

## Constable GD in Central Armed Police Forces CAPFs SSF Rifleman GD in Assam Rifles Examination 2024

Exam Date	22/02/2024
Exam Time	11:30 AM - 12:30 PM
Subject	Constable GD Examination 2024

### Section : Part-A-General Intelligence and Reasoning

**Q.1** Six colleagues Peter, Quin, Rachel, Sam, Tina, and Ulysses are sitting in a circle facing away from the center. Peter is sitting to the immediate right of Quin. Tina is not sitting next to Peter. Sam, who is sitting to the immediate left of Quin, is also sitting to the immediate right of Ulysses. Who is sitting to the immediate right of Tina?

- Ans**
- 1. Quinn
  - 2. Ulysses
  - 3. Rachel
  - 4. Peter

**Q.2** Arrange the given words in the sequence in which they occur in the dictionary.

1. Debate
2. Debark
3. Debar
4. Debauch
5. Debenture

- Ans**
- 1. 1,2,3,5,4
  - 2. 3,2,1,5,4
  - 3. 1,2,3,4,5
  - 4. 3,2,1,4,5

**Q.3** 'M × N' means 'M is the mother of N'

'M + N' means 'M is the father of N'

'M ÷ N' means 'M is the sister of N'

'M - N' means 'M is the brother of N'

How is X related to Y in the expression 'X ÷ Z - A × Y'?

- Ans**
- 1. Mother's sister
  - 2. Sister
  - 3. Husband's sister
  - 4. Father's sister

**Q.4** In a certain code language, 'TEACH' is coded as '74', 'STUDY' is coded as '178'. What is the code for 'NEVER' in that code language?

- Ans**
- 1. 128
  - 2. 124
  - 3. 118
  - 4. 132

**Q.5** Three Statements are given followed by two conclusions numbered I and II. Assuming the statements to be true, even if they seem to be at variance with commonly known facts, decide which of the conclusions logically follow(s) from the statements.

Statement I: All bicycles are wheels.

Statement II: Some bicycles are vehicles.

Statement III: Some vehicles are not tyres.

Conclusion I: Some bicycles are tyres.

Conclusion II: Some wheels are not vehicles.

- Ans**
- 1. Both conclusions I and II follow
  - 2. Neither conclusion I nor II follows
  - 3. Only conclusion I follows
  - 4. Only conclusion II follows

**Q.6** In a certain code language, 'LEAVE' is coded as '42', 'TEAM' is coded as '36'. What is the code for 'OFFER' in that code language?

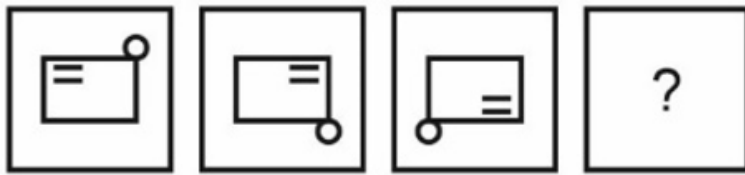
- Ans**
- 1. 46
  - 2. 48
  - 3. 47
  - 4. 50

**Q.7** Which two signs should be interchanged to make the given equation correct?

$$62 + 12 - 42 \div 7 \times 44 = 90$$

- Ans**
- 1.  $\times$  and  $\div$
  - 2.  $\times$  and  $-$
  - 3.  $\times$  and  $+$
  - 4.  $+$  and  $\div$

Q.8 In the following question, select the figure which can be placed at the sign of question mark (?) from the given alternatives.



Ans

✓ 1.



✗ 2.



✗ 3.



✗ 4.



Q.9 Which of the following numbers will replace the question mark (?) in the given series?  
118, 113, 108, 103, 98, 93, ?

Ans ✗ 1. 75

✓ 2. 88

✗ 3. 59

✗ 4. 62

Q.10 Which of the following letter cluster will replace the question mark (?) in the given series?

DS, EN, GJ, JG, NE, ?

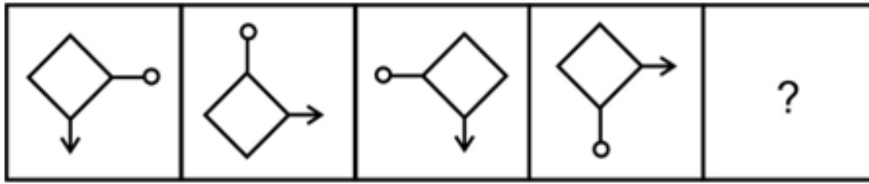
Ans ✗ 1. SC

✗ 2. RD

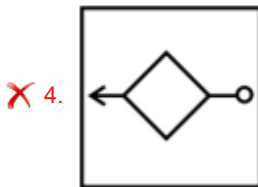
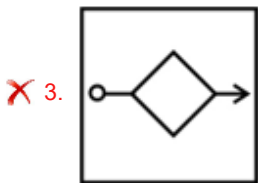
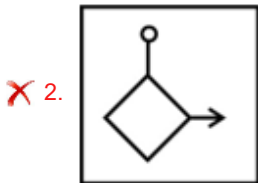
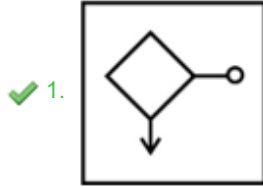
✗ 3. RE

✓ 4. SD

Q.11 Select the figure that will replace the question mark (?) in the following figure series.



Ans



Q.12 In the following question, select the missing number from the given series.

10, 28, 46, 64, ?, 100

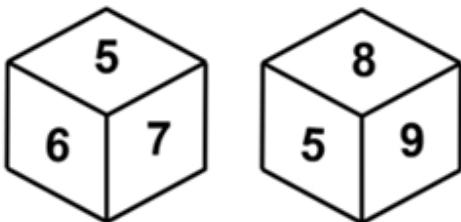
Ans ✗ 1. 85

✗ 2. 80

✗ 3. 90

✓ 4. 82

Q.13 Two different positions of the same dice are given below. Find the number opposite of 8.



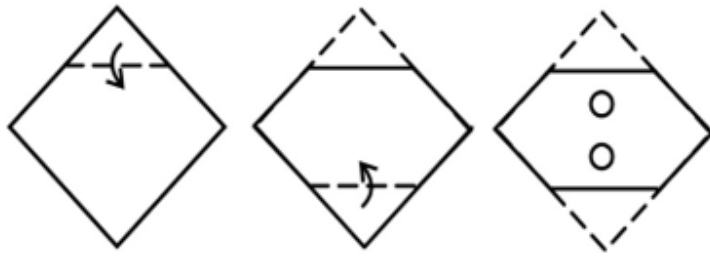
Ans ✗ 1. 9

✗ 2. 6

✓ 3. 7

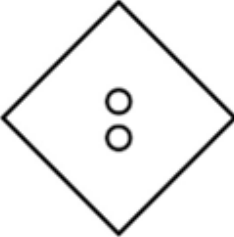
✗ 4. 5

Q.14 A paper is folded and cut as shown below. How will it appear when unfolded?

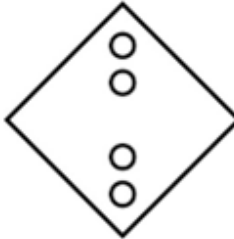


Ans

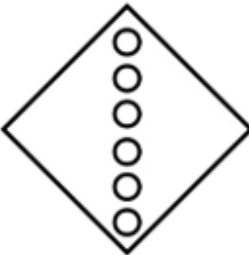
✗ 1.



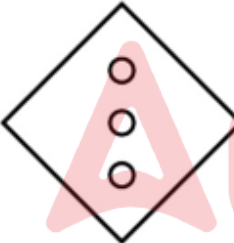
✓ 2.



✗ 3.



✗ 4.



Adda247

Q.15 If  $17\ M\ 18\ N\ 55\ O\ 5 = 46$  and  $68\ M\ 13\ N\ 65\ O\ 13 = 86$ , then  $40\ M\ 70\ N\ 85\ O\ 17 = ?$

Ans ✗ 1. 135

✗ 2. 145

✓ 3. 115

✗ 4. 150

Q.16 Select the option that is related to the fifth letter cluster in the same way as the fourth letter cluster is related to the third letter cluster and the second letter cluster is related to the first letter cluster.

CAUSAL : ACUSLA :: DEBATE : EDBAET :: EFFORT : ?

Ans ✗ 1. FEOFTR

✗ 2. TROFFE

✓ 3. FEFOTR

✗ 4. FFETRO

Q.17 Which of the following groups of letters when sequentially placed from left to right will complete the given series?

gghhiiijgggh\_iiijgggh\_ \_jjggghiiijggghiiijggg\_hiijj

- Ans
- 1. ghij
  - 2. hihi
  - 3. gggh
  - 4. hiih

Q.18 Five friends Priya, Rahul, Suresh, Tina, and Varun are sitting on a circular table facing the center. Varun, who is sitting to the immediate left of Rahul, is also second to the right of Tina. Suresh is not sitting next to Varun. Who is sitting second to the left of Rahul?

- Ans
- 1. Priya
  - 2. Tina
  - 3. Suresh
  - 4. Varun

Q.19 Select the option that is related to the fifth number-letter cluster in the same way as the fourth number-letter cluster is related to the third number-letter cluster, and the second number-letter cluster is related to the first number-letter cluster.  
ELECTRON : TRONCELE :: FUNCTION : TIONCNUF :: CLUSTERS : ?

- Ans
- 1. TERSSUCL
  - 2. TRESSULC
  - 3. TERSSULC
  - 4. TERSUSLC

Q.20 Three different positions of the same dice are given below. Find the number opposite of 1.



- Ans
- 1. 4
  - 2. 6
  - 3. 3
  - 4. 2

Section : Part-B-General Knowledge and General awareness

Q.1 Unemployment that occurs during recessions and depressions are called as \_\_\_\_\_.

- Ans
- 1. Disguised unemployment
  - 2. Frictional unemployment
  - 3. Seasonal unemployment
  - 4. Cyclical unemployment

Q.2 \_\_\_\_\_ in Indian Dance is given in recognition of excellence and achievement in performance or research studies in Indian Dance.

- Ans
- 1. The Manorama Thakkar Award
  - 2. The Uday Shankar Award
  - 3. The Rukmini Devi Award
  - 4. The Nritya Choodamani Award

Q.3 Which article of the Indian Constitution comprises the fundamental duties?

- Ans
- 1. 51-A
  - 2. 52-A
  - 3. 53-A
  - 4. 54-A

Q.4 Which of the following clubs is playing in the i-League 2023/24?

- I. Punjab FC
- II. Mohammedan Sporting Club

- Ans
- 1. Neither I nor II
  - 2. Only I
  - 3. Only II
  - 4. Both I and II

Q.5 Which two teams played in the finals of the Syed Mushtaq Ali Trophy in November 2023?

- Ans
- 1. Punjab and Baroda
  - 2. Punjab and Assam
  - 3. Assam and Baroda
  - 4. Baroda and Delhi

Q.6 In which of the following states of India is Nongkrem festival celebrated?

- Ans
- 1. Rajasthan
  - 2. Madhya Pradesh
  - 3. Tamil Nadu
  - 4. Meghalaya

Q.7 Tipu Sultan became the ruler of Mysore in \_\_\_\_\_.

- Ans
- 1. 1798
  - 2. 1782
  - 3. 1792
  - 4. 1786

Q.8 The Bharatiya Nagarik Suraksha Sanhita (BNSS) 2023, aimed at replacing the Criminal Procedure Code was introduced by \_\_\_\_\_.

- Ans
- 1. President Draupadi Murmu
  - 2. Foreign Minister S.Jayshankar
  - 3. Prime Minister Narendra Modi
  - 4. Home Minister Amit Shah

Q.9 Which of the following statements is correct regarding five year plan in India?

- I. India had emerged as one of the fastest growing economy by the end of the Tenth Five year Plan.
- II. Tenth Five year Plan had set 'monitorable targets' for few key indicators of development.

- Ans
- 1. Neither I nor II
  - 2. Only II
  - 3. Both I and II
  - 4. Only I

Q.10 Who was recently appointed as a Deputy Governor of the Reserve Bank of India (RBI) in June 2023?

- Ans
- 1. Swaminathan Janakiraman
  - 2. Shaktikanta Das
  - 3. T. Rabi Sankar
  - 4. Mahesh Kumar Jain

Q.11 Which dance form originated in Andhra Pradesh?

- Ans
- 1. Kuchipudi
  - 2. Kathak
  - 3. Bharatnatyam
  - 4. Sattriya

Q.12 Which of the following is correct regarding green revolution In India?

- I. During green revolution, shifting from traditional farming to monoculture had negative effects on small farmers.
- II. One of the impacts of green revolution is over-capitalization in Agriculture.

- Ans
- 1. Only II
  - 2. Both I and II
  - 3. Neither I nor II
  - 4. Only I

Q.13 In any tennis game, any game starts at 0-0 and the zero point in tennis is called \_\_\_\_\_.

- Ans
- 1. origin
  - 2. start
  - 3. love
  - 4. base



Q.14 Match the following personalities with their associated musical instrument:

- A) S. Balachander
- B) Anushka Shankar
- C) Kishan Maharaj
- 1 Tabla
- 2 Veena
- 3 Sitar

- Ans
- 1. A-1, B-3, C-2
  - 2. A-2, B-1, C-3
  - 3. A-1, B-2, C-3
  - 4. A-2, B-3, C-1

Q.15 What is the basic unit of time?

- Ans
- 1. Second (s)
  - 2. Minute/second (m/s)
  - 3. Minute(min.)
  - 4. Hour(hr.)

Q.16 Which state cabinet has approved the 'Abua Awas Yojna', a housing scheme in October 2023?

- Ans
- 1. Bihar
  - 2. Rajasthan
  - 3. Jharkhand
  - 4. Assam

Q.17 How many members of the Rajya Sabha are elected indirectly and are representatives of States and Union Territories?

- Ans
- 1. 237
  - 2. 239
  - 3. 236
  - 4. 238

Q.18 Read the following statements about Money.

- A. Money also acts as a convenient unit of account.
  - B. The value of all goods and services can be expressed in monetary units.
- Identify the CORRECT statement/statements.

- Ans
- 1. Both A and B
  - 2. Neither A nor B
  - 3. Only A
  - 4. Only B

Q.19 Who was the founder of the Mauryan empire?

- Ans
- 1. Mahapadma Nanda
  - 2. Bindusara
  - 3. Ashoka
  - 4. Chandragupta Maurya

Q.20 The adult literacy rate (15+) for male is \_\_\_\_\_ against 59.3 of females in 2011

- Ans
- 1. 90
  - 2. 58.8
  - 3. 70.8
  - 4. 78.8

Section : Part-C-Elementary Mathematics

Q.1 A person bought some pens at the rate of 20 for a rupee and sold them at the rate of 15 for a rupee. What is the profit percentage?

- Ans
- 1. 35 percent
  - 2. 15 percent
  - 3. 33.33 percent
  - 4. 40 percent

Q.2 After giving 10 percent discount on an article there is still a profit of 10 percent. What will be the profit percentage when no discount is given?

- Ans
- 1. 35 percent
  - 2. 33.33 percent
  - 3. 22.22 percent
  - 4. 66.67 percent

Q.3 Manish alone can complete a work in 48 days and Pratap alone can complete the same work in half of the time taken by Manish. In how many days will both together complete  $\frac{1}{4}$  part of the total work?

- Ans
- 1. 5 days
  - 2. 4.5 days
  - 3. 6 days
  - 4. 4 days

Q.4 The average of marks obtained by S1 and S2 is 35 more than the average of marks obtained by S2 and S3. If the marks obtained by S3 is 75, then what are the marks obtained by S1?

- Ans
- 1. 170
  - 2. 165
  - 3. 155
  - 4. 145

**Q.5** On a sum, simple interest at the annual rate of 10 percent for 8 years is Rs. 8000. What will be the compound interest on the same sum at the annual rate of 10 percent (compounding annually) for 3 years?

- Ans**
- 1. Rs. 3450
  - 2. Rs. 3750
  - 3. Rs. 3220
  - 4. Rs. 3310

**Q.6** The average age of 14 students of a class is 17 years. If a new student of age 32 years joins the class, then what will be the average age of these 15 students?

- Ans**
- 1. 21 years
  - 2. 22 years
  - 3. 19 years
  - 4. 18 years

**Q.7** Simple interest on a sum for 5 years is equal to 20 percent of the principal. In how many years interest will be equal to the principal?

- Ans**
- 1. 30 years
  - 2. 40 years
  - 3. 25 years
  - 4. 35 years

**Q.8** A person bought an article and sold it at a loss of 20 percent. If he had bought it for 30 percent less price and sold it for Rs.125 more, then he would earn a profit of 50 percent. What is the cost price of the article

- Ans**
- 1. Rs. 450
  - 2. Rs. 620
  - 3. Rs. 500
  - 4. Rs. 600

**Q.9** In a class, 40 percent are boys and the number of girls are 54. What is the number of boys in the class?

- Ans**
- 1. 36
  - 2. 34
  - 3. 33
  - 4. 37

**Q.10** X, Y and Z are three students. X got 40 percent more marks than Y and 20 percent less marks than Z. If Y got 480 marks, then what are the marks got by Z?

- Ans**
- 1. 840
  - 2. 850
  - 3. 820
  - 4. 800

Q.11 How many spherical balls of radius 8 cm can be made by melting a hemisphere of radius 48 cm?

- Ans
- 1. 90
  - 2. 116
  - 3. 104
  - 4. 108

Q.12 The sum of the three numbers is 123. If the ratio between the first and second is 3: 4 and that between the second and third is 3: 5, then find the second number.

- Ans
- 1. 46
  - 2. 42
  - 3. 33
  - 4. 36

Q.13 What is the value of  $42 \times 3 + 25 \times 3 - 14 \div 7 \times 5$ ?

- Ans
- 1. 187
  - 2. 191
  - 3. 186
  - 4. 182

Q.14 What is the Highest Common Factor of 12, 8 and 24?

- Ans
- 1. 12
  - 2. 8
  - 3. 4
  - 4. 6

Q.15 For what value of M, 58524M is divisible by 9?

- Ans
- 1. 8
  - 2. 2
  - 3. 3
  - 4. 7

Q.16 The least number which is exactly divisible by 27, 36, 56, 12 and 10?

- Ans
- 1. 7560
  - 2. 8584
  - 3. 5953
  - 4. 7694

Q.17 The ratio of three numbers is 6 : 8 : 9. If the sum of the three numbers is 460, then what is the largest number among the three numbers?

- Ans
- 1. 160
  - 2. 120
  - 3. 100
  - 4. 180

**Q.18** A boat travels a distance of 54 km at uniform speed. If the speed of boat is increased by 3 km/hr, then it takes 3 hours less to cover the same distance. What is the original speed of the boat?

- Ans**
- 1. 3 km/hr
  - 2. 12 km/hr
  - 3. 9 km/hr
  - 4. 6 km/hr

**Q.19** Marked price and selling price of an article are Rs. 7600 and Rs. 6688 respectively. What is the discount percentage?

- Ans**
- 1. 8 percent
  - 2. 12 percent
  - 3. 10 percent
  - 4. 16 percent

**Q.20** Rakesh, Mahesh and Puneesh together can make a chair in 20 minutes. Rakesh and Mahesh together can make it in 25 minutes. How much time will Puneesh alone take to make that chair?

- Ans**
- 1. 95 minutes
  - 2. 80 minutes
  - 3. 100 minutes
  - 4. 110 minutes

Section : Part-D-English

**Q.1** Find the part of the given sentence that has an error in it. If there is no error, choose 'No error'.  
The most significant near-term impacts on renewable plants that are already contracted or under construction may being felt through supply chains.

- Ans**
- 1. renewable plants that are already contracted or under
  - 2. The most significant near-term impacts on
  - 3. No error
  - 4. construction may being felt through supply chains.

**Q.2** Select the incorrectly spelt word from the given sentence.

The primary goal of verbal communication is to use language to convey information clearly and concisely.

- Ans**
- 1. comunication
  - 2. concisely
  - 3. convey
  - 4. language

**Q.3** The sentence has been divided into three parts, identify the error segment in the sentence given below. Choose no error if there is no error in the sentence.

Her latest novel is considered one of the most captivating story/ in contemporary literature, earning praise/ for its intricate plot and well-developed characters.

- Ans**
- 1. Her latest novel is considered one of the most captivating story
  - 2. for its intricate plot and well-developed characters.
  - 3. no error
  - 4. in contemporary literature, earning praise

**Q.4** Select the sentence with no spelling errors.

- Ans**
- 1. IIT-Roorkee has stated three main findengs in its report.
  - 2. IIT-Roorkee has stated three main findings in its report.
  - 3. IIT-Roorkee has statid three main findings in its report.
  - 4. IIT-Roorkee has stated three main findings in its repourt.

**Q.5** In the following question, out of the given four alternatives, select the alternative which best expresses the meaning of the Idiom/Phrase.

To make merry

- Ans**
- 1. To find loopholes
  - 2. To get married
  - 3. To enjoy oneself
  - 4. To make excuses

**Q.6** Improve the underlined part of the sentence. Choose 'No improvement' as an answer if the sentence is grammatically correct.

Find out who is the real actor.

- Ans**
- 1. real actors
  - 2. real acting
  - 3. really actor
  - 4. No improvement

**Q.7** Select the most appropriate word to fill in the blank.

This is only a partial list of the books \_\_\_\_\_ are needed in the library.

- Ans**
- 1. that's
  - 2. that
  - 3. those
  - 4. their

Q.8 Choose the word that is opposite in meaning to the given word.

Strong

- Ans
- 1. Quick
  - 2. Lazy
  - 3. Boring
  - 4. Delicate

Q.9 Choose the idiom/phrase that can substitute the highlighted group of words meaningfully.

It's no use **worrying about the past mishaps.**

- Ans
- 1. Spill the beans
  - 2. Crying over spilt milk
  - 3. Off on the wrong foot
  - 4. Back to the grind

Q.10 In the following question, out of the given four alternatives, select the alternative which best expresses the meaning of the Idiom/Phrase.

To hit or miss the mark

- Ans
- 1. To succeed or fail in an attempt
  - 2. To speak a truth and lie at the same time
  - 3. To retain one's position no matter what
  - 4. To miss someone

Q.11 Find the part of the given sentence that has an error in it. If there is no error, choose 'No error'.

The muscles on his chest and arms was not well defined.

- Ans
- 1. No error
  - 2. The muscles on
  - 3. his chest and arms
  - 4. was not well defined.

Q.12 Select the most appropriate antonym of the given word.

Capital

- Ans
- 1. Regular
  - 2. Fundamental
  - 3. Principle
  - 4. Extra

Q.13 Choose the most appropriate synonym of the underlined word.

We cannot always follow instructions exactly, sometimes we need to incorporate our own ideas.

- Ans
- 1. Exclude
  - 2. Integrate
  - 3. Part
  - 4. Separate

Q.14 Select the most appropriate option for the given blank.

Can you \_\_\_\_\_ me a favour this last time?

- Ans
- 1. do
  - 2. lend
  - 3. make
  - 4. have

Q.15 Improve the underlined part of the sentence. Choose 'No improvement' as an answer if the sentence is grammatically correct.

The effect of the changes was unexpected.

- Ans
- 1. has unexpected
  - 2. was unexpect
  - 3. were unexpected
  - 4. No improvement

**Comprehension:**

In the following passage some words have been deleted. Fill in the blanks with the help of the alternatives given. Select the most appropriate option for each number.

This room was chill, because it (1) \_\_\_\_\_ had a fire; it was silent, because (2) \_\_\_\_\_ from the nursery and kitchen; solemn, (3) \_\_\_\_\_ it was known to be so seldom entered. The (4) \_\_\_\_\_ alone came here on Saturdays only, to wipe from the mirrors and the furniture a week's quiet dust; and Mrs. Reed (5) \_\_\_\_\_, at far intervals, visited it to review its contents.

**SubQuestion No : 16**

Q.16 Select the most appropriate option to fill in the blank No. 1.

- Ans
- 1. seldom
  - 2. usually
  - 3. frequently
  - 4. often



**Comprehension:**

In the following passage some words have been deleted. Fill in the blanks with the help of the alternatives given. Select the most appropriate option for each number.

This room was chill, because it (1) \_\_\_\_\_ had a fire; it was silent, because (2) \_\_\_\_\_ from the nursery and kitchen; solemn, (3) \_\_\_\_\_ it was known to be so seldom entered. The (4) \_\_\_\_\_ alone came here on Saturdays only, to wipe from the mirrors and the furniture a week's quiet dust; and Mrs. Reed (5) \_\_\_\_\_, at far intervals, visited it to review its contents.

**SubQuestion No : 17**

**Q.17** Select the most appropriate option to fill in the blank No. 2.

- Ans**
- 1. remote
  - 2. foreign
  - 3. strange
  - 4. exclusive

**Comprehension:**

In the following passage some words have been deleted. Fill in the blanks with the help of the alternatives given. Select the most appropriate option for each number.

This room was chill, because it (1) \_\_\_\_\_ had a fire; it was silent, because (2) \_\_\_\_\_ from the nursery and kitchen; solemn, (3) \_\_\_\_\_ it was known to be so seldom entered. The (4) \_\_\_\_\_ alone came here on Saturdays only, to wipe from the mirrors and the furniture a week's quiet dust; and Mrs. Reed (5) \_\_\_\_\_, at far intervals, visited it to review its contents.

**SubQuestion No : 18**

**Q.18** Select the most appropriate option to fill in the blank No. 3.

- Ans**
- 1. however
  - 2. perhaps
  - 3. because
  - 4. as

**Comprehension:**

In the following passage some words have been deleted. Fill in the blanks with the help of the alternatives given. Select the most appropriate option for each number.

This room was chill, because it (1) \_\_\_\_\_ had a fire; it was silent, because (2) \_\_\_\_\_ from the nursery and kitchen; solemn, (3) \_\_\_\_\_ it was known to be so seldom entered. The (4) \_\_\_\_\_ alone came here on Saturdays only, to wipe from the mirrors and the furniture a week's quiet dust; and Mrs. Reed (5) \_\_\_\_\_, at far intervals, visited it to review its contents.

**SubQuestion No : 19**

**Q.19** Select the most appropriate option to fill in the blank No. 4.

- Ans**
- 1. electrician
  - 2. doctor
  - 3. plumber
  - 4. house-maid

**Comprehension:**

In the following passage some words have been deleted. Fill in the blanks with the help of the alternatives given. Select the most appropriate option for each number.

This room was chill, because it (1) \_\_\_\_\_ had a fire; it was silent, because (2) \_\_\_\_\_ from the nursery and kitchen; solemn, (3) \_\_\_\_\_ it was known to be so seldom entered. The (4) \_\_\_\_\_ alone came here on Saturdays only, to wipe from the mirrors and the furniture a week's quiet dust; and Mrs. Reed (5) \_\_\_\_\_, at far intervals, visited it to review its contents.

**SubQuestion No : 20****Q.20** Select the most appropriate option to fill in the blank No. 5.

- Ans**
- 1. oneself
  - 2. ourselves
  - 3. themselves
  - 4. herself

**Section : Part-D-Hindi**

**Q.1** निम्नलिखित प्रश्न में, चार विकल्पों में से, उस विकल्प का चयन करें जो कोष्ठक में दिए गए शब्द के विलोम शब्द का सही विकल्प है।

आज मेरे घर में बहुत ही (दूषित) \_\_\_\_\_ पानी आ रहा है।

- Ans**
- 1. भद्र
  - 2. सामिष
  - 3. कम
  - 4. विशुद्ध

**Q.2** निम्नलिखित प्रश्न में, चार विकल्पों में से, उस विकल्प का चयन करें जो कोष्ठक में दिए गए शब्द के पर्यायवाची शब्द का सही विकल्प नहीं है।

अपने से बड़ों की बातों का (खंडन) \_\_\_\_\_ करना गलत बात होती है।

- Ans**
- 1. निवर्तन
  - 2. प्रत्याख्यान
  - 3. पराकोटि
  - 4. नकार

**Q.3** निम्नलिखित प्रश्न में, चार विकल्पों में से, उस विकल्प का चयन करें जो कोष्ठक में दिए गए शब्द के तद्भव रूप का सही विकल्प है।

(क्षत्रिय) \_\_\_\_\_ हिंदु समाज के चार वर्णों में से एक वर्ण है।

- Ans**
- 1. खत्री
  - 2. खार
  - 3. त्रिणी
  - 4. सिपाही

Q.4 निम्नलिखित वाक्य में रेखांकित भाग के लिए एक सार्थक शब्द ज्ञात कीजिए।

गुरु जी सबके मन की बात जानते हैं।

Ans ✗ 1. महापुरुष

✓ 2. अंतर्यामी

✗ 3. जादूगर

✗ 4. भगवान

Q.5 दिए गए वाक्यांश के लिए सार्थक शब्द ज्ञात कीजिए।

जिसका कोई इलाज न हो

Ans ✓ 1. लाइलाज

✗ 2. लाईलाज

✗ 3. लाईलाज़

✗ 4. लाइलाज्ज

Q.6 निम्नलिखित प्रश्न में, दिए गए चार विकल्पों में से, उस विकल्प का चयन करें जो दिए गए मुहावरे के अर्थ को सर्वश्रेष्ठ रूप से व्यक्त करता है।

सब गुड़ गोबर हो गया

Ans ✗ 1. सारा भोजन कूड़े में फेंक देना

✓ 2. सब किया कराया चौपट कर देना

✗ 3. व्यापार में लगातार हानि होना

✗ 4. त्याग करने पर भी कोई लाभ न होना

Q.7 निम्नलिखित प्रश्न में, दिए गए चार विकल्पों में से, उस विकल्प का चयन करें जो दिए गए मुहावरे के अर्थ को सर्वश्रेष्ठ रूप से व्यक्त करता है।

दूसरे के कंधे पर रखकर बंदूक चलाना

Ans ✗ 1. अपना फायदा और दूसरे का नुकसान करना

✓ 2. दूसरे के बहाने अपना काम करना

✗ 3. अपनी गलती की सजा दूसरे को दिलवाना

✗ 4. दूसरे की हानि करवाना

Q.8 दिए गए वाक्य में से गलत वर्तनी ज्ञात कीजिए।

अध्यन जीवन की महत्वपूर्ण प्रक्रिया है।

- Ans
- ✗ 1. महत्वपूर्ण
  - ✓ 2. अध्यन
  - ✗ 3. जीवन
  - ✗ 4. प्रक्रिया

Q.9 दिए गए वाक्यांश के लिए सार्थक शब्द ज्ञात कीजिए।

पिता या पूर्वजों से प्राप्त संपत्ति

- Ans
- ✗ 1. पिता-धन
  - ✓ 2. वसीयत
  - ✗ 3. पूंजी
  - ✗ 4. लाभ

Q.10 दिए गए वाक्य का वह भाग ज्ञात करें, जिसमें कोई त्रुटि है।

शेर को देखकर उसका प्राण सूख गए और वह बेहोश हो गया।

- Ans
- ✗ 1. गए और वह
  - ✗ 2. बेहोश हो गया
  - ✗ 3. शेर को देखकर
  - ✓ 4. उसका प्राण सूख

Q.11 निम्नलिखित वाक्य में, उस वाक्यांश को पहचानिए जिसमें अशुद्धियाँ हैं। यदि कोई गलती नहीं है तो 'कोई त्रुटि नहीं है' का चुनाव कीजिए।

निबंध लिखने में जो सबसे महत्त्वपूर्ण बात/ ध्यान में रखनी होती है, वह यह है कि/ आपको विषय को भटकने में बचना है।

- Ans
- ✗ 1. कोई त्रुटि नहीं है
  - ✓ 2. आपको विषय को भटकने में बचना है
  - ✗ 3. निबंध लिखने में जो सबसे महत्त्वपूर्ण बात
  - ✗ 4. ध्यान में रखनी होती है, वह यह है कि

Q.12 दिए गए वाक्य में रेखांकित शब्द का तत्सम शब्द ज्ञात कीजिए।

ठंड से उसके होंठ कँपकपा रहे हैं।

- Ans
- 1. हस्ति
  - 2. हस्त
  - 3. पादु
  - 4. ओष्ठ

Q.13 दिए गए वाक्य में उचित पर्यायवाची शब्द का चयन करके रिक्त स्थान की पूर्ति करें।

\_\_\_\_\_ (संकेत) मत करो। अच्छी बात नहीं है।

- Ans
- 1. इशारा
  - 2. मेल
  - 3. दुःखी
  - 4. उत्तम

Q.14 दिए गए वाक्य में रेखांकित शब्द का विलोम शब्द ज्ञात कीजिए।

पुलिस ने बदमाश को पकड़ लिया।

- Ans
- 1. कंजूस
  - 2. शरीफ
  - 3. बेशर्म
  - 4. भीरू

Q.15 निम्नलिखित प्रश्न में, चार विकल्पों में से, उस विकल्प का चयन करें जो रिक्त स्थान के लिए सही भाववाचक संज्ञा वाला विकल्प हो।  
आज पुष्पा ने बरतन ठीक से नहीं धोया है कढ़ाई में अभी भी \_\_\_\_\_ है।

- Ans
- 1. तेल
  - 2. चिकनाहट
  - 3. खटाई
  - 4. चिकना

Comprehension:

नीचे दिए गए गद्य में कुछ शब्द छोड़ दिए गए हैं और प्रत्येक रिक्त स्थान के चार विकल्प दिए गए हैं। इन चारों में से कौन सा विकल्प रिक्त स्थान की पूर्ति करेगा-

काले लोगो के न तो जीवन का सम्मान किया जाता है और न ही (1)\_\_\_\_\_ का। उनकी मौत के बाद भी उनका (2)\_\_\_\_\_ जारी रहता है। मौत के बाद भी उनकी अस्थियाँ (3)\_\_\_\_\_ में कैद रहती है ताकि लोग देख सके। इस पूरे (4)\_\_\_\_\_ पर एक बहुत ही अच्छी (5)\_\_\_\_\_ बन सकती है - "लैट द फायर बर्न"।

SubQuestion No : 16

Q.16 रिक्त 1 के लिए सबसे उपयुक्त विकल्प का चयन कीजिए।

- Ans
- 1. उदार
  - 2. उदास
  - 3. प्रचार
  - 4. मृत्यु

Comprehension:

नीचे दिए गए गद्य में कुछ शब्द छोड़ दिए गए हैं और प्रत्येक रिक्त स्थान के चार विकल्प दिए गए हैं। इन चारों में से कौन सा विकल्प रिक्त स्थान की पूर्ति करेगा-

काले लोगो के न तो जीवन का सम्मान किया जाता है और न ही (1)\_\_\_\_\_ का। उनकी मौत के बाद भी उनका (2)\_\_\_\_\_ जारी रहता है। मौत के बाद भी उनकी अस्थियाँ (3)\_\_\_\_\_ में कैद रहती है ताकि लोग देख सके। इस पूरे (4)\_\_\_\_\_ पर एक बहुत ही अच्छी (5)\_\_\_\_\_ बन सकती है - "लैट द फायर बर्न"।

SubQuestion No : 17

Q.17 रिक्त 2 के लिए सबसे उपयुक्त विकल्प का चयन कीजिए।

- Ans
- 1. भाग्य
  - 2. शोषण
  - 3. मनोहर
  - 4. भाग्यवान

Comprehension:

नीचे दिए गए गद्य में कुछ शब्द छोड़ दिए गए हैं और प्रत्येक रिक्त स्थान के चार विकल्प दिए गए हैं। इन चारों में से कौन सा विकल्प रिक्त स्थान की पूर्ति करेगा-

काले लोगो के न तो जीवन का सम्मान किया जाता है और न ही (1)\_\_\_\_\_ का। उनकी मौत के बाद भी उनका (2)\_\_\_\_\_ जारी रहता है। मौत के बाद भी उनकी अस्थियाँ (3)\_\_\_\_\_ में कैद रहती है ताकि लोग देख सके। इस पूरे (4)\_\_\_\_\_ पर एक बहुत ही अच्छी (5)\_\_\_\_\_ बन सकती है - "लैट द फायर बर्न"।

SubQuestion No : 18

Q.18 रिक्त 3 के लिए सबसे उपयुक्त विकल्प का चयन कीजिए।

- Ans
- 1. घर
  - 2. म्युज़ियम
  - 3. स्कूल
  - 4. प्लेघर

Comprehension:

नीचे दिए गए गद्य में कुछ शब्द छोड़ दिए गए हैं और प्रत्येक रिक्त स्थान के चार विकल्प दिए गए हैं। इन चारों में से कौन सा विकल्प रिक्त स्थान की पूर्ति करेगा-

काले लोगो के न तो जीवन का सम्मान किया जाता है और न ही (1)\_\_\_\_\_ का। उनकी मौत के बाद भी उनका (2)\_\_\_\_\_ जारी रहता है। मौत के बाद भी उनकी अस्थियाँ (3)\_\_\_\_\_ में कैद रहती है ताकि लोग देख सके। इस पूरे (4)\_\_\_\_\_ पर एक बहुत ही अच्छी (5)\_\_\_\_\_ बन सकती है - "लैट द फायर बर्न"।

SubQuestion No : 19

Q.19 रिक्त 4 के लिए सबसे उपयुक्त विकल्प का चयन कीजिए।

- Ans
- ✓ 1. घटनाक्रम
  - ✗ 2. विचित्र
  - ✗ 3. भयानक
  - ✗ 4. मतभेद

Comprehension:

नीचे दिए गए गद्य में कुछ शब्द छोड़ दिए गए हैं और प्रत्येक रिक्त स्थान के चार विकल्प दिए गए हैं। इन चारों में से कौन सा विकल्प रिक्त स्थान की पूर्ति करेगा-

काले लोगो के न तो जीवन का सम्मान किया जाता है और न ही (1)\_\_\_\_\_ का। उनकी मौत के बाद भी उनका (2)\_\_\_\_\_ जारी रहता है। मौत के बाद भी उनकी अस्थियाँ (3)\_\_\_\_\_ में कैद रहती है ताकि लोग देख सके। इस पूरे (4)\_\_\_\_\_ पर एक बहुत ही अच्छी (5)\_\_\_\_\_ बन सकती है - "लैट द फायर बर्न"।

SubQuestion No : 20

Q.20 रिक्त 5 के लिए सबसे उपयुक्त विकल्प का चयन कीजिए।

- Ans
- ✗ 1. म्युजिक
  - ✗ 2. अधिकारी
  - ✓ 3. डाक्यूमेंट्री
  - ✗ 4. पाठशाला

