

Multi Tasking Non Technical Staff and Havaladar CBIC and CBN Examination 2024

Exam Date	12/11/2024
Exam Time	12:30 PM - 2:30 PM
Subject	MTS Non Tech Havaladar CBIC and CBN Examination 2024

Section : Numerical and Mathematical Ability

Q.1 Find the number of lead balls of diameter 4 cm each that can be made from a sphere of diameter 24 cm.

- Ans
- 1. 108
 - 2. 432
 - 3. 216
 - 4. 144

Q.2 If a reduction of 10% in the price of rice enables a person to obtain 22 kg more for ₹250, then the original price of the rice per kg is:
(correct to two decimal place)

- Ans
- 1. ₹1.22
 - 2. ₹1.20
 - 3. ₹1.26
 - 4. ₹1.24

Q.3 The table below shows the production of different types of scooters X, Y, Z and T by a company during four months.

Type of Scooter/Month	January	February	March	April
X	45	55	28	35
Y	75	47	58	26
Z	86	27	73	51
T	74	32	29	69
Total	280	161	188	181

In which month did the company produce the minimum number of scooters?

- Ans
- 1. April
 - 2. March
 - 3. February
 - 4. January

Q.4 A man rows downstream 27 km and upstream 18 km, taking one hour each time. What is the speed of the current?

- Ans
- 1. 9 km/h
 - 2. 1.5 km/h
 - 3. 4.5 km/h
 - 4. 6 km/h

Test Prime

ALL EXAMS,
ONE SUBSCRIPTION



40,000+
Mock Tests



Personalised
Report Card



Unlimited
Re-Attempt



500+
Exam Covered



Previous Year
Papers



500%
Refund



DOWNLOAD NOW

Q.5 The HCF of 28,35 and 42 is:

- Ans
- 1. 7
 - 2. 3
 - 3. 5
 - 4. 11

Q.6 A shopkeeper marked the price of a commodity at ₹37,000 more than the actual cost. If the shopkeeper allowed a 15% discount, it would fetch ₹ 7,500 more than if he allowed a 20% discount. Find the cost price.

- Ans
- 1. ₹1,31,000
 - 2. ₹1,13,000
 - 3. ₹1,50,000
 - 4. ₹1,23,000

Q.7 If the cost price of a house is 86% of the selling price, then what is the profit percentage, correct up to two decimals?

- Ans
- 1. 11.17%
 - 2. 14.07%
 - 3. 16.27%
 - 4. 13.22%

Q.8 A man covers a total distance of 100 km on bicycle. For the first 2 h, the speed was 20 km/h and for the rest of the journey, it came down to 10 km/h. The average speed will be:

- Ans
- 1. $12\frac{1}{2}$ km/h
 - 2. 20 km/h
 - 3. 13 km/h
 - 4. $15\frac{1}{8}$ km/h

Q.9 A start from X at 9:00 A.M. and reaches Y at 1:00 P.M., on the same day, B also starts from Y at 9:00 A.M. and reaches X at 3:00 P.M. on the same day, following the same route as A. At what time do the two meet?

- Ans
- 1. 11:12 A.M.
 - 2. 10:00 A.M.
 - 3. 11:24 A.M.
 - 4. 11:30 A.M.

Q.10 The average of the first, second and third observations is 39, while the average of the second, third and fourth observations is 35. If the fourth observation is $\frac{3}{5}$ times that of the first, then the value of the fourth observation is:

- Ans
- 1. 27
 - 2. 45
 - 3. 36
 - 4. 18

Q.11 Find the simple interest (in ₹) on ₹2500 as a sum borrowed at 3% per year rate of interest for 2 years.

- Ans
- 1. 110
 - 2. 150
 - 3. 190
 - 4. 90

Q.12 The circumference of the base of a cone is 66 cm and its height is 20 cm.
Find the volume of the cone. (Use $\pi = \frac{22}{7}$)

- Ans
- 1. 465 cu.cm
 - 2. 2000 cu.cm
 - 3. 2310 cu.cm
 - 4. 3087 cu.cm

Q.13 If 5 litres of vinegar containing 20% of water is mixed with 10 litres of vinegar containing 5% of water, then what percentage of the new vinegar mixture is water?

- Ans
- 1. 15%
 - 2. 10%
 - 3. 11.11%
 - 4. 20%

Q.14 16 women can finish a task in 20 days and 20 men take 32 days to finish the same task. How many days will 8 women and 16 men take to finish the same task?

- Ans
- 1. 10
 - 2. 16
 - 3. 32
 - 4. 20

Q.15 Study the given bar graph and answer the question that follows.
The given bar graph shows the sale of toys (in thousands) from five branches of a manufacturer for two consecutive years, 2021 and 2022.



What is the difference between the average sales (in thousands) of all the five branches in 2021 and 2022?

- Ans
- 1. 15.4
 - 2. 16.4
 - 3. 17.4
 - 4. 18.4

Q.16 Find the simple interest (in ₹) on ₹3000 as a sum borrowed at 6% per year rate of interest for 6 years.

- Ans
- 1. 1020
 - 2. 1120
 - 3. 1080
 - 4. 1040

Q.17 The average age of a mother and her daughter is 42 years. The ratio of their ages is 9 : 5, respectively. Find the daughter's age (in years).

- Ans
- 1. 20
 - 2. 35
 - 3. 30
 - 4. 25

Q.18 A solid sphere of radius 12 cm is melted and cast into small spherical balls, each of diameter 2.4 cm. Find the number of balls thus obtained.

- Ans
- 1. 1050
 - 2. 500
 - 3. 980
 - 4. 1000

Q.19 A's income and expenditure are in the ratio 5 : 4. If his total savings are ₹56,000, what is his expenditure in ₹?

- Ans
- 1. 2,44,000
 - 2. 4,42,000
 - 3. 2,42,000
 - 4. 2,24,000

Q.20 What sum of money (in ₹) will produce ₹75 as simple interest in 4 years at $1\frac{1}{2}$ % per annum?

- Ans
- 1. 1,250
 - 2. 1,200
 - 3. 1,210
 - 4. 1,240

Section : Reasoning Ability and Problem Solving

Q.1 Read the given statements and conclusions carefully. Assuming that the information given in the statements is true, even if it appears to be at variance with commonly known facts, decide which of the given conclusions logically follow(s) from the statements.

Statements:
No bed is a chair.
No chair is table.

Conclusions:
(I) No bed is a table.
(II) Some tables may be chairs.

- Ans
- 1. Only conclusion II follows
 - 2. Neither conclusion I nor II follows
 - 3. Both conclusion I and II follow
 - 4. Only conclusion I follows

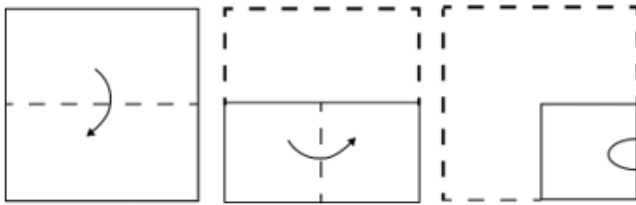
Q.2 Which two numbers should be interchanged to make the following equation correct?

$$(16 \div 4) \times 6 + 26 - 48 + 9 \times 8 = 154$$

(Note: Interchange should be done of the entire number and not individual digits of a given number.)

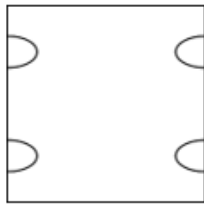
- Ans
- 1. 26 and 48
 - 2. 6 and 9
 - 3. 4 and 8
 - 4. 16 and 48

Q.3 A square sheet of paper is folded along the dotted line successively along the directions shown and is then punched in the last. How would the paper look when unfolded?

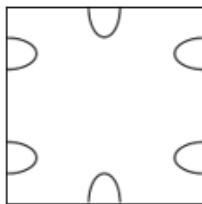


Ans

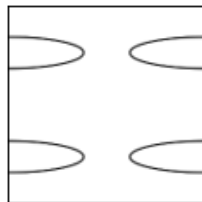
✓ 1.



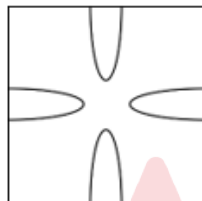
✗ 2.



✗ 3.



✗ 4.



Q.4 In a certain code language, 'please fill this' is written as 'km tu dk' and 'this is book' is written as 'dk pu sy'. How is 'this' written in the given language?

Ans

- ✗ 1. tu
- ✗ 2. py
- ✗ 3. km
- ✓ 4. dk

Q.5 WGQA is related to XHRB in a certain way based on the English alphabetical order. In the same way, HRBL is related to ISCM. To which of the following is GQAK related, following the same logic?

Ans

- ✗ 1. HRKM
- ✓ 2. HRBL
- ✗ 3. HTBM
- ✗ 4. HRBM

Q.6 Read the given statements and conclusions carefully. Assuming that the information given in the statements is true, even if it appears to be at variance with commonly known facts, decide which of the given conclusions logically follow(s) from the statements.

Statements:

All cats are dogs.

No cat is a horse.

Conclusions:

(I): No dog is a horse.

(II): No horse is a cat.

Ans

- ✓ 1. Only conclusion II follows.
- ✗ 2. Both conclusions I and II follow.
- ✗ 3. Only conclusion I follows.
- ✗ 4. Neither conclusion I nor II follows.

Q.7 Select the number from among the given options that can replace the question mark (?) in the following series.

13, 26, 39, 52, 65, ?

- Ans 1. 78
 2. 79
 3. 77
 4. 80

Q.8 In a certain code language, 'COAT' is coded as '3571' and 'PAIN' is coded as '4238'. What is the code for 'A' in the given code language?

- Ans 1. 3
 2. 7
 3. 8
 4. 2

Q.9 A, B, C, D, E, F and G are sitting around a circular table facing the centre (but not necessarily in the same order). A sits second to the left of D, who is third to the left of E. C sits third to the right of G, who is not an immediate neighbour of E. B sits second to the right of G. What is the position of B with respect to C?

- Ans 1. Immediate right
 2. Immediate left
 3. Second to the left
 4. Second to the right

Q.10 What should come in place of the question mark (?) in the given series based on the English alphabetical order? AAA, BCD, CEG, DGJ, ?

- Ans 1. EHN
 2. EIM
 3. FIK
 4. FGK

Q.11 Seven people A, B, C, D, E, F and G are sitting around a circular table, facing the centre (but not necessarily in the same order). B is sitting third to the right of D. G is sitting second to the left of A. E is sitting to the immediate right of G. Only three people are sitting between E and C when counted from the left of E. C is not an immediate neighbour of A. The position of how many persons will remain unchanged except A if all the persons are arranged in the English alphabetical order in anti-clockwise direction, starting from A and keeping the position of A unchanged?

- Ans 1. None
 2. Three
 3. Two
 4. One

Q.12 In a certain code language, 'BLAME' is coded as 'YOZNV' and 'GLAZE' is coded as 'TOZAV'. What is the code for 'PRAKASH' in the given code language?

- Ans 1. KJZPZHS
 2. KIZPZHS
 3. KIZPZHT
 4. KIZQZHS

Q.13 What will come in the place of the question mark ('?') in the following equation, if '+' and 'x' are interchanged and '-' and '÷' are interchanged?
 $18 \times 72 - 3 \div 2 + 11 = ?$

- Ans 1. 31
 2. 20
 3. 32
 4. 24

Q.14 45 is related to 85 following a certain logic. Following the same logic, 63 is related to 121. To which of the following is 58 related, following the same logic? (NOTE: Operations should be performed on the whole numbers, without breaking down the numbers into its constituent digits. E.g. 13 – Operations on 13 such as adding /subtracting /multiplying etc. to 13 can be performed. Breaking down 13 into 1 and 3 and then performing mathematical operations on 1 and 3 is not allowed)

- Ans 1. 111
 2. 101
 3. 116

Q.15 KINL is related to QOTR in a certain way based on the English alphabetical order. In the same way, NLQO is related to TRWU. To which of the following is PNSQ related, following the same logic?

- Ans 1. VTWY
 2. VTYW
 3. TVYW
 4. TVWY

Q.16 Select the figure from among the given options that can replace the question mark (?) in the following series and complete the pattern.

B	O	D	T	D	A	A	T	D	O	D	☆	
	☆	A		B	O		B	☆		A	T	?
T			☆			O			B			

Ans

1.

☆	O	D
	A	B
T		
2.

B	T	D
	A	☆
O		
3.

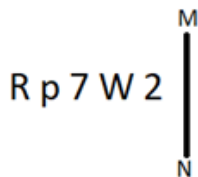
D	☆	O
	A	B
T		
4.

T	O	B
	A	D
☆		

Q.17 In a certain code language, 'KIDS' is coded as '97&5' and 'DESK' is coded as 'R759'. What is the code for 'E' in the given code language?

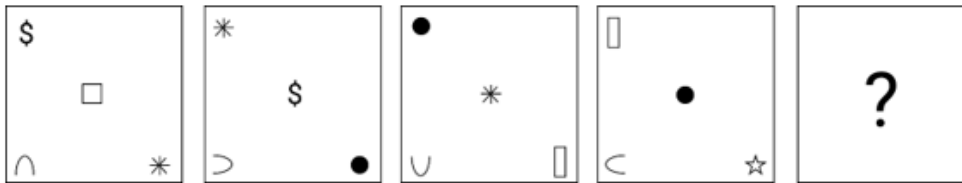
- Ans 1. R
 2. 9
 3. 7
 4. 5

Q.18 Select the correct mirror image of the given figure when the mirror is placed at MN as shown below.



- Ans 1. 2W7qЯ
 2. 2M7qЯ
 3. 2W7qR
 4. 2Wp7Я

Q.19 Identify the figure given in the options which when put in place of (?) will logically complete the series.



Ans

- ✗ 1.
- ✓ 2.
- ✗ 3.
- ✗ 4.

Q.20 9 is related to 37 following a certain logic. Following the same logic, 3 is related to 13. To which of the following is 8 related, following the same logic?

(NOTE: Operations should be performed on the whole numbers, without breaking down the numbers into its constituent digits. E.g. 13 - Operations on 13 such as adding /subtracting /multiplying etc. to 13 can be performed. Breaking down 13 into 1 and 3 and then performing mathematical operations on 1 and 3 is not allowed.)

- Ans
- ✗ 1. 29
 - ✗ 2. 35
 - ✓ 3. 33
 - ✗ 4. 31

Section : General Awareness

Q.1 Which element is located in Group 18 of the periodic table and is known for its lack of chemical reactivity?

- Ans
- ✓ 1. Helium
 - ✗ 2. Oxygen
 - ✗ 3. Fluorine
 - ✗ 4. Chlorine

Q.2 Which of the following groups of organisms are more vulnerable to the acidification of ocean?

- Ans
- ✗ 1. Marine algae
 - ✗ 2. Marine reptiles
 - ✓ 3. Calcifying organisms
 - ✗ 4. Marine mammals

Q.3 Who among the following Indian leaders was the first member to be elected to the British Parliament?

- Ans
- ✗ 1. Motilal Nehru
 - ✓ 2. Dadabhai Naoroji
 - ✗ 3. Bhikaji Cama
 - ✗ 4. Lala Hardayal

Q.4 At which of the following places the written form of teachings of Jainism in which they are presently available, were written around 1500 years ago?

- Ans**
- 1. Shravanabelagola
 - 2. Pataliputra
 - 3. Mathura
 - 4. Valabhi

Q.5 The Talcher Thermal Power Station is located in which state?

- Ans**
- 1. Andhra Pradesh
 - 2. Rajasthan
 - 3. Odisha
 - 4. Bihar

Q.6 The SEWA Cooperative Bank was first initiated in _____ in the year _____.

- Ans**
- 1. Varanasi; 1974
 - 2. Ahmedabad; 1984
 - 3. Ahmedabad; 1974
 - 4. Varanasi; 1984

Q.7 In which city was the 141st session of the International Olympic Committee (IOC) inaugurated in India?

- Ans**
- 1. Chennai
 - 2. Prayagraj
 - 3. Mumbai
 - 4. Delhi

Q.8 Which of the following is the zonal headquarter of North Eastern Railway?

- Ans**
- 1. Hubli
 - 2. Kolkata
 - 3. Gorakhpur
 - 4. Allahabad

Q.9 In which Indian city is the DY Patil Cricket Stadium located?

- Ans**
- 1. Navi Mumbai
 - 2. Pune
 - 3. Nashik
 - 4. Aurangabad

Q.10 Which Article of the Constitution of India deals with the composition of the Legislative Council?

- Ans**
- 1. Article 171
 - 2. Article 168
 - 3. Article 181
 - 4. Article 169

Q.11 The Kamakshi Saunsthan temple of Goa is crowned with the _____ two-storied tower and with a golden Kalash perched on its Shikhar.

- Ans**
- 1. hexagonal
 - 2. octagonal
 - 3. pentagonal
 - 4. circular

Q.12 To remain healthy and disease free, taking a balanced diet is very important. A balanced diet is:

- Ans**
- 1. a diet that contains adequate amount of protein and fat
 - 2. a diet that contains sufficient amount of all the nutrients that the human body needs to grow properly
 - 3. a diet that contains appreciable number of vitamins and minerals
 - 4. a diet that contains adequate amount of carbohydrates

Q.13 In February 2023, which Indian-American was appointed as the CEO of YouTube?

- Ans
- 1. Satya Nadella
 - 2. Anjali Sud
 - 3. Vivek Ramaswamy
 - 4. Neal Mohan

Q.14 During which of the following Prime Ministers' leadership were Fundamental Duties incorporated in the Indian Constitution?

- Ans
- 1. Lal Bahadur Shastri
 - 2. Atal Bihari Vajpai
 - 3. Jawahar Lal Nehru
 - 4. Indira Gandhi

Q.15 Which of the following autobiographies is written by the former Indian Judge Leila Seth?

- Ans
- 1. Challenges of Governance: An Insider's View
 - 2. Justice for the Judge: An Autobiography
 - 3. In Pursuit of Justice: An Autobiography
 - 4. On Balance: An Autobiography

Q.16 Who among the following signed the Treaty of Allahabad in August 1765 with the Nawab of Awadh and Shah Alam II, the Mughal Emperor?

- Ans
- 1. Robert Clive
 - 2. Warren Hastings
 - 3. William Bentick
 - 4. Earl Mountbatten

Q.17 The title of 'Chief of the Merchants' or 'Malikut-Tujjar' was conferred on Mahmud Gawan by which of the following Bahamani kings?

- Ans
- 1. Bahman Shah
 - 2. Humayun Shah
 - 3. Mohammad Shah
 - 4. Nizamuddin Ahmad III

Q.18 In which year did Guru Indira PP Bora receive the Padma Shri Award?

- Ans
- 1. 2019
 - 2. 2018
 - 3. 2020
 - 4. 2021

Q.19 Pradhan Mantri MUDRA Yojana (PMMY) is a scheme launched in 2015 for providing loans up to _____ lakh to the non-corporate, non-farm small/micro enterprises.

- Ans
- 1. 10
 - 2. 8
 - 3. 5
 - 4. 2

Q.20 Indian classical singer, Kesarbai Kerkar belonged to which of the following gharanas?

- Ans
- 1. Agra gharana
 - 2. Jaipur-Atrauli gharana
 - 3. Delhi gharana
 - 4. Benaras gharana

Q.21 Match the columns.

- Column-A(Nutrients)
- i. Protein rich diet
 - ii. Fat rich diet
 - iii. Carbohydrate rich diet
 - iv. Vitamin C rich diet

- Column-B(Source)
- a. Glucose and other sugars
 - b. Citrus fruits
 - c. Egg white and red meat
 - d. Butter and cheese

- Ans
- 1. i-c, ii-d, iii-a, iv-b
 - 2. i-c, ii-d, iii-b, iv-a
 - 3. i-d, ii-c, iii-b, iv-a
 - 4. i-c, ii-a, iii-b, iv-d

Q.22 The Ananda Pagoda is a famous festival of which neighbouring country of India?

- Ans
- 1. Myanmar
 - 2. Pakistan
 - 3. Maldives
 - 4. Afghanistan

Q.23 Which of the following Indian classical dance forms was developed by Siddhendra Yogi?

- Ans
- 1. Kathak
 - 2. Dandiya
 - 3. Kuchipudi
 - 4. Kathakali

Q.24 The president of which country was the chief guest at the Indian Republic Day Ceremony of 2023?

- Ans
- 1. Egypt
 - 2. Morocco
 - 3. Sudan
 - 4. Lebanon

Q.25 National Sickle Cell Anaemia Elimination Programme, introduced in the Union Budget 2023, aims to eliminate sickle cell genetic transmission by the year _____.

- Ans
- 1. 2049
 - 2. 2047
 - 3. 2045
 - 4. 2040

Section : English Language and Comprehension

Q.1 Select the most appropriate ANTONYM of the underlined word in the given sentence.

I concur with the decision of our principal, when he says that students who display indiscipline should be dismissed from the institute irrespective of their academic achievements.

- Ans
- 1. credit
 - 2. differ
 - 3. promote
 - 4. coincide

Q.2 Select the most appropriate option that can substitute the underlined segment in the given sentence. If there is no need to substitute it, select 'No substitution required'.

My manager thanked the staff for there continued dedication and support.

- Ans
- 1. for they're continued
 - 2. No substitution required
 - 3. for there continuous
 - 4. for their continued

Q.3 The following sentence has been split into four segments. Identify the segment that contains a grammatical error.

I have made / the cupcakes, so / please hand out them / to me.

A B C D

- Ans
- 1. C
 - 2. B
 - 3. A
 - 4. D

Q.4 Select the INCORRECTLY spelt word..

- Ans
- 1. Taciturn
 - 2. Particulate
 - 3. Outsource
 - 4. Stubbal

Q.5 Select the most appropriate ANTONYM of the highlighted word in the given sentence.
The company faced a downturn in profits due to economic uncertainties.

- Ans
- 1. Surge
 - 2. Recession
 - 3. Plunge
 - 4. Decline

Q.6 The following sentence has been split into four segments. Identify the segment that contains a grammatical error.

After school, we / went home and / told our respective parents / off the incident.

- Ans
- 1. went home and
 - 2. told our respective parents
 - 3. After school, we
 - 4. off the incident

Q.7 Select the most appropriate ANTONYM of the given word.

spontaneous

- Ans
- 1. scarce
 - 2. deliberate
 - 3. separate
 - 4. dirty

Q.8 Select the most appropriate option to fill in the blank.

While the stock market experiences volatility, financial analysts _____ market trends and provide investment advice.

- Ans
- 1. monitored
 - 2. have monitored
 - 3. monitor
 - 4. were monitored

Q.9 Select the grammatically correct sentence from the given options.

- Ans
- 1. Since yesterday, the policeman had been waiting for the woman to take a details of a case.
 - 2. Since yesterday, a policeman had been waiting for a woman to take the details of the case.
 - 3. Since yesterday, the policeman had been waiting for a woman to take a details of the case.
 - 4. Since yesterday, the policeman had been waiting for the woman to take the details of the case.

Q.10 Select the option that will improve the underlined part of the given sentence.

Ritu was still standing in the queue when the film was starting.

- Ans
- 1. film starts
 - 2. film started
 - 3. film had began
 - 4. film begins

Q.11 Select the most appropriate option that can substitute the highlighted word(s) in the given sentence.

One must not be proud of his achievements.

- Ans
- 1. for one's achievements
 - 2. off his achievements
 - 3. by his achievements
 - 4. of one's achievements

Q.12 Select the most appropriate option to fill in the blank.

I am thinking about colouring my _____.

- Ans
- 1. hare
 - 2. air
 - 3. hair
 - 4. heir

Q.13 Select the meaningful and correctly spelt word from the given options to fill in the blank.

Regular physical exercise improves cardiovascular health, reducing the risk of heart disease and _____.

- Ans
- 1. strike
 - 2. stroke
 - 3. stock
 - 4. struck

Q.14 Select the most appropriate synonym of the given word.

Entangle

- Ans
- 1. Trap
 - 2. Engross
 - 3. Intrude
 - 4. Enlarge

Q.15 Select the most appropriate idiom that can substitute the underlined segment in the given sentence.

After the long and tedious project, Sarah felt like she was at the limit of her patience.

- Ans
- 1. finishing line
 - 2. end of her rope
 - 3. tip of the iceberg
 - 4. crossroads

Q.16 Select the most appropriate meaning of the given idiom.

To look black

- Ans
- 1. To roll on ice
 - 2. To seem unfavourable
 - 3. To cry bitterly
 - 4. To give an approving expression

Q.17 The following sentence has been split into four segments. Identify the segment that contains a grammatical error.
She speaks / so soft that / hardly anyone / can hear her.

- Ans
- 1. hardly anyone
 - 2. can hear her
 - 3. She speaks
 - 4. so soft that

Q.18 Select the correct spelling of the underlined word in the given sentence.

Sometimes, the nicknames of children, given to them by their loved ones in childhood, give them a true sense of embarresment, especially when they are called by those names in front of others.

- Ans
- 1. emberressment
 - 2. embrassment
 - 3. embarrassment
 - 4. embarresmint

Q.19 Select the most appropriate expression that can substitute the underlined words in the given sentence.
The watchman tried every possible way to catch the thief of the hostel.

- Ans**
- 1. arrived at the eleventh hour
 - 2. explored every avenue
 - 3. cut the cackle
 - 4. called it a day

Q.20 In the following sentence the underlined part contains an error. Alternatives to the underlined part are given as options.
Select the correct alternative.
We never expected most from her.

- Ans**
- 1. many
 - 2. more
 - 3. little
 - 4. much

Comprehension:

In the following passage, some words have been deleted. Read the passage carefully and select the most appropriate option to fill in each blank.

Westminster Abbey's 1. _____ was one of Edward the Confessor's greatest accomplishments as king of England from 1042 to 1066. Edward was King Ethelred's son and he had a lot of pressure as his father was known to be an incompetent ruler. The Danes drove Edward from England, and he lived in exile in Normandy. According to legend, Edward promised that if he could make it back to his realm in safety, he would travel to St. Peter's in Rome. Upon his return and 2. _____ in Winchester in 1042, he discovered that he could not abandon his subjects. He was freed from his pledge by the Pope, but only if he established or 3. _____ a monastery dedicated to St. Peter. As a result, Westminster Abbey was constructed in the Norman 4. _____. He believed that London was not the 5. _____ place to build the Minster. Hence, a location known as 'Westminster' was discovered to be to the west of the metropolis.

SubQuestion No : 21

Q.21 Select the most appropriate option to fill in blank number 1.

- Ans**
- 1. configuration
 - 2. construction
 - 3. geometry
 - 4. arrangement

Comprehension:

In the following passage, some words have been deleted. Read the passage carefully and select the most appropriate option to fill in each blank.

Westminster Abbey's 1. _____ was one of Edward the Confessor's greatest accomplishments as king of England from 1042 to 1066. Edward was King Ethelred's son and he had a lot of pressure as his father was known to be an incompetent ruler. The Danes drove Edward from England, and he lived in exile in Normandy. According to legend, Edward promised that if he could make it back to his realm in safety, he would travel to St. Peter's in Rome. Upon his return and 2. _____ in Winchester in 1042, he discovered that he could not abandon his subjects. He was freed from his pledge by the Pope, but only if he established or 3. _____ a monastery dedicated to St. Peter. As a result, Westminster Abbey was constructed in the Norman 4. _____. He believed that London was not the 5. _____ place to build the Minster. Hence, a location known as 'Westminster' was discovered to be to the west of the metropolis.

SubQuestion No : 22

Q.22 Select the most appropriate option to fill in blank number 2.

- Ans**
- 1. personification
 - 2. inauguration
 - 3. dethronement
 - 4. coronation

Comprehension:

In the following passage, some words have been deleted. Read the passage carefully and select the most appropriate option to fill in each blank.

Westminster Abbey's 1. _____ was one of Edward the Confessor's greatest accomplishments as king of England from 1042 to 1066. Edward was King Ethelred's son and he had a lot of pressure as his father was known to be an incompetent ruler. The Danes drove Edward from England, and he lived in exile in Normandy. According to legend, Edward promised that if he could make it back to his realm in safety, he would travel to St. Peter's in Rome. Upon his return and 2. _____ in Winchester in 1042, he discovered that he could not abandon his subjects. He was freed from his pledge by the Pope, but only if he established or 3. _____ a monastery dedicated to St. Peter. As a result, Westminster Abbey was constructed in the Norman 4. _____. He believed that London was not the 5. _____ place to build the Minster. Hence, a location known as 'Westminster' was discovered to be to the west of the metropolis.

SubQuestion No : 23

Q.23 Select the most appropriate option to fill in blank number 3.

- Ans**
- 1. decorate
 - 2. renovation
 - 3. update
 - 4. fix

Comprehension:

In the following passage, some words have been deleted. Read the passage carefully and select the most appropriate option to fill in each blank.

Westminster Abbey's 1. _____ was one of Edward the Confessor's greatest accomplishments as king of England from 1042 to 1066. Edward was King Ethelred's son and he had a lot of pressure as his father was known to be an incompetent ruler. The Danes drove Edward from England, and he lived in exile in Normandy. According to legend, Edward promised that if he could make it back to his realm in safety, he would travel to St. Peter's in Rome. Upon his return and 2. _____ in Winchester in 1042, he discovered that he could not abandon his subjects. He was freed from his pledge by the Pope, but only if he established or 3. _____ a monastery dedicated to St. Peter. As a result, Westminster Abbey was constructed in the Norman 4. _____. He believed that London was not the 5. _____ place to build the Minster. Hence, a location known as 'Westminster' was discovered to be to the west of the metropolis.

SubQuestion No : 24

Q.24 Select the most appropriate option to fill in blank number 4.

- Ans**
- 1. designate
 - 2. style
 - 3. dub
 - 4. label

Comprehension:

In the following passage, some words have been deleted. Read the passage carefully and select the most appropriate option to fill in each blank.

Westminster Abbey's 1. _____ was one of Edward the Confessor's greatest accomplishments as king of England from 1042 to 1066. Edward was King Ethelred's son and he had a lot of pressure as his father was known to be an incompetent ruler. The Danes drove Edward from England, and he lived in exile in Normandy. According to legend, Edward promised that if he could make it back to his realm in safety, he would travel to St. Peter's in Rome. Upon his return and 2. _____ in Winchester in 1042, he discovered that he could not abandon his subjects. He was freed from his pledge by the Pope, but only if he established or 3. _____ a monastery dedicated to St. Peter. As a result, Westminster Abbey was constructed in the Norman 4. _____. He believed that London was not the 5. _____ place to build the Minster. Hence, a location known as 'Westminster' was discovered to be to the west of the metropolis.

SubQuestion No : 25

Q.25 Select the most appropriate option to fill in blank number 5.

- Ans**
- 1. appropriate
 - 2. allot
 - 3. annex
 - 4. seize