

Multi Tasking Non Technical Staff and Havaladar CBIC and CBN Examination 2024

Exam Date	14/11/2024
Exam Time	9:00 AM - 11:00 AM
Subject	MTS Non Tech Havaladar CBIC and CBN Examination 2024

Section : Numerical and Mathematical Ability

Q.1 After successive discounts of 26% and 22.5%, an item was sold at a profit of 24%. If the cost price of the item was ₹925, what was the marked price (in ₹) of the item?

- Ans**
- 1. 2,000
 - 2. 2,200
 - 3. 1,975
 - 4. 2,250

Q.2 Monthly incentives (in ₹) of three employees Rohit, Juli and Ankit of a company during three months are given in the following table. Study the table carefully and answer the question that follows.

Employee/Month	May	June	July
Rohit	25,500	20,000	22,250
Juli	15,000	12,000	18,000
Ankit	10,000	11,500	9,600

What is the ratio of incentives received by Juli and Rohit in May?

- Ans**
- 1. 89 : 60
 - 2. 17 : 10
 - 3. 60 : 89
 - 4. 10 : 17

Q.3 Among three numbers, the second number is half of the first number and the third number is 4 less than the second number. If the average of the first and third numbers is 16, what is the second number?

- Ans**
- 1. 12
 - 2. 18
 - 3. 10
 - 4. 16

Q.4 A bought an item for ₹384 and sold it for ₹576, and B bought another item for ₹1,254 and sold it for ₹1,672. What is the ratio of gain percentage of A to gain percentage of B?

- Ans**
- 1. $\frac{3}{2}$
 - 2. $\frac{5}{3}$
 - 3. $\frac{5}{2}$
 - 4. $\frac{3}{4}$

Test Prime

ALL EXAMS,
ONE SUBSCRIPTION



40,000+
Mock Tests



Personalised
Report Card



Unlimited
Re-Attempt



500+
Exam Covered



Previous Year
Papers



500%
Refund



DOWNLOAD NOW

Q.5 If the radii of two right circular cylinders are in the ratio of 2:3 and their heights are in the ratio of 5:4, then find the ratio of their curved surface areas?

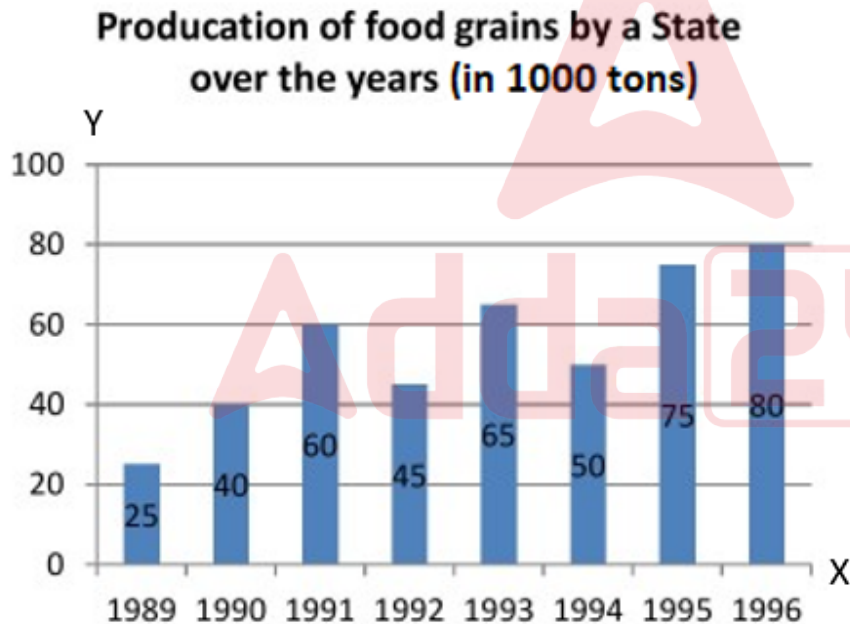
- Ans
- 1. 6 : 10
 - 2. 10 : 6
 - 3. 5 : 6
 - 4. 6 : 5

Q.6 A right circular conical vessel has a capacity of 9240 m^3 . The radius of the cone is 21 m. What will be the total cost (in ₹) of painting the outer curved surface area of cone at the rate of ₹10/m²?

Take $\pi = \frac{22}{7}$

- Ans
- 1. 18140
 - 2. 19140
 - 3. 33000
 - 4. 92400

Q.7 The given graph shows the production of food grains by a state (in 1000 tons) over the years from 1989 to 1996. Study the graph carefully and answer the question that follows.



In how many of the given years was the production of food grains more than the average production of the given years?

- Ans
- 1. 1
 - 2. 3
 - 3. 2
 - 4. 4

Q.8 A class teacher conducted a unit test in the class. If out of 25 students, 11 students' average score is 77 and rest 14 students' average score is 69, then the weighted average score is:

- Ans
- 1. 68.54
 - 2. 74.65
 - 3. 72.52
 - 4. 70.29

Q.9 The average of 20 results is 15 and the average of other 25 results is 24. What is the average of all the results?

- Ans
- 1. 22
 - 2. 40
 - 3. 20
 - 4. 39

Q.10 ABCD is a quadrilateral in which diagonal $BD = 62$ cm, $AL \perp BD$ and $CM \perp BD$, such that $AL = 14.3$ cm and $CM = 17.7$ cm. The area of the quadrilateral ABCD is:

- Ans
- 1. 982 cm^2
 - 2. 902 cm^2
 - 3. 992 cm^2
 - 4. 900 cm^2

Q.11 What is the LCM of $\frac{2}{3}$, $\frac{4}{9}$ and $\frac{5}{6}$?

- Ans
- 1. $\frac{10}{3}$
 - 2. 10
 - 3. $\frac{40}{3}$
 - 4. $\frac{20}{3}$

Q.12 Find the simple interest (in ₹) on ₹2500 as a sum borrowed at 7% per year rate of interest for 6 years.

- Ans
- 1. 990
 - 2. 1090
 - 3. 1010
 - 4. 1050

Q.13 When x is added to each of 2, 3, 30 and 35, then the numbers obtained in this order are in proportion. What is the second largest part in the proportion?

- Ans
- 1. 35
 - 2. 30
 - 3. 45
 - 4. 40

Q.14 How long (in months) will it take a sum of money invested at 5% per annum on simple interest to increase its value by 22.5%?

- Ans
- 1. 48
 - 2. 50
 - 3. 54
 - 4. 44

Q.15 Find the simple interest (in ₹) on ₹3000 as a sum borrowed at 4% per year rate of interest for 5 years.

- Ans
- 1. 540
 - 2. 560
 - 3. 600
 - 4. 640

Q.16 A bicycle goes 11 metres in 9 seconds. Find its speed in km/h.

- Ans
- 1. $4\frac{2}{5}$
 - 2. $3\frac{3}{5}$
 - 3. $3\frac{2}{5}$
 - 4. $4\frac{1}{5}$

Q.17 Ravish had ₹1,500 with him. Sunaina had 24% more money than what Ravish had, while Sanatan had 10% less money than what Sunaina had. How much money did Sanatan have?

- Ans
- 1. ₹1,764
 - 2. ₹1,674
 - 3. ₹1,774
 - 4. ₹1,664

Q.18 If two trains 200 m and 150 m long are running on parallel rails at the rate of 50 km/h and 30 km/h, respectively, find the relative speed if they are running in the same direction.

- Ans
- 1. $\frac{25}{18}$ m/sec
 - 2. $\frac{58}{18}$ m/sec
 - 3. $\frac{25}{9}$ m/sec
 - 4. $\frac{50}{9}$ m/sec

Q.19 A dealer mixes 26 kg of a variety of tea at ₹200 per kg with 30 kg of another variety of tea at ₹360 per kg, and sells the mixture at ₹300 per kg. His profit percentage is:

- Ans
- 1. 14%
 - 2. 5%
 - 3. 12%
 - 4. 8%

Q.20 A park has an average number of 420 visitors on Sunday and 120 on other days. The average number of visitors per day in a month of 30 days beginning with Sunday, is:

- Ans
- 1. 170
 - 2. 160
 - 3. 270
 - 4. 150

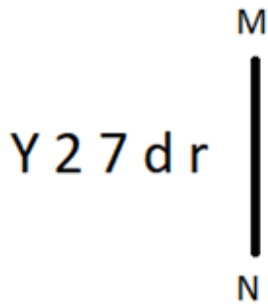
Section : Reasoning Ability and Problem Solving

Q.1 What should come in place of the question mark (?) in the given series?

216 219 224 227 232 ?

- Ans
- 1. 234
 - 2. 236
 - 3. 235
 - 4. 233

Q.2 Select the correct mirror image of the given figure when the mirror is placed at MN as shown below.



- Ans
- ✓ 1. ɹ b Ɔ Ɔ Y
 - ✗ 2. ɹ b ʌ ʌ ʌ
 - ✗ 3. ɹ b 2 7 Y
 - ✗ 4. ɹ p Ɔ Ɔ Y

Q.3 A, B, C, D, E, F and G are sitting around a circular table facing the centre (but not necessarily in the same order). G sits to the immediate left of B. A sits to the immediate left of D. D sits second to the left of E. C sits third to the left of B. How many people sit between B and D when counted from the left of D?

- Ans
- ✗ 1. 1
 - ✗ 2. 3
 - ✗ 3. 4
 - ✓ 4. 2

Q.4 In a certain code language, 'rep sho pel' means 'goats are bleating'; 'sho jin ken' means 'goats and cows' and 'met rep pi' means 'dogs are mad'. What is the code for 'are' in that code language?

- Ans
- ✗ 1. pi
 - ✗ 2. met
 - ✓ 3. rep
 - ✗ 4. sho

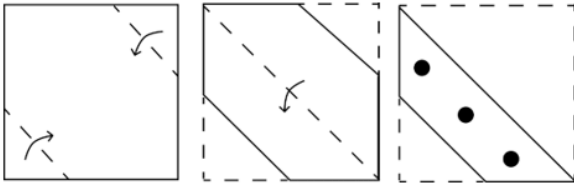
Q.5 Which two numbers should be interchanged to make the given equation correct?

$$6 \times 4 - (60 \div 5) + 15 + (33 \div 3) \times 2 = 59$$

(Note: Interchange should be done of entire number and not individual digits of a given number)


- Ans
- ✗ 1. 2 and 5
 - ✓ 2. 2 and 4
 - ✗ 3. 6 and 5
 - ✗ 4. 5 and 15

Q.6 A square sheet of paper is folded along the dotted line successively along the directions shown and is then punched in the last. How would the paper look when unfolded?




Ans

✓ 1.




✗ 2.



✗ 3.



✗ 4.



Q.7 A, B, C, D, E, F and G are sitting around a circular table facing the centre (but not necessarily in the same order). Only 2 people sit between A and C when counted from the right of C. B sits 2nd to the left of C. F sits immediate on the right of D. E is not an immediate neighbour of C. Who sits immediate to the right of A?

- Ans**
- ✗ 1. D
 - ✓ 2. E
 - ✗ 3. G
 - ✗ 4. F

Q.8 EJ68 is related to OT55 in a certain way. In the same way, KP47 is related to UZ34. To which of the following is QV29 related, following the same logic?

- Ans**
- ✗ 1. FA20
 - ✗ 2. FA16
 - ✓ 3. AF16
 - ✗ 4. AF20

Q.9 Read the given statement(s) and conclusions carefully. Assuming that the information given in the statements is true, even if it appears to be at variance with commonly known facts, decide which of the given conclusions logically follow(s) from the statement(s).

Statements: All the pianos are instruments. All the instruments are flutes.

Conclusions:

- (I) All the flutes are instruments.
- (II) All the pianos are flutes.

- Ans**
- 1. Neither conclusion (I) nor (II) follows.
 - 2. Both conclusion (I) and (II) follow.
 - 3. Only Conclusion (I) follows.
 - 4. Only Conclusion (II) follows.

Q.10 8 is related to 33 following a certain logic. Following the same logic, 11 is related to 45. To which of the following is 24 related, following the same logic?

(NOTE : Operations should be performed on the whole numbers, without breaking down the numbers into its constituent digits. E.g. 13 – Operations on 13 such as adding / subtracting / multiplying, etc., to 13 can be performed. Breaking down 13 into 1 and 3 and then performing mathematical operations on 1 and 3 is not allowed.)

- Ans**
- 1. 97
 - 2. 95
 - 3. 99
 - 4. 98

Q.11 In the following number-pairs, the second number is obtained by applying certain mathematical operations to the first number. Select the set in which the numbers are related in the same way as are the numbers of the following sets.

(NOTE: Operations should be performed on the whole numbers, without breaking down the numbers into their constituent digits. E.g. 13 – Operations on 13 such as adding/subtracting/multiplying to 13 can be performed. Breaking down 13 into 1 and 3 and then performing mathematical operations on 1 and 3 is not allowed.)

9, 43
13, 63

- Ans**
- 1. 17, 83
 - 2. 17, 82
 - 3. 18, 82
 - 4. 18, 83

Q.12 Read the given statements and conclusions carefully. Assuming that the information given in the statements is true, even if it appears to be at variance with commonly known facts, decide which of the given conclusions logically follow(s) from the statements.

Statements:

All juices are burgers.

Some burgers are chocolates.

Conclusions:

(I) Some burgers are juices.

(II) Some juices are chocolates.

- Ans**
- 1. Both conclusions I and II follow
 - 2. Neither conclusion I nor II follows
 - 3. Only conclusion II follows
 - 4. Only conclusion I follows

Q.13 EJDI is related to CHBG in a certain way based on the English alphabetical order. In the same way, JOIN is related to HMGL. To which of the following is NSMR related, following the same logic?

- Ans**
- 1. PQLK
 - 2. PQKL
 - 3. LQPK
 - 4. LQKP

Q.14 In a certain code language, 'ZERO' is coded as '2468' and 'OILY' is coded as '5679'. What is the code for 'O' in that language?

- Ans
- 1. 8
 - 2. 5
 - 3. 9
 - 4. 6

Q.15 What will come in place of the question mark (?) of the following equation, if '+' and '-' are interchanged and 'x' and '÷' are interchanged?

$$15 + 9 \div 2 - 63 \times 3 = ?$$

- Ans
- 1. 18
 - 2. 33
 - 3. 12
 - 4. 25

Q.16 In a certain code language, 'MUST' is coded as '7913' and 'TALE' is coded as '8672'. What is the code for 'T' in the given code language?

- Ans
- 1. 7
 - 2. 3
 - 3. 6
 - 4. 8

Q.17 What should come in place of the question mark (?) in the given series based on the English alphabetical order?

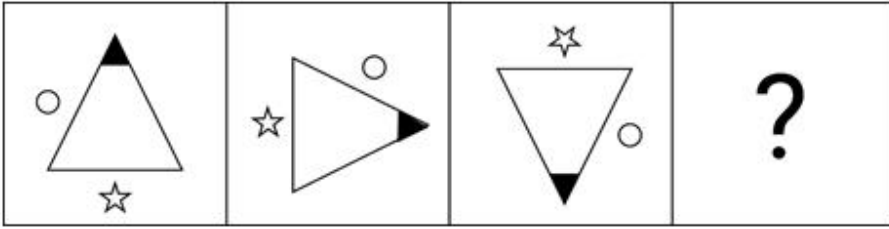
HKR, DGN, ZCJ, VYF, ?

- Ans
- 1. RBK
 - 2. RUB
 - 3. RFG
 - 4. RBY

Q.18 In a code language, 'PARENT' is written as 'PWRANT' and 'SING' is written as 'SENG'. How will 'TERMINATE' be written in the same language?

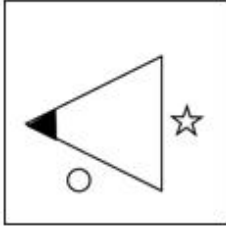
- Ans
- 1. TERMANWTA
 - 2. SARMENWTA
 - 3. TARMENWTA
 - 4. SERMANWTA

Q.19 Identify the figure given in the options which when put in place of (?) will logically complete the series.

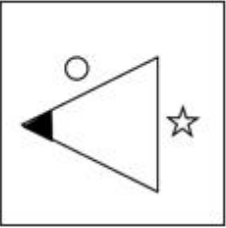


Ans

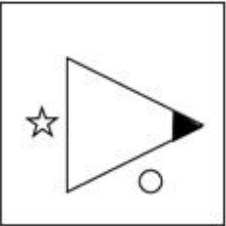
✓ 1.



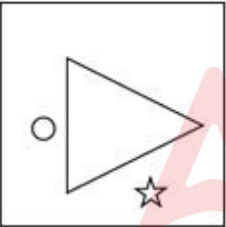
✗ 2.



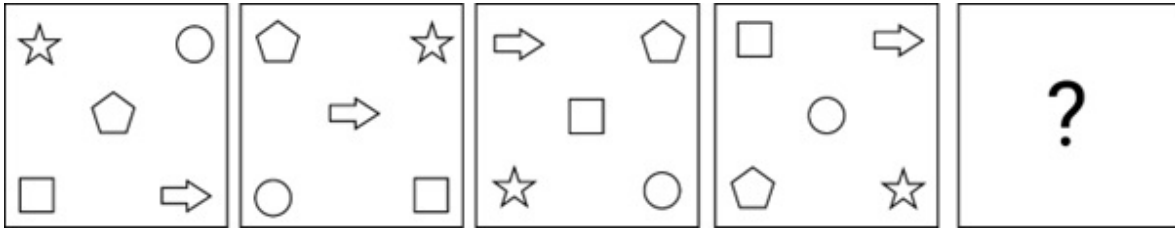
✗ 3.



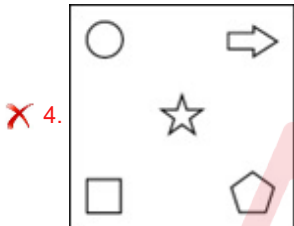
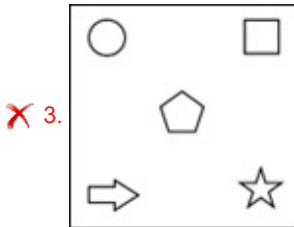
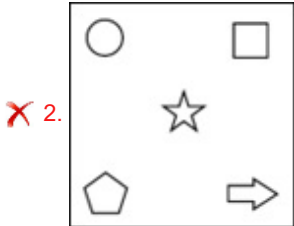
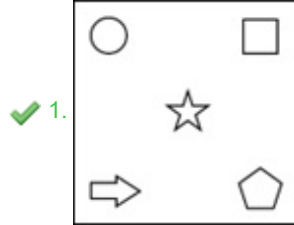
✗ 4.



Q.20 Identify the figure given in the options which when put in place of '?' will logically complete the series.



Ans



Section : General Awareness

Q.1 According to the Indian calendar, the March and April months are known as _____.

- Ans
- ✗ 1. Asvina-Kartika
 - ✓ 2. Chaitra-Vaisakha
 - ✗ 3. Jyaistha-Asadha
 - ✗ 4. Magha-Phalguna

Q.2 What is the salt measurement in hypersaline lagoons?

- Ans
- ✗ 1. Less than 100
 - ✗ 2. 30 to 35
 - ✗ 3. Less than 5
 - ✓ 4. More than 100

Q.3 Who among the following became the Chairperson of the Parliamentary Committee on Science and Technology, Environment, Forests and Climate Change as on 30th September 2023?

- Ans
- ✗ 1. Surendra Singh Nagar
 - ✗ 2. Neeraj Shekhar
 - ✓ 3. Jairam Ramesh
 - ✗ 4. Satish Chandra Dubey

Q.4 What is the player who sits at the centre of the rectangular field in Kho Kho called?

- Ans
- 1. Captain
 - 2. Defender
 - 3. Master
 - 4. Chaser

Q.5 Which type of coal is found in Damodar valley?

- Ans
- 1. Peat
 - 2. Anthracite
 - 3. Lignite
 - 4. Bituminous

Q.6 What is the total length of 'Atal Tunnel', which is located in Himachal Pradesh state?

- Ans
- 1. 9.8 kilometres
 - 2. 9 kilometres
 - 3. 9.02 kilometres
 - 4. 9.5 kilometres

Q.7 Shree Narayana Dharma Paripalana Yogam (SNDP), founded in 1903, to carry on the work of social reform was active in which of the following states?

- Ans
- 1. Bihar
 - 2. Assam
 - 3. Kerala
 - 4. Punjab

Q.8 Which of the following is the national fruit of Sri Lanka?

- Ans
- 1. Strawberry
 - 2. Mango
 - 3. Orange
 - 4. Jackfruit

Q.9 What is the process of a substance changing directly from a solid to a gas without passing through the liquid state called?

- Ans
- 1. Evaporation
 - 2. Condensation
 - 3. Sublimation
 - 4. Fusion

Q.10 Chhath Puja falls in which month of the Hindu calendar?

- Ans
- 1. Ashadha
 - 2. Kartika
 - 3. Jyeshtha
 - 4. Phalguna

Q.11 Who among the following is the author of the famous novel, 'One Amazing Thing'?

- Ans
- 1. Khushwant Singh
 - 2. Chitra Banerjee Divakurni
 - 3. Sonali Dev
 - 4. Amitav Ghosh

Q.12 The Bara Imambara in Lucknow was built in the year 1784 by _____.

- Ans
- 1. Akbar
 - 2. Nawab Siraj-ud-Daula
 - 3. Jahangir
 - 4. Nawab Asaf-ud-Daula

Q.13 In which the following sports do caddies play the role of helper for the player?

- Ans
- 1. Golf
 - 2. Shooting
 - 3. Boxing
 - 4. Cycling

Q.14 How much amount is provided per month as assistance to the female head of the family under the Gruha Lakshmi Scheme launched by the Karnataka Government in July 2023?

- Ans
- 1. ₹1,500
 - 2. ₹3,500
 - 3. ₹5,000
 - 4. ₹2,000

Q.15 Which of the following statements about the Sangeet Natak Akademi is/are true?

1. The Sangeet Natak Akademi has been functioning as the apex body of the performing arts in the country.
2. The main objective of the Akademi is to coordinate and collaborate with the government and performing artists.
3. The Sangeet Natak Akademi comes under the Ministry of Culture of the government of India.

- Ans
- 1. Only 2 and 3
 - 2. Only 1 and 3
 - 3. Only 1 and 2
 - 4. 1, 2, and 3

Q.16 Which of the following are building blocks of proteins?

- Ans
- 1. Bases
 - 2. Amino acids
 - 3. Cells
 - 4. Acids

Q.17 The 'Servants of India Society' was founded by which of the following freedom fighters?

- Ans
- 1. Chittaranjan Das
 - 2. Mahatma Gandhi
 - 3. Gopal Krishna Gokhale
 - 4. Motilal Nehru

Q.18 _____, which translates to 'dance of the enchantress,' stands out as one of the most captivating expressions in the Indian classical dance repertoire.

- Ans
- 1. Mohiniyattam
 - 2. Kuttiyattam
 - 3. Manipuri
 - 4. Kuchipudi

Q.19 Name the Sri Lankan Buddhist text that provides details of the Mauryan empire.

- Ans
- 1. Divyavadana
 - 2. Dipavamsa
 - 3. Parishishtaparvan
 - 4. Ashokavadana

Q.20 Which of the following states in India had the LOWEST poverty ratio in 2011-2012 as per the Economic Survey 2013-14, released by the Ministry of Finance, Government of India?

- Ans
- 1. Kerala
 - 2. Haryana
 - 3. Gujarat
 - 4. Karnataka

Q.21 Under which category did Ricky Kej secure his third Grammy award?

- Ans
- 1. Best Immersive Audio Album
 - 2. Song of the year
 - 3. Best Audio Album of the year
 - 4. Best Contemporary Instrumental Album

Q.22 Which of the following is the legislative organ of the Union Government?

- Ans
- 1. Judiciary
 - 2. Executive
 - 3. State Executive
 - 4. Parliament

Q.23 Which of the following is the quality of the public goods?

- Ans
- 1. Rivalrous
 - 2. Non-rivalrous
 - 3. Excludable
 - 4. Non-divisible

Q.24 Who among the following Mughal emperors had a great interest in paintings?

- Ans
- 1. Babur
 - 2. Humayun
 - 3. Jahangir
 - 4. Shahjahan

Q.25 Which of the following is a NOT a feature of the Indian Parliamentary form of Government?

- Ans
- 1. Leadership of the Prime Minister
 - 2. Majority party rule
 - 3. Non membership of the ministers in Legislature
 - 4. Dissolution of the Lower House

Section : English Language and Comprehension

Q.1 Select the most appropriate option with the correct usage of the preposition to substitute the underlined segment in the given sentence.

UNESCO's mission is to contribute to the building of a culture of peace, the eradication of poverty, sustainable development and intercultural dialogue with education, the sciences, culture, communication and information.

- Ans
- 1. intercultural dialogue in education
 - 2. intercultural dialogue by education
 - 3. intercultural dialogue from education
 - 4. intercultural dialogue through education

Q.2 Select the most appropriate homonym to fill in the blank.

During the _____ of Queen Victoria, England made all-round progress.

- Ans
- 1. rein
 - 2. rain
 - 3. reign
 - 4. rhine

Q.3 Select the most appropriate option to fill the blank.

The strike, that the truck association called, caused a minor _____ of food in our village.

- Ans
- 1. leak
 - 2. dearth
 - 3. less
 - 4. availability

Q.4 Select the grammatically correct sentence.

- Ans
- 1. The carpenter kept the furniture in a backyard of his house.
 - 2. The carpenter kept furniture in the backyard of his house.
 - 3. The carpenter kept a furniture in the backyard of his house.
 - 4. The carpenter kept the furniture in backyard of his house.

Q.5 Select the most appropriate option that can substitute the underlined segment in the given sentence.

The Rungrado is the large football stadium in the world.

- Ans
- 1. largest
 - 2. most largest
 - 3. larger
 - 4. more larger

Q.6 Select the most appropriate meaning of the given idiom.

Pay off old scores

- Ans
- 1. To score good marks
 - 2. To clear one's debt
 - 3. To have one's revenge
 - 4. To be successful

Q.7 Select the most appropriate ANTONYM of the given word.

Whimsical

- Ans
- 1. Practical
 - 2. Confident
 - 3. Illogical
 - 4. Fickle

Q.8 Select the most appropriate option that can substitute the underlined segment in the given sentence. If there is no need to substitute it, select 'No substitution required'.

Mahira is an more efficient and hardworking employee of her company.

- Ans
- 1. Mahira is the efficient
 - 2. Mahira is the more efficient
 - 3. Mahira is an efficient
 - 4. No substitution required

Q.9 Select the option that rectifies the underlined spelling error.

Participating in the marthon was a challenging experience.

- Ans
- 1. merethon
 - 2. marathon
 - 3. mereton
 - 4. marethon

Q.10 Select the most appropriate option to fill in the blank.

Where have you _____ all this time?

- Ans
- 1. bean
 - 2. been
 - 3. bin
 - 4. bine

Q.11 Select the option that can be used as a one-word substitute for the given group of words.

A person who loves music

- Ans
- 1. Melophile
 - 2. Discophile
 - 3. Astrophile
 - 4. Chromatophilic

Q.12 Select the INCORRECTLY spelt word.

- Ans
- 1. Noctummbulism
 - 2. Chauvinism
 - 3. Alcoholism
 - 4. Somnambulism

Q.13 Select the most appropriate option to fill in the blank.
Indian Meteorological Department (IMD) had _____ that the city would witness rainfall on Thursday.

- Ans
- 1. forecast
 - 2. contest
 - 3. prolong
 - 4. manifest

Q.14 Select the most appropriate synonym of the given word.
Avoid

- Ans
- 1. Reflect
 - 2. Accept
 - 3. Pursue
 - 4. Evade

Q.15 Select the most appropriate option to fill in the blank.

The company implemented a new _____ to improve efficiency.

- Ans
- 1. strategie
 - 2. stratagy
 - 3. strateji
 - 4. strategy

Q.16 Select the most appropriate option to fill in the blank.

We should always _____ our best to help others.

- Ans
- 1. done
 - 2. do
 - 3. did
 - 4. does

Q.17 Select the most appropriate option that can substitute the underlined segment in the given sentence.

If we want to promote national integrity in our country, then we must desist our tendency of taking up with others.

- Ans
- 1. coming round
 - 2. bringing forward
 - 3. looking down upon
 - 4. setting out

Q.18 Select the most appropriate meaning of the given phrase.

Jump on the bandwagon

- Ans
- 1. To support ideas that are less popular
 - 2. To oppose the idea of a group gaining popularity
 - 3. To join or support something which is gaining popularity
 - 4. To jump to a conclusion

Q.19 Select the most appropriate synonym of the given word to fill in the blank.

Desist

Every Indian should ____ from acts of corruption.

- Ans
- 1. insist
 - 2. show
 - 3. refrain
 - 4. pledge

Q.20 Parts of the following sentence have been given as options. Select the option that contains an error.

John searched thoroughly but could not find his coat nowhere in the house.

- Ans
- 1. but could not
 - 2. find his coat
 - 3. John searched thoroughly
 - 4. nowhere in the house.

Comprehension:

In the following passage, some words have been deleted. Read the passage carefully and select the most appropriate option to fill in each blank.

Our (1)_____ revolve around our work. For the most part, males have to labour with their hands in order to (2)_____ themselves. But everyone needs to work in some (3)_____. It provides honour and credit to us. Nothing in life can be accomplished without it. Man is great only because of his labours. (4)_____ comes from work. The secret to success is this. Nobody can advance without labour. It truly is the (5)_____ idea of existence. Without it, life is even less meaningful.

SubQuestion No : 21

Q.21 Select the most appropriate option to fill in blank number 1.

- Ans
- 1. lives
 - 2. creatures
 - 3. histories
 - 4. mortals

Comprehension:

In the following passage, some words have been deleted. Read the passage carefully and select the most appropriate option to fill in each blank.

Our (1)_____ revolve around our work. For the most part, males have to labour with their hands in order to (2)_____ themselves. But everyone needs to work in some (3)_____. It provides honour and credit to us. Nothing in life can be accomplished without it. Man is great only because of his labours. (4)_____ comes from work. The secret to success is this. Nobody can advance without labour. It truly is the (5)_____ idea of existence. Without it, life is even less meaningful.

SubQuestion No : 22

Q.22 Select the most appropriate option to fill in blank number 2.

- Ans**
- 1. support
 - 2. bear
 - 3. promote
 - 4. embrace

Comprehension:

In the following passage, some words have been deleted. Read the passage carefully and select the most appropriate option to fill in each blank.

Our (1)_____ revolve around our work. For the most part, males have to labour with their hands in order to (2)_____ themselves. But everyone needs to work in some (3)_____. It provides honour and credit to us. Nothing in life can be accomplished without it. Man is great only because of his labours. (4)_____ comes from work. The secret to success is this. Nobody can advance without labour. It truly is the (5)_____ idea of existence. Without it, life is even less meaningful.

SubQuestion No : 23

Q.23 Select the most appropriate option to fill in blank number 3.

- Ans**
- 1. magnitude
 - 2. volume
 - 3. capacity
 - 4. measurement

Comprehension:

In the following passage, some words have been deleted. Read the passage carefully and select the most appropriate option to fill in each blank.

Our (1)_____ revolve around our work. For the most part, males have to labour with their hands in order to (2)_____ themselves. But everyone needs to work in some (3)_____. It provides honour and credit to us. Nothing in life can be accomplished without it. Man is great only because of his labours. (4)_____ comes from work. The secret to success is this. Nobody can advance without labour. It truly is the (5)_____ idea of existence. Without it, life is even less meaningful.

SubQuestion No : 24

Q.24 Select the most appropriate option to fill in blank number 4.

- Ans**
- 1. Boast
 - 2. Remedy
 - 3. Glory
 - 4. Shame

Comprehension:

In the following passage, some words have been deleted. Read the passage carefully and select the most appropriate option to fill in each blank.

Our (1)_____ revolve around our work. For the most part, males have to labour with their hands in order to (2)_____ themselves. But everyone needs to work in some (3)_____. It provides honour and credit to us. Nothing in life can be accomplished without it. Man is great only because of his labours. (4)_____ comes from work. The secret to success is this. Nobody can advance without labour. It truly is the (5)_____ idea of existence. Without it, life is even less meaningful.

SubQuestion No : 25

Q.25 Select the most appropriate option to fill in blank number 5.

- Ans**
- 1. fundamental
 - 2. secondary
 - 3. uproar
 - 4. demean