

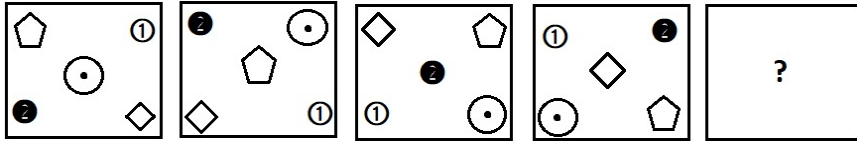
Sub Inspector in Delhi Police and Central Armed Police Forces Examination 2024 Paper I Exam

Roll Number	
Candidate Name	
Venue Name	Yagyavalkya Institute of Technology
Exam Date	27/06/2024
Exam Time	4:00 PM - 6:00 PM
Subject	SICPO Paper I 2024

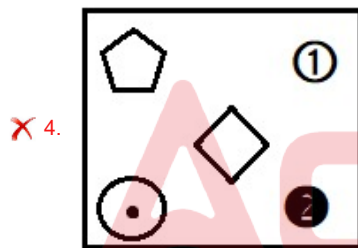
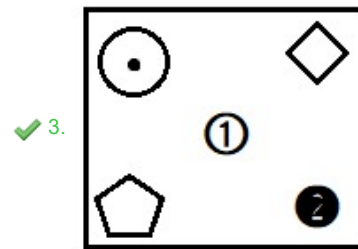
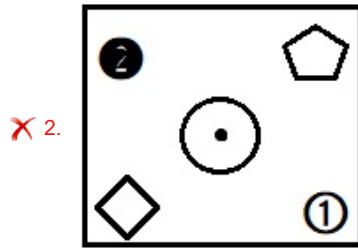
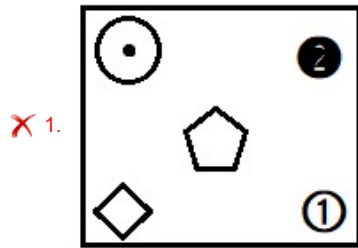
Section : General Intelligence and Reasoning



Q.1 Select the figure from among the given options that can logically replace the question mark (?) in the following series.



Ans



Question ID : 630680867759

Option 1 ID : 6306803398681

Option 2 ID : 6306803398680

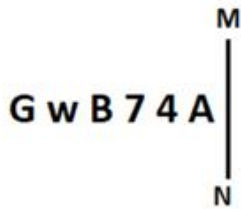
Option 3 ID : 6306803398683

Option 4 ID : 6306803398682

Status : Answered

Chosen Option : 3

Q.2 Select the correct mirror image of the given figure when the mirror is placed at MN as shown below.



- Ans
- 1. G w B 7 4 A
 - 2. A 7 B 4 w G
 - 3. G w B 7 4 A
 - 4. G w B 7 4 A

Question ID : 630680356641
Option 1 ID : 6306801388565
Option 2 ID : 6306801388566
Option 3 ID : 6306801388567
Option 4 ID : 6306801388568
Status : Answered
Chosen Option : 4

Q.3 Select the set in which the numbers are related in the same way as are the numbers of the following sets.

(NOTE: Operations should be performed on the whole numbers, without breaking down the numbers into its constituent digits. E.g. 13 – Operations on 13 such as adding /deleting /multiplying etc. to 13 can be performed. Breaking down 13 into 1 and 3 and then performing mathematical operations on 1 and 3 is not allowed)

(288, 144, 24)
(432, 216, 36)

- Ans
- 1. (504, 252, 42)
 - 2. (506, 252, 42)
 - 3. (504, 252, 44)
 - 4. (504, 250, 42)

Question ID : 630680344674
Option 1 ID : 6306801341008
Option 2 ID : 6306801341007
Option 3 ID : 6306801341005
Option 4 ID : 6306801341006
Status : Answered
Chosen Option : 2

Q.4 Based on the English alphabetical order, three of the following four letter-clusters are alike in a certain way and thus form a group. Which letter-cluster does not belong to that group?
(Note: The odd letter-cluster is not based on the number of consonants/vowels or their position in the letter-cluster.)

- Ans
- 1. FIK
 - 2. JMP
 - 3. ORT
 - 4. DGI

Question ID : 630680416089
Option 1 ID : 6306801623120
Option 2 ID : 6306801623121
Option 3 ID : 6306801623122
Option 4 ID : 6306801623119
Status : Answered
Chosen Option : 2

Q.5 In a code language, 'BASIC' is coded as 101 and 'MAGIC' is coded as 102. How will 'LIGHT' be coded in the same language?

- Ans
- 1. 85
 - 2. 79
 - 3. 82
 - 4. 86

Question ID : 630680416660
Option 1 ID : 6306801625405
Option 2 ID : 6306801625403
Option 3 ID : 6306801625404
Option 4 ID : 6306801625406
Status : Not Answered
Chosen Option : --

Q.6 Select the set in which the numbers are related in the same way as are the numbers of the given sets.

(NOTE: Operations should be performed on the whole numbers, without breaking down the numbers into its constituent digits. E.g. 13 – Operations on 13 such as adding/deleting/multiplying, etc. to 13 can be performed. Breaking down 13 into 1 and 3 and then performing mathematical operations on 1 and 3 is not allowed.)
(16, 4, 20)
(28, 7, 35)

- Ans
- 1. (52, 13, 65)
 - 2. (52, 13, 60)
 - 3. (50, 13, 65)
 - 4. (50, 13, 60)

Question ID : 630680294012
Option 1 ID : 6306801143863
Option 2 ID : 6306801143861
Option 3 ID : 6306801143862
Option 4 ID : 6306801143860
Status : Answered
Chosen Option : 1

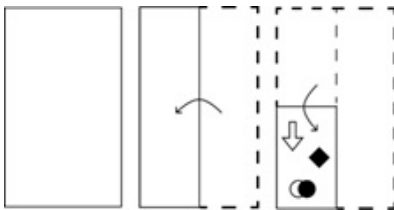
Q.7 What will come in place of the question mark (?) when + and - are interchanged and 8 and 6 are also interchanged?
 $8 - 6 + 10 = ?$

- Ans
- 1. 7
 - 2. 4
 - 3. 6
 - 4. 5

Question ID : 630680411791
 Option 1 ID : 6306801606002
 Option 2 ID : 6306801606001
 Option 3 ID : 6306801606000
 Option 4 ID : 6306801605999

Status : Answered
 Chosen Option : 2

Q.8 The sequence of folding a paper and the manner in which the folded paper is cut is shown in the following figures. How would this paper look when unfolded?



Ans

- 1.
- 2.
- 3.
- 4.

Question ID : 630680344222
 Option 1 ID : 6306801339203
 Option 2 ID : 6306801339204
 Option 3 ID : 6306801339202
 Option 4 ID : 6306801339201

Status : Answered
 Chosen Option : 1

Q.9 Select the option that is related to the fifth letter-cluster in the same way as the second letter-cluster is related to the first letter-cluster and the fourth letter-cluster is related to the third letter-cluster.

ISLAND : ANDISL :: EITHER : HEREIT :: IMPACT : ?

- Ans
- 1. ICAPMT
 - 2. TCAPMI
 - 3. IPMCTA
 - 4. ACTIMP

Question ID : 630680416503
Option 1 ID : 6306801624777
Option 2 ID : 6306801624776
Option 3 ID : 6306801624778
Option 4 ID : 6306801624775
Status : Answered
Chosen Option : 4

Q.10 If 'P' stands for '+', 'Q' stands for 'x', 'R' stands for '+' and 'S' stands for '-', what will come in place of the question mark (?) in the following equation?

[(18 S 5) Q 4] P 2 R 22 Q 3 S 24 R 9 = ?

- Ans
- 1. 89
 - 2. 77
 - 3. 82
 - 4. 63

Question ID : 630680411677
Option 1 ID : 6306801605546
Option 2 ID : 6306801605544
Option 3 ID : 6306801605545
Option 4 ID : 6306801605543
Status : Answered
Chosen Option : 2

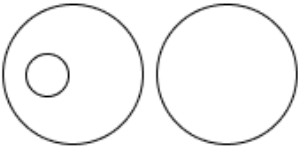
Adda247

Q.11 Select the Venn diagram that best illustrates the relationship between the following classes.

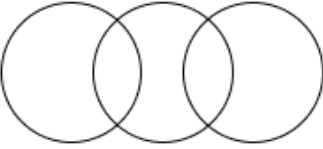
Mechanic, Peon, Lawyer

Ans

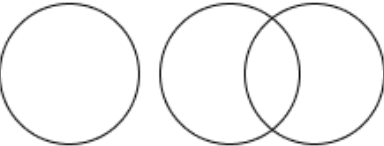
✗ 1.



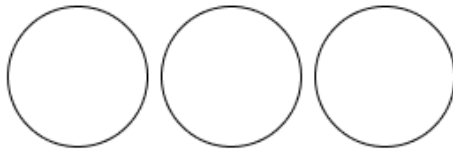
✗ 2.



✗ 3.



✓ 4.



Question ID : 630680869737

Option 1 ID : 6306803406316

Option 2 ID : 6306803406315

Option 3 ID : 6306803406314

Option 4 ID : 6306803406317

Status : Answered

Chosen Option : 4

Q.12 What will come in the place of '?' in the following equation, if '+' and '-' are interchanged and also 'x' and '÷' are interchanged?
 $154 \times 11 - 24 \div 3 + 19 = ?$

Ans ✗ 1. 62

✓ 2. 67

✗ 3. 71

✗ 4. 54

Question ID : 630680343180

Option 1 ID : 6306801335096

Option 2 ID : 6306801335093

Option 3 ID : 6306801335095

Option 4 ID : 6306801335094

Status : Answered

Chosen Option : 2

Q.13 Select the figure from among the given options that can logically replace the question mark (?) in the following series.

$\begin{matrix} \text{H} & \geq & = \\ \text{c} & \leftrightarrow & \end{matrix}$	$\begin{matrix} \leftrightarrow & = \\ \text{c} & \text{H} \end{matrix}$	$\begin{matrix} \leftrightarrow & \text{c} \\ = & \geq \\ \text{H} & \end{matrix}$	$\begin{matrix} \geq & \text{c} \\ \text{H} & \leftrightarrow \\ = & \end{matrix}$?
---	--	--	--	---

Ans

✗ 1.

$\begin{matrix} = & \text{c} \\ \text{H} & \leftrightarrow \\ \geq & \end{matrix}$
--

✗ 2.

$\begin{matrix} \leftrightarrow & \geq \\ \text{c} & = \\ \text{H} & \end{matrix}$
--

✗ 3.

$\begin{matrix} \text{H} & \leftrightarrow \\ \geq & \text{c} \\ = & \end{matrix}$
--

✓ 4.

$\begin{matrix} \geq & \text{H} \\ \text{c} & = \\ \leftrightarrow & \end{matrix}$
--

Question ID : 630680867761

Option 1 ID : 6306803398688

Option 2 ID : 6306803398689

Option 3 ID : 6306803398690

Option 4 ID : 6306803398691

Status : Not Answered

Chosen Option : --

Q.14 Which letter cluster will replace the question mark (?) to complete the given series?
TDQR, SFNV, ?, QJHD, PLEH

- Ans 1. RHKZ
 2. RGJZ
 3. FJCQ
 4. IDBZ

Question ID : 630680417191
Option 1 ID : 6306801627530
Option 2 ID : 6306801627528
Option 3 ID : 6306801627529
Option 4 ID : 6306801627527
Status : Answered
Chosen Option : 1

Q.15 Which of the following numbers will replace the question mark (?) in the given series?
324, 722, 1200, ?, 2420

- Ans 1. 1764
 2. 1632
 3. 1634
 4. 1736

Question ID : 630680412019
Option 1 ID : 6306801606914
Option 2 ID : 6306801606912
Option 3 ID : 6306801606913
Option 4 ID : 6306801606911
Status : Not Answered
Chosen Option : --

Q.16 Two statements are given, followed by two conclusions numbered I and II. Assuming the statements to be true, even if they seem to be at variance with commonly known facts, decide which of the conclusions logically follow(s) from the statements.

Statements:
All wings are whites.
No whites are wands.

Conclusions:
I. Some wings are wands.
II. No wand is a white.

- Ans 1. Only conclusion II follows
 2. Both conclusions I and II follow
 3. Neither conclusion I nor II follows
 4. Only conclusion I follows

Question ID : 630680417101
Option 1 ID : 6306801627168
Option 2 ID : 6306801627169
Option 3 ID : 6306801627170
Option 4 ID : 6306801627167
Status : Answered
Chosen Option : 1

Q.17 If 'P' stands for '+', 'Q' stands for 'x', 'R' stands for '+' and 'S' stands for '-', what will come in place of the question mark (?) in the following equation?

$$45 R (26 Q 2) P 4 R 19 S 32 = ?$$

- Ans
- 1. 50
 - 2. 35
 - 3. 45
 - 4. 40

Question ID : 630680411680
Option 1 ID : 6306801605558
Option 2 ID : 6306801605555
Option 3 ID : 6306801605557
Option 4 ID : 6306801605556
Status : Answered
Chosen Option : 3

Q.18 Select the set in which the numbers are related in the same way as are the numbers of the following sets.

(NOTE: Operations should be performed on the whole numbers, without breaking down the numbers into its constituent digits. E.g. 13 – Operations on 13 such as adding /deleting /multiplying etc. to 13 can be performed. Breaking down 13 into 1 and 3 and then performing mathematical operations on 1 and 3 is not allowed)

(21, 3, 15)
(49, 7, 35)

- Ans
- 1. (84, 12, 60)
 - 2. (85, 12, 60)
 - 3. (84, 12, 62)
 - 4. (85, 13, 60)

Question ID : 630680344668
Option 1 ID : 6306801340983
Option 2 ID : 6306801340984
Option 3 ID : 6306801340981
Option 4 ID : 6306801340982
Status : Answered
Chosen Option : 1

Q.19 Select the Venn diagram that best illustrates the relationship between the following classes.

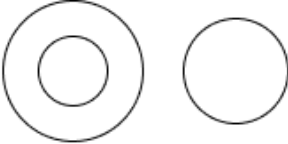
Humans, Painters, Men

Ans

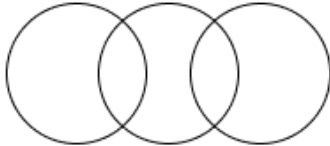
✗ 1.



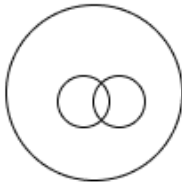
✗ 2.



✗ 3.



✓ 4.



Question ID : 630680869733

Option 1 ID : 6306803406300

Option 2 ID : 6306803406301

Option 3 ID : 6306803406298

Option 4 ID : 6306803406299

Status : Answered

Chosen Option : 4

Q.20 In a certain code language,

'A + B' means 'A is the mother of B'

'A - B' means 'A is the husband of B'

'A x B' means 'B is the sister of A'

'A ÷ B' means 'A is the father of B'

Based on the above, how is B related to E if 'D ÷ E - C + A x B'?

Ans

✗ 1. Wife

✗ 2. Son

✗ 3. Mother

✓ 4. Daughter

Question ID : 630680296563

Option 1 ID : 6306801153905

Option 2 ID : 6306801153903

Option 3 ID : 6306801153906

Option 4 ID : 6306801153904

Status : Answered

Chosen Option : 4

Q.21 Which of the following terms will replace the question mark (?) in the given series?
CJS, DKT, ELU, ?

- Ans
- 1. DLO
 - 2. DHB
 - 3. DRT
 - 4. FMV

Question ID : 630680417065

Option 1 ID : 6306801627026

Option 2 ID : 6306801627025

Option 3 ID : 6306801627023

Option 4 ID : 6306801627024

Status : Answered

Chosen Option : 4

Q.22 Select the option figure in which the given figure is embedded as its part (rotation is NOT allowed).



Ans

- 1.
- 2.
- 3.
- 4.

Question ID : 630680867780

Option 1 ID : 6306803398764

Option 2 ID : 6306803398767

Option 3 ID : 6306803398765

Option 4 ID : 6306803398766

Status : Answered

Chosen Option : 3

Q.23 Which of the following numbers will replace the question mark (?) in the given series?
29, 30, 26, 35, 19, ?

- Ans
- 1. 41
 - 2. 42
 - 3. 44
 - 4. 43

Question ID : 630680411771
Option 1 ID : 6306801605919
Option 2 ID : 6306801605920
Option 3 ID : 6306801605922
Option 4 ID : 6306801605921
Status : Answered
Chosen Option : 3

Q.24 Which of the following numbers will replace the question mark (?) in the given series?
12, 13, 30, 99, 412, ?

- Ans
- 1. 2065
 - 2. 2075
 - 3. 2085
 - 4. 2055

Question ID : 630680411773
Option 1 ID : 6306801605928
Option 2 ID : 6306801605929
Option 3 ID : 6306801605930
Option 4 ID : 6306801605927
Status : Answered
Chosen Option : 3

Q.25 Select the set in which the numbers are related in the same way as are the numbers of the following sets.

(NOTE: Operations should be performed on the whole numbers, without breaking down the numbers into its constituent digits. E.g. 13 – Operations on 13 such as adding /deleting /multiplying etc. to 13 can be performed. Breaking down 13 into 1 and 3 and then performing mathematical operations on 1 and 3 is not allowed)

(14, 28 , 84)
(17, 34, 102)

- Ans
- 1. (21, 42, 126)
 - 2. (20, 41, 126)
 - 3. (20, 41, 136)
 - 4. (21, 42, 136)

Question ID : 630680344666
Option 1 ID : 6306801340974
Option 2 ID : 6306801340976
Option 3 ID : 6306801340973
Option 4 ID : 6306801340975
Status : Answered
Chosen Option : 1

Q.26 In a certain code language, 'FOX' is coded as '14' and 'GOAT' is coded as '21'. How will 'TOMMY' be coded in that language?

- Ans
- 1. 45
 - 2. 35
 - 3. 30
 - 4. 25

Question ID : 630680312596
Option 1 ID : 6306801216268
Option 2 ID : 6306801216266
Option 3 ID : 6306801216267
Option 4 ID : 6306801216265
Status : Not Answered
Chosen Option : --

Q.27 Select the number from among the given options that can replace the question mark (?) in the following series.
115, 140, 160, 175, 185, ?

- Ans
- 1. 193
 - 2. 195
 - 3. 192
 - 4. 190

Question ID : 630680411930
Option 1 ID : 6306801606558
Option 2 ID : 6306801606555
Option 3 ID : 6306801606556
Option 4 ID : 6306801606557
Status : Answered
Chosen Option : 4

Q.28 If 'P' stands for '+', 'Q' stands for 'x', 'R' stands for '+' and 'S' stands for '-', what will come in place of the question mark '?' in the following equation?

(121 S 46) R 19 Q 5 R 126 P 6 S 38 = ?

- Ans
- 1. 139
 - 2. 144
 - 3. 153
 - 4. 159

Question ID : 630680411674
Option 1 ID : 6306801605534
Option 2 ID : 6306801605533
Option 3 ID : 6306801605531
Option 4 ID : 6306801605532
Status : Answered
Chosen Option : 3

Q.29 In a certain code language, 'MAP' is written as '102' and 'ROT' is written as '56'. How will 'SEC' be written in that language?

- Ans 1. 108
 2. 112
 3. 98
 4. 84

Question ID : 630680416590
Option 1 ID : 6306801625124
Option 2 ID : 6306801625125
Option 3 ID : 6306801625126
Option 4 ID : 6306801625123
Status : Not Answered
Chosen Option : --

Q.30 In a code language, 'ROAD' is written as 'QKZZ', and 'BAND' is written as 'AWMZ'. How will 'TASK' be written in that language?

- Ans 1. SWRG
 2. RSWG
 3. SRGW
 4. GRSW

Question ID : 630680416686
Option 1 ID : 6306801625509
Option 2 ID : 6306801625510
Option 3 ID : 6306801625507
Option 4 ID : 6306801625508
Status : Not Answered
Chosen Option : --

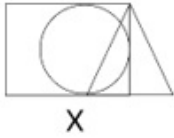
Q.31 Select the option that is related to the fifth letter-cluster in the same way as the second letter-cluster is related to the first letter-cluster and the fourth letter-cluster is related to the third letter-cluster.

JOCK : GLZH :: HURT : EROQ :: SPIN : ?

- Ans 1. QNFK
 2. PNEL
 3. PMFK
 4. QMEK

Question ID : 630680416491
Option 1 ID : 6306801624729
Option 2 ID : 6306801624728
Option 3 ID : 6306801624730
Option 4 ID : 6306801624727
Status : Answered
Chosen Option : 3

Q.32 Select the option in which the given figure (X) is embedded as its part. (Rotation is NOT allowed.)



Ans

✗ 1.



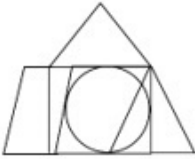
✗ 2.



✗ 3.



✓ 4.



Question ID : 630680305493

Option 1 ID : 6306801188350

Option 2 ID : 6306801188352

Option 3 ID : 6306801188351

Option 4 ID : 6306801188349

Status : Answered

Chosen Option : 2

Q.33 In a code language, 'POET' is coded as '14-13-3-18' and 'SOON' is coded as '17-13-13-12'. How will 'WRITE' be coded in the same language?

Ans ✗ 1. 19-16-5-18-3

✓ 2. 21-16-7-18-3

✗ 3. 21-16-7-9-3

✗ 4. 19-16-7-18-5

Question ID : 630680302862

Option 1 ID : 6306801178113

Option 2 ID : 6306801178110

Option 3 ID : 6306801178111

Option 4 ID : 6306801178112

Status : Answered

Chosen Option : 2

Q.34 P, Q, R, S, T and U are sitting around a circular table facing the centre. Only one person sits between T and R. Only one person sits between R and U. Only two people sit between U and Q. S sits to the immediate left of T. Who sits second to the left of P?

- Ans
- 1. S
 - 2. Q
 - 3. R
 - 4. U

Question ID : 630680416853
Option 1 ID : 6306801626176
Option 2 ID : 6306801626178
Option 3 ID : 6306801626175
Option 4 ID : 6306801626177
Status : Answered
Chosen Option : 2

Q.35 Which letter-cluster will complete the given series?
FPW, FFPPW, FFFFPPPPW, _____

- Ans
- 1. FFFFFFFPPPPPPWWWWW
 - 2. FFFFFFFPPPPPPWWWWW
 - 3. FFFFFFFPPPPPPPPWWWWW
 - 4. FFFFPPPPWWWWW

Question ID : 630680416700
Option 1 ID : 6306801625565
Option 2 ID : 6306801625564
Option 3 ID : 6306801625566
Option 4 ID : 6306801625563
Status : Answered
Chosen Option : 2

Q.36 If 'A' stands for '+', 'B' stands for '×', 'C' stands for '+' and 'D' stands for '-', what will come in place of the question mark (?) in the following equation?
905 B 2 C 47 D 903 A 3 = ?

- Ans
- 1. 1556
 - 2. 1155
 - 3. 1165
 - 4. 1655

Question ID : 630680411708
Option 1 ID : 6306801605667
Option 2 ID : 6306801605669
Option 3 ID : 6306801605670
Option 4 ID : 6306801605668
Status : Answered
Chosen Option : 1

Q.37 In the given number-pairs, the second number is obtained by applying certain mathematical operations to the first number. Select the number-pair in which the numbers are related in the same way as are the numbers of the given number-pairs. (NOTE: Operations should be performed on the whole numbers, without breaking down the numbers into its constituent digits. E.g., 13 – Operations on 13 such as adding/subtracting/multiplying etc. to 13 can be performed. Breaking down 13 into 1 and 3 and then performing mathematical operations on 1 and 3 is not allowed.)
(45, 88)
(26, 50)

- Ans 1. (15, 32)
 2. (21, 41)
 3. (22, 42)
 4. (18, 36)

Question ID : 630680337273

Option 1 ID : 6306801311815

Option 2 ID : 6306801311816

Option 3 ID : 6306801311814

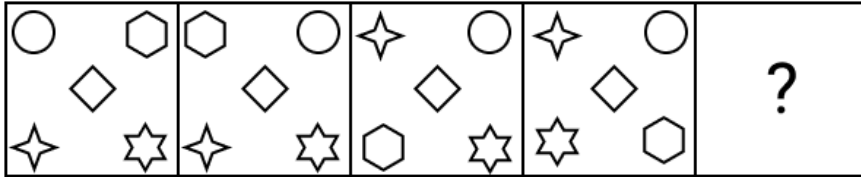
Option 4 ID : 6306801311813

Status : Answered

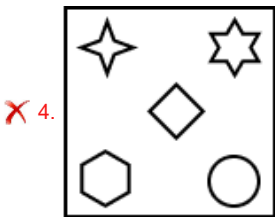
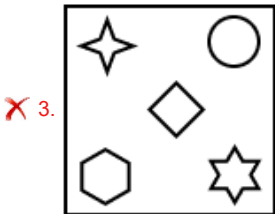
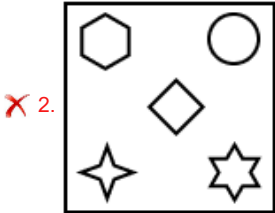
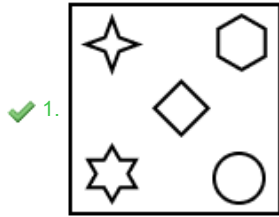
Chosen Option : 3



Q.38 Identify the option figure that when put in place of the question mark (?) will logically complete the series.



Ans



Adda247

Question ID : 630680867766
 Option 1 ID : 6306803398710
 Option 2 ID : 6306803398711
 Option 3 ID : 6306803398709
 Option 4 ID : 6306803398708
 Status : Not Answered

Chosen Option : --

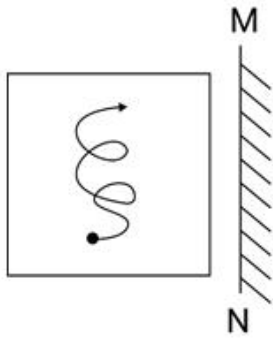
Q.39 Aditi departs from her home and walks 38 m towards West and then turns right and walks 19 m. Now she turns right and walks 25 m. She then takes a left turn and walks 21 m. She then takes a left turn again and walks 38 m. She takes a final left turn and walks 25 m to stop at point X. How far is she from a pole which is 15 m North of her house? (Assume that all turns are 90 degree turns only.)

- Ans
- ✗ 1. 38 m
 - ✗ 2. 49 m
 - ✗ 3. 57 m
 - ✓ 4. 51 m

Question ID : 630680416276
 Option 1 ID : 6306801623867
 Option 2 ID : 6306801623869
 Option 3 ID : 6306801623870
 Option 4 ID : 6306801623868
 Status : Answered

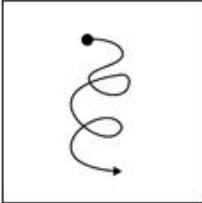
Chosen Option : 1

Q.40 Select the correct mirror image of the given figure when the mirror is placed at MN as shown below.

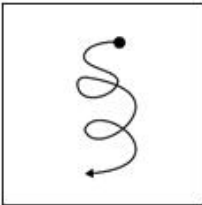


Ans

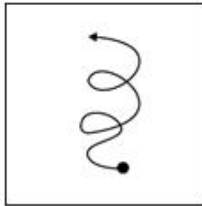
✗ 1.



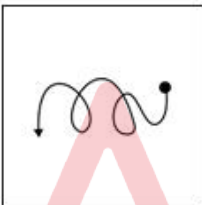
✗ 2.



✓ 3.



✗ 4.



Question ID : 630680296905

Option 1 ID : 6306801155263

Option 2 ID : 6306801155264

Option 3 ID : 6306801155265

Option 4 ID : 6306801155266

Status : Answered

Chosen Option : 3

Q.41 Ajay starts from Point A and drives 20 km towards South. He then takes a left turn, drives 5 km, turns left and drives 30 km. He then takes a right turn and drives 8 km. He takes a final right turn, drives 10 km and stops at Point Q. How far (shortest distance) and towards which direction should he now drive to reach Point A again? (All turns are 90° turns only.)

- Ans**
- 1. 13 km towards East
 - 2. 5 km towards West
 - 3. 13 km towards West
 - 4. 8 km towards West

Question ID : 630680416082

Option 1 ID : 6306801623094

Option 2 ID : 6306801623091

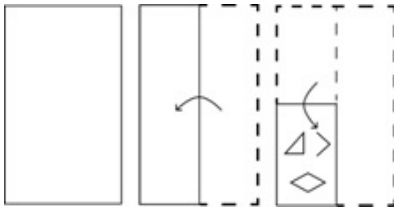
Option 3 ID : 6306801623093

Option 4 ID : 6306801623092

Status : Answered

Chosen Option : 3

Q.42 The sequence of folding a paper and the manner in which the folded paper is cut is shown in the following figures. How would this paper look when unfolded?



Ans

- 1.
- 2.
- 3.
- 4.

Question ID : 630680344226

Option 1 ID : 6306801339220

Option 2 ID : 6306801339217

Option 3 ID : 6306801339219

Option 4 ID : 6306801339218

Status : Answered

Chosen Option : 3

Q.43 Select the option that represents the correct order of the given words as they would appear in an English dictionary.

1. Temperament
2. Tenure
3. Tenant
4. Tender
5. Temptation
6. Temperature

- Ans
- 1. 1, 6, 5, 2, 4, 3
 - 2. 1, 6, 5, 3, 2, 4
 - 3. 1, 6, 5, 3, 4, 2
 - 4. 1, 6, 5, 2, 3, 4

Question ID : 630680417391

Option 1 ID : 6306801628329

Option 2 ID : 6306801628328

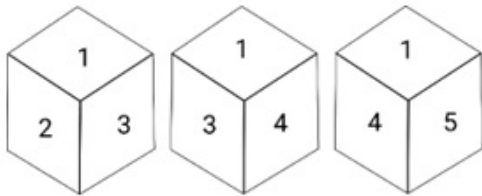
Option 3 ID : 6306801628327

Option 4 ID : 6306801628330

Status : Answered

Chosen Option : 3

Q.44 Three different positions of the same dice are shown. Find the number on the face opposite the face showing '2'.



- Ans
- 1. 6
 - 2. 1
 - 3. 5
 - 4. 4

Question ID : 630680321647

Option 1 ID : 6306801251285

Option 2 ID : 6306801251286

Option 3 ID : 6306801251288

Option 4 ID : 6306801251287

Status : Answered

Chosen Option : 4

Q.45 Select the option that represents the correct order of the given words as they would appear in an English dictionary.

1. Dermatology
2. Derogation
3. Derivative
4. Derailed
5. Dermestid
6. Deregulation

- Ans
- 1. 4, 3, 2, 1, 5, 6
 - 2. 4, 6, 3, 2, 1, 5
 - 3. 4, 6, 3, 1, 5, 2
 - 4. 4, 6, 1, 5, 3, 2

Question ID : 630680417409

Option 1 ID : 6306801628402

Option 2 ID : 6306801628399

Option 3 ID : 6306801628400

Option 4 ID : 6306801628401

Status : Answered

Chosen Option : 3

Q.46 Which of the following interchanges of signs would make the given equation correct?

$$56 \div 8 - 14 \times 2 + 12 = 23$$

- Ans
- 1. + and ×
 - 2. - and ×
 - 3. + and ×
 - 4. - and +

Question ID : 630680411963

Option 1 ID : 6306801606690

Option 2 ID : 6306801606689

Option 3 ID : 6306801606687

Option 4 ID : 6306801606688

Status : Answered

Chosen Option : 4

Q.47 A, B, C, D, E and F are six members of a family. There are parents, their children and grandchildren in the family. A is the son of C and E is the daughter of A. D is the daughter of F who is the mother of E. Which of the following pairs is the grandchildren of the parents?

- Ans
- 1. C, E
 - 2. D, E
 - 3. A, E
 - 4. A, D

Question ID : 630680102737

Option 1 ID : 630680399209

Option 2 ID : 630680399210

Option 3 ID : 630680399207

Option 4 ID : 630680399208

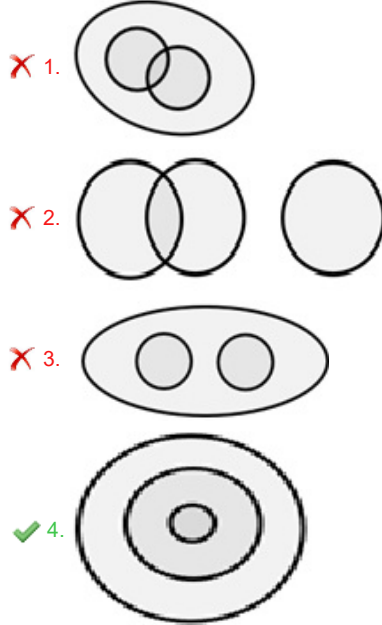
Status : Answered

Chosen Option : 2

Q.48 Select the Venn diagram that best illustrates the relationship between the following classes.

India, Tamil Nadu, Chennai

Ans



Question ID : 630680417337

Option 1 ID : 6306801628113

Option 2 ID : 6306801628114

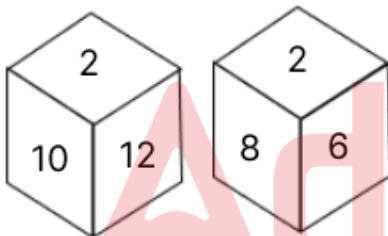
Option 3 ID : 6306801628112

Option 4 ID : 6306801628111

Status : Answered

Chosen Option : 4

Q.49 A dice has its faces marked by numbers 2, 4, 6, 8, 10 and 12. Two positions of the same dice are given below. Which face is opposite to face 4?



- Ans
- ✗ 1. 10
- ✗ 2. 6
- ✗ 3. 12
- ✓ 4. 2

Question ID : 630680867790

Option 1 ID : 6306803398804

Option 2 ID : 6306803398807

Option 3 ID : 6306803398805

Option 4 ID : 6306803398806

Status : Answered

Chosen Option : 4

Q.50 In a code language, 'PIG' is coded as 29 and 'COW' is coded as 38. How will 'CAMEL' be coded in the same language?

- Ans
- 1. 27
 - 2. 29
 - 3. 22
 - 4. 34

Question ID : 630680416662
Option 1 ID : 6306801625412
Option 2 ID : 6306801625413
Option 3 ID : 6306801625411
Option 4 ID : 6306801625414
Status : Not Answered
Chosen Option : --

Section : General Knowledge and General Awareness

Q.1 In 1596, who suggested in his work 'Thesaurus Geographicus' that the continents of the earth were not always located in their present positions?

- Ans
- 1. Dan Peter McKenzie
 - 2. Georges Cuvier
 - 3. Louis Agassiz
 - 4. Abraham Ortelius

Question ID : 630680407451
Option 1 ID : 6306801588745
Option 2 ID : 6306801588743
Option 3 ID : 6306801588742
Option 4 ID : 6306801588744
Status : Not Answered
Chosen Option : --

Q.2 Gobinda Chandra Pal is an awardee of the Sangeet Natak Akademi Amrit Award for the year 2022. He contributed to the field of:

- Ans
- 1. Odissi Dance (Gotipua)
 - 2. Dance (Kathak)
 - 3. Puppetry
 - 4. Theatre (Acting)

Question ID : 630680409355
Option 1 ID : 6306801596250
Option 2 ID : 6306801596249
Option 3 ID : 6306801596252
Option 4 ID : 6306801596251
Status : Not Answered
Chosen Option : --

Q.3 In how many categories are loans provided under the MUDRA loan scheme?

- Ans 1. 4
 2. 3
 3. 1
 4. 2

Question ID : 630680407150
Option 1 ID : 6306801587545
Option 2 ID : 6306801587544
Option 3 ID : 6306801587542
Option 4 ID : 6306801587543
Status : Not Answered
Chosen Option : --

Q.4 Which of the following is a selective credit instrument?

- Ans 1. Variable reserve ratio
 2. Bank rate
 3. CRR
 4. Credit rationing

Question ID : 630680407196
Option 1 ID : 6306801587726
Option 2 ID : 6306801587728
Option 3 ID : 6306801587729
Option 4 ID : 6306801587727
Status : Not Answered
Chosen Option : --

Q.5 Which of the following forces can only be applied when in contact with an object?

- Ans 1. Frictional force
 2. Gravitational force
 3. Electrostatic force
 4. Magnetic force

Question ID : 63068052306
Option 1 ID : 630680201327
Option 2 ID : 630680201329
Option 3 ID : 630680201326
Option 4 ID : 630680201328
Status : Answered
Chosen Option : 1

Q.6 In which year were four new Directive Principles added to the original list?

- Ans 1. 1976
 2. 1980
 3. 1977
 4. 1975

Question ID : 630680305536
Option 1 ID : 6306801188518
Option 2 ID : 6306801188520
Option 3 ID : 6306801188519
Option 4 ID : 6306801188517
Status : Answered
Chosen Option : 4

Q.7 With progressive delicensing of industries as part of liberalisation, which of the following is the industry that is removed from the requirement of license?

- Ans
- 1. Cigars and cigarettes of tobacco, and manufactured tobacco substitutes
 - 2. Coal and lignite
 - 3. Industrial explosives
 - 4. Hazardous chemicals

Question ID : 630680407169
Option 1 ID : 6306801587618
Option 2 ID : 6306801587621
Option 3 ID : 6306801587620
Option 4 ID : 6306801587619
Status : Not Answered
Chosen Option : --

Q.8 Who among the following is a distinguished and experienced scion of the famous Kavungal family associated with 'Kathakali' for six generations?

- Ans
- 1. Meenakshi Sundaram Pillai
 - 2. Ammannur Madhava Chakyar
 - 3. Chathunni Panicker
 - 4. Padma Subramanyam

Question ID : 630680306007
Option 1 ID : 6306801190381
Option 2 ID : 6306801190382
Option 3 ID : 6306801190384
Option 4 ID : 6306801190383
Status : Not Answered
Chosen Option : --

Q.9 Kamalini Asthana and Nalini Asthana, veteran dancers who represent Benaras Gharana of Kathak, were conferred with which of the following awards in the year 2022?

- Ans
- 1. Sangeet Natak Akademi
 - 2. Padma Bhushan
 - 3. Padma Vibhushan
 - 4. Padma Shri

Question ID : 630680309161
Option 1 ID : 6306801202821
Option 2 ID : 6306801202822
Option 3 ID : 6306801202823
Option 4 ID : 6306801202824
Status : Not Answered
Chosen Option : --

Q.10 Which country won the 15th Men's Hockey World Cup-2023 title?

- Ans
- 1. Belgium
 - 2. India
 - 3. Germany
 - 4. Pakistan

Question ID : 630680306028
Option 1 ID : 6306801190465
Option 2 ID : 6306801190467
Option 3 ID : 6306801190466
Option 4 ID : 6306801190468
Status : Answered
Chosen Option : 1

Q.11 Which of the following Governor-Generals of British India was in favour of free press and repealed the press regulations of 1823?

- Ans
- 1. Lord Lytton
 - 2. Lord Metcalfe
 - 3. Lord Ripon
 - 4. Lord Ellenborough

Question ID : 630680412398
Option 1 ID : 6306801608417
Option 2 ID : 6306801608415
Option 3 ID : 6306801608416
Option 4 ID : 6306801608418
Status : Not Answered
Chosen Option : --

Q.12 How many types of makeup (vesham) are used for the performers of Kathakali dance?

- Ans
- 1. 7
 - 2. 11
 - 3. 5
 - 4. 9

Question ID : 630680305964
Option 1 ID : 6306801190210
Option 2 ID : 6306801190212
Option 3 ID : 6306801190209
Option 4 ID : 6306801190211
Status : Not Answered
Chosen Option : --

Q.13 Epilimnetic, metalimnetic, and hypolimnetic water strata are example of:

- Ans
- 1. typical thermal stratification of a lake
 - 2. typical layers of hard rock
 - 3. various ecological phases
 - 4. different layers of underground water

Question ID : 630680407538
Option 1 ID : 6306801589092
Option 2 ID : 6306801589093
Option 3 ID : 6306801589091
Option 4 ID : 6306801589090
Status : Not Answered
Chosen Option : --

Q.14 Which of the following is correctly matched?

- Ans
- 1. Hariprasad Chaurasia – Sarood
 - 2. Zakir Husain – Sitar
 - 3. Bismillah Khan – Tabla
 - 4. Sultan Khan – Sarangi

Question ID : 630680409332
Option 1 ID : 6306801596160
Option 2 ID : 6306801596158
Option 3 ID : 6306801596157
Option 4 ID : 6306801596159
Status : Not Answered
Chosen Option : --

Q.15 Anup Rag Vilas' is a book written by which of the following musicians?

- Ans
- 1. Pandit Jasraj
 - 2. Pandit Birju Maharaj
 - 3. Pandit Kumar Gandharva
 - 4. Pandit Dinkar Kaikini

Question ID : 630680409248
Option 1 ID : 6306801595824
Option 2 ID : 6306801595821
Option 3 ID : 6306801595823
Option 4 ID : 6306801595822
Status : Not Answered
Chosen Option : --

Q.16 Which is an integral membrane protein that forms the tetramer and facilitates the diffusion of water and some small, unmodified solutes across cellular membranes?

- Ans
- 1. Immunoglobulins
 - 2. Aquaporins
 - 3. Mucins
 - 4. Transferrin

Question ID : 630680407440
Option 1 ID : 6306801588699
Option 2 ID : 6306801588698
Option 3 ID : 6306801588700
Option 4 ID : 6306801588701
Status : Not Answered
Chosen Option : --

Q.17 Identify the organelle present in plant cell that is not there in an animal cell.

- Ans
- 1. Plastids
 - 2. Nucleus
 - 3. Neuron
 - 4. Cytoplasm

Question ID : 630680407488
Option 1 ID : 6306801588891
Option 2 ID : 6306801588890
Option 3 ID : 6306801588892
Option 4 ID : 6306801588893
Status : Answered
Chosen Option : 1

Q.18 Who among the following physicists invented the voltaic pile, the forerunner of the modern battery, in 1800?

- Ans
- 1. Andre-Marie Ampere
 - 2. Hans Christian Oersted
 - 3. George Simon
 - 4. Alessandro Volta

Question ID : 63068070367
Option 1 ID : 630680272094
Option 2 ID : 630680272096
Option 3 ID : 630680272095
Option 4 ID : 630680272097
Status : Not Answered
Chosen Option : --

Q.19 Pandit Ravi Shankar, founder of National Orchestra of India, was a _____ player.

- Ans
- 1. Sitar
 - 2. Sarangi
 - 3. Sarod
 - 4. Flute

Question ID : 630680409247
Option 1 ID : 6306801595819
Option 2 ID : 6306801595818
Option 3 ID : 6306801595820
Option 4 ID : 6306801595817
Status : Answered
Chosen Option : 1

Q.20 According to Airports Authority of India, what is the total number of International airports in India as on 2022?

- Ans
- 1. 13
 - 2. 14
 - 3. 16
 - 4. 17

Question ID : 630680701462
Option 1 ID : 6306802747781
Option 2 ID : 6306802747782
Option 3 ID : 6306802747783
Option 4 ID : 6306802747784
Status : Answered
Chosen Option : 1

Q.21 Whose memoir is titled 'Once Upon a Life: Burnt Curry and Bloody Rags'?

- Ans
- 1. Easterine Kire
 - 2. Patricia Mukim
 - 3. Janice Pariat
 - 4. Temsula Ao

Question ID : 630680409384
Option 1 ID : 6306801596366
Option 2 ID : 6306801596365
Option 3 ID : 6306801596367
Option 4 ID : 6306801596368
Status : Not Answered
Chosen Option : --

Q.22 Which of the following statements are correct regarding the jurisdiction of the Supreme Court of India?

- A. Original jurisdiction extends to any dispute between the Government of India and one or more States or between the Government of India and any State or States on one side and one or more States on the other or between two or more States.
B. Appellate Jurisdiction extends when the Union plus some States are one side and some other States on the other side of the dispute.
C. Under Articles 129 and 142 of the Constitution, the Supreme Court has been vested with the power to punish for contempt of court.
D. As of now, the International Commercial Arbitration cannot be initiated in the Supreme Court.

- Ans 1. A and B only
 2. B and D only
 3. A and C only
 4. A, B, C and D

Question ID : 630680408317
Option 1 ID : 6306801592166
Option 2 ID : 6306801592165
Option 3 ID : 6306801592164
Option 4 ID : 6306801592163
Status : Not Answered
Chosen Option : --

Q.23 Directive Principles of State Policy in India have been taken from the Constitution of which country?

- Ans 1. Britain
 2. USSR
 3. Ireland
 4. The US

Question ID : 630680408283
Option 1 ID : 6306801592027
Option 2 ID : 6306801592029
Option 3 ID : 6306801592030
Option 4 ID : 6306801592028
Status : Answered
Chosen Option : 3

Q.24 What is the fourth step in mitosis where non-kinetochore spindle fibres lengthen and elongate the cell?

- Ans 1. Metaphase
 2. Prophase
 3. Telophase
 4. Anaphase

Question ID : 630680407477
Option 1 ID : 6306801588849
Option 2 ID : 6306801588847
Option 3 ID : 6306801588848
Option 4 ID : 6306801588846
Status : Answered
Chosen Option : 1

Q.25 Which of the following organic compounds is a benzenoid?

- Ans 1. Acetaldehyde
 2. Propane
 3. Hexane
 4. Aniline

Question ID : 630680210479
Option 1 ID : 630680816075
Option 2 ID : 630680816076
Option 3 ID : 630680816077
Option 4 ID : 630680816078
Status : Answered
Chosen Option : 2

Q.26 According to the Census of India 2011, 'Other Religions and Persuasions' formed what percentage of the country's population?

- Ans 1. 1.7
 2. 0.7
 3. 2.3
 4. 0.4

Question ID : 630680409713
Option 1 ID : 6306801597683
Option 2 ID : 6306801597681
Option 3 ID : 6306801597682
Option 4 ID : 6306801597684
Status : Not Answered
Chosen Option : --

Q.27 Which of the following countries will host the World Badminton Championship event 2026?

- Ans 1. Japan
 2. Indonesia
 3. India
 4. China

Question ID : 63068077627
Option 1 ID : 630680300606
Option 2 ID : 630680300608
Option 3 ID : 630680300605
Option 4 ID : 630680300607
Status : Not Answered
Chosen Option : --

Q.28 Choose the coasts that are running along the Arabian sea.

- a. Northern Circars
- b. Malabar
- c. Konkan
- d. Coromandel

Ans ✓ 1. Only b and c

✗ 2. Only a and c

✗ 3. b, c and d

✗ 4. a, b and c

Question ID : 630680407382

Option 1 ID : 6306801588468

Option 2 ID : 6306801588469

Option 3 ID : 6306801588467

Option 4 ID : 6306801588466

Status : Not Answered

Chosen Option : --

Q.29 Which of the following statement/statements is/are true regarding the light year?

- 1.Light year is a unit of distance.
- 2.Light is a unit of time.
- 3.A light year is the distance that light travels in one Earth year.
- 4.Light year is the measurement of light intensity.

Ans ✗ 1. Only 1 is correct

✗ 2. Only 1 and 2 are correct

✓ 3. Only 1 and 3 are correct

✗ 4. Only 2 is correct

Question ID : 630680100677

Option 1 ID : 630680391404

Option 2 ID : 630680391405

Option 3 ID : 630680391407

Option 4 ID : 630680391406

Status : Answered

Chosen Option : 3

Q.30 According to Agricultural Statistics at a Glance 2022, Government of India, which state recorded the highest production of sugarcane?

Ans ✗ 1. Karnataka

✗ 2. Gujarat

✓ 3. Uttar Pradesh

✗ 4. Maharashtra

Question ID : 630680409639

Option 1 ID : 6306801597386

Option 2 ID : 6306801597388

Option 3 ID : 6306801597385

Option 4 ID : 6306801597387

Status : Answered

Chosen Option : 3

Q.31 Which of the following states of India receives initial rainfall by the Arabian Sea branch of monsoon?

- Ans**
- 1. Mizoram
 - 2. Tamil Nadu
 - 3. Kerala
 - 4. Assam

Question ID : 630680409668
Option 1 ID : 6306801597504
Option 2 ID : 6306801597503
Option 3 ID : 6306801597502
Option 4 ID : 6306801597501
Status : Answered
Chosen Option : 3

Q.32 Abolition of titles is mentioned in which Article of the Indian Constitution?

- Ans**
- 1. Article 23
 - 2. Article 13
 - 3. Article 18
 - 4. Article 24

Question ID : 630680339462
Option 1 ID : 6306801320420
Option 2 ID : 6306801320417
Option 3 ID : 6306801320418
Option 4 ID : 6306801320419
Status : Answered
Chosen Option : 4

Q.33 In which amongst the following acts was Delhi declared the capital of British India in place of Calcutta?

- Ans**
- 1. Government of India Act, 1858
 - 2. Government of India Act, 1935
 - 3. Morley - Minto Act, 1909
 - 4. Montagu Chelmsford Act, 1919

Question ID : 630680127635
Option 1 ID : 630680494799
Option 2 ID : 630680494798
Option 3 ID : 630680494797
Option 4 ID : 630680494796
Status : Answered
Chosen Option : 1

Q.34 Which Article of the Indian Constitution mentions about the salaries and allowances of the Chairman and Deputy Chairman of the Rajya Sabha and the Speaker and Deputy Speaker of the Lok Sabha?

- Ans 1. Article 92
 2. Article 97
 3. Article 94
 4. Article 95

Question ID : 630680408226
Option 1 ID : 6306801591800
Option 2 ID : 6306801591799
Option 3 ID : 6306801591801
Option 4 ID : 6306801591802
Status : Answered
Chosen Option : 1

Q.35 Which of the following Articles of the Indian Constitution mentions that the Vice-President of India shall be the ex officio Chairman of the Council of States?

- Ans 1. Article 89
 2. Article 92
 3. Article 91
 4. Article 90

Question ID : 630680408227
Option 1 ID : 6306801591803
Option 2 ID : 6306801591804
Option 3 ID : 6306801591805
Option 4 ID : 6306801591806
Status : Answered
Chosen Option : 2

Q.36 Under whose rule did the Mughal empire achieve its largest territorial limits?

- Ans 1. Bahadur Shah II
 2. Shah Jahan
 3. Akbar
 4. Aurangzeb

Question ID : 630680198454
Option 1 ID : 630680769778
Option 2 ID : 630680769775
Option 3 ID : 630680769776
Option 4 ID : 630680769777
Status : Answered
Chosen Option : 4

Q.37 Under the Bahmani kingdom, the provinces were administered by _____.

- Ans 1. Afaquis
 2. Tarafdars
 3. Khalisa
 4. Amirs

Question ID : 630680412506
Option 1 ID : 6306801608850
Option 2 ID : 6306801608847
Option 3 ID : 6306801608849
Option 4 ID : 6306801608848
Status : Not Answered
Chosen Option : --

Q.38 Who among the following has been elected as the 36th President of BCCI?

- Ans 1. Anil Kumble
 2. Roger Binny
 3. Sourav Ganguly
 4. Chetan Sharma

Question ID : 630680192739
Option 1 ID : 630680747504
Option 2 ID : 630680747501
Option 3 ID : 630680747502
Option 4 ID : 630680747503
Status : Answered
Chosen Option : 3

Q.39 Goga Navami, which is primarily celebrated in the Indian state of _____, is dedicated to the snake God, Gogaji.

- Ans 1. Andhra Pradesh
 2. Odisha
 3. Rajasthan
 4. Karnataka

Question ID : 630680410365
Option 1 ID : 6306801600194
Option 2 ID : 6306801600191
Option 3 ID : 6306801600193
Option 4 ID : 6306801600192
Status : Answered
Chosen Option : 3

Q.40 Which State was founded by Nizam-ul-Mulk in 1724?

- Ans 1. Awadh
 2. Hyderabad
 3. Mysore
 4. Bengal

Question ID : 630680309321
Option 1 ID : 6306801203441
Option 2 ID : 6306801203442
Option 3 ID : 6306801203444
Option 4 ID : 6306801203443
Status : Answered
Chosen Option : 2

Q.41 The 2026 Winter Olympics will be held in _____.

- Ans 1. The US
 2. Japan
 3. The UK
 4. Italy

Question ID : 63068094661
Option 1 ID : 630680367339
Option 2 ID : 630680367342
Option 3 ID : 630680367340
Option 4 ID : 630680367341
Status : Answered
Chosen Option : 1

Q.42 Select the correct statement/s from the following.

- i. In the Tenth Plan period, the Indian economy grew at 7.7% per year.
- ii. The targeted growth for the Eleventh Five Year Plan was 9% per year.
- iii. In the Ninth Plan period, India realised a growth of 7.5% per year.

- Ans
- 1. i and iii
 - 2. ii and iii
 - 3. Only iii
 - 4. i and ii

Question ID : 630680701668
Option 1 ID : 6306802748619
Option 2 ID : 6306802748618
Option 3 ID : 6306802748620
Option 4 ID : 6306802748617
Status : Answered
Chosen Option : 3

Q.43 Damodar Mauzo, who received the 57th Jnanpith Award, is primarily a/an _____ writer.

- Ans
- 1. Bengali
 - 2. Konkani
 - 3. Odia
 - 4. Maithili

Question ID : 630680701410
Option 1 ID : 6306802747579
Option 2 ID : 6306802747578
Option 3 ID : 6306802747577
Option 4 ID : 6306802747580
Status : Answered
Chosen Option : 1

Q.44 Which of the following was the port-city of the Pandyan Kingdom?

- Ans
- 1. Tenkasi
 - 2. Korkai
 - 3. Dindigul
 - 4. Virudhunagar

Question ID : 630680412348
Option 1 ID : 6306801608217
Option 2 ID : 6306801608215
Option 3 ID : 6306801608218
Option 4 ID : 6306801608216
Status : Answered
Chosen Option : 3

Q.45 In the context of local storms of hot weather season, Nor'Westers are:

- Ans** ✓ 1. the dreaded evening thunderstorms in Bengal and Assam
✗ 2. a nearby wind that blows coffee flowers in Kerala
✗ 3. the hot, dry and oppressing winds blowing in the Northern plains from Punjab to Bihar with higher intensity between Delhi and Patna
✗ 4. the pre-monsoon showers that are a common phenomenon in Kerala and coastal areas of Karnataka

Question ID : 63068076867
Option 1 ID : 630680297566
Option 2 ID : 630680297568
Option 3 ID : 630680297567
Option 4 ID : 630680297565
Status : Answered
Chosen Option : 3

Q.46 Identify the device used to change the resistance in an electric circuit.

- Ans** ✗ 1. Ammeter
✗ 2. Conductor
✓ 3. Rheostat
✗ 4. Voltmeter

Question ID : 63068099060
Option 1 ID : 630680384945
Option 2 ID : 630680384947
Option 3 ID : 630680384944
Option 4 ID : 630680384946
Status : Answered
Chosen Option : 3

Q.47 A choice of goals has been made in each Plan due to:

- Ans** ✗ 1. unlimited manpower
✓ 2. limitation of resources
✗ 3. unlimited resources
✗ 4. limitation of choice

Question ID : 630680407123
Option 1 ID : 6306801587437
Option 2 ID : 6306801587436
Option 3 ID : 6306801587434
Option 4 ID : 6306801587435
Status : Answered
Chosen Option : 2

Q.48 Which of the following rivers is joined by river Chambal from the south?

- Ans** ✗ 1. Teesta
✗ 2. Ganga
✓ 3. Yamuna
✗ 4. Kosi

Question ID : 630680701445
Option 1 ID : 6306802747715
Option 2 ID : 6306802747713
Option 3 ID : 6306802747716
Option 4 ID : 6306802747714
Status : Answered
Chosen Option : 1

Q.49 According to the Global Hunger Index 2022, what is the rank of the neighbouring country, Bangladesh out of 121 countries?

- Ans
- 1. 99th
 - 2. 109th
 - 3. 107th
 - 4. 84th

Question ID : **630680327664**
Option 1 ID : **6306801274655**
Option 2 ID : **6306801274654**
Option 3 ID : **6306801274653**
Option 4 ID : **6306801274656**
Status : **Not Answered**
Chosen Option : --

Q.50 Good Friday is related to:

- Ans
- 1. Hindus
 - 2. Sikhs
 - 3. Jains
 - 4. Christians

Question ID : **630680409206**
Option 1 ID : **6306801595655**
Option 2 ID : **6306801595653**
Option 3 ID : **6306801595654**
Option 4 ID : **6306801595656**
Status : **Answered**
Chosen Option : **4**

Section : **Quantitative Aptitude**

Q.1 Two similar triangles of ΔXYZ and ΔLMN . If area of $(\Delta XYZ) = 16 \text{ cm}^2$, area of $(\Delta LMN) = 25 \text{ cm}^2$ and $YZ = 2.4 \text{ cm}$, then the measure of MN is:

- Ans
- 1. 3 cm
 - 2. 1 cm
 - 3. 4 cm
 - 4. 2 cm

Question ID : **630680421430**
Option 1 ID : **6306801644185**
Option 2 ID : **6306801644183**
Option 3 ID : **6306801644186**
Option 4 ID : **6306801644184**
Status : **Answered**
Chosen Option : **1**

Q.2 A train covers a distance of 56 km in 35 minutes. Travelling at the same speed, in how many seconds will the train cover a distance of 720 metres?

- Ans
- 1. 32
 - 2. 27
 - 3. 30
 - 4. 24

Question ID : 630680428439
Option 1 ID : 6306801671800
Option 2 ID : 6306801671803
Option 3 ID : 6306801671801
Option 4 ID : 6306801671802
Status : Not Answered
Chosen Option : --

Q.3 Simplify

$$\frac{92736}{(274+830) \text{ of } \frac{7}{4}} + 513$$

- Ans
- 1. 574
 - 2. 546
 - 3. 561
 - 4. 526

Question ID : 630680427967
Option 1 ID : 6306801669912
Option 2 ID : 6306801669914
Option 3 ID : 6306801669913
Option 4 ID : 6306801669915
Status : Answered
Chosen Option : 3

Q.4

If $\tan \theta = \frac{3}{10}$, then find the value of $\frac{(1+\sin \theta)(1-\sin \theta)}{(1+\cos \theta)(1-\cos \theta)}$.

- Ans
- 1. $\frac{50}{3}$
 - 2. $\frac{100}{7}$
 - 3. $\frac{100}{9}$
 - 4. $\frac{100}{3}$

Question ID : 630680421361
Option 1 ID : 6306801643910
Option 2 ID : 6306801643909
Option 3 ID : 6306801643908
Option 4 ID : 6306801643907
Status : Answered
Chosen Option : 3

Q.5 Study the given table and answer the question that follows.

The table shows the number of students in various courses in various cities A, B, C, D and E in India during the academic year 2022-2023.

City	MBA	Science	Engineering	Medicine	MCA	Total
A	1200	2560	4520	1100	960	10340
B	1350	2650	5100	1050	850	11000
C	1250	2640	4580	1120	750	10340
D	1960	1250	3500	1850	1600	10160
E	1200	2100	3500	1960	1540	10300
Total	6960	11200	21200	7080	5700	

What was the average number of students in Science course in the all the cities altogether during the academic year 2022-2023?

Ans 1. 2220

2. 2200

3. 2250

4. 2240

Question ID : 630680428328

Option 1 ID : 6306801671357

Option 2 ID : 6306801671356

Option 3 ID : 6306801671359

Option 4 ID : 6306801671358

Status : Answered

Chosen Option : 3

Q.6 A man travels some distance at a speed of 12 km/h and returns at a speed of 8 km/h. If the total time taken by him is 3 hours and 45 minutes, then the total distance (in km) travelled is:

Ans 1. 42

2. 24

3. 32

4. 36

Question ID : 630680869703

Option 1 ID : 6306803406181

Option 2 ID : 6306803406178

Option 3 ID : 6306803406179

Option 4 ID : 6306803406180

Status : Answered

Chosen Option : 2

Q.7 If $\tan\theta = 7/24$, then find the value of $(\cos^2\theta - \sin^2\theta)$.

- Ans
- 1. 1
 - 2. $\frac{520}{625}$
 - 3. $\frac{576}{550}$
 - 4. $\frac{527}{625}$

Question ID : 630680869590
Option 1 ID : 6306803405742
Option 2 ID : 6306803405744
Option 3 ID : 6306803405745
Option 4 ID : 6306803405743
Status : Answered
Chosen Option : 4

Q.8 A rectangular sheet of metal is 60 cm by 25 cm. Equal squares of side 5 cm are cut off at the corners and the remainder is folded up to form an open rectangular box. Find the volume of the box.

- Ans
- 1. 3750 cm^3
 - 2. 5750 cm^3
 - 3. 4750 cm^3
 - 4. 2750 cm^3

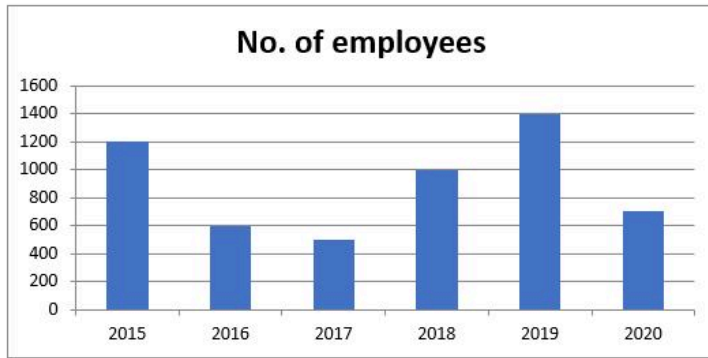
Question ID : 630680421559
Option 1 ID : 6306801644702
Option 2 ID : 6306801644701
Option 3 ID : 6306801644699
Option 4 ID : 6306801644700
Status : Not Answered
Chosen Option : --

Q.9 If 40% of A = 60% of B = $\frac{1}{6}$ of C, then find the ratio of A:B:C.

- Ans
- 1. 15:10:36
 - 2. 36:10:15
 - 3. 15:10:18
 - 4. 10:15:36

Question ID : 630680429146
Option 1 ID : 6306801674629
Option 2 ID : 6306801674628
Option 3 ID : 6306801674631
Option 4 ID : 6306801674630
Status : Answered
Chosen Option : 3

Q.10 The following bar graph shows the recruitment of employees in different years of a particular department.



The percentage increase in the recruitment of employees from 2017 to 2018 is:

- Ans**
- 1. 150%
 - 2. 130%
 - 3. 100%
 - 4. 120%

Question ID : 630680357955
Option 1 ID : 6306801393810
Option 2 ID : 6306801393812
Option 3 ID : 6306801393809
Option 4 ID : 6306801393811
Status : Answered
Chosen Option : 3

Q.11 Simplify $35 - [30 + \{10 + (12 - 10 - 4)\}]$.

- Ans**
- 1. -3
 - 2. 2
 - 3. -2
 - 4. 3

Question ID : 630680428128
Option 1 ID : 6306801670557
Option 2 ID : 6306801670559
Option 3 ID : 6306801670558
Option 4 ID : 6306801670556
Status : Answered
Chosen Option : 1

Q.12 A grocer purchased 10 kg rice for ₹700. He spends some amount on transportation and then sells it for ₹1,400. If the percentage of profit made by the grocer is 30%, then what is the amount (in ₹) he spends on transportation? (Round off to the nearest integer)

- Ans**
- 1. 300
 - 2. 380
 - 3. 377
 - 4. 350

Question ID : 630680869697
Option 1 ID : 6306803406154
Option 2 ID : 6306803406157
Option 3 ID : 6306803406156
Option 4 ID : 6306803406155
Status : Not Answered
Chosen Option : --

Q.13 If two circles of radii 35 cm and 25 cm touch each other externally, then the length (in cm) of a common tangent is (Rounded off to 2 decimal places)

- Ans 1. 60.00
 2. 59.16
 3. 45.29
 4. 52.25

Question ID : 630680421369
Option 1 ID : 6306801643940
Option 2 ID : 6306801643942
Option 3 ID : 6306801643941
Option 4 ID : 6306801643939
Status : Not Answered
Chosen Option : --

Q.14 If $16x^4 + \frac{1}{16x^4} = 14159$, then find the value of $2x + \frac{1}{2x}$.

- Ans 1. 12
 2. 11
 3. 15
 4. 9

Question ID : 630680413511
Option 1 ID : 6306801612870
Option 2 ID : 6306801612869
Option 3 ID : 6306801612871
Option 4 ID : 6306801612868
Status : Answered
Chosen Option : 2

Q.15 A man's speed in still water is 4 km/h more than the speed of the current. If the man takes a total of 10 h to cover 45 km downstream and 35 km upstream, then the speed of the man in still water is:

- Ans 1. 15 km/h
 2. 22 km/h
 3. 18 km/h
 4. 20 km/h

Question ID : 630680428839
Option 1 ID : 6306801673401
Option 2 ID : 6306801673402
Option 3 ID : 6306801673403
Option 4 ID : 6306801673400
Status : Not Answered
Chosen Option : --

Q.16 In a store, an item with marked price of ₹82,500 is available at a discounted price of ₹79,200. What is the percentage of discount given on that item?

- Ans
- 1. 1%
 - 2. 4%
 - 3. 2%
 - 4. 3%

Question ID : 630680428065
Option 1 ID : 6306801670304
Option 2 ID : 6306801670307
Option 3 ID : 6306801670305
Option 4 ID : 6306801670306
Status : Answered
Chosen Option : 2

Q.17 If 24 people can build 90 identical walls in 25 days, then how many more days will 27 people require to build 162 such walls?

- Ans
- 1. 14
 - 2. 13
 - 3. 15
 - 4. 16

Question ID : 630680428432
Option 1 ID : 6306801671772
Option 2 ID : 6306801671773
Option 3 ID : 6306801671774
Option 4 ID : 6306801671775
Status : Answered
Chosen Option : 2

Q.18 Find the surface area (in cm^2) of a sphere of diameter 28 cm. (Use $\pi = \frac{22}{7}$)

- Ans
- 1. 1731
 - 2. 2856
 - 3. 1724
 - 4. 2464

Question ID : 630680421556
Option 1 ID : 6306801644690
Option 2 ID : 6306801644689
Option 3 ID : 6306801644687
Option 4 ID : 6306801644688
Status : Answered
Chosen Option : 4

Q.19 Simplify the following expression:

$$\frac{(525 + 175)^2 - (525 - 175)^2}{(525 \times 175)}$$

- Ans
- 1. 700
 - 2. 4
 - 3. 2
 - 4. 350

Question ID : 630680413601
Option 1 ID : 6306801613230
Option 2 ID : 6306801613228
Option 3 ID : 6306801613231
Option 4 ID : 6306801613229
Status : Answered
Chosen Option : 4

Q.20 The population of a town increases 8% annually. If its present population is 1,42,560, what was the population one year ago?

- Ans
- 1. 1,33,000
 - 2. 1,34,000
 - 3. 1,31,000
 - 4. 1,32,000

Question ID : 630680120225
Option 1 ID : 630680465935
Option 2 ID : 630680465937
Option 3 ID : 630680465934
Option 4 ID : 630680465936
Status : Answered
Chosen Option : 4

Q.21 The value of $5 + [6 + (3 + 5) \div 2] \div 2$ is equal to:

- Ans
- 1. 8
 - 2. 12
 - 3. 10
 - 4. 14

Question ID : 630680428247
Option 1 ID : 6306801671035
Option 2 ID : 6306801671033
Option 3 ID : 6306801671034
Option 4 ID : 6306801671032
Status : Answered
Chosen Option : 3

Q.22 The following table shows the number of delivery partners (in thousands) who joined five different companies during six different years.

Year	Companies				
	Emazon	Clipkart	Twiggy	Tomato	Pyntra
2016	2.4	4.5	1.2	0.9	4.2
2017	1.8	5.4	1.5	1.2	5.6
2018	3.2	7.2	2.4	2.1	6.3
2019	3.9	5.6	2.8	2.7	6.5
2020	4.2	6.4	3.2	3.3	7.0
2021	5.0	7.2	3.6	3.6	7.2

If Emazon decides to give an average salary of a ₹21,000 to the delivery partners and allocates ₹13.44 crore for the same in 2022, find the percentage increase in the number of delivery partners from 2021 to 2022.

- Ans**
- 1. 20%
 - 2. 25%
 - 3. 28%
 - 4. 22.5%

Question ID : 630680429267

Option 1 ID : 6306801675112

Option 2 ID : 6306801675114

Option 3 ID : 6306801675115

Option 4 ID : 6306801675113

Status : Not Answered

Chosen Option : --

Q.23 If $x + \frac{1}{x} = 2$, then find the value of $(x^4 + \frac{4}{(x)^4})(x^3 - \frac{4}{x^3})$.

- Ans**
- 1. -10
 - 2. 10
 - 3. -15
 - 4. 15

Question ID : 630680413572

Option 1 ID : 6306801613112

Option 2 ID : 6306801613113

Option 3 ID : 6306801613114

Option 4 ID : 6306801613115

Status : Not Answered

Chosen Option : --

Q.24 In a $\triangle ABC$, angle $BAC = 30^\circ$ and angle $BCA = 60^\circ$. If $AC = 13$ cm and $AB = 12$ cm, then BC is equal to:

- Ans**
- 1. 7 cm
 - 2. 5 cm
 - 3. 4 cm
 - 4. 6 cm

Question ID : 630680421458

Option 1 ID : 6306801644298

Option 2 ID : 6306801644296

Option 3 ID : 6306801644295

Option 4 ID : 6306801644297

Status : Answered

Chosen Option : 2

Q.25 18 workers can complete a piece of work in 96 days. They start working together and after 26 days 10 more workers join them. In how many days in all will the work be completed?

- Ans
- 1. 72
 - 2. 69
 - 3. 71
 - 4. 70

Question ID : 630680428445
Option 1 ID : 6306801671826
Option 2 ID : 6306801671824
Option 3 ID : 6306801671827
Option 4 ID : 6306801671825
Status : Not Answered
Chosen Option : --

Q.26 Study the given table and answer the question that follows.
The table shows the number of students in various courses in various cities A, B, C, D and E in India during the academic year 2022-2023.

City	MBA	Science	Engineering	Medicine	MCA	Total
A	1200	2560	4520	1100	960	10340
B	1350	2650	5100	1050	850	11000
C	1250	2640	4580	1120	750	10340
D	1960	1250	3500	1850	1600	10160
E	1200	2100	3500	1960	1540	10300
Total	6960	11200	21200	7080	5700	

In all the cities altogether, what is the difference between the students of science and those of MBA?

- Ans
- 1. 4240
 - 2. 4440
 - 3. 4540
 - 4. 4340

Question ID : 630680428327
Option 1 ID : 6306801671355
Option 2 ID : 6306801671353
Option 3 ID : 6306801671352
Option 4 ID : 6306801671354
Status : Answered
Chosen Option : 1

Q.27 A person deposited some amount of money in the bank at simple interest. After 20 years, the amount became nine times the amount deposited. In how many years will the amount become 13 times the amount if the interest rate remains the same?

- Ans
- 1. 28
 - 2. 30
 - 3. 25
 - 4. 23

Question ID : 630680427953
Option 1 ID : 6306801669859
Option 2 ID : 6306801669857
Option 3 ID : 6306801669856
Option 4 ID : 6306801669858
Status : Answered
Chosen Option : 3

Q.28 In alloys A and B, the ratio of lead to tin is 5 : 3 and 3 : 1, respectively. 80 kg of alloy A and 100 kg of alloy B are mixed together to form a new alloy. What is the amount of tin (in kg) in the new alloy?

- Ans 1. 90
 2. 55
 3. 81.3
 4. 68

Question ID : 630680869682
Option 1 ID : 6306803406096
Option 2 ID : 6306803406095
Option 3 ID : 6306803406094
Option 4 ID : 6306803406097
Status : Not Answered
Chosen Option : --

Q.29 In an election between two candidates, 10% of the voters did not cast their votes and 75 votes were found invalid. The winner got 50% of the total votes expected and won by 170 votes. How many voters were enrolled in the voters' list?

- Ans 1. 800
 2. 850
 3. 950
 4. 855

Question ID : 630680428871
Option 1 ID : 6306801673530
Option 2 ID : 6306801673528
Option 3 ID : 6306801673529
Option 4 ID : 6306801673531
Status : Not Answered
Chosen Option : --

Q.30 If the radius of a sphere is increased by 40%, then find the percentage increase in its surface area.

- Ans 1. 85%
 2. 88%
 3. 96%
 4. 92%

Question ID : 630680421631
Option 1 ID : 6306801644987
Option 2 ID : 6306801644988
Option 3 ID : 6306801644990
Option 4 ID : 6306801644989
Status : Answered
Chosen Option : 3

Q.31 The value of $(4^2)^2 + 4 \times 4 \div 4 - 4$ is:

- Ans
- 1. 4^0
 - 2. 4^2
 - 3. 4^3
 - 4. 4^4

Question ID : 630680428203

Option 1 ID : 6306801670859

Option 2 ID : 6306801670856

Option 3 ID : 6306801670858

Option 4 ID : 6306801670857

Status : Answered

Chosen Option : 4

Q.32 A product was offered at a 10% trade discount on the marked price. After a cash discount of 10%, the product was sold for ₹7,290. The marked price (in ₹) is:

- Ans
- 1. 8,510
 - 2. 9,000
 - 3. 8,900
 - 4. 8,720

Question ID : 630680428604

Option 1 ID : 6306801672460

Option 2 ID : 6306801672463

Option 3 ID : 6306801672462

Option 4 ID : 6306801672461

Status : Answered

Chosen Option : 2

Q.33 R reaches office from home in 30 minutes and comes back in 20 minutes. The distance to his office from home is 12.5 km. What is his average speed (in km/h) from home to office and then back home?

- Ans
- 1. 30
 - 2. 60
 - 3. 25
 - 4. 20

Question ID : 630680428719

Option 1 ID : 6306801672922

Option 2 ID : 6306801672923

Option 3 ID : 6306801672921

Option 4 ID : 6306801672920

Status : Not Answered

Chosen Option : --

Q.34

The value of $1 + \frac{1}{1 + \frac{1}{5 + \frac{1}{2 + \frac{1}{3}}}}$ is:

Ans

1. $2\frac{11}{45}$

2. $1\frac{38}{45}$

3. $2\frac{17}{45}$

4. $1\frac{13}{45}$

Question ID : 630680428271

Option 1 ID : 6306801671129

Option 2 ID : 6306801671128

Option 3 ID : 6306801671131

Option 4 ID : 6306801671130

Status : Not Answered

Chosen Option : --

Q.35 A dishonest dealer sells his goods at 20% loss on the cost price but uses a faulty weight that weighs 25% less. His profit or loss percentage (rounded off to 2 decimal places) is:

Ans 1. 6.67%, profit

2. 3.33%, profit

3. 3.33%, loss

4. 6.67%, loss

Question ID : 630680429104

Option 1 ID : 6306801674461

Option 2 ID : 6306801674463

Option 3 ID : 6306801674462

Option 4 ID : 6306801674460

Status : Answered

Chosen Option : 1

Q.36 Which of the following is true when $x = \sin A + \cos A$; $y = \sec A + \operatorname{cosec} A$?

Ans 1. $y + 2x = x^2 y$

2. $y(1 + x^2) = 2x$

3. $y(1 - 2x^2) = x$

4. $y - 2x = x^2 y$

Question ID : 630680183250

Option 1 ID : 630680710071

Option 2 ID : 630680710070

Option 3 ID : 630680710072

Option 4 ID : 630680710069

Status : Not Answered

Chosen Option : --

Q.37 In an election, A received 27% of the votes and B received 125,982 votes. 19% did not cast their votes. Find the number of votes received by A.

- Ans
- 1. 1,88,973
 - 2. 62,991
 - 3. 57,827
 - 4. 44,327

Question ID : 630680428145
Option 1 ID : 6306801670624
Option 2 ID : 6306801670626
Option 3 ID : 6306801670627
Option 4 ID : 6306801670625
Status : Answered
Chosen Option : 2

Q.38 Simplify $[(38 - (-6)) \times \{9 - (8 - 1)\}] \div [4 \times \{6 + (-4)\}]$.

- Ans
- 1. 14
 - 2. 18
 - 3. 11
 - 4. 22

Question ID : 630680428120
Option 1 ID : 6306801670526
Option 2 ID : 6306801670527
Option 3 ID : 6306801670524
Option 4 ID : 6306801670525
Status : Answered
Chosen Option : 3

Q.39 Mitu can do a piece of work in 12 hours, Titu and Situ together in 2 hours, and Mitu and Situ together in 3 hours. How long will Titu alone take to do it?

- Ans
- 1. 6 hours
 - 2. 4 hours
 - 3. 7 hours
 - 4. 8 hours

Question ID : 630680869702
Option 1 ID : 6306803406174
Option 2 ID : 6306803406176
Option 3 ID : 6306803406177
Option 4 ID : 6306803406175
Status : Answered
Chosen Option : 2

Q.40 Triangle DEF is an equilateral triangle with a side length of 12 cm. If point G is the mid-point of side DE, what is the length (in cm) of side FG?

- Ans
- 1. 12
 - 2. $6\sqrt{3}$
 - 3. 6
 - 4. $3\sqrt{6}$

Question ID : 630680421465
Option 1 ID : 6306801644323
Option 2 ID : 6306801644324
Option 3 ID : 6306801644326
Option 4 ID : 6306801644325
Status : Answered
Chosen Option : 2

Q.41 The ratio of marks of A and B is 3 : 4 and the ratio of marks of B and C is 4 : 5. If the difference in the marks of C and A is 30, then how much marks does B get?

- Ans
- 1. 52
 - 2. 60
 - 3. 56
 - 4. 64

Question ID : 630680428949
Option 1 ID : 6306801673841
Option 2 ID : 6306801673843
Option 3 ID : 6306801673842
Option 4 ID : 6306801673840
Status : Answered
Chosen Option : 2

Q.42 The value of $\frac{1}{4} + \frac{2}{5} \div \left[\left(2\frac{1}{5} - 2 \right) \times 5 \right] - \frac{2}{3}$ of $\frac{3}{5}$ is:

- Ans
- 1. $\frac{2}{3}$
 - 2. $\frac{1}{4}$
 - 3. $\frac{3}{5}$
 - 4. $\frac{5}{6}$

Question ID : 630680285354
Option 1 ID : 6306801109394
Option 2 ID : 6306801109393
Option 3 ID : 6306801109391
Option 4 ID : 6306801109392
Status : Answered
Chosen Option : 2

- Q.43** The following table shows the number of teachers in four colleges (male and female) and the percentage of trained teachers among them.

Colleges	Male		Female	
	No. of Teachers	% of Trained Teachers	No. of Teachers	% of Trained Teachers
A	225	44	175	40
B	250	30	128	25
C	290	55	100	45
D	350	60	150	30

What is the total number of non-trained male teachers in college A and non-trained female teachers in college B?

- Ans** 1. 222
 2. 230
 3. 224
 4. 228

Question ID : 630680357953
Option 1 ID : 6306801393804
Option 2 ID : 6306801393801
Option 3 ID : 6306801393803
Option 4 ID : 6306801393802
Status : Answered
Chosen Option : 1

- Q.44** Find the maximum value of
($19 \sin \theta + 6 \cot \theta \sin \theta$).

- Ans** 1. $\sqrt{197}$
 2. $\sqrt{397}$
 3. $\sqrt{497}$
 4. $\sqrt{297}$

Question ID : 630680421363
Option 1 ID : 6306801643917
Option 2 ID : 6306801643915
Option 3 ID : 6306801643918
Option 4 ID : 6306801643916
Status : Answered
Chosen Option : 2

Q.45 A drainage tile is a cylindrical shell 42 cm long. The inside and outside diameters are 8 cm and 14 cm, respectively. What is the volume (in cm^3) of clay required for the tile? (Use $\pi = \frac{22}{7}$)

- Ans**
- 1. 4125
 - 2. 4881
 - 3. 4356
 - 4. 5241

Question ID : 630680421353
Option 1 ID : 6306801643878
Option 2 ID : 6306801643876
Option 3 ID : 6306801643877
Option 4 ID : 6306801643875
Status : Not Answered
Chosen Option : --

Q.46 Simplify $22 \times 10 \div 5 \times 2 + 12$.

- Ans**
- 1. 101
 - 2. 103
 - 3. 100
 - 4. 102

Question ID : 630680428122
Option 1 ID : 6306801670532
Option 2 ID : 6306801670534
Option 3 ID : 6306801670533
Option 4 ID : 6306801670535
Status : Answered
Chosen Option : 3

Q.47 Study the given table and answer the question that follows.
The table shows the production of five types of cars P, Q, R, S and T by a company from the year 1989 to 1994.

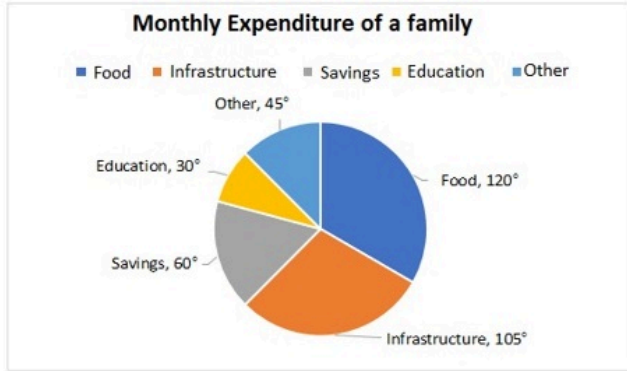
Type of Car	1989	1990	1991	1992	1993	1994	Total
P	8	20	16	17	21	6	88
Q	16	10	14	12	12	14	78
R	21	17	16	15	13	8	90
S	4	6	10	16	20	31	87
T	25	18	19	30	14	27	133
Total	74	71	75	90	80	86	476

In which year was the total production of cars of types P and Q together equal to the total production of cars of types R and S together?

- Ans**
- 1. 1992
 - 2. 1991
 - 3. 1993
 - 4. 1989

Question ID : 630680428330
Option 1 ID : 6306801671366
Option 2 ID : 6306801671365
Option 3 ID : 6306801671367
Option 4 ID : 6306801671364
Status : Not Answered
Chosen Option : --

Q.48 The savings and expenditure of a family in a month on different heads is shown in the given pie chart. The family saves ₹8,000 per month.



Find the total monthly expenditure (in ₹) of the family.

- Ans
- 1. 30000
 - 2. 40000
 - 3. 35000
 - 4. 25000

Question ID : 630680176355
Option 1 ID : 630680683650
Option 2 ID : 630680683648
Option 3 ID : 630680683649
Option 4 ID : 630680683651
Status : Not Answered
Chosen Option : --

Q.49 If the surface areas of two spheres are in the ratio of 9: 49, then the ratio of their volumes is: (Where $\pi = \frac{22}{7}$)

- Ans
- 1. 27 : 343
 - 2. 16 : 216
 - 3. 25 : 512
 - 4. 49 : 363

Question ID : 630680421615
Option 1 ID : 6306801644924
Option 2 ID : 6306801644923
Option 3 ID : 6306801644925
Option 4 ID : 6306801644926
Status : Answered
Chosen Option : 1

Q.50 The value of $9 \times 9 + 9 \div 9 - 9 \times 9 + 9 + 9 \times 9 - 9 - 9 \times 9$ is:

- Ans
- 1. 9
 - 2. 81
 - 3. 1
 - 4. 0

Question ID : 630680428264
Option 1 ID : 6306801671102
Option 2 ID : 6306801671103
Option 3 ID : 6306801671101
Option 4 ID : 6306801671100
Status : Answered
Chosen Option : 3

Q.1 Select the most appropriate idiom that can substitute the underlined segment in the given sentence and complete the sentence correctly.

It is important to take this opportunity to make a name for yourself – beat around the bush.

- Ans**
- 1. strike while the iron is hot
 - 2. fight tooth and claw
 - 3. pass with flying colours
 - 4. bare the foot

Question ID : 630680517345
Option 1 ID : 6306802021778
Option 2 ID : 6306802021776
Option 3 ID : 6306802021779
Option 4 ID : 6306802021777
Status : Answered
Chosen Option : 1

Q.2 Select the word from the sentence below, which is an antonym for the word 'resolve'
My cousin Nisha's curiosity about life will never be satisfied because no one knows all the answers to all her questions.

- Ans**
- 1. About
 - 2. Questions
 - 3. Knows
 - 4. Satisfied

Question ID : 630680517333
Option 1 ID : 6306802021728
Option 2 ID : 6306802021731
Option 3 ID : 6306802021730
Option 4 ID : 6306802021729
Status : Answered
Chosen Option : 3

Q.3 Select the word from the sentence below, which is an antonym for the word 'advance'.
Clive is a travel blogger who believes that with even an elementary or intermediate Knowledge of the local language, you can enjoy your travel more.

- Ans**
- 1. Destination
 - 2. Believes
 - 3. Elementary
 - 4. knowledge

Question ID : 630680517334
Option 1 ID : 6306802021735
Option 2 ID : 6306802021732
Option 3 ID : 6306802021733
Option 4 ID : 6306802021734
Status : Answered
Chosen Option : 3

Q.4 Select the most appropriate option that can substitute the underlined segment in the given sentence.

Last night, I failed to sleep because of some familiar issues that couldn't be avoided.

- Ans
- 1. unthinkable
 - 2. unsolvable
 - 3. inevitable
 - 4. incapable

Question ID : 630680414575

Option 1 ID : 6306801617052

Option 2 ID : 6306801617051

Option 3 ID : 6306801617053

Option 4 ID : 6306801617054

Status : Answered

Chosen Option : 3

Q.5 Select the option that will improve the underlined part of the given sentence.

My friend vanished when the goons came to fight with me.

- Ans
- 1. mobilised when the thugs arrived
 - 2. disappeared when the thugs arrived
 - 3. condemned when the thugs arrived
 - 4. attacked when the thugs arrived

Question ID : 630680414504

Option 1 ID : 6306801616778

Option 2 ID : 6306801616775

Option 3 ID : 6306801616777

Option 4 ID : 6306801616776

Status : Answered

Chosen Option : 2

Q.6 Select the option that rectifies the spelling error in the given sentence.

The phone rang, but nobody awnsered.

- Ans
- 1. awmsered
 - 2. answered
 - 3. answord
 - 4. answered

Question ID : 630680517473

Option 1 ID : 6306802022289

Option 2 ID : 6306802022288

Option 3 ID : 6306802022290

Option 4 ID : 6306802022291

Status : Answered

Chosen Option : 4

Q.7 Select the most appropriate idiom for the given situation focusing on the underlined words.

I invited them to my anniversary dinner but they had other plans, so they decided to politely decline with the implication that they may come at a later date.

- Ans
- 1. To spoil a moment
 - 2. To take a rain check
 - 3. Call it a day
 - 4. Took it with a grain of salt

Question ID : 630680517363
Option 1 ID : 6306802021848
Option 2 ID : 6306802021850
Option 3 ID : 6306802021851
Option 4 ID : 6306802021849
Status : Answered
Chosen Option : 4

Q.8 Select the option that can be used as a one-word substitute for the given group of words.

A lively, cheerful outgoing person.

- Ans
- 1. Orator
 - 2. Ambivert
 - 3. Extrovert
 - 4. Introvert

Question ID : 630680414531
Option 1 ID : 6306801616885
Option 2 ID : 6306801616886
Option 3 ID : 6306801616883
Option 4 ID : 6306801616884
Status : Answered
Chosen Option : 3

Q.9 Select the most appropriate meaning of the given idiom.
Gift of the gab

- Ans
- 1. A gift for a person named Gab
 - 2. A talent for speaking
 - 3. A talent for lying
 - 4. A talent for singing

Question ID : 630680167283
Option 1 ID : 630680647904
Option 2 ID : 630680647905
Option 3 ID : 630680647906
Option 4 ID : 630680647907
Status : Answered
Chosen Option : 2

Q.10 What is the most appropriate ANTONYM of the word 'fluctuate'?

- Ans 1. Stabilise
 2. Deflect
 3. Fickle
 4. Vacillate

Question ID : 630680409895
Option 1 ID : 6306801598409
Option 2 ID : 6306801598411
Option 3 ID : 6306801598410
Option 4 ID : 6306801598412
Status : Answered
Chosen Option : 1

Q.11 Parts of the following sentences have been given as options. Select the option that contains a grammatical error.

Ms. Malathi is living lonely in an apartment.

- Ans 1. is living
 2. lonely in
 3. Ms. Malathi
 4. an apartment

Question ID : 630680146964
Option 1 ID : 630680568695
Option 2 ID : 630680568696
Option 3 ID : 630680568694
Option 4 ID : 630680568697
Status : Answered
Chosen Option : 2

Q.12 Select the most appropriate idiomatic expression that can substitute the underlined segment in the given sentence.

He is very strict with his students but good-natured.

- Ans 1. his eyes are bigger than his stomach
 2. his heart is in the right place
 3. he has a big mouth
 4. his heart misses a beat

Question ID : 630680166223
Option 1 ID : 630680643866
Option 2 ID : 630680643864
Option 3 ID : 630680643867
Option 4 ID : 630680643865
Status : Answered
Chosen Option : 2

Q.13 The following sentence has been split into four segments. Identify the segment that contains a spelling error.
The dried raisons / have an intoxicating /effect on humans as / well as flora and fauna.

- Ans
- 1. have an intoxicating
 - 2. The dried raisons
 - 3. effect on humans as
 - 4. well as flora and fauna.

Question ID : 630680518782
Option 1 ID : 6306802027625
Option 2 ID : 6306802027624
Option 3 ID : 6306802027626
Option 4 ID : 6306802027627
Status : Answered
Chosen Option : 3

Q.14 Select the INCORRECTLY spelt word in the given sentence.
Every season the river overflows its banks and when it goes down it leaves silt for crops to be gruw n.

- Ans
- 1. Gruwn
 - 2. Season
 - 3. Overflows
 - 4. Silt

Question ID : 630680396918
Option 1 ID : 6306801547741
Option 2 ID : 6306801547740
Option 3 ID : 6306801547743
Option 4 ID : 6306801547742
Status : Answered
Chosen Option : 1

Q.15 Select the most appropriate idiom that can substitute the underlined segment in the given sentence.
Popular cosmetics brands in India are very expensive.

- Ans
- 1. up in arms
 - 2. flog a dead horse
 - 3. take it with a pinch of salt
 - 4. cost an arm and a leg

Question ID : 630680517318
Option 1 ID : 6306802021671
Option 2 ID : 6306802021670
Option 3 ID : 6306802021668
Option 4 ID : 6306802021669
Status : Answered
Chosen Option : 4

Q.16 Select the most appropriate segment to substitute the underlined words in the given sentence.

After he leave, we discussed his suggestion.

- Ans
- 1. he will be leaving
 - 2. he has left
 - 3. he had left
 - 4. he was leaving

Question ID : 630680436024
Option 1 ID : 6306801702040
Option 2 ID : 6306801702037
Option 3 ID : 6306801702039
Option 4 ID : 6306801702038
Status : Answered
Chosen Option : 3

Q.17 Select the most appropriate ANTONYM of the given word.

Confound

- Ans
- 1. Expire
 - 2. Discern
 - 3. Assure
 - 4. Suppress

Question ID : 630680435583
Option 1 ID : 6306801700267
Option 2 ID : 6306801700265
Option 3 ID : 6306801700268
Option 4 ID : 6306801700266
Status : Answered
Chosen Option : 3

Q.18 Select the option that can be used as a one-word substitute for the given group of words.

Weak and cowardly

- Ans
- 1. Pusillanimous
 - 2. Meek
 - 3. Timid
 - 4. Anxious

Question ID : 630680176617
Option 1 ID : 630680684690
Option 2 ID : 630680684688
Option 3 ID : 630680684691
Option 4 ID : 630680684689
Status : Answered
Chosen Option : 3

Q.19 Select the INCORRECTLY spelt word.

- Ans** 1. Bicycle
 2. Academy
 3. Mystery
 4. Justice

Question ID : 630680517477
Option 1 ID : 6306802022306
Option 2 ID : 6306802022307
Option 3 ID : 6306802022304
Option 4 ID : 6306802022305
Status : Answered
Chosen Option : 1

Q.20 Select the INCORRECTLY spelt word.

- Ans** 1. Neccessity
 2. Perseverance
 3. Hierarchy
 4. Knowledgeable

Question ID : 630680410008
Option 1 ID : 6306801598863
Option 2 ID : 6306801598864
Option 3 ID : 6306801598861
Option 4 ID : 6306801598862
Status : Answered
Chosen Option : 4

Q.21 Select the option that can be used as a one-word substitute for the given group of words.

A lover of mankind

- Ans** 1. Recluse
 2. Cynic
 3. Psychiatrist
 4. Philanthropist

Question ID : 630680414800
Option 1 ID : 6306801617943
Option 2 ID : 6306801617945
Option 3 ID : 6306801617944
Option 4 ID : 6306801617946
Status : Answered
Chosen Option : 4

Q.22 Select the most appropriate option that can substitute the underlined words in the given sentence.

Though very informative, Shweta's article was mercilessly rejected of the editor.

- Ans
- 1. was mercilessly rejected of
 - 2. was mercilessly rejected on
 - 3. was mercilessly rejected each
 - 4. was mercilessly rejected by

Question ID : 630680182093
Option 1 ID : 630680705596
Option 2 ID : 630680705594
Option 3 ID : 630680705597
Option 4 ID : 630680705595
Status : Answered
Chosen Option : 4

Q.23 Select the most appropriate meaning of the given idiom.
To leave no stone unturned

- Ans
- 1. To win everything that is available
 - 2. To control a person completely
 - 3. To do everything possible to achieve something
 - 4. To treat someone/something as if of no importance

Question ID : 630680195032
Option 1 ID : 630680756619
Option 2 ID : 630680756617
Option 3 ID : 630680756618
Option 4 ID : 630680756620
Status : Answered
Chosen Option : 3

Q.24 Select the most appropriate synonym of the underlined word in the given sentence.
The environmental organisation issued a statement to condemn the deforestation happening in the protected area.

- Ans
- 1. Censure
 - 2. Persuade
 - 3. Foster
 - 4. Compel

Question ID : 630680383231
Option 1 ID : 6306801493834
Option 2 ID : 6306801493833
Option 3 ID : 6306801493831
Option 4 ID : 6306801493832
Status : Answered
Chosen Option : 1

Q.25 Select the option that can be used as a one-word substitute for the underlined words.
He was promoted to a higher position in the first year due to his careful nature and hard-working efforts.

- Ans
- 1. business mindedness
 - 2. extraordinary
 - 3. elegance
 - 4. diligence

Question ID : 630680414578
Option 1 ID : 6306801617064
Option 2 ID : 6306801617066
Option 3 ID : 6306801617065
Option 4 ID : 6306801617063
Status : Answered
Chosen Option : 2

Q.26 Parts of the given sentence have been underlined. One of them contains an error.
Select the option that has the segment with a grammatical error.
The art historian argued that the painting's value has been greatly underestimated,
and that its unique style and technique deserved recognition from the art community
and the public alike.

- Ans
- 1. its unique style and technique
 - 2. has been greatly underestimated
 - 3. recognition from the art community
 - 4. and the public alike

Question ID : 630680415364
Option 1 ID : 6306801620204
Option 2 ID : 6306801620203
Option 3 ID : 6306801620205
Option 4 ID : 6306801620206
Status : Answered
Chosen Option : 1

Q.27 Select the most appropriate synonym of the given word.
Mourn

- Ans
- 1. Dread
 - 2. Amuse
 - 3. Grieve
 - 4. Approve

Question ID : 630680310013
Option 1 ID : 6306801206200
Option 2 ID : 6306801206198
Option 3 ID : 6306801206197
Option 4 ID : 6306801206199
Status : Answered
Chosen Option : 3

Q.28 Select the most appropriate idiom to fill in the blank.
When I went to Egypt and lost my wallet and passport, I was _____.

- Ans
- 1. rolling up my sleeves
 - 2. putting my nose to the grindstone
 - 3. working my fingers to the bone
 - 4. up in a creek without a paddle

Question ID : 630680445913
Option 1 ID : 6306801740994
Option 2 ID : 6306801740992
Option 3 ID : 6306801740993
Option 4 ID : 6306801740995
Status : Answered
Chosen Option : 3

Q.29 Select the most appropriate ANTONYM of the given word.
Oral

- Ans
- 1. Verbal
 - 2. Inscribed
 - 3. Obligatory
 - 4. Dejected

Question ID : 630680295215
Option 1 ID : 6306801148584
Option 2 ID : 6306801148585
Option 3 ID : 6306801148586
Option 4 ID : 6306801148587
Status : Answered
Chosen Option : 2

Q.30 The following sentence has been divided into parts. One of them contains an error.
Select the part that contains the error from the given options.
Mr. Vinu / has never / slept in / a igloo.

- Ans
- 1. slept in
 - 2. a igloo
 - 3. Mr. Vinu
 - 4. has never

Question ID : 630680184892
Option 1 ID : 630680716531
Option 2 ID : 630680716532
Option 3 ID : 630680716529
Option 4 ID : 630680716530
Status : Answered
Chosen Option : 2

Q.31 Select the most appropriate idiom to fill in the blank.

John was always _____ about becoming a millionaire without doing any hard work.

- Ans
- 1. a storm in a tea cup
 - 2. eating like a horse
 - 3. building castles in the air
 - 4. having an ace up his sleeve

Question ID : 630680517407

Option 1 ID : 6306802022027

Option 2 ID : 6306802022025

Option 3 ID : 6306802022024

Option 4 ID : 6306802022026

Status : Answered

Chosen Option : 3

Q.32 Select the most appropriate option that can substitute the underlined segment in the given sentence.

No sooner had she finished her breakfast that she had received a phone call from her boss, informing her that she needed to come to work immediately.

- Ans
- 1. that she received
 - 2. that she receives
 - 3. than she receives
 - 4. than she received

Question ID : 630680414517

Option 1 ID : 6306801616829

Option 2 ID : 6306801616830

Option 3 ID : 6306801616827

Option 4 ID : 6306801616828

Status : Answered

Chosen Option : 4

Q.33 Select the most appropriate option that can substitute the underlined segment in the given sentence. If there is no need to substitute it, select 'No substitution'.

If I was very rich, I would spend all my time and money for the poor.

- Ans
- 1. No substitution
 - 2. If I were very rich
 - 3. If I have much riches
 - 4. If I am very rich

Question ID : 630680414537

Option 1 ID : 6306801616910

Option 2 ID : 6306801616908

Option 3 ID : 6306801616909

Option 4 ID : 6306801616907

Status : Answered

Chosen Option : 2

Q.34 Parts of the following sentence have been given as options. Select the option that contains an error.

My neighbours were serious injured in the car accident.

- Ans
- 1. serious injured
 - 2. My neighbours were
 - 3. the car accident
 - 4. in

Question ID : 630680154843

Option 1 ID : 630680599169

Option 2 ID : 630680599168

Option 3 ID : 630680599171

Option 4 ID : 630680599170

Status : Answered

Chosen Option : 1

Q.35 Select the most appropriate idiom that can substitute the underlined segment in the given sentence.

The players like the coach because he is honest, realistic and practical in dealing with them.

- Ans
- 1. down to earth
 - 2. by and large
 - 3. far and wide
 - 4. sick and tired

Question ID : 630680435642

Option 1 ID : 6306801700499

Option 2 ID : 6306801700498

Option 3 ID : 6306801700500

Option 4 ID : 6306801700497

Status : Answered

Chosen Option : 2

Q.36 Identify the most appropriate antonym of the given word.

Rapid

- Ans
- 1. active
 - 2. smart
 - 3. lately
 - 4. slow

Question ID : 630680517350

Option 1 ID : 6306802021798

Option 2 ID : 6306802021799

Option 3 ID : 6306802021796

Option 4 ID : 6306802021797

Status : Answered

Chosen Option : 4

Q.37 The following sentence has been divided into four segments. Identify the segment that has a grammatical error.

I am working with him since 2002, / but even today / I am unable / to understand his motives.

- Ans
- 1. I am unable
 - 2. I am working with him since 2002,
 - 3. to understand his motives.
 - 4. but even today

Question ID : 630680191737

Option 1 ID : 630680743559

Option 2 ID : 630680743557

Option 3 ID : 630680743560

Option 4 ID : 630680743558

Status : Answered

Chosen Option : 3

Q.38 Select the option that can be used as a one-word substitute for the given group of words.

An area/place in which dead bodies are buried

- Ans
- 1. Demise
 - 2. Cemetery
 - 3. Mansion
 - 4. Clementi

Question ID : 630680414623

Option 1 ID : 6306801617237

Option 2 ID : 6306801617235

Option 3 ID : 6306801617238

Option 4 ID : 6306801617236

Status : Answered

Chosen Option : 2

Q.39 Underlined word in the sentence is not spelt correctly. Identify the correct spelling from the options given below.

Raman had been living a reklusive life since he had lost his job.

- Ans
- 1. Reclusive
 - 2. Reclucive
 - 3. Reslusive
 - 4. Reclusive

Question ID : 630680409865

Option 1 ID : 6306801598291

Option 2 ID : 6306801598289

Option 3 ID : 6306801598290

Option 4 ID : 6306801598292

Status : Answered

Chosen Option : 4

Q.40 Select the most appropriate ANTONYM of the given word.

Convalesce

- Ans** 1. Collapse
 2. Conceal
 3. Corrupt
 4. Confront

Question ID : 630680435591
Option 1 ID : 6306801700299
Option 2 ID : 6306801700300
Option 3 ID : 6306801700297
Option 4 ID : 6306801700298
Status : Answered
Chosen Option : 4

Comprehension:

In the following passage, some words have been deleted. Read the passage carefully and select the most appropriate option to fill in each blank.
Why do people yawn? No one seems to know the exact (1)_____. Some people believe that we yawn (2)_____ we do not have enough oxygen in our bodies. In (3)_____ words, we yawn to breathe in (4)_____ oxygen. People also believe that yawning is associated (5)_____ boredom.

SubQuestion No : 41

Q.41 Select the correct option to fill blank 1.

- Ans** 1. explanation
 2. basis
 3. reason
 4. reality

Question ID : 630680514988
Option 1 ID : 6306802012531
Option 2 ID : 6306802012532
Option 3 ID : 6306802012529
Option 4 ID : 6306802012530
Status : Answered
Chosen Option : 3

Comprehension:

In the following passage, some words have been deleted. Read the passage carefully and select the most appropriate option to fill in each blank.
Why do people yawn? No one seems to know the exact (1)_____. Some people believe that we yawn (2)_____ we do not have enough oxygen in our bodies. In (3)_____ words, we yawn to breathe in (4)_____ oxygen. People also believe that yawning is associated (5)_____ boredom.

SubQuestion No : 42

Q.42 Select the correct option to fill blank 2.

- Ans** 1. when
 2. as
 3. why
 4. while

Question ID : 630680514989
Option 1 ID : 6306802012535
Option 2 ID : 6306802012533
Option 3 ID : 6306802012536
Option 4 ID : 6306802012534
Status : Answered
Chosen Option : 1

Comprehension:

In the following passage, some words have been deleted. Read the passage carefully and select the most appropriate option to fill in each blank.

Why do people yawn? No one seems to know the exact (1)_____. Some people believe that we yawn (2)_____ we do not have enough oxygen in our bodies. In (3)_____ words, we yawn to breathe in (4)_____ oxygen. People also believe that yawning is associated (5)_____ boredom.

SubQuestion No : 43

Q.43 Select the correct option to fill blank 3.

- Ans 1. some
 2. new
 3. rather
 4. other

Question ID : 630680514990

Option 1 ID : 6306802012540

Option 2 ID : 6306802012538

Option 3 ID : 6306802012537

Option 4 ID : 6306802012539

Status : Answered

Chosen Option : 4

Comprehension:

In the following passage, some words have been deleted. Read the passage carefully and select the most appropriate option to fill in each blank.

Why do people yawn? No one seems to know the exact (1)_____. Some people believe that we yawn (2)_____ we do not have enough oxygen in our bodies. In (3)_____ words, we yawn to breathe in (4)_____ oxygen. People also believe that yawning is associated (5)_____ boredom.

SubQuestion No : 44

Q.44 Select the correct option to fill blank 4.

- Ans 1. less
 2. little
 3. much
 4. more

Question ID : 630680514991

Option 1 ID : 6306802012541

Option 2 ID : 6306802012544

Option 3 ID : 6306802012542

Option 4 ID : 6306802012543

Status : Answered

Chosen Option : 4

Comprehension:

In the following passage, some words have been deleted. Read the passage carefully and select the most appropriate option to fill in each blank.

Why do people yawn? No one seems to know the exact (1)_____. Some people believe that we yawn (2)_____ we do not have enough oxygen in our bodies. In (3)_____ words, we yawn to breathe in (4)_____ oxygen. People also believe that yawning is associated (5)_____ boredom.

SubQuestion No : 45**Q.45 Select the correct option to fill blank 5.**

- Ans 1. on
 2. in
 3. with
 4. by

Question ID : 630680514992

Option 1 ID : 6306802012546

Option 2 ID : 6306802012545

Option 3 ID : 6306802012548

Option 4 ID : 6306802012547

Status : Answered

Chosen Option : 3

Comprehension:

Read the given passage and answer the questions that follow.

Ahoy there, matey! Today, we're going to talk about something near and dear to my heart: pirates. You know, those swashbuckling scallywags who pillage and plunder on the high seas. Now, when you think of pirates, you might picture them as these tough, intimidating figures. But let me tell you, there's a lot more to these buccaneers than meets the eye. For one thing, have you ever noticed that pirates seem to have an unusual fondness for parrots? I mean, come on. They're birds. What use could a pirate possibly have for a bird? And then there's the whole eyepatch thing. Yes, pirates are known for wearing eyepatches, but did you ever stop to wonder why? Some people think it's because they lost an eye in battle, but the real reason is much simpler: it's so they can switch the patch from eye to eye and maintain night vision in both eyes. Genius, right? But my favourite pirate quirk has got to be their love of treasure. I mean, who doesn't love a good treasure hunt? But the way pirates go about it is just hilarious. They'll spend months, even years, searching for that one elusive chest of gold, only to bury it on some deserted island and forget where they put it. It's like they're playing an eternal game of hide-and-seek with themselves. And let's not forget about their vocabulary. Pirates have a whole language all their own, full of terms like 'shiver me timbers', 'avast', and 'yo-ho-ho'. I mean, what does any of that even mean? It's like they're speaking a different language entirely. So, there you have it, folks. Pirates might be fierce, but they're also pretty darn funny. Who knows? Maybe we could all learn a thing or two from these salty dogs.

SubQuestion No : 46**Q.46 What is a common phrase used in pirate language?**

- Ans 1. Yo, dude!
 2. Shiver me timbers
 3. Howdy, partner!
 4. Greetings, friend!

Question ID : 630680406894

Option 1 ID : 6306801586629

Option 2 ID : 6306801586626

Option 3 ID : 6306801586628

Option 4 ID : 6306801586627

Status : Answered

Chosen Option : 2

Comprehension:

Read the given passage and answer the questions that follow.

Ahoy there, matey! Today, we're going to talk about something near and dear to my heart: pirates. You know, those swashbuckling scallywags who pillage and plunder on the high seas. Now, when you think of pirates, you might picture them as these tough, intimidating figures. But let me tell you, there's a lot more to these buccaneers than meets the eye. For one thing, have you ever noticed that pirates seem to have an unusual fondness for parrots? I mean, come on. They're birds. What use could a pirate possibly have for a bird?

And then there's the whole eyepatch thing. Yes, pirates are known for wearing eyepatches, but did you ever stop to wonder why? Some people think it's because they lost an eye in battle, but the real reason is much simpler: it's so they can switch the patch from eye to eye and maintain night vision in both eyes. Genius, right?

But my favourite pirate quirk has got to be their love of treasure. I mean, who doesn't love a good treasure hunt? But the way pirates go about it is just hilarious. They'll spend months, even years, searching for that one elusive chest of gold, only to bury it on some deserted island and forget where they put it. It's like they're playing an eternal game of hide-and-seek with themselves.

And let's not forget about their vocabulary. Pirates have a whole language all their own, full of terms like 'shiver me timbers', 'avast', and 'yo-ho-ho'. I mean, what does any of that even mean? It's like they're speaking a different language entirely.

So, there you have it, folks. Pirates might be fierce, but they're also pretty darn funny. Who knows? Maybe we could all learn a thing or two from these salty dogs.

SubQuestion No : 47

Q.47 Which of the following options best describes the tone of the passage?

- Ans**
- 1. Serious
 - 2. Sarcastic
 - 3. Angry
 - 4. Humorous

Question ID : **630680406892**

Option 1 ID : **6306801586618**

Option 2 ID : **6306801586619**

Option 3 ID : **6306801586621**

Option 4 ID : **6306801586620**

Status : **Answered**

Chosen Option : **1**

Adda247

Comprehension:

Read the given passage and answer the questions that follow.

Ahoy there, matey! Today, we're going to talk about something near and dear to my heart: pirates. You know, those swashbuckling scallywags who pillage and plunder on the high seas. Now, when you think of pirates, you might picture them as these tough, intimidating figures. But let me tell you, there's a lot more to these buccaneers than meets the eye. For one thing, have you ever noticed that pirates seem to have an unusual fondness for parrots? I mean, come on. They're birds. What use could a pirate possibly have for a bird?

And then there's the whole eyepatch thing. Yes, pirates are known for wearing eyepatches, but did you ever stop to wonder why? Some people think it's because they lost an eye in battle, but the real reason is much simpler: it's so they can switch the patch from eye to eye and maintain night vision in both eyes. Genius, right?

But my favourite pirate quirk has got to be their love of treasure. I mean, who doesn't love a good treasure hunt? But the way pirates go about it is just hilarious. They'll spend months, even years, searching for that one elusive chest of gold, only to bury it on some deserted island and forget where they put it. It's like they're playing an eternal game of hide-and-seek with themselves.

And let's not forget about their vocabulary. Pirates have a whole language all their own, full of terms like 'shiver me timbers', 'avast', and 'yo-ho-ho'. I mean, what does any of that even mean? It's like they're speaking a different language entirely.

So, there you have it, folks. Pirates might be fierce, but they're also pretty darn funny. Who knows? Maybe we could all learn a thing or two from these salty dogs.

SubQuestion No : 48

Q.48 What is one of the pirate quirks mentioned in the passage?

- Ans** 1. Their tendency to forget where they buried their treasure
2. Their love for basketball
3. Their fondness for cats
4. Their love of gardening

Question ID : 630680406893

Option 1 ID : 6306801586624

Option 2 ID : 6306801586622

Option 3 ID : 6306801586623

Option 4 ID : 6306801586625

Status : Answered

Chosen Option : 1

Adda247

Comprehension:

Read the given passage and answer the questions that follow.

Ahoy there, matey! Today, we're going to talk about something near and dear to my heart: pirates. You know, those swashbuckling scallywags who pillage and plunder on the high seas. Now, when you think of pirates, you might picture them as these tough, intimidating figures. But let me tell you, there's a lot more to these buccaneers than meets the eye. For one thing, have you ever noticed that pirates seem to have an unusual fondness for parrots? I mean, come on. They're birds. What use could a pirate possibly have for a bird?

And then there's the whole eyepatch thing. Yes, pirates are known for wearing eyepatches, but did you ever stop to wonder why? Some people think it's because they lost an eye in battle, but the real reason is much simpler: it's so they can switch the patch from eye to eye and maintain night vision in both eyes. Genius, right?

But my favourite pirate quirk has got to be their love of treasure. I mean, who doesn't love a good treasure hunt? But the way pirates go about it is just hilarious. They'll spend months, even years, searching for that one elusive chest of gold, only to bury it on some deserted island and forget where they put it. It's like they're playing an eternal game of hide-and-seek with themselves.

And let's not forget about their vocabulary. Pirates have a whole language all their own, full of terms like 'shiver me timbers', 'avast', and 'yo-ho-ho'. I mean, what does any of that even mean? It's like they're speaking a different language entirely.

So, there you have it, folks. Pirates might be fierce, but they're also pretty darn funny. Who knows? Maybe we could all learn a thing or two from these salty dogs.

SubQuestion No : 49

Q.49 Which of the following would be the most appropriate title for this passage?

- Ans**
- 1. The Mysterious Language of Pirates
 - 2. The Serious World of Pirates
 - 3. The Humorous Quirks of Pirates
 - 4. The Fierce and Intimidating Pirate Culture

Question ID : 630680406895

Option 1 ID : 6306801586632

Option 2 ID : 6306801586630

Option 3 ID : 6306801586633

Option 4 ID : 6306801586631

Status : Answered

Chosen Option : 1

Adda247

Comprehension:

Read the given passage and answer the questions that follow.

Ahoy there, matey! Today, we're going to talk about something near and dear to my heart: pirates. You know, those swashbuckling scallywags who pillage and plunder on the high seas. Now, when you think of pirates, you might picture them as these tough, intimidating figures. But let me tell you, there's a lot more to these buccaneers than meets the eye. For one thing, have you ever noticed that pirates seem to have an unusual fondness for parrots? I mean, come on. They're birds. What use could a pirate possibly have for a bird?

And then there's the whole eyepatch thing. Yes, pirates are known for wearing eyepatches, but did you ever stop to wonder why? Some people think it's because they lost an eye in battle, but the real reason is much simpler: it's so they can switch the patch from eye to eye and maintain night vision in both eyes. Genius, right?

But my favourite pirate quirk has got to be their love of treasure. I mean, who doesn't love a good treasure hunt? But the way pirates go about it is just hilarious. They'll spend months, even years, searching for that one elusive chest of gold, only to bury it on some deserted island and forget where they put it. It's like they're playing an eternal game of hide-and-seek with themselves.

And let's not forget about their vocabulary. Pirates have a whole language all their own, full of terms like 'shiver me timbers', 'avast', and 'yo-ho-ho'. I mean, what does any of that even mean? It's like they're speaking a different language entirely.

So, there you have it, folks. Pirates might be fierce, but they're also pretty darn funny. Who knows? Maybe we could all learn a thing or two from these salty dogs.

SubQuestion No : 50

Q.50 Why do pirates wear eyepatches?

- Ans**
- 1. To maintain night vision in both eyes
 - 2. To cover up an embarrassing birthmark
 - 3. Because they lost an eye in battle
 - 4. To intimidate their enemies

Question ID : **630680406891**

Option 1 ID : **6306801586615**

Option 2 ID : **6306801586617**

Option 3 ID : **6306801586616**

Option 4 ID : **6306801586614**

Status : **Answered**

Chosen Option : **1**

Adda247