

Sub Inspector in Delhi Police and Central Armed Police Forces Examination 2024 Paper I Exam

Roll Number	
Candidate Name	
Venue Name	Shri Siddhi Vinayak Institute Of Technology
Exam Date	29/06/2024
Exam Time	12:30 PM - 2:30 PM
Subject	SICPO Paper I 2024

Section : General Intelligence and Reasoning

Q.1 From his office, Mukesh went 12 km straight. Then he turned 45° right and covered 8 km. From here he turned left and travelled 7 km and finally turning left he covered 11 km. If he was going north-west at last, then in which direction did he start from his office?

Ans ✓ 1. East

✗ 2. South

✗ 3. West

✗ 4. North

Question ID : 630680113411

Option 1 ID : 630680439186

Option 2 ID : 630680439189

Option 3 ID : 630680439188

Option 4 ID : 630680439187

Status : Not Answered

Chosen Option : --

Q.2 Which of the following numbers will replace the question mark (?) in the given series?
46, ?, 81, 100, 120, 141

Ans ✗ 1. 59

✗ 2. 61

✓ 3. 63

✗ 4. 66

Question ID : 630680411953

Option 1 ID : 6306801606648

Option 2 ID : 6306801606647

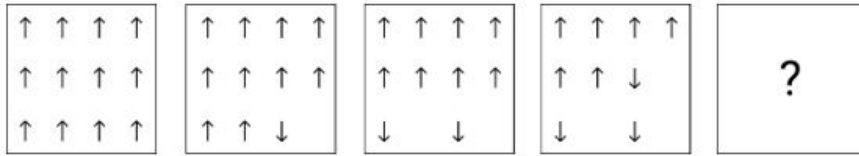
Option 3 ID : 6306801606650

Option 4 ID : 6306801606649

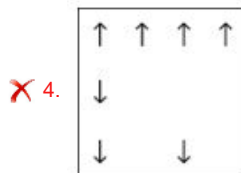
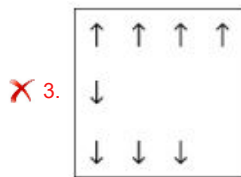
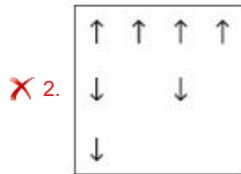
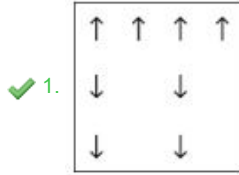
Status : Answered

Chosen Option : 3

Q.3 Identify the figure given in the options which when put in place of '?' will logically complete the series.



Ans



Question ID : 630680366163

Option 1 ID : 6306801426177

Option 2 ID : 6306801426178

Option 3 ID : 6306801426180

Option 4 ID : 6306801426179

Status : Answered

Chosen Option : 1

Q.4 Which of the following terms will replace the question mark (?) in the given series?

GXMA, IVOY, KTQW, MRSU, ?

Ans ✗ 1. OQVS

✗ 2. OQUT

✓ 3. OPUS

✗ 4. OPVS

Question ID : 630680417046

Option 1 ID : 6306801626950

Option 2 ID : 6306801626948

Option 3 ID : 6306801626949

Option 4 ID : 6306801626947

Status : Answered

Chosen Option : 3

Q.5 Which of the following numbers will replace the question mark (?) in the given series?

8 9 13 22 ?

- Ans
- 1. 42
 - 2. 48
 - 3. 32
 - 4. 38

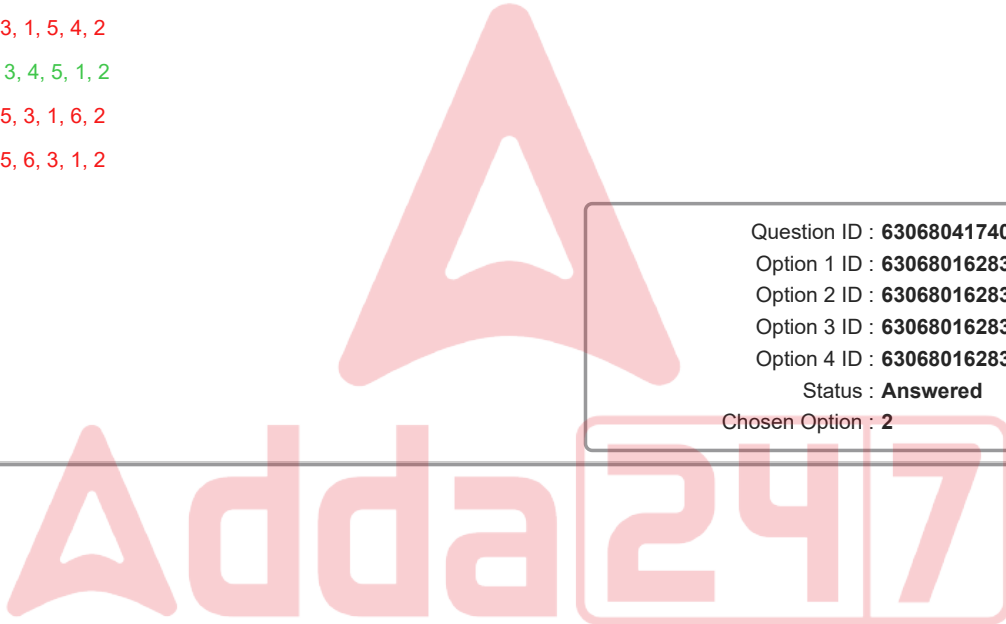
Question ID : 630680412014
Option 1 ID : 6306801606892
Option 2 ID : 6306801606891
Option 3 ID : 6306801606893
Option 4 ID : 6306801606894
Status : Answered
Chosen Option : 4

Q.6 Select the option that represents the correct order of the given words as they would appear in an English dictionary.

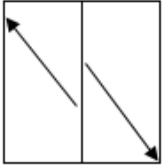
1. Purposively
2. Pursuit
3. Purgatory
4. Purify
5. Purports
6. Purchased

- Ans
- 1. 6, 3, 1, 5, 4, 2
 - 2. 6, 3, 4, 5, 1, 2
 - 3. 4, 5, 3, 1, 6, 2
 - 4. 4, 5, 6, 3, 1, 2

Question ID : 630680417406
Option 1 ID : 6306801628389
Option 2 ID : 6306801628388
Option 3 ID : 6306801628390
Option 4 ID : 6306801628387
Status : Answered
Chosen Option : 2

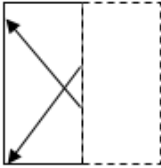


Q.7 A transparent sheet with a pattern is given below. Select the option that depicts the pattern that would appear when the given transparent sheet is folded at the middle vertical line.

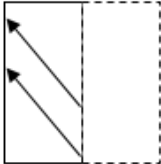


Ans

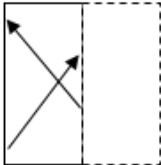
✓ 1.



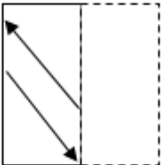
✗ 2.



✗ 3.



✗ 4.



Question ID : 630680389402

Option 1 ID : 6306801518066

Option 2 ID : 6306801518067

Option 3 ID : 6306801518069

Option 4 ID : 6306801518068

Status : Answered

Chosen Option : 1

Q.8 In a certain code language, 'FROM' is written as 'HSNK' and 'WAKE' is written as 'YBJC'. How will 'JUMP' be written in the given language?

Ans ✓ 1. LVLN

✗ 2. LTKN

✗ 3. MTKN

✗ 4. MULM

Question ID : 630680313752

Option 1 ID : 6306801220850

Option 2 ID : 6306801220849

Option 3 ID : 6306801220851

Option 4 ID : 6306801220852

Status : Answered

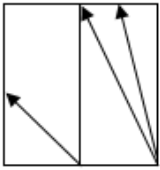
Chosen Option : 1

Q.9 Which letter cluster can replace the question mark (?) to complete the given series?
UBIG, PDKL, ?, FHOV, AJQA

- Ans
- 1. LEMR
 - 2. JEMQ
 - 3. KEMR
 - 4. KFMQ

Question ID : 630680416308
Option 1 ID : 6306801623996
Option 2 ID : 6306801623998
Option 3 ID : 6306801623995
Option 4 ID : 6306801623997
Status : Answered
Chosen Option : 4

Q.10 A transparent sheet with a pattern is given below. Select the option that depicts the pattern that would appear when the given transparent sheet is folded at the middle vertical line.



Ans

- 1.
- 2.
- 3.
- 4.

Question ID : 630680389406
Option 1 ID : 6306801518084
Option 2 ID : 6306801518085
Option 3 ID : 6306801518082
Option 4 ID : 6306801518083
Status : Answered
Chosen Option : 1

Q.11 What will come in place of the question mark (?) when + and - are interchanged?
 $8 - 3 \times 4 + 16 \div 2 = ?$

- Ans 1. 12
 2. 11
 3. 10
 4. 14

Question ID : 630680411790
Option 1 ID : 6306801605996
Option 2 ID : 6306801605998
Option 3 ID : 6306801605995
Option 4 ID : 6306801605997
Status : Answered
Chosen Option : 1

Q.12 Select the option that is related to the fifth term in the same way as the second term is related to the first term and the fourth term is related to the third term.
DRIVE : RDEVI :: STOCK : TSKCO :: MOULD : ?

- Ans 1. OMDLU
 2. MODLU
 3. OMULD
 4. OMLUD

Question ID : 630680416788
Option 1 ID : 6306801625916
Option 2 ID : 6306801625917
Option 3 ID : 6306801625915
Option 4 ID : 6306801625918
Status : Answered
Chosen Option : 1

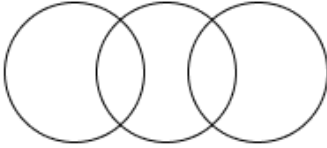
Adda247

Q.13 Select the Venn diagram that best illustrates the relationship between the following classes.

Animals, Lions, Jackals

Ans

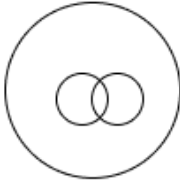
✗ 1.



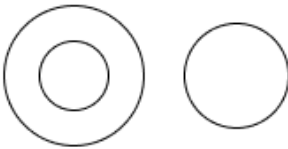
✓ 2.



✗ 3.



✗ 4.



Question ID : 630680869732

Option 1 ID : 6306803406295

Option 2 ID : 6306803406294

Option 3 ID : 6306803406296

Option 4 ID : 6306803406297

Status : Answered

Chosen Option : 2

Q.14 Select the set in which the numbers are related in the same way as are the numbers of the following sets.

(NOTE: Operations should be performed on the whole numbers, without breaking down the numbers into its constituent digits. E.g. 13 – Operations on 13 such as adding /deleting /multiplying etc. to 13 can be performed. Breaking down 13 into 1 and 3 and then performing mathematical operations on 1 and 3 is not allowed)

(84, 28, 4)

(147, 49, 7)

Ans ✓ 1. (231, 77, 11)

✗ 2. (231, 77, 13)

✗ 3. (241, 77, 11)

✗ 4. (231, 67, 11)

Question ID : 630680344678

Option 1 ID : 6306801341023

Option 2 ID : 6306801341021

Option 3 ID : 6306801341024

Option 4 ID : 6306801341022

Status : Answered

Chosen Option : 1

Q.15 In a code language, 'COOL' is coded as '180' and 'MAN' is coded as '84'. How will 'QUIET' be coded in the same language?

Ans 1. 36

2. 360

3. 56

4. 284

Question ID : 630680302859

Option 1 ID : 6306801178100

Option 2 ID : 6306801178099

Option 3 ID : 6306801178098

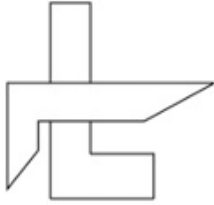
Option 4 ID : 6306801178101

Status : Answered

Chosen Option : 2



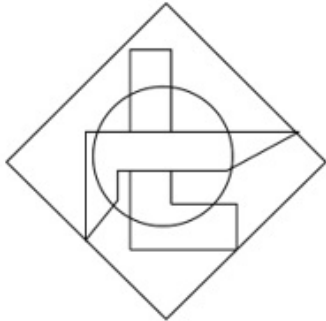
Q.16 Select the option in which the given figure (X) is embedded as its part. (Rotation is NOT allowed.)



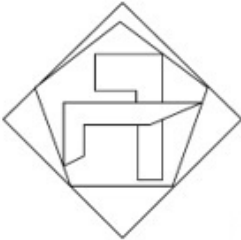
X

Ans

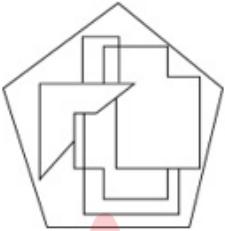
✓ 1.



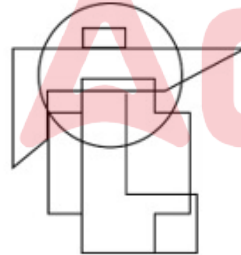
✗ 2.



✗ 3.



✗ 4.



Question ID : 630680305496

Option 1 ID : 6306801188361

Option 2 ID : 6306801188364

Option 3 ID : 6306801188363

Option 4 ID : 6306801188362

Status : Answered

Chosen Option : 1

Q.17 If 'A' stands for '+', 'B' stands for 'x', 'C' stands for '+' and 'D' stands for '-', what will come in place of the question mark (?) in the following equation?
96 A 4 D 5 B 7 C 20 = ?

- Ans 1. 9
 2. 2
 3. 4
 4. 7

Question ID : 630680411670
Option 1 ID : 6306801605518
Option 2 ID : 6306801605515
Option 3 ID : 6306801605517
Option 4 ID : 6306801605516
Status : Answered
Chosen Option : 1

Q.18 Select the set in which the numbers are related in the same way as are the numbers of the following sets.

(NOTE: Operations should be performed on the whole numbers, without breaking down the numbers into its constituent digits. E.g. 13 – Operations on 13 such as adding /deleting /multiplying etc. to 13 can be performed. Breaking down 13 into 1 and 3 and then performing mathematical operations on 1 and 3 is not allowed)

(21, 63, 378)

(23, 69, 414)

- Ans 1. (26, 81, 486)
 2. (27, 81, 486)
 3. (27, 80, 486)
 4. (27, 81, 476)

Question ID : 630680344669
Option 1 ID : 6306801340988
Option 2 ID : 6306801340987
Option 3 ID : 6306801340986
Option 4 ID : 6306801340985
Status : Answered
Chosen Option : 2

Q.19 Based on the English alphabetical order, three of the following four letter-clusters are alike in a certain way and thus form a group. Which letter-cluster does not belong to that group?
(Note: The odd letter-cluster is not based on the number of consonants/vowels or their position in the letter-cluster.)

- Ans 1. SWT
 2. QUS
 3. OSP
 4. UYV

Question ID : 630680416091
Option 1 ID : 6306801623128
Option 2 ID : 6306801623129
Option 3 ID : 6306801623130
Option 4 ID : 6306801623127
Status : Answered
Chosen Option : 2

Q.20 Which of the following numbers will replace the question mark (?) in the given series?
101, 103, 107, 109, ?, 127, 131, 137

- Ans
- 1. 125
 - 2. 111
 - 3. 123
 - 4. 113

Question ID : 630680411869
Option 1 ID : 6306801606311
Option 2 ID : 6306801606313
Option 3 ID : 6306801606312
Option 4 ID : 6306801606314
Status : Not Answered
Chosen Option : --

Q.21 In a certain code language, 'SING' is written as '22121710' and 'FOUR' is written as '9182421'. How will 'BEAN' be written in that language?

- Ans
- 1. 68418
 - 2. 58417
 - 3. 57413
 - 4. 69516

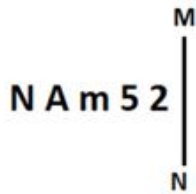
Question ID : 630680416594
Option 1 ID : 6306801625140
Option 2 ID : 6306801625142
Option 3 ID : 6306801625139
Option 4 ID : 6306801625141
Status : Marked For Review
Chosen Option : 2

Q.22 Select the option that is related to the third word in the same way as the second word is related to the first word. (The words must be considered as meaningful English words and must not be related to each other based on the number of letters/number of consonants/vowels in the word.)
Concology : Shells :: Palaeontology : ?

- Ans
- 1. Metals
 - 2. Fossils
 - 3. Planets
 - 4. Soil

Question ID : 630680416725
Option 1 ID : 6306801625664
Option 2 ID : 6306801625666
Option 3 ID : 6306801625665
Option 4 ID : 6306801625663
Status : Marked For Review
Chosen Option : 2

Q.23 Select the correct mirror image of the given figure when the mirror is placed at MN as shown below.



- Ans
- ✓ 1. 2 5 m A N
 - ✗ 2. 5 2 m A N
 - ✗ 3. 2 5 m A N
 - ✗ 4. 2 5 m A N

Question ID : 630680356650
 Option 1 ID : 6306801388601
 Option 2 ID : 6306801388604
 Option 3 ID : 6306801388603
 Option 4 ID : 6306801388602
 Status : Answered
 Chosen Option : 1

Q.24 9 is related to 90 following a certain logic. Following the same logic, 12 is related to 156. Which of the following numbers is related to 72 using the same logic?

- Ans
- ✗ 1. 6
 - ✗ 2. 9
 - ✗ 3. 7
 - ✓ 4. 8

Question ID : 63068063340
 Option 1 ID : 630680244526
 Option 2 ID : 630680244529
 Option 3 ID : 630680244527
 Option 4 ID : 630680244528
 Status : Answered
 Chosen Option : 4

Q.25 In a certain code language,
 'A x B' means 'A is the son of B',
 'A - B' means 'A is the brother of B',
 'A + B' means 'A is the wife of B',
 'A % B' means 'A is the father of B'.

How is M related to T if 'M + N - P x S % T'?

- Ans
- ✗ 1. Mother's brother's daughter
 - ✓ 2. Brother's wife
 - ✗ 3. Father's brother's son's wife
 - ✗ 4. Wife's sister

Question ID : 630680869741
 Option 1 ID : 6306803406332
 Option 2 ID : 6306803406333
 Option 3 ID : 6306803406330
 Option 4 ID : 6306803406331
 Status : Answered
 Chosen Option : 2

Q.26 What will come in place of the question mark (?) in the following equation, if '+' and '-' are interchanged and 'x' and '÷' are interchanged?
 $76 \div 6 + 18 \times 6 - 49 = ?$

- Ans
- 1. 524
 - 2. 569
 - 3. 596
 - 4. 502

Question ID : 630680411739
Option 1 ID : 6306801605793
Option 2 ID : 6306801605794
Option 3 ID : 6306801605791
Option 4 ID : 6306801605792
Status : Marked For Review
Chosen Option : 4

Q.27 Which of the following terms will replace the question mark (?) in the given series?

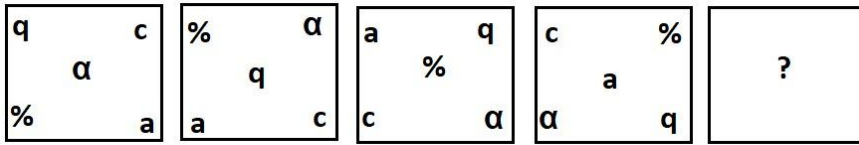
NBRY, PZSX, ?, TVUV, VTVU

- Ans
- 1. SYTW
 - 2. SXTW
 - 3. RYTW
 - 4. RXTW

Question ID : 630680417047
Option 1 ID : 6306801626954
Option 2 ID : 6306801626953
Option 3 ID : 6306801626951
Option 4 ID : 6306801626952
Status : Answered
Chosen Option : 4

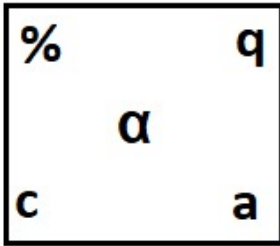
Adda247

Q.28 Select the figure from among the given options that can logically replace the question mark (?) in the following series.



Ans

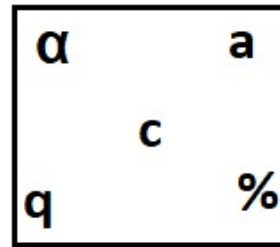
✗ 1.



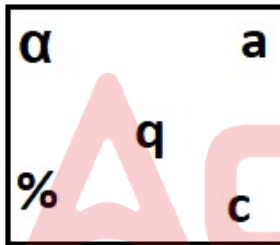
✗ 2.



✓ 3.



✗ 4.



Question ID : 630680867755

Option 1 ID : 6306803398666

Option 2 ID : 6306803398665

Option 3 ID : 6306803398664

Option 4 ID : 6306803398667

Status : Answered

Chosen Option : 3

Q.29 Select the set in which the numbers are related in the same way as are the numbers of the given sets.

(NOTE: Operations should be performed on the whole numbers, without breaking down the numbers into its constituent digits. E.g. 13 – Operations on 13 such as adding/deleting/multiplying, etc. to 13 can be performed. Breaking down 13 into 1 and 3 and then performing mathematical operations on 1 and 3 is not allowed.)
(18, 3, 9)
(36, 6, 18)

- Ans 1. (72, 13, 36)
 2. (78, 13, 39)
 3. (72, 14, 39)
 4. (78, 14, 39)

Question ID : 630680294011
Option 1 ID : 6306801143857
Option 2 ID : 6306801143858
Option 3 ID : 6306801143856
Option 4 ID : 6306801143859
Status : Answered
Chosen Option : 2

Q.30 If + means \div , \div means \times , \times means $+$, and \div means \times , what will be the value of the following expression?
 $16 \times 9 + 5 \div 4 - 2 = ?$

- Ans 1. 20
 2. 15
 3. 40
 4. 35

Question ID : 630680411961
Option 1 ID : 6306801606682
Option 2 ID : 6306801606680
Option 3 ID : 6306801606679
Option 4 ID : 6306801606681
Status : Answered
Chosen Option : 2

Q.31 In a code language, 'CRAB' is written as 'YTWD', and 'CALM' is written as 'YCHO'. How will 'ZOOM' be written in that language?

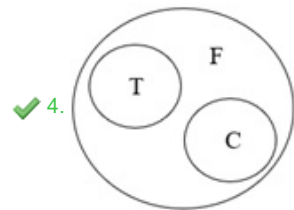
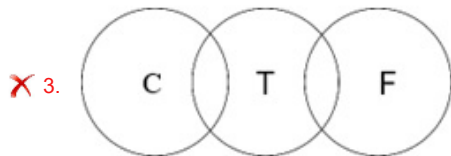
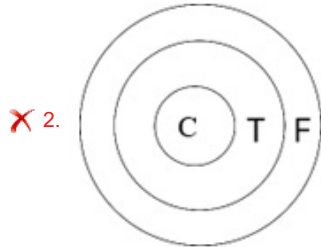
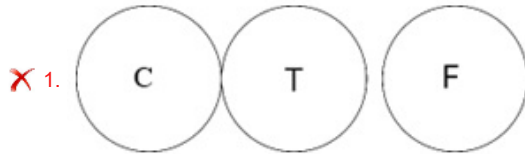
- Ans 1. VKOQ
 2. KVOQ
 3. KOVQ
 4. VQKO

Question ID : 630680416677
Option 1 ID : 6306801625471
Option 2 ID : 6306801625474
Option 3 ID : 6306801625472
Option 4 ID : 6306801625473
Status : Answered
Chosen Option : 4

Q.32 Select the Venn diagram that best illustrates the relationship between the following classes.

Furniture, Chair, Table

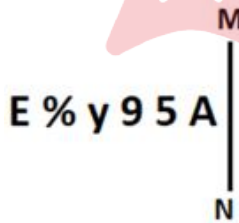
Ans

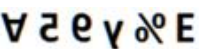
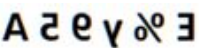




Question ID : 630680416274
 Option 1 ID : 6306801623862
 Option 2 ID : 6306801623860
 Option 3 ID : 6306801623861
 Option 4 ID : 6306801623859

Status : Answered
 Chosen Option : 4

Q.33 Select the correct mirror image of the given figure when the mirror is placed at MN as shown below.



- Ans
- X 1. 
 - ✓ 2. 
 - X 3. 
 - X 4. 

Question ID : 630680356644
 Option 1 ID : 6306801388580
 Option 2 ID : 6306801388577
 Option 3 ID : 6306801388578
 Option 4 ID : 6306801388579

Status : Answered
 Chosen Option : 2

Q.34 In a code language, 'BEST' is written as 'GKXZ', and 'EDGE' is written as 'JLJK'. How will 'WIND' be written in that language?

- Ans 1. BOSJ
 2. SJBO
 3. BSJO
 4. JSOB

Question ID : 630680416692
Option 1 ID : 6306801625533
Option 2 ID : 6306801625531
Option 3 ID : 6306801625534
Option 4 ID : 6306801625532
Status : Answered
Chosen Option : 1

Q.35 A, B, C, D, E and F are sitting around a circular table facing the centre. Only two people sit between A and F. Only one person sits between F and E. C sits to the immediate left of D. C is not an immediate neighbour of A. Who is sitting to the immediate left of F?

- Ans 1. E
 2. A
 3. D
 4. B

Question ID : 630680416854
Option 1 ID : 6306801626181
Option 2 ID : 6306801626179
Option 3 ID : 6306801626182
Option 4 ID : 6306801626180
Status : Answered
Chosen Option : 4

Q.36 Select the number from among the given options that can replace the question mark (?) in the following series.
228, 209, 192, 179, 168, ?

- Ans 1. 162
 2. 160
 3. 165
 4. 161

Question ID : 630680411931
Option 1 ID : 6306801606559
Option 2 ID : 6306801606562
Option 3 ID : 6306801606561
Option 4 ID : 6306801606560
Status : Not Answered
Chosen Option : --

Q.37 Three different positions of the same die are shown below. Find the number on the face opposite to the face showing '1'.



- Ans
- 1. 5
 - 2. 3
 - 3. 6
 - 4. 2

Question ID : 630680318733
Option 1 ID : 6306801239938
Option 2 ID : 6306801239940
Option 3 ID : 6306801239939
Option 4 ID : 6306801239937
Status : Answered
Chosen Option : 4

Q.38 Point B is 35 m to the east of Point A. Point C is 26 m to the north of Point A. Point C is 15 m to the west of Point D. Point E is 13 m to the south of Point D. Point F is 20 m to the east of Point E. In which direction is Point B with respect to Point F?

- Ans
- 1. South
 - 2. South-east
 - 3. West
 - 4. North-west

Question ID : 630680416357
Option 1 ID : 6306801624192
Option 2 ID : 6306801624193
Option 3 ID : 6306801624194
Option 4 ID : 6306801624191
Status : Answered
Chosen Option : 1

Q.39 Which two signs should be interchanged to make the given equation correct?
 $7 \div 255 + 5 \times 3 - 20 = 140$

- Ans
- 1. - and +
 - 2. + and ÷
 - 3. × and +
 - 4. + and -

Question ID : 630680411798
Option 1 ID : 6306801606027
Option 2 ID : 6306801606030
Option 3 ID : 6306801606029
Option 4 ID : 6306801606028
Status : Marked For Review
Chosen Option : 2

Q.40 In a certain code language, 'BEDROOM' is written as '28' and 'MOON' is written as '16'.
How will 'CHAIN' be written in that language?

- Ans 1. 20
 2. 26
 3. 24
 4. 23

Question ID : 630680416592
Option 1 ID : 6306801625133
Option 2 ID : 6306801625134
Option 3 ID : 6306801625132
Option 4 ID : 6306801625131
Status : Answered
Chosen Option : 1

Q.41 If 'A' stands for '+', 'B' stands for '-', 'C' stands for 'x' and 'D' stands for '÷', what will come in place of the question mark (?) in the following equation?
80 B 12 C 5 A 27 D 9 = ?

- Ans 1. 19
 2. 25
 3. 23
 4. 27

Question ID : 630680411666
Option 1 ID : 6306801605499
Option 2 ID : 6306801605501
Option 3 ID : 6306801605500
Option 4 ID : 6306801605502
Status : Answered
Chosen Option : 3

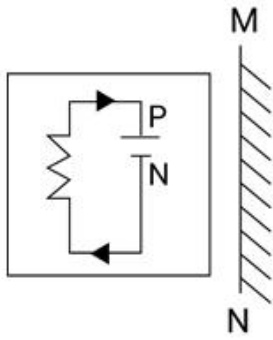
Q.42 Two statements are given followed by two conclusions numbered I and II. Assuming the statements to be true, even if they seem to be at variance with commonly known facts, decide which of the conclusions logically follow(s) from the statements.

Statements:
No plate is a bowl.
All plates are tumblers.
Conclusions:
I. No tumbler is a plate.
II. Some tumblers are bowls.

- Ans 1. Only conclusion I follows
 2. Only conclusion II follows
 3. Either conclusion I or II follows
 4. Neither conclusion I nor II follows

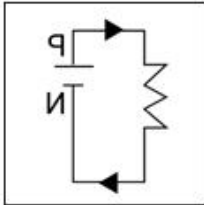
Question ID : 630680416891
Option 1 ID : 6306801626327
Option 2 ID : 6306801626328
Option 3 ID : 6306801626329
Option 4 ID : 6306801626330
Status : Answered
Chosen Option : 4

Q.43 Select the correct mirror image of the given figure when the mirror is placed at MN as shown below.

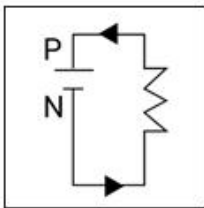


Ans

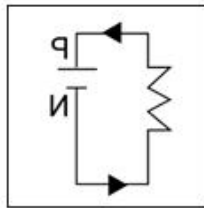
X 1.



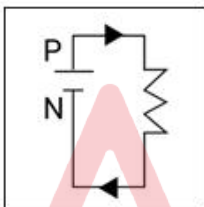
X 2.



✓ 3.



X 4.



Question ID : 630680296901

Option 1 ID : 6306801155250

Option 2 ID : 6306801155247

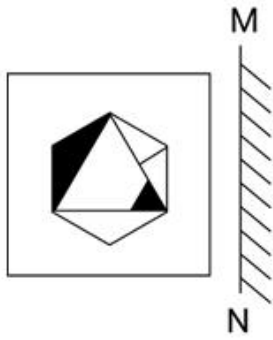
Option 3 ID : 6306801155249

Option 4 ID : 6306801155248

Status : Answered

Chosen Option : 3

Q.44 Select the correct mirror image of the given figure when the mirror is placed at MN as shown below.

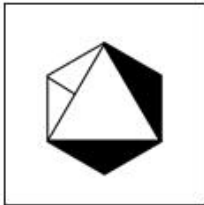


Ans

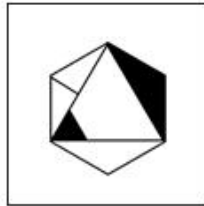
✗ 1.



✗ 2.



✓ 3.



✗ 4.



Question ID : 630680296906

Option 1 ID : 6306801155267

Option 2 ID : 6306801155270

Option 3 ID : 6306801155268

Option 4 ID : 6306801155269

Status : Answered

Chosen Option : 3

Q.45 What will come in the place of '?' in the following equation, if '+' and '-' are interchanged and also 'x' and '÷' are interchanged?

$$11 \div 12 - 78 \times 6 + 54 = ?$$

Ans 1. 104

2. 91

3. 86

4. 99

Question ID : 630680343177

Option 1 ID : 6306801335082

Option 2 ID : 6306801335081

Option 3 ID : 6306801335083

Option 4 ID : 6306801335084

Status : Answered

Chosen Option : 2

Q.46 Select the option that represents the correct order of the given words as they would appear in an English dictionary?

1. Unfaithful
2. Unfamiliar
3. Uneasiness
4. Undone
5. Understand
6. Undetermined

Ans 1. 5, 6, 4, 3, 2, 1

2. 5, 6, 4, 3, 1, 2

3. 5, 6, 4, 2, 1, 3

4. 5, 6, 1, 2, 4, 3

Question ID : 630680417390

Option 1 ID : 6306801628323

Option 2 ID : 6306801628325

Option 3 ID : 6306801628324

Option 4 ID : 6306801628326

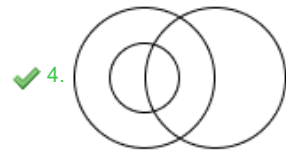
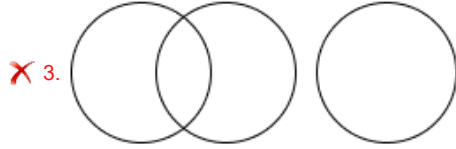
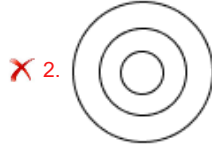
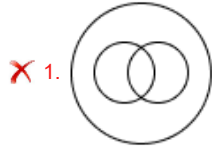
Status : Answered

Chosen Option : 2

Adda247

Q.47 उस वेन आरेख का चयन कीजिए जो निम्नलिखित वर्गों के बीच संबंध को सर्वोत्तम रूप से दर्शाता है।
महिला, माँ, अभिनेता

Ans



Question ID : 630680869739
Option 1 ID : 6306803406323
Option 2 ID : 6306803406324
Option 3 ID : 6306803406322
Option 4 ID : 6306803406325
Status : Answered
Chosen Option : 3

Adda247

Q.48 Identify the figure given in the options, which when put in place of the question mark (?) will logically complete the series.

1	8	8	0	0	2	2	7	
	0		2		7		1	?
7	2	1	7	8	1	0	8	

Ans

✗ 1.

7	1
	8
0	2

✗ 2.

7	0
	1
2	8

✗ 3.

1	8
	0
7	2

✓ 4.

7	1
	8
2	0

Question ID : 630680867773

Option 1 ID : 6306803398737

Option 2 ID : 6306803398739

Option 3 ID : 6306803398738

Option 4 ID : 6306803398736

Status : Answered

Chosen Option : 4

Q.49 Select the set in which the numbers are related in the same way as are the numbers of the following sets.

(NOTE : Operations should be performed on the whole numbers, without breaking down the numbers into its constituent digits. E.g. 13 – Operations on 13 such as adding /deleting /multiplying etc. to 13 can be performed. Breaking down 13 into 1 and 3 and then performing mathematical operations on 1 and 3 is not allowed.)
(16, 20, 80)
(12, 16, 64)

- Ans 1. (20, 25, 100)
 2. (18, 22, 88)
 3. (19, 23, 82)
 4. (11, 15, 70)

Question ID : 630680340903

Option 1 ID : 6306801326054

Option 2 ID : 6306801326056

Option 3 ID : 6306801326055

Option 4 ID : 6306801326053

Status : Answered

Chosen Option : 2

Q.50 In a certain code language,

A + B means 'A is the mother of B'

A - B means 'A is the brother of B'

A × B means 'A is the wife of B'

A ÷ B means 'A is the father of B'

Based on the above, how is T related to Q if 'P - Q + R - S ÷ T × U'?

- Ans 1. Wife's sister
 2. Daughter's daughter
 3. Son's daughter
 4. Sister

Question ID : 630680284953

Option 1 ID : 6306801107811

Option 2 ID : 6306801107813

Option 3 ID : 6306801107812

Option 4 ID : 6306801107814

Status : Answered

Chosen Option : 3

Section : General Knowledge and General Awareness

Q.1 Which Union Territory has the lowest literacy rate, according to the Census of India 2011?

- Ans 1. Lakshadweep
 2. Dadra and Nagar Haveli
 3. Andaman and Nicobar Islands
 4. Delhi

Question ID : 630680112002

Option 1 ID : 630680433734

Option 2 ID : 630680433735

Option 3 ID : 630680433736

Option 4 ID : 630680433737

Status : Answered

Chosen Option : 2

Q.2 Ugadi is celebrated primarily in which of the following states on the first day of the Chaitra month of the Hindu calendar?

- Ans
- 1. Odisha
 - 2. Karnataka
 - 3. Uttarakhand
 - 4. Assam

Question ID : 630680410362
Option 1 ID : 6306801600179
Option 2 ID : 6306801600180
Option 3 ID : 6306801600182
Option 4 ID : 6306801600181
Status : Answered
Chosen Option : 2

Q.3 One term for the continuous movement of water through the lithosphere, atmosphere and hydrosphere is:

- Ans
- 1. hydrological cycle
 - 2. hydro equilibrium cycle
 - 3. hydrostatical equilibrium
 - 4. water circulation

Question ID : 630680210495
Option 1 ID : 630680816140
Option 2 ID : 630680816142
Option 3 ID : 630680816141
Option 4 ID : 630680816139
Status : Not Answered
Chosen Option : --

Q.4 Which Article of the Indian Constitution mentions about the qualification for membership of the State Legislature?

- Ans
- 1. Article 173
 - 2. Article 179
 - 3. Article 171
 - 4. Article 180

Question ID : 630680408218
Option 1 ID : 6306801591767
Option 2 ID : 6306801591769
Option 3 ID : 6306801591768
Option 4 ID : 6306801591770
Status : Not Answered
Chosen Option : --

Q.5 Identify whether the given statements about an earthquake are correct or incorrect.
Statement 1: When the stress on the edge overcomes the friction, there is an earthquake that releases energy in waves that travel through Earth's crust and causes the shaking that we feel.
Statement 2: An earthquake cannot be identified as a foreshock until after a larger earthquake in the same area occurs.

- Ans**
- 1. Both Statements 1 and 2 are incorrect
 - 2. Only Statement 1 is correct
 - 3. Only Statement 2 is correct
 - 4. Both Statements 1 and 2 are correct

Question ID : **630680407482**
Option 1 ID : **6306801588869**
Option 2 ID : **6306801588866**
Option 3 ID : **6306801588867**
Option 4 ID : **6306801588868**
Status : **Not Answered**
Chosen Option : --

Q.6 Select the correct alternative on the basis of the statements given about 'Rasa'.
Statement I: It is the aesthetic experience that one derives while enjoying an artistic presentation.
Statement II: It deals with the creation of human sentiments in the spectator or the aesthete.

- Ans**
- 1. Only Statement I is true.
 - 2. Neither Statement I nor Statement II is true.
 - 3. Only Statement II is true.
 - 4. Both Statement I and Statement II are true.

Question ID : **630680409181**
Option 1 ID : **6306801595553**
Option 2 ID : **6306801595556**
Option 3 ID : **6306801595554**
Option 4 ID : **6306801595555**
Status : **Not Answered**
Chosen Option : --

Q.7 If tax rate decreases with increase in taxable base, then this type of taxation is called:

- Ans**
- 1. degressive
 - 2. regressive
 - 3. progressive
 - 4. increasing

Question ID : **630680407140**
Option 1 ID : **6306801587503**
Option 2 ID : **6306801587502**
Option 3 ID : **6306801587504**
Option 4 ID : **6306801587505**
Status : **Not Answered**
Chosen Option : --

Q.8 Manyakheta or Malkhed was the capital of which of the following kingdoms?

- Ans
- 1. Shaka
 - 2. Rashtrakuta
 - 3. Kushan
 - 4. Satavahana

Question ID : 630680412513
Option 1 ID : 6306801608877
Option 2 ID : 6306801608876
Option 3 ID : 6306801608875
Option 4 ID : 6306801608878
Status : Not Answered
Chosen Option : --

Q.9 _____ is commonly represented by the Greek letter ρ (rho).

- Ans
- 1. Electrical resistivity
 - 2. Current
 - 3. Flow of charges
 - 4. Electrical conductivity

Question ID : 63068099061
Option 1 ID : 630680384951
Option 2 ID : 630680384948
Option 3 ID : 630680384950
Option 4 ID : 630680384949
Status : Answered
Chosen Option : 1

Q.10 As of 2022, which of the following is the longest national waterway in India?

- Ans
- 1. Godavari-Krishna stretch
 - 2. Allahabad-Haldia stretch
 - 3. Sadiya-Dhubri stretch
 - 4. Kottapuram-Kollam stretch

Question ID : 630680409695
Option 1 ID : 6306801597610
Option 2 ID : 6306801597609
Option 3 ID : 6306801597611
Option 4 ID : 6306801597612
Status : Answered
Chosen Option : 3

Q.11 In which district of Uttarakhand does the Ramganga river originate from the Doodhatoli ranges?

- Ans
- 1. Champawat
 - 2. Chamoli
 - 3. Pauri Garhwal
 - 4. Almora

Question ID : 630680407448
Option 1 ID : 6306801588733
Option 2 ID : 6306801588730
Option 3 ID : 6306801588731
Option 4 ID : 6306801588732
Status : Answered
Chosen Option : 3

Q.12 Who among the following is NOT a vocalist?

- Ans 1. Pt. Kumar Gandharva
 2. Pt. Shiv Kumar Sharma
 3. Pt. Bhimsen Joshi
 4. Gangubai Hangal

Question ID : 630680409335
Option 1 ID : 6306801596172
Option 2 ID : 6306801596171
Option 3 ID : 6306801596169
Option 4 ID : 6306801596170
Status : Answered
Chosen Option : 2

Q.13 Arrange the following battles fought during Mughal period in correct chronological order.

- a. Battle of Khanwa
b. First battle of Panipat
c. Battle of Ghaghra
d. Battle of Chausa

- Ans 1. a, c, b, d
 2. d, a, b, c
 3. c, a, d, b
 4. b, a, c, d

Question ID : 630680184289
Option 1 ID : 630680714166
Option 2 ID : 630680714168
Option 3 ID : 630680714167
Option 4 ID : 630680714165
Status : Answered
Chosen Option : 2

Q.14 What kind of energy does a yo-yo have before it is released?

- Ans 1. Kinetic energy
 2. Chemical energy
 3. Light energy
 4. Potential energy

Question ID : 63068076931
Option 1 ID : 630680297821
Option 2 ID : 630680297823
Option 3 ID : 630680297824
Option 4 ID : 630680297822
Status : Not Answered
Chosen Option : --

Q.15 The book Godaan was authored by _____ in 1936.

- Ans 1. Munshi Premchand
 2. Mulk Raj Anand
 3. Jawaharlal Nehru
 4. Mahatma Gandhi

Question ID : 630680701389
Option 1 ID : 6306802747493
Option 2 ID : 6306802747494
Option 3 ID : 6306802747496
Option 4 ID : 6306802747495
Status : Answered
Chosen Option : 1

Q.16 _____ was the first fast bowler who was the Indian test team captain.

- Ans 1. Zaheer Khan
 2. Javagal Srinath
 3. Kapil Dev
 4. Jaspreet Bumrah

Question ID : 630680177038
Option 1 ID : 630680686358
Option 2 ID : 630680686359
Option 3 ID : 630680686356
Option 4 ID : 630680686357
Status : Not Answered
Chosen Option : --

Q.17 Mohan Veena player Pandit Vishwa Mohan Bhatt won the Grammy Award in the year _____.

- Ans 1. 1992
 2. 1990
 3. 1994
 4. 1996

Question ID : 630680409260
Option 1 ID : 6306801595870
Option 2 ID : 6306801595869
Option 3 ID : 6306801595871
Option 4 ID : 6306801595872
Status : Not Answered
Chosen Option : --

Q.18 'Along The Red River: A Memoir' is a book about the life of _____.

- Ans 1. Nirupama Borgohain
 2. Sabita Goswami
 3. Mitra Phukan
 4. Pushpalata Das

Question ID : 630680409381
Option 1 ID : 6306801596355
Option 2 ID : 6306801596354
Option 3 ID : 6306801596356
Option 4 ID : 6306801596353
Status : Not Answered
Chosen Option : --

Q.19 Which of the following leaders had gone to Lucknow to invite Mahatma Gandhi to see the plight of the peasants in Champaran?

- Ans 1. Raj Kumar Shukla
 2. Hasan Mohani
 3. JB Kripalani
 4. Rajendra Prasad

Question ID : 630680412423
Option 1 ID : 6306801608517
Option 2 ID : 6306801608518
Option 3 ID : 6306801608515
Option 4 ID : 6306801608516
Status : Answered
Chosen Option : 1

Q.20 Garlic is good source of:

- Ans 1. iron and copper
 2. manganese and selenium
 3. zinc and cobalt
 4. magnesium and aluminium

Question ID : 630680407535
Option 1 ID : 6306801589080
Option 2 ID : 6306801589079
Option 3 ID : 6306801589081
Option 4 ID : 6306801589078
Status : Not Answered
Chosen Option : --

Q.21 Montane forests have which of the following types of wildlife species?

- Ans 1. Sloth
 2. Scorpion
 3. Yak
 4. Snail

Question ID : 630680869488
Option 1 ID : 6306803405386
Option 2 ID : 6306803405387
Option 3 ID : 6306803405385
Option 4 ID : 6306803405388
Status : Not Answered
Chosen Option : --

Q.22 Which river originates south of the equator and flows north through north-eastern Africa to drain into the Mediterranean Sea?

- Ans 1. Congo River
 2. Nile River
 3. Amazon River
 4. Lena River

Question ID : 63068076888
Option 1 ID : 630680297652
Option 2 ID : 630680297649
Option 3 ID : 630680297650
Option 4 ID : 630680297651
Status : Not Answered
Chosen Option : --

Q.23 Ashoka sent his son Mahendra and daughter Sanghmitra to spread the message of Dhamma to which of the following countries?

- Ans
- 1. Sri Lanka
 - 2. Burma
 - 3. Afghanistan
 - 4. China

Question ID : 630680412353
Option 1 ID : 6306801608238
Option 2 ID : 6306801608235
Option 3 ID : 6306801608237
Option 4 ID : 6306801608236
Status : Answered
Chosen Option : 1

Q.24 Who has the power to make law and policies for the country, as per the Indian Constitution?

- Ans
- 1. Political pressure groups
 - 2. The Prime Minister
 - 3. Political parties
 - 4. The Parliament

Question ID : 630680408296
Option 1 ID : 6306801592079
Option 2 ID : 6306801592082
Option 3 ID : 6306801592080
Option 4 ID : 6306801592081
Status : Answered
Chosen Option : 4

Q.25 Which article of the Indian Constitution deals with the Union Executive?

- Ans
- 1. Article 38 to 50
 - 2. Article 52 to 78
 - 3. Article 80 to 86
 - 4. Article 112 to 118

Question ID : 630680408213
Option 1 ID : 6306801591747
Option 2 ID : 6306801591749
Option 3 ID : 6306801591748
Option 4 ID : 6306801591750
Status : Not Answered
Chosen Option : --

Q.26 Name the white precipitate formed in the reaction of sodium sulphate and barium chloride.

- Ans
- 1. Barium hydroxide
 - 2. Barium sulphate
 - 3. Sodium chloride
 - 4. Sodium oxide

Question ID : 630680310223
Option 1 ID : 6306801207023
Option 2 ID : 6306801207024
Option 3 ID : 6306801207021
Option 4 ID : 6306801207022
Status : Not Answered
Chosen Option : --

Q.27 The minimum strength of the Council of Ministers in a state as per the Indian Constitution is _____ .

- Ans
- 1. 15 persons
 - 2. 13 persons
 - 3. 14 persons
 - 4. 12 persons

Question ID : 630680408323
Option 1 ID : 6306801592190
Option 2 ID : 6306801592188
Option 3 ID : 6306801592189
Option 4 ID : 6306801592187
Status : Not Answered
Chosen Option : --

Q.28 Which vitamin is involved in red blood cell formation, neurological function and DNA synthesis?

- Ans
- 1. Vitamin K
 - 2. Vitamin B7
 - 3. Vitamin E
 - 4. Vitamin B12

Question ID : 630680407470
Option 1 ID : 6306801588821
Option 2 ID : 6306801588820
Option 3 ID : 6306801588818
Option 4 ID : 6306801588819
Status : Not Answered
Chosen Option : --

Q.29 Bundu Khan was a _____ player of Delhi gharana.

- Ans
- 1. sarangi
 - 2. sarod
 - 3. flute
 - 4. santoor

Question ID : 630680409249
Option 1 ID : 6306801595828
Option 2 ID : 6306801595825
Option 3 ID : 6306801595826
Option 4 ID : 6306801595827
Status : Answered
Chosen Option : 1

Q.30 The International Olympic Committee was established in the year _____ .

- Ans
- 1. 1894
 - 2. 1892
 - 3. 1896
 - 4. 1890

Question ID : 630680192730
Option 1 ID : 630680747467
Option 2 ID : 630680747466
Option 3 ID : 630680747468
Option 4 ID : 630680747465
Status : Not Answered
Chosen Option : --

Q.31 What is the literacy rate in India as per the Census of 2011?

- Ans
- 1. 16.68%
 - 2. 65.46%
 - 3. 82.14%
 - 4. 72.98%

Question ID : 630680409709
Option 1 ID : 6306801597668
Option 2 ID : 6306801597667
Option 3 ID : 6306801597665
Option 4 ID : 6306801597666
Status : Answered
Chosen Option : 2

Q.32 The RBI act provides for how many members in RBI Monetary Policy Committee (MPC)?

- Ans
- 1. 6
 - 2. 4
 - 3. 8
 - 4. 5

Question ID : 630680407149
Option 1 ID : 6306801587540
Option 2 ID : 6306801587538
Option 3 ID : 6306801587541
Option 4 ID : 6306801587539
Status : Not Answered
Chosen Option : --

Q.33 Growth, as envisaged in the five-year plans, refers to:

- Ans
- 1. improvement in the state of equity in the country
 - 2. improvement in the level of education and primary health in the country
 - 3. self-reliance in producing all goods and services it requires, within its geographical boundaries
 - 4. increase in the country's capacity to produce the output of goods and services within the country

Question ID : 630680407129
Option 1 ID : 6306801587458
Option 2 ID : 6306801587460
Option 3 ID : 6306801587461
Option 4 ID : 6306801587459
Status : Answered
Chosen Option : 1

Q.34 What is the number of protons present in beryllium.

- Ans
- 1. 1
 - 2. 4
 - 3. 3
 - 4. 2

Question ID : 630680133821
Option 1 ID : 630680518225
Option 2 ID : 630680518223
Option 3 ID : 630680518224
Option 4 ID : 630680518222
Status : Answered
Chosen Option : 3

Q.35 Who among the following founded the Ramakrishna Mission to carry on humanitarian and social work?

- Ans
- 1. Debendranath Tagore
 - 2. Swami Vivekananda
 - 3. Ishwar Chandra Vidyasagar
 - 4. Aurobindo Ghosh

Question ID : 630680326446
Option 1 ID : 6306801269875
Option 2 ID : 6306801269876
Option 3 ID : 6306801269873
Option 4 ID : 6306801269874
Status : Answered
Chosen Option : 3

Q.36 Which of the following statements are correct in the context of the Indian Constitution?

1. There are three major organs of the government, namely Legislature, Executive and Judiciary.
2. A separation of functions rather than powers is followed.
3. All organs of the government are independent.

- Ans
- 1. 1, 2 and 3
 - 2. 1 and 3 only
 - 3. 1 and 2 only
 - 4. 2 and 3 only

Question ID : 630680296974
Option 1 ID : 6306801155462
Option 2 ID : 6306801155460
Option 3 ID : 6306801155459
Option 4 ID : 6306801155461
Status : Not Answered
Chosen Option : --

Q.37 Which festival is celebrated as the birth of Lord Krishna?

- Ans
- 1. Janmashtami
 - 2. Navratri
 - 3. Diwali
 - 4. Ganesh Chaturthi

Question ID : 630680409210
Option 1 ID : 6306801595671
Option 2 ID : 6306801595669
Option 3 ID : 6306801595672
Option 4 ID : 6306801595670
Status : Answered
Chosen Option : 1

Q.38 Which of the following awards is NOT given in the field of dance and music?

- Ans
- 1. Kalidas Samman
 - 2. Sangeet Natak Akademi Award
 - 3. Dronacharya Award
 - 4. Mahari Award

Question ID : 630680305931
Option 1 ID : 6306801190077
Option 2 ID : 6306801190078
Option 3 ID : 6306801190080
Option 4 ID : 6306801190079
Status : Answered
Chosen Option : 3

Q.39 Which wave oscillates parallel to the motion of the sound wave?

- Ans
- 1. Transverse wave
 - 2. Electromagnetic wave
 - 3. Mechanical wave
 - 4. Longitudinal wave

Question ID : 63068076938
Option 1 ID : 630680297851
Option 2 ID : 630680297849
Option 3 ID : 630680297850
Option 4 ID : 630680297852
Status : Answered
Chosen Option : 1

Q.40 Sangeet Majumdar was felicitated by Casa De La, Spain for her contribution to which of the following Indian Classical Dances?

- Ans
- 1. Kathak
 - 2. Mohiniyattam
 - 3. Bharatanatyam
 - 4. Kuchipudi

Question ID : 630680409344
Option 1 ID : 6306801596207
Option 2 ID : 6306801596206
Option 3 ID : 6306801596205
Option 4 ID : 6306801596208
Status : Not Answered
Chosen Option : --

Q.41 How many major ports are there in India for maritime transportation?

- Ans
- 1. 13
 - 2. 21
 - 3. 18
 - 4. 15

Question ID : 630680409728
Option 1 ID : 6306801597741
Option 2 ID : 6306801597744
Option 3 ID : 6306801597743
Option 4 ID : 6306801597742
Status : Not Answered
Chosen Option : --

Q.42 The _____ is/are given for outstanding performance in sports and games over a period of the previous four years and for showing qualities of leadership, sportsmanship and a sense of discipline.

- Ans
- 1. Arjuna Awards
 - 2. Rashtriya Khel Protsahan Puraskar
 - 3. Dronacharya Awards
 - 4. Maulana Abul Kalam Azad (MAKA) Trophy

Question ID : 630680303674
Option 1 ID : 6306801181265
Option 2 ID : 6306801181267
Option 3 ID : 6306801181266
Option 4 ID : 6306801181268
Status : Answered
Chosen Option : 1

Q.43 Which of the following classical dance forms was initiated by Srimant Shankardev, a Vaishnava saint?

- Ans
- 1. Manipuri
 - 2. Odissi
 - 3. Sattriya
 - 4. Kathak

Question ID : 630680309145
Option 1 ID : 6306801202757
Option 2 ID : 6306801202758
Option 3 ID : 6306801202760
Option 4 ID : 6306801202759
Status : Answered
Chosen Option : 3

Q.44 Which of the following was NOT one of the factors leading to the economic reforms in 1991?

- Ans
- 1. There was inflation in the economy.
 - 2. There was a fall in India's foreign reserves.
 - 3. There was a rise in the fiscal deficit of the country.
 - 4. There was stagflation in the economy.

Question ID : 630680407176
Option 1 ID : 6306801587647
Option 2 ID : 6306801587649
Option 3 ID : 6306801587648
Option 4 ID : 6306801587646
Status : Not Answered
Chosen Option : --

Q.45 Article 50 of the Constitution of India refers to the _____.

- Ans
- 1. reservation of seats
 - 2. separation of judiciary from executive
 - 3. right to elementary education
 - 4. appointment of Governor

Question ID : 630680408207
Option 1 ID : 6306801591723
Option 2 ID : 6306801591726
Option 3 ID : 6306801591724
Option 4 ID : 6306801591725
Status : Not Answered
Chosen Option : --

Q.46 Which of the following foods generally increase blood pressure?

- Ans
- 1. Food with low salt and low sugar
 - 2. Food high in protein
 - 3. Food high in fibre
 - 4. Food high in salt, sugar and saturated or trans fats

Question ID : 630680102292
Option 1 ID : 630680397454
Option 2 ID : 630680397452
Option 3 ID : 630680397453
Option 4 ID : 630680397451
Status : Not Answered
Chosen Option : --

Q.47 How many members (elected and nominated) were there in the Council of State under the Government of India Act 1919 passed by the Parliament of the United Kingdom to expand participation of Indians in the government of India?

- Ans
- 1. 70
 - 2. 50
 - 3. 75
 - 4. 60

Question ID : 630680118821
Option 1 ID : 630680460388
Option 2 ID : 630680460386
Option 3 ID : 630680460389
Option 4 ID : 630680460387
Status : Not Answered
Chosen Option : --

Q.48 Who among the following was first female swimmer to win seven medals at a single Olympics, in Tokyo Olympics-2020?

- Ans
- 1. Kylie Masse
 - 2. Mary Hanna
 - 3. Regan Smith
 - 4. Emma McKeon

Question ID : 630680192722
Option 1 ID : 630680747435
Option 2 ID : 630680747434
Option 3 ID : 630680747436
Option 4 ID : 630680747433
Status : Not Answered
Chosen Option : --

Q.49 निम्नलिखित में से कौन-सी घटना, भारत में मानसून से संबंधित नहीं है?

- Ans
- 1. अरब सागर शाखा
 - 2. वर्षा अंतराल
 - 3. बादल फटना
 - 4. पश्चिमी विक्षोभ

Question ID : 630680409671
Option 1 ID : 6306801597514
Option 2 ID : 6306801597515
Option 3 ID : 6306801597513
Option 4 ID : 6306801597516
Status : Answered
Chosen Option : 2

Q.50 Who among the following was awarded the Bharat Ratna for his contribution to the Green Revolution in India?

- Ans
- 1. APJ Abdul Kalam
 - 2. C Subramaniam
 - 3. Govind Ballabh Pant
 - 4. PV Kane

Question ID : 630680407187
Option 1 ID : 6306801587692
Option 2 ID : 6306801587691
Option 3 ID : 6306801587690
Option 4 ID : 6306801587693
Status : Not Answered
Chosen Option : --

Section : Quantitative Aptitude

Q.1

The value of $\frac{1}{2^2} + \frac{1}{2^3} \div \left(\frac{1}{2} + \frac{1}{2} \div 1\right) + 3\frac{1}{3} \div \frac{5}{2} \times \frac{3}{4} \div 6\frac{2}{3} \times \frac{7}{6}$ is:

- Ans
- 1. $\frac{7}{40}$
 - 2. $\frac{21}{20}$
 - 3. $\frac{11}{20}$
 - 4. $\frac{11}{30}$

Question ID : 630680427960
Option 1 ID : 6306801669885
Option 2 ID : 6306801669887
Option 3 ID : 6306801669884
Option 4 ID : 6306801669886
Status : Answered
Chosen Option : 3

Q.2 The population of a town increases annually by 20%. If the present population is 80lakh, then what is the difference between the population three years ago and 2years ago?

- Ans 1. 925925.93
 2. 85592.6
 3. 65592.6
 4. 75592.6

Question ID : 630680107409
Option 1 ID : 630680417003
Option 2 ID : 630680417002
Option 3 ID : 630680417001
Option 4 ID : 630680417000
Status : Not Answered
Chosen Option : --

Q.3 The height of a cylinder is 8 cm, and its area of the base is 20 cm^2 . Find its volume?

- Ans 1. 80 cm^3
 2. 180 cm^3
 3. 160 cm^3
 4. 100 cm^3

Question ID : 630680421561
Option 1 ID : 6306801644708
Option 2 ID : 6306801644710
Option 3 ID : 6306801644709
Option 4 ID : 6306801644707
Status : Answered
Chosen Option : 3

Q.4 Rajan and Rajat can do a work in 64 days and 48 days, respectively. Starting with Rajat, they work on alternate days. In how many days will the work be completed?

- Ans 1. 55
 2. $54\frac{3}{4}$
 3. 54
 4. $55\frac{3}{4}$

Question ID : 630680428409
Option 1 ID : 6306801671682
Option 2 ID : 6306801671681
Option 3 ID : 6306801671680
Option 4 ID : 6306801671683
Status : Answered
Chosen Option : 2

Q.5 The secant CD intersects the circle at E and CF is tangent to the circle at F. If the length of the secant CD is equal to 20 cm and the length of tangent CF is 15 cm, find the length of the chord DE.

- Ans** 1. 8.75 cm
 2. 11.25 cm
 3. 9.25 cm
 4. 3.75 cm

Question ID : 630680421379
Option 1 ID : 6306801643979
Option 2 ID : 6306801643980
Option 3 ID : 6306801643982
Option 4 ID : 6306801643981
Status : Answered
Chosen Option : 1

Q.6 Melting a metal ball of radius 3 units, 27 identical dice and a ball of radius 1 units are made. What is the side of dice?

- Ans** 1. 1.7 units
 2. 1.5 units
 3. 1.4 units
 4. 1.6 units

Question ID : 63068076302
Option 1 ID : 630680295311
Option 2 ID : 630680295310
Option 3 ID : 630680295312
Option 4 ID : 630680295309
Status : Not Answered
Chosen Option : --

Q.7 Simplify the given expression.

$$12.3 - [7 + 0.8 \text{ of } (5.6 - 3.8 \times 1.03)]$$

- Ans** 1. 1.2368
 2. 7.8539
 3. 5.2314
 4. 3.9512

Question ID : 630680428050
Option 1 ID : 6306801670247
Option 2 ID : 6306801670244
Option 3 ID : 6306801670245
Option 4 ID : 6306801670246
Status : Not Answered
Chosen Option : --

Q.8 If $\frac{5x+3y}{5x-3y} = \frac{7}{3}$, then find x : y.

- Ans
- 1. 2 : 3
 - 2. 5 : 3
 - 3. 3 : 2
 - 4. 3 : 5

Question ID : 630680428418
Option 1 ID : 6306801671717
Option 2 ID : 6306801671719
Option 3 ID : 6306801671718
Option 4 ID : 6306801671716

Status : Answered

Chosen Option : 3

Q.9 A dishonest dealer sells an article at a 10% loss on the cost price but uses a weight of 40 g instead of 50 g. What is his percentage of profit?

- Ans
- 1. 12.5%
 - 2. 10.0%
 - 3. 11.5%
 - 4. 18.4%

Question ID : 630680429116
Option 1 ID : 6306801674510
Option 2 ID : 6306801674511
Option 3 ID : 6306801674508
Option 4 ID : 6306801674509

Status : Answered

Chosen Option : 1

Q.10 The total percentage change in the volume of a cuboid if its length and breadth are decreased by 15% and 25%, respectively, while its height is increased by 60% is:

- Ans
- 1. 5% decrease
 - 2. 2% decrease
 - 3. 2% increase
 - 4. 5% increase

Question ID : 630680428905
Option 1 ID : 6306801673665
Option 2 ID : 6306801673666
Option 3 ID : 6306801673664
Option 4 ID : 6306801673667

Status : Answered

Chosen Option : 3

Q.11

If $x + \frac{1}{1 + \frac{1}{3 + \frac{1}{2}}} = 1$, then the value of x is equal to:

Ans

✓ 1. $\frac{2}{9}$

✗ 2. $\frac{1}{7}$

✗ 3. $\frac{7}{9}$

✗ 4. $\frac{3}{7}$

Question ID : 630680428268

Option 1 ID : 6306801671116

Option 2 ID : 6306801671117

Option 3 ID : 6306801671119

Option 4 ID : 6306801671118

Status : Not Answered

Chosen Option : --

Q.12 A man rows 48 km and back in 48 hours. He can row 4 km with the stream in the same time as 3 km against the stream. The speed of the stream (in km/h) is:

Ans

✗ 1. $\frac{7}{21}$

✗ 2. $\frac{3}{29}$

✗ 3. $\frac{5}{21}$

✓ 4. $\frac{7}{24}$

Question ID : 630680428812

Option 1 ID : 6306801673292

Option 2 ID : 6306801673295

Option 3 ID : 6306801673294

Option 4 ID : 6306801673293

Status : Not Answered

Chosen Option : --

Q.13 The breadth of a rectangular lawn is decreased by 8% and its length is increased by 15%. Find the percentage change in the lawn area.

Ans ✗ 1. 8.5% decrease

✗ 2. 8.5% increase

✗ 3. 5.8% decrease

✓ 4. 5.8% increase

Question ID : 630680428146

Option 1 ID : 6306801670631

Option 2 ID : 6306801670629

Option 3 ID : 6306801670630

Option 4 ID : 6306801670628

Status : Answered

Chosen Option : 4

Q.14 The in-radius of a triangle is 8 cm, and the sum of the lengths of its sides is 125 cm. The area of the triangle (in cm^2) is

- Ans
- 1. 480
 - 2. 250
 - 3. 500
 - 4. 1000

Question ID : 630680421364
Option 1 ID : 6306801643921
Option 2 ID : 6306801643922
Option 3 ID : 6306801643920
Option 4 ID : 6306801643919
Status : Answered
Chosen Option : 3

Q.15 If $\sin(x+y) = \cos\{3(x+y)\}$, then, the value of $\cot\{2(x+y)\}$ is _____.

- Ans
- 1. 2
 - 2. 1
 - 3. -1
 - 4. -2

Question ID : 630680869589
Option 1 ID : 6306803405738
Option 2 ID : 6306803405740
Option 3 ID : 6306803405739
Option 4 ID : 6306803405741
Status : Not Answered
Chosen Option : --

Q.16 The value of $\frac{2\cos 15^\circ \sin 15^\circ}{\cos^2 15^\circ - \sin^2 15^\circ}$ is:

- Ans
- 1. $\frac{1}{\sqrt{3}}$
 - 2. $\sqrt{3}$
 - 3. $\frac{\sqrt{5}-1}{\sqrt{5}+1}$
 - 4. ∞

Question ID : 630680869597
Option 1 ID : 6306803405772
Option 2 ID : 6306803405770
Option 3 ID : 6306803405771
Option 4 ID : 6306803405773
Status : Answered
Chosen Option : 1

Q.17 Study the given table and answer the question that follows.

The table shows the production of five different types of cars by a company from 1989 to 1994.

Year → Type ↓	1989	1990	1991	1992	1993	1994	Total
P	8	20	16	17	21	6	88
Q	16	10	14	12	12	14	78
R	21	17	16	15	13	8	90
S	4	6	10	16	20	31	87
T	25	18	19	30	14	27	133
Total	74	71	75	90	80	86	476

Which type of car constituted 25% of the total production of all types of cars in 1993?

- Ans
- 1. R
 - 2. Q
 - 3. P
 - 4. S

Question ID : 630680428278
Option 1 ID : 6306801671158
Option 2 ID : 6306801671157
Option 3 ID : 6306801671156
Option 4 ID : 6306801671159

Status : Answered

Chosen Option : 4

Q.18 The value of $\frac{7 + 8 \times 8 \div 8 \text{ of } 8 + 8 \div 8 \times 5}{4 \div 4 \text{ of } 4 + 4 \times 4 \div 4 - 4 \div 4}$ is::

- Ans
- 1. 4
 - 2. 3
 - 3. 2
 - 4. 1

Question ID : 630680428082
Option 1 ID : 6306801670375
Option 2 ID : 6306801670374
Option 3 ID : 6306801670373
Option 4 ID : 6306801670372

Status : Answered

Chosen Option : 1

Q.19

The value of $\frac{(275 \times 275 \times 275 + 725 \times 725 \times 725)}{(275 \times 275 + 725 \times 725 - 725 \times 275)} \times \frac{(275 \times 275 \times 275 - 725 \times 725 \times 725)}{(275 \times 275 + 725 \times 725 + 725 \times 275)}$ is:

- Ans
- 1. -45000
 - 2. 450000
 - 3. 45000
 - 4. -450000

Question ID : 630680107182

Option 1 ID : 630680416114

Option 2 ID : 630680416115

Option 3 ID : 630680416113

Option 4 ID : 630680416112

Status : Answered

Chosen Option : 4

Q.20

If $x^2 + 4y^2 + 2x + 1 = 0$, then find the value of $x^{39} + y^{36}$.

- Ans
- 1. 1
 - 2. -1
 - 3. 2
 - 4. -2

Question ID : 630680413585

Option 1 ID : 6306801613164

Option 2 ID : 6306801613165

Option 3 ID : 6306801613166

Option 4 ID : 6306801613167

Status : Answered

Chosen Option : 2

Q.21 The value of $(12 + 18) \div 2 - 11 + 16 \times 4 - 28 + 13(-18 + 15)$ is:

- Ans
- 1. 3
 - 2. 0
 - 3. 1
 - 4. 2

Question ID : 630680428204

Option 1 ID : 6306801670863

Option 2 ID : 6306801670860

Option 3 ID : 6306801670861

Option 4 ID : 6306801670862

Status : Answered

Chosen Option : 3

Q.22 A trader gives a 40% discount on his goods. Further, he gives 20% discount on the goods. Find the single discount equivalent to these two successive discounts.

- Ans
- 1. 30%
 - 2. 60%
 - 3. 50%
 - 4. 52%

Question ID : 630680428577
Option 1 ID : 6306801672354
Option 2 ID : 6306801672352
Option 3 ID : 6306801672355
Option 4 ID : 6306801672353
Status : Answered
Chosen Option : 4

Q.23 The area of a triangle is 486 cm^2 and its sides are in the ratio 3:4:5. The perimeter of the triangle is:

- Ans
- 1. 108 cm
 - 2. 308 cm
 - 3. 218 cm
 - 4. 105 cm

Question ID : 630680421616
Option 1 ID : 6306801644927
Option 2 ID : 6306801644930
Option 3 ID : 6306801644928
Option 4 ID : 6306801644929
Status : Not Answered
Chosen Option : --

Q.24 A drink is made by mixing water and juice in the ratio 9 : 7. If x litres of water and $2x$ litres of juice are mixed in 160 litres of drink, then the new ratio becomes 13 : 15. The quantity of drink (in litres) is:

- Ans
- 1. 240
 - 2. 280
 - 3. 300
 - 4. 260

Question ID : 630680422102
Option 1 ID : 6306801646843
Option 2 ID : 6306801646844
Option 3 ID : 6306801646845
Option 4 ID : 6306801646846
Status : Answered
Chosen Option : 2

Q.25 Study the given table and answer the question that follows.

The table shows the number of voters at three different centres A, B, C.

Centre	Total number of registered voters	Percentage of people who voted (Out of the total number of registered voters)
A	4600	78
B	5400	70
C	6500	85

Number of people who did not vote at centre B is what percentage more than those who did not vote at centre C?

- Ans
- 1. $66\frac{3}{13}\%$
 - 2. $66\frac{1}{13}\%$
 - 3. $66\frac{2}{13}\%$
 - 4. $66\frac{5}{13}\%$

Question ID : 630680428313
Option 1 ID : 6306801671297
Option 2 ID : 6306801671296
Option 3 ID : 6306801671298
Option 4 ID : 6306801671299
Status : Answered
Chosen Option : 3

Q.26 Simplify $\frac{\tan 71^\circ + \tan 19^\circ}{1 - \tan 71^\circ \tan 19^\circ}$.

- Ans
- 1. 0
 - 2. $\sqrt{3}$
 - 3. Not defined
 - 4. 1

Question ID : 630680869598
Option 1 ID : 6306803405774
Option 2 ID : 6306803405776
Option 3 ID : 6306803405777
Option 4 ID : 6306803405775
Status : Answered
Chosen Option : 3

Q.27 The following table gives the number of males, females, educated males and educated females in a village over the years 2016 - 2020. Study the table carefully and answer the question.

Year / No.	2016	2017	2018	2019	2020
Males	1050	1200	1250	1300	1400
Females	900	1000	1020	1100	1200
Educated males	850	1000	1100	1150	1200
Educated females	600	820	950	980	1000

Find the percentage of the total number of educated females to the total number of females over all the years (up to 2 decimal places).

- Ans
- 1. 0.9233
 - 2. 0.8623
 - 3. 0.8333
 - 4. 0.8923

Question ID : 630680869712
Option 1 ID : 6306803406214
Option 2 ID : 6306803406216
Option 3 ID : 6306803406215
Option 4 ID : 6306803406217
Status : Not Answered
Chosen Option : --

Q.28 Simplify $63 - [15 + \{17 - (9 - 7 + 1)\}]$.

- Ans
- 1. 44
 - 2. 40
 - 3. 34
 - 4. 30

Question ID : 630680428123
Option 1 ID : 6306801670539
Option 2 ID : 6306801670536
Option 3 ID : 6306801670538
Option 4 ID : 6306801670537
Status : Answered
Chosen Option : 3

Q.29 The distance between two stations A and B is 800 km. A train covers the journey from A to B at a speed of 90 km/h and returns to A with a uniform speed of 65 km/h. Find the average speed of train during the whole journey (in km/h)?

- Ans
- 1. 75.48
 - 2. 70.45
 - 3. 82.36
 - 4. 80.50

Question ID : 630680428645
Option 1 ID : 6306801672625
Option 2 ID : 6306801672626
Option 3 ID : 6306801672627
Option 4 ID : 6306801672624
Status : Answered
Chosen Option : 1

Q.30 Find the value of the following expression.

$$(1 + \tan \theta + \sec \theta) \times (1 + \cot \theta - \operatorname{cosec} \theta)$$

Ans 1. $\cos \theta \sin \theta$

2. 1

3. 2

4. $\tan \theta$

Question ID : 630680349843

Option 1 ID : 6306801361661

Option 2 ID : 6306801361663

Option 3 ID : 6306801361664

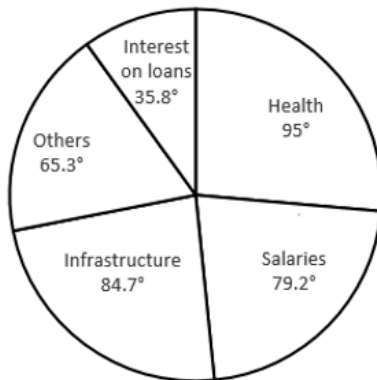
Option 4 ID : 6306801361662

Status : Answered

Chosen Option : 3

Q.31 Study the given pie-graph and answer the question that follows.

In a certain company, allocations to various sectors of the yearly budget per ₹7,200 crores are represented by this pie-diagram.



The expenditure (in ₹) on Infrastructure is:

Ans 1. ₹6,098 crores

2. ₹1,649 crores

3. ₹6,089 crores

4. ₹1,694 crores

Question ID : 630680387894

Option 1 ID : 6306801512198

Option 2 ID : 6306801512199

Option 3 ID : 6306801512200

Option 4 ID : 6306801512201

Status : Not Answered

Chosen Option : --

Q.32 The following table shows the shares traded on Mumbai, Rajasthan, Uttar Pradesh and Uttarakhand stock exchanges:

Name of the company	Mumbai		Uttarakhand		Rajasthan		Uttar Pradesh	
	High	Low	High	Low	High	Low	High	Low
Aata tea	540	395	450	4255	320	510	440	310
Kolgate	34	57	60	42	25	60	20	70
Jmibuja cement	150	155	120	125	160	135	145	170

For Jmibuja cement, the ratio of the high rate of share to the low rate is maximum in the stock exchange at:

- Ans**
- 1. Rajasthan
 - 2. Mumbai
 - 3. Uttar Pradesh
 - 4. Uttarakhand

Question ID : 630680429252

Option 1 ID : 6306801675054

Option 2 ID : 6306801675052

Option 3 ID : 6306801675055

Option 4 ID : 6306801675053

Status : Answered

Chosen Option : 1

Q.33 18 students of a class took part in a quiz. If the number of girls is 8 more than the number of boys, find the product of the number of boys and girls.

- Ans**
- 1. 63
 - 2. 36
 - 3. 56
 - 4. 65

Question ID : 630680413578

Option 1 ID : 6306801613139

Option 2 ID : 6306801613138

Option 3 ID : 6306801613136

Option 4 ID : 6306801613137

Status : Answered

Chosen Option : 4

Q.34 If $a + b + c = 13$ and $ab + bc + ca = 22$, then the value of $a^3 + b^3 + c^3 - 3abc$ is _____.

- Ans**
- 1. 1225
 - 2. 1625
 - 3. 1339
 - 4. 1911

Question ID : 630680413554

Option 1 ID : 6306801613041

Option 2 ID : 6306801613042

Option 3 ID : 6306801613040

Option 4 ID : 6306801613043

Status : Answered

Chosen Option : 3

Q.35 A hostel had food provision for 300 students for a month. After 20 days, 50 students left the hostel. How long would the remaining food last? (1 month = 30 days)

- Ans
- 1. 14 days
 - 2. 12 days
 - 3. 10 days
 - 4. 16 days

Question ID : 630680428856
Option 1 ID : 6306801673469
Option 2 ID : 6306801673470
Option 3 ID : 6306801673468
Option 4 ID : 6306801673471
Status : Answered
Chosen Option : 2

Q.36 A person bought two buffaloes for ₹11,520. One is sold at a loss of 15% and the other is sold at a gain of 19%. If the selling price of both buffaloes is equal, find the cost price of the first one.

- Ans
- 1. ₹6,700
 - 2. ₹6,720
 - 3. ₹6,710
 - 4. ₹6,715

Question ID : 630680869695
Option 1 ID : 6306803406147
Option 2 ID : 6306803406149
Option 3 ID : 6306803406146
Option 4 ID : 6306803406148
Status : Answered
Chosen Option : 2

Q.37 If the simple interest on a certain sum of money for 20 months at the rate of 19.2% per annum exceeds the simple interest on the same sum for 15 months at the rate of 11.2% p.a. by ₹2,920, then what is the sum (in ₹, to the nearest hundreds)?

- Ans
- 1. 16,620
 - 2. 12,660
 - 3. 16,660
 - 4. 16,200

Question ID : 630680428009
Option 1 ID : 6306801670082
Option 2 ID : 6306801670083
Option 3 ID : 6306801670081
Option 4 ID : 6306801670080
Status : Not Answered
Chosen Option : --

Q.38 Find the surface area (in m^2) of a cuboid that is 11 m long, 7 m broad and 4 m high.

- Ans
- 1. 249
 - 2. 289
 - 3. 298
 - 4. 320

Question ID : 630680421627
Option 1 ID : 6306801644971
Option 2 ID : 6306801644972
Option 3 ID : 6306801644973
Option 4 ID : 6306801644974
Status : Answered
Chosen Option : 3

Q.39 The following table shows the Gross Turnover (in Crores) of a company over five years:

Year	Gross Turnover
2015	13
2016	20
2017	15
2018	23
2019	25

The Gross Turnover for 2017 is what per cent of the Gross Turnover for 2019?

- Ans
- 1. 16
 - 2. 60
 - 3. 6
 - 4. 0.06

Question ID : 630680349028
Option 1 ID : 6306801358402
Option 2 ID : 6306801358401
Option 3 ID : 6306801358403
Option 4 ID : 6306801358404
Status : Answered
Chosen Option : 2

Q.40 Find the volume (in cm^3) of a hemisphere of radius 18 cm. (Use $\pi = \frac{22}{7}$) (Rounded off to two decimal places)

- Ans
- 1. 12200.43
 - 2. 12219.43
 - 3. 18750.23
 - 4. 11250.25

Question ID : 630680421554
Option 1 ID : 6306801644682
Option 2 ID : 6306801644681
Option 3 ID : 6306801644679
Option 4 ID : 6306801644680
Status : Answered
Chosen Option : 2

Q.41 A 234 m long train passes a person running at 9 km/h in the opposite direction, in 6 seconds. In how much time (in seconds) will it pass another person who is moving at 23.4 km/h, in the same direction?

- Ans 1. 7.8
 2. 7.2
 3. 8
 4. 8.4

Question ID : 630680869708
Option 1 ID : 6306803406201
Option 2 ID : 6306803406200
Option 3 ID : 6306803406198
Option 4 ID : 6306803406199
Status : Answered
Chosen Option : 1

Q.42 The speed of a boat when travelling downstream is 33 km/h, whereas when travelling upstream it is 27 km/h. What is the speed of the boat in still water?

- Ans 1. 30 km/h
 2. 60 km/h
 3. 12 km/h
 4. 6 km/h

Question ID : 630680428377
Option 1 ID : 6306801671555
Option 2 ID : 6306801671554
Option 3 ID : 6306801671552
Option 4 ID : 6306801671553
Status : Answered
Chosen Option : 1

Q.43 Swati earns a sum of ₹40,000, out of which she saves 25%. She spends the remaining amount on food and education in the ratio of 3 : 2. What is the percentage of expenditure incurred on education to her total income?

- Ans 1. 30%
 2. 60%
 3. 40%
 4. 20%

Question ID : 630680429160
Option 1 ID : 6306801674685
Option 2 ID : 6306801674687
Option 3 ID : 6306801674686
Option 4 ID : 6306801674684
Status : Answered
Chosen Option : 1

Q.44 What is the area of the sector of a circle whose radius is 35 cm and whose arc subtends an angle of 72° at the centre of the circle?

$$\left(\pi = \frac{22}{7}\right)$$

- Ans
- 1. 770 cm²
 - 2. 610 cm²
 - 3. 810 cm²
 - 4. 970 cm²

Question ID : 630680421441
Option 1 ID : 6306801644229
Option 2 ID : 6306801644228
Option 3 ID : 6306801644227
Option 4 ID : 6306801644230

Status : Answered

Chosen Option : 1

Q.45 Simplify:

$$27 \div 4 \text{ of } 6 \times [16 \div 8 \times (12 - 8)] - (14 \div 7 \times 28)$$

- Ans
- 1. 62
 - 2. - 51
 - 3. - 47
 - 4. 27

Question ID : 630680427989
Option 1 ID : 6306801670001
Option 2 ID : 6306801670002
Option 3 ID : 6306801670000
Option 4 ID : 6306801670003

Status : Answered

Chosen Option : 3

Q.46 Taking any three of the line segments out of segments of length 2 cm, 5 cm, 7 cm and 8 cm, the number of triangles that can be formed is:

- Ans
- 1. 1
 - 2. 3
 - 3. 4
 - 4. 2

Question ID : 630680421454
Option 1 ID : 6306801644279
Option 2 ID : 6306801644281
Option 3 ID : 6306801644282
Option 4 ID : 6306801644280

Status : Not Answered

Chosen Option : --

Q.47 The value of $264 \div 8 - 1 - 32 \times 2 + 80 \div 5 \times 40 \div 20$ is:

Ans 1.0

2.1

3.3

4.2

Question ID : 630680428205

Option 1 ID : 6306801670867

Option 2 ID : 6306801670866

Option 3 ID : 6306801670864

Option 4 ID : 6306801670865

Status : Answered

Chosen Option : 1

Q.48 Study the given table and answer the question that follows.

The table shows the yearly production (in thousands) of scooters in five different factories (P, Q, R, S and T) from 1985 to 1989.

Yearly production (in thousands) of scooters in different factories.

Factory	1985	1986	1987	1988	1989
P	20	15	24	13	17
Q	16	23	41	20	15
R	14	21	30	16	12
S	25	17	15	12	22
T	40	32	39	41	35
Total	115	108	149	102	101

The ratio of the production of scooters by factory P to that by factory T in 1985 is:

Ans 1.3 : 2

2.1 : 2

3.2 : 3

4.2 : 1

Question ID : 630680428274

Option 1 ID : 6306801671143

Option 2 ID : 6306801671140

Option 3 ID : 6306801671142

Option 4 ID : 6306801671141

Status : Answered

Chosen Option : 2

Q.49 The marked price of an immersion rod in an electronic store is ₹900. The store offers a discount of 12% on its sale. At what price (in ₹) can a customer buy it from the electronic store?

- Ans
- 1. 782
 - 2. 797
 - 3. 787
 - 4. 792

Question ID : 630680869673
Option 1 ID : 6306803406058
Option 2 ID : 6306803406061
Option 3 ID : 6306803406059
Option 4 ID : 6306803406060
Status : Answered
Chosen Option : 4

Q.50 Sapna is double efficient as compared to Rakesh. If they both work together on a project and complete it in 48 days, then the number of days in which Sapna alone can complete the project is:

- Ans
- 1. 68
 - 2. 72
 - 3. 52
 - 4. $69\frac{1}{2}$

Question ID : 630680869711
Option 1 ID : 6306803406210
Option 2 ID : 6306803406211
Option 3 ID : 6306803406213
Option 4 ID : 6306803406212
Status : Answered
Chosen Option : 2

Section : English Comprehension

Q.1 Select the most appropriate ANTONYM of the underlined word in the following sentence.

The teacher praised the student for his diligent work and consistent effort.

- Ans
- 1. frazzle
 - 2. persistent
 - 3. lazy
 - 4. squander

Question ID : 630680517377
Option 1 ID : 6306802021905
Option 2 ID : 6306802021906
Option 3 ID : 6306802021907
Option 4 ID : 6306802021904
Status : Answered
Chosen Option : 3

Q.2 Select the most appropriate synonym of the underlined word.

I will strive to win the race.

- Ans
- 1. trouble
 - 2. Support
 - 3. Assume
 - 4. Attempt

Question ID : 630680297283
Option 1 ID : 6306801156599
Option 2 ID : 6306801156600
Option 3 ID : 6306801156601
Option 4 ID : 6306801156602
Status : Answered
Chosen Option : 4

Q.3 Select the most appropriate ANTONYM of the given word.
Pitiable

- Ans
- 1. Eradicate
 - 2. Pleasant
 - 3. Grievous
 - 4. Aggregate

Question ID : 630680295216
Option 1 ID : 6306801148590
Option 2 ID : 6306801148591
Option 3 ID : 6306801148588
Option 4 ID : 6306801148589
Status : Not Answered
Chosen Option : --

Q.4 Identify from the given options the word which is similar in meaning to the following word.
Efface

- Ans
- 1. Hidden
 - 2. Makeup
 - 3. Daily
 - 4. Destroy

Question ID : 630680360067
Option 1 ID : 6306801402216
Option 2 ID : 6306801402215
Option 3 ID : 6306801402214
Option 4 ID : 6306801402213
Status : Answered
Chosen Option : 4

Q.5 Select the most appropriate synonym of the underlined word.

I was astonished to know the truth.

- Ans 1. Stunned
 2. Awesome
 3. Blindsided
 4. Sickened

Question ID : 630680297282

Option 1 ID : 6306801156597

Option 2 ID : 6306801156596

Option 3 ID : 6306801156598

Option 4 ID : 6306801156595

Status : Answered

Chosen Option : 1

Q.6 Select the phrase/idiom that will improve the underlined part of the given sentence.

When our principal said she was leaving the company, I played out the opportunity to fill the job.

- Ans 1. glided at the opportunity
 2. jumped at the opportunity
 3. started at the opportunity
 4. ran to the opportunity

Question ID : 630680175905

Option 1 ID : 630680681887

Option 2 ID : 630680681886

Option 3 ID : 630680681885

Option 4 ID : 630680681884

Status : Answered

Chosen Option : 2

Q.7 The following sentence has been split into four segments. Identify the segment that contains a grammatical/spelling error.

The sons of the old farmer / fell off after their father / breathed his last / in the village.

- Ans 1. in the village.
 2. breathed his last
 3. The sons of the old farmer
 4. fell off after their father

Question ID : 630680415351

Option 1 ID : 6306801620154

Option 2 ID : 6306801620153

Option 3 ID : 6306801620151

Option 4 ID : 6306801620152

Status : Answered

Chosen Option : 2

Q.8 Select the most appropriate option with correct usage of the preposition to substitute the underlined segment in the given sentence.

The core part in Artificial Intelligence (AI) is knowledge engineering, machine learning, machine perception, and robotics.

- Ans
- 1. The core part on Artificial Intelligence
 - 2. The core part of Artificial Intelligence
 - 3. The core part from Artificial Intelligence
 - 4. The core part with Artificial Intelligence

Question ID : 630680206721

Option 1 ID : 630680801483

Option 2 ID : 630680801486

Option 3 ID : 630680801485

Option 4 ID : 630680801484

Status : Answered

Chosen Option : 2

Q.9 Select the most appropriate ANTONYM of the given word.
Quaint

- Ans
- 1. Brisk
 - 2. Ridiculous
 - 3. Ordinary
 - 4. Distinct

Question ID : 630680297870

Option 1 ID : 6306801158880

Option 2 ID : 6306801158879

Option 3 ID : 6306801158881

Option 4 ID : 6306801158882

Status : Not Answered

Chosen Option : --

Q.10 Select the sentence that has the correct use of words and spellings from the options given below.

- Ans
- 1. The professional athlete pushed her body to the limit, surpassing all expectations and acheiving a new personal record.
 - 2. The professional athlete pushed her body to the limit, surpassing all expectasions and achieving a new personal record.
 - 3. The professional athlete pushed her body to the limit, surpassing all expectations and acheiving a new personal record.
 - 4. The professional athlete pushed her body to the limit, surpassing all expectations and achieving a new personal record.

Question ID : 630680410006

Option 1 ID : 6306801598853

Option 2 ID : 6306801598855

Option 3 ID : 6306801598856

Option 4 ID : 6306801598854

Status : Answered

Chosen Option : 4

Q.11 Select the most appropriate ANTONYM of the given word.

Languid

- Ans
- 1. Exceptional
 - 2. Lazy
 - 3. Loyal
 - 4. Energetic

Question ID : 630680436156

Option 1 ID : 6306801702566

Option 2 ID : 6306801702565

Option 3 ID : 6306801702568

Option 4 ID : 6306801702567

Status : Not Answered

Chosen Option : --

Q.12 Select the most appropriate meaning of the idiom in the given sentence.
She's feeling under the weather today.

- Ans
- 1. She's feeling happy and energetic.
 - 2. She's feeling adventurous and ready for a challenge.
 - 3. She's feeling worried about something.
 - 4. She's not feeling well or is a bit sick.

Question ID : 630680517346

Option 1 ID : 6306802021780

Option 2 ID : 6306802021783

Option 3 ID : 6306802021782

Option 4 ID : 6306802021781

Status : Answered

Chosen Option : 4

Q.13 Select the option that can be used as a one-word substitute for the given group of words.

Madness or obsession with males

- Ans
- 1. Polygamy
 - 2. Loquacious
 - 3. Misandrist
 - 4. Andromania

Question ID : 630680414926

Option 1 ID : 6306801618448

Option 2 ID : 6306801618450

Option 3 ID : 6306801618449

Option 4 ID : 6306801618447

Status : Answered

Chosen Option : 3

Q.14 Select the INCORRECTLY spelt word.

- Ans
- 1. Assimilation
 - 2. Pluckiness
 - 3. Accumulation
 - 4. Exestenalism

Question ID : 630680409900
Option 1 ID : 6306801598430
Option 2 ID : 6306801598432
Option 3 ID : 6306801598429
Option 4 ID : 6306801598431
Status : Not Answered
Chosen Option : --

Q.15 Select the most appropriate option that can substitute the underlined segment in the given sentence. If no substitution is required, select 'No substitution'.
Not a word didn't they speak to the others about the sad turn of events.

- Ans
- 1. did they speak
 - 2. No substitution
 - 3. do they speak
 - 4. had they speak

Question ID : 630680414506
Option 1 ID : 6306801616783
Option 2 ID : 6306801616786
Option 3 ID : 6306801616784
Option 4 ID : 6306801616785
Status : Answered
Chosen Option : 1

Q.16 Select the most appropriate meaning of the given idiom.

A vicious cycle

- Ans
- 1. a situation in which one problem causes another one, making the original problem impossible to solve.
 - 2. a situation in which one problem causes another one, making the first one easy to solve.
 - 3. a situation in which one problem creates another one, making the original problem easy to forget.
 - 4. a situation in which several problems merge and become one extremely complex problem.

Question ID : 630680517347
Option 1 ID : 6306802021785
Option 2 ID : 6306802021786
Option 3 ID : 6306802021784
Option 4 ID : 6306802021787
Status : Answered
Chosen Option : 1

Q.17 The following sentence has been divided into parts. One of them may contain an error. Select the part that contains the error from the given options. If you don't find any error, mark 'No error' as your answer.

I had done / my cooking when / Vishnu came to see me.

- Ans**
- 1. No error
 - 2. I had done
 - 3. Vishnu came to see me
 - 4. my cooking when

Question ID : 630680184891
Option 1 ID : 630680716528
Option 2 ID : 630680716525
Option 3 ID : 630680716527
Option 4 ID : 630680716526
Status : Answered
Chosen Option : 1

Q.18 Select the option that can be used as a one-word substitute for the given group of words.

A mythological animal with one horn on its forehead

- Ans**
- 1. Unicameral
 - 2. Unipod
 - 3. Unific
 - 4. Unicorn

Question ID : 630680414811
Option 1 ID : 6306801617989
Option 2 ID : 6306801617988
Option 3 ID : 6306801617987
Option 4 ID : 6306801617990
Status : Answered
Chosen Option : 4

Q.19 Select the most appropriate segment to substitute the underlined words in the given sentence.

Mr. Patel is likely to win the elections in the sweeping majority.

- Ans**
- 1. elections by a sweeping majority
 - 2. elections on a sweeping majority
 - 3. elections of a sweeping majority
 - 4. elections at a sweeping majority

Question ID : 630680435974
Option 1 ID : 6306801701853
Option 2 ID : 6306801701855
Option 3 ID : 6306801701854
Option 4 ID : 6306801701856
Status : Answered
Chosen Option : 1

Q.20 Select the option that can be used as a one-word substitute for the given group of words.

One who does not express himself freely.

- Ans
- 1. Approachable
 - 2. Immodest
 - 3. Introvert
 - 4. Outgoing

Question ID : 630680414791
Option 1 ID : 6306801617910
Option 2 ID : 6306801617908
Option 3 ID : 6306801617907
Option 4 ID : 6306801617909
Status : Answered
Chosen Option : 3

Q.21 Select the most appropriate meaning of the given idiom.
The best of both worlds

- Ans
- 1. Everyone gets a chance
 - 2. Stay strong in a difficult situation
 - 3. Do a perfectly good job
 - 4. Good in every way

Question ID : 630680517357
Option 1 ID : 6306802021826
Option 2 ID : 6306802021825
Option 3 ID : 6306802021827
Option 4 ID : 6306802021824
Status : Answered
Chosen Option : 4

Q.22 Select the most appropriate idiom that can substitute the underlined words in the given sentence.

I have been living without a lot of money since I lost my job.

- Ans
- 1. receiving a kickback
 - 2. living hand to mouth
 - 3. keeping my chin up
 - 4. as genuine as a three-dollar bill

Question ID : 630680183590
Option 1 ID : 630680711369
Option 2 ID : 630680711370
Option 3 ID : 630680711372
Option 4 ID : 630680711371
Status : Answered
Chosen Option : 2

Q.23 Identify the INCORRECTLY spelt word in the given sentence and select the option that rectifies the spelling error.

Thousands of years ago, great masters of Ayurveda, notably Sushrut and Charaka, discussed in detail the use of spices for culinary and medical purpose.

- Ans
- 1. Parpose
 - 2. Notably
 - 3. Discused
 - 4. Cullinary

Question ID : 630680517485
Option 1 ID : 6306802022339
Option 2 ID : 6306802022336
Option 3 ID : 6306802022337
Option 4 ID : 6306802022338
Status : Answered
Chosen Option : 2

Q.24 Select the most appropriate option to substitute the underlined segment in the given sentence.

The veteran footballer was expected for reach here by 10 o'clock, the notice said.

- Ans
- 1. expected on reach here
 - 2. expected to reach here
 - 3. expected of reach here
 - 4. expected by reach here

Question ID : 630680414524
Option 1 ID : 6306801616858
Option 2 ID : 6306801616857
Option 3 ID : 6306801616855
Option 4 ID : 6306801616856
Status : Answered
Chosen Option : 2

Q.25 Underlined word in the sentence is not spelt correctly. Identify the correct spelling from the options given below.

The boys seem irresponsibly insaucient about bullying the juniors.

- Ans
- 1. Insouciant
 - 2. Insuociant
 - 3. Insouciant
 - 4. Insouceant

Question ID : 630680409868
Option 1 ID : 6306801598304
Option 2 ID : 6306801598302
Option 3 ID : 6306801598301
Option 4 ID : 6306801598303
Status : Not Answered
Chosen Option : --

Q.26 Select the most appropriate option that can substitute the underlined word in the given idiom.

At the last hour

- Ans
- 1. half
 - 2. eleventh
 - 3. sixth
 - 4. twelfth

Question ID : 630680441961

Option 1 ID : 6306801725452

Option 2 ID : 6306801725450

Option 3 ID : 6306801725453

Option 4 ID : 6306801725451

Status : Answered

Chosen Option : 2

Q.27 Select the most appropriate segment to substitute the underlined words in the given sentence.

The Sumo wrestler seemed to be incapable in being tired.

- Ans
- 1. incapable of being tired
 - 2. incapable from being tired
 - 3. incapable to being tired
 - 4. incapable by being tired

Question ID : 630680436020

Option 1 ID : 6306801702021

Option 2 ID : 6306801702023

Option 3 ID : 6306801702024

Option 4 ID : 6306801702022

Status : Answered

Chosen Option : 1

Q.28 Select the most appropriate option that can substitute the underlined segment in the given sentence.

Ratul's capability of being able to speak two languages is apt for this post.

- Ans
- 1. bilingual
 - 2. bicultural
 - 3. bidialectical
 - 4. lingual

Question ID : 630680414912

Option 1 ID : 6306801618391

Option 2 ID : 6306801618392

Option 3 ID : 6306801618393

Option 4 ID : 6306801618394

Status : Answered

Chosen Option : 1

Q.29 Parts of the following sentence have been given as options. Select the option that contains an error.
There are four tributaries of Ganga and it is ranked as the fifth most polluted river of the world.

- Ans
- 1. is ranked as the fifth
 - 2. of Ganga and it
 - 3. There are four tributaries
 - 4. most polluted river of the world.

Question ID : 630680192255

Option 1 ID : 630680745623

Option 2 ID : 630680745622

Option 3 ID : 630680745621

Option 4 ID : 630680745624

Status : **Not Attempted and Marked For Review**

Chosen Option : --

Q.30 Select the most appropriate meaning of the given idiom.
Bite the bullet

- Ans
- 1. To avoid a situation
 - 2. To help someone achieve their goals
 - 3. To eat something unpleasant
 - 4. To face a difficult situation

Question ID : 630680517281

Option 1 ID : 6306802021520

Option 2 ID : 6306802021523

Option 3 ID : 6306802021522

Option 4 ID : 6306802021521

Status : **Answered**

Chosen Option : 4

Q.31 Select the INCORRECTLY spelt word in the given sentence.
Mount Vesuvius is a volcano that erapts hot ashes which fall from the sky like a blizzard.

- Ans
- 1. Erapts
 - 2. Blizzard
 - 3. Ashes
 - 4. Volcano

Question ID : 630680396920

Option 1 ID : 6306801547749

Option 2 ID : 6306801547751

Option 3 ID : 6306801547750

Option 4 ID : 6306801547748

Status : **Answered**

Chosen Option : 1

Q.32 Select the most appropriate ANTONYM of the given word.
Suspend

- Ans
- 1. Extend
 - 2. Terminate
 - 3. Project
 - 4. Resume

Question ID : 630680517316
Option 1 ID : 6306802021662
Option 2 ID : 6306802021660
Option 3 ID : 6306802021663
Option 4 ID : 6306802021661
Status : Answered
Chosen Option : 4

Q.33 Select the word which means the same as the group of words underlined in the given sentence.

Today, a man who betrayed his own country in exchange for money was the topic of every news report.

- Ans
- 1. Gangster
 - 2. Terrorist
 - 3. Traitor
 - 4. Conman

Question ID : 630680414823
Option 1 ID : 6306801618038
Option 2 ID : 6306801618036
Option 3 ID : 6306801618035
Option 4 ID : 6306801618037
Status : Answered
Chosen Option : 3

Q.34 Select the most appropriate meaning of the given idiom.
Beat around the bush

- Ans
- 1. To avoid talking about what is important
 - 2. To await an explanation
 - 3. To take on a task that is way too big
 - 4. To do something without any hesitation

Question ID : 630680192449
Option 1 ID : 630680746387
Option 2 ID : 630680746385
Option 3 ID : 630680746388
Option 4 ID : 630680746386
Status : Answered
Chosen Option : 1

Q.35 Select the most appropriate ANTONYM of the underlined word.
The artist's abstract painting was enigmatic to the viewers.

- Ans
- 1. Mysterious
 - 2. Instigating
 - 3. Clear
 - 4. Thrilling

Question ID : 630680396864
Option 1 ID : 6306801547524
Option 2 ID : 6306801547526
Option 3 ID : 6306801547525
Option 4 ID : 6306801547527
Status : Answered
Chosen Option : 3

Q.36 Select the most appropriate meaning of the given idiom.

Through thick and thin

- Ans
- 1. Always supporting someone even if there are problems or difficulties
 - 2. Sometimes thin, sometimes thick
 - 3. Never giving up a friendship
 - 4. Never giving up on a goal

Question ID : 630680517379
Option 1 ID : 6306802021913
Option 2 ID : 6306802021912
Option 3 ID : 6306802021915
Option 4 ID : 6306802021914
Status : Answered
Chosen Option : 4

Q.37 Select the most appropriate option that can substitute the underlined words in the given sentence.

The road is too busy for elderly people that they cannot cross safely.

- Ans
- 1. that it is difficult to cross.
 - 2. to cross safely.
 - 3. that it cannot be crossed properly.
 - 4. that it is impossible for them to cross.

Question ID : 630680443861
Option 1 ID : 6306801732765
Option 2 ID : 6306801732764
Option 3 ID : 6306801732766
Option 4 ID : 6306801732767
Status : Answered
Chosen Option : 2

Q.38 Rectify the sentence by selecting the correct spelling of the underlined word from the options.

The baby smiled and laughed at the pickaboo game.

- Ans
- 1. peakaboo
 - 2. pikaboo
 - 3. peekaboo
 - 4. pekaboo

Question ID : 630680517496

Option 1 ID : 6306802022382

Option 2 ID : 6306802022380

Option 3 ID : 6306802022381

Option 4 ID : 6306802022383

Status : Answered

Chosen Option : 4

Q.39 The given sentence is divided into four segments. Identify the segment that contains a grammatical error.

Had you been / working regularly, / you had completed / the project yesterday.

- Ans
- 1. Had you been
 - 2. the project yesterday
 - 3. you had completed
 - 4. working regularly

Question ID : 630680157020

Option 1 ID : 630680607632

Option 2 ID : 630680607635

Option 3 ID : 630680607634

Option 4 ID : 630680607633

Status : Answered

Chosen Option : 3

Q.40 Select the most appropriate option that can substitute the underlined segment in the given sentence.

Before she began, she asked the teacher whether she write with a pen or a pencil.

- Ans
- 1. she can write
 - 2. she wrote
 - 3. she should write
 - 4. she did write.

Question ID : 630680436031

Option 1 ID : 6306801702063

Option 2 ID : 6306801702061

Option 3 ID : 6306801702062

Option 4 ID : 6306801702064

Status : Answered

Chosen Option : 1

Comprehension:

In the following passage, some words have been deleted. Read the passage carefully and select the most appropriate option to fill in each blank.
Childhood is an important phase in a person's life. Children are free from worries, tensions and stresses so they lead a very (1)_____ life. This is the only reason they create golden and beautiful memories during this period which are (2)_____ in their adulthood. It is the responsibility of parents and guardians to shape the future of a child as he is very (3)_____ and can drift in any direction. If they have made any mistakes, we should (4)_____ them instead of misbehaving with them. How we have behaved with them will be (5)_____ on their minds which will reflect in later stages.

SubQuestion No : 41

Q.41 Select the most appropriate option to fill in blank No. 1.

- Ans** 1. carefree
 2. careful
 3. stressful
 4. cautious

Question ID : 630680515018
Option 1 ID : 6306802012630
Option 2 ID : 6306802012629
Option 3 ID : 6306802012631
Option 4 ID : 6306802012632
Status : Answered
Chosen Option : 3

Comprehension:

In the following passage, some words have been deleted. Read the passage carefully and select the most appropriate option to fill in each blank.
Childhood is an important phase in a person's life. Children are free from worries, tensions and stresses so they lead a very (1)_____ life. This is the only reason they create golden and beautiful memories during this period which are (2)_____ in their adulthood. It is the responsibility of parents and guardians to shape the future of a child as he is very (3)_____ and can drift in any direction. If they have made any mistakes, we should (4)_____ them instead of misbehaving with them. How we have behaved with them will be (5)_____ on their minds which will reflect in later stages.

SubQuestion No : 42

Q.42 Select the most appropriate option to fill in blank No. 2.

- Ans** 1. cherished
 2. blocked
 3. dumped
 4. neglected

Question ID : 630680515019
Option 1 ID : 6306802012634
Option 2 ID : 6306802012635
Option 3 ID : 6306802012636
Option 4 ID : 6306802012633
Status : Answered
Chosen Option : 1

Comprehension:

In the following passage, some words have been deleted. Read the passage carefully and select the most appropriate option to fill in each blank.
Childhood is an important phase in a person's life. Children are free from worries, tensions and stresses so they lead a very (1)_____ life. This is the only reason they create golden and beautiful memories during this period which are (2)_____ in their adulthood. It is the responsibility of parents and guardians to shape the future of a child as he is very (3)_____ and can drift in any direction. If they have made any mistakes, we should (4)_____ them instead of misbehaving with them. How we have behaved with them will be (5)_____ on their minds which will reflect in later stages.

SubQuestion No : 43

Q.43 Select the most appropriate option to fill in blank No. 3.

- Ans** 1. mature
 2. innocent
 3. crafty
 4. guilty

Question ID : **630680515020**
Option 1 ID : **6306802012640**
Option 2 ID : **6306802012637**
Option 3 ID : **6306802012639**
Option 4 ID : **6306802012638**
Status : **Answered**
Chosen Option : **3**

Comprehension:

In the following passage, some words have been deleted. Read the passage carefully and select the most appropriate option to fill in each blank.
Childhood is an important phase in a person's life. Children are free from worries, tensions and stresses so they lead a very (1)_____ life. This is the only reason they create golden and beautiful memories during this period which are (2)_____ in their adulthood. It is the responsibility of parents and guardians to shape the future of a child as he is very (3)_____ and can drift in any direction. If they have made any mistakes, we should (4)_____ them instead of misbehaving with them. How we have behaved with them will be (5)_____ on their minds which will reflect in later stages.

SubQuestion No : 44

Q.44 Select the most appropriate option to fill in blank No. 4.

- Ans** 1. damage
 2. create
 3. design
 4. rectify

Question ID : **630680515021**
Option 1 ID : **6306802012641**
Option 2 ID : **6306802012643**
Option 3 ID : **6306802012642**
Option 4 ID : **6306802012644**
Status : **Answered**
Chosen Option : **4**

Comprehension:

In the following passage, some words have been deleted. Read the passage carefully and select the most appropriate option to fill in each blank.

Childhood is an important phase in a person's life. Children are free from worries, tensions and stresses so they lead a very (1)_____ life. This is the only reason they create golden and beautiful memories during this period which are (2)_____ in their adulthood. It is the responsibility of parents and guardians to shape the future of a child as he is very (3)_____ and can drift in any direction. If they have made any mistakes, we should (4)_____ them instead of misbehaving with them. How we have behaved with them will be (5)_____ on their minds which will reflect in later stages.

SubQuestion No : 45

Q.45 Select the most appropriate option to fill in blank No. 5.

- Ans 1. published
 2. bleached
 3. imprinted
 4. coloured

Question ID : 630680515022

Option 1 ID : 6306802012648

Option 2 ID : 6306802012645

Option 3 ID : 6306802012646

Option 4 ID : 6306802012647

Status : Answered

Chosen Option : 3

Comprehension:

Read the given passage and answer the questions that follow.

Have you ever taken the time to stop and consider the dirt under your feet? Leonardo da Vinci said, "We know more about the movement of celestial bodies than about the soil underfoot."

Yet, our very survival as humans – and life on this planet – is intimately linked with the health of a thin layer of soil enveloping the earth.

Soil provides society with essential food, feed, fibre and raw materials, as well as being home to a quarter of the earth's biodiversity. Soils are also the largest organic carbon reservoir on Earth and although highly dynamic, are very fragile. Chop a forest down and it might grow back in 50 years, but lose 10 cm of soil and get ready to wait 1,000 years to get it back.

Without soil, our planet would be unrecognisable to us, and more like the barren and inhospitable surface of the Moon or Mars.

Until recently, we did not even know how deep the soil is below our feet. Like the best mysteries, a bit of digging is required for soils to be fully understood and for their history to be laid bare.

When they are visible, a range of questions arise. What does the variation in colour with depth mean? How much carbon is stored? Is the soil dense or light, damaged or healthy?

Answering these questions is important, but presents a significant challenge and may require years of training.

SubQuestion No : 46

Q.46 Select the most suitable word from the passage which means 'difficult to stay or live in'.

- Ans 1. Inhospitable
 2. Dense
 3. Barren
 4. Essential

Question ID : 630680406917

Option 1 ID : 6306801586704

Option 2 ID : 6306801586705

Option 3 ID : 6306801586703

Option 4 ID : 6306801586702

Status : Answered

Chosen Option : 3

Comprehension:

Read the given passage and answer the questions that follow.

Have you ever taken the time to stop and consider the dirt under your feet? Leonardo da Vinci said, "We know more about the movement of celestial bodies than about the soil underfoot." Yet, our very survival as humans – and life on this planet – is intimately linked with the health of a thin layer of soil enveloping the earth.

Soil provides society with essential food, feed, fibre and raw materials, as well as being home to a quarter of the earth's biodiversity. Soils are also the largest organic carbon reservoir on Earth and although highly dynamic, are very fragile. Chop a forest down and it might grow back in 50 years, but lose 10 cm of soil and get ready to wait 1,000 years to get it back.

Without soil, our planet would be unrecognisable to us, and more like the barren and inhospitable surface of the Moon or Mars.

Until recently, we did not even know how deep the soil is below our feet. Like the best mysteries, a bit of digging is required for soils to be fully understood and for their history to be laid bare.

When they are visible, a range of questions arise. What does the variation in colour with depth mean? How much carbon is stored? Is the soil dense or light, damaged or healthy? Answering these questions is important, but presents a significant challenge and may require years of training.

SubQuestion No : 47

Q.47 How many years are required to renew the loss of 10 cm of soil?

- Ans 1. 1,00,000
 2. 1,000
 3. 100
 4. 10,000

Question ID : 630680406916
Option 1 ID : 6306801586701
Option 2 ID : 6306801586699
Option 3 ID : 6306801586700
Option 4 ID : 6306801586698
Status : Answered
Chosen Option : 2

Comprehension:

Read the given passage and answer the questions that follow.

Have you ever taken the time to stop and consider the dirt under your feet? Leonardo da Vinci said, "We know more about the movement of celestial bodies than about the soil underfoot." Yet, our very survival as humans – and life on this planet – is intimately linked with the health of a thin layer of soil enveloping the earth.

Soil provides society with essential food, feed, fibre and raw materials, as well as being home to a quarter of the earth's biodiversity. Soils are also the largest organic carbon reservoir on Earth and although highly dynamic, are very fragile. Chop a forest down and it might grow back in 50 years, but lose 10 cm of soil and get ready to wait 1,000 years to get it back.

Without soil, our planet would be unrecognisable to us, and more like the barren and inhospitable surface of the Moon or Mars.

Until recently, we did not even know how deep the soil is below our feet. Like the best mysteries, a bit of digging is required for soils to be fully understood and for their history to be laid bare.

When they are visible, a range of questions arise. What does the variation in colour with depth mean? How much carbon is stored? Is the soil dense or light, damaged or healthy? Answering these questions is important, but presents a significant challenge and may require years of training.

SubQuestion No : 48

Q.48 What is the tone of the speaker?

- Ans 1. Derisive
 2. Dogmatic
 3. Sarcastic
 4. Alarming

Question ID : 630680406918
Option 1 ID : 6306801586706
Option 2 ID : 6306801586708
Option 3 ID : 6306801586707
Option 4 ID : 6306801586709
Status : Answered
Chosen Option : 2

Comprehension:

Read the given passage and answer the questions that follow.

Have you ever taken the time to stop and consider the dirt under your feet? Leonardo da Vinci said, "We know more about the movement of celestial bodies than about the soil underfoot." Yet, our very survival as humans – and life on this planet – is intimately linked with the health of a thin layer of soil enveloping the earth.

Soil provides society with essential food, feed, fibre and raw materials, as well as being home to a quarter of the earth's biodiversity. Soils are also the largest organic carbon reservoir on Earth and although highly dynamic, are very fragile. Chop a forest down and it might grow back in 50 years, but lose 10 cm of soil and get ready to wait 1,000 years to get it back.

Without soil, our planet would be unrecognisable to us, and more like the barren and inhospitable surface of the Moon or Mars.

Until recently, we did not even know how deep the soil is below our feet. Like the best mysteries, a bit of digging is required for soils to be fully understood and for their history to be laid bare.

When they are visible, a range of questions arise. What does the variation in colour with depth mean? How much carbon is stored? Is the soil dense or light, damaged or healthy? Answering these questions is important, but presents a significant challenge and may require years of training.

SubQuestion No : 49

Q.49 Identify the most suitable title for the given passage.

- Ans
- 1. Moon and Mars Expedition
 - 2. Necessity of Mining
 - 3. The Uninhabitable Universe
 - 4. Mysteries Under Man's Feet

Question ID : 630680406919
Option 1 ID : 6306801586711
Option 2 ID : 6306801586710
Option 3 ID : 6306801586713
Option 4 ID : 6306801586712
Status : Answered
Chosen Option : 4

Comprehension:

Read the given passage and answer the questions that follow.

Have you ever taken the time to stop and consider the dirt under your feet? Leonardo da Vinci said, "We know more about the movement of celestial bodies than about the soil underfoot." Yet, our very survival as humans – and life on this planet – is intimately linked with the health of a thin layer of soil enveloping the earth.

Soil provides society with essential food, feed, fibre and raw materials, as well as being home to a quarter of the earth's biodiversity. Soils are also the largest organic carbon reservoir on Earth and although highly dynamic, are very fragile. Chop a forest down and it might grow back in 50 years, but lose 10 cm of soil and get ready to wait 1,000 years to get it back.

Without soil, our planet would be unrecognisable to us, and more like the barren and inhospitable surface of the Moon or Mars.

Until recently, we did not even know how deep the soil is below our feet. Like the best mysteries, a bit of digging is required for soils to be fully understood and for their history to be laid bare.

When they are visible, a range of questions arise. What does the variation in colour with depth mean? How much carbon is stored? Is the soil dense or light, damaged or healthy? Answering these questions is important, but presents a significant challenge and may require years of training.

SubQuestion No : 50

Q.50 Mankind's survival, according to the passage, solely depends on _____ .

- Ans
- 1. inventions
 - 2. celestial bodies
 - 3. soil
 - 4. reproduction

Question ID : 630680406915
Option 1 ID : 6306801586696
Option 2 ID : 6306801586694
Option 3 ID : 6306801586697
Option 4 ID : 6306801586695
Status : Answered
Chosen Option : 3