

## Sub Inspector in Delhi Police and Central Armed Police Forces Examination 2023 Paper I

Roll Number	
Candidate Name	
Venue Name	
Exam Date	03/10/2023
Exam Time	12:30 PM - 2:30 PM
Subject	SICPO Paper I 2023

Section : General Intelligence and Reasoning

**Q.1** Which of the following numbers will replace the question mark (?) in the given series?  
91, 111, 133, ?, 183, 211

- Ans
- 1. 149
  - 2. 156
  - 3. 167
  - 4. 157

Question ID : 26433067631  
Option 1 ID : 264330265039  
Option 2 ID : 264330265037  
Option 3 ID : 264330265036  
Option 4 ID : 264330265038

Status : Answered

Chosen Option : 4

**Q.2** Three Statements are given followed by Three conclusions numbered I, II and III. Assuming the statements to be true, even if they seem to be at variance with commonly known facts, decide which of the conclusions logically follow(s) from the statements.

**Statements:**  
All valleys are mountains.  
No sea is a mountain.  
Some plains are seas.

**Conclusions:**  
I. Some valleys are plains.  
II. No plain is a mountain.  
III. No sea is a valley.

- Ans
- 1. Only conclusion II follows.
  - 2. Only conclusion III follows.
  - 3. Only conclusion I follows.
  - 4. Both conclusions I and II follow.

Question ID : 264330145341  
Option 1 ID : 264330569621  
Option 2 ID : 264330569620  
Option 3 ID : 264330569622  
Option 4 ID : 264330569619

Status : Answered

Chosen Option : 2

# Test Prime

ALL EXAMS,  
ONE SUBSCRIPTION



**40,000+**  
Mock Tests



Personalised  
Report Card



Unlimited  
Re-Attempt



**500+**  
Exam Covered



Previous Year  
Papers



**500%**  
Refund



**DOWNLOAD NOW**

Q.3 Select the set in which the numbers are related in the same way as are the numbers of the following set.

(NOTE : Operations should be performed on the whole numbers, without breaking down the numbers into its constituent digits. E.g. 13 – Operations on 13 such as adding /subtracting /multiplying etc. to 13 can be performed. Breaking down 13 into 1 and 3 and then performing mathematical operations on 1 and 3 is NOT allowed)

(25, 3, 150)  
(13, 7, 182)

- Ans  1. (5,8,184)  
 2. (6,13,234)  
 3. (10,5,100)  
 4. (3,4,45)

Question ID : 264330145327

Option 1 ID : 264330569564

Option 2 ID : 264330569566

Option 3 ID : 264330569565

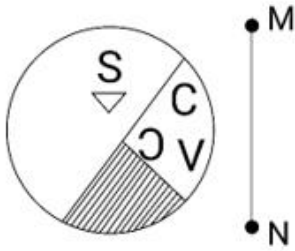
Option 4 ID : 264330569563

Status : Answered

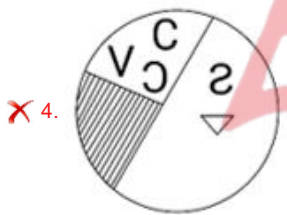
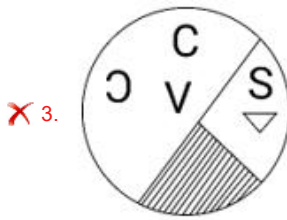
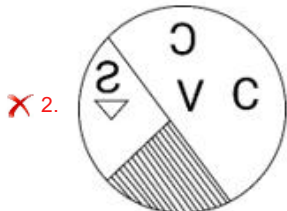
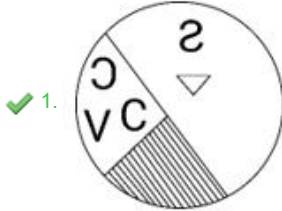
Chosen Option : 3



Q.4 Select the correct mirror image of the given figure, when the mirror is placed at line MN as shown.



Ans



Question ID : 264330170163

Option 1 ID : 264330667329

Option 2 ID : 264330667328

Option 3 ID : 264330667327

Option 4 ID : 264330667330

Status : Answered

Chosen Option : 1

Q.5 In a certain code language, 'COUNTY' is written as 'ULCYGN' and 'FOREST' is written as 'RLFTHE'. How will 'MARGIN' be written in that language?

- Ans
- 1. RJMDSZ
  - 2. ZMTPRH
  - 3. ZMMRGI
  - 4. RZMNRG

Question ID : 26433074765

Option 1 ID : 264330293149

Option 2 ID : 264330293150

Option 3 ID : 264330293151

Option 4 ID : 264330293148

Status : Not Attempted and  
Marked For Review

Chosen Option : --

Q.6 Six students Meera, Jigyasa, Tarun, Naina, Shambhavi and Avni are sitting around a circular table facing the centre (not necessarily in the same order). Shambhavi is an immediate neighbour of both Jigyasa and Avni. Tarun is sitting third to the left of Jigyasa. Meera is sitting second to the right of Avni. Who is sitting third to the right of Meera?

- Ans
- 1. Avni
  - 2. Naina
  - 3. Jigyasa
  - 4. Shambhavi

Question ID : 26433082280

Option 1 ID : 264330322953

Option 2 ID : 264330322956

Option 3 ID : 264330322955

Option 4 ID : 264330322954

Status : Not Attempted and  
Marked For Review

Chosen Option : --

Q.7 Shilpa goes to a park every day for walking. One morning, she started walking from her home and walked 40 km towards the north. Then she turned to the right and walked 60 km. Again, she turned right and walked 40 km. Lastly, she took a left turn and walked 30 km. How far is she from her home?

- Ans
- 1. 140 km
  - 2. 90 km
  - 3. 100 km
  - 4. 60 km

Question ID : 26433097222

Option 1 ID : 264330381588

Option 2 ID : 264330381587

Option 3 ID : 264330381585

Option 4 ID : 264330381586

Status : Answered

Chosen Option : 2

Q.8 Which two mathematical signs should be interchanged to make the given equation correct?

$$(75 + 15) \times 27 \times 1 - 9 \div 7 \times (135 + 3) - 10 \div (189 + 63) = 434$$

Ans  1. + and ÷

2. + and -

3. × and +

4. ÷ and -

Question ID : 264330145311

Option 1 ID : 264330569501

Option 2 ID : 264330569500

Option 3 ID : 264330569499

Option 4 ID : 264330569502

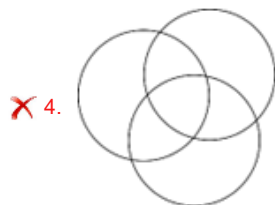
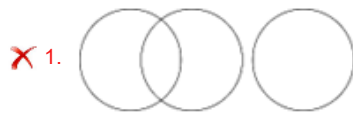
Status : Not Attempted and Marked For Review

Chosen Option : --

Q.9 Select the Venn diagram that best illustrates the relationship between the following classes.

Animals, Cats, Dogs

Ans



Question ID : 264330132028

Option 1 ID : 264330517210

Option 2 ID : 264330517208

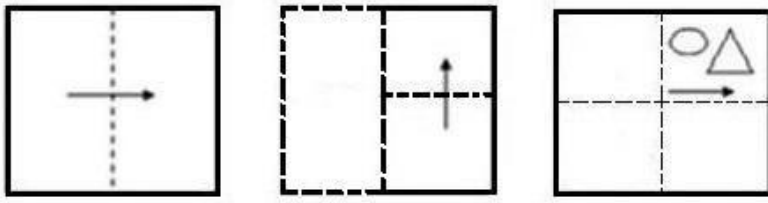
Option 3 ID : 264330517209

Option 4 ID : 264330517207

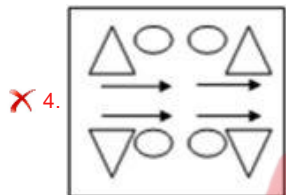
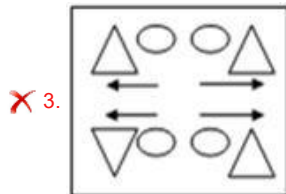
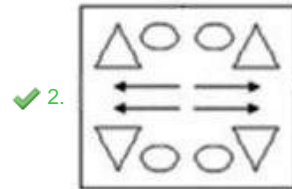
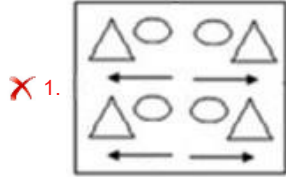
Status : Answered

Chosen Option : 4

Q.10 A paper is folded and cut as shown below. How will it appear when unfolded?



Ans



Question ID : 26433091687

Option 1 ID : 264330360114

Option 2 ID : 264330360113

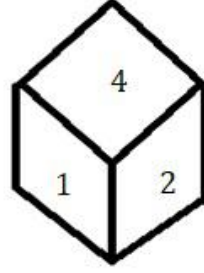
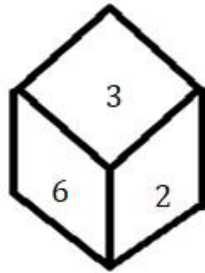
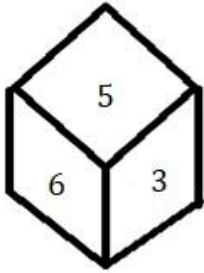
Option 3 ID : 264330360116

Option 4 ID : 264330360115

Status : Answered

Chosen Option : 2

Q.11 Three different positions of the same dice are shown. Find the number on the face opposite the face showing '5'.



- Ans  1. 2  
 2. 3  
 3. 4  
 4. 1

Question ID : 264330108970  
 Option 1 ID : 264330428158  
 Option 2 ID : 264330428159  
 Option 3 ID : 264330428160  
 Option 4 ID : 264330428157  
 Status : Answered  
 Chosen Option : 1

Q.12 In a certain code language, 'DOING' is written as 'BQTOV' and 'ZEBRA' is written as 'FAAKB'. How will 'STORM' be written in that language?

- Ans  1. PETBK  
 2. MKYTS  
 3. PRYSK  
 4. MLNKP

Question ID : 26433074759  
 Option 1 ID : 264330293127  
 Option 2 ID : 264330293125  
 Option 3 ID : 264330293124  
 Option 4 ID : 264330293126  
 Status : Not Attempted and Marked For Review  
 Chosen Option : --

Q.13 Two statements are given followed by two conclusions numbered I and II. Assuming the statements to be true, even if they seem to be at variance with commonly known facts, decide which of the conclusions logically follow(s) from the statements.

Statements:  
 Some shells are pebbles.  
 All pebbles are rocks.

Conclusions:  
 I. No shell is a rock.  
 II. Some shells are rocks.

- Ans  1. Only conclusion I follows  
 2. Neither conclusion I nor II follows  
 3. Both conclusions I and II follow  
 4. Only conclusion II follows

Question ID : 26433058040  
 Option 1 ID : 264330227144  
 Option 2 ID : 264330227147  
 Option 3 ID : 264330227146  
 Option 4 ID : 264330227145  
 Status : Answered  
 Chosen Option : 4

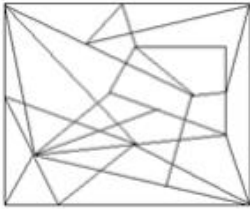


Q.14 Select the option figure in which the given figure is embedded (rotation is NOT allowed).

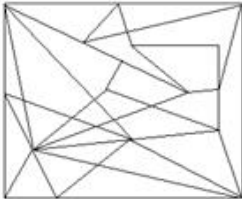


Ans

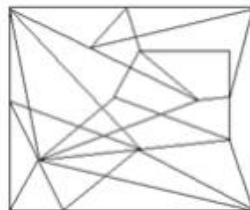
✗ 1.



✗ 2.



✓ 3.



✗ 4.



Question ID : 264330145475

Option 1 ID : 264330570156

Option 2 ID : 264330570155

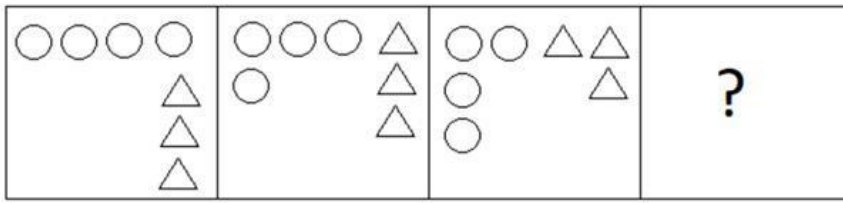
Option 3 ID : 264330570157

Option 4 ID : 264330570158

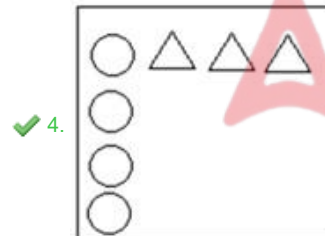
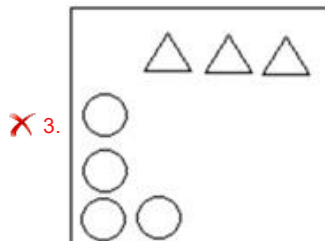
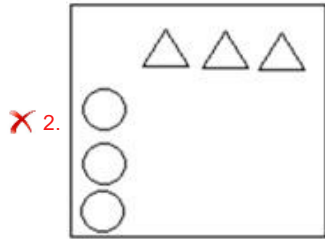
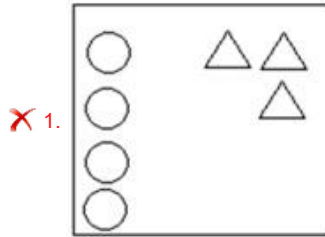
Status : **Not Attempted and Marked For Review**

Chosen Option : --

Q.15 Select the figure that will come next in the following figure series.



Ans



Question ID : 2643308702  
 Option 1 ID : 264330341931  
 Option 2 ID : 264330341930  
 Option 3 ID : 264330341929  
 Option 4 ID : 264330341932  
 Status : Answered  
 Chosen Option : 4

Q.16 Select the correct option that indicates the arrangement of the given words in the order in which they appear in an English dictionary.

1. Formal
2. Foreign
3. Forest
4. Forgotten
5. Forge
6. Forlorn

Ans  1. 2, 3, 5, 4, 6, 1  
 2. 2, 3, 6, 1, 5, 4  
 3. 2, 3, 4, 5, 6, 1  
 4. 2, 3, 5, 6, 4, 1

Question ID : 264330145376  
 Option 1 ID : 264330569760  
 Option 2 ID : 264330569762  
 Option 3 ID : 264330569759  
 Option 4 ID : 264330569761  
 Status : Answered  
 Chosen Option : 3

Q.17 If A denotes '+', B denotes '×', C denotes '-', and D denotes '÷', then what will be the value of the following equation?  
 13 B 7 A 64 D 4 C 23 = ?

Ans  1. 82  
 2. 84  
 3. 86  
 4. 76

Question ID : 264330129784  
 Option 1 ID : 264330508367  
 Option 2 ID : 264330508369  
 Option 3 ID : 264330508368  
 Option 4 ID : 264330508370  
 Status : Answered  
 Chosen Option : 2

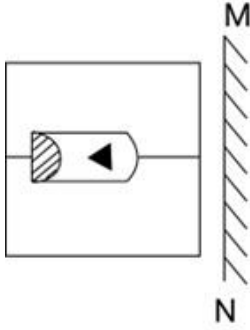
Q.18 Select the option that represents the letters which, when sequentially placed from left to right in the blanks below, will complete the letter series.

A \_ \_ D F \_ K \_ \_ F A \_ L \_ \_

Ans  1. DLKLFALD  
 2. LALKDFDK  
 3. KLALDKDF  
 4. FDLAKFDL

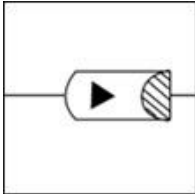
Question ID : 26433086951  
 Option 1 ID : 264330341445  
 Option 2 ID : 264330341447  
 Option 3 ID : 264330341446  
 Option 4 ID : 264330341448  
 Status : Answered  
 Chosen Option : 3

Q.19 Select the correct mirror image of the given combination when the mirror is placed at 'MN' as shown below.

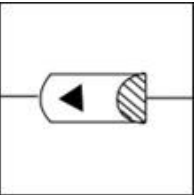


Ans

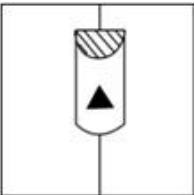
✓ 1.



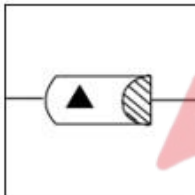
✗ 2.



✗ 3.



✗ 4.



Question ID : 264330130773

Option 1 ID : 264330512204

Option 2 ID : 264330512205

Option 3 ID : 264330512203

Option 4 ID : 264330512206

Status : Answered

Chosen Option : 1

Q.20 Town Q is to the north of Town P. Town R is to the west of Town Q. Town S is to the north of Town R. Town T is to the east of Town S. What is the position of Town T with respect to Town R? (All positions are arranged in GRID pattern).

Ans ✗ 1. East

✗ 2. South

✓ 3. North-east

✗ 4. South-east

Question ID : 26433091638

Option 1 ID : 264330359919

Option 2 ID : 264330359918

Option 3 ID : 264330359917

Option 4 ID : 264330359920

Status : Answered

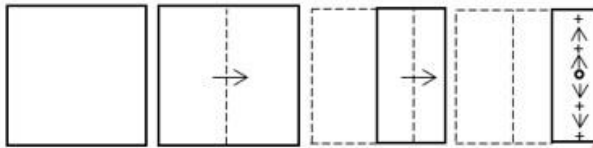
Chosen Option : 4

**Q.21** In a certain code language, 'FRIGHT' is written as 'FOCQED' and 'SHREDS' is written as 'OEPPAB'. How will 'UPSETS' be written in that language?

- Ans
- 1. PMRSQB
  - 2. PMROQB
  - 3. PMRPQB
  - 4. PMSPQB

Question ID : 264330180764  
 Option 1 ID : 264330709026  
 Option 2 ID : 264330709023  
 Option 3 ID : 264330709025  
 Option 4 ID : 264330709024  
 Status : Answered  
 Chosen Option : 4

**Q.22** A paper is folded and cut as shown. How will it appear when unfolded?



- Ans
- 1.
  - 2.
  - 3.
  - 4.



Question ID : 26433068428  
 Option 1 ID : 264330268224  
 Option 2 ID : 264330268227  
 Option 3 ID : 264330268225  
 Option 4 ID : 264330268226  
 Status : Not Attempted and Marked For Review  
 Chosen Option : --

Q.23 Select the set in which the numbers are related in the same way as are the numbers of the following sets.

(NOTE : Operations should be performed on the whole numbers, without breaking down the numbers into its constituent digits. E.g. 13 – Operations on 13 such as adding /subtracting /multiplying etc. to 13 can be performed. Breaking down 13 into 1 and 3 and then performing mathematical operations on 1 and 3 is NOT allowed)

(11, 33, 17), (18, 44, 21)

- Ans  1. (7, 32, 9)  
 2. (12, 40, 18)  
 3. (16, 43, 22)  
 4. (15, 34, 19)

Question ID : 264330145304

Option 1 ID : 264330569473

Option 2 ID : 264330569474

Option 3 ID : 264330569471

Option 4 ID : 264330569472

Status : Answered

Chosen Option : 3

Q.24 Which of the following numbers will replace the question mark (?) in the given series?

90, 110, 132, ?, 182

- Ans  1. 156  
 2. 169  
 3. 148  
 4. 146

Question ID : 264330145335

Option 1 ID : 264330569598

Option 2 ID : 264330569597

Option 3 ID : 264330569595

Option 4 ID : 264330569596

Status : Answered

Chosen Option : 1

Q.25 Select the set in which the numbers are related in the same way as are the numbers of the following sets.

(NOTE : Operations should be performed on the whole numbers, without breaking down the numbers into its constituent digits. E.g. 13 – Operations on 13 such as adding /subtracting /multiplying etc. to 13 can be performed. Breaking down 13 into 1 and 3 and then performing mathematical operations on 1 and 3 is NOT allowed)

(13, 104, 16), (9, 63, 14)

- Ans  1. (23, 204, 26)  
 2. (8, 60, 15)  
 3. (12, 85, 15)  
 4. (10, 92, 17)

Question ID : 264330145299

Option 1 ID : 264330569451

Option 2 ID : 264330569453

Option 3 ID : 264330569454

Option 4 ID : 264330569452

Status : Not Attempted and  
Marked For Review

Chosen Option : --

Q.26 Which of the following numbers will replace the question mark (?) in the given series?  
18, 27, 31, 43, 44, 59, 57, ?

- Ans
- 1. 82
  - 2. 74
  - 3. 83
  - 4. 75

Question ID : 26433067869  
Option 1 ID : 264330265989  
Option 2 ID : 264330265990  
Option 3 ID : 264330265991  
Option 4 ID : 264330265988  
Status : Answered  
Chosen Option : 4

Q.27 Which letter-cluster will complete the given series?  
BHERZ, DGHTX, FFKVV, \_\_\_\_\_

- Ans
- 1. HENWT
  - 2. GGNXU
  - 3. HGMWU
  - 4. HENXT

Question ID : 264330106616  
Option 1 ID : 264330418766  
Option 2 ID : 264330418768  
Option 3 ID : 264330418765  
Option 4 ID : 264330418767  
Status : Not Attempted and  
Marked For Review  
Chosen Option : --

Q.28 Select the option that is related to the third word in the same way as the second word is related to the first word. (The words must be considered as meaningful words and must not be related to each other based on the number of letters/number of consonants/vowels in the word.)  
Nun : Convent :: King : ?

- Ans
- 1. Palace
  - 2. Cottage
  - 3. Prison
  - 4. Monastery

Question ID : 26433091603  
Option 1 ID : 264330359778  
Option 2 ID : 264330359777  
Option 3 ID : 264330359780  
Option 4 ID : 264330359779  
Status : Answered  
Chosen Option : 1

Q.29 Select the option that represents the correct order of the given words as they would appear in an English dictionary?

1. Authority
2. Automate
3. Authentic
4. Auspicious
5. Aureole

- Ans
- 1. 4, 5, 3, 1, 2
  - 2. 5, 3, 4, 1, 2
  - 3. 5, 4, 3, 1, 2
  - 4. 3, 4, 5, 1, 2

Question ID : 26433067246

Option 1 ID : 264330263499

Option 2 ID : 264330263497

Option 3 ID : 264330263498

Option 4 ID : 264330263496

Status : Answered

Chosen Option : 3

Q.30 Seven friends, A, B, C, D, E, F and G, are sitting around a circular table facing the centre (not necessarily in the same order). D is an immediate neighbour of B and C. A is sitting third to the right of C. E is an immediate neighbour of A and F. G is sitting immediate left of C. B is sitting third to the right of G. What is the position of G with respect to A when counted from the right side of A?

- Ans
- 1. Third to the right
  - 2. Second to the right
  - 3. Third to the left
  - 4. Second to the left

Question ID : 26433056907

Option 1 ID : 264330222613

Option 2 ID : 264330222614

Option 3 ID : 264330222612

Option 4 ID : 264330222615

Status : Not Attempted and  
Marked For Review

Chosen Option : --

Q.31 Four letter-clusters have been given, out of which three are alike in some manner and one is different. Select the odd letter-cluster.

- Ans
- 1. KNJZ
  - 2. FIEU
  - 3. MJLO
  - 4. SVRH

Question ID : 264330180753

Option 1 ID : 264330708981

Option 2 ID : 264330708979

Option 3 ID : 264330708980

Option 4 ID : 264330708982

Status : Not Attempted and  
Marked For Review

Chosen Option : --



Q.32 Three of the following letter-clusters are alike in some manner and one is different.  
Select the one that is different.

- Ans  1. MRVY  
 2. GLPS  
 3. NSWZ  
 4. TGQJ

Question ID : 264330145344  
 Option 1 ID : 264330569631  
 Option 2 ID : 264330569632  
 Option 3 ID : 264330569634  
 Option 4 ID : 264330569633

Status : Not Attempted and  
Marked For Review

Chosen Option : --

Q.33 Which two numbers (not digits) should be interchanged to make the given equation correct?

$$(18 \times 2) - 24 + 10 \times 160 \div 16 + (10 \times 4) = 170$$

- Ans  1. 2 and 24  
 2. 2 and 4  
 3. 24 and 18  
 4. 16 and 18

Question ID : 264330145307  
 Option 1 ID : 264330569486  
 Option 2 ID : 264330569483  
 Option 3 ID : 264330569485  
 Option 4 ID : 264330569484

Status : Answered

Chosen Option : 3

Q.34 Select the set in which the numbers are related in the same way as are the numbers of the following sets.

(NOTE : Operations should be performed on the whole numbers, without breaking down the numbers into its constituent digits. E.g. 13- Operations on 13 such as adding/subtracting/multiplying etc. to 13 can be performed. Breaking down 13 into 1 and 3 and then performing mathematical operations on 1 and 3 is not allowed.)

(15, 21, 66)  
 (9, 17, 44)

- Ans  1. (2, 4, 12)  
 2. (5, 37, 52)  
 3. (7, 9, 86)  
 4. (11, 13, 35)

Question ID : 26433057456  
 Option 1 ID : 264330224809  
 Option 2 ID : 264330224810  
 Option 3 ID : 264330224808  
 Option 4 ID : 264330224811

Status : Not Attempted and  
Marked For Review

Chosen Option : --

Q.35 Which two signs should be interchanged to make the given equation correct?

$$13 + 145 \div 29 \times 52 - 11 = 106$$

Ans  1. - and ×

2. × and +

3. + and -

4. + and +

Question ID : 264330129525

Option 1 ID : 264330507469

Option 2 ID : 264330507468

Option 3 ID : 264330507466

Option 4 ID : 264330507467

Status : Answered

Chosen Option : 2



Q.36 Which figure from the given options would replace the question mark (?) if the following figure series were to be continued?

R	3	A	□	9	R	3	F	☆	□	A	3	
○	F	9	3	F	☆	S	○	A	F	○	9	?
□	☆	S	S	○	A	□	9	R	R	S	☆	

Ans

✗ 1.

F	S	9
R	A	☆
□	○	3

✗ 2.

R	S	☆
□	A	3
F	○	9

✓ 3.

F	○	9
R	S	☆
□	A	3

✗ 4.

R	9	□
A	○	S
☆	F	3

Question ID : 264330145478

Option 1 ID : 264330570170

Option 2 ID : 264330570167

Option 3 ID : 264330570168

Option 4 ID : 264330570169

Status : Not Attempted and  
Marked For Review

Chosen Option : --

Q.37 If M denotes '-', N denotes '+', O denotes 'x', and P denotes '+', then what will come in place of '?' in the following equation?  
255 N 5 O 4 P 16 O 3 M 29 = ?

- Ans  1. 223  
 2. 216  
 3. 211  
 4. 230

Question ID : 26433057631  
 Option 1 ID : 264330225508  
 Option 2 ID : 264330225509  
 Option 3 ID : 264330225511  
 Option 4 ID : 264330225510  
 Status : Answered  
 Chosen Option : 1

Q.38 PRO 5' is related to 'OSQ 15' in a certain way. In the same way, 'OPO 10' is related to 'NQQ 30'. Which of the following is related to 'MAC 9' using the same logic?

- Ans  1. NZA 3  
 2. OZA 3  
 3. NZB 3  
 4. NZA 27

Question ID : 264330145384  
 Option 1 ID : 264330569792  
 Option 2 ID : 264330569791  
 Option 3 ID : 264330569794  
 Option 4 ID : 264330569793  
 Status : Answered  
 Chosen Option : 4

Q.39 'M \$ K' means 'M is the mother of K'.  
 'M # K' means 'M is the father of K'.  
 'M @ K' means 'M is the husband of K'.  
 'M % K' means 'M is the daughter of K'.  
 If A \$ C @ R, then how is R related to A?

- Ans  1. Husband's father  
 2. Mother  
 3. Son's wife  
 4. Daughter

Question ID : 264330145391  
 Option 1 ID : 264330569822  
 Option 2 ID : 264330569821  
 Option 3 ID : 264330569819  
 Option 4 ID : 264330569820  
 Status : Answered  
 Chosen Option : 3

Q.40 If '+' means 'divided by', '-' means 'added to', 'x' means 'subtracted from' and '÷' means 'multiplied by', then what will be the value of the following expression?

$$[(25 \times 13) - (3 \div 3)] + (3 - 4) \div 5$$

- Ans
- 1. 20
  - 2. 10
  - 3. 15
  - 4. 5

Question ID : 264330130377

Option 1 ID : 264330510622

Option 2 ID : 264330510620

Option 3 ID : 264330510621

Option 4 ID : 264330510619

Status : Not Attempted and  
Marked For Review

Chosen Option : --

Q.41 Which of the following numbers will replace the question mark (?) and complete the given number series?  
15, 19, 21, 25, 27, ?

- Ans
- 1. 31
  - 2. 32
  - 3. 29
  - 4. 30

Question ID : 26433067479

Option 1 ID : 264330264429

Option 2 ID : 264330264431

Option 3 ID : 264330264430

Option 4 ID : 264330264428

Status : Answered

Chosen Option : 1

Q.42 Which letter-cluster will replace the question mark (?) to complete the given series?  
MMNO, OKPM, ?, SGTI, UEVG

- Ans
- 1. POKI
  - 2. QRIL
  - 3. QIRK
  - 4. PQIJ

Question ID : 264330180763

Option 1 ID : 264330709022

Option 2 ID : 264330709020

Option 3 ID : 264330709021

Option 4 ID : 264330709019

Status : Not Attempted and  
Marked For Review

Chosen Option : --

Q.43 In a certain code language, 'OIL' is coded as 27 and 'CREAM' is coded as 125. How will 'POWDER' be coded in the same language?

- Ans  1. 225  
 2. 216  
 3. 198  
 4. 169

Question ID : 264330132210  
 Option 1 ID : 264330517938  
 Option 2 ID : 264330517937  
 Option 3 ID : 264330517936  
 Option 4 ID : 264330517935

Status : Not Attempted and Marked For Review

Chosen Option : --

Q.44 Given below are two statements and two conclusions. Take the statements to be true even if they are at variance with commonly known facts, and decide whether the conclusion(s) follow(s) the given statements.

Statements:

Some cakes are biscuits.

Some biscuits are chocolates.

Conclusions:

I. Some biscuits are cakes.

II. Some cakes are chocolates.

- Ans  1. Both the conclusions follow  
 2. Only conclusion II follows  
 3. Neither conclusion I nor II follows  
 4. Only conclusion I follows

Question ID : 26433056639  
 Option 1 ID : 264330221542  
 Option 2 ID : 264330221541  
 Option 3 ID : 264330221543  
 Option 4 ID : 264330221540

Status : Answered

Chosen Option : 1

Q.45 If I denotes '+', J denotes 'x', K denotes '-' and L denotes '+', then what will come in place of '?' in the following equation?

$$(35 \text{ I } 5) \text{ J } 9 \text{ K } 23 \text{ L } 39 \text{ K } (3 \text{ J } 8) = ?$$

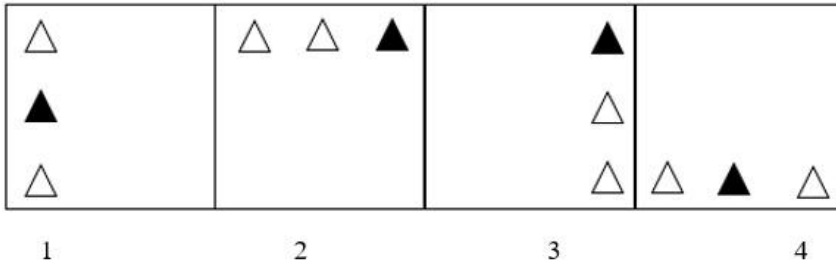
- Ans  1. 60  
 2. 59  
 3. 51  
 4. 55

Question ID : 264330145339  
 Option 1 ID : 264330569612  
 Option 2 ID : 264330569614  
 Option 3 ID : 264330569613  
 Option 4 ID : 264330569611

Status : Answered

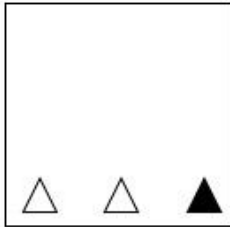
Chosen Option : 4

Q.46 Which of the given figures when placed in the 5<sup>th</sup> position would continue the series that is established by the first four figures?

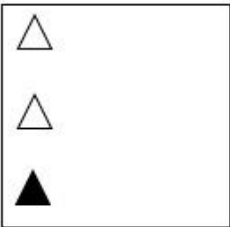


Ans

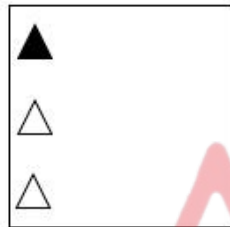
✗ 1.



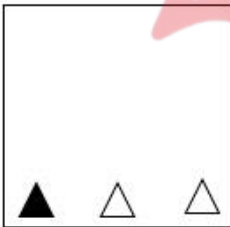
✗ 2.



✓ 3.



✗ 4.



Question ID : 26433087307

Option 1 ID : 264330342867

Option 2 ID : 264330342866

Option 3 ID : 264330342865

Option 4 ID : 264330342868

Status : Not Attempted and  
Marked For Review

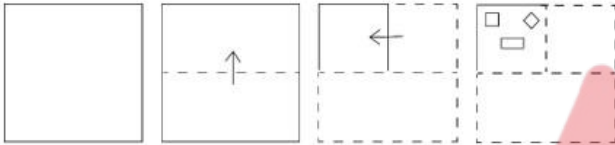
Chosen Option : --

Q.47 A @ B means 'A is the husband of B'  
 A & B means 'A is the mother of B'  
 A # B means 'A is the daughter of B'  
 If Q @ M & Y @ J # R & Z, then how is Y related to Z?

- Ans
- 1. Brother's wife
  - 2. Father's sister
  - 3. Sister's husband
  - 4. Father

Question ID : 264330126024  
 Option 1 ID : 264330493768  
 Option 2 ID : 264330493769  
 Option 3 ID : 264330493771  
 Option 4 ID : 264330493770  
 Status : Not Attempted and Marked For Review  
 Chosen Option : --

Q.48 A paper is folded and cut as shown below. How will it appear when unfolded?



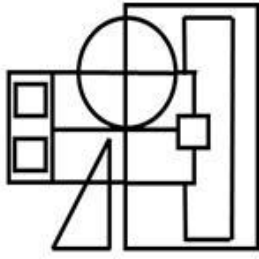
Ans

- 1.
- 2.
- 3.
- 4.

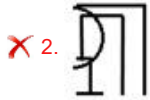
Question ID : 264330103002  
 Option 1 ID : 264330404399  
 Option 2 ID : 264330404398  
 Option 3 ID : 264330404397  
 Option 4 ID : 264330404400  
 Status : Not Attempted and Marked For Review  
 Chosen Option : --



Q.49 Select the option figure which is embedded in the given figure as its part (rotation is NOT allowed).



Ans



Question ID : 264330145465

Option 1 ID : 264330570117

Option 2 ID : 264330570118

Option 3 ID : 264330570116

Option 4 ID : 264330570115

Status : Not Attempted and Marked For Review

Chosen Option : --

Q.50 In a certain code language, 'HIGHLY' is written as 'GRHYOH' and 'CLEVER' is written as 'EOCRVV'. How will 'HORROR' be written in that language?

Ans ✗ 1. JRLPDB

✓ 2. RLHRLR

✗ 3. JPRDER

✗ 4. RKJPED

Question ID : 26433074763

Option 1 ID : 264330293142

Option 2 ID : 264330293141

Option 3 ID : 264330293143

Option 4 ID : 264330293140

Status : Not Answered

Chosen Option : --

Q.1 In India, which of the following modes of transportation reduces trans-shipment losses and delays in supply of petroleum and gas?

- Ans  1. Pipeline  
 2. Roadways  
 3. Railways  
 4. Waterways

Question ID : 264330132720  
Option 1 ID : 264330519978  
Option 2 ID : 264330519977  
Option 3 ID : 264330519975  
Option 4 ID : 264330519976  
Status : Answered  
Chosen Option : 1

Q.2 From which country has the concept of Martial Law, which restricts Fundamental rights, borrowed?

- Ans  1. The UK  
 2. The USSR  
 3. China  
 4. Japan

Question ID : 264330113392  
Option 1 ID : 264330445654  
Option 2 ID : 264330445656  
Option 3 ID : 264330445655  
Option 4 ID : 264330445653  
Status : Answered  
Chosen Option : 4

Q.3 Copacabana beach is situated in \_\_\_\_\_.

- Ans  1. Peru  
 2. Australia  
 3. Mexico  
 4. Brazil

Question ID : 26433054947  
Option 1 ID : 264330214774  
Option 2 ID : 264330214772  
Option 3 ID : 264330214775  
Option 4 ID : 264330214773  
Status : Not Attempted and Marked For Review  
Chosen Option : --

Q.4 Which of the following is the most widely used method for refining impure metals?

- Ans  1. Vapour-Phase Refining  
 2. Poling Refining  
 3. Electrolytic Refining  
 4. Liquidation Refining

Question ID : 264330131684  
Option 1 ID : 264330515835  
Option 2 ID : 264330515838  
Option 3 ID : 264330515836  
Option 4 ID : 264330515837  
Status : Answered  
Chosen Option : 3

Q.5 Which of the following is the correct statement?

- Ans  1. Joule is the unit of work  
 2. The unit of energy is the watt.  
 3. Joule/ second is also a unit of energy.  
 4. The unit of power is joule/newton.

Question ID : 264330111860  
Option 1 ID : 264330439527  
Option 2 ID : 264330439526  
Option 3 ID : 264330439528  
Option 4 ID : 264330439525  
Status : Answered  
Chosen Option : 1

Q.6 Which of the following microfinance institutions was established in India at the time of independence?

- Ans  1. Joint Liability Group  
 2. Rural Cooperatives  
 3. Self Help Group  
 4. Grameen Model Bank

Question ID : 264330145234  
Option 1 ID : 264330569192  
Option 2 ID : 264330569191  
Option 3 ID : 264330569193  
Option 4 ID : 264330569194  
Status : Not Attempted and Marked For Review  
Chosen Option : --

Q.7 'The Race of my Life' is the autobiography of which of the following sportsmen?

- Ans  1. PT Usha  
 2. Mary Kom  
 3. Milkha Singh  
 4. Saurav Ganguly

Question ID : 26433071672  
Option 1 ID : 264330281115  
Option 2 ID : 264330281114  
Option 3 ID : 264330281113  
Option 4 ID : 264330281112  
Status : Answered  
Chosen Option : 3

Q.8 Which of the following has been INCORRECTLY listed as a condition for becoming a citizen of India?

- Ans  1. Citizenship by birth  
 2. Citizenship by naturalisation  
 3. Citizenship through acquisition of property  
 4. Citizenship by descent

Question ID : 264330130475  
Option 1 ID : 264330511011  
Option 2 ID : 264330511014  
Option 3 ID : 264330511013  
Option 4 ID : 264330511012  
Status : Answered  
Chosen Option : 3

Q.9 Which British scientist is known for developing the principle of holography in 1947 to improve the resolution of the electron microscope?

- Ans
- 1. Werner Heisenberg
  - 2. Lloyd Cross
  - 3. Dennis Gabor
  - 4. Charles Towns

Question ID : 264330141668  
Option 1 ID : 264330554994  
Option 2 ID : 264330554993  
Option 3 ID : 264330554992  
Option 4 ID : 264330554991  
Status : Answered  
Chosen Option : 3

Q.10 The 'Tripartite struggle' was between Gurjara Pratiharas in North India, Palas in Eastern India and \_\_\_\_\_ in South India.

- Ans
- 1. Marathas
  - 2. Rashtrakutas
  - 3. Cholas
  - 4. Cheras

Question ID : 264330165356  
Option 1 ID : 264330648506  
Option 2 ID : 264330648505  
Option 3 ID : 264330648504  
Option 4 ID : 264330648503  
Status : Answered  
Chosen Option : 2

Q.11 Who is the author of the novel 'The Moor's Last Sigh'?

- Ans
- 1. VS Naipaul
  - 2. John Keay
  - 3. Kiran Doshi
  - 4. Salman Rushdie

Question ID : 264330145174  
Option 1 ID : 264330568951  
Option 2 ID : 264330568953  
Option 3 ID : 264330568954  
Option 4 ID : 264330568952  
Status : Answered  
Chosen Option : 4

Q.12 Which of the following dances is based on Rasleela themes of Radha and Krishna?

- Ans
- 1. Manipuri dance
  - 2. Sattriya dance
  - 3. Mohiniyattam
  - 4. Kathak

Question ID : 264330164790  
Option 1 ID : 264330646287  
Option 2 ID : 264330646289  
Option 3 ID : 264330646290  
Option 4 ID : 264330646288  
Status : Answered  
Chosen Option : 3

Q.13 Who among the following was the last Mauryan ruler and was killed by his commander-in-chief?

- Ans
- 1. Shatadhanvan
  - 2. Bindusara
  - 3. Brihadratha
  - 4. Dashratha

Question ID : 264330165558  
Option 1 ID : 264330649314  
Option 2 ID : 264330649312  
Option 3 ID : 264330649313  
Option 4 ID : 264330649311

Status : Not Attempted and  
Marked For Review

Chosen Option : --

Q.14 Which writ is issued when the court finds that there is unlawful arrest of a person?

- Ans
- 1. Prohibition
  - 2. Mandamus
  - 3. Quo warranto
  - 4. Habeas corpus

Question ID : 264330116397  
Option 1 ID : 264330457675  
Option 2 ID : 264330457674  
Option 3 ID : 264330457676  
Option 4 ID : 264330457673

Status : Answered

Chosen Option : 4

Q.15 Who among the following founded an expatriate Communist Party of India at Tashkent in 1920?

- Ans
- 1. PC Joshi
  - 2. Shripad Amrut Dange
  - 3. Jolly Kaul
  - 4. MN Roy

Question ID : 264330106615  
Option 1 ID : 264330418762  
Option 2 ID : 264330418761  
Option 3 ID : 264330418763  
Option 4 ID : 264330418764

Status : Answered

Chosen Option : 4

Q.16 Which of the following statements is correct?

- Ans  1. The transport of male gametes in Gymnosperms occurs through water.
2. The transport of male gametes in bryophytes and pteridophytes occurs through water.
3. The transport of male gametes in bryophytes and pteridophytes occurs through air.
4. The transport of male gametes in angiosperms occurs through water.

Question ID : 26433089668

Option 1 ID : 264330352173

Option 2 ID : 264330352176

Option 3 ID : 264330352175

Option 4 ID : 264330352174

Status : Not Attempted and  
Marked For Review

Chosen Option : --

Q.17 Which Union Territory recorded the highest male literacy rate, according to the 2011 Census?

- Ans  1. Daman and Diu
2. Delhi
3. Andaman and Nicobar Islands
4. Lakshadweep

Question ID : 264330110659

Option 1 ID : 264330434916

Option 2 ID : 264330434913

Option 3 ID : 264330434915

Option 4 ID : 264330434914

Status : Answered

Chosen Option : 2

Q.18 Pandit Ravi Shankar popularised which instrument in particular all over the world?

- Ans  1. Sitar
2. Tabla
3. Veena
4. Harmonium

Question ID : 26433074853

Option 1 ID : 264330293503

Option 2 ID : 264330293500

Option 3 ID : 264330293501

Option 4 ID : 264330293502

Status : Answered

Chosen Option : 1

Q.19 According to the Census of India 2011, which metropolitan city has the highest population?

- Ans  1. Mumbai  
 2. Kolkata  
 3. Chennai  
 4. Patna

Question ID : 264330166806

Option 1 ID : 264330654259

Option 2 ID : 264330654261

Option 3 ID : 264330654260

Option 4 ID : 264330654262

Status : Answered

Chosen Option : 1

Q.20 Ker and Garia Puja are traditional tribal festivals of which state?

- Ans  1. Jharkhand  
 2. Manipur  
 3. Odisha  
 4. Tripura

Question ID : 264330164806

Option 1 ID : 264330646351

Option 2 ID : 264330646354

Option 3 ID : 264330646352

Option 4 ID : 264330646353

Status : Not Attempted and  
Marked For Review

Chosen Option : --

Q.21 Which company has been given the responsibility of construction, operation and maintenance of the Hazira-Vijaipur-Jagdishpur (HVJ) pipeline project?

- Ans  1. TATA Petrodyne Limited (TPL)  
 2. Oil and Natural Gas Corporation (ONGC)  
 3. Gas Authority of India (GAIL)  
 4. Reliance Industries Limited (RIL)

Question ID : 264330111326

Option 1 ID : 264330437390

Option 2 ID : 264330437389

Option 3 ID : 264330437392

Option 4 ID : 264330437391

Status : Not Attempted and  
Marked For Review

Chosen Option : --

Q.22 Mawsynram, the place that receives the highest rainfall in the world, is situated in which hills?

- Ans
- 1. Patkai Hills
  - 2. Mishmi Hills
  - 3. Rajmahal Hills
  - 4. Khasi Hills

Question ID : 264330119785  
Option 1 ID : 264330469418  
Option 2 ID : 264330469415  
Option 3 ID : 264330469416  
Option 4 ID : 264330469417  
Status : Answered  
Chosen Option : 4

Q.23 Which of the following organisations was founded in Poona, Satara and other towns of Maharashtra that worked against Brahmanical orthodoxy and tried to reform Hinduism?

- Ans
- 1. Brahma Samaj
  - 2. Paramahansa Mandali
  - 3. Ramakrishna Mission
  - 4. Arya Samaj

Question ID : 264330165399  
Option 1 ID : 264330648678  
Option 2 ID : 264330648675  
Option 3 ID : 264330648676  
Option 4 ID : 264330648677  
Status : Answered  
Chosen Option : 4

Q.24 In 1784, who discovered the composition of water through his experiment with hydrogen and oxygen?

- Ans
- 1. Henry Cavendish
  - 2. Herbert C Brown
  - 3. Joseph Priestley
  - 4. John Dalton

Question ID : 264330145222  
Option 1 ID : 264330569146  
Option 2 ID : 264330569143  
Option 3 ID : 264330569145  
Option 4 ID : 264330569144  
Status : Answered  
Chosen Option : 1



Q.25 Under which strata do trees fall?

- Ans
- 1. Second vertical
  - 2. Top vertical
  - 3. Middle vertical
  - 4. Bottom vertical

Question ID : 264330145214

Option 1 ID : 264330569112

Option 2 ID : 264330569111

Option 3 ID : 264330569113

Option 4 ID : 264330569114

Status : Not Attempted and  
Marked For Review

Chosen Option : --

Q.26 The fundamental duties were added in the Indian Constitution on the recommendation of the:

- Ans
- 1. Balwant Rai Mehta Committee
  - 2. Bibek Debroy Committee
  - 3. LM Singhvi Committee
  - 4. Sardar Swaran Singh Committee

Question ID : 264330111511

Option 1 ID : 264330438129

Option 2 ID : 264330438132

Option 3 ID : 264330438131

Option 4 ID : 264330438130

Status : Answered

Chosen Option : 4

Q.27 Which of the following is the correct formula for moment of inertia?

- Ans
- 1.  $I = mr^2$
  - 2.  $I = rm^2$
  - 3.  $I = m/r^2$
  - 4.  $I = 2mr$

Question ID : 264330111862

Option 1 ID : 264330439534

Option 2 ID : 264330439536

Option 3 ID : 264330439533

Option 4 ID : 264330439535

Status : Answered

Chosen Option : 1

Q.28 Which of the following Articles of the Indian Constitution deals with the relationship between the Prime Minister and the President?

- Ans
- 1. Article 45
  - 2. Article 25
  - 3. Article 35
  - 4. Article 75

Question ID : 264330113416

Option 1 ID : 264330445749

Option 2 ID : 264330445751

Option 3 ID : 264330445752

Option 4 ID : 264330445750

Status : Answered

Chosen Option : 4

Q.29 India's rank in Tokyo Olympic 2020 is:

Ans  1. 49

2. 48

3. 47

4. 46

Question ID : 264330109684

Option 1 ID : 264330431016

Option 2 ID : 264330431015

Option 3 ID : 264330431014

Option 4 ID : 264330431013

Status : **Not Attempted and  
Marked For Review**

Chosen Option : --

Q.30 In which of the following years was the Muslim League formed?

Ans  1. 1915

2. 1909

3. 1906

4. 1912

Question ID : 264330112345

Option 1 ID : 264330441465

Option 2 ID : 264330441467

Option 3 ID : 264330441468

Option 4 ID : 264330441466

Status : **Answered**

Chosen Option : 2

Q.31 The Chambal, Hindon and Tons rivers are tributaries of the river:

Ans  1. Yamuna

2. Mahanadi

3. Kaveri

4. Tapi

Question ID : 264330169992

Option 1 ID : 264330666643

Option 2 ID : 264330666645

Option 3 ID : 264330666644

Option 4 ID : 264330666646

Status : **Not Attempted and  
Marked For Review**

Chosen Option : --

Q.32 Prabhat Sarma, a recipient of Sangeet Natak Akademi Award, was a \_\_\_\_\_ player from Assam.

- Ans
- 1. Ghatam
  - 2. Flute
  - 3. Tabla
  - 4. sarangi

Question ID : 264330145158  
Option 1 ID : 264330568890  
Option 2 ID : 264330568887  
Option 3 ID : 264330568889  
Option 4 ID : 264330568888

Status : Not Attempted and  
Marked For Review

Chosen Option : --

Q.33 Mehrangarh fort is located in which of the following cities?

- Ans
- 1. Jaipur
  - 2. Kota
  - 3. Jodhpur
  - 4. Bikaner

Question ID : 264330164850  
Option 1 ID : 264330646528  
Option 2 ID : 264330646529  
Option 3 ID : 264330646530  
Option 4 ID : 264330646527

Status : Not Attempted and  
Marked For Review

Chosen Option : --

Q.34 During a game of hockey, following an offence, if a player is shown a yellow card then he will be sent off the pitch for \_\_\_\_\_.

- Ans
- 1. 5 minutes
  - 2. 6 minutes
  - 3. 4 minutes
  - 4. 3 minutes

Question ID : 264330109854  
Option 1 ID : 264330431695  
Option 2 ID : 264330431696  
Option 3 ID : 264330431694  
Option 4 ID : 264330431693

Status : Answered

Chosen Option : 1

Q.35 Trade liberalisation has helped India improve its \_\_\_\_\_ in industries with medium-to-high technology content.

- Ans
- 1. imports
  - 2. fuel efficiency
  - 3. labour intensity
  - 4. comparative advantage

Question ID : 26433064580  
Option 1 ID : 264330252912  
Option 2 ID : 264330252915  
Option 3 ID : 264330252913  
Option 4 ID : 264330252914  
Status : Answered  
Chosen Option : 1

Q.36 Which of the following five-year plan addressed the issue of removal of poverty as a chief objective for the first time?

- Ans
- 1. Fourth Five-year Plan
  - 2. Third Five-year Plan
  - 3. Sixth Five-year Plan
  - 4. Fifth Five-year Plan

Question ID : 264330145228  
Option 1 ID : 264330569168  
Option 2 ID : 264330569167  
Option 3 ID : 264330569170  
Option 4 ID : 264330569169  
Status : Answered  
Chosen Option : 4

Q.37 Which of the following was the first B vitamin discovered in 1897 that is essential in amino acid and carbohydrate metabolism and is active in energy production reactions?

- Ans
- 1. Biotin
  - 2. Riboflavin
  - 3. Thiamine
  - 4. Folate

Question ID : 264330145202  
Option 1 ID : 264330569065  
Option 2 ID : 264330569064  
Option 3 ID : 264330569063  
Option 4 ID : 264330569066  
Status : Not Attempted and Marked For Review  
Chosen Option : --

Q.38 Identify the cultural festival on the basis of given clues:

- i) This festival brings together craftsmen like potters, embroiderers, weavers, wood carvers, metal workers, stone smiths and painters from all over India on one platform in Haryana.  
ii) This crafts mela is held in February every year and provides a glimpse of the state's cultural heritage and recent achievements.

- Ans
- 1. Kapil Muni Fair
  - 2. Shamlaji Fair
  - 3. Chitra Vichitra Fair
  - 4. Surajkund Mela

Question ID : 26433054217

Option 1 ID : 264330211853

Option 2 ID : 264330211852

Option 3 ID : 264330211855

Option 4 ID : 264330211854

Status : Not Attempted and  
Marked For Review

Chosen Option : --

Q.39 The duration of the 12<sup>th</sup> five year plan was from \_\_\_\_\_ to \_\_\_\_\_.

- Ans
- 1. 2012 - 2017
  - 2. 1987 - 1992
  - 3. 2007 - 2012
  - 4. 1990 - 1995

Question ID : 264330145251

Option 1 ID : 264330569259

Option 2 ID : 264330569262

Option 3 ID : 264330569260

Option 4 ID : 264330569261

Status : Answered

Chosen Option : 1

Q.40 Manisha Kalyan is associated with which of the following sports events?

- Ans
- 1. Football
  - 2. Hockey
  - 3. Cricket
  - 4. Chess

Question ID : 264330109689

Option 1 ID : 264330431033

Option 2 ID : 264330431034

Option 3 ID : 264330431035

Option 4 ID : 264330431036

Status : Not Attempted and  
Marked For Review

Chosen Option : --

Q.41 A Governor shall, notwithstanding the expiration of his term, continue to hold office until \_\_\_\_\_.

- Ans
- 1. the President's consent
  - 2. the Legislative Secretary takes charge
  - 3. his/her successor enters his/her office
  - 4. he/she has aid and advice of the Chief Minister

Question ID : 264330145265  
Option 1 ID : 264330569316  
Option 2 ID : 264330569315  
Option 3 ID : 264330569318  
Option 4 ID : 264330569317  
Status : Answered  
Chosen Option : 1

Q.42 A government budget shows a primary deficit of ₹6,900 crore. The revenue expenditure on interest payment is ₹400 crore. Fiscal deficit is equal to:

- Ans
- 1. ₹6,500 crore
  - 2. ₹7,300 crore
  - 3. ₹7,100 crore
  - 4. ₹6,900 crore

Question ID : 264330145254  
Option 1 ID : 264330569272  
Option 2 ID : 264330569271  
Option 3 ID : 264330569274  
Option 4 ID : 264330569273  
Status : Answered  
Chosen Option : 2

Q.43 The office of Diwan-i-Insha dealt with which affair in administration?

- Ans
- 1. State correspondence
  - 2. Military
  - 3. Finance
  - 4. Religious affairs

Question ID : 264330109006  
Option 1 ID : 264330428301  
Option 2 ID : 264330428303  
Option 3 ID : 264330428304  
Option 4 ID : 264330428302  
Status : Not Attempted and Marked For Review  
Chosen Option : --

Q.44 The earth's perihelion occurs in:

- Ans
- 1. July
  - 2. October
  - 3. January
  - 4. September

Question ID : 264330131737  
Option 1 ID : 264330516048  
Option 2 ID : 264330516050  
Option 3 ID : 264330516047  
Option 4 ID : 264330516049  
Status : Answered  
Chosen Option : 4

Q.45 Guru Bipin Singh, who received the honour of Sangeet Natak Akademi Award in 1966 and the Kalidas Samman by Madhya Pradesh Government, was an exponent of which of the following Indian classical dance forms?

- Ans
- 1. Odissi
  - 2. Manipuri
  - 3. Kuchipudi
  - 4. Kathak

Question ID : 264330145153  
Option 1 ID : 264330568867  
Option 2 ID : 264330568870  
Option 3 ID : 264330568869  
Option 4 ID : 264330568868  
Status : Answered  
Chosen Option : 2

Q.46 Who among the following was the youngest recipient of the Padma Vibhushan award in dance in 1984?

- Ans
- 1. Birju Maharaj
  - 2. Rajendra Gangani
  - 3. Abhimanyu Lal
  - 4. Ehshan Hilal

Question ID : 26433054504  
Option 1 ID : 264330213002  
Option 2 ID : 264330213000  
Option 3 ID : 264330213003  
Option 4 ID : 264330213001  
Status : Not Attempted and Marked For Review  
Chosen Option : --

Q.47 When was the Indian Meteorological Department, which collects data on temperature, rainfall, wind, etc., and makes weather forecasts, established by the Government of India?

- Ans
- 1. 1879
  - 2. 1876
  - 3. 1875
  - 4. 1873

Question ID : 264330145191  
Option 1 ID : 264330569022  
Option 2 ID : 264330569021  
Option 3 ID : 264330569020  
Option 4 ID : 264330569019  
Status : Not Attempted and Marked For Review  
Chosen Option : --

Q.48 What is the percentage of proteins in the cell membrane?

- Ans
- 1. 60-80%
  - 2. 80-100%
  - 3. 20-40%
  - 4. 40-60%

Question ID : 26433086610  
Option 1 ID : 264330340083  
Option 2 ID : 264330340084  
Option 3 ID : 264330340081  
Option 4 ID : 264330340082  
Status : Answered  
Chosen Option : 4

Q.49 Syed Modi India International is organised in which sporting event?

- Ans
- 1. Kabaddi
  - 2. Volleyball
  - 3. Chess
  - 4. Badminton

Question ID : 264330119247  
Option 1 ID : 264330467278  
Option 2 ID : 264330467275  
Option 3 ID : 264330467277  
Option 4 ID : 264330467276  
Status : Not Attempted and  
Marked For Review  
Chosen Option : --

Q.50 Which dance form of Goa is also known as the 'Warrior Dance'?

- Ans
- 1. Bihu
  - 2. Lavani
  - 3. Ghode Modni
  - 4. Rauf

Question ID : 26433092388  
Option 1 ID : 264330362841  
Option 2 ID : 264330362844  
Option 3 ID : 264330362842  
Option 4 ID : 264330362843  
Status : Answered  
Chosen Option : 3

Section : Quantitative Aptitude



Q.1 Sukhvir purchased some perishable items for sale but 30% of those items could not be sold and went bad. However, Sukhvir managed to sell the rest of the items at a price that helped him earn an overall profit of 19%. At what percentage above the cost price of each item purchased by Sukhvir did he sell each of the items that did not go bad?

- Ans
- 1. 49%
  - 2. 70%
  - 3. 63%
  - 4. 75%

Question ID : 264330103260

Option 1 ID : 264330405346

Option 2 ID : 264330405347

Option 3 ID : 264330405345

Option 4 ID : 264330405348

Status : Not Attempted and  
Marked For Review

Chosen Option : --

Q.2 An item with a marked price of ₹1,940 was sold at a discount of 15%. At what price (in ₹) was the item sold?

- Ans
- 1. 1659
  - 2. 1639
  - 3. 1649
  - 4. 1654

Question ID : 264330131157

Option 1 ID : 264330513739

Option 2 ID : 264330513741

Option 3 ID : 264330513740

Option 4 ID : 264330513742

Status : Answered

Chosen Option : 3

Q.3 A hostel mess requires 217 eggs for a week. How many eggs will it require in total for the months of July, August and September?

- Ans
- 1. 2821
  - 2. 2883
  - 3. 2852
  - 4. 2790

Question ID : 264330103974

Option 1 ID : 264330408197

Option 2 ID : 264330408200

Option 3 ID : 264330408198

Option 4 ID : 264330408199

Status : Answered

Chosen Option : 1

**Q.4** Find the greatest number which when divides 261, 853 and 1221, leaves a remainder of 5 in each case.

- Ans
- 1. 19
  - 2. 18
  - 3. 17
  - 4. 16

Question ID : 26433073062

Option 1 ID : 264330286443

Option 2 ID : 264330286442

Option 3 ID : 264330286441

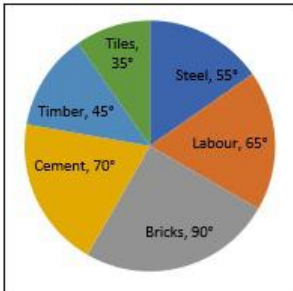
Option 4 ID : 264330286440

Status : Not Attempted and  
Marked For Review

Chosen Option : --

**Q.5** Study the given pie-chart and answer the question that follows.

The pie-chart shows total expenditure of ₹3,00,00,000 on different items for constructing a flat in a town.



The percentage of the total expenditure on Labour and Timber is:

- Ans
- 1.  $30\frac{5}{9}\%$
  - 2.  $30\frac{1}{3}\%$
  - 3.  $30\frac{1}{9}\%$
  - 4.  $30\frac{7}{9}\%$

Question ID : 264330158282

Option 1 ID : 264330620488

Option 2 ID : 264330620490

Option 3 ID : 264330620487

Option 4 ID : 264330620489

Status : Not Attempted and  
Marked For Review

Chosen Option : --

**Q.6** What is the number of valid votes cast in favour of a candidate in an election, if the candidate received 75% of the total valid votes, and 5% of the total votes were declared invalid, given that the total number of voters was 1,46,000?

- Ans
- 1. 1,06,650
  - 2. 1,10,250
  - 3. 1,04,025
  - 4. 1,08,850

Question ID : 264330157711  
 Option 1 ID : 264330618205  
 Option 2 ID : 264330618203  
 Option 3 ID : 264330618206  
 Option 4 ID : 264330618204  
 Status : Not Attempted and Marked For Review  
 Chosen Option : --

**Q.7** A conical shape vessel has a radius of 21 cm and has a slant height of 25 cm. If the curved part of the vessel is to be painted white, find the cost (in ₹) of painting at the rate of ₹1.5 per cm<sup>2</sup>.

- Ans
- 1. 2475
  - 2. 1650
  - 3. 825
  - 4. 1250

Question ID : 264330145104  
 Option 1 ID : 264330568674  
 Option 2 ID : 264330568671  
 Option 3 ID : 264330568672  
 Option 4 ID : 264330568673  
 Status : Not Attempted and Marked For Review  
 Chosen Option : --

**Q.8** P and Q can do a work together in 30 days. Q and R can do the same work together in 24 days and R and P together in 20 days. They started the work together, but Q and R left after 10 days. How many more days will P take to finish the remaining work?

- Ans
- 1. 23
  - 2. 21
  - 3. 18
  - 4. 19

Question ID : 264330122719  
 Option 1 ID : 264330480974  
 Option 2 ID : 264330480973  
 Option 3 ID : 264330480971  
 Option 4 ID : 264330480972  
 Status : Not Attempted and Marked For Review  
 Chosen Option : --

**Q.9** Find the greatest possible length (in metres) that can be used to exactly measure the lengths 6 m, 5 m 25 cm and 12 m 50 cm.

- Ans  1. 0.25 m  
 2. 0.75 m  
 3. 0.90 m  
 4. 0.35 m

Question ID : 26433073063  
 Option 1 ID : 264330286447  
 Option 2 ID : 264330286445  
 Option 3 ID : 264330286444  
 Option 4 ID : 264330286446  
 Status : Not Attempted and Marked For Review  
 Chosen Option : --

**Q.10** In a village election, Sharuk got 80% of the total valid votes. 10% of the votes were invalid. If the total number of votes was 4500, then find the number of valid votes the other candidate got.

- Ans  1. 620  
 2. 450  
 3. 530  
 4. 810

Question ID : 264330145071  
 Option 1 ID : 264330568540  
 Option 2 ID : 264330568539  
 Option 3 ID : 264330568541  
 Option 4 ID : 264330568542  
 Status : Not Attempted and Marked For Review  
 Chosen Option : --

**Q.11** What will be the difference between the total surface area and the curved surface area of a hemisphere having 4 cm diameter?

- Ans  1.  $5\pi \text{ cm}^2$   
 2.  $8\pi \text{ cm}^2$   
 3.  $4\pi \text{ cm}^2$   
 4.  $4.4\pi \text{ cm}^2$

Question ID : 264330104374  
 Option 1 ID : 264330409800  
 Option 2 ID : 264330409798  
 Option 3 ID : 264330409797  
 Option 4 ID : 264330409799  
 Status : Not Attempted and Marked For Review  
 Chosen Option : --

Q.12 A can do a piece of work in 8 days, while B can do it in 7 days. If they work at it alternately beginning with A, then in how many days will the work be completed?

- Ans
- 1. 8
  - 2.  $8\frac{1}{2}$
  - 3.  $7\frac{1}{2}$
  - 4. 7

Question ID : 26433082414  
 Option 1 ID : 264330323491  
 Option 2 ID : 264330323492  
 Option 3 ID : 264330323490  
 Option 4 ID : 264330323489  
 Status : Answered  
 Chosen Option : 3

Q.13 The cost of painting the total surface area of a 30 m high solid right circular cylinder at the rate of ₹25 per  $m^2$  is ₹18,425. What is the volume (in  $m^3$ ) of this cylinder [use  $\pi = \frac{22}{7}$ ]?

- Ans
- 1. 1145
  - 2. 1210
  - 3. 1155
  - 4. 1122

Question ID : 264330122876  
 Option 1 ID : 264330481571  
 Option 2 ID : 264330481574  
 Option 3 ID : 264330481573  
 Option 4 ID : 264330481572  
 Status : Not Attempted and Marked For Review  
 Chosen Option : --

Q.14 What is the length (in cm) of the transverse common tangent between two circles with radii 6 cm and 4 cm, given that the distance between their centres is 14 cm?

- Ans
- 1.  $2\sqrt{6}$
  - 2.  $4\sqrt{6}$
  - 3.  $5\sqrt{6}$
  - 4.  $3\sqrt{6}$

Question ID : 264330163486  
 Option 1 ID : 264330641203  
 Option 2 ID : 264330641205  
 Option 3 ID : 264330641206  
 Option 4 ID : 264330641204  
 Status : Not Attempted and Marked For Review  
 Chosen Option : --

Q.15 The value of  $(1 + \sin^4 A - \cos^4 A) \operatorname{cosec}^2 A$  is:

- Ans
- 1. -2
  - 2. 2
  - 3. 1
  - 4. -1

Question ID : 264330157758

Option 1 ID : 264330618394

Option 2 ID : 264330618393

Option 3 ID : 264330618391

Option 4 ID : 264330618392

Status : Not Attempted and  
Marked For Review

Chosen Option : --

Q.16 The table given below shows the number of products sold by 4 shopkeepers A, B, C and D on four different days.

person \ Days	A	B	C	D
Monday	1000	800	-	750
Tuesday	500	-	900	650
Wednesday	800	1000	700	-
Thursday	-	1200	800	900

If the total products sold by A and B, including all four days, is 3000 and 3500, respectively, the products sold by B on Tuesday is how many more or less than the products sold by A on Thursday?

- Ans
- 1. 300 more
  - 2. 200 less
  - 3. 200 more
  - 4. 300 less

Question ID : 264330167246

Option 1 ID : 264330655982

Option 2 ID : 264330655979

Option 3 ID : 264330655980

Option 4 ID : 264330655981

Status : Not Attempted and  
Marked For Review

Chosen Option : --

Q.17 If an amount of ₹80 becomes ₹96 in 2 years in a bank account which gives simple annual interest, then an amount of ₹62,000 will become \_\_\_\_\_ in the same account after 5 years.

- Ans
- 1. ₹88,200
  - 2. ₹84,600
  - 3. ₹82,400
  - 4. ₹93,000

Question ID : 264330117926

Option 1 ID : 264330463522

Option 2 ID : 264330463520

Option 3 ID : 264330463519

Option 4 ID : 264330463521

Status : Not Attempted and  
Marked For Review

Chosen Option : --

Q.18 If  $a \propto b$ ,  $b \propto \frac{1}{c}$  and  $c \propto d$ , then the relation between a and d is:

- Ans
- ✓ 1.  $a \propto \frac{1}{d}$
  - ✗ 2.  $a \propto d$
  - ✗ 3.  $a \propto d^2$
  - ✗ 4.  $a \propto \sqrt{d}$

Question ID : 264330145072  
 Option 1 ID : 264330568544  
 Option 2 ID : 264330568543  
 Option 3 ID : 264330568545  
 Option 4 ID : 264330568546  
 Status : Answered  
 Chosen Option : 1

Q.19 Study the given table and answer the question that follows.  
 The table shows the production of five types of cars P, Q, R, S and T by a company from the year 1989 to 1994.

Type of Car	1989	1990	1991	1992	1993	1994	Total
P	8	20	16	17	21	6	88
Q	16	10	14	12	12	14	78
R	21	17	16	15	13	8	90
S	4	6	10	16	20	31	87
T	25	18	19	30	14	27	133
Total	74	71	75	90	80	86	476

During the period 1989-94, which type of car featured a continuous increase in production?

- Ans
- ✓ 1. S
  - ✗ 2. Q
  - ✗ 3. R
  - ✗ 4. P

Question ID : 264330165465  
 Option 1 ID : 264330648942  
 Option 2 ID : 264330648940  
 Option 3 ID : 264330648941  
 Option 4 ID : 264330648939  
 Status : Answered  
 Chosen Option : 4

Q.20 Evaluate  $6.9 - [8.6 - \{6.5 - (5.4 - 4.3 - 2)\}]$ .

- Ans
- ✗ 1. 1.8
  - ✗ 2. 1.9
  - ✗ 3. 1.6
  - ✓ 4. 1.7

Question ID : 26433063983  
 Option 1 ID : 264330250526  
 Option 2 ID : 264330250527  
 Option 3 ID : 264330250525  
 Option 4 ID : 264330250524  
 Status : Not Attempted and Marked For Review  
 Chosen Option : --

Q.21 A thief is noticed by a policeman from a distance of 300 m. The thief starts running and the policeman starts chasing him. The thief and policeman run at the rate of 11 km/h and 13 km/h, respectively. After running for how many kilometres will the policeman be able to catch the thief?

- Ans
- 1. 1.65
  - 2. 1.85
  - 3. 1.75
  - 4. 1.95

Question ID : 26433082987

Option 1 ID : 264330325781

Option 2 ID : 264330325783

Option 3 ID : 264330325782

Option 4 ID : 264330325784

Status : Not Attempted and  
Marked For Review

Chosen Option : --

Q.22 A sum of ₹1,00,000 was taken from a bank at the rate of 7% p.a to be compounded annually for 5 years. Calculate the compound interest. (Closest to a ₹)

- Ans
- 1. ₹40,000
  - 2. ₹20,963
  - 3. ₹40,567
  - 4. ₹40,255

Question ID : 264330145083

Option 1 ID : 264330568587

Option 2 ID : 264330568590

Option 3 ID : 264330568589

Option 4 ID : 264330568588

Status : Not Attempted and  
Marked For Review

Chosen Option : --

Q.23 The curved surface area of a cone whose base radius is 7 cm and slant height is 10 cm is:

- Ans
- 1.  $280 \text{ cm}^2$
  - 2.  $250 \text{ cm}^2$
  - 3.  $300 \text{ cm}^2$
  - 4.  $220 \text{ cm}^2$

Question ID : 264330103753

Option 1 ID : 264330407319

Option 2 ID : 264330407318

Option 3 ID : 264330407320

Option 4 ID : 264330407317

Status : Not Attempted and  
Marked For Review

Chosen Option : --



Q.24 A sector of a circle has a central angle of  $45^\circ$  and an arc length of 22 cm.  
Find the radius of the circle. ( Use  $\pi = \frac{22}{7}$ .)

- Ans
- 1. 32 cm
  - 2. 35 cm
  - 3. 28 cm
  - 4. 36 cm

Question ID : 264330163481

Option 1 ID : 264330641185

Option 2 ID : 264330641183

Option 3 ID : 264330641184

Option 4 ID : 264330641186

Status : **Not Attempted and  
Marked For Review**

Chosen Option : --

Q.25 The least common multiple of 210, 336 and 504 is :

- Ans
- 1. 5040
  - 2. 3360
  - 3. 2100
  - 4. 4560

Question ID : 26433066160

Option 1 ID : 264330259173

Option 2 ID : 264330259172

Option 3 ID : 264330259174

Option 4 ID : 264330259175

Status : **Not Attempted and  
Marked For Review**

Chosen Option : --

Q.26 The LCM of  $\frac{1}{3}$ ,  $\frac{3}{5}$ ,  $\frac{4}{7}$  and  $\frac{9}{16}$  is:

- Ans
- 1. 36
  - 2. 49
  - 3. 38
  - 4. 81

Question ID : 264330145041

Option 1 ID : 264330568419

Option 2 ID : 264330568421

Option 3 ID : 264330568420

Option 4 ID : 264330568422

Status : **Not Attempted and  
Marked For Review**

Chosen Option : --

Q.27 Study the given table and answer the question that follows.

The table shows the number of students doing various courses in various cities.

City	MBA	MCA	M.Sc.	M.Com.	M.A.	Total
Ahmedabad	1234	1384	1440	1289	1332	6679
Bengaluru	1156	1783	1874	1003	1340	7156
Bhopal	1187	1347	1532	1321	1486	6873
Chennai	1342	1473	1129	1765	1666	7375
New Delhi	1230	1098	1128	1865	1777	7098
Hyderabad	1456	1234	1556	1653	1789	7688
Kolkata	1239	1785	1865	1504	1762	8155

In Chennai, the number of students in MBA is nearly what percentage of students in M.A? (rounded off to 2 digits after decimal)

- Ans
- 1. 76.25%
  - 2. 80.55%
  - 3. 92.12%
  - 4. 99.23%

Question ID : 264330145102

Option 1 ID : 264330568663

Option 2 ID : 264330568664

Option 3 ID : 264330568665

Option 4 ID : 264330568666

Status : Not Attempted and  
Marked For Review

Chosen Option : --

Q.28 If  $\cos A = \frac{15}{17}$ ,  $0 \leq A \leq 90^\circ$ , then the value of  $\cot(90^\circ - A)$  is:

- Ans
- 1.  $\frac{8}{15}$
  - 2.  $\frac{2\sqrt{2}}{15}$
  - 3.  $\frac{\sqrt{2}}{15}$
  - 4.  $\frac{7}{15}$

Question ID : 264330157751

Option 1 ID : 264330618364

Option 2 ID : 264330618366

Option 3 ID : 264330618365

Option 4 ID : 264330618363

Status : Answered

Chosen Option : 1

**Q.29** Study the given table and answer the question that follows.

The table shows the number of cakes sold by four different bakeries in 4 different months.

Month \ Bakery	August	September	October	November
P	250	241	213	168
Q	175	189	201	122
R	164	145	129	168
S	224	154	184	209

What is the difference between the total number of cakes sold by bakeries Q and S together in September and the total number of cakes sold by bakeries P and R together in November?

- Ans**
- 1. 7
  - 2. 9
  - 3. 10
  - 4. 8

Question ID : 264330158259  
 Option 1 ID : 264330620398  
 Option 2 ID : 264330620396  
 Option 3 ID : 264330620395  
 Option 4 ID : 264330620397

Status : **Not Attempted and Marked For Review**

Chosen Option : --

**Q.30** The volume of a right circular cone having a base diameter of 14 cm is  $196\pi$  cm<sup>3</sup>. Find the perpendicular height of this cone

- Ans**
- 1. 10 cm
  - 2. 12 cm
  - 3. 14 cm
  - 4. 8 cm

Question ID : 264330145117  
 Option 1 ID : 264330568724  
 Option 2 ID : 264330568725  
 Option 3 ID : 264330568726  
 Option 4 ID : 264330568723

Status : **Not Attempted and Marked For Review**

Chosen Option : --

Q.31

Find the LCM of  $\frac{3}{2}$ ,  $\frac{81}{16}$  and  $\frac{9}{8}$ .

Ans

1.  $\frac{91}{2}$

2.  $\frac{81}{2}$

3.  $\frac{111}{2}$

4.  $\frac{101}{2}$

Question ID : 26433080080

Option 1 ID : 264330314269

Option 2 ID : 264330314268

Option 3 ID : 264330314271

Option 4 ID : 264330314270

Status : Not Attempted and  
Marked For Review

Chosen Option : --

Q.32

If  $\frac{A}{L} + \frac{M}{B} = 1$  and  $\frac{B}{M} + \frac{N}{C} = 1$ , then the value of  $\frac{L}{A} + \frac{C}{N}$  is:

Ans

1.  $\frac{B}{M}$

2. 0

3. 1

4.  $\frac{M}{B}$

Question ID : 264330157777

Option 1 ID : 264330618470

Option 2 ID : 264330618468

Option 3 ID : 264330618467

Option 4 ID : 264330618469

Status : Not Attempted and  
Marked For Review

Chosen Option : --

Q.33 The perimeter of a sector of a circle is 24 cm and the radius is 3 cm. Calculate the area (in  $\text{cm}^2$ ) of the sector.

Ans

1. 24

2. 33

3. 27

4. 30

Question ID : 264330163482

Option 1 ID : 264330641187

Option 2 ID : 264330641190

Option 3 ID : 264330641188

Option 4 ID : 264330641189

Status : Not Attempted and  
Marked For Review

Chosen Option : --

**Q.34** Study the given table and answer the question that follows.  
The table shows the production of five types of cars P, Q, R, S and T by a company from the year 1989 to 1994.

Type of Car	1989	1990	1991	1992	1993	1994	Total
P	8	20	16	17	21	6	88
Q	16	10	14	12	12	14	78
R	21	17	16	15	13	8	90
S	4	6	10	16	20	31	87
T	25	18	19	30	14	27	133
Total	74	71	75	90	80	86	476

During the period 1989-94, which type of car featured a continuous decrease in production?

- Ans
- 1. S
  - 2. Q
  - 3. R
  - 4. T

Question ID : 264330165466

Option 1 ID : 264330648945

Option 2 ID : 264330648943

Option 3 ID : 264330648944

Option 4 ID : 264330648946

Status : Not Attempted and Marked For Review

Chosen Option : --

**Q.35** Find the value of  $\frac{\cos 65^\circ}{\sin 25^\circ} + \frac{5 \sin 19^\circ}{\cos 71^\circ} - \frac{3 \cos 28^\circ}{\sin 62^\circ}$ .

- Ans
- 1. 2
  - 2. 0
  - 3. 1
  - 4. 3

Question ID : 264330158292

Option 1 ID : 264330620529

Option 2 ID : 264330620527

Option 3 ID : 264330620528

Option 4 ID : 264330620530

Status : Not Attempted and Marked For Review

Chosen Option : --

**Q.36** Swastik saves 20% of his income while spends the remaining amount on food, rent, education and shopping. 15% of the income is spent on food, while ₹12,800 is spent on rent, ₹32,000 on education and ₹7,200 on shopping. The amount spent on shopping is 11.25% of the total expenditure. How much money (in ₹) is spent on food?

- Ans
- 1. 9600
  - 2. 10800
  - 3. 12000
  - 4. 15000

Question ID : 264330103315

Option 1 ID : 264330405567

Option 2 ID : 264330405568

Option 3 ID : 264330405565

Option 4 ID : 264330405566

Status : Not Attempted and Marked For Review

Chosen Option : --

Q.37 Simplify the given expression.

$$\frac{a^2 - b^2 - 2bc - c^2}{a^2 + b^2 + 2ab - c^2}$$

- Ans
- 1.  $\frac{a + b + c}{a - b - c}$
  - 2.  $\frac{a - b - c}{a + b - c}$
  - 3.  $\frac{a + b - c}{a - b - c}$
  - 4.  $\frac{a - b + c}{a + b - c}$

Question ID : 264330157767

Option 1 ID : 264330618430

Option 2 ID : 264330618429

Option 3 ID : 264330618428

Option 4 ID : 264330618427

Status : Not Attempted and  
Marked For Review

Chosen Option : --

Q.38 If the marked price is 75% more than the cost price and a discount of 40% is allowed on the marked price, then the percentage profit is:

- Ans
- 1. 6%
  - 2. 7%
  - 3. 8%
  - 4. 5%

Question ID : 264330104505

Option 1 ID : 264330410324

Option 2 ID : 264330410321

Option 3 ID : 264330410322

Option 4 ID : 264330410323

Status : Not Attempted and  
Marked For Review

Chosen Option : --

Q.39 In what ratio must a shopkeeper mix two types of rice worth ₹55 per kg and ₹70 per kg, so that the average cost of the mixture is ₹65 per kg?

- Ans
- 1. 1 : 2
  - 2. 2 : 3
  - 3. 3 : 2
  - 4. 1 : 3

Question ID : 264330105977

Option 1 ID : 264330416212

Option 2 ID : 264330416209

Option 3 ID : 264330416210

Option 4 ID : 264330416211

Status : Not Attempted and  
Marked For Review

Chosen Option : --

Q.40 What is the value of the given expression?

$$\frac{1}{12} + \frac{1}{16} + \frac{1}{8}$$

- Ans
- ✓ 1.  $\frac{13}{48}$
  - ✗ 2.  $\frac{10}{72}$
  - ✗ 3.  $\frac{3}{48}$
  - ✗ 4.  $\frac{13}{18}$

Question ID : 26433063280

Option 1 ID : 264330247773

Option 2 ID : 264330247775

Option 3 ID : 264330247772

Option 4 ID : 264330247774

Status : Answered

Chosen Option : 1

Q.41 For a triangle ABC, D and E are two points on AB and AC such that  $AD = \frac{1}{6} AB$ ,  $AE = \frac{1}{6} AC$ . If  $BC = 22$  cm, then DE is \_\_\_\_\_. (Consider up to two decimals)

- Ans
- ✗ 1. 1.33 cm
  - ✗ 2. 1.67 cm
  - ✓ 3. 3.67 cm
  - ✗ 4. 3.33 cm

Question ID : 264330145114

Option 1 ID : 264330568714

Option 2 ID : 264330568711

Option 3 ID : 264330568713

Option 4 ID : 264330568712

Status : Not Attempted and  
Marked For Review

Chosen Option : --

Q.42 Reema runs  $\frac{5}{4}$  times as fast as Rekha. In view of this Reema allows Rekha a lead of 50 metres to Rekha in a friendly race competition. What is the distance from the starting point where both Reema and Rekha meet?

- Ans
- ✓ 1. 250 m
  - ✗ 2. 225 m
  - ✗ 3. 200 m
  - ✗ 4. 240 m

Question ID : 264330145027

Option 1 ID : 264330568363

Option 2 ID : 264330568364

Option 3 ID : 264330568365

Option 4 ID : 264330568366

Status : Not Attempted and  
Marked For Review

Chosen Option : --

Q.43 The given table shows marks obtained by four students in four subjects.

Subjects Student	Maths (100)	English (100)	Science (100)	Hindi (100)
A	75	80	75	85
B	80	70	70	80
C	70	85	85	75
D	85	75	80	70

The average percentage of marks obtained by all students in Hindi is:

- Ans
- 1. 77.0%
  - 2. 77.6%
  - 3. 77.8%
  - 4. 77.5%

Question ID : 264330165488

Option 1 ID : 264330649032

Option 2 ID : 264330649031

Option 3 ID : 264330649034

Option 4 ID : 264330649033

Status : Not Attempted and  
Marked For Review

Chosen Option : --

Q.44 If  $\cot \theta = \frac{4}{3}$ ,  $0 < \theta < \frac{\pi}{2}$ , and  $5p \cos^2 \theta \sin \theta = \cot^2 \theta$ , then the value of p is:

- Ans
- 1.  $\frac{7}{27}$
  - 2.  $\frac{125}{27}$
  - 3.  $\frac{5}{27}$
  - 4.  $\frac{25}{27}$

Question ID : 264330145122

Option 1 ID : 264330568746

Option 2 ID : 264330568745

Option 3 ID : 264330568744

Option 4 ID : 264330568743

Status : Answered

Chosen Option : 4



Q.45 Train 'A' requires 15 seconds to cross train 'B' of length 300 m moving in the opposite direction at a speed of 36 km/h. Further, train 'A' requires 30 seconds to cross a 500 m long stationary train 'C'. Find the length (in m) of train 'A'.

Ans  1. 200

2. 300

3. 250

4. 275

Question ID : 264330103990

Option 1 ID : 264330408264

Option 2 ID : 264330408261

Option 3 ID : 264330408263

Option 4 ID : 264330408262

Status : Not Attempted and  
Marked For Review

Chosen Option : --

Q.46 If the difference between the selling prices of an article at profits of 10% and 7% is ₹6, then the cost price (in ₹) of the article is:

Ans  1. 175

2. 150

3. 200

4. 100

Question ID : 264330102344

Option 1 ID : 264330401843

Option 2 ID : 264330401842

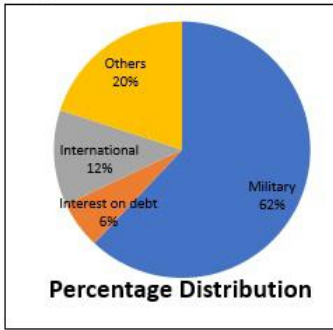
Option 3 ID : 264330401844

Option 4 ID : 264330401841

Status : Not Attempted and  
Marked For Review

Chosen Option : --

Q.47 Study the given pie-chart and answer the question that follows.  
The pie-chart shows the National Budget Expenditure in the year 2019.



If ₹850 billion were spent in year 2019 for interest on debt and military, then what would have been the total expenditure for that year (in ₹ billion)?

- Ans
- 1. 1,700
  - 2. 1,300
  - 3. 1,250
  - 4. 1,450

Question ID : 264330158281  
Option 1 ID : 264330620483  
Option 2 ID : 264330620485  
Option 3 ID : 264330620486  
Option 4 ID : 264330620484

Status : Not Attempted and Marked For Review

Chosen Option : --

Q.48 John can do a piece of work alone in 20 days, while Ravi can do the same piece of work alone in 28 days. In how many days can the duo complete the same work if they work together?

- Ans
- 1.  $11\frac{1}{3}$
  - 2.  $12\frac{2}{3}$
  - 3.  $11\frac{2}{3}$
  - 4.  $12\frac{1}{3}$

Question ID : 264330103284  
Option 1 ID : 264330405442  
Option 2 ID : 264330405444  
Option 3 ID : 264330405441  
Option 4 ID : 264330405443

Status : Not Attempted and Marked For Review

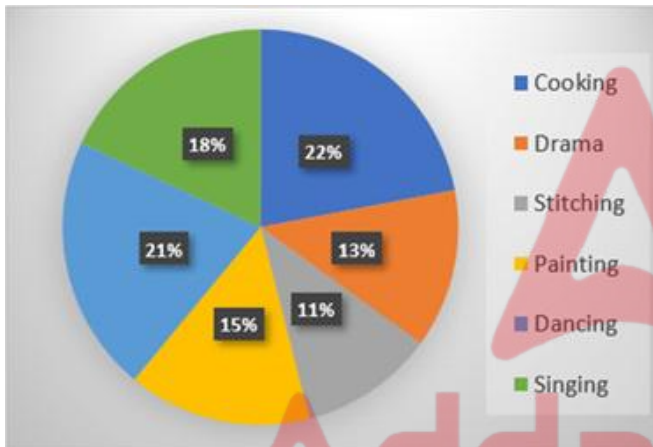
Chosen Option : --

**Q.49** At a courier shop, the weights of 8 parcels were found to be 1.5 kg, 1.25 kg, 1.35 kg, 750 gm, 950 gm, 0.7 kg, 0.4 kg, and 0.5 kg. Find their average weight.

- Ans
- 1. 875gm
  - 2. 900gm
  - 3. 925gm
  - 4. 700gm

Question ID : 264330109236  
 Option 1 ID : 264330429221  
 Option 2 ID : 264330429223  
 Option 3 ID : 264330429224  
 Option 4 ID : 264330429222  
 Status : Answered  
 Chosen Option : 3

**Q.50** Study the given pie-chart and answer the question that follows. The pie-chart shows the percentage of 3600 students enrolled in different hobby classes in a school.



The number of students enrolled in Painting classes is approximately what percentage of those enrolled in Singing classes?

- Ans
- 1. 108%
  - 2. 83%
  - 3. 98%
  - 4. 78%

Question ID : 264330157735  
 Option 1 ID : 264330618302  
 Option 2 ID : 264330618300  
 Option 3 ID : 264330618301  
 Option 4 ID : 264330618299  
 Status : Answered  
 Chosen Option : 1

Q.1 Select the option that can be used as a one-word substitute for the given group of words.

Study of science of insects

- Ans  1. Entomology  
 2. Anthropology  
 3. Microbiology  
 4. Ecology

Question ID : 26433088991  
Option 1 ID : 264330349501  
Option 2 ID : 264330349502  
Option 3 ID : 264330349504  
Option 4 ID : 264330349503  
Status : Answered  
Chosen Option : 1

Q.2 Select the most appropriate ANTONYM of the given word.

Apathy

- Ans  1. Interruption  
 2. Ignorance  
 3. Interest  
 4. Sincerity

Question ID : 26433099134  
Option 1 ID : 264330389149  
Option 2 ID : 264330389152  
Option 3 ID : 264330389150  
Option 4 ID : 264330389151  
Status : Not Attempted and  
Marked For Review  
Chosen Option : --

Q.3 Select the option that can be used as a one-word substitute for the given group of words.

One who settles in another country

- Ans  1. Resident  
 2. Immigrant  
 3. Traveller  
 4. Refugee

Question ID : 26433088532  
Option 1 ID : 264330347704  
Option 2 ID : 264330347701  
Option 3 ID : 264330347703  
Option 4 ID : 264330347702  
Status : Answered  
Chosen Option : 2

Q.4 Select the most appropriate option that can substitute the underlined segment in the given sentence. If there is no need to substitute it, select 'No substitution required'.  
The Taj Mahal is one of the much popular seven wonders of the world.

- Ans
- 1. No substitution required
  - 2. more
  - 3. much more
  - 4. most

Question ID : 26433070768  
Option 1 ID : 264330277531  
Option 2 ID : 264330277529  
Option 3 ID : 264330277528  
Option 4 ID : 264330277530  
Status : Answered  
Chosen Option : 4

Q.5 Select the INCORRECTLY spelt word from the given sentence.  
Gandhiji considared untouchability to be one of India's major social ills.

- Ans
- 1. social
  - 2. major
  - 3. considared
  - 4. untouchability

Question ID : 264330164526  
Option 1 ID : 264330645298  
Option 2 ID : 264330645297  
Option 3 ID : 264330645295  
Option 4 ID : 264330645296  
Status : Answered  
Chosen Option : 3

Q.6 Select the most appropriate meaning of the given idiom.

Crack someone up

- Ans
- 1. To criticise someone
  - 2. To force someone to commit a mistake
  - 3. To make someone angry
  - 4. To make someone laugh

Question ID : 264330163404  
Option 1 ID : 264330640896  
Option 2 ID : 264330640898  
Option 3 ID : 264330640895  
Option 4 ID : 264330640897  
Status : Answered  
Chosen Option : 1

Q.7 Select the most appropriate synonym of the given word.  
Captivate

- Ans  1. Study  
 2. Allure  
 3. Envelope  
 4. Arrest

Question ID : 264330102432  
Option 1 ID : 264330402176  
Option 2 ID : 264330402174  
Option 3 ID : 264330402175  
Option 4 ID : 264330402173

Status : Not Attempted and  
Marked For Review

Chosen Option : --

Q.8 Select the option that can be used as a one-word substitute for the given group of words.

The capacity for being useful for some purpose.

- Ans  1. Gain  
 2. Utility  
 3. Desirability  
 4. Aid

Question ID : 26433090451  
Option 1 ID : 264330355265  
Option 2 ID : 264330355266  
Option 3 ID : 264330355268  
Option 4 ID : 264330355267

Status : Answered

Chosen Option : 2

Q.9 Select the most appropriate ANTONYM of the given word.

Rejoinder

- Ans  1. Expedite  
 2. Reply  
 3. Ordinary  
 4. Request

Question ID : 264330163379  
Option 1 ID : 264330640806  
Option 2 ID : 264330640803  
Option 3 ID : 264330640804  
Option 4 ID : 264330640805

Status : Not Attempted and  
Marked For Review

Chosen Option : --

Q.10 Select the sentence that has a spelling error.

- A- The art of living is learnt easily by those who are positive and optimistic.  
B- We can learn a lot about the art of living by having a peep into the lives of great men.  
C- The daily routines of these great men dissiminate that they are different.  
D- Their unique lifestyles help us learn certain habits and practices that they followed.

- Ans  1. The daily routines of these great men dissiminate that they are different.  
 2. Their unique lifestyles help us learn certain habits and practices that they followed.  
 3. We can learn a lot about the art of living by having a peep into the lives of great men.  
 4. The art of living is learnt easily by those who are positive and optimistic.

Question ID : 264330141561  
Option 1 ID : 264330554581  
Option 2 ID : 264330554582  
Option 3 ID : 264330554580  
Option 4 ID : 264330554579  
Status : Answered  
Chosen Option : 2

Q.11 Select the correct idiom to replace the underlined segment in the given sentence.

We should ask Emily to join our team. She is as keen as butter.

- Ans  1. as keen as a bee  
 2. as keen as mustard  
 3. as keen as salt  
 4. as keen as sugar

Question ID : 26433092313  
Option 1 ID : 264330362550  
Option 2 ID : 264330362551  
Option 3 ID : 264330362549  
Option 4 ID : 264330362552  
Status : Answered  
Chosen Option : 1

Q.12 Choose the correct spelling of the underlined word in the given sentence.  
He has won the medal for the twelth time.

- Ans  1. Twellth  
 2. Twwelfth  
 3. Twelfth  
 4. Twelth

Question ID : 264330117377  
Option 1 ID : 264330461549  
Option 2 ID : 264330461551  
Option 3 ID : 264330461550  
Option 4 ID : 264330461552  
Status : Answered  
Chosen Option : 1

Q.13 Select the most appropriate meaning of the given idiom.

What a small world!

- Ans
- 1. The world is great.
  - 2. What a beautiful place!
  - 3. The world is a village.
  - 4. What a coincidence!

Question ID : 26433099940

Option 1 ID : 264330392334

Option 2 ID : 264330392336

Option 3 ID : 264330392333

Option 4 ID : 264330392335

Status : Answered

Chosen Option : 4

Q.14 Select the most appropriate option that can substitute the underlined segment in the given sentence.

Payal's father was seen desperately searching for the medicine that can counteract the effect of a venomous snakebite in Parul's left hand.

- Ans
- 1. antiseptic
  - 2. anti-serum
  - 3. remedy
  - 4. antidote

Question ID : 26433070594

Option 1 ID : 264330276840

Option 2 ID : 264330276842

Option 3 ID : 264330276843

Option 4 ID : 264330276841

Status : Answered

Chosen Option : 4

Q.15 Select the most appropriate ANTONYM of the given word.  
Asset

- Ans
- 1. Mole
  - 2. Liability
  - 3. Wealth
  - 4. Refuge

Question ID : 264330167909

Option 1 ID : 264330658555

Option 2 ID : 264330658558

Option 3 ID : 264330658557

Option 4 ID : 264330658556

Status : Answered

Chosen Option : 2



Q.16 Select the INCORRECTLY spelt word.

- Ans
- 1. Merriment
  - 2. Yearn
  - 3. Zenith
  - 4. Miniture

Question ID : 26433091838  
Option 1 ID : 264330360690  
Option 2 ID : 264330360692  
Option 3 ID : 264330360691  
Option 4 ID : 264330360689  
Status : Answered  
Chosen Option : 4

Q.17 Select the most appropriate ANTONYM of the given word.  
Placid

- Ans
- 1. Turbulent
  - 2. Pensive
  - 3. Pristine
  - 4. Destined

Question ID : 26433097020  
Option 1 ID : 264330380815  
Option 2 ID : 264330380816  
Option 3 ID : 264330380813  
Option 4 ID : 264330380814  
Status : Not Attempted and  
Marked For Review  
Chosen Option : --

Q.18 Choose the most suitable idiom for the given situation.

Ravi has a strong desire to be in college hockey team this year and he is working hard to gain such skills to fulfill his goal of life. He has clearly made up his mind to achieve his target.

- Ans
- 1. To rise to the occasion
  - 2. To make the cut
  - 3. Set sights on
  - 4. To move the goal posts

Question ID : 264330137462  
Option 1 ID : 264330538474  
Option 2 ID : 264330538472  
Option 3 ID : 264330538473  
Option 4 ID : 264330538471  
Status : Not Attempted and  
Marked For Review  
Chosen Option : --

Q.19 Select the INCORRECTLY spelt word.

- Ans
- 1. Bread
  - 2. Pasta
  - 3. Noodle
  - 4. Piza

Question ID : 26433089012  
Option 1 ID : 264330349588  
Option 2 ID : 264330349586  
Option 3 ID : 264330349585  
Option 4 ID : 264330349587  
Status : Answered  
Chosen Option : 4

Q.20 Identify the sentence that correctly uses the indefinite article.

- Ans
- 1. There are three cars parked outside: a Mercedes, an Jaguar and a Fiat.
  - 2. There are three cars parked outside: an Mercedes, a Jaguar and a Fiat.
  - 3. There are three cars parked outside: a Mercedes, a Jaguar and a Fiat.
  - 4. There are three cars parked outside: a Mercedes, an Jaguar and an Fiat.

Question ID : 26433059561  
Option 1 ID : 264330233094  
Option 2 ID : 264330233093  
Option 3 ID : 264330233092  
Option 4 ID : 264330233095  
Status : Answered  
Chosen Option : 3

Q.21 You are preparing a speech for an upcoming function. Select a synonym for the highlighted word to make it better.

Effective public transportation networks may greatly alleviate traffic congestion and enhance inhabitants' quality of life in general.

- Ans
- 1. Amplification
  - 2. Diversion
  - 3. Gridlock
  - 4. Laxity

Question ID : 264330121904  
Option 1 ID : 264330477774  
Option 2 ID : 264330477772  
Option 3 ID : 264330477771  
Option 4 ID : 264330477773  
Status : Answered  
Chosen Option : 3

Q.22 Select the option that can be used as a one-word substitute for the given group of words.

Happening repeatedly

- Ans
- 1. Recuperate
  - 2. Recurrent
  - 3. Rapport
  - 4. Regression

Question ID : 26433073674  
Option 1 ID : 264330288837  
Option 2 ID : 264330288836  
Option 3 ID : 264330288839  
Option 4 ID : 264330288838  
Status : Answered  
Chosen Option : 2

Q.23 Select the correct idiom that can substitute the italicised group of words in the given sentence.

He really stinks and *smells foul* after a hard session at the gym.

- Ans
- 1. an old flame
  - 2. an iron will
  - 3. pen and ink
  - 4. lame excuse

Question ID : 26433094782  
Option 1 ID : 264330371953  
Option 2 ID : 264330371955  
Option 3 ID : 264330371956  
Option 4 ID : 264330371954  
Status : Not Attempted and Marked For Review  
Chosen Option : --

Q.24 The following sentence has been divided into parts. One of them may contain an error. Select the part that contains the error from the given options. If you don't find any error, mark 'No error' as your answer.

I wanted to buy a candle holder, / but the store didn't have one. / So, I got a cake.

- Ans
- 1. No error
  - 2. but the store didn't have one
  - 3. I wanted to buy a candle holder
  - 4. So, I got a cake

Question ID : 26433059551  
Option 1 ID : 264330233055  
Option 2 ID : 264330233053  
Option 3 ID : 264330233052  
Option 4 ID : 264330233054  
Status : Answered  
Chosen Option : 2

**Q.25** Select the most appropriate idiom to fill in the blank.  
All my efforts went in vain. The project on which I was working for the last two months has failed and we are \_\_\_\_\_.

- Ans
- 1. all in the seventh heaven
  - 2. back to square one
  - 3. on the fly
  - 4. around the bend

Question ID : 264330134221  
Option 1 ID : 264330525880  
Option 2 ID : 264330525879  
Option 3 ID : 264330525881  
Option 4 ID : 264330525882  
Status : Answered  
Chosen Option : 2

**Q.26** Select the most appropriate idiom to fill in the blank.  
Choosing not to pursue a degree in computer engineering was \_\_\_\_\_, as the market for them is extremely limited nowadays.

- Ans
- 1. airy fairy
  - 2. a cut above
  - 3. an elevator pitch
  - 4. a blessing in disguise

Question ID : 264330134219  
Option 1 ID : 264330525871  
Option 2 ID : 264330525873  
Option 3 ID : 264330525874  
Option 4 ID : 264330525872  
Status : Not Attempted and Marked For Review  
Chosen Option : --

**Q.27** Select the option that can be used as a one-word substitute for the given group of words.

A person who believes that God does not exist

- Ans
- 1. Atheist
  - 2. Fanatic
  - 3. Epicurean
  - 4. Hedonistic

Question ID : 26433088195  
Option 1 ID : 264330346375  
Option 2 ID : 264330346374  
Option 3 ID : 264330346376  
Option 4 ID : 264330346373  
Status : Answered  
Chosen Option : 1

Q.28 Select the most appropriate ANTONYM of the word 'discordant' in the given sentence and choose the correct option.

The sweet melodious symphony of the piano filled the room, transporting the listeners to a world of beauty and emotion.

- Ans
- 1. Filled
  - 2. Melodious
  - 3. Transporting
  - 4. Emotion

Question ID : 264330163538

Option 1 ID : 264330641408

Option 2 ID : 264330641407

Option 3 ID : 264330641409

Option 4 ID : 264330641410

Status : Not Attempted and  
Marked For Review

Chosen Option : --

Q.29 Select the correct option to substitute the underlined segment in the given sentence. If no substitution is required, select 'No substitution'.

He is faster than smarter.

- Ans
- 1. more fast than smart
  - 2. fast than smart
  - 3. faster than being smart
  - 4. No substitution

Question ID : 26433090823

Option 1 ID : 264330356713

Option 2 ID : 264330356715

Option 3 ID : 264330356714

Option 4 ID : 264330356716

Status : Not Attempted and  
Marked For Review

Chosen Option : --

Q.30 Parts of the following sentence have been given as options. One of them may contain an error. Select the part that contains the error from the given options. If you don't find any error, mark 'No error' as your answer.

You arrived two days ago. By the time you leave, you will have spent nine days here.

- Ans
- 1. You arrived two days ago
  - 2. No error
  - 3. By the time you leave
  - 4. you will have spent nine days here

Question ID : 26433090496

Option 1 ID : 264330355433

Option 2 ID : 264330355436

Option 3 ID : 264330355434

Option 4 ID : 264330355435

Status : Not Attempted and  
Marked For Review

Chosen Option : --

Q.31 Select the option that can be used as a one-word substitute for the given group of words.

The study of the human mind

- Ans  1. Psychology  
 2. Microbiology  
 3. Epidemiology  
 4. Anthropology

Question ID : 26433088754  
Option 1 ID : 264330348572  
Option 2 ID : 264330348571  
Option 3 ID : 264330348570  
Option 4 ID : 264330348569  
Status : Answered  
Chosen Option : 1

Q.32 Select the most appropriate option to substitute the underlined segment in the given sentence.

Any sort of unfair conduct is not tolerated in international sports tournaments as it can completely ruin an athlete's career.

- Ans  1. straw in the eye  
 2. hand in the mud  
 3. foul play  
 4. red handed

Question ID : 26433092923  
Option 1 ID : 264330364961  
Option 2 ID : 264330364963  
Option 3 ID : 264330364964  
Option 4 ID : 264330364962  
Status : Answered  
Chosen Option : 3

Q.33 Select the most appropriate ANTONYM of the given word.  
Denounce

- Ans  1. Praise  
 2. Relieve  
 3. Criticise  
 4. Dainty

Question ID : 264330165246  
Option 1 ID : 264330648084  
Option 2 ID : 264330648085  
Option 3 ID : 264330648083  
Option 4 ID : 264330648086  
Status : Not Attempted and Marked For Review  
Chosen Option : --

Q.34 Select the most appropriate ANTONYM of the given word.

Leniency

- Ans
- 1. Penalty
  - 2. Favour
  - 3. Sternness
  - 4. Discard

Question ID : 264330163374

Option 1 ID : 264330640786

Option 2 ID : 264330640783

Option 3 ID : 264330640785

Option 4 ID : 264330640784

Status : Not Attempted and  
Marked For Review

Chosen Option : --

Q.35 Select the most appropriate synonym of the word 'viable' in the given sentence and choose the correct option.

The engineer's design was optimised for efficiency and scalability, with a focus on sustainability.

- Ans
- 1. Efficiency
  - 2. Optimised
  - 3. Scalability
  - 4. Sustainability

Question ID : 264330163534

Option 1 ID : 264330641392

Option 2 ID : 264330641391

Option 3 ID : 264330641393

Option 4 ID : 264330641394

Status : Answered

Chosen Option : 2

Q.36 The following sentence has been split into four segments. Identify the segment that contains a grammatical error.

A Prime Minister of India / will address / the nation today / on the occasion of Independence Day.

- Ans
- 1. A Prime Minister of India
  - 2. the nation today
  - 3. on the occasion of Independence Day
  - 4. will address

Question ID : 264330120604

Option 1 ID : 264330472655

Option 2 ID : 264330472657

Option 3 ID : 264330472658

Option 4 ID : 264330472656

Status : Answered

Chosen Option : 1

Q.37 Select the most appropriate idiom to fill in the blank.

I think we should \_\_\_\_\_ before buying this car.

- Ans
- 1. eat like a horse
  - 2. hold our horses
  - 3. stop to change horses
  - 4. get off our high horse

Question ID : 264330163337  
 Option 1 ID : 264330640647  
 Option 2 ID : 264330640650  
 Option 3 ID : 264330640648  
 Option 4 ID : 264330640649  
 Status : Answered  
 Chosen Option : 2

Q.38 Select the correct idiom to substitute the underlined word segment in the following sentence.

She trusted her husband but he stabbed her in the neck when he usurped her inheritance.

- Ans
- 1. stabbed her in the back
  - 2. stabbed her prospects
  - 3. stabbed her with a fork
  - 4. snapped her in the neck

Question ID : 264330101448  
 Option 1 ID : 264330398303  
 Option 2 ID : 264330398302  
 Option 3 ID : 264330398301  
 Option 4 ID : 264330398304  
 Status : Answered  
 Chosen Option : 2

Q.39 Select the option that can be used as a one-word substitute for the given group of words.

A keeper or custodian of a museum or other collection

- Ans
- 1. Cartographer
  - 2. Calligrapher
  - 3. Curator
  - 4. Chauffeur

Question ID : 264330164300  
 Option 1 ID : 264330644415  
 Option 2 ID : 264330644418  
 Option 3 ID : 264330644417  
 Option 4 ID : 264330644416  
 Status : Answered  
 Chosen Option : 3



**Q.40** Parts of the following sentence have been given as options. Select the option that contains an error.  
Raman ate the cake and exclaimed that it tasted sweetly.

- Ans**
- 1. the cake
  - 2. and exclaimed that
  - 3. it tasted sweetly
  - 4. Raman ate

Question ID : 264330134121  
Option 1 ID : 264330525508  
Option 2 ID : 264330525509  
Option 3 ID : 264330525510  
Option 4 ID : 264330525507  
Status : Answered  
Chosen Option : 3

**Comprehension:**

In the following passage, some words have been deleted. Read the passage carefully and select the most appropriate option to fill in each blank.

South Korea is the most cosmetically (1)\_\_\_\_\_ country on Earth. Beauty editors estimate that it is because of the government's heavy investment (2)\_\_\_\_\_ industry. It is ahead of its competitors, and its citizens (3)\_\_\_\_\_ twice as much on skincare products as consumers in the United States, the UK, and France. Korean shoppers are (4)\_\_\_\_\_ the world's most discerning. Eight out of 10 Korean women in their 20s and 30s use an app that (5)\_\_\_\_\_ like a cosmetics-specific, to debate the merits of various common ingredients.

**SubQuestion No : 41**

**Q.41** Select the most appropriate option to fill in blank number 1.

- Ans**
- 1. ancient
  - 2. primitive
  - 3. advanced
  - 4. early

Question ID : 264330164225  
Option 1 ID : 264330644135  
Option 2 ID : 264330644137  
Option 3 ID : 264330644136  
Option 4 ID : 264330644138  
Status : Answered  
Chosen Option : 3

**Comprehension:**

In the following passage, some words have been deleted. Read the passage carefully and select the most appropriate option to fill in each blank.

South Korea is the most cosmetically (1)\_\_\_\_\_ country on Earth. Beauty editors estimate that it is because of the government's heavy investment (2)\_\_\_\_\_ industry. It is ahead of its competitors, and its citizens (3)\_\_\_\_\_ twice as much on skincare products as consumers in the United States, the UK, and France. Korean shoppers are (4)\_\_\_\_\_ the world's most discerning. Eight out of 10 Korean women in their 20s and 30s use an app that (5)\_\_\_\_\_ like a cosmetics-specific, to debate the merits of various common ingredients.

**SubQuestion No : 42**

**Q.42** Select the most appropriate option to fill in blank number 2.

- Ans**  1. of the  
 2. by the  
 3. in the  
 4. from the

Question ID : 264330164226

Option 1 ID : 264330644139

Option 2 ID : 264330644140

Option 3 ID : 264330644141

Option 4 ID : 264330644142

Status : Answered

Chosen Option : 3

**Comprehension:**

In the following passage, some words have been deleted. Read the passage carefully and select the most appropriate option to fill in each blank.

South Korea is the most cosmetically (1)\_\_\_\_\_ country on Earth. Beauty editors estimate that it is because of the government's heavy investment (2)\_\_\_\_\_ industry. It is ahead of its competitors, and its citizens (3)\_\_\_\_\_ twice as much on skincare products as consumers in the United States, the UK, and France. Korean shoppers are (4)\_\_\_\_\_ the world's most discerning. Eight out of 10 Korean women in their 20s and 30s use an app that (5)\_\_\_\_\_ like a cosmetics-specific, to debate the merits of various common ingredients.

**SubQuestion No : 43**

**Q.43** Select the most appropriate option to fill in blank number 3.

- Ans**  1. spend  
 2. cherish  
 3. comply  
 4. propagate

Question ID : 264330164227

Option 1 ID : 264330644146

Option 2 ID : 264330644144

Option 3 ID : 264330644143

Option 4 ID : 264330644145

Status : Answered

Chosen Option : 1

**Comprehension:**

In the following passage, some words have been deleted. Read the passage carefully and select the most appropriate option to fill in each blank.

South Korea is the most cosmetically (1)\_\_\_\_\_ country on Earth. Beauty editors estimate that it is because of the government's heavy investment (2)\_\_\_\_\_ industry. It is ahead of its competitors, and its citizens (3)\_\_\_\_\_ twice as much on skincare products as consumers in the United States, the UK, and France. Korean shoppers are (4)\_\_\_\_\_ the world's most discerning. Eight out of 10 Korean women in their 20s and 30s use an app that (5)\_\_\_\_\_ like a cosmetics-specific, to debate the merits of various common ingredients.

**SubQuestion No : 44**

**Q.44** Select the most appropriate option to fill in blank number 4.

- Ans  1. perhaps  
 2. although  
 3. maybe  
 4. though

Question ID : 264330164228

Option 1 ID : 264330644147

Option 2 ID : 264330644148

Option 3 ID : 264330644150

Option 4 ID : 264330644149

Status : Answered

Chosen Option : 3

**Comprehension:**

In the following passage, some words have been deleted. Read the passage carefully and select the most appropriate option to fill in each blank.

South Korea is the most cosmetically (1)\_\_\_\_\_ country on Earth. Beauty editors estimate that it is because of the government's heavy investment (2)\_\_\_\_\_ industry. It is ahead of its competitors, and its citizens (3)\_\_\_\_\_ twice as much on skincare products as consumers in the United States, the UK, and France. Korean shoppers are (4)\_\_\_\_\_ the world's most discerning. Eight out of 10 Korean women in their 20s and 30s use an app that (5)\_\_\_\_\_ like a cosmetics-specific, to debate the merits of various common ingredients.

**SubQuestion No : 45**

**Q.45** Select the most appropriate option to fill in blank number 5.

- Ans  1. dissolves  
 2. stops  
 3. malfunctions  
 4. functions

Question ID : 264330164229

Option 1 ID : 264330644153

Option 2 ID : 264330644151

Option 3 ID : 264330644152

Option 4 ID : 264330644154

Status : Answered

Chosen Option : 4

**Comprehension:**

Read the given passage carefully and answer the questions that follow.

Throughout history, the intricacies of the human mind have been the subject of fascination and inquiry. From ancient philosophers to modern-day neuroscientists, the workings of the brain have been studied and analysed in an attempt to unravel its mysteries. However, despite centuries of research, much remains unknown about the complexities of human cognition and consciousness.

One of the most fascinating aspects of the human mind is its ability to create and imagine.

The human mind has the capacity to conceptualise and bring into being ideas that were previously unknown or unimaginable, from artistic expression to scientific discovery. The process of creativity has captured the attention of scholars and laypeople alike and is both enigmatic and awe-inspiring.

There have been many theories proposed to explain the process of creativity. Some suggest that it is a purely subconscious process, while others argue that creativity is a result of conscious effort and intentional problem-solving. Still others suggest that creativity arises from a combination of conscious and subconscious processes.

Despite the ongoing debate over the nature of creativity, one thing is clear: it is a multifaceted and complex phenomenon. Creativity can manifest in a wide range of human activities, from the creation of art and literature to the development of scientific theories and inventions. It can occur in both individual and collective contexts and can be driven by a variety of factors such as curiosity, passion, or the desire for recognition.

Creativity also has the potential to bring about positive change in the world. Throughout history, creative individuals and groups have used their talents to address social, political, and environmental challenges, often inspiring others to take action and make a difference. From the abolitionist movement to the civil rights movement to the environmental movement, creativity has played a crucial role in promoting social justice and positive change.

Despite the many benefits of creativity, it is not without its challenges. The process of creative expression can be fraught with obstacles, from self-doubt and insecurity to external pressures and constraints. Moreover, not all creative ideas are successful or well-received, and many artists and innovators face rejection and criticism as they seek to bring their ideas to fruition.

Despite these challenges, however, the human drive to create and imagine persists.

Individuals and groups continue to harness the power of creativity to make a difference in the world. From the humblest amateur artist to the most celebrated innovator, the human capacity for creativity remains one of our greatest strengths and sources of inspiration.

**SubQuestion No : 46**

**Q.46** Select an appropriate title for the passage.

- Ans**
- 1. The Power of Creativity
  - 2. The Complexities of Human Cognition
  - 3. The History of the Human Mind
  - 4. The Role of the Human Mind in Promoting Positive Change

Question ID : 264330165133

Option 1 ID : 264330647640

Option 2 ID : 264330647642

Option 3 ID : 264330647639

Option 4 ID : 264330647641

Status : Answered

Chosen Option : 1

**Comprehension:**

Read the given passage carefully and answer the questions that follow.

Throughout history, the intricacies of the human mind have been the subject of fascination and inquiry. From ancient philosophers to modern-day neuroscientists, the workings of the brain have been studied and analysed in an attempt to unravel its mysteries. However, despite centuries of research, much remains unknown about the complexities of human cognition and consciousness.

One of the most fascinating aspects of the human mind is its ability to create and imagine.

The human mind has the capacity to conceptualise and bring into being ideas that were previously unknown or unimaginable, from artistic expression to scientific discovery. The process of creativity has captured the attention of scholars and laypeople alike and is both enigmatic and awe-inspiring.

There have been many theories proposed to explain the process of creativity. Some suggest that it is a purely subconscious process, while others argue that creativity is a result of conscious effort and intentional problem-solving. Still others suggest that creativity arises from a combination of conscious and subconscious processes.

Despite the ongoing debate over the nature of creativity, one thing is clear: it is a multifaceted and complex phenomenon. Creativity can manifest in a wide range of human activities, from the creation of art and literature to the development of scientific theories and inventions. It can occur in both individual and collective contexts and can be driven by a variety of factors such as curiosity, passion, or the desire for recognition.

Creativity also has the potential to bring about positive change in the world. Throughout history, creative individuals and groups have used their talents to address social, political, and environmental challenges, often inspiring others to take action and make a difference. From the abolitionist movement to the civil rights movement to the environmental movement, creativity has played a crucial role in promoting social justice and positive change.

Despite the many benefits of creativity, it is not without its challenges. The process of creative expression can be fraught with obstacles, from self-doubt and insecurity to external pressures and constraints. Moreover, not all creative ideas are successful or well-received, and many artists and innovators face rejection and criticism as they seek to bring their ideas to fruition.

Despite these challenges, however, the human drive to create and imagine persists.

Individuals and groups continue to harness the power of creativity to make a difference in the world. From the humblest amateur artist to the most celebrated innovator, the human capacity for creativity remains one of our greatest strengths and sources of inspiration.

**SubQuestion No : 47**

**Q.47** What is the main focus of the passage?

- Ans**
- 1. The complexities and challenges of cognitive processes.
  - 2. The mysteries of the human mind.
  - 3. The nature of creativity, its benefits and challenges.
  - 4. The nature of fancy and imagination.

Question ID : 264330165134

Option 1 ID : 264330647644

Option 2 ID : 264330647643

Option 3 ID : 264330647646

Option 4 ID : 264330647645

Status : Answered

Chosen Option : 3

**Comprehension:**

Read the given passage carefully and answer the questions that follow.

Throughout history, the intricacies of the human mind have been the subject of fascination and inquiry. From ancient philosophers to modern-day neuroscientists, the workings of the brain have been studied and analysed in an attempt to unravel its mysteries. However, despite centuries of research, much remains unknown about the complexities of human cognition and consciousness.

One of the most fascinating aspects of the human mind is its ability to create and imagine. The human mind has the capacity to conceptualise and bring into being ideas that were previously unknown or unimaginable, from artistic expression to scientific discovery. The process of creativity has captured the attention of scholars and laypeople alike and is both enigmatic and awe-inspiring.

There have been many theories proposed to explain the process of creativity. Some suggest that it is a purely subconscious process, while others argue that creativity is a result of conscious effort and intentional problem-solving. Still others suggest that creativity arises from a combination of conscious and subconscious processes.

Despite the ongoing debate over the nature of creativity, one thing is clear: it is a multifaceted and complex phenomenon. Creativity can manifest in a wide range of human activities, from the creation of art and literature to the development of scientific theories and inventions. It can occur in both individual and collective contexts and can be driven by a variety of factors such as curiosity, passion, or the desire for recognition.

Creativity also has the potential to bring about positive change in the world. Throughout history, creative individuals and groups have used their talents to address social, political, and environmental challenges, often inspiring others to take action and make a difference. From the abolitionist movement to the civil rights movement to the environmental movement, creativity has played a crucial role in promoting social justice and positive change.

Despite the many benefits of creativity, it is not without its challenges. The process of creative expression can be fraught with obstacles, from self-doubt and insecurity to external pressures and constraints. Moreover, not all creative ideas are successful or well-received, and many artists and innovators face rejection and criticism as they seek to bring their ideas to fruition.

Despite these challenges, however, the human drive to create and imagine persists.

Individuals and groups continue to harness the power of creativity to make a difference in the world. From the humblest amateur artist to the most celebrated innovator, the human capacity for creativity remains one of our greatest strengths and sources of inspiration.

**SubQuestion No : 48**

**Q.48 Which of the following factors can drive creativity?**

- Ans**
- 1. Self-doubt and insecurity
  - 2. Curiosity and passion
  - 3. Fancy and imagination
  - 4. External pressures and constraints

Question ID : 264330165135

Option 1 ID : 264330647647

Option 2 ID : 264330647649

Option 3 ID : 264330647650

Option 4 ID : 264330647648

Status : Not Answered

Chosen Option : --

**Comprehension:**

Read the given passage carefully and answer the questions that follow.

Throughout history, the intricacies of the human mind have been the subject of fascination and inquiry. From ancient philosophers to modern-day neuroscientists, the workings of the brain have been studied and analysed in an attempt to unravel its mysteries. However, despite centuries of research, much remains unknown about the complexities of human cognition and consciousness.

One of the most fascinating aspects of the human mind is its ability to create and imagine. The human mind has the capacity to conceptualise and bring into being ideas that were previously unknown or unimaginable, from artistic expression to scientific discovery. The process of creativity has captured the attention of scholars and laypeople alike and is both enigmatic and awe-inspiring.

There have been many theories proposed to explain the process of creativity. Some suggest that it is a purely subconscious process, while others argue that creativity is a result of conscious effort and intentional problem-solving. Still others suggest that creativity arises from a combination of conscious and subconscious processes.

Despite the ongoing debate over the nature of creativity, one thing is clear: it is a multifaceted and complex phenomenon. Creativity can manifest in a wide range of human activities, from the creation of art and literature to the development of scientific theories and inventions. It can occur in both individual and collective contexts and can be driven by a variety of factors such as curiosity, passion, or the desire for recognition.

Creativity also has the potential to bring about positive change in the world. Throughout history, creative individuals and groups have used their talents to address social, political, and environmental challenges, often inspiring others to take action and make a difference. From the abolitionist movement to the civil rights movement to the environmental movement, creativity has played a crucial role in promoting social justice and positive change.

Despite the many benefits of creativity, it is not without its challenges. The process of creative expression can be fraught with obstacles, from self-doubt and insecurity to external pressures and constraints. Moreover, not all creative ideas are successful or well-received, and many artists and innovators face rejection and criticism as they seek to bring their ideas to fruition.

Despite these challenges, however, the human drive to create and imagine persists.

Individuals and groups continue to harness the power of creativity to make a difference in the world. From the humblest amateur artist to the most celebrated innovator, the human capacity for creativity remains one of our greatest strengths and sources of inspiration.

**SubQuestion No : 49**

**Q.49 According to the passage, what is one of the challenges of creative expression?**

- Ans**
- 1. The absence of external pressures and constraints.
  - 2. The limited capacity of the human mind.
  - 3. The lack of appreciation for creative ideas.
  - 4. The overemphasis on conscious problem-solving.

Question ID : 264330165136

Option 1 ID : 264330647654

Option 2 ID : 264330647652

Option 3 ID : 264330647651

Option 4 ID : 264330647653

Status : Not Answered

Chosen Option : --

**Comprehension:**

Read the given passage carefully and answer the questions that follow.

Throughout history, the intricacies of the human mind have been the subject of fascination and inquiry. From ancient philosophers to modern-day neuroscientists, the workings of the brain have been studied and analysed in an attempt to unravel its mysteries. However, despite centuries of research, much remains unknown about the complexities of human cognition and consciousness.

One of the most fascinating aspects of the human mind is its ability to create and imagine.

The human mind has the capacity to conceptualise and bring into being ideas that were previously unknown or unimaginable, from artistic expression to scientific discovery. The process of creativity has captured the attention of scholars and laypeople alike and is both enigmatic and awe-inspiring.

There have been many theories proposed to explain the process of creativity. Some suggest that it is a purely subconscious process, while others argue that creativity is a result of conscious effort and intentional problem-solving. Still others suggest that creativity arises from a combination of conscious and subconscious processes.

Despite the ongoing debate over the nature of creativity, one thing is clear: it is a multifaceted and complex phenomenon. Creativity can manifest in a wide range of human activities, from the creation of art and literature to the development of scientific theories and inventions. It can occur in both individual and collective contexts and can be driven by a variety of factors such as curiosity, passion, or the desire for recognition.

Creativity also has the potential to bring about positive change in the world. Throughout history, creative individuals and groups have used their talents to address social, political, and environmental challenges, often inspiring others to take action and make a difference. From the abolitionist movement to the civil rights movement to the environmental movement, creativity has played a crucial role in promoting social justice and positive change.

Despite the many benefits of creativity, it is not without its challenges. The process of creative expression can be fraught with obstacles, from self-doubt and insecurity to external pressures and constraints. Moreover, not all creative ideas are successful or well-received, and many artists and innovators face rejection and criticism as they seek to bring their ideas to fruition.

Despite these challenges, however, the human drive to create and imagine persists.

Individuals and groups continue to harness the power of creativity to make a difference in the world. From the humblest amateur artist to the most celebrated innovator, the human capacity for creativity remains one of our greatest strengths and sources of inspiration.

**SubQuestion No : 50**

**Q.50** Select the most appropriate **ANTONYM** for the word 'fraught'.

- Ans**
- 1. Tranquil
  - 2. Calm
  - 3. Beset
  - 4. Devoid

Question ID : 264330165137

Option 1 ID : 264330647656

Option 2 ID : 264330647658

Option 3 ID : 264330647655

Option 4 ID : 264330647657

Status : Not Answered

Chosen Option : --