

Constable GD in Central Armed Police Forces CAPFs SSF Rifleman GD in Assam Rifles Examination 2024

Exam Date	26/02/2024
Exam Time	2:30 PM - 3:30 PM
Subject	Constable GD Examination 2024

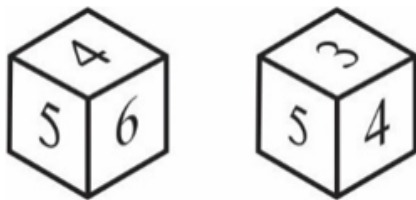
Section : Part-A-General Intelligence and Reasoning

Q.1 In the following question, select the related letter pair from the given alternatives.

TYC : WBF :: ?

- Ans
- 1. AMV : VMJ
 - 2. POL : ZXU
 - 3. LSU : MLL
 - 4. CDF : FGI

Q.2 Two positions of a dice are given below. What will come on the face opposite to the face containing '3' on it?



- Ans
- 1. 2
 - 2. 4
 - 3. 6
 - 4. 1

Q.3 In a certain code language, 'CASKM' is coded as '69271', 'CHARM' is coded as '13576', 'CIAOS' is coded as '74682'. What can be the code for 'H' in that code language?

- Ans
- 1. 7
 - 2. 1
 - 3. 3
 - 4. 6

Q.4 In the following question, select the missing number from the given series.

111, 122, 133, ?, 155, 166

- Ans
- 1. 143
 - 2. 145
 - 3. 148
 - 4. 144

Test Prime

ALL EXAMS,
ONE SUBSCRIPTION



40,000+
Mock Tests



Personalised
Report Card



Unlimited
Re-Attempt



500+
Exam Covered



Previous Year
Papers



500%
Refund



DOWNLOAD NOW

Q.5 Three Statements are given followed by two conclusions numbered I and II. Assuming the statements to be true, even if they seem to be at variance with commonly known facts, decide which of the conclusions logically follow(s) from the statements.

Statement I: No land is water.

Statement II: No water is air.

Statement III: No air is forest.

Conclusion I: No land is forest.

Conclusion II: Some air are water.

- Ans**
- 1. Only conclusion I follows
 - 2. Neither conclusion I nor II follows
 - 3. Only conclusion II follows
 - 4. Both conclusions I and II follow

Q.6 In the following question, select the missing number from the given series.

44, 46, 54, 86, 214, ?

- Ans**
- 1. 719
 - 2. 716
 - 3. 720
 - 4. 726

Q.7 Which two numbers should be interchanged to make the given equation correct?

$$18 \times 3 \div 9 + 5 - 6 = 2$$

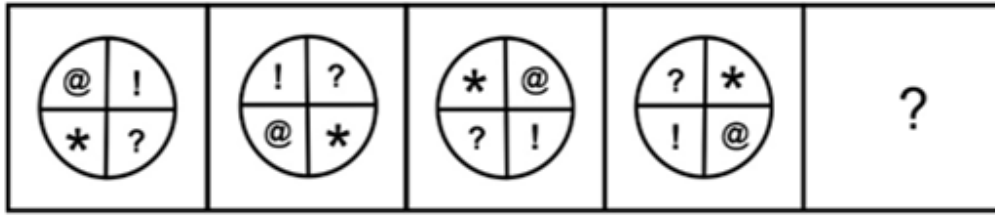
- Ans**
- 1. 18 and 6
 - 2. 3 and 5
 - 3. 2 and 3
 - 4. 5 and 9

Q.8 By Interchanging the given two numbers which of the following equation will be NOT correct?

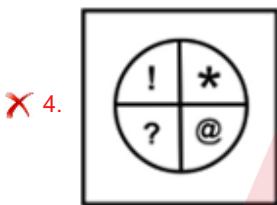
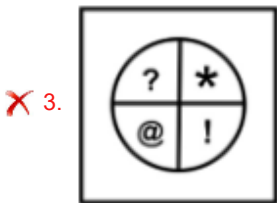
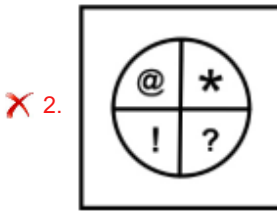
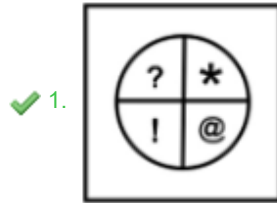
3 and 5

- Ans**
- 1. $5 - 3 + 6 = 4$
 - 2. $7 \times 4 - 5 + 3 = 30$
 - 3. $5 + 3 \times 2 - 1 = 12$
 - 4. $5 \times 4 + 3 - 2 = 18$

Q.9 Select the figure that will replace the question mark (?) in the following figure series.



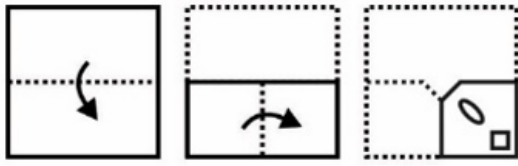
Ans



Q.10 Eight athletes Sunil, Abhishek, Mohit, Cheenu, Rahul, Tanu, Koyal and Ankit are sitting around a circular table facing opposite to the centre (not necessarily in the same order). Koyal is third to the left of Rahul. Tanu is third to the right of Cheenu. Mohit is second to the right of Sunil. Abhishek is second to the left of Cheenu. Tanu is second to the left of Sunil. Who is sitting second to the right of Rahul?

- Ans
- ✗ 1. Koyal
 - ✗ 2. Ankit
 - ✗ 3. Tanu
 - ✓ 4. Abhishek

Q.11 A piece of paper is folded and punched as shown below in the question figures. From the given option figures, indicate how it will appear when opened?

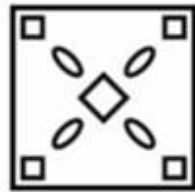


Ans

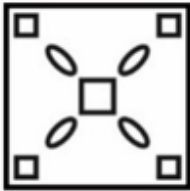
✗ 1.



✓ 2.



✗ 3.



✗ 4.



Q.12 In a certain code language, 'FEAR' is coded as 'JJEW'. What is the code for 'FLAT' in that code language?

Ans ✓ 1. JQEY

✗ 2. JQDY

✗ 3. JREZ

✗ 4. JQEZ

Q.13 A series is given with one term missing. Select the correct alternative from the given ones that will complete the series.

RQ, NO, LK, HI, ?

Ans ✗ 1. FH

✓ 2. FE

✗ 3. TQ

✗ 4. FX

Q.14 Which of the following groups of letters when sequentially placed from left to right will complete the given series?

ii_jk_ii_jkkii_jjk_ii_jkkii_jjk_ii_jkkii_jjk_ii_jkkii_ _kk

- Ans**
- 1. kiji
 - 2. jjkk
 - 3. kkjj
 - 4. iijk

Q.15 After arranging the given words according to dictionary order, which word will come at 'Third' position?

- 1. Sloven
- 2. Slow
- 3. Slough
- 4. Slobber
- 5. Slouch

- Ans**
- 1. Slow
 - 2. Slough
 - 3. Slouch
 - 4. Sloven

Q.16 P, Q, R, S, T, U and V are seven friends sitting in a single row facing North. S is to the immediate right of R. T and P are neighbours of U. Q is to the immediate left of R and on second place from left most end. P is at the right most end. Who is sitting on the immediate right of T?

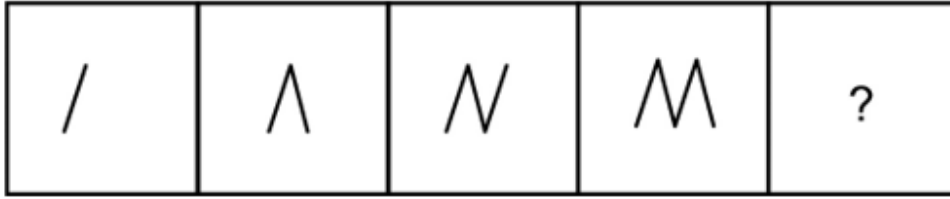
- Ans**
- 1. R
 - 2. Q
 - 3. P
 - 4. U

Q.17 Select the option that is related to the fifth letter cluster in the same way as the fourth letter cluster is related to the third letter cluster and the second letter cluster is related to the first letter cluster.

NICE : MOHJBDDF :: KIND : JLHJMOCE :: LAZY : ?

- Ans**
- 1. KMZBZXAY
 - 2. MKBZAYZX
 - 3. AYZXMKBZ
 - 4. KMZBYAXZ

Q.18 Select the figure that will replace the question mark (?) in the following figure series.



Ans

✗ 1.



✗ 2.



✗ 3.



✓ 4.




Q.19 A paper is folded and cut as shown below. How will it appear when unfolded?

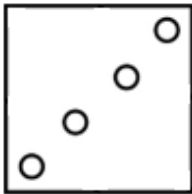


Ans

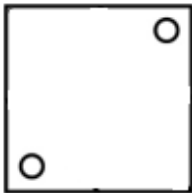
✓ 1.



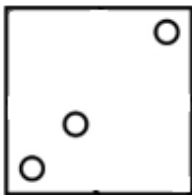
✗ 2.



✗ 3.



✗ 4.



Q.20 Pointing towards a picture of a girl, Raman said, "She is the sister of my mother's husband". How that girl is related to Raman?

Ans

✓ 1. Father's sister

✗ 2. Sister

✗ 3. Father's Mother

✗ 4. Mother

Section : Part-B-General Knowledge and General awareness

Q.1 The Government _____ is a statement of expected receipts and expected expenditures of the Government (for the coming fiscal year) that reveals the budgetary policy of the Government to achieve the twin objective of growth and stability.

Ans

✗ 1. Policy

✗ 2. Revenue

✗ 3. Plan

✓ 4. Budget

Q.2 Which of the following articles of the Indian Constitution mentions abolition or creation of Legislative Councils in States?

- Ans
- 1. Article 161
 - 2. Article 169
 - 3. Article 165
 - 4. Article 173

Q.3 In which state of India is the 'Flamingo Festival' organized?

- Ans
- 1. Nagaland
 - 2. Sikkim
 - 3. Mizoram
 - 4. Andhra Pradesh

Q.4 The first five year plan of India was based on _____.

- Ans
- 1. Mahalanobis Plan
 - 2. Harrod-Domar Model
 - 3. Nehru Model
 - 4. Gadgil Yojna

Q.5 National Nritya Shiromani Award 2022 was won by _____.

- Ans
- 1. N. Rajam
 - 2. Aparna Satheesan
 - 3. Anuradha Pandey
 - 4. Raj Bisaria

Q.6 The nineteenth century saw the golden age of _____ under the patronage of Wajid Ali Shah.

- Ans
- 1. Kuchipudi
 - 2. Odissi
 - 3. Manipuri
 - 4. Kathak

Q.7 The script used by the Sunga was a variant of Brahmi, and was used to write the _____ language.

- Ans
- 1. Sanskrit
 - 2. Urdu
 - 3. English
 - 4. Hindi

Q.8 In _____ 2023, the Union Cabinet of India approved the National Green Hydrogen Mission.

- Ans
- 1. June
 - 2. July
 - 3. January
 - 4. March

Q.9 In Volleyball, if the game is tied at _____ in any set (except fifth set), the set continues till one team builds a two-point lead over the other.

- Ans
- 1. 24 – 24
 - 2. 11 – 11
 - 3. 14 – 14
 - 4. 18 – 18

Q.10 The MRTP Act of 1969 aimed at:

- Ans
- 1. Promoting monopolies in key industries
 - 2. Promoting free trade agreements
 - 3. Regulating and controlling monopolistic and restrictive trade practices
 - 4. Encouraging foreign direct investment

Q.11 Prime Minister Narendra Modi inaugurated the priority section of Delhi-Ghaziabad-Meerut RRTS Corridor at Sahibabad RapidX Station, Uttar Pradesh on October 20, 2023. What does 'T' stand for in RRTS?

- Ans
- 1. Transform
 - 2. Telecom
 - 3. Transit
 - 4. Traffic

Q.12 Which sport is played by the Indian sportsperson Aruna Mishra?

- Ans
- 1. Cricket
 - 2. Hockey
 - 3. Boxing
 - 4. Table Tennis

Q.13 Which iconic playback singer, known for his mesmerizing voice and classic hits like "Mere Sapno Ki Rani Kab Aayegi Tu," was also a music director and composer?

- Ans
- 1. Mohammed Rafi
 - 2. Mukesh
 - 3. Talat Mahmood
 - 4. Kishore Kumar

Q.14 According to the Indian Constitution, the Right to protection of life and personal liberty is a:

- Ans
- 1. Fundamental Duty of State
 - 2. Non enforceable rights
 - 3. Fundamental Right of an Individual
 - 4. Directive Principle of state policy

Q.15 As of October 2023, who among the following is the governor of Odisha?

- Ans
- 1. Ganeshi Lal
 - 2. S.C. Jamir
 - 3. Hemant Soren
 - 4. Raghubar Das

Q.16 According to the 2011 census of India, the literacy rate in India is _____ percent.

- Ans
- 1. 72.99
 - 2. 62.99
 - 3. 94.04
 - 4. 54.04

Q.17 Which of the following is a 's' block element?

- Ans
- 1. Scandium
 - 2. Vanadium
 - 3. Titanium
 - 4. Rubidium

Q.18 Average density of population in India is _____ persons per square km, according to 2011 census of India.

- Ans
- 1. 362
 - 2. 342
 - 3. 382
 - 4. 322

Q.19 Who among the following won the ICC U19 Women's T20 World Cup 2023?

- Ans
- 1. New Zealand
 - 2. England
 - 3. India
 - 4. Australia

Q.20 _____ was the founder of the Widow Remarriage Association (1861)

- Ans
- 1. Keshub Chandra Sen
 - 2. Mahadev Govind Ranade
 - 3. Dr. Atma Ram Pandurang
 - 4. Debendra Nath Tagore

Section : Part-C-Elementary Mathematics

Q.1 Two trains are moving in the same direction at the speed of 40 km/hr and 90 km/hr, their lengths are 275 metres and 350 metres respectively. What will be the time taken by faster train to cross the slower train?

- Ans
- ✓ 1. 45 seconds
 - ✗ 2. 36 seconds
 - ✗ 3. 60 seconds
 - ✗ 4. 54 seconds

Q.2 A alone can do a work in 40 days and B alone can do the same work in 60 days. In how many days will they together complete the same work?

- Ans
- ✓ 1. 24 days
 - ✗ 2. 32 days
 - ✗ 3. 25 days
 - ✗ 4. 29 days

Q.3 If $4P = 5Q$ and $3Q = 4R$, then what is the value of $P : Q : R$?

- Ans
- ✗ 1. 7 : 6 : 2
 - ✗ 2. 25 : 16 : 10
 - ✗ 3. 10 : 8 : 3
 - ✓ 4. 5 : 4 : 3

Q.4 Sneha alone can complete a work in 30 days and Anju alone can complete the same work in 45 days. Anju alone worked for first 15 days and then left the work. In how many days will Sneha alone complete the remaining work?

- Ans
- ✗ 1. 28 days
 - ✗ 2. 21 days
 - ✗ 3. 27 days
 - ✓ 4. 20 days

Q.5 What is the value of $810 \div 5 - 25 \times 13 + 2 \times 12$?

- Ans
- ✓ 1. -139
 - ✗ 2. -47
 - ✗ 3. -39
 - ✗ 4. -147

Q.6 If the cost of 5 apples and 8 mangoes is same as the cost of 9 apples and 4 mangoes, then what is the ratio of the price of a mango and the price of an apple?

- Ans
- ✗ 1. 1 : 2
 - ✗ 2. 4 : 1
 - ✗ 3. 1 : 3
 - ✓ 4. 1 : 1

Q.7 A bicycle was bought for \$120 and sold at a profit of 15%. Find the selling price.

- Ans
- 1. \$138
 - 2. \$111
 - 3. \$142
 - 4. \$127

Q.8 Dinesh purchases 12 dozens of apples at the rate of Rs. 300 per dozen. He sells each apple at the rate of Rs. 30. What is the profit of Dinesh?

- Ans
- 1. 25 percent
 - 2. 15 percent
 - 3. 10 percent
 - 4. 20 percent

Q.9 Successive discounts of 15% and 12% are equivalent to a single discount of :

- Ans
- 1. 20%
 - 2. 27%
 - 3. 18.5%
 - 4. 25.2%

Q.10 If 70 percent of $X_1 = (6/7)$ of X_2 , then what is $X_1 : X_2$?

- Ans
- 1. 60 : 49
 - 2. 30 : 7
 - 3. 30 : 49
 - 4. 7 : 30

Q.11 In an exam, Sandeep got 55 percent less marks than the passing marks. He got 223.2 marks. If the passing percentage is 62 percent, then what are the maximum marks of the exam?

- Ans
- 1. 200
 - 2. 600
 - 3. 400
 - 4. 800

Q.12 Ritu sold a camera for ₹24000, earning a profit of 20%. If she wanted to earn a profit of 25%, at what price should she have sold the camera?

- Ans
- 1. Rs. 27000
 - 2. Rs. 22000
 - 3. Rs. 24000
 - 4. Rs. 25000

Q.13 Three numbers are in the ratio 3 : 9 : 11 and their HCF is 29. Find the numbers.

- Ans
- 1. 84, 240, and 300
 - 2. 58, 88, and 319
 - 3. 144, 261, and 320
 - 4. 87, 261, and 319

Q.14 Rs. 20000 is lent at compound interest at an annual rate of 18 percent for 1 year (compounding annually). If the compounding of interest is done half yearly, then how much more interest will be obtained?

- Ans
- 1. Rs. 190
 - 2. Rs. 142
 - 3. Rs. 162
 - 4. Rs. 150

Q.15 A sum of Rs. 7000 is invested in a scheme of simple interest. The rate of interest in this scheme is 20 percent per annum. If Rs. 1750 interest is obtained, then for how many months is the sum invested?

- Ans
- 1. 21 months
 - 2. 24 months
 - 3. 15 months
 - 4. 18 months

Q.16 Find the value of $1573 \div 13 \{(12 - 6) + (48 - 53)\}$

- Ans
- 1. 155
 - 2. 130
 - 3. 121
 - 4. 153

Q.17 A new student having weight 47 kg join a class of 41 students and the average weight of the class reduces by 1.5 kg. What is the new average weight of the class?

- Ans
- 1. 107.4 kg
 - 2. 109 kg
 - 3. 108.5 kg
 - 4. 110 kg

Q.18 Average age of a group of 27 boys is 21 years. If a boy leaves the group, then the average age becomes 21.7 years. What is the age of the boy who left the group?

- Ans
- 1. 2.5 years
 - 2. 2.8 years
 - 3. 3.4 years
 - 4. 2 years

Q.19 What is the value of $143 \times 13 \div 11 + 156 \div 13 \times 12 - 210 \times 15 \div 14$?

- Ans
- 1. 78
 - 2. 178
 - 3. 88
 - 4. 168

Q.20 What is the total surface area of a cylinder having radius of base as 4.2 cm and height as 8 cm?

- Ans
- 1. 346.04 cm^2
 - 2. 246.58 cm^2
 - 3. 284.92 cm^2
 - 4. 322.08 cm^2

Section : Part-D-English

Q.1 Select the most appropriate word to fill in the blank.

_____ she was partly deaf, she was a gifted pianist.

- Ans
- 1. until
 - 2. although
 - 3. because
 - 4. yet

Q.2 Select the most appropriate antonym of the given word.

Morose

- Ans
- 1. Uplifted
 - 2. Cranky
 - 3. Glum
 - 4. Gloomy

Q.3 Identify the segment that contains a grammatical error. If there is no error, select 'No error'.

We decided that it would be / too good for you to have / some feminine influence.

- Ans
- 1. We decided that it would be
 - 2. some feminine influence.
 - 3. too good for you to have
 - 4. No error

Q.4 Identify the segment that contains a grammatical error. If there is no error, select 'No error'.

You have never loved me; / you have either heart / nor honourable feeling!

- Ans
- 1. nor honourable feeling!
 - 2. you have either heart
 - 3. You have never loved me;
 - 4. No error

Q.5 Select the most appropriate word to fill in the blank.

Colossal sums have _____wasted on this project.

- Ans
- 1. to
 - 2. being
 - 3. be
 - 4. been

Q.6 Find the part of the given sentence that has an error in it. If there is no error, choose 'No error'.

Tracing the origin of horse domestication in the prehistoric era have proven to be an exceedingly difficult task.

- Ans
- 1. Tracing the origin of horse domestication
 - 2. No error
 - 3. in the prehistoric era have proven
 - 4. to be an exceedingly difficult task.

Q.7 From the options given below choose the synonym (similar meaning) of the word:

Ossified

- Ans
- 1. Harden
 - 2. Amenable
 - 3. Docile
 - 4. Pliant

Q.8 In the following question, out of the given four alternatives, select the alternative which best expresses the meaning of the Idiom/Phrase.

To pick/take up the gauntlet

- Ans
- 1. To reduce one's worth
 - 2. To accept a challenge
 - 3. To share the responsibility
 - 4. To take a small task

Q.9 Choose the most appropriate antonym of the underlined word.

Davie would be well away, for he would fret about his grandmother, and that would do neither of them any good.

- Ans
- 1. Agonize
 - 2. Bother
 - 3. Carp
 - 4. Delight

Q.10 Select the incorrectly spelt word from the given sentence.

More than once in the course of my questionnaire, I have questioned about your love for the country and culture.

- Ans
- 1. questioned
 - 2. course
 - 3. culture
 - 4. questionnaire

Q.11 Select the most appropriate word to fill in the blank.

Napoleon was one of the most capable generals in _____ history.

- Ans
- 1. a
 - 2. the
 - 3. an
 - 4. No article

Q.12 Fill in the blank with the most appropriate option.

I have taken care that the door is locked and the window _____ fastened.

- Ans
- 1. deeply
 - 2. securely
 - 3. unfixed
 - 4. safely

Q.13 Choose the idiom/phrase that can substitute the highlighted group of words meaningfully.

For certain, this is the best pizza in town.

- Ans
- 1. Through thick and thin
 - 2. Beyond a shadow of a doubt
 - 3. Benefit of doubt
 - 4. Off on the wrong foot

Q.14 Fill in the blank with the most appropriate antonym of the bracketed word.

We've learned that (calmness) spreads faster online than joy.

- Ans
- 1. rage
 - 2. sweetness
 - 3. cumbersome
 - 4. calamity

Q.15 Select the sentence with no spelling errors.

- Ans
- 1. We need to strike a balance between creating false alarms and letting any urgent medical matters fall through the cracks.
 - 2. We need to strike a balance between creating false alarms and letting any urjent medical matters fall throuh the cracks.
 - 3. We need to strike a balance between creating false alarms and leting any urgent medical maters fall through the cracks.
 - 4. We need to strike a balance between creating false alrms and letting any ergent medical matters fall through the cracks.

Comprehension:

In the following passage some words have been deleted. Fill in the blanks with the help of the alternatives given. Select the most appropriate option for each number.

His speech had begun to (1) _____, and he passed abruptly from one subject to (2) _____. Konstantin with the help of Masha (3) _____ him not to go out anywhere, and got him to bed (4) _____ drunk. Masha promised to write to Konstantin in case of need, and to persuade Nikolay Levin to go and (5) _____ with his brother.

SubQuestion No : 16

Q.16 Select the most appropriate option to fill in the blank No. 1.

- Ans
- 1. malfunction
 - 2. falter
 - 3. default
 - 4. prompt

Comprehension:

In the following passage some words have been deleted. Fill in the blanks with the help of the alternatives given. Select the most appropriate option for each number.

His speech had begun to (1) _____, and he passed abruptly from one subject to (2) _____. Konstantin with the help of Masha (3) _____ him not to go out anywhere, and got him to bed (4) _____ drunk. Masha promised to write to Konstantin in case of need, and to persuade Nikolay Levin to go and (5) _____ with his brother.

SubQuestion No : 17

Q.17 Select the most appropriate option to fill in the blank No. 2.

- Ans
- 1. one other
 - 2. an other
 - 3. on other
 - 4. another

Comprehension:

In the following passage some words have been deleted. Fill in the blanks with the help of the alternatives given. Select the most appropriate option for each number.

His speech had begun to (1) _____, and he passed abruptly from one subject to (2) _____. Konstantin with the help of Masha (3) _____ him not to go out anywhere, and got him to bed (4) _____ drunk. Masha promised to write to Konstantin in case of need, and to persuade Nikolay Levin to go and (5) _____ with his brother.

SubQuestion No : 18

Q.18 Select the most appropriate option to fill in the blank No. 3.

- Ans
- 1. preached
 - 2. retreated
 - 3. acrossed
 - 4. persuaded

Comprehension:

In the following passage some words have been deleted. Fill in the blanks with the help of the alternatives given. Select the most appropriate option for each number.

His speech had begun to (1) _____, and he passed abruptly from one subject to (2) _____. Konstantin with the help of Masha (3) _____ him not to go out anywhere, and got him to bed (4) _____ drunk. Masha promised to write to Konstantin in case of need, and to persuade Nikolay Levin to go and (5) _____ with his brother.

SubQuestion No : 19

Q.19 Select the most appropriate option to fill in the blank No. 4.

- Ans
- 1. floor
 - 2. sky
 - 3. uniquely
 - 4. desperately

Comprehension:

In the following passage some words have been deleted. Fill in the blanks with the help of the alternatives given. Select the most appropriate option for each number.

His speech had begun to (1) _____, and he passed abruptly from one subject to (2) _____. Konstantin with the help of Masha (3) _____ him not to go out anywhere, and got him to bed (4) _____ drunk. Masha promised to write to Konstantin in case of need, and to persuade Nikolay Levin to go and (5) _____ with his brother.

SubQuestion No : 20

Q.20 Select the most appropriate option to fill in the blank No. 5.

- Ans
- 1. outside
 - 2. stay
 - 3. inside
 - 4. commerce

Q.1 दिए गए वाक्य में उचित पर्यायवाची शब्द का चयन करके रिक्त स्थान की पूर्ति करें।

यह संसार एक _____ (माया) है।

- Ans
- ✗ 1. सुरक्षा
 - ✗ 2. खून
 - ✓ 3. छल
 - ✗ 4. जड़

Q.2 दिए गए वाक्यांश के लिए सार्थक शब्द ज्ञात कीजिए।

जिसकी पत्नी मर गई हो

- Ans
- ✗ 1. अभागा
 - ✗ 2. दुराचारी
 - ✗ 3. विधवा
 - ✓ 4. विधुर

Q.3 दिए गए वाक्य में उचित पर्यायवाची शब्द का चयन करके रिक्त स्थान की पूर्ति करें।

_____ (खाली) स्थान भरीए।

- Ans
- ✗ 1. सुगम
 - ✗ 2. नस
 - ✓ 3. रिक्त
 - ✗ 4. सैना

Q.4 निम्नलिखित प्रश्न में, चार विकल्पों में से, उस विकल्प का चयन करें जो कोष्ठक में दिए गए शब्द के तत्सम रूप का सही विकल्प है।
जब हम गाँव जाते हैं तब हम वहाँ (खाट) _____ पर ही सोते हैं।

- Ans
- ✓ 1. खटवा
 - ✗ 2. खर्पर
 - ✗ 3. खंडगृह
 - ✗ 4. खर्जू

Q.5 निम्नलिखित प्रश्न में, दिए गए चार विकल्पों में से, उस विकल्प का चयन करें जो दिए गए मुहावरे के अर्थ को सर्वश्रेष्ठ रूप से व्यक्त करता है।

छिपा/छुपा रुस्तम होना

- Ans
- ✗ 1. चालक आदमी
 - ✗ 2. अपने ही घर में चोरी करना
 - ✗ 3. शर्मिला होना
 - ✓ 4. देखने में साधारण पर वस्तुतः असाधारण

Q.6 निम्नलिखित वाक्य में, उस वाक्यांश को पहचानिए जिसमें मात्राओं से संबंधित अशुद्धियाँ हैं। यदि कोई गलती नहीं है तो 'कोई त्रुटि नहीं है' का चुनाव कीजिए।
हर व्यक्ति का कुछ महत्वाकांक्षा पर इच्छा/ होती है जैसे जब हम बच्चे थे तो हम कई/ चीजों को देखकर रोमांचित हो उठते थे।

- Ans
- ✗ 1. कोई त्रुटि नहीं है
 - ✗ 2. चीजों को देखकर रोमांचित हो उठते थे
 - ✓ 3. हर व्यक्ति का कुछ महत्वाकांक्षा पर इच्छा
 - ✗ 4. होती है जैसे जब हम बच्चे थे तो हम कई

Q.7 दिए गए वाक्य में रेखांकित शब्द के लिए सही वर्तनी ज्ञात कीजिए।

भव्या लाल रँग की शर्ट ढूँढ़ रही है।

- Ans
- ✗ 1. रगं
 - ✓ 2. रंग
 - ✗ 3. रग
 - ✗ 4. रग

Q.8 निम्नलिखित प्रश्न में, चार विकल्पों में से, उस विकल्प का चयन करें जो दी गई लोकोक्ति का सही अर्थ वाला है।

बीमार की रात पहाड़ बराबर

- Ans
- ✗ 1. गंदी लिखावट
 - ✗ 2. डर खत्म होते ही मौज मनाना
 - ✓ 3. खराब समय मुश्किल से कटता है
 - ✗ 4. मूर्खतापूर्ण कार्य करना

Q.9 निम्नलिखित प्रश्न में, चार विकल्पों में से, उस सही विकल्प का चयन करें जो वाक्यांशों के लिए एक शब्द का विकल्प हो।

जो किसी भी गुट में नहीं हो

- Ans
- ✓ 1. तटस्थ
 - ✗ 2. तल्लीन
 - ✗ 3. तस्कर
 - ✗ 4. तटवर्ती

Q.10 निम्नलिखित प्रश्न में, चार विकल्पों में से, उस विकल्प का चयन करें जो कोष्ठक में दिए गए शब्द के विलोम शब्द का सही विकल्प है।
कई कवियों ने इस महान भूमि की (निंदा) _____ के गीत गाए हैं।

- Ans
- ✗ 1. बुराई
 - ✗ 2. भर्त्सना
 - ✓ 3. प्रशंसा
 - ✗ 4. कुत्सा

Q.11 दिए गए वाक्य का वह भाग ज्ञात करें, जिसमें कोई त्रुटि है।
मेरे को जब कुछ याद आएगा तभी मैं तुम्हें कुछ बता पाऊंगा।

- Ans
- ✗ 1. कुछ बना पाऊंगा।
 - ✗ 2. कुछ याद आएगा
 - ✓ 3. मेरे को जब
 - ✗ 4. तभी मैं तुम्हें

Q.12 निम्नलिखित प्रश्न में, चार विकल्पों में से, उस सही विकल्प का चयन करें जो वाक्यांश के लिए एक शब्द का विकल्प हो।
जो सबके मन की बात जानता हो

- Ans
- ✗ 1. अनभिज्ञ
 - ✓ 2. अंतर्दामी
 - ✗ 3. अनागत
 - ✗ 4. अनार्य

Q.13 निम्नलिखित प्रश्न में, चार विकल्पों में से, उस विकल्प का चयन करें जो कोष्ठक में दिए गए शब्द के तद्भव रूप का सही विकल्प है।
मेरे मन की (विधा) _____ कोई भी नहीं समझता है।

- Ans
- ✗ 1. विशेषता
 - ✓ 2. व्यथा
 - ✗ 3. कड़वाहट
 - ✗ 4. जलन

Q.14 दिए गए वाक्य में रेखांकित शब्द का विलोम शब्द ज्ञात कीजिए।

वह बेसब्री से आपका इंतजार कर रहा है।

- Ans
- ✗ 1. तीव्रता
 - ✗ 2. सहज
 - ✓ 3. सब्र
 - ✗ 4. बेस्वाद

Q.15 निम्नलिखित प्रश्न में, चार विकल्पों में से, उस विकल्प का चयन करें जो रिक्त स्थान के लिए सही स्त्रीलिंग रूप वाला विकल्प हो।
सभी को ईश्वर की _____ करनी चाहिए।

- Ans
- ✗ 1. देखरेख
 - ✓ 2. भक्ति
 - ✗ 3. अग्नि
 - ✗ 4. शक्ति

Comprehension:

नीचे दिए गए गद्य में कुछ शब्द छोड़ दिए गए हैं और प्रत्येक रिक्त स्थान के चार विकल्प दिए गए हैं। इन चारों में से कौन सा विकल्प रिक्त स्थान की पूर्ति करेगा-

साक्षरता तो एक (1)_____ है जिसमें कच्चे आटे को तपा कर ज्ञान का हलवा निकला जाता है। यह ज्ञान अगर पूर्ण है तो सतत (2)_____ और उन्नति का मार्ग खोल देता है। अगर यह अपूर्ण रह जाए तो मनुष्य को (3)_____ बना देता है। अपूर्ण ज्ञान कलिंग (4)_____ के विषय से भी ज्यादा प्राणघातक माना जाता है। ठीक वैसे ही जैसे (5)_____ को भेदने के लिए अभिमन्यु उसमें घुस जरूर गया परंतु उससे बाहर नहीं आ पाया।

SubQuestion No : 16

Q.16 रिक्त 1 के लिए सबसे उपयुक्त विकल्प का चयन कीजिए।

- Ans
- ✓ 1. कड़ाही
 - ✗ 2. प्रश्न
 - ✗ 3. प्रकोप
 - ✗ 4. शरीर

Comprehension:

नीचे दिए गए गद्य में कुछ शब्द छोड़ दिए गए हैं और प्रत्येक रिक्त स्थान के चार विकल्प दिए गए हैं। इन चारों में से कौन सा विकल्प रिक्त स्थान की पूर्ति करेगा-

साक्षरता तो एक (1)_____ है जिसमें कच्चे आटे को तपा कर ज्ञान का हलवा निकला जाता है। यह ज्ञान अगर पूर्ण है तो सतत (2)_____ और उन्नति का मार्ग खोल देता है। अगर यह अपूर्ण रह जाए तो मनुष्य को (3)_____ बना देता है। अपूर्ण ज्ञान कलिंग (4)_____ के विषय से भी ज्यादा प्राणघातक माना जाता है। ठीक वैसे ही जैसे (5)_____ को भेदने के लिए अभिमन्यु उसमें घुस जरूर गया परंतु उससे बाहर नहीं आ पाया।

SubQuestion No : 17

Q.17 रिक्त 2 के लिए सबसे उपयुक्त विकल्प का चयन कीजिए।

- Ans
- ✗ 1. दयाहीन
 - ✗ 2. कमजोर
 - ✓ 3. विकास
 - ✗ 4. बल

Comprehension:

नीचे दिए गए गद्य में कुछ शब्द छोड़ दिए गए हैं और प्रत्येक रिक्त स्थान के चार विकल्प दिए गए हैं। इन चारों में से कौन सा विकल्प रिक्त स्थान की पूर्ति करेगा-

साक्षरता तो एक (1)_____ है जिसमें कच्चे आटे को तपा कर ज्ञान का हलवा निकला जाता है। यह ज्ञान अगर पूर्ण है तो सतत (2)_____ और उन्नति का मार्ग खोल देता है। अगर यह अपूर्ण रह जाए तो मनुष्य को (3)_____ बना देता है। अपूर्ण ज्ञान कलिंग (4)_____ के विष से भी ज्यादा प्राणघातक माना जाता है। ठीक वैसे ही जैसे (5)_____ को भेदने के लिए अभिमन्यु उसमें घुस जरूर गया परंतु उससे बाहर नहीं आ पाया।

SubQuestion No : 18

Q.18 रिक्त 3 के लिए सबसे उपयुक्त विकल्प का चयन कीजिए।

- Ans
- 1. बलवान
 - 2. योग्य
 - 3. बलवती
 - 4. पंगु

Comprehension:

नीचे दिए गए गद्य में कुछ शब्द छोड़ दिए गए हैं और प्रत्येक रिक्त स्थान के चार विकल्प दिए गए हैं। इन चारों में से कौन सा विकल्प रिक्त स्थान की पूर्ति करेगा-

साक्षरता तो एक (1)_____ है जिसमें कच्चे आटे को तपा कर ज्ञान का हलवा निकला जाता है। यह ज्ञान अगर पूर्ण है तो सतत (2)_____ और उन्नति का मार्ग खोल देता है। अगर यह अपूर्ण रह जाए तो मनुष्य को (3)_____ बना देता है। अपूर्ण ज्ञान कलिंग (4)_____ के विष से भी ज्यादा प्राणघातक माना जाता है। ठीक वैसे ही जैसे (5)_____ को भेदने के लिए अभिमन्यु उसमें घुस जरूर गया परंतु उससे बाहर नहीं आ पाया।

SubQuestion No : 19

Q.19 रिक्त 4 के लिए सबसे उपयुक्त विकल्प का चयन कीजिए।

- Ans
- 1. सर्प
 - 2. सगुण
 - 3. साध्य
 - 4. गाय

Comprehension:

नीचे दिए गए गद्य में कुछ शब्द छोड़ दिए गए हैं और प्रत्येक रिक्त स्थान के चार विकल्प दिए गए हैं। इन चारों में से कौन सा विकल्प रिक्त स्थान की पूर्ति करेगा-

साक्षरता तो एक (1)_____ है जिसमें कच्चे आटे को तपा कर ज्ञान का हलवा निकला जाता है। यह ज्ञान अगर पूर्ण है तो सतत (2)_____ और उन्नति का मार्ग खोल देता है। अगर यह अपूर्ण रह जाए तो मनुष्य को (3)_____ बना देता है। अपूर्ण ज्ञान कलिंग (4)_____ के विषय से भी ज्यादा प्राणघातक माना जाता है। ठीक वैसे ही जैसे (5)_____ को भेदने के लिए अभिमन्यु उसमें घुस जरूर गया परंतु उससे बाहर नहीं आ पाया।

SubQuestion No : 20

Q.20 रिक्त 5 के लिए सबसे उपयुक्त विकल्प का चयन कीजिए।

- Ans
- 1. चक्रवर्ती
 - 2. चक्र
 - 3. चक्रव्यूह
 - 4. चक्रधारी

