

**Constable GD in CAPFs SSF Rifleman GD in Assam Rifles and  
Sepoy in NCB Examination 2022**

Roll Number	
Candidate Name	
Venue Name	iON Digital Zone iDZ Kozhikode
Exam Date	16/01/2023
Exam Time	2:30 PM - 3:30 PM
Subject	Constable GD Examination 2022

## Section : Part-A-General Intelligence and Reasoning

**Q.1** Eight people, D, E, M, P, T, W, Y and Z are sitting in a straight line, facing north. M sits at one of the extreme ends of the line. Only two people sit between M and E. D sits third to the right of E. Only four people sit between D and T. Z sits to the immediate right of P. W does not sit at any of the extreme ends of the line. How many people sit to the right of Y?

- Ans  1. One  
 2. None  
 3. Three  
 4. More than three

Question ID : 26433092420  
Status : Not Answered  
Chosen Option : --

# Test Prime

**ALL EXAMS,  
ONE SUBSCRIPTION**



**70,000+**  
Mock Tests



**Personalised  
Report Card**



**Unlimited  
Re-Attempt**



**600+**  
Exam Covered



**Previous Year  
Papers**



**500%**  
Refund



**ATTEMPT FREE MOCK NOW**

Q.2

Which of the following figures is the exact mirror image of the given problem figure when the mirror is held at the right side?

Problem figure:




Ans

✗ 1.



✓ 2.



✗ 3.



✗ 4.



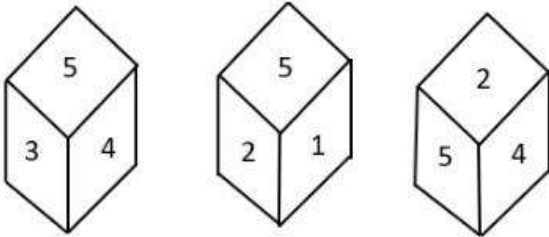
Question ID : 26433087091  
Status : Answered  
Chosen Option : 2

Q.3 Which letter-cluster will replace the question mark (?) to complete the given series?  
AFIN, EJMR, ?, MRUZ, QVYD

- Ans
- 1. JNRV
  - 2. INQV
  - 3. JNQV
  - 4. INRV

Question ID : 26433067944  
Status : Answered  
Chosen Option : 2

Q.4 Three different positions of the same dice are shown. Find the number on the face opposite the face showing '5'.



- Ans
- 1. 6
  - 2. 2
  - 3. 4
  - 4. 3

Question ID : 26433090073  
Status : Answered  
Chosen Option : 1

Q.5 Which of the following options will replace the question mark (?) in the given series?  
3, 8, 18, 38, ?, 158, 318

- Ans
- 1. 98
  - 2. 78
  - 3. 128
  - 4. 108

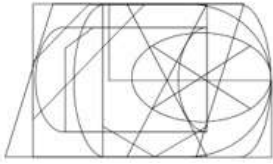
Question ID : 26433089439  
Status : Answered  
Chosen Option : 2

Q.6 In a certain code language, 'DAINTY' is written as 'GCKQWB' and 'PROMISE' is written as 'SUQPKVG'. How will 'CERTAIN' be written in that language?

- Ans
- 1. GGTUYKP
  - 2. EHTVDLP
  - 3. EHUVCLQ
  - 4. FGUWCKQ

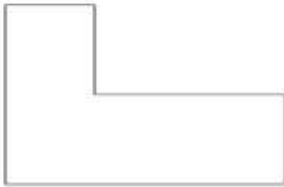
Question ID : 26433081763  
Status : Answered  
Chosen Option : 4

Q.7 Select the option figure which is embedded in the given figure. (Rotation is NOT allowed)




Ans


✓ 1.



✗ 2.



✗ 3.



✗ 4.



Question ID : 26433085740

Status : Answered

Chosen Option : 1

Q.8 Which option represents the correct order of the given words as they would appear in the English dictionary?

- 1 jumping
- 2 juice
- 3 jumble
- 4 jupiter
- 5 junior

- Ans
- 1. 2,3,4,1,5
  - 2. 2,3,1,5,4
  - 3. 3,4,2,1,5
  - 4. 3,2,1,5,4

Question ID : 26433069303  
Status : Answered  
Chosen Option : 2

Q.9 Select the option that is related to the fifth number in the same way as the second number is related to the first number and the fourth number is related to the third number.

9 : 11 :: 29 : 21 :: 37 : ?

- Ans
- 1. 26
  - 2. 24
  - 3. 25
  - 4. 22

Question ID : 26433069430  
Status : Not Attempted and Marked For Review  
Chosen Option : --

Q.10 Select the letter-cluster from among the given options that can replace the question mark (?) in the following series.  
OL, VE, CX, JQ, ?

- Ans
- 1. PK
  - 2. PJ
  - 3. QJ
  - 4. QK

Question ID : 26433079038  
Status : Answered  
Chosen Option : 3

Q.11 Which two signs and two numbers (not digits) should be interchanged in the following equation to make it correct?

$19 \div 14 + 7 \times 2 \times 4 = 80$

- Ans
- 1. 14 and 2; + and ×
  - 2. 7 and 2; + and ×
  - 3. 4 and 19; + and +
  - 4. 19 and 14; + and ÷

Question ID : 26433082884  
Status : Not Attempted and Marked For Review  
Chosen Option : --

Q.12 Seven people K, L, M, N, O, P and Q, are sitting in a straight row, facing the north. Only four people sit to the left of P. Q sits third to the left of N. N is not an immediate neighbour of P. M sits third to the left of L. K sits to the immediate left of M. Who sits at the extreme left end of the row?

- Ans
- 1. Q
  - 2. M
  - 3. O
  - 4. K

Question ID : 26433076527  
Status : Answered  
Chosen Option : 1

Q.13 'A + B' means 'A is the brother of B'.  
'A / B' means 'A is the mother of B'.  
'A ^ B' means 'A is the husband of B'.  
'A % B' means 'A is the sister of B'.  
'A @ B' means 'A is the son of B'.  
If  $U \wedge V / W + X \% Y$ , how is U related to Y?

- Ans
- 1. Father's brother
  - 2. Father
  - 3. Son
  - 4. Brother

Question ID : 26433087000  
Status : Answered  
Chosen Option : 2

Q.14 Select the number from among the given options that can replace the question mark (?) in the following series.  
113, 114, 110, 119, 103, 128, ?

- Ans
- 1. 98
  - 2. 89
  - 3. 92
  - 4. 97

Question ID : 26433078917  
Status : Answered  
Chosen Option : 1

Q.15 Which two signs should be interchanged to make the below equation mathematically correct?  
 $36 + 27 - 75 \times 5 \div 25 = 24$

- Ans
- 1. + and -
  - 2. - and +
  - 3. + and  $\times$
  - 4. + and  $\div$

Question ID : 264330117557  
Status : Answered  
Chosen Option : 4

Q.16 In a certain code language, 'FLEET' is written as 'TFMFF', 'OUTLET' is written as 'TOVUMF', how will 'LABOUR' be written as in that language?

- Ans
- 1. RLBCPV
  - 2. RLABOU
  - 3. LRBCPV
  - 4. LRAOU

Question ID : 26433069648

Status : **Not Attempted and Marked For Review**

Chosen Option : --

Q.17 Select the option that is related to the fifth letter-cluster in the same way as the second letter-cluster is related to the first letter-cluster and the fourth letter-cluster is related to the third letter-cluster.  
ZINCKY : XGLAIW :: ZIGZAG : XGEXYE :: JOCKEY : ?

- Ans
- 1. XJASIH
  - 2. HSIAJX
  - 3. HMAICW
  - 4. HISAJX


Question ID : 26433083108

Status : **Answered**

Chosen Option : 3



Q.18 Select the figure that will come next in the following series.



Ans

- ✗ 1.
- ✗ 2.
- ✓ 3.
- ✗ 4.

Question ID : 26433078972  
Status : Answered  
Chosen Option : 3

Q.19 Select the option that is related to the third word in the same way as the second word is related to the first word. (The words must be considered as meaningful English words and must not be related to each other based on the number of letters/number of consonants/vowels in the word.)  
Author : Pen :: Carpenter : ?

- ✗ 1. Wood
- ✗ 2. Wrench
- ✓ 3. Saw
- ✗ 4. Furniture

Question ID : 26433067856  
Status : Answered  
Chosen Option : 2

**Q.20** Three statements are given, followed by three conclusions numbered I, II and III. Assuming the statements to be true, even if they seem to be at variance with commonly known facts, decide which of the conclusions logically follow(s) from the statements.

**Statements:**

All birds are cows.

Some cows are hens.

Some dogs are birds.

**Conclusions:**

I. Some dogs are hens.

II. No hens are birds.

III. Some cows are dogs.

- Ans**
- 1. Only conclusions II and III follow
  - 2. Only conclusions I and II follow
  - 3. All conclusions follow
  - 4. Only conclusion III follows

Question ID : 26433090990  
Status : Answered  
Chosen Option : 4

Section : Part-B-General Knowledge and General awareness

**Q.1** Who among the following personalities received the Padma Shri award in the year 2008 for his contributions in Odissi dance?

- Ans**
- 1. Shambhu Maharaj
  - 2. Kalkaprasad
  - 3. Ramlal Bareth
  - 4. Gangadhar Pradhan

Question ID : 26433070808  
Status : Answered  
Chosen Option : 1

**Q.2** Use of bauxite as a raw material is mainly for which industry?

- Ans**
- 1. Aluminium industry
  - 2. Jute industry
  - 3. Steel industry
  - 4. Cement industry

Question ID : 264330115398  
Status : Answered  
Chosen Option : 1

**Q.3** Which state/Union Territory hosted the Lusofonia Games in the year 2014?

- Ans**
- 1. Goa
  - 2. Delhi
  - 3. Madhya Pradesh
  - 4. Pondicherry

Question ID : 264330115938  
Status : Not Answered  
Chosen Option : --

Q.4 Prime Minister Narendra Modi inaugurated Arunachal Pradesh's first greenfield airport in which city?

- Ans
- 1. Dirang
  - 2. Hollongi
  - 3. Khonsa
  - 4. Anini

Question ID : 264330115047  
Status : Not Answered  
Chosen Option : --

Q.5 The Hampi Utsav is celebrated every year in which of the following states?

- Ans
- 1. Karnataka
  - 2. Kerala
  - 3. Tamil Nadu
  - 4. Andhra Pradesh

Question ID : 264330115110  
Status : Answered  
Chosen Option : 1

Q.6 Workers who own and operate an enterprise to earn their livelihood are known as \_\_\_\_\_.

- Ans
- 1. regular salaried workers
  - 2. skill workers
  - 3. self-employed
  - 4. casual labourers

Question ID : 264330116085  
Status : Answered  
Chosen Option : 2

Q.7 Which of the following is the chemical formula of washing soda?

- Ans
- 1.  $\text{Na}_2\text{CO}_3 \cdot 10\text{H}_2\text{O}$
  - 2.  $\text{Na}_2\text{CO}_2$
  - 3.  $\text{Na}_2\text{CO}_3 \cdot \text{H}_2\text{O}$
  - 4.  $\text{NaCO}_2 \cdot \text{H}_2\text{O}$

Question ID : 264330115199  
Status : Answered  
Chosen Option : 2

Q.8 Consider a market structure where the number of firms is large, there is free entry and exit of firms, but the goods produced by them are not homogeneous. Such a market structure is called \_\_\_\_\_.

- Ans
- 1. monopsony
  - 2. oligopoly
  - 3. monopoly
  - 4. monopolistic competition

Question ID : 264330115344  
Status : Answered  
Chosen Option : 2

Q.9 Which of the following is known as Fool's Gold?

- Ans
- 1.  $\text{Fe}_2\text{S}_3$
  - 2.  $\text{FeS}_2$
  - 3.  $\text{FeS}$
  - 4.  $\text{FeS}_3$

Question ID : 26433066469  
Status : Not Answered  
Chosen Option : --

Q.10 The Consumer Protection Act, 2019 was passed in 2019 and came into force in \_\_\_\_\_.

- Ans
- 1. 2019
  - 2. 2021
  - 3. 2020
  - 4. 2022

Question ID : 264330116233  
Status : Answered  
Chosen Option : 3

Q.11 Aga Khan Gold Cup is associated with which of the following Sports?

- Ans
- 1. Golf
  - 2. Hockey
  - 3. Basketball
  - 4. Tennis

Question ID : 264330116304  
Status : Not Answered  
Chosen Option : --

Q.12 Emperor Ashoka was the son of \_\_\_\_\_.

- Ans
- 1. Bimbisara
  - 2. Bindusara
  - 3. Chandragupta Maurya
  - 4. Ajatashatru

Question ID : 264330106589  
Status : Answered  
Chosen Option : 1

Q.13 The upper house of a state legislature is known as \_\_\_\_\_.

- Ans
- 1. Lok Sabha
  - 2. Vidhan Parishad
  - 3. Vidhan Sabha
  - 4. Rajya Sabha

Question ID : 26433086674  
Status : Answered  
Chosen Option : 1

Q.14 What was the actual growth rate of the seventh five year plan of India?

- Ans
- 1. 8 %
  - 2. 3 %
  - 3. 12 %
  - 4. 6 %

Question ID : 26433054630  
Status : Not Answered  
Chosen Option : --

Q.15 As of November 2022, who is the Union Minister for Health in India?

- Ans
- 1. Hardeep Singh Puri
  - 2. Mansukh Mandaviya
  - 3. Parshottam Rupala
  - 4. Narayan Rane

Question ID : 264330114934  
Status : Not Answered  
Chosen Option : --

Q.16 In \_\_\_\_\_, James Mill, a Scottish economist and political philosopher, published a massive three-volume work, A History of British India.

- Ans
- 1. 1819
  - 2. 1831
  - 3. 1821
  - 4. 1817

Question ID : 264330115708  
Status : Not Answered  
Chosen Option : --

Q.17 Sharodi Saikia is an Indian classical dancer known for \_\_\_\_\_ dance form.

- Ans
- 1. Fusion
  - 2. Kuchipudi
  - 3. Manipuri
  - 4. Sattriya

Question ID : 264330115887  
Status : Not Answered  
Chosen Option : --

Q.18 Rule of Law is the foundation of any \_\_\_\_\_, which means that no person is above the law.

- Ans
- 1. communism
  - 2. autocracy
  - 3. democracy
  - 4. dictatorship

Question ID : 26433086801  
Status : Answered  
Chosen Option : 3

Q.19 Visakhapatnam is the \_\_\_\_\_ landlocked and well-protected port.

- Ans
- 1. deepest
  - 2. shallowest
  - 3. longest
  - 4. shortest

Question ID : 264330115591  
Status : Not Answered  
Chosen Option : --

Q.20 Dead Sea is bordered by which two countries?

- Ans
- 1. Israel and Tunisia
  - 2. Jordan and Turkey
  - 3. Israel and Jordan
  - 4. Syria and Jordan

Question ID : 264330116015  
Status : Not Answered  
Chosen Option : --

Q.1 The value of an Apple laptop depreciated from Rs.1,33,100 to Rs.72,900 in 3 years. Find the yearly rate of depreciation. (Correct to 2 decimal places.)

- Ans
- 1. 25.32%
  - 2. 21.34%
  - 3. 20.75%
  - 4. 18.18%

Question ID : 26433081476  
Status : Answered  
Chosen Option : 4

Q.2 In a mixture of 624 litres, the ratio of milk and water is 5:3. The amount of water to be further added to the mixture so as to make the ratio of the milk to water 5:4 will be:

- Ans
- 1. 84 litres
  - 2. 78 litres
  - 3. 64 litres
  - 4. 54 litres

Question ID : 26433075720  
Status : Answered  
Chosen Option : 2

Q.3 A man sold two pens at Rs.12 each. On one, he gained 20% and on the other, he lost 20%. On the whole, he:

- Ans
- 1. lost Rs.1
  - 2. neither gained nor lost
  - 3. gained Rs.1
  - 4. gained Rs.2

Question ID : 26433075147  
Status : Answered  
Chosen Option : 2

Q.4 Two trains of same length are running on parallel tracks in opposite directions with speeds of 54 km/h and 90 km/h respectively. They cross each other in 12 sec. Find the length (in metres) of each train.

- Ans
- 1. 210
  - 2. 220
  - 3. 240
  - 4. 230

Question ID : 26433076307  
Status : Not Answered  
Chosen Option : --

Q.5 The Time taken by Anjali to finish a piece of work is four times the time taken by Ron and Three times the time taken by John. If all three of them work together, it takes them 4 days to complete the entire work. How much time Ron alone take to finish the work?

- Ans
- 1. 11 days
  - 2. 7 days
  - 3. 6 days
  - 4. 8 days

Question ID : 264330116917  
Status : Answered  
Chosen Option : 4

Q.6 Calculate the cost to paint a water tank in the shape of a sphere having a radius of 7 cm, if the cost of painting is Rs.4.5/cm<sup>2</sup>. ( $\pi = 22/7$ )

- Ans
- 1. Rs. 2,272
  - 2. Rs. 2,277
  - 3. Rs. 2,727
  - 4. Rs. 2,772

Question ID : 26433076247  
Status : Not Answered  
Chosen Option : --

Q.7 Mohan and Sohan invested Rs.3,000 and Rs.4,000 respectively in a property and after 6 month Sohan withdraws. If in the end of the year their profit is Rs.540, then what is the profit earned by Mohan?

- Ans
- 1. Rs.288
  - 2. Rs.324
  - 3. Rs.344
  - 4. Rs.296

Question ID : 26433075673  
Status : Not Answered  
Chosen Option : --

Q.8 Seats for Engineering, Management and Science in a University are in the ratio of 7 : 8 : 9. There is a proposal to increase these seats by 20%, 30% and 60% respectively. What will be the ratio of the increased seats?

- Ans
- 1. 17 : 19 : 21
  - 2. 8 : 9 : 11
  - 3. 21 : 26 : 36
  - 4. 23 : 25 : 27

Question ID : 26433082367  
Status : Answered  
Chosen Option : 4



Q.9 Two trains running in the same direction at 110 km/h and 90 km/h completely pass one another in 54 sec. If the length of the first train is 130 metres, then find the length of the second train.

- Ans
- 1. 165 metre
  - 2. 180 metre
  - 3. 160 metre
  - 4. 170 metre

Question ID : 26433080195  
Status : Not Answered  
Chosen Option : --

Q.10 A cyclist moving on a circular track of radius 140 m completes one revolution in 2 min. What is the average speed of the cyclist?

- Ans
- 1.  $660 \frac{\text{m}}{\text{min}}$
  - 2.  $440 \frac{\text{m}}{\text{min}}$
  - 3.  $880 \frac{\text{m}}{\text{min}}$
  - 4.  $550 \frac{\text{m}}{\text{min}}$

Question ID : 26433074275  
Status : Not Answered  
Chosen Option : --

Q.11 Find the mean proportional of 0.75 and 3?

- Ans
- 1. 1.25
  - 2. 1.5
  - 3. 1
  - 4. 2

Question ID : 26433081714  
Status : Not Answered  
Chosen Option : --

Q.12 If a reduction of 10% in the price of rice enables a person to obtain 22 kg more for ₹250, then the original price of rice per kg is:

- Ans
- 1. ₹2.42
  - 2. ₹1.62
  - 3. ₹1.26
  - 4. ₹1.86

Question ID : 26433075809  
Status : Not Answered  
Chosen Option : --

Q.13 The HCF and LCM of 2 numbers are 32 and 192. One of the numbers is 64. Find the absolute difference between the numbers.

- Ans
- 1. 16
  - 2. 8
  - 3. 24
  - 4. 32

Question ID : 264330116651  
Status : Answered  
Chosen Option : 3

Q.14 Simplify  $6 + [(16 - 4) \div (2^2 + 2)] - 2$ .

- Ans
- 1. 4
  - 2. 8
  - 3. 6
  - 4. 2

Question ID : 26433079766  
Status : Answered  
Chosen Option : 3

Q.15 The expenses on rice, petrol and oil of a family are in the ratio 8 : 11 : 6. If the prices of these items are increased by 10%, 20% and 30%, respectively, then the total expenses of the family on these items are increased by:

- Ans
- 1. 20.8%
  - 2. 20.2%
  - 3. 19.8%
  - 4. 19.2%

Question ID : 26433080356  
Status : Not Answered  
Chosen Option : --

Q.16 A school manager decides to build a new school building in 40 days. He employs 100 men in the beginning and 100 men after 35 days and completes the construction within the stipulated time. If he had not employed the additional men, how many days behind schedule would the school building have been completed?

- Ans
- 1. 2 days
  - 2. 3 days
  - 3. 4 days
  - 4. 5 days

Question ID : 26433075104  
Status : Not Answered  
Chosen Option : --

Q.17 ₹12,000 becomes ₹15,972 in a certain period of time at the rate of 10% per annum on compound interest, compounding annually. Find the period of time.

- Ans
- 1. 1 year
  - 2. 4 years
  - 3. 2 years
  - 4. 3 years

Question ID : 26433080123  
Status : Answered  
Chosen Option : 2

Q.18 The marked price of a hair dryer is Rs.10,550. The shopkeeper offers a discount of 18% on it. Find its selling price.

- Ans
- 1. Rs.8,453
  - 2. Rs.8,651
  - 3. Rs.8,052
  - 4. Rs.7,652

Question ID : 26433075235  
Status : Answered  
Chosen Option : 4

Q.19 The marked price of a mobile phone was ₹10,000. The shop owner offered 10% discount but on further request by the customer, he sold it at ₹8500 after giving a cash discount. How much is this cash discount in percentage (up to 2 decimal places)?

- Ans
- 1. 6.25%
  - 2. 5.25%
  - 3. 6.65%
  - 4. 5.56%

Question ID : 26433082385  
Status : Not Answered  
Chosen Option : --

Q.20 What is the volume of a cone whose height is 24 cm and radius is 14 cm?

- Ans
- 1. 4298 cm<sup>3</sup>
  - 2. 4928 cm<sup>3</sup>
  - 3. 9428 cm<sup>3</sup>
  - 4. 4982 cm<sup>3</sup>

Question ID : 26433073046  
Status : Not Answered  
Chosen Option : --

Q.1 Fill in the blanks with appropriate homonym.

At a particular \_\_\_\_\_ of life, the body goes through some unnecessary changes.

- Ans
- 1. Stage (a raised platform)
  - 2. Plane
  - 3. Stage (step)
  - 4. Plain

Question ID : 26433092933  
Status : Answered  
Chosen Option : 3

Q.2 Parts of the following sentence have been underlined and given as options. Select the option that contains an error.

Jiten and Hiru loves to eat French fries for lunch.

- Ans
- 1. French fries
  - 2. loves
  - 3. lunch
  - 4. eat

Question ID : 26433089369  
Status : Answered  
Chosen Option : 2

Q.3 Select the most appropriate homonym of the given word.

Blue

- Ans
- 1. Bellow
  - 2. Blew
  - 3. Below
  - 4. Blow

Question ID : 26433086347  
Status : Not Attempted and  
Marked For Review  
Chosen Option : --

Q.4 Select the most appropriate option that can substitute the underlined word in the given sentence.

Mr. Saxena has espoused a child from an orphanage.

- Ans
- 1. adapted
  - 2. adepted
  - 3. accepted
  - 4. adopted

Question ID : 264330101274  
Status : Answered  
Chosen Option : 4

Q.5 Select the most appropriate ANTONYM of the given word.

Accurate

- Ans  1. Heist  
 2. Proficient  
 3. Unreliable  
 4. Fiesta

Question ID : 26433073987  
Status : Answered  
Chosen Option : 4

Q.6 Select the most appropriate option to fill in the blank.

His seat was the \_\_\_\_\_ in our row.

- Ans  1. farthest  
 2. near to  
 3. further  
 4. far

Question ID : 26433090563  
Status : Not Answered  
Chosen Option : --

Q.7 The sentence given below has one misspelt word. Spot the INCORRECTLY spelt word and select its correct spelling.

Abbreviations are not understood by everyone.

- Ans  1. Abreviashions  
 2. Abbriviations  
 3. Abbreviations  
 4. Abriviations

Question ID : 26433073548  
Status : Not Answered  
Chosen Option : --

Q.8 Select the most appropriate ANTONYM of the given word.

Put forth

- Ans  1. Stop  
 2. Against  
 3. Apply  
 4. Conceal

Question ID : 26433090797  
Status : Answered  
Chosen Option : 1

Q.9 Select the most appropriate synonym of the underlined word in the given sentence.

No one can exterminate poverty from this world.

- Ans
- 1. plant
  - 2. endure
  - 3. secure
  - 4. eradicate

Question ID : 26433092912  
Status : Answered  
Chosen Option : 4

Q.10 Select the most appropriate synonym of the underlined word.

We had to move slowly through the narrow alley.

- Ans
- 1. Imminent
  - 2. Dreary
  - 3. Maximum
  - 4. Cramped

Question ID : 26433088762  
Status : Answered  
Chosen Option : 3

Q.11 Select the most appropriate option that can substitute the underlined segment in the given sentence.

We should also learn to trust what he says. After all, he is a reformed person now.

- Ans
- 1. to give someone the benefit of the doubt
  - 2. to make matters worse
  - 3. no pain, no gain
  - 4. to wrap our head around something

Question ID : 26433072097  
Status : Marked For Review  
Chosen Option : 1

Q.12 Select the most appropriate option to substitute the underlined segment in the given sentence.

The manager have get hot under the collar when the workers demanded higher wages.

- Ans
- 1. had get under the collar
  - 2. got hot under the collar
  - 3. get hot under the collar
  - 4. will got under the collar

Question ID : 26433073923  
Status : Not Answered  
Chosen Option : --

Q.13 Select the most appropriate option to substitute the underlined segment in the given sentence.

The bufotoxin present on a toad's skin can irritate you but touching a toad shall not cause you warts.

- Ans
- 1. was not cause
  - 2. do not cause
  - 3. has not give
  - 4. won't give

Question ID : 26433089832  
Status : Answered  
Chosen Option : 4

Q.14 Select the most appropriate synonym of the given word.

Manifest

- Ans
- 1. Apparent
  - 2. Cryptic
  - 3. Natural
  - 4. Concealed

Question ID : 26433073862  
Status : Answered  
Chosen Option : 4

Q.15 Select the most appropriate option to fill in the blank.

The minister reached the venue of the programme before time which                      wonder and awe among the organisers.

- Ans
- 1. strengthened
  - 2. draped
  - 3. created
  - 4. lagged

Question ID : 26433073789  
Status : Answered  
Chosen Option : 3

**Comprehension:**

In the following passage, some words have been deleted. Read the passage carefully and select the most appropriate option to fill in each blank.

Maybe you're bored of bananas, apples and grapes and need a fresh produce pick? A nutrient-rich serving of kiwi fruit may be just what you need. A serving of kiwi fruit (2 kiwis) has twice the vitamin C of an orange, (1) \_\_\_\_\_ potassium as a banana and the fibre of a bowl of whole grain cereal—all for less than 100 calories!

The fuzzy fruit is sky-high in both soluble and insoluble fibre, both of which are essential for promoting heart health, (2) \_\_\_\_\_ digestion and lowering cholesterol levels—that's a winning trifecta. Kiwi fruit has also been considered a 'nutritional all-star,' as Rutgers University researchers found that kiwi fruit has the best nutrient density of 21 commonly consumed fruits.

Along with vitamin C, kiwi fruits are rich in many bioactive compounds that have antioxidant capacity to help protect against free radicals, harmful by-products produced in the body. If you want clean energy, think of kiwi fruit because they're rich in magnesium, a nutrient essential to (3) \_\_\_\_\_ food into energy.

A kiwi fruit also doubles as a peeper-keeper by supplying your eyes with protective lutein, a carotenoid that's concentrated in eye tissues and helps protect against harmful free radicals. Kiwi fruit is also (4) \_\_\_\_\_ with blood pressure-lowering potassium. In fact, a 100-gram serving of kiwi fruit—that's about one large kiwi—provides 15% of the Recommended Daily Allowance (RDA) of potassium.

Kiwi fruit has been growing in New Zealand for over 100 years. Once the fruit gained in popularity, other countries started to grow them including Italy, France, Chile, Japan, South Korea and Spain. At first, kiwis were referred to as 'Yang Tao' or 'Chinese Gooseberry,' but the name was (5) \_\_\_\_\_ changed to kiwi fruit so that everyone would know where the fruit came from.

**SubQuestion No : 16**

**Q.16** Select the most appropriate option to fill in blank number 1.

- Ans  1. lot of  
 2. as much  
 3. as much as  
 4. much of

Question ID : 26433088913

Status : Marked For Review

Chosen Option : 1



**Comprehension:**

In the following passage, some words have been deleted. Read the passage carefully and select the most appropriate option to fill in each blank.

Maybe you're bored of bananas, apples and grapes and need a fresh produce pick? A nutrient-rich serving of kiwi fruit may be just what you need. A serving of kiwi fruit (2 kiwis) has twice the vitamin C of an orange, (1) \_\_\_\_\_ potassium as a banana and the fibre of a bowl of whole grain cereal—all for less than 100 calories!

The fuzzy fruit is sky-high in both soluble and insoluble fibre, both of which are essential for promoting heart health, (2) \_\_\_\_\_ digestion and lowering cholesterol levels—that's a winning trifecta. Kiwi fruit has also been considered a 'nutritional all-star,' as Rutgers University researchers found that kiwi fruit has the best nutrient density of 21 commonly consumed fruits.

Along with vitamin C, kiwi fruits are rich in many bioactive compounds that have antioxidant capacity to help protect against free radicals, harmful by-products produced in the body. If you want clean energy, think of kiwi fruit because they're rich in magnesium, a nutrient essential to (3) \_\_\_\_\_ food into energy.

A kiwi fruit also doubles as a peeper-keeper by supplying your eyes with protective lutein, a carotenoid that's concentrated in eye tissues and helps protect against harmful free radicals. Kiwi fruit is also (4) \_\_\_\_\_ with blood pressure-lowering potassium. In fact, a 100-gram serving of kiwi fruit—that's about one large kiwi—provides 15% of the Recommended Daily Allowance (RDA) of potassium.

Kiwi fruit has been growing in New Zealand for over 100 years. Once the fruit gained in popularity, other countries started to grow them including Italy, France, Chile, Japan, South Korea and Spain. At first, kiwis were referred to as 'Yang Tao' or 'Chinese Gooseberry,' but the name was (5) \_\_\_\_\_ changed to kiwi fruit so that everyone would know where the fruit came from.

**SubQuestion No : 17**

**Q.17** Select the most appropriate option to fill in blank number 2.

- Ans**  1. regulating  
 2. repressing  
 3. taming  
 4. constraining

Question ID : 26433088914

Status : Answered

Chosen Option : 1

**Comprehension:**

In the following passage, some words have been deleted. Read the passage carefully and select the most appropriate option to fill in each blank.

Maybe you're bored of bananas, apples and grapes and need a fresh produce pick? A nutrient-rich serving of kiwi fruit may be just what you need. A serving of kiwi fruit (2 kiwis) has twice the vitamin C of an orange, (1) \_\_\_\_\_ potassium as a banana and the fibre of a bowl of whole grain cereal—all for less than 100 calories!

The fuzzy fruit is sky-high in both soluble and insoluble fibre, both of which are essential for promoting heart health, (2) \_\_\_\_\_ digestion and lowering cholesterol levels—that's a winning trifecta. Kiwi fruit has also been considered a 'nutritional all-star,' as Rutgers University researchers found that kiwi fruit has the best nutrient density of 21 commonly consumed fruits.

Along with vitamin C, kiwi fruits are rich in many bioactive compounds that have antioxidant capacity to help protect against free radicals, harmful by-products produced in the body. If you want clean energy, think of kiwi fruit because they're rich in magnesium, a nutrient essential to (3) \_\_\_\_\_ food into energy.

A kiwi fruit also doubles as a peeper-keeper by supplying your eyes with protective lutein, a carotenoid that's concentrated in eye tissues and helps protect against harmful free radicals. Kiwi fruit is also (4) \_\_\_\_\_ with blood pressure-lowering potassium. In fact, a 100-gram serving of kiwi fruit—that's about one large kiwi—provides 15% of the Recommended Daily Allowance (RDA) of potassium.

Kiwi fruit has been growing in New Zealand for over 100 years. Once the fruit gained in popularity, other countries started to grow them including Italy, France, Chile, Japan, South Korea and Spain. At first, kiwis were referred to as 'Yang Tao' or 'Chinese Gooseberry,' but the name was (5) \_\_\_\_\_ changed to kiwi fruit so that everyone would know where the fruit came from.

**SubQuestion No : 18**

**Q.18** Select the most appropriate option to fill in blank number 3.

- Ans
- 1. vary
  - 2. revise
  - 3. convert
  - 4. displace

Question ID : 26433088915

Status : Answered

Chosen Option : 3

**Comprehension:**

In the following passage, some words have been deleted. Read the passage carefully and select the most appropriate option to fill in each blank.

Maybe you're bored of bananas, apples and grapes and need a fresh produce pick? A nutrient-rich serving of kiwi fruit may be just what you need. A serving of kiwi fruit (2 kiwis) has twice the vitamin C of an orange, (1) \_\_\_\_\_ potassium as a banana and the fibre of a bowl of whole grain cereal—all for less than 100 calories!

The fuzzy fruit is sky-high in both soluble and insoluble fibre, both of which are essential for promoting heart health, (2) \_\_\_\_\_ digestion and lowering cholesterol levels—that's a winning trifecta. Kiwi fruit has also been considered a 'nutritional all-star,' as Rutgers University researchers found that kiwi fruit has the best nutrient density of 21 commonly consumed fruits.

Along with vitamin C, kiwi fruits are rich in many bioactive compounds that have antioxidant capacity to help protect against free radicals, harmful by-products produced in the body. If you want clean energy, think of kiwi fruit because they're rich in magnesium, a nutrient essential to (3) \_\_\_\_\_ food into energy.

A kiwi fruit also doubles as a peeper-keeper by supplying your eyes with protective lutein, a carotenoid that's concentrated in eye tissues and helps protect against harmful free radicals. Kiwi fruit is also (4) \_\_\_\_\_ with blood pressure-lowering potassium. In fact, a 100-gram serving of kiwi fruit—that's about one large kiwi—provides 15% of the Recommended Daily Allowance (RDA) of potassium.

Kiwi fruit has been growing in New Zealand for over 100 years. Once the fruit gained in popularity, other countries started to grow them including Italy, France, Chile, Japan, South Korea and Spain. At first, kiwis were referred to as 'Yang Tao' or 'Chinese Gooseberry,' but the name was (5) \_\_\_\_\_ changed to kiwi fruit so that everyone would know where the fruit came from.

**SubQuestion No : 19**

**Q.19** Select the most appropriate option to fill in blank number 4.

- Ans
- 1. burdened
  - 2. condensed
  - 3. overstuffed
  - 4. packed

Question ID : 26433088916

Status : Answered

Chosen Option : 3

**Comprehension:**

In the following passage, some words have been deleted. Read the passage carefully and select the most appropriate option to fill in each blank.

Maybe you're bored of bananas, apples and grapes and need a fresh produce pick? A nutrient-rich serving of kiwi fruit may be just what you need. A serving of kiwi fruit (2 kiwis) has twice the vitamin C of an orange, (1) \_\_\_\_\_ potassium as a banana and the fibre of a bowl of whole grain cereal—all for less than 100 calories!

The fuzzy fruit is sky-high in both soluble and insoluble fibre, both of which are essential for promoting heart health, (2) \_\_\_\_\_ digestion and lowering cholesterol levels—that's a winning trifecta. Kiwi fruit has also been considered a 'nutritional all-star,' as Rutgers University researchers found that kiwi fruit has the best nutrient density of 21 commonly consumed fruits.

Along with vitamin C, kiwi fruits are rich in many bioactive compounds that have antioxidant capacity to help protect against free radicals, harmful by-products produced in the body. If you want clean energy, think of kiwi fruit because they're rich in magnesium, a nutrient essential to (3) \_\_\_\_\_ food into energy.

A kiwi fruit also doubles as a peeper-keeper by supplying your eyes with protective lutein, a carotenoid that's concentrated in eye tissues and helps protect against harmful free radicals. Kiwi fruit is also (4) \_\_\_\_\_ with blood pressure-lowering potassium. In fact, a 100-gram serving of kiwi fruit—that's about one large kiwi—provides 15% of the Recommended Daily Allowance (RDA) of potassium.

Kiwi fruit has been growing in New Zealand for over 100 years. Once the fruit gained in popularity, other countries started to grow them including Italy, France, Chile, Japan, South Korea and Spain. At first, kiwis were referred to as 'Yang Tao' or 'Chinese Gooseberry,' but the name was (5) \_\_\_\_\_ changed to kiwi fruit so that everyone would know where the fruit came from.

**SubQuestion No : 20**

**Q.20** Select the most appropriate option to fill in blank number 5.

- Ans**
- 1. anon
  - 2. presently
  - 3. ultimately
  - 4. directly

Question ID : 26433088917

Status : Answered

Chosen Option : 4

**Section : Part-D-Hindi**

**Q.1** 'मैं तुम्हारे \_\_\_\_\_ भविष्य की कामना करता हूँ।' वाक्य में रिक्त स्थान की पूर्ति शुद्ध शब्द द्वारा कीजिए।

- Ans**
- 1. उज्वल
  - 2. उजवल
  - 3. उज्ज्वल
  - 4. उज्वल्ल

Question ID : 26433069703

Status : Not Answered

Chosen Option : --

Q.2 निम्न वाक्य में रिक्त स्थान की पूर्ति उचित संज्ञा शब्द से करें।  
वह अभी-अभी \_\_\_\_\_ के घर गया है।

- Ans
- 1. कोई
  - 2. दूसरे
  - 3. लोकेश
  - 4. किसी

Question ID : 26433085023

Status : Not Answered

Chosen Option : --

Q.3 “आकाश में तम का साम्राज्य था।”  
उक्त वाक्य में प्रयुक्त ‘तम’ के स्थान पर उसके विलोम शब्द का प्रयोग निम्न में से किस वाक्य में किया गया है?

- Ans
- 1. आकाश में प्रकाश का साम्राज्य था।
  - 2. आकाश में तिमिर का साम्राज्य था।
  - 3. आकाश में तारों का साम्राज्य था।
  - 4. आकाश में अंधकार का साम्राज्य था।

Question ID : 26433067024

Status : Not Answered

Chosen Option : --

Q.4 निम्न वाक्य में रेखांकित अंश के स्थान पर आने वाले सर्वाधिक उपयुक्त विकल्प का चयन कीजिए।  
मैंने उसे बहुत समझाया पर वहाँ न मानी।

- Ans
- 1. तुम
  - 2. कि
  - 3. वह
  - 4. मैं

Question ID : 26433066879

Status : Not Answered

Chosen Option : --

Q.5 “आप अपने लक्ष्य तक अवश्य पहुँचेंगे।”  
उक्त वाक्य में प्रयुक्त ‘लक्ष्य’ के स्थान पर उसके समानार्थी शब्द का प्रयोग निम्न में से किस वाक्य में किया गया है?

- Ans
- 1. आप अपने अंत तक अवश्य पहुँचेंगे।
  - 2. आप अपने मार्ग तक अवश्य पहुँचेंगे।
  - 3. आप अपने परिवार तक अवश्य पहुँचेंगे।
  - 4. आप अपने गंतव्य तक अवश्य पहुँचेंगे।

Question ID : 26433067030

Status : Not Answered

Chosen Option : --

Q.6 निम्नलिखित वाक्य में रिक्त स्थानों की पूर्ति उचित एकार्थी शब्दों से करें।  
\_\_\_\_\_ बदलती नहीं है और \_\_\_\_\_ हमेशा बदलती है।

- Ans
- 1. सत्य -सपना
  - 2. झूठ-मौसम
  - 3. ऋत-ऋतु
  - 4. टुटा-सपना

Question ID : 26433091323  
Status : Not Answered  
Chosen Option : --

Q.7 नीचे दिए गए वाक्य के रेखांकित भाग को उचित वाक्य-खंड से प्रतिस्थापित करें।  
'हमारे गले में पराधीनता की बेड़ियाँ पड़ी थीं।'

- Ans
- 1. हमारे गले में स्वाधीनता की बेड़ियाँ
  - 2. हमारे पैरों में पराधीनता की बेड़ियाँ
  - 3. हमारे पैरों में पराधीनता की हथकड़ियाँ
  - 4. हमारे हाथों में पराधीनता की बेड़ियाँ

Question ID : 26433062809  
Status : Not Answered  
Chosen Option : --

Q.8 निम्न वाक्य में रेखांकित शब्द के स्थान पर सर्वोचित विकल्प चुनिए।  
वह मिलनसार था, इसलिए उसने कई अपने बना लिए।

- Ans
- 1. प्रेमी
  - 2. भक्त
  - 3. शत्रु
  - 4. मित्र

Question ID : 26433084958  
Status : Not Answered  
Chosen Option : --

Q.9 दिए गए मुहावरे में रेखांकित अंश के स्थान पर सबसे उपयुक्त विकल्प कौन-सा होगा?  
छाती पर चना दलना

- Ans
- 1. मक्का
  - 2. मूंग
  - 3. तेल
  - 4. पानी

Question ID : 26433066747  
Status : Not Answered  
Chosen Option : --

Q.10 'किनारा' का पर्यायवाची शब्द इनमें से क्या होगा?

- Ans  1. पानी  
 2. तट  
 3. आलय  
 4. तारिका

Question ID : 26433066906  
Status : Not Answered  
Chosen Option : --

Q.11 निम्नलिखित में से शुद्ध वाक्य कौन-सा है?

- Ans  1. शरीर पर कई अंग होते हैं।  
 2. विदुषी स्त्री का सम्मान करना चाहिए।  
 3. मैं आप वहाँ जाऊँगा।  
 4. अपने बच्चों बहादुर बनाओ।

Question ID : 26433066999  
Status : Not Answered  
Chosen Option : --

Q.12 'सिर उठाना' मुहावरे का उचित अर्थ है-

- Ans  1. हर स्थिति में साथ देना  
 2. सिर ऊपर करना  
 3. विरोध में खड़ा होना  
 4. पीछे पड़ना

Question ID : 26433065876  
Status : Not Answered  
Chosen Option : --

Q.13 निम्नलिखित विकल्पों में से कौनसा एक वाक्य साधारण क्रिया-विशेषण से सम्बन्ध नहीं रखता है?

- Ans  1. सेवक कहाँ गया।  
 2. अरे! वह अब पढ़ना चाहता है।  
 3. हाय! वह वहाँ जाता है।  
 4. हाय! वह यहाँ आता है।

Question ID : 26433091235  
Status : Not Answered  
Chosen Option : --

Q.14 निम्नलिखित वाक्यांश के लिए एक सार्थक शब्द चुनिए।  
वह पर्वत, जहाँ से सूर्य का अस्त माना जाता हो -

- Ans
- 1. अस्तगामी
  - 2. अनुपम
  - 3. अतुल
  - 4. अस्ताचल

Question ID : 26433062735

Status : Not Answered

Chosen Option : --

Q.15 निम्न वाक्यांश के लिए सार्थक शब्द का चयन विकल्पों में से कीजिए।  
जानने की इच्छा

- Ans
- 1. लिप्सा
  - 2. पिपासा
  - 3. जिज्ञासा
  - 4. आशा

Question ID : 26433070086

Status : Not Answered

Chosen Option : --

#### Comprehension:

निम्नलिखित गद्यांश में कुछ शब्दों को हटा दिया गया है। दिए गए विकल्पों की सहायता से रिक्त स्थानों की पूर्ति कीजिए। प्रत्येक संख्या के लिए सबसे उपयुक्त विकल्प का चयन कीजिए।  
आज फैशन का 1. \_\_\_\_\_ है। एक देश ही नहीं, सारा विश्व इससे 2. \_\_\_\_\_ है। विश्व में वैज्ञानिक 3. \_\_\_\_\_ चहुमुखी क्षेत्रों में हुई है। नए-नए 4. \_\_\_\_\_ के विकसित होने के कारण फैशन की दुनिया भी बढ़ती चली गई है। कल तक जो नया माना जाता था, आज पुराना लगने लगता है। विभिन्न औद्योगिक संस्थान नई से नई वस्तुएँ बनाते हैं और सभी को 5. \_\_\_\_\_ करने के लिए उनका व्यापक प्रचार करते हैं।

#### SubQuestion No : 16

Q.16 रिक्त स्थान 1 की पूर्ति के लिए सबसे उपयुक्त विकल्प का चयन कीजिए।

- Ans
- 1. हाल
  - 2. युग
  - 3. प्रतियोगिता
  - 4. कार्य

Question ID : 264330111101

Status : Not Answered

Chosen Option : --



**Comprehension:**

निम्नलिखित गद्यांश में कुछ शब्दों को हटा दिया गया है। दिए गए विकल्पों की सहायता से रिक्त स्थानों की पूर्ति कीजिए। प्रत्येक संख्या के लिए सबसे उपयुक्त विकल्प का चयन कीजिए।  
आज फैशन का 1. \_\_\_\_\_ है। एक देश ही नहीं, सारा विश्व इससे 2. \_\_\_\_\_ है। विश्व में वैज्ञानिक 3. \_\_\_\_\_ चहुमुखी क्षेत्रों में हुई है। नए-नए 4. \_\_\_\_\_ के विकसित होने के कारण फैशन की दुनिया भी बढ़ती चली गई है। कल तक जो नया माना जाता था, आज पुराना लगने लगता है। विभिन्न औद्योगिक संस्थान नई से नई वस्तुएँ बनाते हैं और सभी को 5. \_\_\_\_\_ करने के लिए उनका व्यापक प्रचार करते हैं।

**SubQuestion No : 17**

Q.17 रिक्त स्थान 2 की पूर्ति के लिए सबसे उपयुक्त विकल्प का चयन कीजिए।

- Ans
- 1. सहमा
  - 2. उलझा
  - 3. समाहित
  - 4. प्रभावित

Question ID : 264330111102

Status : Not Answered

Chosen Option : --

**Comprehension:**

निम्नलिखित गद्यांश में कुछ शब्दों को हटा दिया गया है। दिए गए विकल्पों की सहायता से रिक्त स्थानों की पूर्ति कीजिए। प्रत्येक संख्या के लिए सबसे उपयुक्त विकल्प का चयन कीजिए।  
आज फैशन का 1. \_\_\_\_\_ है। एक देश ही नहीं, सारा विश्व इससे 2. \_\_\_\_\_ है। विश्व में वैज्ञानिक 3. \_\_\_\_\_ चहुमुखी क्षेत्रों में हुई है। नए-नए 4. \_\_\_\_\_ के विकसित होने के कारण फैशन की दुनिया भी बढ़ती चली गई है। कल तक जो नया माना जाता था, आज पुराना लगने लगता है। विभिन्न औद्योगिक संस्थान नई से नई वस्तुएँ बनाते हैं और सभी को 5. \_\_\_\_\_ करने के लिए उनका व्यापक प्रचार करते हैं।

**SubQuestion No : 18**

Q.18 रिक्त स्थान 3 की पूर्ति के लिए सबसे उपयुक्त विकल्प का चयन कीजिए।

- Ans
- 1. व्यापकता
  - 2. भाव
  - 3. दुर्गति
  - 4. प्रगति

Question ID : 264330111103

Status : Not Answered

Chosen Option : --

**Comprehension:**

निम्नलिखित गद्यांश में कुछ शब्दों को हटा दिया गया है। दिए गए विकल्पों की सहायता से रिक्त स्थानों की पूर्ति कीजिए। प्रत्येक संख्या के लिए सबसे उपयुक्त विकल्प का चयन कीजिए।  
आज फैशन का 1. \_\_\_\_\_ है। एक देश ही नहीं, सारा विश्व इससे 2. \_\_\_\_\_ है। विश्व में वैज्ञानिक 3. \_\_\_\_\_ चहुमुखी क्षेत्रों में हुई है। नए-नए 4. \_\_\_\_\_ के विकसित होने के कारण फैशन की दुनिया भी बढ़ती चली गई है। कल तक जो नया माना जाता था, आज पुराना लगने लगता है। विभिन्न औद्योगिक संस्थान नई से नई वस्तुएँ बनाते हैं और सभी को 5. \_\_\_\_\_ करने के लिए उनका व्यापक प्रचार करते हैं।

**SubQuestion No : 19**

**Q.19 रिक्त स्थान 4 की पूर्ति के लिए सबसे उपयुक्त विकल्प का चयन कीजिए।**

- Ans**
- 1. अनिवार्यता
  - 2. लोगों
  - 3. उपकरणों
  - 4. देशों

Question ID : 264330111104

Status : Not Answered

Chosen Option : --

**Comprehension:**

निम्नलिखित गद्यांश में कुछ शब्दों को हटा दिया गया है। दिए गए विकल्पों की सहायता से रिक्त स्थानों की पूर्ति कीजिए। प्रत्येक संख्या के लिए सबसे उपयुक्त विकल्प का चयन कीजिए।  
आज फैशन का 1. \_\_\_\_\_ है। एक देश ही नहीं, सारा विश्व इससे 2. \_\_\_\_\_ है। विश्व में वैज्ञानिक 3. \_\_\_\_\_ चहुमुखी क्षेत्रों में हुई है। नए-नए 4. \_\_\_\_\_ के विकसित होने के कारण फैशन की दुनिया भी बढ़ती चली गई है। कल तक जो नया माना जाता था, आज पुराना लगने लगता है। विभिन्न औद्योगिक संस्थान नई से नई वस्तुएँ बनाते हैं और सभी को 5. \_\_\_\_\_ करने के लिए उनका व्यापक प्रचार करते हैं।

**SubQuestion No : 20**

**Q.20 रिक्त स्थान 5 की पूर्ति के लिए सबसे उपयुक्त विकल्प का चयन कीजिए।**

- Ans**
- 1. दिखावा
  - 2. आकर्षित
  - 3. बहलावा
  - 4. छलावा

Question ID : 264330111105

Status : Not Answered

Chosen Option : --