



रेल भर्ती बोर्ड / RAILWAY RECRUITMENT BOARDS
सी ई एन आर आर सी - ०१/२०१९ - CEN RRC - 01/2019



Roll Number	
Candidate Name	
Test Center Name	iON Digital Zone iDZ Gajularega
Test Date	06/10/2022
Test Time	9:00 AM - 10:30 AM
Subject	Level 1

*** Note**

Correct Answer will carry 1 mark per Question.

Incorrect Answer will carry 1/3 Negative mark per Question.

1. Options shown in green color with a tick icon are correct.

2. Chosen option on the right of the question indicates the option selected by the candidate.

Section : Level 1

Q.1 In a class test, a certain number of students got different ranks based on their marks. Vivek is ranked 12th from the top and 15th from the bottom. How many total students gave the test?

- Ans**
- 1. 27
 - 2. 26
 - 3. 32
 - 4. 35

Question ID : 75189714174
Option 1 ID : 75189756693
Option 2 ID : 75189756695
Option 3 ID : 75189756694
Option 4 ID : 75189756696

Status : Answered
Chosen Option : 2

Q.2 In a certain code language, 'ANGRY' is coded as 'CKIOA' and 'THINK' is coded as 'VEKKM'. How will 'CROWN' be coded in that language?

- Ans**
- 1. EOQTP
 - 2. FOQUP
 - 3. FPRUQ
 - 4. EPRTQ

Question ID : 75189714235
Option 1 ID : 75189756939
Option 2 ID : 75189756940
Option 3 ID : 75189756937
Option 4 ID : 75189756938

Status : Answered
Chosen Option : 1

Test Prime

ALL EXAMS,
ONE SUBSCRIPTION



40,000+
Mock Tests



Personalised
Report Card



Unlimited
Re-Attempt



500+
Exam Covered



Previous Year
Papers



500%
Refund



DOWNLOAD NOW

Q.3 In accordance to Fleming's left hand rule used to find the direction of force on a current carrying conductor placed inside a magnetic field, the centre finger and the index finger represent the directions of _____ and _____, respectively.

- Ans**
- 1. force, magnetic field
 - 2. magnetic field, current
 - 3. current, magnetic field
 - 4. magnetic field, force

Question ID : 75189712664
Option 1 ID : 75189750653
Option 2 ID : 75189750655
Option 3 ID : 75189750656
Option 4 ID : 75189750654
Status : Answered
Chosen Option : 2

Q.4 Which of the following statements is/are correct?

- A) Classification is necessary in order to compare the physical and chemical properties of the elements.
- B) Classification is necessary to arrange the same kind of elements in the same group.
- C) Classification is necessary to arrange the different kinds of elements in the same group.

- Ans**
- 1. A, B and C
 - 2. Only B and C
 - 3. Only A and B
 - 4. Only A

Question ID : 75189714792
Option 1 ID : 75189759167
Option 2 ID : 75189759168
Option 3 ID : 75189759166
Option 4 ID : 75189759165
Status : Answered
Chosen Option : 1

Q.5 Which of the following processes does NOT occur during photosynthesis?

- Ans**
- 1. Splitting of water molecules
 - 2. Absorption of light energy
 - 3. Reduction of carbon dioxide
 - 4. Absorption of oxygen

Question ID : 75189714818
Option 1 ID : 75189759272
Option 2 ID : 75189759269
Option 3 ID : 75189759271
Option 4 ID : 75189759270
Status : Answered
Chosen Option : 1



Q.6 An adult human being has only _____ incisors in his/her mouth.

- Ans
- 1. twelve
 - 2. eight
 - 3. ten
 - 4. four

Question ID : 75189712264
Option 1 ID : 75189749056
Option 2 ID : 75189749054
Option 3 ID : 75189749055
Option 4 ID : 75189749053
Status : Answered
Chosen Option : 2

Q.7 H, N, P, T, W and Y live on six different floors of the same building. The lowermost floor in the building is numbered 1, the floor above it, number 2 and so on till the topmost floor is numbered 6. H lives on an odd numbered floor but not on floor number 3. Only two people live between H and N. P lives on an odd numbered floor above N. Only two people live between P and T. Neither T nor W live on the topmost floor. How many people live below T?

- Ans
- 1. Two
 - 2. Three
 - 3. More than three
 - 4. One

Question ID : 75189715235
Option 1 ID : 75189760939
Option 2 ID : 75189760938
Option 3 ID : 75189760937
Option 4 ID : 75189760940
Status : Answered
Chosen Option : 4

Q.8 Which gas is produced during electrolysis of brine, that burns with a pop sound?

- Ans
- 1. Cl_2
 - 2. H_2
 - 3. O_2
 - 4. N_2

Question ID : 75189711899
Option 1 ID : 75189747594
Option 2 ID : 75189747593
Option 3 ID : 75189747596
Option 4 ID : 75189747595
Status : Answered
Chosen Option : 1

Q.9 The Ministry of Women and Child Development, Government of India, celebrated the International Women's Day week from _____, 2022 as an 'Iconic Week' as a part of 'Azadi Ka Amrit Mahotsav'.

- Ans**
- ✓ 1. 1 to 8 March
 - ✗ 2. 15 to 22 March
 - ✗ 3. 22 to 28 March
 - ✗ 4. 8 to 15 March

Question ID : 75189715077

Option 1 ID : 75189760306

Option 2 ID : 75189760307

Option 3 ID : 75189760308

Option 4 ID : 75189760305

Status : **Not Attempted and Marked For Review**

Chosen Option : --

Q.10 Select the option that represents the letters that, when placed from left to right in the blanks below, will complete the letter series.

E _ F G _ E _ F G H E _ G G H _ F G H _

- Ans**
- ✗ 1. EGFHFF
 - ✗ 2. EFHHFH
 - ✓ 3. EHF FEH
 - ✗ 4. EHFGEH

Question ID : 75189710828

Option 1 ID : 75189743310

Option 2 ID : 75189743309

Option 3 ID : 75189743311

Option 4 ID : 75189743312

Status : **Answered**

Chosen Option : 3

Q.11 If $48 : b :: b : 75$, and $b > 0$, find the value of b .

- Ans**
- ✗ 1. 65
 - ✓ 2. 60
 - ✗ 3. 70
 - ✗ 4. 55

Question ID : 75189712945

Option 1 ID : 75189751779

Option 2 ID : 75189751778

Option 3 ID : 75189751780

Option 4 ID : 75189751777

Status : **Answered**

Chosen Option : 2

Q.12 If 2 is multiplied to each odd digit and 1 is added to each even digit in the number 6311624, what will be the difference between the largest of the digits and the smallest of the digits thus formed?

- Ans**
- 1. 6
 - 2. 3
 - 3. 5
 - 4. 4

Question ID : 75189713721
Option 1 ID : 75189754883
Option 2 ID : 75189754881
Option 3 ID : 75189754884
Option 4 ID : 75189754882
Status : Answered
Chosen Option : 3

Q.13 Regulating the natural flow of a river by building large dams affects agriculture in downstream regions by _____.

- Ans**
- 1. lowering the water table due to reduced water flow
 - 2. blocking annual deposits of mineral rich sediment from floods
 - 3. making the water salty due to reduced water supply
 - 4. preventing the recharging of ground water during monsoons

Question ID : 75189712325
Option 1 ID : 75189749297
Option 2 ID : 75189749298
Option 3 ID : 75189749299
Option 4 ID : 75189749300
Status : Not Answered
Chosen Option : --

Q.14 A sum of ₹150 is divided into two parts. The first part is ₹2 more than three times the second part. Find the second part.

- Ans**
- 1. ₹37
 - 2. ₹35
 - 3. ₹115
 - 4. ₹113

Question ID : 75189713358
Option 1 ID : 75189753430
Option 2 ID : 75189753432
Option 3 ID : 75189753431
Option 4 ID : 75189753429
Status : Answered
Chosen Option : 1

Q.15 Which of the following statements is NOT true?

Ans 1. In the short run, a firm cannot vary all the inputs.

2.

A firm, in order to produce different levels of output in the long run may not vary one of the inputs.

3.

One of the factors cannot be varied, and therefore, remain fixed in the short run.

4. In the long run, all factors of production can be varied.

Question ID : 75189712389

Option 1 ID : 75189749553

Option 2 ID : 75189749556

Option 3 ID : 75189749554

Option 4 ID : 75189749555

Status : Not Answered

Chosen Option : --

Q.16 A show ticket costs ₹7.50 for a parent and ₹3 for a child. If a total of ₹5,925 is collected by selling 952 tickets in all, then find the number of children's tickets sold.

Ans 1. 500

2. 300

3. 270

4. 682

Question ID : 75189713375

Option 1 ID : 75189753500

Option 2 ID : 75189753498

Option 3 ID : 75189753499

Option 4 ID : 75189753497

Status : Answered

Chosen Option : 3

Q.17 Frogs have a pair of lungs like human beings but they can also breathe through their:

Ans 1. spiracles

2. tracheae

3. slippery and moist skin

4. gills

Question ID : 75189713903

Option 1 ID : 75189755609

Option 2 ID : 75189755610

Option 3 ID : 75189755611

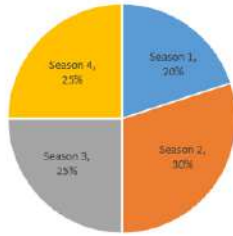
Option 4 ID : 75189755612

Status : Answered

Chosen Option : 3

Q.18 Study the given pie-chart and answer the following question.

The given pie chart depicts the number of episodes watched of four different seasons (1, 2, 3 and 4). The total number of episodes watched of the four seasons together is 60.



What is the central angle corresponding to the number of episodes watched of season 3?

- Ans**
- 1. 90°
 - 2. 108°
 - 3. 84°
 - 4. 80°

Question ID : 75189712738

Option 1 ID : 75189750949

Option 2 ID : 75189750951

Option 3 ID : 75189750952

Option 4 ID : 75189750950

Status : Answered

Chosen Option : 1

Q.19 Three statements are given followed by two conclusions numbered I and II. You have to take the statements to be true, even if they seem to be at variance with commonly known facts and decide which of the conclusions logically follow(s) from the statements.

Statements:

Some Watches are Clocks.

All Clocks are Towers.

All Towers are Bricks.

Conclusions:

(I) Some Bricks are Watches.

(II) All Clocks are Bricks.

- Ans**
- 1. Only conclusion (I) follows.
 - 2. Both conclusions (I) and (II) follow.
 - 3. Only conclusion (II) follows.
 - 4. Neither conclusion (I) nor (II) follows.

Question ID : 75189714612

Option 1 ID : 75189758445

Option 2 ID : 75189758447

Option 3 ID : 75189758446

Option 4 ID : 75189758448

Status : Answered

Chosen Option : 2

Q.20 Which of the following mountains and states/UT is NOT correct matched?

- Ans
- 1. Saser Kangari – Ladakh
 - 2. K2 mountain – Himachal Pradesh
 - 3. Nandadevi – Uttarakhand
 - 4. Kanchenjunga – Sikkim

Question ID : 75189715453
Option 1 ID : 75189761811
Option 2 ID : 75189761812
Option 3 ID : 75189761810
Option 4 ID : 75189761809
Status : Answered
Chosen Option : 2

Q.21 A 12 V battery is connected across an unknown resistor. If a current of 2 mA is flowing through the circuit, the value of the resistance is _____.

- Ans
- 1. 600 ohm
 - 2. 6 ohm
 - 3. 6000 ohm
 - 4. 60 ohm

Question ID : 75189713806
Option 1 ID : 75189755223
Option 2 ID : 75189755221
Option 3 ID : 75189755224
Option 4 ID : 75189755222
Status : Answered
Chosen Option : 3

Q.22 Which of the following statements is/are true regarding the centre of curvature of a spherical mirror?

- (S - I) The centre of curvature (C) of a spherical mirror is the centre of the sphere of which the mirror is a cut part.
(S - II) The aperture (D) of a spherical mirror is the diameter of the sphere of which the mirror is a cut part.
(S - III) The principal focus (F) is strictly the mid-point between the pole (P) and the centre of curvature (C) of a spherical mirror.

- Ans
- 1. (S - I) and (S - II) only
 - 2. (S - I) and (S - III) only
 - 3. (S - I) only
 - 4. (S - I), (S - II) and (S - III)

Question ID : 75189714506
Option 1 ID : 75189758022
Option 2 ID : 75189758023
Option 3 ID : 75189758021
Option 4 ID : 75189758024
Status : Not Attempted and Marked For Review
Chosen Option : --

Q.23 A shopkeeper offers a scheme of either selling articles at successive discounts of 30% and 20% or one where a customer can "buy 2, get 1 free". The positive difference in overall nominal percentage discounts offered in the two schemes is:

Ans

1. $11\frac{2}{3}\%$

2. $10\frac{1}{3}\%$

3. $11\frac{1}{3}\%$

4. $10\frac{2}{3}\%$

Question ID : 75189713430

Option 1 ID : 75189753718

Option 2 ID : 75189753719

Option 3 ID : 75189753720

Option 4 ID : 75189753717

Status : Answered

Chosen Option : 3

Q.24 Rama Navami is a Hindu spring festival that commemorates God Rama's birthday, which is usually comes in the month of _____.

Ans

1. June

2. July

3. April

4. August

Question ID : 75189714043

Option 1 ID : 75189756169

Option 2 ID : 75189756171

Option 3 ID : 75189756170

Option 4 ID : 75189756172

Status : Answered

Chosen Option : 4

Q.25 The volume of a right circular cylinder is 814 cm^3 . If the radius and the height of the cylinder are equal, find the height (in cm) of the cylinder.

(Use $\pi = \frac{22}{7}$)

Ans

1. $\sqrt[3]{259}$

2. $2\sqrt[3]{259}$

3. $\sqrt[3]{259}$

4. $\sqrt[3]{295}$

Question ID : 75189713401

Option 1 ID : 75189753601

Option 2 ID : 75189753604

Option 3 ID : 75189753602

Option 4 ID : 75189753603

Status : Answered

Chosen Option : 3

Q.26 A shopkeeper finds that when he sells one kind of rice at ₹50 per kg he loses 20% and when he sells another kind of rice at ₹72 per kg he gains 20%. If he mixes them in the ratio 3 : 2 and sells the mixture at ₹64 per kg., then what is his overall gain percentage (correct to one decimal place)?

- Ans**
- 1. 5.4%
 - 2. 4.1%
 - 3. 4.5%
 - 4. 5.6%

Question ID : 75189712626

Option 1 ID : 75189750503

Option 2 ID : 75189750501

Option 3 ID : 75189750502

Option 4 ID : 75189750504

Status : **Not Attempted and Marked For Review**

Chosen Option : --

Q.27 The sum of a number and its reciprocal is -2. Find the quadratic equation associated with the situation and also the number.

- Ans**
- 1. $x^2 + 2x + 1 = 0, x = 1$
 - 2. $x^2 + 2x - 1 = 0, x = -1$
 - 3. $x^2 + 2x + 1 = 0, x = -1$
 - 4. $x^2 - 2x + 1 = 0, x = -1$

Question ID : 75189713389

Option 1 ID : 75189753555

Option 2 ID : 75189753556

Option 3 ID : 75189753553

Option 4 ID : 75189753554

Status : **Not Attempted and Marked For Review**

Chosen Option : --

Q.28 According to right hand thumb rule, _____ represent(s) the direction of current.

- Ans**
- 1. the little finger
 - 2. the fore finger
 - 3. the middle finger
 - 4. the thumb

Question ID : 75189713865

Option 1 ID : 75189755459

Option 2 ID : 75189755460

Option 3 ID : 75189755458

Option 4 ID : 75189755457

Status : **Answered**

Chosen Option : 3

Q.29 H, N, P, T, W and Y live on six different floors of the same building. The lowermost floor in the building is numbered 1, the floor above it, number 2 and so on till the topmost floor is numbered 6. H lives on one of the floors above floor number 4. Only three people live between H and N. P lives immediately above N. Only three people live between P and T. W lives on one of the odd numbered floors below T. Who lives immediately above Y?

- Ans**
- 1. H
 - 2. W
 - 3. N
 - 4. T

Question ID : 75189715234
Option 1 ID : 75189760935
Option 2 ID : 75189760934
Option 3 ID : 75189760936
Option 4 ID : 75189760933
Status : Answered
Chosen Option : 1

Q.30 In a right-angled triangle ABC, right-angled at B, if $\tan A = \frac{1}{\sqrt{3}}$, the value of $(\sin A \cos C + \cos A \sin C)$ is:

- Ans**
- 1. 1
 - 2. $\frac{3}{4}$
 - 3. $\frac{1}{2}$
 - 4. $\frac{1}{4}$

Question ID : 75189713478
Option 1 ID : 75189753912
Option 2 ID : 75189753911
Option 3 ID : 75189753910
Option 4 ID : 75189753909
Status : Answered
Chosen Option : 1

Q.31 In March 2022, under the project of setting up health clinics in schools, a health clinic at a government school that will focus on the physical and mental well-being of students was inaugurated in which state of India?

- Ans**
- 1. West Bengal
 - 2. Punjab
 - 3. Delhi
 - 4. Andhra Pradesh

Question ID : 75189712346
Option 1 ID : 75189749381
Option 2 ID : 75189749382
Option 3 ID : 75189749383
Option 4 ID : 75189749384
Status : Not Answered
Chosen Option : --

Q.32 The LCM of 62 and 30 is:

- Ans
- 1. 310
 - 2. 9300
 - 3. 930
 - 4. 1860

Question ID : 75189713421
Option 1 ID : 75189753681
Option 2 ID : 75189753682
Option 3 ID : 75189753683
Option 4 ID : 75189753684
Status : Answered
Chosen Option : 3

Q.33 Given below are two letter-cluster pairs in which the second letter-cluster is related to the first letter-cluster following a certain logic. Select the letter-cluster pair from among the options that follows the same logic.

CPG : PGC

TJM : JMT

- Ans
- 1. UQK : QKU
 - 2. UQK : KQU
 - 3. UQK : QKV
 - 4. UQK : QUK

Question ID : 7518979772
Option 1 ID : 75189739088
Option 2 ID : 75189739085
Option 3 ID : 75189739087
Option 4 ID : 75189739086
Status : Answered
Chosen Option : 1

Q.34 Which Five-Year Plan emphasised the setting up of Basic and Heavy Industries so as to establish a strong base for rapid industrialisation, self-reliance, and technological development?

- Ans
- 1. Third Five-Year Plan
 - 2. First Five-Year Plan
 - 3. Fourth Five-Year Plan
 - 4. Second Five-Year Plan

Question ID : 75189715446
Option 1 ID : 75189761781
Option 2 ID : 75189761784
Option 3 ID : 75189761783
Option 4 ID : 75189761782
Status : Answered
Chosen Option : 1

Q.35 The ideal waste disposal method in case of metal is:

- Ans
- 1. reusing
 - 2. recycling
 - 3. composting
 - 4. incineration

Question ID : 75189710271
Option 1 ID : 75189741084
Option 2 ID : 75189741083
Option 3 ID : 75189741082
Option 4 ID : 75189741081
Status : Answered
Chosen Option : 2

Q.36 A sum of money triples itself at a certain rate of compound interest in 10 years. In how many years will it amount to 9 times of itself?

- Ans
- 1. 15 years
 - 2. 20 years
 - 3. 30 years
 - 4. 25 years

Question ID : 75189712959
Option 1 ID : 75189751833
Option 2 ID : 75189751834
Option 3 ID : 75189751836
Option 4 ID : 75189751835
Status : Answered
Chosen Option : 2

Q.37 Vishnu scored X runs in his 10th innings. After scoring those runs, his average per innings increased by 8 runs. If the new average is 28, then find the value of X.

- Ans
- 1. 110
 - 2. 90
 - 3. 105
 - 4. 100





Question ID : 75189713343
Option 1 ID : 75189753369
Option 2 ID : 75189753372
Option 3 ID : 75189753370
Option 4 ID : 75189753371
Status : Not Attempted and Marked For Review
Chosen Option : --

Q.38 The sum of two numbers is 205. If one of these numbers is reduced by 5% and the other is increased by 10%, the resulting numbers are equal to each other. Find the smaller of the two initial numbers.

- Ans**
- 1. 95
 - 2. 100
 - 3. 105
 - 4. 110

Question ID : 75189713287
 Option 1 ID : 75189753145
 Option 2 ID : 75189753147
 Option 3 ID : 75189753148
 Option 4 ID : 75189753146
 Status : **Not Attempted and Marked For Review**
 Chosen Option : --

Q.39 The symbol for resistance (R) is denoted with _____.

- Ans**
- 1. 
 - 2. 
 - 3. 
 - 4. 

Question ID : 75189713783
 Option 1 ID : 75189755131
 Option 2 ID : 75189755130
 Option 3 ID : 75189755132
 Option 4 ID : 75189755129
 Status : **Answered**
 Chosen Option : 3

Q.40 Refer to the following letter, number, symbol series and answer the question.

(Left) Z & U P # 2 9 ! 3 B @ 7 4 S L 5 T 8 5 * X (Right)

If all the numbers are dropped from the series, which of the following will be tenth from the left?

- Ans**
- 1. *
 - 2. L
 - 3. T
 - 4. S

Question ID : 75189715175
 Option 1 ID : 75189760698
 Option 2 ID : 75189760697
 Option 3 ID : 75189760699
 Option 4 ID : 75189760700
 Status : **Answered**
 Chosen Option : 2

Q.41 Consider the given statement and decide which of the given assumptions is/are implicit in the statement.

Statement:

During winters, the sky is very clear at night.

Assumptions:

- I. The sun sets early in the winter months.
- II. During winter, it even rains.

- Ans
- 1. Neither assumptions I nor II is implicit
 - 2. Both assumptions I and II are implicit
 - 3. Only assumption I is implicit
 - 4. Only assumption II is implicit

Question ID : 75189715331

Option 1 ID : 75189761323

Option 2 ID : 75189761324

Option 3 ID : 75189761321

Option 4 ID : 75189761322

Status : Answered

Chosen Option : 3

Q.42 Which is the smallest fraction among the options given below?

- Ans
- 1. $\frac{1981}{150}$
 - 2. $\frac{1981}{155}$
 - 3. $\frac{1981}{153}$
 - 4. $\frac{1981}{152}$

Question ID : 75189713259

Option 1 ID : 75189753033

Option 2 ID : 75189753036

Option 3 ID : 75189753034

Option 4 ID : 75189753035

Status : Answered

Chosen Option : 2

Q.43 Who among the following was one of the recipients of the Major Dhyan Chand Khel Ratna Award 2021?

- Ans
- 1. Neeraj Chopra
 - 2. Mary Kom
 - 3. Jwala Gutta
 - 4. Virat Kohli

Question ID : 75189713970

Option 1 ID : 75189755880

Option 2 ID : 75189755877

Option 3 ID : 75189755878

Option 4 ID : 75189755879

Status : Answered

Chosen Option : 1

Q.44 Precipitation reactions are a specific class of _____.

- Ans
- 1. combination reactions
 - 2. double displacement reactions
 - 3. redox reactions
 - 4. Decomposition reactions

Question ID : 75189712787
Option 1 ID : 75189751147
Option 2 ID : 75189751146
Option 3 ID : 75189751148
Option 4 ID : 75189751145
Status : Not Answered
Chosen Option : --

Q.45 If today is Monday the 22nd of January 2020, then what date and day will it be after 100 days from today?

- Ans
- 1. 3 May 2020, Thursday
 - 2. 1 May 2020, Wednesday
 - 3. 1 May 2020, Monday
 - 4. 2 May 2020, Wednesday

Question ID : 75189713574
Option 1 ID : 75189754295
Option 2 ID : 75189754296
Option 3 ID : 75189754293
Option 4 ID : 75189754294
Status : Answered
Chosen Option : 2

Q.46 Find the value of n, when $2^{-7} \times 2^{3n+4} = 2^{11} \div 2^5$.

- Ans
- 1. 2
 - 2. 5
 - 3. 3
 - 4. 4

Question ID : 75189712898
Option 1 ID : 75189751589
Option 2 ID : 75189751591
Option 3 ID : 75189751592
Option 4 ID : 75189751590
Status : Answered
Chosen Option : 3

Q.47 What is the habitat of the Musk Deer?

- Ans
- 1. High alpine environments above altitudes of 2500 m
 - 2. Plains of the Ganga below altitudes of 500 m
 - 3. Western Ghat
 - 4. Thar desert

Question ID : 75189715466
 Option 1 ID : 75189761863
 Option 2 ID : 75189761864
 Option 3 ID : 75189761862
 Option 4 ID : 75189761861
 Status : Answered
 Chosen Option : 1

Q.48 How many such pairs of letters are there in the word **PLATE** (in both forward and backward directions) which have as many letters between them in the word as there are in the English alphabetical order?

- Ans
- 1. One
 - 2. None
 - 3. Two
 - 4. Three

Question ID : 75189711526
 Option 1 ID : 75189746102
 Option 2 ID : 75189746101
 Option 3 ID : 75189746103
 Option 4 ID : 75189746104
 Status : Answered
 Chosen Option : 2

Q.49 The following graph shows the earnings of Mr. Rajesh from his grocery shop, over the months. Study the graph and answer the question.



What is the respective ratio of the total earnings in May, June and July together to the total earnings in August, September and October together?

- Ans
- 1. 1 : 1
 - 2. 2 : 1
 - 3. 11 : 21
 - 4. 1 : 2

Question ID : 75189715199
 Option 1 ID : 75189760793
 Option 2 ID : 75189760794
 Option 3 ID : 75189760795
 Option 4 ID : 75189760796
 Status : Answered
 Chosen Option : 1

Q.50 Three statements are given followed by two conclusions numbered I and II. You have to take the statements to be true, even if they seem to be at variance with commonly known facts and decide which of the conclusions logically follow(s) from the statements.

Statements:

Some Pots are Mud.
Some Flowers are Mud.
All Mud are Worms.

Conclusions:

(I) Some Flowers are Worms.
(II) Some Pots are Flowers.

- Ans**
- 1. Neither conclusion (I) nor (II) follows.
 - 2. Only conclusion (II) follows.
 - 3. Only conclusion (I) follows.
 - 4. Both conclusions (I) and (II) follow.

Question ID : 75189714608
Option 1 ID : 75189758432
Option 2 ID : 75189758430
Option 3 ID : 75189758429
Option 4 ID : 75189758431
Status : Answered
Chosen Option : 3

Q.51 In Jainism, who is a Tirthankara?

- Ans**
- 1. A saviour and spiritual teacher of the dharma who teaches the way to moksha, or liberation.
 - 2. A person who believes in one God and one spirit and believes in rebirth.
 - 3. A person who never believes in God.
 - 4. A group of pilgrims.

Question ID : 75189715426
Option 1 ID : 75189761704
Option 2 ID : 75189761702
Option 3 ID : 75189761701
Option 4 ID : 75189761703
Status : Answered
Chosen Option : 1

Q.52 Find the area of a triangle whose sides measure 42 cm, 36 cm and 34 cm, respectively.

- Ans**
- 1. $112\sqrt{110}\text{cm}^2$
 - 2. $56\sqrt{110}\text{cm}^2$
 - 3. $14\sqrt{55}\text{cm}^2$
 - 4. $28\sqrt{55}\text{cm}^2$

Question ID : 75189712084
Option 1 ID : 75189748334
Option 2 ID : 75189748333
Option 3 ID : 75189748336
Option 4 ID : 75189748335
Status : Answered
Chosen Option : 2

Q.53 A statement is given followed by four conclusions. Find out which conclusion is true based on the given statement.

Statement: $P < Q < R \leq S = T \leq U$

Conclusions:

1) $Q \leq T$

2) $T > U$

3) $Q \leq U$

4) $S \leq U$

- Ans
- 1. 3
 - 2. 4
 - 3. 1
 - 4. 2

Question ID : 75189713188
Option 1 ID : 75189752751
Option 2 ID : 75189752752
Option 3 ID : 75189752749
Option 4 ID : 75189752750
Status : Answered
Chosen Option : 2

Q.54 A beam of light after passing through a concave lens appears to diverge from a point 25 cm behind the lens. The power of the lens is

- Ans
- 1. + 0.25 D
 - 2. - 0.25 D
 - 3. + 4 D
 - 4. - 4 D

Question ID : 75189712202
Option 1 ID : 75189748808
Option 2 ID : 75189748806
Option 3 ID : 75189748805
Option 4 ID : 75189748807
Status : Answered
Chosen Option : 2

Q.55 Select the option that is related to the third term in the same way as the second term is related to the first term and the sixth term is related to the fifth term.

48 : 16 :: 96 : ? :: 108 : 21

- Ans
- 1. 22
 - 2. 21
 - 3. 20
 - 4. 23

Question ID : 75189713699
Option 1 ID : 75189754794
Option 2 ID : 75189754795
Option 3 ID : 75189754793
Option 4 ID : 75189754796
Status : Answered
Chosen Option : 2

Q.56 Vinny starts from Point A and drives 8 km towards the east. He then takes a right turn, drives 9 km, turns left and drives 12 km. He then takes a left turn and drives 17 km. He takes a final left turn, drives 20 km and stops at Point B. How far and towards which direction should he drive in order to reach Point A from Point B? (All turns are 90 degree turns only)

- Ans**
- 1. 6 km towards the north
 - 2. 2 km towards the south
 - 3. 8 km towards the south
 - 4. 4 km towards the east

Question ID : 75189715390
Option 1 ID : 75189761558
Option 2 ID : 75189761560
Option 3 ID : 75189761559
Option 4 ID : 75189761557
Status : Answered
Chosen Option : 3

Q.57 In $\triangle ABC$, \overline{AD} bisects $\angle A$ and D is a point on \overline{BC} . If $m(\overline{AC}) = 4.2$ cm, $m(\overline{BD}) = 4$ cm and $m(\overline{BC}) = 7$ cm, then find $m(\overline{AB})$.

- Ans**
- 1. 5.2 cm
 - 2. 4.2 cm
 - 3. 4.8 cm
 - 4. 5.6 cm

Question ID : 75189713467
Option 1 ID : 75189753865
Option 2 ID : 75189753868
Option 3 ID : 75189753867
Option 4 ID : 75189753866
Status : Answered
Chosen Option : 4

Q.58 According to Newland's Law of Octaves, every _____ element had properties similar to that of the first element

- Ans**
- 1. fourth
 - 2. eighth
 - 3. seventh
 - 4. sixth

Question ID : 75189715036
Option 1 ID : 75189760144
Option 2 ID : 75189760143
Option 3 ID : 75189760142
Option 4 ID : 75189760141
Status : Answered
Chosen Option : 2

Q.59 Which incident intensified British control over India's foreign trade?

- Ans
- 1. Building railways
 - 2. Drainage of Indian wealth
 - 3. British's monopoly on foreign trade
 - 4. Opening of Suez Canal

Question ID : 7518977239

Option 1 ID : 75189728954

Option 2 ID : 75189728955

Option 3 ID : 75189728956

Option 4 ID : 75189728953

Status : Answered

Chosen Option : 1

Q.60 Subject Expert Committee (SEC) on COVID-19, India, has recommended which of the following vaccines for phase II/III clinical trial in the age group 2 to 18 Years in May 2021?

- Ans
- 1. Covishield
 - 2. Covaxin
 - 3. Sputnik light vaccine
 - 4. Corbevax

Question ID : 75189710416

Option 1 ID : 75189741664

Option 2 ID : 75189741662

Option 3 ID : 75189741661

Option 4 ID : 75189741663

Status : Not Answered

Chosen Option : --

Q.61 Six students, A, B, C, D, E and F, participated in one of the International Mathematics Olympiad. Each of them scored different marks. C scored more than D but less than B. E scored less than A. B scored more than A but less than F. C scored less than E. Who scored the maximum marks among the given students?

- Ans
- 1. E
 - 2. A
 - 3. F
 - 4. B

Question ID : 7518974965

Option 1 ID : 75189719860

Option 2 ID : 75189719859

Option 3 ID : 75189719857

Option 4 ID : 75189719858

Status : Answered

Chosen Option : 3

Q.62 Which of the following numbers will replace the question mark (?) in the given number series?

87, 88, 80, 107, 43, ?

- Ans
- 1. 70
 - 2. 126
 - 3. 168
 - 4. 98

Question ID : 75189713647
Option 1 ID : 75189754586
Option 2 ID : 75189754587
Option 3 ID : 75189754585
Option 4 ID : 75189754588
Status : Answered
Chosen Option : 3

Q.63 At present, the difference of the ages of a mother and son is 30 years. 15 years ago, the mother's age was twice the then age of the son. The present age (in years) of the mother is:

- Ans
- 1. 75
 - 2. 90
 - 3. 45
 - 4. 60

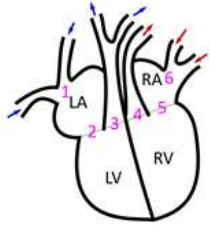
Question ID : 75189713368
Option 1 ID : 75189753469
Option 2 ID : 75189753472
Option 3 ID : 75189753470
Option 4 ID : 75189753471
Status : Answered
Chosen Option : 3

Q.64 Which of the following statements about carbon is correct?

- Ans
- 1. Carbon is metalloid in nature.
 - 2. Carbon is a noble gas.
 - 3. Carbon is non-metal in nature.
 - 4. Carbon is metal in nature.

Question ID : 75189714986
Option 1 ID : 75189759943
Option 2 ID : 75189759944
Option 3 ID : 75189759941
Option 4 ID : 75189759942
Status : Answered
Chosen Option : 3

Q.65 The following figure shows the human heart. LA = left auricle; LV = left ventricle;
RA = right auricle; RV = right ventricle. Where are the valves located?



- Ans
- 1. At all positions: 1, 2, 3, 4, 5 and 6
 - 2. At positions 1, 2, 4 and 6
 - 3. At positions 2, 3, 4 and 5
 - 4. At positions 4, 5 and 6

Question ID : 75189710102

Option 1 ID : 75189740408

Option 2 ID : 75189740405

Option 3 ID : 75189740406

Option 4 ID : 75189740407

Status : Not Answered

Chosen Option : --

Q.66 Town Q is to the south-east of Town P. Town R is to the south-west of Town Q. Town R is to the south of Town P. Town S is to the west of Town R. What is the direction of Town P with respect to Town S?

- Ans
- 1. South-east
 - 2. North
 - 3. South-west
 - 4. North-east

Question ID : 75189715366

Option 1 ID : 75189761463

Option 2 ID : 75189761462

Option 3 ID : 75189761461

Option 4 ID : 75189761464

Status : Answered

Chosen Option : 4

Q.67 _____ में, भारत सरकार द्वारा कुछ निश्चित आवश्यकताओं की पूर्ति करने वाली भारतीय भाषाओं को

"शास्त्रीय भाषा" घोषित करने का निर्णय लिया गया था।

- Ans
- 1. 2010
 - 2. 2008
 - 3. 2004
 - 4. 2006

Question ID : 75189715416

Option 1 ID : 75189761664

Option 2 ID : 75189761663

Option 3 ID : 75189761661

Option 4 ID : 75189761662

Status : Answered

Chosen Option : 3

Q.68 Which of the following options is the closest approximate value which will come in place of the question mark (?) in the following equation?

$$18.01 \times 3.99 + 9.99 \times 3.99 = ?$$

- Ans**
- 1. 92
 - 2. 112
 - 3. 122
 - 4. 84

Question ID : 75189712716
Option 1 ID : 75189750861
Option 2 ID : 75189750862
Option 3 ID : 75189750864
Option 4 ID : 75189750863
Status : Answered
Chosen Option : 2

Q.69 The LCM of two numbers is 14 times their HCF. If one of the numbers is 36 and the sum of the LCM and the HCF is 270, then the other number is:

- Ans**
- 1. 126
 - 2. 144
 - 3. 252
 - 4. 234

Question ID : 75189712934
Option 1 ID : 75189751734
Option 2 ID : 75189751733
Option 3 ID : 75189751735
Option 4 ID : 75189751736
Status : Answered
Chosen Option : 1

Q.70 Which of the following events is known as the Calcutta killings?

- Ans**
- 1. Quit India movement
 - 2. Direct action day
 - 3. Salt satyagraha
 - 4. Bengal satyagraha

Question ID : 7518977460
Option 1 ID : 75189729838
Option 2 ID : 75189729839
Option 3 ID : 75189729840
Option 4 ID : 75189729837
Status : Answered
Chosen Option : 4

Q.71 Which of the following is NOT one of the determinants of demand?

- Ans
- 1. Future expectation to change in price
 - 2. Income of consumer
 - 3. Price of goods
 - 4. Taste and preference of seller

Question ID : 75189714062
Option 1 ID : 75189756246
Option 2 ID : 75189756248
Option 3 ID : 75189756245
Option 4 ID : 75189756247
Status : Not Answered
Chosen Option : --

Q.72 Seven people (E, F, G, H, I, J and K), are sitting in a straight row, facing north. Only three people sit between E and I. Only two people sit to the right of J. E sits third to the left of J. H is an immediate neighbour of E and G. K is not an immediate neighbour of E. Who sits in the exact middle position of the row?

- Ans
- 1. J
 - 2. H
 - 3. I
 - 4. G

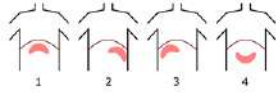
Question ID : 75189713516
Option 1 ID : 75189754063
Option 2 ID : 75189754062
Option 3 ID : 75189754064
Option 4 ID : 75189754061
Status : Answered
Chosen Option : 4

Q.73 A and B can do a piece of work in 9 days and 12 days, respectively. A starts the work and they work on alternate days. They can finish the work in:

- Ans
- 1. $11\frac{1}{4}$ days
 - 2. 11 days
 - 3. $10\frac{1}{4}$ days
 - 4. $10\frac{2}{7}$ days

Question ID : 75189713435
Option 1 ID : 75189753738
Option 2 ID : 75189753737
Option 3 ID : 75189753740
Option 4 ID : 75189753739
Status : Answered
Chosen Option : 3

Q.74 Which figure shows the correct location of the liver (shown as the pink shape) in the human body (given that the person is facing you, the reader)?



- Ans
- 1. Figure 4
 - 2. Figure 1
 - 3. Figure 2
 - 4. Figure 3

Question ID : 75189710077
Option 1 ID : 75189740308
Option 2 ID : 75189740305
Option 3 ID : 75189740306
Option 4 ID : 75189740307
Status : Answered
Chosen Option : 4

Q.75 Find the value of $(3 + 11) \times 4 \div (6 + 1) - 21$.

- Ans
- 1. 15
 - 2. 13
 - 3. -13
 - 4. -15

Question ID : 75189712892
Option 1 ID : 75189751565
Option 2 ID : 75189751568
Option 3 ID : 75189751567
Option 4 ID : 75189751566
Status : Answered
Chosen Option : 3

Q.76 A group of numbers/symbols is coded using letters as per the table given below and the conditions that follow. The correct combination of codes following the conditions is your answer.

Number /symbol	2	%	4	3	5	\$	@	9	#	+	8	^	7	9
Code Letter	L	D	B	S	G	A	H	K	L	Z	F	X	Q	Y

Conditions:

- (i) If the first element is a symbol and the last element is a number, the codes for these two (the first and the last elements) are to be interchanged.
- (ii) If the first element is an odd number and the last element is an even number, the first and last elements are to be coded as 9.
- (iii) If both the second and third elements are perfect squares, the third element is to be coded as the code for the second element.

What will be the code for \$ 2 3 % 4 ?

- Ans**
- 1. ASLDB
 - 2. BLDSA
 - 3. ALSDB
 - 4. BLSDA

Question ID : 75189711052
 Option 1 ID : 75189744206
 Option 2 ID : 75189744205
 Option 3 ID : 75189744207
 Option 4 ID : 75189744208
 Status : Not Answered
 Chosen Option : --

Q.77 The valency of carbon is ____.

- Ans**
- 1. 4
 - 2. 2
 - 3. 6
 - 4. 3

Question ID : 75189714659
 Option 1 ID : 75189758634
 Option 2 ID : 75189758635
 Option 3 ID : 75189758636
 Option 4 ID : 75189758633
 Status : Answered
 Chosen Option : 3

Q.78 Which of the following numbers will replace the question mark (?) in the given series?

2 1.5 1.1 0.8 0.6 ?

- Ans**
- 1. 0.4
 - 2. 0.3
 - 3. 0.5
 - 4. 0.6

Question ID : 75189712678
 Option 1 ID : 75189750709
 Option 2 ID : 75189750712
 Option 3 ID : 75189750710
 Option 4 ID : 75189750711
 Status : Answered
 Chosen Option : 3

Q.79 The following is the data for an image formed by a convex mirror:

Object distance = 30 cm,

Size of object = 10 cm,

Size of image = 2.5 cm,

The focal length of this mirror is _____.

- Ans
- 1. 30 cm
 - 2. 20 cm
 - 3. 15 cm
 - 4. 10 cm

Question ID : 75189715091

Option 1 ID : 75189760364

Option 2 ID : 75189760362

Option 3 ID : 75189760363

Option 4 ID : 75189760361

Status : Answered

Chosen Option : 3

Q.80 Which of the following statements about fundamental duties of the Indian Constitution is correct?

- Ans
- 1. To preserve the biodiversity is a fundamental duty
 - 2. To make compulsory education to children of 6 to 14 years as our fundamental duty
 - 3. To obey parents is a fundamental duty
 - 4. To save money for future is a fundamental duty

Question ID : 75189715470

Option 1 ID : 75189761879

Option 2 ID : 75189761877

Option 3 ID : 75189761878

Option 4 ID : 75189761880

Status : Answered

Chosen Option : 1

Q.81 Article _____ of the Constitution which enshrines one of the Directive Principles of State Policy, lays down that the State shall take steps to organise village panchayats and endow them with such powers and authority as may be necessary to enable them to function as units of self-government.

- Ans
- 1. 37
 - 2. 40
 - 3. 48
 - 4. 31

Question ID : 75189715479
Option 1 ID : 75189761914
Option 2 ID : 75189761915
Option 3 ID : 75189761916
Option 4 ID : 75189761913
Status : Not Answered
Chosen Option : --

Q.82 A perfect pair of sex chromosomes is found in:

- Ans
- 1. human women
 - 2. starfish
 - 3. human men
 - 4. snakes

Question ID : 75189714874
Option 1 ID : 75189759495
Option 2 ID : 75189759494
Option 3 ID : 75189759496
Option 4 ID : 75189759493
Status : Not Answered
Chosen Option : --

Q.83 Train A leaves station M at 6.00 a.m. and reaches station N at 2.00 p.m. on the same day. Train B leaves station N at 8.00 a.m. and reaches station M at 3.00 p.m. on the same day. Find the time when Trains A and B meet.

- Ans
- 1. 11.00 a.m.
 - 2. 10.48 a.m.
 - 3. 10.45 a.m.
 - 4. 10.55 a.m.

Question ID : 75189713325
Option 1 ID : 75189753298
Option 2 ID : 75189753297
Option 3 ID : 75189753300
Option 4 ID : 75189753299
Status : Not Attempted and Marked For Review
Chosen Option : --

Q.84 Eight friends are sitting around a square table facing the centre. Four of them are sitting at the corners and remaining four are sitting at the exact middle of the four sides. Arhaan is sitting to the immediate left of Sunita. Hari is sitting fourth to the left of Tarini. Tarini is second to the left of Arhaan. Only Daisy is sitting between Tarini and Neelima. Only Prashant is sitting between Hari and Neelima. Yash is sitting fourth to the left of Prashant. Who amongst the following has Tarini and Arhaan as the immediate neighbours?

- Ans**
- 1. Neelima
 - 2. Prashant
 - 3. Daisy
 - 4. Yash

Question ID : 75189714163
Option 1 ID : 75189756649
Option 2 ID : 75189756652
Option 3 ID : 75189756651
Option 4 ID : 75189756650
Status : Answered
Chosen Option : 4

Q.85 If 2 is added to each odd digit and 1 is subtracted from each even digit in the number 94387251, what will be the sum of the first, fifth and last digits in the new number thus formed?

- Ans**
- 1. 14
 - 2. 12
 - 3. 11
 - 4. 10

Question ID : 75189713059
Option 1 ID : 75189752236
Option 2 ID : 75189752233
Option 3 ID : 75189752235
Option 4 ID : 75189752234
Status : Answered
Chosen Option : 1

Q.86 Lokapavani and Bhavani are tributaries of the River _____.

- Ans**
- 1. Cauvery
 - 2. Godavari
 - 3. Krishna
 - 4. Mahanadi

Question ID : 75189715460
Option 1 ID : 75189761837
Option 2 ID : 75189761840
Option 3 ID : 75189761838
Option 4 ID : 75189761839
Status : Not Answered
Chosen Option : --

Q.87 The resistivity of a material of length 5 m is 1.6×10^{-8} ohm-m. If the length of the material is increased by 10 m, then the value of resistivity is _____.

- Ans**
- 1. 12.4×10^{-8}
 - 2. 0.8×10^{-8}
 - 3. 3.2×10^{-8}
 - 4. 1.6×10^{-8}

Question ID : 75189713795
Option 1 ID : 75189755180
Option 2 ID : 75189755179
Option 3 ID : 75189755177
Option 4 ID : 75189755178
Status : Answered
Chosen Option : 3

Q.88 Three statements are given followed by two conclusions numbered I and II. You have to take the statements to be true, even if they seem to be at variance with commonly known facts and decide which of the conclusions logically follow(s) from the statements.

Statements:

Some Lipsticks are Red.
Some Red are Pink.
All Lipsticks are Colours.

Conclusions:

(I) Some Lipsticks are Pink.
(II) Some Colours are Red.

- Ans**
- 1. Neither conclusion (I) nor (II) follows.
 - 2. Only conclusion (I) follows.
 - 3. Both conclusions (I) and (II) follow.
 - 4. Only conclusion (II) follows.

Question ID : 75189714617
Option 1 ID : 75189758468
Option 2 ID : 75189758465
Option 3 ID : 75189758467
Option 4 ID : 75189758466
Status : Answered
Chosen Option : 4

Q.89 Which of the following is divisible by 4?

- Ans**
- 1. 2124
 - 2. 2125
 - 3. 2123
 - 4. 2122

Question ID : 75189712915
Option 1 ID : 75189751659
Option 2 ID : 75189751660
Option 3 ID : 75189751658
Option 4 ID : 75189751657
Status : Answered
Chosen Option : 1

Q.90 Arrange the following metals in the correct order of reactivity.

K, Al, Fe, Au, Pb

- Ans
- 1. $K > Al > Pb > Fe > Au$
 - 2. $K > Al > Fe > Pb > Au$
 - 3. $K > Al > Fe > Au > Pb$
 - 4. $K > Fe > Al > Pb > Au$

Question ID : 75189712753

Option 1 ID : 75189751009

Option 2 ID : 75189751011

Option 3 ID : 75189751012

Option 4 ID : 75189751010

Status : Answered

Chosen Option : 1

Q.91 Find the measure of each interior angle of a regular hexagon.

- Ans
- 1. 135°
 - 2. 45°
 - 3. 120°
 - 4. 80°

Question ID : 75189712092

Option 1 ID : 75189748365

Option 2 ID : 75189748366

Option 3 ID : 75189748368

Option 4 ID : 75189748367

Status : Answered

Chosen Option : 2

Q.92 According to clause (2) of _____ of the Constitution of India, the President of India appoints the Chief Justice of India.

- Ans
- 1. Article 127
 - 2. Article 121
 - 3. Article 124
 - 4. Article 118

Question ID : 75189712534

Option 1 ID : 75189750136

Option 2 ID : 75189750134

Option 3 ID : 75189750135

Option 4 ID : 75189750133

Status : Not Answered

Chosen Option : --

Q.93 Under The National Air Sports Policy 2022 there will be _____-tier governance structure for air sports in India.

- Ans
- 1. Six
 - 2. Three
 - 3. Four
 - 4. Two

Question ID : 75189712569
Option 1 ID : 75189750276
Option 2 ID : 75189750274
Option 3 ID : 75189750273
Option 4 ID : 75189750275
Status : Not Answered
Chosen Option : --

Q.94 If $\frac{5}{2}$ is a root of the equation $4x^2 - mx + 25 = 0$, then the value of m is:

- Ans
- 1. 20
 - 2. 50
 - 3. 10
 - 4. 25

Question ID : 75189713382
Option 1 ID : 75189753525
Option 2 ID : 75189753527
Option 3 ID : 75189753528
Option 4 ID : 75189753526
Status : Answered
Chosen Option : 3

Q.95 Select the set in which the numbers are related in the same way as are the numbers of the following sets.

(NOTE: Operations should be performed on the whole numbers, without breaking down the numbers into its constituent digits. EXAMPLE: 13 – Operations on 13 such as adding/subtracting/multiplying etc. to 13 can be performed. Breaking down 13 into 1 and 3 and then performing mathematical operations on 1 and 3 is not allowed)

(4, 11, 31)
(3, 9, 25)

- Ans
- 1. (7, 11, 35)
 - 2. (2, 8, 19)
 - 3. (5, 13, 29)
 - 4. (6, 15, 43)

Question ID : 75189711624
Option 1 ID : 75189746494
Option 2 ID : 75189746496
Option 3 ID : 75189746493
Option 4 ID : 75189746495
Status : Answered
Chosen Option : 4

Q.96 An object is placed in front of a concave lens of focal length 15 cm and an image is formed at 7.5 cm. Then the magnification of the lens is:

- Ans**
- 1. 0.50
 - 2. 1.5
 - 3. 0.75
 - 4. 1.25

Question ID : 75189712208
Option 1 ID : 75189748830
Option 2 ID : 75189748832
Option 3 ID : 75189748831
Option 4 ID : 75189748829
Status : Answered
Chosen Option : 1

Q.97 Kamal is the father of Vishnu. The sum of their present ages is 60 years. If 6 years ago, Kamal's age was 5 times the then age of Vishnu, then find the present age (in years) of Vishnu.

- Ans**
- 1. 15
 - 2. 20
 - 3. 10
 - 4. 14

Question ID : 75189713369
Option 1 ID : 75189753474
Option 2 ID : 75189753475
Option 3 ID : 75189753473
Option 4 ID : 75189753476
Status : Answered
Chosen Option : 4

Q.98 Which of the following acid-base pairs will produce a salt of ammonium chloride?

- Ans**
- 1. $\text{HNO}_3 - \text{NH}_4\text{OH}$
 - 2. $\text{H}_2\text{SO}_4 - \text{NH}_4\text{OH}$
 - 3. $\text{HCl} - \text{NH}_4\text{OH}$
 - 4. $\text{HCl} - \text{NaOH}$

Question ID : 75189712788
Option 1 ID : 75189751151
Option 2 ID : 75189751152
Option 3 ID : 75189751150
Option 4 ID : 75189751149
Status : Answered
Chosen Option : 3

Q.99 This question is based on the five, three-digit numbers given below.

(Left) 567 243 186 689 427 (Right)

(Example- 123 – First digit = 1, second digit = 2 and third digit = 3)

NOTE - All operations to be done from left to right.

What will be the resultant if the first digit of the second greatest number is added to the third digit of the smallest number?

- Ans**
- 1. 12
 - 2. 11
 - 3. 10
 - 4. 13

Question ID : 75189711044

Option 1 ID : 75189744175

Option 2 ID : 75189744174

Option 3 ID : 75189744173

Option 4 ID : 75189744176

Status : Answered

Chosen Option : 2

Q.100 In February 2022, which service provider announced that it will land its next generation multi-terabit India-Asia-Xpress (IAX) undersea cable system in Hulhumale, Maldives?

- Ans**
- 1. Bharti Airtel Limited
 - 2. Reliance Jio Infocomm Limited
 - 3. Reliance Communications Limited
 - 4. Vodafone Idea Limited