



रेल भर्ती बोर्ड / RAILWAY RECRUITMENT BOARDS
सी ई एन आर आर सी - ०१/२०१९ - CEN RRC - 01/2019



Roll Number	
Candidate Name	
Test Center Name	Ishwar Chand Vidyasagar Institute Of Technology & Management
Test Date	12/09/2022
Test Time	9:00 AM - 10:30 AM
Subject	Level 1

*** Note**

Correct Answer will carry 1 mark per Question.
Incorrect Answer will carry 1/3 Negative mark per Question.

- Options shown in green color with a tick icon are correct.
- Chosen option on the right of the question indicates the option selected by the candidate.

Section : Level 1

Q.1 Which of the following statements is correct with reference to aerobic respiration?

Ans 1.

The release of energy in aerobic respiration is lower than that in anaerobic respiration.

2.

In mitochondria, one molecule of pyruvate breaks down to give three molecules of carbon dioxide.

3.

Only carbon dioxide is released in the process of aerobic respiration.

4. Aerobic respiration takes places in the absence of oxygen.

Question ID : 7518977797

Option 1 ID : 75189731186

Option 2 ID : 75189731185

Option 3 ID : 75189731188

Option 4 ID : 75189731187

Status : Answered

Chosen Option : 2

Test Prime

ALL EXAMS,
ONE SUBSCRIPTION



40,000+
Mock Tests



Personalised
Report Card



Unlimited
Re-Attempt



500+
Exam Covered



Previous Year
Papers



500%
Refund



DOWNLOAD NOW

Q.2 A Data-Driven Research, has been launched by the Department of Biotechnology, Ministry of Science and Technology on 24 March 2022 with the objective to eradicate which disease?

- Ans
- 1. Covid
 - 2. Tuberculosis
 - 3. Cancer
 - 4. AIDS

Question ID : 7518979361
Option 1 ID : 75189737441
Option 2 ID : 75189737442
Option 3 ID : 75189737444
Option 4 ID : 75189737443
Status : Not Answered
Chosen Option : --

Q.3 What will be the product when $\text{CO}(\text{g})$ reacts with $\text{H}_2(\text{g})$ at 340 atm pressure?

- Ans
- 1. $\text{C}_2\text{H}_5\text{OH}$
 - 2. CH_3OH
 - 3. HCHO
 - 4. HCOOH

Question ID : 7518979613
Option 1 ID : 75189738451
Option 2 ID : 75189738450
Option 3 ID : 75189738449
Option 4 ID : 75189738452
Status : Answered
Chosen Option : 3

Q.4 After fertilisation in plants, the ovule gets converted into:

- Ans
- 1. zygote
 - 2. seed
 - 3. fruit
 - 4. embryo

Question ID : 7518977852
Option 1 ID : 75189731408
Option 2 ID : 75189731407
Option 3 ID : 75189731405
Option 4 ID : 75189731406
Status : Answered
Chosen Option : 3

Q.5 Which of the following is NOT a common route of transmission of HIV from one person to another?

Ans ✓ 1.

Casual contacts like handshakes or hugs with the infected people

- ✗ 2. Blood to blood contact with the infected people
- ✗ 3. Infected mother to foetus during pregnancy
- ✗ 4. Unprotected sexual contact with the infected person

Question ID : 7518974631

Option 1 ID : 75189718524

Option 2 ID : 75189718523

Option 3 ID : 75189718522

Option 4 ID : 75189718521

Status : Answered

Chosen Option : 1

Q.6 A can complete $\frac{2}{3}$ of a certain work in 12 days and B can complete $\frac{1}{4}$ of the same work in 3 days. Working together, the number of days they will take to finish the work is:

Ans

- ✗ 1. $5\frac{1}{5}$
- ✗ 2. $8\frac{1}{5}$
- ✓ 3. $7\frac{1}{5}$
- ✗ 4. $6\frac{1}{5}$

Question ID : 7518979264

Option 1 ID : 75189737055

Option 2 ID : 75189737054

Option 3 ID : 75189737053

Option 4 ID : 75189737056

Status : Answered

Chosen Option : 3

Q.7 Each of A, B, C, D and E has an exam on a different day of a week, starting from Monday and ending on Friday of the same week.

A has the exam on Thursday. Only one person has the exam between D and E. D has the exam on the day immediately before B. Who has the exam on Friday.?

Ans ✓ 1. C

- ✗ 2. E
- ✗ 3. D
- ✗ 4. B

Question ID : 7518978181

Option 1 ID : 75189732723

Option 2 ID : 75189732721

Option 3 ID : 75189732724

Option 4 ID : 75189732722

Status : Answered

Chosen Option : 1

Q.8 Urdu was declared the second official language of which one of the following state in 2017?

- Ans
- 1. West Bengal
 - 2. Chhattisgarh
 - 3. Odisha
 - 4. Telangana

Question ID : 7518979388

Option 1 ID : 75189737550

Option 2 ID : 75189737552

Option 3 ID : 75189737551

Option 4 ID : 75189737549

Status : Answered

Chosen Option : 4

Q.9 Six friends M, N, O, P, Q and R are sitting in a row facing north. Only O is seated between P and M. Only R is seated between N and Q. M is not seated at either of the ends and not an immediate neighbour of Q. P is sitting at immediate left of O. Where is N seated?

- Ans
- 1. At one of the extreme ends
 - 2. 2nd from the extreme left end
 - 3. Immediate right of M
 - 4. 2nd from the extreme right end

Question ID : 7518979709

Option 1 ID : 75189738835

Option 2 ID : 75189738833

Option 3 ID : 75189738834

Option 4 ID : 75189738836

Status : Answered

Chosen Option : 3

Q.10 A ray of light is incident on a refracting surface AB of glass prism, kept in air, and emerges out of the other refracting surface AC. Consider the following statements:

- (a) The angle of refraction at surface AB is less than the angle of incidence.
- (b) The angle of refraction at the surface AC is less than the angle of incidence.

Which of the above statements is/are correct?

- Ans**
- 1. Neither (a) nor (b)
 - 2. Both (a) and (b)
 - 3. Only (a)
 - 4. Only (b)

Question ID : 7518976641
Option 1 ID : 75189726564
Option 2 ID : 75189726563
Option 3 ID : 75189726561
Option 4 ID : 75189726562
Status : Answered
Chosen Option : 4

Q.11 A merchant purchased an item for ₹1,500. How much should he mark on the item to earn 20% profit after allowing 20% discount?

- Ans**
- 1. ₹2,250
 - 2. ₹1,800
 - 3. ₹1,650
 - 4. ₹2,000

Question ID : 7518978690
Option 1 ID : 75189734757
Option 2 ID : 75189734759
Option 3 ID : 75189734760
Option 4 ID : 75189734758
Status : Answered
Chosen Option : 1

Q.12 Hornbill and Moatsu Festivals are predominantly celebrated in which of the following states?

- Ans**
- 1. Nagaland
 - 2. Uttar Pradesh
 - 3. Himachal Pradesh
 - 4. West Bengal

Question ID : 7518979382
Option 1 ID : 75189737527
Option 2 ID : 75189737525
Option 3 ID : 75189737526
Option 4 ID : 75189737528
Status : Answered
Chosen Option : 1

Q.13 The fourth proportional to 0.15, 0.35 and 12 is:

- Ans
- 1. 38
 - 2. 48
 - 3. 28
 - 4. 58

Question ID : 7518978670
Option 1 ID : 75189734679
Option 2 ID : 75189734678
Option 3 ID : 75189734680
Option 4 ID : 75189734677
Status : Answered
Chosen Option : 3

Q.14 Twice the present age of X is 9 years less than thrice the present age of Y. At present, X's father P is twice as old as X, and Y is 9 years younger than her sister Q. If P is 20 years older than Q, then the present age (in years) of Y is:

- Ans
- 1. 23
 - 2. 18
 - 3. 21
 - 4. 19

Question ID : 7518978447
Option 1 ID : 75189733788
Option 2 ID : 75189733785
Option 3 ID : 75189733787
Option 4 ID : 75189733786
Status : Not Attempted and
Marked For Review
Chosen Option : --

Q.15 Three statements are given followed by three conclusions. Consider the statements and conclusions to be true even if they vary from commonly known facts and then decide which of the conclusions follow(s) from the given statements.

Statements:

1. Some flowers are petals.
2. Some birds are petals.
3. No bird is a flower.

Conclusions:

- (I) Some petals are birds.
- (II) Some flowers are birds.
- (III) Some petals are flowers.

Ans ✓ 1. Only conclusions I and III follow.

✗ 2. Only conclusion III follows.

✗ 3. None of the conclusions follow.

✗ 4. Only conclusion II follows.

Question ID : 7518979722

Option 1 ID : 75189738887

Option 2 ID : 75189738885

Option 3 ID : 75189738888

Option 4 ID : 75189738886

Status : Answered

Chosen Option : 1

Q.16 Each vowel in the word SURPRISING is changed to the letter following it in the English alphabetical order and each consonant is changed to the letter preceding it in the English alphabetical order. How many letters will appear twice in the group thus formed?

Ans ✓ 1. Three

✗ 2. Five

✗ 3. Four

✗ 4. Two

Question ID : 7518978246

Option 1 ID : 75189732982

Option 2 ID : 75189732984

Option 3 ID : 75189732983

Option 4 ID : 75189732981

Status : Not Answered

Chosen Option : --

Q.17 Which of the following statements for the reaction of copper oxide with HCl is correct?

- Ans
- 1. Cu is formed.
 - 2. CuSO_4 is formed.
 - 3. CuCl_2 is formed.
 - 4. Cl_2 is liberated.

Question ID : 7518979629
Option 1 ID : 75189738515
Option 2 ID : 75189738514
Option 3 ID : 75189738513
Option 4 ID : 75189738516

Status : Answered
Chosen Option : 3

Q.18 Which of the following options is the closest approximate value which will come in place of question mark(?) in the following equation?

$$13.99 - 4.02 + 19.89 \times 5.99 = ?$$

- Ans
- 1. 210
 - 2. 30
 - 3. 180
 - 4. 130

Question ID : 7518979876
Option 1 ID : 75189739504
Option 2 ID : 75189739503
Option 3 ID : 75189739502
Option 4 ID : 75189739501

Status : Answered
Chosen Option : 4

Q.19 The first oil-field in Independent India was discovered in _____.

- Ans
- 1. Assam
 - 2. Gujarat
 - 3. Maharashtra
 - 4. Rajasthan

Question ID : 7518978572
Option 1 ID : 75189734286
Option 2 ID : 75189734285
Option 3 ID : 75189734288
Option 4 ID : 75189734287

Status : Answered
Chosen Option : 3

Q.20

In January 2022, who became India's first UNDP youth climate champion?

Ans

- ✓ 1. Prajakta Koli
- ✗ 2. Medha Patkar
- ✗ 3. Priyanka Chaudhary
- ✗ 4. Riya Singh

Question ID : 7518973788
Option 1 ID : 75189715149
Option 2 ID : 75189715152
Option 3 ID : 75189715151
Option 4 ID : 75189715150
Status : Not Answered
Chosen Option : --

Q.21 Six persons, Prem, Amit, Ram, Shyam, Tarun and Uma travelled in different months of the same year viz. January, February, March, July, September and December. Prem travelled in September. Only one person travelled between Prem and Uma. No one travelled between Tarun and Amit. Amit travelled in a month after Tarun. More than two persons travelled between Amit and Ram. Who among them travelled in July?

Ans

- ✓ 1. Shyam
- ✗ 2. Ram
- ✗ 3. Uma
- ✗ 4. Tarun

Question ID : 7518979818
Option 1 ID : 75189739269
Option 2 ID : 75189739271
Option 3 ID : 75189739270
Option 4 ID : 75189739272
Status : Answered
Chosen Option : 1

Q.22 The focal length of a spherical mirror is the distance between _____.

- Ans
- 1. infinity and principal focus
 - 2. focal plane and centre of curvature
 - 3. pole and principal focus
 - 4. centre of curvature and infinity

Question ID : 7518979483
Option 1 ID : 75189737932
Option 2 ID : 75189737929
Option 3 ID : 75189737930
Option 4 ID : 75189737931
Status : Answered
Chosen Option : 3

Q.23 Select the INCORRECT statement related to magnetic field lines outside a bar magnet.

- Ans
- 1. Field lines merge at south pole.
 - 2. Field lines emerge from north pole.
 - 3. Field lines intersect each other.
 - 4. Field lines do not intersect each other.

Question ID : 7518979578
Option 1 ID : 75189738312
Option 2 ID : 75189738311
Option 3 ID : 75189738309
Option 4 ID : 75189738310
Status : Answered
Chosen Option : 4

Q.24 If all the letters in each of the following words are rearranged as per English alphabetical order, and the newly formed words/clusters are arranged as per the dictionary arrangement, which initial word/cluster will appear exactly in the middle?

LIKE, LIVE, LOVE, LIME, LUCK

- Ans
- 1. LOVE
 - 2. LIME
 - 3. LIVE
 - 4. LUCK

Question ID : 7518977970
Option 1 ID : 75189731877
Option 2 ID : 75189731879
Option 3 ID : 75189731880
Option 4 ID : 75189731878
Status : Answered
Chosen Option : 3

Q.25 How many times does an adult human breathe per minute at rest?

- Ans
- 1. 70-72
 - 2. 12-15
 - 3. 15-18
 - 4. 72-75

Question ID : 7518974383
Option 1 ID : 75189717531
Option 2 ID : 75189717529
Option 3 ID : 75189717530
Option 4 ID : 75189717532
Status : Answered
Chosen Option : 1

Q.26 Which of the following elements has the highest atomic radius?

- Ans
- 1. N
 - 2. Be
 - 3. Li
 - 4. O

Question ID : 7518979689
Option 1 ID : 75189738755
Option 2 ID : 75189738753
Option 3 ID : 75189738756
Option 4 ID : 75189738754
Status : Answered
Chosen Option : 1

Q.27 Roots of the equation $x^2 = 24 - 10x$ are:

- Ans
- 1. 2, -12
 - 2. 3, -11
 - 3. 3, -12
 - 4. 2, -11

Question ID : 7518979307
Option 1 ID : 75189737226
Option 2 ID : 75189737227
Option 3 ID : 75189737225
Option 4 ID : 75189737228
Status : Answered
Chosen Option : 1

Q.28 In the wake of the Andhra Pradesh microfinance crisis of 2010, RBI had constituted which committee to study issues and concerns in the Microfinance Institutions sector in India?

- Ans**
- 1. RV Gupta Committee
 - 2. Malegam Committee
 - 3. Parthasarathi Shome Committee
 - 4. Kelkar Committee

Question ID : 7518974234
Option 1 ID : 75189716935
Option 2 ID : 75189716936
Option 3 ID : 75189716934
Option 4 ID : 75189716933
Status : Not Answered
Chosen Option : --

Q.29 If $(a - b) = 8$ and $(a^2 + b^2) = 160$, then the value of ab is:

- Ans**
- 1. 32
 - 2. 40
 - 3. 36
 - 4. 48

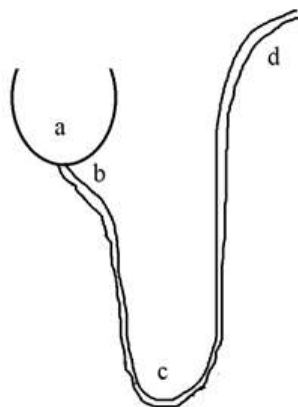
Question ID : 7518979280
Option 1 ID : 75189737120
Option 2 ID : 75189737117
Option 3 ID : 75189737119
Option 4 ID : 75189737118
Status : Answered
Chosen Option : 4

Q.30 Identify the committee constituted for the promotion of small scale industries.

- Ans**
- 1. Raja Chelliah Committee
 - 2. Hanumanth Committee
 - 3. Kelkar Committee
 - 4. Karve Committee

Question ID : 7518977244
Option 1 ID : 75189728976
Option 2 ID : 75189728974
Option 3 ID : 75189728975
Option 4 ID : 75189728973
Status : Not Answered
Chosen Option : --

Q.31 Which letter represents the region Bowman's capsule in the diagram below?



- Ans
- 1. Region a
 - 2. Region b
 - 3. Region d
 - 4. Region c

Question ID : 7518974407
Option 1 ID : 75189717625
Option 2 ID : 75189717626
Option 3 ID : 75189717628
Option 4 ID : 75189717627

Status : Answered

Chosen Option : 1

Q.32 Which group of the following metals are obtained by reduction using carbon?

Na, Zn, Ca, Pb, Mg, Fe, Al, Cu, Ag

- Ans
- 1. Fe, Al, Cu, Ag
 - 2. Zn, Fe, Cu
 - 3. Ca, Pb, Mg
 - 4. Na, Zn, Ca, Pb

Question ID : 7518973682
Option 1 ID : 75189714728
Option 2 ID : 75189714726
Option 3 ID : 75189714727
Option 4 ID : 75189714725

Status : Marked For Review

Chosen Option : 2

Q.33 Which of the following terms will replace the question mark (?) in the given series to make it logically complete?

RMI3C, WR17H, BW21M, GB25R, ?

- Ans
- 1. GW29L
 - 2. LG29W
 - 3. WG33L
 - 4. LG33W

Question ID : 7518979140
Option 1 ID : 75189736558
Option 2 ID : 75189736560
Option 3 ID : 75189736559
Option 4 ID : 75189736557
Status : Answered
Chosen Option : 2

Q.34 _____ is considered as the holy person who gave Jainism its present form.

- Ans
- 1. Mahavira
 - 2. Vasudev
 - 3. Digambar
 - 4. Rishabhanatha

Question ID : 7518974027
Option 1 ID : 75189716108
Option 2 ID : 75189716107
Option 3 ID : 75189716106
Option 4 ID : 75189716105
Status : Answered
Chosen Option : 1

Q.35 This question is based on the following 3-letter words.

(Left) CAT OWN EYE AND SAD (Right)

If in each of the given words, each alphabet is changed to the following letter in the English alphabetical series, how many words thus formed will have at least one vowel?

- Ans
- 1. Two
 - 2. Four
 - 3. One
 - 4. Three

Question ID : 7518979005
Option 1 ID : 75189736018
Option 2 ID : 75189736020
Option 3 ID : 75189736017
Option 4 ID : 75189736019
Status : Answered
Chosen Option : 4

Q.36 The transport of food and other substances takes place in the sieve tubes with the help of adjacent companion cells both in upward and downward directions. Name the process.

- Ans**
- 1. Translocation
 - 2. Osmosis
 - 3. Diffusion
 - 4. Transpiration

Question ID : 7518974353
Option 1 ID : 75189717411
Option 2 ID : 75189717409
Option 3 ID : 75189717410
Option 4 ID : 75189717412
Status : Answered
Chosen Option : 1

Q.37 Two statements are given below, followed by four conclusions given in the options. Find out which conclusion is NOT true based on the given statements.

Statement: $P > M > N = O$, $X > Y > P$

- Ans**
- 1. $Y < N$
 - 2. $N < Y$
 - 3. $O < X$
 - 4. $X > M$

Question ID : 7518979731
Option 1 ID : 75189738924
Option 2 ID : 75189738922
Option 3 ID : 75189738923
Option 4 ID : 75189738921
Status : Answered
Chosen Option : 1

Q.38 The least 3-digit number that is completely divisible by 8 and 12 is:

- Ans**
- 1. 120
 - 2. 144
 - 3. 108
 - 4. 124

Question ID : 7518979219
Option 1 ID : 75189736875
Option 2 ID : 75189736876
Option 3 ID : 75189736873
Option 4 ID : 75189736874
Status : Answered
Chosen Option : 1

Q.39 The value of $(2^{25} \div 2^{15}) \times 2^4$ is:

- Ans
- 1. 2^{14}
 - 2. 2^{10}
 - 3. 2^{11}
 - 4. 2^{13}

Question ID : 7518979201
Option 1 ID : 75189736802
Option 2 ID : 75189736804
Option 3 ID : 75189736803
Option 4 ID : 75189736801
Status : Answered
Chosen Option : 1

Q.40 If equal potential difference is applied across tungsten, manganin and hard rubber wires of the same length and thickness, then:

- Ans
- 1. equal current will flow through all wires
 - 2. maximum current will pass through hard rubber
 - 3. maximum current will pass through tungsten
 - 4. maximum current will pass through manganin

Question ID : 7518979547
Option 1 ID : 75189738185
Option 2 ID : 75189738188
Option 3 ID : 75189738187
Option 4 ID : 75189738186
Status : Answered
Chosen Option : 1

Q.41 Using empirical relation between the mean, median and mode, find the value of the mode if the median is 30 and mean is 25.

- Ans
- 1. 30
 - 2. 50
 - 3. 60
 - 4. 40

Question ID : 7518978723
Option 1 ID : 75189734892
Option 2 ID : 75189734890
Option 3 ID : 75189734889
Option 4 ID : 75189734891
Status : Answered
Chosen Option : 4

Q.42 A class of 20 students took a science test. 8 students had an average (arithmetic mean) score of 60. The remaining students had an average score of 40. The average score of the whole class is:

- Ans**
- 1. 68
 - 2. 48
 - 3. 58
 - 4. 40





Question ID : 7518979273
 Option 1 ID : 75189737089
 Option 2 ID : 75189737090
 Option 3 ID : 75189737091
 Option 4 ID : 75189737092
 Status : Answered
 Chosen Option : 2

Q.43 National air sports policy 2022 lays out the vision of making India one of the top nations by the year:

- Ans**
- 1. 2025
 - 2. 2030
 - 3. 2040
 - 4. 2035

Question ID : 7518976800
 Option 1 ID : 75189727197
 Option 2 ID : 75189727198
 Option 3 ID : 75189727200
 Option 4 ID : 75189727199
 Status : Not Answered
 Chosen Option : --

Q.44 Which of the following is a china dish?

- Ans**
- 1. 
 - 2. 
 - 3. 
 - 4. 

Question ID : 7518973582
 Option 1 ID : 75189714328
 Option 2 ID : 75189714325
 Option 3 ID : 75189714327
 Option 4 ID : 75189714326
 Status : Answered
 Chosen Option : 1

Q.45 If the digits of each number are written in reverse order and then the numbers are arranged in descending order, the position of how many numbers will NOT change?

7846, 6354, 8745, 4653

- Ans**
- 1. Three
 - 2. Two
 - 3. Zero
 - 4. One

Question ID : 7518978070

Option 1 ID : 75189732277

Option 2 ID : 75189732278

Option 3 ID : 75189732280

Option 4 ID : 75189732279

Status : Answered

Chosen Option : 4

Q.46 Three statements are given followed by three conclusions. Consider the statements and conclusions to be true even if they vary from commonly known facts and then decide which of the conclusions follow(s) from the given statements.

Statements:

1. All birds are lions.
2. No goat is a lion.
3. Some tigers are goats.

Conclusions:

- (I) Some tigers are lions.
- (II) No lion is a tiger.
- (III) Some lions are birds.

- Ans**
- 1. None of the conclusions follow.
 - 2. Only conclusions I and III follow.
 - 3. Only conclusion II follows.
 - 4. Only conclusion III follows.

Question ID : 7518979717

Option 1 ID : 75189738868

Option 2 ID : 75189738867

Option 3 ID : 75189738866

Option 4 ID : 75189738865

Status : Answered

Chosen Option : 4

Q.47 The value of $\left\{14 + \left(2\frac{1}{2} + \frac{4}{5} + 1\right)\right\} \times \frac{1}{100}$ is:

- Ans
- 1. 0.0183
 - 2. 0.183
 - 3. 1.83
 - 4. 18.3

Question ID : 7518979211
 Option 1 ID : 75189736843
 Option 2 ID : 75189736842
 Option 3 ID : 75189736841
 Option 4 ID : 75189736844
 Status : Answered
 Chosen Option : 2

Q.48 Select the triad that follows the same pattern as that followed by the two triads given below. Both triads follow the same pattern.

BG - FK - JO

NS - RW - VA

- Ans
- 1. SW - VA - ZE
 - 2. MR - QV - UY
 - 3. DI - HM - LQ
 - 4. TY - XB - AF

Question ID : 7518977381
 Option 1 ID : 75189729524
 Option 2 ID : 75189729521
 Option 3 ID : 75189729523
 Option 4 ID : 75189729522
 Status : Answered
 Chosen Option : 3

Q.49 Sarvan starts from Point Y and drives 5 km towards the north. He then takes a right turn, drives 5 km, turns right and drives 7 km. He then takes a right turn and drives 15 km. Then he takes a right turn and drives 2 km. He takes a final right turn, drives 5 km and stops at Point M. How far and towards which direction should he drive in order to reach Point Y from Point M? (All turns are 90 degree turns only)

- Ans
- 1. 5 km towards the west
 - 2. 15 km towards the east
 - 3. 10 km towards the north
 - 4. 5 km towards the east

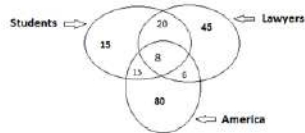
Question ID : 7518979862
 Option 1 ID : 75189739448
 Option 2 ID : 75189739447
 Option 3 ID : 75189739445
 Option 4 ID : 75189739446
 Status : Answered
 Chosen Option : 4

Q.50 The sum lent at the rate of 25% per annum simple interest, that produces interest of ₹ 2.00 a day, for a year of 365 days, is:

- Ans**
- 1. ₹2,820
 - 2. ₹2,920
 - 3. ₹2,902
 - 4. ₹2,800

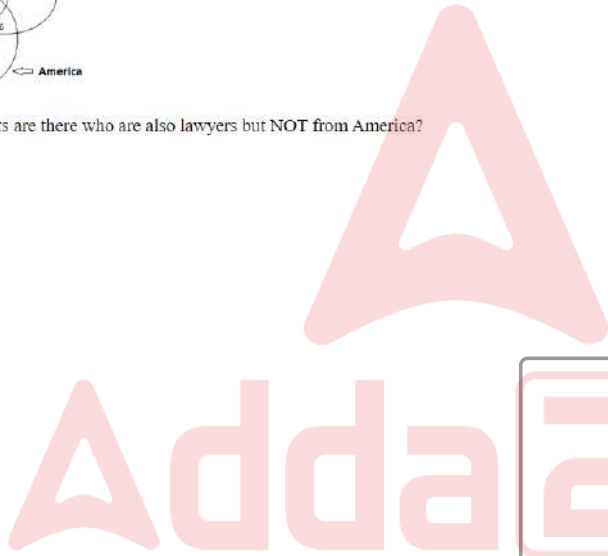
Question ID : **7518979239**
 Option 1 ID : **75189736953**
 Option 2 ID : **75189736954**
 Option 3 ID : **75189736956**
 Option 4 ID : **75189736955**
 Status : **Answered**
 Chosen Option : **2**

Q.51 Study the given diagram carefully and answer the question. The numbers in different sections indicate the number of persons.



How many such students are there who are also lawyers but NOT from America?

- Ans**
- 1. 8
 - 2. 45
 - 3. 20
 - 4. 15



Question ID : **7518979829**
 Option 1 ID : **75189739316**
 Option 2 ID : **75189739314**
 Option 3 ID : **75189739313**
 Option 4 ID : **75189739315**
 Status : **Answered**
 Chosen Option : **3**

Q.52 Following the Indian Constitution and respecting the national anthem and flag is the _____ fundamental duty included in our Constitution.

- Ans**
- 1. First
 - 2. Fourth
 - 3. Third
 - 4. Second

Question ID : **7518974095**
 Option 1 ID : **75189716377**
 Option 2 ID : **75189716380**
 Option 3 ID : **75189716379**
 Option 4 ID : **75189716378**
 Status : **Not Answered**
 Chosen Option : **--**

Q.53 Given below is a decision followed by two statements I and II. Read the information carefully and select the correct option

Decision:

The Board of Directors of a Digital Marketing Company AMX have decided to shift their headquarters from the city centre to the business towers located on the outskirts of the city.

Statements:

I. Low property rent in outskirts would help reduce the overall expenditure of the company substantially.

II. The business towers is the hub of multiple MNCs with frequent visitors from international companies as well. This will give more visibility to AMX.

Ans 1.

Statement I strengthens the decision but statement II is neutral.

2. Both statements I and II strengthen the decision.

3.

Statement I weakens the decision but statement II is neutral.

4. Both statements I and II weaken the decision.

Question ID : 7518979078

Option 1 ID : 75189736309

Option 2 ID : 75189736312

Option 3 ID : 75189736310

Option 4 ID : 75189736311

Status : Answered

Chosen Option : 2

Q.54 A man bought mangoes at the rate of 12 for ₹900 and sold them at the rate of 9 for ₹1,200. His profit percentage in the transaction is:

Ans

1. $77\frac{7}{9}\%$

2. $66\frac{7}{9}\%$

3. $99\frac{8}{9}\%$

4. $88\frac{8}{9}\%$

Question ID : 7518978685

Option 1 ID : 75189734739

Option 2 ID : 75189734740

Option 3 ID : 75189734737

Option 4 ID : 75189734738

Status : Answered

Chosen Option : 1

Q.55 If south is changed to north-west, north-west is changed to east, east is changed to south-west and so on, which direction is north-east changed to?

- Ans**
- 1. West
 - 2. South
 - 3. North
 - 4. East

Question ID : 7518979765
Option 1 ID : 75189739060
Option 2 ID : 75189739058
Option 3 ID : 75189739057
Option 4 ID : 75189739059
Status : Answered
Chosen Option : 2

Q.56 After the changes brought about by the 73rd amendment in Panchayati Raj institutions, all states in India have a uniform _____ tier Panchayati Raj structure.

- Ans**
- 1. 2
 - 2. 5
 - 3. 4
 - 4. 3

Question ID : 7518979451
Option 1 ID : 75189737801
Option 2 ID : 75189737804
Option 3 ID : 75189737803
Option 4 ID : 75189737802
Status : Answered
Chosen Option : 4

Q.57 Mendeléev's Periodic Table was published in _____.

- Ans**
- 1. 1842
 - 2. 1872
 - 3. 1852
 - 4. 1862

Question ID : 7518979682
Option 1 ID : 75189738725
Option 2 ID : 75189738728
Option 3 ID : 75189738726
Option 4 ID : 75189738727
Status : Not Answered
Chosen Option : --

Q.58 The random wavering of objects seen through a turbulent stream of hot air rising above a fire can be explained using:

- Ans**
- 1. scattering of light
 - 2. Total internal reflection
 - 3. dispersion of light
 - 4. atmospheric refraction

Question ID : 7518975446
Option 1 ID : 75189721781
Option 2 ID : 75189721784
Option 3 ID : 75189721783
Option 4 ID : 75189721782
Status : Answered
Chosen Option : 4

Q.59 The resistance of a wire of length L and area of cross-section A is 0.4Ω . The resistance of a wire of the same material, of the same length (L) and area of cross-section $4A$ will be:

- Ans**
- 1. 0.2Ω
 - 2. 0.8Ω
 - 3. 1.6Ω
 - 4. 0.1Ω

Question ID : 7518976681
Option 1 ID : 75189726723
Option 2 ID : 75189726722
Option 3 ID : 75189726721
Option 4 ID : 75189726724
Status : Answered
Chosen Option : 1

Q.60 In a certain code language, 'ADMIT' is written as 'BFPMY' and 'ACTOR' is written as 'BEWSW'. How will 'ABUSE' be written in that language?

- Ans**
- 1. BDZWJ
 - 2. BDYWJ
 - 3. BDGWJ
 - 4. BDXWJ

Question ID : 7518979852
Option 1 ID : 75189739407
Option 2 ID : 75189739406
Option 3 ID : 75189739408
Option 4 ID : 75189739405
Status : Answered
Chosen Option : 4

Q.61 $(x^4 - 625)$ can be factorised as:

- Ans
- 1. $(x + 5)^2(x^2 - 25)$
 - 2. $(x^2 + 25)(x^2 + 25)$
 - 3. $(x - 5)(x + 5)(x^2 + 25)$
 - 4. $(x^2 - 25)(x^2 - 5)$

Question ID : 7518979277

Option 1 ID : 75189737108

Option 2 ID : 75189737105

Option 3 ID : 75189737107

Option 4 ID : 75189737106

Status : Answered

Chosen Option : 3

Q.62 If each of the following numbers is multiplied by 2 and the digits of each number are written in reverse order and then the numbers are arranged in descending order, the position of how many numbers will NOT change?

57, 87, 35, 97, 56, 74

- Ans
- 1. Two
 - 2. One
 - 3. Four
 - 4. Three

Question ID : 7518978071

Option 1 ID : 75189732283

Option 2 ID : 75189732284

Option 3 ID : 75189732281

Option 4 ID : 75189732282

Status : Answered

Chosen Option : 2

Q.63 The concept of indifference curve is based on the law of _____.

- Ans
- 1. diminishing marginal utility
 - 2. marginal rate of substitution
 - 3. diminishing marginal rate of substitution
 - 4. demand and supply

Question ID : 7518977214

Option 1 ID : 75189728853

Option 2 ID : 75189728855

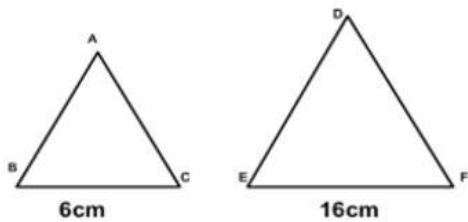
Option 3 ID : 75189728854

Option 4 ID : 75189728856

Status : Answered

Chosen Option : 4

Q.64 In the given figure, if $\triangle ABC$ and $\triangle DEF$ are similar, then the ratio of CA to FD will be:



- Ans
- 1. 3 : 7
 - 2. 5 : 7
 - 3. 3 : 4
 - 4. 3 : 8

Question ID : 7518979339

Option 1 ID : 75189737356

Option 2 ID : 75189737355

Option 3 ID : 75189737354

Option 4 ID : 75189737353

Status : Answered

Chosen Option : 4

Q.65 The mode of the observations 20, 23, 25, 30, 20, 31, 32, 35, 20, 41, 42, 43, 20 and 20 is:

- Ans
- 1. 35
 - 2. 40
 - 3. 20
 - 4. 30

Question ID : 7518978720

Option 1 ID : 75189734878

Option 2 ID : 75189734877

Option 3 ID : 75189734880

Option 4 ID : 75189734879

Status : Answered

Chosen Option : 3

Q.66 Which of the following statements is true about the nature of roots for the equation $11x^2 + 19x + 8 = 0$?

- Ans
- 1. Both roots are negative real
 - 2. One root is positive real, and one is negative real
 - 3. Both roots are imaginary or non-real
 - 4. Both roots are positive real

Question ID : 7518979313

Option 1 ID : 75189737252

Option 2 ID : 75189737250

Option 3 ID : 75189737249

Option 4 ID : 75189737251

Status : Answered

Chosen Option : 1

Q.67 In the year 2022, at what altitude was the Earth Observation Satellite (EOS-04) placed into a sun-synchronous polar orbit?

- Ans**
- ✓ 1. 529 km
 - ✗ 2. 612 km
 - ✗ 3. 317 km
 - ✗ 4. 714 km

Question ID : 7518977153
Option 1 ID : 75189728609
Option 2 ID : 75189728612
Option 3 ID : 75189728611
Option 4 ID : 75189728610
Status : Not Answered
Chosen Option : --

Q.68 Which of the following numbers is divisible by 4?

- Ans**
- ✗ 1. 9876754
 - ✗ 2. 9876342
 - ✗ 3. 7864534
 - ✓ 4. 8978624

Question ID : 7518978638
Option 1 ID : 75189734552
Option 2 ID : 75189734550
Option 3 ID : 75189734549
Option 4 ID : 75189734551
Status : Answered
Chosen Option : 4

Q.69 What is the process of accumulation of chemicals in higher trophic levels called?

- Ans**
- ✗ 1. Biological oxidation
 - ✗ 2. Biological reduction
 - ✓ 3. Biological magnification
 - ✗ 4. Biological remediation

Question ID : 7518977856
Option 1 ID : 75189731423
Option 2 ID : 75189731424
Option 3 ID : 75189731421
Option 4 ID : 75189731422
Status : Answered
Chosen Option : 3

Q.70 Two statements are given below, followed by four conclusions given in the options. Find out which conclusion is true based on the given statements.

Statement: $P < Q = R < T = M, J < N < P$

- Ans**
- 1. $R < J$
 - 2. $J > T$
 - 3. $N > R$
 - 4. $M > J$

Question ID : 7518979733

Option 1 ID : 75189738929

Option 2 ID : 75189738931

Option 3 ID : 75189738932

Option 4 ID : 75189738930

Status : Answered

Chosen Option : 4

Q.71 The focal length of a concave mirror is:

- Ans**
- 1. positive or negative
 - 2. zero
 - 3. always negative
 - 4. always positive

Question ID : 7518979487

Option 1 ID : 75189737945

Option 2 ID : 75189737948

Option 3 ID : 75189737946

Option 4 ID : 75189737947

Status : Answered

Chosen Option : 3

Q.72 Which of the following numbers will replace the question mark (?) in the given series?

176, 174, 171, 166, 159, ?

- Ans**
- 1. 135
 - 2. 138
 - 3. 148
 - 4. 145

Question ID : 7518978306

Option 1 ID : 75189733223

Option 2 ID : 75189733224

Option 3 ID : 75189733221

Option 4 ID : 75189733222

Status : Answered

Chosen Option : 3

Q.73 Which of the following will NOT show covalent bonding?

- Ans
- 1. Ammonia (NH_3)
 - 2. Oxygen (O_2)
 - 3. Methane (CH_4)
 - 4. Magnesium chloride (MgCl_2)

Question ID : 7518973387

Option 1 ID : 75189713546

Option 2 ID : 75189713545

Option 3 ID : 75189713547

Option 4 ID : 75189713548

Status : Answered

Chosen Option : 4

Q.74 The process by which electrical energy can be produced in a coil involves:

- Ans
- 1. presence of galvanometer in the system
 - 2. inclusion of commutator in the system
 - 3. magnet and coil under stationary positions
 - 4. relative motion of the coil and magnet

Question ID : 7518979583

Option 1 ID : 75189738332

Option 2 ID : 75189738329

Option 3 ID : 75189738330

Option 4 ID : 75189738331

Status : Answered

Chosen Option : 4

Q.75 In this question, a group of numbers/symbols is coded using letters as per the table given below and the conditions which follow. The correct combination of codes following the condition is your answer.

Number/Symbol	2	6	=	@	?	8	<	5	7	#	!	/	7	4
Code	K	S	R	T	U	M	W	Y	A	V	C	X	E	B

Conditions:


- (i) If the first element is a number and the last, a symbol, the codes for these two are to be interchanged.
- (ii) If the first element is an even number and the last, an odd number, the first and last elements are to be coded as O.
- (iii) If both second and third elements are perfect squares, the third element is to be coded as the code for the second element.

How will '5 # / 4 =' be coded?

- Ans**
- 1. R V X B Y
 - 2. Y V E B Y
 - 3. Y V X B R
 - 4. R C X B Y

Question ID : 7518975028
 Option 1 ID : 75189720112
 Option 2 ID : 75189720111
 Option 3 ID : 75189720110
 Option 4 ID : 75189720109
 Status : Answered
 Chosen Option : 3

Q.76 The given pie chart provides details of the study modes used by students of class XII. Study the pie chart and answer the question.



If 18 students study using home tutors, how many total students are there in class XII?

- Ans**
- 1. 300
 - 2. 180
 - 3. 200
 - 4. 350

Question ID : 7518979802
 Option 1 ID : 75189739205
 Option 2 ID : 75189739207
 Option 3 ID : 75189739208
 Option 4 ID : 75189739206
 Status : Answered
 Chosen Option : 3

Q.77 Which of the following not-for-profit organisations runs a flagship programme called Udaan that supports accelerated learning of out of school adolescent girls (aged 11-14 years), as of July 2022?

- Ans
- 1. SEEDS
 - 2. Save the Children
 - 3. CARE
 - 4. YUVA

Question ID : 7518976551
Option 1 ID : 75189726204
Option 2 ID : 75189726202
Option 3 ID : 75189726201
Option 4 ID : 75189726203
Status : Answered
Chosen Option : 3

Q.78 40% of 60% of $\frac{5}{8}$ of a number is 339. The number is:

- Ans
- 1. 2260
 - 2. 4260
 - 3. 5260
 - 4. 3260

Question ID : 7518978659
Option 1 ID : 75189734636
Option 2 ID : 75189734634
Option 3 ID : 75189734633
Option 4 ID : 75189734635
Status : Answered
Chosen Option : 1

Q.79 Hirakud Dam was in news due to the conflict between Odisha and Chhattisgarh over the distribution of water from the _____ river on which the dam has been erected.

- Ans
- 1. Mahanadi
 - 2. Indravati
 - 3. Sankh
 - 4. Damodar

Question ID : 7518978913
Option 1 ID : 75189735649
Option 2 ID : 75189735650
Option 3 ID : 75189735651
Option 4 ID : 75189735652
Status : Answered
Chosen Option : 1

Q.80 Select the set in which the numbers are related in the same way as are the numbers of the following sets.
(NOTE: Operations should be performed on the whole numbers, without breaking down the numbers into its constituent digits. E.g. 12 – Operations on 12 such as adding/ subtracting/multiplying etc. to 12 can be performed. Breaking down 12 into 1 and 2 and then performing mathematical operations on 1 and 2 is not allowed)

(5, 144, 7)

(9, 225, 6)

- Ans**
- 1. (4, 100, 5)
 - 2. (10, 145, 13)
 - 3. (9, 99, 10)
 - 4. (9, 256, 7)

Question ID : 7518978321

Option 1 ID : 75189733281

Option 2 ID : 75189733284

Option 3 ID : 75189733282

Option 4 ID : 75189733283

Status : Answered

Chosen Option : 4

Q.81 Amit, Bineet, Chandan, Dipti, Gyan and Farhaan live on six different floors of the same building. The lowermost floor in the building is numbered 1, the floor above it number 2, and so on till the topmost floor is numbered 6. Dipti lives on an even numbered floor but not on floor number 4. Only two people live between Dipti and Amit. Chandan lives immediately below Farhaan. Farhaan lives on an even numbered floor. Neither Chandan nor Bineet live on the lowermost floor. Who lives on floor number 4?

- Ans**
- 1. Amit
 - 2. Chandan
 - 3. Farhaan
 - 4. Bineet

Question ID : 7518979816

Option 1 ID : 75189739262

Option 2 ID : 75189739263

Option 3 ID : 75189739261

Option 4 ID : 75189739264

Status : Answered

Chosen Option : 3

Q.82 Two trains of lengths 160 m and 90 m are running in the same direction with velocities of 40 km/h and 50 km/h, respectively. The time taken by them to cross each other is:

- Ans**
- 1. 90 sec
 - 2. 95 sec
 - 3. 75 sec
 - 4. 80 sec

Question ID : 7518979261

Option 1 ID : 75189737044

Option 2 ID : 75189737043

Option 3 ID : 75189737041

Option 4 ID : 75189737042

Status : Answered

Chosen Option : 1

Q.83 The correct relation between H (heat), I (current), R (resistance) and T (time) is:

- Ans 1. $H = I^2RT$
 2. $H = I^2RT^2$
 3. $H = IR^2T$
 4. $H = IR T^2$

Question ID : 7518979568
Option 1 ID : 75189738269
Option 2 ID : 75189738272
Option 3 ID : 75189738270
Option 4 ID : 75189738271
Status : Answered
Chosen Option : 1

Q.84 As per the Reserve Bank of India notification of March 2022 the minimum requirement of microfinance loans for NBFC-MFIs should be _____ per cent of the total assets.

- Ans 1. 25
 2. 80
 3. 75
 4. 50

Question ID : 7518977228
Option 1 ID : 75189728909
Option 2 ID : 75189728912
Option 3 ID : 75189728911
Option 4 ID : 75189728910
Status : Not Answered
Chosen Option : --

Q.85 In 1896, Maharshi Dhondo Keshav Karve set up an Ashram at _____ to educate widows and other women as he believed in empowerment through education.

- Ans 1. Madras
 2. Surat
 3. Poona
 4. Nagpur

Question ID : 7518973993
Option 1 ID : 75189715971
Option 2 ID : 75189715970
Option 3 ID : 75189715969
Option 4 ID : 75189715972
Status : Answered
Chosen Option : 3

Q.86 _____ covers most of the Deccan Plateau, which includes parts of Maharashtra, Madhya Pradesh, Gujarat and Andhra Pradesh and some parts of Tamil Nadu.

- Ans
- 1. Laterite soil
 - 2. Peaty soil
 - 3. Black soil
 - 4. Alluvial soil

Question ID : 7518978905
Option 1 ID : 75189735619
Option 2 ID : 75189735620
Option 3 ID : 75189735617
Option 4 ID : 75189735618
Status : Answered
Chosen Option : 1

Q.87 If $\tan x = \frac{3}{4}$, for $0 < x < 90^\circ$, then the value of $\frac{1 - \sin x}{1 + \sin x}$ will be:

- Ans
- 1. $\frac{1}{2}$
 - 2. $\frac{1}{5}$
 - 3. $\frac{1}{4}$
 - 4. $\frac{1}{3}$

Question ID : 7518979344
Option 1 ID : 75189737375
Option 2 ID : 75189737374
Option 3 ID : 75189737376
Option 4 ID : 75189737373
Status : Answered
Chosen Option : 3

Q.88 The sum of two positive numbers is 34 and their product is 64. The positive difference between them is:

- Ans
- 1. 40
 - 2. 30
 - 3. 50
 - 4. 60

Question ID : 7518978739
Option 1 ID : 75189734955
Option 2 ID : 75189734956
Option 3 ID : 75189734954
Option 4 ID : 75189734953
Status : Answered
Chosen Option : 2

Q.89 Refer to the following letter, number, symbol series and answer the question.

(Left) G \$ 5 & 2 P H 8 # T * S 2 F 8 C 2 7 \$ Y 6 F (Right)

How many such symbols are there which are immediately preceded by a letter and also immediately followed by a number?

- Ans**
- 1. 2
 - 2. 1
 - 3. 3
 - 4. 4

Question ID : 7518979168
 Option 1 ID : 75189736670
 Option 2 ID : 75189736669
 Option 3 ID : 75189736671
 Option 4 ID : 75189736672
 Status : Answered
 Chosen Option : 1

Q.90 Six friends E, F, G, H, I and J are seated around a round table facing the centre. E is seated 2nd to the right of I. Only G is seated between H and J. Where is F seated?

- Ans**
- 1. 3rd to the left of G
 - 2. 2nd to the left of I
 - 3. 2nd to the right of G
 - 4. 2nd to the right of I

Question ID : 7518979707
 Option 1 ID : 75189738827
 Option 2 ID : 75189738825
 Option 3 ID : 75189738828
 Option 4 ID : 75189738826
 Status : Answered
 Chosen Option : 1

Q.91 The volume of a sphere having radius 6 cm is:

- Ans**
- 1. $488 \pi \text{ cm}^3$
 - 2. $388 \pi \text{ cm}^3$
 - 3. $288 \pi \text{ cm}^3$
 - 4. $588 \pi \text{ cm}^3$

Question ID : 7518978784
 Option 1 ID : 75189735134
 Option 2 ID : 75189735135
 Option 3 ID : 75189735136
 Option 4 ID : 75189735133
 Status : Answered
 Chosen Option : 3

Q.92 If the 5-digit number $688xy$ is divisible by 11 and 21, then what is the value of $(8x - 3y + xy)$?

- Ans
- 1. 6
 - 2. 24
 - 3. 15
 - 4. 13

Question ID : 7518978349
Option 1 ID : 75189733396
Option 2 ID : 75189733393
Option 3 ID : 75189733394
Option 4 ID : 75189733395
Status : Answered
Chosen Option : 3

Q.93 _____ of the Constitution of India deals with the prohibition of traffic in human beings and forced labour.

- Ans
- 1. Article 26
 - 2. Article 28
 - 3. Article 23
 - 4. Article 21

Question ID : 7518978934
Option 1 ID : 75189735734
Option 2 ID : 75189735736
Option 3 ID : 75189735735
Option 4 ID : 75189735733
Status : Answered
Chosen Option : 3

Q.94 Which of the following compounds is used in the manufacture of borax?

- Ans
- 1. Chlorine water
 - 2. Brine water
 - 3. Bleaching powder
 - 4. Washing soda

Question ID : 7518979657
Option 1 ID : 75189738625
Option 2 ID : 75189738627
Option 3 ID : 75189738628
Option 4 ID : 75189738626
Status : Answered
Chosen Option : 4

Q.95 Which of the following numbers will replace the question mark (?) in the given series?

5, 5, 7, 21, 25, ?

- Ans
- 1. 65
 - 2. 45
 - 3. 120
 - 4. 125

Question ID : 7518979872
Option 1 ID : 75189739487
Option 2 ID : 75189739486
Option 3 ID : 75189739488
Option 4 ID : 75189739485
Status : Answered
Chosen Option : 4

Q.96 The ratio of the radius of the base to the height of a cylinder is 2 : 1. If its volume is 4312 cm^3 , then the curved surface area of the cylinder is:

- Ans
- 1. 946 cm^2
 - 2. 734 cm^2
 - 3. 616 cm^2
 - 4. 668 cm^2

Question ID : 7518979327
Option 1 ID : 75189737305
Option 2 ID : 75189737306
Option 3 ID : 75189737307
Option 4 ID : 75189737308
Status : Answered
Chosen Option : 3

Q.97 Which of the following methods can be used to conserve our natural resources?

- Ans
- 1. Walking to nearby places without using vehicles
 - 2. Not recycling goods
 - 3. Turning on lights even when not required
 - 4. Using more water

Question ID : 7518977878
Option 1 ID : 75189731510
Option 2 ID : 75189731511
Option 3 ID : 75189731512
Option 4 ID : 75189731509
Status : Answered
Chosen Option : 1

Q.98 The following table shows the monthly expenditure (in ₹ thousand) by three persons on rent, food, clothing and traveling. Study the table and answer the question.

	Rent	Food	Clothing	Traveling
Rahul	12.3	10.0	12.7	15.0
Geeta	14.3	15.0	11.7	11.5
Madhu	14.5	25.0	20.0	22.0

What is the average expenditure of Madhu on all the four expenses together?

- Ans**
- 1. ₹20,377
 - 2. ₹20,357
 - 3. ₹20,375
 - 4. ₹20,537

Question ID : 7518979896
Option 1 ID : 75189739584
Option 2 ID : 75189739582
Option 3 ID : 75189739581
Option 4 ID : 75189739583

Status : Answered

Chosen Option : 3

Q.99 Who won the men's singles Yonex Sunrise India Open 2022?

- Ans**
- 1. Mohammad Ahsan
 - 2. Satwiksairaj Rankireddy
 - 3. Chirag Shetty
 - 4. Lakshya Sen

Question ID : 7518973949
Option 1 ID : 75189715796
Option 2 ID : 75189715793
Option 3 ID : 75189715794
Option 4 ID : 75189715795

Status : Answered

Chosen Option : 4

Q.100 Select the option that is related to the fifth number in the same way as the fourth number is related to the third number and the second number is related to the first number.

9 : 83 :: 5 : 47 :: 4 : ?

- Ans**
- 1. 37
 - 2. 38
 - 3. 33
 - 4. 32

Question ID : 7518979773
Option 1 ID : 75189739089
Option 2 ID : 75189739092
Option 3 ID : 75189739090
Option 4 ID : 75189739091
Status : Answered
Chosen Option : 2

