



रेल भर्ती बोर्ड / RAILWAY RECRUITMENT BOARDS
सी ई एन आर आर सी - ०१/२०१९ - CEN RRC - 01/2019



Roll Number	
Candidate Name	
Test Center Name	iON Digital Zone iDZ Aluva
Test Date	14/09/2022
Test Time	12:45 PM - 2:15 PM
Subject	Level 1

* Note

Correct Answer will carry 1 mark per Question.

Incorrect Answer will carry 1/3 Negative mark per Question.

- Options shown in green color with a tick icon are correct.
- Chosen option on the right of the question indicates the option selected by the candidate.

Section : Level 1

Q.1 Select the set in which the numbers are related in the same way as are the numbers of the following sets.

(NOTE: Operations should be performed on the whole numbers, without breaking down the numbers into its constituent digits. E.g. 13 – Operations on 13 such as adding /deleting /multiplying etc. to 13 can be performed. Breaking down 13 into 1 and 3 and then performing mathematical operations on 1 and 3 is not allowed)

(10, 144)

(17,361)

- Ans
- 1. (11, 144)
 - 2. (9, 100)
 - 3. (12, 169)
 - 4. (21, 529)

Question ID : 75189710933

Option 1 ID : 75189743732

Option 2 ID : 75189743730

Option 3 ID : 75189743729

Option 4 ID : 75189743731

Status : Answered

Chosen Option : 4

Test Prime

ALL EXAMS,
ONE SUBSCRIPTION



40,000+
Mock Tests



Personalised
Report Card



Unlimited
Re-Attempt



500+
Exam Covered



Previous Year
Papers



500%
Refund



DOWNLOAD NOW

Q.2 In terrestrial animals, exchange of gases takes place by diffusion. Which among the following statements are true about respiration in these animals?

- a. Diffusion through their surface
- b. They have fine and delicate surface that enables exchange of gases
- c. They may have passages for flow of air
- d. They have less surface area but heavy blood flow for respiration

Ans ✓ 1. a, b and c

✗ 2. a and b

✗ 3. a, c and d

✗ 4. a and d

Question ID : 75189710164

Option 1 ID : 75189740655

Option 2 ID : 75189740653

Option 3 ID : 75189740654

Option 4 ID : 75189740656

Status : Answered

Chosen Option : 1

Q.3 The Kanya Shiksha Pravesh Utsav campaign launched by the Government of India in March 2022 aims at enhancing enrolment and retention of girls between _____ of age in schools.

Ans ✗ 1. 15 to 18 years

✓ 2. 11 to 14 years

✗ 3. 14 to 16 years

✗ 4. 6 to 10 years

Question ID : 7518977453

Option 1 ID : 75189729812

Option 2 ID : 75189729810

Option 3 ID : 75189729811

Option 4 ID : 75189729809

Status : Not Answered

Chosen Option : --

Q.4 Three statements are given, followed by three conclusions numbered I, II and III. Assuming the statements to be true, even if they seem to be at variance with commonly known facts, decide which of the conclusions logically follow(s) from the statements.

Statements:

1. All pens are sketch-pens.
2. Some sketch-pens are markers.
3. No marker is a drawing.

Conclusions:

- I. Some drawings are markers.
- II. No pen is a drawing.
- III. Some sketch-pens are pens.

- Ans**
- 1. Only conclusion I follows
 - 2. Only conclusions I and II follow
 - 3. Only conclusions II and III follow
 - 4. Only conclusion III follows

Question ID : 75189710781

Option 1 ID : 75189743123

Option 2 ID : 75189743121

Option 3 ID : 75189743122

Option 4 ID : 75189743124

Status : Answered

Chosen Option : 4

Q.5 Read the given statements and conclusions carefully. Assuming that the information given in the statements is true, even if it appears to be at variance with commonly known facts, decide which of the given conclusions logically follow(s) from the statements.

Statements:

All TVs are radios.

Some radios are mobiles.

All mobiles are pen drives.

Conclusions:

(I) Some radios are pen drives.

(II) Some TVs are mobiles.

- Ans**
- 1. Only conclusion I follows
 - 2. Neither conclusion I nor II follow
 - 3. Only conclusion II follows
 - 4. Both conclusions I and II follow

Question ID : 75189710995

Option 1 ID : 75189743977

Option 2 ID : 75189743979

Option 3 ID : 75189743978

Option 4 ID : 75189743980

Status : Answered

Chosen Option : 1

Q.6 _____ is a suitable mirror that can be used to focus sunlight to a point.

- Ans
- 1. A glass plate
 - 2. A concave mirror
 - 3. A convex mirror
 - 4. A plane mirror

Question ID : 75189711136
Option 1 ID : 75189744544
Option 2 ID : 75189744541
Option 3 ID : 75189744542
Option 4 ID : 75189744543
Status : Answered
Chosen Option : 3

Q.7 Which of the following fundamental duties is added by the 86th Amendment of the constitution in 2002?

- Ans
- 1. To cherish and follow the noble ideals which inspired our national struggle for freedom
 - 2. To safeguard public property and to abjure violence
 - 3. Who is a parent or guardian, to provide opportunities for education to his child, or as the case may be, ward between the age of six and fourteen years
 - 4. To defend the country and render national service when called upon to do so

Question ID : 7518979438
Option 1 ID : 75189737749
Option 2 ID : 75189737751
Option 3 ID : 75189737752
Option 4 ID : 75189737750
Status : Answered
Chosen Option : 3

Q.8 An alloy is made of aluminium and nickel in the ratio 3 : 4. The quantity (in kg) of nickel required to be melted with 36 kg of aluminium is _____.

- Ans
- 1. 3
 - 2. 18
 - 3. 48
 - 4. 32

Question ID : 75189710650
Option 1 ID : 75189742598
Option 2 ID : 75189742597
Option 3 ID : 75189742599
Option 4 ID : 75189742600
Status : Answered
Chosen Option : 3

Q.9 Farah got married 8 years ago. Today her age is $\frac{9}{7}$ times her age at the time of her marriage. At present her daughter's age is $\frac{1}{6}$ of her age. Her daughter's age 3 years ago was:

- Ans
- 1. 6 years
 - 2. 9 years
 - 3. 12 years
 - 4. 3 years

Question ID : 7518979299
Option 1 ID : 75189737194
Option 2 ID : 75189737195
Option 3 ID : 75189737196
Option 4 ID : 75189737193
Status : Answered
Chosen Option : 4

Q.10 Which system is affected the most by AIDS?

- Ans
- 1. Immune system
 - 2. Nervous system
 - 3. Circulatory system
 - 4. Excretory system

Question ID : 7518974423
Option 1 ID : 75189717689
Option 2 ID : 75189717691
Option 3 ID : 75189717692
Option 4 ID : 75189717690
Status : Answered
Chosen Option : 1

Q.11 Which zone separates the troposphere from the stratosphere?

- Ans
- 1. Thermopause
 - 2. Stratopause
 - 3. Tropopause
 - 4. Mesopause

Question ID : 7518977251
Option 1 ID : 75189729004
Option 2 ID : 75189729003
Option 3 ID : 75189729001
Option 4 ID : 75189729002
Status : Answered
Chosen Option : 3

Q.12 Five persons are sitting in a straight row, facing North. K and N are sitting at the two extreme ends. R is sitting to the immediate left of L. M is sitting to the immediate left of N. K and L are the immediate neighbours of R. What is R's position when counted from the extreme left end?

- Ans**
- 1. Second
 - 2. Fifth
 - 3. Fourth
 - 4. Third

Question ID : 75189710739
 Option 1 ID : 75189742953
 Option 2 ID : 75189742956
 Option 3 ID : 75189742955
 Option 4 ID : 75189742954
 Status : Answered
 Chosen Option : 1

Q.13 If an object is placed 36 cm in front of a concave mirror of focal length 18 cm, then its image will be formed _____.

- Ans**
- 1. at 18 cm behind the mirror
 - 2. at 36 cm behind the mirror
 - 3. at 18 cm in front of the mirror
 - 4. at 36 cm in front of the mirror

Question ID : 7518979491
 Option 1 ID : 75189737962
 Option 2 ID : 75189737964
 Option 3 ID : 75189737961
 Option 4 ID : 75189737963
 Status : Marked For Review
 Chosen Option : 4

Q.14 In the given question, the statement is followed by two conclusions. Which of the two conclusion(s) is/are true based on the given statement?

Statement: $B = T < E \leq G > H > Q$

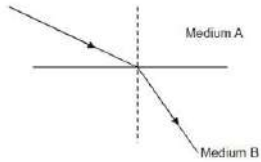
Conclusions: I. $G > B$

II. $G > Q$

- Ans**
- 1. Neither conclusion I nor II is true
 - 2. Both conclusions I and II are true
 - 3. Only conclusion II is true
 - 4. Only conclusion I is true

Question ID : 7518977625
 Option 1 ID : 75189730499
 Option 2 ID : 75189730500
 Option 3 ID : 75189730498
 Option 4 ID : 75189730497
 Status : Answered
 Chosen Option : 2

Q.15 The path of a ray of light incident on an interface separating two transparent media is shown in the figure. The refractive index (n) of medium B with respect to medium A is given by:



Ans 1. $n > 1$

2. $0 < n < 1$

3. $n = 1$

4. $n = 0$

Question ID : 7518975403

Option 1 ID : 75189721609

Option 2 ID : 75189721611

Option 3 ID : 75189721610

Option 4 ID : 75189721612

Status : Answered

Chosen Option : 2

Q.16 Which of the following elements has three shells with two valence electrons?

Ans 1. Cl

2. Si

3. Mg

4. P

Question ID : 75189710379

Option 1 ID : 75189741516

Option 2 ID : 75189741514

Option 3 ID : 75189741515

Option 4 ID : 75189741513

Status : Not Answered

Chosen Option : --

Q.17 Find the cost of tiling the verandah, at the rate of ₹ 24 per m^2 , if the length and breadth of the verandah are in the ratio 3 : 1 and its perimeter is 40 m.

Ans 1. ₹ 1,800

2. ₹ 1,600

3. ₹ 1,700

4. ₹ 1,900

Question ID : 7518979322

Option 1 ID : 75189737286

Option 2 ID : 75189737287

Option 3 ID : 75189737285

Option 4 ID : 75189737288

Status : Answered

Chosen Option : 1

Q.18 Read the given statement and the arguments carefully and select the appropriate answer from the given options.

Statement:

Farmers in Village X should switch to crops that require comparatively less water for irrigation as compared to sugarcane.

Arguments:

- I. Availability of water for irrigation has been on a constant decline in Village X for last few years.
- II. Main source of income of farmers in Village X is through sale of sugarcane crop to the nearby sugar factories.

- Ans
- 1. II weakens while I strengthens the statement.
 - 2. I weakens while II strengthens the statement.
 - 3. Both I and II weaken the statement.
 - 4. Both I and II strengthen the statement.

Question ID : 75189711124

Option 1 ID : 75189744494

Option 2 ID : 75189744493

Option 3 ID : 75189744495

Option 4 ID : 75189744496

Status : Answered

Chosen Option : 4

Q.19 How many molecules of carbon dioxide are formed during the breakdown of pyruvate using oxygen in the mitochondria?

- Ans
- 1. Two
 - 2. Six
 - 3. Five
 - 4. Three

Question ID : 75189710200

Option 1 ID : 75189740797

Option 2 ID : 75189740800

Option 3 ID : 75189740799

Option 4 ID : 75189740798

Status : Not Answered

Chosen Option : --

Q.20 Simplify $12 \text{ of } 3 - 24 \text{ of } 4 \div 12$.

- Ans
- 1. 28
 - 2. 5
 - 3. -5
 - 4. 4

Question ID : 7518979093

Option 1 ID : 75189736372

Option 2 ID : 75189736371

Option 3 ID : 75189736369

Option 4 ID : 75189736370

Status : Answered

Chosen Option : 1

Q.21 How many Indian Institutes of Technology were started under the First Five-Year Plan?

- Ans
- 1. Five
 - 2. Four
 - 3. Three
 - 4. Two

Question ID : 7518979416
Option 1 ID : 75189737661
Option 2 ID : 75189737662
Option 3 ID : 75189737663
Option 4 ID : 75189737664
Status : Not Answered
Chosen Option : --

Q.22 In which year was Operation Flood started with an aim to create a nationwide milk grid?

- Ans
- 1. 1979
 - 2. 1970
 - 3. 1981
 - 4. 1985

Question ID : 7518974056
Option 1 ID : 75189716222
Option 2 ID : 75189716221
Option 3 ID : 75189716223
Option 4 ID : 75189716224
Status : Not Answered
Chosen Option : --

Q.23 Seven boxes, O, P, Q, R, S, T and U, are kept one over the other, but not necessarily in the same order. Only four boxes are between Q and P. U is exactly in the middle of the pile. R is immediately below Q. S is exactly third from the bottom. Only T is between S and P. Q is immediately below O. Which box is at the top-most position?

- Ans
- 1. R
 - 2. P
 - 3. Q
 - 4. O

Question ID : 75189710766
Option 1 ID : 75189743063
Option 2 ID : 75189743064
Option 3 ID : 75189743061
Option 4 ID : 75189743062
Status : Answered
Chosen Option : 4

Q.24 In a row of people all facing north, Mohit is at 20th position from the extreme left end and 30th from the extreme right end of the row. How many people are there in the row?

- Ans**
- 1. 50
 - 2. 39
 - 3. 40
 - 4. 49

Question ID : 75189710991
Option 1 ID : 75189743963
Option 2 ID : 75189743964
Option 3 ID : 75189743961
Option 4 ID : 75189743962
Status : Answered
Chosen Option : 4

Q.25 m and n are two parallel lines. If l is a transversal intersecting m and n , then the sum of the interior angles formed on the same side of l is equal to:

- Ans**
- 1. 270°
 - 2. 360°
 - 3. 180°
 - 4. 90°

Question ID : 75189710033
Option 1 ID : 75189740131
Option 2 ID : 75189740132
Option 3 ID : 75189740130
Option 4 ID : 75189740129
Status : Answered
Chosen Option : 3

Q.26 In this question, the statement is followed by four conclusions. Find out which conclusion is true based on the given statement.

Statement: $Z < X \geq U = Y < V \leq W$

- Ans**
- 1. $V > U$
 - 2. $Z > X$
 - 3. $X < Y$
 - 4. $Y > W$

Question ID : 75189710802
Option 1 ID : 75189743206
Option 2 ID : 75189743207
Option 3 ID : 75189743208
Option 4 ID : 75189743205
Status : Answered
Chosen Option : 1

Q.27 Which of the following is NOT an example of fixed cost for a firm?

- Ans
- 1. Insurance
 - 2. Maintenance and repair
 - 3. Rental lease
 - 4. Property tax

Question ID : 75189710462
Option 1 ID : 75189741846
Option 2 ID : 75189741848
Option 3 ID : 75189741845
Option 4 ID : 75189741847
Status : Answered
Chosen Option : 4

Q.28 30 soldiers are standing in a straight row facing the north. Ramsingh is 6th from the right end and Abhimanyu is 14th from the right end as well. How many soldiers are standing between Ramsingh and Abhimanyu?

- Ans
- 1. 16
 - 2. 7
 - 3. 8
 - 4. 24

Question ID : 75189710978
Option 1 ID : 75189743910
Option 2 ID : 75189743912
Option 3 ID : 75189743909
Option 4 ID : 75189743911
Status : Answered
Chosen Option : 2

Q.29 25% of a number is 1320. Find 35% of the same number.

- Ans
- 1. 1166
 - 2. 1848
 - 3. 1260
 - 4. 1644

Question ID : 7518978660
Option 1 ID : 75189734638
Option 2 ID : 75189734640
Option 3 ID : 75189734637
Option 4 ID : 75189734639
Status : Answered
Chosen Option : 2

Q.30 In Economics, Average product = _____ ÷ Labour

- Ans
- 1. Fixed cost
 - 2. Variable cost
 - 3. Total product
 - 4. Marginal product

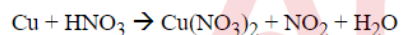
Question ID : 7518978556
 Option 1 ID : 75189734222
 Option 2 ID : 75189734223
 Option 3 ID : 75189734224
 Option 4 ID : 75189734221
 Status : Answered
 Chosen Option : 3

Q.31 The average of the all natural numbers between 12 and 39 which are divisible by 5 is _____.

- Ans
- 1. 25.5
 - 2. 28
 - 3. 21
 - 4. 25

Question ID : 75189710677
 Option 1 ID : 75189742705
 Option 2 ID : 75189742708
 Option 3 ID : 75189742706
 Option 4 ID : 75189742707
 Status : Answered
 Chosen Option : 4

Q.32 Copper reacts with conc. nitric acid to produce cupric nitrate and nitrogen dioxide as follows.



Which of the following balanced equations is correct?

- Ans
- 1. $2 \text{Cu} + 4 \text{HNO}_3 \rightarrow 2 \text{Cu}(\text{NO}_3)_2 + 2 \text{NO}_2 + 2 \text{H}_2\text{O}$
 - 2. $\text{Cu} + 4 \text{HNO}_3 \rightarrow \text{Cu}(\text{NO}_3)_2 + 2 \text{NO}_2 + 2 \text{H}_2\text{O}$
 - 3. $\text{Cu} + 4 \text{HNO}_3 \rightarrow \text{Cu}(\text{NO}_3)_2 + 2 \text{NO}_2 + \text{H}_2\text{O}$
 - 4. $\text{Cu} + 2 \text{HNO}_3 \rightarrow \text{Cu}(\text{NO}_3)_2 + \text{NO}_2 + 2 \text{H}_2\text{O}$

Question ID : 75189710326
 Option 1 ID : 75189741302
 Option 2 ID : 75189741304
 Option 3 ID : 75189741303
 Option 4 ID : 75189741301
 Status : Answered
 Chosen Option : 2

Q.33 Which of the following Articles discusses the veto power of the President of India?

- Ans
- 1. Article 145
 - 2. Article 114
 - 3. Article 111
 - 4. Article 122

Question ID : 7518977559
 Option 1 ID : 75189730236
 Option 2 ID : 75189730234
 Option 3 ID : 75189730233
 Option 4 ID : 75189730235
 Status : Answered
 Chosen Option : 3

Q.34 Select the option that is related to the fifth number in the same way as the second number is related to the first number and the fourth number is related to the third number.

13 : 19 :: 3 : 7 :: 31 : ?

- Ans
- 1. 41
 - 2. 39
 - 3. 51
 - 4. 47

Question ID : 75189710930
 Option 1 ID : 75189743717
 Option 2 ID : 75189743720
 Option 3 ID : 75189743719
 Option 4 ID : 75189743718
 Status : Answered
 Chosen Option : 1

Q.35 If $\frac{5^{3n+2}}{5^{4n-1}} = 25$, then n = _____.

- Ans
- 1. - 1
 - 2. 5
 - 3. 2
 - 4. 1

Question ID : 75189710689
 Option 1 ID : 75189742754
 Option 2 ID : 75189742753
 Option 3 ID : 75189742755
 Option 4 ID : 75189742756
 Status : Answered
 Chosen Option : 4

Q.36 In a certain code language, the numbers/symbols are coded using letters as per the table given below and as per the given conditions.

Number/ Symbol	1	!	2	@	3	#	4	\$	5	%	6	^	7	&	8	*	9
Code	T	D	C	R	G	B	Y	H	N	J	P	L	Q	S	D	F	Z

Conditions:

- I. If the first element is an even number and the last is an odd number, the code for the first and last elements will be K.
- II. If both the second and third elements are even numbers, the codes for these two are to be interchanged.
- III. If the first element is a number and the last a symbol, the code for the first element is to be used for the last element also.

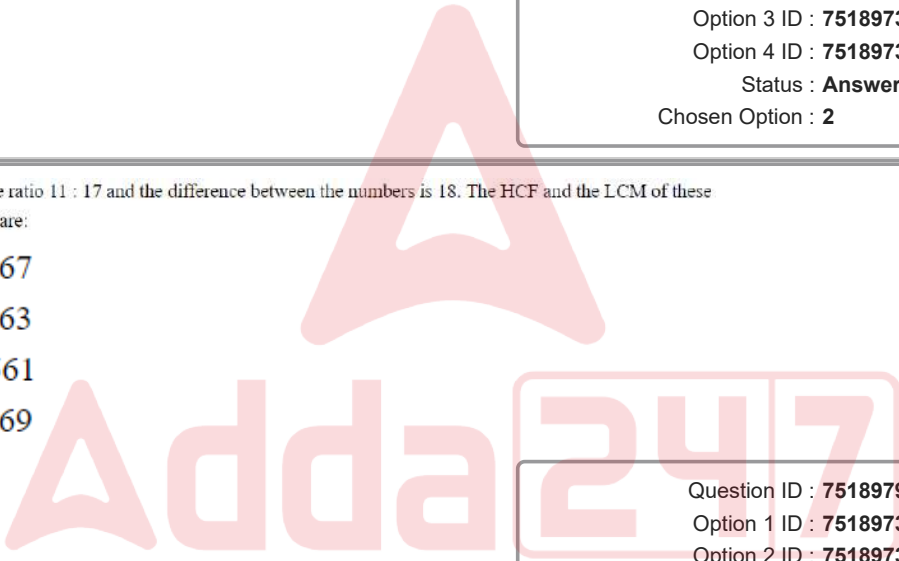
What will be the code for 2\$4%3&?

- Ans**
- 1. SHYJGC
 - 2. CHYJGC
 - 3. SHYJGS
 - 4. CHYJGS

Question ID : 7518978007
 Option 1 ID : 75189732027
 Option 2 ID : 75189732025
 Option 3 ID : 75189732028
 Option 4 ID : 75189732026
 Status : Answered
 Chosen Option : 2

Q.37 Two numbers are in the ratio 11 : 17 and the difference between the numbers is 18. The HCF and the LCM of these numbers, respectively, are:

- Ans**
- 1. 9 and 567
 - 2. 7 and 563
 - 3. 3 and 561
 - 4. 5 and 569



Question ID : 7518979222
 Option 1 ID : 75189736885
 Option 2 ID : 75189736888
 Option 3 ID : 75189736887
 Option 4 ID : 75189736886
 Status : Answered
 Chosen Option : 3

Q.38 January 2022, researchers at the IIT Kharagpur have developed a new highly accurate, portable, yet user-friendly, affordable and non-invasive device for detecting _____ in resource-constrained clinical settings.

- Ans**
- 1. oral cancer
 - 2. breast cancer
 - 3. blood cancer
 - 4. lung cancer

Question ID : 75189710412
Option 1 ID : 75189741645
Option 2 ID : 75189741648
Option 3 ID : 75189741647
Option 4 ID : 75189741646
Status : Not Answered
Chosen Option : --

Q.39 On 31st January 2022, who was appointed as Director General of the National Institute of Electronics and Information Technology?

- Ans**
- 1. Dr. Pinaki Talukdar
 - 2. Dr. Madan Mohan Tripathi
 - 3. Dr. Amrita Hazra
 - 4. Dr. Narayan Pradhan

Question ID : 7518973762
Option 1 ID : 75189715046
Option 2 ID : 75189715047
Option 3 ID : 75189715048
Option 4 ID : 75189715045
Status : Not Answered
Chosen Option : --

Q.40 As per the report of the National Rubber Policy 2019, India is the _____ largest producer of Natural Rubber in the world.

- Ans**
- 1. eighth
 - 2. fifth
 - 3. seventh
 - 4. sixth

Question ID : 7518977535
Option 1 ID : 75189730140
Option 2 ID : 75189730137
Option 3 ID : 75189730139
Option 4 ID : 75189730138
Status : Not Answered
Chosen Option : --

Q.41 A train goes from A to B at a speed of 20 km/h and returns from B to A by the same route at 30 km/h. The average speed (in km/h) of the train during the two-way journey is:

- Ans**
- 1. 24
 - 2. 25
 - 3. 22
 - 4. 23

Question ID : 7518979968
Option 1 ID : 75189739871
Option 2 ID : 75189739872
Option 3 ID : 75189739869
Option 4 ID : 75189739870
Status : Answered
Chosen Option : 1

Q.42 Town F is to the north of Town M. Town B is to the west of Town M. Town C is to the east of Town M. Town D is to the south of Town C. What is the position of Town F with respect to Town D?

- Ans**
- 1. South-East
 - 2. South-West
 - 3. North-East
 - 4. North- West

Question ID : 7518979855
Option 1 ID : 75189739419
Option 2 ID : 75189739420
Option 3 ID : 75189739417
Option 4 ID : 75189739418
Status : Answered
Chosen Option : 4

Q.43 Autotrophs store their food in the form of:

- Ans
- 1. glycogen
 - 2. protein
 - 3. starch
 - 4. fats

Question ID : 75189710148
Option 1 ID : 75189740589
Option 2 ID : 75189740591
Option 3 ID : 75189740590
Option 4 ID : 75189740592
Status : Answered
Chosen Option : 3

Q.44 Refer to the following letter-symbol series and answer the question that follows.

N S \$ F S & H H Y T G B R ^ @ D R S V % ^ V # D % C D @

How many such symbols are there that are immediately preceded by a letter and also immediately followed by a letter?

- Ans
- 1. 4
 - 2. 3
 - 3. 2
 - 4. 1

Question ID : 7518977983
Option 1 ID : 75189731932
Option 2 ID : 75189731931
Option 3 ID : 75189731930
Option 4 ID : 75189731929
Status : Answered
Chosen Option : 1

Q.45 The roots of the quadratic equation $x^2 + 10x + 21 = 0$ are:

- Ans
- 1. 7, 3
 - 2. 3, -7
 - 3. 7, -3
 - 4. -3, -7

Question ID : 7518978765
Option 1 ID : 75189735060
Option 2 ID : 75189735058
Option 3 ID : 75189735057
Option 4 ID : 75189735059
Status : Answered
Chosen Option : 4

Q.46 The value of $2\sqrt{2}\sin 45^\circ \sin 30^\circ + 2\sqrt{3}\cos 60^\circ \tan 60^\circ - \sin 90^\circ$ is _____.

- Ans
- 1. -1
 - 2. 3
 - 3. 0
 - 4. 1

Question ID : 75189710722
 Option 1 ID : 75189742887
 Option 2 ID : 75189742888
 Option 3 ID : 75189742885
 Option 4 ID : 75189742886
 Status : Answered
 Chosen Option : 2

Q.47 If '+' means 'x', 'x' means '+', '-' means '÷', and '÷' means '-', then what will be the value of the given expression?

$$215 \times 5 + 4 - 18 \times 3$$

- Ans
- 1. 39
 - 2. 95
 - 3. 86
 - 4. 45

Question ID : 7518979792
 Option 1 ID : 75189739166
 Option 2 ID : 75189739165
 Option 3 ID : 75189739167
 Option 4 ID : 75189739168
 Status : Answered
 Chosen Option : 4

Q.48 Which of the following statements is INCORRECT about plaster of Paris?

- Ans
- 1. It is also known as calcium sulphate dihydrate.
 - 2. It is used for setting fractured bones.
 - 3. It is used in making cosmetics and casts for statues.
 - 4. It is used for making surfaces smooth before painting.

Question ID : 75189710373
 Option 1 ID : 75189741490
 Option 2 ID : 75189741492
 Option 3 ID : 75189741489
 Option 4 ID : 75189741491
 Status : Answered
 Chosen Option : 4

Q.49 In India, _____ is observed as Rashtriya Ekta Diwas or National Unity Day every year.

- Ans
- 1. 2 October
 - 2. 15 December
 - 3. 30 January
 - 4. 31 October

Question ID : 7518978521
Option 1 ID : 75189734082
Option 2 ID : 75189734084
Option 3 ID : 75189734083
Option 4 ID : 75189734081
Status : Answered
Chosen Option : 4

Q.50 Which Indian Chess player was in attendance along with other officials to receive the official hosting rights of FIDE 44th World Chess Olympiad 2022 on behalf of India?

- Ans
- 1. Dibyendu Barua
 - 2. Viswanathan Anand
 - 3. Koneru Humpy
 - 4. Abhijit Kunte

Question ID : 7518974130
Option 1 ID : 75189716517
Option 2 ID : 75189716520
Option 3 ID : 75189716518
Option 4 ID : 75189716519
Status : Not Answered
Chosen Option : --

Q.51 Which two languages got the Classical language status in 2008?

- Ans
- 1. Sanskrit and Malayalam
 - 2. Malayalam and Odia
 - 3. Kannada and Telugu
 - 4. Tamil and Sanskrit

Question ID : 75189710436
Option 1 ID : 75189741742
Option 2 ID : 75189741743
Option 3 ID : 75189741744
Option 4 ID : 75189741741
Status : Not Answered
Chosen Option : --

Q.52 Which of the following substances show biological magnification?

- Ans 1. Chemical pesticides
 2. Acidic fumes
 3. Greenhouse gases
 4. Carbon soot deposits

Question ID : 75189710126
Option 1 ID : 75189740504
Option 2 ID : 75189740503
Option 3 ID : 75189740501
Option 4 ID : 75189740502
Status : Answered
Chosen Option : 1

Q.53 Six friends, F, G, H, J, K and L are having dinner sitting around a round table in a restaurant facing the center (but not necessarily in the same order). K is the immediate neighbor of H and J. F is sitting to the immediate right of H. L is to the immediate left of J. Who is sitting to the immediate right of G?

- Ans 1. L
 2. F
 3. J
 4. H

Question ID : 75189710731
Option 1 ID : 75189742922
Option 2 ID : 75189742921
Option 3 ID : 75189742924
Option 4 ID : 75189742923
Status : Answered
Chosen Option : 1

Q.54 Which of the following is the Modern Periodic Law?

- Ans 1. 'Properties of elements are a periodic function of their melting points'.
 2. 'Properties of elements are a periodic function of their atomic mass'.
 3. 'Properties of elements are a periodic function of their atomic number'.
 4. 'Properties of elements are a periodic function of their boiling points'.

Question ID : 7518979686
Option 1 ID : 75189738743
Option 2 ID : 75189738742
Option 3 ID : 75189738741
Option 4 ID : 75189738744
Status : Answered
Chosen Option : 3

Q.55 If '+' means '×', '×' means '+', '-' means '+', and '-' means '+', then what will be the value of the given expression?

$$87 \times 3 - 8 + 5 + 10$$

- Ans**
- 1. 57
 - 2. 19
 - 3. 47
 - 4. 59

Question ID : 7518979793
 Option 1 ID : 75189739172
 Option 2 ID : 75189739170
 Option 3 ID : 75189739171
 Option 4 ID : 75189739169
 Status : Answered
 Chosen Option : 4

Q.56 Which of the following terms will replace the question mark (?) in the given series to make it logically complete?

ZRW21, XPU25, VNS29, TLQ33, ?

- Ans**
- 1. RJO37
 - 2. ORJ37
 - 3. OPJ36
 - 4. JRO37

Question ID : 7518979836
 Option 1 ID : 75189739341
 Option 2 ID : 75189739343
 Option 3 ID : 75189739344
 Option 4 ID : 75189739342
 Status : Answered
 Chosen Option : 1

Q.57 Refer to the following number-symbol series and answer the question that follows.

(Left) 1 3 & > 3 \$ 8 4 ! > 9 3 4 1 @ \$ 3 5 > @ # 2 9 8 6 9 ! 9 (Right)

If all the numbers are dropped from the series, which of the following symbols will be the seventh to the left of the third from the right?

- Ans**
- 1. >
 - 2. \$
 - 3. @
 - 4. &

Question ID : 7518977989
 Option 1 ID : 75189731954
 Option 2 ID : 75189731955
 Option 3 ID : 75189731956
 Option 4 ID : 75189731953
 Status : Marked For Review
 Chosen Option : 1

Q.58 As of August 2022, which Article of the Constitution of India says "No child below the age of fourteen years shall be employed to work in any factory or mine or engaged in any other hazardous employment"?

- Ans**
- 1. Article 32
 - 2. Article 27
 - 3. Article 24
 - 4. Article 19

Question ID : 75189711089
Option 1 ID : 75189744356
Option 2 ID : 75189744355
Option 3 ID : 75189744354
Option 4 ID : 75189744353
Status : Answered
Chosen Option : 3

Q.59 In all Panchayat institutions, not less than _____ of the total number of seats reserved, shall be reserved for women belonging to the Scheduled Castes or, as the case may be, the Scheduled Tribes.

- Ans**
- 1. Three-fourths
 - 2. Two-third
 - 3. Half
 - 4. One-third

Question ID : 75189710503
Option 1 ID : 75189742012
Option 2 ID : 75189742010
Option 3 ID : 75189742011
Option 4 ID : 75189742009
Status : Not Answered
Chosen Option : --

Q.60 Who among the following was the founder of the Arya Samaj?

- Ans**
- 1. Ram Mohan Roy
 - 2. Ishwar Chandra Vidyasagar
 - 3. Dayanand Saraswati
 - 4. Bal Gangadhar Tilak

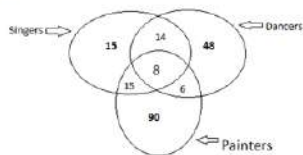
Question ID : 7518977466
Option 1 ID : 75189729863
Option 2 ID : 75189729864
Option 3 ID : 75189729862
Option 4 ID : 75189729861
Status : Answered
Chosen Option : 3

Q.61 Which of the following metals is the most reactive?

- Ans 1. Mg
 2. Fe
 3. Zn
 4. Cu

Question ID : 7518973488
 Option 1 ID : 75189713949
 Option 2 ID : 75189713951
 Option 3 ID : 75189713952
 Option 4 ID : 75189713950
 Status : Answered
 Chosen Option : 2

Q.62 Study the given diagram carefully and answer the question. The numbers in different sections indicate the number of persons.



How many people are Singers as well Dancers but not Painters?

- Ans 1. 22
 2. 8
 3. 15
 4. 14

Question ID : 75189710785
 Option 1 ID : 75189743137
 Option 2 ID : 75189743138
 Option 3 ID : 75189743140
 Option 4 ID : 75189743139
 Status : Answered
 Chosen Option : 4

Q.63 The value of $(625)^{-1/2}$ is _____.

- Ans 1. 2.5
 2. 25
 3. 0.04
 4. 0.25

Question ID : 75189710686
 Option 1 ID : 75189742744
 Option 2 ID : 75189742741
 Option 3 ID : 75189742743
 Option 4 ID : 75189742742
 Status : Answered
 Chosen Option : 3

Q.64 If 13 May 2007 is a Sunday, then what will be the day of the week on 17 May 2013?

- Ans
- 1. Friday
 - 2. Monday
 - 3. Sunday
 - 4. Wednesday

Question ID : 7518979149
Option 1 ID : 75189736593
Option 2 ID : 75189736594
Option 3 ID : 75189736595
Option 4 ID : 75189736596
Status : Marked For Review
Chosen Option : 1

Q.65 If $\frac{196}{0.196} = \frac{19.6}{n}$, then the value of $n =$ _____.

- Ans
- 1. 0.0196
 - 2. 0.00196
 - 3. 1.96
 - 4. 0.196

Question ID : 75189710624
Option 1 ID : 75189742495
Option 2 ID : 75189742494
Option 3 ID : 75189742496
Option 4 ID : 75189742493
Status : Answered
Chosen Option : 1

Q.66 If the interest on a sum of ₹ y at 4% per annum compounded annually for 2 years is ₹612, then the total amount payable at the end of the two-year period will be _____.

- Ans
- 1. ₹8,262
 - 2. ₹7,812
 - 3. ₹8,112
 - 4. ₹8,002

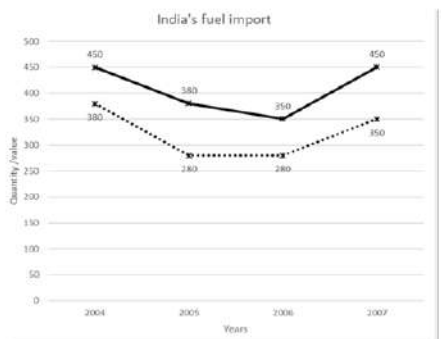
Question ID : 75189710656
Option 1 ID : 75189742623
Option 2 ID : 75189742624
Option 3 ID : 75189742622
Option 4 ID : 75189742621
Status : Answered
Chosen Option : 3

Q.67 Alok starts from Point B and drives 5 km towards the north. He then takes a right turn, drives 10 km, turns right and drives 5 km. He takes a final right turn, drives 3 km and stops at Point X. How far and towards which direction should he drive in order to reach Point B from Point X? (All turns are 90 degree turns only)

- Ans**
- 1. 7 km towards the west
 - 2. 5 km towards the east
 - 3. 6 km towards the west
 - 4. 7 km towards the east

Question ID : 7518979858
 Option 1 ID : 75189739431
 Option 2 ID : 75189739430
 Option 3 ID : 75189739432
 Option 4 ID : 75189739429
 Status : Answered
 Chosen Option : 1

Q.68 The line graph given below shows India's total quantity of fuel imported (in million tonnes) (dotted line) and the total value of that fuel imported (in USD billion) (solid line) for the year 2004-2007. Study the graph and answer the question.



What was the ratio of the quantity of fuel imported to the value of fuel imported in the year 2006?

- Ans**
- 1. 2 : 3
 - 2. 4 : 6
 - 3. 7 : 9
 - 4. 4 : 5

Question ID : 75189710961
 Option 1 ID : 75189743844
 Option 2 ID : 75189743842
 Option 3 ID : 75189743843
 Option 4 ID : 75189743841
 Status : Answered
 Chosen Option : 4

Q.69 A and B can do a piece of work in 12 days and 8 days, respectively. The number of days required to complete the work if both A and B work together is:

- Ans**
- 1. 4.8
 - 2. 3.2
 - 3. 6.4
 - 4. 2.4

Question ID : 7518979962
Option 1 ID : 75189739847
Option 2 ID : 75189739846
Option 3 ID : 75189739848
Option 4 ID : 75189739845
Status : Answered
Chosen Option : 1

Q.70 If the number of turns in a solenoid increases, then:

- Ans**
- 1. magnetic field increases
 - 2. magnetic field decreases
 - 3. magnetic field remains constant
 - 4. magnetic field decreases to zero

Question ID : 7518979580
Option 1 ID : 75189738317
Option 2 ID : 75189738318
Option 3 ID : 75189738319
Option 4 ID : 75189738320
Status : Answered
Chosen Option : 1

Q.71 Conversion of energy in electric motor is:

- Ans**
- 1. Sunlight to electrical energy
 - 2. Electrical energy to heat energy
 - 3. Mechanical energy to electrical energy
 - 4. Electrical energy to mechanical energy

Question ID : 7518979562
Option 1 ID : 75189738245
Option 2 ID : 75189738248
Option 3 ID : 75189738247
Option 4 ID : 75189738246
Status : Answered
Chosen Option : 4

Q.72 If the length of the wire is doubled and cross section area of the wire is halved then the resistivity of the material is:

- Ans**
- 1. doubled
 - 2. halved
 - 3. increased by 4 times
 - 4. unchanged

Question ID : 75189711157

Option 1 ID : 75189744625

Option 2 ID : 75189744626

Option 3 ID : 75189744628

Option 4 ID : 75189744627

Status : Answered

Chosen Option : 3

Q.73 If \times stands for $-$, $+$ stands for $+$, \div stands for \div and $-$ stands for \times , what will come in place of the question mark (?) in the following equation?

$$24 \div 30 - 9 + 15 \times 18 = ?$$

- Ans**
- 1. 32
 - 2. 29
 - 3. 24
 - 4. 42

Question ID : 7518979049

Option 1 ID : 75189736193

Option 2 ID : 75189736194

Option 3 ID : 75189736195

Option 4 ID : 75189736196

Status : Answered

Chosen Option : 3

Q.74 Which of the following numbers will replace the question mark (?) in the given series?

15, 17, 20, 25, 32, ?

- Ans**
- 1. 40
 - 2. 45
 - 3. 43
 - 4. 44

Question ID : 7518978308

Option 1 ID : 75189733232

Option 2 ID : 75189733229

Option 3 ID : 75189733231

Option 4 ID : 75189733230

Status : Answered

Chosen Option : 3

Q.75 If the lengths of the sides of a triangle are $x + 1$, $7 - x$ and $4x - 2$, then the value of x for which the triangle represents an isosceles triangle is _____.

- Ans**
- 1. 1.8
 - 2. 2.4
 - 3. 3
 - 4. 1

Question ID : 75189710694
Option 1 ID : 75189742775
Option 2 ID : 75189742773
Option 3 ID : 75189742776
Option 4 ID : 75189742774
Status : Answered
Chosen Option : 4

Q.76 Which of the following is a Middle Indian dialect that is closely related to Sanskrit, and is one of the major languages of Buddhist scriptures and literature?

- Ans**
- 1. Saraiki
 - 2. Varhadi
 - 3. Pali
 - 4. Paisaci

Question ID : 7518974012
Option 1 ID : 75189716048
Option 2 ID : 75189716045
Option 3 ID : 75189716046
Option 4 ID : 75189716047
Status : Answered
Chosen Option : 3

Q.77 The LCM of two numbers is 1260 and their HCF is 30. If one of the two numbers is 180, find the other number.

- Ans**
- 1. 240
 - 2. 270
 - 3. 200
 - 4. 210

Question ID : 7518979918
Option 1 ID : 75189739671
Option 2 ID : 75189739672
Option 3 ID : 75189739669
Option 4 ID : 75189739670
Status : Answered
Chosen Option : 4

Q.78 Find the volume (in cm^3) of a sphere having a diameter of 8 cm, giving your answer correct to two places of decimal.

Take $\pi = \frac{22}{7}$

- Ans**
- 1. 268.19
 - 2. 248.19
 - 3. 258.19
 - 4. 278.19

Question ID : 75189710021
Option 1 ID : 75189740083
Option 2 ID : 75189740081
Option 3 ID : 75189740082
Option 4 ID : 75189740084
Status : Answered
Chosen Option : 1

Q.79 Which of the following is/are an abiotic component of an ecosystem?

- Ans**
- 1. Insects
 - 2. Microorganisms
 - 3. Soil
 - 4. Fungi

Question ID : 7518977855
Option 1 ID : 75189731418
Option 2 ID : 75189731419
Option 3 ID : 75189731420
Option 4 ID : 75189731417
Status : Answered
Chosen Option : 3

Q.80 An electric transformer works on the principle of:

- Ans**
- 1. photoelectric effect
 - 2. Ohm's law
 - 3. Joule's heating effect
 - 4. electromagnetic induction

Question ID : 75189711177
Option 1 ID : 75189744706
Option 2 ID : 75189744708
Option 3 ID : 75189744707
Option 4 ID : 75189744705
Status : Answered
Chosen Option : 4

Q.81 Which of the following numbers will replace the question mark (?) in the given series?

14, 18, 26, 38, 54, ?

- Ans
- 1. 70
 - 2. 74
 - 3. 72
 - 4. 78

Question ID : 75189710909
Option 1 ID : 75189743634
Option 2 ID : 75189743635
Option 3 ID : 75189743636
Option 4 ID : 75189743633
Status : Answered
Chosen Option : 2

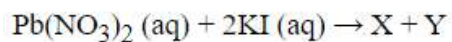
Q.82

In which of the following cities is the Indian Institute of Tropical Meteorology located?

- Ans
- 1. Pune
 - 2. Mumbai
 - 3. Delhi
 - 4. Kochi

Question ID : 7518973893
Option 1 ID : 75189715570
Option 2 ID : 75189715571
Option 3 ID : 75189715569
Option 4 ID : 75189715572
Status : Not Answered
Chosen Option : --

Q.83 In the given double displacement reaction, identify the products X and Y.



- Ans
- 1. $\text{PbI}_2 + \text{HNO}_3$
 - 2. $\text{PbI}_2 (\text{s}) + \text{KCl} (\text{s})$
 - 3. No reaction occurs
 - 4. $\text{PbI}_2 (\text{s}) + 2\text{KNO}_3 (\text{aq})$

Question ID : 7518973592
Option 1 ID : 75189714367
Option 2 ID : 75189714366
Option 3 ID : 75189714368
Option 4 ID : 75189714365
Status : Answered

Chosen Option : 4

Q.84 What happens when a pencil is immersed in water?

- Ans
- 1. Colour of pencil changes
 - 2. Pencil appears bright
 - 3. Pencil appears bent
 - 4. Pencil looks curved

Question ID : 7518979537
Option 1 ID : 75189738145
Option 2 ID : 75189738146
Option 3 ID : 75189738147
Option 4 ID : 75189738148
Status : Answered

Chosen Option : 3

Q.85

The value of $\sqrt{190 + \sqrt{11 + \sqrt{617 + 8}}}$ is _____.

- Ans
- 1. 14
 - 2. 12
 - 3. 13
 - 4. 16

Question ID : 75189710623
Option 1 ID : 75189742492
Option 2 ID : 75189742489
Option 3 ID : 75189742491
Option 4 ID : 75189742490
Status : Answered

Chosen Option : 1

Q.86 In case of N_2 , the molecule has _____.

- Ans
- 1. an ionic bond between the two nitrogen atoms
 - 2. a double bond between the two nitrogen atoms
 - 3. a single bond between the two nitrogen atoms
 - 4. a triple bond between the two nitrogen atoms

Question ID : 7518979588

Option 1 ID : 75189738352

Option 2 ID : 75189738351

Option 3 ID : 75189738350

Option 4 ID : 75189738349

Status : Answered

Chosen Option : 2

Q.87 Nitu Ghangas won Gold in which sport at the Commonwealth Games 2022?

- Ans
- 1. Boxing
 - 2. Athletics
 - 3. Wrestling
 - 4. Judo

Question ID : 7518976517

Option 1 ID : 75189726067

Option 2 ID : 75189726066

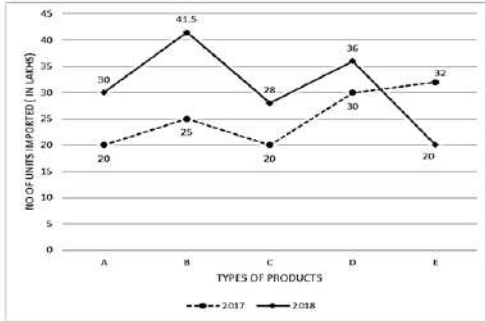
Option 3 ID : 75189726065

Option 4 ID : 75189726068

Status : Not Answered

Chosen Option : --

Q.88 The line graph given below shows the total number of different products A, B, C, D and E (in lakh) are imported by a company in 2017 and 2018. Study the graph carefully and answer the following question.



What was the ratio of the number of type C products imported in the year 2017 to that in 2018?

- Ans**
- 1. 4 : 6
 - 2. 2 : 3
 - 3. 7 : 5
 - 4. 5 : 7

Question ID : 75189710959
 Option 1 ID : 75189743834
 Option 2 ID : 75189743836
 Option 3 ID : 75189743835
 Option 4 ID : 75189743833
 Status : Answered
 Chosen Option : 4

Q.89 The position of how many letters will remain unchanged if each of the letters in the word HMADIST is arranged in alphabetical order?

- Ans**
- 1. Two
 - 2. Three
 - 3. None
 - 4. One

Question ID : 7518979842
 Option 1 ID : 75189739367
 Option 2 ID : 75189739368
 Option 3 ID : 75189739365
 Option 4 ID : 75189739366
 Status : Answered
 Chosen Option : 1

Q.90 The roots of $6 - 4x^2 + 5x = 0$ are:

- Ans
- 1. $-2, -\frac{3}{4}$
 - 2. $-2, \frac{3}{4}$
 - 3. $2, \frac{3}{4}$
 - 4. $2, -\frac{3}{4}$

Question ID : 7518978766
Option 1 ID : 75189735061
Option 2 ID : 75189735064
Option 3 ID : 75189735062
Option 4 ID : 75189735063
Status : Answered
Chosen Option : 4

Q.91 A train travels at an average speed of 30 miles per hour for $2\frac{1}{2}$ hours and then travels at a speed of 60 miles per hour for $1\frac{1}{2}$ hours. The total distance (in miles) covered by the train is _____.

- Ans
- 1. 90
 - 2. 180
 - 3. 165
 - 4. 135

Question ID : 75189710669
Option 1 ID : 75189742673
Option 2 ID : 75189742674
Option 3 ID : 75189742675
Option 4 ID : 75189742676
Status : Answered
Chosen Option : 3

Q.92 ABCD is a quadrilateral in which P, Q, R and S are mid-points of the sides AB, BC, CD and DA, respectively. The quadrilateral PQRS is necessarily a:

- Ans
- 1. rectangle
 - 2. rhombus
 - 3. Trapezium, but not a parallelogram
 - 4. parallelogram

Question ID : 75189710043
Option 1 ID : 75189740169
Option 2 ID : 75189740171
Option 3 ID : 75189740170
Option 4 ID : 75189740172
Status : Answered
Chosen Option : 2

Q.93 Who was the mastermind behind the Arabari Project of West Bengal, which started in 1972?

- Ans
- 1. Sunder lal Bahuguna
 - 2. Dr. AK Banerjee
 - 3. Dr. Sunita Narain
 - 4. Dr. Rajendra Singh

Question ID : 7518974697
Option 1 ID : 75189718785
Option 2 ID : 75189718787
Option 3 ID : 75189718788
Option 4 ID : 75189718786
Status : Not Answered
Chosen Option : --

Q.94 Which of the following reactions is an example of double displacement?

- Ans
- 1. $\text{Fe(s)} + \text{CuSO}_4(\text{aq}) \rightarrow \text{FeSO}_4(\text{aq}) + \text{Cu(s)}$
 - 2. $\text{Zn(s)} + \text{CuSO}_4(\text{aq}) \rightarrow \text{ZnSO}_4(\text{aq}) + \text{Cu(s)}$
 - 3. $\text{Na}_2\text{SO}_4(\text{aq}) + \text{BaCl}_2(\text{aq}) \rightarrow \text{BaSO}_4(\text{s}) + 2\text{NaCl}(\text{aq})$
 - 4. $\text{Pb(s)} + \text{CuCl}_2(\text{aq}) \rightarrow \text{PbCl}_2(\text{aq}) + \text{Cu(s)}$

Question ID : 75189710344
Option 1 ID : 75189741376
Option 2 ID : 75189741374
Option 3 ID : 75189741375
Option 4 ID : 75189741373
Status : Answered
Chosen Option : 3

Q.95 If a toaster is connected to 440 V AC instead of 220 V AC, then the heat produced per second will be _____ of the initial amount.

- Ans
- 1. half
 - 2. one-fourth
 - 3. four times
 - 4. twice

Question ID : 7518979575
Option 1 ID : 75189738298
Option 2 ID : 75189738300
Option 3 ID : 75189738299
Option 4 ID : 75189738297
Status : Answered
Chosen Option : 4

Q.96 In a code language, 'mangoes are here' is written as 'tod din mul', 'no fruit is like mangoes' as 'mado si fla pri tod' and 'I am here' as 'lopi din nro'. What code words are written for 'mangoes' and 'here' respectively?

- Ans**
- 1. mul, tod
 - 2. din, mul
 - 3. tod, mul
 - 4. tod, din

Question ID : 75189710875
Option 1 ID : 75189743500
Option 2 ID : 75189743499
Option 3 ID : 75189743497
Option 4 ID : 75189743498
Status : Answered
Chosen Option : 4

Q.97 A dishonest vendor claims that he is selling goods at their cost price. But he is weighing 850 grams for 1000 grams. What is his profit percentage (rounded off to 2 decimal places)?

- Ans**
- 1. 14.65%
 - 2. 15.65%
 - 3. 17.65%
 - 4. 16.65%

Question ID : 7518979949
Option 1 ID : 75189739793
Option 2 ID : 75189739794
Option 3 ID : 75189739796
Option 4 ID : 75189739795
Status : Answered
Chosen Option : 3

Q.98 A shopkeeper offered a machine at a discount of 10% after setting its marked price at 10% above the cost price. His loss percentage is _____.

- Ans**
- 1. 1%
 - 2. 10%
 - 3. 7.8%
 - 4. 9.8%

Question ID : 75189710666
Option 1 ID : 75189742664
Option 2 ID : 75189742661
Option 3 ID : 75189742663
Option 4 ID : 75189742662
Status : Answered
Chosen Option : 1

Q.99 Select the option that is related to the fifth letter-cluster in the same way as the second letter-cluster is related to the first letter-cluster and the fourth letter-cluster is related to the third letter-cluster.

TXB : QWE :: REA : ODD :: DUW : ?

- Ans**
- 1. AQX
 - 2. ATX
 - 3. BTZ
 - 4. ATZ

Question ID : 75189710902
Option 1 ID : 75189743607
Option 2 ID : 75189743608
Option 3 ID : 75189743605
Option 4 ID : 75189743606
Status : Answered
Chosen Option : 4

Q.100 Which of the following statements is INCORRECT?

- Ans**
- 1. Carbon dioxide is more soluble in water than oxygen.
 - 2. The pyruvate is converted into lactic acid which is a three-carbon molecule.
 - 3. The respiratory pigment is present in the white blood corpuscles.
 - 4. The walls of the alveoli contain an extensive network of blood-vessels.

Question ID : 75189710194
Option 1 ID : 75189740773
Option 2 ID : 75189740775
Option 3 ID : 75189740774
Option 4 ID : 75189740776
Status : Answered
Chosen Option : 3