



रेल भर्ती बोर्ड / RAILWAY RECRUITMENT BOARDS  
सी ई एन आर आर सी - ०१/२०१९ - CEN RRC - 01/2019



Roll Number	
Candidate Name	
Test Center Name	Arya Institute of Engineering and Technology
Test Date	14/09/2022
Test Time	5:00 PM - 6:30 PM
Subject	Level 1

\* Note

Correct Answer will carry 1 mark per Question.  
Incorrect Answer will carry 1/3 Negative mark per Question.

- Options shown in green color with a tick icon are correct.
- Chosen option on the right of the question indicates the option selected by the candidate.

Section : Level 1

Q.1 Where was the final match of Indian Premier League (IPL) 2022 played?

- Ans
- 1. Green Park Stadium, Kanpur
  - 2. M Chinnaswamy Stadium, Bengaluru
  - 3. Narendra Modi Stadium, Ahmedabad
  - 4. Wankhede Stadium, Mumbai

Question ID : 7518976469  
Option 1 ID : 75189725873  
Option 2 ID : 75189725876  
Option 3 ID : 75189725875  
Option 4 ID : 75189725874  
Status : Answered  
Chosen Option : 3

Q.2 All 24 students of a class are standing in a straight row facing north. Neha is 8<sup>th</sup> from the right end, while Abhishek is 20<sup>th</sup> from the left end. How many students are standing between Neha and Abhishek?

- Ans
- 1. 4
  - 2. 1
  - 3. 3
  - 4. 2

Question ID : 7518979813  
Option 1 ID : 75189739250  
Option 2 ID : 75189739252  
Option 3 ID : 75189739251  
Option 4 ID : 75189739249  
Status : Answered  
Chosen Option : 4

# Test Prime

ALL EXAMS,  
ONE SUBSCRIPTION



**40,000+**  
Mock Tests



Personalised  
Report Card



Unlimited  
Re-Attempt



**500+**  
Exam Covered



Previous Year  
Papers



**500%**  
Refund



**DOWNLOAD NOW**

**Q.3** Which of the following options is the closest approximate value which will come in place of question mark(?) in the following equation?

$$5.18 \times 4 + 2.06 \times 5 - 10 \div 2 + 1 = ?$$

- Ans**
- 1. 30
  - 2. 26
  - 3. 15
  - 4. 40

Question ID : 7518977747  
Option 1 ID : 75189730985  
Option 2 ID : 75189730986  
Option 3 ID : 75189730988  
Option 4 ID : 75189730987  
Status : Answered  
Chosen Option : 2

**Q.4** Select the option that is related to the fifth number in the same way as the second number is related to the first number and the fourth number is related to the third number.

$$72 : 90 :: 48 : 60 :: 24 : ?$$

- Ans**
- 1. 32
  - 2. 24
  - 3. 40
  - 4. 30

Question ID : 75189710925  
Option 1 ID : 75189743700  
Option 2 ID : 75189743698  
Option 3 ID : 75189743697  
Option 4 ID : 75189743699  
Status : Answered  
Chosen Option : 4

Q.5

The historic place 'Chauri Chaura' is situated in which state?

Ans

- 1. Himachal Pradesh
- 2. Andhra Pradesh
- 3. Kerala
- 4. Uttar Pradesh

Question ID : 7518973801

Option 1 ID : 75189715201

Option 2 ID : 75189715202

Option 3 ID : 75189715204

Option 4 ID : 75189715203

Status : **Marked For Review**

Chosen Option : 1

Q.6 Which of the following industries has developed the most on the banks of the Hooghly river?

Ans

- 1. Jute Industry
- 2. Dairy Industry
- 3. Sugar Industry
- 4. Iron-ore Industry

Question ID : 7518977516

Option 1 ID : 75189730064

Option 2 ID : 75189730062

Option 3 ID : 75189730061

Option 4 ID : 75189730063

Status : **Answered**

Chosen Option : 1

Q.7 The average of  $3^2$ ,  $4^2$ ,  $5^2$ ,  $6^2$  and  $7^2$  is \_\_\_\_\_.

- Ans
- 1. 24
  - 2. 27
  - 3. 28
  - 4. 25

Question ID : 75189710679  
Option 1 ID : 75189742716  
Option 2 ID : 75189742714  
Option 3 ID : 75189742713  
Option 4 ID : 75189742715  
Status : Answered  
Chosen Option : 2

Q.8 Simplify  $34 - 66 \div 6 + 18 \times 8$ .

- Ans
- 1. 138
  - 2. 167
  - 3. -600
  - 4. 104

Question ID : 7518979092  
Option 1 ID : 75189736367  
Option 2 ID : 75189736366  
Option 3 ID : 75189736368  
Option 4 ID : 75189736365  
Status : Answered  
Chosen Option : 2

Q.9 On increasing the potential difference applied across a conductor at constant temperature, \_\_\_\_\_

- Ans
- 1. current decreases
  - 2. current remains constant
  - 3. current becomes zero
  - 4. current increases

Question ID : 7518979541  
Option 1 ID : 75189738161  
Option 2 ID : 75189738163  
Option 3 ID : 75189738164  
Option 4 ID : 75189738162  
Status : Answered  
Chosen Option : 4

Q.10 Where is the ozone hole located?

- Ans
- 1. Over the North and South Poles
  - 2. Over industrialised Europe
  - 3. Over Antarctica
  - 4. Over the Equator

Question ID : 75189710127  
Option 1 ID : 75189740506  
Option 2 ID : 75189740507  
Option 3 ID : 75189740508  
Option 4 ID : 75189740505  
Status : Answered  
Chosen Option : 4

Q.11 The ratio of the lengths of two corresponding sides of two similar triangles is 3 : 1. The ratio of their corresponding angles is:

- Ans
- 1. 1 : 3
  - 2. 2 : 1
  - 3. 3 : 1
  - 4. 1 : 1

Question ID : 75189710041  
Option 1 ID : 75189740164  
Option 2 ID : 75189740162  
Option 3 ID : 75189740163  
Option 4 ID : 75189740161  
Status : Answered  
Chosen Option : 3

Q.12 Which of the following statements is correct with respect to Newlands law of octaves?

- Ans
- 1. Newlands' law of octaves worked well with lighter elements only.
  - 2. Newlands' law of octaves worked well with heavier elements only.
  - 3. In Newlands' octaves, the properties of fluorine and sodium were found to be the same.
  - 4. John Newlands, an English scientist arranged the then known elements in the order of increasing atomic sizes.

Question ID : 75189710385  
Option 1 ID : 75189741537  
Option 2 ID : 75189741539  
Option 3 ID : 75189741540  
Option 4 ID : 75189741538  
Status : Answered  
Chosen Option : 2

**Q.13** A group of numbers/symbols is coded using letters as per the table given below and the conditions which follow. The correct combination of codes following the conditions is your answer.

Number/ symbol	4	%	5	8	@	\$	5	4	^	+	#	3	7	9
Code Letter	G	O	H	P	T	M	A	B	L	N	F	S	Q	R

Conditions:

- (i) If the first element is a symbol and the last element is a number, the codes for these two (the first and the last elements) are to be interchanged.
- (ii) If the first element is an odd number and the last element is an even number, the first and last elements are to be coded as ©.
- (iii) If both the second and third elements are perfect squares, the third element is to be coded as the code for the second element.

What will be the code for 5 @ S ^ 8 ?

- Ans**
- 1. HTMLP
  - 2. ©TML©
  - 3. ©TMLP
  - 4. HTML©

Question ID : 75189711056  
 Option 1 ID : 75189744221  
 Option 2 ID : 75189744224  
 Option 3 ID : 75189744223  
 Option 4 ID : 75189744222  
 Status : Answered  
 Chosen Option : 2

**Q.14** Two trains are moving in opposite directions at speeds of 80 km/h and 120 km/h. The length of one train is 300 m. The time taken by them to cross each other is 12 seconds. The length (in m) of the other train, correct to 2 decimal places, is:

- Ans**
- 1. 366.67
  - 2. 388.88
  - 3. 377.77
  - 4. 333.33



Question ID : 7518979960  
 Option 1 ID : 75189739838  
 Option 2 ID : 75189739840  
 Option 3 ID : 75189739839  
 Option 4 ID : 75189739837  
 Status : Answered  
 Chosen Option : 1

**Q.15** Parenchyma tissue is the most common simple permanent tissue in plants. Why is it known as Chlorenchyma and Aerenchyma in some plants?

**Ans**  1.

Chlorenchyma — Has air spaces (aquatic plants) and helps them to float

Aerenchyma — provides mechanical support

2.

Chlorenchyma — Has chlorophyll for photosynthesis (leaves)

Aerenchyma — Has air spaces (aquatic plants) and helps them to float

3.

Chlorenchyma — supports the plant

Aerenchyma — Has chlorophyll for photosynthesis (leaves)

4.

Chlorenchyma — Has air spaces (aquatic plants) and helps them to float

Aerenchyma — has chlorophyll for photosynthesis

Question ID : 7518974514

Option 1 ID : 75189718056

Option 2 ID : 75189718053

Option 3 ID : 75189718054

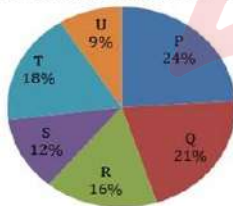
Option 4 ID : 75189718055

Status : Answered

Chosen Option : 4

**Q.16** The given pie chart shows the number of students in six different Houses- P, Q, R, S, T and U of VV International School. Study the chart and answer the question.

Total number of students = 2400



Find the ratio of students in House S to students in House T.

**Ans**  1. 1 : 2

2. 4 : 7

3. 2 : 3

4. 3 : 4

Question ID : 75189710966

Option 1 ID : 75189743861

Option 2 ID : 75189743864

Option 3 ID : 75189743863

Option 4 ID : 75189743862

Status : Answered

Chosen Option : 3



Q.17 In preparation of NaOH by electrolytic method, which solution is used?

- Ans
- 1. Lime water
  - 2. Chlorine water
  - 3. Bromine water
  - 4. Brine

Question ID : 7518979645  
Option 1 ID : 75189738577  
Option 2 ID : 75189738580  
Option 3 ID : 75189738579  
Option 4 ID : 75189738578  
Status : Answered  
Chosen Option : 3

Q.18 Raghav's monthly salary is ₹18,000. Raghav took a loan of ₹30,000 on simple interest for 3 years at the rate of 5% per annum. The amount that he will be paying as simple interest in 3 years is what percentage of his monthly salary?

- Ans
- 1. 35%
  - 2. 20%
  - 3. 30%
  - 4. 25%

Question ID : 7518979102  
Option 1 ID : 75189736408  
Option 2 ID : 75189736406  
Option 3 ID : 75189736407  
Option 4 ID : 75189736405  
Status : Answered  
Chosen Option : 4

Q.19 A rainbow is observed due to refraction of the sunlight through rain drops. This implies that:

- Ans
- 1. sunlight is monochromatic
  - 2. sunlight is polychromatic
  - 3. refractive index of rain drop is 1
  - 4. rain drops are not spherical in shape

Question ID : 75189711153  
Option 1 ID : 75189744609  
Option 2 ID : 75189744610  
Option 3 ID : 75189744611  
Option 4 ID : 75189744612  
Status : Answered  
Chosen Option : 3

Q.20 Which of the following numbers will replace the question mark (?) in the given series?

87, 76, 67, 60, 55, ?

- Ans
- 1. 51
  - 2. 50
  - 3. 53
  - 4. 52

Question ID : 75189710923  
Option 1 ID : 75189743690  
Option 2 ID : 75189743689  
Option 3 ID : 75189743692  
Option 4 ID : 75189743691  
Status : Answered  
Chosen Option : 4

Q.21 In an isosceles triangle, the vertex angle measures  $80^\circ$ . What is the measure of each of the base angles?

- Ans
- 1.  $50^\circ$  and  $50^\circ$
  - 2.  $60^\circ$  and  $40^\circ$
  - 3.  $60^\circ$  and  $50^\circ$
  - 4.  $60^\circ$  and  $60^\circ$

Question ID : 75189710036  
Option 1 ID : 75189740141  
Option 2 ID : 75189740142  
Option 3 ID : 75189740144  
Option 4 ID : 75189740143  
Status : Answered  
Chosen Option : 1

Q.22 A certain number of persons are standing in a straight row facing North. X is standing to the immediate left of W but immediate right of R. Z is standing to the immediate left of R. There is only one person to the left of P. Q is standing to the immediate left of Y. The person standing at the extreme right end is the only person to the right of Y. Only four persons are standing between P and Q. If no other person is standing in the row, what is the total number of persons standing?

- Ans
- 1. Ten
  - 2. Eight
  - 3. Seven
  - 4. Nine

Question ID : 75189710770  
Option 1 ID : 75189743080  
Option 2 ID : 75189743078  
Option 3 ID : 75189743077  
Option 4 ID : 75189743079  
Status : Answered  
Chosen Option : 2

Q.23 Who among the following Indian cueists won his eighth title at the 19th Asian 100 UP Billiards Championship 2022?

- Ans
- 1. Alok Kumar
  - 2. Wilson Jones
  - 3. Pankaj Advani
  - 4. Dhruv Sitwala

Question ID : 7518978824  
Option 1 ID : 75189735296  
Option 2 ID : 75189735295  
Option 3 ID : 75189735294  
Option 4 ID : 75189735293  
Status : Answered  
Chosen Option : 1

Q.24 In which of the following states are the Palitana temples, a Jain pilgrimage site, located?

- Ans
- 1. Karnataka
  - 2. Rajasthan
  - 3. Jharkhand
  - 4. Gujarat

Question ID : 7518977492  
Option 1 ID : 75189729968  
Option 2 ID : 75189729967  
Option 3 ID : 75189729965  
Option 4 ID : 75189729966  
Status : Answered  
Chosen Option : 1

Q.25 An electric generator is a device which converts:

- Ans
- 1. mechanical energy into electrical energy
  - 2. electrical energy into mechanical energy
  - 3. light energy into mechanical energy
  - 4. mechanical energy into light energy

Question ID : 75189711176  
Option 1 ID : 75189744703  
Option 2 ID : 75189744704  
Option 3 ID : 75189744702  
Option 4 ID : 75189744701  
Status : Answered  
Chosen Option : 1

Q.26 Evaluate  $999^3$ .

- Ans
- ✓ 1. 997002999
  - ✗ 2. 997003999
  - ✗ 3. 997004999
  - ✗ 4. 997005999

Question ID : 7518979983  
 Option 1 ID : 75189739929  
 Option 2 ID : 75189739930  
 Option 3 ID : 75189739931  
 Option 4 ID : 75189739932  
 Status : Answered  
 Chosen Option : 1

Q.27 A cylindrical rod has an outer curved surface area of  $2800 \text{ cm}^2$ . If the length of the rod is 100 cm, then the outer radius (in cm) of the rod, correct to two places of decimal, is:

Take  $\pi = \frac{22}{7}$

- Ans
- ✗ 1. 2.45
  - ✗ 2. 5.45
  - ✗ 3. 3.45
  - ✓ 4. 4.45

Question ID : 75189710028  
 Option 1 ID : 75189740109  
 Option 2 ID : 75189740112  
 Option 3 ID : 75189740110  
 Option 4 ID : 75189740111  
 Status : Answered  
 Chosen Option : 4

Q.28 Which of the following terms will replace the question mark (?) in the given series to make it logically complete?

BKS36, GPX48, LUC60, QZH72, ?

- Ans
- ✗ 1. VEM88
  - ✗ 2. MVE84
  - ✗ 3. MVE88
  - ✓ 4. VEM84

Question ID : 7518979145  
 Option 1 ID : 75189736579  
 Option 2 ID : 75189736580  
 Option 3 ID : 75189736578  
 Option 4 ID : 75189736577  
 Status : Answered  
 Chosen Option : 4

Q.29 Which of the following is an INCORRECT relation between V, I and R?

- Ans
- ✓ 1.  $V = \frac{R}{I}$
  - ✗ 2.  $I = \frac{V}{R}$
  - ✗ 3.  $R = \frac{V}{I}$
  - ✗ 4.  $V = IR$

Question ID : 7518979543  
 Option 1 ID : 75189738170  
 Option 2 ID : 75189738172  
 Option 3 ID : 75189738169  
 Option 4 ID : 75189738171  
 Status : Answered  
 Chosen Option : 1

Q.30 Study the given number series and answer the question that follows.

(Left) 9 6 7 6 8 2 5 7 3 2 5 8 6 2 7 5 4 9 2 4 7 3 8 5 (Right)

How many such even numbers are there each of which is immediately preceded by an odd number and also immediately followed by an odd number?

- Ans
- ✓ 1. 4
  - ✗ 2. 6
  - ✗ 3. 2
  - ✗ 4. 8

Question ID : 75189711036  
 Option 1 ID : 75189744141  
 Option 2 ID : 75189744143  
 Option 3 ID : 75189744144  
 Option 4 ID : 75189744142  
 Status : Answered  
 Chosen Option : 1

Q.31 Select the option that is related to the fifth number in the same way as the second number is related to the first number and the fourth number is related to the third number.

8 : 32 :: 18 : 162 :: 16 : ?

- Ans
- ✗ 1. 130
  - ✗ 2. 120
  - ✓ 3. 128
  - ✗ 4. 118

Question ID : 75189710929  
 Option 1 ID : 75189743714  
 Option 2 ID : 75189743716  
 Option 3 ID : 75189743715  
 Option 4 ID : 75189743713  
 Status : Answered  
 Chosen Option : 3

**Q.32** Amit starts from Point Y and drives 8 km towards the north. He then takes a right turn, drives 12 km, turns right and drives 11 km. He then takes a right turn and drives 15 km. He takes a final right turn, drives 3 km and stops at Point Z. How far and towards which direction should he drive in order to reach Point Y from Point Z? (All turns are 90 degree turns only)

- Ans**
- 1. 3 km towards the north
  - 2. 2 km towards the west
  - 3. 3 km towards the east
  - 4. 2 km towards the east

Question ID : 7518979863  
Option 1 ID : 75189739449  
Option 2 ID : 75189739452  
Option 3 ID : 75189739451  
Option 4 ID : 75189739450  
Status : Answered  
Chosen Option : 3

**Q.33** In which of following states of India is the cultural festival 'LOSAR' celebrated?

- Ans**
- 1. Arunachal Pradesh
  - 2. Nagaland
  - 3. Goa
  - 4. Karnataka

Question ID : 7518979376  
Option 1 ID : 75189737502  
Option 2 ID : 75189737501  
Option 3 ID : 75189737503  
Option 4 ID : 75189737504  
Status : Answered  
Chosen Option : 1

**Q.34** In a balanced chemical equation, the reactant is always written \_\_\_\_\_ the arrow.

- Ans**
- 1. above
  - 2. on the left-hand side of
  - 3. below
  - 4. on the right-hand side of

Question ID : 7518979607  
Option 1 ID : 75189738425  
Option 2 ID : 75189738426  
Option 3 ID : 75189738428  
Option 4 ID : 75189738427  
Status : Answered  
Chosen Option : 1

**Q.35** Read the given statements and conclusions carefully and decide which of the given conclusions logically follows the statements.

**Statements:**

1.  $D \geq S$
2.  $X < W$
3.  $S = J$
4.  $W > Y$
5.  $X > D$
6.  $J \geq E$

**Conclusions:**

- I.  $D < Y$
- II.  $D = E$
- III.  $E = S$
- IV.  $W > J$

- Ans**
- 1. Only conclusion III follows
  - 2. Only conclusion IV follows
  - 3. Only conclusion I follows
  - 4. Only conclusion II follows

Question ID : 7518977942  
Option 1 ID : 75189731768  
Option 2 ID : 75189731767  
Option 3 ID : 75189731765  
Option 4 ID : 75189731766

Status : Answered

Chosen Option : 4

**Q.36** Electromagnetic induction is the phenomenon wherein:

- Ans**
- 1. a moving coil carrying current induces force on the magnet
  - 2. a moving magnet induces an EMF in the closed loop of a conductor
  - 3. a moving magnet exerts force on the closed loop of a conductor
  - 4. a moving closed loop of a conductor induces an EMF in the closed loop of another conductor

Question ID : 75189711175  
Option 1 ID : 75189744700  
Option 2 ID : 75189744697  
Option 3 ID : 75189744699  
Option 4 ID : 75189744698

Status : Answered

Chosen Option : 1

**Q.37** A boy covers 450 m in 2 minutes 30 seconds. How many kilometres will he cover in an hour if he travels at the same speed mentioned above?

- Ans**
- 1. 12.8
  - 2. 9.6
  - 3. 10.8
  - 4. 13.5

Question ID : 75189710667  
Option 1 ID : 75189742667  
Option 2 ID : 75189742668  
Option 3 ID : 75189742666  
Option 4 ID : 75189742665  
Status : Answered  
Chosen Option : 3

**Q.38** Each vowel in the word THUNDER is changed to the letter following it in the English alphabetical order and each consonant is changed to the letter preceding it in the English alphabetical order. Which of the following letters will appear in the middle of the group of letters thus formed?

- Ans**
- 1. M
  - 2. V
  - 3. N
  - 4. O

Question ID : 75189710839  
Option 1 ID : 75189743354  
Option 2 ID : 75189743355  
Option 3 ID : 75189743356  
Option 4 ID : 75189743353  
Status : Answered  
Chosen Option : 1

**Q.39** From which of the following countries India has purchased S-400 Missile System?

- Ans**
- 1. America
  - 2. Canada
  - 3. Israel
  - 4. Russia

Question ID : 75189710519  
Option 1 ID : 75189742075  
Option 2 ID : 75189742076  
Option 3 ID : 75189742074  
Option 4 ID : 75189742073  
Status : Answered  
Chosen Option : 4



Q.40 Factorise  $49a^2 + 70ab + 25b^2$ .

- Ans
- 1.  $(5a - 7b)^2$
  - 2.  $(7a + 5b)^2$
  - 3.  $(5a + 7b)^2$
  - 4.  $(7a - 5b)^2$

Question ID : 7518979978  
Option 1 ID : 75189739912  
Option 2 ID : 75189739909  
Option 3 ID : 75189739910  
Option 4 ID : 75189739911  
Status : Answered  
Chosen Option : 2

Q.41 The marks scored by 10 students are given below.

17, 13, 18, 11, 15, 13, 19, 18, 13, 17

The mode of the data is:

- Ans
- 1. 13
  - 2. 17
  - 3. 11
  - 4. 19

Question ID : 7518979972  
Option 1 ID : 75189739885  
Option 2 ID : 75189739886  
Option 3 ID : 75189739887  
Option 4 ID : 75189739888  
Status : Answered  
Chosen Option : 1

Q.42 Which of the following features of the Constitution of India is borrowed from the Constitution of the United Kingdom?

- Ans
- 1. Single citizenship
  - 2. Fundamental duties
  - 3. Concurrent list
  - 4. Directive principles of state policy

Question ID : 7518979435  
Option 1 ID : 75189737739  
Option 2 ID : 75189737740  
Option 3 ID : 75189737737  
Option 4 ID : 75189737738  
Status : Answered  
Chosen Option : 2

Q.43 The volume (in  $m^3$ ) of a cube, each of whose edges is 9 m, is:

- Ans
- 1. 648
  - 2. 527
  - 3. 486
  - 4. 729

Question ID : 75189710029  
Option 1 ID : 75189740115  
Option 2 ID : 75189740114  
Option 3 ID : 75189740113  
Option 4 ID : 75189740116  
Status : Answered  
Chosen Option : 4

Q.44 As of August 2022, what is the prescribed maximum age of the subscriber under Atal Pension Yojana (APY) when the minimum prescribed age is 18 years?

- Ans
- 1. 60 years
  - 2. 55 years
  - 3. 35 years
  - 4. 40 years

Question ID : 75189711111  
Option 1 ID : 75189744444  
Option 2 ID : 75189744443  
Option 3 ID : 75189744441  
Option 4 ID : 75189744442  
Status : Answered  
Chosen Option : 2

Q.45 The roots of the equation  $\sqrt{3}x^2 - 8x + 5\sqrt{3} = 0$  are:

- Ans
- 1.  $\sqrt{3}, \frac{-5}{\sqrt{3}}$
  - 2.  $-\sqrt{3}, \frac{-5}{\sqrt{3}}$
  - 3.  $-\sqrt{3}, \frac{5}{\sqrt{3}}$
  - 4.  $\sqrt{3}, \frac{5}{\sqrt{3}}$

Question ID : 7518978764  
Option 1 ID : 75189735054  
Option 2 ID : 75189735055  
Option 3 ID : 75189735053  
Option 4 ID : 75189735056  
Status : Answered  
Chosen Option : 4

Q.46 Garhwal was the birthplace of the \_\_\_\_\_.

- Ans
- ✓ 1. Chipko Movement
  - ✗ 2. Bishnoi Movement
  - ✗ 3. Jungle Bachao Andolan
  - ✗ 4. Narmada Bachao Andolan

Question ID : 7518974497

Option 1 ID : 75189717988

Option 2 ID : 75189717985

Option 3 ID : 75189717987

Option 4 ID : 75189717986

Status : Answered

Chosen Option : 3

Q.47 Three statements are given, followed by four conclusions numbered I, II, III and IV. Assuming the statements to be true, even if they seem to be at variance with commonly known facts, decide which of the conclusions logically follow(s) from the statements.

Statements:

1. All pictures are drawings.
2. No drawing is caricature.
3. All figures are caricatures.

Conclusions:

- I. Some figures are pictures.
- II. No caricature is picture.
- III. No picture is figure.
- IV. Some caricatures are pictures.

- Ans
- ✗ 1. Only conclusion IV follows
  - ✗ 2. Only conclusions I and IV follow
  - ✗ 3. Only conclusions I follows
  - ✓ 4. Only conclusions II and III follow

Question ID : 75189710773

Option 1 ID : 75189743092

Option 2 ID : 75189743091

Option 3 ID : 75189743089

Option 4 ID : 75189743090

Status : Answered

Chosen Option : 4

Q.48 Select the number from among the given options that can replace the question mark (?) in the following series.

3, 4, 4, 6, 12, 15, ?, 49, 196, 201

- Ans
- 1. 37
  - 2. 45
  - 3. 27
  - 4. 32

Question ID : 7518979033  
Option 1 ID : 75189736131  
Option 2 ID : 75189736132  
Option 3 ID : 75189736129  
Option 4 ID : 75189736130  
Status : Answered  
Chosen Option : 2

Q.49 A, B and C invested ₹ 10,000, ₹12,000, and ₹15,000, respectively, for 5, 6, and 9 months, respectively, in a business. If A's share in the profit is ₹2,500, then the total profit is:

- Ans
- 1. ₹12,550
  - 2. ₹12,650
  - 3. ₹12,700
  - 4. ₹12,850

Question ID : 7518979232  
Option 1 ID : 75189736925  
Option 2 ID : 75189736926  
Option 3 ID : 75189736927  
Option 4 ID : 75189736928  
Status : Answered  
Chosen Option : 4

Q.50 The value of  $(\sin 32^\circ \cos 58^\circ + \cos 32^\circ \sin 58^\circ)$  is:

- Ans
- 1. 3
  - 2. 0
  - 3. 1
  - 4. 2

Question ID : 75189710047  
Option 1 ID : 75189740188  
Option 2 ID : 75189740185  
Option 3 ID : 75189740186  
Option 4 ID : 75189740187  
Status : Answered  
Chosen Option : 3

**Q.51** The Banking Regulation Act, 1949 is a law that regulates banking firms in India. This Act was amended by the Banking Regulation (Amendment) Act of which year?

- Ans**
- 1. 2018
  - 2. 2014
  - 3. 2020
  - 4. 2016

Question ID : 7518979409  
Option 1 ID : 75189737633  
Option 2 ID : 75189737636  
Option 3 ID : 75189737635  
Option 4 ID : 75189737634  
Status : Answered  
Chosen Option : 3

**Q.52** If  $-(2/3)$  is a root of the equation  $kx^2 - 13x - 10 = 0$ , then the value of k is:

- Ans**
- 1. 3
  - 2. 1
  - 3. 2
  - 4. 4

Question ID : 7518978767  
Option 1 ID : 75189735067  
Option 2 ID : 75189735065  
Option 3 ID : 75189735066  
Option 4 ID : 75189735068  
Status : Answered  
Chosen Option : 1

**Q.53** In the given letter-cluster pairs, the first letter-cluster is related to the second letter-cluster following a certain logic. Study the given pairs carefully, and from the given options, select the pair that follows the same logic.

OKD : RNG

MKS : PNV

- Ans**
- 1. HKV : EKH
  - 2. RVH : UYK
  - 3. RVH : VUK
  - 4. HVK : UKH

Question ID : 7518979871  
Option 1 ID : 75189739484  
Option 2 ID : 75189739481  
Option 3 ID : 75189739482  
Option 4 ID : 75189739483  
Status : Answered  
Chosen Option : 2

**Q.54** A group of numbers/symbols is coded using letters as per the table given below and the conditions that follow. The correct combination of codes following the conditions is your answer.

Number/ symbol	6	%	8	9	@	\$	5	4	^	+	#	3	7	9
Code Letter	G	O	H	Q	T	M	A	B	L	M	F	S	Q	R

Conditions:

- (i) If the first element is a symbol and the last element is a number, the codes for these two (the first and the last elements) are to be interchanged.
- (ii) If the first element is an odd number and the last element is an even number, the first and last elements are to be coded as ©.
- (iii) If both the second and third elements are perfect squares, the third element is to be coded as the code for the second element.

What will be the code for 3 @ 4 # 4 ?

- Ans**
- 1. ©TFBC
  - 2. ©TBF©
  - 3. SFTF©
  - 4. STBF©

Question ID : **75189711051**  
 Option 1 ID : **75189744203**  
 Option 2 ID : **75189744204**  
 Option 3 ID : **75189744202**  
 Option 4 ID : **75189744201**  
 Status : **Answered**  
 Chosen Option : **2**

**Q.55** Amongst six cousins, P, Q, R, S, T and U, each are of a different age. P's age is more than that of only one cousin. Q's age is more than that of S and P but not more than that of R. S's age is immediately more than P's age. R is younger than U. T is the youngest. Who is the oldest among all the cousins?

- Ans**
- 1. S
  - 2. U
  - 3. Q
  - 4. T



Question ID : **75189710816**  
 Option 1 ID : **75189743263**  
 Option 2 ID : **75189743262**  
 Option 3 ID : **75189743261**  
 Option 4 ID : **75189743264**  
 Status : **Answered**  
 Chosen Option : **2**

Q.56 We can obtain an image that is real and of equal size when an object is placed \_\_\_\_\_ of a \_\_\_\_\_ mirror.

- Ans
- 1. between P and F, concave
  - 2. at F, concave
  - 3. at C, concave
  - 4. at F, convex

Question ID : 7518979463  
Option 1 ID : 75189737852  
Option 2 ID : 75189737851  
Option 3 ID : 75189737850  
Option 4 ID : 75189737849  
Status : Answered  
Chosen Option : 3

Q.57 What are the group numbers of halogens and carbon family, respectively, in the modern periodic table?

- Ans
- 1. Group 16 and Group 14
  - 2. Group 17 and Group 14
  - 3. Group 16 and Group 17
  - 4. Group 18 and Group 14

Question ID : 75189710391  
Option 1 ID : 75189741562  
Option 2 ID : 75189741564  
Option 3 ID : 75189741563  
Option 4 ID : 75189741561  
Status : Answered  
Chosen Option : 2

Q.58 If 2, 3, 8 and y are in proportion, find the value of y.

- Ans
- 1. 48
  - 2. 12
  - 3. 24
  - 4. 16

Question ID : 75189710649  
Option 1 ID : 75189742593  
Option 2 ID : 75189742596  
Option 3 ID : 75189742594  
Option 4 ID : 75189742595  
Status : Answered  
Chosen Option : 2

**Q.59** The Finance Commission is a constitutionally mandated body, set up under Article \_\_\_\_\_ of the Constitution of India.

- Ans**
- 1. 276
  - 2. 273
  - 3. 280
  - 4. 288

Question ID : 7518978596  
Option 1 ID : 75189734382  
Option 2 ID : 75189734381  
Option 3 ID : 75189734384  
Option 4 ID : 75189734383  
Status : Answered  
Chosen Option : 2

**Q.60** If the digits 6 and 5 are replaced with 3 and 9, respectively, in the number 265367856, what will be the sum of the 1<sup>st</sup> and the 5<sup>th</sup> digits (when counted from the left) in the new number thus formed?

- Ans**
- 1. 8
  - 2. 5
  - 3. 13
  - 4. 17

Question ID : 75189711077  
Option 1 ID : 75189744305  
Option 2 ID : 75189744306  
Option 3 ID : 75189744307  
Option 4 ID : 75189744308  
Status : Answered  
Chosen Option : 2

**Q.61** In humans, the sex of the offspring is determined by the \_\_\_\_\_.

- Ans**
- 1. autosomes
  - 2. paternal chromosome
  - 3. maternal chromosome
  - 4. both maternal and paternal chromosomes

Question ID : 7518974449  
Option 1 ID : 75189717796  
Option 2 ID : 75189717794  
Option 3 ID : 75189717793  
Option 4 ID : 75189717795  
Status : Answered  
Chosen Option : 2



**Q.62** What do you call an economic contraction (recession) followed by an expansion?

- Ans**
- 1. Balance of payment
  - 2. Adaptive Expectations
  - 3. Business Cycle
  - 4. Production function

Question ID : 7518978882  
Option 1 ID : 75189735525  
Option 2 ID : 75189735526  
Option 3 ID : 75189735528  
Option 4 ID : 75189735527  
Status : Answered  
Chosen Option : 4

**Q.63** Study the following number arrangement and answer the question given below. All numbers given below are 2 digit numbers.

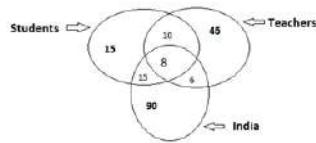
23 35 76 87 45 28 49 98 56 34 37 48 78 75 64 89 73

What will be the product of numbers that is third from the left end and fifth from the right end in the above series?

- Ans**
- 1. 2880
  - 2. 4586
  - 3. 5928
  - 4. 6525

Question ID : 7518978993  
Option 1 ID : 75189735970  
Option 2 ID : 75189735972  
Option 3 ID : 75189735971  
Option 4 ID : 75189735969  
Status : Answered  
Chosen Option : 3

**Q.64** Study the given diagram carefully and answer the question. The numbers in different sections indicate the number of persons.



How many such students are there who are also teachers but NOT from India?

- Ans**
- 1. 10
  - 2. 20
  - 3. 12
  - 4. 60

Question ID : 7518979828  
 Option 1 ID : 75189739309  
 Option 2 ID : 75189739311  
 Option 3 ID : 75189739310  
 Option 4 ID : 75189739312  
 Status : Answered  
 Chosen Option : 1

**Q.65** If 2 is added to each odd digit and 2 is subtracted from each even digit in the number 5374816. What will be the product of the digits which are second from the left and second from the right in the new number thus formed?

- Ans**
- 1. 28
  - 2. 15
  - 3. 3
  - 4. 20

Question ID : 75189710947  
 Option 1 ID : 75189743787  
 Option 2 ID : 75189743788  
 Option 3 ID : 75189743786  
 Option 4 ID : 75189743785  
 Status : Answered  
 Chosen Option : 2

**Q.66** Read the given statement and arguments carefully and select the appropriate answer from the given options.

Statement:

Unemployment among youth has emerged as the biggest challenge in post-COVID-19 times.

Arguments:

- I. Many small-scale industries stopped working during the COVID period.
- II. People do not want to work in small scale industries.

- Ans**
- 1. I weakens while II strengthens the statement.
  - 2. Both I and II strengthen the statement.
  - 3. II weakens while I strengthens the statement.
  - 4. Both I and II weaken the statement.

Question ID : 75189711117  
Option 1 ID : 75189744465  
Option 2 ID : 75189744468  
Option 3 ID : 75189744466  
Option 4 ID : 75189744467  
Status : Answered  
Chosen Option : 3

**Q.67** Which of the following carry/carries digested and absorbed fat from the intestine?

- Ans**
- 1. Veins
  - 2. Plasma
  - 3. Lymph
  - 4. Platelets

Question ID : 7518977833  
Option 1 ID : 75189731332  
Option 2 ID : 75189731329  
Option 3 ID : 75189731330  
Option 4 ID : 75189731331  
Status : Answered  
Chosen Option : 3

**Q.68** A dishonest shopkeeper sells goods at cost price but uses a weight of 940 gm for one kg. His gain percentage (rounded off to two decimal places) is:

- Ans**
- 1. 5.38%
  - 2. 6.08%
  - 3. 4.38%
  - 4. 6.38%

Question ID : 7518979250  
Option 1 ID : 75189736997  
Option 2 ID : 75189736998  
Option 3 ID : 75189737000  
Option 4 ID : 75189736999  
Status : Answered  
Chosen Option : 4

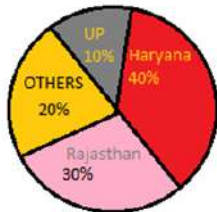
**Q.69** The average age of a husband and his wife was 23 years at the beginning of their marriage. After 5 years of marriage, they had a one-year-old child. The average age of the family of three when the child was born was:

- Ans**
- 1. 20 years
  - 2. 18 years
  - 3. 24 years
  - 4. 23 years

Question ID : 7518978755  
Option 1 ID : 75189735019  
Option 2 ID : 75189735020  
Option 3 ID : 75189735017  
Option 4 ID : 75189735018  
Status : Answered  
Chosen Option : 2

**Q.70** Study the given pie chart and answer the question that follows.

The pie-chart shows the number of tourists visiting from different states. The total tourist traffic is 20 lakh.



Find the difference between the number of tourists visiting from Haryana and Rajasthan.

- Ans**
- 1. 5 lakh
  - 2. 3 lakh
  - 3. 4 lakh
  - 4. 2 lakh

Question ID : 75189711082  
Option 1 ID : 75189744328  
Option 2 ID : 75189744325  
Option 3 ID : 75189744326  
Option 4 ID : 75189744327  
Status : Answered  
Chosen Option : 4

**Q.71** On 7 March 2022, the Ministry of Women and Child Development (MoWCD), in partnership with the Ministry of Education and UNICEF, launched a landmark campaign to bring back out of school adolescent girls in India to the formal education and/or skilling system. What is the name of this campaign?

- Ans**
- 1. Kanya Pathshala Utsav
  - 2. Kanya Pravesh Utsav
  - 3. Kanya Shikhsan Utsav
  - 4. Kanya Shikhsa Pravesh Utsav

Question ID : 7518979367  
Option 1 ID : 75189737465  
Option 2 ID : 75189737466  
Option 3 ID : 75189737468  
Option 4 ID : 75189737467  
Status : Answered  
Chosen Option : 4

**Q.72** An object must be placed \_\_\_\_\_ to obtain a real and inverted image of the same size as that of the object after reflection.

- Ans**
- 1. at infinity from a concave mirror
  - 2. at C of a concave mirror
  - 3. between P and F of a convex mirror
  - 4. at C of a convex mirror

Question ID : 7518979467  
Option 1 ID : 75189737865  
Option 2 ID : 75189737868  
Option 3 ID : 75189737866  
Option 4 ID : 75189737867  
Status : Answered  
Chosen Option : 2

**Q.73** A shopkeeper marked the price of an article at 10% higher than its cost price. He then gives two successive discounts of 5% each. What is his loss or profit percentage?

- Ans**
- 1. 0.725% profit
  - 2. 0.725% loss
  - 3. 0.525% loss
  - 4. 0.525% profit

Question ID : 7518979954  
Option 1 ID : 75189739815  
Option 2 ID : 75189739813  
Option 3 ID : 75189739814  
Option 4 ID : 75189739816  
Status : Answered  
Chosen Option : 2

**Q.74** The Norman Borlaug National Excellence Award is given for excellence in which research field?

- Ans**
- 1. Agricultural Sciences
  - 2. Physical Sciences
  - 3. Energy Sciences
  - 4. Chemical Sciences

Question ID : 7518973954  
Option 1 ID : 75189715813  
Option 2 ID : 75189715816  
Option 3 ID : 75189715814  
Option 4 ID : 75189715815  
Status : Answered  
Chosen Option : 4

**Q.75** Which of the following reactions is NOT a combination reaction?

- Ans**
- 1.  $\text{H}_2 + \text{O}_2 \rightarrow \text{H}_2\text{O}$
  - 2.  $\text{NH}_3 + \text{HCl} \rightarrow \text{NH}_4\text{Cl}$
  - 3.  $\text{C} + \text{O}_2 \rightarrow \text{CO}_2$
  - 4.  $\text{HI} \rightarrow \text{H}_2 + \text{I}_2$

Question ID : 75189710334  
Option 1 ID : 75189741333  
Option 2 ID : 75189741334  
Option 3 ID : 75189741336  
Option 4 ID : 75189741335  
Status : Answered  
Chosen Option : 3

**Q.76** Jyoti starts from the mall and drives 4 km towards West. She then takes a left turn, drives 8 km, turns left and drives 24 km. She then takes a left turn and drives 6 km. She then turns left, drives 6 km and reaches her home. Which direction is the mall with reference to her home?

- Ans**
- 1. North- West
  - 2. South- east
  - 3. South - West
  - 4. North

Question ID : 75189710888  
Option 1 ID : 75189743550  
Option 2 ID : 75189743551  
Option 3 ID : 75189743552  
Option 4 ID : 75189743549  
Status : Answered  
Chosen Option : 1

Q.77 Which of the following is the correct period for which the Annual Budget 2021-22 of the Indian Government was announced?

- Ans
- 1. 1 July - 30 June 2021-22
  - 2. 1 November - 31 October 2021-22
  - 3. 1 April - 31 March 2021-22
  - 4. 31 March - 1 April 2021-22

Question ID : 7518978877  
Option 1 ID : 75189735506  
Option 2 ID : 75189735507  
Option 3 ID : 75189735508  
Option 4 ID : 75189735505

Status : Answered  
Chosen Option : 3

Q.78 Which of the following compounds does NOT belong to the same homologous series?

- Ans
- 1.  $C_5H_{10}$
  - 2.  $C_3H_6$
  - 3.  $C_4H_8$
  - 4.  $C_6H_{11}$

Question ID : 7518973560  
Option 1 ID : 75189714239  
Option 2 ID : 75189714237  
Option 3 ID : 75189714238  
Option 4 ID : 75189714240

Status : Answered  
Chosen Option : 4

Q.79 Which of the following coloured precipitates is formed when lead (II) nitrate and potassium iodide are mixed together?

- Ans
- 1. Yellow
  - 2. Violet
  - 3. Black
  - 4. Green

Question ID : 75189710346  
Option 1 ID : 75189741381  
Option 2 ID : 75189741382  
Option 3 ID : 75189741384  
Option 4 ID : 75189741383

Status : Answered  
Chosen Option : 2

Q.80 Three numbers are in the ratio 5 : 6 : 8 and their LCM is 1200. The sum of the numbers is:

- Ans
- 1. 180
  - 2. 210
  - 3. 200
  - 4. 190

Question ID : 7518979220  
Option 1 ID : 75189736880  
Option 2 ID : 75189736877  
Option 3 ID : 75189736878  
Option 4 ID : 75189736879  
Status : Answered  
Chosen Option : 4

Q.81 Which of the following is the most environment-friendly method of disposing of organic wastes?

- Ans
- 1. Composting
  - 2. Incineration
  - 3. Development of value-added products
  - 4. Landfills

Question ID : 7518974478  
Option 1 ID : 75189717911  
Option 2 ID : 75189717910  
Option 3 ID : 75189717912  
Option 4 ID : 75189717909  
Status : Answered  
Chosen Option : 4

Q.82 An object is placed on the principal axis of a convex lens, at a point beyond  $2F_1$ . Its image formed is \_\_\_\_\_.

- Ans
- 1. real and diminished
  - 2. virtual and enlarged
  - 3. real and enlarged
  - 4. virtual and diminished

Question ID : 7518976624  
Option 1 ID : 75189726493  
Option 2 ID : 75189726496  
Option 3 ID : 75189726495  
Option 4 ID : 75189726494  
Status : Answered  
Chosen Option : 4



**Q.83** Six friends M, N, O, P, Q and R are seated around a round table facing the centre. P is an immediate neighbour of both N and R. Q is an immediate neighbour of both M and O. N is not seated at either side of O. Where is M seated?

- Ans**
- 1. Beside R
  - 2. Beside P
  - 3. Beside N
  - 4. Beside O

Question ID : 7518979706  
Option 1 ID : 75189738824  
Option 2 ID : 75189738823  
Option 3 ID : 75189738822  
Option 4 ID : 75189738821  
Status : Answered  
Chosen Option : 3

**Q.84** What is good way to get relief from leg muscle cramps after intense activity?

- Ans**
- 1. Applying a pain reliever ointment
  - 2. Rubbing legs with an ice-pack
  - 3. Gentle massage with warm pads
  - 4. Drinking warm sweet milk or tea

Question ID : 75189710093  
Option 1 ID : 75189740370  
Option 2 ID : 75189740369  
Option 3 ID : 75189740371  
Option 4 ID : 75189740372  
Status : Answered  
Chosen Option : 2

**Q.85** If 19 November 2005 is a Saturday, then what will be the day of the week on 23 November 2008?

- Ans**
- 1. Tuesday
  - 2. Friday
  - 3. Wednesday
  - 4. Sunday

Question ID : 7518979150  
Option 1 ID : 75189736600  
Option 2 ID : 75189736599  
Option 3 ID : 75189736597  
Option 4 ID : 75189736598  
Status : Answered  
Chosen Option : 4

**Q.86** Which of the following statements correctly describes water transport in plants?

**Ans**  1.

The process by which water is pulled from the xylem cells of the roots into leaves is called translocation.

2.

The process in which loss of water takes place in the form of water vapour through stomata is called transpiration.

3.

The process of water loss from stomata requires energy in the form of ATP.

4.

The process which is the main driving force of water into the xylem during the day is root pressure.

Question ID : 7518977803

Option 1 ID : 75189731211

Option 2 ID : 75189731209

Option 3 ID : 75189731210

Option 4 ID : 75189731212

Status : Answered

Chosen Option : 2

**Q.87** Three statements are given, followed by two conclusions numbered I and II. Assuming the statements to be true, even if they seem to be at variance with commonly known facts, decide which of the conclusions logically follow(s) from the statements.

Statements:

1. Some apricots are peaches.

2. Some kiwis are apricots.

3. All apricots are sweet-limes.

Conclusions:

I. Some sweet-limes are kiwis.

II. No peach is sweet-lime.

**Ans**  1. Only conclusion II follows

2. Only conclusion I follows

3. Both conclusions I and II follow

4. Either conclusion I or II follow

Question ID : 75189710783

Option 1 ID : 75189743130

Option 2 ID : 75189743129

Option 3 ID : 75189743132

Option 4 ID : 75189743131

Status : Answered

Chosen Option : 2

**Q.88** J, L, N, P, R, T, V and W are sitting around a square table facing the centre of the table (but not necessarily in the same order). Some of them are sitting at the corners while some are sitting at the exact centre of the sides. W is on the immediate left of J but not an immediate neighbour of P or R. T is on the immediate right of L. N has R and T as his immediate neighbours, V is immediate neighbour of R. Who is sitting to the immediate left of P?

- Ans**
- 1. L
  - 2. J
  - 3. V
  - 4. R

Question ID : 75189710736  
Option 1 ID : 75189742942  
Option 2 ID : 75189742941  
Option 3 ID : 75189742944  
Option 4 ID : 75189742943  
Status : Marked For Review  
Chosen Option : 2

**Q.89** Neeraj and his sister are 12 years and 3 years old, respectively. After how many years will Neeraj's sister be half as old as Neeraj?

- Ans**
- 1. 7
  - 2. 9
  - 3. 6
  - 4. 3

Question ID : 75189710001  
Option 1 ID : 75189740003  
Option 2 ID : 75189740004  
Option 3 ID : 75189740002  
Option 4 ID : 75189740001  
Status : Answered  
Chosen Option : 3

**Q.90** The LCM of 36, 48, 120 and 300 is:

- Ans**
- 1. 1200
  - 2. 1800
  - 3. 3600
  - 4. 900

Question ID : 7518979916  
Option 1 ID : 75189739662  
Option 2 ID : 75189739663  
Option 3 ID : 75189739664  
Option 4 ID : 75189739661  
Status : Answered  
Chosen Option : 3

Q.91 Shri Lal Bahadur Shastri National Sanskrit University is located in:

- Ans
- 1. Pune
  - 2. Lucknow
  - 3. Jaipur
  - 4. New Delhi

Question ID : 75189710548  
Option 1 ID : 75189742191  
Option 2 ID : 75189742192  
Option 3 ID : 75189742190  
Option 4 ID : 75189742189  
Status : Answered  
Chosen Option : 2

Q.92 As per the Ministry of Mines, as of 2021, 44% of the country's primary gold ore reserves is in \_\_\_\_\_.

- Ans
- 1. Bihar
  - 2. Rajasthan
  - 3. Karnataka
  - 4. Jharkhand

Question ID : 7518978573  
Option 1 ID : 75189734292  
Option 2 ID : 75189734289  
Option 3 ID : 75189734290  
Option 4 ID : 75189734291  
Status : Answered  
Chosen Option : 4

Q.93 Which of the following industries does NOT use washing soda?

- Ans
- 1. Glass
  - 2. Paper
  - 3. Soap
  - 4. Cosmetic

Question ID : 75189710370  
Option 1 ID : 75189741478  
Option 2 ID : 75189741480  
Option 3 ID : 75189741477  
Option 4 ID : 75189741479  
Status : Answered  
Chosen Option : 1

Q.94 In electrical geyser \_\_\_\_\_ energy is converted to \_\_\_\_\_.

- Ans
- 1. Electrical, heat
  - 2. Electrical, magnetic
  - 3. Mechanical, electrical
  - 4. Electrical, light

Question ID : 7518979563  
Option 1 ID : 75189738251  
Option 2 ID : 75189738249  
Option 3 ID : 75189738250  
Option 4 ID : 75189738252  
Status : Answered  
Chosen Option : 1

Q.95 40 students of a class are standing in a queue according to the increasing order of their heights. Suhani is 8<sup>th</sup> from the front, while Syma is 8<sup>th</sup> from the back. How many students are standing between Suhani and Syma?

- Ans
- 1. 25
  - 2. 21
  - 3. 23
  - 4. 24

Question ID : 7518979713  
Option 1 ID : 75189738852  
Option 2 ID : 75189738849  
Option 3 ID : 75189738850  
Option 4 ID : 75189738851  
Status : Answered  
Chosen Option : 4

Q.96 The largest peninsular river in India is:

- Ans
- 1. Cauvery
  - 2. Narmada
  - 3. Godavari
  - 4. Krishna

Question ID : 7518979432  
Option 1 ID : 75189737727  
Option 2 ID : 75189737728  
Option 3 ID : 75189737726  
Option 4 ID : 75189737725  
Status : Answered  
Chosen Option : 1

Q.97 Evaluate  $0.\overline{696} \times 0.\overline{27}$ .

- Ans
- 1.  $\frac{2085}{10989}$
  - 2.  $\frac{2088}{10989}$
  - 3.  $\frac{2083}{10989}$
  - 4.  $\frac{2087}{10989}$

Question ID : 7518979909  
 Option 1 ID : 75189739634  
 Option 2 ID : 75189739636  
 Option 3 ID : 75189739633  
 Option 4 ID : 75189739635  
 Status : Answered  
 Chosen Option : 2

Q.98 The value of  $\frac{(0.064) + (0.008)}{0.16 + 0.04 - 0.08}$  is \_\_\_\_\_.

- Ans
- 1. 0.05
  - 2. 1.4
  - 3. 0.6
  - 4. 2.7

Question ID : 75189710617  
 Option 1 ID : 75189742465  
 Option 2 ID : 75189742468  
 Option 3 ID : 75189742467  
 Option 4 ID : 75189742466  
 Status : Answered  
 Chosen Option : 3

Q.99 The \_\_\_\_\_ Constitutional Amendment Act of 1992 was responsible for adding Part IX to the Constitution, 'The Panchayats'.

- Ans
- 1. 7th
  - 2. 83rd
  - 3. 73rd
  - 4. 74th

Question ID : 75189710501  
 Option 1 ID : 75189742001  
 Option 2 ID : 75189742004  
 Option 3 ID : 75189742002  
 Option 4 ID : 75189742003  
 Status : Answered  
 Chosen Option : 3

Q.100 The 'Lohit' is a tributary of which river from following?

- Ans
- 1. Indus
  - 2. Narmada
  - 3. Brahmaputra
  - 4. Cauvery

Question ID : 75189710482

Option 1 ID : 75189741928

Option 2 ID : 75189741925

Option 3 ID : 75189741927

Option 4 ID : 75189741926

Status : Answered

Chosen Option : 2

