



रेल भर्ती बोर्ड / RAILWAY RECRUITMENT BOARDS
सी ई एन आर आर सी - ०१/२०१९ - CEN RRC - 01/2019



Roll Number	
Candidate Name	
Test Center Name	iON Digital Zone iDZ Gram Gangedi Near Mahaveer Tapobhumi
Test Date	22/08/2022
Test Time	5:00 PM - 6:30 PM
Subject	Level 1

* Note

Correct Answer will carry 1 mark per Question.
Incorrect Answer will carry 1/3 Negative mark per Question.

- Options shown in green color with a tick icon are correct.
- Chosen option on the right of the question indicates the option selected by the candidate.

Section : Level 1

Q.1

The value of $\frac{(4x^2 - 9y^2)^3 + (9y^2 - 49z^2)^3 + (49z^2 - 4x^2)^3}{(2x - 3y)^3 + (3y - 7z)^3 + (7z - 2x)^3}$ is:

- Ans
- 1. $42xyz (2x - 3y)(3y - 7z)(7z - 2x)$
 - 2. $(2x + 3y)(3y + 7z)(7z + 2x)$
 - 3. $42xyz (2x + 3y)(3y + 7z)(7z + 2x)$
 - 4. $(2x - 3y)(3y - 7z)(7z - 2x)$

Question ID : 7518976319

Option 1 ID : 75189725276

Option 2 ID : 75189725274

Option 3 ID : 75189725275

Option 4 ID : 75189725273

Status : Not Answered

Chosen Option : --

Test Prime

ALL EXAMS,
ONE SUBSCRIPTION



40,000+
Mock Tests



Personalised
Report Card



Unlimited
Re-Attempt



500+
Exam Covered



Previous Year
Papers



500%
Refund



DOWNLOAD NOW

Q.2 What are the two signs to be interchanged for making the following equation correct?

$$[(44 + 36) - (4 \times 4)] \div (1 - 5) \times 2 = 8$$

- Ans
- 1. \times, \div
 - 2. $+, -$
 - 3. $+, \div$
 - 4. $+, \times$

Question ID : 7518975113
Option 1 ID : 75189720450
Option 2 ID : 75189720452
Option 3 ID : 75189720449
Option 4 ID : 75189720451
Status : Not Answered
Chosen Option : --

Q.3 A cosmetic product is available at 75% discount. If the shopkeeper charges ₹1,874, what is its marked price?

- Ans
- 1. ₹7,496
 - 2. ₹8,342
 - 3. ₹6,145
 - 4. ₹5,674

Question ID : 7518975637
Option 1 ID : 75189722546
Option 2 ID : 75189722545
Option 3 ID : 75189722547
Option 4 ID : 75189722548
Status : Answered
Chosen Option : 1

Q.4 What is the name of the consumer awareness programme started by the Department of Consumer Affairs in 2022?

- Ans
- 1. Consumer Behaviour Week
 - 2. Consumer Empowerment Week
 - 3. Consumer Awareness Week
 - 4. Consumer Rights Week

Question ID : 7518974037
Option 1 ID : 75189716147
Option 2 ID : 75189716145
Option 3 ID : 75189716146
Option 4 ID : 75189716148
Status : Not Answered
Chosen Option : --

Q.5 The sum of the digits in a two-digit number is 9. If the value of the number is 6 more than 5 times the digit in the ones' place, then the number is:

- Ans**
- 1. 45
 - 2. 18
 - 3. 27
 - 4. 36

Question ID : **7518976325**
 Option 1 ID : **75189725297**
 Option 2 ID : **75189725298**
 Option 3 ID : **75189725299**
 Option 4 ID : **75189725300**
 Status : **Answered**
 Chosen Option : **4**

Q.6 In this question, a group of numbers/symbols is coded using letters as per the table given below and the conditions which follow. The correct combination of codes following the conditions is your answer.

Number/Symbol	4	6	7	S	#	@	2
Codes	H	F	M	E	T	P	Z

Conditions:

- (i) If the first element is an even number and the last element is also an even number, the codes for these two (the first and the last elements) are to be interchanged.
- (ii) If the second element is an even number and the fifth element is a symbol, the codes for these two (the second and the fifth elements) are to be interchanged.
- (iii) If the fourth element is a symbol and the sixth element is also a symbol, both these elements (the fourth and the sixth elements) are to be coded as N.

Question: 4 6 S 7 4 # @ 2

- Ans**
- 1. Z H E M F T P H
 - 2. Z F E M H T P H
 - 3. H F E M H T P Z
 - 4. Z F E N H N P H

Question ID : **7518975252**
 Option 1 ID : **75189721007**
 Option 2 ID : **75189721005**
 Option 3 ID : **75189721006**
 Option 4 ID : **75189721008**
 Status : **Answered**
 Chosen Option : **2**

Q.7 A shopkeeper bought 12 dozen eggs at the rate of ₹5 per egg. 12 eggs broke in transit. He sold the remaining eggs at the rate of ₹6 per egg. Find his percentage of profit.

- Ans
- 1. 15%
 - 2. 10%
 - 3. 5%
 - 4. 20%

Question ID : 7518975854
Option 1 ID : 75189723416
Option 2 ID : 75189723414
Option 3 ID : 75189723413
Option 4 ID : 75189723415
Status : Answered
Chosen Option : 2

Q.8 Who launched India's first 'One Health Consortium'?

- Ans
- 1. Ministry of Home Affairs
 - 2. Ministry of Health and Family Welfare
 - 3. Ministry of Education
 - 4. Ministry of Science and Technology

Question ID : 7518974149
Option 1 ID : 75189716595
Option 2 ID : 75189716594
Option 3 ID : 75189716596
Option 4 ID : 75189716593
Status : Not Answered
Chosen Option : --

Q.9 Chauri Chaura incident occurred in which year?

- Ans
- 1. 1921
 - 2. 1922
 - 3. 1920
 - 4. 1919

Question ID : 7518974167
Option 1 ID : 75189716665
Option 2 ID : 75189716666
Option 3 ID : 75189716667
Option 4 ID : 75189716668
Status : Answered
Chosen Option : 4

Q.10 Which of the following interchanges of signs would make the given equation correct?

$$5 \times 4 \div 10 - 8 + 2 = 8$$

- Ans
- ✓ 1. +, -
 - ✗ 2. +, ×
 - ✗ 3. +, ÷
 - ✗ 4. ×, ÷

Question ID : 7518975112

Option 1 ID : 75189720445

Option 2 ID : 75189720447

Option 3 ID : 75189720448

Option 4 ID : 75189720446

Status : Answered

Chosen Option : 1

Q.11 Which of the following alphanumeric clusters will replace the question mark (?) in the series to make it logically complete?

ACE 9, BDF 12, GIK 27, HJL 30, ?, NPR 48, SUW 63

- Ans
- ✗ 1. MNO 42
 - ✓ 2. MOQ 45
 - ✗ 3. NOP 42
 - ✗ 4. OPQ 48

Question ID : 7518974781

Option 1 ID : 75189719122

Option 2 ID : 75189719121

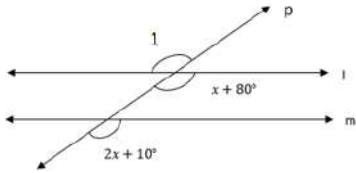
Option 3 ID : 75189719124

Option 4 ID : 75189719123

Status : Answered

Chosen Option : 2

Q.12 In the given figure line l is parallel to m and p is the transversal. Find the measure of the angle 1.



- Ans
- ✓ 1. 150°
 - ✗ 2. 200°
 - ✗ 3. 140°
 - ✗ 4. 300°

Question ID : 7518975766
 Option 1 ID : 75189723062
 Option 2 ID : 75189723064
 Option 3 ID : 75189723061
 Option 4 ID : 75189723063
 Status : Not Answered
 Chosen Option : --

Q.13 Ramesh invested ₹1,232 at 5% p.a. rate of simple interest in a bank. What amount will he get after 3 years?

- Ans
- ✗ 1. ₹1,285.80
 - ✗ 2. ₹2,145.80
 - ✗ 3. ₹1,848.80
 - ✓ 4. ₹1,416.80

Question ID : 7518975616
 Option 1 ID : 75189722462
 Option 2 ID : 75189722463
 Option 3 ID : 75189722461
 Option 4 ID : 75189722464
 Status : Answered
 Chosen Option : 4

Q.14 Mr. Sharma, Mr. Gupta and Ms Sinha invested ₹4,000, ₹8,000 and ₹6,000, respectively, in a business. Mr. Sharma left after 6 months. If after 8 months, there was a gain of ₹34,000, then what will be the share of Mr. Gupta?

- Ans
- ✗ 1. ₹12,000
 - ✗ 2. ₹20,000
 - ✗ 3. ₹14,000
 - ✓ 4. ₹16,000

Question ID : 7518975603
 Option 1 ID : 75189722409
 Option 2 ID : 75189722412
 Option 3 ID : 75189722410
 Option 4 ID : 75189722411
 Status : Answered
 Chosen Option : 4

Q.15 If $3^{x-2} + 3^x = 7290$, then the value of x is:

- Ans
- 1. 8
 - 2. 9
 - 3. 6
 - 4. 7

Question ID : 7518976224
Option 1 ID : 75189724895
Option 2 ID : 75189724896
Option 3 ID : 75189724893
Option 4 ID : 75189724894
Status : Answered
Chosen Option : 1

Q.16 A concave mirror having focal length of magnitude 20 cm forms a real image at a distance of 60 cm from it. The object distance (in cm) is:

- Ans
- 1. +15
 - 2. +30
 - 3. -30
 - 4. -15

Question ID : 7518975383
Option 1 ID : 75189721532
Option 2 ID : 75189721530
Option 3 ID : 75189721529
Option 4 ID : 75189721531
Status : Not Answered
Chosen Option : --

Q.17 Consider the statements given below and identify the correct answer.

Statement-I: Washing soda is produced from sodium chloride.

Statement-II: It attacks dirt and grease to form water soluble products, which are then washed away on rinsing with water.

- Ans
- 1. Both the statements are false.
 - 2. Statement-I is true, and Statement-II is false.
 - 3. Statement-II is true, and Statement-I is false.
 - 4. Both the statements are true.

Question ID : 7518973668
Option 1 ID : 75189714670
Option 2 ID : 75189714671
Option 3 ID : 75189714672
Option 4 ID : 75189714669
Status : Answered
Chosen Option : 4

Q.18 Few birds (One each of Orange, Yellow, Black, Green, Grey, Red colour and three White coloured) were sitting in a row facing north. The black bird was an immediate neighbour of both, the red and the grey bird. The yellow bird was sitting to the immediate right of the green bird. Only three birds were sitting between the orange and the red bird and all these three birds were white. The yellow bird sat third to the right of the black bird. Which colour birds were sitting at the leftmost and rightmost ends of the row respectively?

- Ans**
- ✓ 1. Orange (Left) and Yellow (Right)
 - ✗ 2. Grey (Left) and Red (Right)
 - ✗ 3. White (Left) and Orange (Right)
 - ✗ 4. Yellow (Left) and White (Right)

Question ID : 7518974740
Option 1 ID : 75189718959
Option 2 ID : 75189718960
Option 3 ID : 75189718958
Option 4 ID : 75189718957
Status : Answered
Chosen Option : 1

Q.19 Kokborok is one of the state languages of Tripura. On 19th January 2022, Tripura celebrated which Kokborok day?

- Ans**
- ✗ 1. 34th
 - ✗ 2. 24th
 - ✗ 3. 55th
 - ✓ 4. 44th

Question ID : 7518973819
Option 1 ID : 75189715274
Option 2 ID : 75189715273
Option 3 ID : 75189715276
Option 4 ID : 75189715275
Status : Not Answered
Chosen Option : --

Q.20 Three statements are given, followed by two conclusions numbered I and II. Assuming the statements to be true, even if they seem to be at variance with commonly known facts, decide which of the conclusions logically follow(s) from the statements.

Statements:

Some beds are tables.

Some tables are cupboards.

Some cupboards are chairs.

Conclusions:

I. Some chairs are beds.

II. Some beds are cupboards.

- Ans** ✓ 1. Neither conclusion I nor II follows
✗ 2. Only conclusion I follows
✗ 3. Only conclusion II follows
✗ 4. Both conclusions I and II follow

Question ID : 7518975173

Option 1 ID : 75189720692

Option 2 ID : 75189720689

Option 3 ID : 75189720690

Option 4 ID : 75189720691

Status : Answered

Chosen Option : 1

Q.21 Two pipes A and B can fill a cistern in 36 minutes and 48 minutes, respectively. Both the pipes are opened at the same time and pipe B is closed after some time. If the cistern gets filled in half an hour, then after how many minutes was pipe B closed?

- Ans** ✓ 1. 8
✗ 2. 5
✗ 3. 10
✗ 4. 9

Question ID : 7518976106

Option 1 ID : 75189724422

Option 2 ID : 75189724421

Option 3 ID : 75189724424

Option 4 ID : 75189724423

Status : Not Answered

Chosen Option : --

Q.22 In the reaction $\text{ZnO} + \text{C} \rightarrow \text{Zn} + \text{CO}$:

- Ans
- 1. ZnO is reduced to Zn
 - 2. Zn does not undergo redox reaction.
 - 3. ZnO is oxidized to Zn
 - 4. carbon is reduced to CO

Question ID : 7518973613
Option 1 ID : 75189714450
Option 2 ID : 75189714452
Option 3 ID : 75189714451
Option 4 ID : 75189714449
Status : Not Answered
Chosen Option : --

Q.23 The monthly incomes of two friends Anuj and Mathew, are in the ratio 5 : 7 and each of them saves ₹10,000 every month. If the ratio of their expenditure is 2 : 3, find the income of Anuj.

- Ans
- 1. ₹5,000
 - 2. ₹20,000
 - 3. ₹50,000
 - 4. ₹15,000

Question ID : 7518975600
Option 1 ID : 75189722400
Option 2 ID : 75189722398
Option 3 ID : 75189722399
Option 4 ID : 75189722397
Status : Answered
Chosen Option : 3

Q.24 The equation $x^2 - 6x + 9 = 0$ can be written as:

- Ans
- 1. $(x - 2)(x - 3) = 0$
 - 2. $(x - 2)(x - 3)^2 = 0$
 - 3. $(x + 3)^2 = 0$
 - 4. $(x - 3)^2 = 0$

Question ID : 7518975948
Option 1 ID : 75189723790
Option 2 ID : 75189723791
Option 3 ID : 75189723789
Option 4 ID : 75189723792
Status : Answered
Chosen Option : 4

Q.25 The component of white light that deviates the most on passing through a glass prism is:

- Ans
- 1. blue
 - 2. red
 - 3. violet
 - 4. green

Question ID : 7518975434
Option 1 ID : 75189721735
Option 2 ID : 75189721733
Option 3 ID : 75189721734
Option 4 ID : 75189721736
Status : Not Answered
Chosen Option : --

Q.26 What is the aim of Digital Government Mission launched by the Ministry of Electronics and Information Technology in January 2022?

- Ans
- 1. To provide employment information to youth living in rural areas
 - 2. To have services proactively anticipate citizens' needs before they approach the services.
 - 3. To provide welfare service meant for girl child and women
 - 4. To help workers to meet their financial needs

Question ID : 7518973960
Option 1 ID : 75189715839
Option 2 ID : 75189715838
Option 3 ID : 75189715837
Option 4 ID : 75189715840
Status : Not Answered
Chosen Option : --

Q.27 A boat starting from point P goes downstream to point Q in 3 hours and returns back from point Q to the point P in 4 hours. If the speed of the water is 3 km/h, find the speed of the boat in still water.

- Ans
- 1. 12 km/h
 - 2. 20 km/h
 - 3. 21 km/h
 - 4. 32km/h

Question ID : 7518975711
Option 1 ID : 75189722841
Option 2 ID : 75189722844
Option 3 ID : 75189722842
Option 4 ID : 75189722843
Status : Not Answered
Chosen Option : --

Q.28

The value of $\frac{1}{(1+\cot^2 x)^2} + \frac{\tan^2 x}{(1+\tan^2 x)^2} + \frac{1}{1+\tan^2 x}$ is:

- Ans
- 1. 4
 - 2. 5
 - 3. 3
 - 4. 1

Question ID : 7518976387
 Option 1 ID : 75189725546
 Option 2 ID : 75189725545
 Option 3 ID : 75189725547
 Option 4 ID : 75189725548
 Status : Not Answered
 Chosen Option : --

Q.29

L, G, K, P, H and Z live on eight different floors of the same multistorey building with 2 floors being vacant. The lowermost floor in the building is numbered 1, the floor above it, number 2 and so on till the topmost floor is numbered 8. H lives on floor No. 1, K on No. 2, and P on No. 8. One immediate floor above and one immediate floor below Z are vacant. G's floor is immediately above the floor on which L lives and G's floor is also immediately below P's floor. Who lives on floor No. 4?

- Ans
- 1. Z
 - 2. G
 - 3. H
 - 4. L

Question ID : 7518974726
 Option 1 ID : 75189718902
 Option 2 ID : 75189718904
 Option 3 ID : 75189718903
 Option 4 ID : 75189718901
 Status : Answered
 Chosen Option : 1

Q.30

What is the name of the sacred text of Christianity which consists of two parts: the Old Testament which is essentially the Hebrew text of the time of Jesus; And the New Testament that includes writings about Jesus Christ and the early church?

- Ans
- 1. De doctrina Christiana
 - 2. Bible
 - 3. Book of Psalms
 - 4. Knowing God Jesus

Question ID : 7518974016
 Option 1 ID : 75189716064
 Option 2 ID : 75189716061
 Option 3 ID : 75189716062
 Option 4 ID : 75189716063
 Status : Not Answered
 Chosen Option : --

Q.31 If the radius of a sphere is increased by 2 cm, then its surface area increases by 704 cm^2 . Using $\pi = \frac{22}{7}$, find the radius of the sphere before the increase.

- Ans**
- 1. 16 cm
 - 2. 14 cm
 - 3. 15 cm
 - 4. 13 cm

Question ID : **7518976364**
Option 1 ID : **75189725456**
Option 2 ID : **75189725454**
Option 3 ID : **75189725455**
Option 4 ID : **75189725453**
Status : **Answered**
Chosen Option : 2

Q.32 Monazite ore is found in the sands of which of the following states of India?

- Ans**
- 1. Odisha
 - 2. Rajasthan
 - 3. Punjab
 - 4. Kerala

Question ID : **7518974267**
Option 1 ID : **75189717068**
Option 2 ID : **75189717065**
Option 3 ID : **75189717066**
Option 4 ID : **75189717067**
Status : **Not Answered**

Chosen Option : --

Q.33 Which of the following number will replace the question mark (?) and complete the given number series?

45, 52, 61, 73, 90, ?

- Ans**
- 1. 115
 - 2. 112
 - 3. 116
 - 4. 114

Question ID : **7518975064**
Option 1 ID : **75189720256**
Option 2 ID : **75189720254**
Option 3 ID : **75189720253**
Option 4 ID : **75189720255**
Status : **Answered**
Chosen Option : 4

Q.34 Select the set in which the numbers are related in the same way as are the numbers of the following sets.

(NOTE: Operations should be performed on the whole numbers, without breaking down the numbers into its constituent digits. E.g. 13 – Operations on 13 such as adding/subtracting/multiplying etc. to 13 can be performed. Breaking down 13 into 1 and 3 and then performing mathematical operations on 1 and 3 are not allowed.)

(11, 64, 3)

(17, 36, 11)

- Ans**
- ✓ 1. (24, 169, 11)
 - ✗ 2. (26, 56, 8)
 - ✗ 3. (30, 49, 11)
 - ✗ 4. (21, 144, 32)

Question ID : 7518975302
Option 1 ID : 75189721205
Option 2 ID : 75189721207
Option 3 ID : 75189721208
Option 4 ID : 75189721206
Status : Not Answered
Chosen Option : --

Q.35 The product of two numbers is 1472 and their HCF is 8. Find their LCM.

- Ans**
- ✗ 1. 144
 - ✗ 2. 108
 - ✓ 3. 184
 - ✗ 4. 176

Question ID : 7518976047
Option 1 ID : 75189724185
Option 2 ID : 75189724187
Option 3 ID : 75189724186
Option 4 ID : 75189724188
Status : Not Answered
Chosen Option : --

Q.36 Which of the following numbers will replace the question mark (?) in the given series?

16, 18, 27, 55, 120, ?

- Ans**
- ✗ 1. 230
 - ✓ 2. 246
 - ✗ 3. 240
 - ✗ 4. 510

Question ID : 7518975292
Option 1 ID : 75189721165
Option 2 ID : 75189721166
Option 3 ID : 75189721167
Option 4 ID : 75189721168
Status : Answered
Chosen Option : 2

Q.37 Article 12 to 35 contained in Part _____ of the Constitution deal with Fundamental Rights.

- Ans
- 1. IV
 - 2. III
 - 3. I
 - 4. II

Question ID : 7518974097
Option 1 ID : 75189716388
Option 2 ID : 75189716387
Option 3 ID : 75189716385
Option 4 ID : 75189716386
Status : Not Answered
Chosen Option : --

Q.38 Ozone depletion in the stratosphere layer of the atmosphere is responsible for which of the following

- Ans
- 1. Increase in greenhouse effect
 - 2. Cooling of Earth's atmosphere
 - 3. Increase of UV radiations reaching Earth's surface
 - 4. Increase in infrared radiations in the troposphere

Question ID : 7518974670
Option 1 ID : 75189718678
Option 2 ID : 75189718679
Option 3 ID : 75189718677
Option 4 ID : 75189718680
Status : Not Answered
Chosen Option : --

Q.39 Hariteja walked to his school at a speed of 4 km/h and returned on a scooter at 20 km/h. His average speed during the two-way journey is:

- Ans
- 1. $\frac{20}{3}$ km/h
 - 2. 8 km/h
 - 3. 6 km/h
 - 4. 12 km/h

Question ID : 7518975894
Option 1 ID : 75189723574
Option 2 ID : 75189723576
Option 3 ID : 75189723575
Option 4 ID : 75189723573
Status : Answered
Chosen Option : 1

Q.40 Consider the below statements and identify the correct answer.

Statement-I: Ionic compounds are generally brittle and break into pieces when pressure is applied.

Statement-II: Ionic compounds have low melting and boiling points.

- Ans**
- 1. Both the statements are false.
 - 2. Statement-II is true, and Statement-I is false.
 - 3. Statement-I is true, and Statement-II is false.
 - 4. Both the statements are true.

Question ID : 7518973686

Option 1 ID : 75189714742

Option 2 ID : 75189714744

Option 3 ID : 75189714743

Option 4 ID : 75189714741

Status : Not Answered

Chosen Option : --

Q.41 An electric heater rated 1000 W and an electric geyser rated 2000 W are used for 4 hours daily. The energy consumed in 10 days (in kWh) is:

- Ans**
- 1. 120
 - 2. 1200
 - 3. 12000
 - 4. 12

Question ID : 7518975507

Option 1 ID : 75189722026

Option 2 ID : 75189722027

Option 3 ID : 75189722028

Option 4 ID : 75189722025

Status : Not Answered

Chosen Option : --

Q.42 In January 2022, the Zoological Survey of India (ZSI) underlined some green rules for living root bridges of which state to get the UNESCO world heritage site tag?

Ans

- 1. Rajasthan
- 2. Kerala
- 3. Haryana
- 4. Meghalaya

Question ID : 7518973901
Option 1 ID : 75189715603
Option 2 ID : 75189715601
Option 3 ID : 75189715604
Option 4 ID : 75189715602
Status : Not Answered
Chosen Option : --

Q.43 Where was the 2nd National Para Shooting Championship 2022 between 21 and 25 March 2022 held?

Ans

- 1. New Delhi
- 2. Lakshadweep
- 3. Puducherry
- 4. Chandigarh

Question ID : 7518976513
Option 1 ID : 75189726051
Option 2 ID : 75189726052
Option 3 ID : 75189726050
Option 4 ID : 75189726049
Status : Not Answered
Chosen Option : --

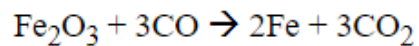
Q.44 Who is the Chief Justice of India as on March 2022?

Ans

- 1. Uday Umesh Lalit
- 2. NV Ramana
- 3. Ranjan Gogoi
- 4. DY Chandrachud

Question ID : 7518974300
Option 1 ID : 75189717198
Option 2 ID : 75189717199
Option 3 ID : 75189717200
Option 4 ID : 75189717197
Status : Answered
Chosen Option : 2

Q.45 In the given reaction, _____ acts as a reducing agent.



- Ans
- 1. Fe_2O_3
 - 2. CO
 - 3. CO_2
 - 4. Fe

Question ID : 7518973451

Option 1 ID : 75189713802

Option 2 ID : 75189713804

Option 3 ID : 75189713803

Option 4 ID : 75189713801

Status : Not Answered

Chosen Option : --

Q.46 Which Article of the Constitution of India enshrines one of the Directive Principles of State Policy which lays down that 'the State shall take steps to organise village panchayats and endow them with such powers and authority as may be necessary to enable them to function as units of self-government'?

- Ans
- 1. Article 48
 - 2. Article 40
 - 3. Article 32
 - 4. Article 37

Question ID : 7518974107

Option 1 ID : 75189716428

Option 2 ID : 75189716427

Option 3 ID : 75189716425

Option 4 ID : 75189716426

Status : Not Answered

Chosen Option : --

Q.47 Shyam walked 10 m towards the north and then turned left and walked 11 m. He then turned right and walked for 13 m, turned right again and walked for 10 m. He then turned left and walked 14 m, and then finally turned right and walked 1 m. How far is Shyam from the starting point?

(All turns are 90 degree turns only)

- Ans
- 1. 34 m
 - 2. 33 m
 - 3. 35 m
 - 4. 37 m

Question ID : 7518974838

Option 1 ID : 75189719349

Option 2 ID : 75189719351

Option 3 ID : 75189719350

Option 4 ID : 75189719352

Status : Answered

Chosen Option : 4

Q.48 Some features of alveoli are mentioned below. Select the INCORRECT option.

- Ans
- 1. Have large surface area
 - 2. Have extensive network of blood vessels
 - 3. Are thin walled
 - 4. Are finger-like structures

Question ID : 7518974582
Option 1 ID : 75189718326
Option 2 ID : 75189718328
Option 3 ID : 75189718327
Option 4 ID : 75189718325
Status : Not Answered
Chosen Option : --

Q.49 Study the given letter series and answer the question that follows.

Q I O M J E S T R U L E B A C K J M N

How many consonants are immediately preceded by a consonant and immediately followed by a vowel?

- Ans
- 1. 3
 - 2. 2
 - 3. 1
 - 4. 4

Question ID : 7518974801
Option 1 ID : 75189719203
Option 2 ID : 75189719202
Option 3 ID : 75189719201
Option 4 ID : 75189719204
Status : Answered
Chosen Option : 2

Q.50 A certain number of people are sitting in a row, facing north. D is to the immediate right of H. A is third to the left of C. Only three people sit between H and L. L is fifth to the right of C. D is at the extreme right end of the row. If no other person is sitting in the row, what is the total number of persons seated?

- Ans
- 1. 16
 - 2. 14
 - 3. 18
 - 4. 12

Question ID : 7518974923
Option 1 ID : 75189719691
Option 2 ID : 75189719690
Option 3 ID : 75189719692
Option 4 ID : 75189719689
Status : Answered
Chosen Option : 2

Q.51 In a certain code language, 'CURRY' is written as 'BSONT' and 'KHAKE' is written as 'JFXGD'. How will 'BHEEM' be written in that language?

- Ans**
- 1. AFBAH
 - 2. AFBBI
 - 3. CFBBH
 - 4. AEBBI

Question ID : 7518974828
Option 1 ID : 75189719312
Option 2 ID : 75189719309
Option 3 ID : 75189719310
Option 4 ID : 75189719311
Status : Answered
Chosen Option : 1

Q.52 The conversion of ethanol to ethanoic acid is an example of which of the following reactions?

- Ans**
- 1. Addition reaction
 - 2. Oxidation reaction
 - 3. Combustion reaction
 - 4. Substitution reaction

Question ID : 7518973536
Option 1 ID : 75189714143
Option 2 ID : 75189714142
Option 3 ID : 75189714141
Option 4 ID : 75189714144
Status : Not Answered
Chosen Option : --

Q.53 Which of the following statements in Economics is NOT correct?

- Ans**
- 1. Average fixed cost curve is downward sloping.
 - 2. Total cost is the sum of the total variable cost and the total fixed cost.
 - 3. In the long run, all inputs are fixed.
 - 4. Short run marginal cost, average variable cost and short run average cost curves are 'U'-shaped.

Question ID : 7518974242
Option 1 ID : 75189716966
Option 2 ID : 75189716965
Option 3 ID : 75189716968
Option 4 ID : 75189716967
Status : Not Answered
Chosen Option : --

Q.54

In January 2022, India's first para-badminton academy was launched in which state?

Ans

1. Punjab

2. Uttar Pradesh

3. Haryana

4. Jharkhand

Question ID : 7518973754

Option 1 ID : 75189715016

Option 2 ID : 75189715014

Option 3 ID : 75189715013

Option 4 ID : 75189715015

Status : Not Answered

Chosen Option : --

Q.55

The S.I unit of induced potential difference is:

Ans

1. mV

2. A

3. V

4. mA

Question ID : 7518975536

Option 1 ID : 75189722144

Option 2 ID : 75189722141

Option 3 ID : 75189722143

Option 4 ID : 75189722142

Status : Not Answered

Chosen Option : --

Q.56

How much angular distance will be covered by the minute hand of a correct clock in a period of 3 hours 10 minutes?

Ans

1. 1000°

2. 1202°

3. 978°

4. 1140°

Question ID : 7518976434

Option 1 ID : 75189725734

Option 2 ID : 75189725736

Option 3 ID : 75189725733

Option 4 ID : 75189725735

Status : Not Answered

Chosen Option : --

Q.57 Three statements are given, followed by two conclusions numbered I and II. Assuming the statements to be true, even if they seem to be at variance with commonly known facts, decide which of the conclusions logically follow(s) from the statements.

Statements:

Some purses are keys.

All lockers are keys.

All keys are pins.

Conclusions:

I. Some pins are purses.

II. No pin is a purse.

- Ans**
- 1. Only conclusion I follows
 - 2. Both conclusions I and II follow
 - 3. Either conclusion I or II follows
 - 4. Only conclusion II follows

Question ID : 7518975170
Option 1 ID : 75189720677
Option 2 ID : 75189720679
Option 3 ID : 75189720680
Option 4 ID : 75189720678
Status : Answered
Chosen Option : 1

Q.58 In which part of the leaves do massive amounts of gaseous exchange take place during respiration?

- Ans**
- 1. Stomata
 - 2. Grana
 - 3. Chlorophyll
 - 4. Thylakoid

Question ID : 7518974331
Option 1 ID : 75189717321
Option 2 ID : 75189717322
Option 3 ID : 75189717324
Option 4 ID : 75189717323
Status : Not Answered
Chosen Option : --

Q.59

How many private banks were nationalised by Indra Gandhi during the Fourth Five Year Plan in 1969?

Ans

✓ 1. 14

✗ 2. 10

✗ 3. 17

✗ 4. 24

Question ID : 7518973882

Option 1 ID : 75189715525

Option 2 ID : 75189715527

Option 3 ID : 75189715528

Option 4 ID : 75189715526

Status : Not Answered

Chosen Option : --

Q.60

Read the given statement and conclusions carefully. Assuming that the information given in the statements is true, decide which of the given conclusions logically follow(s) from the statement.

Statement:

Team A students lost 14 out of 20 games they played last season.

Conclusions:

- I. Team A students are more interested in academics than sports.
- II. Team A students are unlucky.

Ans

✗ 1. Both conclusions I and II follow

✓ 2. Neither conclusion I nor II follows

✗ 3. Only conclusion II follows

✗ 4. Only conclusion I follows

Question ID : 7518976413

Option 1 ID : 75189725652

Option 2 ID : 75189725651

Option 3 ID : 75189725650

Option 4 ID : 75189725649

Status : Answered

Chosen Option : 2

Q.61 In some women, oviducts are blocked. These women are unable to bear babies because sperms cannot reach the egg for fertilisation. The doctors advise IVF (invitro fertilisation) in such cases. Below are given some steps of the procedure. Select the INCORRECT step.

Ans ✓ 1.

Zygote is kept outside and development takes place in a test tube

- ✗ 2. Fusion of egg and sperms is done outside the body
- ✗ 3. Complete development takes place in the uterus
- ✗ 4. Zygote is formed and after a week placed in the uterus

Question ID : 7518974616

Option 1 ID : 75189718464

Option 2 ID : 75189718461

Option 3 ID : 75189718463

Option 4 ID : 75189718462

Status : Not Answered

Chosen Option : --

Q.62 Which of the following will be the next member of the homologous series of hexene?

- Ans**
- ✗ 1. Pentene
 - ✗ 2. Pentane
 - ✗ 3. Heptane
 - ✓ 4. Heptene

Question ID : 7518973410

Option 1 ID : 75189713639

Option 2 ID : 75189713637

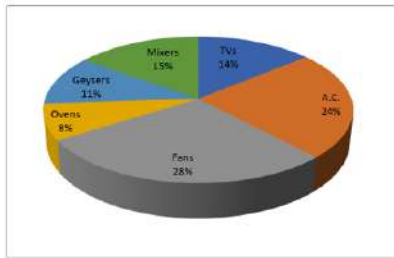
Option 3 ID : 75189713638

Option 4 ID : 75189713640

Status : Not Answered

Chosen Option : --

Q.63 The following chart shows the percentage of various products sold from an electronics goods shop during the year 2021. The total number of products sold from the shop during 2021 is 16800. Study the chart and answer the question.



How many more Fans have been sold from the shop in comparison to Ovens during 2021?

- Ans**
- 1. 3566
 - 2. 3360
 - 3. 3420
 - 4. 3200

Question ID : 7518975339
Option 1 ID : 75189721356
Option 2 ID : 75189721354
Option 3 ID : 75189721355
Option 4 ID : 75189721353
Status : Answered
Chosen Option : 2

Q.64 Some features of the circulatory system in humans are mentioned below. Select the INCORRECT option.

- Ans**
- 1. Lymph is also called tissue fluid
 - 2. Platelets help in clotting of blood
 - 3. Capillaries join to form veins
 - 4. Hypertension is caused by constriction of veins

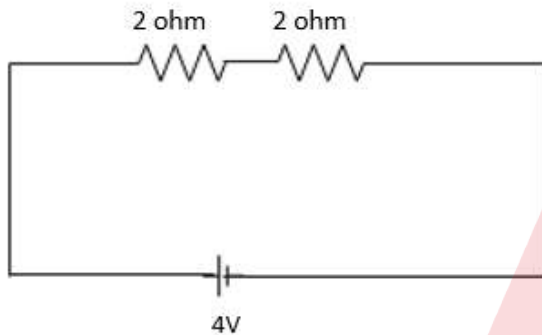
Question ID : 7518974596
Option 1 ID : 75189718384
Option 2 ID : 75189718381
Option 3 ID : 75189718382
Option 4 ID : 75189718383
Status : Not Answered
Chosen Option : --

Q.65 The sum of the first 8 prime numbers divided by 7 is equal to _____

- Ans
- 1. 14
 - 2. 11
 - 3. 13
 - 4. 10

Question ID : 7518975580
Option 1 ID : 75189722320
Option 2 ID : 75189722317
Option 3 ID : 75189722319
Option 4 ID : 75189722318
Status : Answered
Chosen Option : 2

Q.66 Calculate the total current in the circuit given below:



- Ans
- 1. 8A
 - 2. 4A
 - 3. 2A
 - 4. 1A

Question ID : 7518975472
Option 1 ID : 75189721888
Option 2 ID : 75189721887
Option 3 ID : 75189721886
Option 4 ID : 75189721885
Status : Not Answered
Chosen Option : --

Q.67 Find the value of $7 + \{4 + 3 \text{ of } 4 - (5 + 3 - 6 \div 2)\}$.

- Ans
- 1. 21
 - 2. 15
 - 3. 18
 - 4. 17

Question ID : 7518976007
Option 1 ID : 75189724026
Option 2 ID : 75189724027
Option 3 ID : 75189724025
Option 4 ID : 75189724028
Status : Answered
Chosen Option : 3

Q.68 The Gua mines of Jharkhand is associated with which of the following minerals?

- Ans
- 1. Bauxite
 - 2. Iron-ore
 - 3. Zinc
 - 4. Coal

Question ID : 7518976491
Option 1 ID : 75189725964
Option 2 ID : 75189725961
Option 3 ID : 75189725963
Option 4 ID : 75189725962
Status : Not Answered
Chosen Option : --

Q.69 In human males, why are testes present outside the abdominal cavity in a pouch called scrotum?

- Ans
- 1. It helps in maintaining low pressure than the body for sperm formation
 - 2. It secretes hormones for sperm formation
 - 3. It helps in maintaining temperature 2-3 degrees lower than the body for sperm formation
 - 4. It is richly supplied by blood vessels needed for sperm formation

Question ID : 7518974613
Option 1 ID : 75189718451
Option 2 ID : 75189718452
Option 3 ID : 75189718450
Option 4 ID : 75189718449
Status : Not Answered
Chosen Option : --

Q.70 Select the set in which the numbers are related in the same way as are the numbers of the following sets.

(NOTE : Operations should be performed on the whole numbers, without breaking down the numbers into its constituent digits. E.g. 13 – Operations on 13 such as adding / subtracting /multiplying etc. to 13 can be performed. Breaking down 13 into 1 and 3 and then performing mathematical operations on 1 and 3 is not allowed)

(5, 62, 7)

(8, 188, 12)

- Ans**
- 1. 6, 117, 19
 - 2. 11, 390, 13
 - 3. 10, 181, 9
 - 4. 7, 114, 9

Question ID : 7518974868

Option 1 ID : 75189719469

Option 2 ID : 75189719470

Option 3 ID : 75189719471

Option 4 ID : 75189719472

Status : Not Answered

Chosen Option : --

Q.71 Simplify: $\frac{3}{2}x^2 + 2x - \frac{3}{2} + \frac{x^2}{2} - 6x + \frac{1}{2}$.

- Ans**
- 1. $2x^2 - 4x + 1$
 - 2. $2x^2 + 4x + 1$
 - 3. $2x^2 - 4x - 1$
 - 4. $2x^2 + 4x - 1$

Question ID : 7518975909

Option 1 ID : 75189723633

Option 2 ID : 75189723636

Option 3 ID : 75189723634

Option 4 ID : 75189723635

Status : Answered

Chosen Option : 3

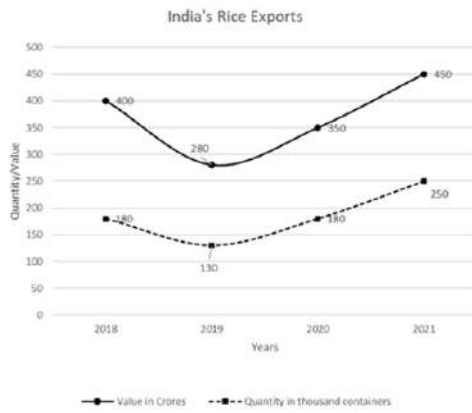
Q.72 Which of the following is/are useful effort(s) for sustainability of resources?

- a. Switching off unnecessary lights and fans
- b. Using lift instead of stairs
- c. Repairing leaking taps for conserving water
- d. Using empty containers to store things
- e. Going to school by your own car instead of cycling

- Ans
- 1. b and e
 - 2. Only e
 - 3. Only b
 - 4. a, c and d

Question ID : 7518974710
Option 1 ID : 75189718840
Option 2 ID : 75189718839
Option 3 ID : 75189718837
Option 4 ID : 75189718838
Status : Answered
Chosen Option : 4

Q.73 Study the following line graph carefully and answer the question.



Supposing if in 2020, the average value of goods sold per container was same as that of 2019, then what would be the new approximate value of total exports (in crores) in 2020 if number of containers in 2020 remains unchanged?

- Ans
- 1. 555
 - 2. 500
 - 3. 346
 - 4. 387

Question ID : 7518975114
 Option 1 ID : 75189720454
 Option 2 ID : 75189720456
 Option 3 ID : 75189720455
 Option 4 ID : 75189720453
 Status : Not Answered
 Chosen Option : --

Q.74 Eight persons, A, B, C, D, E, F, G and H, are sitting around a square table facing the centre of the table. Four of them are sitting at the corners while the other four are sitting at the exact centre of the sides of the table. C is sitting at one of the corners. F is to the immediate right of C. Only H is sitting between C and G. D is sitting at one of the corners. A is not sitting at any of the corners. E is to the immediate left of B. E is the immediate neighbour of F. Which two persons are sitting towards the left of G but to the right of B?

- Ans
- 1. C and H
 - 2. A and F
 - 3. A and E
 - 4. A and D

Question ID : 7518975136
 Option 1 ID : 75189720542
 Option 2 ID : 75189720544
 Option 3 ID : 75189720541
 Option 4 ID : 75189720543
 Status : Answered
 Chosen Option : 4

Q.75 _____ is the money that is available from an individual's salary after he/she pays local, state, and federal taxes.

- Ans**
- 1. Personal Income
 - 2. Per Capita Income
 - 3. Disposable Income
 - 4. National Income

Question ID : **7518974043**
 Option 1 ID : **75189716170**
 Option 2 ID : **75189716172**
 Option 3 ID : **75189716169**
 Option 4 ID : **75189716171**
 Status : **Not Answered**
 Chosen Option : --

Q.76 A and B together complete a work in 8 days. If B is 25% more efficient than A, then in how many days will A alone complete the same work?

- Ans**
- 1. 24 days
 - 2. 12 days
 - 3. 18 days
 - 4. 6 days

Question ID : **7518976096**
 Option 1 ID : **75189724383**
 Option 2 ID : **75189724381**
 Option 3 ID : **75189724382**
 Option 4 ID : **75189724384**
 Status : **Answered**
 Chosen Option : **3**

Q.77 L, M, N, O, P, Q and R, are sitting in a straight row, facing north. Only three people sit between Q and N. M and O are immediate neighbours. O is at the extreme right end of the row. R is at the immediate left of N. Who is at the fifth position from the left end of the row?

- Ans**
- 1. P
 - 2. N
 - 3. L
 - 4. M

Question ID : **7518974904**
 Option 1 ID : **75189719614**
 Option 2 ID : **75189719615**
 Option 3 ID : **75189719613**
 Option 4 ID : **75189719616**
 Status : **Answered**
 Chosen Option : **2**

Q.78 Which of the following triads is NOT a Dobereiner's triad?

- (i) Li, Na, K
- (ii) Ca, Sr, Ba
- (iii) N, P, Sb
- (iv) Cl, Br, I

- Ans
- 1. Only ii
 - 2. Only i
 - 3. Only iii
 - 4. Only iv

Question ID : 7518973698

Option 1 ID : 75189714790

Option 2 ID : 75189714789

Option 3 ID : 75189714791

Option 4 ID : 75189714792

Status : Not Answered

Chosen Option : --

Q.79

Saga Dawa festival is celebrated in which of the following Indian states?

Ans

- 1. Uttar Pradesh
- 2. Madhya Pradesh
- 3. Arunachal Pradesh
- 4. Kerala

Question ID : 7518973810

Option 1 ID : 75189715240

Option 2 ID : 75189715239

Option 3 ID : 75189715238

Option 4 ID : 75189715237

Status : Not Answered

Chosen Option : --

Q.80 What will come in place of the question mark (?) in the following equation if '+' and '-' are interchanged and also 'x' and '/' are interchanged?

$$42 + 7 + 24 \times 6 - 3 = ?$$

- Ans**
- 1. 13
 - 2. 12
 - 3. 10
 - 4. 14

Question ID : 7518975325
 Option 1 ID : 75189721299
 Option 2 ID : 75189721298
 Option 3 ID : 75189721297
 Option 4 ID : 75189721300
 Status : Answered
 Chosen Option : 2

Q.81 A statement is given, followed by four conclusions given in the options. Find out which conclusion is true based on the given statement.

Statement: $G < D < R = T > Y > Q = H$

- Ans**
- 1. $G = T$
 - 2. $D < T$
 - 3. $H > T$
 - 4. $R < G$

Question ID : 7518975190
 Option 1 ID : 75189720760
 Option 2 ID : 75189720758
 Option 3 ID : 75189720759
 Option 4 ID : 75189720757
 Status : Answered
 Chosen Option : 2

Q.82 In this question, a statement is followed by two conclusions. Which of the two conclusions is/are true with respect to the statement?

Statement: $A = F \geq S > H < Z > R = G$

Conclusions:

I. $S < G$

II. $S \geq A$

- Ans**
- 1. Only conclusion I is true
 - 2. Only conclusion II is true
 - 3. Both conclusions I and II are true
 - 4. Neither conclusion I nor II is true

Question ID : 7518974962
 Option 1 ID : 75189719845
 Option 2 ID : 75189719846
 Option 3 ID : 75189719847
 Option 4 ID : 75189719848
 Status : Answered
 Chosen Option : 4

Q.83 Which of the following is a quadratic equation whose roots are $\frac{7}{3}$ and $\frac{12}{5}$?

- Ans
- 1. $15x^2 - 70x + 84 = 0$
 - 2. $15x^2 - 72x + 84 = 0$
 - 3. $x^2 - 71x + 84 = 0$
 - 4. $15x^2 - 71x + 84 = 0$

Question ID : 7518975735
Option 1 ID : 75189722937
Option 2 ID : 75189722938
Option 3 ID : 75189722939
Option 4 ID : 75189722940
Status : Answered
Chosen Option : 4

Q.84 A cuboidal block, 12 cm by 24 cm by 30 cm, is cut up into an exact number of identical cubes. The least possible number of such cubes is:

- Ans
- 1. 45
 - 2. 40
 - 3. 55
 - 4. 50

Question ID : 7518976369
Option 1 ID : 75189725475
Option 2 ID : 75189725476
Option 3 ID : 75189725473
Option 4 ID : 75189725474
Status : Not Answered
Chosen Option : --

Q.85 Find the value of $\sqrt{\frac{0.030625}{0.001225}}$.

- Ans
- 1. 25
 - 2. 15
 - 3. 20
 - 4. 5

Question ID : 7518976015
Option 1 ID : 75189724059
Option 2 ID : 75189724058
Option 3 ID : 75189724060
Option 4 ID : 75189724057
Status : Marked For Review
Chosen Option : 4

Q.86 A convex lens produces a magnification of -3 for an object placed at 1.5 m from the lens. Find the image distance (with correct sign).

- Ans**
- 1. -4.5 m
 - 2. 4.5 m
 - 3. 0.5 m
 - 4. -0.5 m

Question ID : **7518975415**
Option 1 ID : **75189721658**
Option 2 ID : **75189721657**
Option 3 ID : **75189721659**
Option 4 ID : **75189721660**
Status : **Not Answered**
Chosen Option : --

Q.87 Each vowel in the word OPTICAL is changed to the letter following it in the English alphabetical order and each consonant is changed to the letter preceding it in the English alphabetical order. Which of the following letters will appear twice in the group of letters thus formed?

- Ans**
- 1. J
 - 2. P
 - 3. O
 - 4. B

Question ID : **7518974794**
Option 1 ID : **75189719176**
Option 2 ID : **75189719173**
Option 3 ID : **75189719174**
Option 4 ID : **75189719175**
Status : **Answered**
Chosen Option : 4

Q.88 Which of the following options states the different ways of excretion in plants?

- Ans**
- 1. Transpiration, diffusion and storage
 - 2. Only diffusion and storage
 - 3. Only transpiration and diffusion
 - 4. Only transpiration and storage

Question ID : **7518974560**
Option 1 ID : **75189718240**
Option 2 ID : **75189718239**
Option 3 ID : **75189718237**
Option 4 ID : **75189718238**
Status : **Not Answered**
Chosen Option : --

Q.89 In the given letter-cluster pairs, the first letter-cluster is related to the second letter-cluster following a certain logic. Study the given pairs carefully, and from the given options, select the pair that follows the same logic.

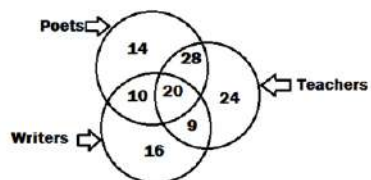
HCM : MHR

FET : KJY

- Ans**
- 1. PRT : TPS
 - 2. UFL : LKU
 - 3. GHK : HKJ
 - 4. UPJ: ZUO

Question ID : 7518974852
 Option 1 ID : 75189719405
 Option 2 ID : 75189719408
 Option 3 ID : 75189719406
 Option 4 ID : 75189719407
 Status : Answered
 Chosen Option : 4

Q.90 Study the given diagram carefully and answer the question. The numbers in different sections indicate the number of persons.



Which of the following statements is correct on the basis of the above diagram?

- Ans**
- 1. The number of teachers who are both writers and poets is 20.
 - 2. The number of poets who are also teachers but not writers is 48.
 - 3. The number of poets who are also teachers is 44.
 - 4. The number of writers who are neither teachers nor poets is 10.

Question ID : 7518975186
 Option 1 ID : 75189720741
 Option 2 ID : 75189720742
 Option 3 ID : 75189720744
 Option 4 ID : 75189720743
 Status : Answered
 Chosen Option : 1

Q.91

In January 2022, which village became the first open-defecation free (ODF) Plus village of Mizoram?

Ans

- 1. Khanpui
- 2. Selam
- 3. Dulte
- 4. South Maubuang

Question ID : 7518973791

Option 1 ID : 75189715161

Option 2 ID : 75189715162

Option 3 ID : 75189715164

Option 4 ID : 75189715163

Status : Not Answered

Chosen Option : --

Q.92

A magnet, when moved near a coil, produces an induced potential difference in the coil. What happens when we increase the speed of the magnet near the coil?

Ans

- 1. The induced potential difference remains the same.
- 2. The induced potential difference in the coil increases.
- 3. The induced current in the coil remains the same.
- 4. The induced potential difference in the coil decreases.

Question ID : 7518975538

Option 1 ID : 75189722151

Option 2 ID : 75189722149

Option 3 ID : 75189722152

Option 4 ID : 75189722150

Status : Not Answered

Chosen Option : --

Q.93 P started from a point facing north and then turned right and ran for 24 m east, turned left and walked for 26 m. He then turned left and first ran for 24 m and then walked for 6 m and then turned right and walked for 6 m, turned right again, and ran for 30 m. How much distance did he cover walking, and in which direction is he facing now?

(All turns are 90 degree turns only)

- Ans**
- 1. 38 m, East
 - 2. 38 m, West
 - 3. 126 m, East
 - 4. 126 m, West

Question ID : 7518974847
Option 1 ID : 75189719386
Option 2 ID : 75189719385
Option 3 ID : 75189719388
Option 4 ID : 75189719387
Status : Answered
Chosen Option : 3

Q.94 Which of the following is NOT a property of similar triangles?

- Ans**
- 1. Ratio of corresponding sides = Ratio of corresponding altitudes
 - 2. Ratio of corresponding sides = Ratio of corresponding perimeters
 - 3. Ratio of corresponding sides = Ratio of corresponding medians
 - 4. Ratio of any two angles = Ratio of any two medians

Question ID : 7518975989
Option 1 ID : 75189723955
Option 2 ID : 75189723953
Option 3 ID : 75189723954
Option 4 ID : 75189723956
Status : Not Answered
Chosen Option : --

Q.95 Each vowel in the word INCURABLE is changed to the letter following it in the English alphabetical order and each consonant is changed to the letter preceding it in the English alphabetical order. How many vowels will be there in the new word thus formed?

- Ans**
- 1. 1
 - 2. 4
 - 3. 3
 - 4. 2

Question ID : 7518974795
Option 1 ID : 75189719178
Option 2 ID : 75189719180
Option 3 ID : 75189719179
Option 4 ID : 75189719177
Status : Answered
Chosen Option : 1

Q.96 As of July 2022, what is the required age bracket of a subscriber to the Atal Pension Yojana?

- Ans
- 1. 14-35 years
 - 2. 16-25 years
 - 3. 18-40 years
 - 4. 21-60 years

Question ID : 7518976554
Option 1 ID : 75189726216
Option 2 ID : 75189726213
Option 3 ID : 75189726214
Option 4 ID : 75189726215
Status : Answered
Chosen Option : 3

Q.97 Find x, if the median is 28.5.

CI	0-10	10-20	20-30	30-40	40-50	50-60
F	5	X	20	15	7	5

- Ans
- 1. 8
 - 2. 7
 - 3. 2
 - 4. 4

Question ID : 7518975685
Option 1 ID : 75189722739
Option 2 ID : 75189722740
Option 3 ID : 75189722737
Option 4 ID : 75189722738
Status : Not Answered
Chosen Option : --

Q.98 A spherical mirror converges a beam of light, at a given point on the principal axis. Which of the following statement(s) about the mirror is/are true?

- (a) The mirror used is concave
- (b) The mirror has positive focal length
- (c) The point of convergence is the principal focus of the mirror

Ans 1. Both (a) and (b)

2. Only (a)

3. Only (b)

4. Both (a) and (c)

Question ID : 7518975365

Option 1 ID : 75189721460

Option 2 ID : 75189721457

Option 3 ID : 75189721458

Option 4 ID : 75189721459

Status : Not Answered

Chosen Option : --

Q.99 An electric heater is rated 2200 W at 220 V. The minimum rating of the fuse wire to be connected to the device is:

Ans 1. 20 A

2. 5 A

3. 10 A

4. 22 A

Question ID : 7518975504

Option 1 ID : 75189722015

Option 2 ID : 75189722013

Option 3 ID : 75189722014

Option 4 ID : 75189722016

Status : Not Answered

Chosen Option : --

Q.100 What is the correct order of metallic character of the following metals?

Ans 1. Ba < Cs < Mg < Na

2. Cs < Ba < Na < Mg

3. Na < Mg < Cs < Ba

4. Mg < Na < Ba < Cs

Question ID : 7518973737

Option 1 ID : 75189714948

Option 2 ID : 75189714947

Option 3 ID : 75189714946

Option 4 ID : 75189714945

Status : Not Answered

Chosen Option : --