



रेल भर्ती बोर्ड / RAILWAY RECRUITMENT BOARDS
सी ई एन आर आर सी - ०१/२०१९ - CEN RRC - 01/2019



Roll Number	
Candidate Name	
Test Center Name	iON Digital Zone iDZ Anantapur
Test Date	23/08/2022
Test Time	9:00 AM - 10:30 AM
Subject	Level 1

* Note

Correct Answer will carry 1 mark per Question.
Incorrect Answer will carry 1/3 Negative mark per Question.

- Options shown in green color with a tick icon are correct.
- Chosen option on the right of the question indicates the option selected by the candidate.

Section : Level 1

Q.1 A cyclist covers a distance of 2.5 km in 4 minutes 10 seconds. How long will he take to cover a distance of 6 km at the same speed?

- Ans
- 1. 12 minutes
 - 2. 11 minutes
 - 3. 10 minutes
 - 4. 9 minutes

Question ID : 7518976290
Option 1 ID : 75189725160
Option 2 ID : 75189725157
Option 3 ID : 75189725158
Option 4 ID : 75189725159

Status : Answered
Chosen Option : 3

Test Prime

ALL EXAMS,
ONE SUBSCRIPTION



40,000+
Mock Tests



Personalised
Report Card



Unlimited
Re-Attempt



500+
Exam Covered



Previous Year
Papers



500%
Refund



DOWNLOAD NOW

Q.2 Study the given table and answer the question that follows.

The table shows value of Indian exports across different goods for different years.

Year	2021	2020	2019	2018	2017	2016
Items	(Amount in ₹ Crores)					
Fruits	85	75	70	61	35	30
Pulses	35	20	35	60	70	40
IT products	200	160	100	120	90	85
Defence products	120	80	110	85	60	40
Dairy products	60	62	68	72	40	30

What is the yearly average exports(combined) of fruits, IT products and defence products for 2018 to 2020?

- Ans**
- 1. ₹282 crores
 - 2. ₹165 crores
 - 3. ₹280 crores
 - 4. ₹287 crores

Question ID : 7518974890
Option 1 ID : 75189719558
Option 2 ID : 75189719559
Option 3 ID : 75189719557
Option 4 ID : 75189719560

Status : Answered

Chosen Option : 4

Q.3 In a certain code language, TOUGH is written as 20152178 and PLEAD is written as 1612514. How will CLOVE be written in the same language?

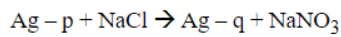
- Ans**
- 1. 31115215
 - 2. 31215225
 - 3. 31215324
 - 4. 31315235

Question ID : 7518975242
Option 1 ID : 75189720968
Option 2 ID : 75189720965
Option 3 ID : 75189720967
Option 4 ID : 75189720966

Status : Answered

Chosen Option : 2

Q.4 What will come in place of p and q, respectively, in the given double displacement reaction?



- Ans
- 1. NO_3 and Cl
 - 2. Cl and NO_3
 - 3. NO_3 and NO_3
 - 4. Cl and Cl

Question ID : 7518973439
 Option 1 ID : 75189713756
 Option 2 ID : 75189713754
 Option 3 ID : 75189713753
 Option 4 ID : 75189713755
 Status : Answered
 Chosen Option : 1

Q.5 In February 2022, India became the first country in the world to play _____ One Day International cricket matches.

- Ans
- 1. 800
 - 2. 1100
 - 3. 1000
 - 4. 900

Question ID : 7518976459
 Option 1 ID : 75189725836
 Option 2 ID : 75189725833
 Option 3 ID : 75189725834
 Option 4 ID : 75189725835
 Status : Answered
 Chosen Option : 3

Q.6 Select the option that represents the letters that, when placed from left to right in the same sequence in the blanks below, will complete the letter series.

C _ P R _ D T _ R N _ T _ R N _ T P _ N

- Ans
- 1. TNPEPFR
 - 2. TPNDPFR
 - 3. TNTEPFP
 - 4. PNPERFP

Question ID : 7518975218
 Option 1 ID : 75189720872
 Option 2 ID : 75189720870
 Option 3 ID : 75189720871
 Option 4 ID : 75189720869
 Status : Answered
 Chosen Option : 1

Q.7 In the given letter-cluster pairs, the first letter-cluster is related to the second letter-cluster following a certain logic. Study the given pairs carefully, and from the given options, select the pair that follows the same logic.

TOP : VRU

XOR : ZRW

- Ans**
- 1. QIP : SLV
 - 2. NET : PGY
 - 3. NOR : PRW
 - 4. TOM : VRQ

Question ID : 7518975058
Option 1 ID : 75189720230
Option 2 ID : 75189720229
Option 3 ID : 75189720232
Option 4 ID : 75189720231
Status : Answered
Chosen Option : 3

Q.8 The Union Budget 2022-23 has proposed to reduce the surcharge of cooperative societies from _____ to 7% for those whose income is between ₹1 crore and ₹10 crore.

- Ans**
- 1. 11%
 - 2. 10%
 - 3. 12%
 - 4. 9%

Question ID : 7518973861
Option 1 ID : 75189715443
Option 2 ID : 75189715442
Option 3 ID : 75189715444
Option 4 ID : 75189715441
Status : Not Answered
Chosen Option : --

Q.9 Which of the following materials is preferably used in making heating elements of electrical heating devices?

- Ans**
- 1. Tungsten
 - 2. Tin-lead alloy
 - 3. Constantan
 - 4. Nichrome

Question ID : 7518975484
Option 1 ID : 75189721936
Option 2 ID : 75189721935
Option 3 ID : 75189721934
Option 4 ID : 75189721933
Status : Answered
Chosen Option : 4

Q.10 4 people A, B, C and D are sitting in a straight line, facing north. A and C are not sitting adjacent to each other, while C and B are sitting adjacent to each other. Which of the following sitting arrangements is NOT possible?

- Ans**
- 1. CBAD
 - 2. DABC
 - 3. BCAD
 - 4. ABCD

Question ID : 7518974714
Option 1 ID : 75189718855
Option 2 ID : 75189718853
Option 3 ID : 75189718856
Option 4 ID : 75189718854
Status : Answered
Chosen Option : 3

Q.11 Which of the following home appliances does NOT use an electric motor?

- Ans**
- 1. Electric washing machine
 - 2. Electric mixer
 - 3. Electric iron
 - 4. Electric fan

Question ID : 7518975528
Option 1 ID : 75189722111
Option 2 ID : 75189722110
Option 3 ID : 75189722112
Option 4 ID : 75189722109
Status : Answered
Chosen Option : 3

Q.12 Three statements are given, followed by two conclusions numbered I and II. Assuming the statements to be true, even if they seem to be at variance with commonly known facts, decide which of the conclusions logically follow(s) from the statements.

Statements:

All sketches are cards.

All cards are posters.

Some sketches are folders.

Conclusions:

I. Some folders are posters.

II. Some cards are folders.

- Ans**
- 1. Only conclusion II follows
 - 2. Only conclusion I follows
 - 3. Either conclusion I or II follows
 - 4. Both conclusions I and II follow

Question ID : 7518975168
Option 1 ID : 75189720670
Option 2 ID : 75189720669
Option 3 ID : 75189720672
Option 4 ID : 75189720671
Status : Answered
Chosen Option : 4

Q.13 The value of $\sqrt{144} + \sqrt{0.0169} - \sqrt{4.41} =$

- Ans
- 1. 15.4
 - 2. 10.03
 - 3. 14.23
 - 4. 11.2

Question ID : 7518975565
Option 1 ID : 75189722259
Option 2 ID : 75189722257
Option 3 ID : 75189722258
Option 4 ID : 75189722260
Status : Answered
Chosen Option : 3

Q.14 Two resistors of $4\ \Omega$ each are connected in parallel to a 5 V battery source. The total current in the circuit is:

- Ans
- 1. 5 A
 - 2. 20 A
 - 3. 10 A
 - 4. 2.5 A

Question ID : 7518975453
Option 1 ID : 75189721810
Option 2 ID : 75189721812
Option 3 ID : 75189721811
Option 4 ID : 75189721809
Status : Answered
Chosen Option : 4

Q.15 The average of thirteen consecutive integers is 36. If two times the smallest of these 13 integers is added to the largest of these 13 integers, what will be the sum obtained?

- Ans
- 1. 115
 - 2. 121
 - 3. 102
 - 4. 110

Question ID : 7518976304
Option 1 ID : 75189725214
Option 2 ID : 75189725213
Option 3 ID : 75189725216
Option 4 ID : 75189725215
Status : Answered
Chosen Option : 3

Q.16 Which of the following numbers will replace the question mark (?) in the given series?

13, 27, 56, 115, 234,?

- Ans
- 1. 346
 - 2. 332
 - 3. 482
 - 4. 473

Question ID : 7518975283
Option 1 ID : 75189721130
Option 2 ID : 75189721129
Option 3 ID : 75189721132
Option 4 ID : 75189721131
Status : Answered
Chosen Option : 4

Q.17 Consider the statements below and identify the correct answer.

Statement-I: Modern periodic table has 18 vertical columns known as groups.

Statement-II: Modern periodic table has 7 horizontal rows known as periods.

- Ans
- 1. Both statements are correct.
 - 2. Both statements are incorrect.
 - 3. Statement I is correct, Statement II is incorrect.
 - 4. Statement II is correct, Statement I is incorrect.

Question ID : 7518973718
Option 1 ID : 75189714871
Option 2 ID : 75189714872
Option 3 ID : 75189714869
Option 4 ID : 75189714870
Status : Answered
Chosen Option : 1

Q.18 From which state of India did ISRO successfully test fire the Vikas engine, that would power India's first human-carrying rocket Gaganyaan?

- Ans
- 1. Punjab
 - 2. Tamil Nadu
 - 3. Haryana
 - 4. Rajasthan

Question ID : 7518973764
Option 1 ID : 75189715054
Option 2 ID : 75189715053
Option 3 ID : 75189715055
Option 4 ID : 75189715056
Status : Answered
Chosen Option : 4

Q.19 If $x^2 + xy + x = 18$ and $y^2 + xy + y = 24$, then the value of $x + y$ is:

- Ans
- 1. -5 or 6
 - 2. 5 or -6
 - 3. 6 or -7
 - 4. -6 or 7

Question ID : 7518976346

Option 1 ID : 75189725383

Option 2 ID : 75189725381

Option 3 ID : 75189725382

Option 4 ID : 75189725384

Status : Answered

Chosen Option : 3

Q.20 Four houses, A, B, C and D, are located in the same colony. House A is 300 m to the north of House D. House C is 400 m to the east of House B. House A is 300 m to the south of House B. In which direction is House D with reference to House B?

- Ans
- 1. West
 - 2. North
 - 3. South
 - 4. East

Question ID : 7518975259

Option 1 ID : 75189721034

Option 2 ID : 75189721035

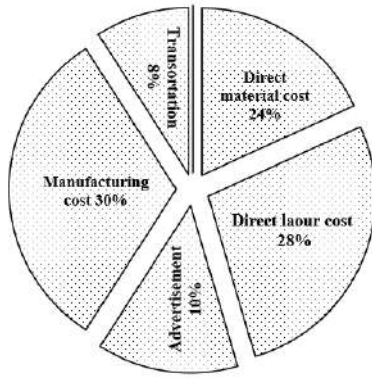
Option 3 ID : 75189721036

Option 4 ID : 75189721033

Status : Answered

Chosen Option : 3

Q.21 The following pie chart shows the percentage distribution of the expenditure incurred in manufacturing a power bank. Study the pie chart and answer the question.



If 100 power banks are manufactured and the manufacturing cost on them amounts to ₹50,000, then what should be the selling price of the power banks so that the manufacturer can earn a profit of 50%?

- Ans**
- 1. ₹2400
 - 2. ₹2500
 - 3. ₹2200
 - 4. ₹3000

Question ID : 7518975124
 Option 1 ID : 75189720494
 Option 2 ID : 75189720496
 Option 3 ID : 75189720495
 Option 4 ID : 75189720493

Status : Answered

Chosen Option : 2

Q.22 Given below are some conclusions of Mendel's work on pea plants. All of them are correct except one. Select the INCORRECT conclusion.

Ans 1. Genes are inherited as distinct units.

2.

Segregation of genes takes place during formation of gametes.

3. Each gamete has two copies of the same gene.

4. Genes come in pairs.

Question ID : 7518974640
 Option 1 ID : 75189718558
 Option 2 ID : 75189718559
 Option 3 ID : 75189718560
 Option 4 ID : 75189718557

Status : Answered

Chosen Option : 3

Q.23 In this question, a statement is followed by two conclusions. Which of the two conclusions is/are true with respect to the statement?

Statement: $C \leq F < E = D > G \geq H < I$

Conclusions:

I. $D > C$

II. $E < H$

- Ans
- 1. Neither conclusion I nor II is true
 - 2. Only conclusion II is true
 - 3. Only conclusion I is true
 - 4. Both conclusions I and II are true

Question ID : 7518974964

Option 1 ID : 75189719856

Option 2 ID : 75189719854

Option 3 ID : 75189719853

Option 4 ID : 75189719855

Status : Answered

Chosen Option : 1

Q.24 What is the main reason for the pollution of River Ganga by coliform bacteria?

- Ans
- 1. Immersion of unburnt corpses
 - 2. Chemical effluents from industries
 - 3. Washing of clothes
 - 4. Untreated sewage dumped in it

Question ID : 7518974684

Option 1 ID : 75189718735

Option 2 ID : 75189718734

Option 3 ID : 75189718733

Option 4 ID : 75189718736

Status : Not Answered

Chosen Option : --

Q.25 Oral pills used for birth control change the hormonal balance of the body. How do these prevent pregnancy? Select the correct option.

- Ans
- 1. Lining of uterus breaks off
 - 2. Eggs are released but no fertilisation
 - 3. No formation of eggs
 - 4. Eggs are not released and no fertilisation

Question ID : 7518974625

Option 1 ID : 75189718499

Option 2 ID : 75189718500

Option 3 ID : 75189718498

Option 4 ID : 75189718497

Status : Answered

Chosen Option : 3

Q.26 Each of A, B, C, D, E and F has an exam on a different day of a week starting from Monday and ending on Sunday of the same week. Thursday is the only gap day on which no exam is held. E's exam is on Saturday. The exams of A and F are separated by one day that is the gap day. D's exam is immediately before F but is immediately after C. B's exam is on Sunday. On which day is D's exam held?

- Ans**
- 1. Friday
 - 2. Tuesday
 - 3. Wednesday
 - 4. Monday

Question ID : 7518975149
Option 1 ID : 75189720596
Option 2 ID : 75189720594
Option 3 ID : 75189720595
Option 4 ID : 75189720593
Status : Answered
Chosen Option : 2

Q.27 Which of the following numbers will replace the question mark (?) in the given series?

25, 36, 49, 66, 85, ?

- Ans**
- 1. 103
 - 2. 110
 - 3. 105
 - 4. 108

Question ID : 7518975067
Option 1 ID : 75189720266
Option 2 ID : 75189720268
Option 3 ID : 75189720265
Option 4 ID : 75189720267
Status : Answered
Chosen Option : 4

Q.28 Ten years ago, a mother was 3 times as old as her son. 5 years ago she was $\frac{5}{2}$ times her son's age. What is her present age?

- Ans**
- 1. 30 years
 - 2. 35 years
 - 3. 55 years
 - 4. 45 years

Question ID : 7518975722
Option 1 ID : 75189722888
Option 2 ID : 75189722887
Option 3 ID : 75189722885
Option 4 ID : 75189722886
Status : Answered
Chosen Option : 4

Q.29 Which of following is the world's largest food security programme extended till September 2022 by the Union Cabinet, Government of India in March 2022?

- Ans**
- 1. Annapurna Scheme
 - 2. Swaranjayanti Gram Swarozgar Yojana
 - 3. Pradhan Mantri Garib Kalyan Anna Yojana
 - 4. Mahatma Gandhi National Rural Employment Guarantee Act

Question ID : 7518974162
Option 1 ID : 75189716645
Option 2 ID : 75189716646
Option 3 ID : 75189716648
Option 4 ID : 75189716647
Status : Answered
Chosen Option : 3

Q.30 If a sum of money doubles itself in 10 years at compound interest, then in how many years will it become 16 times of itself at the same rate?

- Ans**
- 1. 30
 - 2. 20
 - 3. 40
 - 4. 10

Question ID : 7518975853
Option 1 ID : 75189723411
Option 2 ID : 75189723410
Option 3 ID : 75189723412
Option 4 ID : 75189723409
Status : Answered
Chosen Option : 3

Q.31 Which of the following is NOT a true statement?

- Ans**
- 1. Diagonals of a rhombus bisect each other at right angles.
 - 2. All squares are rhombuses.
 - 3. Sum of any pair of adjacent angles of a rhombus is not 180° .
 - 4. All sides of a rhombus are congruent.

Question ID : 7518975993
Option 1 ID : 75189723971
Option 2 ID : 75189723969
Option 3 ID : 75189723972
Option 4 ID : 75189723970
Status : Answered
Chosen Option : 3

Q.32 A compound X is transparent crystalline solid. It has cleansing properties and used in manufacture of glass. Compound X is:

- Ans
- 1. baking soda
 - 2. sodium hydroxide
 - 3. bleaching powder
 - 4. washing soda

Question ID : 7518973666
Option 1 ID : 75189714661
Option 2 ID : 75189714663
Option 3 ID : 75189714664
Option 4 ID : 75189714662
Status : Not Answered
Chosen Option : --

Q.33 Solve: $2(5x - 3) + 3(3x - 5) = 93$

- Ans
- 1. $x = 6$
 - 2. $x = 9$
 - 3. $x = -6$
 - 4. $x = -9$

Question ID : 7518975912
Option 1 ID : 75189723645
Option 2 ID : 75189723647
Option 3 ID : 75189723646
Option 4 ID : 75189723648
Status : Answered
Chosen Option : 1

Q.34 In a dynamo, electric current is produced using the principle of:

- Ans
- 1. electromagnetism
 - 2. electric conduction
 - 3. electromagnetic radiation
 - 4. electromagnetic induction

Question ID : 7518975542
Option 1 ID : 75189722166
Option 2 ID : 75189722165
Option 3 ID : 75189722167
Option 4 ID : 75189722168
Status : Answered
Chosen Option : 1

Q.35 The value of

$$(3^0 + 3^{-2} + 3^{-1}) \times 27 =$$

- Ans
- 1. 3
 - 2. 32
 - 3. 23
 - 4. 39

Question ID : 7518975556
Option 1 ID : 75189722224
Option 2 ID : 75189722222
Option 3 ID : 75189722221
Option 4 ID : 75189722223
Status : Answered
Chosen Option : 4

Q.36 Which of the following languages is NOT a classical language in India as on June 2022?

- Ans
- 1. Odia
 - 2. Bengali
 - 3. Sanskrit
 - 4. Tamil

Question ID : 7518974183
Option 1 ID : 75189716732
Option 2 ID : 75189716730
Option 3 ID : 75189716729
Option 4 ID : 75189716731
Status : Answered
Chosen Option : 2

Q.37 Select the set in which the numbers are related in the same way as are the numbers of the following sets.

(NOTE : Operations should be performed on the whole numbers, without breaking down the numbers into its constituent digits. E.g. 13 – Operations on 13 such as adding /deleting /multiplying etc. to 13 can be performed. Breaking down 13 into 1 and 3 and then performing mathematical operations on 1 and 3 is not allowed)

(4, 3, 16)

(3, 5, 19)

- Ans
- 1. (8, 2, 20)
 - 2. (8, 1, 18)
 - 3. (5, 2, 49)
 - 4. (3, 2, 12)

Question ID : 7518975084
Option 1 ID : 75189720333
Option 2 ID : 75189720336
Option 3 ID : 75189720335
Option 4 ID : 75189720334
Status : Answered
Chosen Option : 1

Q.38 In a certain code language, ROUTINE is written as UORTENI and PLAYERS is written as ALPYSRE. How will BANKING be written in the same language?

- Ans**
- 1. NABGNIK
 - 2. NABKGNI
 - 3. BNAKIGN
 - 4. NBAIGKN

Question ID : 7518975245
Option 1 ID : 75189720978
Option 2 ID : 75189720977
Option 3 ID : 75189720979
Option 4 ID : 75189720980
Status : Answered
Chosen Option : 2

Q.39 As per Annual Status of Education Report (rural) – 2021, what was the enrolment rate of children enrolled in government schools in the year 2021?

- Ans**
- 1. 65.3%
 - 2. 72.5%
 - 3. 70.3%
 - 4. 67.5%

Question ID : 7518976542
Option 1 ID : 75189726165
Option 2 ID : 75189726168
Option 3 ID : 75189726167
Option 4 ID : 75189726166
Status : Not Answered
Chosen Option : --

Q.40 Selectively permeable membranes are those that allow penetration of _____.

- Ans**
- 1. neither solvent nor solute molecules
 - 2. only solvent molecules but not solute molecules
 - 3. both solvent and solute molecules
 - 4. only solute molecules but not solvent molecules

Question ID : 7518974357
Option 1 ID : 75189717425
Option 2 ID : 75189717428
Option 3 ID : 75189717427
Option 4 ID : 75189717426
Status : Answered
Chosen Option : 3

Q.41 Study the given letter, number, symbol series and answer the question that follows.

7 T % N 9 * M S 3 U = L 8 Y @ G & 3 E > 5 & R 3 ! K # 7 % H = Y 6

Find out the total number of letters that are immediately followed by a number and immediately preceded by a symbol.

- Ans
- 1. 1
 - 2. 2
 - 3. 4
 - 4. 3

Question ID : 7518974798
 Option 1 ID : 75189719189
 Option 2 ID : 75189719190
 Option 3 ID : 75189719192
 Option 4 ID : 75189719191
 Status : Answered
 Chosen Option : 3

Q.42 The insoluble substance formed in a solution during a chemical reaction is known as _____.

- Ans
- 1. residue
 - 2. aqueous solution
 - 3. soluble salt
 - 4. precipitate

Question ID : 7518973436
 Option 1 ID : 75189713741
 Option 2 ID : 75189713743
 Option 3 ID : 75189713742
 Option 4 ID : 75189713744
 Status : Answered
 Chosen Option : 4

Q.43 एक कथन और उसके बाद दो धारणाएं I और II दी गई हैं। कथन में दी गई जानकारी को सत्य मानते हुए विचार करें, और बताएं कि दी गई धारणाओं में से कौन सी कथन में निहित हैं?

कथन:

इमारत की बाहरी दीवारों में कई दरारें हैं, जिनकी मरम्मत दीवार की पेंटिंग शुरू होने से पहले की जानी चाहिए, जिससे बाद में रिसाव जैसी समस्याओं का सामना न करना पड़े।

धारणा:

- I. बाहरी दीवारों को पेंट करने से रिसाव की समस्याएं हो सकती हैं।
- II. बाहरी दीवारों में दरारों के कारण रिसाव की समस्याएं हो सकती हैं।

- Ans
- 1. केवल धारणा II निहित है
 - 2. न तो धारणा I, और न ही II निहित है
 - 3. धारणा I और II, दोनों निहित हैं
 - 4. केवल धारणा I निहित है

Question ID : 7518976407
 Option 1 ID : 75189725626
 Option 2 ID : 75189725627
 Option 3 ID : 75189725628
 Option 4 ID : 75189725625
 Status : Answered
 Chosen Option : 1

Q.44 Consider the below statements and identify the correct answer.

Statement-I: Most carbon compounds are poor conductors of electricity.

Statement-II: Carbon compounds have low melting and boiling points.

- Ans
- 1. Both the statements are false
 - 2. Statement-II is true, and Statement-I is false
 - 3. Statement-I is true, and Statement-II is false
 - 4. Both the statements are true

Question ID : 7518973544
Option 1 ID : 75189714174
Option 2 ID : 75189714176
Option 3 ID : 75189714175
Option 4 ID : 75189714173
Status : Answered
Chosen Option : 3

Q.45 In the year 2000, Monu was 3 times his sister's age. In 2010, he was 24 years older than her. Find Monu's age in 2010.

- Ans
- 1. 38 years
 - 2. 46 years
 - 3. 52 years
 - 4. 62 years

Question ID : 7518975715
Option 1 ID : 75189722857
Option 2 ID : 75189722860
Option 3 ID : 75189722859
Option 4 ID : 75189722858
Status : Answered
Chosen Option : 2

Q.46 What is the angular distance covered by the second hand of a correct clock in 12 minutes?

- Ans
- 1. 4762°
 - 2. 5120°
 - 3. 4320°
 - 4. 5611°

Question ID : 7518976429
Option 1 ID : 75189725714
Option 2 ID : 75189725715
Option 3 ID : 75189725713
Option 4 ID : 75189725716
Status : Answered
Chosen Option : 3

Q.47 V, W, X, Y, Z, A and B are seven boxes kept one over the other but not necessarily in the same order. A is kept immediately above W. Only four boxes are kept between B and W. Only one box is kept between V and X. X is kept immediately above A. B is kept at the topmost position. How many boxes are kept between Z and Y?

- Ans**
- 1. Two
 - 2. Three
 - 3. Four
 - 4. One

Question ID : 7518974921
 Option 1 ID : 75189719682
 Option 2 ID : 75189719683
 Option 3 ID : 75189719684
 Option 4 ID : 75189719681
 Status : Answered
 Chosen Option : 2

Q.48 There are three numbers which are co-prime to one other such that the product of the first two is 357 and that of the last two is 609. What is the sum of the three numbers?

- Ans**
- 1. 91
 - 2. 67
 - 3. 83
 - 4. 75

Question ID : 7518976245
 Option 1 ID : 75189724980
 Option 2 ID : 75189724977
 Option 3 ID : 75189724978
 Option 4 ID : 75189724979
 Status : Answered
 Chosen Option : 2

Q.49 Select the set in which the numbers are related in the same way as are the numbers of the following sets.

(NOTE: Operations should be performed on the whole numbers, without breaking down the numbers into its constituent digits. E.g. 13 – Operations on 13 such as adding/subtracting/multiplying etc. to 13 can be performed. Breaking down 13 into 1 and 3 and then performing mathematical operations on 1 and 3 are not allowed.)

(7, 175, 5)

(6, 294, 7)

- Ans**
- 1. (5, 140, 7)
 - 2. (3, 192, 8)
 - 3. (6, 216, 5)
 - 4. (8, 412, 9)

Question ID : 7518975306
 Option 1 ID : 75189721222
 Option 2 ID : 75189721221
 Option 3 ID : 75189721223
 Option 4 ID : 75189721224
 Status : Answered
 Chosen Option : 2

Q.50 Which of the following is NOT a result of the ozone layer depletion?

- Ans
- 1. The Earth getting more UV rays from the Sun
 - 2. Tsunami
 - 3. Immune deficiency disorders
 - 4. Skin cancer

Question ID : 7518974467
Option 1 ID : 75189717866
Option 2 ID : 75189717865
Option 3 ID : 75189717868
Option 4 ID : 75189717867
Status : Answered
Chosen Option : 2

Q.51 Simplify $\frac{\sin A}{1 + \cos A} + \frac{1 + \cos A}{\sin A}$.

- Ans
- 1. $2\sec A$
 - 2. $\sec A$
 - 3. $\operatorname{cosec} A$
 - 4. $2\operatorname{cosec} A$

Question ID : 7518976214
Option 1 ID : 75189724855
Option 2 ID : 75189724853
Option 3 ID : 75189724854
Option 4 ID : 75189724856
Status : Answered
Chosen Option : 4

Q.52 Which Indian Cricketer played his 100th test match against Sri Lanka in Mohali in March 2022?

- Ans
- 1. Rohit Sharma
 - 2. Ravichandran Ashwin
 - 3. Virat Kohli
 - 4. Ishant Sharma

Question ID : 7518973950
Option 1 ID : 75189715798
Option 2 ID : 75189715799
Option 3 ID : 75189715797
Option 4 ID : 75189715800
Status : Answered
Chosen Option : 2

Q.53 Some features of transportation in plants are mentioned below. Which option shows the INCORRECT feature?

Ans 1.

Vessels and Tracheids are dead cells and Sieve tubes are living

2. Movement of both water and food is bidirectional

3. Xylem transports water and Phloem transports food

4.

Water movement is by simple physical forces; food movement requires energy

Question ID : 7518974543

Option 1 ID : 75189718171

Option 2 ID : 75189718170

Option 3 ID : 75189718169

Option 4 ID : 75189718172

Status : Answered

Chosen Option : 2

Q.54

Which of the following is NOT a tributary of the Yamuna river system?

Ans

1. Hindon

2. Chambal

3. Sind

4. Chenab

Question ID : 7518973906

Option 1 ID : 75189715621

Option 2 ID : 75189715622

Option 3 ID : 75189715623

Option 4 ID : 75189715624

Status : Answered

Chosen Option : 4

Q.55 Kidney is an organ of excretion and osmoregulation in humans. Regulation of which two substances is done by the kidneys?

Ans

1. Water and O₂

2. Sugar and salts

3. CO₂ and proteins

4. Water and salts

Question ID : 7518974606

Option 1 ID : 75189718424

Option 2 ID : 75189718422

Option 3 ID : 75189718421

Option 4 ID : 75189718423

Status : Answered

Chosen Option : 4

Q.56 Which of the following is a protein-splitting enzyme?

- Ans
- 1. Ptyalin
 - 2. Amylase
 - 3. Lipase
 - 4. Pepsin

Question ID : 7518974373

Option 1 ID : 75189717491

Option 2 ID : 75189717490

Option 3 ID : 75189717492

Option 4 ID : 75189717489

Status : Answered

Chosen Option : 4

Q.57 Three statements are given, followed by three conclusions numbered I, II and III. Assuming the statements to be true, even if they seem to be at variance with commonly known facts, decide which of the conclusions logically follow(s) from the statements.

Statements:

1. All blazers are dungarees.
2. No dungaree is scarf.
3. All pyjamas are dungarees.

Conclusions:

- I. No blazer is scarf.
- II. No blazer is pyjama.
- III. Some blazers are pyjamas.

- Ans
- 1. Only conclusion I and III follow
 - 2. Only conclusion I follows
 - 3. Only conclusion I and II follow
 - 4. None of the conclusions follow

Question ID : 7518974751

Option 1 ID : 75189719002

Option 2 ID : 75189719003

Option 3 ID : 75189719001

Option 4 ID : 75189719004

Status : Answered

Chosen Option : 2

Q.58 Find the volume of a sphere whose diameter is 12 cm.

- Ans
- 1. $864\pi \text{ cm}^3$
 - 2. $288\pi \text{ cm}^3$
 - 3. $284\pi \text{ cm}^3$
 - 4. $248\pi \text{ cm}^3$

Question ID : 7518975967
Option 1 ID : 75189723867
Option 2 ID : 75189723866
Option 3 ID : 75189723865
Option 4 ID : 75189723868
Status : Answered
Chosen Option : 2

Q.59 निम्नलिखित में से कौन सा, संविधान के अनुसार भारत में पंचायती राज व्यवस्था का हिस्सा नहीं है?

- Ans
- 1. ग्राम पंचायत
 - 2. ग्राम निगम
 - 3. जिला पंचायत
 - 4. पंचायत समिति

Question ID : 7518974309
Option 1 ID : 75189717233
Option 2 ID : 75189717234
Option 3 ID : 75189717236
Option 4 ID : 75189717235
Status : Answered
Chosen Option : 2

Q.60 The mean of the data 9, 3, 5, 4, 4, 5 and y is y. What is the mode of the data?

- Ans
- 1. 4
 - 2. 5
 - 3. 9
 - 4. 3

Question ID : 7518976310
Option 1 ID : 75189725237
Option 2 ID : 75189725238
Option 3 ID : 75189725239
Option 4 ID : 75189725240
Status : Answered
Chosen Option : 2

Q.61 The measure of each interior angle of a regular polygon is 120° . How many sides does this polygon have?

- Ans
- 1. 7
 - 2. 6
 - 3. 5
 - 4. 8

Question ID : 7518975984
Option 1 ID : 75189723935
Option 2 ID : 75189723934
Option 3 ID : 75189723933
Option 4 ID : 75189723936
Status : Answered
Chosen Option : 2

Q.62 Four friends Himani, Shalaka, Mitali and Brinda are sitting around a square table facing the centre of the table. All four of them are sitting at the corners of the table. Himani is to the immediate right of Brinda. Mitali is to the immediate left of Shalaka. Himani is second to the left of Shalaka. After some time, Himani leaves her place and is replaced by Kamini. Similarly, Brinda is also replaced by Tara. Now who is sitting to the immediate left of Tara?

- Ans
- 1. Mitali
 - 2. Shalaka
 - 3. Brinda
 - 4. Kamini

Question ID : 7518975138
Option 1 ID : 75189720550
Option 2 ID : 75189720549
Option 3 ID : 75189720552
Option 4 ID : 75189720551
Status : Answered
Chosen Option : 2

Q.63 A bike running at a speed of 50 km/h reaches its destination 10 minutes late. If it runs at 60 km/h it is late by 5 minutes. How many minutes should the bike take, travelling at usual speed to complete the journey on the same route to reach on time?

- Ans
- 1. 15 minutes
 - 2. 25 minutes
 - 3. 20 minutes
 - 4. 12 minutes

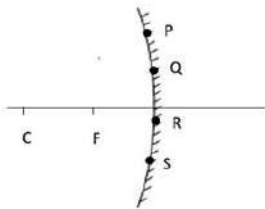
Question ID : 7518976090
Option 1 ID : 75189724359
Option 2 ID : 75189724357
Option 3 ID : 75189724358
Option 4 ID : 75189724360
Status : Answered
Chosen Option : 3

Q.64 An object placed 30 cm from a concave lens forms a virtual erect image at a distance of 10 cm from the lens. The magnification produced by the lens is:

- Ans
- 1. -3
 - 2. 3
 - 3. -1/3
 - 4. 1/3

Question ID : 7518975417
 Option 1 ID : 75189721666
 Option 2 ID : 75189721665
 Option 3 ID : 75189721668
 Option 4 ID : 75189721667
 Status : Answered
 Chosen Option : 4

Q.65 P, Q, R and S are four points on the surface of a concave mirror as shown in the figure. If r_1 , r_2 , r_3 and r_4 are the distance of centre of curvature from points P, Q, R and S, respectively, then the correct relation between r_1 , r_2 , r_3 and r_4 is:



- Ans
- 1. $r_1 = r_2, r_3 = r_4, r_2 \neq r_3$
 - 2. $r_1 = r_2 = r_3 = r_4$
 - 3. $r_1 > r_2 > r_3 > r_4$
 - 4. $r_1 < r_2 < r_3 < r_4$

Question ID : 7518975358
 Option 1 ID : 75189721432
 Option 2 ID : 75189721429
 Option 3 ID : 75189721430
 Option 4 ID : 75189721431
 Status : Answered
 Chosen Option : 2

Q.66

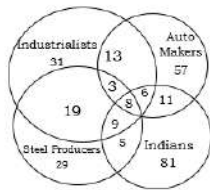
The Largest brackish water Lake of India is present in which state?

Ans

- 1. Assam
- 2. Odisha
- 3. Gujarat
- 4. Maharashtra

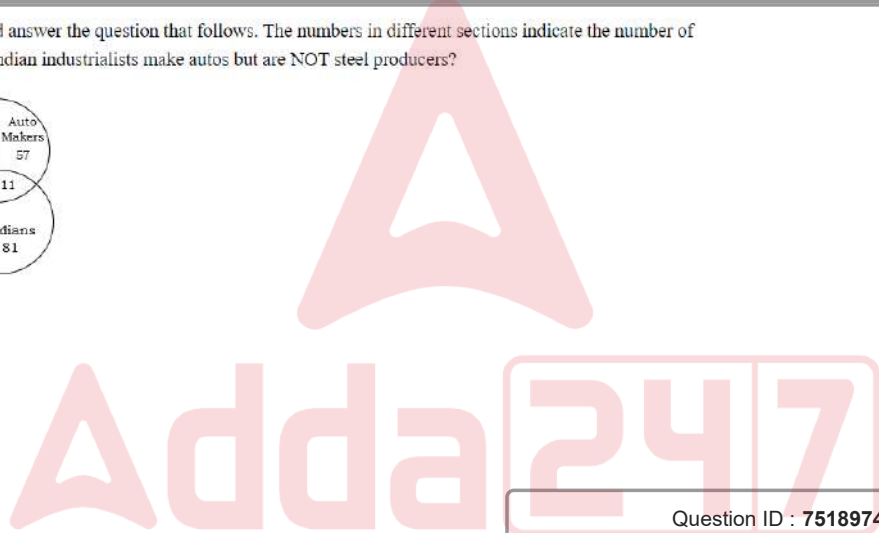
Question ID : 7518973905
 Option 1 ID : 75189715619
 Option 2 ID : 75189715617
 Option 3 ID : 75189715618
 Option 4 ID : 75189715620
 Status : Answered
 Chosen Option : 2

Q.67 Study the diagram and answer the question that follows. The numbers in different sections indicate the number of persons. How many Indian industrialists make autos but are NOT steel producers?



Ans

- 1. 6
- 2. 3
- 3. 8
- 4. 13



Question ID : 7518974758
 Option 1 ID : 75189719032
 Option 2 ID : 75189719030
 Option 3 ID : 75189719031
 Option 4 ID : 75189719029
 Status : Answered
 Chosen Option : 1

Q.68 Which of the following options is the closest approximate value which will come in place of question mark(?) in the following equation?

$$125.99 - 35.92 + 3.89 \times 16.11 = ?$$

- Ans**
- 1. 158
 - 2. 166
 - 3. 154
 - 4. 150

Question ID : 7518975093
Option 1 ID : 75189720370
Option 2 ID : 75189720372
Option 3 ID : 75189720371
Option 4 ID : 75189720369
Status : Answered
Chosen Option : 3

Q.69 The sum of three consecutive multiples of 9 is 2457, find the largest one.

- Ans**
- 1. 828
 - 2. 990
 - 3. 819
 - 4. 999

Question ID : 7518975705
Option 1 ID : 75189722818
Option 2 ID : 75189722820
Option 3 ID : 75189722817
Option 4 ID : 75189722819
Status : Answered
Chosen Option : 1

Q.70 A wire of a given material has length 'l' and resistance 'R'. Another wire of the same material having nine times the length and the same area of cross section will have a resistance equal to:

- Ans**
- 1. $1/3R$
 - 2. $1/9R$
 - 3. $9R$
 - 4. $3R$

Question ID : 7518975468
Option 1 ID : 75189721872
Option 2 ID : 75189721870
Option 3 ID : 75189721869
Option 4 ID : 75189721871
Status : Answered
Chosen Option : 3

Q.71 The Missionaries of Charity is a Catholic religious congregation established in _____ by Mother Teresa.

- Ans
- 1. 1954
 - 2. 1950
 - 3. 1947
 - 4. 1952

Question ID : 7518974196
Option 1 ID : 75189716784
Option 2 ID : 75189716782
Option 3 ID : 75189716781
Option 4 ID : 75189716783
Status : Not Answered
Chosen Option : --

Q.72 Which Article of the Indian Constitution states that 'The Council of Ministers shall be collectively responsible to the House of the People'?

- Ans
- 1. Article 80 (4)
 - 2. Article 75 (2)
 - 3. Article 75 (1)
 - 4. Article 75 (3)

Question ID : 7518974285
Option 1 ID : 75189717140
Option 2 ID : 75189717139
Option 3 ID : 75189717138
Option 4 ID : 75189717137
Status : Answered
Chosen Option : 3

Q.73 Which two signs should be interchanged to make the given equation correct?

$$24 \times 6 - 12 + 18 \div 3 = 46$$

- Ans
- 1. + and -
 - 2. \times and \div
 - 3. + and \div
 - 4. \times and +

Question ID : 7518975327
Option 1 ID : 75189721308
Option 2 ID : 75189721306
Option 3 ID : 75189721307
Option 4 ID : 75189721305
Status : Answered
Chosen Option : 2

Q.74

'निशागंधी नृत्य उत्सव' इनमें से किस राज्य में मनाया जाता है?

Ans

- ✓ 1. केरल
- ✗ 2. कर्नाटक
- ✗ 3. तमिलनाडु
- ✗ 4. उत्तर प्रदेश

Question ID : 7518973807
 Option 1 ID : 75189715227
 Option 2 ID : 75189715226
 Option 3 ID : 75189715225
 Option 4 ID : 75189715228
 Status : Answered
 Chosen Option : 4

Q.75 If A bought an item for ₹384 and sold it for ₹576 and B bought another item for ₹1,254 and sold it for ₹1,672. What is the ratio of gain % of A to gain % of B?

Ans

- ✗ 1. $\frac{5}{2}$
- ✗ 2. $\frac{5}{3}$
- ✓ 3. $\frac{3}{2}$
- ✗ 4. $\frac{3}{4}$

Question ID : 7518975623
 Option 1 ID : 75189722489
 Option 2 ID : 75189722492
 Option 3 ID : 75189722491
 Option 4 ID : 75189722490
 Status : Answered
 Chosen Option : 3

Q.76 In a class of 21 students, each scored differently. P's rank from the bottom is 9th, while Q's rank from the top is also 9th. How many students are ranked between Q and P?

Ans

- ✗ 1. 4
- ✗ 2. 2
- ✗ 3. 5
- ✓ 4. 3

Question ID : 7518974718
 Option 1 ID : 75189718869
 Option 2 ID : 75189718870
 Option 3 ID : 75189718871
 Option 4 ID : 75189718872
 Status : Answered
 Chosen Option : 4

Q.77 At which position on principal axis does a concave mirror forms a highly diminished, real and inverted image of an object?

- Ans
- 1. $2F$
 - 2. beyond $2F$
 - 3. between F and $2F$
 - 4. F

Question ID : 7518975367
Option 1 ID : 75189721466
Option 2 ID : 75189721468
Option 3 ID : 75189721467
Option 4 ID : 75189721465
Status : Answered
Chosen Option : 3

Q.78 Lemons placed inside a beaker filled with water appear relatively larger in size due to:

- Ans
- 1. scattering of light
 - 2. refraction of light
 - 3. reflection of light
 - 4. dispersion of light

Question ID : 7518975443
Option 1 ID : 75189721771
Option 2 ID : 75189721769
Option 3 ID : 75189721770
Option 4 ID : 75189721772
Status : Answered
Chosen Option : 2

Q.79 N.K.Singh became the Chairman of which Finance Commission of India?

- Ans
- 1. 19th
 - 2. 17th
 - 3. 13th
 - 4. 15th

Question ID : 7518973925
Option 1 ID : 75189715700
Option 2 ID : 75189715699
Option 3 ID : 75189715697
Option 4 ID : 75189715698
Status : Answered
Chosen Option : 4

Q.80 The HCF of 45, 78 and 117 is:

- Ans
- 1. 9
 - 2. 5
 - 3. 7
 - 4. 3

Question ID : 7518976248
Option 1 ID : 75189724990
Option 2 ID : 75189724991
Option 3 ID : 75189724989
Option 4 ID : 75189724992
Status : Answered
Chosen Option : 4

Q.81 Workers who own and operate an enterprise to earn their livelihood are known as:

- Ans
- 1. hired workers
 - 2. regular salaried employed workers
 - 3. government employed workers
 - 4. self-employed workers

Question ID : 7518974225
Option 1 ID : 75189716897
Option 2 ID : 75189716900
Option 3 ID : 75189716898
Option 4 ID : 75189716899
Status : Answered
Chosen Option : 4

Q.82 The product of the roots of the quadratic equation $6 - 5x^2 - 8x = 0$ is:

- Ans
- 1. $-\frac{8}{5}$
 - 2. $\frac{8}{5}$
 - 3. $\frac{6}{5}$
 - 4. $-\frac{6}{5}$

Question ID : 7518976168
Option 1 ID : 75189724670
Option 2 ID : 75189724669
Option 3 ID : 75189724672
Option 4 ID : 75189724671
Status : Answered
Chosen Option : 1

Q.83 Fiscal policy is the policy of:

- Ans 1. the Government
 2. RBI
 3. NABARD
 4. Both the Government and RBI

Question ID : 7518974235
Option 1 ID : 75189716938
Option 2 ID : 75189716939
Option 3 ID : 75189716937
Option 4 ID : 75189716940
Status : Answered
Chosen Option : 1

Q.84 Which of the following Acts was passed by the British Parliament, defining the powers and responsibilities of the various organs of the East India Company?

- Ans 1. Indian Councils Act of 1892
 2. Regulating Act of 1773
 3. Government of India Act of 1858
 4. Pitt's India Act of 1784

Question ID : 7518973989
Option 1 ID : 75189715956
Option 2 ID : 75189715953
Option 3 ID : 75189715955
Option 4 ID : 75189715954
Status : Answered
Chosen Option : 2

Q.85 A dealer allows 30% discount on the marked price of an item and still makes a profit of 10%. By how much percentage is the marked price more than the cost price (rounded off to two places of decimal)?

- Ans 1. 57.14%
 2. 26.67%
 3. 33.33%
 4. 45.45%

Question ID : 7518976081
Option 1 ID : 75189724324
Option 2 ID : 75189724321
Option 3 ID : 75189724322
Option 4 ID : 75189724323
Status : Answered
Chosen Option : 4

Q.86 The cost incurred by Mahesh to produce an item in the factory was ₹2,000. He had to spend 10% of the production cost incurred on the item in the factory to transport it to the showroom. He sold the item from the showroom at a price that was 15% above the total cost incurred by Mahesh in the production and transportation of the item. What was the price at which Mahesh sold the item from the showroom?

- Ans**
- 1. ₹2,300
 - 2. ₹2,530
 - 3. ₹2,500
 - 4. ₹2,250

Question ID : 7518976260
Option 1 ID : 75189725038
Option 2 ID : 75189725039
Option 3 ID : 75189725037
Option 4 ID : 75189725040
Status : Answered
Chosen Option : 2

Q.87 A sum of money is to be distributed among four members A, B, C, and D in the ratio 4: 7: 9: 3. If C gets ₹720 more than D, find D's share.

- Ans**
- 1. ₹240
 - 2. ₹160
 - 3. ₹360
 - 4. ₹480

Question ID : 7518976064
Option 1 ID : 75189724254
Option 2 ID : 75189724253
Option 3 ID : 75189724255
Option 4 ID : 75189724256
Status : Answered
Chosen Option : 3

Q.88 Each of the digits in the number 813924765 is arranged in ascending order from left to right. The position of how many digits will remain unchanged as compared to that in the original number?

- Ans**
- 1. None
 - 2. One
 - 3. Two
 - 4. Three

Question ID : 7518974876
Option 1 ID : 75189719501
Option 2 ID : 75189719502
Option 3 ID : 75189719503
Option 4 ID : 75189719504
Status : Answered
Chosen Option : 3

Q.89 Refer to the given letter and symbol series and answer the question that follows.

(Left) U # S & S F o G ^ & J % Z K * D X † T X € @ Y S (Right)

How many such letters are there in the series each of which is immediately preceded by a symbol and also immediately followed by a symbol?

- Ans
- 1. 4
 - 2. 6
 - 3. 5
 - 4. 2

Question ID : 7518975005
Option 1 ID : 75189720018
Option 2 ID : 75189720019
Option 3 ID : 75189720020
Option 4 ID : 75189720017
Status : Answered
Chosen Option : 3

Q.90 Which of the following group of hydrocarbons follows the general formula of C_nH_{2n} ?

- Ans
- 1. Alkyne
 - 2. Alkyl
 - 3. Alkane
 - 4. Alkene

Question ID : 7518973380
Option 1 ID : 75189713519
Option 2 ID : 75189713520
Option 3 ID : 75189713517
Option 4 ID : 75189713518
Status : Answered
Chosen Option : 4

Q.91 Which physiographic division covers a distance of 2500 km from Indus to Brahmaputra in west-east direction?

- Ans
- 1. Coastal plains
 - 2. Northern plains
 - 3. Himalayan mountains
 - 4. Peninsular plateau

Question ID : 7518974079
Option 1 ID : 75189716316
Option 2 ID : 75189716313
Option 3 ID : 75189716314
Option 4 ID : 75189716315
Status : Answered
Chosen Option : 3

Q.92 The Twenty Point Programme (TPP) was launched by the Government of India in _____.

- Ans
- 1. 1980
 - 2. 1975
 - 3. 1985
 - 4. 1990

Question ID : 7518974250
Option 1 ID : 75189716998
Option 2 ID : 75189716997
Option 3 ID : 75189716999
Option 4 ID : 75189717000
Status : Not Answered
Chosen Option : --

Q.93 Consider the statements below and identify the correct answer.

Statement I: Among chemical properties, Mendeleev concentrated on the compounds formed by elements with carbon and hydrogen.

Statement II: He selected these elements as they are less reactive and formed compounds with few elements.

- Ans
- 1. Statement II is correct, Statement I is incorrect.
 - 2. Both statements are incorrect.
 - 3. Both statements are correct.
 - 4. Statement I is correct, Statement II is incorrect.

Question ID : 7518973713
Option 1 ID : 75189714850
Option 2 ID : 75189714852
Option 3 ID : 75189714851
Option 4 ID : 75189714849
Status : Answered
Chosen Option : 2

Q.94 Each vowel in the word 'DESTROY' is changed to the letter following it in the English alphabetical order and each consonant is changed to the letter preceding it in the English alphabetical order. If each letter, thus formed, is arranged in alphabetical order, which letter will be fifth from the right end?

- Ans
- 1. P
 - 2. F
 - 3. Q
 - 4. R

Question ID : 7518974989
Option 1 ID : 75189719954
Option 2 ID : 75189719953
Option 3 ID : 75189719955
Option 4 ID : 75189719956
Status : Answered
Chosen Option : 4

Q.95 In chlor-alkali process, chlor represents chlorine gas and alkali represents:

- Ans
- 1. NaOH
 - 2. CaCO_3
 - 3. Ca(OH)_2
 - 4. ZnO

Question ID : 7518973471
Option 1 ID : 75189713883
Option 2 ID : 75189713882
Option 3 ID : 75189713884
Option 4 ID : 75189713881
Status : Answered
Chosen Option : 1

Q.96 Starting from point L, a person walks 125 m towards the south. He then takes a left turn and walks 70 m. From there, he takes a left turn and walks 80 m. After that, he takes a left turn and walks 115 m. Finally, he takes a right turn and walks 45 m to reach point M. How far and in which direction is point M from point L? (All turns are 90 degree turns only)

- Ans
- 1. 45 m, East
 - 2. 90 m, East
 - 3. 45 m, West
 - 4. 90 m, North

Question ID : 7518975049
Option 1 ID : 75189720193
Option 2 ID : 75189720195
Option 3 ID : 75189720194
Option 4 ID : 75189720196
Status : Answered
Chosen Option : 3

Q.97 Find the area of a rhombus whose diagonals are 12 cm and 15 cm long.

- Ans
- 1. 45 cm^2
 - 2. 60 cm^2
 - 3. 90 cm^2
 - 4. 80 cm^2

Question ID : 7518975964
Option 1 ID : 75189723854
Option 2 ID : 75189723853
Option 3 ID : 75189723856
Option 4 ID : 75189723855
Status : Answered
Chosen Option : 3

Q.98 Who has launched the first Indian Virtual Science Lab for children under the CSIR Jigyasa programme?

- Ans
- 1. Dharmendra Pradhan
 - 2. Dr. Jitendra Singh
 - 3. Amit Shah
 - 4. Dr. Virendra Kumar

Question ID : 7518974147
Option 1 ID : 75189716586
Option 2 ID : 75189716585
Option 3 ID : 75189716587
Option 4 ID : 75189716588
Status : Answered
Chosen Option : 1

Q.99 In this question, a statement is followed by two conclusions. Which of the two conclusions is/are true with respect to the statement?

Statement: $N > M < K = L \geq I > J$

Conclusions:

I. $L > J$

II. $N > L$

- Ans
- 1. Neither conclusion I nor II is true
 - 2. Only conclusion II is true
 - 3. Only conclusion I is true
 - 4. Both conclusions I and II are true

Question ID : 7518974951
Option 1 ID : 75189719804
Option 2 ID : 75189719802
Option 3 ID : 75189719801
Option 4 ID : 75189719803
Status : Answered
Chosen Option : 3

Q.100 The value of $12 \div 3 \times (7 + 8 - 3)$ is:

- Ans
- 1. 48
 - 2. 24
 - 3. $\frac{6}{13}$
 - 4. $\frac{1}{13}$

Question ID : 7518976005
Option 1 ID : 75189724017
Option 2 ID : 75189724020
Option 3 ID : 75189724018
Option 4 ID : 75189724019
Status : Answered
Chosen Option : 1