



रेल भर्ती बोर्ड / RAILWAY RECRUITMENT BOARDS
सी ई एन आर आर सी - ०१/२०१९ - CEN RRC - 01/2019



Roll Number	
Candidate Name	
Test Center Name	iON Digital Zone iDZ Anantapur
Test Date	25/08/2022
Test Time	9:00 AM - 10:30 AM
Subject	Level 1

* Note

Correct Answer will carry 1 mark per Question.

Incorrect Answer will carry 1/3 Negative mark per Question.

- Options shown in green color with a tick icon are correct.
- Chosen option on the right of the question indicates the option selected by the candidate.

Section : Level 1

Q.1 _____ make an isomeric pair.

- Ans
- ✓ 1. Butane and 2-methyl propane
 - ✗ 2. Propane and butane
 - ✗ 3. Propane and 2-methyl propane
 - ✗ 4. Butane and 2-ethyl butane

Question ID : 7518973553
Option 1 ID : 75189714210
Option 2 ID : 75189714209
Option 3 ID : 75189714212
Option 4 ID : 75189714211

Status : Answered

Chosen Option : 1

Test Prime

ALL EXAMS,
ONE SUBSCRIPTION



40,000+
Mock Tests



Personalised
Report Card



Unlimited
Re-Attempt



500+
Exam Covered



Previous Year
Papers



500%
Refund



DOWNLOAD NOW

Q.2 Which of the following is a use of plaster of Paris?

- (i) Manufacture of glass, soap and paper
- (ii) As a cleaning agent for domestic purposes
- (iii) Making toys, materials for decoration and for making surfaces smooth
- (iv) For baking

- Ans
- 1. only i
 - 2. only ii
 - 3. Only iv
 - 4. only iii

Question ID : **7518973671**
 Option 1 ID : **75189714681**
 Option 2 ID : **75189714682**
 Option 3 ID : **75189714684**
 Option 4 ID : **75189714683**
 Status : **Answered**
 Chosen Option : **4**

Q.3 The table given below shows the number of students (girls and boys), in thousand numbers, who got admissions on merit basis in a certain well-recognised university 'XYZ' from four different places – J, K, L and M – over the years. Study the table and answer the question.

Places \ Years	J		K		L		M	
	Boys	Girls	Boys	Girls	Boys	Girls	Boys	Girls
2016	12.5	10	14	7.5	7	10	6	9
2017	10	9	13	7	8.5	11	8	7
2018	11	9	10	8.5	8	6	5	4
2019	9.5	7	11	9	9	8	10	11
2020	10.5	6	12	10.5	10.5	9.5	14	12
2021	12	8	10	9.5	11	10	15	18

The total number of boys who got admission from places J and M in 2017 was exactly equal to the total number of girls who got admission from place M in which of the following years?

- Ans
- 1. 2020
 - 2. 2021
 - 3. 2019
 - 4. 2017

Question ID : **7518975125**
 Option 1 ID : **75189720499**
 Option 2 ID : **75189720500**
 Option 3 ID : **75189720498**
 Option 4 ID : **75189720497**
 Status : **Answered**
 Chosen Option : **2**

Q.4 Carbonisation is a term used to describe the process of transforming dead plants into _____ over a long period of time.

- Ans
- 1. petrol
 - 2. fossil
 - 3. coal
 - 4. diesel

Question ID : 7518974494
Option 1 ID : 75189717974
Option 2 ID : 75189717976
Option 3 ID : 75189717975
Option 4 ID : 75189717973
Status : Answered
Chosen Option : 2

Q.5 Select the element with the highest valency from among the following.

- Ans
- 1. Ca
 - 2. Al
 - 3. Li
 - 4. N

Question ID : 7518973730
Option 1 ID : 75189714919
Option 2 ID : 75189714918
Option 3 ID : 75189714917
Option 4 ID : 75189714920
Status : Answered
Chosen Option : 4

Q.6 Ten years ago, a son was $\frac{1}{9}$ th of his father's age. Now, he is $\frac{9}{37}$ th of his father's present age. Find the present age of the father.

- Ans
- 1. 67 years
 - 2. 74 years
 - 3. 57 years
 - 4. 87 years

Question ID : 7518975717
Option 1 ID : 75189722866
Option 2 ID : 75189722867
Option 3 ID : 75189722868
Option 4 ID : 75189722865
Status : Answered
Chosen Option : 2

Q.7 Which of the following formulae does NOT represent the heat produced in a conductor due to flow of electric current?

Ans

✗ 1. $H = \frac{V^2}{R}t$

✓ 2. $H = IR^2t$

✗ 3. $H = I^2Rt$

✗ 4. $H = VIt$

Question ID : 7518975493

Option 1 ID : 75189721971

Option 2 ID : 75189721970

Option 3 ID : 75189721969

Option 4 ID : 75189721972

Status : Answered

Chosen Option : 2

Q.8 Five girls, Beena, Elisa, Hema, Ketaki and Zoya, are sitting around a circular table facing the centre of the table. Beena is sitting to the immediate left of Ketaki. Hema is sitting to the immediate right of Zoya. Only Ketaki is sitting between Beena and Elisa. Who is sitting to the immediate right of Elisa?

Ans

✓ 1. Zoya

✗ 2. Beena

✗ 3. Ketaki

✗ 4. Hema

Question ID : 7518975130

Option 1 ID : 75189720519

Option 2 ID : 75189720520

Option 3 ID : 75189720517

Option 4 ID : 75189720518

Status : Answered

Chosen Option : 1

Q.9 If p, q, r and s, the measures of the four angles of a quadrilateral, are in the ratio 3 : 5 : 4 : 6, then the value of $3p + 2r$ is:

Ans

✗ 1. 330°

✓ 2. 340°

✗ 3. 360°

✗ 4. 310°

Question ID : 7518976382

Option 1 ID : 75189725527

Option 2 ID : 75189725525

Option 3 ID : 75189725526

Option 4 ID : 75189725528

Status : Answered

Chosen Option : 2

Q.10 _____ reduce (s) the size of large fat globules, allowing enzymes to work more effectively.

- Ans
- 1. Succus entericus
 - 2. Pancreatic juice
 - 3. Bile salts
 - 4. Hydrochloric acid

Question ID : 7518974377
Option 1 ID : 75189717505
Option 2 ID : 75189717506
Option 3 ID : 75189717508
Option 4 ID : 75189717507
Status : Not Answered
Chosen Option : --

Q.11 A pair of parallel lines is intersected by a transversal such that $\angle 1$ and $\angle 2$ form a pair of interior angles on the same side of the transversal. If $m\angle 1 = 35^\circ$, what is the measure of $\angle 2$?

- Ans
- 1. 35°
 - 2. 55°
 - 3. 65°
 - 4. 145°

Question ID : 7518975981
Option 1 ID : 75189723923
Option 2 ID : 75189723922
Option 3 ID : 75189723924
Option 4 ID : 75189723921
Status : Answered
Chosen Option : 4

Q.12 If the mean of a data is 65 and its mode is 23 then the median using empirical formula is:

- Ans
- 1. 53
 - 2. 54
 - 3. 51
 - 4. 52

Question ID : 7518975687
Option 1 ID : 75189722747
Option 2 ID : 75189722748
Option 3 ID : 75189722746
Option 4 ID : 75189722745
Status : Answered
Chosen Option : 3

Q.13 Match the following:

Formula	Name
i. CH_3COOH	a. Methane
ii. CHCl_3	b. Ethanol
iii. $\text{CH}_3\text{CH}_2\text{OH}$	c. Acetic acid
iv. CH_4	d. Chloroform

- Ans
- 1. i-a, ii-b, iii-c, iv-d
 - 2. i-c, ii-d, iii-a, iv-b
 - 3. i-c, ii-d, iii-b, iv-a
 - 4. i-a, ii-c, iii-b, iv-d

Question ID : 7518973546
Option 1 ID : 75189714183
Option 2 ID : 75189714181
Option 3 ID : 75189714184
Option 4 ID : 75189714182
Status : Answered
Chosen Option : 3

Q.14 A certain number of people are sitting in a row, facing the north. Rahul is at the 8th place from the left end of the row. Only 11 persons are sitting between Rahul and Samar. Samar is at some place towards the right of Rahul. Mohit is to the immediate left of Zeeshan, who is sitting at the extreme right end. Samar is at the 9th place from the extreme right end. If no other person is sitting in the row, what is the total number of persons seated?

- Ans
- 1. 27
 - 2. 29
 - 3. 26
 - 4. 28

Question ID : 7518975167
Option 1 ID : 75189720666
Option 2 ID : 75189720668
Option 3 ID : 75189720665
Option 4 ID : 75189720667
Status : Answered
Chosen Option : 4

Q.15 This question is based on the following three-letter words:

(Left) NAT PAL COT TAN (Right)

If in each of the words, each letter is changed to the next letter in the English alphabetical order, how many words thus formed will have no vowel?

- Ans**
- 1. One
 - 2. Three
 - 3. Four
 - 4. Two

Question ID : **7518975013**
Option 1 ID : **75189720049**
Option 2 ID : **75189720051**
Option 3 ID : **75189720052**
Option 4 ID : **75189720050**
Status : **Answered**
Chosen Option : **1**

Q.16 Select the option that is related to the fifth number in the same way as the second number is related to the first number and the fourth number is related to the third number.

6 : 150 :: 4 : 36 :: 5 : ?

- Ans**
- 1. 80
 - 2. 78
 - 3. 82
 - 4. 84

Question ID : **7518975299**
Option 1 ID : **75189721194**
Option 2 ID : **75189721193**
Option 3 ID : **75189721195**
Option 4 ID : **75189721196**
Status : **Answered**
Chosen Option : **1**

Q.17 Which of the following numbers will replace the question mark (?) in the given series?

43, 80, 117, 154, ?

- Ans**
- 1. 191
 - 2. 193
 - 3. 196
 - 4. 190

Question ID : **7518975061**
Option 1 ID : **75189720244**
Option 2 ID : **75189720243**
Option 3 ID : **75189720241**
Option 4 ID : **75189720242**
Status : **Answered**
Chosen Option : **1**

Q.18 We should refrain from using plastics because _____.

- Ans 1. enzymes are unable to break down plastics
2. plastics are water soluble
3. plastics are not long-lasting
4. plastics are easily degraded by insects

Question ID : 7518974479
Option 1 ID : 75189717914
Option 2 ID : 75189717916
Option 3 ID : 75189717915
Option 4 ID : 75189717913
Status : Answered
Chosen Option : 1

Q.19 What is the full form of NABARD?

- Ans 1.
National Agriculture Bank Authority for Rural Development
2. National Bank for Agriculture and Regional Development
3. National Bank for Agriculture and Rural Development
4. National Bank for Rural Development

Question ID : 7518977227
Option 1 ID : 75189728906
Option 2 ID : 75189728908
Option 3 ID : 75189728905
Option 4 ID : 75189728907
Status : Answered
Chosen Option : 1

Q.20 Which of the following is NOT TRUE about vegetative propagation in plants?

- Ans 1.
Plants bear flowers and fruits earlier than those produced from seeds.
2.
Plants that have lost the capacity to produce seeds can be grown.
3.
Plants produced are genetically different from the parent plant.
4. Plants are grown from root, stem and leaves.

Question ID : 7518974655
Option 1 ID : 75189718620
Option 2 ID : 75189718618
Option 3 ID : 75189718619
Option 4 ID : 75189718617
Status : Answered
Chosen Option : 3

Q.21 Select the option that represents the letters that, when placed from left to right in the same sequence in the blanks below, will complete the letter series.

F _ L N _ S V _ Z C _

- Ans**
- 1. IPXF
 - 2. IQXF
 - 3. IPYF
 - 4. IPXE

Question ID : 7518974979
 Option 1 ID : 75189719913
 Option 2 ID : 75189719914
 Option 3 ID : 75189719915
 Option 4 ID : 75189719916
 Status : Answered
 Chosen Option : 3

Q.22 An object, 1.0 cm in height, is placed at a distance of 18.0 cm in front of a concave mirror of focal length 10.0 cm, on its principal axis. Its image has a height of _____ and is _____.

- Ans**
- 1. more than 1.0 cm, inverted
 - 2. more than 1.0 cm, erect
 - 3. less than 1.0 cm, erect
 - 4. less than 1.0 cm, inverted

Question ID : 7518976588
 Option 1 ID : 75189726350
 Option 2 ID : 75189726349
 Option 3 ID : 75189726351
 Option 4 ID : 75189726352
 Status : Answered
 Chosen Option : 1

Q.23 Which of the following options is the closest approximate value which will come in place of question mark (?) in the following equation?

$$12.998 + 20.009 + 4.998 - 2.999 \times 2.998 = ?$$

- Ans**
- 1. 16
 - 2. 12
 - 3. 8
 - 4. 19

Question ID : 7518975309
 Option 1 ID : 75189721235
 Option 2 ID : 75189721234
 Option 3 ID : 75189721233
 Option 4 ID : 75189721236
 Status : Answered
 Chosen Option : 3

Q.24 India and which country among the following agreed to line up a joint task force on a "proposal to construct a hydropower project" from investments of both countries in February 2022?

- Ans**
- 1. Myanmar
 - 2. Bangladesh
 - 3. Bhutan
 - 4. Nepal

Question ID : 7518977159
Option 1 ID : 75189728635
Option 2 ID : 75189728636
Option 3 ID : 75189728634
Option 4 ID : 75189728633
Status : Not Answered
Chosen Option : --

Q.25 As long as MP (marginal product) remains higher than the average product (AP), the average product _____.

- Ans**
- 1. continues to fall
 - 2. continues to rise
 - 3. remains constant
 - 4. falls with diminishing rate

Question ID : 7518977236
Option 1 ID : 75189728941
Option 2 ID : 75189728943
Option 3 ID : 75189728942
Option 4 ID : 75189728944
Status : Not Answered
Chosen Option : --

Q.26 Which Article of the Indian Constitution envisages the Election Commission of India (ECI), a constitutional body established by the Constitution of India, to conduct and regulate elections in the country?

- Ans**
- 1. Article 350 B
 - 2. Article 148
 - 3. Article 76
 - 4. Article 324

Question ID : 7518974099
Option 1 ID : 75189716396
Option 2 ID : 75189716394
Option 3 ID : 75189716395
Option 4 ID : 75189716393
Status : Answered
Chosen Option : 4

Q.27 A tradesman marked his goods at 26% above its cost price and then allowed a discount of 13%. His gain (in %) is:

- Ans
- 1. 6.29
 - 2. 9.62
 - 3. 9.26
 - 4. 6.92

Question ID : 7518975859
Option 1 ID : 75189723436
Option 2 ID : 75189723433
Option 3 ID : 75189723434
Option 4 ID : 75189723435
Status : Answered
Chosen Option : 2

Q.28 The portion of agricultural product that is sold by farmers in market is popularly known as _____.

- Ans
- 1. marketable agriculture product
 - 2. permitted agriculture product
 - 3. minimum marketed product
 - 4. marketed surplus

Question ID : 7518977243
Option 1 ID : 75189728971
Option 2 ID : 75189728970
Option 3 ID : 75189728969
Option 4 ID : 75189728972
Status : Not Answered
Chosen Option : --

Q.29 Simplify:

$$a^2 + 9b^2 + c^2 - 6ab + 6bc - 2ac =$$

- Ans
- 1. $(a + 3b + c)^2$
 - 2. $(a - 3b + c)^2$
 - 3. $(a - 3b - c)^2$
 - 4. $(a - 3b - 2c)^2$

Question ID : 7518975697
Option 1 ID : 75189722786
Option 2 ID : 75189722785
Option 3 ID : 75189722787
Option 4 ID : 75189722788
Status : Answered
Chosen Option : 3

Q.30 The refractive indices of turpentine oil and glass are 1.47 and 1.52, respectively. A ray of light passes from turpentine oil to glass. The refractive index of glass with respect to turpentine oil is _____ and the ray bends _____ the normal in glass.

- Ans**
- 1. 0.97, towards
 - 2. 1.03, away from
 - 3. 1.03, towards
 - 4. 0.97, away from

Question ID : 7518976623
Option 1 ID : 75189726490
Option 2 ID : 75189726491
Option 3 ID : 75189726492
Option 4 ID : 75189726489
Status : Answered
Chosen Option : 3

Q.31 Mohan gets 12% increase in his sale amount in the first year and 15% increase in the second year, with that his present sale is ₹1,28,800, what was his sale two years ago?

- Ans**
- 1. ₹1,75,000
 - 2. ₹1,00,000
 - 3. ₹1,50,000
 - 4. ₹1,25,000

Question ID : 7518975597
Option 1 ID : 75189722387
Option 2 ID : 75189722385
Option 3 ID : 75189722386
Option 4 ID : 75189722388
Status : Answered
Chosen Option : 2

Q.32 Which type of forest is most commonly home to the Royal Bengal tiger?

- Ans**
- 1. Mountain Forests
 - 2. Deciduous Forests
 - 3. Mangrove Forests
 - 4. Thorn Forests

Question ID : 7518977265
Option 1 ID : 75189729058
Option 2 ID : 75189729060
Option 3 ID : 75189729059
Option 4 ID : 75189729057
Status : Answered
Chosen Option : 2

Q.33 The position of how many letters will remain unchanged if each of the letters in the word 'ANOTHER' is arranged in alphabetical order?

- Ans**
- 1. 1
 - 2. 2
 - 3. None
 - 4. 3

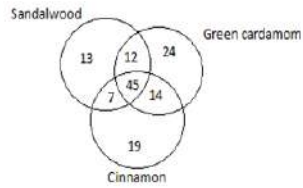
Question ID : 7518974985
Option 1 ID : 75189719938
Option 2 ID : 75189719939
Option 3 ID : 75189719937
Option 4 ID : 75189719940
Status : Answered
Chosen Option : 1

Q.34 A shopkeeper allows successive discount of 20% and 15% on an item of marked price ₹2,000. At what price did he sell the item?

- Ans**
- 1. ₹1,300
 - 2. ₹1,240
 - 3. ₹1,360
 - 4. ₹1,200

Question ID : 7518975640
Option 1 ID : 75189722557
Option 2 ID : 75189722559
Option 3 ID : 75189722560
Option 4 ID : 75189722558
Status : Answered
Chosen Option : 3

Q.35 Study the given diagram carefully and answer the following question. The numbers in different sections indicate the number of recipes in a cook book using the given ingredients.



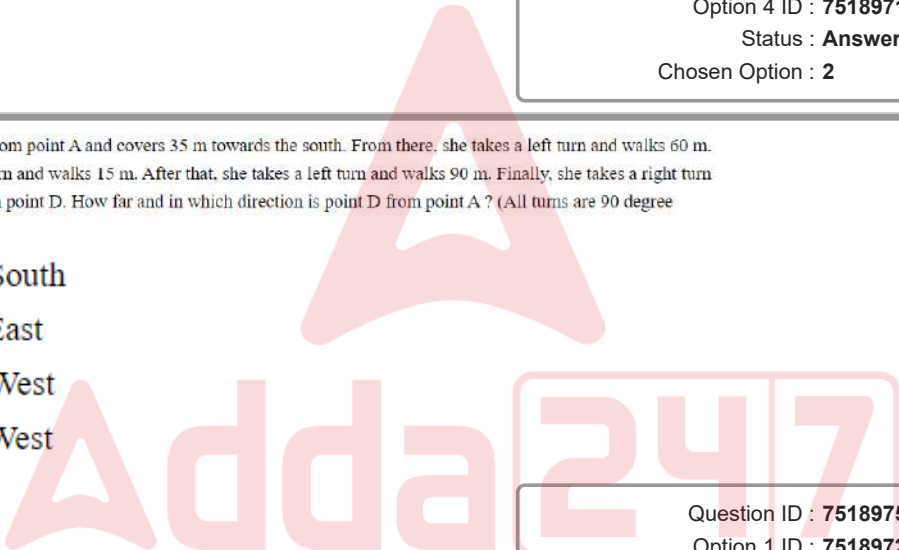
How many recipes use exactly any two of the given ingredients?

- Ans
- 1. 7
 - 2. 33
 - 3. 12
 - 4. 14

Question ID : 7518974945
 Option 1 ID : 75189719780
 Option 2 ID : 75189719777
 Option 3 ID : 75189719778
 Option 4 ID : 75189719779
 Status : Answered
 Chosen Option : 2

Q.36 Parvati starts walking from point A and covers 35 m towards the south. From there, she takes a left turn and walks 60 m. Then, she takes a left turn and walks 15 m. After that, she takes a left turn and walks 90 m. Finally, she takes a right turn and walks 20 m to reach point D. How far and in which direction is point D from point A ? (All turns are 90 degree turns only)

- Ans
- 1. 20 m, South
 - 2. 30 m, East
 - 3. 30 m, West
 - 4. 20 m, West



Question ID : 7518975039
 Option 1 ID : 75189720156
 Option 2 ID : 75189720154
 Option 3 ID : 75189720153
 Option 4 ID : 75189720155
 Status : Answered
 Chosen Option : 3

Q.37 A statement is given followed by two possible conclusions I and II. Read all the information given in the statement carefully and decide which of the given conclusions can be concluded from the given information.

Statement:

An online teaching platform has reported to earn almost double through subscriptions ever since they started LIVE problem-solving classes on the platform.

Conclusions:

- I. No other online teaching platform offers LIVE problem-solving classes.
- II. Students who opt for LIVE problem-solving sessions on the said platform have to pay double the fees as compared to those who opt for regular classes.

- Ans**
- 1. Both I and II can be concluded
 - 2. Only II can be concluded
 - 3. Only I can be concluded
 - 4. Neither I nor II can be concluded

Question ID : 7518976767
Option 1 ID : 75189727067
Option 2 ID : 75189727066
Option 3 ID : 75189727065
Option 4 ID : 75189727068

Status : Answered

Chosen Option : 4

Q.38 The value of $1 + 3 + 5 + 7 + \dots + 21 =$

- Ans**
- 1. 121
 - 2. 211
 - 3. 108
 - 4. 144

Question ID : 7518975563
Option 1 ID : 75189722251
Option 2 ID : 75189722250
Option 3 ID : 75189722249
Option 4 ID : 75189722252

Status : Answered

Chosen Option : 1

Q.39 Each of A, B, C, D, E, F and G has an exam on a different day of a week starting from Monday and ending on Sunday of the same week. C has the exam on Tuesday. Only one person has the exam between A and G. A has exam before G. D has the exam on the day immediately before A, but not on Thursday. F's exam is on one of the days before E but after B. E has exam on Sunday. Who among the following has the exam on Monday?

- Ans**
- 1. E
 - 2. F
 - 3. B
 - 4. D

Question ID : 7518974909
Option 1 ID : 75189719633
Option 2 ID : 75189719636
Option 3 ID : 75189719635
Option 4 ID : 75189719634
Status : Answered
Chosen Option : 3

Q.40 In which one of the following state will you experience 'Kaal Baisakhi'?

- Ans**
- 1. Tamil Nadu
 - 2. West Bengal
 - 3. Gujarat
 - 4. Punjab

Question ID : 7518974260
Option 1 ID : 75189717038
Option 2 ID : 75189717040
Option 3 ID : 75189717039
Option 4 ID : 75189717037
Status : Answered
Chosen Option : 2

Q.41 In this question, a group of numbers/symbols is coded using letters as per the table given below and the conditions which follow. The correct combination of codes following the conditions is your answer.

Number/Symbol	6	5	4	3	%	#	8
Codes	R	G	U	W	K	P	B

Conditions:

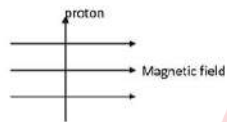
- (i) If the first element is an odd number and the last element is an even number, the codes for these two (the first and the last elements) are to be interchanged.
- (ii) If the second element is a symbol and the fifth element is an even number, the codes for these two (the second and the fifth elements) are to be interchanged.
- (iii) If the third element is a number and the fourth element is a symbol, both these elements (the third and the fourth elements) are to be coded as Y.

Question: 6 # % 3 8 5 # 4

- Ans**
- 1. BUKWPGPR
 - 2. RPKWBGPU
 - 3. RBKWPGPU
 - 4. RBYYPGPU

Question ID : 7518975248
 Option 1 ID : 75189720992
 Option 2 ID : 75189720990
 Option 3 ID : 75189720989
 Option 4 ID : 75189720991
 Status : Answered
 Chosen Option : 3

Q.42 A proton is projected into a magnetic field as shown in the figure, the direction of force experienced by it is :



- Ans**
- 1. outside the plane of paper
 - 2. in the direction of motion of proton
 - 3. into the plane of paper
 - 4. against the direction of motion of proton

Question ID : 7518975527
 Option 1 ID : 75189722108
 Option 2 ID : 75189722105
 Option 3 ID : 75189722107
 Option 4 ID : 75189722106
 Status : Not Answered
 Chosen Option : --

Q.43 Three statements are given, followed by two conclusions numbered I and II. Assuming the statements to be true, even if they seem to be at variance with commonly known facts, decide which of the conclusions logically follow(s) from the statements.

Statements:

All wires are switches.

No switch is a pipe.

All bulbs are pipes.

Conclusions:

I. No wire is a pipe.

II. No bulb is a switch.

- Ans**
- 1. Neither conclusion I nor II follows
 - 2. Both conclusions I and II follow
 - 3. Only conclusion II follows
 - 4. Only conclusion I follows

Question ID : 7518975172
Option 1 ID : 75189720688
Option 2 ID : 75189720687
Option 3 ID : 75189720686
Option 4 ID : 75189720685

Status : Answered

Chosen Option : 2

Q.44 The _____ city has been named as the host of the International Olympic Committee session in 2023?

- Ans**
- 1. Mumbai
 - 2. Pune
 - 3. Bengaluru
 - 4. New Delhi

Question ID : 7518973948
Option 1 ID : 75189715791
Option 2 ID : 75189715792
Option 3 ID : 75189715789
Option 4 ID : 75189715790

Status : Answered

Chosen Option : 2

Q.45 Which of the following stores starch, proteins and oil granules in a plant cell?

- Ans
- 1. Protoplast
 - 2. Chromoplast
 - 3. Leucoplast
 - 4. Chloroplast

Question ID : 7518974512
Option 1 ID : 75189718048
Option 2 ID : 75189718046
Option 3 ID : 75189718047
Option 4 ID : 75189718045
Status : Answered
Chosen Option : 4

Q.46 The magnetic field strength inside a current carrying solenoid is:

- Ans
- 1. less at ends and more at centre
 - 2. uniform and non-zero
 - 3. more at ends and less at centre
 - 4. zero

Question ID : 7518975516
Option 1 ID : 75189722064
Option 2 ID : 75189722062
Option 3 ID : 75189722063
Option 4 ID : 75189722061
Status : Answered
Chosen Option : 3

Q.47 The smallest whole number that must be multiplied to 1083 to make it a perfect square, is:

- Ans
- 1. 4
 - 2. 3
 - 3. 11
 - 4. 2

Question ID : 7518975564
Option 1 ID : 75189722253
Option 2 ID : 75189722254
Option 3 ID : 75189722256
Option 4 ID : 75189722255
Status : Answered
Chosen Option : 2

Q.48 Three resistors of $9\ \Omega$ each are connected in parallel. Their equivalent resistance is:

- Ans
- 1. $27\ \Omega$
 - 2. $9\ \Omega$
 - 3. $18\ \Omega$
 - 4. $3\ \Omega$

Question ID : 7518975478

Option 1 ID : 75189721909

Option 2 ID : 75189721911

Option 3 ID : 75189721910

Option 4 ID : 75189721912

Status : Answered

Chosen Option : 4

Q.49 Which of the following is an example of 'Electrolytic Decomposition Reaction'?

- Ans
- 1. $2\text{KClO}_3 \rightarrow 2\text{KCl} + 3\text{O}_2$
 - 2. $2\text{H}_2\text{O} \rightarrow 2\text{H}_2 + \text{O}_2$
 - 3. $\text{ZnCO}_3 \rightarrow \text{ZnO} + \text{CO}_2$
 - 4. $2\text{AgBr} \rightarrow 2\text{Ag} + \text{Br}_2$

Question ID : 7518973430

Option 1 ID : 75189713720

Option 2 ID : 75189713717

Option 3 ID : 75189713719

Option 4 ID : 75189713718

Status : Answered

Chosen Option : 4

Q.50 One year ago, Krishna was four times as old as his daughter Kavitha. Six years hence, Krishna's age will be 12 years more than his daughter's age. Find the ratio of the present ages of Krishna and his daughter.

- Ans
- 1. 11: 3
 - 2. 9: 2
 - 3. 12: 5
 - 4. 17: 5

Question ID : 7518976156

Option 1 ID : 75189724622

Option 2 ID : 75189724621

Option 3 ID : 75189724623

Option 4 ID : 75189724624

Status : Answered

Chosen Option : 4

Q.51 If 1 is added to each odd digit and 1 is subtracted from each even digit in the number given below, what will be the difference in the digits that are third from the left and third from the right in the new number thus formed?

(Left) 86547231 (Right)

- Ans**
- 1. 5
 - 2. 4
 - 3. 3
 - 4. 6

Question ID : 7518975317
Option 1 ID : 75189721267
Option 2 ID : 75189721266
Option 3 ID : 75189721265
Option 4 ID : 75189721268
Status : Answered
Chosen Option : 1

Q.52 What is the least 5-digit number, which when divided by 15, 24, 35 and 42, the remainder in each case is 13?

- Ans**
- 1. 10067
 - 2. 10073
 - 3. 10093
 - 4. 10106

Question ID : 7518975590
Option 1 ID : 75189722357
Option 2 ID : 75189722359
Option 3 ID : 75189722358
Option 4 ID : 75189722360
Status : Answered
Chosen Option : 3

Q.53 Two banks, A and B, offered loans at 4.5% and 5.5% per annum, respectively. Ramesh borrowed an amount of ₹2,00,000 from each bank. Find the positive difference in the amounts of simple interest paid to the two banks by Ramesh after 2 years.

- Ans**
- 1. ₹ 2,000
 - 2. ₹ 4,000
 - 3. ₹ 8,000
 - 4. ₹ 6,000

Question ID : 7518975849
Option 1 ID : 75189723395
Option 2 ID : 75189723396
Option 3 ID : 75189723393
Option 4 ID : 75189723394
Status : Answered
Chosen Option : 1

Q.54

On what date were the Consumer Protection (Direct Selling) Rules, 2021 introduced by the Government of India?

Ans

- 1. 25 December 2021
- 2. 26 December 2021
- 3. 28 December 2021
- 4. 24 December 2021

Question ID : 7518973850
Option 1 ID : 75189715399
Option 2 ID : 75189715398
Option 3 ID : 75189715397
Option 4 ID : 75189715400
Status : Answered
Chosen Option : 1

Q.55

The Digambara sect belongs to which of the following religions?

Ans

- 1. Buddhism
- 2. Islam
- 3. Jainism
- 4. Sikhism

Question ID : 7518974208
Option 1 ID : 75189716829
Option 2 ID : 75189716831
Option 3 ID : 75189716830
Option 4 ID : 75189716832
Status : Answered
Chosen Option : 3

Q.56 Which of the following is NOT a change that marks the onset of puberty

- Ans
- 1. change in voice
 - 2. Sudden increase in height
 - 3. Growth of nails
 - 4. change in body shape

Question ID : 7518974432
Option 1 ID : 75189717727
Option 2 ID : 75189717725
Option 3 ID : 75189717726
Option 4 ID : 75189717728
Status : Answered
Chosen Option : 3

Q.57 If $x : y = 7 : 3$, then $(x^2 + y^2) : (x^2 - y^2) = ?$

- Ans
- 1. 29 : 20
 - 2. 25 : 4
 - 3. 5 : 2
 - 4. 5 : 1

Question ID : 7518975845
Option 1 ID : 75189723378
Option 2 ID : 75189723380
Option 3 ID : 75189723377
Option 4 ID : 75189723379
Status : Answered
Chosen Option : 1

Q.58 The following table shows the number of two-wheelers sold by five automobile companies named K, L, M, N and O in three different years from 2019, 2020, 2021. Study the table and answer the question.

Companies	2019	2020	2021
K	210	240	320
L	655	345	225
M	235	340	765
N	265	325	650
O	650	345	555

What is the percentage share of sale of company M done in the year 2019 in the total sale of Company M in all three years taken together?

- Ans**
- 1. 19.8%
 - 2. 17.5%
 - 3. 16.4%
 - 4. 15.3%

Question ID : 7518975343
 Option 1 ID : 75189721372
 Option 2 ID : 75189721371
 Option 3 ID : 75189721370
 Option 4 ID : 75189721369
 Status : Answered
 Chosen Option : 2

Q.59 Based on the given statement, two conclusions are drawn. Find out which conclusion is true based on the statement.

Statement: $T \geq C$, $B < D$, $C > B$

Conclusions:

- 1. $D = C$
- 2. $T > B$

- Ans**
- 1. Both conclusions 1 and 2 are true
 - 2. Only conclusion 2 is true
 - 3. Only conclusion 1 is true
 - 4. Neither conclusion 1 nor 2 is true

Question ID : 7518974767
 Option 1 ID : 75189719067
 Option 2 ID : 75189719066
 Option 3 ID : 75189719065
 Option 4 ID : 75189719068
 Status : Answered
 Chosen Option : 2

Q.60 In July 2022, the Lok Sabha passed the Family Courts (Amendment) Bill, 2022, to overcome the issue of lack of jurisdiction of Family Courts in the States of Himachal Pradesh and _____.

- Ans**
- 1. Sikkim
 - 2. Mizoram
 - 3. Meghalaya
 - 4. Nagaland

Question ID : 7518976535
Option 1 ID : 75189726140
Option 2 ID : 75189726138
Option 3 ID : 75189726139
Option 4 ID : 75189726137
Status : Not Answered
Chosen Option : --

Q.61 In January 2022, who released 'Banking on electric vehicles in India' report in collaboration with Rocky Mountain Institute and RMI India?

- Ans**
- 1. Ministry of Finance
 - 2. NITI Aayog
 - 3. DRDO
 - 4. Ministry of Road Transport and Highways

Question ID : 7518973793
Option 1 ID : 75189715171
Option 2 ID : 75189715172
Option 3 ID : 75189715169
Option 4 ID : 75189715170
Status : Not Answered
Chosen Option : --

Q.62 A concave mirror forms a real, inverted and diminished image of an object. Where is the object placed?

- Ans**
- 1. Between pole and focus
 - 2. Beyond centre of curvature
 - 3. Between focus and centre of curvature
 - 4. At focus

Question ID : 7518975356
 Option 1 ID : 75189721422
 Option 2 ID : 75189721423
 Option 3 ID : 75189721421
 Option 4 ID : 75189721424
 Status : Answered
 Chosen Option : 1

Q.63 In this question, a group of numbers/symbols is coded using letters as per the table given below and the conditions which follow. The correct combination of codes following the conditions is your answer.

Number/s ymbol	8	3	!	&	4	#	6	@	\$	7
Code	Q	W	E	R	T	Y	U	L	P	K

Conditions:

- (i) If the second element is a symbol and the last is also a symbol, then these two symbols do not require coding.
- (ii) If the first element is an even number and the last is a symbol, the codes of the first and last elements are to be interchanged.
- (iii) If the question has more than two odd numbers, then all even numbers do not require coding.
- (iv) if none of the conditions apply, use the codes directly

Question: 7 # \$ 4 6 @ 4 ! 8 3

- Ans**
- 1. KYPYULTEQW
 - 2. WYP4UL4EQK
 - 3. KYPTULTEQW
 - 4. KYP46L4E8W

Question ID : 7518974830
 Option 1 ID : 75189719317
 Option 2 ID : 75189719319
 Option 3 ID : 75189719318
 Option 4 ID : 75189719320
 Status : Answered
 Chosen Option : 3

Q.64 _____ is an Indian regional political party in the state of Tamil Nadu and the union territory of Puducherry, established in 1972.

- Ans
- 1. BJD
 - 2. AIADMK
 - 3. INLD
 - 4. DMDK

Question ID : 7518974111
 Option 1 ID : 75189716442
 Option 2 ID : 75189716441
 Option 3 ID : 75189716444
 Option 4 ID : 75189716443
 Status : Not Answered
 Chosen Option : --

Q.65 If the time in the mirror image of a 12-hour clock is 3:55, what is the actual time?

- Ans
- 1. 8:05
 - 2. 8:25
 - 3. 7:05
 - 4. 7:25

Question ID : 7518976771
 Option 1 ID : 75189727084
 Option 2 ID : 75189727081
 Option 3 ID : 75189727082
 Option 4 ID : 75189727083
 Status : Answered
 Chosen Option : 1

Q.66 If A is an acute angle of triangle ABC, the $\frac{\cos A - \sin A + 1}{\cos A + \sin A - 1}$ is equal to:

- Ans
- 1. $\cos A + \operatorname{cosec} A$
 - 2. $\cot A + \operatorname{cosec} A$
 - 3. $\tan A + \cos A$
 - 4. $\cot A + \sec A$

Question ID : 7518975783
 Option 1 ID : 75189723130
 Option 2 ID : 75189723129
 Option 3 ID : 75189723132
 Option 4 ID : 75189723131
 Status : Answered
 Chosen Option : 2

Q.67 Which of the following is/are weak acid(s)?

HCl, CH₃COOH, H₂SO₄, HNO₃, H₂CO₃, H₂SO₃

Ans 1. CH₃COOH, H₂CO₃

2. CH₃COOH, H₂SO₄, HNO₃, H₂CO₃

3. H₂SO₄, HNO₃, H₂CO₃

4. HCl, CH₃COOH, H₂SO₄

Question ID : 7518973621

Option 1 ID : 75189714482

Option 2 ID : 75189714484

Option 3 ID : 75189714483

Option 4 ID : 75189714481

Status : Answered

Chosen Option : 1

Q.68 A cube made of edge 18 m is completely filled with milk. The milk is transferred into a cuboid of length 27 m and height 7 m. The width of the cuboid is

Ans 1. 72.5 m

2. 54.6 m

3. 12.7 m

4. 30.8 m

Question ID : 7518975760

Option 1 ID : 75189723037

Option 2 ID : 75189723038

Option 3 ID : 75189723039

Option 4 ID : 75189723040

Status : Answered

Chosen Option : 4

Q.69 Two trains of same length are running on parallel tracks in the same direction at speeds of 56 m/s and 46 m/s. The faster train crosses the slower train in 26 sec. The length of each train is:

Ans 1. 100 m

2. 120 m

3. 140 m

4. 130 m

Question ID : 7518975875

Option 1 ID : 75189723497

Option 2 ID : 75189723498

Option 3 ID : 75189723499

Option 4 ID : 75189723500

Status : Answered

Chosen Option : 4

Q.70 Based on the given statement, four conclusions are drawn. Find out which conclusion is true based on the statement.

Statement: $J > H = N \geq B \leq C < E$

- Ans
- 1. $H < B$
 - 2. $B < J$
 - 3. $N > C$
 - 4. $N > E$

Question ID : 7518974765

Option 1 ID : 75189719057

Option 2 ID : 75189719058

Option 3 ID : 75189719059

Option 4 ID : 75189719060

Status : Answered

Chosen Option : 2

Q.71 Find the surface area of a sphere whose radius is 7 cm. [Use $\pi = \frac{22}{7}$]

- Ans
- 1. 616 cm^2
 - 2. 661 cm^2
 - 3. 666 cm^2
 - 4. 166 cm^2

Question ID : 7518975969

Option 1 ID : 75189723876

Option 2 ID : 75189723874

Option 3 ID : 75189723875

Option 4 ID : 75189723873

Status : Answered

Chosen Option : 1

Q.72 The value of $\frac{2}{3} + \frac{1}{1+\frac{4}{5}} - \frac{5}{6}$ is:

- Ans
- 1. $\frac{5}{18}$
 - 2. $\frac{13}{18}$
 - 3. $\frac{7}{18}$
 - 4. $\frac{11}{18}$

Question ID : 7518976232

Option 1 ID : 75189724928

Option 2 ID : 75189724925

Option 3 ID : 75189724926

Option 4 ID : 75189724927

Status : Answered

Chosen Option : 3

Q.73 In plants, the cells of meristematic tissue undergo a process wherein they lose their ability to divide, take up a permanent shape and size and specialise to perform a specific function. What is this process known as?

- Ans**
- 1. Development
 - 2. Proliferation
 - 3. Differentiation
 - 4. Regeneration

Question ID : 7518974520
Option 1 ID : 75189718078
Option 2 ID : 75189718080
Option 3 ID : 75189718077
Option 4 ID : 75189718079
Status : Answered
Chosen Option : 2

Q.74 The doldrums are an area of _____ pressure around the equator, where prevailing winds are calm.

- Ans**
- 1. Constant
 - 2. low
 - 3. high
 - 4. fluctuating

Question ID : 7518977254
Option 1 ID : 75189729015
Option 2 ID : 75189729013
Option 3 ID : 75189729014
Option 4 ID : 75189729016
Status : Answered
Chosen Option : 1

Q.75 An object is placed on the principal axis of a concave lens of focal length 20 cm, at a distance of 10 cm. The magnification produced by the lens is _____ and the image is _____.

- Ans**
- 1. less than 1, erect
 - 2. more than 1, inverted
 - 3. more than 1, erect
 - 4. less than 1, inverted

Question ID : 7518976631
Option 1 ID : 75189726522
Option 2 ID : 75189726523
Option 3 ID : 75189726521
Option 4 ID : 75189726524
Status : Answered
Chosen Option : 1

Q.76 If 1 is added to each even digit and 1 is subtracted from each odd digit in the number 457943246, what will be the sum of the digits that are fourth from the left and fourth from the right?

- Ans**
- 1. 16
 - 2. 10
 - 3. 8
 - 4. 12

Question ID : 7518975100
Option 1 ID : 75189720400
Option 2 ID : 75189720398
Option 3 ID : 75189720397
Option 4 ID : 75189720399
Status : Answered
Chosen Option : 2

Q.77 How many such pairs of letters are there in the word 'ROASTERS' (in both forward and backward directions) which have as many letters between them in the word as there are in the English alphabetical order?

- Ans**
- 1. Four
 - 2. Two
 - 3. One
 - 4. Three

Question ID : 7518975222
Option 1 ID : 75189720888
Option 2 ID : 75189720886
Option 3 ID : 75189720885
Option 4 ID : 75189720887
Status : Answered
Chosen Option : 4

Q.78 Three statements are given followed by three conclusions I,II and III. You have to consider these statements to be true, even if they seem at variance from commonly known facts. Choose which of the given conclusions logically follow/s from the given statements.

Statements:

1. All sugars are jaggery.
2. No jaggery is sweetener.
3. All sweeteners are fruits.

Conclusions:

- I. No sugar is sweetener.
- II. Some jaggeries are sweeteners.
- III. Some jaggeries are sugars.

- Ans**
- 1. All conclusions follow.
 - 2. Only conclusion I and III follow.
 - 3. Only conclusions II and III follow.
 - 4. Only conclusions I and II follow.

Question ID : 7518974745
Option 1 ID : 75189718979
Option 2 ID : 75189718980
Option 3 ID : 75189718978
Option 4 ID : 75189718977

Status : Answered

Chosen Option : 2

Q.79 J, K, L, M, N, O and P are seven comedians sitting in a straight row facing north. O and L are immediate neighbours. Only two people sit to the left of K. L is to the immediate right of N. P is an immediate neighbour of both K and N. If J is at the extreme left end of the row, who sits at the extreme right end?

- Ans**
- 1. P
 - 2. M
 - 3. N
 - 4. O

Question ID : 7518974901
Option 1 ID : 75189719602
Option 2 ID : 75189719604
Option 3 ID : 75189719601
Option 4 ID : 75189719603

Status : Answered

Chosen Option : 4

Q.80 Five-fourths of a number is greater than three-fourths of the number by 6. Find the number.

- Ans**
- 1. 10
 - 2. 14
 - 3. 12
 - 4. 8

Question ID : 7518976135
Option 1 ID : 75189724538
Option 2 ID : 75189724540
Option 3 ID : 75189724539
Option 4 ID : 75189724537
Status : Answered
Chosen Option : 3

Q.81 Seven boxes, A, B, C, D, E, F and G, are kept one over the other but not necessarily in the same order. Exactly two boxes are kept between C and D with C placed above D. F is immediately below A. G is immediately above B. B is the third box from the top. Exactly two boxes are kept between D and E with D placed above E. Only one box is kept between E and A. Which box is kept just above E?

- Ans**
- 1. D
 - 2. C
 - 3. G
 - 4. F

Question ID : 7518975160
Option 1 ID : 75189720637
Option 2 ID : 75189720640
Option 3 ID : 75189720639
Option 4 ID : 75189720638
Status : Answered
Chosen Option : 4

Q.82 Six poles, A, B, C, D, E and F, are located in the same colony. B is 20 m to the west of C. F is 60 m to the south of E. C is 30 m to the north of E. A is 60 m to the west of B. D is 30 m to the south of B. In which direction is A with reference to C?

- Ans**
- 1. North
 - 2. West
 - 3. East
 - 4. South

Question ID : 7518975269
Option 1 ID : 75189721075
Option 2 ID : 75189721074
Option 3 ID : 75189721073
Option 4 ID : 75189721076
Status : Answered
Chosen Option : 2

Q.83 Which Amendment in the Indian Constitution substituted the words 'sovereign democratic republic' with the words 'sovereign socialist secular democratic republic' and 'unity of the Nation' with the words 'unity and integrity of the Nation'?

- Ans**
- ✓ 1. 42nd
 - ✗ 2. 31st
 - ✗ 3. 53rd
 - ✗ 4. 64th

Question ID : 7518974284
Option 1 ID : 75189717134
Option 2 ID : 75189717133
Option 3 ID : 75189717135
Option 4 ID : 75189717136
Status : Answered
Chosen Option : 1

Q.84 In which of the following states did NESTLE India Ltd. set up its first factory in 1961?

- Ans**
- ✗ 1. Madhya Pradesh
 - ✓ 2. Punjab
 - ✗ 3. Kerala
 - ✗ 4. Haryana

Question ID : 7518973803
Option 1 ID : 75189715210
Option 2 ID : 75189715211
Option 3 ID : 75189715209
Option 4 ID : 75189715212
Status : Answered
Chosen Option : 4

Q.85 Pipe A is 3 times faster than pipe B. Both pipes together fill a tank in 36 min. How much time will pipe A alone take to fill the tank?

- Ans**
- 1. 80 min
 - 2. 100 min
 - 3. 156 min
 - 4. 48 min

Question ID : 7518975662
Option 1 ID : 75189722645
Option 2 ID : 75189722646
Option 3 ID : 75189722648
Option 4 ID : 75189722647
Status : Answered
Chosen Option : 4

Q.86 Select the triad which follows the same pattern as that followed by the two triads given below. Both triads follow the same pattern.

PY - RW - TU

EN - GL - JJ

- Ans**
- 1. XC - YB - ZA
 - 2. MT - OR - QP
 - 3. UV - TU - ST
 - 4. DE - EF - FG

Question ID : 7518975055
Option 1 ID : 75189720219
Option 2 ID : 75189720218
Option 3 ID : 75189720220
Option 4 ID : 75189720217
Status : Answered
Chosen Option : 2

Q.87 Which festival revives and preserves the rich culture of Nagaland, and showcases its extraordinary traditions?

- Ans**
- 1. Thrissur Pooram Festival
 - 2. Hornbill Festival
 - 3. Losar Festival
 - 4. Thaipusam Festival

Question ID : 7518973998
Option 1 ID : 75189715991
Option 2 ID : 75189715989
Option 3 ID : 75189715990
Option 4 ID : 75189715992
Status : Answered
Chosen Option : 2

Q.88 Which cell organelle detoxifies toxins and drugs?

- Ans
- 1. Ribosomes
 - 2. Mitochondria
 - 3. Golgi bodies
 - 4. Endoplasmic reticulum

Question ID : 7518974363
Option 1 ID : 75189717452
Option 2 ID : 75189717449
Option 3 ID : 75189717450
Option 4 ID : 75189717451
Status : Answered
Chosen Option : 3

Q.89 Select the set in which the numbers are related in the same way as are the numbers of the following sets.

(NOTE: Operations should be performed on the whole numbers, without breaking down the numbers into its constituent digits. E.g. 13 – Operations on 13 such as adding/subtracting/multiplying etc. to 13 can be performed. Breaking down 13 into 1 and 3 and then performing mathematical operations on 1 and 3 are not allowed.)

(12, 61, 7)

(15, 51, 6)

- Ans
- 1. (14, 78, 8)
 - 2. (20, 54, 5)
 - 3. (12, 46, 4)
 - 4. (16, 70, 9)

Question ID : 7518975301
Option 1 ID : 75189721202
Option 2 ID : 75189721204
Option 3 ID : 75189721201
Option 4 ID : 75189721203
Status : Not Answered
Chosen Option : --

Q.90 The sum of two positive integers is 55. If their HCF and LCM are 5 and 120, respectively, then the sum of their reciprocals is _____.

- Ans
- 1. $\frac{120}{13}$
 - 2. $\frac{11}{120}$
 - 3. $\frac{14}{6}$
 - 4. $\frac{12}{13}$

Question ID : 7518975592
Option 1 ID : 75189722366
Option 2 ID : 75189722367
Option 3 ID : 75189722368
Option 4 ID : 75189722365
Status : Answered
Chosen Option : 2

Q.91 If one root of a quadratic equation, α , is half of the other root of the same equation, then find the quadratic equation.

- Ans
- 1. $x^2 + 3ax + 2a^2 = 0$
 - 2. $x^2 + 3ax - 2a^2 = 0$
 - 3. $x^2 - 3ax + 2a^2 = 0$
 - 4. $x^2 - 3ax - 2a^2 = 0$

Question ID : 7518975951
Option 1 ID : 75189723802
Option 2 ID : 75189723804
Option 3 ID : 75189723801
Option 4 ID : 75189723803
Status : Answered
Chosen Option : 3

Q.92 Which of the following is the first indigenous RT-PCR kit developed by 'CSIR – Central Drug Research Institute' for testing the omicron variant?

- Ans
- 1. VinCom
 - 2. Shanti
 - 3. Cowin
 - 4. INDICoV-Om

Question ID : 7518974151
Option 1 ID : 75189716601
Option 2 ID : 75189716602
Option 3 ID : 75189716604
Option 4 ID : 75189716603
Status : Answered
Chosen Option : 4

Q.93 Two bulbs A and B are rated 100 W and 25 W, respectively, at a given voltage. The ratio of resistance of bulb A to that of bulb B is:

- Ans
- 1. 4 : 1
 - 2. 2 : 1
 - 3. 1 : 4
 - 4. 1 : 2

Question ID : 7518975506
Option 1 ID : 75189722022
Option 2 ID : 75189722024
Option 3 ID : 75189722021
Option 4 ID : 75189722023
Status : Answered
Chosen Option : 1

Q.94 Which of the following groups represents zero valency?

- Ans
- 1. 18
 - 2. 14
 - 3. 12
 - 4. 16

Question ID : 7518973526
Option 1 ID : 75189714104
Option 2 ID : 75189714103
Option 3 ID : 75189714101
Option 4 ID : 75189714102
Status : Answered
Chosen Option : 1

Q.95 Which of the following numbers will replace the question mark (?) in the given series?

11, 31, 55, 84, 119, ?

- Ans
- 1. 131
 - 2. 161
 - 3. 157
 - 4. 142

Question ID : 7518975293
Option 1 ID : 75189721169
Option 2 ID : 75189721172
Option 3 ID : 75189721171
Option 4 ID : 75189721170
Status : Answered
Chosen Option : 2

Q.96 Which Indian language is also recognised as an official language of Singapore and Sri Lanka?

- Ans
- 1. Kannada
 - 2. Telugu
 - 3. Bengali
 - 4. Tamil

Question ID : 7518977192
Option 1 ID : 75189728766
Option 2 ID : 75189728765
Option 3 ID : 75189728768
Option 4 ID : 75189728767
Status : Not Answered
Chosen Option : --

Q.97 Find the roots of $\sqrt{3}m^2 + 10m + 7\sqrt{3} = 0$.

- Ans
- 1. $-\frac{7}{\sqrt{3}}$ and $-\sqrt{3}$
 - 2. $\frac{7}{\sqrt{3}}$ and $-\sqrt{3}$
 - 3. $-\frac{7}{\sqrt{3}}$ and $\sqrt{3}$
 - 4. $-\frac{7}{\sqrt{3}}$ and $-2\sqrt{3}$

Question ID : 7518975741
Option 1 ID : 75189722961
Option 2 ID : 75189722963
Option 3 ID : 75189722962
Option 4 ID : 75189722964
Status : Answered
Chosen Option : 1

Q.98 Which of the following is an example of combination reaction?

- Ans
- 1. $\text{ZnCO}_3 \rightarrow \text{ZnO} + \text{CO}_2$
 - 2. $2\text{NaCl} \rightarrow 2\text{Na} + \text{Cl}_2$
 - 3. $\text{MgCl}_2 + \text{Na} \rightarrow 2\text{NaCl} + \text{Mg}$
 - 4. $\text{N}_2 + \text{H}_2 \rightarrow 2\text{NH}_3$

Question ID : 7518973422
Option 1 ID : 75189713688
Option 2 ID : 75189713686
Option 3 ID : 75189713687
Option 4 ID : 75189713685
Status : Answered
Chosen Option : 4

Q.99 Who among the following became the first para-athlete of India to receive the Padma Bhushan in the year 2022?

- Ans**
- 1. Harvinder Singh
 - 2. Pramod Bhagat
 - 3. Devendra Jhajharia
 - 4. Manoj Sarkar

Question ID : 7518976460
Option 1 ID : 75189725838
Option 2 ID : 75189725840
Option 3 ID : 75189725837
Option 4 ID : 75189725839

Status : Answered
Chosen Option : 3

Q.100 The frequency distribution here gives the monthly consumption of electricity of 60 consumers of a locality. What is the median of the data?

Monthly consumption (in units)	Number of consumers
50 – 60	6
60 – 70	8
70 – 80	15
80 – 90	20
90 – 100	11

- Ans**
- 1. 80.5
 - 2. 83.1
 - 3. 82.4
 - 4. 81.2

Question ID : 7518976313
Option 1 ID : 75189725249
Option 2 ID : 75189725252
Option 3 ID : 75189725251
Option 4 ID : 75189725250

Status : Answered
Chosen Option : 1