



रेल भर्ती बोर्ड / RAILWAY RECRUITMENT BOARDS
सी ई एन आर आर सी - ०१/२०१९ - CEN RRC - 01/2019



Roll Number	
Candidate Name	
Test Center Name	Dr. Ghanshyam Singh College Of Education
Test Date	27/09/2022
Test Time	12:45 PM - 2:15 PM
Subject	Level 1

* Note

Correct Answer will carry 1 mark per Question.

Incorrect Answer will carry 1/3 Negative mark per Question.

1. Options shown in green color with a tick icon are correct.

2. Chosen option on the right of the question indicates the option selected by the candidate.

Section : Level 1

Q.1 Which of the following statements is correct with regard to the reflection of light by a spherical mirror?

- (a) A convex mirror converges the light rays incident parallel to its principal axis.
- (b) A concave mirror converges the light rays incident parallel to its principal axis.
- (c) Convex mirror can form both, real and virtual images.
- (d) Concave mirror can form both, real and virtual images.

Ans 1. Only (a) and (d)

2. Only (a) and (c)

3. Only (b) and (c)

4. Only (b) and (d)

Question ID : 75189714094

Option 1 ID : 75189756375

Option 2 ID : 75189756373

Option 3 ID : 75189756376

Option 4 ID : 75189756374

Status : Not Answered

Chosen Option : --

Test Prime

ALL EXAMS,
ONE SUBSCRIPTION



40,000+
Mock Tests



Personalised
Report Card



Unlimited
Re-Attempt



500+
Exam Covered



Previous Year
Papers



500%
Refund



DOWNLOAD NOW

Q.2 Simplify the following.

$$0.\overline{06} \times 8.\overline{3}$$

- Ans
- 1. $0.\overline{050}$
 - 2. $0.0\overline{50}$
 - 3. $0.\overline{50}$
 - 4. $0.1\overline{50}$

Question ID : 75189713267

Option 1 ID : 75189753066

Option 2 ID : 75189753065

Option 3 ID : 75189753067

Option 4 ID : 75189753068

Status : Answered

Chosen Option : 4

Q.3 The Forest Department changed its strategy, making a beginning in the Arabari forest range of Midnapore district, at the insistence of a far-seeing forest officer named:

- Ans
- 1. ED Arun Ghosh
 - 2. KA Midhun
 - 3. AK Banerjee
 - 4. TA Chatterjee

Question ID : 75189710293

Option 1 ID : 75189741171

Option 2 ID : 75189741169

Option 3 ID : 75189741170

Option 4 ID : 75189741172

Status : Not Answered

Chosen Option : --

Q.4 A certain number of people are sitting in a row, facing north. Q is second to the right of P. Only three people sit between Q and S. T is fourth to the right of S. If no other person is sitting in the row, what is the total number of people seated in the row?

- Ans
- 1. 10
 - 2. 8
 - 3. 11
 - 4. 12

Question ID : 75189714907

Option 1 ID : 75189759625

Option 2 ID : 75189759627

Option 3 ID : 75189759626

Option 4 ID : 75189759628

Status : Answered

Chosen Option : 3

Q.5 Which language is a descendant of Sanskrit and is influenced by the languages of Dravidian, Arabic, Portuguese, English, Persian and Turkey?

- Ans**
- 1. Bengali
 - 2. Hindi
 - 3. Tamil
 - 4. Urdu

Question ID : **75189712529**
 Option 1 ID : **75189750115**
 Option 2 ID : **75189750114**
 Option 3 ID : **75189750113**
 Option 4 ID : **75189750116**
 Status : **Answered**
 Chosen Option : **3**

Q.6 Which of the following terms will replace the question mark (?) in the given series to make it logically complete?

YSL 22, WQJ 25, UOH 28, SMF 31, ?

- Ans**
- 1. QLD 34
 - 2. RKD 32
 - 3. SLE 35
 - 4. QKD 34

Question ID : **75189714463**
 Option 1 ID : **75189757849**
 Option 2 ID : **75189757850**
 Option 3 ID : **75189757852**
 Option 4 ID : **75189757851**
 Status : **Answered**
 Chosen Option : **4**

Q.7 The nominal marks obtained by students who appeared in a test are given below. Find the median marks of the students.

Marks	11	20	8	16	29	22
No. of students	14	5	11	9	3	8

- Ans**
- 1. 13
 - 2. 8
 - 3. 13.5
 - 4. 10.5

Question ID : **75189712641**
 Option 1 ID : **75189750564**
 Option 2 ID : **75189750561**
 Option 3 ID : **75189750563**
 Option 4 ID : **75189750562**
 Status : **Answered**
 Chosen Option : **3**

Q.8 Select the option that is related to the fifth number in the same way as the second number is related to the first number and the fourth number is related to the third number.

15 : 230 :: 13 : 174 :: 11 : ?

- Ans
- 1. 121
 - 2. 144
 - 3. 149
 - 4. 126

Question ID : 75189711668
Option 1 ID : 75189746670
Option 2 ID : 75189746671
Option 3 ID : 75189746669
Option 4 ID : 75189746672
Status : Answered
Chosen Option : 4

Q.9 The Cardamom hills are located in which state of India?

- Ans
- 1. Kerala
 - 2. Maharashtra
 - 3. Karnataka
 - 4. Goa

Question ID : 75189712508
Option 1 ID : 75189750032
Option 2 ID : 75189750029
Option 3 ID : 75189750031
Option 4 ID : 75189750030
Status : Answered
Chosen Option : 1

Q.10 Which of the following numbers will replace the question mark (?) in the given series?

3 7 23 59 ? 223

- Ans
- 1. 133
 - 2. 123
 - 3. 143
 - 4. 113

Question ID : 75189712701
Option 1 ID : 75189750803
Option 2 ID : 75189750802
Option 3 ID : 75189750804
Option 4 ID : 75189750801
Status : Answered
Chosen Option : 2

Q.11 The value of $(\sin \theta + \operatorname{cosec} \theta)^2 + (\cos \theta + \sec \theta)^2$ is:

- Ans
- 1. $7 - \cot^2 \theta + \tan^2 \theta$
 - 2. $5 + \cot^2 \theta + \tan^2 \theta$
 - 3. $7 + \cot^2 \theta + \tan^2 \theta$
 - 4. $5 - \cot^2 \theta + \tan^2 \theta$

Question ID : 75189712888
Option 1 ID : 75189751551
Option 2 ID : 75189751550
Option 3 ID : 75189751552
Option 4 ID : 75189751549
Status : Answered
Chosen Option : 4

Q.12 Which of the following groups represents metals?

- Ans
- 1. Group 2
 - 2. Group 18
 - 3. Group 16
 - 4. Group 17

Question ID : 75189715085
Option 1 ID : 75189760337
Option 2 ID : 75189760338
Option 3 ID : 75189760340
Option 4 ID : 75189760339
Status : Answered
Chosen Option : 1

Q.13 Who among the following was the Prime Minister of India during the Eighth Five-Year Plan?

- Ans
- 1. PV Narasimha Rao
 - 2. Manmohan Singh
 - 3. Chandra Shekhar
 - 4. Rajiv Gandhi

Question ID : 75189712493
Option 1 ID : 75189749972
Option 2 ID : 75189749969
Option 3 ID : 75189749970
Option 4 ID : 75189749971
Status : Answered
Chosen Option : 4

Q.14 Five boxes X, Y, Z, A and B are kept one above the other but not necessarily in the same order. Only X is kept between Y and B. Z is not kept immediately above or immediately below A. A is not kept on the top most position. Which box is kept at the bottom most position?

- Ans**
- 1. B
 - 2. A
 - 3. Y
 - 4. Z

Question ID : 75189713598
Option 1 ID : 75189754390
Option 2 ID : 75189754389
Option 3 ID : 75189754391
Option 4 ID : 75189754392
Status : Answered
Chosen Option : 2

Q.15 R, S, T, U, V and W live on six different floors of the same building. The lowermost floor in the building is numbered 1, the floor above it is numbered 2 and so on till the topmost floor is numbered 6. V lives on floor number 5. S does not live on an even numbered floor. U lives immediately below T. Neither R nor S lives on the topmost floor. Only two people live between V and T. Who lives immediately below R?

- Ans**
- 1. T
 - 2. V
 - 3. U
 - 4. S

Question ID : 75189713535
Option 1 ID : 75189754138
Option 2 ID : 75189754140
Option 3 ID : 75189754139
Option 4 ID : 75189754137
Status : Answered
Chosen Option : 4

Q.16 If 2 is multiplied to each even digit and 2 is added to each odd digit in the number 2434251, what will be the sum of the digits which will appear more than once in the new number thus formed?

- Ans**
- 1. 12
 - 2. 13
 - 3. 14
 - 4. 15

Question ID : 75189713723
Option 1 ID : 75189754892
Option 2 ID : 75189754889
Option 3 ID : 75189754891
Option 4 ID : 75189754890
Status : Answered
Chosen Option : 1

Q.17 Refer to the following letter, number, symbol series and answer the question.

(Left) S 7 & D M # Z 6 % 3 T 2 * H G = C ? 4 Y B (Right)

How many such symbols are there which are immediately preceded by a number and also immediately followed by a letter?

- Ans
- 1. Two
 - 2. Four
 - 3. One
 - 4. Three

Question ID : 75189713046

Option 1 ID : 75189752182

Option 2 ID : 75189752184

Option 3 ID : 75189752181

Option 4 ID : 75189752183

Status : Answered

Chosen Option : 1

Q.18 Who is the ex-officio Chairman of the Rajya Sabha?

- Ans
- 1. Prime Minister of India
 - 2. President of India
 - 3. Vice-President of India
 - 4. Home Minister of India

Question ID : 75189712169

Option 1 ID : 75189748673

Option 2 ID : 75189748675

Option 3 ID : 75189748674

Option 4 ID : 75189748676

Status : Answered

Chosen Option : 3

Q.19 तांबे की निम्न प्रतिरोधकता के कारण, इसका उपयोग _____ में किया जाता है।

- Ans
- 1. हीटर
 - 2. संचरण लाइनों
 - 3. विद्युत बल्ब
 - 4. टोस्टर

Question ID : 75189713794

Option 1 ID : 75189755174

Option 2 ID : 75189755175

Option 3 ID : 75189755173

Option 4 ID : 75189755176

Status : Answered

Chosen Option : 2

Q.20 One evening, Ram and Shyam are talking face-to-face with each other. If Shyam's shadow was exactly to the right of Ram, in which direction was Shyam facing?

- Ans**
- 1. South
 - 2. West
 - 3. North
 - 4. East

Question ID : 75189713221
Option 1 ID : 75189752882
Option 2 ID : 75189752881
Option 3 ID : 75189752884
Option 4 ID : 75189752883
Status : Answered
Chosen Option : 3

Q.21 If $C = 400$ and $Y = 1000$, then what is the average propensity to consume?

- Ans**
- 1. 2.5
 - 2. 40
 - 3. 0.4
 - 4. 250

Question ID : 7518976810
Option 1 ID : 75189727238
Option 2 ID : 75189727239
Option 3 ID : 75189727237
Option 4 ID : 75189727240
Status : Answered
Chosen Option : 3

Q.22 Refractive index of flint glass is 1.56. Then the critical angle(I_c) for glass air interface can also be expressed as $\sin I_c$ equals :

- Ans**
- 1. 0.64
 - 2. 0.94
 - 3. 0.74
 - 4. 0.84

Question ID : 75189712215
Option 1 ID : 75189748857
Option 2 ID : 75189748860
Option 3 ID : 75189748858
Option 4 ID : 75189748859
Status : Not Answered
Chosen Option : --

Q.23 निम्नलिखित में से किसे भारत में सरकार के संघीय स्वरूप का परिणाम कहा जा सकता है?

Ans 1.

राज्य के साथ-साथ अन्य व्यक्तियों के विरुद्ध व्यक्तियों के अधिकार

2. बहु-स्तरीय सरकार - संघ, राज्य और स्थानीय

3. प्रधानमंत्री की अध्यक्षता वाली मंत्रिपरिषद

4.

सरकार के तीन अंग - विधायिका, कार्यपालिका और न्यायपालिका

Question ID : 7518978587

Option 1 ID : 75189734348

Option 2 ID : 75189734346

Option 3 ID : 75189734345

Option 4 ID : 75189734347

Status : Answered

Chosen Option : 3

Q.24 The general formula C_nH_{2n-2} represents:

Ans 1. alkene

2. acyclic compound

3. alkane

4. alkyne

Question ID : 75189714664

Option 1 ID : 75189758654

Option 2 ID : 75189758656

Option 3 ID : 75189758653

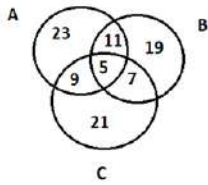
Option 4 ID : 75189758655

Status : Answered

Chosen Option : 4

Q.25 Study the given Venn diagram carefully and answer the question that follows. The numbers in different sections indicate the number of gardeners assigned with the following tasks.

A = Watering the plants; B = Growing new plants; C = Beautification of the park



How many such gardeners are there who are assigned with the task of only growing new plants?

- Ans**
- 1. 21
 - 2. 11
 - 3. 19
 - 4. 12

Question ID : 75189714970

Option 1 ID : 75189759880

Option 2 ID : 75189759877

Option 3 ID : 75189759879

Option 4 ID : 75189759878

Status : Answered

Chosen Option : 3

Q.26 कृत्रिम किडनी के उपयोग से नाइट्रोजनयुक्त अपशिष्ट को हटाने की प्रक्रिया _____ कहलाती है।

- Ans**
- 1. राइनोप्लास्टी (rhinoplasty)
 - 2. हीमोडायलिसिस (haemodialysis)
 - 3. ट्रांसप्लांटेशन (transplantation)
 - 4. एंजियोग्राम (angiogram)

Question ID : 7518974408

Option 1 ID : 75189717631

Option 2 ID : 75189717630

Option 3 ID : 75189717632

Option 4 ID : 75189717629

Status : Answered

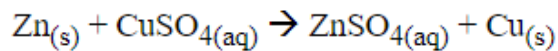
Chosen Option : 2

Q.27 Simplify $\frac{(5p-q)^3 - (3p-2q)^3 - (q+2p)^3}{13pq - 15p^2 - 2q^2}$.

- Ans
- 1. $-6p+3q$
 - 2. $6p+3q$
 - 3. $-6p-3q$
 - 4. $6p-3q$

Question ID : 75189712065
 Option 1 ID : 75189748260
 Option 2 ID : 75189748257
 Option 3 ID : 75189748258
 Option 4 ID : 75189748259
 Status : Answered
 Chosen Option : 2

Q.28 The given reaction is an example of a _____.



- Ans
- 1. double displacement reaction
 - 2. displacement reaction
 - 3. decomposition reaction
 - 4. combination reaction

Question ID : 75189711871
 Option 1 ID : 75189747482
 Option 2 ID : 75189747484
 Option 3 ID : 75189747483
 Option 4 ID : 75189747481
 Status : Answered
 Chosen Option : 2

Q.29 The Home Rule League was established in India by Indian nationalist Bal Gangadhar Tilak and Indian independence leader _____ in September 1916 in Madras, with the objective of achieving self-government in India.

- Ans
- 1. Bipin Chandra Pal
 - 2. Annie Besant
 - 3. Lala Lajpat Rai
 - 4. Swami Vivekananda

Question ID : 75189710426
 Option 1 ID : 75189741702
 Option 2 ID : 75189741701
 Option 3 ID : 75189741703
 Option 4 ID : 75189741704
 Status : Answered
 Chosen Option : 2

Q.30 Simplify the given expression.

$$\frac{5}{2}x^2 + 4x + \frac{3}{2} + \frac{x^2}{2} - 6x + \frac{5}{2}$$

- Ans
- 1. $3x^2 + 2x + 4$
 - 2. $3x^2 - 2x + 4$
 - 3. $3x^2 - 2x - 4$
 - 4. $3x^2 + 2x - 4$

Question ID : 75189712997

Option 1 ID : 75189751987

Option 2 ID : 75189751986

Option 3 ID : 75189751988

Option 4 ID : 75189751985

Status : Answered

Chosen Option : 2

Q.31 In March 2022, a captive floating solar power plant which is claimed to be the country's first and largest floating power plant, set up by the agri-nutrient and fertilisers company Southern Petrochemicals Industries Corporation Limited, popularly known as SPIC Limited, formally went on stream at which place?

- Ans
- 1. Kodaikanal
 - 2. Bhopal
 - 3. Udaipur
 - 4. Thoothukudi

Question ID : 75189712342

Option 1 ID : 75189749368

Option 2 ID : 75189749367

Option 3 ID : 75189749366

Option 4 ID : 75189749365

Status : Not Answered

Chosen Option : --

Q.32 Select the set in which the numbers are related in the same way as are the numbers of the following sets.
(NOTE : Operations should be performed on the whole numbers, without breaking down the numbers into its constituent digits. E.g. 13 – Operations on 13 such as adding / subtracting / multiplying etc. to 13 can be performed. Breaking down 13 into 1 and 3 and then performing mathematical operations on 1 and 3 is not allowed.)

(11, 24, 57)
(7, 39, 60)

- Ans**
- 1. (17, 58, 91)
 - 2. (14, 25, 43)
 - 3. (12, 55, 19)
 - 4. (15, 41, 86)

Question ID : 75189714936
Option 1 ID : 75189759741
Option 2 ID : 75189759743
Option 3 ID : 75189759742
Option 4 ID : 75189759744
Status : Not Answered
Chosen Option : --

Q.33 Six equal cubes, each of side 7 cm, are placed adjacent to each other. The volume of the new solid formed will be:

- Ans**
- 1. 2312 cm³
 - 2. 2058 cm³
 - 3. 2206 cm³
 - 4. 2124 cm³

Question ID : 75189712867
Option 1 ID : 75189751468
Option 2 ID : 75189751465
Option 3 ID : 75189751467
Option 4 ID : 75189751466
Status : Answered
Chosen Option : 2

Q.34 When light passes from water to air then _____ changes.

- Ans**
- 1. Wave length
 - 2. its frequency
 - 3. its colour
 - 4. its speed

Question ID : 7518979503
Option 1 ID : 75189738010
Option 2 ID : 75189738009
Option 3 ID : 75189738012
Option 4 ID : 75189738011
Status : Answered
Chosen Option : 4

Q.35 Read the given statements and conclusions carefully. Assuming that the information given in the statements is true, even if it appears to be at variance with commonly known facts, decide which of the given conclusions logically follow(s) from the statements.

Statements:

Some markers are pens.

Some pens are colours.

Some colours are wax.

Conclusions:

(I) Some colours are markers.

(II) Some pens are wax.

- Ans**
- 1. Only conclusion (I) follows.
 - 2. Both conclusion (I) and conclusion (II) follow.
 - 3. Only conclusion (II) follows.
 - 4. Both conclusion (I) and conclusion (II) do not follow.

Question ID : 75189714730

Option 1 ID : 75189758917

Option 2 ID : 75189758919

Option 3 ID : 75189758918

Option 4 ID : 75189758920

Status : Answered

Chosen Option : 4

Q.36 In what time will a sum of ₹6,400 amount to ₹7,168 at 6% simple interest per annum?

- Ans**
- 1. 2.5 years
 - 2. 4 years
 - 3. 2 years
 - 4. 3 years

Question ID : 75189713301

Option 1 ID : 75189753201

Option 2 ID : 75189753203

Option 3 ID : 75189753204

Option 4 ID : 75189753202

Status : Answered

Chosen Option : 3

Q.37 ऋण की अवधि के दौरान बदलने वाली ब्याज दरों के लिए प्रयुक्त शब्द क्या है?

- Ans
- 1. अपवाह दर (Drifting rate)
 - 2. परिवर्तनीय दर (Variable rate)
 - 3. अस्थिर दर (Floating rate)
 - 4. उत्प्लावक दर (Buoyant rate)

Question ID : 75189712480

Option 1 ID : 75189749919

Option 2 ID : 75189749918

Option 3 ID : 75189749917

Option 4 ID : 75189749920

Status : Not Answered

Chosen Option : --

Q.38 In a certain code language, 'PURPLE' is written as 'VQQSFM' and 'YELLOW' is written as 'FZMMXP'. How will 'VIOLET' be written in the same code language?

- Ans
- 1. JWMPUF
 - 2. JMWPFU
 - 3. AMFUPW
 - 4. XMPWUF

Question ID : 75189713625

Option 1 ID : 75189754498

Option 2 ID : 75189754500

Option 3 ID : 75189754497

Option 4 ID : 75189754499

Status : Answered

Chosen Option : 1

Q.39 Who became the first Indian to bag a medal at the IBSA Judo Grand Prix, in 2022?

- Ans
- 1. Navjot Chana
 - 2. Kapil Parmar
 - 3. Akram Shah
 - 4. Avtar Singh

Question ID : 75189712547

Option 1 ID : 75189750185

Option 2 ID : 75189750186

Option 3 ID : 75189750187

Option 4 ID : 75189750188

Status : Not Answered

Chosen Option : --

Q.40 The gaseous waste product generated during photosynthesis is:

- Ans 1. oxygen
 2. carbon monoxide
 3. nitrogen
 4. carbon dioxide

Question ID : 75189710174
Option 1 ID : 75189740696
Option 2 ID : 75189740693
Option 3 ID : 75189740695
Option 4 ID : 75189740694
Status : Answered
Chosen Option : 3

Q.41 Which of the following are exactly divisible by 44?

- (a) 155232
(b) 155248
(c) 156944
(d) 156992

- Ans 1. Only (b) and (c)
 2. Only (a) and (d)
 3. Only (a) and (c)
 4. Only (b) and (d)

Question ID : 75189712610
Option 1 ID : 75189750438
Option 2 ID : 75189750440
Option 3 ID : 75189750437
Option 4 ID : 75189750439
Status : Answered
Chosen Option : 2

Q.42 On 1 March 2022, the National Commission for Protection of Child Rights (NCPCR) marked its _____ Foundation Day.

- Ans
- 1. 13th
 - 2. 11th
 - 3. 15th
 - 4. 17th

Question ID : 7518979365
Option 1 ID : 75189737458
Option 2 ID : 75189737457
Option 3 ID : 75189737459
Option 4 ID : 75189737460
Status : Not Answered
Chosen Option : --

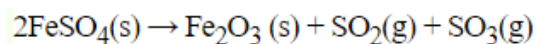
Q.43 Select the option that is related to the fifth term in the same way as the fourth term is related to the third term and the second term is related to the first term.

DOLPHIN : ALIMEFK :: GROUP : DOLRM :: SHARK : ?

- Ans
- 1. PFXOH
 - 2. PEYOH
 - 3. VKDUN
 - 4. PEXOH

Question ID : 75189713635
Option 1 ID : 75189754537
Option 2 ID : 75189754538
Option 3 ID : 75189754539
Option 4 ID : 75189754540
Status : Answered
Chosen Option : 4

Q.44 What is the colour of ferrous sulphate in the given chemical reaction?



- Ans
- 1. Red
 - 2. Yellow
 - 3. Blue
 - 4. Green

Question ID : 75189713961
Option 1 ID : 75189755844
Option 2 ID : 75189755843
Option 3 ID : 75189755841
Option 4 ID : 75189755842
Status : Answered
Chosen Option : 4

Q.45 Amongst six friends A, B, C, D, E and F, each has a different height. Only two people are taller than A. F is not the tallest. E is shorter than B but taller than D. Only one person is shorter than E. B is not taller than F. Who is the second tallest among all the friends?

- Ans**
- 1. B
 - 2. C
 - 3. A
 - 4. F

Question ID : 75189713162
Option 1 ID : 75189752648
Option 2 ID : 75189752646
Option 3 ID : 75189752645
Option 4 ID : 75189752647
Status : Answered
Chosen Option : 4

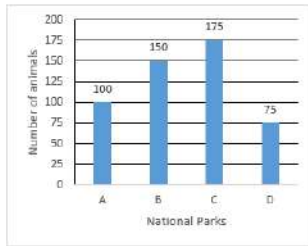
Q.46 What is the name of the cell created in 2016 by the Government of India in which a dedicated team has been established to promote Korean investment in India?

- Ans**
- 1. Korea Plus
 - 2. Korea Sigma
 - 3. Korea Combined
 - 4. Korea Multiply

Question ID : 75189712466
Option 1 ID : 75189749864
Option 2 ID : 75189749861
Option 3 ID : 75189749863
Option 4 ID : 75189749862
Status : Answered
Chosen Option : 2

Q.47 Study the given bar graph and answer the following question.

The given bar graph depicts the number of animals in four national parks.



Out of the total number of animals in National Parks A and C together, the respective ratio between the number of herbivores and carnivores was 11 : 14. What was the total number of herbivores in National Parks A and C together?
(All national parks mentioned above contain herbivore and carnivore animals only)

- Ans**
- 1. 110
 - 2. 99
 - 3. 132
 - 4. 121

Question ID : 75189712730
 Option 1 ID : 75189750919
 Option 2 ID : 75189750917
 Option 3 ID : 75189750918
 Option 4 ID : 75189750920
 Status : Answered
 Chosen Option : 4

Q.48 Simplify the given expression.

$$(\sqrt{1008} \div \sqrt{448}) \times \sqrt{0.16}$$

- Ans**
- 1. 0.8
 - 2. 0.9
 - 3. 0.3
 - 4. 0.6

Question ID : 75189712596
 Option 1 ID : 75189750382
 Option 2 ID : 75189750384
 Option 3 ID : 75189750383
 Option 4 ID : 75189750381
 Status : Answered
 Chosen Option : 2

Q.49 दर्शन पूर्व की ओर 10 km पैदल चलना शुरू करता है। वह दाईं ओर मुड़ता है 6 km चलता है, फिर दाईं ओर मुड़ता है। वह 5 m चलता है, और फिर दाईं ओर मुड़ता है। वह 4 km चलने के बाद बाईं ओर मुड़ता है। फिर वह 2 km चलता है, फिर बाईं ओर मुड़ता है, और फिर 5 km चलता है। अंत में, वह दाईं ओर मुड़ता है, और 2 km चलता है। अब उसका मुख किस दिशा की ओर है? (सभी मोड़ केवल 90 डिग्री वाले मोड़ हैं)

- Ans
- 1. उत्तर
 - 2. पूर्व
 - 3. पश्चिम
 - 4. दक्षिण

Question ID : 75189714262

Option 1 ID : 75189757046

Option 2 ID : 75189757047

Option 3 ID : 75189757045

Option 4 ID : 75189757048

Status : Answered

Chosen Option : 3

Q.50 A dishonest shopkeeper promises to sell his goods at cost price. However, he uses a weight that actually weighs 40% less than what is written on it. Find his profit percentage.

- Ans
- 1. $62\frac{2}{3}\%$
 - 2. $65\frac{2}{3}\%$
 - 3. $66\frac{2}{3}\%$
 - 4. $66\frac{1}{3}\%$

Question ID : 75189712967

Option 1 ID : 75189751865

Option 2 ID : 75189751866

Option 3 ID : 75189751867

Option 4 ID : 75189751868

Status : Answered

Chosen Option : 3

Q.51 Consider two numbers whose $LCM + HCF = 504$, and $LCM - HCF = 456$. If one of these two numbers is 96, find the other number.

- Ans**
- 1. 100
 - 2. 126
 - 3. 120
 - 4. 130

Question ID : 75189713285
Option 1 ID : 75189753139
Option 2 ID : 75189753137
Option 3 ID : 75189753140
Option 4 ID : 75189753138
Status : Answered
Chosen Option : 3

Q.52 Ravi's age is 5 years more than Gowri's age. The sum of their ages is 31 years. What is Gowri's age?

- Ans**
- 1. 16 years
 - 2. 18 years
 - 3. 15 years
 - 4. 13 years

Question ID : 75189712071
Option 1 ID : 75189748284
Option 2 ID : 75189748282
Option 3 ID : 75189748283
Option 4 ID : 75189748281
Status : Answered
Chosen Option : 4

Q.53 Arrange the following elements in the order of increasing atomic number.

B, Ne, K, O

- Ans**
- 1. B, K, O, Ne
 - 2. K, B, O, Ne
 - 3. B, O, Ne, K
 - 4. Ne, K, B, O

Question ID : 75189714809
Option 1 ID : 75189759233
Option 2 ID : 75189759235
Option 3 ID : 75189759234
Option 4 ID : 75189759236
Status : Answered
Chosen Option : 2

Q.54 Which of the following options is the closest approximate value which will come in place of the question mark (?) in the following equation?

$$(325 \div 17.99 - 8.99)^2 = ?$$

- Ans**
- 1. 25
 - 2. 196
 - 3. 121
 - 4. 81

Question ID : 75189712717
Option 1 ID : 75189750865
Option 2 ID : 75189750868
Option 3 ID : 75189750866
Option 4 ID : 75189750867
Status : Answered
Chosen Option : 4

Q.55 Express $0.\overline{12}$ in the form $\frac{p}{q}$, where p and q are integers and $q \neq 0$.

- Ans**
- 1. $\frac{5}{33}$
 - 2. $\frac{6}{33}$
 - 3. $\frac{7}{33}$
 - 4. $\frac{4}{33}$

Question ID : 75189712912
Option 1 ID : 75189751646
Option 2 ID : 75189751647
Option 3 ID : 75189751648
Option 4 ID : 75189751645
Status : Answered
Chosen Option : 4

Q.56 A, B, C, D, E and F are sitting around a circular table facing the centre. A is sitting second to the right of C. B is sitting to the immediate left of F. C is an immediate neighbour of both D and F. Who is sitting second to the left of B ?

- Ans**
- 1. A
 - 2. E
 - 3. C
 - 4. F

Question ID : 75189713150
Option 1 ID : 75189752599
Option 2 ID : 75189752598
Option 3 ID : 75189752597
Option 4 ID : 75189752600
Status : Answered
Chosen Option : 2

Q.57 Study the given table and answer the following question.

	Number of pages read in	
	Book 1	Book 2
Aayush	485	392
Bhakti	642	198

If the total number of pages that can be read in Book 1 was 750, how many pages were left unread by Bhakti in Book 1?

- Ans
- 1. 108
 - 2. 98
 - 3. 96
 - 4. 120

Question ID : 75189712749

Option 1 ID : 75189750995

Option 2 ID : 75189750996

Option 3 ID : 75189750994

Option 4 ID : 75189750993

Status : Answered

Chosen Option : 1

Q.58 One of the natural sources of lactic acid is:

- Ans
- 1. Orange
 - 2. Vinegar
 - 3. Tomato
 - 4. Curd

Question ID : 7518979642

Option 1 ID : 75189738566

Option 2 ID : 75189738568

Option 3 ID : 75189738567

Option 4 ID : 75189738565

Status : Answered

Chosen Option : 4

Q.59 The direction of a magnetic field can be obtained from the _____ drawn at any point of the magnetic lines of force.

- Ans**
- 1. slope
 - 2. secant
 - 3. subtangent
 - 4. tangent

Question ID : **75189713857**
Option 1 ID : **75189755425**
Option 2 ID : **75189755427**
Option 3 ID : **75189755428**
Option 4 ID : **75189755426**
Status : **Answered**
Chosen Option : **4**

Q.60 Chakravarty drives a car at a speed of 52 km/h. How much time will he take to cover a distance of 364 km?

- Ans**
- 1. 6 hours
 - 2. 4 hours
 - 3. 5 hours
 - 4. 7 hours

Question ID : **75189712972**
Option 1 ID : **75189751887**
Option 2 ID : **75189751885**
Option 3 ID : **75189751886**
Option 4 ID : **75189751888**
Status : **Answered**
Chosen Option : **4**

Q.61 In the number 482818259, if 1 is added to all the digits placed at the even places starting from left and 1 is subtracted from the digits placed at the odd places starting from left, what will be the sum of the last 4 digits ?

(Example- 697 – First digit = 6, second digit = 9 and third digit = 7)

NOTE - All operations to be done from left to right.

- Ans**
- 1. 24
 - 2. 22
 - 3. 20
 - 4. 32

Question ID : **75189713660**
Option 1 ID : **75189754637**
Option 2 ID : **75189754638**
Option 3 ID : **75189754639**
Option 4 ID : **75189754640**
Status : **Answered**
Chosen Option : **1**

Q.62 In which season do the dry and hot winds known as 'Loo' blow in the afternoon?

- Ans 1. The Hot Weather Season
 2. The Cold Weather Season
 3. The Retreating Monsoon Season
 4. The Southwest Monsoon Season

Question ID : 75189714008
Option 1 ID : 75189756030
Option 2 ID : 75189756029
Option 3 ID : 75189756032
Option 4 ID : 75189756031
Status : Answered
Chosen Option : 1

Q.63 Which of the following statements regarding HIV transmission is FALSE?

- Ans 1.
HIV can be transmitted through a mosquito bite after it has bitten an HIV infected person.
 2.
HIV can be transmitted from an infected mother to her new born child.
 3. Transfusion of HIV infected blood transmits HIV.
 4.
HIV can be transmitted through unsafe sexual contact with an infected person.

Question ID : 75189714845
Option 1 ID : 75189759379
Option 2 ID : 75189759377
Option 3 ID : 75189759378
Option 4 ID : 75189759380
Status : Answered
Chosen Option : 1

Q.64 Which of the following numbers will replace the question mark (?) in the given series?

171, 140, 110, 81, 53, ?

- Ans 1. 25
 2. 32
 3. 26
 4. 20

Question ID : 75189713684
Option 1 ID : 75189754734
Option 2 ID : 75189754736
Option 3 ID : 75189754735
Option 4 ID : 75189754733
Status : Answered
Chosen Option : 3

Q.65 Carbon compounds DO NOT conduct electricity in the molten state because _____.

Ans 1. bonding in carbon compounds involve formation of ions

2. they are ionic in nature

3.

bonding in carbon compounds does not involve formation of any ions

4. they are non-covalent in nature

Question ID : 75189712756

Option 1 ID : 75189751023

Option 2 ID : 75189751022

Option 3 ID : 75189751024

Option 4 ID : 75189751021

Status : Not Answered

Chosen Option : --

Q.66 An ice-ball of 6 cm diameter is placed 30 cm in front of a concave mirror and its principal focus is double the distance of the object. Following the new Cartesian sign convention, the diameter of the image is:

Ans 1. 14 cm

2. 12 cm

3. 16 cm

4. 10 cm

Question ID : 75189712186

Option 1 ID : 75189748743

Option 2 ID : 75189748742

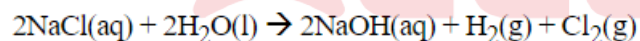
Option 3 ID : 75189748744

Option 4 ID : 75189748741

Status : Not Answered

Chosen Option : --

Q.67 Which product is formed near the cathode in the given chemical reaction?



Ans 1. NaOH, H₂

2. NaOH

3. NaOH, Cl₂

4. H₂, Cl₂

Question ID : 75189713966

Option 1 ID : 75189755863

Option 2 ID : 75189755862

Option 3 ID : 75189755864

Option 4 ID : 75189755861

Status : Not Answered

Chosen Option : --

Q.68 Panchayats have been defined in which Article of the Indian Constitution?

- Ans
- 1. Article 244
 - 2. Article 243
 - 3. Article 242
 - 4. Article 245

Question ID : 75189712428
Option 1 ID : 75189749711
Option 2 ID : 75189749710
Option 3 ID : 75189749709
Option 4 ID : 75189749712
Status : Answered
Chosen Option : 2

Q.69 Energy flow through the various trophic levels in the ecosystem is _____.

- Ans
- 1. random
 - 2. bidirectional
 - 3. reduced with each higher trophic level
 - 4. increased with each higher trophic level

Question ID : 75189714883
Option 1 ID : 75189759529
Option 2 ID : 75189759530
Option 3 ID : 75189759531
Option 4 ID : 75189759532
Status : Not Answered
Chosen Option : --

Q.70 Which Indian state is the host of the FIH Hockey Men's World Cup 2023?

- Ans
- 1. New Delhi
 - 2. Haryana
 - 3. Tamil Nadu
 - 4. Odisha

Question ID : 75189712523
Option 1 ID : 75189750090
Option 2 ID : 75189750092
Option 3 ID : 75189750089
Option 4 ID : 75189750091
Status : Answered
Chosen Option : 4

Q.71 The current in a short circuit _____.

- Ans
- 1. does not change
 - 2. increases enormously
 - 3. varies continuously
 - 4. reduces enormously

Question ID : 75189713896

Option 1 ID : 75189755581

Option 2 ID : 75189755583

Option 3 ID : 75189755584

Option 4 ID : 75189755582

Status : Answered

Chosen Option : 3

Q.72 Which cell organelle is known as the 'suicide bags of a cell'?

- Ans
- 1. Lysosome
 - 2. Nucleus
 - 3. Mitochondria
 - 4. Centrosome

Question ID : 7518974361

Option 1 ID : 75189717444

Option 2 ID : 75189717443

Option 3 ID : 75189717442

Option 4 ID : 75189717441

Status : Answered

Chosen Option : 1

Q.73 Which of the following equations is NOT a quadratic equation?

- Ans
- 1. $(2x + 1)(3x - 4) = 2x^2 + 3$
 - 2. $\sqrt{3} x^2 - 2x + \frac{1}{\sqrt{2}} = 0$
 - 3. $x^2 + 2\sqrt{x} - 5 = 0$
 - 4. $(x + 2)^3 = x^3 - 5$

Question ID : 75189712646

Option 1 ID : 75189750581

Option 2 ID : 75189750583

Option 3 ID : 75189750582

Option 4 ID : 75189750584

Status : Answered

Chosen Option : 2

Q.74 Two trains are running in opposite directions on parallel tracks. If their speeds are 50 km/h and 58 km/h, find their relative speed.

- Ans**
- 1. 20 m/s
 - 2. 40 m/s
 - 3. 30 m/s
 - 4. 50 m/s

Question ID : 75189712978

Option 1 ID : 75189751909

Option 2 ID : 75189751911

Option 3 ID : 75189751910

Option 4 ID : 75189751912

Status : Answered

Chosen Option : 3

Q.75 Refer to the following letter, number and symbol series and answer the question.

(Left) F D 3 & S * 9 J 5 @ 6 A & 2 R U # 3 E 7 E % Z (Right)

If all the numbers are dropped from the series, how many such symbols will be there which are immediately preceded by a vowel and also immediately followed by a consonant?

- Ans**
- 1. Four
 - 2. One
 - 3. Three
 - 4. Two

Question ID : 75189710844

Option 1 ID : 75189743376

Option 2 ID : 75189743373

Option 3 ID : 75189743375

Option 4 ID : 75189743374

Status : Answered

Chosen Option : 4

Q.76 From the salary of Hari, 15% is deducted as house rent, 20% of the remaining amount is spent on children's education, and 10% of the remaining balance is his medical expenses. Finally, he is left with ₹42,840. Find his total salary.

- Ans**
- 1. ₹72,500
 - 2. ₹65,000
 - 3. ₹70,000
 - 4. ₹75,000

Question ID : 75189712940

Option 1 ID : 75189751760

Option 2 ID : 75189751757

Option 3 ID : 75189751758

Option 4 ID : 75189751759

Status : Answered

Chosen Option : 3

Q.77 If the marked price of an article is ₹2,850 and the discount is 21%, then find the selling price.

- Ans
- 1. ₹2,521.50
 - 2. ₹2,259.50
 - 3. ₹2,215.50
 - 4. ₹2,251.50

Question ID : 75189713316
Option 1 ID : 75189753262
Option 2 ID : 75189753264
Option 3 ID : 75189753263
Option 4 ID : 75189753261
Status : Answered
Chosen Option : 4

Q.78 The Sunni and Shia are the two major sects in which religion or belief?

- Ans
- 1. Judaism
 - 2. Islam
 - 3. Parsi
 - 4. Sikhism

Question ID : 75189714002
Option 1 ID : 75189756008
Option 2 ID : 75189756007
Option 3 ID : 75189756005
Option 4 ID : 75189756006
Status : Answered
Chosen Option : 2

Q.79 Giri and Kamal invested their capitals in a business in the ratio 5 : 7, respectively. If ₹1,728 was the total money invested in the business, what is Giri's share in the business?

- Ans
- 1. ₹702
 - 2. ₹720
 - 3. ₹1,008
 - 4. ₹1,080

Question ID : 75189713294
Option 1 ID : 75189753175
Option 2 ID : 75189753174
Option 3 ID : 75189753173
Option 4 ID : 75189753176
Status : Answered
Chosen Option : 2

Q.80 In a certain code language, 'WORTH' is coded as 'SRNWD' and 'MODEL' is coded as 'IRZHH'. How will 'COAST' be coded in that language?

- Ans**
- 1. YRWVP
 - 2. FRDVV
 - 3. FKDOV
 - 4. YKWOP

Question ID : 75189714241
Option 1 ID : 75189756964
Option 2 ID : 75189756963
Option 3 ID : 75189756961
Option 4 ID : 75189756962
Status : Answered
Chosen Option : 1

Q.81 National Unity Day in India is observed on 31 October, coinciding with the birthday of _____.

- Ans**
- 1. Dr. BR Ambedkar
 - 2. Sardar Vallabhbhai Patel
 - 3. Jawaharlal Nehru
 - 4. Indira Gandhi

Question ID : 75189714042
Option 1 ID : 75189756168
Option 2 ID : 75189756165
Option 3 ID : 75189756166
Option 4 ID : 75189756167
Status : Answered
Chosen Option : 2

Q.82 दिए गए कथनों और निष्कर्षों को ध्यानपूर्वक पढ़ें। कथनों में दी गई जानकारी को सत्य मानते हुए विचार करें, भले ही वह सामान्यतः ज्ञात तथ्यों से भिन्न प्रतीत होती हो, और बताएं कि दिए गए निष्कर्षों में से कौन से कथन का ताकिक रूप से पालन करते हैं?

कथन:

कक्षा 9वीं के छात्र 20 हॉकी मैचों में से 14 हार गए, लेकिन इस वर्ष खेले गए 10 फुटबॉल मैचों में से उन्होंने 8 में जीत हासिल की।

निष्कर्ष:

- I. 9वीं कक्षा के छात्रों को हॉकी से अधिक फुटबॉल पसंद है
- II. 9वीं कक्षा के छात्रों को हॉकी से अधिक फुटबॉल खेलना चाहिए

- Ans
- 1. निष्कर्ष I और II दोनों पालन करते हैं।
 - 2. केवल निष्कर्ष II पालन करता है
 - 3. न तो निष्कर्ष I और ना ही II पालन करता है।
 - 4. केवल निष्कर्ष I पालन करता है

Question ID : 75189713505

Option 1 ID : 75189754020

Option 2 ID : 75189754018

Option 3 ID : 75189754019

Option 4 ID : 75189754017

Status : Answered

Chosen Option : 2

Q.83 Resistance is represented by _____.

- Ans
- 1. work done / (charge \times current)
 - 2. work done / charge
 - 3. work done \times time
 - 4. work done / current \times time

Question ID : 75189713788

Option 1 ID : 75189755149

Option 2 ID : 75189755150

Option 3 ID : 75189755152

Option 4 ID : 75189755151

Status : Not Answered

Chosen Option : --

Q.84 If the median of a set of data is 12 and its mean is 10, then find the mode of this data set, using the empirical formula.

- Ans
- 1. 14
 - 2. 17
 - 3. 16
 - 4. 15

Question ID : **75189713350**
Option 1 ID : **75189753397**
Option 2 ID : **75189753400**
Option 3 ID : **75189753398**
Option 4 ID : **75189753399**
Status : **Not Answered**
Chosen Option : --

Q.85 In this question, the statement is followed by four conclusions. Find out which conclusion is true based on the given statement:

Statement: $X \geq W > U \leq Y = V > Z$

- Ans
- 1. $Z = Y$
 - 2. $U < X$
 - 3. $V < U$
 - 4. $W < V$

Question ID : **75189710798**
Option 1 ID : **75189743189**
Option 2 ID : **75189743192**
Option 3 ID : **75189743190**
Option 4 ID : **75189743191**
Status : **Answered**
Chosen Option : **2**

Q.86 On the occasion of 'World Day against Human Trafficking' (30 July, 2022), National Commission for Protection of Child Rights (NCPDR) launched a _____ campaign called 'Combating Child Trafficking' in 75 bordering districts of India in August 2022.

- Ans
- 1. 15 day
 - 2. 7 day
 - 3. 25 day
 - 4. 10 day

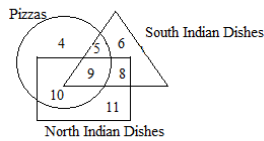
Question ID : **75189715059**
Option 1 ID : **75189760234**
Option 2 ID : **75189760236**
Option 3 ID : **75189760233**
Option 4 ID : **75189760235**
Status : **Not Answered**
Chosen Option : --

Q.87 The full form of ATP is _____.

- Ans
- 1. Adenine Tetrphosphate
 - 2. Adenine Triphosphate
 - 3. Adenosine Triphosphate
 - 4. Adenosine Tetrphosphate

Question ID : 7518974338
 Option 1 ID : 75189717352
 Option 2 ID : 75189717351
 Option 3 ID : 75189717349
 Option 4 ID : 75189717350
 Status : Answered
 Chosen Option : 2

Q.88 Study the given diagram carefully and answer the question. The numbers in different sections indicate the number of restaurants famous for various dishes.



How many restaurants are famous for their South Indian dishes and North India Dishes but NOT for pizzas?

- Ans
- 1. 13
 - 2. 17
 - 3. 22
 - 4. 8

Question ID : 75189713605
 Option 1 ID : 75189754419
 Option 2 ID : 75189754418
 Option 3 ID : 75189754420
 Option 4 ID : 75189754417
 Status : Answered
 Chosen Option : 2

Q.89 If r and s are the roots of $x^2 - 3x + 2 = 0$, then the quadratic equation in x whose roots are $r^2 + s^2$ and $(rs)^2$ is:

- Ans
- 1. $x^2 + 9x - 20 = 0$
 - 2. $x^2 + 9x + 20 = 0$
 - 3. $x^2 - 9x + 20 = 0$
 - 4. $x^2 - 9x - 20 = 0$

Question ID : 75189712846
 Option 1 ID : 75189751381
 Option 2 ID : 75189751382
 Option 3 ID : 75189751384
 Option 4 ID : 75189751383
 Status : Answered
 Chosen Option : 3

Q.90 निम्नलिखित में से कौन सा गर्भनिरोधन की रोध विधि (barrier method) का उदाहरण है?

- Ans
- ✗ 1. लूप
 - ✗ 2. शुक्रवाहिका-उच्छेदन (Vasectomy)
 - ✓ 3. कंडोम
 - ✗ 4. खाई जाने वाली गोलियां (Oral pills)

Question ID : 75189712585
 Option 1 ID : 75189750337
 Option 2 ID : 75189750340
 Option 3 ID : 75189750339
 Option 4 ID : 75189750338
 Status : Answered
 Chosen Option : 3

Q.91 If the perimeter of a square is 44 cm, then find the perimeter of a circle whose radius is equal to the length of a side of the given square.

- Ans
- ✓ 1. 22π
 - ✗ 2. 11π
 - ✗ 3. 12π
 - ✗ 4. 21π

Question ID : 75189713003
 Option 1 ID : 75189752009
 Option 2 ID : 75189752012
 Option 3 ID : 75189752010
 Option 4 ID : 75189752011
 Status : Answered
 Chosen Option : 1

Q.92 जब मुख्य नदियां एक-दूसरे के समांतर बहती हों और सहायक नदियां उनसे समकोण पर मिलती हों, तो ऐसे प्रतिरूप को _____ अपवाह प्रतिरूप कहते हैं।

- Ans
- ✓ 1. जालीनुमा (trellis)
 - ✗ 2. अभिकेंद्री (centripetal)
 - ✗ 3. अरीय (radial)
 - ✗ 4. वृक्षाकार (dendritic)

Question ID : 75189712410
 Option 1 ID : 75189749639
 Option 2 ID : 75189749640
 Option 3 ID : 75189749638
 Option 4 ID : 75189749637
 Status : Not Answered
 Chosen Option : --

Q.93 Six persons (L, M, N, O, P and Q) are sitting around a circular table facing the centre. Q is sitting second to the right of N. P is sitting second to the left of M. Q is an immediate neighbour of L and P. L is sitting second to the right of M. Who is sitting third to the left of O?

- Ans**
- 1. N
 - 2. L
 - 3. P
 - 4. Q

Question ID : 75189713511
 Option 1 ID : 75189754042
 Option 2 ID : 75189754041
 Option 3 ID : 75189754044
 Option 4 ID : 75189754043
 Status : Answered
 Chosen Option : 2

Q.94 The length of a rectangular plot is 60% more than its breadth. If the difference between the length and the breadth of that rectangle is 30 cm, what is the perimeter of that rectangle?

- Ans**
- 1. 300 cm
 - 2. 260 cm
 - 3. 330 cm
 - 4. 270 cm

Question ID : 75189712858
 Option 1 ID : 75189751430
 Option 2 ID : 75189751432
 Option 3 ID : 75189751429
 Option 4 ID : 75189751431
 Status : Answered
 Chosen Option : 2

Q.95 The resistance of a wire of length l , radius r , and resistivity ρ is _____.

- Ans**
- 1. $R = \frac{\rho l}{4\pi r}$
 - 2. $R = \frac{\rho l}{2\pi r}$
 - 3. $R = \frac{\rho l}{4\pi r^2}$
 - 4. $R = \frac{\rho l}{\pi r^2}$

Question ID : 75189713798
 Option 1 ID : 75189755191
 Option 2 ID : 75189755192
 Option 3 ID : 75189755190
 Option 4 ID : 75189755189
 Status : Answered
 Chosen Option : 1

Q.96 If today is Thursday, what will be the day after 560 days from today?

- Ans
- 1. Thursday
 - 2. Friday
 - 3. Wednesday
 - 4. Sunday

Question ID : 75189713578
Option 1 ID : 75189754311
Option 2 ID : 75189754310
Option 3 ID : 75189754309
Option 4 ID : 75189754312
Status : Answered
Chosen Option : 1

Q.97 India's first indigenous COVID-19 vaccine 'COVAXIN' is developed by BBIL in collaboration with the Indian Council of Medical Research (ICMR) - National Institute of Virology (NIV). The 'BBIL' is stand for -

- Ans
- 1. Bharat Biochemistry and International Limited
 - 2. Bharat Biotechnology International Limited
 - 3. Bharat Biotech International Limited
 - 4. Bharat Biological International Limited

Question ID : 75189710413
Option 1 ID : 75189741652
Option 2 ID : 75189741651
Option 3 ID : 75189741650
Option 4 ID : 75189741649
Status : Answered
Chosen Option : 3

Q.98 A regular polygon in which each interior angle is 140° is a/an:

- Ans
- 1. octagon
 - 2. nonagon
 - 3. decagon
 - 4. heptagon

Question ID : 75189712875
Option 1 ID : 75189751498
Option 2 ID : 75189751499
Option 3 ID : 75189751500
Option 4 ID : 75189751497
Status : Answered
Chosen Option : 2

Q.99 The quadrilateral formed by joining the mid-points of the sides of a quadrilateral PQRS, taken in order, is a rhombus, if

- Ans**
- 1. PQRS is a rhombus
 - 2. PQRS is a trapezium
 - 3. Diagonals of PQRS are equal
 - 4. Diagonals of PQRS are perpendicular

Question ID : 75189712882

Option 1 ID : 75189751525

Option 2 ID : 75189751526

Option 3 ID : 75189751527

Option 4 ID : 75189751528

Status : Answered

Chosen Option : 1

Q.100 Refer to the following number series and answer the question.

(Left) 6 1 4 6 2 7 5 3 8 6 9 1 3 9 5 3 (Right)

Find the sum of all the even numbers in the above number series.

- Ans**
- 1. 44
 - 2. 32
 - 3. 54
 - 4. 24

Question ID : 75189711542

Option 1 ID : 75189746166

Option 2 ID : 75189746167

Option 3 ID : 75189746165

Option 4 ID : 75189746168

Status : Answered

Chosen Option : 2