



रेल भर्ती बोर्ड / RAILWAY RECRUITMENT BOARDS
सी ई एन आर आर सी - ०१/२०१९ - CEN RRC - 01/2019



Roll Number	
Candidate Name	
Test Center Name	Jagannath Institute Of Engineering And Technology
Test Date	30/08/2022
Test Time	9:00 AM - 10:30 AM
Subject	Level 1

* Note

Correct Answer will carry 1 mark per Question.
Incorrect Answer will carry 1/3 Negative mark per Question.

- Options shown in green color with a tick icon are correct.
- Chosen option on the right of the question indicates the option selected by the candidate.

Section : Level 1

Q.1 Which of the following languages has NOT been mentioned in the 8th Schedule of the Indian Constitution?

- Ans
- 1. Odia
 - 2. Awadhi
 - 3. Dogri
 - 4. Maithili

Question ID : 7518974187
Option 1 ID : 75189716746
Option 2 ID : 75189716748
Option 3 ID : 75189716747
Option 4 ID : 75189716745
Status : Not Answered
Chosen Option : --

Q.2 Who is the Chairman of Rajya Sabha? (As of August 12, 2022)?

- Ans
- 1. Shri Om Birla
 - 2. Shri Jagdeep Dhankhar
 - 3. Shri Harivansh
 - 4. Shri Rajnath Singh

Question ID : 7518977564
Option 1 ID : 75189730254
Option 2 ID : 75189730256
Option 3 ID : 75189730255
Option 4 ID : 75189730253
Status : Answered
Chosen Option : 2

Test Prime

ALL EXAMS,
ONE SUBSCRIPTION



40,000+
Mock Tests



Personalised
Report Card



Unlimited
Re-Attempt



500+
Exam Covered



Previous Year
Papers



500%
Refund



DOWNLOAD NOW

Q.3 Which was the first state of India to adopt the Panchayati Raj system in the year 1959?

- Ans
- 1. Odisha
 - 2. Rajasthan
 - 3. Karnataka
 - 4. Bihar

Question ID : 7518977570
Option 1 ID : 75189730279
Option 2 ID : 75189730278
Option 3 ID : 75189730277
Option 4 ID : 75189730280
Status : Answered
Chosen Option : 2

Q.4 The point of intersection of the medians of a triangle is called:

- Ans
- 1. Circumcentre
 - 2. Orthocentre
 - 3. incentre
 - 4. Centroid

Question ID : 7518975768
Option 1 ID : 75189723069
Option 2 ID : 75189723071
Option 3 ID : 75189723072
Option 4 ID : 75189723070
Status : Answered
Chosen Option : 4

Q.5 Consider the V-I graphs for wires of material A and material B as described below:

Material A: It is a straight line passing through origin and is inclined at 20° to the current I axis.

Material B: It is a straight line passing through origin and is inclined at 60° to the current I axis.

Which of the following options is correct?

- Ans
- 1. Neither A nor B follow Ohm's law.
 - 2. B follows Ohm's law but A does not.
 - 3. Both A and B follow Ohm's law.
 - 4. A follows Ohms' law but B does not.

Question ID : 7518976665
Option 1 ID : 75189726658
Option 2 ID : 75189726660
Option 3 ID : 75189726657
Option 4 ID : 75189726659
Status : Answered
Chosen Option : 3

Q.6 Bharat borrowed a sum of ₹10,000 at a certain rate of simple interest for 2 years. If he paid an interest of ₹2,000 at the end of the period, then find the rate of interest per annum.

- Ans**
- 1. 15%
 - 2. 25%
 - 3. 20%
 - 4. 10%

Question ID : 7518975848
Option 1 ID : 75189723390
Option 2 ID : 75189723389
Option 3 ID : 75189723392
Option 4 ID : 75189723391
Status : Answered
Chosen Option : 4

Q.7 If 1 is added to each odd digit and 1 is subtracted from each even digit in the number 58132745, what will be the sum of the digits which are second from the left and third from the right?

- Ans**
- 1. 15
 - 2. 10
 - 3. 5
 - 4. 8

Question ID : 7518977748
Option 1 ID : 75189730990
Option 2 ID : 75189730992
Option 3 ID : 75189730989
Option 4 ID : 75189730991
Status : Answered
Chosen Option : 1

Q.8 Lakshman and Bharath start a business by investing ₹48,000 and ₹72,000, respectively. What is Bharath's share out of an annual profit of ₹6,530?

- Ans**
- 1. ₹2,612
 - 2. ₹3,918
 - 3. ₹3,080
 - 4. ₹2,450

Question ID : 7518976264
Option 1 ID : 75189725053
Option 2 ID : 75189725054
Option 3 ID : 75189725056
Option 4 ID : 75189725055
Status : Answered
Chosen Option : 2

Q.9 Select the set in which the numbers are related in the same way as are the numbers of the following sets.

(NOTE : Operations should be performed on the whole numbers, without breaking down the numbers into its constituent digits. E.g. 13 – Operations on 13 such as adding / subtracting /multiplying etc. to 13 can be performed. Breaking down 13 into 1 and 3 and then performing mathematical operations on 1 and 3 is not allowed)

(12, 112, 9)

(6, 28, 4)

- Ans
- 1. (12, 149, 12)
 - 2. (18, 94, 5)
 - 3. (13, 55, 4)
 - 4. (11, 99, 9)

Question ID : 7518977740
Option 1 ID : 75189730960
Option 2 ID : 75189730959
Option 3 ID : 75189730958
Option 4 ID : 75189730957
Status : Answered
Chosen Option : 2

Q.10 Propanone has _____ carbons and _____ functional group.

- Ans
- 1. 4, ketone
 - 2. 3, aldehyde
 - 3. 4, aldehyde
 - 4. 3, ketone

Question ID : 7518973559
Option 1 ID : 75189714233
Option 2 ID : 75189714236
Option 3 ID : 75189714235
Option 4 ID : 75189714234
Status : Answered
Chosen Option : 4

Q.11 Simplify: $125 \div 25 \times 6 + [3 + (8 - 2)] \div 3$.

- Ans
- 1. 30
 - 2. 39
 - 3. 33
 - 4. 45

Question ID : 7518975791
Option 1 ID : 75189723161
Option 2 ID : 75189723162
Option 3 ID : 75189723164
Option 4 ID : 75189723163
Status : Answered
Chosen Option : 3

Q.12 Which of the following is a precipitation reaction?

- Ans 1. $\text{CuSO}_4 (\text{aq}) + \text{BaCl}_2 (\text{aq}) \rightarrow \text{BaSO}_4 (\text{s}) + \text{CuCl}_2 (\text{aq})$
2. $\text{Fe}(\text{s}) + \text{CuSO}_4 (\text{aq}) \rightarrow \text{FeSO}_4 (\text{aq}) + \text{Cu} (\text{s})$
3. $2\text{Al}_2\text{O}_3 (\text{l}) \rightarrow 4\text{Al} (\text{l}) + 3\text{O}_2 (\text{g})$
4. $\text{CuO} + \text{H}_2 \rightarrow \text{H}_2\text{O} + \text{Cu}$

Question ID : 7518973596

Option 1 ID : 75189714381

Option 2 ID : 75189714382

Option 3 ID : 75189714383

Option 4 ID : 75189714384

Status : Answered

Chosen Option : 1

Q.13 A certain number of people are sitting in a row, facing north. K sits to the immediate left of G. L sits to the immediate right of P. P is fourth to the right of G. L is fourth to the left of H. If no other person is sitting in the row, what is the total number of persons seated?

- Ans 1. 12
2. 11
3. 13
4. 10

Question ID : 7518977602

Option 1 ID : 75189730407

Option 2 ID : 75189730406

Option 3 ID : 75189730408

Option 4 ID : 75189730405

Status : Answered

Chosen Option : 4

Q.14 Refer to the following letter series and answer the question.

P Q S D A B U E H I R I A A Y E J S B R X M F G U A B U E H I R

How many such vowels are there in the series each of which is immediately preceded by a consonant and also immediately followed by a consonant?

- Ans 1. 5
2. 2
3. 4
4. 3

Question ID : 7518974997

Option 1 ID : 75189719988

Option 2 ID : 75189719985

Option 3 ID : 75189719987

Option 4 ID : 75189719986

Status : Answered

Chosen Option : 3

Q.15 The Khelo India University Games 2021 was organised in _____.

- Ans
- 1. Patna
 - 2. Bengaluru
 - 3. Jaipur
 - 4. Hyderabad

Question ID : 7518976472
Option 1 ID : 75189725885
Option 2 ID : 75189725886
Option 3 ID : 75189725887
Option 4 ID : 75189725888
Status : Not Answered
Chosen Option : --

Q.16 Eight clowns I, J, K, L, M, N, O and P were sitting around a square table, facing the centre. Some of them were sitting at the corners, while some were sitting at the exact centre of the sides. K was sitting to the immediate left of O. J was sitting to the immediate right of M. P was sitting second to the right of L. J was sitting fourth to the left of P. N was sitting fourth to the left of K. O was sitting to the immediate left of M. M is sitting at one of the corners. Who was sitting fourth to the left of I?

- Ans
- 1. O
 - 2. P
 - 3. L
 - 4. M

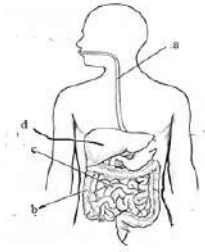
Question ID : 7518977581
Option 1 ID : 75189730321
Option 2 ID : 75189730324
Option 3 ID : 75189730322
Option 4 ID : 75189730323
Status : Answered
Chosen Option : 4

Q.17 The prayers on _____ are supposed to be in the community mosque, and are known as the Jumma Namaz.

- Ans
- 1. Friday
 - 2. Tuesday
 - 3. Wednesday
 - 4. Thursday

Question ID : 7518977490
Option 1 ID : 75189729960
Option 2 ID : 75189729957
Option 3 ID : 75189729958
Option 4 ID : 75189729959
Status : Answered
Chosen Option : 1

Q.18 The diagram of the human alimentary canal is given below. Select the option that shows the correct matching of Column I with Column II.

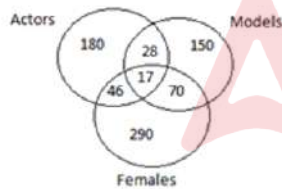


Column I	Column II
a	i) Villi absorb water from food
b	ii) Length depends on food the organism eats
c	iii) Helps in emulsification of fats
d	iv) No digestion

- Ans**
- ✗ 1. a-iii, b-ii, c-i, d-iv
 - ✗ 2. a-i, b-ii, c-iii, d-iv
 - ✗ 3. a-ii, b-iii, c-iv, d-i
 - ✓ 4. a-iv, b-i, c-ii, d-iii

Question ID : 7518974576
 Option 1 ID : 75189718303
 Option 2 ID : 75189718301
 Option 3 ID : 75189718302
 Option 4 ID : 75189718304
 Status : Answered
 Chosen Option : 4

Q.19 Study the given diagram carefully and answer the question. The numbers in different sections indicate the number of persons working in a film industry.



How many female actors are also models?

- Ans**
- ✗ 1. 28
 - ✗ 2. 46
 - ✓ 3. 17
 - ✗ 4. 70

Question ID : 7518977622
 Option 1 ID : 75189730485
 Option 2 ID : 75189730486
 Option 3 ID : 75189730488
 Option 4 ID : 75189730487
 Status : Answered
 Chosen Option : 3

Q.20 If carbon will form C^{4+} , then the number of electrons and protons in the carbon ion will be _____ and _____, respectively.

- Ans
- 1. 2; 4
 - 2. 4; 2
 - 3. 10; 6
 - 4. 6; 10

Question ID : 7518973401
Option 1 ID : 75189713603
Option 2 ID : 75189713601
Option 3 ID : 75189713602
Option 4 ID : 75189713604
Status : Answered
Chosen Option : 3

Q.21 In May 2021, who was appointed as the Head Coach of Indian Women's National Cricket Team?

- Ans
- 1. Woorkeri Raman
 - 2. Ramesh Powar
 - 3. Rahul Dravid
 - 4. Gary Kirsten

Question ID : 7518977145
Option 1 ID : 75189728577
Option 2 ID : 75189728578
Option 3 ID : 75189728579
Option 4 ID : 75189728580
Status : Answered
Chosen Option : 2

Q.22 Simplify $\frac{2.46 \times 2.46 - 1.46 \times 1.46}{2.46 - 1.46}$, giving your answer as a fraction.

- Ans
- 1. $\frac{392}{10}$
 - 2. $\frac{392}{10000}$
 - 3. $\frac{392}{1000}$
 - 4. $\frac{392}{100}$

Question ID : 7518975807
Option 1 ID : 75189723228
Option 2 ID : 75189723226
Option 3 ID : 75189723227
Option 4 ID : 75189723225
Status : Answered
Chosen Option : 4

Q.23 A litmus paper was used to check the pH of a solution. The solution turns blue litmus red, its pH is likely to be:

- Ans**
- 1. 9
 - 2. 8
 - 3. 5
 - 4. 7

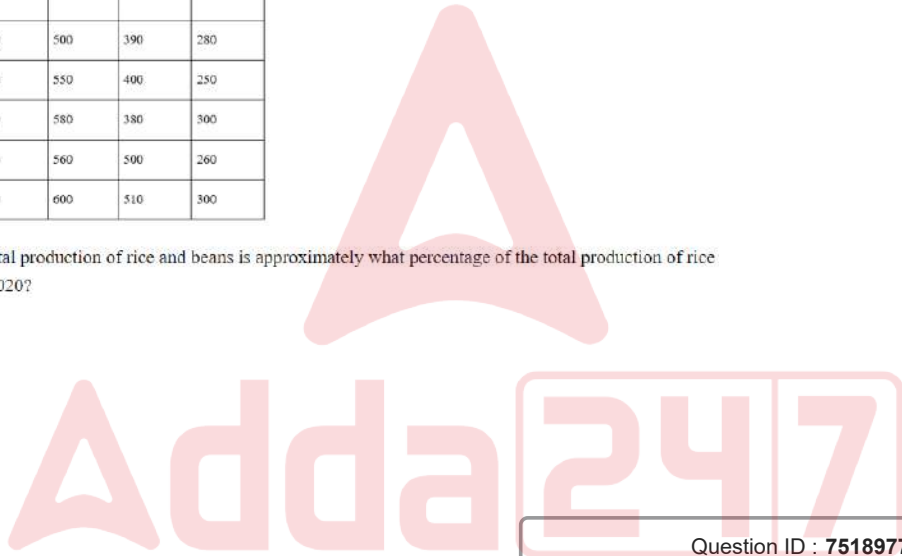
Question ID : **7518973628**
 Option 1 ID : **75189714510**
 Option 2 ID : **75189714511**
 Option 3 ID : **75189714512**
 Option 4 ID : **75189714509**
 Status : **Answered**
 Chosen Option : **3**

Q.24 The given table shows the production of food grains (in tonnes) in a certain state of India for the period 2016-2020. Study the table and answer the question.

Food grains \ Year	Wheat	Maize	Rice	Pulses	Beans
2016	410	680	500	390	280
2017	500	700	550	400	250
2018	550	500	580	380	300
2019	510	750	560	500	260
2020	600	800	600	510	300

In the year 2018, the total production of rice and beans is approximately what percentage of the total production of rice and beans in the year 2020?

- Ans**
- 1. 97.8%
 - 2. 90.5%
 - 3. 89.3%
 - 4. 85.5%



Question ID : **7518977779**
 Option 1 ID : **75189731113**
 Option 2 ID : **75189731116**
 Option 3 ID : **75189731115**
 Option 4 ID : **75189731114**
 Status : **Answered**
 Chosen Option : **1**

Q.25 The radius of curvature of a concave mirror is 12 cm. Following New Cartesian Sign Convention, the principal focus is located at x = _____.

- Ans**
- 1. 6 cm
 - 2. -12 cm
 - 3. -6 cm
 - 4. 12 cm

Question ID : 7518976593
Option 1 ID : 75189726369
Option 2 ID : 75189726372
Option 3 ID : 75189726371
Option 4 ID : 75189726370
Status : Answered
Chosen Option : 3

Q.26 Which of the following was declared a Fundamental Right in 2017 by the Supreme Court of India?

- Ans**
- 1. Right to Freedom of Religion
 - 2. Right to Constitutional Remedies
 - 3. Right to Privacy
 - 4. Right against Exploitation

Question ID : 7518974291
Option 1 ID : 75189717162
Option 2 ID : 75189717164
Option 3 ID : 75189717163
Option 4 ID : 75189717161
Status : Not Answered

Chosen Option : --

Q.27 A 725 m long train passes through a 235 m long tunnel in 48 sec. Find the speed of the train.

- Ans**
- 1. 82 km/h
 - 2. 72 km/h
 - 3. 54 km/h
 - 4. 66 km/h

Question ID : 7518975646
Option 1 ID : 75189722582
Option 2 ID : 75189722581
Option 3 ID : 75189722583
Option 4 ID : 75189722584
Status : Answered
Chosen Option : 2

Q.28 If two interior angles on the same side of a transversal intersecting two parallel lines are in the ratio 2: 3, then the greater of the two angles is:

- Ans
- 1. 120°
 - 2. 136°
 - 3. 108°
 - 4. 54°

Question ID : **7518976196**
Option 1 ID : **75189724783**
Option 2 ID : **75189724784**
Option 3 ID : **75189724782**
Option 4 ID : **75189724781**
Status : **Answered**
Chosen Option : **3**

Q.29 Which option is correct regarding the movement of water and mineral ions in the root cells of a plant from the soil?

- Ans
- 1. Ions and water are absorbed together
 - 2. Water moves in first by diffusion, followed by active transport of ions
 - 3. Ions move in first by passive transport, followed by water by active transport
 - 4. Ions move in first by active transport, followed by water along the concentration gradient

Question ID : **7518974547**
Option 1 ID : **75189718185**
Option 2 ID : **75189718186**
Option 3 ID : **75189718188**
Option 4 ID : **75189718187**
Status : **Not Answered**
Chosen Option : **--**

Q.30 When is the primary deficit zero in the Government of India budget?

- Ans
- 1. When the fiscal deficit is equal to the revenue deficit
 - 2. When the fiscal deficit is equal to the interest payment
 - 3. When the net interest payments is equal to the revenue deficit
 - 4. When the revenue deficit is zero

Question ID : **7518974223**
Option 1 ID : **75189716892**
Option 2 ID : **75189716891**
Option 3 ID : **75189716890**
Option 4 ID : **75189716889**
Status : **Not Answered**
Chosen Option : **--**

Q.31 Which of the following journals was published for the purpose of social-religious reforms among the Parsis in 1851?

- Ans
- 1. Bombay Herald
 - 2. Somaprakash
 - 3. Rast Goftar
 - 4. Bombay Post

Question ID : 7518973806
Option 1 ID : 75189715221
Option 2 ID : 75189715222
Option 3 ID : 75189715224
Option 4 ID : 75189715223
Status : Not Answered
Chosen Option : --

Q.32 If the surface area of a sphere is $2124\frac{4}{7}$ cm², then what is the radius of that sphere? [Use $\pi = \frac{22}{7}$]

- Ans
- 1. 14 cm
 - 2. 12 cm
 - 3. 11 cm
 - 4. 13 cm

Question ID : 7518976363
Option 1 ID : 75189725449
Option 2 ID : 75189725451
Option 3 ID : 75189725452
Option 4 ID : 75189725450
Status : Answered
Chosen Option : 4

Q.33 The average age of a family of father, mother and 2 children is 26 years. If the sum of the ages of the father and the children is 62 years, find the age of the mother.

- Ans
- 1. 42 years
 - 2. 30 years
 - 3. 26 years
 - 4. 45 years

Question ID : 7518975890
Option 1 ID : 75189723559
Option 2 ID : 75189723558
Option 3 ID : 75189723557
Option 4 ID : 75189723560
Status : Answered
Chosen Option : 1

Q.34 A chemical that contributes to the depletion of the ozone layer is:

- Ans
- 1. carbon tetrachloride
 - 2. methane
 - 3. phosphorus pentoxide
 - 4. chlorofluorocarbon

Question ID : 7518974464
Option 1 ID : 75189717854
Option 2 ID : 75189717855
Option 3 ID : 75189717856
Option 4 ID : 75189717853
Status : Answered
Chosen Option : 4

Q.35 Which of the following statements is NOT a myth?

- Ans
- 1. If a girl looks at boys while menstruating, she becomes pregnant.
 - 2. Foods like chips and canned snacks are low in nutrition and should be avoided during adolescence/reproductive phase
 - 3. The mother is ultimately accountable for her child's sexual orientation.
 - 4. During menstruation, a girl should not be permitted to work in the kitchen.

Question ID : 7518974412
Option 1 ID : 75189717645
Option 2 ID : 75189717648
Option 3 ID : 75189717646
Option 4 ID : 75189717647
Status : Answered
Chosen Option : 2

Q.36 Find the LCM of 84, 105 and 140.

- Ans
- 1. 240
 - 2. 360
 - 3. 420
 - 4. 120

Question ID : 7518976041
Option 1 ID : 75189724162
Option 2 ID : 75189724163
Option 3 ID : 75189724161
Option 4 ID : 75189724164
Status : Answered
Chosen Option : 3

Q.37 India Plastics Pact, a joint initiative between which trade organisation and World-Wide Fund for Nature-India (WWF India), was launched in September 2021?

- Ans**
- ✓ 1. Confederation of Indian Industry
 - ✗ 2. Cellular Operators Association of India
 - ✗ 3. Engineering Exports Promotion Council
 - ✗ 4. Indian Association of Amusement Parks and Industries

Question ID : 7518973985
Option 1 ID : 75189715939
Option 2 ID : 75189715938
Option 3 ID : 75189715940
Option 4 ID : 75189715937
Status : Not Answered
Chosen Option : --

Q.38 The refractive indices of mediums 1, 2 and 3 are 1.46, 1.65 and 1.31, respectively. If the speed of light in the mediums are v_1 , v_2 and v_3 , respectively, which of the following relations between them is correct?

- Ans**
- ✓ 1. $v_3 > v_1 > v_2$
 - ✗ 2. $v_2 > v_3 > v_1$
 - ✗ 3. $v_1 > v_2 > v_3$
 - ✗ 4. $v_1 = v_2 = v_3$

Question ID : 7518976620
Option 1 ID : 75189726480
Option 2 ID : 75189726479
Option 3 ID : 75189726478
Option 4 ID : 75189726477
Status : Answered
Chosen Option : 1

Q.39 A dishonest shopkeeper pretends to sell his goods at cost price, but uses a false weight on which 984 gm is written but which actually weighs much less. Using this false weight the shopkeeper actually makes a gain of 23%. Find the actual measure of the weight used.

- Ans**
- ✗ 1. 900 gm
 - ✓ 2. 800 gm
 - ✗ 3. 850 gm
 - ✗ 4. 935 gm

Question ID : 7518975863
Option 1 ID : 75189723450
Option 2 ID : 75189723449
Option 3 ID : 75189723451
Option 4 ID : 75189723452
Status : Answered
Chosen Option : 2

Q.40 Some functions of lymph are given below. Select the option with the correct functions.

- a) Carries digested and absorbed fat from intestine
- b) Carries CO_2 to lungs
- c) Carries RBCs to the lymph nodes
- d) Drains excess fluid from extracellular space back into blood

- Ans
- ✓ 1. a and d
 - ✗ 2. c and d
 - ✗ 3. b and c
 - ✗ 4. a and b

Question ID : 7518974591
Option 1 ID : 75189718364
Option 2 ID : 75189718363
Option 3 ID : 75189718362
Option 4 ID : 75189718361
Status : Answered

Chosen Option : 2

Q.41 Which of the following can be expressed in the form of a standard quadratic equation?

- Ans
- ✗ 1. $(2x - 1)^3 = x^2 - 3x + 2$
 - ✓ 2. $\sqrt{2x^2 + 3x - 4} - 2x + 5 = 0$
 - ✗ 3. $(x + 1)(x + 2) = x^2 - 16$
 - ✗ 4. $(2x + 3)^2 + 4x - 5 = (2x + 1)(2x - 3)$

Question ID : 7518976344
Option 1 ID : 75189725376
Option 2 ID : 75189725374
Option 3 ID : 75189725375
Option 4 ID : 75189725373

Status : Not Attempted and
Marked For Review

Chosen Option : --

Q.42 Which of the following numbers will replace the question mark (?) in the given series?

6, 8, 15, 37, 104, ?

- Ans
- 1. 308
 - 2. 312
 - 3. 310
 - 4. 306

Question ID : 7518977721

Option 1 ID : 75189730882

Option 2 ID : 75189730884

Option 3 ID : 75189730883

Option 4 ID : 75189730881

Status : **Not Attempted and
Marked For Review**

Chosen Option : --

Q.43 The value of $\frac{\sin 16^\circ}{\cos 74^\circ} + \frac{\tan 14^\circ}{\cot 76^\circ} =$ is:

- Ans
- 1. 2
 - 2. 0
 - 3. 3
 - 4. 1

Question ID : 7518975780

Option 1 ID : 75189723119

Option 2 ID : 75189723117

Option 3 ID : 75189723120

Option 4 ID : 75189723118

Status : **Answered**

Chosen Option : 1

Q.44 The valency of group 17 elements will be:

- Ans
- 1. 1
 - 2. 2
 - 3. 8
 - 4. 5

Question ID : 7518973515

Option 1 ID : 75189714057

Option 2 ID : 75189714058

Option 3 ID : 75189714060

Option 4 ID : 75189714059

Status : **Answered**

Chosen Option : 1

Q.45 Read the given statements and conclusions carefully. Assuming that the information given in the statements is true, even if it appears to be at variance with commonly known facts, decide which of the given conclusions logically follow(s) from the statements.

Statements:

- I. All B's are G's.
- II. Some G's are S's.
- III. Some S's are A's.

Conclusions:

- I. All B's are S's.
- II. Some A's are B's.

- Ans**
- 1. Only conclusion II follows
 - 2. Neither conclusion I nor II follows
 - 3. Both conclusions I and II follow
 - 4. Only conclusion I follows

Question ID : 7518977313

Option 1 ID : 75189729250

Option 2 ID : 75189729251

Option 3 ID : 75189729252

Option 4 ID : 75189729249

Status : Answered

Chosen Option : 2

Q.46 If the time in the mirror image of a 12-hour clock is 5:40, what is the actual time?

- Ans**
- 1. 2:10
 - 2. 2:50
 - 3. 6:20
 - 4. 6:10

Question ID : 7518976768

Option 1 ID : 75189727072

Option 2 ID : 75189727071

Option 3 ID : 75189727069

Option 4 ID : 75189727070

Status : Answered

Chosen Option : 3

Q.47 _____ is the first 'Made in India' Petascale Supercomputer installed at IIT Roorkee under the National Supercomputing Mission (NSM) in 2022.

- Ans
- 1. PARAM seva
 - 2. PARAM Siddhi-AI
 - 3. PARAM Ganga
 - 4. PARAM Pravega

Question ID : 7518974137
Option 1 ID : 75189716548
Option 2 ID : 75189716546
Option 3 ID : 75189716545
Option 4 ID : 75189716547
Status : Not Answered
Chosen Option : --

Q.48 Two train engines of same length are running in the same direction with speeds of 18 km/h and 36 km/h. If the faster engine crosses the slower one in 8 sec, what is the length of each train engine?

- Ans
- 1. 25 m
 - 2. 20 m
 - 3. 30 m
 - 4. 10 m

Question ID : 7518975877
Option 1 ID : 75189723507
Option 2 ID : 75189723506
Option 3 ID : 75189723508
Option 4 ID : 75189723505
Status : Answered
Chosen Option : 2

Q.49 Which of the following is reducible to a quadratic equation?

A.) $(m + 1) - \frac{1}{m + 1} = 65$

B.) $x^3 + 3x = 2x^3 - 4x^2$

C.) $(a + b)^2 = \frac{3}{b}$

D.) $x + (3x - 2) = \frac{1}{x^2} - 6$

Ans ✓ 1. A

✗ 2. D

✗ 3. B

✗ 4. C

Question ID : 7518975727

Option 1 ID : 75189722905

Option 2 ID : 75189722908

Option 3 ID : 75189722906

Option 4 ID : 75189722907

Status : Answered

Chosen Option : 1

Q.50 In the given letter-cluster pairs, the first letter-cluster is related to the second letter-cluster following a certain logic. Study the given pairs carefully, and from the given options, select the pair that follows the same logic.

MON : PLQ

KIT : NFW

Ans ✗ 1. LPG : OMK

✗ 2. TAP : WYS

✓ 3. PEN : SBQ

✗ 4. PET : SIW

Question ID : 7518977707

Option 1 ID : 75189730825

Option 2 ID : 75189730828

Option 3 ID : 75189730826

Option 4 ID : 75189730827

Status : Answered

Chosen Option : 3

Q.51 If '+' means '-', '-' means '×', '×' means '+' and '+' means '+', what will come in place of the question mark (?) in the following equation?

$$100 + 136 \times 17 - 12 \div 6 = ?$$

- Ans**
- 1. 4
 - 2. 14
 - 3. 8
 - 4. 10

Question ID : 7518977418
Option 1 ID : 75189729669
Option 2 ID : 75189729672
Option 3 ID : 75189729670
Option 4 ID : 75189729671
Status : Answered
Chosen Option : 4

Q.52 Six students - 1, 2, 3, 4, 5 and 6 - are sitting around a circular table facing the centre. 4 is sitting to the immediate right of 5 and immediate left of 6. 5 is sitting second to the right of 3. 6 and 3 are the immediate neighbours of 1. Who among the following is sitting to the immediate left of 2?

- Ans**
- 1. 6
 - 2. 3
 - 3. 5
 - 4. 4

Question ID : 7518977292
Option 1 ID : 75189729166
Option 2 ID : 75189729165
Option 3 ID : 75189729167
Option 4 ID : 75189729168
Status : Answered
Chosen Option : 2

Q.53 In this question, a group of numbers/symbols is coded using letters as per the table given below and the conditions which follow. The correct combination of codes following the condition is your answer.

Number/Symbol	6	#	4	9	@	%	>	2	!	?	5	8	\$	3
Code	C	H	T	J	D	G	M	X	V	W	K	U	N	L

Conditions:

- (i) If the first element is a symbol and the last, a number, the codes for these two are to be interchanged.
- (ii) If the first element is an odd number and the last, an even number, the first and last elements are to be coded as E.
- (iii) If both second and third elements are perfect squares, the third element is to be coded as the code for the second element.

How will '5 # 9 4 @ 3' be coded?

- Ans**
- 1. NHJTDL
 - 2. LHJTDN
 - 3. LHDTGN
 - 4. £HJTD£

Question ID : 7518975031
 Option 1 ID : 75189720121
 Option 2 ID : 75189720122
 Option 3 ID : 75189720124
 Option 4 ID : 75189720123
 Status : Answered
 Chosen Option : 2

Q.54 If any person is affected by a bee-sting attack, which chemical would be helpful for him to get some relief from pain?

- Ans**
- 1. Baking soda
 - 2. Curd
 - 3. Common salt
 - 4. Vinegar

Question ID : 7518973447
 Option 1 ID : 75189713787
 Option 2 ID : 75189713785
 Option 3 ID : 75189713786
 Option 4 ID : 75189713788
 Status : Answered
 Chosen Option : 1

Q.55 The value of

$$(18 \div 9) \times (-7 + 9) - 7 \times 2 =$$

- Ans
- ✓ 1. -10
 - ✗ 2. -13
 - ✗ 3. -6
 - ✗ 4. -12

Question ID : 7518975551
Option 1 ID : 75189722201
Option 2 ID : 75189722204
Option 3 ID : 75189722203
Option 4 ID : 75189722202
Status : Answered
Chosen Option : 1

Q.56 In a certain code language, 'PUNCH' is written as 'OWMEG' and 'SHAWL' is written as 'RJZYK'. How will 'KARMA' be written in that language?

- Ans
- ✗ 1. JZQOZ
 - ✗ 2. KZQPZ
 - ✓ 3. JCQOZ
 - ✗ 4. KZQPY

Question ID : 7518974827
Option 1 ID : 75189719307
Option 2 ID : 75189719308
Option 3 ID : 75189719305
Option 4 ID : 75189719306
Status : Answered
Chosen Option : 3

Q.57 In an electric generator, _____ energy is used to rotate a conductor in a _____ field to produce electricity.

- Ans
- ✓ 1. mechanical, magnetic
 - ✗ 2. mechanical, electric
 - ✗ 3. electrical, magnetic
 - ✗ 4. electrical, electric

Question ID : 7518976747
Option 1 ID : 75189726987
Option 2 ID : 75189726988
Option 3 ID : 75189726986
Option 4 ID : 75189726985
Status : Answered
Chosen Option : 1

Q.58 If each of the digits in the number given below is arranged in the ascending order from left to right, the position of how many digits will remain unchanged as compared to that in the original number?

(Left) 6352897 (Right)

- Ans**
- 1. Three
 - 2. Two
 - 3. None
 - 4. One

Question ID : 7518975314
 Option 1 ID : 75189721256
 Option 2 ID : 75189721255
 Option 3 ID : 75189721253
 Option 4 ID : 75189721254
 Status : Answered
 Chosen Option : 2

Q.59 The present age of a father is $1\frac{1}{2}$ times the sum of the present ages of his two sons. Six years hence, the ratio of his age to the sum of the ages of his sons will be 6 : 5. The present age of the father is:

- Ans**
- 1. 45 years
 - 2. 36 years
 - 3. 42 years
 - 4. 50 years

Question ID : 7518976340
 Option 1 ID : 75189725358
 Option 2 ID : 75189725360
 Option 3 ID : 75189725359
 Option 4 ID : 75189725357
 Status : Answered
 Chosen Option : 3

Q.60 Starting from point A, Jagdish walks 98 m towards the west. He takes a left turn and walks 54 m. He takes a left turn again and walks 112 m. Again, he takes a left turn and walks 54 m to reach point B. How far and in which direction is point A from point B? (All turns are 90 degree turns only)

- Ans**
- 1. 16 m, West
 - 2. 14 m, West
 - 3. 14 m, East
 - 4. 16 m, East

Question ID : 7518977689
 Option 1 ID : 75189730756
 Option 2 ID : 75189730754
 Option 3 ID : 75189730753
 Option 4 ID : 75189730755
 Status : Answered
 Chosen Option : 3

Q.61 Which of the following elements has valency 3?

- Ans
- 1. S
 - 2. C
 - 3. Mg
 - 4. Al

Question ID : 7518973525
Option 1 ID : 75189714098
Option 2 ID : 75189714100
Option 3 ID : 75189714097
Option 4 ID : 75189714099
Status : Answered
Chosen Option : 4

Q.62 A 1100 W electric toaster operates at 220 V. The resistance of its coil is:

- Ans
- 1. 11 Ω
 - 2. 88 Ω
 - 3. 22 Ω
 - 4. 44 Ω

Question ID : 7518976719
Option 1 ID : 75189726873
Option 2 ID : 75189726876
Option 3 ID : 75189726874
Option 4 ID : 75189726875
Status : Answered
Chosen Option : 4

Q.63 The maximum concentration of iron and steel industry is found in which region in India from following?

- Ans
- 1. Bundelkhand Plateau
 - 2. Malwa Plateau
 - 3. Baghelkhand Plateau
 - 4. Chhotanagpur plateau

Question ID : 7518977514
Option 1 ID : 75189730055
Option 2 ID : 75189730053
Option 3 ID : 75189730056
Option 4 ID : 75189730054
Status : Not Answered
Chosen Option : --

Q.64 Ramu used to spend 72% of his income. His income is increased by 12% and he increases his expenditure by 5%. If

Ramu earlier saved ₹y and after the increases he now saves ₹x, then what is the value of $(\frac{x-y}{y} \times 100)\%$?

- Ans**
- 1. 22%
 - 2. 27%
 - 3. 25%
 - 4. 30%

Question ID : 7518976262

Option 1 ID : 75189725045

Option 2 ID : 75189725047

Option 3 ID : 75189725046

Option 4 ID : 75189725048

Status : Answered

Chosen Option : 4

Q.65 This question is based on the five, three-digit numbers given below.

(Left) 248 382 415 127 335 (Right)

(Example- 697 – First digit = 6, second digit = 9 and third digit = 7)

NOTE - All operations to be done from left to right.

What will be the resultant if the first digit of the second smallest number is multiplied with the second digit of the largest number?

- Ans**
- 1. 2
 - 2. 6
 - 3. 4
 - 4. 8

Question ID : 7518977669

Option 1 ID : 75189730673

Option 2 ID : 75189730675

Option 3 ID : 75189730674

Option 4 ID : 75189730676

Status : Answered

Chosen Option : 1

Q.66 The focus of a concave mirror is at a distance of 16 cm from its pole. Its centre of curvature will be at a distance of _____ from the pole.

- Ans**
- 1. 16 cm
 - 2. 24 cm
 - 3. 8 cm
 - 4. 32 cm

Question ID : 7518976578

Option 1 ID : 75189726310

Option 2 ID : 75189726311

Option 3 ID : 75189726309

Option 4 ID : 75189726312

Status : Answered

Chosen Option : 4

Q.67 Some of the advantages of transpiration to plants are mentioned below. Select the option that is a disadvantage.

- Ans**
- 1. causes cooling of plants by evaporation
 - 2. can cause wilting of plants
 - 3. Provides water to leaf for photosynthesis
 - 4. Helps in transporting mineral ions

Question ID : 7518974545

Option 1 ID : 75189718179

Option 2 ID : 75189718180

Option 3 ID : 75189718177

Option 4 ID : 75189718178

Status : Answered

Chosen Option : 2

Q.68 What is the age group of the people benefitted under the Pradhan Mantri Jeevan Jyoti Bima Yojana (PMJJBY) (As of July 2022)?

- Ans**
- 1. 18 to 50 years
 - 2. 25 to 60 years
 - 3. 14 to 50 years
 - 4. 15 to 60 years

Question ID : 7518976488

Option 1 ID : 75189725949

Option 2 ID : 75189725951

Option 3 ID : 75189725952

Option 4 ID : 75189725950

Status : Not Answered

Chosen Option : --

Q.69 A certain number of people are sitting in a row, facing north. D sits to the immediate left of F. Only six people sit between S and D. K sits third to the right of F. S sits at the extreme left end of the row. If no other person is sitting in the row, what is the total number of persons seated?

- Ans**
- 1. 12
 - 2. 10
 - 3. 13
 - 4. 11

Question ID : 7518977601

Option 1 ID : 75189730403

Option 2 ID : 75189730401

Option 3 ID : 75189730404

Option 4 ID : 75189730402

Status : Answered

Chosen Option : 1

Q.70 The table here gives the yield of wheat per hectare of 100 farmers of a village. What is the cumulative frequency of the class preceding the median class?

Production yield (Qui/Hec)	Number of farmers
30-40	5
40-50	18
50-60	15
60-70	22
70-80	27
80-90	13

- Ans**
- 1. 43
 - 2. 38
 - 3. 29
 - 4. 35

Question ID : 7518976312

Option 1 ID : 75189725245

Option 2 ID : 75189725246

Option 3 ID : 75189725248

Option 4 ID : 75189725247

Status : **Not Attempted and Marked For Review**

Chosen Option : --

Q.71 A statement is given, followed by four conclusions given in the options. Find out which conclusion is true based on the given statement.

Statement: $L = U > V > E < Z < Q$

- Ans**
- 1. $U > E$
 - 2. $Q > V$
 - 3. $L < V$
 - 4. $E = L$

Question ID : 7518975195

Option 1 ID : 75189720778

Option 2 ID : 75189720780

Option 3 ID : 75189720777

Option 4 ID : 75189720779

Status : **Answered**

Chosen Option : 1

Q.72 The shopkeeper offers 3 successive discounts on a washing machine that costs ₹58,000, so that the price gets reduced to ₹42,000. If 5%, 10% and $x\%$ are the respective discounts, find the value of x .

- Ans**
- 1. 12
 - 2. 10
 - 3. 15.3
 - 4. 9

Question ID : 7518975641
Option 1 ID : 75189722561
Option 2 ID : 75189722564
Option 3 ID : 75189722562
Option 4 ID : 75189722563
Status : **Not Attempted and Marked For Review**
Chosen Option : --

Q.73 If X is the greatest number that can divide 3808, 4798 and 5128 leaving the same remainder 13, then the sum of digits in X is:

- Ans**
- 1. 18
 - 2. 12
 - 3. 14
 - 4. 16

Question ID : 7518976250
Option 1 ID : 75189725000
Option 2 ID : 75189724997
Option 3 ID : 75189724998
Option 4 ID : 75189724999
Status : **Not Attempted and Marked For Review**
Chosen Option : --

Q.74 Seven boxes J, K, L, M, N, O and P are kept one over the other but not necessarily in the same order. Only five boxes are kept between K and J. L is kept immediately above P. M is kept immediately below N. O is kept at one of the positions above J. N is kept immediately below K. How many boxes are kept between N and J?

- Ans**
- 1. 1
 - 2. 3
 - 3. 2
 - 4. 4

Question ID : 7518977598
Option 1 ID : 75189730389
Option 2 ID : 75189730391
Option 3 ID : 75189730390
Option 4 ID : 75189730392
Status : **Answered**
Chosen Option : 4

Q.75 Refer to the following number series and answer the question.

5 6 2 6 5 8 5 3 5 0 2 6 3 8 2 5 6 9 3 7

How many such odd numbers are there each of which is immediately preceded by an even number and also immediately followed by an even number?

- Ans**
- 1. 4
 - 2. 1
 - 3. 3
 - 4. 2

Question ID : **7518977663**
Option 1 ID : **75189730652**
Option 2 ID : **75189730649**
Option 3 ID : **75189730651**
Option 4 ID : **75189730650**
Status : **Answered**
Chosen Option : **3**

Q.76 As per the Union Budget of India 2022-23, how many kilometres wide corridor will be formed along the river Ganga for promotion of chemical free natural farming?

- Ans**
- 1. 2.5 km
 - 2. 7.5 km
 - 3. 5 km
 - 4. 10 km

Question ID : **7518977500**
Option 1 ID : **75189729997**
Option 2 ID : **75189729999**
Option 3 ID : **75189729998**
Option 4 ID : **75189730000**
Status : **Not Answered**
Chosen Option : **--**

Q.77 What kind of anti-viral face mask was being developed under the 'Nano mission project' to fight against the Covid-19 pandemic in February 2022?

- Ans**
- 1. Non-biodegradable anti-viral face mask
 - 2. Copper-based nanoparticle coated anti-viral face mask
 - 3. Self-disinfecting, non-biodegradable face mask
 - 4. Biodegradable but non-washable anti-viral face mask

Question ID : **7518977164**
Option 1 ID : **75189728653**
Option 2 ID : **75189728654**
Option 3 ID : **75189728655**
Option 4 ID : **75189728656**
Status : **Not Answered**
Chosen Option : **--**

Q.78 Consider the following statements about an electric motor:

- (a) An electric motor uses split rings.
- (b) The direction of the force on the motor's coil can be found using Fleming's right-hand rule.

Which of the above statements is/are correct?

- Ans
- 1. Neither (a) nor (b)
 - 2. Only (b)
 - 3. Only (a)
 - 4. Both (a) and (b)

Question ID : 7518976745
Option 1 ID : 75189726980
Option 2 ID : 75189726978
Option 3 ID : 75189726977
Option 4 ID : 75189726979
Status : Not Answered
Chosen Option : --

Q.79 Through which of the following places does the Standard Meridian of India pass?

- Ans
- 1. Kannauj
 - 2. Mirzapur
 - 3. Agra
 - 4. Jaunpur

Question ID : 7518977523
Option 1 ID : 75189730091
Option 2 ID : 75189730090
Option 3 ID : 75189730092
Option 4 ID : 75189730089
Status : Answered
Chosen Option : 4

Q.80 A statement is given below, followed by four conclusions given in the options. Find out which conclusion is true based on the given statement.

Statement: $F = U \geq P = M \leq K < W < T$

- Ans
- 1. $T < K$
 - 2. $P \geq K$
 - 3. $M > F$
 - 4. $F \geq P$

Question ID : 7518975189
Option 1 ID : 75189720754
Option 2 ID : 75189720755
Option 3 ID : 75189720753
Option 4 ID : 75189720756
Status : Answered
Chosen Option : 4

Q.81 A nichrome wire AB is made of three parts, AC, CD and DB of resistances in the ratio of 1 : 2 : 3. The wire is connected to a battery. If V_1 , V_2 and V_3 are the potential drops across AC, CD and DB, respectively, then which of the following is correct?

- Ans**
- 1. $V_1 : V_2 : V_3 = 2 : 3 : 1$
 - 2. $V_1 : V_2 : V_3 = 1 : 1 : 1$
 - 3. $V_1 : V_2 : V_3 = 1 : 2 : 3$
 - 4. $V_1 : V_2 : V_3 = 3 : 2 : 1$

Question ID : 7518976668

Option 1 ID : 75189726670

Option 2 ID : 75189726672

Option 3 ID : 75189726669

Option 4 ID : 75189726671

Status : Answered

Chosen Option : 3

Q.82 Which of the following is/are advantage(s) of building dams?

- i) Stores water for irrigation
- ii) No equitable distribution of water
- iii) Stores water for generating electricity
- iv) Canals from dams help in transferring water to great distances
- v) Benefits only to a few people

- Ans**
- 1. Only v
 - 2. Only ii
 - 3. ii and v
 - 4. i, iii and iv

Question ID : 7518974702

Option 1 ID : 75189718807

Option 2 ID : 75189718805

Option 3 ID : 75189718808

Option 4 ID : 75189718806

Status : Answered

Chosen Option : 4

Q.83 Three statements are followed by three conclusions numbered I, II and III. You have to consider these statements to be true, even if they seem to be at variance with commonly known facts. Decide which of the given conclusions logically follow(s) from the given statements.

Statements:

Some tablets are mobile phones

All mobile phones are telephones

Some laptops are tablets

Conclusions:

(I) Some laptops are mobile phones

(II) Some telephones are laptops

(III) All tablets are telephones

- Ans**
- 1. None of the conclusions follow
 - 2. Only conclusion I follows
 - 3. Only conclusion I and III follows
 - 4. Only conclusion II follows

Question ID : 7518977608

Option 1 ID : 75189730432

Option 2 ID : 75189730429

Option 3 ID : 75189730431

Option 4 ID : 75189730430

Status : Answered

Chosen Option : 1

Q.84 Which is the most commonly used measure for the size of the economy?

- Ans**
- 1. Gross Net product (GNP)
 - 2. Net domestic product (NDP)
 - 3. Gross domestic product (GDP)
 - 4. Nation Net product (NNP)

Question ID : 7518974040

Option 1 ID : 75189716159

Option 2 ID : 75189716157

Option 3 ID : 75189716158

Option 4 ID : 75189716160

Status : Answered

Chosen Option : 3

Q.85 The refractive indices of ice and glass are 1.31 and 1.52, respectively. A ray of light passes from ice to glass. The refractive index of glass with respect to ice is _____ and the ray bends _____ the normal in glass.

- Ans**
- 1. 0.86, towards
 - 2. 0.86, away from
 - 3. 1.16, towards
 - 4. 1.16, away from

Question ID : 7518976621
Option 1 ID : 75189726481
Option 2 ID : 75189726482
Option 3 ID : 75189726483
Option 4 ID : 75189726484
Status : Answered
Chosen Option : 4

Q.86 Which of the following terms will replace the question mark (?) and complete the given alpha-numeric series?

25LN, 26OQ, 29RT, ? 41XZ

- Ans**
- 1. 30UV
 - 2. 31UW
 - 3. 34VW
 - 4. 34UW

Question ID : 7518977646
Option 1 ID : 75189730582
Option 2 ID : 75189730581
Option 3 ID : 75189730584
Option 4 ID : 75189730583
Status : Answered
Chosen Option : 4

Q.87 In Which state of India experiences winter rainfall due to retreating monsoon?

- Ans**
- 1. West Bengal
 - 2. Gujarat
 - 3. Madhya Pradesh
 - 4. Tamil Nadu

Question ID : 7518977528
Option 1 ID : 75189730111
Option 2 ID : 75189730109
Option 3 ID : 75189730110
Option 4 ID : 75189730112
Status : Not Answered
Chosen Option : --

Q.88 Select the option that is related to the fifth number in the same way as the second number is related to the first number and the fourth number is related to the third number.
25 : 49 :: 42 : 36 :: 74 : ?

- Ans**
- 1. 120
 - 2. 122
 - 3. 118
 - 4. 121

Question ID : 7518977727

Option 1 ID : 75189730906

Option 2 ID : 75189730905

Option 3 ID : 75189730907

Option 4 ID : 75189730908

Status : **Not Attempted and Marked For Review**

Chosen Option : --

Q.89 There are two classrooms A and B having a certain number of students. If 5 students are shifted from A to B, then B has twice the number of students as A. If 1 student is sent from B to A, then both classrooms will have the same number of students. How many students are there in A?

- Ans**
- 1. 17
 - 2. 22
 - 3. 26
 - 4. 19

Question ID : 7518975703

Option 1 ID : 75189722811

Option 2 ID : 75189722812

Option 3 ID : 75189722810

Option 4 ID : 75189722809

Status : **Answered**

Chosen Option : 1

Q.90 To reach point Q from point S, a person has to walk 83 m towards the west. He must then take a right turn and walk 240 m. He must take another right turn and walk 147 m. He must take another right turn and walk 240 m to reach the destination. How far and in which direction is point Q from point S? (All turns are 90 degree turns only)

- Ans**
- 1. 59 m, East
 - 2. 59 m, West
 - 3. 64 m, West
 - 4. 64 m, East

Question ID : 7518977696

Option 1 ID : 75189730781

Option 2 ID : 75189730782

Option 3 ID : 75189730784

Option 4 ID : 75189730783

Status : **Answered**

Chosen Option : 4

Q.91 Which of the following numbers will replace the question mark (?) in the given series?

87, 66, 53, 46, 43, ?

- Ans 1. 42
 2. 44
 3. 40
 4. 41

Question ID : 7518977713
Option 1 ID : 75189730851
Option 2 ID : 75189730852
Option 3 ID : 75189730849
Option 4 ID : 75189730850
Status : Answered
Chosen Option : 4

Q.92 Find the perimeter of a rhombus whose diagonals are of lengths 5 cm and 12 cm.

- Ans 1. 20 cm
 2. 26 cm
 3. 24 cm
 4. 25 cm

Question ID : 7518975966
Option 1 ID : 75189723861
Option 2 ID : 75189723862
Option 3 ID : 75189723864
Option 4 ID : 75189723863
Status : Not Attempted and
Marked For Review
Chosen Option : --

Q.93 If $a + b = 27$ and $ab = 140$, then what is the value of $a^3 + b^3$?

- Ans 1. 19683
 2. 11340
 3. 8343
 4. 8433

Question ID : 7518976129
Option 1 ID : 75189724516
Option 2 ID : 75189724515
Option 3 ID : 75189724513
Option 4 ID : 75189724514
Status : Not Answered
Chosen Option : --

Q.94 A statement is given followed by two possible underlying assumptions I and II. Read all the information carefully and decide which of the given assumptions can be assumed by the given statement.

Statement:

Recent marketing trends suggest that words like 'premium', 'exquisite', 'priority' are considered prestigious by consumers of the middle income group and hence increase the chances of sale of any product advertised with these words.

Assumptions:

- I. The products advertised with the said 'prestigious' words definitely cost higher than those which are not advertised with such words.
II. Such prestigious words have no impact on sales among the lower income group.

- Ans**
- 1. Only I can be assumed
 - 2. Only II can be assumed
 - 3. Both I and II can be assumed
 - 4. Neither I nor II can be assumed

Question ID : 7518976764
Option 1 ID : 75189727053
Option 2 ID : 75189727054
Option 3 ID : 75189727055
Option 4 ID : 75189727056

Status : Answered

Chosen Option : 4

Q.95 In which one of the following regions will you find 'Bari Doab'?

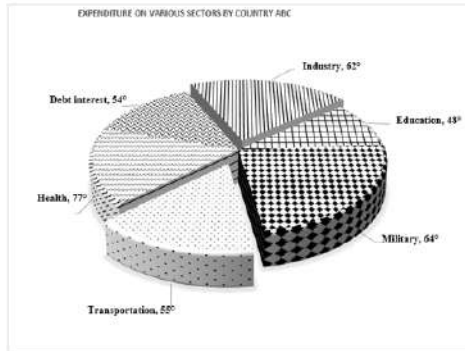
- Ans**
- 1. Between Ravi and Chenab
 - 2. Between Chenab and Jhelum
 - 3. Between Beas and Ravi
 - 4. Between Beas and Sutlej

Question ID : 7518977260
Option 1 ID : 75189729039
Option 2 ID : 75189729040
Option 3 ID : 75189729038
Option 4 ID : 75189729037

Status : Not Answered

Chosen Option : --

Q.96 The given circle graph shows the annual spending of country 'ABC' on various sectors during a particular year (in the form of central angle). Study the circle graph and answer the question.



If the amount spent on industry and transportation during a year was \$10 million, then what was the total approximate amount spent on all the various sectors by the country in that year?

- Ans**
- ✓ 1. \$30.8 million
 - ✗ 2. \$45.5 million
 - ✗ 3. \$20.5 million
 - ✗ 4. \$50 million

Question ID : 7518977775
 Option 1 ID : 75189731100
 Option 2 ID : 75189731099
 Option 3 ID : 75189731097
 Option 4 ID : 75189731098
 Status : Answered
 Chosen Option : 1

Q.97 Which of the following festivals is associated with the state of Assam?

- Ans**
- ✗ 1. Baisakhi
 - ✓ 2. Bihu
 - ✗ 3. Onam
 - ✗ 4. Pongal



Question ID : 7518974182
 Option 1 ID : 75189716728
 Option 2 ID : 75189716725
 Option 3 ID : 75189716727
 Option 4 ID : 75189716726
 Status : Answered
 Chosen Option : 2

Q.98 Which of the following is NOT a part of the female reproductive system?

- Ans
- 1. Fallopian tubes
 - 2. Ovaries
 - 3. Urethra
 - 4. Uterus

Question ID : 7518974433
Option 1 ID : 75189717732
Option 2 ID : 75189717729
Option 3 ID : 75189717731
Option 4 ID : 75189717730
Status : Not Answered
Chosen Option : --

Q.99 Consider the below statements and identify the correct answer.

Statement-I: Sodium hydroxide is prepared by chlor-alkali process.

Statement-II: Three products chlorine gas, hydrogen gas and sodium hydroxide are produced in this process.

- Ans
- 1. Statement-I is true, and Statement-II is false.
 - 2. Both the statements are true.
 - 3. Statement-II is true, and Statement-I is false.
 - 4. Both the statements are false.

Question ID : 7518973645
Option 1 ID : 75189714579
Option 2 ID : 75189714577
Option 3 ID : 75189714580
Option 4 ID : 75189714578
Status : Not Answered
Chosen Option : --

Q.100 The numerator of a fraction is one less than the denominator. If 6 is added to the numerator, the fraction will be equal to $\frac{5}{4}$. Find the fraction.

- Ans
- 1. $-\frac{20}{21}$
 - 2. $\frac{19}{20}$
 - 3. $\frac{20}{21}$
 - 4. $-\frac{21}{20}$

Question ID : 7518976142
Option 1 ID : 75189724566
Option 2 ID : 75189724568
Option 3 ID : 75189724567
Option 4 ID : 75189724565
Status : Not Answered
Chosen Option : --