



रेल भर्ती बोर्ड / RAILWAY RECRUITMENT BOARDS
सी ई एन आर आर सी - ०१/२०१९ - CEN RRC - 01/2019



Roll Number	
Candidate Name	
Test Center Name	GITA Autonomous College
Test Date	30/09/2022
Test Time	9:00 AM - 10:30 AM
Subject	Level 1

* Note

Correct Answer will carry 1 mark per Question.

Incorrect Answer will carry 1/3 Negative mark per Question.

1. Options shown in green color with a tick icon are correct.

2. Chosen option on the right of the question indicates the option selected by the candidate.

Section : Level 1

Q.1 Currently Hema is 48 years old and Roja is 32 years old. How many years ago was the ratio of their ages 5 : 3?

- Ans
- 1. 9 years
 - 2. 6 years
 - 3. 8 years
 - 4. 7 years

Question ID : 75189712826

Option 1 ID : 75189751302

Option 2 ID : 75189751304

Option 3 ID : 75189751301

Option 4 ID : 75189751303

Status : Answered

Chosen Option : 3

Q.2 The external length, breadth and depth of a cuboidal iron storage space are 4 m, 3.6 m, and 1.5 m, respectively. It is open at the top. What is the cost (in ₹) of painting its outer surface at the rate of ₹55 per m^2 ?

- Ans
- 1. 1,991
 - 2. 2,046
 - 3. 1,936
 - 4. 2,838

Question ID : 75189712654

Option 1 ID : 75189750614

Option 2 ID : 75189750615

Option 3 ID : 75189750613

Option 4 ID : 75189750616

Status : Answered

Chosen Option : 2

Test Prime

ALL EXAMS,
ONE SUBSCRIPTION



40,000+
Mock Tests



Personalised
Report Card



Unlimited
Re-Attempt



500+
Exam Covered



Previous Year
Papers



500%
Refund



DOWNLOAD NOW

Q.3 Puneet walks 4 m towards the west. He turns right and walks 7 m. He turns left and walks 4 m. He again turns left and walks 7 m. He turns right and walks 3 m. In which direction is he facing now? (All turns are 90 degree turns only)

- Ans**
- 1. West
 - 2. South
 - 3. North
 - 4. East

Question ID : 75189714252
Option 1 ID : 75189757006
Option 2 ID : 75189757008
Option 3 ID : 75189757007
Option 4 ID : 75189757005
Status : Answered
Chosen Option : 1

Q.4 Refer to the following number series and answer the question.

(Left) 9 2 3 5 7 8 6 3 2 1 5 6 7 9 4 3 6 3 5 8 2 (Right)

How many such even numbers are there in the series each of which is immediately preceded and followed by an odd number?

- Ans**
- 1. Four
 - 2. Three
 - 3. Six
 - 4. Five

Question ID : 75189710850
Option 1 ID : 75189743398
Option 2 ID : 75189743397
Option 3 ID : 75189743400
Option 4 ID : 75189743399
Status : Answered
Chosen Option : 4

Q.5 The process of obtaining images of different body parts by using a weak magnetic field produced inside the body is called _____.

- Ans**
- 1. PET scan
 - 2. Ultrasound scan
 - 3. CT scan
 - 4. MRI scan

Question ID : 75189713819
Option 1 ID : 75189755275
Option 2 ID : 75189755276
Option 3 ID : 75189755273
Option 4 ID : 75189755274
Status : Answered
Chosen Option : 4

Q.6 What is the correct statement about Mayor?

Ans 1.

Mayor is the second citizen of the Municipal Corporation after City Magistrate.

- 2. Tenure of Mayors of cities in India is fixed for five years.
- 3. Mayor is elected by the Governor of the State.
- 4. Mayor is the head of the Municipal Corporation.

Question ID : 75189715482

Option 1 ID : 75189761925

Option 2 ID : 75189761927

Option 3 ID : 75189761928

Option 4 ID : 75189761926

Status : Answered

Chosen Option : 2

Q.7 The Shanti Swarup Bhatnagar Prize for Science and Technology is a science award in India given annually by which of the following scientific bodies?

Ans 1. Indian Council of Medical Research (ICMR)

2. Department of Biotechnology (DBT)

3. Council of Scientific and Industrial Research (CSIR)

4. Department of Science and Technology (DST)

Question ID : 75189715403

Option 1 ID : 75189761610

Option 2 ID : 75189761611

Option 3 ID : 75189761609

Option 4 ID : 75189761612

Status : Answered

Chosen Option : 3

Q.8 Which of the following is divisible by 9?

Ans 1. 3132

2. 1099

3. 2352

4. 2121

Question ID : 75189712916

Option 1 ID : 75189751664

Option 2 ID : 75189751661

Option 3 ID : 75189751663

Option 4 ID : 75189751662

Status : Answered

Chosen Option : 1

Q.9 Select the option that is related to the third term in the same way as the second term is related to the first term and the sixth term is related to the fifth term.

7 : 4096 :: 6 : ? :: 4 : 1

- Ans**
- 1. 245
 - 2. 246
 - 3. 243
 - 4. 242

Question ID : 75189713705
 Option 1 ID : 75189754817
 Option 2 ID : 75189754819
 Option 3 ID : 75189754818
 Option 4 ID : 75189754820
 Status : **Not Attempted and Marked For Review**
 Chosen Option : --

Q.10 Select the option that represents the letters that, when placed from left to right in the same sequence in the blanks below, will complete the letter series.

FG_C_IQ_SF_SCAIQ_SF_SC_I_PS

- Ans**
- 1. SAPGPGAQ
 - 2. SAPGBGAP
 - 3. SAPFBFAP
 - 4. SAPGPGBQ

Question ID : 75189713095
 Option 1 ID : 75189752377
 Option 2 ID : 75189752378
 Option 3 ID : 75189752380
 Option 4 ID : 75189752379
 Status : **Answered**
 Chosen Option : 1

Q.11 The net resistance of the two resistors connected in series is 6 ohm. If one of the resistances is 2 ohm, what is the other resistance if the current flowing through them is 4 amp?

- Ans**
- 1. 4 ohm
 - 2. 8 ohm
 - 3. 12 ohm
 - 4. 3 ohm

Question ID : 75189713805
 Option 1 ID : 75189755219
 Option 2 ID : 75189755217
 Option 3 ID : 75189755220
 Option 4 ID : 75189755218
 Status : **Answered**
 Chosen Option : 1

Q.12 Which of the following compounds can conduct electricity?

- Ans
- 1. Kerosene
 - 2. Alcohol
 - 3. Sodium chloride
 - 4. Glucose

Question ID : 75189715029

Option 1 ID : 75189760115

Option 2 ID : 75189760116

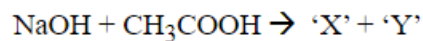
Option 3 ID : 75189760114

Option 4 ID : 75189760113

Status : Answered

Chosen Option : 1

Q.13 Identify 'X' and 'Y' products respectively, in the given chemical equation.



- Ans
- 1. CH_3COONa and H_2O
 - 2. NaO and CO_2
 - 3. Na_2OH and CO_2
 - 4. $\text{CH}_3\text{CO}_2\text{H}$ and $\text{Na}(\text{OH})_2$

Question ID : 75189714774

Option 1 ID : 75189759094

Option 2 ID : 75189759093

Option 3 ID : 75189759096

Option 4 ID : 75189759095

Status : Answered

Chosen Option : 1

Q.14 Find the gain percentage, given that Bushra sold her scooter for ₹15,000 gaining one-fifth of the selling price.

- Ans
- 1. 10%
 - 2. 20%
 - 3. 15%
 - 4. 25%

Question ID : 75189713310

Option 1 ID : 75189753237

Option 2 ID : 75189753240

Option 3 ID : 75189753238

Option 4 ID : 75189753239

Status : Answered

Chosen Option : 2

Q.15 Which of the following alternatives is NOT a source of formal data on unemployment in India?

- Ans
- 1. Reports of Census of India
 - 2. Reports by Directorate General of Employment
 - 3. Reports of National Family Health Survey
 - 4. National Sample Survey Reports

Question ID : 75189714005
Option 1 ID : 75189756017
Option 2 ID : 75189756020
Option 3 ID : 75189756018
Option 4 ID : 75189756019
Status : Not Answered
Chosen Option : --

Q.16 Mango showers can be defined as:

- Ans
- 1. monsoon showers which are common in the states of Uttar Pradesh and Bihar
 - 2. pre-monsoon showers which are common in the states of Karnataka and Kerala
 - 3. Snow storms during the winter season
 - 4. post-monsoon showers which are common in the states of Maharashtra and Madhya Pradesh

Question ID : 75189715454
Option 1 ID : 75189761815
Option 2 ID : 75189761814
Option 3 ID : 75189761816
Option 4 ID : 75189761813
Status : Answered
Chosen Option : 2

Q.17 Six boxes M, N, O, P, Q and R are kept one above the other but not necessarily in the same order. Only 2 boxes are kept below M. Only one box is kept above Q. O is kept at any of the positions above R but not at the topmost position. R is not kept at the bottom most position. N is kept at any of positions below Q. Where is box P kept?

- Ans
- 1. 2nd from the bottom
 - 2. 3rd from the top
 - 3. At the topmost position
 - 4. 3rd from the bottom

Question ID : 75189713597
Option 1 ID : 75189754385
Option 2 ID : 75189754387
Option 3 ID : 75189754388
Option 4 ID : 75189754386
Status : Answered
Chosen Option : 3

Q.18 Which of the following countries won the Thomas Cup for the first time ever, in 2022?

- Ans
- 1. India
 - 2. China
 - 3. Japan
 - 4. Indonesia

Question ID : 75189712539

Option 1 ID : 75189750153

Option 2 ID : 75189750155

Option 3 ID : 75189750156

Option 4 ID : 75189750154

Status : Answered

Chosen Option : 1

Q.19 P, Q, R, S and T live on five different floors of the same building. The lowermost floor in the building is numbered 1, the floor above it, number 2 and so on till the topmost floor is numbered 5. P lives immediately below T and immediately above S. P lives on an odd numbered floor. If R is not on the lowermost floor, where does T live?

- Ans
- 1. 2nd floor
 - 2. 5th floor
 - 3. 1st floor
 - 4. 4th floor

Question ID : 75189714902

Option 1 ID : 75189759606

Option 2 ID : 75189759607

Option 3 ID : 75189759605

Option 4 ID : 75189759608

Status : Answered

Chosen Option : 4

Q.20 Match the cities in column-A with the rivers in column-B.

Column-A (City)	Column-B (River)
a. Ahmedabad	1. Godavari
b. Kolkata	2. Brahmaputra
c. Guwahati	3. Sabarmati
d. Nasik	4. Hooghly

- Ans
- 1. a-4, b-3, c-1, d-2
 - 2. a-3, b-4, c-2, d-1
 - 3. a-4, b-3, c-2, d-1
 - 4. a-1, b-2, c-3, d-4

Question ID : 75189715464
Option 1 ID : 75189761856
Option 2 ID : 75189761855
Option 3 ID : 75189761854
Option 4 ID : 75189761853
Status : Answered
Chosen Option : 2

Q.21 Arun is the elder brother of Kiran. The difference in their ages is 20 years. If 5 years ago, Arun was 5 times as old as Kiran then was, then find the present age (in years) of Arun.

- Ans
- 1. 30
 - 2. 40
 - 3. 20
 - 4. 10

Question ID : 75189713370
Option 1 ID : 75189753479
Option 2 ID : 75189753480
Option 3 ID : 75189753478
Option 4 ID : 75189753477
Status : Answered
Chosen Option : 1

Q.22 The 'NavIC' is an independent regional navigation satellite system being developed by which country?

- Ans
- 1. Japan
 - 2. Russia
 - 3. India
 - 4. France

Question ID : 75189712451
Option 1 ID : 75189749802
Option 2 ID : 75189749801
Option 3 ID : 75189749804
Option 4 ID : 75189749803
Status : Not Answered
Chosen Option : --

Q.23 ভারতীয় সংবিধানে আবির্ভাব অনুযায়ী সঠিক কালানুক্রমে আইন এবং নীতিগুলো বেছে নাও।

Ans 1.

শিক্ষার অধিকার আইন, তথ্য প্রযুক্তি আইন, প্রতিবন্ধী ব্যক্তির অধিকার আইন ও সুরক্ষা, তথ্য অধিকার আইন

2.

তথ্য অধিকার আইন, শিক্ষার অধিকার আইন, প্রতিবন্ধী ব্যক্তির অধিকার ও সুরক্ষা আইন, তথ্য প্রযুক্তি আইন

3.

তথ্য প্রযুক্তি আইন, তথ্য অধিকার আইন, প্রতিবন্ধী ব্যক্তির অধিকার ও সুরক্ষা আইন, শিক্ষার অধিকার আইন

4.

তথ্য প্রযুক্তি আইন, তথ্য অধিকার আইন, শিক্ষার অধিকার আইন, প্রতিবন্ধী ব্যক্তির অধিকার ও সুরক্ষা আইন

Question ID : 75189713981

Option 1 ID : 75189755924

Option 2 ID : 75189755923

Option 3 ID : 75189755921

Option 4 ID : 75189755922

Status : Not Answered

Chosen Option : --

Q.24 A statement is given followed by four conclusions. Find out which conclusion is NOT true based on the given statement.

Statement: $P < Q \leq R < S > T \geq U > V$

Conclusions:

1) $T > V$

2) $P < R$

3) $S \geq V$

4) $Q < S$

Ans 1. 2

2. 1

3. 3

4. 4

Question ID : 75189713197

Option 1 ID : 75189752786

Option 2 ID : 75189752785

Option 3 ID : 75189752787

Option 4 ID : 75189752788

Status : Answered

Chosen Option : 3

Q.25 The budget of any government is defined as:

- Ans 1. a weekly statement of the estimated receipts and expenditure of the government over the last week
2. an annual statement of the estimated receipts and expenditure of the government over the fiscal year
3. a monthly statement of the estimated receipts and expenditure of the government over the last month
4. a biennial statement of the estimated receipts and expenditure of the government over the last two fiscal years

Question ID : 75189715428
Option 1 ID : 75189761712
Option 2 ID : 75189761710
Option 3 ID : 75189761709
Option 4 ID : 75189761711
Status : Answered
Chosen Option : 2

Q.26 Which of the following numbers will replace the question mark (?) in the given series?

40 31.2 23.2 16 9.6 ?

- Ans 1. 4.2
2. 3
3. 3.8
4. 4

Question ID : 75189712687
Option 1 ID : 75189750745
Option 2 ID : 75189750748
Option 3 ID : 75189750746
Option 4 ID : 75189750747
Status : Answered
Chosen Option : 4

Q.27 Aquatic animals like fishes, excrete waste in which of the following forms?

- Ans 1. Sweat salts
2. Uric acid
3. Ammonia
4. Urea

Question ID : 75189714828
Option 1 ID : 75189759312
Option 2 ID : 75189759311
Option 3 ID : 75189759309
Option 4 ID : 75189759310
Status : Not Answered
Chosen Option : --

Q.28 Select the correct combination of mathematical signs that can sequentially replace the * and balance the given equation.

$$32 * 16 * 8 * 2 * 3 * 5 * 5$$

- Ans**
- 1. -, +, ÷, ×, =, +
 - 2. +, -, ÷, ×, =, +
 - 3. -, +, ÷, =, ×, +
 - 4. -, +, ×, =, ÷, +

Question ID : 75189714979

Option 1 ID : 75189759914

Option 2 ID : 75189759915

Option 3 ID : 75189759916

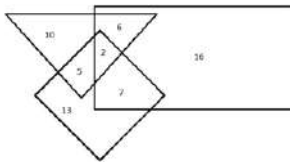
Option 4 ID : 75189759913

Status : Answered

Chosen Option : 3

Q.29 In the following Venn diagram, the rectangle represents 'fruits', the triangle represents 'sour tasting eatables', and the square represents 'yellow coloured eatables'.

Select the option which represents the number of sour tasting yellow fruits.



- Ans**
- 1. 2
 - 2. 6
 - 3. 5
 - 4. 7

Question ID : 75189714197

Option 1 ID : 75189756786

Option 2 ID : 75189756785

Option 3 ID : 75189756787

Option 4 ID : 75189756788

Status : Answered

Chosen Option : 1

Q.30 If the arithmetic mean of 11, 15, 13, p and 10 is 11, then the value of p is:

- Ans**
- 1. 8
 - 2. 6
 - 3. 5
 - 4. 7

Question ID : 75189713436

Option 1 ID : 75189753744

Option 2 ID : 75189753742

Option 3 ID : 75189753741

Option 4 ID : 75189753743

Status : Answered

Chosen Option : 2

Q.31 Select the correct group of fundamental rights provided by the Constitution of India from the given alternatives.

- A. Right to equality
- B. Right to freedom of religion
- C. Right to financial support for higher and professional education
- D. Right to constitutional remedies
- E. Right to paternal properties

- Ans**
- 1. B, D and E
 - 2. C, D and E
 - 3. A, B and D
 - 4. A, C and E

Question ID : 75189714016
Option 1 ID : 75189756062
Option 2 ID : 75189756064
Option 3 ID : 75189756063
Option 4 ID : 75189756061
Status : Not Answered
Chosen Option : --

Q.32 The radius of curvature of a convex mirror of focal length 2 m is:

- Ans**
- 1. 2.0 m
 - 2. 0.5 m
 - 3. 4.0 m
 - 4. 1.0 m

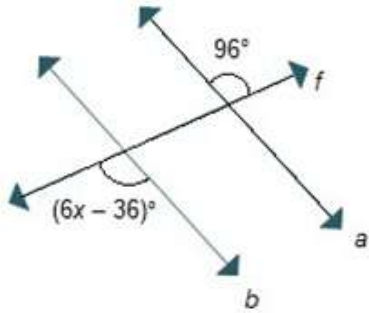
Question ID : 75189714081
Option 1 ID : 75189756322
Option 2 ID : 75189756321
Option 3 ID : 75189756323
Option 4 ID : 75189756324
Status : Answered
Chosen Option : 3

Q.33 Find the ratio between the LCM and the HCF of 5, 15 and 20.

- Ans**
- 1. 14 : 3
 - 2. 8 : 1
 - 3. 12 : 1
 - 4. 11 : 2

Question ID : 75189712933
Option 1 ID : 75189751730
Option 2 ID : 75189751729
Option 3 ID : 75189751732
Option 4 ID : 75189751731
Status : Answered
Chosen Option : 3

Q.34 In the given figure, line a is parallel to line b. Find the value of x.



- Ans
- 1. 96°
 - 2. 32°
 - 3. 22°
 - 4. 36°

Question ID : 75189712090

Option 1 ID : 75189748359

Option 2 ID : 75189748357

Option 3 ID : 75189748360

Option 4 ID : 75189748358

Status : Answered

Chosen Option : 3

Q.35 Which of the following options is the closest approximate value which will come in place of the question mark (?) in the following equation?

$$3.01^3 \div 2.99 \times 6.01 = ?$$

- Ans
- 1. 64
 - 2. 46
 - 3. 54
 - 4. 36

Question ID : 75189712712

Option 1 ID : 75189750848

Option 2 ID : 75189750846

Option 3 ID : 75189750845

Option 4 ID : 75189750847

Status : Answered

Chosen Option : 3

Q.36 Arrange the numbers given below in ascending order.

705.0, 7.005, 7.500, 70.50, 7050, 7.050, 75

- Ans
- 1. 7050, 705.0, 75, 70.50, 7.500, 7.050, 7.005
 - 2. 7.005, 7.500, 7.050, 70.50, 75, 705.0, 7050
 - 3. 7.005, 7.500, 7.050, 75, 70.50, 705.0, 7050
 - 4. 7.005, 7.050, 7.500, 70.50, 75, 705.0, 7050

Question ID : 75189713260

Option 1 ID : 75189753040

Option 2 ID : 75189753037

Option 3 ID : 75189753039

Option 4 ID : 75189753038

Status : Answered

Chosen Option : 4

Q.37 If $\sin^2 x + 3 \cos^2 x = 2$, and ($0^\circ < x < 90^\circ$), find the value of $\operatorname{cosec} x$.

- Ans
- 1. $\sqrt{3}$
 - 2. 2
 - 3. $\frac{2\sqrt{3}}{3}$
 - 4. $\sqrt{2}$

Question ID : 75189713415

Option 1 ID : 75189753659

Option 2 ID : 75189753658

Option 3 ID : 75189753660

Option 4 ID : 75189753657

Status : Answered

Chosen Option : 4

Q.38 A production cycle in which at least one production factor is fixed is known as:

- Ans
- 1. short run production
 - 2. variable long term production
 - 3. constant long term production
 - 4. long run production

Question ID : 75189715441

Option 1 ID : 75189761761

Option 2 ID : 75189761763

Option 3 ID : 75189761764

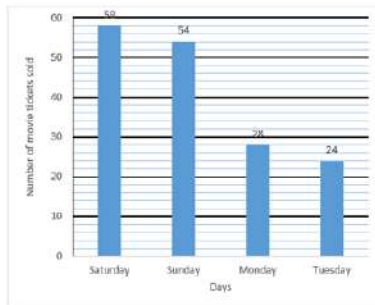
Option 4 ID : 75189761762

Status : Not Answered

Chosen Option : --

Q.39 Study the given bar graph and answer the following question.

The given bar graph depicts the number of movie tickets sold on four days.



If the average number of tickets sold on Monday, Tuesday and Wednesday was 31, what was the number of tickets sold on Wednesday?

- Ans**
- 1. 41
 - 2. 43
 - 3. 39
 - 4. 45

Question ID : 75189712733

Option 1 ID : 75189750931

Option 2 ID : 75189750930

Option 3 ID : 75189750929

Option 4 ID : 75189750932

Status : Answered

Chosen Option : 1

Q.40 The width of a rectangle is one-third of its length. If the perimeter of the rectangle is 64 cm, find the width of the rectangle.

- Ans**
- 1. 21 cm
 - 2. 24 cm
 - 3. 8 cm
 - 4. 16 cm

Question ID : 75189713359

Option 1 ID : 75189753434

Option 2 ID : 75189753433

Option 3 ID : 75189753435

Option 4 ID : 75189753436

Status : Answered

Chosen Option : 3

Q.41 Who won the Male Single's title of the All England Badminton Championship 2022?

- Ans
- 1. Viktor Axelsen
 - 2. Kidambi Srikanth
 - 3. Lee Zii Jia
 - 4. Lakshya Sen

Question ID : 75189715399
Option 1 ID : 75189761595
Option 2 ID : 75189761596
Option 3 ID : 75189761593
Option 4 ID : 75189761594
Status : Answered
Chosen Option : 1

Q.42 Which of the following is non-biodegradable?

- Ans
- 1. Coffee powder
 - 2. Wool
 - 3. Cotton
 - 4. Nylon

Question ID : 75189710278
Option 1 ID : 75189741110
Option 2 ID : 75189741112
Option 3 ID : 75189741109
Option 4 ID : 75189741111
Status : Answered
Chosen Option : 4

Q.43 The polarity of an electromagnet can be reversed by changing the _____.

- Ans
- 1. direction of current
 - 2. distance between the turns
 - 3. number of turns in the electromagnet
 - 4. magnitude of the current flowing through it

Question ID : 75189713883
Option 1 ID : 75189755529
Option 2 ID : 75189755531
Option 3 ID : 75189755530
Option 4 ID : 75189755532
Status : Answered
Chosen Option : 1

Q.44 The graph of $y = 9x^2 + 16$:

- Ans
- 1. touches the x-axis at $\frac{4}{3}$
 - 2. either intersects or touches the x-axis
 - 3. intersects the x-axis at $-\frac{4}{3}$ and $\frac{4}{3}$
 - 4. neither intersects nor touches the x-axis

Question ID : 75189712836

Option 1 ID : 75189751342

Option 2 ID : 75189751343

Option 3 ID : 75189751341

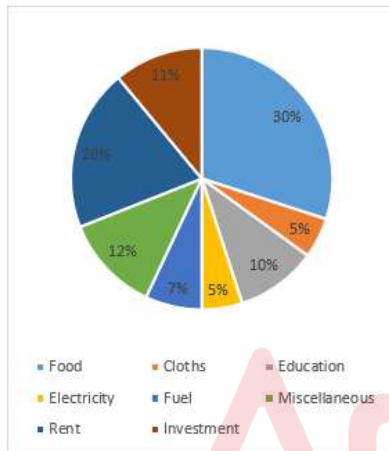
Option 4 ID : 75189751344

Status : Answered

Chosen Option : 3

Q.45 The given pie chart shows the expenses of a family in a month.

Read the chart and answer the question that follows.



What is the central angle for total expenditure on fuel, miscellaneous and investment?

- Ans
- 1. 100°
 - 2. 102°
 - 3. 98°
 - 4. 108°

Question ID : 75189713489

Option 1 ID : 75189753953

Option 2 ID : 75189753954

Option 3 ID : 75189753956

Option 4 ID : 75189753955

Status : Answered

Chosen Option : 4

Q.46 An object of size 3.0 cm is placed at a distance of 50 cm from a concave lens of focal length 25 cm. The size of the image formed will be :

- Ans**
- 1. 1.2 cm
 - 2. 0.33 cm
 - 3. 1.5 cm
 - 4. 1.0 cm

Question ID : 75189711301
Option 1 ID : 75189745202
Option 2 ID : 75189745204
Option 3 ID : 75189745201
Option 4 ID : 75189745203
Status : Answered
Chosen Option : 4

Q.47 Select the correct statement about Rajya Sabha.

- Ans**
- 1.
A member who is elected for a full term in Rajya Sabha serves for a period of four years.
 - 2.
The President of India act as ex-officio Chairman of Rajya Sabha.
 - 3.
It is the lower house of parliament and it dissolves every five years.
 - 4.
It is called upper house of parliament and it never dissolves.

Question ID : 75189715477
Option 1 ID : 75189761908
Option 2 ID : 75189761905
Option 3 ID : 75189761906
Option 4 ID : 75189761907
Status : Answered
Chosen Option : 4

Q.48 In the given letter-cluster pairs, the first letter-cluster is related to the second letter-cluster following a certain logic. Study the given pairs carefully, and from the given options, select the pair that follows the same logic.

ADG : EHK
TJF : XNJ

- Ans**
- 1. KOH : OSL
 - 2. JQR : NTV
 - 3. FJW : HLZ
 - 4. IPD : RKW

Question ID : 75189714928
Option 1 ID : 75189759709
Option 2 ID : 75189759712
Option 3 ID : 75189759710
Option 4 ID : 75189759711
Status : Answered
Chosen Option : 1

Q.49 What is the genetic material inherited from one generation to other?

- Ans
- 1. Enzymes
 - 2. Proteins
 - 3. DNA
 - 4. RNA

Question ID : 75189712591
Option 1 ID : 75189750364
Option 2 ID : 75189750361
Option 3 ID : 75189750363
Option 4 ID : 75189750362
Status : Answered
Chosen Option : 3

Q.50 Mr. X travelled 220 km, 250 km and 140 km at a speed of 11 km/h, 5 km/h and 7 km/h, respectively. Find his average speed in km/h.

- Ans
- 1. $7\frac{7}{9}$
 - 2. $6\frac{5}{9}$
 - 3. $6\frac{7}{9}$
 - 4. $6\frac{2}{9}$

Question ID : 75189713321
Option 1 ID : 75189753281
Option 2 ID : 75189753283
Option 3 ID : 75189753284
Option 4 ID : 75189753282
Status : Answered
Chosen Option : 3

Q.51 How is urea removed from the blood by an artificial kidney?

- Ans
- 1. By osmosis
 - 2. By filtration
 - 3. By enzymatic action
 - 4. By absorption

Question ID : 75189712277
Option 1 ID : 75189749106
Option 2 ID : 75189749105
Option 3 ID : 75189749108
Option 4 ID : 75189749107
Status : Not Answered
Chosen Option : --

Q.52

Find the value of n , when $216^{\frac{2}{n}} = 36$.

- Ans
- 1. 1
 - 2. 6
 - 3. 3
 - 4. 9

Question ID : 75189712899

Option 1 ID : 75189751596

Option 2 ID : 75189751594

Option 3 ID : 75189751595

Option 4 ID : 75189751593

Status : Answered

Chosen Option : 3

Q.53

The allotrope of which non-metal conducts electricity?

- Ans
- 1. Sulfur
 - 2. Phosphorous
 - 3. Carbon
 - 4. Oxygen

Question ID : 75189714990

Option 1 ID : 75189759958

Option 2 ID : 75189759957

Option 3 ID : 75189759960

Option 4 ID : 75189759959

Status : Answered

Chosen Option : 3

Q.54

20% of the population of a city died due to war, and of the remaining population, 5% died in an epidemic. If the present population of the city is 15,200, then find the population of the city before the war.

- Ans
- 1. 20,000
 - 2. 20,100
 - 3. 23,500
 - 4. 19,680

Question ID : 75189713289

Option 1 ID : 75189753156

Option 2 ID : 75189753154

Option 3 ID : 75189753155

Option 4 ID : 75189753153

Status : Answered

Chosen Option : 1

Q.55 একটি বিবৃতি দেওয়া হয়েছে, তার পরে দুটি যুক্তি I এবং II দেওয়া হয়েছে। বিবৃতি এবং যুক্তিগুলি মনোযোগ সহকারে পড়ুন এবং প্রদত্ত বিকল্পগুলি থেকে উপযুক্ত উত্তর নির্বাচন করুন।

বিবৃতি:

ছোটবেলা থেকেই বাচ্চাদের মোবাইল ফোন ব্যবহার করার অনুমতি দেওয়া উচিত।

যুক্তি:

I. মোবাইল ফোনের রুমাগত ব্যবহার বাচ্চাদের বিব্রান্তি সৃষ্টি করে।

II. অনেক শিক্ষামূলক অ্যাপ বাচ্চাদের মধ্যে খেলাচ্ছলে প্রতিযোগিতাকে উৎসাহিত করে যেটি তাদের নতুন ধারণা শেখার উপায় বাড়ায়।

Ans

- ✓ 1. I দুর্বল করে, যখন II বিবৃতিকে শক্তিশালী করে
- ✗ 2. I এবং II উভয়ই বিবৃতিকে শক্তিশালী করে
- ✗ 3. II দুর্বল করে, যখন I বিবৃতিটিকে শক্তিশালী করে
- ✗ 4. I এবং II উভয়ই বিবৃতিকে দুর্বল করে

Question ID : 75189715332

Option 1 ID : 75189761325

Option 2 ID : 75189761328

Option 3 ID : 75189761326

Option 4 ID : 75189761327

Status : Answered

Chosen Option : 2

Q.56 Maulana Azad National Urdu University (MANUU) is a Central University established at National Level in _____ by an act of Parliament.

Ans

- ✗ 1. 2004
- ✗ 2. 2001
- ✗ 3. 1999
- ✓ 4. 1998

Question ID : 75189715417

Option 1 ID : 75189761668

Option 2 ID : 75189761667

Option 3 ID : 75189761666

Option 4 ID : 75189761665

Status : Not Answered

Chosen Option : --

Q.57 In the phenomena of electromagnetic induction, when the coil carrying current and magnetic field are stationary, the galvanometer _____.

- Ans**
- 1. shows null deflection
 - 2. Shows deflection on both sides alternately
 - 3. deflects right
 - 4. deflects left

Question ID : **75189713886**
Option 1 ID : **75189755543**
Option 2 ID : **75189755544**
Option 3 ID : **75189755541**
Option 4 ID : **75189755542**
Status : **Answered**
Chosen Option : **2**

Q.58 A man sells potatoes at ₹27 per kg, which he bought at ₹25 per kg. He also uses a faulty weight and each time gives 800 g instead of 1 kg. His actual gain percentage is:

- Ans**
- 1. 25%
 - 2. 35%
 - 3. 20%
 - 4. 40%

Question ID : **75189712630**
Option 1 ID : **75189750518**
Option 2 ID : **75189750519**
Option 3 ID : **75189750517**
Option 4 ID : **75189750520**
Status : **Answered**
Chosen Option : **2**

Q.59 A statement is given followed by four conclusions. Find out which conclusion is INCORRECT based on the given statement.

Statement: $S > W = T < L < O \leq R$

Conclusions:

1. $W < R$

2. $S > L$

3. $W < O$

4. $T < S$

- Ans**
- 1. 1
 - 2. 2
 - 3. 3
 - 4. 4

Question ID : 75189713182

Option 1 ID : 75189752725

Option 2 ID : 75189752726

Option 3 ID : 75189752727

Option 4 ID : 75189752728

Status : Answered

Chosen Option : 2

Q.60 Hemodialysis consists of several tubes having semi-permeable lining suspended in tank having fluid that has _____.

- Ans**
- 1. Same composition as renal filtrate
 - 2. Same composition as blood except that it has more heparin
 - 3. Same osmotic pressure as blood and is devoid of nitrogenous wastes
 - 4. Low osmotic pressure to enable movement of molecules

Question ID : 75189710212

Option 1 ID : 75189740845

Option 2 ID : 75189740847

Option 3 ID : 75189740846

Option 4 ID : 75189740848

Status : Not Answered

Chosen Option : --

Q.61 Find the total surface area of a solid right circular cylinder whose radius of base is 2 cm, and the height is 10 cm.

- Ans
- ✓ 1. $48\pi \text{ cm}^2$
 - ✗ 2. $840000\pi \text{ cm}^2$
 - ✗ 3. $84000\pi \text{ cm}^2$
 - ✗ 4. $8.4\pi \text{ cm}^2$

Question ID : 75189713403
Option 1 ID : 75189753609
Option 2 ID : 75189753612
Option 3 ID : 75189753610
Option 4 ID : 75189753611
Status : Answered
Chosen Option : 1

Q.62 Town X is west of town Y. Town Q is north of X. Town P is east of Q and north-west of Y. What is the position of town P with respect to X?

- Ans
- ✗ 1. North-west
 - ✓ 2. North-east
 - ✗ 3. South-west
 - ✗ 4. East

Question ID : 75189714921
Option 1 ID : 75189759681
Option 2 ID : 75189759682
Option 3 ID : 75189759684
Option 4 ID : 75189759683
Status : Answered
Chosen Option : 2

Q.63 Which of the following statements with respect to position of elements having atomic number 11, 12, 13, 14, 15, 16, 17 and 18, respectively, in the modern periodic table is INCORRECT?

- Ans
- ✗ 1. These elements belong to the third period of the modern periodic table.
 - ✓ 2. These elements belong to the second period of the modern periodic table.
 - ✗ 3. Electrons in the atoms of these elements are filled in K, L and M shells.
 - ✗ 4. These elements are placed in the same period in the modern periodic table.

Question ID : 75189711932
Option 1 ID : 75189747728
Option 2 ID : 75189747726
Option 3 ID : 75189747727
Option 4 ID : 75189747725
Status : Answered
Chosen Option : 2

Q.64 Seven boxes E, F, G, H, I, J and K are kept one over the other but not necessarily in the same order. Only three boxes are kept between F and J. Neither G nor I is kept at the top. Only H is kept between G and I. K is kept immediately below J. Only one box is kept above F. How many boxes are kept between H and K?

- Ans**
- 1. One
 - 2. Two
 - 3. Four
 - 4. Three

Question ID : 75189713536
Option 1 ID : 75189754142
Option 2 ID : 75189754143
Option 3 ID : 75189754141
Option 4 ID : 75189754144
Status : Answered
Chosen Option : 1

Q.65 If $25 : 15 :: 15 : x$, then find the value of x.

- Ans**
- 1. 9
 - 2. 15
 - 3. 11
 - 4. 13

Question ID : 75189712947
Option 1 ID : 75189751785
Option 2 ID : 75189751788
Option 3 ID : 75189751786
Option 4 ID : 75189751787
Status : Answered
Chosen Option : 1

Q.66 A cross between a tall plant (TT) and short plant (tt) resulted in F₁ progeny which were all tall plants because:

- Ans**
- 1. The plant height is governed by T and t
 - 2. The plant height is governed by t only
 - 3. The plant height is governed by T or t
 - 4. The plant height is governed by T only

Question ID : 75189710238
Option 1 ID : 75189740950
Option 2 ID : 75189740951
Option 3 ID : 75189740949
Option 4 ID : 75189740952
Status : Answered
Chosen Option : 4

Q.67 'REASON' শব্দের প্রতিটি স্বরবর্ণকে ইংরেজি বর্ণের ক্রমানুসারে এটির পরের অক্ষরে পরিবর্তিত করা হয় এবং প্রতিটি বাঞ্ছনবর্ণকে ইংরেজি বর্ণের ক্রমানুসারে এটির পূর্ববর্তী বর্ণে পরিবর্তিত করা হয়। এইভাবে গঠিত শব্দের প্রতিটি বর্ণকে বর্ণানুক্রমিকভাবে সাজানো হলে বামদিক থেকে কোনটি চতুর্থ বর্ণ হবে?

- Ans**
- 1. F
 - 2. M
 - 3. Q
 - 4. P

Question ID : 75189711533

Option 1 ID : 75189746129

Option 2 ID : 75189746130

Option 3 ID : 75189746132

Option 4 ID : 75189746131

Status : Not Answered

Chosen Option : --

Q.68 Which of the following reactions is the most accurate representation of the reaction between barium chloride and sodium sulphate?

- Ans**
- 1. $Na_2SO_4 + BaCl \rightarrow BaSO_4 + 2NaCl$
 - 2. $Na_2SO_4 + BaCl_2 \rightarrow BaSO_4 + 2NaCl$
 - 3. $NaSO_4 + BaCl_2 \rightarrow BaSO_4 + NaCl_2$
 - 4. $NaSO_4 + BaCl \rightarrow BaSO_4 + NaCl$

Question ID : 75189712783

Option 1 ID : 75189751132

Option 2 ID : 75189751130

Option 3 ID : 75189751131

Option 4 ID : 75189751129

Status : Answered

Chosen Option : 2

Q.69 If the time in the mirror image of a 12-hour clock is 3:25, what is the actual time?

- Ans**
- 1. 9:35
 - 2. 8:35
 - 3. 8:45
 - 4. 7:45

Question ID : 75189715353

Option 1 ID : 75189761410

Option 2 ID : 75189761411

Option 3 ID : 75189761412

Option 4 ID : 75189761409

Status : Answered

Chosen Option : 2

Q.70 In this question, a group of numbers/symbols is coded using letters as per the given table and the conditions which follow. The correct combination of codes following the conditions is your answer.

Number / Symbol	5	3	@	8	%	2	#	&	6	ψ	π	7	5	φ
Code	A	V	L	K	R	M	B	F	N	T	E	C	S	W

Conditions:

- (i) If the first element is a symbol and the last element is a number, the codes for these two (the first and the last elements) are to be interchanged.
- (ii) If the first element is an odd number and the last element is an even number, the first and last elements are to be coded as ©.
- (iii) If both the second and third elements are perfect squares, the third element is to be coded as the code for the second element.

ψ62%85

- Ans**
- 1. SNMRKT
 - 2. TNMRKS
 - 3. SNLRBT
 - 4. TNBRLS

Question ID : 75189715275
 Option 1 ID : 75189761100
 Option 2 ID : 75189761099
 Option 3 ID : 75189761097
 Option 4 ID : 75189761098
 Status : Not Answered
 Chosen Option : --

Q.71 Which of the following numbers will replace the question mark (?) in the given number series?

29, 30, 34, 43, 59, ?

- Ans**
- 1. 84
 - 2. 79
 - 3. 86
 - 4. 82

Question ID : 75189713637
 Option 1 ID : 75189754547
 Option 2 ID : 75189754548
 Option 3 ID : 75189754546
 Option 4 ID : 75189754545
 Status : Answered
 Chosen Option : 1

Q.72 Narmada Bachao Andolan is related to:

- Ans
- 1. Bhakra Nangal Dam
 - 2. Nagarjuna Sagar Dam
 - 3. Hirakud Dam
 - 4. Sardar Sarovar Dam

Question ID : 75189710297
Option 1 ID : 75189741185
Option 2 ID : 75189741187
Option 3 ID : 75189741186
Option 4 ID : 75189741188
Status : Not Answered
Chosen Option : --

Q.73 A person borrows ₹20,000 at 25% compound interest per year, compounded annually. At the end of every year, he pays ₹2,500 as part payment. How much does he still owe after two such instalments?

- Ans
- 1. ₹25,625
 - 2. ₹25,725
 - 3. ₹25,825
 - 4. ₹25,925

Question ID : 75189712960
Option 1 ID : 75189751837
Option 2 ID : 75189751838
Option 3 ID : 75189751839
Option 4 ID : 75189751840
Status : Not Attempted and Marked For Review
Chosen Option : --

Q.74 Evaluate $\left(\frac{-5}{7}\right)^{-6} \times \left(\frac{-5}{7}\right)^4$.

- Ans
- 1. $\frac{49}{25}$
 - 2. $\frac{125}{343}$
 - 3. $\frac{25}{49}$
 - 4. $\frac{343}{125}$

Question ID : 75189712895
Option 1 ID : 75189751577
Option 2 ID : 75189751580
Option 3 ID : 75189751578
Option 4 ID : 75189751579
Status : Answered
Chosen Option : 1

Q.75 Find the arithmetic mean of the given frequency distribution.

Marks	Frequency
50	3
28	4
85	6
40	7

- Ans
- 1. 56.2
 - 2. 50.5
 - 3. 40.95
 - 4. 52.6

Question ID : 75189713345
Option 1 ID : 75189753378
Option 2 ID : 75189753380
Option 3 ID : 75189753379
Option 4 ID : 75189753377
Status : Answered
Chosen Option : 2

Q.76 The commercial unit of electrical energy is _____.

- Ans
- 1. Watt
 - 2. Calorie
 - 3. Kilowatt hour
 - 4. Joule

Question ID : 75189713842
Option 1 ID : 75189755366
Option 2 ID : 75189755367
Option 3 ID : 75189755368
Option 4 ID : 75189755365
Status : Answered
Chosen Option : 3

Q.77 Seven boys, M, N, O, P, Q, R and S, are sitting around a circular table facing the centre. Exactly two boys sit between S and N, to the right of S. P is an immediate neighbour of M and S. R is second to the right of P and to the immediate right of S. N is an immediate neighbour of Q and O. If O is third to the left of M, where is Q seated?

- Ans
- 1. To the immediate left of P
 - 2. Second to the left of P
 - 3. Third to the left of P
 - 4. Fourth to the left of P

Question ID : 75189714888
Option 1 ID : 75189759549
Option 2 ID : 75189759552
Option 3 ID : 75189759551
Option 4 ID : 75189759550
Status : Answered
Chosen Option : 2

Q.78 The emergent ray from the optical centre of the lens will be _____.

- Ans 1. un-deviated
 2. reflected
 3. bent
 4. deviated

Question ID : 75189713767
 Option 1 ID : 75189755068
 Option 2 ID : 75189755066
 Option 3 ID : 75189755067
 Option 4 ID : 75189755065
 Status : Answered
 Chosen Option : 1

Q.79 In this question, a group of numbers/symbols is coded using letters as per the table given below and the conditions which follow. The correct combination of codes following the conditions is your answer.

Number/Symbol	3	#	6	4	@	5	7	2	%	5	=	9	8
Code	T	H	J	K	M	P	U	D	U	E	W	V	S

Conditions:

- (i) If the first element is a symbol and the last, a number, the codes for these two (the first and the last elements) are to be interchanged.
- (ii) If the first element is an odd number and the last, an even number, the first and last elements are to be coded as ©
- (iii) If both second and third elements are perfect squares, the third element is to be coded as the code for the second element.

Decode %57#8 using the above information.

- Ans 1. SPUHU
 2. SPIHU
 3. SKUHU
 4. UPUHS

Question ID : 75189713106
 Option 1 ID : 75189752421
 Option 2 ID : 75189752424
 Option 3 ID : 75189752423
 Option 4 ID : 75189752422
 Status : Answered
 Chosen Option : 1

Q.80 Six students are sitting around a circular table facing the centre. Taran is an immediate neighbour of Karam and Viraj. Param is sitting second to the right of Taran. Sunny is an immediate neighbour of Param and Manjit. Karam is sitting second to the right of Sunny. Who is an immediate neighbour of Sunny and Viraj?

- Ans**
- 1. Taran
 - 2. Manjit
 - 3. Param
 - 4. Karam

Question ID : 75189713506
Option 1 ID : 75189754022
Option 2 ID : 75189754024
Option 3 ID : 75189754021
Option 4 ID : 75189754023
Status : Answered
Chosen Option : 1

Q.81 An element 'A' reacts with chlorine to give a compound ACl with a high melting point. This compound is also soluble in water. The element 'A' is likely to be:

- Ans**
- 1. silicon
 - 2. iron
 - 3. sodium
 - 4. carbon

Question ID : 7518973690
Option 1 ID : 75189714759
Option 2 ID : 75189714760
Option 3 ID : 75189714757
Option 4 ID : 75189714758
Status : Answered
Chosen Option : 3

Q.82 Which of the following options is the closest approximate value which will come in place of the question mark (?) in the following equation?

$$2.33 - 4.12 + 6.13 \times 11.3 = ?$$

- Ans**
- 1. 43
 - 2. 39
 - 3. 106
 - 4. 64

Question ID : 75189713237
Option 1 ID : 75189752946
Option 2 ID : 75189752948
Option 3 ID : 75189752945
Option 4 ID : 75189752947
Status : Answered
Chosen Option : 4

Q.83 In which group of modern periodic table are halogens placed?

- Ans
- 1. 17th
 - 2. 16th
 - 3. 18th
 - 4. 1st

Question ID : 75189711930
Option 1 ID : 75189747720
Option 2 ID : 75189747717
Option 3 ID : 75189747718
Option 4 ID : 75189747719
Status : Answered
Chosen Option : 1

Q.84 Which among the following statement is FALSE about transportation through phloem?

- Ans
- 1. Transportation in phloem uses GTP & CTP
 - 2. Sucrose is transported initially by using energy into phloem
 - 3. Transportation in phloem is by Utilization of energy (ATP)
 - 4. Increase in osmotic pressure due to sucrose causes water to move into phloem.

Question ID : 75189710149
Option 1 ID : 75189740595
Option 2 ID : 75189740594
Option 3 ID : 75189740593
Option 4 ID : 75189740596
Status : Not Answered
Chosen Option : --

Q.85 Which of the following festivals is the mark of the triumph of Rama, an avatar of Vishnu, over the 10-headed demon king Ravana?

- Ans
- 1. Dussehra
 - 2. Ram Navmi
 - 3. Holi
 - 4. Rakshabandhan

Question ID : 75189715412
Option 1 ID : 75189761648
Option 2 ID : 75189761645
Option 3 ID : 75189761647
Option 4 ID : 75189761646
Status : Answered
Chosen Option : 1

Q.86 Mother Teresa was canonized by Pope Francis I on September 4, _____.

- Ans
- 1. 2018
 - 2. 2014
 - 3. 2012
 - 4. 2016

Question ID : 75189712143
Option 1 ID : 75189748572
Option 2 ID : 75189748570
Option 3 ID : 75189748569
Option 4 ID : 75189748571
Status : Not Answered
Chosen Option : --

Q.87 In December 2021, to improve leadership skills of grassroots women political leaders, the National Commission for Women (NCW) launched a pan-India capacity building programme. What is the name of this programme?

- Ans
- 1. 'She is a Leader'
 - 2. 'Womanhood at Grassroot'
 - 3. 'Ladki Hoon, Lad Sakti Hoon'
 - 4. 'She is a Changemaker'

Question ID : 75189712349
Option 1 ID : 75189749395
Option 2 ID : 75189749396
Option 3 ID : 75189749393
Option 4 ID : 75189749394
Status : Not Answered
Chosen Option : --

Q.88 The Mahanadi River system is the third largest in the peninsula of India and the largest river of _____.

- Ans
- 1. Assam
 - 2. Telangana
 - 3. Odisha
 - 4. West Bengal

Question ID : 75189715298
Option 1 ID : 75189761189
Option 2 ID : 75189761192
Option 3 ID : 75189761191
Option 4 ID : 75189761190
Status : Answered
Chosen Option : 3

Q.89 How many districts of West Bengal were included in the 'Combating Child Trafficking' campaign in August 2022?

- Ans
- 1. 15
 - 2. 22
 - 3. 11
 - 4. 5

Question ID : 75189715065
Option 1 ID : 75189760259
Option 2 ID : 75189760260
Option 3 ID : 75189760258
Option 4 ID : 75189760257
Status : Not Answered
Chosen Option : --

Q.90

The value of $\sqrt{2 + \sqrt{2 + \sqrt{2}}}$ is:

- Ans
- 1. 2
 - 2. 2.5
 - 3. 1.5
 - 4. 1.75

Question ID : 75189713383
Option 1 ID : 75189753529
Option 2 ID : 75189753531
Option 3 ID : 75189753532
Option 4 ID : 75189753530
Status : Answered
Chosen Option : 1

Q.91 Three statements are given, followed by two conclusions numbered I and II. Assuming the statements to be true, even if they seem to be at variance with commonly known facts, decide which of the conclusions logically follow(s) from the statements.

Statements:

1. All flowers are white.
2. Some flowers are dark.
3. All darks are blue.

Conclusions:

- I. Some whites are blue.
- II. All darks are white.

- Ans**
- 1. Neither conclusion I nor II follows
 - 2. Only conclusion II follows
 - 3. Both conclusions I and II follow
 - 4. Only conclusion I follows

Question ID : 75189715396

Option 1 ID : 75189761584

Option 2 ID : 75189761582

Option 3 ID : 75189761583

Option 4 ID : 75189761581

Status : Answered

Chosen Option : 4

Q.92 X people were given a contract for doing a piece of work in 15 days. 3 people did not turn up to work due to sickness, and the rest of the people completed the work in 20 days. What is the value of X?

- Ans**
- 1. 12
 - 2. 14
 - 3. 15
 - 4. 10

Question ID : 75189713328

Option 1 ID : 75189753309

Option 2 ID : 75189753312

Option 3 ID : 75189753310

Option 4 ID : 75189753311

Status : Answered

Chosen Option : 1

Q.93 Which of the following DOES NOT contain covalent bond?

- Ans
- 1. H_2
 - 2. $NaOH$
 - 3. CH_4
 - 4. NH_3

Question ID : 75189712759
Option 1 ID : 75189751033
Option 2 ID : 75189751036
Option 3 ID : 75189751034
Option 4 ID : 75189751035
Status : Answered
Chosen Option : 2

Q.94 The ratio of the ages of Arjun and Dharma is 4 : 5. Four years ago, this ratio was 10 : 13. What will be the ratio of their ages after 3 years?

- Ans
- 1. 9 : 11
 - 2. 7 : 9
 - 3. 5 : 7
 - 4. 8 : 13

Question ID : 75189712834
Option 1 ID : 75189751333
Option 2 ID : 75189751335
Option 3 ID : 75189751336
Option 4 ID : 75189751334
Status : Answered
Chosen Option : 1

Q.95 Select the set in which the numbers are related in the same way as are the numbers of the following sets.

(NOTE: Operations should be performed on the whole numbers, without breaking down the numbers into its constituent digits. E.g. 13 – Operations on 13 such as adding/deleting/multiplying etc. to 13 can be performed. Breaking down 13 into 1 and 3 and then performing mathematical operations on 1 and 3 is not allowed)
(22, 49, 568)
(25, 45, 560)

- Ans
- 1. (30, 15, 225)
 - 2. (15, 33, 240)
 - 3. (18, 27, 225)
 - 4. (33, 38, 568)

Question ID : 75189715191
Option 1 ID : 75189760761
Option 2 ID : 75189760764
Option 3 ID : 75189760763
Option 4 ID : 75189760762
Status : Not Answered
Chosen Option : --

Q.96 This question is based on the five three-digit numbers given below.

423 875 652 246 168

(Example - 697 – First digit = 6, second digit = 9 and third digit = 7)

What will be the resultant, if third digit of the second greatest number is added to the second digit of the smallest number?

- Ans**
- 1. 10
 - 2. 8
 - 3. 11
 - 4. 13

Question ID : 75189715256

Option 1 ID : 75189761022

Option 2 ID : 75189761021

Option 3 ID : 75189761024

Option 4 ID : 75189761023

Status : Answered

Chosen Option : 2

Q.97 Read the given statements and conclusions carefully. Assuming that the information given in the statements is true, even if it appears to be at variance with commonly known facts, decide which of the given conclusions logically follow(s) from the statements.

Statements: 1. Some classical dancers are students.

2. Rama is a classical dancer.

3. Sohan is a student of class X.

Conclusions: (I) Sohan is not a classical dancer.

(II) Rama is a student.

- Ans**
- 1. Only conclusion II follows.
 - 2. Only conclusion I follows.
 - 3. None of the conclusions definitely follow.
 - 4. Both conclusions I and II follow.

Question ID : 75189713601

Option 1 ID : 75189754401

Option 2 ID : 75189754402

Option 3 ID : 75189754404

Option 4 ID : 75189754403

Status : Answered

Chosen Option : 3

Q.98 The nature of the image formed behind the mirror, in case of a convex mirror is _____.

- Ans
- 1. virtual and inverted
 - 2. real and inverted
 - 3. virtual and erect
 - 4. real and erect

Question ID : 75189713748
Option 1 ID : 75189754990
Option 2 ID : 75189754989
Option 3 ID : 75189754992
Option 4 ID : 75189754991
Status : Answered
Chosen Option : 3

Q.99 In a triangle ABC, the lengths of its sides \overline{AB} , \overline{AC} and \overline{BC} are 4 cm, 5 cm and 6 cm, respectively. An angle bisector \overline{AD} is drawn from A onto \overline{BC} , intersecting \overline{BC} at D. Find $m(\overline{BD})$, correct to two places of decimal.

- Ans
- 1. 2.67 cm
 - 2. 1.50 cm
 - 3. 2.25 cm
 - 4. 3.00 cm

Question ID : 75189713469
Option 1 ID : 75189753874
Option 2 ID : 75189753873
Option 3 ID : 75189753875
Option 4 ID : 75189753876
Status : Not Answered
Chosen Option : --

Q.100 On the eve of independence, what was the GDP of India?

- Ans
- 1. ₹270 lakh crore
 - 2. ₹27 lakh crore
 - 3. ₹2.7 lakh crore
 - 4. ₹1 lakh crore

Question ID : 75189715443
Option 1 ID : 75189761770
Option 2 ID : 75189761769
Option 3 ID : 75189761771
Option 4 ID : 75189761772
Status : Not Answered
Chosen Option : --