

**Constable GD in CAPFs and SSF Rifleman GD in AR and Sepoy in NCB Examination 2025**

Exam Date	04/02/2025
Exam Time	3:00 PM - 4:00 PM
Subject	Constable GD Examination 2025

Section : Part-A-General Intelligence and Reasoning

**Q.1** What should come in place of the question mark (?) in the given series?

65 86 114 149 191 ?

- Ans
- 1. 240
  - 2. 216
  - 3. 226
  - 4. 232

**Q.2** What should come in place of the question mark (?) in the given series?

10 11 13 17 25 ?

- Ans
- 1. 42
  - 2. 40
  - 3. 43
  - 4. 41

**Q.3** In a certain code language, 'BIGS' is coded as '4593' and 'SING' is coded as '9432'. What is the code for 'N' in the given code language?

- Ans
- 1. 2
  - 2. 9
  - 3. 4
  - 4. 3

**Q.4** MLTA is related to QHXW in a certain way based on the English alphabetical order. In the same way, LNVB is related to PJZX. To which of the given options is CWON related, following the same logic?

- Ans
- 1. GSJS
  - 2. GASR
  - 3. GSAR
  - 4. GSSJ

**Q.5** What will come in the place of the question mark '?' in the following equation, if '-' and '÷' are interchanged and 'x' and '+' are interchanged?

$8 + 63 - 7 \times 7 \div 9 = ?$

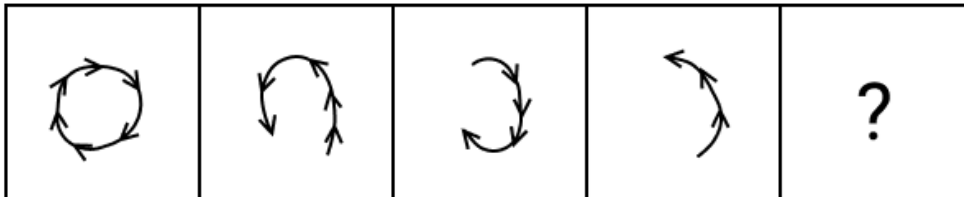
- Ans
- 1. 68
  - 2. 69
  - 3. 70
  - 4. 71

**Q.6** Based on the English alphabetical order, three of the following four letter-clusters are alike in a certain way and thus form a group. Which letter-cluster DOES NOT belong to that group?

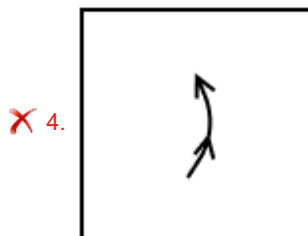
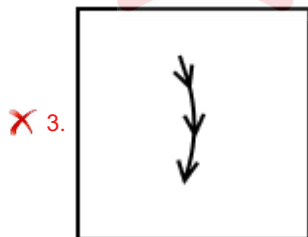
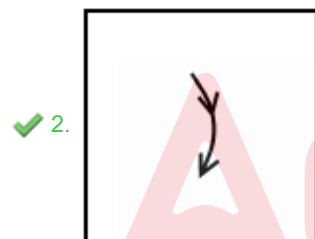
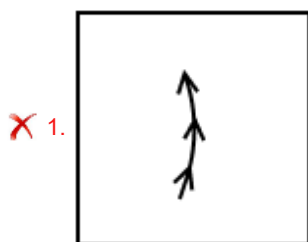
(Note: The odd man out is not based on the number of consonants/vowels or their position in the letter-cluster.)

- Ans**
- 1. NYJ
  - 2. TEP
  - 3. CNY
  - 4. QZK

**Q.7** Identify the figure given in the options which when put in place of the question mark (?) will logically complete the series.



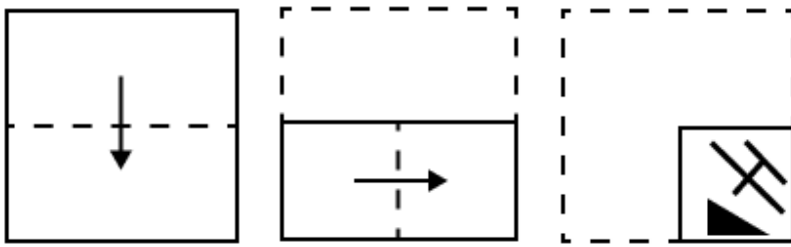
**Ans**



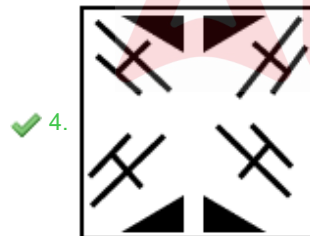
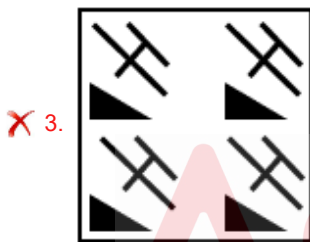
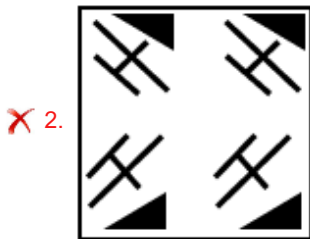
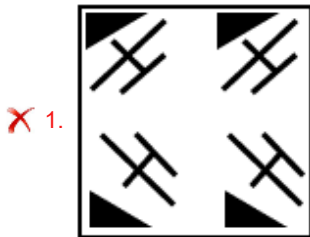
**Q.8** NRDF is related to PMFA in a certain way based on the English alphabetical order. In the same way, SFJW is related to UALR. To which of the given options is GVKQ related, following the same logic?

- Ans**
- 1. IQML
  - 2. RGLB
  - 3. PGKY
  - 4. KRCX

Q.9 A paper is folded and punched as shown below. How will it appear when unfolded?



Ans



Q.10 Read the given statements and conclusions carefully. Assuming that the information given in the statements is true, even if it appears to be at variance with commonly known facts, decide which of the given conclusion(s) logically follow(s) from the statement(s).

Statements:

- All anklets are socks.
- All socks are flats.
- Some flats are trousers.

Conclusions:

- (I) All anklets are flats.
- (II) Some trousers are anklets.

- Ans
- ✓ 1. Only conclusion (I) follows.
  - ✗ 2. Only conclusion (II) follows.
  - ✗ 3. Neither conclusion (I) nor (II) follows.
  - ✗ 4. Both conclusions (I) and (II) follow.

Q.11 In a certain code language,  
'A + B' means 'A is the mother of B',  
'A - B' means 'A is the daughter of B',  
'A x B' means 'A is the son of B' and  
'A ÷ B' means 'A is the brother of B'.

How is F related to C if 'C - D ÷ E x F + G'?

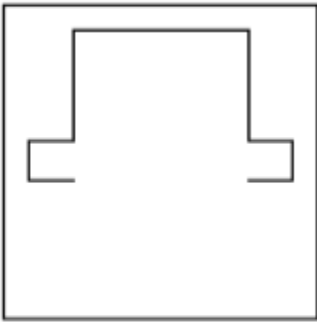
- Ans
- 1. Mother's father
  - 2. Father's mother
  - 3. Daughter's son
  - 4. Father's brother

Q.12 What should come in place of '?' in the given series based on the English alphabetical order?

TKF UJG VIH WHI ?

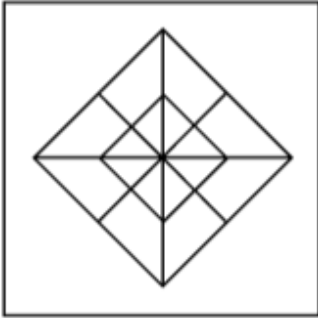
- Ans
- 1. XGJ
  - 2. ZJM
  - 3. XLJ
  - 4. JGX

Q.13 Select the option in which the given figure is embedded (rotation is NOT allowed).

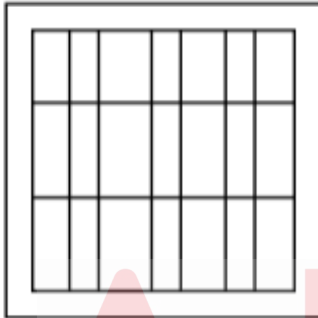


Ans

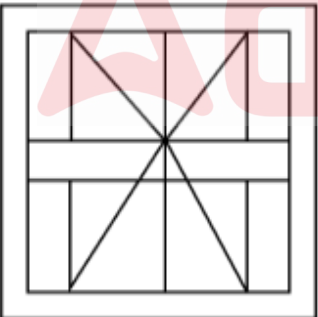
✗ 1.



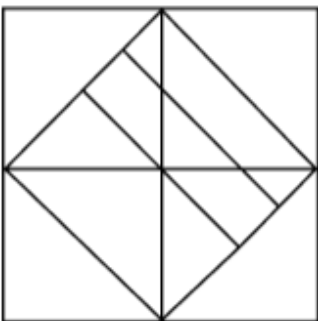
✗ 2.



✓ 3.



✗ 4.



Q.14 In a certain code language, 'TDZM' is coded as '8-24-2-15' and 'KRIY' is coded as '17-10-19-3'. What is the code for 'HAWP' in the given code language?

- Ans
- ✗ 1. 23-25-6-11
  - ✗ 2. 22-9-7-13
  - ✗ 3. 19-8-5-14
  - ✓ 4. 20-27-5-12

Q.15 Select the option that represents the letters that, when sequentially placed from left to right in the blanks below, will complete the letter series.

p \_ \_ u o p q t \_ \_ \_ q \_ u o p q \_ u \_

- Ans
- 1. tquoptto
  - 2. qtouptto
  - 3. qtuoptto
  - 4. tqouptot

Q.16 Seven people, G, H, I, J, K, L and M, are sitting in a row, facing north (but not necessarily in the same order). No one sits to the right of M. Only three people sit between M and K. Only two people sit between K and H. G sits third to the left of L. J sits to the immediate right of L.

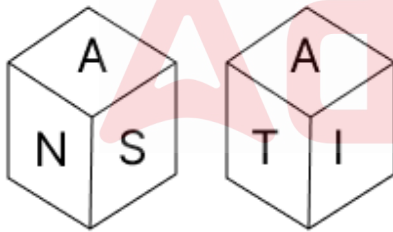
How many people sit between I and H?

- Ans
- 1. One
  - 2. Two
  - 3. Three
  - 4. Four

Q.17 The position(s) of how many letters will remain unchanged if each of the letters in the word VARIABLE is arranged in the reverse English alphabetical order?

- Ans
- 1. Three
  - 2. Four
  - 3. One
  - 4. Two

Q.18 A dice has its faces marked by letters K, A, S, N, T and I. Two positions of the same dice are shown in the given figures. Which face is opposite to face K?



- Ans
- 1. S
  - 2. A
  - 3. N
  - 4. T

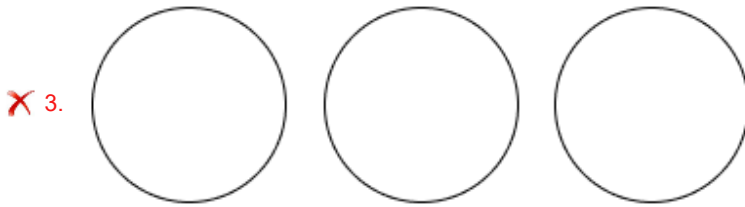
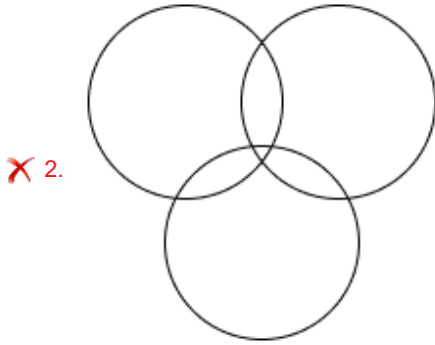
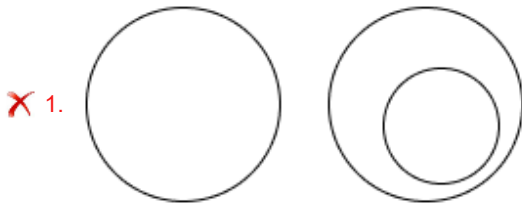
Q.19 Six friends E, F, G, R, S and T are sitting around a circular table facing the centre (but not necessarily in the same order). S sits second to the right of F. F sits second to the right of G. Only F sits between R and E. E is an immediate neighbour of S. How many people sit between T and R when counted from the right of R?

- Ans
- 1. Four
  - 2. One
  - 3. Three
  - 4. Two

Q.20 Select the Venn diagram that best illustrate the relationship between the following classes.

Shirt, Cotton, Denim

Ans



Section : Part-B-General Knowledge and General awareness

Q.1 Who was the most famous Shaka ruler known for his inscription at Girnar?

- Ans
- ✗ 1. Menander
  - ✗ 2. Demetrius
  - ✗ 3. Rudrabhuti
  - ✓ 4. Rudradaman

Q.2 Who was the first President of the All India Muslim League, founded in 1906?

- Ans
- ✗ 1. Sir Sultan Muhammad Shah
  - ✓ 2. Aga Khan III
  - ✗ 3. Muhammad Ali Jinnah
  - ✗ 4. Nawab Salimullah Khan

Q.3 Ali-Aye-Ligang, the spring festival, is observed on the first Wednesday of the Phagun month in the Indian state of \_\_\_\_\_.

- Ans
- ✗ 1. Goa
  - ✓ 2. Assam
  - ✗ 3. Himachal Pradesh
  - ✗ 4. Kerala

Q.4 Name the virus spread by mosquitoes that causes inflammation in the brain?

- Ans
- 1. Lymphatic filariasis
  - 2. Japanese encephalitis
  - 3. Francisella tularensis
  - 4. Yellow fever virus

Q.5 In the game of Basketball, each basket shall consist of a pressure-release NBA-approved metal safety ring \_\_\_\_\_ in inside diameter with a white cord net 18" in length.

- Ans
- 1. 19"
  - 2. 18"
  - 3. 20"
  - 4. 17"

Q.6 Under which amendment of the Constitution of India was Right to Property removed from the list of Fundamental Rights?

- Ans
- 1. 42<sup>nd</sup> Amendment
  - 2. 52<sup>nd</sup> Amendment
  - 3. 61<sup>st</sup> Amendment
  - 4. 44<sup>th</sup> Amendment

Q.7 Who is the Chief Minister of Tamil Nadu as of September 2024?

- Ans
- 1. Bhupendra Patel
  - 2. Nayab Singh Saini
  - 3. MK Stalin
  - 4. Hemant Soren

Q.8 Who among the following was appointed as the Minister of Tribal Affairs in June 2024?

- Ans
- 1. Bhupender Yadav
  - 2. Jual Oram
  - 3. Pralhad Joshi
  - 4. Ashwini Vaishnav

Q.9 Which musical instrument is played by Yella Venkateswara Rao, an Indian classical musician and percussionist?

- Ans
- 1. Nadaswaran
  - 2. Pakhawaj
  - 3. Mridangam
  - 4. Ghatam

Q.10 Which of the following does NOT come under the power of a Governor of a State in India?

- Ans
- 1. Obligatory power
  - 2. Discretionary power
  - 3. Executive power
  - 4. Legislative power

Q.11 Which Five-Year Plan aimed to achieve self-reliance and aimed at 'growth with stability'?

- Ans
- 1. Second Plan
  - 2. Seventh Plan
  - 3. Fourth Plan
  - 4. Sixth Plan



Q.12 Which of the following is a major factor that has facilitated globalisation?

- Ans
- 1. Isolationist policies
  - 2. Rapid improvements in technology
  - 3. Increased tariffs and trade barriers
  - 4. Decline in multinational corporations

Q.13 Who was conferred a gold medal in 1968 by the Mexican government for her choreography?

- Ans
- 1. Rekha
  - 2. Shovana Narayan
  - 3. Rukmini Arundale
  - 4. Mrinalini Sarabhai

Q.14 Which among the following belongs to the tertiary sector of the Indian economy?

- Ans
- 1. Manufacturing
  - 2. Public administration
  - 3. Electricity supply services
  - 4. Forestry

Q.15 As per Census 2011, which of the following streams of migration has the highest percentage?

- Ans
- 1. Rural to urban
  - 2. Urban to urban
  - 3. Urban to rural
  - 4. Rural to rural

Q.16 Who among the following launched the nationwide programme of Fit India Freedom Run 2.0?

- Ans
- 1. Anurag Thakur
  - 2. Draupadi Murmu
  - 3. Narendra Modi
  - 4. Amit Shah

Q.17 'Natyashashtra', the earliest text dealing with performing arts (dances and music), was compiled by which sage?

- Ans
- 1. Sakya
  - 2. Valmiki
  - 3. Agastya
  - 4. Bharata

Q.18 For a book of mass  $m$ , moving a distance  $d$  on a smooth horizontal table, the work done due gravitational force is:

- Ans
- 1.  $md$
  - 2.  $mgd$
  - 3. 0
  - 4.  $m d \cos \theta$

Q.19 Dhivehi is the official language of which neighbouring country of India?

- Ans
- 1. Maldives
  - 2. Myanmar
  - 3. Bhutan
  - 4. Sri Lanka

Q.20 Which of the following is the saltiest water body bordering Jordan in the east and Israel in the west?

- Ans
- 1. World Ocean
  - 2. Dead Sea
  - 3. Great Salt Lake
  - 4. Don Juan Pond

Section : Part-C-Elementary Mathematics

Q.1 If the marked price of an article is ₹7,895 and the discount offered is 4.2%, then the selling price (in ₹) is:

- Ans
- 1. 7,563.41
  - 2. 7,635.41
  - 3. 7,456.31
  - 4. 7,364.51

Q.2 The LCM of 56, 30, 108 and 120 is:

- Ans
- 1. 7471
  - 2. 7560
  - 3. 7660
  - 4. 7549

Q.3 The ratio between two numbers is 19 : 24. If each number is reduced by 36, the ratio becomes 3 : 4. Find the sum of the numbers.

- Ans
- 1. 387
  - 2. 305
  - 3. 238
  - 4. 295

Q.4 Ritu and Mona can finish painting a house together in 18 days. Ritu alone would take 27 days to finish the painting. How long will it take Mona to finish the painting on her own?

- Ans
- 1. 65 days
  - 2. 60 days
  - 3. 44 days
  - 4. 54 days

Q.5 If the cost price of a camera is 75% of its selling price, then the profit per cent is:

- Ans
- 1.  $33\frac{1}{3}\%$
  - 2. 25%
  - 3.  $16\frac{2}{3}\%$
  - 4. 24%

Q.6 The average score of 7 players was initially recorded as 55. However, it was later discovered that a score of 35 had been mistakenly read as 53. Determine the correct average score.(Rounded up to two decimal places)

- Ans
- 1. 54.31
  - 2. 32.43
  - 3. 52.43
  - 4. 42.08

Q.7 The average age of 54 students of a class is 37 years. If the age of the teacher is also included, the average age of the whole group becomes 38 years. The age (in years) of the teacher is:

- Ans
- 1. 92
  - 2. 95
  - 3. 97
  - 4. 90

Q.8 A gun is fired at a distance of 1.35 km from Mukul. She hears the sound after three seconds. The speed (in m/s) at which sound travels is:

- Ans
- 1. 500
  - 2. 450
  - 3. 675
  - 4. 525

Q.9 Vijay has ₹1224 with him. He divided it amongst his sons Ajay and Prakash and asked them to invest it at 4% rate of interest compounded annually. It was seen that Ajay and Prakash got same amount after 18 and 19 years respectively. How much (in ₹) did Vijay give to Prakash?

- Ans
- 1. 450
  - 2. 724
  - 3. 624
  - 4. 600

Q.10 The simple interest on a principal amount (in ₹) is ₹318 for a period of 2 years at the rate of 6% per annum. The principal amount (in ₹) is:

- Ans
- 1. 2651
  - 2. 2650
  - 3. 2655
  - 4. 2656

Q.11 400 apples were bought at ₹1200 per hundred and were sold at a profit of ₹800. Find the selling price (in ₹) per dozen of apples.

- Ans
- 1. 158
  - 2. 168
  - 3. 183
  - 4. 178

Q.12 If 4% of  $x = 72$ , then  $x$  is equal to:

- Ans
- 1. 1900
  - 2. 3700
  - 3. 1800
  - 4. 3600

Q.13 The amount of money earned on a job is directly proportional to the number of hours worked. If ₹324 is earned in 6 hours, then how much money (in ₹) will be earned in 29 hours of work?

- Ans
- 1. ₹1,676
  - 2. ₹1,566
  - 3. ₹1,655
  - 4. ₹1,585

**Q.14** The speed of a stream is 9 km/h. A boat can go 56 km downstream and 28 km upstream in 7 hours. What is the speed (in km/h) of the boat in still water?

- Ans**
- 1. 16
  - 2. 20
  - 3. 9
  - 4. 15

**Q.15** If the radius of a sphere is tripled, what is the ratio of the volume of the original sphere to that of the new sphere?

- Ans**
- 1. 9 : 1
  - 2. 27 : 1
  - 3. 1 : 27
  - 4. 1 : 9

**Q.16** Mahesh has ₹1617 with him. He divided it amongst his sons Vijay and Ajay and asked them to invest it at 10% rate of interest compounded annually. It was seen that Vijay and Ajay got same amount after 13 and 14 years respectively. How much (in ₹) did Mahesh give to Vijay?

- Ans**
- 1. 870
  - 2. 697
  - 3. 770
  - 4. 847

**Q.17** Find the HCF of 153, 117 and 405.

- Ans**
- 1. 9
  - 2. 12
  - 3. 6
  - 4. 2

**Q.18** LCM and HCF of two numbers are 66 and 11 respectively. If one of the numbers is 33, then find the other number.

- Ans**
- 1. 20
  - 2. 19
  - 3. 22
  - 4. 25

**Q.19** The price of fuel decreases by 40%, 10% and 50% in three successive months, but increases by 50% in the fourth month. What is the percentage increase/decrease in the price of fuel in the fourth month as compared to its original price?

- Ans**
- 1. Increases by 57.3%
  - 2. Decreases by 59.5%
  - 3. Increases by 56.29%
  - 4. Decreases by 61.17%

**Q.20** Find the value of  $\left[ (23 \times 5) \times \left\{ 6 \div 6 \times \frac{(18 - 14)}{4} \right\} \right]$

- Ans**
- 1. 104
  - 2. 96
  - 3. 106
  - 4. 115

Q.1 Select the word that best completes the given sentence. Determine the collocation through the sentence.

Varun, the chef, \_\_\_\_\_ up a delicious meal in just 30 minutes.

- Ans
- 1. whipped
  - 2. held
  - 3. kept
  - 4. hit

Q.2 Select the most appropriate option that can substitute the underlined segment in the given sentence.

She always do her work in time.

- Ans
- 1. always doing
  - 2. always will done
  - 3. always does
  - 4. always done

Q.3 Select the INCORRECTLY spelt word in the given sentence.

The atmosphere at the consert was electric.

- Ans
- 1. consert
  - 2. was
  - 3. atmosphere
  - 4. electric

Q.4 Select the sentence with an error in the adverb used.

- Ans
- 1. The solution was applied so effective that it resolved the issue immediately.
  - 2. They performed the task surprisingly well despite the challenges.
  - 3. She had scarcely begun her speech when the microphone failed.
  - 4. He spoke softly enough to avoid waking the baby.

Q.5 Select the most appropriate ANTONYM of the underlined word in the following sentence to fill in the blank.

The police thought that the theft was deliberate, but it was \_\_\_\_\_.

- Ans
- 1. expected
  - 2. prepared
  - 3. planned
  - 4. unintentional

Q.6 Select the most appropriate synonym of the given word.

Strange

- Ans
- 1. Mild
  - 2. Odd
  - 3. Stable
  - 4. Safe

Q.7 Select the most appropriate synonym of the underlined word.

The vintage bag was made of coarse black leather.

- Ans
- 1. Brief
  - 2. Rough
  - 3. Secure
  - 4. Honest

Q.8 Select the most appropriate option to fill in the blank.

She is the one \_\_\_\_\_ won the award.

- Ans
- 1. which
  - 2. whose
  - 3. who
  - 4. whom

Q.9 Select the most appropriate ANTONYM of the given word.

Esoteric

- Ans
- 1. Cryptic
  - 2. Arcane
  - 3. Common
  - 4. Abstruse

Q.10 Select the most appropriate option to fill in the blank.

She decided to go on a/an \_\_\_\_\_ vacation.

- Ans
- 1. tropic
  - 2. notorious
  - 3. expandable
  - 4. recreational

Q.11 Select the correct spelling of the underlined incorrectly spelt word in the given sentence.

The next generation has become well-travelled, tech-savvy and hardworking.

- Ans
- 1. tech-savvy
  - 2. tech-savee
  - 3. tec-savvy
  - 4. tech-saivy

Q.12 Select the most appropriate meaning of the given idiom.

Bide one's time

- Ans
- 1. To face a difficult situation with courage and determination
  - 2. To join a popular trend or activity
  - 3. To wait patiently for an opportunity
  - 4. To accidentally reveal a secret

Q.13 Identify the sentence with the INCORRECT usage of an adverb.

- Ans
- 1. We are hardly ever late for work.
  - 2. They are usually late for work.
  - 3. Mahesh and Mukesh are always late for work.
  - 4. Chandni is late often for work.

**Q.14** Select the most appropriate option to fill in the blank.

The project manager's \_\_\_\_\_ approach ensured that every aspect of the project was meticulously planned and executed.

- Ans**
- 1. methodical
  - 2. erratic
  - 3. negligent
  - 4. lax

**Q.15** Select the most appropriate ANTONYM of the given word.

**Abate**

- Ans**
- 1. Reduce
  - 2. Intensify
  - 3. Supply
  - 4. Consume

**Comprehension:**

In the following passage, some words have been deleted. Read the passage carefully and select the most appropriate option to fill in each blank.

Effective communication in the digital age (1)\_\_\_\_\_ proper etiquette. Responding (2)\_\_\_\_\_ to emails and messages is a sign of professionalism. However, being (3)\_\_\_\_\_ of the tone used is equally important. Misunderstandings can arise easily in written communication. Balancing (4)\_\_\_\_\_ and courtesy ensures meaningful interactions, (5)\_\_\_\_\_ positive relationships in both personal and professional spheres.

**SubQuestion No : 16**

**Q.16** Select the most appropriate option to fill in blank number 1.

- Ans**
- 1. is natural
  - 2. require
  - 3. requires
  - 4. is fitting

**Comprehension:**

In the following passage, some words have been deleted. Read the passage carefully and select the most appropriate option to fill in each blank.

Effective communication in the digital age (1)\_\_\_\_\_ proper etiquette. Responding (2)\_\_\_\_\_ to emails and messages is a sign of professionalism. However, being (3)\_\_\_\_\_ of the tone used is equally important. Misunderstandings can arise easily in written communication. Balancing (4)\_\_\_\_\_ and courtesy ensures meaningful interactions, (5)\_\_\_\_\_ positive relationships in both personal and professional spheres.

**SubQuestion No : 17**

**Q.17** Select the most appropriate option to fill in blank number 2.

- Ans**
- 1. promptly
  - 2. hurry
  - 3. gradually
  - 4. carelessly

**Comprehension:**

In the following passage, some words have been deleted. Read the passage carefully and select the most appropriate option to fill in each blank.

Effective communication in the digital age (1)\_\_\_\_\_ proper etiquette. Responding (2)\_\_\_\_\_ to emails and messages is a sign of professionalism. However, being (3)\_\_\_\_\_ of the tone used is equally important. Misunderstandings can arise easily in written communication. Balancing (4)\_\_\_\_\_ and courtesy ensures meaningful interactions, (5)\_\_\_\_\_ positive relationships in both personal and professional spheres.

**SubQuestion No : 18**

**Q.18** Select the most appropriate option to fill in blank number 3.

- Ans**  1. mindful  
 2. indiscreet  
 3. watch  
 4. heedless

**Comprehension:**

In the following passage, some words have been deleted. Read the passage carefully and select the most appropriate option to fill in each blank.

Effective communication in the digital age (1)\_\_\_\_\_ proper etiquette. Responding (2)\_\_\_\_\_ to emails and messages is a sign of professionalism. However, being (3)\_\_\_\_\_ of the tone used is equally important. Misunderstandings can arise easily in written communication. Balancing (4)\_\_\_\_\_ and courtesy ensures meaningful interactions, (5)\_\_\_\_\_ positive relationships in both personal and professional spheres.

**SubQuestion No : 19**

**Q.19** Select the most appropriate option to fill in blank number 4.

- Ans**  1. brightness  
 2. sharpness  
 3. clarity  
 4. visibility

**Comprehension:**

In the following passage, some words have been deleted. Read the passage carefully and select the most appropriate option to fill in each blank.

Effective communication in the digital age (1)\_\_\_\_\_ proper etiquette. Responding (2)\_\_\_\_\_ to emails and messages is a sign of professionalism. However, being (3)\_\_\_\_\_ of the tone used is equally important. Misunderstandings can arise easily in written communication. Balancing (4)\_\_\_\_\_ and courtesy ensures meaningful interactions, (5)\_\_\_\_\_ positive relationships in both personal and professional spheres.

**SubQuestion No : 20**

**Q.20** Select the most appropriate option to fill in blank number 5.

- Ans**  1. suppressing  
 2. combating  
 3. impeding  
 4. fostering

**Section : Part-D-Hindi**

**Q.1** भारत गुटों से अलग रहने वाले देशों में शामिल है। 'गुटों से अलग रहने वाले' वाक्यांश के स्थान पर उचित शब्द होगा -

- Ans**  1. स्वतंत्र  
 2. विकासशील  
 3. सापेक्ष  
 4. तटस्थ



Q.2 सरल वाक्य -'दुर्भाग्य से वह परीक्षा में बैठ न सका।' निम्नलिखित विकल्पों में से इस वाक्य के लिए कौन सा एक उचितसंयुक्त वाक्य होगा?

- Ans
- ✓ 1. उसका दुर्भाग्य था और इसलिए वह परीक्षा में बैठ न सका।
  - ✗ 2. उसका दुर्भाग्य कि परीक्षा में बैठ न सका।
  - ✗ 3. उसका दुर्भाग्य था और परीक्षा में पास न हुआ।
  - ✗ 4. इसलिए वह परीक्षा में उसका दुर्भाग्य था और बैठ न सका।

Q.3 निम्न में से किस वाक्य में सम्बन्धवाचक सर्वनाम नहीं है?

- Ans
- ✗ 1. जिसकी लाठी उसकी भैंस।
  - ✓ 2. उसने कुछ नहीं खाया।
  - ✗ 3. वह कौन है जो जा रहा है।
  - ✗ 4. जो सोएगा सो खोएगा।

Q.4 दिए गए वाक्यांश के लिए एक शब्द होगा किसी शुभ कार्य को विधि विधान और श्रद्धापूर्वक करना

- Ans
- ✗ 1. अर्चना
  - ✗ 2. श्राद्ध
  - ✗ 3. यज्ञ
  - ✓ 4. अनुष्ठान

Q.5 'हाथ का मैल होना' मुहावरे का सही अर्थ इनमें से क्या होगा?

- Ans
- ✗ 1. अत्यंत खट्टा होना
  - ✗ 2. अत्यंत बड़ा होना
  - ✓ 3. अत्यंत तुच्छ होना
  - ✗ 4. अत्यंत मीठा होना

Q.6 'आपने चाय-वाय पी ली होगी।' वाक्य में प्रयुक्त चाय-वाय किस प्रकार का शब्द युग्म है ?

- Ans
- ✗ 1. पर्यायवाची
  - ✗ 2. एकार्थी-अनेकार्थी
  - ✓ 3. सार्थक-निरर्थक
  - ✗ 4. विलोम शब्द

Q.7 'आसक्ति' का उपयुक्त एकार्थक शब्द है -

- Ans
- ✗ 1. घृणा
  - ✓ 2. गहरी चाह
  - ✗ 3. निपुण
  - ✗ 4. कुशल

Q.8 'यहाँ किसी को भी इस कार्यालय का पता मालूम नहीं है।' उपरोक्त वाक्य में वर्तनी सम्बन्धी अशुद्धि है। इसके शुद्ध रूप का चयन करें-

- Ans
- ✗ 1. यहाँ किसी को भी इस कार्यालये का पता मालूम नहीं है।
  - ✗ 2. यहाँ किसी को भी इस कार्यालय का पता मलूम नहीं है।
  - ✓ 3. यहाँ किसी को भी इस कार्यालय का पता मालूम नहीं है।
  - ✗ 4. यहाँ किसी को भी इस कर्यालय का पता मालूम नहीं है।

Q.9 दिए गए शब्द का सही पर्यायवाची शब्द पहचानिए -  
ब्रह्मा

- Ans
- ✓ 1. लोकेश
  - ✗ 2. पशुपति
  - ✗ 3. नीलकंठ
  - ✗ 4. महेश्वर

Q.10 निम्नलिखित वाक्य को ध्यानपूर्वक पढ़ें और बताएं कि चिह्नित वाक्यांश में किस प्रकार की त्रुटि है?

वह बहुत ज्ञानी व्यक्ति है। उसने अनेकों ग्रन्थों की रचना की है।

- Ans
- 1. लिंग
  - 2. अव्यय
  - 3. विशेषण
  - 4. वचन

Q.11 'सारे कलाकार ऊपर हैं।' उपर्युक्त वाक्य का सम्बन्ध किस क्रिया-विशेषण से है?

- Ans
- 1. स्थानवाचक क्रिया-विशेषण
  - 2. कालवाचक क्रिया-विशेषण
  - 3. रीतिवाचक क्रिया-विशेषण
  - 4. परिमाणवाचक क्रिया-विशेषण

Q.12 'जलजीवन' पर्याय है-

- Ans
- 1. पानी का
  - 2. नदी का
  - 3. समुद्र का
  - 4. मछली का

Q.13 दिए गए वाक्य में शब्द या वाक्य खण्ड को बदलिए।

मेरे पीछे आप आये।

- Ans
- 1. मेरे पीछे ही आप आये।
  - 2. आप आये मेरे पीछे।
  - 3. मेरे बाद आप आये।
  - 4. मेरे आने के पीछे आप आये।

Q.14 निम्नलिखित विकल्पों में से कौन सा एक विलोम युग्म सही नहीं है?

- Ans
- 1. खग-मृग
  - 2. गमन-लाघव
  - 3. गुप्त-प्रकट
  - 4. गमन-आगमन

Q.15 'रिधिमा आज अपने घर-वर गयी होगी।' वाक्य में प्रयुक्त घर-वर किस प्रकार के शब्द युग्म के अंतर्गत आएँगे?

- Ans
- 1. सार्थक सार्थक
  - 2. निरर्थक निरर्थक
  - 3. शब्द विलोम
  - 4. सार्थक निरर्थक

**Comprehension:**

गद्यांश के आधार पर प्रश्न का उत्तर दें।

महात्मा ज्योतिबा फुले के मौलिक विचार 'गुलामगिरी 'शेखकरयांचा आसूड ' [किसानों का प्रतिरोध ] 'सार्वजनिक सत्य धर्म ' आदि पुस्तकों में संगृहित है। उनके विचार अपने समय से बहुत आगे थे। आदर्श परिवार के बारे में उनकी अवधारणा है –'जिस परिवार में पिता बौद्ध , माता ईसाई , बेटी मुसलमान और बेटा सत्यधर्मी हो , वह परिवार एक आदर्श परिवार है। 1888 में जब ज्योतिबा फुले को 'महात्मा' की उपाधि से सम्मानित किया गया तो उन्होंने कहा –"मुझे महात्मा कहकर मेरे संघर्ष को पूर्णविराम मत दीजिए। जब व्यक्ति मठाधीश बन जाता है तब वह संघर्ष नहीं कर सकता। इसलिए आप सब साधारण जन ही रहने दें , मुझे अपने बीच से अलग न करें।"महात्मा ज्योतिबा फुले की सबसे बड़ी विशेषता यह थी कि वे कहते थे, उसे अपने आचरण और व्यवहार में उतारते थे।

**SubQuestion No : 16**

**Q.16** महात्मा फुले के अनुसार –'जिस परिवार में पिता बौद्ध, माता ईसाई, बेटी मुसलमान और बेटा सत्यधर्मी हो, उस परिवार को किस प्रकार के परिवार की संज्ञा दी है?

- Ans**
- 1. परिपूर्ण परिवार
  - 2. शिक्षित परिवार
  - 3. स्वतंत्र परिवार
  - 4. आदर्श परिवार

**Comprehension:**

गद्यांश के आधार पर प्रश्न का उत्तर दें।

महात्मा ज्योतिबा फुले के मौलिक विचार 'गुलामगिरी 'शेखकरयांचा आसूड ' [किसानों का प्रतिरोध ] 'सार्वजनिक सत्य धर्म ' आदि पुस्तकों में संगृहित है। उनके विचार अपने समय से बहुत आगे थे। आदर्श परिवार के बारे में उनकी अवधारणा है –'जिस परिवार में पिता बौद्ध , माता ईसाई , बेटी मुसलमान और बेटा सत्यधर्मी हो , वह परिवार एक आदर्श परिवार है। 1888 में जब ज्योतिबा फुले को 'महात्मा' की उपाधि से सम्मानित किया गया तो उन्होंने कहा –"मुझे महात्मा कहकर मेरे संघर्ष को पूर्णविराम मत दीजिए। जब व्यक्ति मठाधीश बन जाता है तब वह संघर्ष नहीं कर सकता। इसलिए आप सब साधारण जन ही रहने दें , मुझे अपने बीच से अलग न करें।"महात्मा ज्योतिबा फुले की सबसे बड़ी विशेषता यह थी कि वे कहते थे, उसे अपने आचरण और व्यवहार में उतारते थे।

**SubQuestion No : 17**

**Q.17** 'महात्मा' शब्द में किस संधि का प्रयोग हुआ है?

- Ans**
- 1. महा+आत्मा
  - 2. मह+आत्मा
  - 3. महा+अत्मा
  - 4. महात्म+आ

**Comprehension:**

गद्यांश के आधार पर प्रश्न का उत्तर दें।

महात्मा ज्योतिबा फुले के मौलिक विचार 'गुलामगिरी 'शेखकरयांचा आसूड ' [किसानों का प्रतिरोध ] 'सार्वजनिक सत्य धर्म ' आदि पुस्तकों में संगृहित है। उनके विचार अपने समय से बहुत आगे थे। आदर्श परिवार के बारे में उनकी अवधारणा है –'जिस परिवार में पिता बौद्ध , माता ईसाई , बेटी मुसलमान और बेटा सत्यधर्मी हो , वह परिवार एक आदर्श परिवार है। 1888 में जब ज्योतिबा फुले को 'महात्मा' की उपाधि से सम्मानित किया गया तो उन्होंने कहा –"मुझे महात्मा कहकर मेरे संघर्ष को पूर्णविराम मत दीजिए। जब व्यक्ति मठाधीश बन जाता है तब वह संघर्ष नहीं कर सकता। इसलिए आप सब साधारण जन ही रहने दें , मुझे अपने बीच से अलग न करें।"महात्मा ज्योतिबा फुले की सबसे बड़ी विशेषता यह थी कि वे कहते थे, उसे अपने आचरण और व्यवहार में उतारते थे।

**SubQuestion No : 18**

**Q.18** महात्मा फुले को 'महात्मा' की उपाधि से कब सम्मानित किया गया?

- Ans**
- 1. 1888
  - 2. 1886
  - 3. 1887
  - 4. 1889

**Comprehension:**

गद्यांश के आधार पर प्रश्न का उत्तर दें।

महात्मा ज्योतिबा फुले के मौलिक विचार 'गुलामगिरी 'शेखकरयांचा आसूड ' [किसानों का प्रतिरोध ] 'सार्वजनिक सत्य धर्म ' आदि पुस्तकों में संगृहित है। उनके विचार अपने समय से बहुत आगे थे। आदर्श परिवार के बारे में उनकी अवधारणा है – 'जिस परिवार में पिता बौद्ध , माता ईसाई , बेटी मुसलमान और बेटा सत्यधर्मी हो , वह परिवार एक आदर्श परिवार है। 1888 में जब ज्योतिबा फुले को 'महात्मा' की उपाधि से सम्मानित किया गया तो उन्होंने कहा – "मुझे महात्मा कहकर मेरे संघर्ष को पूर्णविराम मत दीजिए। जब व्यक्ति मठाधीश बन जाता है तब वह संघर्ष नहीं कर सकता। इसलिए आप सब साधारण जन ही रहने दें , मुझे अपने बीच से अलग न करें।" महात्मा ज्योतिबा फुले की सबसे बड़ी विशेषता यह थी कि वे कहते थे, उसे अपने आचरण और व्यवहार में उतारते थे।

**SubQuestion No : 19**

**Q.19** ज्योतिबा फुले की सबसे बड़ी क्या विशेषता थी?

- Ans**
- 1. जो देखते थे वही अपने आचरण एवं व्यवहार में उतारते थे।
  - 2. जो सुनते थे वही अपने आचरण एवं व्यवहार में उतारते थे।
  - 3. जो कहते थे वही अपने आचरण एवं व्यवहार में उतारते थे।
  - 4. जो कहते थे वह अपने आचरण एवं व्यवहार में कभी नहीं उतारते थे।

**Comprehension:**

गद्यांश के आधार पर प्रश्न का उत्तर दें।

महात्मा ज्योतिबा फुले के मौलिक विचार 'गुलामगिरी 'शेखकरयांचा आसूड ' [किसानों का प्रतिरोध ] 'सार्वजनिक सत्य धर्म ' आदि पुस्तकों में संगृहित है। उनके विचार अपने समय से बहुत आगे थे। आदर्श परिवार के बारे में उनकी अवधारणा है – 'जिस परिवार में पिता बौद्ध , माता ईसाई , बेटी मुसलमान और बेटा सत्यधर्मी हो , वह परिवार एक आदर्श परिवार है। 1888 में जब ज्योतिबा फुले को 'महात्मा' की उपाधि से सम्मानित किया गया तो उन्होंने कहा – "मुझे महात्मा कहकर मेरे संघर्ष को पूर्णविराम मत दीजिए। जब व्यक्ति मठाधीश बन जाता है तब वह संघर्ष नहीं कर सकता। इसलिए आप सब साधारण जन ही रहने दें , मुझे अपने बीच से अलग न करें।" महात्मा ज्योतिबा फुले की सबसे बड़ी विशेषता यह थी कि वे कहते थे, उसे अपने आचरण और व्यवहार में उतारते थे।

**SubQuestion No : 20**

**Q.20** उपर्युक्त गद्यांश का उचित शीर्षक होगा?

- Ans**
- 1. ज्योतिबा फुले के राजनीतिक विचार
  - 2. ज्योतिबा फुले के जाति सम्बन्धी विचार
  - 3. ज्योतिबा फुले के आदर्श विचार
  - 4. ज्योतिबा फुले के नारी सम्बन्धी विचार