

Constable GD in CAPFs and SSF Rifleman GD in AR and Sepoy in NCB Examination 2025

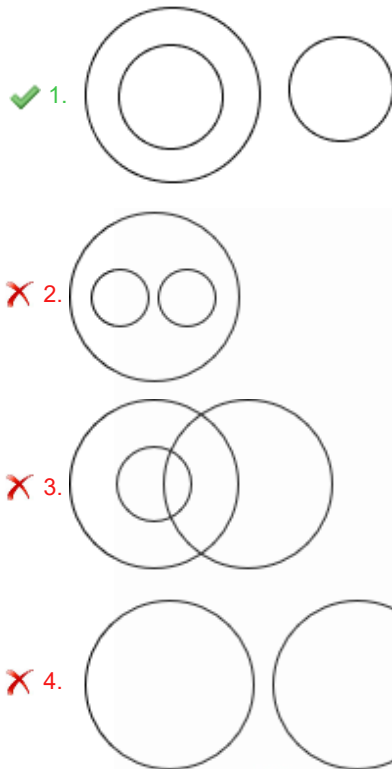
Exam Date	11/02/2025
Exam Time	9:00 AM - 10:00 AM
Subject	Constable GD Examination 2025

Section : Part-A-General Intelligence and Reasoning

Q.1 Select the Venn diagram that best illustrates the relationship between the following classes.

Males, Fathers, Females

Ans



Q.2 Read the given statements and conclusions carefully. Assuming that the information given in the statements is true, even if it appears to be at variance with commonly known facts, decide which of the given conclusions logically follow(s) from the statements.

Statements:

No almond is a date.

No date is a raisin.

No date is a cherry.

Conclusions:

(I): No almond is a raisin.

(II): Some cherries are raisins.

- Ans
- 1. Only conclusion (I) follows.
 - 2. Neither conclusion (I) nor (II) follows.
 - 3. Both conclusions (I) and (II) follow.
 - 4. Only conclusion (II) follows.

Q.3 What will come in the place of the question mark '?' in the following equation, if '+' and 'x' are interchanged and '+' and '-' are interchanged?

$$27 - 6 \div 4 + 24 \times 3 = ?$$

- Ans
- 1. 46
 - 2. 44
 - 3. 45
 - 4. 43

Q.4 In a certain code language, 'we like trees' is coded as 'bv mn fd' and 'trees like water' is coded as 'bv cx fd'. How is 'we' coded in the given language?

- Ans**
- 1. bv
 - 2. cx
 - 3. mn
 - 4. fd

Q.5 What should come in place of (?) in the given series based on the English alphabetical order?

OAS, QCU, SEW, UGY, ?

- Ans**
- 1. WHB
 - 2. WIA
 - 3. VJB
 - 4. VHZ

Q.6 What should come in place of the question mark (?) in the given series?

195 175 150 120 85 ?

- Ans**
- 1. 45
 - 2. 30
 - 3. 36
 - 4. 40

Q.7 Each letter in the word HARMFUL is arranged in the English alphabetical order. How many letters are there in the English alphabetical order between the letter which is third from the left end and the one which is third from the right end in the new letter-cluster thus formed?

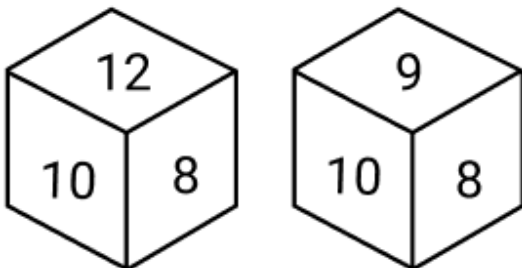
- Ans**
- 1. 4
 - 2. 5
 - 3. 7
 - 4. 3

Q.8 Select the combination of letters that when sequentially placed in the blanks of the given series will complete the series.

E _ _ MXEGL _ _ _ GLM _ E _ _ MX

- Ans**
- 1. GLMXEXGL
 - 2. GMLXEXGL
 - 3. GLMXEGXL
 - 4. MGLXEXGL

Q.9 Two different positions of the same dice are given below. Which is the number on the face opposite to the face containing 12?



- Ans**
- 1. 11
 - 2. 9
 - 3. 8
 - 4. 7

Q.10 In a certain code language,

'A + B' means 'A is the daughter of B',

'A - B' means 'A is the brother of B',

'A × B' means 'A is the wife of B' and

'A ÷ B' means 'A is the father of B.'

Based on the above, how is P related to T if 'P + Q ÷ R - S × T'?

Ans 1. Wife's sister

2. Sister

3. Wife's mother

4. Mother

Q.11 Seven people, E, F, G, H, K, L and M are sitting in a row, facing north (but not necessarily in the same order). No one sits to the left of E. Only four people sit between E and G. Only three people sit to the right of F. L sits to the immediate left of M. K is not an immediate neighbour of F. Who sits at the rightmost end of the line?

Ans 1. M

2. G

3. K

4. E

Q.12 NAVI is related to QCYK in a certain way based on the English alphabetical order. In the same way, ZIHQ is related to CKKS. To which of the given options is IOQW related, following the same logic?

Ans 1. LTYQ

2. LOIU

3. LQTY

4. LQYT

Q.13 Select the figure from among the given options that can replace the question mark (?) in the following series.

H	θ	j	j	τ	H	H	θ	j	j	τ	H	?
p	τ	●	●	θ	p	p	τ	●	●	θ	p	

Ans

✗ 1.

H	τ	θ
p	●	j

✗ 2.

p	θ	j
H	τ	●

✓ 3.

H	θ	j
p	τ	●

✗ 4.

H	τ	●
p	θ	j

Q.14 Based on the English alphabetical order, three of the following four letter-clusters are alike in a certain way and thus form a group. Which letter-cluster DOES NOT belong to that group?

(Note: The odd man out is not based on the number of consonants/vowels or their position in the letter-cluster.)

Ans

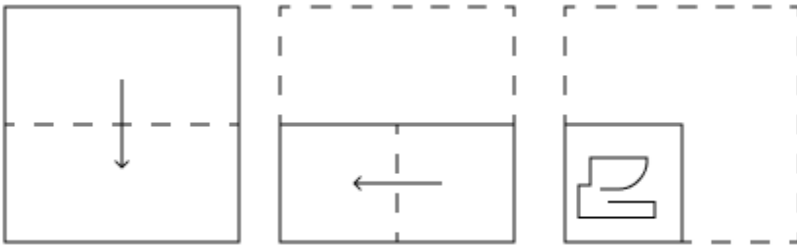
✗ 1. HEI

✗ 2. QNR

✓ 3. DBE

✗ 4. GDH

Q.15 A paper is folded and punched as shown below. How will it appear when unfolded?



Ans

- ✗ 1.
- ✓ 2.
- ✗ 3.
- ✗ 4.

Q.16 Six people, Q, R, S, T, U and Y, are sitting around a circular table facing the centre (but not necessarily in the same order). Only one person sits between Q and Y when counted from the left of Y. Y sits third to the left of R. U sits to the immediate right of Y. S is not an immediate neighbour of Y. How many people sit between S and T when counted from the right of S?

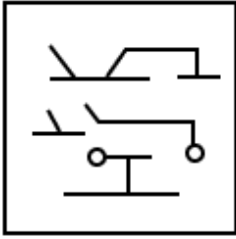
- ✓ 1. Two
- ✗ 2. Three
- ✗ 3. One
- ✗ 4. Four

Q.17 Select the option figure in which the given figure is embedded as its part (rotation is NOT allowed).

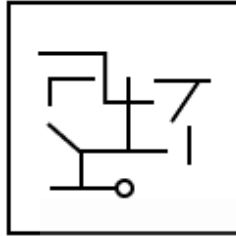


Ans

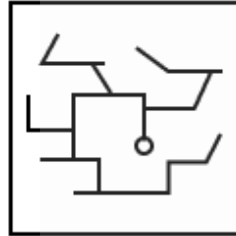
✗ 1.



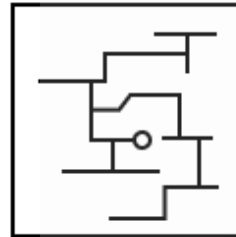
✗ 2.



✗ 3.



✓ 4.



Q.18 EWHO is related to HZKR in a certain way based on the English alphabetical order. In the same way, OPQM is related to RSTP. To which of the given options is LTOG related, following the same logic?

- Ans
- ✓ 1. OWRJ
 - ✗ 2. OQRD
 - ✗ 3. IQLD
 - ✗ 4. IWLJ

Q.19 What should come in place of the question mark (?) in the given series?

901 888 902 887 903 886 904 ?

- Ans
- ✓ 1. 885
 - ✗ 2. 884
 - ✗ 3. 886
 - ✗ 4. 905

Q.20 In a certain code language 'XEKP' is coded as '6-25-19-14' and 'UBHW' is coded as '9-28-22-7'. What is the code for 'QCJR' in the given language?

- Ans
- ✗ 1. 12-25-19-11
 - ✗ 2. 14-28-22-10
 - ✓ 3. 13-27-20-12
 - ✗ 4. 10-23-19-9

Q.1 Who among the following was the founder of Bahishkrit Hitkarini Sabha (Society for Welfare of the Ostracized)?

- Ans
- 1. Atmaram Pandurang
 - 2. Dr. Rajendra Prasad
 - 3. Dr. BR Ambedkar
 - 4. Rabindranath Tagore

Q.2 As per Sample Registration System 2020, what is the infant death rate in India?

- Ans
- 1. 28 per thousand live births
 - 2. 19 per thousand live births
 - 3. 44 per thousand live births
 - 4. 31 per thousand live births

Q.3 Which experiment is Ernest Rutherford well known for performing in 1911?

- Ans
- 1. Oil drop experiment
 - 2. Plum pudding experiment
 - 3. Double-slit experiment
 - 4. Gold foil experiment

Q.4 What was the proposed status of RGNIYD (Rajiv Gandhi National Institute of Youth Development)?

- Ans
- 1. International Youth Organisation
 - 2. Deemed National Youth University
 - 3. Regional Youth Development Centre
 - 4. Central University

Q.5 Aditya Prateek Singh Sisodia is the rapper who debuted with the song 'DJ wale babu'. What is his professional name?

- Ans
- 1. Raftaar
 - 2. Brodha V
 - 3. Yo Yo Honey Singh
 - 4. Badshah

Q.6 In which Part of the Indian Constitution are Directive Principles of State Policy enumerated?

- Ans
- 1. Part II
 - 2. Part IV
 - 3. Part V
 - 4. Part III

Q.7 Which of the following is the concerned Union Ministry that introduced the Jammu and Kashmir Local Bodies Laws (Amendment) Bill, 2024 in the parliament?

- Ans
- 1. Ministry of Agriculture and Farmers' Welfare
 - 2. Ministry of AYUSH
 - 3. Ministry of Home Affairs
 - 4. Ministry of Defence

Q.8 What was the goal of 'National Beekeeping & Honey Mission' ('NBHM')?

- Ans
- 1. To achieve the goal of the 'Red Revolution'
 - 2. To achieve the goal of the 'Sweet Revolution'
 - 3. To achieve the goal of the 'Black Revolution'
 - 4. To achieve the goal of the 'Pink Revolution'

Q.9 In India, during a National Emergency, who may extend the term of Legislative Assemblies for a period not exceeding one year at a time?

- Ans**
- 1. Governor
 - 2. Chief Minister
 - 3. Parliament
 - 4. Prime Minister

Q.10 To whom is the Orange Cap awarded in the Indian Premier League (IPL)?

- Ans**
- 1. Emerging player of the league
 - 2. Youngest player of the league
 - 3. Highest wicket taker in the league
 - 4. Highest run scorer in the league

Q.11 Mayiladumparai, which was notified in 2022 as the oldest Iron Age site in the Indian subcontinent, is in which of the following states in India?

- Ans**
- 1. Tamil Nadu
 - 2. Karnataka
 - 3. Maharashtra
 - 4. Kerala

Q.12 The Badminton World Federation (BWF) has upgraded India Open from Super 500 level to Super 750 level for the next ____ years.

- Ans**
- 1. five
 - 2. three
 - 3. nine
 - 4. seven

Q.13 On 5 August 2024, which individual, along with top military officials, met former Bangladeshi Prime Minister Sheikh Hasina at Ghaziabad's Hindon Airbase?

- Ans**
- 1. Ajit Doval
 - 2. Shivshankar Menon
 - 3. Kataragama Menon
 - 4. Manoj Gupta

Q.14 What is the name of the southern half of the Pangaea supercontinent that existed about 300 million years ago?

- Ans**
- 1. Rodinia
 - 2. Pannotia
 - 3. Gondwana
 - 4. Nuna

Q.15 With which of the following dance forms is Rukmini Devi Arundale associated?

- Ans**
- 1. Kuchhipudi
 - 2. Kathkali
 - 3. Bharatnatyam
 - 4. Odissi

Q.16 Which revolution followed the Green Revolution in India, focusing on increasing the production of fruits and vegetables?

- Ans**
- 1. Golden Revolution
 - 2. White Revolution
 - 3. Yellow Revolution
 - 4. Blue Revolution

Q.17 Which of the following is NOT a national festival of India?

- Ans
- 1. Republic Day
 - 2. Gandhi Jayanti
 - 3. Independence Day
 - 4. National Unity Day

Q.18 The office of the Registrar General and Census Commissioner of India falls under which ministry?

- Ans
- 1. Ministry of Health and Family Welfare
 - 2. Ministry of Home Affairs
 - 3. Ministry of Rural Development
 - 4. Ministry of Finance

Q.19 Which Indian dancer achieved recognition in Guinness World Records 2023 by completing a five-day dance marathon?

- Ans
- 1. Jayshree Gogoi
 - 2. Samaira Koser
 - 3. Srushti Sudhir Jagtap
 - 4. Sanjukta Panigrahi

Q.20 If a fish eats a shrimp, the energy gets transferred from:

- Ans
- 1. secondary consumer to primary consumer
 - 2. secondary consumer to tertiary consumer
 - 3. primary consumer to secondary consumer
 - 4. producer to decomposer

Section : Part-C-Elementary Mathematics

Q.1 The price (per litre) of petrol increases by 85%. By what percent should its consumption be reduced such that the expenditure on it increases by 11% only?

- Ans
- 1. 46%
 - 2. 60%
 - 3. 40%
 - 4. 53%

Q.2 The LCM of 30, 13, 180 and 234 is:

- Ans
- 1. 2409
 - 2. 2340
 - 3. 2379
 - 4. 2291

Q.3 Gopal invests a sum of ₹5400 and Akshay invests a sum of ₹10200 at the same rate of simple interest per annum. If, at the end of 4 years, Akshay gets ₹720 more interest than Gopal, then find the rate of interest per annum (in percentage).

- Ans
- 1. 3.75
 - 2. 5.75
 - 3. 2.75
 - 4. 1.75

Q.4 When difference between compound and simple interest for three years is ₹93 at 10% interest per annum, the principal is ₹_____

- Ans
- 1. 3000
 - 2. 2425
 - 3. 3420
 - 4. 4200

Q.5 A man goes to Chennai from Hyderabad at a speed of 56km/hr and returns to Hyderabad at speed of 72km/hr, through same route. What is his average speed (in km/hr) of the entire journey?

- Ans
- 1. 60
 - 2. 62
 - 3. 61
 - 4. 63

Q.6 The LCM of 75, 45, 180 and 110 is:

- Ans
- 1. 9817
 - 2. 9856
 - 3. 9946
 - 4. 9900

Q.7 A person travels by a motorcycle to a place at an average speed of 60 km/h and returns at an average speed of 30 km/h. Find his average speed (in km/h) for the whole journey.

- Ans
- 1. 40
 - 2. 55
 - 3. 45
 - 4. 50

Q.8 A shopkeeper marks a table at 40% above the cost price and gives a discount of 25%. If he still makes a profit of ₹450, what is the cost price (in ₹) of the table?

- Ans
- 1. 8,500
 - 2. 8,000
 - 3. 9,500
 - 4. 9,000

Q.9 The cost of painting a spherical vessel of radius 7 cm is ₹18,480. What is the cost of painting per square centimetre? (Use

$$\pi = \frac{22}{7}$$

- Ans
- 1. ₹33
 - 2. ₹32
 - 3. ₹30
 - 4. ₹31

Q.10 LCM and HCF of two numbers are 144 and 8 respectively. If one of the numbers is 16, then find the other number.

- Ans
- 1. 73
 - 2. 74
 - 3. 72
 - 4. 70

Q.11 Determine the number that must be subtracted from both terms of the ratio 43 : 91 to make the ratio 3 : 7.

- Ans
- 1. 4
 - 2. 6
 - 3. 7
 - 4. 5

Q.12 Ashok has ₹1612 with him. He divided it amongst his sons Raj and Varun and asked them to invest it at 8% rate of interest compounded annually. It was seen that Raj and Varun got same amount after 14 and 15 years respectively. How much (in ₹) did Ashok give to Raj?

- Ans
- 1. 687
 - 2. 837
 - 3. 775
 - 4. 875

Q.13 Find the fourth proportional of $5\sqrt{24}$, $3\sqrt{10}$ and $3\sqrt{15}$.

- Ans
- 1. 4.5
 - 2. 3
 - 3. 3.5
 - 4. 4

Q.14 The average age of 22 students of a class is 47 years. If the age of the teacher is also included, the average age of the whole group becomes 48 years. The age (in years) of the teacher is:

- Ans
- 1. 71
 - 2. 67
 - 3. 70
 - 4. 69

Q.15 Two trains are moving in opposite directions at speeds of 110 km/h and 140 km/h. The length of one train is 140 m. The time taken by them to cross each other is 5 seconds. The length (in m) of the other train, correct to 2 decimal places, is:

- Ans
- 1. 208.21
 - 2. 209.67
 - 3. 205.65
 - 4. 207.22

Q.16 The product of two numbers is 1,48,176 and their LCM is 3,528. What is their HCF?

- Ans
- 1. 42
 - 2. 51
 - 3. 32
 - 4. 36

Q.17 The value of an ornament depreciates every year by 5%. If the present value of the ornament is ₹12,500, what will be its value after 2 years?

- Ans
- 1. ₹11,315.50
 - 2. ₹11,250
 - 3. ₹11,325
 - 4. ₹11,281.25

Q.18 By selling an article for ₹4,824, a man gains 20%. What will be his profit percentage (rounded off to the nearest integer) if he sells it for ₹6,000?

- Ans
- 1. 49%
 - 2. 53%
 - 3. 40%
 - 4. 32%

Q.19 Kanchan sold 153 chairs and had a gain equal to the selling price of 78 chairs. What is his profit percentage?

- Ans
- 1. 104%
 - 2. 114%
 - 3. 109%
 - 4. 99%

Q.20 Ram, Ravi and Reena can do a piece of work in 16, 20 and 24 days, respectively. They began the work together but Ravi left the work 5 days before the completion of the work. In how much time did they finish the work together?

- Ans
- 1. $10\frac{5}{34}$ days
 - 2. $11\frac{6}{37}$ days
 - 3. $8\frac{4}{37}$ days
 - 4. $12\frac{5}{48}$ days

Section : Part-D-English

Q.1 Select the most appropriate ANTONYM of the given word.

Salvage

- Ans
- 1. Rescue
 - 2. Extricate
 - 3. Forfeit
 - 4. Clean

Q.2 Select the most appropriate option to fill in the blank.

Each of the students _____ completed their assignments.

- Ans
- 1. will
 - 2. has
 - 3. were
 - 4. are

Q.3 Select the appropriate synonym of the given word.

Elusive

- Ans
- 1. Clear
 - 2. Obvious
 - 3. Definite
 - 4. Evasive

Q.4 Select the INCORRECTLY spelt word.

- Ans
- 1. Police
 - 2. Policy
 - 3. Issue
 - 4. Adress

Q.5 Select the most appropriate synonym of the given word.

Proud

- Ans
- 1. Happy
 - 2. Haughty
 - 3. Sad
 - 4. Hyper

Q.6 Select the most appropriate ANTONYM of the given word.

Keen

- Ans
- 1. Indifferent
 - 2. Understanding
 - 3. Tolerant
 - 4. Acceptable

Q.7 Select the most appropriate option to fill in the blank.

The _____ design of the new energy-efficient appliances has reduced electricity consumption significantly.

- Ans
- 1. innovates
 - 2. innovativeness
 - 3. innovative
 - 4. innovation

Q.8 Select the most appropriate option to substitute the underlined segment in the given sentence.

They decided to hit the nail on the head with their solution.

- Ans
- 1. avoid the problem
 - 2. guess the outcome
 - 3. make the wrong decision
 - 4. find exactly the right answer or solution

Q.9 Select the INCORRECTLY spelt word

- Ans
- 1. Violent
 - 2. Honestly
 - 3. Refugee
 - 4. Probably

Q.10 Select the most appropriate option that can substitute the underlined segment in the given sentence and rectify it. If no correction is needed, select 'No correction required'.

The cake (was baking) in the oven when I arrived.

- Ans
- 1. baked
 - 2. No correction required
 - 3. was being baked
 - 4. was baked

Q.11 Select the most appropriate option that can substitute the underlined segment in the given sentence.

Although Tania and her friend are poles apart, they still love each other.

- Ans
- 1. completely different and opposite
 - 2. imperfect by all means
 - 3. completely similar
 - 4. arrogant and cruel

Q.12 Parts of the following sentence have been given as options. Select the option that contains an error.

Last week, while walking in the garden, I saw a toddler who was sleeping in the pram.

- Ans
- 1. was sleeping in the pram.
 - 2. I saw a toddler who
 - 3. walking in the garden,
 - 4. Last week, while

Q.13 Select the word that best completes the given sentence. Determine the collocation through the sentence.

Deepa is _____ worried about you.

- Ans
- 1. deeply
 - 2. gracefully
 - 3. sadly
 - 4. brightly

Q.14 The given sentence is divided into four segments. Select the option that has the segment with an adverbial usage error.

Mr. Joe remarked / that the audience / brightly listened / to the speech.

- Ans
- 1. to the speech
 - 2. Mr. Joe remarked
 - 3. that the audience
 - 4. brightly listened

Q.15 Select the most appropriate meaning of the given word.

Resilience

- Ans
- 1. The determination to laugh at one's own self
 - 2. The ability to defeat anyone in argument
 - 3. The confidence to go abroad alone without any help
 - 4. The ability to deal with any kind of hardship and recover from its effects

Comprehension:

In the following passage, some words have been deleted. Read the passage carefully and select the most appropriate option to fill in each blank.

The ancient Egyptians (1)_____ pyramids as tombs for their pharaohs. These colossal structures served as monuments and (2)_____ constructed with limestone and granite. The main purpose of the pyramids (3)_____ to safeguard the pharaoh's body and possessions in the afterlife. The (4)_____ famous pyramid, the Great Pyramid of Giza, is a testament to the architectural brilliance (5)_____ the ancient Egyptians.

SubQuestion No : 16

Q.16 Select the most appropriate option to fill in blank no. 1.

- Ans
- 1. structure
 - 2. construct
 - 3. built
 - 4. make

Comprehension:

In the following passage, some words have been deleted. Read the passage carefully and select the most appropriate option to fill in each blank.

The ancient Egyptians (1)_____ pyramids as tombs for their pharaohs. These colossal structures served as monuments and (2)_____ constructed with limestone and granite. The main purpose of the pyramids (3)_____ to safeguard the pharaoh's body and possessions in the afterlife. The (4)_____ famous pyramid, the Great Pyramid of Giza, is a testament to the architectural brilliance (5)_____ the ancient Egyptians.

SubQuestion No : 17

Q.17 Select the most appropriate option to fill in blank no. 2.

- Ans**
- 1. is
 - 2. were
 - 3. was
 - 4. had been

Comprehension:

In the following passage, some words have been deleted. Read the passage carefully and select the most appropriate option to fill in each blank.

The ancient Egyptians (1)_____ pyramids as tombs for their pharaohs. These colossal structures served as monuments and (2)_____ constructed with limestone and granite. The main purpose of the pyramids (3)_____ to safeguard the pharaoh's body and possessions in the afterlife. The (4)_____ famous pyramid, the Great Pyramid of Giza, is a testament to the architectural brilliance (5)_____ the ancient Egyptians.

SubQuestion No : 18

Q.18 Select the most appropriate option to fill in blank no. 3.

- Ans**
- 1. are
 - 2. was
 - 3. is
 - 4. were

Comprehension:

In the following passage, some words have been deleted. Read the passage carefully and select the most appropriate option to fill in each blank.

The ancient Egyptians (1)_____ pyramids as tombs for their pharaohs. These colossal structures served as monuments and (2)_____ constructed with limestone and granite. The main purpose of the pyramids (3)_____ to safeguard the pharaoh's body and possessions in the afterlife. The (4)_____ famous pyramid, the Great Pyramid of Giza, is a testament to the architectural brilliance (5)_____ the ancient Egyptians.

SubQuestion No : 19

Q.19 Select the most appropriate option to fill in blank no. 4.

- Ans**
- 1. least
 - 2. very
 - 3. most
 - 4. little

Comprehension:

In the following passage, some words have been deleted. Read the passage carefully and select the most appropriate option to fill in each blank.

The ancient Egyptians (1)_____ pyramids as tombs for their pharaohs. These colossal structures served as monuments and (2)_____ constructed with limestone and granite. The main purpose of the pyramids (3)_____ to safeguard the pharaoh's body and possessions in the afterlife. The (4)_____ famous pyramid, the Great Pyramid of Giza, is a testament to the architectural brilliance (5)_____ the ancient Egyptians.

SubQuestion No : 20

Q.20 Select the most appropriate option to fill in blank no. 5.

- Ans**
- 1. on
 - 2. in
 - 3. of
 - 4. off

Section : Part-D-Hindi

Q.1 निम्नलिखित में से कौन-सा शब्द पुल्लिंग नहीं है?

- Ans
- 1. याचना
 - 2. वचन
 - 3. आवास
 - 4. समाज

Q.2 मुहावरे और उसके अर्थ के लिए सही विकल्प चुनें।
अंग-अंग ढीला होना

- Ans
- 1. थककर सो जाना
 - 2. बिल्कुल नहीं थकना
 - 3. थक जाना
 - 4. अंग टूटना

Q.3 निम्नलिखित में से किस वाक्य में एक दूसरे के उचित विलोम शब्द का प्रयोग नहीं है?

- Ans
- 1. उत्तीर्ण और अनुत्तीर्ण एक दूसरे के विलोम हैं।
 - 2. योगी और भोगी एक दूसरे के विलोम हैं।
 - 3. ऐच्छिक और वैकल्पिक एक दूसरे के विलोम हैं।
 - 4. उत्कर्ष और अपकर्ष एक दूसरे के विलोम हैं।

Q.4 वाक्य के रेखांकित शब्द को नीचे दिये गये शब्दों में से सर्वोचित शब्द से परिवर्तित करें-

अधिक खा लेने के चलते मेरा हाल आज बुरा है।

- Ans
- 1. संग
 - 2. वास्ते
 - 3. कारण
 - 4. बदले

Q.5 हम स्वाधीन भारत में रहते हैं।

रेखांकित शब्द के उचित विलोम शब्द का चयन कीजिए।

- Ans
- 1. पराधीन
 - 2. अधीन
 - 3. गुलाम
 - 4. श्रेष्ठ

Q.6 निम्नलिखित वाक्य में वर्तनी संबंधी त्रुटि की पहचान करें।

चौपाल पर पिताजी गाँव के बड़े-बूढ़ों के साथ हुक्का पीते हैं।

- Ans
- 1. हुक्का
 - 2. बड़े-बूढ़ों
 - 3. चौपाल
 - 4. पिताजी

Q.7 वर्तनी की दृष्टि से दिए गए वाक्य के किस अंश में त्रुटि है चयन करें?
अनिष्ट की आशंका से नीमा का कलेजा काँप उठा।

- Ans
- 1. नीमा का कलेजा
 - 2. अनिष्ट की
 - 3. काँप उठा।
 - 4. आशंका से

Q.8 निम्नलिखित वाक्यांश हेतु सार्थक शब्द का चुनाव करें।
जो बूढ़ा न हो

- Ans
- 1. युवा
 - 2. अजर
 - 3. अमर
 - 4. हृष्ट

Q.9 रेखांकित शब्द के स्थान पर सर्वोचित विकल्प चुनिए।

गुलाब का कोई भी नाम रख दो गंध ही देगा।

- Ans
- 1. सुगंध
 - 2. काँटे
 - 3. दुर्गंध
 - 4. चुभन

Q.10 वह बच्चा सामने जा रहा है जिसने तुम्हारी किताब फाड़ दी थी। वाक्य में निहित विशेषण है।

- Ans
- 1. संकेतवाचक सार्वनामिक
 - 2. प्रश्नवाचक सार्वनामिक
 - 3. अनिश्चयवाचक सार्वनामिक
 - 4. संबंधवाचक सार्वनामिक

Q.11 'निर्झर एवं प्रपात' पर्याय हैं-

- Ans
- 1. सरोवर के
 - 2. झील के
 - 3. झरने के
 - 4. नदी के

Q.12 'मैं कभी किसी _____ पर नहीं गयी।'

उचित सार्थक-निरर्थक शब्द-युग्म से वाक्य पूर्ण करें-

- Ans
- 1. नदी-नाले
 - 2. जमीन-समीन
 - 3. पहाड़-वहाड़
 - 4. घर-बार

Q.13 निम्नलिखित वाक्य में रेखांकित खंड के स्थान पर प्रयुक्त होने वाले सबसे उपयुक्त विकल्प का चयन कीजिए-

वह छोड़कर चला भोजन गया।

- Ans
- 1. भोजन चला छोड़कर
 - 2. भोजन छोड़कर चला
 - 3. चला भोजन छोड़कर
 - 4. छोड़कर चला

Q.14 'राजा ने भिक्षुक को अपने यहाँ _____ दिया।' वाक्य में रिक्त स्थान की पूर्ति तत्सम शब्द द्वारा कीजिए।

- Ans
- 1. आशय
 - 2. आसरा
 - 3. आश्रय
 - 4. आश्रम

Q.15 निम्नलिखित वाक्य को ध्यानपूर्वक पढ़ें और चिन्हित शब्द का पर्यायवाची अर्थ लिखें।
भैया ने इस बात का खंडन किया कि दहेज लेना-देना हमारी परंपरा है।

- Ans
- 1. हास
 - 2. गंभीरता
 - 3. अस्वीकार
 - 4. त्रास

Comprehension:

प्रश्न संख्या 16 से 20 तक इसी अनुच्छेद से करें।

प्रजातांत्रिक व्यवस्था के संबंध में बहुलवादियों की धारणा है कि यह एक सामाजिक राजनीतिक _____(1) है जिससे राज्य शक्ति में बहुसंख्यक व्यक्तिगत समुदाय इन्टरेस्ट आर्गनाइजेशन तथा _____(2) भाग लेते हैं। इसके अनुसार सम्प्रभुता का विभिन्न समुदायों में _____ विभाजन(3) होना चाहिए। एक तरह से इस सिद्धांत को Classical प्रजातन्त्र और 'Elitist' के प्रजातांत्रिक विचारों का _____(4) मान सकते हैं। सिद्धान्त व्यक्ति की नैतिक योग्यता को नहीं _____(5) है।

SubQuestion No : 16

Q.16 रिक्त स्थान के लिए सही विकल्प चुनें।(1)

- Ans
- 1. क्रम
 - 2. व्यवस्था
 - 3. प्रणाली
 - 4. परिणाम

Comprehension:

प्रश्न संख्या 16 से 20 तक इसी अनुच्छेद से करें।

प्रजातांत्रिक व्यवस्था के संबंध में बहुलवादियों की धारणा है कि यह एक सामाजिक राजनीतिक _____(1) है जिससे राज्य शक्ति में बहुसंख्यक व्यक्तिगत समुदाय इन्टरेस्ट आर्गनाइजेशन तथा _____(2) भाग लेते हैं। इसके अनुसार सम्प्रभुता का विभिन्न समुदायों में _____ विभाजन(3) होना चाहिए। एक तरह से इस सिद्धांत को Classical प्रजातन्त्र और 'Elitist' के प्रजातांत्रिक विचारों का _____(4) मान सकते हैं। सिद्धान्त व्यक्ति की नैतिक योग्यता को नहीं _____(5) है।

SubQuestion No : 17

Q.17 रिक्त स्थान के लिए सही विकल्प चुनें।(2)

- Ans
- 1. प्रतिनिधि
 - 2. सदस्य
 - 3. दूत
 - 4. व्यक्ति

Comprehension:

प्रश्न संख्या 16 से 20 तक इसी अनुच्छेद से करें।

प्रजातांत्रिक व्यवस्था के संबंध में बहुलवादियों की धारणा है कि यह एक सामाजिक राजनीतिक _____(1) है जिससे राज्य शक्ति में बहुसंख्यक व्यक्तिगत समुदाय इन्टरेस्ट आर्गनाइजेशन तथा _____(2) भाग लेते हैं। इसके अनुसार सम्प्रभुता का विभिन्न समुदायों में _____ विभाजन(3) होना चाहिए। एक तरह से इस सिद्धांत को Classical प्रजातन्त्र और 'Elitist' के प्रजातांत्रिक विचारों का _____(4) मान सकते हैं। सिद्धान्त व्यक्ति की नैतिक योग्यता को नहीं _____(5) है।

SubQuestion No : 18

Q.18 रिक्त स्थान के लिए सही विकल्प चुनें।(3)

- Ans
- 1. अनुकरण
 - 2. अंतरण
 - 3. वितरण
 - 4. विभाजन

Comprehension:

प्रश्न संख्या 16 से 20 तक इसी अनुच्छेद से करें।

प्रजातांत्रिक व्यवस्था के संबंध में बहुलवादियों की धारणा है कि यह एक सामाजिक राजनीतिक _____ (1) है जिससे राज्य शक्ति में बहुसंख्यक व्यक्तिगत समुदाय इन्टरेस्ट आर्गनाइजेशन तथा _____ (2) भाग लेते हैं। इसके अनुसार सम्प्रभुता का विभिन्न समुदायों में _____ विभाजन (3) होना चाहिए। एक तरह से इस सिद्धांत को Classical प्रजातन्त्र और 'Elitist' के प्रजातांत्रिक विचारों का _____ (4) मान सकते हैं। सिद्धान्त व्यक्ति की नैतिक योग्यता को नहीं _____ (5) है।

SubQuestion No : 19

Q.19 रिक्त स्थान के लिए सही विकल्प चुनें।(4)

- Ans
- 1. गणना
 - 2. मिश्रण
 - 3. लेखन
 - 4. विभाजन

Comprehension:

प्रश्न संख्या 16 से 20 तक इसी अनुच्छेद से करें।

प्रजातांत्रिक व्यवस्था के संबंध में बहुलवादियों की धारणा है कि यह एक सामाजिक राजनीतिक _____ (1) है जिससे राज्य शक्ति में बहुसंख्यक व्यक्तिगत समुदाय इन्टरेस्ट आर्गनाइजेशन तथा _____ (2) भाग लेते हैं। इसके अनुसार सम्प्रभुता का विभिन्न समुदायों में _____ विभाजन (3) होना चाहिए। एक तरह से इस सिद्धांत को Classical प्रजातन्त्र और 'Elitist' के प्रजातांत्रिक विचारों का _____ (4) मान सकते हैं। सिद्धान्त व्यक्ति की नैतिक योग्यता को नहीं _____ (5) है।

SubQuestion No : 20

Q.20 रिक्त स्थान के लिए सही विकल्प चुनें।(5)

- Ans
- 1. समझता
 - 2. देखता
 - 3. आँकता
 - 4. मानता