

Constable GD in CAPFs and SSF Rifleman GD in AR and Sepoy in NCB Examination 2025

Exam Date	12/02/2025
Exam Time	9:00 AM - 10:00 AM
Subject	Constable GD Examination 2025

Section : Part-A-General Intelligence and Reasoning

Q.1 Based on the English alphabetical order, three of the following four letter-clusters are alike in a certain way and thus form a group. Which letter-cluster DOES NOT belong to that group?
(Note: The odd one out is not based on the number of consonants/vowels or their position in the letter-cluster.)

- Ans
- 1. OIP
 - 2. LPJ
 - 3. OSM
 - 4. MQK

Q.2 Select the combination of letters that when sequentially placed in the blanks of the given series, will logically complete the series.

_OSNR_QLPK_JNIM_LGK_

- Ans
- 1. VMQHE
 - 2. TNOGF
 - 3. TMOHF
 - 4. VNQGE

Q.3 In a certain code language, 'JIVE' is coded as '1597' and 'FIVE' is coded as '5781'. What is the code for 'F' in the given code language?

- Ans
- 1. 5
 - 2. 7
 - 3. 8
 - 4. 1

Q.4 What will come in the place of the question mark '?' in the following equation, if '-' and '÷' are interchanged and 'x' and '+' are interchanged?

$$7 + 45 - 15 \times 5 \div 12 = ?$$

- Ans
- 1. 14
 - 2. 16
 - 3. 15
 - 4. 17

Q.5 In a certain code language, 'CLAP' is coded as '6452' and 'PALM' is coded as '5428'. How is 'M' coded in the given language?

- Ans
- 1. 6
 - 2. 4
 - 3. 5
 - 4. 8

Q.6 DEATH is related to GLITZ in a certain way based on the English alphabetical order. In the same way, GRAVE is related to JYIWW. To which of the given options is BENCH related, following the same logic?

- Ans**
- 1. FKVCA
 - 2. FLVCZ
 - 3. ELVCA
 - 4. ELVCZ

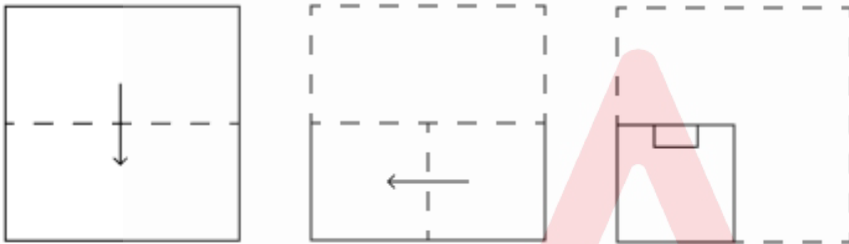
Q.7 In a certain code language,

'A < B' means 'A is the son of B',
 'A / B' means 'A is the father of B',
 'A : B' means 'A is the wife of B' and
 'A ! B' means 'A is the brother of B'.

How is F related to H if 'F ! L : A < S / H'?

- Ans**
- 1. Brother's wife's father
 - 2. Brother's wife's brother
 - 3. Brother's wife's sister
 - 4. Brother's wife's son

Q.8 A paper is folded and cut as shown below. How will it appear when unfolded?



Ans

- 1.
- 2.
- 3.
- 4.

Q.9 What should come in place of the question (?) in the given series based on the English alphabetical order?
BFA CGA DHA EIA ?

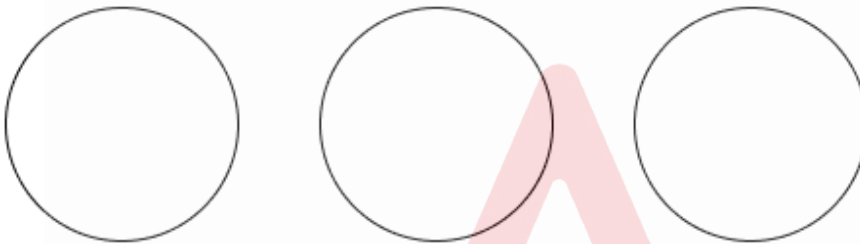

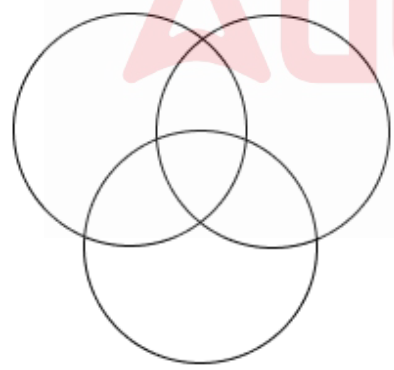
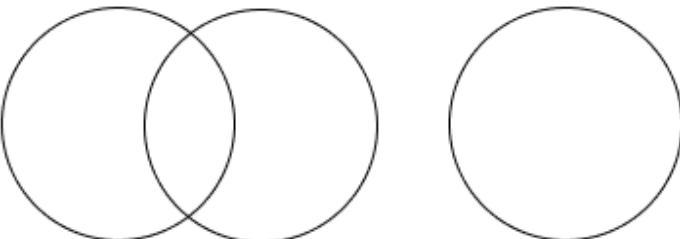
- Ans
- 1. FJA
 - 2. FGH
 - 3. FAJ
 - 4. JFA

Q.10 C, D, G, H, I, K and L are sitting around a circular table facing the centre of the table (but not necessarily in the same order).
Only two people sit between D and C when counted from the left of C. K sits third to the left of I. H sits to the immediate right of I. H sits second to the left of D. L is not an immediate neighbour of K.
Who sits third to the right of G?

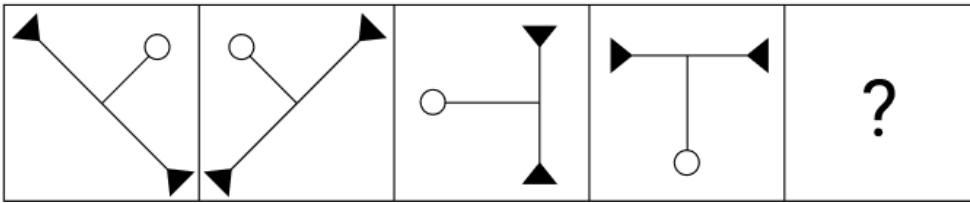
- Ans
- 1. D
 - 2. L
 - 3. H
 - 4. C

Q.11 Select the Venn diagram that best illustrates the relationship between the following classes.
Whale, Mammal, Reptile

Ans

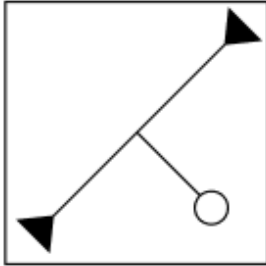
- 1. 
- 2. 
- 3. 
- 4. 

Q.12 Select the figure from among the given options that can replace the question mark (?) in the following series.

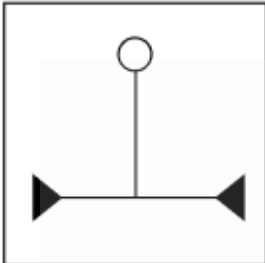


Ans

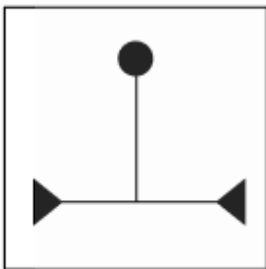
✓ 1.



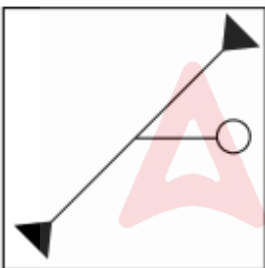
✗ 2.



✗ 3.



✗ 4.



Q.13 Select the option in which the given figure (X) is embedded (rotation is NOT allowed).



Ans


✗ 1.



✓ 2.



✗ 3.



✗ 4.



Q.14 What should come in place of the question mark (?) in the given series?

17 9 29 21 65 57 ?

- Ans
- ✗ 1. 175
 - ✗ 2. 169
 - ✓ 3. 173
 - ✗ 4. 167

Q.15 Seven people, L, M, N, O, W, X and Y, are sitting in a row, facing north (but not necessarily in the same order). Only two people sit to the left of Y. Only three people sit between Y and W. X sits second to the right of Y. Only two people sit between X and M. L sits at some place to the right of O but at some place to the left of N. How many people sit to the right of L?

- Ans
- ✗ 1. Two
 - ✓ 2. Three
 - ✗ 3. One
 - ✗ 4. Four

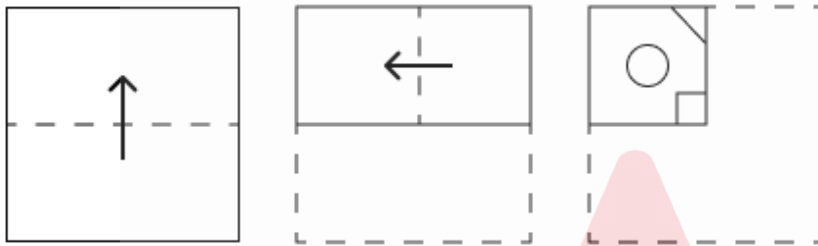
Q.16 Each letter in the word GUILDER is arranged in the English alphabetical order. How many letters are there in the English alphabetical order between the letter which is fourth from the left end and the one which is first from the right end in the new letter-cluster thus formed?

- Ans
- 1. 12
 - 2. 9
 - 3. 11
 - 4. 10

Q.17 YFOT is related to CIRX in a certain way based on the English alphabetical order. In the same way, UBHW is related to YEKA. To which of the following is SAEX related, following the same logic?

- Ans
- 1. VCGA
 - 2. WCGC
 - 3. VBIC
 - 4. WDHB

Q.18 A paper is folded and cut as shown below. How will it appear when unfolded?



Ans

- 1.
- 2.
- 3.
- 4.

Q.19 What should come in place of the question mark (?) in the given series?

710 712 716 722 730 ?

- Ans
- 1. 742
 - 2. 738
 - 3. 740
 - 4. 744

Q.20 Read the given statements and conclusions carefully. Assuming that the information given in the statements is true, even if it appears to be at variance with commonly known facts, decide which of the given conclusions logically follow(s) from the statements.

Statements:

Some chargers are batteries.

Some chargers are powers.

Some batteries are energies.

Conclusions:

(I) Some chargers are energies.

(II) Some batteries are powers.

- Ans
- 1. Only conclusion (II) follows
 - 2. Only conclusion (I) follows
 - 3. Both conclusions (I) and (II) follow
 - 4. Neither conclusion (I) nor (II) follows

Section : Part-B-General Knowledge and General awareness

Q.1 'Ladaladi' is a folk dance of the _____, in which the bride and bridegroom are lifted upon the shoulders and others dance around the couple.

- Ans
- 1. Santal
 - 2. Chakma
 - 3. Garos
 - 4. Bhils

Q.2 Which Five-Year Plan aimed at accelerating food grain production, increasing employment and productivity with a focus on 'food, work and productivity'?

- Ans
- 1. Seventh Plan
 - 2. Fourth Plan
 - 3. Third Plan
 - 4. Sixth Plan

Q.3 What is the minimum age for a person to be considered literate in the Indian Census?

- Ans
- 1. 5 years
 - 2. 7 years
 - 3. 15 years
 - 4. 10 years

Q.4 As per the 2023 statistic, which of the following neighbouring countries of India had the lowest infant mortality rate?

- Ans
- 1. Sri Lanka
 - 2. Nepal
 - 3. Pakistan
 - 4. Bangladesh

Q.5 In November 2024, Indian Prime Minister Narendra Modi was conferred the highest National Award 'Dominica Award of Honour'. This award recognises his contributions

- Ans**
- 1. during the COVID-19 pandemic
 - 2. during his first term governance
 - 3. in the development of the agriculture sector of the country
 - 4. in the development of the IT sector of the country

Q.6 To which state of India does swimmer Srihari Nataraj belong?

- Ans**
- 1. Maharashtra
 - 2. Karnataka
 - 3. Gujrat
 - 4. Kerala

Q.7 Who was the first president of BCCI?

- Ans**
- 1. Sikandar Hayat Khan
 - 2. AN Ghose
 - 3. RE Grant Govan
 - 4. PM Rungta

Q.8 Who is a 'wholesaler' in the context of trade?

- Ans**
- 1. A person who buys and sells in small quantities
 - 2. A person who transports goods
 - 3. A person who produces goods
 - 4. A person who buys and sells in large quantities

Q.9 Which organisation was formed by Dr. BR Ambedkar to promote the rights of Dalits?

- Ans**
- 1. Depressed Classes Mission
 - 2. Bahishkrit Hitakarini Sabha
 - 3. Social Service League
 - 4. Harijan Sevak Sangh

Q.10 In the meeting of the Executive Board of Sangeet Natak Akademi held in 2011, it was decided to give how many Akademi Awards in the field of dance?

- Ans**
- 1. 11
 - 2. 6
 - 3. 9
 - 4. 13

Q.11 What is the average monthly income per agricultural household in India, according to the 77th round of National Statistical Office (NSO) survey, calculated using the paid-out expenses approach?

- Ans**
- 1. ₹8,000
 - 2. ₹6,426
 - 3. ₹12,000
 - 4. ₹10,218

Q.12 Which birth anniversary of Mahatma Gandhi was celebrated on 2nd October 2023?

- Ans**
- 1. 151
 - 2. 153
 - 3. 154
 - 4. 152

Q.13 Which Article of the Constitution authorises issuing of writs by any High Court of the country?

- Ans
- 1. Article 226
 - 2. Article 233
 - 3. Article 254
 - 4. Article 246

Q.14 Who was appointed for a third term as the National Security Advisor in the Modi government in June 2024?

- Ans
- 1. Manoj Gupta
 - 2. Kataragama Menon
 - 3. Ajit Doval
 - 4. Shivshankar Menon

Q.15 Which of the following is the correct Match of the column-A with Colum-B

Column-A (name of disease)	Column-B (affected organs)
i. Tuberculosis	a. Salivary glands
ii. Hepatitis	b. Reproductive tract
iii. Gonorrhoea	c. Lungs
iv. Mumps	d. Liver

- Ans
- 1. i - c, ii - a, iii - b, iv - d
 - 2. i - c, ii - d, iii - a, iv - b
 - 3. i - c, ii - d, iii - b, iv - a
 - 4. i - d, ii - c, iii - b, iv - a

Q.16 Which language and script were primarily used in Ashoka's edicts?

- Ans
- 1. Greek and Latin
 - 2. Prakrit and Brahmi
 - 3. Pali and Kharoshti
 - 4. Sanskrit and Devanagari

Q.17 Which alkyne with chemical formula $\text{CH}_3\text{C}\equiv\text{CH}$ appears as a colourless liquefied gas with a sweet odour?

- Ans
- 1. Ethyne
 - 2. 1-Hexyne
 - 3. 1-Butyne
 - 4. 1-Propyne

Q.18 A standard rain gauge is a meteorological instrument consisting of a collector of what shape connected to a measuring tube that is used to measure rainfall per unit area at a given time?

- Ans
- 1. Disc-shaped
 - 2. J-shaped
 - 3. Funnel-shaped
 - 4. Prism-shaped

Q.19 Zakir Hussain, a famous Tabla player, belonged to which of the following musical gharanas?

- Ans**
- 1. Punjab gharana
 - 2. Indore gharana
 - 3. Benaras gharana
 - 4. Delhi gharana

Q.20 Which Amendment Act paved the way for the introduction of goods and services tax in the country?

- Ans**
- 1. 100th Amendment Act
 - 2. 101st Amendment Act
 - 3. 102nd Amendment Act
 - 4. 103rd Amendment Act

Section : Part-C-Elementary Mathematics

Q.1 Find the ratio in which rice at ₹8.30 per kg be mixed with rice at ₹5.30 per kg to produce a mixture worth ₹6.30 per kg.

- Ans**
- 1. 2 : 1
 - 2. 1 : 2
 - 3. 1 : 3
 - 4. 2 : 3

Q.2 Zakir travels from City A to City B. If Zakir drives his car at $\frac{2}{3}$ of his normal speed, then he reaches City B 45 minutes late. Find the time (in minutes) that Zakir would have taken to travel from City A to City B if he drove at his normal speed.

- Ans**
- 1. 86
 - 2. 83
 - 3. 90
 - 4. 85

Q.3 P and Q can do a piece of work in 10, and 6 days, respectively, while R can destroy the same work in 15 days. If P and Q work on 1st day, R works on 2nd and so on. They follow the same pattern until the work gets completed. How many days will it take for the work to be completed the first time?

- Ans**
- 1. $8\frac{3}{4}$
 - 2. $9\frac{1}{2}$
 - 3. $8\frac{1}{2}$
 - 4. $9\frac{3}{4}$

Q.4 Baban has two grandsons Rakesh and Shivam. 13 year old Rakesh gets some money from Baban's wealth and 14 year old Shivam gets rest of the money. But Rakesh and Shivam will get money only when they turn 22 years old. Till then the money is in a bank getting interest at rate 10% compounded annually. When both turn 22, they receive the same amount. How much had Baban given Shivam (in ₹) initially, if total money with Baban was ₹23100?

- Ans**
- 1. 10750
 - 2. 12100
 - 3. 11000
 - 4. 12450

Q.5 Three persons step out together for a walk. Their steps measure 90 cm, 95 cm and 75 cm, respectively. What is the minimum distance (in m) each should walk so that they can cover the distance in complete step?

- Ans
- 1. 85.05
 - 2. 87.06
 - 3. 87.6
 - 4. 85.5

Q.6 Evaluate: $16 + 9 \div 3 - 2 \times 3$

- Ans
- 1. 12
 - 2. 15
 - 3. 16
 - 4. 13

Q.7 A scooterist is travelling at the speed of 42 km/h. How much distance (in km) will they travel in 90 minutes?

- Ans
- 1. 55
 - 2. 63
 - 3. 60
 - 4. 49

Q.8 A man sold an article for ₹35,400 and made a profit of 18% in the process. What would have been his profit or loss percentage, had he sold it for ₹33,000?

- Ans
- 1. Gain 15%
 - 2. Loss 10%
 - 3. Loss 15%
 - 4. Gain 10%

Q.9 The value of $68 - 6 \times [4 + 4 \times \{12 - 4(6 - 5) \times 3\} \div 15]$ is:

- Ans
- 1. 54
 - 2. 50
 - 3. 47
 - 4. 44

Q.10 The average weight of Amit, Gopal and Akshay is 45 kg. If the average weight of Amit and Gopal be 43 kg and that of Gopal and Akshay be 47 kg, then the weight of Gopal (in kg) is:

- Ans
- 1. 65
 - 2. 55
 - 3. 60
 - 4. 45

Q.11 When 8, 16, 18, 20 and 25 divide the least number x , the remainder in each case is 3, but x is divisible by 7. What is the value of x ?

- Ans
- 1. 7203
 - 2. 7302
 - 3. 7320
 - 4. 7023

Q.12 The expenditure of Sudha is 175% more than her savings. If her expenditure decreases by 12% and savings increase by 40.5%, then by what percent does her income increase?

- Ans
- 1. 4%
 - 2. 5%
 - 3. 2%
 - 4. 7%

Q.13 The simple interest on a principal amount (in ₹) is ₹531 for a period of 5 years at the rate of 9% per annum. The principal amount (in ₹) is:

- Ans
- 1. 1171
 - 2. 1186
 - 3. 1179
 - 4. 1180

Q.14 The height of a right circular cone is 10 cm and its base radius is 24 cm. What is the curved surface area (in cm^2) of the cone?

- Ans
- 1. 640π
 - 2. 620π
 - 3. 624π
 - 4. 580π

Q.15 The population of a town increases by 8% annually. If the present population is 45,000, what will be its population after 2 years?

- Ans
- 1. 52,488
 - 2. 52,200
 - 3. 52,316
 - 4. 52,532

Q.16 The third proportional of 20 and 25 is:

- Ans
- 1. 31.75
 - 2. 32.75
 - 3. 31.25
 - 4. 32.25

Q.17 The present age ratio of the mother to the daughter is 7 : 2. After 12 years, their ages will be in the ratio of 9 : 4. What is the current age of the mother?

- Ans
- 1. 48 years
 - 2. 52 years
 - 3. 42 years
 - 4. 38 years

Q.18 The marked price of a table is ₹8,980. If the shopkeeper offers a discount of 19%, what is its selling price (in ₹, to the nearest rupee)?

- Ans
- 1. ₹7,427
 - 2. ₹7,472
 - 3. ₹7,247
 - 4. ₹7,274

Q.19 400 guavas were bought at ₹1240 per hundred and were sold at a profit of ₹940. Find the selling price (in ₹) per dozen of guavas.

- Ans
- 1. 167
 - 2. 192
 - 3. 177
 - 4. 187

Q.20 Baban has two grandsons Rakesh and Shivam. 13 year old Rakesh gets some money from Baban's wealth and 14 year old Shivam gets rest of the money. But Rakesh and Shivam will get money only when they turn 22 years old. Till then the money is in a bank getting interest at rate 5% compounded annually. When both turn 22, they receive the same amount. How much had Baban given Shivam (in ₹) initially, if total money with Baban was ₹24600?

- Ans
- 1. 12600
 - 2. 11750
 - 3. 12000
 - 4. 12950

Section : Part-D-English

Q.1 Select the correct spelling of the incorrectly spelt word in the given sentence.

The principal announced several curricullam changes for the upcoming year.

- Ans
- 1. currciular
 - 2. curricular
 - 3. curricular
 - 4. curicullam

Q.2 Select the most appropriate ANTONYM of the given word.

Lanky

- Ans
- 1. Plump
 - 2. Rectangular
 - 3. Rare
 - 4. Congenital

Q.3 Select the most appropriate synonym of the given word.
Chastise

- Ans
- 1. Praise
 - 2. Laud
 - 3. Flog
 - 4. Compliment

Q.4 Select the most appropriate ANTONYM of the given word.

Baroque

- Ans
- 1. Gilt
 - 2. Plain
 - 3. Florid
 - 4. Ornate

Q.5 Select the most appropriate option to fill in the blank.

Researchers _____ new technologies to improve recycling processes in the near future.

- Ans
- 1. has been developing
 - 2. develop
 - 3. are developing
 - 4. was developing

Q.6 Select the most appropriate option that can substitute the underlined segment in the given sentence.

The discipline committee of the college pondered the matter for two hours but did not take any decision.

- Ans
- 1. thought down the matter
 - 2. pondering over the matter
 - 3. grinned in the matter
 - 4. talked over the matter

Q.7 Select the most appropriate option to fill in the blank.

The company is _____ financial difficulties due to declining sales.

- Ans
- 1. doing
 - 2. facing
 - 3. challenging
 - 4. directing

Q.8 Select the INCORRECTLY spelt word.

- Ans
- 1. Exiuisite
 - 2. Accolades
 - 3. Restaurants
 - 4. Cuisine

Q.9 Select the most appropriate option to fill in the blank.

After working tirelessly on the project for weeks, Mark finally decided to burn the midnight _____.

- Ans
- 1. food
 - 2. water
 - 3. paper
 - 4. oil

Q.10 Select the most appropriate ANTONYM of the given word.

Fatuous

- Ans
- 1. Sappy
 - 2. Dim
 - 3. Lamebrain
 - 4. Brilliant

Q.11 Select the most appropriate option to fill in the blank.

The farmers will _____ their fields tomorrow.

- Ans
- 1. tropical
 - 2. plough
 - 3. collide
 - 4. isotope

Q.12 The following sentence has been divided into parts. One of them may contain an error. Select the part that contains the error from the given options. If you don't find any error, mark 'No error' as your answer.

Most of the passengers complained/ that the speed of the bus/ was usual fast.

- Ans
- 1. was usual fast.
 - 2. that the speed of the bus
 - 3. Most of the passengers complained
 - 4. No error.

Q.13 Select the most appropriate option to fill in the blank and make the sentence meaningful.

My grandmother _____ to the temple alone last night.

- Ans
- 1. goes
 - 2. have gone
 - 3. went
 - 4. is going

Q.14 The following sentence has been divided into parts. One of them may contain an error. Select the part that contains the error from the given options. If you don't find any error, mark 'No error' as your answer.

He doesn't travel such more/ these days/ because he is not well.

- Ans
- 1. because he is not well.
 - 2. No error.
 - 3. He doesn't travel such more
 - 4. these days

Q.15 Select the most appropriate meaning of the given word.

Tedious

- Ans
- 1. Brief and concise
 - 2. Boring and tiresome
 - 3. Inspiring and uplifting
 - 4. Exciting and fun

Comprehension:

In the following passage, some words have been deleted. Read the passage carefully and select the most appropriate option to fill in each blank.

The US is the (1) _____ shareholder in the World Bank and traditionally, the bank's president has been a US citizen (2) _____ by Washington. Small island developing states have argued for moving the fund (3) _____ from a donor recipient model, with all their usual power imbalances. (4) _____ a partnership founded on a shared _____ commitment to protecting the planet. This will require partial or total (5) _____ of the World Bank. This is already happening under its new president, some argue. But hosting the fund within the bank would still give donor countries disproportionate influence.

SubQuestion No : 16

Q.16 Select the most appropriate option to fill in blank no. 1.

- Ans**
- 1. brightest
 - 2. tallest
 - 3. longest
 - 4. biggest

Comprehension:

In the following passage, some words have been deleted. Read the passage carefully and select the most appropriate option to fill in each blank.

The US is the (1) _____ shareholder in the World Bank and traditionally, the bank's president has been a US citizen (2) _____ by Washington. Small island developing states have argued for moving the fund (3) _____ from a donor recipient model, with all their usual power imbalances. (4) _____ a partnership founded on a shared _____ commitment to protecting the planet. This will require partial or total (5) _____ of the World Bank. This is already happening under its new president, some argue. But hosting the fund within the bank would still give donor countries disproportionate influence.

SubQuestion No : 17

Q.17 Select the most appropriate option to fill in blank no. 2.

- Ans**
- 1. nominated
 - 2. radiated
 - 3. culminated
 - 4. ruminated

Comprehension:

In the following passage, some words have been deleted. Read the passage carefully and select the most appropriate option to fill in each blank.

The US is the (1) _____ shareholder in the World Bank and traditionally, the bank's president has been a US citizen (2) _____ by Washington. Small island developing states have argued for moving the fund (3) _____ from a donor recipient model, with all their usual power imbalances. (4) _____ a partnership founded on a shared _____ commitment to protecting the planet. This will require partial or total (5) _____ of the World Bank. This is already happening under its new president, some argue. But hosting the fund within the bank would still give donor countries disproportionate influence.

SubQuestion No : 18

Q.18 Select the most appropriate option to fill in blank no. 3.

- Ans**
- 1. during
 - 2. beside
 - 3. away
 - 4. along

Comprehension:

In the following passage, some words have been deleted. Read the passage carefully and select the most appropriate option to fill in each blank.

The US is the (1) _____ shareholder in the World Bank and traditionally, the bank's president has been a US citizen (2) _____ by Washington. Small island developing states have argued for moving the fund (3) _____ from a donor recipient model, with all their usual power imbalances. (4) _____ a partnership founded on a shared _____ commitment to protecting the planet. This will require partial or total (5) _____ of the World Bank. This is already happening under its new president, some argue. But hosting the fund within the bank would still give donor countries disproportionate influence.

SubQuestion No : 19

Q.19 Select the most appropriate option to fill in blank no. 4.

- Ans**
- 1. lest
 - 2. behind
 - 3. towards
 - 4. liable

Comprehension:

In the following passage, some words have been deleted. Read the passage carefully and select the most appropriate option to fill in each blank.

The US is the (1) _____ shareholder in the World Bank and traditionally, the bank's president has been a US citizen (2) _____ by Washington. Small island developing states have argued for moving the fund (3) _____ from a donor recipient model, with all their usual power imbalances. (4) _____ a partnership founded on a shared _____ commitment to protecting the planet. This will require partial or total (5) _____ of the World Bank. This is already happening under its new president, some argue. But hosting the fund within the bank would still give donor countries disproportionate influence.

SubQuestion No : 20

Q.20 Select the most appropriate option to fill in blank no. 5.

- Ans**
- 1. resign
 - 2. reform
 - 3. reckon
 - 4. redeem

Section : Part-D-Hindi

Q.1 'आग में समिधा डालना।' मुहावरे में रेखांकित शब्द के स्थान पर उपयुक्त शब्द होगा -

- Ans**
- 1. घी
 - 2. सामग्री
 - 3. लौंग
 - 4. तेल

Q.2 निम्नलिखित वाक्य के किस खंड में अशुद्धि है?

व्यक्ति को अपने समय का सदूपयोग करना चाहिए।

- Ans**
- 1. चाहिए
 - 2. सदूपयोग
 - 3. व्यक्ति
 - 4. अपने

Q.3 हंस के समान गति से चलने वाली – वाक्यांश के लिए उपयुक्त शब्द क्या होगा ?

- Ans
- 1. गजवाहिनी
 - 2. हंसवाहिनी
 - 3. हंसगामिनी
 - 4. गजगामिनी

Q.4 निम्नलिखित वाक्य में रेखांकित खंड के स्थान पर प्रयुक्त होने वाले सबसे उपयुक्त विकल्प का चयन कीजिए-

प्रधानमंत्री ने क्षेत्रों का भूकंप पीड़ित दौरा किया।

- Ans
- 1. भूकंप क्षेत्रों का पीड़ित
 - 2. भूकंप का पीड़ित
 - 3. पीड़ित भूकंप क्षेत्रों का
 - 4. भूकंप पीड़ित क्षेत्रों का

Q.5 निम्न वाक्य में रेखांकित पद को संशोधित कर लिखिए।
वे सब कालचक्र के पहिए के नीचे पिस गए।

- Ans
- 1. में
 - 2. पहिए के साथ
 - 3. के पहिए
 - 4. से

Q.6 निम्नलिखित विकल्पों में से कौन सा एक विलोम युग्म सही नहीं है?

- Ans
- 1. घना-विरल
 - 2. गहन-पुलिन
 - 3. घना-गरम
 - 4. गोप्य-प्रकाश्य

Q.7 निम्नलिखित में से कौन सा दीपक का पर्यायवाची शब्द नहीं है -

- Ans
- 1. दिवा
 - 2. दिवला
 - 3. प्रदीप
 - 4. दीया

Q.8 निम्नलिखित में से किस वाक्य में एक दूसरे के उचित विलोम शब्द का प्रयोग नहीं किया गया है?

- Ans
- 1. विषम परिस्थितियों में अज्ञ – विज्ञ का अंतर स्पष्ट हो जाता है।
 - 2. आत्मा का न आदि है न अंत ।
 - 3. रामन ने तरल – ठोस पदार्थों पर किरण के प्रभाव का अध्ययन किया।
 - 4. मूर्ख क्या समझे , आस्तिक - वास्तविक का फर्क?

Q.9 'दोनों दस्तावेजों में कोई साम्यता नहीं है, इनमें सुधार की आवश्यकता है।' उपरोक्त वाक्य के किस शब्द की वर्तनी अशुद्ध है?

- Ans
- 1. साम्यता
 - 2. आवश्यकता
 - 3. दस्तावेजों
 - 4. सुधार

Q.10 निम्नलिखित वाक्यांश के लिए उपयुक्त सार्थक शब्द है:

सौ साल का समय

- Ans
- 1. सौसाल
 - 2. सौ वर्ष
 - 3. शताब्दी
 - 4. सौ समय

Q.11 इन वैज्ञानिकों ने कई आविष्कार किए हैं। - वाक्य में प्रयुक्त रेखांकित एकार्थी शब्द का उचित अर्थ है-

- Ans
- 1. नवीन वस्तु का निर्माण करना
 - 2. रहस्य खोजना
 - 3. हथियार बनाना
 - 4. अज्ञात स्थान खोजना

Q.12 उचित तत्सम शब्द चुनकर वाक्य पूर्ण करें-
'रसोई का सभी सामान _____ में रखा है।'

- Ans
- 1. दुछत्ती
 - 2. भांडागार
 - 3. भण्डार
 - 4. घर

Q.13 निम्नलिखित में से कौन-सा शब्द स्त्रीलिंग नहीं है?

- Ans
- 1. सुर
 - 2. देव
 - 3. लज्जा
 - 4. दानव

Q.14 'इस साँप को मारना है, _____।'

उपरोक्त वाक्य को पूरा करने के लिए उचित सार्थक और निरर्थक शब्द युग्म वाले विकल्प का चयन करें-

- Ans
- 1. कोई डंडा-लाठी लाओ
 - 2. कोई डंडा-वंडा लाओ
 - 3. कोई डंडा लाओ-वाओ
 - 4. कोई-सोई डंडा लाओ

Q.15 निम्नलिखित में से एकवचन से संबंधित वाक्य है-

- Ans
- 1. उसके हाथ में पतंग है।
 - 2. वे लड़के बहुत होनहार थे।
 - 3. कुछ अध्यापिकाएँ कमरे में बैठी हैं।
 - 4. मुझे कुछ जरूरी वस्तुएँ चाहिए।

Comprehension:

गद्यांश के आधार पर प्रश्न का उत्तर दें।

आज के भागदौड़ के इस युग में न केवल व्यापारी, वकील, अभिनेता, शिक्षक, चिकित्सक, इंजीनियर और प्रबंधक ही तनाव के शिकार हैं, बल्कि अपने _____ (1) और परीक्षा से चिंतित छात्र-छात्राएँ भी कम तनावग्रस्त नहीं हैं। इसका बुरा प्रभाव उनके _____ (2) पर पड़ता है। कुछ लोग _____ (3) तंगी के कारण तनावग्रस्त हैं तो कुछ सभी प्रकार की सुविधाओं से _____ (4) होने पर भी उन्हें बनाए रखने और निरंतर बढ़ाने की _____ (5) से तनावग्रस्त हैं। यह तनाव हृदय-रोग, अलसर, डायबिटीज़ और दूसरी बीमारियों का भी कारण बन रहा है।

SubQuestion No : 16

Q.16 गद्यांश के प्रथम रिक्त स्थान को निम्न में से सर्वोचित शब्द से पूर्ण करें--

- Ans
- 1. भूत
 - 2. कैरियर
 - 3. चरित्र
 - 4. परिवार

Comprehension:

गद्यांश के आधार पर प्रश्न का उत्तर दें।

आज के भागदौड़ के इस युग में न केवल व्यापारी, वकील, अभिनेता, शिक्षक, चिकित्सक, इंजीनियर और प्रबंधक ही तनाव के शिकार हैं, बल्कि अपने _____ (1) और परीक्षा से चिंतित छात्र-छात्राएँ भी कम तनावग्रस्त नहीं हैं। इसका बुरा प्रभाव उनके _____ (2) पर पड़ता है। कुछ लोग _____ (3) तंगी के कारण तनावग्रस्त हैं तो कुछ सभी प्रकार की सुविधाओं से _____ (4) होने पर भी उन्हें बनाए रखने और निरंतर बढ़ाने की _____ (5) से तनावग्रस्त हैं। यह तनाव हृदय-रोग, अलसर, डायबिटीज़ और दूसरी बीमारियों का भी कारण बन रहा है।

SubQuestion No : 17

Q.17 गद्यांश के द्वितीय रिक्त स्थान को निम्न में से सर्वोचित शब्द से पूर्ण करें--

- Ans**
- 1. भाग
 - 2. स्तर
 - 3. स्वास्थ्य
 - 4. जीव

Comprehension:

गद्यांश के आधार पर प्रश्न का उत्तर दें।

आज के भागदौड़ के इस युग में न केवल व्यापारी, वकील, अभिनेता, शिक्षक, चिकित्सक, इंजीनियर और प्रबंधक ही तनाव के शिकार हैं, बल्कि अपने _____ (1) और परीक्षा से चिंतित छात्र-छात्राएँ भी कम तनावग्रस्त नहीं हैं। इसका बुरा प्रभाव उनके _____ (2) पर पड़ता है। कुछ लोग _____ (3) तंगी के कारण तनावग्रस्त हैं तो कुछ सभी प्रकार की सुविधाओं से _____ (4) होने पर भी उन्हें बनाए रखने और निरंतर बढ़ाने की _____ (5) से तनावग्रस्त हैं। यह तनाव हृदय-रोग, अलसर, डायबिटीज़ और दूसरी बीमारियों का भी कारण बन रहा है।

SubQuestion No : 18

Q.18 गद्यांश के तृतीय रिक्त स्थान को निम्न में से सर्वोचित शब्द से पूर्ण करें--

- Ans**
- 1. प्रेम की
 - 2. मानसिक
 - 3. शालीनता
 - 4. आर्थिक

Comprehension:

गद्यांश के आधार पर प्रश्न का उत्तर दें।

आज के भागदौड़ के इस युग में न केवल व्यापारी, वकील, अभिनेता, शिक्षक, चिकित्सक, इंजीनियर और प्रबंधक ही तनाव के शिकार हैं, बल्कि अपने _____ (1) और परीक्षा से चिंतित छात्र-छात्राएँ भी कम तनावग्रस्त नहीं हैं। इसका बुरा प्रभाव उनके _____ (2) पर पड़ता है। कुछ लोग _____ (3) तंगी के कारण तनावग्रस्त हैं तो कुछ सभी प्रकार की सुविधाओं से _____ (4) होने पर भी उन्हें बनाए रखने और निरंतर बढ़ाने की _____ (5) से तनावग्रस्त हैं। यह तनाव हृदय-रोग, अलसर, डायबिटीज़ और दूसरी बीमारियों का भी कारण बन रहा है।

SubQuestion No : 19

Q.19 गद्यांश के चतुर्थ रिक्त स्थान को निम्न में से सर्वोचित शब्द से पूर्ण करें--

- Ans**
- 1. संबद्ध
 - 2. अभावग्रस्त
 - 3. दूर
 - 4. संपन्न

Comprehension:

गद्यांश के आधार पर प्रश्न का उत्तर दें।

आज के भागदौड़ के इस युग में न केवल व्यापारी, वकील, अभिनेता, शिक्षक, चिकित्सक, इंजीनियर और प्रबंधक ही तनाव के शिकार हैं, बल्कि अपने _____ (1) और परीक्षा से चिंतित छात्र-छात्राएँ भी कम तनावग्रस्त नहीं हैं। इसका बुरा प्रभाव उनके _____ (2) पर पड़ता है। कुछ लोग _____ (3) तंगी के कारण तनावग्रस्त हैं तो कुछ सभी प्रकार की सुविधाओं से _____ (4) होने पर भी उन्हें बनाए रखने और निरंतर बढ़ाने की _____ (5) से तनावग्रस्त हैं। यह तनाव हृदय-रोग, अलसर, डायबिटीज़ और दूसरी बीमारियों का भी कारण बन रहा है।

SubQuestion No : 20

Q.20 गद्यांश के पंचम रिक्त स्थान को निम्न में से सर्वोचित शब्द से पूर्ण करें--

- Ans**
- 1. चल-पहल
 - 2. भागदौड़
 - 3. जिज्ञासा
 - 4. भावना