

Constable GD in CAPFs and SSF Rifleman GD in AR and Sepoy in NCB Examination 2025

Exam Date	12/02/2025
Exam Time	3:00 PM - 4:00 PM
Subject	Constable GD Examination 2025

Section : Part-A-General Intelligence and Reasoning

Q.1 Select the combination of letters that when sequentially placed in the blanks of the given series, will logically complete the series.

_XRLQ_PJOT_HMRL_KPJ_

- Ans
- 1. TVMFC
 - 2. SVNFD
 - 3. SUNED
 - 4. TUMEC

Q.2 What should come in place of '?' in the given series based on the English alphabetical order?

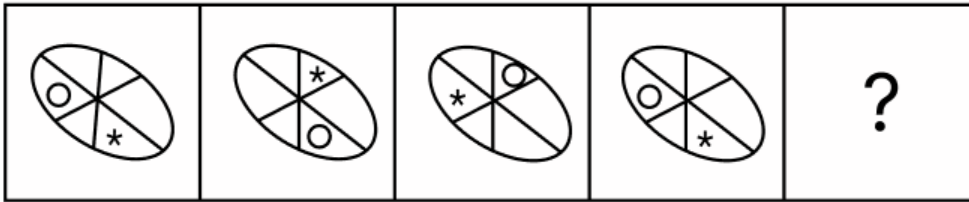
DUT GSR JQP MON ?

- Ans
- 1. NPO
 - 2. PML
 - 3. PMO
 - 4. PRQ

Q.3 Six people, B, C, D, E, F and S, are sitting in a row facing north (but not necessarily in the same order). Only two people sit to the left of S. Only two people sit between S and F. Only one person sits between F and C. D sits to the immediate left of E. How many people sit to the right of B?

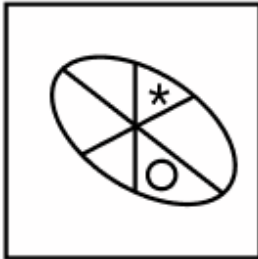
- Ans
- 1. Three
 - 2. One
 - 3. Four
 - 4. Two

Q.4 Identify the figure given in the options which when put in place of the question mark (?) will logically complete the series.

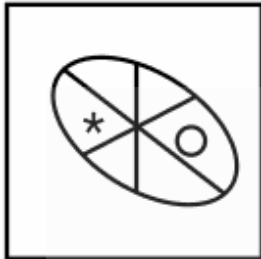


Ans

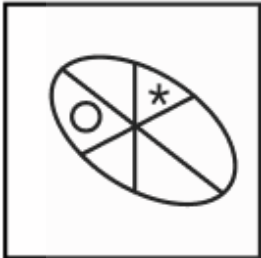
✓ 1.



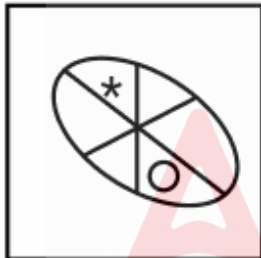
✗ 2.



✗ 3.



✗ 4.



Q.5 RN 20 is related to SI 4 in a certain way. In the same way, MK 5 is related to NF -11. To which of the following is QV 3 related, following the same logic?

✗ 1. PS -12

✗ 2. RR -11

✓ 3. RQ -13

✗ 4. PR -10

Q.6 What should come in place of the question mark (?) in the given series?

4 30 82 160 264 ?

✗ 1. 331

✓ 2. 394

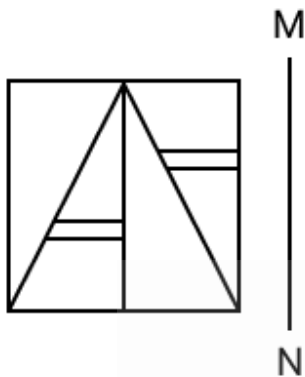
✗ 3. 303

✗ 4. 342

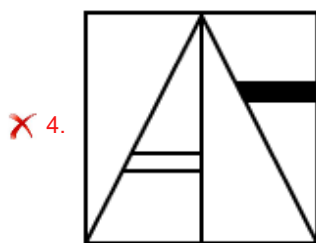
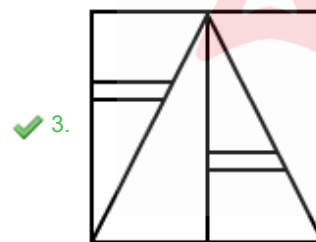
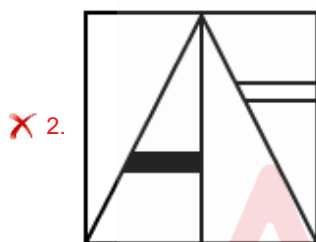
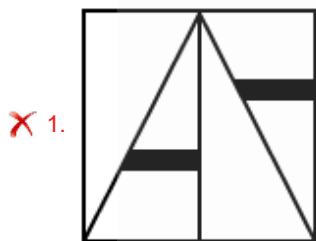
Q.7 Each letter in the word LANGUID is arranged in the English alphabetical order. How many letters are there in the English alphabetical order between the letter which is third from the left end and the one which is first from the right end in the new letter-cluster thus formed?

- Ans
- 1. 16
 - 2. 12
 - 3. 14
 - 4. 13

Q.8 Select the correct mirror image of the given figure when the mirror is placed at MN as shown below.



Ans



Q.9 Based on the English alphabetical order, three of the following four letter-clusters are alike in a certain way and thus form a group. Which letter-cluster DOES NOT belong to that group?

(Note: The odd one out is not based on the number of consonants/vowels or their position in the letter-cluster.)

- Ans
- 1. MOL
 - 2. YXV
 - 3. OQN
 - 4. HJG

Q.10 In a certain code language, 'MCOPT' is coded as '20' and 'VSB' is coded as '12'. What is the code for 'JIGETY' in the given language?

- Ans
- 1. 24
 - 2. 18
 - 3. 22
 - 4. 16

Q.11 Which two numbers should be interchanged to make the given equation correct?

$$50 \times 3 + 12 \times 5 - (66 \div 2) + 11 \times 4 - 22 = 160$$

(Note: Interchange should be done of entire number and not individual digits of a given number)

- Ans
- 1. 3 and 2
 - 2. 5 and 3
 - 3. 22 and 2
 - 4. 12 and 11

Q.12 Read the given statements and conclusions carefully. Assuming that the information given in the statements is true, even if it appears to be at variance with commonly known facts, decide which of the given conclusions logically follow(s) from the statements.

Statements:

All cucumbers are carrots.

All cucumbers are beans.

Some beans are apples.

Conclusions:

(I): Some apples are cucumbers.

(II): Some beans are carrots.

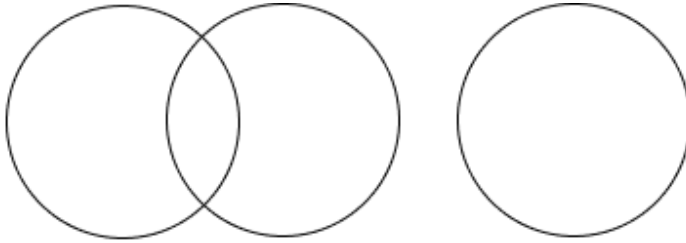
- Ans
- 1. Only conclusion (I) follows.
 - 2. Neither conclusion (I) nor (II) follows.
 - 3. Both conclusions (I) and (II) follow.
 - 4. Only conclusion (II) follows.

Q.13 Select the Venn diagram that best illustrates the relationship among the following classes.

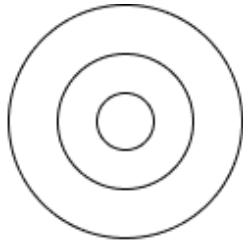
Pizza, Pasta, Noodles

Ans

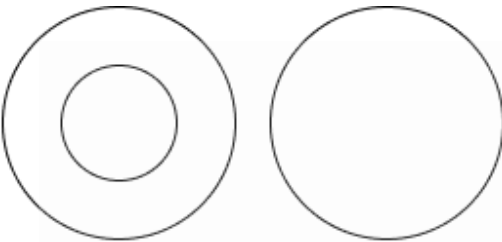
✗ 1.



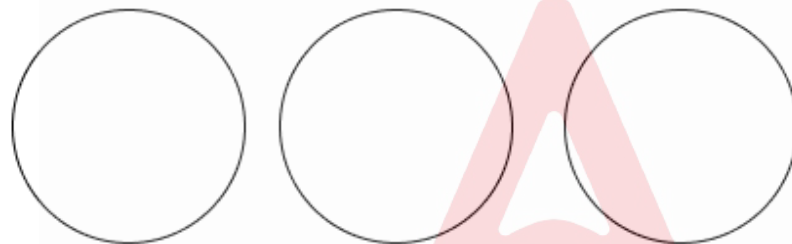
✗ 2.



✗ 3.



✓ 4.



Q.14 ESAW is related to GVCZ in a certain way based on the English alphabetical order. In the same way, TIPD is related to VLRG. To which of the given options is XUNC related, following the same logic?

Ans

✗ 1. YXRH

✗ 2. AYQG

✓ 3. ZXPF

✗ 4. AYRH

Q.15 In a certain code language,

'C * Q' means 'C is the mother of Q',
 'C - Q' means 'C is the father of Q',
 'C + Q' means 'C is the sister of Q' and
 'C # Q' means 'C is the brother of Q'

Based on the above, how is L related to U if 'U * F - L # M'?

Ans

✗ 1. Son

✓ 2. Son's son

✗ 3. Brother

✗ 4. Daughter

Q.16 Seven people, E, F, G, H, K, L and M, are sitting in a row, facing north (but not necessarily in the same order). Only two people sit to the right of G. Only two people sit between E and M. M sits to the immediate left of G. H sits to the immediate right of K. Who sits at the third position from the left end of the line?

- Ans
- 1. F
 - 2. E
 - 3. H
 - 4. M

Q.17 What should come in place of the question mark (?) in the given series?

24 34 54 94 174 ?

- Ans
- 1. 333
 - 2. 335
 - 3. 334
 - 4. 336

Q.18 A dice has its faces marked by letters M, I, T, A, P and D. Two positions of the same dice are given below. Which face is opposite to face I?

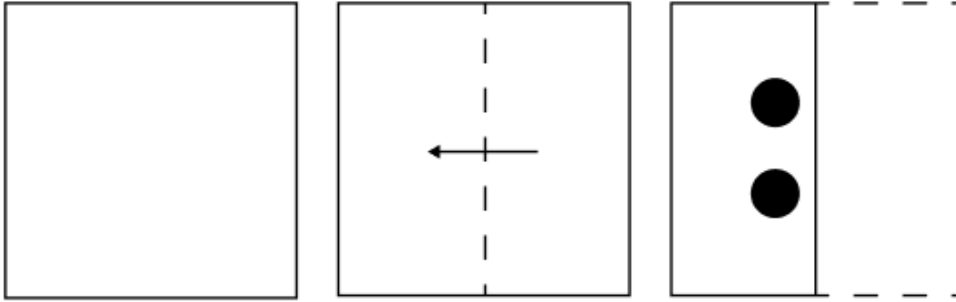


- Ans
- 1. M
 - 2. P
 - 3. T
 - 4. A

Q.19 In a certain code language, 'HIDS' is coded as '1273' and 'DISK' is coded as '3210'. What is the code for 'K' in the given code language?


- Ans
- 1. 3
 - 2. 0
 - 3. 1
 - 4. 2

Q.20 A square sheet of paper is folded along the dotted line successively along the directions shown and is then punched in the end. How would the paper look when unfolded?




Ans


✗ 1.




✓ 2.



✗ 3.



✗ 4.



Section : Part-B-General Knowledge and General awareness

Q.1 According to the Constitution, India is a _____.

- Ans
- ✗ 1. Commonwealth of States
 - ✗ 2. Federation of States
 - ✗ 3. Confederation of States
 - ✓ 4. Union of States

Q.2 Thanjavur Quartet is best remembered for the revival and codification of which ancient classical dance form?

- Ans
- 1. Bharatanatyam
 - 2. Mohiniattam
 - 3. Kathakali
 - 4. Kathak

Q.3 In September, the Union Cabinet approved the One Nation, One Poll recommendations proposed by whom among the following?

- Ans
- 1. Dhananjaya Yeshwant Chandrachud
 - 2. Ashwini Vaishnaw
 - 3. Ram Nath Kovind
 - 4. Pratibha Patil

Q.4 Bushu, Yemshe and Tokhu Emong are some of the cultural festivals celebrated by the tribal people of which state?

- Ans
- 1. Nagaland
 - 2. Arunachal Pradesh
 - 3. Jharkhand
 - 4. Sikkim

Q.5 Ostriches were found in India during which period?

- Ans
- 1. Palaeolithic
 - 2. Chalcolithic
 - 3. Epipalaeolithic
 - 4. Neolithic

Q.6 The FIFA U-17 Women's World Cup was held at _____ venues in India from October 11 to 30, 2022.

- Ans
- 1. two
 - 2. seven
 - 3. three
 - 4. five

Q.7 According to the Indian Constitution, which of the following powers are NOT vested in Governor?

- Ans
- 1. Writs Issuing powers
 - 2. Discretionary powers
 - 3. Legislative powers
 - 4. Financial powers

Q.8 A geographic region that has separate but similar ecosystems characterised by a distinct climate is called a(n) _____.

- Ans
- 1. ecosystem
 - 2. biosphere
 - 3. organism
 - 4. biome

Q.9 Which Five-Year Plan was interrupted due to the Indo-Pak War and economic crisis?

- Ans
- 1. Fifth Plan
 - 2. Second Plan
 - 3. First Plan
 - 4. Third Plan

Q.10 How many indicators were included in National Multidimensional Poverty Index 2021 of India?

- Ans**
- 1. 14
 - 2. 8
 - 3. 12
 - 4. 10

Q.11 A balanced budget refers to a situation where:

- Ans**
- 1. government revenue equates government expenditure
 - 2. private revenue equates government expenditure
 - 3. government revenue equates government investment
 - 4. government revenue equates private expenditure

Q.12 Who was the youngest medal winner for India at the Asian Games event held in 2023?

- Ans**
- 1. Parul Chaudhary
 - 2. Sanjana Bathula
 - 3. Annu Rani
 - 4. Anahat Singh

Q.13 Noted Xatriya (Sattriya) and Odissi dance exponent and Sangeet Natak Akademi Award winner, Garima Hazarika belong to the Indian state of _____.

- Ans**
- 1. Odisha
 - 2. West Bengal
 - 3. Assam
 - 4. Kerala

Q.14 As per Census 2011, what was the percentage of scheduled tribes of the total population in India?

- Ans**
- 1. 2.4%
 - 2. 8.6%
 - 3. 8.2%
 - 4. 10.4%

Q.15 Which type of industry uses natural resources with minimal human intervention and is oriented towards nature?

- Ans**
- 1. Primary industry
 - 2. Manufacturing industry
 - 3. Genetic industry
 - 4. Service industry

Q.16 Which climate zone is characterised by hot and humid conditions throughout the year?

- Ans**
- 1. Tropical
 - 2. Desert
 - 3. Temperate
 - 4. Polar

Q.17 Which of the following is a straight chain alkane composed of 4 carbon atoms that is commonly used as a fuel and aerosol propellant?

- Ans**
- 1. 2-Methylbutane
 - 2. Isobutane
 - 3. Butane
 - 4. 2, 3-Dimethylbutane

Q.18 Who took charge as the new Chief Minister of Delhi in September 2024?

- Ans
- 1. Atishi Marlena
 - 2. Arvind Kejriwal
 - 3. Sanjay Singh
 - 4. Manish Sisodia

Q.19 Arnab Chakrabarty is associated with which of the following musical instruments?

- Ans
- 1. Sarangi
 - 2. Mridangam
 - 3. Surbahar
 - 4. Sarod

Q.20 Who was the founder of the Tattwabodhini Sabha, a reformist movement in Bengal?

- Ans
- 1. Debendranath Tagore
 - 2. Keshab Chandra Sen
 - 3. Ishwar Chandra Vidyasagar
 - 4. Swami Vivekananda

Section : Part-C-Elementary Mathematics

Q.1 An aeroplane travels distances 1320 km, 1760 km and 2095 km at the rate of 528 km/h, 352 km/h and 419 km/h, respectively. Find the average speed (in km/h) of the aeroplane.

- Ans
- 1. 398
 - 2. 497
 - 3. 452
 - 4. 414

Q.2 Find the mean proportional between $(4 + \sqrt{5})$ and $(12 - 2\sqrt{20})$.

- Ans
- 1. $\sqrt{39}$
 - 2. $2\sqrt{7 - \sqrt{5}}$
 - 3. $\sqrt{7 - \sqrt{5}}$
 - 4. $2\sqrt{7 + \sqrt{5}}$

Q.3 Ayush starts his journey from Chandigarh to Ludhiana with his car at a speed of 77 km/hr and returns at a speed of 63 km/hr. If the distance between Chandigarh and Ludhiana is 97 km, then what is the average speed (in km/hr) of Ayush during his whole journey?

- Ans
- 1. 69
 - 2. 68.2
 - 3. 68
 - 4. 69.3

Q.4 What is the smallest number which is when increased by 5 is divisible by 18, 30, 36 and 24?

- Ans
- 1. 355
 - 2. 365
 - 3. 350
 - 4. 360

Q.5 Two trains are moving in opposite directions at speeds of 80 km/h and 70 km/h. The length of one train is 180 m. The time taken by them to cross each other is 19 seconds. The length (in m) of the other train, correct to 2 decimal places, is:

- Ans
- 1. 614.03
 - 2. 611.66
 - 3. 610.21
 - 4. 613.04

Q.6 If p varies directly to q and $p_1 = 15$, $q_1 = 630$, and $p_2 = 6$, then find the value of q_2 .

- Ans
- 1. 7
 - 2. 84
 - 3. 42
 - 4. 252

Q.7 A and B working separately can finish a work in 18 days and 24 days, respectively. A begins the work and works for two consecutive days, while B works on the 3rd day. This pattern is continued till the work is completed. In how many days will the work be completed?

- Ans
- 1. $14\frac{3}{5}$
 - 2. $16\frac{2}{3}$
 - 3. $23\frac{2}{3}$
 - 4. $19\frac{1}{2}$

Q.8 The salary of a worker is first increased by 8% and then it is decreased by 8%. What is the percentage change in his salary?

- Ans
- 1. 0.81%
 - 2. 0.25%
 - 3. 0.49%
 - 4. 0.64%

Q.9 David has two grandsons Rodney and Amit. 15 year old Rodney gets some money from David's wealth and 16 year old Amit gets rest of the money. But Rodney and Amit will get money only when they turn 22 years old. Till then the money is in a bank getting interest at rate 8% compounded annually. When both turn 22, they receive the same amount. How much had David given Amit (in ₹) initially, if total money with David was ₹23400?

- Ans
- 1. 12150
 - 2. 12500
 - 3. 11000
 - 4. 11250

Q.10 A profit earned when an item is sold for ₹4,000 is ten times the loss incurred when it is sold for ₹ 2,790. At what price should the item be sold if it is desired to make a profit of 20%?

- Ans
- 1. ₹3,075
 - 2. ₹3,860
 - 3. ₹3,480
 - 4. ₹2,900

Q.11 A merchant fixes the marked price of his goods at 60% above the cost price. He sells his goods at 25% discount. His percentage of profit is:

- Ans
- 1. 25%
 - 2. 15%
 - 3. 10%
 - 4. 20%

Q.12 A square field has its area equal to 252 m^2 . Find its perimeter.

- Ans
- 1. $25\sqrt{7} \text{ m}$
 - 2. $23\sqrt{7} \text{ m}$
 - 3. $24\sqrt{7} \text{ m}$
 - 4. $22\sqrt{7} \text{ m}$

Q.13 What will be difference in population 3 years ago and 2 years ago of a town, whose current population is 100000 and which is increasing at a rate of 25% every year?

- Ans
- 1. 12050
 - 2. 12800
 - 3. 13150
 - 4. 12250

Q.14 Evaluate: $(-9) - (-60) \div (-15) + (-3) \times 9$

- Ans
- 1. -43
 - 2. -42
 - 3. -40
 - 4. -39

Q.15 The simple interest on a principal amount (in ₹) is ₹191 for a period of 5 years at the rate of 2% per annum. The principal amount (in ₹) is:

- Ans
- 1. 1910
 - 2. 1908
 - 3. 1914
 - 4. 1913

Q.16 The population of a district is 333000, out of which 213000 are males. 71% of the population is literate. If 71% males are literate, then what percentage of females are literate?

- Ans
- 1. 68%
 - 2. 69%
 - 3. 74%
 - 4. 71%

Q.17 The LCM of $2^3 \times 9^2 \times 13$, $2^2 \times 13^2 \times 19$ and $9^3 \times 13^2 \times 19^2$ is:

- Ans
- 1. $2^3 \times 9^3 \times 13^2 \times 19^2$
 - 2. $2^2 \times 9^3 \times 13 \times 19^2$
 - 3. $2^2 \times 9^2 \times 13^2 \times 19^3$
 - 4. $2^3 \times 9^2 \times 13^2 \times 19$

Q.18 There are 30 members in group A, 76 members in group B and 44 members in group C. All the members of these groups went to a restaurant. The average amount spent on each member of group A, B and C is ₹249, ₹168 and ₹498, respectively. The total average amount (in ₹) spent per member is:

- Ans
- 1. 284
 - 2. 282
 - 3. 281
 - 4. 279

Q.19 A dishonest shopkeeper promises to sell his goods at cost price. However, he uses a weight that actually weighs 37% less than what is written on it. Find his profit percentage.

- Ans
- 1. $60\frac{92}{63}\%$
 - 2. $59\frac{47}{63}\%$
 - 3. $57\frac{46}{63}\%$
 - 4. $58\frac{46}{63}\%$

Q.20 The value of $40 - 3 \times [10 + 6 \times \{20 - 10(6 - 5) \times 2\} \div 47]$ is:

- Ans
- 1. 7
 - 2. 5
 - 3. 1
 - 4. 10

Section : Part-D-English

Q.1 Select the most appropriate option to fill in the blank.

3D printing is an exciting new technology _____ promises to very quickly create anything people can design.

- Ans
- 1. the
 - 2. that
 - 3. than
 - 4. then

Q.2 Select the most appropriate one-word substitute for the underlined segment in the given sentence.

She provided a compact and precise summary of her research work.

- Ans
- 1. verbose
 - 2. diffuse
 - 3. succinct
 - 4. redundant

Q.3 The following sentence has been divided into parts. One of them may contain an error. Select the part that contains the error from the given options. If you don't find any error, mark 'No error' as your answer.

In the Director's party,/ everyone noticed/ that he sings more too faster.

- Ans**
- 1. that he sings more too faster.
 - 2. In the Director's party,
 - 3. No error.
 - 4. everyone noticed

Q.4 Select the most appropriate meaning of the given idiom.

The proof of the pudding is in the eating

- Ans**
- 1. Trust is built by sharing good food
 - 2. A person can only know if something is good or bad by trying it
 - 3. One has the evidence if they are alert
 - 4. Its better to be well-fed than to go hungry

Q.5 Identify the sentence with the INCORRECTLY spelt word.

- Ans**
- 1. She enjoyed the delicious dinner and dessert.
 - 2. The team worked hard to complete the project.
 - 3. We visited several historical sites during our trip.
 - 4. The hotel room was very clean and comfortable.

Q.6 Select the word that best completes the given sentence. Determine the collocation through the sentence.

Ramesh has been _____ involved in social service for 30 years.

- Ans**
- 1. actively
 - 2. exactly
 - 3. gently
 - 4. brightly

Q.7 Select the most appropriate option to fill in the blank.

The security officer ordered the group _____ the premises immediately.

- Ans**
- 1. to left
 - 2. to leave
 - 3. left
 - 4. leaving

Q.8 Select the most appropriate option to substitute the underlined segment in the given sentence.

Somebody have left dirty clothes on the bed.

- Ans**
- 1. has left
 - 2. were left
 - 3. have been left
 - 4. was left

Q.9 Identify the sentence with the INCORRECT usage of the adverb.

- Ans**
- 1. The teacher noticed that all students worked meticulously to complete the project on time.
 - 2. The teacher noticed that all students worked strenuous to complete the project on time.
 - 3. The teacher noticed that all students worked hard to complete the project on time.
 - 4. The teacher noticed that all students worked laboriously to complete the project on time.

Q.10 Select the INCORRECTLY spelt word in the following sentence.
The necessary documents are required for the application process.

- Ans
- 1. process
 - 2. necessary
 - 3. required
 - 4. application

Q.11 Select the most appropriate synonym of the given word.

Brutal

- Ans
- 1. Notable
 - 2. Heroic
 - 3. Ruthless
 - 4. Active

Q.12 Select the most appropriate ANTONYM of the underlined word in the given sentence.

Mrs. Sharma found her husband to be a sloppy dresser.

- Ans
- 1. messy
 - 2. meticulous
 - 3. shabby
 - 4. untidy

Q.13 In the sentence, 'Her argument was so convoluted', what is a synonym of the word 'convoluted'?

- Ans
- 1. Straightforward
 - 2. Neutral
 - 3. Direct
 - 4. Complex

Q.14 Select the most appropriate ANTONYM of the word in brackets to fill in the blank.

The artist decided to use the _____ (traditional) approach in creating a classic-style painting.

- Ans
- 1. ancient
 - 2. stale
 - 3. contemporary
 - 4. unique

Q.15 Select the most appropriate ANTONYM of the given word.

Haughty

- Ans
- 1. Modest
 - 2. Distracted
 - 3. Transient
 - 4. Ample

Comprehension:

In the following passage, some words have been deleted. Read the passage carefully and select the most appropriate option to fill in each blank.

The farmers in our village were fed up with the birds that used to eat ____ [A] ____ all their harvested grains. They tried to take turns watching, ____ [B] ____ still, they were not able to save the crops. One of the older men in our village suggested that we should build a scarecrow. The idea was well-received. The face of the scarecrow was made using an earthen pot, while bundles of straw ____ [C] ____ to create its arms. Finally, it was accessorised with a hat and a coat to perfect ____ [D] ____ illusion as a man. It was a ____ [E] ____ coat that used to belong to a beggar who stayed near the temple.

SubQuestion No : 16

Q.16 Select the most appropriate option to fill in the blank marked [A].

- Ans**
- 1. off
 - 2. on
 - 3. up
 - 4. away

Comprehension:

In the following passage, some words have been deleted. Read the passage carefully and select the most appropriate option to fill in each blank.

The farmers in our village were fed up with the birds that used to eat ____ [A] ____ all their harvested grains. They tried to take turns watching, ____ [B] ____ still, they were not able to save the crops. One of the older men in our village suggested that we should build a scarecrow. The idea was well-received. The face of the scarecrow was made using an earthen pot, while bundles of straw ____ [C] ____ to create its arms. Finally, it was accessorised with a hat and a coat to perfect ____ [D] ____ illusion as a man. It was a ____ [E] ____ coat that used to belong to a beggar who stayed near the temple.

SubQuestion No : 17

Q.17 Select the most appropriate option to fill in the blank marked [B].

- Ans**
- 1. because
 - 2. as
 - 3. for
 - 4. but

Comprehension:

In the following passage, some words have been deleted. Read the passage carefully and select the most appropriate option to fill in each blank.

The farmers in our village were fed up with the birds that used to eat ____ [A] ____ all their harvested grains. They tried to take turns watching, ____ [B] ____ still, they were not able to save the crops. One of the older men in our village suggested that we should build a scarecrow. The idea was well-received. The face of the scarecrow was made using an earthen pot, while bundles of straw ____ [C] ____ to create its arms. Finally, it was accessorised with a hat and a coat to perfect ____ [D] ____ illusion as a man. It was a ____ [E] ____ coat that used to belong to a beggar who stayed near the temple.

SubQuestion No : 18

Q.18 Select the most appropriate option to fill in the blank marked [C].

- Ans**
- 1. are used
 - 2. were used
 - 3. had been used
 - 4. has been used

Comprehension:

In the following passage, some words have been deleted. Read the passage carefully and select the most appropriate option to fill in each blank.

The farmers in our village were fed up with the birds that used to eat ____ [A] ____ all their harvested grains. They tried to take turns watching, ____ [B] ____ still, they were not able to save the crops. One of the older men in our village suggested that we should build a scarecrow. The idea was well-received. The face of the scarecrow was made using an earthen pot, while bundles of straw ____ [C] ____ to create its arms. Finally, it was accessorised with a hat and a coat to perfect ____ [D] ____ illusion as a man. It was a ____ [E] ____ coat that used to belong to a beggar who stayed near the temple.

SubQuestion No : 19

Q.19 Select the most appropriate option to fill in the blank marked [D].

- Ans**
- 1. its
 - 2. it's
 - 3. theirs
 - 4. their

Comprehension:

In the following passage, some words have been deleted. Read the passage carefully and select the most appropriate option to fill in each blank.

The farmers in our village were fed up with the birds that used to eat ____ [A] ____ all their harvested grains. They tried to take turns watching, ____ [B] ____ still, they were not able to save the crops. One of the older men in our village suggested that we should build a scarecrow. The idea was well-received. The face of the scarecrow was made using an earthen pot, while bundles of straw ____ [C] ____ to create its arms. Finally, it was accessorised with a hat and a coat to perfect ____ [D] ____ illusion as a man. It was a ____ [E] ____ coat that used to belong to a beggar who stayed near the temple.

SubQuestion No : 20

Q.20 Select the most appropriate option to fill in the blank marked [E].

- Ans** 1. brown, old, tattered
 2. tattered, old, brown
 3. brown, tattered, old
 4. old, tattered, brown

Section : Part-D-Hindi

Q.1 निम्न में से किस वाक्य में गुणवाचक विशेषण का उचित प्रयोग हुआ है?

- Ans** 1. सीधा राजा ही उत्तम प्रशासन प्रदान कर सकता है।
 2. दुष्ट राजा ही उत्तम प्रशासन प्रदान कर सकता है।
 3. न्यायी राजा ही उत्तम प्रशासन प्रदान कर सकता है।
 4. शांत राजा ही उत्तम प्रशासन प्रदान कर सकता है।

Q.2 'आँखों पर परदा डालना' मुहावरे का सही अर्थ है -

- Ans** 1. बुद्धि न काम करना
 2. जानबूझकर गलत का पक्ष लेना
 3. सच न देखना
 4. दिखाई न देना

Q.3 अयोध्या के राजा राम लक्ष्मण के ____ भाई थे।'

उपर्युक्त वाक्य में रिक्त स्थान की पूर्ति के लिए उपयुक्त तत्सम शब्द है?

- Ans** 1. कनिष्ठ
 2. सहोदर
 3. भ्राता
 4. ज्येष्ठ

Q.4 निम्नलिखित वाक्य में रिक्त स्थान की पूर्ति सार्थक शब्द के माध्यम से करें।

यदि तुमने 50 _____ नहीं पेले तो तुम्हें _____ मिलेगा।

- Ans** 1. वज़न
 2. दंड
 3. किलो
 4. पिटाई

Q.5 'यद्यपि उसने चोरी की तथापि वह पकड़ा नहीं गया।' निम्नलिखित विकल्पों में से इस वाक्य के लिए कौन सा एक उचित संयुक्त वाक्य होगा?

- Ans** 1. उसने चोरी की पर वह पकड़ा नहीं गया।
 2. वह चोरी की पकड़ा नहीं गया।
 3. चोरी की वह पकड़ा नहीं गया।
 4. उसने चोरी की पकड़ा नहीं गया।

Q.6 निम्न में से किस वाक्य में 'ग्रस्त' के सही विलोम शब्द का प्रयोग हुआ है?

- Ans
- 1. सभी छात्र अत्यंत त्रस्त थे।
 - 2. पक्षी मुक्त हो गया।
 - 3. अक्षदा के साथ उसके पिता थे।
 - 4. रक्षिता ने सभा में प्रशंसा से युक्त वाक्य कहे।

Q.7 'सुनी' का विलोम है-

- Ans
- 1. अनकही
 - 2. अनहोनी
 - 3. असुनी
 - 4. अनसुनी

Q.8 निम्न में से किस वाक्य में सार्वनामिक विशेषण का प्रयोग नहीं हुआ है-

- Ans
- 1. ये पेड़ बहुत अच्छे लगते हैं।
 - 2. वे लोग वहाँ क्यों खड़े हैं?
 - 3. इन किताबों को पढ़िए।
 - 4. पुराने कपड़े दान कर दीजिए।

Q.9 निम्नलिखित वाक्य में वर्तनी संबंधी त्रुटि की पहचान करें।

गंगा नदि मेरे गाँव से छः सात मील पर बहती थी।

- Ans
- 1. गाँव
 - 2. नदि
 - 3. गंदा
 - 4. छः

Q.10 समाज के उत्थान के लिए हमें निरन्तर प्रयासरत् रहना होगा। वाक्य में प्रयुक्त उत्थान का विलोमार्थी शब्द है।

- Ans
- 1. आविर्भाव
 - 2. पतन
 - 3. विनाश
 - 4. जागरण

Q.11 निम्नलिखित में से कौन-सा विकल्प नीचे दिए शब्द का पर्यायवाची नहीं है?

पुष्कर

- Ans
- 1. तड़ाग
 - 2. सरोवर
 - 3. पोखर
 - 4. पुष्ट

Q.12 'आज मध्याह्न के बाद वाले व्याख्यान में अत्यंत निरसता थी।' उपरोक्त वाक्य के किस भाग में वर्तनी सम्बन्धी अशुद्धि है?

- Ans
- 1. के बाद वाले
 - 2. व्याख्यान में
 - 3. आज मध्याह्न
 - 4. अत्यंत निरसता थी

Q.13 'जो अपेक्षाकृत कम बोलता हो' वाक्यांश के लिए एक शब्द होगा-

- Ans
- 1. मिथ्यावादी
 - 2. मिताहारी
 - 3. मितव्ययी
 - 4. मितभाषी

Q.14 बड़े भाई विदा हो गये किन्तु छोटा भाई अभी शेष हैं। 'बड़े भाई' के स्थान पर उचित शब्द होगा -

- Ans
- 1. अनुजा
 - 2. अग्रज
 - 3. अग्रजा
 - 4. अनुज

Q.15 निम्नलिखित वाक्यांश हेतु सार्थक शब्द की पहचान करें।
जो बिना सोचे समझे विश्वास करें

- Ans
- 1. परम मित्र
 - 2. दास
 - 3. अन्धविश्वासी
 - 4. विश्वासी

Comprehension:

गद्यांश के आधार पर प्रश्न का उत्तर दें।

संक्षेप में हम कह सकते हैं कि दूरदर्शन, टेलीविजन या टी.वी. विज्ञान का एक अनोखा तथा 1. _____ आविष्कार है। विज्ञान ने सारी दुनिया को 2 _____ के बक्से में बंद करके घर-घर तक पहुँचा दिया है। इसके माध्यम से हम विश्व-परिवार के 3. _____ बन गये। वैज्ञानिक इससे आगे भी खोज में लगे हुए हैं। इसमें किसी और नये चमत्कार की संभावना बनी हुई है। जो भी हो, टेलीविजन ने रेडियो और 4 _____ को एक करके पूरे विश्व-समुदाय की बड़ी सेवा की है। विश्व की सभी मनुष्य ही नहीं, बल्कि कला, साहित्य, समाज, विज्ञान इत्यादि भी इससे काफी उपकृत हुए हैं तथा उन्हें 5 _____ में इससे और भी बेहतर सेवा की आशा है।

SubQuestion No : 16

Q.16 गद्यांश के आधार पर उत्तर के रूप में सही विकल्प चुनें।

1. संक्षेप में हम कह सकते हैं कि दूरदर्शन, टेलीविजन या टी.वी. विज्ञान का एक अनोखा तथा _____ आविष्कार है।

- Ans
- 1. पुराना
 - 2. अद्भुत
 - 3. अनावश्यक
 - 4. चमत्कारी

Comprehension:

गद्यांश के आधार पर प्रश्न का उत्तर दें।

संक्षेप में हम कह सकते हैं कि दूरदर्शन, टेलीविजन या टी.वी. विज्ञान का एक अनोखा तथा 1. _____ आविष्कार है। विज्ञान ने सारी दुनिया को 2 _____ के बक्से में बंद करके घर-घर तक पहुँचा दिया है। इसके माध्यम से हम विश्व-परिवार के 3. _____ बन गये। वैज्ञानिक इससे आगे भी खोज में लगे हुए हैं। इसमें किसी और नये चमत्कार की संभावना बनी हुई है। जो भी हो, टेलीविजन ने रेडियो और 4 _____ को एक करके पूरे विश्व-समुदाय की बड़ी सेवा की है। विश्व की सभी मनुष्य ही नहीं, बल्कि कला, साहित्य, समाज, विज्ञान इत्यादि भी इससे काफी उपकृत हुए हैं तथा उन्हें 5 _____ में इससे और भी बेहतर सेवा की आशा है।

SubQuestion No : 17

Q.17 गद्यांश के आधार पर उत्तर के रूप में सही विकल्प चुनें।

2. विज्ञान ने सारी दुनिया को _____ के बक्से में बंद करके घर-घर पहुँचा दिया है।

- Ans
- 1. कागज
 - 2. फल
 - 3. टेलीविजन
 - 4. कलम

Comprehension:

गद्यांश के आधार पर प्रश्न का उत्तर दें।

संक्षेप में हम कह सकते हैं कि दूरदर्शन, टेलीविजन या टी.वी. विज्ञान का एक अनोखा तथा 1. _____ आविष्कार है। विज्ञान ने सारी दुनिया को 2 _____ के बक्से में बंद करके घर-घर तक पहुँचा दिया है। इसके माध्यम से हम विश्व-परिवार के 3. _____ बन गये। वैज्ञानिक इससे आगे भी खोज में लगे हुए हैं। इसमें किसी और नये चमत्कार की संभावना बनी हुई है। जो भी हो, टेलीविजन ने रेडियो और 4 _____ को एक करके पूरे विश्व-समुदाय की बड़ी सेवा की है। विश्व की सभी मनुष्य ही नहीं, बल्कि कला, साहित्य, समाज, विज्ञान इत्यादि भी इससे काफी उपकृत हुए हैं तथा उन्हें 5 _____ में इससे और भी बेहतर सेवा की आशा है।

SubQuestion No : 18

Q.18 गद्यांश के आधार पर उत्तर के रूप में सही विकल्प चुनें।

3. इसके माध्यम से हम विश्व-परिवार का _____ बन गये।

- Ans
- 1. व्यक्ति
 - 2. सेवक
 - 3. सदस्य
 - 4. अतिथि

Comprehension:

गद्यांश के आधार पर प्रश्न का उत्तर दें।

संक्षेप में हम कह सकते हैं कि दूरदर्शन, टेलीविजन या टी.वी. विज्ञान का एक अनोखा तथा 1. _____ आविष्कार है। विज्ञान ने सारी दुनिया को 2 _____ के बक्से में बंद करके घर-घर तक पहुँचा दिया है। इसके माध्यम से हम विश्व-परिवार के 3. _____ बन गये। वैज्ञानिक इससे आगे भी खोज में लगे हुए हैं। इसमें किसी और नये चमत्कार की संभावना बनी हुई है। जो भी हो, टेलीविजन ने रेडियो और 4 _____ को एक करके पूरे विश्व-समुदाय की बड़ी सेवा की है। विश्व की सभी मनुष्य ही नहीं, बल्कि कला, साहित्य, समाज, विज्ञान इत्यादि भी इससे काफी उपकृत हुए हैं तथा उन्हें 5 _____ में इससे और भी बेहतर सेवा की आशा है।

SubQuestion No : 19

Q.19 गद्यांश के आधार पर उत्तर के रूप में सही विकल्प चुनें।

4. जो भी हो, टेलीविजन ने रेडियो और _____ को एक करके पूरे विश्व-समुदाय की बड़ी सेवा की है।

- Ans
- 1. दुनिया
 - 2. नाटक
 - 3. सिनेमा
 - 4. समाज

Comprehension:

गद्यांश के आधार पर प्रश्न का उत्तर दें।

संक्षेप में हम कह सकते हैं कि दूरदर्शन, टेलीविजन या टी.वी. विज्ञान का एक अनोखा तथा 1. _____ आविष्कार है। विज्ञान ने सारी दुनिया को 2 _____ के बक्से में बंद करके घर-घर तक पहुँचा दिया है। इसके माध्यम से हम विश्व-परिवार के 3. _____ बन गये। वैज्ञानिक इससे आगे भी खोज में लगे हुए हैं। इसमें किसी और नये चमत्कार की संभावना बनी हुई है। जो भी हो, टेलीविजन ने रेडियो और 4 _____ को एक करके पूरे विश्व-समुदाय की बड़ी सेवा की है। विश्व की सभी मनुष्य ही नहीं, बल्कि कला, साहित्य, समाज, विज्ञान इत्यादि भी इससे काफी उपकृत हुए हैं तथा उन्हें 5 _____ में इससे और भी बेहतर सेवा की आशा है।

SubQuestion No : 20

Q.20 गद्यांश के आधार पर उत्तर के रूप में सही विकल्प चुनें।

5. विश्व के सभी मनुष्य ही नहीं, बल्कि कला, साहित्य, समाज, विज्ञान इत्यादि भी इससे काफी उपकृत हुए हैं तथा _____ में इससे और भी बेहतर सेवा की आशा है।

- Ans
- 1. कृषि
 - 2. भविष्य
 - 3. समाज
 - 4. संसार