

Constable GD in CAPFs and SSF Rifleman GD in AR and Sepoy in NCB Examination 2025

| | |
|-----------|-------------------------------|
| Exam Date | 13/02/2025 |
| Exam Time | 9:00 AM - 10:00 AM |
| Subject | Constable GD Examination 2025 |

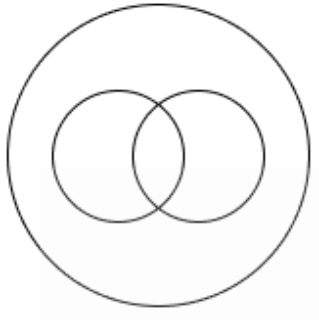
Section : Part-A-General Intelligence and Reasoning

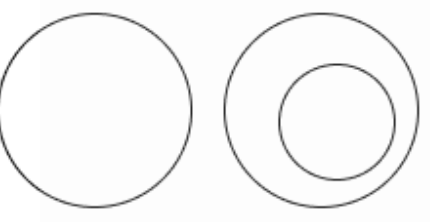
Q.1


Select the Venn diagram that best illustrates the relationship between the following classes.


Son, Father, Brother


Ans

1. 

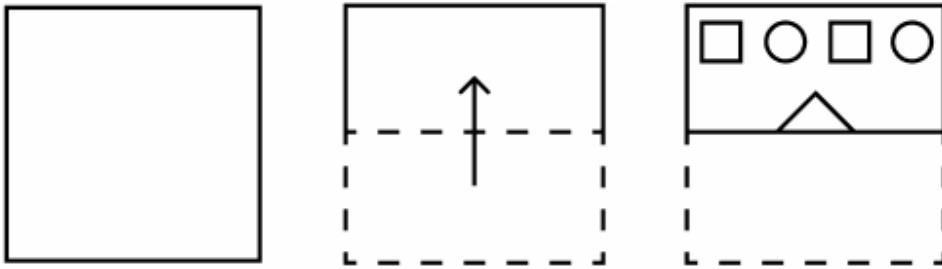
2. 

3. 

4. 



Q.2 The sequence of folding a piece of paper and the manner in which the folded paper is cut is shown in the following figures. How would this paper look when unfolded?



Ans

- ✓ 1.
- ✗ 2.
- ✗ 3.
- ✗ 4.

Q.3 Based on the English alphabetical order, three of the following four letter-clusters are alike in a certain way and thus form a group. Which letter-cluster DOES NOT belong to that group?

(Note: The odd one out is not based on the number of consonants/vowels or their position in the letter-cluster.)

- ✗ 1. ZCA
- ✗ 2. GJH
- ✓ 3. MPD
- ✗ 4. LOM

Q.4 Based on some logic, 'MARVEL' is written as 'SXROCP' and 'STRING' is written as 'YQRBLK'. Following the same logic, 'CIRCLE' can be written as:

- ✗ 1. IFRVJK
- ✗ 2. KFRVJK
- ✗ 3. KFRVJI
- ✓ 4. IFRVJI

Q.5 Select the option that represents the letters that, when sequentially placed from left to right in the blanks below, will complete the letter series.



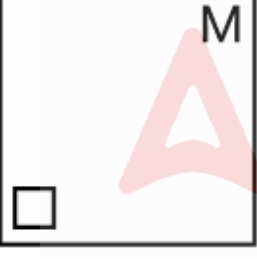
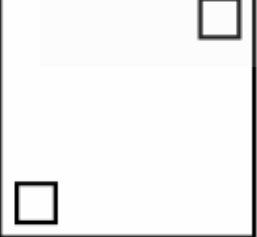
tar__olvt_riv__vtar_v_l_

- Ans
- 1. tarivolv
 - 2. ivaoliov
 - 3. valtavri
 - 4. volvtari

Q.6 Identify the figure given in the options which when put in place of the question mark (?) will logically complete the series.

| | | | | |
|----------|----------|----------|-----------|---|
| Q U U | ☆ ○ ☆ | % ◇ ◇ | \$ @ @ | ? |
|----------|----------|----------|-----------|---|

Ans

- 1. 
- 2. 
- 3. 
- 4. 

Q.7 In a certain code language, 'SBZFPA' is coded as '18' and 'GNPQ' is coded as '12'. What is the code for 'LCEZRDX' in the given code language?

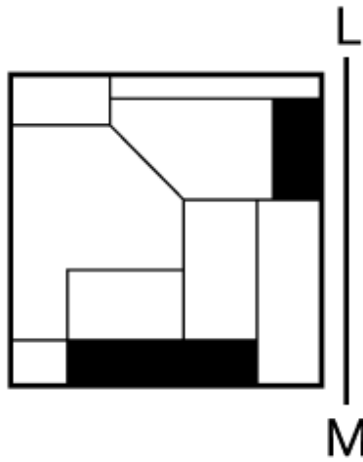
- Ans
- 1. 21
 - 2. 19
 - 3. 26
 - 4. 24

Q.8 Eight people are sitting in two parallel rows containing 4 people each in such a way that there is equal distance between adjacent persons.
In row 1, L, M, N and O are seated and all of them are facing south.
In row 2, U, V, W and X are seated and all of them are facing north.
Thus, each person faces another person from the other row.
W sits to the immediate right of U. Only two people sit between L and M. U faces L. The one who faces N sits to the immediate left of V. X does not sit at any of the extreme ends.
Who amongst the following faces O?

- Ans
- 1. V
 - 2. X
 - 3. U
 - 4. W

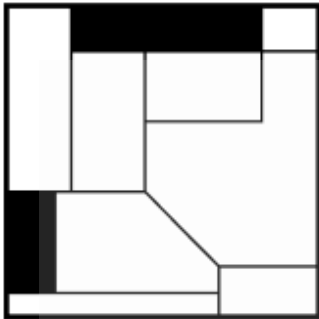


Q.9 Select the correct mirror image of the given figure when the mirror is placed at LM as shown below.

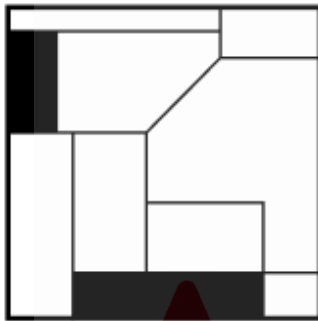


Ans

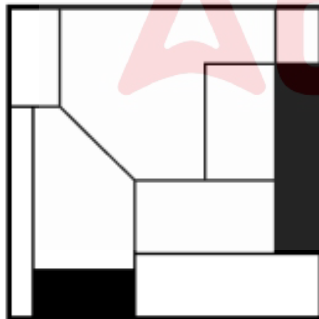
✗ 1.



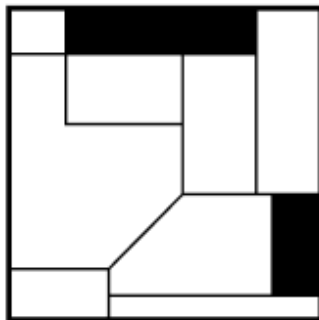
✓ 2.



✗ 3.



✗ 4.



Q.10 What will come in the place of the question mark '?' in the following equation, if '-' and '÷' are interchanged and 'x' and '+' are interchanged?

$$24 + 25 - 5 \times 2 \div 9 = ?$$

- Ans
- 1. 115
 - 2. 114
 - 3. 113
 - 4. 112

Q.11 BD 11 is related to CE 33 in a certain way. In the same way, ST 10 is related to TU 30. To which of the given options is UB 2 related, following the same logic?

- Ans
- 1. UC 6
 - 2. VC 8
 - 3. VC 6
 - 4. UC 8

Q.12 Seven people, L, M, N, O, W, X and Y, are sitting in a row, facing north (but not necessarily in the same order). Only L sits to the left of X. Only four people sit between L and N. Only M sits between O and W, and O is not an immediate neighbour of N. Who sits at the extreme right of the line?

- Ans
- 1. L
 - 2. Y
 - 3. O
 - 4. N

Q.13 The position(s) of how many letters will remain unchanged if each of the letters in the word DETECTOR is arranged in the reverse English alphabetical order?

- Ans
- 1. Two
 - 2. One
 - 3. Zero
 - 4. Three

Q.14 What should come in place of the question mark (?) in the given series?

$$53 \ 42 \ 49 \ 38 \ 45 \ 34 \ ?$$

- Ans
- 1. 41
 - 2. 43
 - 3. 29
 - 4. 27

Q.15 What should come in place of the question mark (?) in the given series?

$$123 \ 121 \ 117 \ 111 \ ? \ 93$$

- Ans
- 1. 103
 - 2. 101
 - 3. 105
 - 4. 99

Q.16 What should come in place of (?) in the given series based on the English alphabetical order?

$$\text{LYG, JWE, HUC, FSA, ?}$$

- Ans
- 1. DQY
 - 2. BOX
 - 3. EPZ
 - 4. CPX

Q.17 In a certain code language, 'COWS' is coded as '5691' and 'COST' is coded as '1679'. What is the code for 'T' in the given code language?

- Ans
- 1. 9
 - 2. 7
 - 3. 6
 - 4. 1

Q.18 In a certain code language,
'A + B' means 'A is the brother of B',
'A - B' means 'A is the daughter of B',
'A x B' means 'A is the sister of B' and
'A ÷ B' means 'A is the father of B'.

How is M related to K if 'K - L x M + N ÷ O'?

- Ans
- 1. Father's sister
 - 2. Mother's brother
 - 3. Brother's wife
 - 4. Son's daughter

Q.19 Read the given statements and conclusions carefully. Assuming that the information given in the statements is true, even if it appears to be at variance with commonly known facts, decide which of the given conclusions logically follow(s) from the statements.

Statements:

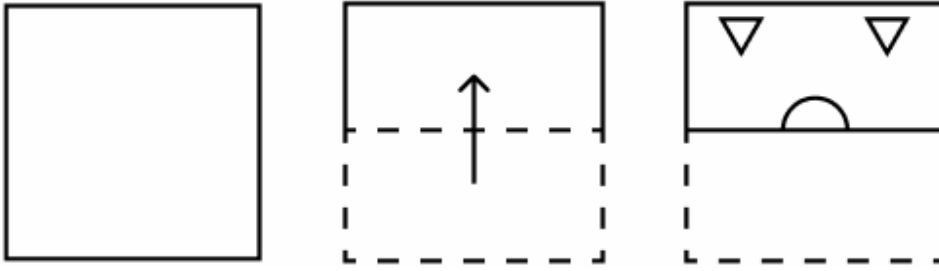
All handles are locks.
No lock is a shelf.
No lock is a cupboard.

Conclusions:

(I) No handle is a shelf.
(II) Some cupboards are shelves.

- Ans
- 1. Both conclusions (I) and (II) follow
 - 2. Neither conclusion (I) nor (II) follows
 - 3. Only conclusion (II) follows
 - 4. Only conclusion (I) follows

Q.20 The sequence of folding a piece of paper and the manner in which the folded paper is cut is shown in the following figures. How would this paper look when unfolded?



Ans

- ✗ 1.
- ✗ 2.
- ✗ 3.
- ✓ 4.

Section : Part-B-General Knowledge and General awareness

Q.1 Article 74 of the Constitution elaborates on which of the following?

- Ans
- ✗ 1. Appointment of Chief Justice by President
 - ✗ 2. Appointment of Vice President by President
 - ✓ 3. Council of Ministers to aid and advise President
 - ✗ 4. Appointment of Chairman of Finance Commission

Q.2 How many medals did India win in the ISSF World Championship 2023 event?

- Ans
- ✗ 1. 18
 - ✗ 2. 06
 - ✓ 3. 14
 - ✗ 4. 12

Q.3 Government of India Act of 1935 had _____ schedules.

- Ans
- 1. 15
 - 2. 8
 - 3. 12
 - 4. 10

Q.4 Which type of industry deals with the reproduction and multiplication of plants and animals for sale?

- Ans
- 1. Extractive industry
 - 2. Genetic industry
 - 3. Service industry
 - 4. Manufacturing industry

Q.5 In which year was the Bengal Partition of 1905 reversed?

- Ans
- 1. 1919
 - 2. 1920
 - 3. 1911
 - 4. 1907

Q.6 Organisms, when faced with new circumstances and surroundings, start adapting new characters to fit into their environment. This is termed as _____.

- Ans
- 1. isolation
 - 2. mimicry
 - 3. speciation
 - 4. behavioural adaptation

Q.7 How does a budget deficit affect a nation's economy?

- Ans
- 1. It indicates a surplus in government spending.
 - 2. It may lead to increased government borrowing.
 - 3. It results in a decrease in public spending.
 - 4. It always leads to immediate economic growth.

Q.8 Identify the classical dance form that is the principal dance of Northern India.

- Ans
- 1. Sattriya
 - 2. Kathak
 - 3. Kuchipudi
 - 4. Kathakali

Q.9 Which of the following Union Ministries introduced The Bills of Lading Bill, 2024 in August 2024 in the Lok Sabha?

- Ans
- 1. Ministry of Commerce and Industry
 - 2. Ministry of Railways
 - 3. Ministry of Law and Justice
 - 4. Ministry of Ports, Shipping and Waterways

Q.10 'Ustad Bismillah Khan Yuva Puraskar' of the Sangeet Natak Akademi is NOT awarded in which of the following categories?

- Ans
- 1. Music
 - 2. Dance
 - 3. Theatre
 - 4. Literature

Q.11 Dhanu Yatra celebration of Odisha, which is also the largest open-air theatre in the world, is based on _____.

- Ans
- 1. Krishna Leela
 - 2. Lord Shiva
 - 3. Dussehra
 - 4. Ram Leela

Q.12 Which singer of Carnatic music was given the title of 'Bombay' by the people of Tamil Nadu?

- Ans
- 1. Jayashri Ramnath
 - 2. Ranjani Hebbar
 - 3. Dwaram Lakshmi
 - 4. Nithyasree Mahadevan

Q.13 Who is the cabinet minister of the Ministry of Commerce and Industry as of September 2024?

- Ans
- 1. HD Kumaraswamy
 - 2. Piyush Goyal
 - 3. Nitin Jairam Gadkari
 - 4. Amit Shah

Q.14 What is the meaning of geological time?

- Ans
- 1. Geological events over millions of years
 - 2. Short-term changes in geological features
 - 3. Rapid changes in climate
 - 4. Long-term changes in atmospheric conditions

Q.15 The Gopatha Brahmana is related to which of the following Vedas?

- Ans
- 1. Rigveda
 - 2. Yajurveda
 - 3. Atharvaveda
 - 4. Samaveda

Q.16 Which of the following states has the LOWEST child sex ratio as per Census 2011?

- Ans
- 1. Sikkim
 - 2. Arunachal Pradesh
 - 3. Haryana
 - 4. Chhattisgarh

Q.17 According to Census of India 2001, what was the percentage of immigrant population from Afghanistan?

- Ans
- 1. 0.4%
 - 2. 0.3%
 - 3. 0.5%
 - 4. 0.2%

Q.18 Which of the following is an example of genetic industry?

- Ans
- 1. Mining
 - 2. Poultry farming
 - 3. Cement manufacturing
 - 4. Construction of dams

Q.19 When was the Dronacharya Award instituted in India?

- Ans
- 1. 1987
 - 2. 1983
 - 3. 1981
 - 4. 1985

Q.20 The ratio of 'mass by volume percentage' to 'volume by volume percentage' of a given solution gives _____.

- Ans
- 1. meaningless quantity
 - 2. density of solvent
 - 3. density of solution
 - 4. density of solute

Section : Part-C-Elementary Mathematics

Q.1 400 apples were bought at ₹1210 per hundred and were sold at a profit of ₹860. Find the selling price (in ₹) per dozen of apples.

- Ans
- 1. 181
 - 2. 161
 - 3. 171
 - 4. 186

Q.2 Ashish has two grandsons Ketan and Mahesh. 15 year old Ketan gets some money from Ashish's wealth and 16 year old Mahesh gets rest of the money. But Ketan and Mahesh will get money only when they turn 23 years old. Till then the money is in a bank getting interest at rate 4% compounded annually. When both turn 23, they receive the same amount. How much had Ashish given Mahesh (in ₹) initially, if total money with Ashish was ₹25500?

- Ans
- 1. 12500
 - 2. 12250
 - 3. 13350
 - 4. 13000

Q.3 The price of fuel decreases by 25%, 35% and 40% in three successive months, but increases by 60% in the fourth month. What is the percentage increase/decrease in the price of fuel in the fourth month as compared to its original price?

- Ans
- 1. Decreases by 57.28%
 - 2. Decreases by 53.2%
 - 3. Increases by 55.35%
 - 4. Increases by 50.32%

Q.4 The average score of 5 players of a cricket team is 55. It is also observed that 3 of these 5 players have an average score of 55. What will be the average score of the remaining two players?

- Ans
- 1. 55
 - 2. 50
 - 3. 45
 - 4. 60

Q.5 The greatest number, which divides 2248 and 1761 to leave 3 and 1 respectively as remainders, is:

- Ans
- 1. 14
 - 2. 5
 - 3. 19
 - 4. 24

Q.6 The speed of a train is 65 km per hour. In 35 minutes and 15 seconds, the train will cover _____ km and _____ metres.

- Ans
- 1. 36; 187.5
 - 2. 38; 187.5
 - 3. 36; 178.5
 - 4. 38; 178.5

Q.7 Two trains are moving in opposite directions at speeds of 50 km/h and 80 km/h. The length of one train is 480 m. The time taken by them to cross each other is 28 seconds. The length (in m) of the other train, correct to 2 decimal places, is:

- Ans
- 1. 533.51
 - 2. 530.12
 - 3. 529.39
 - 4. 531.11

Q.8 Ramu invested some money in HDFC at 4% per annum rate of interest. What would be the corresponding simple interest (in ₹) if after 2 years, Ramu got ₹127.5 as compound interest, considering annual compounding?

- Ans
- 1. 135
 - 2. 120
 - 3. 125
 - 4. 140

Q.9 A and B can do a piece of work in 28 days; B and C can do the same work in 18 days and A, B and C together can do it in 16 days. The time required (in days) to finish the work by A and C is:

- Ans
- 1. $29\frac{11}{17}$
 - 2. $25\frac{11}{13}$
 - 3. $23\frac{11}{15}$
 - 4. $27\frac{13}{19}$

Q.10 The third proportional of numbers a and b is ab. Which of the following statements is true?

- Ans
- 1. $2a = b$
 - 2. $a = 2b$
 - 3. $a^2 = b$
 - 4. $a = b^2$

Q.11 When 12, 15, 18, 20 and 25 divide the least number x, the remainder in each case was 3 but x was divisible by 7. What is the value of x?

- Ans
- 1. 390
 - 2. 930
 - 3. 903
 - 4. 309

Q.12 Which of the following schemes provide the highest discount?

- Ans
- 1. Two successive discounts of 10% and 3%
 - 2. Two successive discounts of 10% each
 - 3. Two successive discounts of 7% and 10%
 - 4. Two successive discounts of 5% and 10%.

Q.13 Rajesh bought 5 kg of apples for ₹875 and sold it for ₹220 per kg. How much is the profit gained by him?

- Ans
- 1. ₹220
 - 2. ₹215
 - 3. ₹225
 - 4. ₹200

Q.14 The fourth proportional of a, c and bc is d. The fourth proportional of $\frac{bc^2}{a}$, $\frac{ad}{c}$ and c is _____.

- Ans
- 1. c
 - 2. a
 - 3. b
 - 4. d

Q.15 Find the value of $\left[(22 \times 6) \times \left\{ 4 \div 4 \times \frac{(19 - 12)}{7} \right\} \right]$

- Ans
- 1. 116
 - 2. 150
 - 3. 132
 - 4. 117

Q.16 The ratio of the areas of two triangles is 4 : 3 and the ratio of their heights is 3 : 4. The ratio of their bases is:

- Ans
- 1. 16 : 9
 - 2. 3 : 2
 - 3. 4 : 9
 - 4. 1 : 6

Q.17 The LCM of two numbers is 126 times their HCF. If their HCF is 7 and the difference between the two numbers is five times the HCF, then the sum of the two numbers is:

- Ans
- 1. 611
 - 2. 218
 - 3. 161
 - 4. 116

Q.18 The average weight of Gopal, Akshay and Atul is 45 kg. If the average weight of Gopal and Akshay be 43 kg and that of Akshay and Atul be 43 kg, then the weight of Akshay (in kg) is:

- Ans
- 1. 37
 - 2. 57
 - 3. 47
 - 4. 52

Q.19 Shivam invests a sum of ₹5400 and Rupesh invests a sum of ₹9400 at the same rate of simple interest per annum. If, at the end of 4 years, Rupesh gets ₹600 more interest than Shivam, then find the rate of interest per annum (in percentage).

- Ans
- 1. 2.75
 - 2. 5.75
 - 3. 3.75
 - 4. 1.75

Q.20 There are 1224 employees in an organisation, out of which 25% are promoted. How many such employees are there who got promotion?

- Ans
- 1. 312
 - 2. 306
 - 3. 308
 - 4. 310

Section : Part-D-English

Q.1 Select the most appropriate option to replace the highlighted grammatical error and the underlined MISSPELT word in the following sentence.
The crops are dyeing, it must not had rained.

- Ans
- 1. dlying; must not have been
 - 2. daying; must had not
 - 3. dying; must not have
 - 4. dieing; must not be

Q.2 Select the most appropriate ANTONYM of the given word.
Audacity

- Ans
- 1. Balance
 - 2. Challenge
 - 3. Ability
 - 4. Modesty

Q.3 Parts of the following sentence have been given as options. Select the option that contains an error.

'The storm approached very rapid, causing panic in the village'.

- Ans
- 1. causing panic
 - 2. in the village.
 - 3. The storm approached
 - 4. very rapid,

Q.4 Rectify the sentence by selecting the correctly spelt word from the options.

Her nonverbal expressions were equivocall, making it difficult to ascertain whether she agreed or disagreed with the verdict.

- Ans
- 1. Equiivocal
 - 2. Iquivocal
 - 3. Equivocal
 - 4. Equevocal

Q.5 Select the most appropriate option to fill in the blanks.

The chef's (1)___ meal consisted of crispy (2)___, tender meat and a (3)___ sauce that delighted everyone at the dinner party.

- Ans
- 1. (1) tangy ; (2) delicious ; (3) vegetables
 - 2. (1) delicious ; (2) vegetables ; (3) tangy
 - 3. (1) vegetables ; (2) tangy ; (3) delicious
 - 4. (1) vegetables ; (2) delicious ; (3) tangy

Q.6 Select the most appropriate synonym of the given word.

Tramp

- Ans
- 1. Doctor
 - 2. Actor
 - 3. Wanderer
 - 4. Professor

Q.7 Select the most appropriate option that can substitute the underlined words in the given sentence.

Vipul was having a wonderful dream at that moment somebody was knocking on the door.

- Ans
- 1. then somebody had been knocking in the door
 - 2. then somebody has knocked on the door
 - 3. later somebody knocked in the door
 - 4. when somebody knocked on the door

Q.8 Select the most appropriate option to substitute the underlined segment in the given sentence.

The time is ripe for harness the rising level of ambition.

- Ans
- 1. The time is ripe to
 - 2. The time has ripeness for
 - 3. The time were ripe to
 - 4. The time is ripeness to

Q.9 Select the most appropriate ANTONYM of the given word.

Lament

- Ans
- 1. Part
 - 2. Refuse
 - 3. Grieve
 - 4. Rejoice

Q.10 The following sentence has been split into four segments. Identify the segment that contains a grammatical error.
(A) The children eagerly gathered / (B) around the storyteller, / (C) listening attentive as he spun tales / (D) of adventure and magic under the starry sky.

- Ans
- 1. C
 - 2. B
 - 3. A
 - 4. D

Q.11 Select the most appropriate meaning of the underlined idiom.

Arjun was an expert developer, and it took him all of a New York minute to solve the issue with the software.

- Ans
- 1. A situation beyond the scope of one's imagination
 - 2. An elaborate exhibition or presentation
 - 3. A very short amount of time
 - 4. A very casual attitude

Q.12 Select the most appropriate synonym of the given word.

Empty

- Ans
- 1. Vacant
 - 2. Common
 - 3. Busy
 - 4. Dear

Q.13 Select the most appropriate option to fill in the blank.

He was late for the meeting _____ the traffic jam.

- Ans
- 1. because
 - 2. because of
 - 3. as a result
 - 4. owing for

Q.14 Complete the sentence with the correct collocation.

Despite facing numerous challenges, Binod managed to attain an impressive level of academic _____.

- Ans
- 1. excellence
 - 2. result
 - 3. discourse
 - 4. failure

Q.15 Select the most appropriate synonym of the given word.

Brave

- Ans
- 1. Scared
 - 2. Courageous
 - 3. Timid
 - 4. Fearful

Comprehension:

In the following passage, some words have been deleted. Read the passage carefully and select the most appropriate option to fill in each blank.

Technology has become an essential part of our (1) _____, influencing everything from how we communicate to how we work. With the rise of smartphones and (2) _____, people are now more connected than ever through many applications like Facebook. However, despite the many benefits, there are growing concerns about the negative effects of technology on (3) _____ health. Constant notifications, social media comparisons and the pressure to stay updated can lead to stress and anxiety. Studies have shown that too much screen time may reduce focus and (4) _____ and disrupt sleep patterns which might lead to less work, forgetting important works and loss of concentration. Therefore, while technology offers numerous advantages, it is important to manage its (5) _____ responsibly to maintain a healthy balance.

SubQuestion No : 16

Q.16 Select the most appropriate option to fill in blank number 1.

- Ans
- 1. homes
 - 2. jobs
 - 3. lives
 - 4. economy

Comprehension:

In the following passage, some words have been deleted. Read the passage carefully and select the most appropriate option to fill in each blank.

Technology has become an essential part of our (1) _____, influencing everything from how we communicate to how we work. With the rise of smartphones and (2) _____, people are now more connected than ever through many applications like Facebook. However, despite the many benefits, there are growing concerns about the negative effects of technology on (3) _____ health. Constant notifications, social media comparisons and the pressure to stay updated can lead to stress and anxiety. Studies have shown that too much screen time may reduce focus and (4) _____ and disrupt sleep patterns which might lead to less work, forgetting important works and loss of concentration. Therefore, while technology offers numerous advantages, it is important to manage its (5) _____ responsibly to maintain a healthy balance.

SubQuestion No : 17

Q.17 Select the most appropriate option to fill in blank number 2.

- Ans**
- 1. social media
 - 2. websites
 - 3. public network
 - 4. games

Comprehension:

In the following passage, some words have been deleted. Read the passage carefully and select the most appropriate option to fill in each blank.

Technology has become an essential part of our (1) _____, influencing everything from how we communicate to how we work. With the rise of smartphones and (2) _____, people are now more connected than ever through many applications like Facebook. However, despite the many benefits, there are growing concerns about the negative effects of technology on (3) _____ health. Constant notifications, social media comparisons and the pressure to stay updated can lead to stress and anxiety. Studies have shown that too much screen time may reduce focus and (4) _____ and disrupt sleep patterns which might lead to less work, forgetting important works and loss of concentration. Therefore, while technology offers numerous advantages, it is important to manage its (5) _____ responsibly to maintain a healthy balance.

SubQuestion No : 18

Q.18 Select the most appropriate option to fill in blank number 3.

- Ans**
- 1. mental
 - 2. social
 - 3. physical
 - 4. emotional

Comprehension:

In the following passage, some words have been deleted. Read the passage carefully and select the most appropriate option to fill in each blank.

Technology has become an essential part of our (1) _____, influencing everything from how we communicate to how we work. With the rise of smartphones and (2) _____, people are now more connected than ever through many applications like Facebook. However, despite the many benefits, there are growing concerns about the negative effects of technology on (3) _____ health. Constant notifications, social media comparisons and the pressure to stay updated can lead to stress and anxiety. Studies have shown that too much screen time may reduce focus and (4) _____ and disrupt sleep patterns which might lead to less work, forgetting important works and loss of concentration. Therefore, while technology offers numerous advantages, it is important to manage its (5) _____ responsibly to maintain a healthy balance.

SubQuestion No : 19

Q.19 Select the most appropriate option to fill in blank number 4.

- Ans**
- 1. creative
 - 2. memory
 - 3. productive
 - 4. energise

Comprehension:

In the following passage, some words have been deleted. Read the passage carefully and select the most appropriate option to fill in each blank.

Technology has become an essential part of our (1)_____, influencing everything from how we communicate to how we work. With the rise of smartphones and (2)_____, people are now more connected than ever through many applications like Facebook. However, despite the many benefits, there are growing concerns about the negative effects of technology on (3)_____ health. Constant notifications, social media comparisons and the pressure to stay updated can lead to stress and anxiety. Studies have shown that too much screen time may reduce focus and (4)_____ and disrupt sleep patterns which might lead to less work, forgetting important works and loss of concentration. Therefore, while technology offers numerous advantages, it is important to manage its (5)_____ responsibly to maintain a healthy balance.

SubQuestion No : 20

Q.20 Select the most appropriate option to fill in blank number 5.

- Ans**
- 1. cost
 - 2. use
 - 3. development
 - 4. creation

Section : Part-D-Hindi

Q.1 जो विद्यार्थी पास हो गए हों, वे इस कक्षा में बैठ जाएं। 'पास हो गए हो' वाक्यांश के स्थान पर उचित शब्द होगा -

- Ans**
- 1. असफल
 - 2. कामयाब
 - 3. उत्तीर्ण
 - 4. अनुत्तीर्ण

Q.2 'हाथ के कागज उड़ना।' मुहावरे में रेखांकित शब्द के स्थान पर उपयुक्त शब्द होगा -

- Ans**
- 1. बाज़
 - 2. कौवे
 - 3. तोते
 - 4. कबूतर

Q.3 'संसार में असंख्य शिशुओं का जन्म प्रतिक्षण होता है।'

उपर्युक्त वाक्य में अशुद्ध शब्द है -

- Ans**
- 1. असंख्य
 - 2. शिशुओं
 - 3. जन्म
 - 4. प्रतिक्षण

Q.4 'अनाथ' शब्द का विलोम क्या होगा?

- Ans**
- 1. नाथ
 - 2. स्वामी
 - 3. दास
 - 4. सनाथ

Q.5 मयंक ने भाभी के लिए कंकण खरीदे। इस वाक्य में कंकण शब्द का तद्भव रूप प्रयुक्त कर वाक्य पूर्ण कीजिए

- Ans**
- 1. मयंक ने भाभी के लिए कंगन खरीदे।
 - 2. मयंक ने भाभी के लिए कंचन खरीदे।
 - 3. मयंक ने भाभी के लिए पायल खरीदे।
 - 4. मयंक ने भाभी के लिए कर्णफूल खरीदे।

Q.6 'इच्छा' शब्द का विलोम क्या होगा?

- Ans
- 1. अभीप्सा
 - 2. आराम
 - 3. अनिच्छा
 - 4. लिप्सा

Q.7 निम्नलिखित वाक्य के शुद्ध रूप का चयन करें-

'कृपया हमें उज्ज्वल भविष्य का आशीर्वाद दें।'

- Ans
- 1. कृपया हमें उज्ज्वल भविष्य का आशीर्वाद दें।
 - 2. कृपया हमें उज्ज्वल भविष्य का आशीर्वाद दें।
 - 3. कृपया हमें उज्ज्वल भविष्य का आशीर्वाद दें।
 - 4. कृप्या हमें उज्ज्वल भविष्य का आशीर्वाद दें।

Q.8 'जिसके हृदय में दया नहीं है' वाक्यांश के लिए उपयुक्त शब्द होगा-

- Ans
- 1. निर्दय
 - 2. निर्भीक
 - 3. निरंकुश
 - 4. निर्भय

Q.9 निम्नलिखित वाक्यांश के लिए सार्थक शब्द चुनिए -
जिसकी उत्पत्ति स्वयं हो

- Ans
- 1. परस्वयंभू
 - 2. दुस्वयंभू
 - 3. स्वयंभू
 - 4. अस्वयंभू

Q.10 निम्नलिखित वाक्यांश के लिए सार्थक शब्द चुनिए-
जिसके हाथ में वीणा हो

- Ans
- 1. वीणापाणि
 - 2. पाणिवीणा
 - 3. चक्रपाणि
 - 4. पाणिचक्र

Q.11 निम्न में से किस वाक्य में 'चेतन' के सही विलोम शब्द का प्रयोग हुआ है?

- Ans
- 1. वृक्ष भी सजीव होते हैं।
 - 2. चालक को सदैव जागरुक रहना चाहिए।
 - 3. दुर्घटना के कुछ समय तक करण सचेत अवस्था में था।
 - 4. यह सभी जड़ पदार्थ हैं।

Q.12 रमेश ने गैस के गोदाम पर काम करना शुरू कर दिया है। वाक्य में गैस शब्द है।

- Ans
- 1. तत्सम
 - 2. तद्भव
 - 3. विदेशी
 - 4. देशज

Q.13 "मोहन" शब्द में कौन सी संज्ञा है?

- Ans
- 1. समूहवाचक
 - 2. जातिवाचक
 - 3. व्यक्तिवाचक
 - 4. भाववाचक

Q.14 निम्नलिखित विकल्पों में से 'मरण' शब्द के लिए किस एक वाक्य में उचित विलोम का प्रयोग हुआ है?

- Ans
- 1. उसने अपना जीवन अच्छे से जिया है।
 - 2. किसी पर जरूरत से ज्यादा विश्वास घातक होता है।
 - 3. तुमने किस विषय से परास्नातक किया है?
 - 4. उसने सबकी मदद की है।

Q.15 वह घर _____ बाहर आया। - रिक्त स्थान के लिए उचित कारक चिह्न है-

- Ans
- 1. से
 - 2. ने
 - 3. में
 - 4. पर

Comprehension:

गद्यांश के आधार पर प्रश्न का उत्तर दें।

प्रकृति के इस _____ से पन्त प्रारम्भ सेही खिंचते रहे। प्रकृति के स्वतन्त्र परन्तु _____ संयत, नियंत्रित, नियमित वातावरण ने ही उनके छन्दों और भाषा का _____ करके उनकी कला का भी निर्माण किया है। पन्त ने स्वयं लिखा है कि 'कविता करने की _____ मुझे सबसे पहले प्रकृति निरीक्षण से मिली है, जिसका श्रेय मेरी जन्म भूमि कूर्माचल प्रदेश को है; कवि जीवन से भी पहले, मुझे याद है, मैं घण्टों एकान्त में बैठा, प्राकृतिक दृश्यों को एक एकटक देखा करता था और कोई अज्ञात आकर्षण मेरे भीतर एक अव्यक्त _____ का जाल बुनकर मेरी चेतना को तन्मय कर देता था।' प्रकृति से नातिदूर का परिचय स्थापित होने के कारण कवि की दृष्टि _____ हो गयी और यही कारण है कि प्रकृति के साथ पन्त की रागात्मकता बढ़ जाती है।

SubQuestion No : 16

Q.16 रिक्त स्थान पर सही शब्द विकल्प का चयन करें।
प्रकृति के इस _____ से पन्त प्रारम्भ से ही खिंचते रहे।

- Ans
- 1. सौंदर्य
 - 2. आकर्षण
 - 3. लगाव
 - 4. मोह

Comprehension:

गद्यांश के आधार पर प्रश्न का उत्तर दें।

प्रकृति के इस _____ से पन्त प्रारम्भ सेही खिंचते रहे। प्रकृति के स्वतन्त्र परन्तु _____ संयत, नियंत्रित, नियमित वातावरण ने ही उनके छन्दों और भाषा का _____ करके उनकी कला का भी निर्माण किया है। पन्त ने स्वयं लिखा है कि 'कविता करने की _____ मुझे सबसे पहले प्रकृति निरीक्षण से मिली है, जिसका श्रेय मेरी जन्म भूमि कूर्माचल प्रदेश को है; कवि जीवन से भी पहले, मुझे याद है, मैं घण्टों एकान्त में बैठा, प्राकृतिक दृश्यों को एक एकटक देखा करता था और कोई अज्ञात आकर्षण मेरे भीतर एक अव्यक्त _____ का जाल बुनकर मेरी चेतना को तन्मय कर देता था।' प्रकृति से नातिदूर का परिचय स्थापित होने के कारण कवि की दृष्टि _____ हो गयी और यही कारण है कि प्रकृति के साथ पन्त की रागात्मकता बढ़ जाती है।

SubQuestion No : 17

Q.17 रिक्त स्थान पर सही शब्द विकल्प का चयन करें।
प्रकृति के स्वतंत्र परन्तु संयत, नियंत्रित नियमित वातावरण ने ही उनके छंदों और भाषा का _____ करके उनकी कला का भी निर्माण किया है।

- Ans
- 1. परिष्कार
 - 2. निर्माण
 - 3. शुद्धिकरण
 - 4. आविष्कार