

Constable GD in CAPFs and SSF Rifleman GD in AR and Sepoy in NCB Examination 2025

Exam Date	19/02/2025
Exam Time	9:00 AM - 10:00 AM
Subject	Constable GD Examination 2025

Section : Part-A-General Intelligence and Reasoning

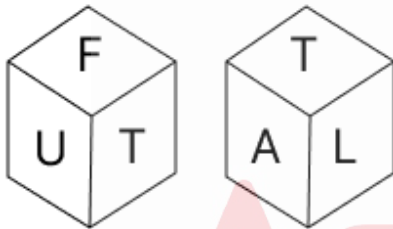
Q.1 In a certain code language, 'drink clean water' is coded as 'rd tm kg' and 'clean your house' is coded as 'db fo tm'. How is 'clean' coded in the given language?

- Ans**
- 1. tm
 - 2. fo
 - 3. rd
 - 4. kg

Q.2 Each letter in the word INJURED is arranged in the English alphabetical order. How many letters are there in the English alphabetical order between the letter which is second from the left end and the one which is fourth from the right end in the new letter-cluster thus formed?

- Ans**
- 1. 3
 - 2. 6
 - 3. 4
 - 4. 2

Q.3 A dice has its faces marked by letters L, E, A, T, F and U. Two positions of the same dice are shown in the given figures. Which face is opposite to face E?



- Ans**
- 1. T
 - 2. A
 - 3. F
 - 4. L

Q.4 What should come in place of the question mark (?) in the given series?

310 311 301 303 293 296 286 ?

- Ans**
- 1. 289
 - 2. 288
 - 3. 290
 - 4. 276

Q.5 In a certain code language, 'JQBT' is coded as '147' and 'IWOG' is coded as '162'. What is the code for 'SDLO' in the given language?

- Ans**
- 1. 156
 - 2. 150
 - 3. 145
 - 4. 138

Q.6 What should come in place of '?' in the given series based on the English alphabetical order?

HNB KQE NTH QWK ?

- Ans
- 1. TZL
 - 2. TZN
 - 3. KWQ
 - 4. RXL

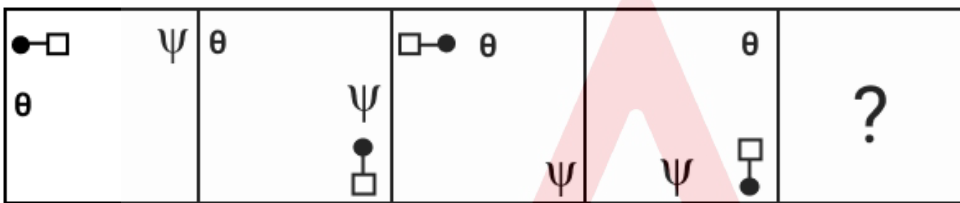
Q.7 In a certain code language.

'U \$ J' means 'U is the husband of J',
 'U # J' means 'U is the mother of J',
 'U @ J' means 'U is the father of J' and
 'U + J' means 'U is the daughter of J'.

Based on the above, how is B related to C if 'B # L \$ C # Q'?

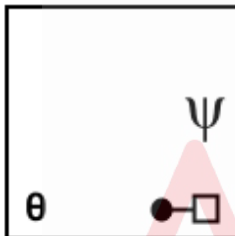
- Ans
- 1. Sister's mother
 - 2. Father's mother
 - 3. Mother's mother
 - 4. Husband's mother

Q.8 Select the figure from among the given options that can replace the question mark (?) in the following series.

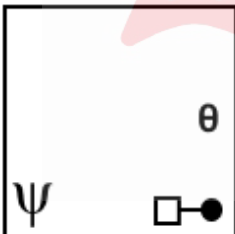


Ans

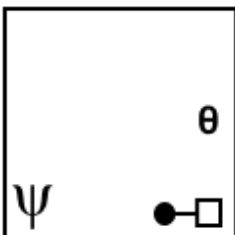
1.



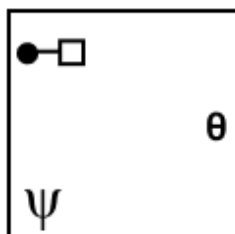
2.



3.



4.



Q.9 What should come in place of the question mark (?) in the given series?

23 32 67 76 155 164 ?

- Ans
- 1. 313
 - 2. 331
 - 3. 303
 - 4. 330

Q.10 GTBK is related to KRFI in a certain way based on the English alphabetical order. In the same way, NSFJ is related to RQJV. To which of the given options is EKVO related, following the same logic?

- Ans
- 1. HJRN
 - 2. IJZM
 - 3. HJTN
 - 4. GJSO

Q.11 Based on the English alphabetical order, three of the following four letter-clusters are alike in a certain way and thus form a group. Which letter-cluster DOES NOT belong to that group?
(Note: The odd one out is not based on the number of consonants/vowels or their position in the letter-cluster.)

- Ans
- 1. DFO
 - 2. MOT
 - 3. SUZ
 - 4. LNS

Q.12 What will come in the place of the question mark '?' in the following equation, if '+' and 'x' are interchanged and '-' and '÷' are interchanged?

$20 - 7 \div 4 + 20 \times 4 = ?$

- Ans
- 1. 43
 - 2. 41
 - 3. 44
 - 4. 42

Q.13 Select the option that represents the letters that, when sequentially placed from left to right in the blanks below, will complete the letter series.

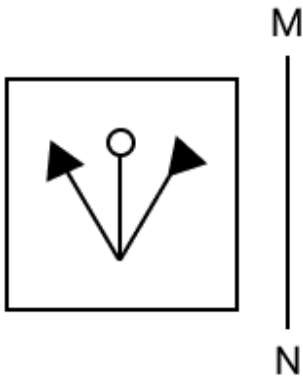
A _ P L _ _ Z _ L M _ _ P L M A Z P _ _

- Ans
- 1. MZAPAZLM
 - 2. ZMAPAZLM
 - 3. ZMPAAZLM
 - 4. MZPAAZML

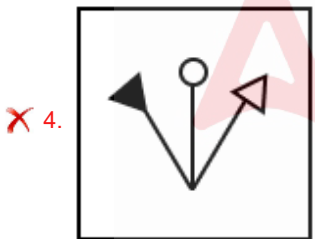
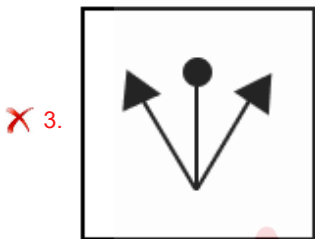
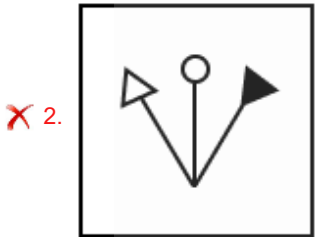
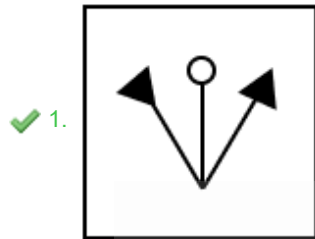
Q.14 KMOQ is related to SUWY in a certain way based on the English alphabetical order. In the same way, EGIK is related to MOQS. To which of the given options is YACE related, following the same logic?

- Ans
- 1. GIKM
 - 2. GIJK
 - 3. GIKL
 - 4. GIMK

Q.15 Select the correct mirror image of the given figure when the mirror is placed at MN as shown below.



Ans



Q.16 Read the given statements and conclusions carefully. Assuming that the information given in the statements is true, even if it appears to be at variance with commonly known facts, decide which of the given conclusions logically follow(s) from the statements.

Statements:

Some papers are books.

All books are shelves.

No shelf is a library.

Conclusions:

(I): Some papers are shelves.

(II): All books are libraries.

Ans ✗ 1. Neither conclusion (I) nor (II) follows.

✗ 2. Only conclusion (II) follows.

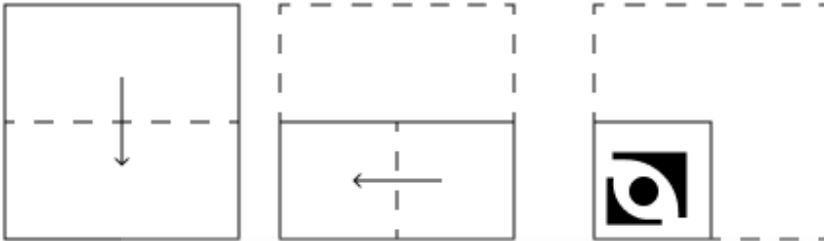
✓ 3. Only conclusion (I) follows.

✗ 4. Both conclusions (I) and (II) follow.

Q.17 Six students A, B, C, U, V and W are seating around a circular table facing the centre (but not necessarily in the same order) . Only one person sits between U and W when counted from the right of U. Only one person sits between A and W. Only two people sit between A and B. C is an immediate neighbour of U. How many people sit between A and V when counted from the left of V?

- Ans
- 1. Two
 - 2. Three
 - 3. Four
 - 4. One

Q.18 A paper is folded and punched as shown below. How will it appear when unfolded?



Ans

1.



2.



3.



4.



Q.19 Six people, Q, R, S, T, U and Y, are sitting in a row facing North (but not necessarily in the same order). Only four people sit between R and Q. S sits to the immediate left of Q. Only one person sits between S and Y. Y sits at some place to the left of T but at some place to the right of U. Who sits third from the left end of the line?

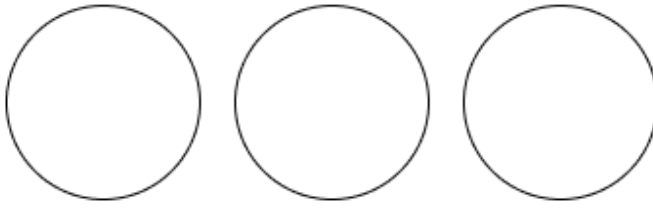
- Ans
- 1. S
 - 2. U
 - 3. Y
 - 4. T

Q.20 Select the Venn diagram that best illustrate the relationship between the following classes.

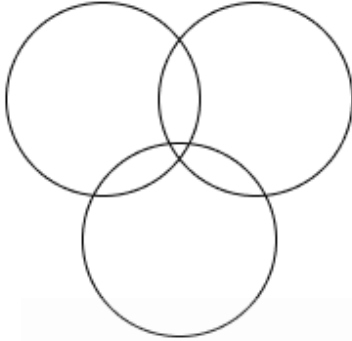
Mother, Princess, Wife

Ans

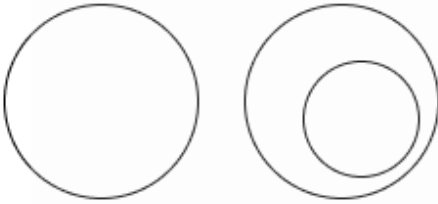
✗ 1.



✓ 2.



✗ 3.



✗ 4.



Section : Part-B-General Knowledge and General awareness

Q.1 Which Article of the Indian Constitution instructs the State to ensure the right to work, education and public assistance in specific circumstances?

- Ans
- ✗ 1. Article 47
 - ✗ 2. Article 48
 - ✗ 3. Article 45
 - ✓ 4. Article 41

Q.2 When was the rolling plan adopted?

- Ans
- ✗ 1. After the sixth five-year plan
 - ✓ 2. After the fifth five-year plan
 - ✗ 3. After the eighth five-year plan
 - ✗ 4. After the seventh five-year plan

Q.3 Generally, what portion of the crop was collected as tax by the state during the Mahajanapada period?

- Ans
- ✗ 1. 1/4th
 - ✗ 2. 1/8th
 - ✗ 3. 1/5th
 - ✓ 4. 1/6th

Q.4 Identify the correct statement(s) from the following with reference to 2023-24 Union Budget of the Government of India.
i. The outlay for PM Awas Yojana is being enhanced to over ₹79,000 crores.
ii. The targeted agriculture credit is ₹20 lakh crores.
iii. The Government has targeted to provide central assistance of approximately ₹10,000 crores to the drought-prone central region of Karnataka.

- Ans**
- 1. Only ii
 - 2. i and ii
 - 3. Only iii
 - 4. ii and iii

Q.5 Who became the 26th Chief of the Naval Staff (CNS) of India on 30 April 2024?

- Ans**
- 1. Admiral Pushendra Bhanu
 - 2. Admiral Raghvendra Sing Sudan
 - 3. Admiral Dinesh Kumar Tripathi
 - 4. Admiral Rakesh Sharma

Q.6 During the Raja festival, womanhood is celebrated. In which Indian state is this festival extremely popular?

- Ans**
- 1. Odisha
 - 2. West Bengal
 - 3. Kerala
 - 4. Maharashtra

Q.7 Who among the following retired from the position of Cabinet Secretary of India in August 2024?

- Ans**
- 1. Pradeep Kumar
 - 2. Ajit Kumar Seth
 - 3. TV Somanathan
 - 4. Rajiv Gauba

Q.8 Which of the following chemical reactions is best described as double displacement reaction?

- Ans**
- 1. $2\text{HNO}_3 + \text{Ca}(\text{OH})_2 \rightarrow \text{Ca}(\text{NO}_3)_2 + 2\text{H}_2\text{O}$
 - 2. $\text{MnO}_2 + 4\text{HCl} \rightarrow \text{MnCl}_2 + 2\text{H}_2\text{O} + \text{Cl}_2$
 - 3. $\text{Fe} (\text{s}) + \text{CuSO}_4 (\text{aq}) \rightarrow \text{FeSO}_4 (\text{aq}) + \text{Cu} (\text{s})$
 - 4. $\text{Na}_2\text{SO}_4 (\text{aq}) + \text{BaCl}_2 (\text{aq}) \rightarrow \text{BaSO}_4 (\text{s}) + 2\text{NaCl} (\text{aq})$

Q.9 According to the Census of India 2011, which state from the following has the highest sex ratio?

- Ans**
- 1. Tamil Nadu
 - 2. Manipur
 - 3. Nagaland
 - 4. Andhra Pradesh

Q.10 Who among the following is associated with the badminton game?

- Ans**
- 1. Devendra Jhanjhariya
 - 2. Sumit Antil
 - 3. Pramod Bhagat
 - 4. Amit Kumar Saroha

Q.11 Who administers the oath of office to the Governor?

- Ans
- 1. Chief Minister
 - 2. Chief Justice of High Court
 - 3. Prime Minister
 - 4. President

Q.12 The Partition of Bengal was implemented by which British official?

- Ans
- 1. Lord Minto
 - 2. Lord Wellesley
 - 3. Lord Curzon
 - 4. Lord Mountbatten

Q.13 In the 'Pradhan Mantri Mudra Yojana', the loan cover for Shishu category is upto _____.

- Ans
- 1. ₹7,00,000
 - 2. ₹5,00,000
 - 3. ₹50,000
 - 4. ₹10,00,000

Q.14 Bhupinder Singh was awarded Sangeet Natak Akademi award in 2015 for which of the following musical traditions?

- Ans
- 1. Carnatic music
 - 2. Pop music
 - 3. Sugam Sangeet
 - 4. Ghazal

Q.15 Aligned with the objective of state control over vital sectors of the economy, the Industrial Policy of Resolution of 1956 was enacted, serving as the foundation for the _____ Five Year Plan.

- Ans
- 1. fourth
 - 2. second
 - 3. first
 - 4. third

Q.16 In 2021, Dr. Padmaja Suresh was awarded the title of 'Karnataka Kalashree' for her best performance in which dance form?

- Ans
- 1. Kathak
 - 2. Mohiniattam
 - 3. Bharatanatyam
 - 4. Sattriya

Q.17 T Balasaraswati, who received the Sangeet Natak Akademi and Padma Vibhushan award, was a _____ dancer.

- Ans
- 1. Kuchipudi
 - 2. Bharatanatyam
 - 3. Odissi
 - 4. Kathak

Q.18 What can be used to sanitise water in swimming pools?

- Ans
- 1. Washing soda
 - 2. Dettol
 - 3. Caustic soda
 - 4. Bleaching powder

Q.19 जब किसी जलभृत में विपाशित जल (trapped water) अभेद्य चट्टान या मिट्टी की परतों से घिरा होता है, जो जल पर धनात्मक दाब डालते हैं, तो इसे किस रूप में जाना जाता है?

- Ans
- 1. असंतृप्त जलभृत (unsaturated aquifer)
 - 2. दुःस्थित जलभृत (perched aquifer)
 - 3. उत्सृत जलभृत (artesian aquifer)
 - 4. अपरिरुद्ध जलभृत (unconfined aquifer)

Q.20 When did India host the Asian Games for the first time?

- Ans
- 1. 1952
 - 2. 1951
 - 3. 1981
 - 4. 1982

Section : Part-C-Elementary Mathematics

Q.1 Evaluate: $16 + 12 \div 3 - 3 \times 4$

- Ans
- 1. 10
 - 2. 11
 - 3. 7
 - 4. 8

Q.2 The simple interest on a principal amount (in ₹) is ₹576 for a period of 3 years at the rate of 6% per annum. The principal amount (in ₹) is:

- Ans
- 1. 3202
 - 2. 3206
 - 3. 3200
 - 4. 3213

Q.3 Ketan bought a shirt and sold it to Mahesh at a profit of 5%. Mahesh sold it to David at a loss of 24%. If David paid ₹3990, then the cost price (in ₹) of the shirt Ketan bought is

- Ans
- 1. 5150
 - 2. 4800
 - 3. 5000
 - 4. 4750

Q.4 What will be difference in population 3 years ago and 2 years ago of a town, whose current population is 110000 and which is increasing at a rate of 25% every year?

- Ans
- 1. 13330
 - 2. 13530
 - 3. 14080
 - 4. 14430

Q.5 If x and y are inversely proportional, then which of the following is correct?

- Ans
- 1. $\frac{x}{y} = k$
 - 2. $xy = \frac{y}{x}$
 - 3. $\frac{x}{y} = 1$
 - 4. $xy = k$

Q.6 Lokesh travels from City A to City B. If Lokesh drives his car at $\frac{3}{4}$ of his normal speed, then he reaches City B 24 minutes late. Find the time (in minutes) that Lokesh would have taken to travel from City A to City B if he drove at his normal speed.

- Ans**
- 1. 62
 - 2. 65
 - 3. 72
 - 4. 70

Q.7 The price (per litre) of petrol increases by 50%. By what percent should its consumption be reduced such that the expenditure on it increases by 11% only?

- Ans**
- 1. 36%
 - 2. 26%
 - 3. 80%
 - 4. 74%

Q.8 The average weight of Shivam, Rupesh and Mandar is 46 kg. If the average weight of Shivam and Rupesh be 39 kg and that of Rupesh and Mandar be 48 kg, then the weight of Rupesh (in kg) is:

- Ans**
- 1. 36
 - 2. 56
 - 3. 46
 - 4. 51

Q.9 What is the single per cent discount equivalent to two successive discounts of 18.5% and 11.5%?

- Ans**
- 1. 30%
 - 2. 27%
 - 3. 27.8725%
 - 4. 32.1275%

Q.10 A man sold an article for ₹217, there by gaining 8.5%. The cost of the article (in ₹) was:

- Ans**
- 1. 198
 - 2. 238
 - 3. 235
 - 4. 200

Q.11 Find the value of $\left[(19 \times 8) \times \left\{ 7 \div 7 \times \frac{(16 - 12)}{4} \right\} \right]$

- Ans**
- 1. 146
 - 2. 170
 - 3. 152
 - 4. 155

Q.12 If 4% of x = 48, then x is equal to:

- Ans**
- 1. 2400
 - 2. 2500
 - 3. 1300
 - 4. 1200

Q.13 The value of $50 - 7 \times [2 + 5 \times \{16 - 2(6 - 5) \times 8\} \div 31]$ is:

- Ans
- 1. 36
 - 2. 40
 - 3. 35
 - 4. 34

Q.14 Evaluate: $16 + 12 \div 4 - 3 \times 4$

- Ans
- 1. 9
 - 2. 10
 - 3. 7
 - 4. 6

Q.15 The average of 19 consecutive natural numbers is 41. What is the smallest number among these numbers?

- Ans
- 1. 30
 - 2. 32
 - 3. 31
 - 4. 33

Q.16 If at same rate of interest, in 2 years, the simple interest is ₹42 and compound interest is ₹43, then what is the principal (in ₹)?

- Ans
- 1. 441
 - 2. 434
 - 3. 436
 - 4. 445

Q.17 A can finish a work in 16 days, and B can do the same work in 12 days. With the help of C, they completed the work in 4 days. In how many days can C alone do the same work?

- Ans
- 1. $\frac{48}{7}$
 - 2. $\frac{48}{5}$
 - 3. $\frac{38}{7}$
 - 4. $\frac{43}{7}$

Q.18 The ratio of income and expenditure is 6 : 5. Income increases by 40% and expenditure decreases by 20%. If the initial expenditure is ₹4,50,000. Find the final saving (in ₹).

- Ans
- 1. 3,96,000
 - 2. 3,84,000
 - 3. 3,90,000
 - 4. 3,69,000

Q.19 A hemispherical bowl made of brass has an inner radius 3.5 cm. Find the cost of tin plating it on the inside at the rate of ₹4 per cm^2 .

- Ans
- 1. ₹308
 - 2. ₹318
 - 3. ₹328
 - 4. ₹348

Q.20 A man goes to Ahmedabad from Kolkata at a speed of 4km/hr and returns to Kolkata at speed of 12km/hr, through same route. What is his average speed (in km/hr) of the entire journey?

- Ans
- 1. 10
 - 2. 6
 - 3. 9
 - 4. 7

Section : Part-D-English

Q.1 Identify the sentence with the INCORRECT usage of adverb.

- Ans
- 1. The coffee tasted very bitter to him.
 - 2. Thomas seldomly takes time off work, even when necessary.
 - 3. They will soon finish the project, despite the delays.
 - 4. Nancy had completely forgotten about the meeting.

Q.2 Identify the INCORRECTLY spelt word in the given sentence.

The new software update includes several enhancments to improve performance.

- Ans
- 1. Performance
 - 2. Enhancements
 - 3. Update
 - 4. Software

Q.3 Fill in the blank with the most suitable collocation.

She _____ asthma all her life.

- Ans
- 1. has suffered
 - 2. suffered to
 - 3. is suffering in
 - 4. has suffered from

Q.4 Select the most appropriate ANTONYM of the bracketed word to fill in the blank.

No child should be exposed to violence, abuse or _____ (neglect).

- Ans
- 1. feel
 - 2. attend
 - 3. forgive
 - 4. appear

Q.5 Select the most appropriate synonym of the given word.

Gorge

- Ans
- 1. Canyon
 - 2. Yacht
 - 3. Aside
 - 4. Storm

Q.6 Select the most appropriate option to fill in the blanks.

The old library had (1)___ shelves, (2)___ books and (3)___ corners, where students could study in peace, surrounded by historical knowledge.

- Ans
- 1. (1) quiet ; (2) dusty ; (3) towering
 - 2. (1) dusty ; (2) quiet ; (3) towering
 - 3. (1) towering ; (2) quiet ; (3) dusty
 - 4. (1) towering ; (2) dusty ; (3) quiet

Q.7 Select the most appropriate option that can substitute the underlined segment in the given sentence.

I thanked God for enabling me to save the child's life and feared about my school principal would accept my reason for coming late to school.

- Ans
- 1. wondered whether my
 - 2. disgusted as if
 - 3. surprised though my
 - 4. shocked if my

Q.8 The given sentence is divided into four segments. Select the option that has the segment with an adverbial usage error.

Teacher Sophia / told the class, / "Henry beautiful / finished his homework."

- Ans
- 1. finished his homework."
 - 2. Teacher Sophia
 - 3. "Henry beautiful
 - 4. told the class,

Q.9 Select the most appropriate ANTONYM of the underlined word.

It was extremely difficult for me to suppress my anger.

- Ans
- 1. Release
 - 2. Harass
 - 3. Praise
 - 4. Reward

Q.10 Select the INCORRECTLY spelt word.

- Ans
- 1. Nation
 - 2. Almighty
 - 3. Refer
 - 4. Preffer

Q.11 Select the most appropriate option to fill in the blank.

In the present situation, teachers not only face criticism, but are also _____ for their innovative teaching methodologies.

- Ans
- 1. commended
 - 2. applauded
 - 3. approved
 - 4. derided

Q.12 Fill in the blank with the most appropriate ANTONYM of the word given in brackets. In this (endeavour) _____, he met with vigorous opponents.

- Ans
- 1. design
 - 2. force
 - 3. inactivity
 - 4. business

Q.13 Select the most appropriate synonym of the given word.

Enraged

- Ans
- 1. Furious
 - 2. Sharp
 - 3. Jealous
 - 4. Synthetic

Q.14 Select the most appropriate option to fill in the blank.

_____ advice you gave me was very useful for solving the issue.

- Ans
- 1. The
 - 2. A piece
 - 3. An
 - 4. A

Q.15 Select the most appropriate idiom to fill in the blank.

The hotel's spacious rooms and convenient location _____ for our family vacation perfectly.

- Ans
- 1. fit of rage
 - 2. fit to kill
 - 3. fit to be tied
 - 4. fit the bill

Comprehension:

In the following passage, some words have been deleted. Read the passage carefully and select the most appropriate option to fill in each blank.

Excessive gaming can negatively impact both (1) _____ and physical health, especially among young people. Social media frequently exposes users to (2) _____ content, which may influence their behaviour. However, the extent of this effect has not been widely studied. In this study, 25 young (3) _____ (average age 21.5) who played online games casually were examined. Participants reported their gaming desire after being exposed to gaming-related content on social media. An implicit association test (IAT) was also conducted to measure their implicit attitudes toward this content. Additionally, the relationship between these attitudes and psychological factors, such as personality traits and impulsiveness, was investigated. The results showed that participants had a stronger gaming desire when exposed to gaming cues as compared to (4) _____ content. They also had a positive implicit attitude towards gaming content. Moreover, higher levels of neuroticism were (5) _____ to correlate with greater explicit gaming desire.

SubQuestion No : 16

Q.16 Select the most appropriate option to fill in blank number 1.

- Ans
- 1. emotions
 - 2. society
 - 3. cognition
 - 4. mental

Comprehension:

In the following passage, some words have been deleted. Read the passage carefully and select the most appropriate option to fill in each blank.

Excessive gaming can negatively impact both (1) _____ and physical health, especially among young people. Social media frequently exposes users to (2) _____ content, which may influence their behaviour. However, the extent of this effect has not been widely studied. In this study, 25 young (3) _____ (average age 21.5) who played online games casually were examined. Participants reported their gaming desire after being exposed to gaming-related content on social media. An implicit association test (IAT) was also conducted to measure their implicit attitudes toward this content. Additionally, the relationship between these attitudes and psychological factors, such as personality traits and impulsiveness, was investigated. The results showed that participants had a stronger gaming desire when exposed to gaming cues as compared to (4) _____ content. They also had a positive implicit attitude towards gaming content. Moreover, higher levels of neuroticism were (5) _____ to correlate with greater explicit gaming desire.

SubQuestion No : 17

Q.17 Select the most appropriate option to fill in blank number 2.

- Ans**
- 1. news
 - 2. advertising
 - 3. gaming-related
 - 4. educational

Comprehension:

In the following passage, some words have been deleted. Read the passage carefully and select the most appropriate option to fill in each blank.

Excessive gaming can negatively impact both (1) _____ and physical health, especially among young people. Social media frequently exposes users to (2) _____ content, which may influence their behaviour. However, the extent of this effect has not been widely studied. In this study, 25 young (3) _____ (average age 21.5) who played online games casually were examined. Participants reported their gaming desire after being exposed to gaming-related content on social media. An implicit association test (IAT) was also conducted to measure their implicit attitudes toward this content. Additionally, the relationship between these attitudes and psychological factors, such as personality traits and impulsiveness, was investigated. The results showed that participants had a stronger gaming desire when exposed to gaming cues as compared to (4) _____ content. They also had a positive implicit attitude towards gaming content. Moreover, higher levels of neuroticism were (5) _____ to correlate with greater explicit gaming desire.

SubQuestion No : 18

Q.18 Select the most appropriate option to fill in blank number 3.

- Ans**
- 1. minors
 - 2. teenagers
 - 3. children
 - 4. adults

Comprehension:

In the following passage, some words have been deleted. Read the passage carefully and select the most appropriate option to fill in each blank.

Excessive gaming can negatively impact both (1) _____ and physical health, especially among young people. Social media frequently exposes users to (2) _____ content, which may influence their behaviour. However, the extent of this effect has not been widely studied. In this study, 25 young (3) _____ (average age 21.5) who played online games casually were examined. Participants reported their gaming desire after being exposed to gaming-related content on social media. An implicit association test (IAT) was also conducted to measure their implicit attitudes toward this content. Additionally, the relationship between these attitudes and psychological factors, such as personality traits and impulsiveness, was investigated. The results showed that participants had a stronger gaming desire when exposed to gaming cues as compared to (4) _____ content. They also had a positive implicit attitude towards gaming content. Moreover, higher levels of neuroticism were (5) _____ to correlate with greater explicit gaming desire.

SubQuestion No : 19

Q.19 Select the most appropriate option to fill in blank number 4.

- Ans**
- 1. negativity
 - 2. neutral
 - 3. gaming
 - 4. positivity

Comprehension:

In the following passage, some words have been deleted. Read the passage carefully and select the most appropriate option to fill in each blank.

Excessive gaming can negatively impact both (1) _____ and physical health, especially among young people. Social media frequently exposes users to (2) _____ content, which may influence their behaviour. However, the extent of this effect has not been widely studied. In this study, 25 young (3) _____ (average age 21.5) who played online games casually were examined. Participants reported their gaming desire after being exposed to gaming-related content on social media. An implicit association test (IAT) was also conducted to measure their implicit attitudes toward this content. Additionally, the relationship between these attitudes and psychological factors, such as personality traits and impulsiveness, was investigated. The results showed that participants had a stronger gaming desire when exposed to gaming cues as compared to (4) _____ content. They also had a positive implicit attitude towards gaming content. Moreover, higher levels of neuroticism were (5) _____ to correlate with greater explicit gaming desire.

SubQuestion No : 20

Q.20 Select the most appropriate option to fill in blank number 5.

- Ans
- 1. founded
 - 2. found
 - 3. find
 - 4. finds

Section : Part-D-Hindi

Q.1 निम्नांकित मुहावरे के रिक्त स्थान के लिए सर्वाधिक उपयुक्त शब्द कौन-सा है?

एक और एक _____ होना।

- Ans
- 1. दस
 - 2. बारह
 - 3. दो
 - 4. म्यारह

Q.2 निबंध लेखक पाठक का _____ विषय से परिचय कराता है।
दिए गए वाक्यांश के लिए सार्थक शब्द चुनिए।

- Ans
- 1. उपसंहार में
 - 2. प्रकरण में
 - 3. प्रस्तावना में
 - 4. विषय-प्रतिपादन में

Q.3 निम्नलिखित वाक्य में किस भाग में वर्तनी अशुद्धि है ?
'अनाब्रिष्टि से देश के इस भाग में सूखा पड़ गया है।'

- Ans
- 1. देश के
 - 2. अनाब्रिष्टि से
 - 3. इस भाग में सूखा
 - 4. पड़ गया है

Q.4 'उद्भव' शब्द का विलोम पहचानिए।

- Ans
- 1. सद्भाव
 - 2. अभाव
 - 3. पराभव
 - 4. अनुभाव

Q.5 निम्नलिखित वाक्यांश के लिए सार्थक शब्द चुनिए -
जिसके समान कोई दूसरा न हो

- Ans
- 1. अद्वितीय
 - 2. अद्वैत
 - 3. द्वितीय
 - 4. द्वैत

Q.6 निम्नलिखित वाक्यांश के लिए उपयुक्त सार्थक शब्द है:

हाल में ही हुआ बच्चा

- Ans
- 1. नया बच्चा
 - 2. नवजात
 - 3. बचपन
 - 4. बच्चा

Q.7 निम्नलिखित वाक्य का कौन सा भाग अशुद्ध है ?

'विवाह समारोह संपन्न हो गया है और उसने अपने विवाह के उपलक्ष में एक भोज दिया है।'

- Ans
- 1. विवाह के उपलक्ष में
 - 2. एक भोज दिया है
 - 3. विवाह समारोह
 - 4. संपन्न हो गया है और उसने

Q.8 निम्न में से किस विकल्प में मिश्र वाक्य का प्रयोग नहीं हुआ है?

- Ans
- 1. जो जागत है सो पावत है। जो सोवत है वह खोवत है।
 - 2. मैं उस अध्यापक से मिला था जिसे राष्ट्रीय पुरस्कार मिला था।
 - 3. आप नहीं जानते कि मैं कौन हूँ।
 - 4. शिक्षक आया और राम पढ़ने लगा।

Q.9 संस्कृत शब्द 'राजन्' का शुद्ध स्त्रीलिंग रूप है-

- Ans
- 1. राज्ञी
 - 2. रत्ना
 - 3. राजश्री
 - 4. राजनि

Q.10 दिए गए शब्द का उचित विलोम शब्द चुनिए-

उत्थान

- Ans
- 1. कमी
 - 2. पतन
 - 3. समाप्त
 - 4. डूबना

Q.11 सक्षम की जितनी प्रशंसा की जाए, वह कम है।

रेखांकित शब्द के उचित विलोम शब्द का चयन कीजिए।

- Ans
- 1. बातचीत
 - 2. निंदा
 - 3. अनुशंसा
 - 4. बुराई

Q.12 यदि कनिष्ठ ज्येष्ठ है, उसी प्रकार निम्नलिखित में से कौन एक सही युग्म है?

- Ans
- 1. अस्त - छुपना
 - 2. सक्षम - सबल
 - 3. अनुकूल - प्रतिकूल
 - 4. बहुज्ञ - जानकार

Q.13 निम्नलिखित वाक्य को ध्यानपूर्वक पढ़ें और क्रिया संबंधी त्रुटि की पहचान कर शुद्ध वाक्य का चयन करें।
वह तालाब में भटक रहा है।

- Ans
- ✓ 1. वह तालाब में तैर रहा है।
 - ✗ 2. सुरेश तालाब में भटक रहा है।
 - ✗ 3. सीमा तालाब में पढ़ रही है।
 - ✗ 4. वह तालाब में जुताई कर रहा है।

Q.14 रिक्त स्थान की पूर्ति तत्सम शब्द से करें-

उस दृश्य को देखकर उसका... तार-तार हो गया।

- Ans
- ✓ 1. हृदय
 - ✗ 2. भावना
 - ✗ 3. हिय
 - ✗ 4. मन

Q.15 अमन को क्षीर बहुत पसंद है। इस वाक्य में क्षीर शब्द का तद्भव रूप प्रयुक्त कर वाक्य पूर्ण कीजिए।

- Ans
- ✓ 1. अमन को खीर बहुत पसंद है।
 - ✗ 2. अमन को नीर बहुत पसंद है।
 - ✗ 3. अमन को दूध बहुत पसंद है।
 - ✗ 4. अमन को जल बहुत पसंद है।

Comprehension:

प्रश्न संख्या 36 से 40 तक के उत्तर दिए गए गद्यांश के आधार पर दीजिए।

दिए गए विकल्पों में से उचित विकल्पों से खाली स्थान भरें।

ऐसा माना जाता है कि मनुष्य एकमात्र ऐसी जाति है, जो सदा _____ (36) रही है और यह चरितार्थ भी हुआ है। परंतु, _____ (37) के विकास के क्रम में मानव ने ज्यों-ज्यों अपने कदम आगे बढ़ाए, त्यों-त्यों सामाजिक-व्यवस्था में पुरुषों ने अपना _____ (38) स्थापित कर लिया और महिलाओं को पर्याप्त योगदान के बावजूद पृष्ठभूमि में डाल दिया गया। महिलाएँ नियमित रूप से _____ (39) झेलती रहीं और सामाजिक-व्यवस्था के कठोर होने के कारण इसके विरुद्ध आवाज़ उठाने में भी _____ (40) करती रहीं।

SubQuestion No : 16

Q.16 गद्यांश के रिक्त स्थान की पूर्ति दिए गए विकल्पों में से उचित विकल्प से कीजिए _____

- Ans
- ✗ 1. पतनशील
 - ✗ 2. पतित
 - ✗ 3. विकसित
 - ✓ 4. विकासशील

Comprehension:

प्रश्न संख्या 36 से 40 तक के उत्तर दिए गए गद्यांश के आधार पर दीजिए।

दिए गए विकल्पों में से उचित विकल्पों से खाली स्थान भरें।

ऐसा माना जाता है कि मनुष्य एकमात्र ऐसी जाति है, जो सदा _____ (36) रही है और यह चरितार्थ भी हुआ है। परंतु, _____ (37) के विकास के क्रम में मानव ने ज्यों-ज्यों अपने कदम आगे बढ़ाए, त्यों-त्यों सामाजिक-व्यवस्था में पुरुषों ने अपना _____ (38) स्थापित कर लिया और महिलाओं को पर्याप्त योगदान के बावजूद पृष्ठभूमि में डाल दिया गया। महिलाएँ नियमित रूप से _____ (39) झेलती रहीं और सामाजिक-व्यवस्था के कठोर होने के कारण इसके विरुद्ध आवाज़ उठाने में भी _____ (40) करती रहीं।

SubQuestion No : 17

Q.17 गद्यांश के रिक्त स्थान की पूर्ति दिए गए विकल्पों में से उचित विकल्प से कीजिए _____

- Ans
- ✗ 1. समाज
 - ✗ 2. परम्परा
 - ✗ 3. संस्कार
 - ✓ 4. सभ्यता

Comprehension:

प्रश्न संख्या 36 से 40 तक के उत्तर दिए गए गद्यांश के आधार पर दीजिए।

दिए गए विकल्पों में से उचित विकल्पों से खाली स्थान भरें।

ऐसा माना जाता है कि मनुष्य एकमात्र ऐसी जाति है, जो सदा _____ (36) रही है और यह चरितार्थ भी हुआ है। परंतु, _____ (37) के विकास के क्रम में मानव ने ज्यों-ज्यों अपने कदम आगे बढ़ाए, त्यों-त्यों सामाजिक-व्यवस्था में पुरुषों ने अपना _____ (38) स्थापित कर लिया और महिलाओं को पर्याप्त योगदान के बावजूद पृष्ठभूमि में डाल दिया गया। महिलाएँ नियमित रूप से _____ (39) झेलती रहीं और सामाजिक-व्यवस्था के कठोर होने के कारण इसके विरुद्ध आवाज़ उठाने में भी _____ (40) करती रहीं।

SubQuestion No : 18

Q.18 गद्यांश के रिक्त स्थान की पूर्ति दिए गए विकल्पों में से उचित विकल्प से कीजिए _____

- Ans**
- 1. शासन
 - 2. राज
 - 3. महत्त्व
 - 4. वर्चस्व

Comprehension:

प्रश्न संख्या 36 से 40 तक के उत्तर दिए गए गद्यांश के आधार पर दीजिए।

दिए गए विकल्पों में से उचित विकल्पों से खाली स्थान भरें।

ऐसा माना जाता है कि मनुष्य एकमात्र ऐसी जाति है, जो सदा _____ (36) रही है और यह चरितार्थ भी हुआ है। परंतु, _____ (37) के विकास के क्रम में मानव ने ज्यों-ज्यों अपने कदम आगे बढ़ाए, त्यों-त्यों सामाजिक-व्यवस्था में पुरुषों ने अपना _____ (38) स्थापित कर लिया और महिलाओं को पर्याप्त योगदान के बावजूद पृष्ठभूमि में डाल दिया गया। महिलाएँ नियमित रूप से _____ (39) झेलती रहीं और सामाजिक-व्यवस्था के कठोर होने के कारण इसके विरुद्ध आवाज़ उठाने में भी _____ (40) करती रहीं।

SubQuestion No : 19

Q.19 गद्यांश के रिक्त स्थान की पूर्ति दिए गए विकल्पों में से उचित विकल्प से कीजिए _____

- Ans**
- 1. अनुशंसा
 - 2. उत्पीड़न
 - 3. अवमानना
 - 4. अपेक्षा

Comprehension:

प्रश्न संख्या 36 से 40 तक के उत्तर दिए गए गद्यांश के आधार पर दीजिए।

दिए गए विकल्पों में से उचित विकल्पों से खाली स्थान भरें।

ऐसा माना जाता है कि मनुष्य एकमात्र ऐसी जाति है, जो सदा _____ (36) रही है और यह चरितार्थ भी हुआ है। परंतु, _____ (37) के विकास के क्रम में मानव ने ज्यों-ज्यों अपने कदम आगे बढ़ाए, त्यों-त्यों सामाजिक-व्यवस्था में पुरुषों ने अपना _____ (38) स्थापित कर लिया और महिलाओं को पर्याप्त योगदान के बावजूद पृष्ठभूमि में डाल दिया गया। महिलाएँ नियमित रूप से _____ (39) झेलती रहीं और सामाजिक-व्यवस्था के कठोर होने के कारण इसके विरुद्ध आवाज़ उठाने में भी _____ (40) करती रहीं।

SubQuestion No : 20

Q.20 गद्यांश के रिक्त स्थान की पूर्ति दिए गए विकल्पों में से उचित विकल्प से कीजिए _____

- Ans**
- 1. संकोच
 - 2. क्षोभ
 - 3. लज्जा
 - 4. विचार