

Combined Graduate Level Examination 2024 Tier I

Roll Number	
Candidate Name	
Venue Name	
Exam Date	09/09/2024
Exam Time	4:00 PM - 5:00 PM
Subject	Combined Graduate Level Examination Tier I

Section : General Intelligence and Reasoning

Q.1 Select the option that is related to the fifth letter-cluster in the same way as the second letter-cluster is related to the first letter-cluster and the fourth letter-cluster is related to the third letter-cluster.
CWE:ZFX ::PYT:MDI :: KIL:?

- Ans ☒ 1. PRO
☒ 2. RTQ
☒ 3. PQO
☒ 4. STQ

Question ID : 630680416748
Option 1 ID : 6306801625755
Option 2 ID : 6306801625756
Option 3 ID : 6306801625758
Option 4 ID : 6306801625757
Status : Answered
Chosen Option : 2

Q.2 Which of the following terms will replace the question mark (?) in the given series?
MFT, NIS, PLQ, SON, WRJ, ?

- Ans ☒ 1. BUP
☒ 2. BVD
☒ 3. BUE
☒ 4. RUE

Question ID : 630680417049
Option 1 ID : 6306801626962
Option 2 ID : 6306801626960
Option 3 ID : 6306801626961
Option 4 ID : 6306801626959
Status : Answered
Chosen Option : 3

Test Prime

**ALL EXAMS,
ONE SUBSCRIPTION**



70,000+
Mock Tests



**Personalised
Report Card**



**Unlimited
Re-Attempt**



600+
Exam Covered



**Previous Year
Papers**

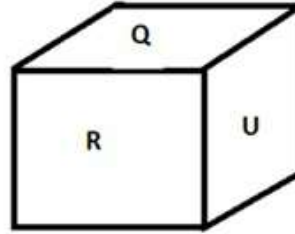
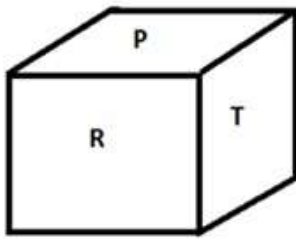


**500%
Refund**



ATTEMPT FREE MOCK NOW

Q.3 Six letters P, Q, R, S, T and U are written on different faces of a dice. Two positions of this dice are shown in the figure below. Find the letter on the face opposite to R.



- Ans
- ☐ 1. U
 - ☐ 2. Q
 - ☒ 3. S
 - ☐ 4. T

Question ID : 630680189141
Option 1 ID : 630680733375
Option 2 ID : 630680733373
Option 3 ID : 630680733374
Option 4 ID : 630680733376
Status : Answered
Chosen Option : 3

Q.4 Three of the following numbers are alike in a certain way and one is different. Pick the odd one out.

(NOTE : Operations should be performed on the whole numbers, without breaking down the numbers into its constituent digits. E.g. 13 – Operations on 13 such as adding /deleting /multiplying etc., to 13 can be performed. Breaking down 13 into 1 and 3 and then performing mathematical operations on 1 and 3 is not allowed.)

- Ans
- ☐ 1. $36 - 84$
 - ☒ 2. $33 - 72$
 - ☐ 3. $66 - 154$
 - ☐ 4. $72 - 168$

Question ID : 630680389588
Option 1 ID : 6306801518810
Option 2 ID : 6306801518812
Option 3 ID : 6306801518811
Option 4 ID : 6306801518813
Status : Answered
Chosen Option : 2

Q.5 Six letters A, M, R, S, Y and Q are written on different faces of a dice. Two positions of this dice are shown in the figures below. Find the letter on the face opposite to S.



- Ans
- ☐ 1. Y
 - ☐ 2. M
 - ☐ 3. Q
 - ☒ 4. A

Question ID : 630680222374
Option 1 ID : 630680863330
Option 2 ID : 630680863329
Option 3 ID : 630680863327
Option 4 ID : 630680863328
Status : Answered
Chosen Option : 4

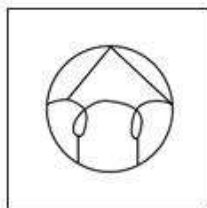
Q.6 Select the option figure in which the given figure (X) is embedded (rotation is NOT allowed).



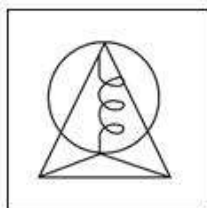
(X)

Ans

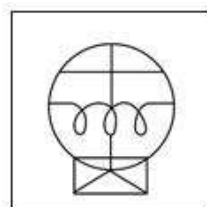
✗ 1.



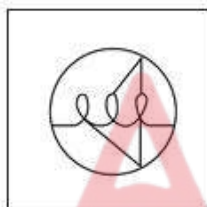
✗ 2.



✓ 3.



✗ 4.



Question ID : 630680296891

Option 1 ID : 6306801155209

Option 2 ID : 6306801155207

Option 3 ID : 6306801155208

Option 4 ID : 6306801155210

Status : Answered

Chosen Option : 3

Q.7 Which two numbers (not digits) should be interchanged to make the given equation correct?

$$24 \div 3 - 4 \times 2 + 6 \times 5 + 12 = 50$$

Ans ✗ 1. 4 and 3

✗ 2. 5 and 4

✗ 3. 3 and 2

✓ 4. 24 and 12

Question ID : 630680319378

Option 1 ID : 6306801242420

Option 2 ID : 6306801242419

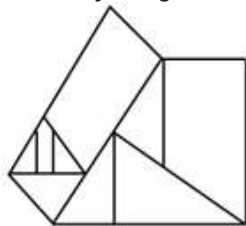
Option 3 ID : 6306801242418

Option 4 ID : 6306801242417

Status : Answered

Chosen Option : 4

Q.8 How many triangles are there in the given figure?



Ans ☒ 1. 6

☒ 2. 8

☒ 3. 4

☒ 4. 5

Question ID : 630680296585

Option 1 ID : 6306801153993

Option 2 ID : 6306801153994

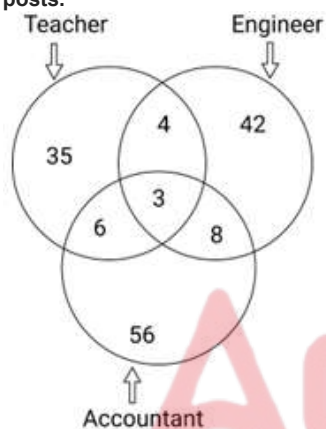
Option 3 ID : 6306801153991

Option 4 ID : 6306801153992

Status : Answered

Chosen Option : 2

Q.9 Study the given diagram carefully and answer the question that follows. The numbers in different sections indicate the number of persons who have applied for different posts.



What is the total number of persons who have applied for more than one post?

Ans ☒ 1. 21

☒ 2. 15

☒ 3. 113

☒ 4. 18

Question ID : 630680195790

Option 1 ID : 630680759613

Option 2 ID : 630680759614

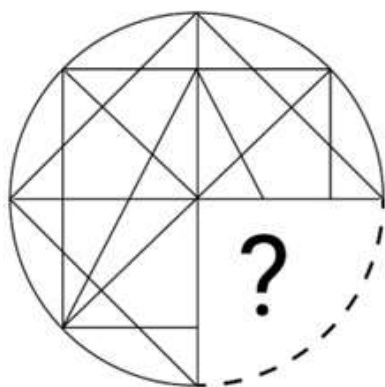
Option 3 ID : 630680759611

Option 4 ID : 630680759612

Status : Answered

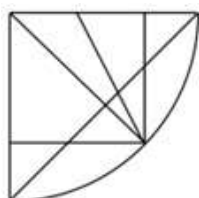
Chosen Option : 1

Q.10 Select the option that will replace the question mark (?) in the figure given below to complete the pattern.

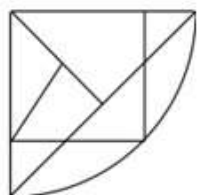


Ans

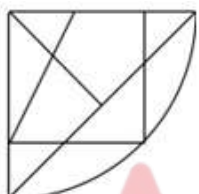
✓ 1.



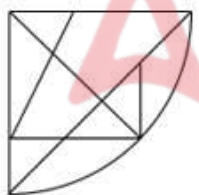
✗ 2.



✗ 3.



✗ 4.



Question ID : 630680313771

Option 1 ID : 6306801220926

Option 2 ID : 6306801220928

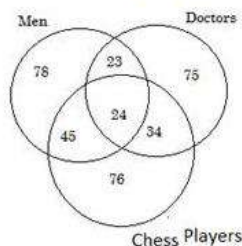
Option 3 ID : 6306801220927

Option 4 ID : 6306801220925

Status : Answered

Chosen Option : 1

Q.11 The following Venn diagram shows Men's profession as Doctors and Chess Players.



How many men are doctors?

- Ans ☒ 1. 47
☒ 2. 34
☒ 3. 23
☒ 4. 24

Question ID : 63068082920
Option 1 ID : 630680321540
Option 2 ID : 630680321543
Option 3 ID : 630680321542
Option 4 ID : 630680321541
Status : Answered
Chosen Option : 3

Q.12 The position of how many letters will remain unchanged if each of the letter in the word 'JANITOR' is arranged in English alphabetical order?

- Ans ☒ 1. Zero
☒ 2. Three
☒ 3. One
☒ 4. Two

Question ID : 630680349932
Option 1 ID : 6306801362019
Option 2 ID : 6306801362017
Option 3 ID : 6306801362018
Option 4 ID : 6306801362020
Status : Answered
Chosen Option : 1

Q.13 Four letter-clusters have been given, out of which three are alike in some manner and one is different. Select the letter-cluster that is different.

Note: The odd one out is not based on the number of consonants/vowels or their position in the letter cluster.

- Ans ☒ 1. PSUV
☒ 2. BEHI
☒ 3. FIKL
☒ 4. TWYZ

Question ID : 63068085565
Option 1 ID : 630680331767
Option 2 ID : 630680331766
Option 3 ID : 630680331764
Option 4 ID : 630680331765
Status : Answered
Chosen Option : 2

Q.14 Select the combination of letters that when sequentially placed in the blanks of the given series will complete the series.
P _ A A _ _ Z A _ V _ _ A _ _

Ans ☒ 1. ZVPAPZAV

☐ 2. ZPVVAPVZ

☐ 3. VZAAPVPZ

☐ 4. VPZZPVAP

Question ID : 630680296794

Option 1 ID : 6306801154826

Option 2 ID : 6306801154823

Option 3 ID : 6306801154824

Option 4 ID : 6306801154825

Status : Answered

Chosen Option : 1

Q.15 Which of the four options will replace the question mark (?) in the following series?
XF 11 , YI 15, ZL 19 , AO 23, ?

Ans ☒ 1. BR 27

☐ 2. CQ 25

☐ 3. CR 25

☐ 4. BP 26

Question ID : 630680416330

Option 1 ID : 6306801624086

Option 2 ID : 6306801624085

Option 3 ID : 6306801624083

Option 4 ID : 6306801624084

Status : Answered

Chosen Option : 1

Q.16 In a certain code language, 'SILK' is written as 'TIML' and 'INSECT' is written as 'IOTEDU'. How will 'CHANGE' be written in that language?

Ans ☐ 1. DEIHAO

☐ 2. DOIHAE

☒ 3. DIAOHE

☐ 4. DEIOHA

Question ID : 630680416129

Option 1 ID : 6306801623281

Option 2 ID : 6306801623279

Option 3 ID : 6306801623280

Option 4 ID : 6306801623282

Status : Answered

Chosen Option : 3

Q.17 What will come in place of the question mark (?) in the following equation, if '+' and '-' are interchanged and 'x' and '÷' are interchanged?
 $321 - 371 \div 22 + 216 \times 6 = ?$

Ans ☒ 1. 7848

☒ 2. 7884

☒ 3. 8747

☒ 4. 8447

Question ID : 630680411716
 Option 1 ID : 6306801605702
 Option 2 ID : 6306801605700
 Option 3 ID : 6306801605701
 Option 4 ID : 6306801605699
 Status : Answered
 Chosen Option : 4

Q.18 In the following number-pairs, the second number is obtained by applying certain mathematical operations to the first number. Select the set in which the numbers are related in the same way as are the numbers of the following sets.
 (NOTE : Operations should be performed on the whole numbers, without breaking down the numbers into its constituent digits. E.g. 13 – Operations on 13 such as adding /deleting /multiplying etc., to 13 can be performed. Breaking down 13 into 1 and 3 and then performing mathematical operations on 1 and 3 is not allowed.)
 (12, 145)
 (9, 82)

Ans ☒ 1. (22, 483)

☒ 2. (16, 256)

☒ 3. (14, 197)

☒ 4. (8, 69)

Question ID : 630680338906
 Option 1 ID : 6306801318214
 Option 2 ID : 6306801318213
 Option 3 ID : 6306801318215
 Option 4 ID : 6306801318216
 Status : Answered
 Chosen Option : 3

Q.19 In a certain code language,
 A + B means 'A is the son of B',
 A - B means 'A is the sister of B',
 A × B means 'A is the brother of B' and
 A ÷ B means 'A is the mother of B'.
 Based on the above, how is T related to P if 'P ÷ Q × R - M + T'?

Ans ☒ 1. Brother

☒ 2. Husband

☒ 3. Father

☒ 4. Son

Question ID : 630680284899
 Option 1 ID : 6306801107597
 Option 2 ID : 6306801107596
 Option 3 ID : 6306801107595
 Option 4 ID : 6306801107598
 Status : Answered
 Chosen Option : 2

Q.20 Select the number from the given options to complete the series.
35, 38, 43, 50, 59, ____

Ans ☒ 1. 68

☒ 2. 70

☒ 3. 62

☒ 4. 78

Question ID : 630680411912

Option 1 ID : 6306801606486

Option 2 ID : 6306801606485

Option 3 ID : 6306801606483

Option 4 ID : 6306801606484

Status : Answered

Chosen Option : 2

Q.21 Select the set in which the numbers are related in the same way as are the numbers of the following sets.

(NOTE: Operations should be performed on the whole numbers, without breaking down the numbers into its constituent digits. E.g. 13 – Operations on 13 such as adding /deleting /multiplying etc. to 13 can be performed. Breaking down 13 into 1 and 3 and then performing mathematical operations on 1 and 3 is not allowed.)

(19, 456, 6)

(16, 320, 5)

Ans ☒ 1. (18, 648, 9)

☒ 2. (14, 210, 5)

☒ 3. (21, 504, 8)

☒ 4. (18, 378, 7)

Question ID : 630680336439

Option 1 ID : 6306801308479

Option 2 ID : 6306801308478

Option 3 ID : 6306801308480

Option 4 ID : 6306801308477

Status : Answered

Chosen Option : 1

Q.22 Which figure should replace the question mark (?) if the following series were to be continued?

=	8	T	△	
B U	2 =	U 2	8 T	?
2 T 9	T 9 U	8 = 9	= 9 2	

Ans

✗ 1.

=
△ 9
8 T 2

✗ 2.

=
△ 2
8 T 9

✓ 3.

=
2 8
△ T 9

✗ 4.

=
9 8
△ 2 T

Question ID : 630680214428
Option 1 ID : 630680831745
Option 2 ID : 630680831743
Option 3 ID : 630680831746
Option 4 ID : 630680831744

Status : Answered
Chosen Option : 3

Q.23 Select the set in which the numbers are related in the same way as are the numbers of the following sets.

(34, 47, 62)

(119, 142, 167)

(NOTE: Operations should be performed on the whole numbers, without breaking down the numbers into its constituent digits. E.g. 13 – Operations on 13 such as adding /deleting /multiplying etc. to 13 can be performed. Breaking down 13 into 1 and 3 and then performing mathematical operations on 1 and 3 is not allowed)

Ans ✗ 1. (64, 78, 99)

✗ 2. (48, 65, 82)

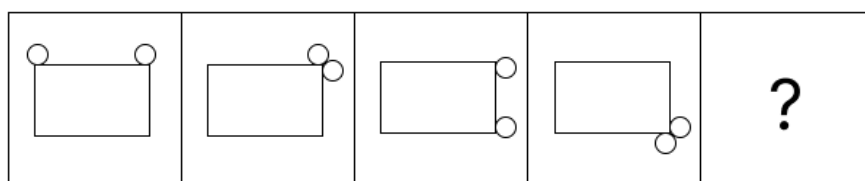
✗ 3. (27, 38, 51)

✓ 4. (79, 98, 119)

Question ID : 630680329240
Option 1 ID : 6306801280784
Option 2 ID : 6306801280782
Option 3 ID : 6306801280781
Option 4 ID : 6306801280783

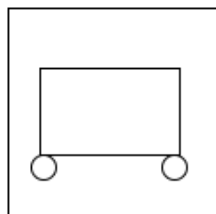
Status : Answered
Chosen Option : 3

Q.24 Identify the figure given in the options which when put in place of the question mark (?) will logically complete the series?

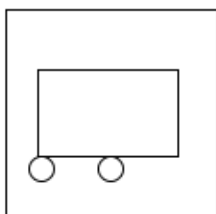


Ans

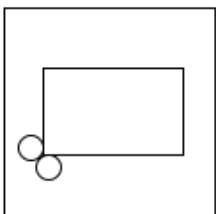
✓ 1.



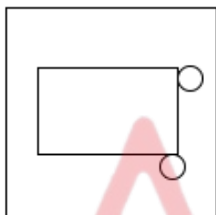
✗ 2.



✗ 3.



✗ 4.



Question ID : 630680471501

Option 1 ID : 6306801841719

Option 2 ID : 6306801841721

Option 3 ID : 6306801841718

Option 4 ID : 6306801841720

Status : Answered

Chosen Option : 1

Q.25 In a certain code language, 'SET' is coded as '37' and 'MIX' is coded as '35'. How will 'WAR' be coded in that language?

Ans ✗ 1. 29

✓ 2. 39

✗ 3. 21

✗ 4. 32

Question ID : 630680285529

Option 1 ID : 6306801110084

Option 2 ID : 6306801110083

Option 3 ID : 6306801110086

Option 4 ID : 6306801110085

Status : Answered

Chosen Option : 2

Q.1 What is the length of Indian Railways network, according to Railway Yearbook 2019-20?

Ans ☒ 1. 67,956 km

☐ 2. 2,402 km

☐ 3. 63,950 km

☐ 4. 1,604 km

Question ID : 630680209064

Option 1 ID : 630680810474

Option 2 ID : 630680810473

Option 3 ID : 630680810471

Option 4 ID : 630680810472

Status : Answered

Chosen Option : 1

Q.2 Which of the following is the largest crustal plate on Earth with an area of over 103,000,000 km²?

Ans ☐ 1. African plate

☐ 2. South American plate

☐ 3. Eurasian plate

☒ 4. Pacific plate

Question ID : 630680302922

Option 1 ID : 6306801178353

Option 2 ID : 6306801178351

Option 3 ID : 6306801178352

Option 4 ID : 6306801178350

Status : Answered

Chosen Option : 3

Q.3 'Nuakhai' is the state festival of:

Ans ☒ 1. Odisha

☐ 2. Tamil Nadu

☐ 3. Meghalaya

☐ 4. Bihar

Question ID : 630680216004

Option 1 ID : 630680837991

Option 2 ID : 630680837993

Option 3 ID : 630680837994

Option 4 ID : 630680837992

Status : Answered

Chosen Option : 1

Q.4 Which of the following is a straight-chain alkyl carboxylic acid with the chemical formula CH₃CH₂CH₂CO₂H?

Ans ☐ 1. Methanoic acid

☐ 2. Ethanoic acid

☐ 3. Propionic acid

☒ 4. Butyric acid

Question ID : 63068085789

Option 1 ID : 630680332618

Option 2 ID : 630680332619

Option 3 ID : 630680332616

Option 4 ID : 630680332617

Status : Answered

Chosen Option : 4

Q.5 Who among the following was the youngest instrumentalist to be awarded the Padma Bhushan, the third highest civilian award of India in 2002?

- Ans** ☒ 1. Ustad Zakir Hussain
☐ 2. Pandit Ravi Shankar
☐ 3. Pandit Bhimsen Joshi
☐ 4. Ustad Bismillah Khan

Question ID : 6306801048036
 Option 1 ID : 6306804114191
 Option 2 ID : 6306804114192
 Option 3 ID : 6306804114190
 Option 4 ID : 6306804114193
 Status : Answered
 Chosen Option : 1

Q.6 Which Article of the Indian Constitution prohibits providing of any religious instruction in the educational institutions maintained by the State?

- Ans** ☐ 1. Article 29
☒ 2. Article 28
☐ 3. Article 30
☐ 4. Article 31

Question ID : 630680305529
 Option 1 ID : 6306801188490
 Option 2 ID : 6306801188489
 Option 3 ID : 6306801188491
 Option 4 ID : 6306801188492
 Status : Answered
 Chosen Option : 1

Q.7 Article 77 of the Indian Constitution deals with the _____.

- Ans** ☐ 1. Vice-President of India
☐ 2. oath of office by the Vice-President
☒ 3. conduct of business of the Government of India
☐ 4. term of office of the Vice-President

Question ID : 630680326513
 Option 1 ID : 6306801270138
 Option 2 ID : 6306801270140
 Option 3 ID : 6306801270137
 Option 4 ID : 6306801270139
 Status : Answered
 Chosen Option : 3

Q.8 The Muslim Women (Protection of Rights on Marriage) Act, 2019 deals with subsistence allowance in which of the following Sections?

- Ans** ☐ 1. Section 7
☒ 2. Section 5
☐ 3. Section 4
☐ 4. Section 6

Question ID : 630680200245
 Option 1 ID : 630680776407
 Option 2 ID : 630680776405
 Option 3 ID : 630680776404
 Option 4 ID : 630680776406
 Status : Not Answered
 Chosen Option : --

Q.9 Which of the following illustrations shows the mitochondrion's structural details?



Ans ☒ 1. c
☒ 2. a
☒ 3. b
☒ 4. d

Question ID : 630680305624
Option 1 ID : 6306801188871
Option 2 ID : 6306801188869
Option 3 ID : 6306801188870
Option 4 ID : 6306801188872
Status : Answered
Chosen Option : 4

Q.10 In which year was the 'Naye Bharat Ke Sapne' campaign launched by Meta and the Ministry of Women?

Ans ☒ 1. 2022
☒ 2. 2021
☒ 3. 2023
☒ 4. 2020

Question ID : 630680413085
Option 1 ID : 6306801611165
Option 2 ID : 6306801611164
Option 3 ID : 6306801611166
Option 4 ID : 6306801611163
Status : Not Answered
Chosen Option : --

Q.11 Which of the following statements is INCORRECT?

Ans ☒ 1. Fats and oils get reduced over time and smell bad.
☒ 2. Antioxidants are added to foods containing fats and oil to prevent oxidation.
☒ 3. Chips manufacturers usually flush bags of chips with Nitrogen to prevent the chips from getting rancid.
☒ 4. Fats and oils are oxidised, they become rancid.

Question ID : 630680517157
Option 1 ID : 6306802021025
Option 2 ID : 6306802021026
Option 3 ID : 6306802021027
Option 4 ID : 6306802021024
Status : Answered
Chosen Option : 1

Q.12 Under which of the following Acts was the power to rule India, transferred from the English East India Company to the British Crown?

- Ans
- ☐ 1. Regulating Act 1773
 - ☐ 2. Pitt's India Act 1784
 - ☒ 3. Government of India Act 1858
 - ☐ 4. Charter Act of 1833

Question ID : 630680412329
 Option 1 ID : 6306801608142
 Option 2 ID : 6306801608140
 Option 3 ID : 6306801608141
 Option 4 ID : 6306801608139
 Status : Answered
 Chosen Option : 3

Q.13 Which of the following countries won the first men's Asian Hockey Championship trophy?

- Ans
- ☐ 1. Japan
 - ☐ 2. China
 - ☐ 3. Pakistan
 - ☒ 4. India

Question ID : 630680510809
 Option 1 ID : 6306801996368
 Option 2 ID : 6306801996366
 Option 3 ID : 6306801996369
 Option 4 ID : 6306801996367
 Status : Answered
 Chosen Option : 4

Q.14 Silappathikaram (the Jewelled Anklet), the earliest epic poem in Tamil was written in the 5th - 6th Century CE by _____.

- Ans
- ☐ 1. Tolkappiyar
 - ☐ 2. Tirumalisai Alwar
 - ☒ 3. Ilango Adigal
 - ☐ 4. Sittalai Sattanar

Question ID : 630680412467
 Option 1 ID : 6306801608692
 Option 2 ID : 6306801608694
 Option 3 ID : 6306801608693
 Option 4 ID : 6306801608691
 Status : Answered
 Chosen Option : 1

Q.15 Which of the following statements is correct?.

- Ans
- ☐ 1. The five-year plan focuses mostly on private intervention in the economy.
 - ☒ 2. The five-year plan permits long-term intervention by the government in the economy.
 - ☐ 3. The five-year plan always focused on the growth of the tertiary sector.
 - ☐ 4. A five-year plan always stresses market-oriented activities.

Question ID : 630680410440
 Option 1 ID : 6306801600477
 Option 2 ID : 6306801600476
 Option 3 ID : 6306801600478
 Option 4 ID : 6306801600479
 Status : Answered
 Chosen Option : 2

Q.16 In Pradhan Mantri Gramin Awaas yojana, the cost of unit assistance is shared between Central and State Governments in the ratio _____ in plain areas.

- Ans
- ☐ 1. 30 : 70
 - ☐ 2. 90 : 10
 - ☒ 3. 60 : 40
 - ☐ 4. 40 : 60

Question ID : 630680339469
Option 1 ID : 6306801320448
Option 2 ID : 6306801320445
Option 3 ID : 6306801320446
Option 4 ID : 6306801320447
Status : Answered
Chosen Option : 1

Q.17 Who was the revenue minister during the reign of Akbar?

- Ans
- ☒ 1. Todar Mal
 - ☐ 2. Abdul Rahim
 - ☐ 3. Mulla Do-Piyaza
 - ☐ 4. Tansen

Question ID : 630680412334
Option 1 ID : 6306801608160
Option 2 ID : 6306801608159
Option 3 ID : 6306801608162
Option 4 ID : 6306801608161
Status : Answered
Chosen Option : 1

Q.18 Hot local wind that flows over north India in summer is known as:

- Ans
- ☐ 1. Purga
 - ☒ 2. Loo
 - ☐ 3. Chinook
 - ☐ 4. Mango showers

Question ID : 630680302660
Option 1 ID : 6306801177309
Option 2 ID : 6306801177308
Option 3 ID : 6306801177307
Option 4 ID : 6306801177306
Status : Answered
Chosen Option : 4

Q.19 As per the definition of Census of India, a 'marginal worker' is a person who works for:

- Ans
- ☐ 1. more than 183 days (or six months) in a year
 - ☒ 2. less than 183 days (or six months) in a year
 - ☐ 3. eight months in a year
 - ☐ 4. 83 days in a year

Question ID : 630680409643
Option 1 ID : 6306801597402
Option 2 ID : 6306801597401
Option 3 ID : 6306801597403
Option 4 ID : 6306801597404
Status : Answered
Chosen Option : 2

Q.20 In which of the following states is the Nrityagram, an Odissi dance institution, located?

- Ans ☒ 1. Karnataka
☐ 2. Tamil Nadu
☐ 3. Kerala
☐ 4. Maharashtra

Question ID : 630680216215
Option 1 ID : 630680838835
Option 2 ID : 630680838838
Option 3 ID : 630680838836
Option 4 ID : 630680838837
Status : Answered
Chosen Option : 2

Q.21 At which Olympics was Kho-Kho featured in an exhibition in the main stadium?

- Ans ☐ 1. 2008
☐ 2. 2016
☐ 3. 1932
☒ 4. 1936

Question ID : 630680510752
Option 1 ID : 6306801996138
Option 2 ID : 6306801996141
Option 3 ID : 6306801996139
Option 4 ID : 6306801996140
Status : Not Answered
Chosen Option : --

Q.22 Which of the following goods needs further transformation in the economic process?

- Ans ☐ 1. Capital goods
☒ 2. Intermediate goods
☐ 3. Finished goods
☐ 4. Consumer durable goods

Question ID : 630680324421
Option 1 ID : 6306801262168
Option 2 ID : 6306801262166
Option 3 ID : 6306801262165
Option 4 ID : 6306801262167
Status : Answered
Chosen Option : 2

Q.23 Who among the following devised the system of 'Subsidiary Alliance'?

- Ans ☐ 1. Lord William Bentinck
☒ 2. Lord Wellesley
☐ 3. Lord Dalhousie
☐ 4. Lord Canning

Question ID : 630680511530
Option 1 ID : 6306801999245
Option 2 ID : 6306801999244
Option 3 ID : 6306801999242
Option 4 ID : 6306801999243
Status : Answered
Chosen Option : 2

Q.24 Which of the following is an inactivated (killed) polio vaccine developed in 1952?

- Ans
- ☐ 1. HDCV vaccine
 - ☒ 2. Salk vaccine
 - ☐ 3. TAB vaccine
 - ☐ 4. Imvanex vaccine

Question ID : 630680407430
Option 1 ID : 6306801588661
Option 2 ID : 6306801588659
Option 3 ID : 6306801588658
Option 4 ID : 6306801588660
Status : Not Answered
Chosen Option : --

Q.25 Which of the following personalities is a Padma Shri awardee folk singer from the state of Uttar Pradesh?

- Ans
- ☒ 1. Ajita Srivastava
 - ☐ 2. Teejan Bai
 - ☐ 3. Ila Arun
 - ☐ 4. Gurmeet Bawa

Question ID : 630680216002
Option 1 ID : 630680837983
Option 2 ID : 630680837984
Option 3 ID : 630680837985
Option 4 ID : 630680837986
Status : Not Answered
Chosen Option : --

Section : Quantitative Aptitude

Q.1 A number is first increased by 12% and then increased by 23%. The number, so obtained, is now decreased by 34%. What is the net increase or decrease percent in the original number (nearest to an integer)?

- Ans
- ☐ 1. 9% increase
 - ☐ 2. 10% decrease
 - ☒ 3. 9% decrease
 - ☐ 4. 10% increase

Question ID : 630680427985
Option 1 ID : 6306801669984
Option 2 ID : 6306801669986
Option 3 ID : 6306801669987
Option 4 ID : 6306801669985
Status : Answered
Chosen Option : 2

Q.2 The given table shows the number of pages printed by four printers in three days.

Days	Printers			
	L	M	N	O
Friday	10,230	9580	7560	9600
Saturday	8540	11,230	6580	7890
Sunday	9235	8264	7546	10,325

If the total number of pages printed by all the given printers together on Wednesday was 15% more than the total number of pages printed by all the given printers together on Saturday, what was the total number of pages printed by all the given printers together on Wednesday?

- Ans
- ☐ 1. 42,577
 - ☐ 2. 38,450
 - ☒ 3. 39,376
 - ☐ 4. 40,263

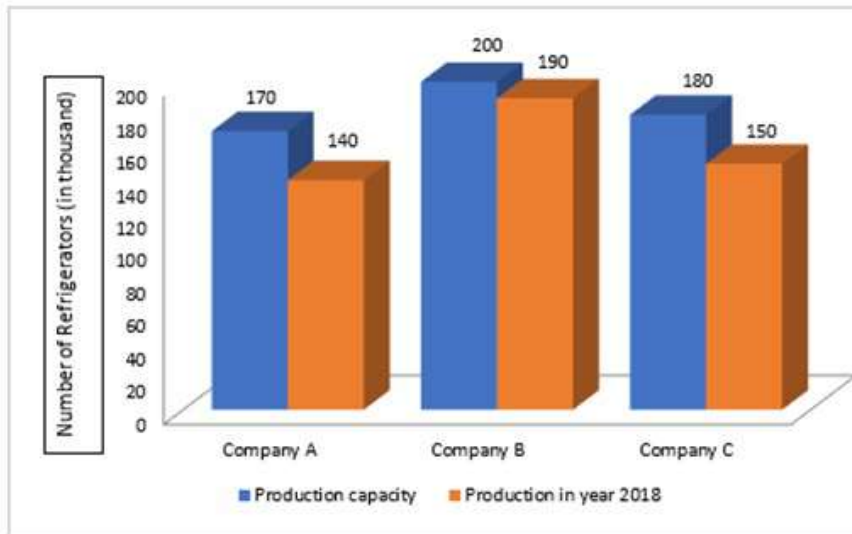
Question ID : 630680523764
Option 1 ID : 6306802047210
Option 2 ID : 6306802047207
Option 3 ID : 6306802047208
Option 4 ID : 6306802047209
Status : Answered
Chosen Option : 3

Q.3 A stock portfolio consists of four stocks. Stock A represents 20% of the portfolio and has a return of 6%. Stock B represents 30% of the portfolio and has a return of 8%. Stock C represents 20% of the portfolio and has a return of 4%. Stock D represents the remaining 30% of the portfolio and has a negative-return of 5%. What is the average return of the portfolio?

- Ans
- ☐ 1. 2.6%
 - ☐ 2. 3.4%
 - ☒ 3. 2.9%
 - ☐ 4. 3.2%

Question ID : 6306801047989
Option 1 ID : 6306804113998
Option 2 ID : 6306804114001
Option 3 ID : 6306804113999
Option 4 ID : 6306804114000
Status : Answered
Chosen Option : 3

Q.4 Study the given graph and answer the question that follows.
The graph shows the production of refrigerators by three companies in 2018.



The refrigerators produced by company C form what percentage of the total production?

- Ans
- ☒ 1. 34.35%
 - ☒ 2. 31.25%
 - ☒ 3. 32.56%
 - ☒ 4. 30.25%

Question ID : 630680428210
Option 1 ID : 6306801670887
Option 2 ID : 6306801670885
Option 3 ID : 6306801670886
Option 4 ID : 6306801670884

Status : Answered

Chosen Option : 3

Q.5 If x, y and z are positive numbers and $x + y + z = 1$, then the least value of $\frac{1}{x} + \frac{1}{y} + \frac{1}{z}$ is:

- Ans
- ☒ 1. 11
 - ☒ 2. 7
 - ☒ 3. 5
 - ☒ 4. 9

Question ID : 630680413530
Option 1 ID : 6306801612947
Option 2 ID : 6306801612944
Option 3 ID : 6306801612946
Option 4 ID : 6306801612945

Status : Answered

Chosen Option : 4

Q.6 A thief noticed a policeman at a distance of 600 metres. The thief started running and the policeman chased him. The thief and policeman are running at speeds of 12 km/h and 15 km/h, respectively. Find the time (in minutes) required for the policeman to catch the thief.

- Ans
- ☒ 1. 8
 - ☒ 2. 10
 - ☒ 3. 12
 - ☒ 4. 15

Question ID : 630680428499
 Option 1 ID : 6306801672041
 Option 2 ID : 6306801672042
 Option 3 ID : 6306801672040
 Option 4 ID : 6306801672043
 Status : Answered
 Chosen Option : 3

Q.7 What is the perimeter (in cm, rounded off to one decimal place) of the sector of a circle with a radius of 10 cm and of angle 30° ? (Use $\pi = 3.14$)

- Ans
- ☒ 1. 82.8
 - ☒ 2. 25.2
 - ☒ 3. 20.4
 - ☒ 4. 35.7

Question ID : 630680401411
 Option 1 ID : 6306801565433
 Option 2 ID : 6306801565430
 Option 3 ID : 6306801565431
 Option 4 ID : 6306801565432
 Status : Answered
 Chosen Option : 2

Q.8 Let $a + b = 2c$, then which of the following expressions is true?

- Ans
- ☒ 1. $a^2 - ac = b^2 - bc$
 - ☒ 2. $a^2 + 2ac = b^2 + 2bc$
 - ☒ 3. $a^2 - 2bc = b^2 - 2ac$
 - ☒ 4. $a^2 + 2bc = b^2 + 2ac$

Question ID : 630680413482
 Option 1 ID : 6306801612755
 Option 2 ID : 6306801612754
 Option 3 ID : 6306801612753
 Option 4 ID : 6306801612752
 Status : Answered
 Chosen Option : 4

Q.9 If 7845K854 is divisible by 11, then what is the value of K?

Ans ☒ 1. 9

☒ 2. 8

☒ 3. 6

☒ 4. 7

Question ID : 630680112895

Option 1 ID : 630680437202

Option 2 ID : 630680437203

Option 3 ID : 630680437205

Option 4 ID : 630680437204

Status : Answered

Chosen Option : 1

Q.10 Find the area (in cm^2) of the sector whose perimeter is $\frac{64}{3}$ cm and central angle is 60° . (Use $\pi = \frac{22}{7}$.)

Ans ☒ 1. $\frac{47}{3}$

☒ 2. $\frac{85}{3}$

☒ 3. $\frac{68}{3}$

☒ 4. $\frac{77}{3}$

Question ID : 630680200522

Option 1 ID : 630680777443

Option 2 ID : 630680777446

Option 3 ID : 630680777444

Option 4 ID : 630680777445

Status : Answered

Chosen Option : 4

Q.11 Study the given table and answer the question that follows.

The given table shows the production of T-shirts by four companies i.e., C1, C2, C3 and C4 over the four years.

Year	Production (in thousands)			
	C1	C2	C3	C4
2019	243	244	244	240
2020	248	239	236	230
2021	232	240	235	248
2022	242	244	230	242

Which company had the maximum average production of T-shirts during these four years?

Ans ☒ 1. C4

☒ 2. C1

☒ 3. C2

☒ 4. C3

Question ID : 630680428199

Option 1 ID : 6306801670843

Option 2 ID : 6306801670840

Option 3 ID : 6306801670841

Option 4 ID : 6306801670842

Status : Answered

Chosen Option : 3

Q.12 The mean proportional of $8a^2$ and $\frac{18}{a^4}$, where a is a positive number, is _____.

Ans

☒ 1. $\frac{12}{a^2}$

☒ 2. $12a^2$

☒ 3. $\frac{12}{a}$

☒ 4. $12a$

Question ID : 630680428708

Option 1 ID : 6306801672878

Option 2 ID : 6306801672876

Option 3 ID : 6306801672879

Option 4 ID : 6306801672877

Status : Answered

Chosen Option : 3

Q.13 In $\triangle PQR$, the bisectors of $\angle Q$ and $\angle R$ meet at point O, inside the triangle. If $\angle QOR = 107^\circ$, then the measure of $\angle P$ is:

- Ans
- ☐ 1. 23°
 - ☐ 2. 40°
 - ☒ 3. 34°
 - ☐ 4. 17°

Question ID : 630680404032
 Option 1 ID : 6306801575615
 Option 2 ID : 6306801575617
 Option 3 ID : 6306801575616
 Option 4 ID : 6306801575614
 Status : Answered
 Chosen Option : 3

Q.14 If $\frac{7\sin\theta + 4\cos\theta}{9\sin\theta - 2\cos\theta} = \frac{5}{4}$, then the value of $\frac{\tan^2\theta + 5}{\tan^2\theta - 5}$ is:

- Ans
- ☐ 1. $-\frac{769}{2121}$
 - ☐ 2. $\frac{769}{2121}$
 - ☐ 3. $\frac{2121}{769}$
 - ☒ 4. $-\frac{2121}{769}$

Question ID : 630680404034
 Option 1 ID : 6306801575625
 Option 2 ID : 6306801575624
 Option 3 ID : 6306801575622
 Option 4 ID : 6306801575623
 Status : Answered
 Chosen Option : 4

Q.15 If the equations $4x + (k - 2)y + 3 = 0$ and $(k - 2)x + 9y - 5 = 0$ ($k > 0$) are parallel, then find the value of $k^2 + 6$.

- Ans
- ☐ 1. 72
 - ☐ 2. 68
 - ☒ 3. 70
 - ☐ 4. 64

Question ID : 630680285536
 Option 1 ID : 6306801110114
 Option 2 ID : 6306801110112
 Option 3 ID : 6306801110113
 Option 4 ID : 6306801110111
 Status : Answered
 Chosen Option : 3

Q.16 Simplify:

$$13 - [7 - (4 + 7) - \{7 - (7 - 4 + 7)\} + 14]$$

- Ans
- ☐ 1. 9
 - ☐ 2. 13
 - ☐ 3. 26
 - ☒ 4. 0

Question ID : 630680427990
Option 1 ID : 6306801670006
Option 2 ID : 6306801670005
Option 3 ID : 6306801670004
Option 4 ID : 6306801670007
Status : Answered
Chosen Option : 4

Q.17 A dishonest shopkeeper claims to sell salt at a rate of ₹25/kg. The cost price of the salt is ₹25/kg. Not satisfied with this, he tries to make profit by removing 200 gm from each kg. What is the shopkeeper's gain percentage?

- Ans
- ☐ 1. 20%
 - ☒ 2. 25%
 - ☐ 3. 30%
 - ☐ 4. 15%

Question ID : 630680428984
Option 1 ID : 6306801673981
Option 2 ID : 6306801673982
Option 3 ID : 6306801673983
Option 4 ID : 6306801673980
Status : Answered
Chosen Option : 2

Q.18 Ramesh has ₹18,000. He deposited ₹7,000 in a bank at the rate of 5% per annum and ₹6,000 in other bank at the rate of 6% per annum simple interest. If he received ₹1,160 as simple interest at the end of one year, then the rate of interest per annum on rest of the capital is equal to:

- Ans
- ☐ 1. 10%
 - ☒ 2. 9%
 - ☐ 3. 8%
 - ☐ 4. 11%

Question ID : 630680357947
Option 1 ID : 6306801393779
Option 2 ID : 6306801393778
Option 3 ID : 6306801393777
Option 4 ID : 6306801393780
Status : Answered
Chosen Option : 2

Q.19

If A is an acute angle, which of the following is equal to $\frac{\sin A}{1 + \cos A}$?

Ans

- ☒ 1. $\frac{1 + \sin A}{\cos A}$
☒ 2. $\frac{1 - \sin A}{\cos A}$
☒ 3. $\frac{1 + \cos A}{\sin A}$
☒ 4. $\frac{1 - \cos A}{\sin A}$

Question ID : 630680180208

Option 1 ID : 630680698576

Option 2 ID : 630680698577

Option 3 ID : 630680698579

Option 4 ID : 630680698578

Status : Answered

Chosen Option : 4

Q.20 In a clearance sale, a sari whose marked price was ₹10,490 is now sold for ₹9,441. What is the discount percentage on the sari?

- ☒ 1. 12%
☒ 2. 10%
☒ 3. 18%
☒ 4. 15%

Question ID : 630680239486

Option 1 ID : 630680928895

Option 2 ID : 630680928898

Option 3 ID : 630680928897

Option 4 ID : 630680928896

Status : Answered

Chosen Option : 2

Q.21 Two triangles EFG and HIJ are congruent. If the area of $\triangle EFG$ is 124 cm^2 , then the area of $\triangle HIJ$ will be:

- ☒ 1. 31 cm^2
☒ 2. 248 cm^2
☒ 3. 124 cm^2
☒ 4. 62 cm^2

Question ID : 630680382705

Option 1 ID : 6306801491738

Option 2 ID : 6306801491737

Option 3 ID : 6306801491735

Option 4 ID : 6306801491736

Status : Answered

Chosen Option : 3

Q.22 If $\frac{\sec \alpha + \tan \alpha}{\sec \alpha - \tan \alpha} = \frac{7}{4}$, then find the value of cosec α .

Ans

- ✗ 1. $\frac{1}{3}$
- ✗ 2. $\frac{1}{11}$
- ✓ 3. $\frac{11}{3}$
- ✗ 4. $\frac{3}{11}$

Question ID : 630680526491
Option 1 ID : 6306802058030
Option 2 ID : 6306802058031
Option 3 ID : 6306802058032
Option 4 ID : 6306802058033
Status : Answered
Chosen Option : 3

Q.23 A pipe can fill an overhead tank in 12 hours. But due to a leak at the bottom, it is filled in 18 hours. If the tank is full, how much time will the leak take to empty it?

Ans

- ✓ 1. 36 hours
- ✗ 2. 7.2 hours
- ✗ 3. 63 hours
- ✗ 4. 3.6 hours

Question ID : 6306801047986
Option 1 ID : 6306804113986
Option 2 ID : 6306804113988
Option 3 ID : 6306804113989
Option 4 ID : 6306804113987
Status : Answered
Chosen Option : 1

Q.24

The following table shows the sale (in thousands) of different types of helmets by a shop over the given years.

Type of Helmet/Year	1998	1999	2000	2001	2002
A	78	45	56	63	88
B	58	64	78	60	68
C	46	54	58	64	68
D	76	65	72	78	82
E	87	66	74	80	84

What was the percentage increase in the sale of Helmets C in 2002 as compared to that in 1999?

Ans

- ✓ 1. 25.93%
- ✗ 2. 27.62%
- ✗ 3. 26.39%
- ✗ 4. 28.26%

Question ID : 630680428152
Option 1 ID : 6306801670653
Option 2 ID : 6306801670654
Option 3 ID : 6306801670652
Option 4 ID : 6306801670655
Status : Answered
Chosen Option : 1

Q.25 If the length, breadth, and height of a cuboid is 8 cm, 4 cm, and 6 cm, respectively, then the volume (in cm^3) of the cuboid is:

- Ans** ☒ 1. 192
☒ 2. 96
☒ 3. 218
☒ 4. 172

Question ID : 630680421510
Option 1 ID : 6306801644503
Option 2 ID : 6306801644504
Option 3 ID : 6306801644505
Option 4 ID : 6306801644506
Status : Answered
Chosen Option : 1

Section : English Comprehension

Q.1 Identify the INCORRECTLY spelt word in the following sentence and select its correct spelling from the given options.
I receieved a parcel in the mail today.

- Ans** ☒ 1. recieved
☒ 2. recived
☒ 3. received
☒ 4. received

Question ID : 630680409943
Option 1 ID : 6306801598601
Option 2 ID : 6306801598603
Option 3 ID : 6306801598604
Option 4 ID : 6306801598602
Status : Answered
Chosen Option : 4

Q.2 Select the option that can be used as a one-word substitute for the given group of words.
An order of law requiring people to remain indoors

- Ans** ☒ 1. Curfew
☒ 2. Check in
☒ 3. Restriction
☒ 4. Limit

Question ID : 630680414761
Option 1 ID : 6306801617787
Option 2 ID : 6306801617789
Option 3 ID : 6306801617790
Option 4 ID : 6306801617788
Status : Answered
Chosen Option : 1

Q.3 Which of the following idioms means 'to steal from a shop'?

- Ans ☒ 1. Golden opportunity
☒ 2. Five-finger discount
☒ 3. Black sheep
☒ 4. Green thumb

Question ID : 630680252137
 Option 1 ID : 630680978530
 Option 2 ID : 630680978527
 Option 3 ID : 630680978529
 Option 4 ID : 630680978528
 Status : Answered
 Chosen Option : 2

Q.4 Parts of the following sentence have been given as options. Select the option that contains an error.
 The tea at this café is best than at the Costa Café in our office.

- Ans ☒ 1. in our office
☒ 2. at the Costa Café
☒ 3. The tea at this café
☒ 4. is best than

Question ID : 630680514374
 Option 1 ID : 6306802010124
 Option 2 ID : 6306802010123
 Option 3 ID : 6306802010121
 Option 4 ID : 6306802010122
 Status : Answered
 Chosen Option : 4

Q.5 Select the most appropriate meaning of the given word.
 Edible

- Ans ☒ 1. noxious
☒ 2. noisome
☒ 3. mortal
☒ 4. nutritive

Question ID : 630680129837
 Option 1 ID : 630680502940
 Option 2 ID : 630680502938
 Option 3 ID : 630680502939
 Option 4 ID : 630680502941
 Status : Answered
 Chosen Option : 4

Q.6 Select the option that can be used as a one-word substitute for the given group of words.
Morbid compulsion to consume alcohol continuously

- Ans**
- ☒ 1. Maniac
 - ☒ 2. Dipsomania
 - ☒ 3. Kleptomania
 - ☒ 4. Satyromania

Question ID : 630680414628
Option 1 ID : 6306801617256
Option 2 ID : 6306801617258
Option 3 ID : 6306801617257
Option 4 ID : 6306801617255
Status : Answered
Chosen Option : 2

Q.7 Parts of a sentence are given below in jumbled order. Arrange the parts in the correct order to form a meaningful sentence.

P. having the opportunity of observing people's
Q. we respect and appreciate their point of views
R. the advantage of travelling different places and
S. culture, custom and lifestyle, is that

- Ans**
- ☒ 1. SQPR
 - ☒ 2. PSQR
 - ☒ 3. RQPS
 - ☒ 4. RPSQ

Question ID : 630680134972
Option 1 ID : 630680522703
Option 2 ID : 630680522704
Option 3 ID : 630680522705
Option 4 ID : 630680522702
Status : Answered
Chosen Option : 4

Q.8 Select the most appropriate synonym of the bracketed word in the following sentence to fill in the blank.

The elaborate syllabi had to be _____(summarised) to make a presentation in the UGC assessment meeting.

- Ans**
- ☒ 1. recapitulated
 - ☒ 2. expanded
 - ☒ 3. prolonged
 - ☒ 4. lengthened

Question ID : 630680310100
Option 1 ID : 6306801206542
Option 2 ID : 6306801206544
Option 3 ID : 6306801206541
Option 4 ID : 6306801206543
Status : Answered
Chosen Option : 1

Q.9 Select the option that can be used as a one-word substitute for the underlined group of words.
The question papers are placed in the lockers of the school in a way that they can't be reached.

- Ans**
- ☒ 1. are affable
 - ☒ 2. are irrepressible
 - ☒ 3. are affordable
 - ☒ 4. are inaccessible

Question ID : 630680158618
Option 1 ID : 630680613964
Option 2 ID : 630680613967
Option 3 ID : 630680613965
Option 4 ID : 630680613966
Status : Answered
Chosen Option : 4

Q.10 Select the INCORRECTLY spelt word.

- Ans**
- ☒ 1. Privilege
 - ☒ 2. Accommodate
 - ☒ 3. Mischievous
 - ☒ 4. Millennium

Question ID : 630680380999
Option 1 ID : 6306801484986
Option 2 ID : 6306801484984
Option 3 ID : 6306801484985
Option 4 ID : 6306801484983
Status : Answered
Chosen Option : 3

Q.11 Select the option that expresses the given sentence in active voice.
The painting was admired by art enthusiasts from around the world.

- Ans**
- ☒ 1. Art enthusiasts from around the world have admired the painting.
 - ☒ 2. Art enthusiasts from around the world admired the painting.
 - ☒ 3. The painting was being admired by art enthusiasts from around the world.
 - ☒ 4. The painting has been admired by art enthusiasts from around the world.

Question ID : 630680415191
Option 1 ID : 6306801619511
Option 2 ID : 6306801619514
Option 3 ID : 6306801619513
Option 4 ID : 6306801619512
Status : Answered
Chosen Option : 2

Q.12 Select the most appropriate ANTONYM of the given word.
Miserable

- Ans ☒ 1. Restrained
☒ 2. Cheerful
☒ 3. Settled
☒ 4. Melodious

Question ID : 630680383233
Option 1 ID : 6306801493839
Option 2 ID : 6306801493841
Option 3 ID : 6306801493842
Option 4 ID : 6306801493840
Status : Answered
Chosen Option : 2

Q.13 Select the most appropriate meaning of the underlined idiom.
Fatima was at her wits' end trying to decide on a serene place for spending the holidays in.

- Ans ☒ 1. So worried, confused or annoyed that she became unconscious
☒ 2. So calm and composed that she knows what to do next
☒ 3. So worried, confused or annoyed that she does not know what to do next
☒ 4. So worried, confused or annoyed that she insulted others for no reason

Question ID : 630680374332
Option 1 ID : 6306801458521
Option 2 ID : 6306801458520
Option 3 ID : 6306801458519
Option 4 ID : 6306801458522
Status : Answered
Chosen Option : 3

Q.14 Select the word segment that can substitute the bracketed word segment correctly and complete the sentence meaningfully.
(Each participant have) performed well.

- Ans ☒ 1. Each participant has
☒ 2. Each participant were
☒ 3. Each participant was
☒ 4. Each participant have been

Question ID : 630680186715
Option 1 ID : 630680723812
Option 2 ID : 630680723810
Option 3 ID : 630680723811
Option 4 ID : 630680723809
Status : Answered
Chosen Option : 1

Q.15 Select the option that expresses the given sentence in active voice.
He will be made President by the people.

- Ans**
- ☒ 1. He will be made President by the people.
 - ☒ 2. By the people, he shall be made the President.
 - ☒ 3. The people will make him President.
 - ☒ 4. People will be making him the President.

Question ID : 630680415157
Option 1 ID : 6306801619376
Option 2 ID : 6306801619375
Option 3 ID : 6306801619377
Option 4 ID : 6306801619378
Status : Answered
Chosen Option : 3

Q.16 Select the most appropriate synonym of the given word.
Taut

- Ans**
- ☒ 1. Torn
 - ☒ 2. Slack
 - ☒ 3. Tight
 - ☒ 4. Flaccid

Question ID : 630680158482
Option 1 ID : 630680613453
Option 2 ID : 630680613452
Option 3 ID : 630680613455
Option 4 ID : 630680613454
Status : Answered
Chosen Option : 3

Q.17 Select the most appropriate synonym of the given word.
Confiscate

- Ans**
- ☒ 1. Titivate
 - ☒ 2. Restock
 - ☒ 3. Seize
 - ☒ 4. Destroy

Question ID : 630680214313
Option 1 ID : 630680831302
Option 2 ID : 630680831299
Option 3 ID : 630680831300
Option 4 ID : 630680831301
Status : Answered
Chosen Option : 3

Q.18 Select the most appropriate homophone to fill in the blank.
He has the _____ to express his thoughts.

- Ans ☒ 1. write
☒ 2. ride
☒ 3. rite
☒ 4. right

Question ID : 630680158494
Option 1 ID : 630680613501
Option 2 ID : 630680613503
Option 3 ID : 630680613502
Option 4 ID : 630680613500
Status : Answered
Chosen Option : 4

Q.19 Select the most appropriate option to substitute the underlined segment in the given sentence.
There are many factories in the operative area of the city.

- Ans ☒ 1. industrious
☒ 2. mechanical
☒ 3. industrial
☒ 4. serviceable

Question ID : 630680176817
Option 1 ID : 630680685481
Option 2 ID : 630680685480
Option 3 ID : 630680685483
Option 4 ID : 630680685482
Status : Answered
Chosen Option : 3

Q.20 Parts of the following sentence have been given as options. Select the option that contains an error.
I are dancing with my husband at my sister's wedding.

- Ans ☒ 1. husband at my
☒ 2. I are dancing
☒ 3. with my
☒ 4. sister's wedding

Question ID : 630680319121
Option 1 ID : 6306801241391
Option 2 ID : 6306801241389
Option 3 ID : 6306801241390
Option 4 ID : 6306801241392
Status : Answered
Chosen Option : 2

Comprehension:

In the following passage, some words have been deleted. Read the passage carefully and select the most appropriate option to fill in each blank.

Tea prices in the domestic (1)_____ continue to rule high in the current year despite the expectation of a higher production as compared to the previous year. During the past three months, tea prices have been (2)_____ with the prices of other companies. Unlike last year, tea prices have generally shown (3)_____, when tea prices rose dramatically, this year, prices seem to have (4)_____ at a rather high level. In the subsequent four months, the (5)_____ average price showed a downtrend.

SubQuestion No : 21

Q.21 Select the most appropriate option to fill in blank number 1.

- Ans
- ☒ 1. field
 - ☒ 2. zone
 - ☒ 3. market
 - ☒ 4. area

Question ID : 630680168584

Option 1 ID : 630680652947

Option 2 ID : 630680652945

Option 3 ID : 630680652946

Option 4 ID : 630680652944

Status : Answered

Chosen Option : 3

Comprehension:

In the following passage, some words have been deleted. Read the passage carefully and select the most appropriate option to fill in each blank.

Tea prices in the domestic (1)_____ continue to rule high in the current year despite the expectation of a higher production as compared to the previous year. During the past three months, tea prices have been (2)_____ with the prices of other companies. Unlike last year, tea prices have generally shown (3)_____, when tea prices rose dramatically, this year, prices seem to have (4)_____ at a rather high level. In the subsequent four months, the (5)_____ average price showed a downtrend.

SubQuestion No : 22

Q.22 Select the most appropriate option to fill in blank number 2.

- Ans
- ☒ 1. aligning
 - ☒ 2. encountering
 - ☒ 3. favouring
 - ☒ 4. countering

Question ID : 630680168585

Option 1 ID : 630680652949

Option 2 ID : 630680652948

Option 3 ID : 630680652951

Option 4 ID : 630680652950

Status : Answered

Chosen Option : 1

Comprehension:

In the following passage, some words have been deleted. Read the passage carefully and select the most appropriate option to fill in each blank.

Tea prices in the domestic (1)_____ continue to rule high in the current year despite the expectation of a higher production as compared to the previous year. During the past three months, tea prices have been (2)_____ with the prices of other companies. Unlike last year, tea prices have generally shown (3)_____, when tea prices rose dramatically, this year, prices seem to have (4)_____ at a rather high level. In the subsequent four months, the (5)_____ average price showed a downtrend.

SubQuestion No : 23

Q.23 Select the most appropriate option to fill in blank number 3.

- Ans
- ☒ 1. an innate
 - ☒ 2. a reduction
 - ☒ 3. an uptrend
 - ☒ 4. an inflow

Question ID : 630680168586

Option 1 ID : 630680652954

Option 2 ID : 630680652952

Option 3 ID : 630680652955

Option 4 ID : 630680652953

Status : Answered

Chosen Option : 1

Comprehension:

In the following passage, some words have been deleted. Read the passage carefully and select the most appropriate option to fill in each blank.

Tea prices in the domestic (1)_____ continue to rule high in the current year despite the expectation of a higher production as compared to the previous year. During the past three months, tea prices have been (2)_____ with the prices of other companies. Unlike last year, tea prices have generally shown (3)_____, when tea prices rose dramatically, this year, prices seem to have (4)_____ at a rather high level. In the subsequent four months, the (5)_____ average price showed a downtrend.

SubQuestion No : 24

Q.24 Select the most appropriate option to fill in blank number 4.

- Ans
- ☒ 1. abated
 - ☒ 2. moderated
 - ☒ 3. stabilised
 - ☒ 4. equated

Question ID : 630680168587

Option 1 ID : 630680652956

Option 2 ID : 630680652957

Option 3 ID : 630680652958

Option 4 ID : 630680652959

Status : Answered

Chosen Option : 1

Comprehension:

In the following passage, some words have been deleted. Read the passage carefully and select the most appropriate option to fill in each blank.

Tea prices in the domestic (1)_____ continue to rule high in the current year despite the expectation of a higher production as compared to the previous year. During the past three months, tea prices have been (2)_____ with the prices of other companies. Unlike last year, tea prices have generally shown (3)_____, when tea prices rose dramatically, this year, prices seem to have (4)_____ at a rather high level. In the subsequent four months, the (5)_____ average price showed a downtrend.

SubQuestion No : 25

Q.25 Select the most appropriate option to fill in blank number 5.

- Ans** ☒ 1. yearly
☒ 2. monthly
☒ 3. half yearly
☒ 4. weekly

Question ID : 630680168588

Option 1 ID : 630680652962

Option 2 ID : 630680652960

Option 3 ID : 630680652963

Option 4 ID : 630680652961

Status : Answered

Chosen Option : 2

