

Combined Graduate Level Examination 2024 Tier I

Roll Number	
Candidate Name	
Venue Name	
Exam Date	10/09/2024
Exam Time	9:00 AM - 10:00 AM
Subject	Combined Graduate Level Examination Tier I

Section : General Intelligence and Reasoning

Q.1 Read the given statements and conclusions carefully. Assuming that the information given in the statements is true, even if it appears to be at variance with commonly known facts, decide which of the given conclusions logically follow(s) from the statements.

Statements: Some boxes are cartons. All cartons are papers. Some cartons are utensils.

Conclusion (I): No box is a utensil.

Conclusion (II): Some papers are utensils.

- Ans** ✓ 1. Only conclusion (II) follows
- ✗ 2. Only conclusion (I) follows
- ✗ 3. Both conclusions (I) and (II) follow
- ✗ 4. Neither conclusion (I) nor (II) follows

Question ID : 630680392631

Option 1 ID : 6306801530871

Option 2 ID : 6306801530870

Option 3 ID : 6306801530873

Option 4 ID : 6306801530872

Status : Answered

Chosen Option : 1

Q.2 Select the correct mirror image of the given figure when the mirror is placed at MN as shown below.



- Ans** ✗ 1. B A 2 3 P n
- ✗ 2. B A 3 2 P u
- ✓ 3. B A 3 2 P u
- ✗ 4. B A 3 2 P n

Question ID : 630680356654

Option 1 ID : 6306801388620

Option 2 ID : 6306801388618

Option 3 ID : 6306801388619

Option 4 ID : 6306801388617

Status : Answered

Chosen Option : 3

Test Prime

**ALL EXAMS,
ONE SUBSCRIPTION**



70,000+
Mock Tests



**Personalised
Report Card**



**Unlimited
Re-Attempt**



600+
Exam Covered



**Previous Year
Papers**



**500%
Refund**



ATTEMPT FREE MOCK NOW

Q.3 Which figure should replace the question mark (?) if the following series were to be continued?

K			X			W			T					
	L	8		2	L		L	2		8	L			
X	W	2	K	8	W	T	X	8	W	2	X			

Ans

- ✖ 1.

2

L8

9XT
- ✖ 2.

8

L T

XW2
- ✖ 3.

X

L 8

TW2
- ✔ 4.

X

L 8

9T2

Question ID : 630680214424
Option 1 ID : 630680831730
Option 2 ID : 630680831728
Option 3 ID : 630680831727
Option 4 ID : 630680831729
Status : Answered
Chosen Option : 3

Q.4 In a certain code language, 'BELL' is written as 'MKFA' and 'BOND' is written as 'EMPA'. How will 'BLEW' be written in that language?

- Ans
- ✔ 1. XDMA

✖ 2. XMDA

✖ 3. XMAD

✖ 4. XDAM

Question ID : 630680416247
Option 1 ID : 6306801623754
Option 2 ID : 6306801623752
Option 3 ID : 6306801623751
Option 4 ID : 6306801623753
Status : Answered
Chosen Option : 1

Q.5 Four letter-clusters have been given, out of which three are alike in some manner and one is different. Select the one that is different. The odd one out is not based on the number of consonants/vowels or their position in the letter cluster

- Ans
- ☒ 1. AFK
 - ☒ 2. LQV
 - ☒ 3. PTX
 - ☒ 4. DIN

Question ID : 63068062113
Option 1 ID : 630680239770
Option 2 ID : 630680239773
Option 3 ID : 630680239771
Option 4 ID : 630680239772
Status : Answered
Chosen Option : 3

Q.6 10 is related to 15 following certain logic. Following the same logic, 42 is related to 63. To which of the following numbers is 22 related, following the same logic? (NOTE : Operations should be performed on the whole numbers, without breaking down the numbers into its constituent digits. E.g. 13 – Operations on 13 such as adding /deleting /multiplying etc., to 13 can be performed. Breaking down 13 into 1 and 3 and then performing mathematical operations on 1 and 3 is not allowed.)

- Ans
- ☒ 1. 31
 - ☒ 2. 33
 - ☒ 3. 28
 - ☒ 4. 30

Question ID : 630680162512
Option 1 ID : 630680629346
Option 2 ID : 630680629347
Option 3 ID : 630680629344
Option 4 ID : 630680629345
Status : Marked For Review
Chosen Option : 1

Q.7 'खिलना' (Blossom), 'मुरझाना' (Wither) से उसी प्रकार संबंधित है, जिस प्रकार 'स्थिर होना' (Stagnate) '_____ ' से संबंधित है।
(शब्दों को सार्थक हिंदी शब्द माना जाना चाहिए और शब्दों की संख्या/व्यंजनों/स्वरों की संख्या के आधार पर एक दूसरे से संबंधित नहीं किया जाना चाहिए।)

- Ans
- ☒ 1. खड़े रहना (Stand)
 - ☒ 2. विराम (Rest)
 - ☒ 3. बहना (Flow)
 - ☒ 4. मंद पड़ना (Languish)

Question ID : 630680416703
Option 1 ID : 6306801625575
Option 2 ID : 6306801625577
Option 3 ID : 6306801625576
Option 4 ID : 6306801625578
Status : Answered
Chosen Option : 3

Q.8 In a certain code language, 'sit on chair' is coded as 'sk mi cn' and 'the chair broke' is coded as 'gm fr mi'. How is 'chair' coded in the given language?

- Ans
- ☐ 1. gm
 - ☐ 2. sk
 - ☒ 3. mi
 - ☐ 4. cn

Question ID : 630680812195
Option 1 ID : 6306803182232
Option 2 ID : 6306803182230
Option 3 ID : 6306803182229
Option 4 ID : 6306803182231
Status : Answered
Chosen Option : 3

Q.9 Select the set in which the numbers are related in the same way as are the numbers of the following set.

(79, 58, 62)

(54, 33, 37)

(NOTE: Operations should be performed on the whole numbers, without breaking down the numbers into its constituent digits. E.g. 13 – Operations on 13 such as adding/deleting/multiplying etc. to 13 can be performed. Breaking down 13 into 1 and 3 and then performing mathematical operations on 1 and 3 is not allowed.)

- Ans
- ☐ 1. (59, 33, 43)
 - ☒ 2. (66, 45, 49)
 - ☐ 3. (47, 36, 41)
 - ☐ 4. (43, 25, 30)

Question ID : 630680329206
Option 1 ID : 6306801280646
Option 2 ID : 6306801280645
Option 3 ID : 6306801280648
Option 4 ID : 6306801280647
Status : Answered
Chosen Option : 2

Q.10 Three of the following four options are alike in a certain way and thus form a group.

Which is the option that does NOT belong to that group?

(NOTE : Operations should be performed on the whole numbers, without breaking down the numbers into its constituent digits. E.g. 13 – Operations on 13 such as adding /deleting /multiplying etc., to 13 can be performed. Breaking down 13 into 1 and 3 and then performing mathematical operations on 1 and 3 is not allowed).

- Ans
- ☐ 1. 2 – 2 – 4
 - ☐ 2. 1 – 3 – 3
 - ☐ 3. 2 – 4 – 8
 - ☒ 4. 3 – 2 – 5

Question ID : 63068058690
Option 1 ID : 630680226383
Option 2 ID : 630680226382
Option 3 ID : 630680226385
Option 4 ID : 630680226384
Status : Answered
Chosen Option : 4

Q.11 उस विकल्प का चयन करें जो तीसरे शब्द से उसी प्रकार संबंधित है जैसे दूसरा शब्द पहले शब्द से संबंधित है। (शब्दों को अर्थपूर्ण अंग्रेजी शब्दों के रूप में माना जाना चाहिए और शब्द आपस में अक्षरों की संख्या/व्यंजन/स्वरों की संख्या के आधार पर एक दूसरे से संबंधित नहीं होना चाहिए)
उतावलापन : शर्मीला :: मनमुटाव : ?

- Ans
- ☒ 1. नाराज़गी
 - ☒ 2. अपराध
 - ☒ 3. गुस्सा
 - ☒ 4. आनंद

Question ID : 630680195784

Option 1 ID : 630680759588

Option 2 ID : 630680759587

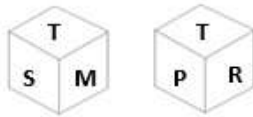
Option 3 ID : 630680759590

Option 4 ID : 630680759589

Status : Answered

Chosen Option : 1

Q.12 Six letters S, T, M, P, R and C are written on different faces of a dice. Two positions of this dice are shown in the figures below. Find the letter on the face opposite to M.



- Ans
- ☒ 1. C
 - ☒ 2. R
 - ☒ 3. S
 - ☒ 4. P

Question ID : 630680222365

Option 1 ID : 630680863293

Option 2 ID : 630680863292

Option 3 ID : 630680863294

Option 4 ID : 630680863291

Status : Answered

Chosen Option : 2

Q.13 Select the option that can replace the question mark (?) in the following series.
FM61, EK58, DI55, CG52, ?

- Ans
- ☒ 1. BE49
 - ☒ 2. CD44
 - ☒ 3. BF48
 - ☒ 4. CE46

Question ID : 630680416295

Option 1 ID : 6306801623945

Option 2 ID : 6306801623944

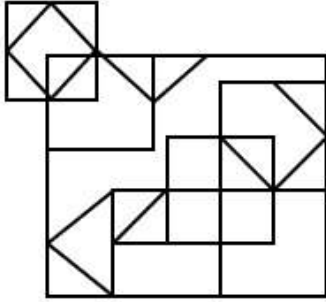
Option 3 ID : 6306801623946

Option 4 ID : 6306801623943

Status : Answered

Chosen Option : 1

Q.14 How many squares are there in the given figure?



- Ans
- ☐ 1. 12
 - ☐ 2. 13
 - ☐ 3. 15
 - ☒ 4. 14

Question ID : 630680163562

Option 1 ID : 630680633432

Option 2 ID : 630680633433

Option 3 ID : 630680633435

Option 4 ID : 630680633434

Status : Answered

Chosen Option : 4

Q.15 Select the set in which the numbers are related in the same way as are the numbers of the following set.

(7, 9, 48)

(6, 8, 42)

(NOTE: Operations should be performed on the whole numbers, without breaking down the numbers into its constituent digits. E.g. 13 – Operations on 13 such as adding/deleting/multiplying etc. to 13 can be performed. Breaking down 13 into 1 and 3 and then performing mathematical operations on 1 and 3 is not allowed.)

- Ans
- ☐ 1. (10, 12, 54)
 - ☐ 2. (9, 11, 56)
 - ☒ 3. (11, 13, 72)
 - ☐ 4. (8, 10, 47)

Question ID : 630680329209

Option 1 ID : 6306801280659

Option 2 ID : 6306801280658

Option 3 ID : 6306801280660

Option 4 ID : 6306801280657

Status : Answered

Chosen Option : 3

Q.16 Which two signs should be interchanged to make the following equation correct?

$$18 - 23 \times 455 \div 7 + 28 = 377$$

- Ans
- ☐ 1. + and -
 - ☐ 2. - and +
 - ☐ 3. + and ×
 - ☒ 4. - and ×

Question ID : 630680204292

Option 1 ID : 630680792251

Option 2 ID : 630680792252

Option 3 ID : 630680792254

Option 4 ID : 630680792253

Status : Answered

Chosen Option : 4

Q.17 Select the option that represents the letters that when placed from left to right in the blanks below will complete the given letter series.
L M B A _ H O L M B A C _ O L M _ A C H O L _ B A C H O L _

- Ans
- ☒ 1. CHMBM
 - ☒ 2. CMHBM
 - ☒ 3. CHBMM
 - ☒ 4. CHMMB

Question ID : 630680416261
Option 1 ID : 6306801623809
Option 2 ID : 6306801623810
Option 3 ID : 6306801623808
Option 4 ID : 6306801623807
Status : Answered
Chosen Option : 3

Q.18 The position of how many letters will remain unchanged if each of the letters in the word 'PRANKED' is arranged in the English alphabetical order?

- Ans
- ☒ 1. One
 - ☒ 2. None
 - ☒ 3. Three
 - ☒ 4. Two

Question ID : 630680327763
Option 1 ID : 6306801275042
Option 2 ID : 6306801275041
Option 3 ID : 6306801275044
Option 4 ID : 6306801275043
Status : Answered
Chosen Option : 2

Q.19 In a certain code language,
A # B means A is the sister of B.
A @ B means A is the son of B.
A & B means A is the wife of B.
A % B means A is the father of B.
How is Q related to R if P & Q % L # R & K?

- Ans
- ☒ 1. Sister
 - ☒ 2. Mother
 - ☒ 3. Father
 - ☒ 4. Wife

Question ID : 630680297721
Option 1 ID : 6306801158285
Option 2 ID : 6306801158284
Option 3 ID : 6306801158283
Option 4 ID : 6306801158286
Status : Answered
Chosen Option : 3

Q.20 What will come in place of the question mark (?) in the following equation if '+' and '÷' are interchanged and 'x' and '-' are interchanged?

$$4 - 12 + 3 \div 12 \times 6 = ?$$

Ans ☒ 1. 11

☒ 2. 46

☒ 3. 13

☒ 4. 22

Question ID : 630680327808

Option 1 ID : 6306801275202

Option 2 ID : 6306801275203

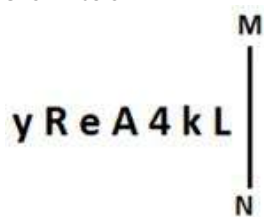
Option 3 ID : 6306801275201

Option 4 ID : 6306801275204

Status : Answered

Chosen Option : 4

Q.21 Select the correct mirror image of the given figure when the mirror is placed at MN as shown below.



Ans ☒ 1. Jk4AeRy

☒ 2. Jk4AeRy

☒ 3. Jk4AeRy

☒ 4. Jk4AeRy

Question ID : 630680356659

Option 1 ID : 6306801388638

Option 2 ID : 6306801388639

Option 3 ID : 6306801388637

Option 4 ID : 6306801388640

Status : Answered

Chosen Option : 2

Q.22 Which letter-cluster will replace the question mark (?) to complete the given series?
ZVRN, VSPM, RPNL, ?, JJJJ

Ans ☒ 1. RNLL

☒ 2. NMLK

☒ 3. RMLN

☒ 4. RNLK

Question ID : 630680417024

Option 1 ID : 6306801626860

Option 2 ID : 6306801626859

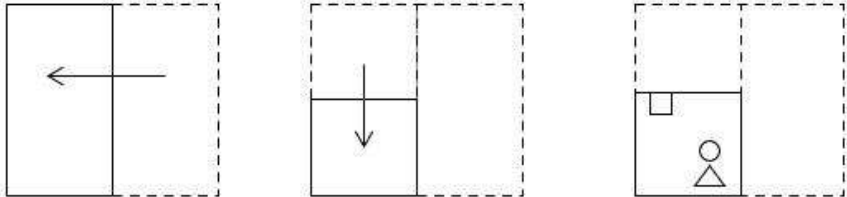
Option 3 ID : 6306801626861

Option 4 ID : 6306801626862

Status : Answered

Chosen Option : 2

Q.23 A paper is folded and cut as shown below. How will it appear when unfolded?



Ans

- ✗ 1.
- ✗ 2.
- ✗ 3.
- ✓ 4.

Question ID : 630680296648
Option 1 ID : 6306801154245
Option 2 ID : 6306801154244
Option 3 ID : 6306801154243
Option 4 ID : 6306801154246
Status : Answered
Chosen Option : 4

Q.24 Select the number from among the given options that can replace the question mark (?) in the following series.
23, 27, 43, 79, 143, ?

- ✗ 1. 240
- ✓ 2. 243
- ✗ 3. 200
- ✗ 4. 250

Question ID : 630680411917
Option 1 ID : 6306801606506
Option 2 ID : 6306801606505
Option 3 ID : 6306801606503
Option 4 ID : 6306801606504
Status : Answered
Chosen Option : 2

Q.25 Identify the figure given in the options which when put in place of the question mark (?) will logically complete the series?

D	S	U	D	P	U	O	P	
	U		P		O		S	?
P		O	O	S	S	D	D	U

Ans

✗ 1.

S		D
	P	
U		O

✗ 2.

U		O
	S	
P		D

✗ 3.

S		O
	U	
P		D

✓ 4.

S		O
	D	
U		P

Question ID : 630680471485
Option 1 ID : 6306801841657
Option 2 ID : 6306801841654
Option 3 ID : 6306801841655
Option 4 ID : 6306801841656
Status : Answered
Chosen Option : 4

Section : General Awareness

Q.1 Which government honoured a distinguished percussionist named Pandit Anindo Chatterjee with the Banga Vibhushan Award in 2022?

Ans ✗ 1. Jharkhand

✓ 2. West Bengal

✗ 3. Tripura

✗ 4. Assam

Question ID : 630680511801
Option 1 ID : 6306802000177
Option 2 ID : 6306802000176
Option 3 ID : 6306802000174
Option 4 ID : 6306802000175
Status : Not Answered
Chosen Option : --

Q.2 According to the Indian Railways (2019-2020), which state has the largest railway track in India?

- Ans** ☒ 1. Madhya Pradesh
☒ 2. Uttar Pradesh
☒ 3. Haryana
☒ 4. Punjab

Question ID : 630680216372
 Option 1 ID : 630680839463
 Option 2 ID : 630680839466
 Option 3 ID : 630680839465
 Option 4 ID : 630680839464
 Status : Not Answered
 Chosen Option : --

Q.3 Who was appointed as India's 28th Controller General of Accounts (CGA) in March 2023?

- Ans** ☒ 1. Praveen Sharma
☒ 2. SS Dubey
☒ 3. Vikram Devdutt
☒ 4. Arun Goel

Question ID : 630680413034
 Option 1 ID : 6306801610960
 Option 2 ID : 6306801610959
 Option 3 ID : 6306801610962
 Option 4 ID : 6306801610961
 Status : Not Answered
 Chosen Option : --

Q.4 After the death of Humayun, the 13 year-old Akbar was coronated in 1556 at Kalanaur in _____.

- Ans** ☒ 1. Gujarat
☒ 2. Rajasthan
☒ 3. Punjab
☒ 4. Bengal

Question ID : 630680412496
 Option 1 ID : 6306801608808
 Option 2 ID : 6306801608809
 Option 3 ID : 6306801608807
 Option 4 ID : 6306801608810
 Status : Answered
 Chosen Option : 2

Q.5 Which Five-Year Plan primarily focused on the 'Garibi Hatao' initiative?

- Ans** ☒ 1. Fourth Five-Year Plan
☒ 2. Sixth Five-Year Plan
☒ 3. Third Five-Year Plan
☒ 4. Fifth Five-Year Plan

Question ID : 630680411050
 Option 1 ID : 6306801602953
 Option 2 ID : 6306801602955
 Option 3 ID : 6306801602952
 Option 4 ID : 6306801602954
 Status : Not Answered
 Chosen Option : --

Q.6 In which of the following cities of Manipur is the Jawaharlal Nehru Manipur Dance Academy located?

- Ans ☒ 1. Ukhrul
☒ 2. Imphal
☒ 3. Chandel
☒ 4. Thoubal

Question ID : 630680216216

Option 1 ID : 630680838841

Option 2 ID : 630680838839

Option 3 ID : 630680838842

Option 4 ID : 630680838840

Status : Not Attempted and
Marked For Review

Chosen Option : --

Q.7 Which Governor-General of British India helped Raja Ram Mohan Roy legally abolish the sati practice?

- Ans ☒ 1. Lord Curzon
☒ 2. Lord William Bentinck
☒ 3. Lord Cornwallis
☒ 4. Lord Ripon

Question ID : 630680412363

Option 1 ID : 6306801608277

Option 2 ID : 6306801608275

Option 3 ID : 6306801608278

Option 4 ID : 6306801608276

Status : Answered

Chosen Option : 2

Q.8 Mahabalipuram emerged as an important centre of temple architecture under which of the following kingdoms of south India?

- Ans ☒ 1. Pallava
☒ 2. Chera
☒ 3. Chola
☒ 4. Chalukya

Question ID : 630680412521

Option 1 ID : 6306801608909

Option 2 ID : 6306801608910

Option 3 ID : 6306801608907

Option 4 ID : 6306801608908

Status : Not Answered

Chosen Option : --

Q.9 Which of the following was the mascot of the FIH men's Hockey World Cup – 2023?

- Ans**
- ☒ 1. Asha
 - ☒ 2. Bheema
 - ☒ 3. Jitu
 - ☒ 4. Olly

Question ID : 630680510808
 Option 1 ID : 6306801996365
 Option 2 ID : 6306801996363
 Option 3 ID : 6306801996364
 Option 4 ID : 6306801996362
 Status : Not Answered
 Chosen Option : --

Q.10 By which of the following state governments is the Tansen Music Festival organised?

- Ans**
- ☒ 1. Madhya Pradesh Government
 - ☒ 2. Maharashtra Government
 - ☒ 3. Uttar Pradesh Government
 - ☒ 4. Rajasthan Government

Question ID : 630680512252
 Option 1 ID : 6306802001979
 Option 2 ID : 6306802001978
 Option 3 ID : 6306802001980
 Option 4 ID : 6306802001981
 Status : Answered
 Chosen Option : 1

Q.11 Which of the following statements is INCORRECT about the Directive Principles of State Policy?

- Ans**
- ☒ 1. They are positive, as they require the State to do certain things.
 - ☒ 2. These have moral and political sanctions.
 - ☒ 3. They aim at establishing social and economic democracy in the country.
 - ☒ 4. They promote welfare of individuals. Hence, they are personal and individualistic.

Question ID : 630680326510
 Option 1 ID : 6306801270125
 Option 2 ID : 6306801270127
 Option 3 ID : 6306801270126
 Option 4 ID : 6306801270128
 Status : Answered
 Chosen Option : 4

Q.12 The Indian Constitution has established _____.

- Ans**
- ☒ 1. independent judicial system
 - ☒ 2. plural judicial system
 - ☒ 3. dual judicial system
 - ☒ 4. partial Judicial system

Question ID : 630680329463
 Option 1 ID : 6306801281593
 Option 2 ID : 6306801281595
 Option 3 ID : 6306801281594
 Option 4 ID : 6306801281596
 Status : Answered
 Chosen Option : 1

Q.13 Which of the following is a non-perishable food?

Ans ☒ 1. Pulses

☐ 2. Curds

☐ 3. Meat

☐ 4. Milk

Question ID : 630680321349

Option 1 ID : 6306801250108

Option 2 ID : 6306801250106

Option 3 ID : 6306801250107

Option 4 ID : 6306801250105

Status : Answered

Chosen Option : 3

Q.14 Which of the following is NOT correct with regards to the history of calculating National Income (NI) in India?

Ans ☒ 1. Dadabhai Naoroji divided the Indian economy into two parts: primary sector and secondary sector.

☐ 2. First attempt to compute NI was made by Dadabhai Naoroji.

☐ 3. First official attempt to compute NI was made by PC Mahalanobis.

☐ 4. First scientific method to compute NI was used by Dr VKRV Rao.

Question ID : 630680324080

Option 1 ID : 6306801260816

Option 2 ID : 6306801260813

Option 3 ID : 6306801260815

Option 4 ID : 6306801260814

Status : Not Answered

Chosen Option : --

Q.15 Hubbardia heptaneuron, which has become endangered, is a species of which of the following?

Ans ☐ 1. Tiger

☐ 2. Bamboo

☐ 3. Crane

☒ 4. Grass

Question ID : 630680302665

Option 1 ID : 6306801177329

Option 2 ID : 6306801177326

Option 3 ID : 6306801177328

Option 4 ID : 6306801177327

Status : Answered

Chosen Option : 3

Q.16 The Parliament passed the Marine Aids to Navigation Bill, 2021 to repeal and replace which of the following Acts?

- Ans**
- ☐ 1. The Dourine Act, 1910
 - ☒ 2. The Lighthouse Act, 1927
 - ☐ 3. The Dangerous Machines (Regulation) Act, 1983
 - ☐ 4. The Personal Injuries (Emergency Provisions) Act, 1962

Question ID : 630680158399
 Option 1 ID : 630680613126
 Option 2 ID : 630680613125
 Option 3 ID : 630680613124
 Option 4 ID : 630680613127
 Status : Not Answered
 Chosen Option : --

Q.17 When was the 1st Asian Kabaddi Championship held?

- Ans**
- ☐ 1. 1975
 - ☐ 2. 1970
 - ☒ 3. 1980
 - ☐ 4. 1985

Question ID : 630680510763
 Option 1 ID : 6306801996184
 Option 2 ID : 6306801996182
 Option 3 ID : 6306801996183
 Option 4 ID : 6306801996185
 Status : Not Answered
 Chosen Option : --

Q.18 The climate of a place is NOT affected by which of the following?

- Ans**
- ☐ 1. Location
 - ☒ 2. Type of soil
 - ☐ 3. Relief
 - ☐ 4. Distance from the sea

Question ID : 630680124376
 Option 1 ID : 630680482355
 Option 2 ID : 630680482356
 Option 3 ID : 630680482357
 Option 4 ID : 630680482354
 Status : Answered
 Chosen Option : 3

Q.19 In which musical note did Newland put the metals Co and Ni with halogens?

- Ans**
- ☐ 1. Re
 - ☐ 2. Mi
 - ☒ 3. Do
 - ☐ 4. Fa

Question ID : 63068076943
 Option 1 ID : 630680297870
 Option 2 ID : 630680297871
 Option 3 ID : 630680297869
 Option 4 ID : 630680297872
 Status : Not Answered
 Chosen Option : --

Q.20 Which of the following places is related to Gandhi's Satyagraha of the year 1917?

Ans ☒ 1. Champaran

☐ 2. Ahmedabad

☐ 3. Kheda

☐ 4. Bardoli

Question ID : 630680511506

Option 1 ID : 6306801999146

Option 2 ID : 6306801999149

Option 3 ID : 6306801999147

Option 4 ID : 6306801999148

Status : Answered

Chosen Option : 1

Q.21 Which of the following is in geographical proximity to Sri Lanka?

Ans ☒ 1. Only Karaikal

☐ 2. Karaikal and Yanam

☐ 3. Only Yanam

☐ 4. Mahe

Question ID : 630680409599

Option 1 ID : 6306801597225

Option 2 ID : 6306801597228

Option 3 ID : 6306801597226

Option 4 ID : 6306801597227

Status : Not Answered

Chosen Option : --

Q.22 The decomposition of gaseous Ammonia on a hot platinum surface is a _____ order reaction at high pressure.

Ans ☐ 1. three

☐ 2. two

☒ 3. zero

☐ 4. one

Question ID : 63068052320

Option 1 ID : 630680201383

Option 2 ID : 630680201385

Option 3 ID : 630680201384

Option 4 ID : 630680201382

Status : Not Answered

Chosen Option : --

Q.23 Which organisms are classified as Aves?

Ans ☐ 1. Frogs

☐ 2. Snakes

☒ 3. Birds

☐ 4. Fishes

Question ID : 630680517132

Option 1 ID : 6306802020926

Option 2 ID : 6306802020927

Option 3 ID : 6306802020924

Option 4 ID : 6306802020925

Status : Answered

Chosen Option : 3

Q.24 Which of the following festivals is celebrated as the birth anniversary of Guru Nanak Dev?

- Ans
- ☐ 1. Hola Mohalla
 - ☐ 2. Baisakhi
 - ☒ 3. Gurpurab
 - ☐ 4. Chappar Mela

Question ID : 630680160211
Option 1 ID : 630680620218
Option 2 ID : 630680620219
Option 3 ID : 630680620217
Option 4 ID : 630680620216
Status : Answered
Chosen Option : 2

Q.25 How many awards were presented at the National Sports and Adventure Awards-2022 ceremony held at Rashtrapati Bhavan on 30 November 2022?

- Ans
- ☒ 1. 44
 - ☐ 2. 52
 - ☐ 3. 28
 - ☐ 4. 32

Question ID : 630680327562
Option 1 ID : 6306801274246
Option 2 ID : 6306801274248
Option 3 ID : 6306801274247
Option 4 ID : 6306801274245
Status : Not Answered
Chosen Option : --

Section : Quantitative Aptitude

Q. Find the gain percentage, given that Priya sold her scooter for ₹42564 gaining $\frac{1}{6}$ th of the selling price.

- Ans
- ☐ 1. 15%
 - ☒ 2. 20%
 - ☐ 3. 30%
 - ☐ 4. 40%

Question ID : 630680922774
Option 1 ID : 6306803615945
Option 2 ID : 6306803615942
Option 3 ID : 6306803615944
Option 4 ID : 6306803615943
Status : Answered
Chosen Option : 2

Q.2 Kiran lent ₹4,000 to two persons such that one part of it at the rate of 8% per annum and the remaining part at the rate of 10% per annum. He got an annual simple interest of ₹352. Then the sum lent at 10% is:

- Ans
- ☒ 1. ₹2,400
 - ☒ 2. ₹1,800
 - ☒ 3. ₹1,600
 - ☒ 4. ₹2,200

Question ID : 630680358065
Option 1 ID : 6306801394249
Option 2 ID : 6306801394251
Option 3 ID : 6306801394250
Option 4 ID : 6306801394252
Status : Answered
Chosen Option : 3

Q.3 By applying which of the following criteria can two triangles NOT be proved congruent?

- Ans
- ☒ 1. side-side-side
 - ☒ 2. angle-angle-angle
 - ☒ 3. side-angle-side
 - ☒ 4. angle-side-angle

Question ID : 630680526460
Option 1 ID : 6306802057906
Option 2 ID : 6306802057909
Option 3 ID : 6306802057907
Option 4 ID : 6306802057908
Status : Answered
Chosen Option : 2

Q.4 $\frac{2 + \tan^2 2A + \cot^2 2A}{\sec 2A \cdot \operatorname{cosec} 2A}$ is equal to _____.

- Ans
- ☒ 1. $\sec 2A - \operatorname{cosec} 2A$
 - ☒ 2. $\cot 2A - \operatorname{cosec} 2A$
 - ☒ 3. $\sec 2A + \operatorname{cosec} 2A$
 - ☒ 4. $\sec 2A + \tan 2A$

Question ID : 630680380394
Option 1 ID : 6306801482573
Option 2 ID : 6306801482571
Option 3 ID : 6306801482574
Option 4 ID : 6306801482572
Status : Not Answered
Chosen Option : --

Q.5 X, Y, and Z are three points on a plane with $XY = 11$ cm, $YZ = 13$ cm, and $XZ = 24$ cm.
The number of circles that travel through points X, Y, and Z is:

Ans ☒ 1. 0

☐ 2. 2

☐ 3. 1

☐ 4. 3

Question ID : 630680404479
Option 1 ID : 6306801577416
Option 2 ID : 6306801577418
Option 3 ID : 6306801577417
Option 4 ID : 6306801577419
Status : Not Answered
Chosen Option : --

Q.6 Which of the following is the largest 5-digit number divisible by 47?

Ans ☐ 1. 99999

☐ 2. 10000

☒ 3. 99969

☐ 4. 98888

Question ID : 630680108755
Option 1 ID : 630680421932
Option 2 ID : 630680421933
Option 3 ID : 630680421934
Option 4 ID : 630680421935
Status : Answered
Chosen Option : 3

Q.7 If, on a marked price, the difference between selling prices with a discount of 65% and with two successive discounts of 30% and 40% is ₹105, then the marked price (in ₹) is:

Ans ☒ 1. 1,500

☐ 2. 1,050

☐ 3. 1,650

☐ 4. 1,320

Question ID : 630680428043
Option 1 ID : 6306801670218
Option 2 ID : 6306801670219
Option 3 ID : 6306801670216
Option 4 ID : 6306801670217
Status : Not Answered
Chosen Option : --

Q.8 What is the value of D, if $A : C = B : D$ in the given table?

A	B	C	D
25	40	30	?

- Ans
- ☐ 1. 45
 - ☐ 2. 56
 - ☐ 3. 42
 - ☒ 4. 48

Question ID : 630680428095
Option 1 ID : 6306801670425
Option 2 ID : 6306801670427
Option 3 ID : 6306801670424
Option 4 ID : 6306801670426
Status : Answered
Chosen Option : 4

Q.9 Two circles of radii 18 cm and 12 cm touch each other externally. Find the length (in cm) of their direct common tangent.

- Ans
- ☒ 1. $12\sqrt{6}$
 - ☐ 2. $18\sqrt{6}$
 - ☐ 3. $15\sqrt{6}$
 - ☐ 4. $10\sqrt{6}$

Question ID : 630680198935
Option 1 ID : 630680771468
Option 2 ID : 630680771470
Option 3 ID : 630680771469
Option 4 ID : 630680771467
Status : Not Attempted and Marked For Review
Chosen Option : --

Q.10 Three pipes P, Q and R can fill a cistern in 40 minutes, 80 minutes and 120 minutes, respectively. Initially, all the pipes are opened. After how much time (in minutes) should the pipes Q and R be turned off so that the cistern will be completely filled in just half an hour?

- Ans
- ☒ 1. 12
 - ☐ 2. 16
 - ☐ 3. 14
 - ☐ 4. 10

Question ID : 630680390414
Option 1 ID : 6306801522099
Option 2 ID : 6306801522101
Option 3 ID : 6306801522100
Option 4 ID : 6306801522098
Status : Answered
Chosen Option : 1

Q.11 The ages of two friends, Ram and Ravi, differ by 7 years. Ram's mother Mayadevi is three times as old as Ram, and Ravi is four times as old as his brother Soham. The ages of Mayadevi and Soham differ by 65 years. Find the age of Mayadevi (in years).

Ans ☒ 1. 45

☒ 2. 69

☒ 3. 36

☒ 4. 85

Question ID : 630680354928

Option 1 ID : 6306801381786

Option 2 ID : 6306801381787

Option 3 ID : 6306801381785

Option 4 ID : 6306801381788

Status : Answered

Chosen Option : 2

Q.12 The bar graph given below shows the sales of books from six schools during two consecutive years, 2013 and 2014.



What percentage of the average sales of the schools A, B, and C in 2014 is the average sales of schools A, C, and F in 2013?

Ans ☒ 1. 81.08%

☒ 2. 81%

☒ 3. 80%

☒ 4. 80.08%

Question ID : 630680428008

Option 1 ID : 6306801670079

Option 2 ID : 6306801670078

Option 3 ID : 6306801670076

Option 4 ID : 6306801670077

Status : Not Answered

Chosen Option : --

Q.13 A money bag contains one rupee, 5 rupee and 10 rupee coins in the ratio of 3 : 5 : 7 respectively. If the total amount in the bag is ₹980, then find the number of coins of ₹10.

Ans ☒ 1. 71

☒ 2. 68

☒ 3. 69

☒ 4. 70

Question ID : 630680524217

Option 1 ID : 6306802049022

Option 2 ID : 6306802049020

Option 3 ID : 6306802049021

Option 4 ID : 6306802049019

Status : Answered

Chosen Option : 4

Q.14 Ramesh purchased some items from a dealer on 19 November 2019. The bill generated was for ₹5,480. He had also purchased some items on 10 November 2019 having the bill value of ₹9,800. He cleared both the bills this time and paid the total amount in cash. If the dealer gives a scheme of 2% discount on the payments done within 10 days and 5% for the payments made in cash at the time of purchase, then find the amount paid by Ramesh on 19 November 2019.

- Ans
- ☒ 1. ₹14,850
 - ☒ 2. ₹14,950
 - ☒ 3. ₹14,810
 - ☒ 4. ₹14,890

Question ID : 630680115569

Option 1 ID : 630680447627

Option 2 ID : 630680447629

Option 3 ID : 630680447626

Option 4 ID : 630680447628

Status : Not Answered

Chosen Option : --

Q.15 A pole 10 m long rests slantly against a vertical wall AB making an angle 30° with the horizontal (ground). Find how far the foot of the pole is from the wall (in metres).

- Ans
- ☒ 1. $5\sqrt{3}$
 - ☒ 2. 10
 - ☒ 3. 15
 - ☒ 4. $\frac{5}{\sqrt{3}}$

Question ID : 630680526444

Option 1 ID : 6306802057843

Option 2 ID : 6306802057842

Option 3 ID : 6306802057845

Option 4 ID : 6306802057844

Status : Answered

Chosen Option : 1

Q.16 The following table represents the total number of research scholars and the respective number of female research scholars in various departments of a university. Study the table carefully and answer the question that follows.

Department	Total number of research scholars	Number of female research scholars
Physics	35	12
Chemistry	40	28
Mathematics	18	4
Statistics	12	3

What is the ratio of male research scholars in Mathematics to Statistics?

Ans ☒ 1. 9 : 14

☒ 2. 14 : 9

☒ 3. 6 : 7

☒ 4. 7 : 6

Question ID : 630680428192

Option 1 ID : 6306801670812

Option 2 ID : 6306801670815

Option 3 ID : 6306801670814

Option 4 ID : 6306801670813

Status : Answered

Chosen Option : 2

Q.17 A bus travels $\frac{1}{3}$ of the distance initially at a speed of 40 km/h, the next $\frac{1}{3}$ of the distance 50 km/h, and the final $\frac{1}{3}$ of the distance at 60 km/h. Find the average speed of the bus for the entire journey.

(Rounded off to two decimal places)

Ans ☒ 1. 48.65 km/h

☒ 2. 54.13 km/h

☒ 3. 51.43 km/h

☒ 4. 46.85 km/h

Question ID : 630680397024

Option 1 ID : 6306801548148

Option 2 ID : 6306801548151

Option 3 ID : 6306801548150

Option 4 ID : 6306801548149

Status : Answered

Chosen Option : 1

Q.18

If $a + \frac{1}{a} = 12$, then find the value of $a^2 + \frac{1}{a^2}$.

- Ans
- ☐ 1. 146
 - ☐ 2. 140
 - ☒ 3. 142
 - ☐ 4. 144

Question ID : 630680413479
Option 1 ID : 6306801612742
Option 2 ID : 6306801612743
Option 3 ID : 6306801612741
Option 4 ID : 6306801612740
Status : Answered
Chosen Option : 3

Q.19 Let $0^\circ < t < 90^\circ$. Then which of the followings is true?

- Ans
- ☐ 1. $\sin(t) < \cos(t)$ when $t > 45^\circ$
 - ☐ 2. $\sin(t) \neq \cos(t)$ when $t = 45^\circ$
 - ☒ 3. $\sin(t) < \cos(t)$ when $t < 45^\circ$
 - ☐ 4. $\sin(t) > \cos(t)$ when $t < 45^\circ$

Question ID : 630680526461
Option 1 ID : 6306802057911
Option 2 ID : 6306802057913
Option 3 ID : 6306802057912
Option 4 ID : 6306802057910
Status : Answered
Chosen Option : 3

Q.20 Study the given table and answer the question that follows.

The given table shows the production of three types of cars (A, B and C) manufactured (in thousands) by an automobile company over the years.

Year	A	B	C
2015	840	680	890
2016	900	750	960
2017	760	620	1000
2018	800	540	1200

For all the years from 2015 to 2018, the average production of B-type cars is how much less (in thousands) than that of the combined average production of A-type and C-type cars?

- Ans
- ☒ 1. 271.25
 - ☐ 2. 284.55
 - ☐ 3. 238.5
 - ☐ 4. 314.75

Question ID : 630680523745
Option 1 ID : 6306802047131
Option 2 ID : 6306802047134
Option 3 ID : 6306802047132
Option 4 ID : 6306802047133
Status : Not Answered
Chosen Option : --

Q.21 If a right circular cone of height 24 cm has a volume of 1232 cm^3 , then the total surface area of the cone is (use $\pi = \frac{22}{7}$):

- Ans
- ☒ 1. 704 cm^2
 - ☐ 2. 904 cm^2
 - ☐ 3. 608 cm^2
 - ☐ 4. 806 cm^2

Question ID : 630680421518
 Option 1 ID : 6306801644538
 Option 2 ID : 6306801644536
 Option 3 ID : 6306801644537
 Option 4 ID : 6306801644535
 Status : Not Answered
 Chosen Option : --

Q.22 If the sum of three numbers is 18 and the sum of their squares is 36, then find the difference between the sum of their cubes and three times of their product.

- Ans
- ☐ 1. 1449
 - ☐ 2. -1494
 - ☐ 3. 4149
 - ☒ 4. -1944

Question ID : 630680413533
 Option 1 ID : 6306801612957
 Option 2 ID : 6306801612958
 Option 3 ID : 6306801612959
 Option 4 ID : 6306801612956
 Status : Not Answered
 Chosen Option : --

Q.23 The side of an equilateral triangle is 28 cm. Taking each vertex as the centre, a circle is described with a radius equal to half the length of the side of the triangle. Find the area of that part of the triangle which is not included in the circles (use $\pi = \frac{22}{7}$ and $\sqrt{3} = 1.73$).

- Ans
- ☐ 1. 30.89 cm^2
 - ☒ 2. 31.08 cm^2
 - ☐ 3. 39.08 cm^2
 - ☐ 4. 38.08 cm^2

Question ID : 630680402046
 Option 1 ID : 6306801567886
 Option 2 ID : 6306801567887
 Option 3 ID : 6306801567889
 Option 4 ID : 6306801567888
 Status : Not Answered
 Chosen Option : --

Q.24 In a circular race of 750 m, X and Y start from the same point and at the same time with speeds of 9 km/h and 13.5 km/h, respectively. If they are running in the same direction then, when will they meet again for the first time on the track?

Ans ☒ 1. 500 seconds

☒ 2. 600 seconds

☒ 3. 900 seconds

☒ 4. 750 seconds

Question ID : 630680135100

Option 1 ID : 630680523186

Option 2 ID : 630680523187

Option 3 ID : 630680523189

Option 4 ID : 630680523188

Status : Answered

Chosen Option : 2

Q.25 The value of $15 \div 3$ of $2 \times 2 + 9 \div 18$ of $2 \times 4 - 4 \div 8 \times 2$ is:

Ans ☒ 1. 5

☒ 2. $2\frac{3}{4}$

☒ 3. $7\frac{3}{4}$

☒ 4. 8

Question ID : 630680422094

Option 1 ID : 6306801646811

Option 2 ID : 6306801646813

Option 3 ID : 6306801646814

Option 4 ID : 6306801646812

Status : Answered

Chosen Option : 1

Section : English Comprehension

Q.1 Select the most appropriate synonym of the underlined word in the given sentence.
The Morbi bridge mishap has left Gujarat in a deplorable state.

Ans ☒ 1. Complaining

☒ 2. Despicable

☒ 3. Rejoicing

☒ 4. Jubilation

Question ID : 630680160241

Option 1 ID : 630680620339

Option 2 ID : 630680620338

Option 3 ID : 630680620337

Option 4 ID : 630680620336

Status : Answered

Chosen Option : 2

Q.2 Select the option that can be used as a one-word substitute for the given group of words.
A government by the officials

- Ans ☒ 1. Monarchy
☒ 2. Autocracy
☒ 3. Bureaucracy
☒ 4. Plutocracy

Question ID : 630680414689
Option 1 ID : 6306801617501
Option 2 ID : 6306801617502
Option 3 ID : 6306801617499
Option 4 ID : 6306801617500
Status : Answered
Chosen Option : 3

Q.3 Select the most appropriate idiom to fill in the blank.

I'm _____ about whether to accept the job offer or continue freelancing.
Both options have their advantages.

- Ans ☒ 1. up in arms
☒ 2. left out in cold
☒ 3. on the fence
☒ 4. cutting corners

Question ID : 630680374411
Option 1 ID : 6306801458827
Option 2 ID : 6306801458829
Option 3 ID : 6306801458828
Option 4 ID : 6306801458830
Status : Answered
Chosen Option : 3

Q.4 The following sentence has been split into four segments. Identify the segment that contains a grammatical error.
After the concert was over, / they go to a restaurant, / had dinner together / and talked until midnight.

- Ans ☒ 1. they go to a restaurant,
☒ 2. had dinner together
☒ 3. and talked until midnight
☒ 4. After the concert was over,

Question ID : 630680514335
Option 1 ID : 6306802009966
Option 2 ID : 6306802009967
Option 3 ID : 6306802009968
Option 4 ID : 6306802009965
Status : Answered
Chosen Option : 3

Q.5 Select the most appropriate synonym of the underlined word.

He was trembling with fear.

- Ans
- ☐ 1. Intrepid
 - ☐ 2. Weeping
 - ☐ 3. Running
 - ☒ 4. Shivering

Question ID : 630680360818
Option 1 ID : 6306801405145
Option 2 ID : 6306801405148
Option 3 ID : 6306801405147
Option 4 ID : 6306801405146
Status : Answered
Chosen Option : 4

Q.6 Select the most appropriate option to substitute the underlined segment in the given sentence.

I have been living in Hyderabad since I am born .

- Ans
- ☒ 1. since I was born
 - ☐ 2. since I have born
 - ☐ 3. since I will be born
 - ☐ 4. since I born

Question ID : 630680162178
Option 1 ID : 630680628016
Option 2 ID : 630680628019
Option 3 ID : 630680628018
Option 4 ID : 630680628017
Status : Answered
Chosen Option : 1

Q.7 Select the option that can be used as a one-word substitute for the given group of words.

A person who sells and arranges cut flowers.

- Ans
- ☐ 1. Horticulturist
 - ☐ 2. Botanist
 - ☒ 3. Florist
 - ☐ 4. Gardener

Question ID : 630680414789
Option 1 ID : 6306801617901
Option 2 ID : 6306801617902
Option 3 ID : 6306801617899
Option 4 ID : 6306801617900
Status : Answered
Chosen Option : 3

Q.8 Select the most appropriate ANTONYM of the underlined word.

She was elated about her promotion, but her colleague felt quite disheartened.

- Ans
- ☒ 1. proud
 - ☒ 2. delighted
 - ☒ 3. cheerful
 - ☒ 4. discouraged

Question ID : 630680374404
Option 1 ID : 6306801458799
Option 2 ID : 6306801458801
Option 3 ID : 6306801458800
Option 4 ID : 6306801458802
Status : Answered
Chosen Option : 4

Q.9 Select the option that can be used as a one-word substitute for the given group of words.

A place where fruit trees are grown

- Ans
- ☒ 1. Garden
 - ☒ 2. Museum
 - ☒ 3. Quay
 - ☒ 4. Orchard

Question ID : 630680129475
Option 1 ID : 630680501518
Option 2 ID : 630680501520
Option 3 ID : 630680501521
Option 4 ID : 630680501519
Status : Marked For Review
Chosen Option : 4

Q.10 Select the option that can be used as a one-word substitute for the given group of words.

A small group of people who spend their time together and do not welcome other people into that group

- Ans
- ☒ 1. Clique
 - ☒ 2. Employees
 - ☒ 3. Lobby
 - ☒ 4. Squad

Question ID : 630680310106
Option 1 ID : 6306801206568
Option 2 ID : 6306801206566
Option 3 ID : 6306801206565
Option 4 ID : 6306801206567
Status : Marked For Review
Chosen Option : 1

Q.11 The following sentence has been split into four segments. Identify the segment that contains a grammatical error.
Renewable energy / sources like solar and wind power / will replaced traditional fossil fuels / and help reduce carbon emissions.

- Ans ☒ 1. and help reduce carbon emissions
☒ 2. will replaced traditional fossil fuels
☒ 3. sources like solar and wind power
☒ 4. Renewable energy

Question ID : 630680512939
Option 1 ID : 6306802004705
Option 2 ID : 6306802004704
Option 3 ID : 6306802004703
Option 4 ID : 6306802004702
Status : Answered
Chosen Option : 1

Q.12 Sentences of a paragraph are given below in jumbled order. Arrange the sentences in the correct order to form a meaningful and coherent paragraph.
A. More children go to school than at any time in the past. But more children today are out of school than any time in the past.
B. But it is not enough to blame the high birth rate for this state of affairs.
C. Indeed, it can be reasonably argued that continued mass illiteracy is not the result but the cause of the high birth rate.
D. There are more literate people in India today than ever before. But there are also more illiterates than ever before.

- Ans ☒ 1. ABCD
☒ 2. DABC
☒ 3. CBAD
☒ 4. BADC

Question ID : 630680167080
Option 1 ID : 630680647180
Option 2 ID : 630680647182
Option 3 ID : 630680647181
Option 4 ID : 630680647183
Status : Answered
Chosen Option : 2

Q.13 Select the most appropriate meaning of the given idiom.
On the ball

- Ans ☒ 1. Aware of any changes or developments and quick to react to them
☒ 2. Unaware of any changes or developments and lazy to react to them
☒ 3. Aware of any changes or developments but slow to react to them
☒ 4. Aware of any changes or developments but doing nothing

Question ID : 630680374330
Option 1 ID : 6306801458512
Option 2 ID : 6306801458511
Option 3 ID : 6306801458513
Option 4 ID : 6306801458514
Status : Answered
Chosen Option : 1

Q.14 Select the most appropriate synonym of the bold word in the following sentence.
He tried to alleviate the sufferings of his neighbours.

- Ans ☒ 1. Swell
☒ 2. Add
☒ 3. Relieve
☒ 4. Intensify

Question ID : 630680283526
Option 1 ID : 6306801102224
Option 2 ID : 6306801102223
Option 3 ID : 6306801102225
Option 4 ID : 6306801102226
Status : Answered
Chosen Option : 3

Q.15 Identify the most appropriate antonym of the given word.

Timid

- Ans ☒ 1. Meek
☒ 2. Daring
☒ 3. Spooky
☒ 4. Anxious

Question ID : 630680517349
Option 1 ID : 6306802021794
Option 2 ID : 6306802021795
Option 3 ID : 6306802021793
Option 4 ID : 6306802021792
Status : Answered
Chosen Option : 2

Q.16 Select the option that expresses the given sentence in active voice.
The contract was grabbed by the biggest telecom company in India.

- Ans ☒ 1. The biggest telecom company in India grabs the contract.
☒ 2. The biggest telecom company in India grabbed the contract.
☒ 3. The biggest telecom company in India will grab the contract.
☒ 4. The biggest telecom company in India has grabbed the contract.

Question ID : 630680415254
Option 1 ID : 6306801619764
Option 2 ID : 6306801619765
Option 3 ID : 6306801619766
Option 4 ID : 6306801619763
Status : Answered
Chosen Option : 2

Q.17 The following sentence contains a word with a spelling error. Rectify the sentence by selecting the correct spelling of the identified word from the given options.

He has to be conscious of his public manners as he is a decendent of a reputed family in this region.

- Ans
- ☐ 1. Dicsendent
 - ☐ 2. Decendant
 - ☒ 3. Descendant
 - ☐ 4. Discendent

Question ID : 630680360839
Option 1 ID : 6306801405229
Option 2 ID : 6306801405230
Option 3 ID : 6306801405232
Option 4 ID : 6306801405231
Status : Answered
Chosen Option : 3

Q.18 Select the option that expresses the given sentence in active voice.
By whom was grammar taught to you?

- Ans
- ☐ 1. You were taught grammar by whom?
 - ☒ 2. Who taught you grammar?
 - ☐ 3. Who had taught you grammar?
 - ☐ 4. Did he teach you grammar?

Question ID : 630680415156
Option 1 ID : 6306801619371
Option 2 ID : 6306801619374
Option 3 ID : 6306801619373
Option 4 ID : 6306801619372
Status : Answered
Chosen Option : 2

Q.19 Identify from the given options the word which is similar in meaning to the following word.
Equivocal

- Ans
- ☒ 1. Ambiguous
 - ☐ 2. Balanced
 - ☐ 3. Clear
 - ☐ 4. Representative

Question ID : 630680360068
Option 1 ID : 6306801402217
Option 2 ID : 6306801402219
Option 3 ID : 6306801402218
Option 4 ID : 6306801402220
Status : Answered
Chosen Option : 2

Q.20 Select the correctly spelt word.

- Ans ☒ 1. Collaegue
☒ 2. Consensus
☒ 3. Entrepreneurship
☒ 4. Bizzaire

Question ID : 630680409939
Option 1 ID : 6306801598588
Option 2 ID : 6306801598585
Option 3 ID : 6306801598587
Option 4 ID : 6306801598586
Status : Answered
Chosen Option : 4

Comprehension:

In the following passage, some words have been deleted. Read the passage carefully and select the most appropriate option to fill in each blank.

The third National Wildlife Action Plan for 2017- 2031, underlying India's plan for wildlife conservation, was unveiled (1)_____ the Global Wildlife Programme conference. The plan recognises (2)_____ addresses concerns pertaining to climate changes and its impact on wildlife .

The plan details the importance of ecosystems for food production, health and other aspects of (3)_____ survival and sustainable development. It also emphasises preservation of genetic (4)_____ and sustainable utilisation of species and ecosystems which has direct bearing on our scientific advancements and support to millions of rural communities.

The plan underscores rehabilitation of threatened wildlife species (5)_____ inland aquatic, coastal and marine ecosystems while conserving their habitats.

SubQuestion No : 21

Q.21 Select the most appropriate option to fill in blank number 1.

- Ans ☒ 1. for
☒ 2. at
☒ 3. to
☒ 4. in

Question ID : 630680164270
Option 1 ID : 630680636209
Option 2 ID : 630680636210
Option 3 ID : 630680636211
Option 4 ID : 630680636208
Status : Answered
Chosen Option : 1

Comprehension:

In the following passage, some words have been deleted. Read the passage carefully and select the most appropriate option to fill in each blank.

The third National Wildlife Action Plan for 2017- 2031, underlying India's plan for wildlife conservation, was unveiled (1)_____ the Global Wildlife Programme conference. The plan recognises (2)_____ addresses concerns pertaining to climate changes and its impact on wildlife .

The plan details the importance of ecosystems for food production, health and other aspects of (3)_____ survival and sustainable development. It also emphasises preservation of genetic (4)_____ and sustainable utilisation of species and ecosystems which has direct bearing on our scientific advancements and support to millions of rural communities.

The plan underscores rehabilitation of threatened wildlife species (5)_____ inland aquatic, coastal and marine ecosystems while conserving their habitats.

SubQuestion No : 22

Q.22 Select the most appropriate option to fill in blank number 2.

- Ans ☒ 1. in
☒ 2. to
☒ 3. and
☒ 4. for

Question ID : 630680164271

Option 1 ID : 630680636214

Option 2 ID : 630680636215

Option 3 ID : 630680636212

Option 4 ID : 630680636213

Status : Answered

Chosen Option : 2

Comprehension:

In the following passage, some words have been deleted. Read the passage carefully and select the most appropriate option to fill in each blank.

The third National Wildlife Action Plan for 2017- 2031, underlying India's plan for wildlife conservation, was unveiled (1)_____ the Global Wildlife Programme conference. The plan recognises (2)_____ addresses concerns pertaining to climate changes and its impact on wildlife .

The plan details the importance of ecosystems for food production, health and other aspects of (3)_____ survival and sustainable development. It also emphasises preservation of genetic (4)_____ and sustainable utilisation of species and ecosystems which has direct bearing on our scientific advancements and support to millions of rural communities.

The plan underscores rehabilitation of threatened wildlife species (5)_____ inland aquatic, coastal and marine ecosystems while conserving their habitats.

SubQuestion No : 23

Q.23 Select the most appropriate option to fill in blank number 3.

- Ans ☒ 1. breed
☒ 2. species
☒ 3. group
☒ 4. human

Question ID : 630680164272

Option 1 ID : 630680636217

Option 2 ID : 630680636216

Option 3 ID : 630680636219

Option 4 ID : 630680636218

Status : Answered

Chosen Option : 2

Comprehension:

In the following passage, some words have been deleted. Read the passage carefully and select the most appropriate option to fill in each blank.

The third National Wildlife Action Plan for 2017- 2031, underlying India's plan for wildlife conservation, was unveiled (1)_____ the Global Wildlife Programme conference. The plan recognises (2)_____ addresses concerns pertaining to climate changes and its impact on wildlife .

The plan details the importance of ecosystems for food production, health and other aspects of (3)_____ survival and sustainable development. It also emphasises preservation of genetic (4)_____ and sustainable utilisation of species and ecosystems which has direct bearing on our scientific advancements and support to millions of rural communities.

The plan underscores rehabilitation of threatened wildlife species (5)_____ inland aquatic, coastal and marine ecosystems while conserving their habitats.

SubQuestion No : 24

Q.24 Select the most appropriate option to fill in blank number 4.

Ans ☒ 1. conflict

☒ 2. rejection

☒ 3. focus

☒ 4. diversity

Question ID : 630680164273

Option 1 ID : 630680636220

Option 2 ID : 630680636221

Option 3 ID : 630680636223

Option 4 ID : 630680636222

Status : Answered

Chosen Option : 4

Comprehension:

In the following passage, some words have been deleted. Read the passage carefully and select the most appropriate option to fill in each blank.

The third National Wildlife Action Plan for 2017- 2031, underlying India's plan for wildlife conservation, was unveiled (1)_____ the Global Wildlife Programme conference. The plan recognises (2)_____ addresses concerns pertaining to climate changes and its impact on wildlife .

The plan details the importance of ecosystems for food production, health and other aspects of (3)_____ survival and sustainable development. It also emphasises preservation of genetic (4)_____ and sustainable utilisation of species and ecosystems which has direct bearing on our scientific advancements and support to millions of rural communities.

The plan underscores rehabilitation of threatened wildlife species (5)_____ inland aquatic, coastal and marine ecosystems while conserving their habitats.

SubQuestion No : 25

Q.25 Select the most appropriate option to fill in blank number 5.

Ans ☒ 1. including

☒ 2. mixing

☒ 3. gathering

☒ 4. counting

Question ID : 630680164274

Option 1 ID : 630680636227

Option 2 ID : 630680636225

Option 3 ID : 630680636224

Option 4 ID : 630680636226

Status : Answered

Chosen Option : 1