

Combined Graduate Level Examination 2024 Tier I

Roll Number	
Candidate Name	
Venue Name	
Exam Date	13/09/2024
Exam Time	4:00 PM - 5:00 PM
Subject	Combined Graduate Level Examination Tier I

Section : General Intelligence and Reasoning

Q.1 In a certain code language,
'A ? B' means 'A is the mother of B',
'A ! B' means 'A is the wife of B',
'A & B' means 'A is the brother of B' and
'A x B' means 'A is the father of B'.
Which of the following means that Z is the wife's father's mother of L?

Ans ✓ 1. Z ? B x T & J ! L

✗ 2. Z ? B ! T & J x L

✗ 3. Z ! B x T ? J & L

✗ 4. Z & B ! T x J ? L

Question ID : 630680797530

Option 1 ID : 6306803125076

Option 2 ID : 6306803125079

Option 3 ID : 6306803125077

Option 4 ID : 6306803125078

Status : Answered

Chosen Option : 1

Q.2 Select the option that is related to the third word in the same way as the second word is related to the first word. (The words must be considered as meaningful English words and must NOT be related to each other based on the number of letters/number of consonants/vowels in the word)
Magician : Magic :: Dancer : ?

Ans ✗ 1. Movie

✗ 2. Song

✗ 3. Theatre

✓ 4. Dance

Question ID : 630680416217

Option 1 ID : 6306801623633

Option 2 ID : 6306801623631

Option 3 ID : 6306801623634

Option 4 ID : 6306801623632

Status : Answered

Chosen Option : 4

Test Prime

**ALL EXAMS,
ONE SUBSCRIPTION**



70,000+
Mock Tests



**Personalised
Report Card**



**Unlimited
Re-Attempt**



600+
Exam Covered



**Previous Year
Papers**



**500%
Refund**



ATTEMPT FREE MOCK NOW

Q.3 In a certain code language, 'VAT' is coded as '43' and 'AWW' is coded as '47'. How will 'ZHU' be coded in that language?

Ans ☒ 1. 62

☒ 2. 55

☒ 3. 48

☒ 4. 63

Question ID : 630680172176

Option 1 ID : 630680667142

Option 2 ID : 630680667141

Option 3 ID : 630680667143

Option 4 ID : 630680667140

Status : Answered

Chosen Option : 2

Q.4 The following contains two pairs of words which are related to each other in a certain way. Three of the following four word-pairs are alike as these have the same relationship and thus form a group. Which word-pair does NOT belong to that group? (The words must be considered as meaningful English words and must not be grouped based on the number of letters/number of consonants/vowels in the word)

Ans ☒ 1. Joy - Peace

☒ 2. Misery - Happiness

☒ 3. Problem - Concern

☒ 4. Worry - Fear

Question ID : 630680798595

Option 1 ID : 6306803129254

Option 2 ID : 6306803129252

Option 3 ID : 6306803129253

Option 4 ID : 6306803129251

Status : Answered

Chosen Option : 2

Q.5 13 is related to 117 following a certain logic. Following the same logic, 23 is related to 207. To which of the following is 51 related, following the same logic?

(NOTE: Operations should be performed on the whole numbers, without breaking down the numbers into its constituent digits. E.g. 13 – Operations on 13 such as adding /deleting /multiplying etc. to 13 can be performed. Breaking down 13 into 1 and 3 and then performing mathematical operations on 1 and 3 is not allowed)

Ans ☒ 1. 350

☒ 2. 459

☒ 3. 359

☒ 4. 450

Question ID : 630680344652

Option 1 ID : 6306801340919

Option 2 ID : 6306801340917

Option 3 ID : 6306801340920

Option 4 ID : 6306801340918

Status : Answered

Chosen Option : 2

Q.6 Select the word-pair that best represents a similar relationship to the one expressed in the pair of words given below.
(The words must be considered as meaningful English words and must NOT be related to each other based on the number of letters/number of consonants/vowels in the word)

Kaziranga : Rhinoceros

Ans

☒ 1. Gir : Leopards

☒ 2. Periyar : Elephants

☒ 3. Gahirmatha : Lions

☒ 4. Ranthambore : Peacocks

Question ID : 630680417410

Option 1 ID : 6306801628403

Option 2 ID : 6306801628405

Option 3 ID : 6306801628406

Option 4 ID : 6306801628404

Status : Not Answered

Chosen Option : --

Q.7 Which of the following terms will replace the question mark (?) in the given series?
BHVC, ZLTG, XPRK, ? , TXNS

Ans

☒ 1. VTPN

☒ 2. VTPO

☒ 3. VPTO

☒ 4. VPTN

Question ID : 630680416984

Option 1 ID : 6306801626699

Option 2 ID : 6306801626700

Option 3 ID : 6306801626701

Option 4 ID : 6306801626702

Status : Answered

Chosen Option : 2

Q.8 Which figure should replace the question mark (?) if the following series were to be continued?

2		D	X	↑	D	X	2	↑	
0	X	5	2	0	7	7	2	0	D 7 S
↑			D		↑		X		?

Ans

- ✗ 1.

X2

7SD

↑
- ✗ 2.

↑X

SD7

2
- ✗ 3.

↑X

7SD

2
- ✓ 4.

X2

SD7

↑

Question ID : 630680214427
Option 1 ID : 630680831739
Option 2 ID : 630680831742
Option 3 ID : 630680831741
Option 4 ID : 630680831740
Status : Answered
Chosen Option : 4

Q.9 Each of the letters in the word 'REDUCTION' are arranged in the English alphabetical order. How many letters are there in the English alphabetical order between the letter which is the third from the left end and the fourth from the left end in the group of letters thus formed?

- Ans
- ✗ 1. One

✗ 2. Two

✗ 3. Four

✓ 4. Three

Question ID : 630680313410
Option 1 ID : 6306801219505
Option 2 ID : 6306801219506
Option 3 ID : 6306801219508
Option 4 ID : 6306801219507
Status : Answered
Chosen Option : 4

Q.10 Six letters B, F, D, X, N and A are written on different faces of a dice. Two positions of this dice are shown in the figures below. Find the letter on the face opposite to D.



Ans ☒ 1. A

☒ 2. F

☒ 3. N

☒ 4. B

Question ID : 630680222367

Option 1 ID : 630680863300

Option 2 ID : 630680863301

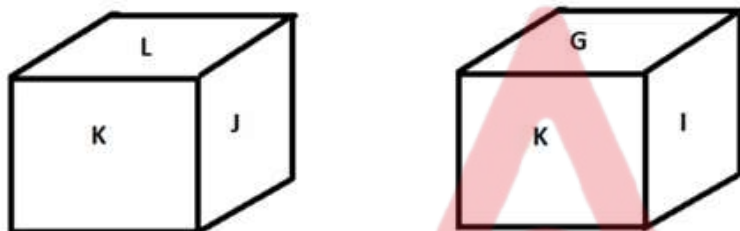
Option 3 ID : 630680863299

Option 4 ID : 630680863302

Status : Answered

Chosen Option : 1

Q.11 Six letters G, H, I, J, K and L are written on different faces of a dice. Two positions of this dice are shown in the figure below. Find the letter on the face opposite to G.



Ans ☒ 1. J

☒ 2. K

☒ 3. I

☒ 4. L

Question ID : 630680189139

Option 1 ID : 630680733366

Option 2 ID : 630680733365

Option 3 ID : 630680733367

Option 4 ID : 630680733368

Status : Answered

Chosen Option : 4

Q.12 Three of the following four options are alike in a certain way and thus form a group. Which is the one that does NOT belong to that group?

(NOTE: Operations should be performed on the whole numbers, without breaking down the numbers into its constituent digits. E.g. 13 – Operations on 13 such as adding/subtracting/multiplying etc. to 13 can be performed. Breaking down 13 into 1 and 3 and then performing mathematical operations on 1 and 3 is not allowed.)

Ans ☒ 1. $82 - 8 - 2$

☒ 2. $164 - 10 - 4$

☒ 3. $63 - 6 - 3$

☒ 4. $360 - 12 - 6$

Question ID : 630680196582

Option 1 ID : 630680762628

Option 2 ID : 630680762629

Option 3 ID : 630680762627

Option 4 ID : 630680762630

Status : Not Answered

Chosen Option : --

Q.13 What will come in place of the question mark (?) in the following equation, if '+' and '-' are interchanged and 'x' and '÷' are interchanged?
 $2864 \times 4 - 168 \div 2 + 69 = ?$

Ans ☒ 1. 938

☒ 2. 389

☒ 3. 839

☒ 4. 983

Question ID : 630680411725
 Option 1 ID : 6306801605735
 Option 2 ID : 6306801605736
 Option 3 ID : 6306801605738
 Option 4 ID : 6306801605737
 Status : Answered
 Chosen Option : 4

Q.14 Which of the following numbers will replace the question mark (?) in the given series?
 22, 23, 27, 54, 70, 195, ?

Ans ☒ 1. 231

☒ 2. 200

☒ 3. 230

☒ 4. 196

Question ID : 630680411888
 Option 1 ID : 6306801606387
 Option 2 ID : 6306801606389
 Option 3 ID : 6306801606388
 Option 4 ID : 6306801606390
 Status : Answered
 Chosen Option : 1

Q.15 Select the option in which the numbers share the same relationship as that shared by the given pair of numbers.
 (NOTE: Operations should be performed on the whole numbers, without breaking down the numbers into its constituent digits. E.g. 13 – Operations on 13 such as adding/deleting/multiplying etc. to 13 can be performed. Breaking down 13 into 1 and 3 and then performing mathematical operations on 1 and 3 is not allowed.)

63 : 441

51 : 357

Ans ☒ 1. 68 : 340

☒ 2. 54 : 324

☒ 3. 89 : 96

☒ 4. 39 : 273

Question ID : 630680326562
 Option 1 ID : 6306801270335
 Option 2 ID : 6306801270333
 Option 3 ID : 6306801270334
 Option 4 ID : 6306801270336
 Status : Answered
 Chosen Option : 4

Q.16 Two sets of numbers are given below. In each set of numbers, certain mathematical operation(s) on the first number result(s) in the second number. Similarly, certain mathematical operation(s) on the second number result(s) in the third number and so on. Which of the given options follows the same set of operations as in the given sets?

(NOTE: Operations should be performed on the whole numbers, without breaking down the numbers into their constituent digits. E.g. 13 – Operations on 13 such as adding/subtracting/multiplying to 13 can be performed. Breaking down 13 into 1 and 3 and then performing mathematical operations on 1 and 3 is not allowed.)

9 – 27 – 31 – 36; 10 – 30 – 34 – 39

Ans ✓ 1. 5 – 15 – 19 – 24

✗ 2. 8 – 24 – 28 – 35

✗ 3. 11 – 33 – 38 – 44

✗ 4. 15 – 45 – 50 – 55

Question ID : 630680814081

Option 1 ID : 6306803189541

Option 2 ID : 6306803189542

Option 3 ID : 6306803189543

Option 4 ID : 6306803189544

Status : Answered

Chosen Option : 1

Q.17 What will come in place of the question mark (?) in the following equation if '+' and '×' are interchanged and '-' and '÷' are interchanged?
 $27 - 6 + 4 \times 8 \div 6 = ?$

Ans ✓ 1. 20

✗ 2. 18

✗ 3. 16

✗ 4. 22

Question ID : 630680336514

Option 1 ID : 6306801308779

Option 2 ID : 6306801308778

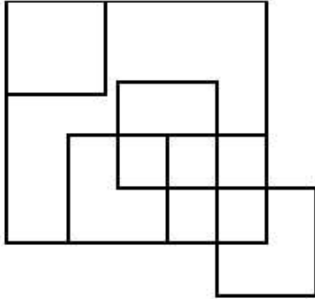
Option 3 ID : 6306801308777

Option 4 ID : 6306801308780

Status : Answered

Chosen Option : 1

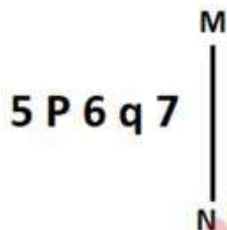
Q.18 How many squares are there in the figure shown below?



- Ans
- ☒ 1. 9
 - ☒ 2. 11
 - ☒ 3. 10
 - ☒ 4. 13

Question ID : 630680296649
 Option 1 ID : 6306801154248
 Option 2 ID : 6306801154250
 Option 3 ID : 6306801154247
 Option 4 ID : 6306801154249
 Status : Answered
 Chosen Option : 2

Q.19 Select the correct mirror image of the given figure when the mirror is placed at MN as shown below.



- Ans
- ☒ 1. 7 q 6 P 5
 - ☒ 2. 7 p 6 P 5
 - ☒ 3. 7 p 6 P 5
 - ☒ 4. 7 p 6 9 5

Question ID : 630680356668
 Option 1 ID : 6306801388676
 Option 2 ID : 6306801388674
 Option 3 ID : 6306801388675
 Option 4 ID : 6306801388673
 Status : Answered
 Chosen Option : 2

Q.20 Identify the figure given in the options which when put in place of the question mark (?) will logically complete the series?

P	0	W	P	X	W	1	X	
1		0		P		W		?
W	X	X	1	1	0	0	P	

Ans

✓ 1.

0		1
	X	
P		W

✗ 2.

P		0
	1	
W		X

✗ 3.

0		1
	P	
W		X

✗ 4.

0		1
	X	
W		P

Question ID : 630680471486
Option 1 ID : 6306801841661
Option 2 ID : 6306801841660
Option 3 ID : 6306801841659
Option 4 ID : 6306801841658
Status : Answered
Chosen Option : 1

Q.21 Select the option that represents the letters that when sequentially placed from left to right in the blanks below will complete the letter series.

_ O _ O _ _ O _ P _ O _

Ans

- ✗ 1. PPOOPOP
✗ 2. OOPPPOO
✓ 3. OPOPOOP
✗ 4. PPOOOPO

Question ID : 630680262381
Option 1 ID : 6306801019163
Option 2 ID : 6306801019166
Option 3 ID : 6306801019164
Option 4 ID : 6306801019165
Status : Not Answered
Chosen Option : --

Q.22 In a certain code language, 'ESTATE' is written as '80', 'FAMOUS' is written as '85', how will 'FOREST' be written in that language?

Ans ☒ 1. 88

☒ 2. 90

☒ 3. 93

☒ 4. 83

Question ID : 630680416122

Option 1 ID : 6306801623253

Option 2 ID : 6306801623254

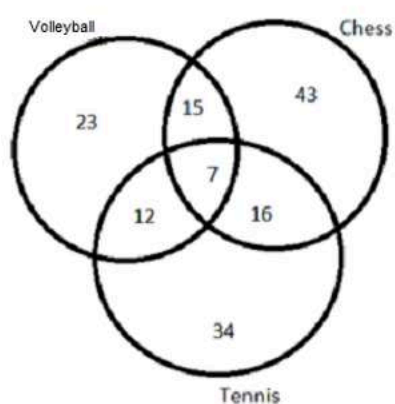
Option 3 ID : 6306801623252

Option 4 ID : 6306801623251

Status : Answered

Chosen Option : 3

Q.23 How many people play either only volleyball or only chess as per the given Venn diagram?



Ans ☒ 1. 66

☒ 2. 15

☒ 3. 88

☒ 4. 81

Question ID : 630680137035

Option 1 ID : 630680530740

Option 2 ID : 630680530738

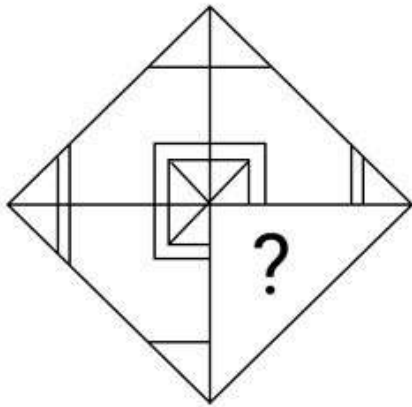
Option 3 ID : 630680530741

Option 4 ID : 630680530739

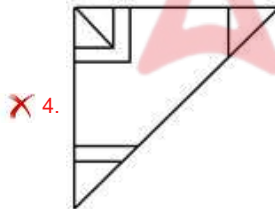
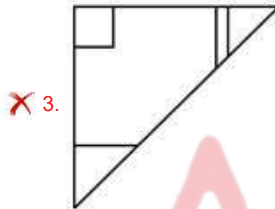
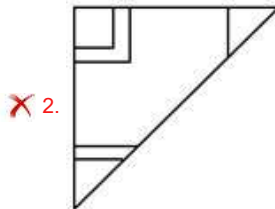
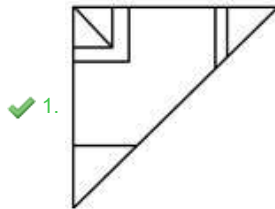
Status : Answered

Chosen Option : 1

Q.24 Select the option figure that will replace the question mark (?) in the figure given below to complete the pattern.



Ans



Question ID : 630680318351

Option 1 ID : 6306801238483

Option 2 ID : 6306801238482

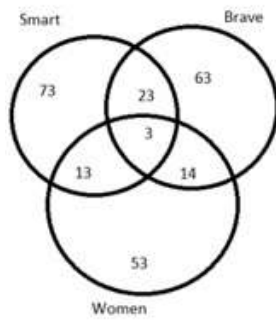
Option 3 ID : 6306801238481

Option 4 ID : 6306801238484

Status : Answered

Chosen Option : 1

Q.25 Study the given Venn diagram and answer the question that follows.



How many women are either smart or brave or both?

- Ans
- ☒ 1. 26
 - ☒ 2. 23
 - ☒ 3. 27
 - ☒ 4. 30

Question ID : 630680199102
 Option 1 ID : 630680772115
 Option 2 ID : 630680772117
 Option 3 ID : 630680772118
 Option 4 ID : 630680772116
 Status : Answered
 Chosen Option : 4

Section : General Awareness

Q.1 Where was the Hindu College established in the year 1791?

- Ans
- ☒ 1. Benaras
 - ☒ 2. Patna
 - ☒ 3. Kolkata
 - ☒ 4. Mathura

Question ID : 630680511541
 Option 1 ID : 6306801999289
 Option 2 ID : 6306801999287
 Option 3 ID : 6306801999286
 Option 4 ID : 6306801999288
 Status : Answered
 Chosen Option : 1

Q.2 In which year was the Gandhi-Irwin Pact signed?

- Ans
- ☒ 1. 1929
 - ☒ 2. 1941
 - ☒ 3. 1931
 - ☒ 4. 1935

Question ID : 630680412374
 Option 1 ID : 6306801608321
 Option 2 ID : 6306801608322
 Option 3 ID : 6306801608319
 Option 4 ID : 6306801608320
 Status : Answered
 Chosen Option : 3

Q.3 Which of the following is NOT the socio-economic objective of Industrial Policy Statement 1980?

- Ans
- ☐ 1. Higher employment generation
 - ☐ 2. Promotion of export-oriented industries
 - ☐ 3. Consumer protection against high prices and bad quality
 - ☒ 4. Allowing the maximum foreign direct investment

Question ID : 6306801048053
Option 1 ID : 6306804114258
Option 2 ID : 6306804114259
Option 3 ID : 6306804114260
Option 4 ID : 6306804114261
Status : Not Answered
Chosen Option : --

Q.4 The name 'Piyadassi' is associated with whom among the following Mauryan kings?

- Ans
- ☒ 1. Ashoka
 - ☐ 2. Brihadratha
 - ☐ 3. Bindusara
 - ☐ 4. Chandragupta Maurya

Question ID : 630680412481
Option 1 ID : 6306801608749
Option 2 ID : 6306801608750
Option 3 ID : 6306801608748
Option 4 ID : 6306801608747
Status : Answered
Chosen Option : 1

Q.5 In which of the following years will India host the World Badminton Championship?

- Ans
- ☐ 1. 2025
 - ☐ 2. 2027
 - ☒ 3. 2026
 - ☐ 4. 2028

Question ID : 630680510791
Option 1 ID : 6306801996294
Option 2 ID : 6306801996296
Option 3 ID : 6306801996295
Option 4 ID : 6306801996297
Status : Not Answered
Chosen Option : --

Q.6 Which of the following plants is used to cure cold and cough?

- Ans
- ☐ 1. Arjun
 - ☐ 2. Babool
 - ☐ 3. Jamun
 - ☒ 4. Tulsi

Question ID : 630680309108
Option 1 ID : 6306801202612
Option 2 ID : 6306801202610
Option 3 ID : 6306801202609
Option 4 ID : 6306801202611
Status : Answered
Chosen Option : 4

Q.7 Where is the Gulf of Mannar located?

- Ans
- ☐ 1. Between the south-eastern tip of India and the southern coast of Sri Lanka
 - ☐ 2. Between the south-eastern tip of India and the eastern coast of Sri Lanka
 - ☐ 3. Between the south-eastern tip of India and the north-western coast of Sri Lanka
 - ☒ 4. Between the south-eastern tip of India and the western coast of Sri Lanka

Question ID : 630680137261
Option 1 ID : 630680531641
Option 2 ID : 630680531640
Option 3 ID : 630680531638
Option 4 ID : 630680531639
Status : Answered
Chosen Option : 3

Q.8 Name a common electrolyte disorder that occurs when the amount of sodium in your blood becomes abnormally low.

- Ans
- ☐ 1. Hypokalemia
 - ☐ 2. Hyperkalemia
 - ☐ 3. Hyponatremia
 - ☒ 4. Hyponatremia

Question ID : 630680295296
Option 1 ID : 6306801148909
Option 2 ID : 6306801148910
Option 3 ID : 6306801148911
Option 4 ID : 6306801148908
Status : Not Answered
Chosen Option : --

Q.9 Who was the player of the match in the semi-final of the T20 Women's World Cup 2023 played between India and Australia?

- Ans
- ☐ 1. Meg Lanning
 - ☒ 2. Ashleigh Gardner
 - ☐ 3. Harmanpreet kaur
 - ☐ 4. Deepti Sharma

Question ID : 630680329493
Option 1 ID : 6306801281715
Option 2 ID : 6306801281713
Option 3 ID : 6306801281714
Option 4 ID : 6306801281716
Status : Not Answered
Chosen Option : --

Q.10 Who among the following won a Gold Medal at the 2021 World Cadet Wrestling Championship held in Budapest, Hungary?

- Ans
- ☐ 1. Vinesh Phogat
 - ☒ 2. Priya Malik
 - ☐ 3. Geeta Phogat
 - ☐ 4. Pooja Dhanda

Question ID : 630680134102
Option 1 ID : 630680519305
Option 2 ID : 630680519302
Option 3 ID : 630680519303
Option 4 ID : 630680519304
Status : Not Answered
Chosen Option : --

Q.11 What is the SI unit of current?

- Ans ☒ 1. Metre
☒ 2. Ampere
☒ 3. Volt
☒ 4. Ohm

Question ID : 630680184307
 Option 1 ID : 630680714240
 Option 2 ID : 630680714238
 Option 3 ID : 630680714239
 Option 4 ID : 630680714237
 Status : Answered
 Chosen Option : 2

Q.12 How many members are nominated by the President to the Rajya Sabha?

- Ans ☒ 1. 20
☒ 2. 15
☒ 3. 10
☒ 4. 12

Question ID : 630680413113
 Option 1 ID : 6306801611276
 Option 2 ID : 6306801611277
 Option 3 ID : 6306801611275
 Option 4 ID : 6306801611278
 Status : Answered
 Chosen Option : 4

Q.13 Sangeet Natak Akademy Awardee Sulochana Chavan was a famous _____ singer.

- Ans ☒ 1. Ghumar
☒ 2. Giddha
☒ 3. Jhumair
☒ 4. Lavani

Question ID : 630680216243
 Option 1 ID : 630680838948
 Option 2 ID : 630680838950
 Option 3 ID : 630680838949
 Option 4 ID : 630680838947
 Status : Not Answered
 Chosen Option : --

Q.14 Which of the following is NOT a component of a flower?

- Ans ☒ 1. Androecium
☒ 2. Spines
☒ 3. Calyx
☒ 4. Corolla

Question ID : 630680321340
 Option 1 ID : 6306801250072
 Option 2 ID : 6306801250069
 Option 3 ID : 6306801250070
 Option 4 ID : 6306801250071
 Status : Answered
 Chosen Option : 2

Q.15 Which is the colloquial term to describe the occurrence of pre-monsoon rains in India especially in parts of Kerala, Karnataka and Tamil Nadu?

- Ans
- ☐ 1. Nor Westers
 - ☐ 2. Kalbaisakhi
 - ☐ 3. Orange showers
 - ☒ 4. Mango showers

Question ID : 63068085804
Option 1 ID : 630680332678
Option 2 ID : 630680332679
Option 3 ID : 630680332677
Option 4 ID : 630680332676
Status : Answered
Chosen Option : 4

Q.16 Tera Tali folk dance is primarily associated with which of the following states?

- Ans
- ☒ 1. Rajasthan
 - ☐ 2. Haryana
 - ☐ 3. Madhya Pradesh
 - ☐ 4. Assam

Question ID : 630680164533
Option 1 ID : 630680637248
Option 2 ID : 630680637251
Option 3 ID : 630680637250
Option 4 ID : 630680637249
Status : Not Answered
Chosen Option : --

Q.17 Dr. B. R. Ambedkar described Directive Principles of State Policy as _____ of the Indian constitution.

- Ans
- ☐ 1. identity card of the constitution
 - ☐ 2. The most precious part of the constitution
 - ☐ 3. soul of the state
 - ☒ 4. a novel feature of the constitution

Question ID : 630680329453
Option 1 ID : 6306801281554
Option 2 ID : 6306801281555
Option 3 ID : 6306801281553
Option 4 ID : 6306801281556
Status : Answered
Chosen Option : 4

Q.18 Which of the following crops is NOT grown during the Zaid season in India?

- Ans
- ☒ 1. Rice
 - ☐ 2. Muskmelon
 - ☐ 3. Watermelon
 - ☐ 4. Cucumber

Question ID : 630680111987
Option 1 ID : 630680433675
Option 2 ID : 630680433674
Option 3 ID : 630680433677
Option 4 ID : 630680433676
Status : Answered
Chosen Option : 1

Q.19 Which of the following is an example of a non-tax revenue source for the government?

- Ans ☒ 1. Value-added tax
☒ 2. Fees and fines
☒ 3. Corporate income tax
☒ 4. Personal income tax

Question ID : 630680324090
 Option 1 ID : 6306801260856
 Option 2 ID : 6306801260855
 Option 3 ID : 6306801260853
 Option 4 ID : 6306801260854
 Status : Answered
 Chosen Option : 2

Q.20 The festival of 'Rath Yatra' of Puri in Odisha is dedicated to which deity?

- Ans ☒ 1. Lord Jagannath
☒ 2. Lord Shiva
☒ 3. Lord Ganesha
☒ 4. Lord Hanuman

Question ID : 630680216007
 Option 1 ID : 630680838004
 Option 2 ID : 630680838003
 Option 3 ID : 630680838005
 Option 4 ID : 630680838006
 Status : Answered
 Chosen Option : 1

Q.21 Sangeet Kala Acharya Award is given by which organisation every year since 1993?

- Ans ☒ 1. Subramaniam Academy of Performing Arts
☒ 2. Madras Music Academy
☒ 3. Calcutta School of Music
☒ 4. Shankar Mahadevan Academy

Question ID : 630680511793
 Option 1 ID : 6306802000145
 Option 2 ID : 6306802000142
 Option 3 ID : 6306802000143
 Option 4 ID : 6306802000144
 Status : Not Answered
 Chosen Option : --

Q.22 As per article 123, the ordinance making power is the most important legislative power of _____.

- Ans ☒ 1. Rajya Sabha
☒ 2. Chief Justice of India
☒ 3. President
☒ 4. Legislative council

Question ID : 630680329455
 Option 1 ID : 6306801281562
 Option 2 ID : 6306801281564
 Option 3 ID : 6306801281561
 Option 4 ID : 6306801281563
 Status : Answered
 Chosen Option : 3

Q.23 Grignard reagent is represented as:

- Ans
- ☒ 1. H-Mg-H
 - ☒ 2. CH₃-Ca-F
 - ☒ 3. CH₃-Be-F
 - ☒ 4. CH₃-Mg-Cl

Question ID : 630680102247
 Option 1 ID : 630680397273
 Option 2 ID : 630680397272
 Option 3 ID : 630680397274
 Option 4 ID : 630680397271
 Status : Not Answered
 Chosen Option : --

Q.24 Which of the following schemes was launched for the welfare of the unorganised sector workers and labourers on 26 August 2021?

- Ans
- ☒ 1. e-Shram Portal
 - ☒ 2. PM Daksh Yojana
 - ☒ 3. Gram Ujala Scheme
 - ☒ 4. PM Mentoring Yuva Scheme

Question ID : 63068099698
 Option 1 ID : 630680387489
 Option 2 ID : 630680387491
 Option 3 ID : 630680387490
 Option 4 ID : 630680387488
 Status : Answered
 Chosen Option : 1

Q.25 Who among the following was the Vakil under the reign of Mughal Emperor, Akbar, who received the title of Khan-i-Khanan?

- Ans
- ☒ 1. Bairam Khan
 - ☒ 2. Mulla do-Piyaza
 - ☒ 3. Birbal
 - ☒ 4. Raja Todar Mal

Question ID : 630680412401
 Option 1 ID : 6306801608430
 Option 2 ID : 6306801608428
 Option 3 ID : 6306801608427
 Option 4 ID : 6306801608429
 Status : Not Answered
 Chosen Option : --

Section : Quantitative Aptitude

Q.1 In the following sets, which set represents the angles of a triangle?

- Ans ☒ 1. $\{30^\circ, 50^\circ, 90^\circ\}$
☒ 2. $\{80^\circ, 50^\circ, 90^\circ\}$
☒ 3. $\{30^\circ, 60^\circ, 90^\circ\}$
☒ 4. $\{30^\circ, 50^\circ, 110^\circ\}$

Question ID : 630680421382
Option 1 ID : 6306801643991
Option 2 ID : 6306801643993
Option 3 ID : 6306801643992
Option 4 ID : 6306801643994
Status : Answered
Chosen Option : 3

Q.2 If the curved surface area of a cylinder is 880 cm^2 , then the product of its height and radius is:

- Ans ☒ 1. 120 cm^2
☒ 2. 140 cm^2
☒ 3. 90 cm^2
☒ 4. 220 cm^2

Question ID : 630680421527
Option 1 ID : 6306801644572
Option 2 ID : 6306801644573
Option 3 ID : 6306801644571
Option 4 ID : 6306801644574
Status : Answered
Chosen Option : 2

Q.3 The following table shows the percentage population of four states below poverty line, and the male to female ratios both above and below the poverty line.

State	Percentage of population below poverty line	Ratio of male to female	
		Below poverty line	Above poverty line
		Male : Female	Male : Female
P	13	1 : 2	1 : 4
Q	19	2 : 5	3 : 5
R	11	3 : 4	2 : 9
S	15	1 : 6	7 : 4

If the population of states Q and S is 14,700 each, then what is the total number of males below poverty line in these states?

- Ans ☒ 1. 1479
☒ 2. 1276
☒ 3. 1364
☒ 4. 1113

Question ID : 630680523819
Option 1 ID : 6306802047427
Option 2 ID : 6306802047429
Option 3 ID : 6306802047428
Option 4 ID : 6306802047430
Status : Not Answered
Chosen Option : --

Q.4 Simplify $\frac{1.5 \times 1.5 + 2.5 \times 2.5 + 3.5 \times 3.5 + 2 \times 1.5 \times 2.5 + 2 \times 2.5 \times 3.5 + 2 \times 1.5 \times 3.5}{1.5 + 2.5 + 3.5}$.

- Ans ☐ 1. 9.5
☒ 2. 7.5
☐ 3. 6.5
☐ 4. 8.5

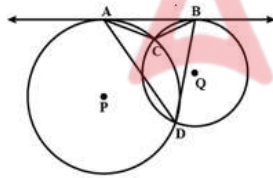
Question ID : 630680413526
 Option 1 ID : 6306801612931
 Option 2 ID : 6306801612928
 Option 3 ID : 6306801612929
 Option 4 ID : 6306801612930
 Status : Answered
 Chosen Option : 2

Q.5 The perimeters of two similar triangles ΔRST and ΔABC are 26 cm and 39 cm, respectively. If $AB = 24$ cm, then RS is ____.

- Ans ☐ 1. 24 cm
☒ 2. 16 cm
☐ 3. 18 cm
☐ 4. 36 cm

Question ID : 630680526524
 Option 1 ID : 6306802058164
 Option 2 ID : 6306802058165
 Option 3 ID : 6306802058163
 Option 4 ID : 6306802058162
 Status : Answered
 Chosen Option : 2

Q.6 Two circles, centred at P and Q intersect at two points C and D . AB is tangent to the two circles at A and B . If $\angle ADB = 68^\circ$, then $\angle ACB =$ ____.



- Ans ☐ 1. 102°
☐ 2. 124°
☐ 3. 132°
☒ 4. 112°

Question ID : 630680296209
 Option 1 ID : 6306801152506
 Option 2 ID : 6306801152505
 Option 3 ID : 6306801152504
 Option 4 ID : 6306801152507
 Status : Answered
 Chosen Option : 4

Q.7 The angle turned by minutes hand in 25 minutes in a clock is:

Ans

- ☒ 1. $\frac{\pi}{2}$
☒ 2. π
☒ 3. $\frac{5\pi}{6}$
☒ 4. $\frac{5\pi}{3}$

Question ID : 630680397675

Option 1 ID : 6306801550625

Option 2 ID : 6306801550628

Option 3 ID : 6306801550627

Option 4 ID : 6306801550626

Status : Answered

Chosen Option : 3

Q.8 A class of 30 students appeared in a test. The average score of 12 students is 62, and that of the rest is 72. What is the average score of the class?

Ans

- ☒ 1. 67
☒ 2. 68
☒ 3. 66
☒ 4. 69

Question ID : 630680566261

Option 1 ID : 6306802214033

Option 2 ID : 6306802214032

Option 3 ID : 6306802214035

Option 4 ID : 6306802214034

Status : Answered

Chosen Option : 2

Q.9 A sum of ₹10,000 is taken as a loan by Rajesh at a rate of 15% p.a. simple interest for 2 years. But Rajesh could not repay it at the agreed time and asked for an extension of two more years. So, the lender included the interest amount for the period as principal for the next two years at the same rate of interest. The total amount paid by Rajesh at the end of 4 years is:

Ans

- ☒ 1. ₹16,900
☒ 2. ₹17,650
☒ 3. ₹15,630
☒ 4. ₹18,590

Question ID : 630680374180

Option 1 ID : 6306801457993

Option 2 ID : 6306801457991

Option 3 ID : 6306801457992

Option 4 ID : 6306801457994

Status : Answered

Chosen Option : 1

Q.10 The area of a sector of a circle of radius 12 cm, formed by an arc of length 7 cm is:

Ans ☒ 1. 42 cm^2

☒ 2. 84 cm^2

☒ 3. 21 cm^2

☒ 4. 28 cm^2

Question ID : 630680397484

Option 1 ID : 6306801549860

Option 2 ID : 6306801549858

Option 3 ID : 6306801549859

Option 4 ID : 6306801549861

Status : Answered

Chosen Option : 1

Q.11 Kalyan spends 80% of his income. His income increases by 15% and his expenditure also increases by 5%. The percentage of increase in his savings is:

Ans ☒ 1. 20%

☒ 2. 50%

☒ 3. 55%

☒ 4. 40%

Question ID : 630680397318

Option 1 ID : 6306801549329

Option 2 ID : 6306801549328

Option 3 ID : 6306801549330

Option 4 ID : 6306801549331

Status : Answered

Chosen Option : 3

Q.12 A boatman rows to a place 30 km distant and back in 14 hours. He finds that he can row 10 km with the stream at the same time as 4 km against the stream. Find the speed (in km/h) of the stream.

Ans ☒ 1. $\frac{4}{9}$

☒ 2. $\frac{9}{2}$

☒ 3. $\frac{2}{9}$

☒ 4. $\frac{9}{4}$

Question ID : 630680428571

Option 1 ID : 6306801672329

Option 2 ID : 6306801672331

Option 3 ID : 6306801672330

Option 4 ID : 6306801672328

Status : Answered

Chosen Option : 4

Q.13 The value of $\left(\frac{\operatorname{cosec} A}{\operatorname{cosec} A - 1} + \frac{\operatorname{cosec} A}{\operatorname{cosec} A + 1}\right)\left(\frac{\sec A}{\sec A - 1} + \frac{\sec A}{\sec A + 1}\right)^{-1}$, when $A = 60^\circ$ is:

Ans ☒ 1. 3

☒ 2. 4

☒ 3. 1

☒ 4. 2

Question ID : 630680183249

Option 1 ID : 630680710066

Option 2 ID : 630680710065

Option 3 ID : 630680710068

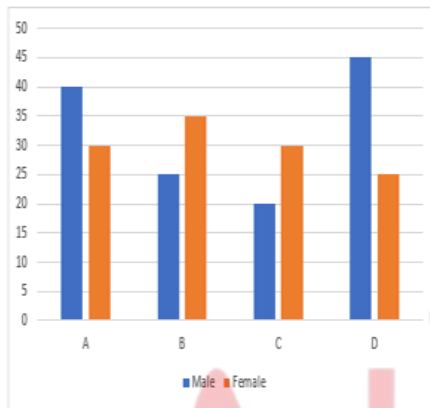
Option 4 ID : 630680710067

Status : Answered

Chosen Option : 1

Q.14 Study the given graph carefully and answer the question that follows.

The given graph shows the number of male and female volunteers for helping handicapped people from four different districts A, B, C and D.



Find the number of volunteers altogether.

Ans ☒ 1. 230

☒ 2. 250

☒ 3. 260

☒ 4. 240

Question ID : 630680428002

Option 1 ID : 6306801670055

Option 2 ID : 6306801670054

Option 3 ID : 6306801670053

Option 4 ID : 6306801670052

Status : Answered

Chosen Option : 2

Q.15 2 biscuits and 1 chocolate cost ₹69. 2 chocolates and 3 cups of coffee cost ₹127. 3 biscuits, 4 chocolates and 2 cups of coffee cost ₹229. Find the total cost (in ₹) of 5 biscuits, 5 chocolates and 5 cups of coffee.

Ans ☒ 1. 355

☐ 2. 375

☐ 3. 304

☐ 4. 345

Question ID : 630680378647

Option 1 ID : 6306801475637

Option 2 ID : 6306801475638

Option 3 ID : 6306801475635

Option 4 ID : 6306801475636

Status : Not Attempted and
Marked For Review

Chosen Option : --

Q.16 Study the given table and answer the question.

The table displays the number of cars produced (in lakhs) by six different brands between 2018 and 2023.

Brand	2018	2019	2020	2021	2022	2023
A	36	40	42	45	47	42
B	23	37	28	32	34	26
C	45	47	51	54	56	48
D	35	37	42	32	36	28
E	57	56	52	38	48	42
F	43	45	56	41	52	40

Which brand production is the highest, and in which year?

Ans ☐ 1. C and 2022

☐ 2. E and 2019

☐ 3. F and 2020

☒ 4. E and 2018

Question ID : 630680459188

Option 1 ID : 6306801793721

Option 2 ID : 6306801793723

Option 3 ID : 6306801793722

Option 4 ID : 6306801793724

Status : Answered

Chosen Option : 1

Q.17 Two pipes P and Q can fill a tank in 36 minutes and 45 minutes, respectively. If both pipes are opened together, the time taken to fill the tank is:

Ans ☐ 1. 10 minutes

☐ 2. 40.5 minutes

☒ 3. 20 minutes

☐ 4. 81 minutes

Question ID : 630680426588

Option 1 ID : 6306801664445

Option 2 ID : 6306801664444

Option 3 ID : 6306801664443

Option 4 ID : 6306801664442

Status : Answered

Chosen Option : 3

Q.18 A dishonest fruit-seller sells fruits at 20% profit but he uses 950 gm weight in place of 1 kg. What is the profit per cent?

- Ans
- ✓ 1. $\frac{500}{19}\%$
- ✗ 2. $\frac{500}{32}\%$
- ✗ 3. $\frac{700}{19}\%$
- ✗ 4. $\frac{500}{17}\%$

Question ID : 630680137016

Option 1 ID : 630680530662

Option 2 ID : 630680530665

Option 3 ID : 630680530664

Option 4 ID : 630680530663

Status : Answered

Chosen Option : 1

Q.19 Simplify the following expression.

$$(g - h)^2 - (g + h)^2 + 4gh$$

- Ans
- ✗ 1. $-4gh$
- ✗ 2. 4
- ✓ 3. 0
- ✗ 4. $4gh$

Question ID : 630680413542

Option 1 ID : 6306801612992

Option 2 ID : 6306801612994

Option 3 ID : 6306801612995

Option 4 ID : 6306801612993

Status : Answered

Chosen Option : 3

Q.20 If $m = a \sec A$ and $y = b \tan A$, then find the value of $b^2 m^2 - a^2 y^2 + \frac{a^2 y^2}{b^2 m^2} + \cos^2 A$.

- Ans
- ✗ 1. $1 - a^2 b^2$
- ✗ 2. $a^2 b^2$
- ✓ 3. $a^2 b^2 + 1$
- ✗ 4. $a^2 b^2 + 2$

Question ID : 630680401760

Option 1 ID : 6306801566808

Option 2 ID : 6306801566806

Option 3 ID : 6306801566807

Option 4 ID : 6306801566809

Status : Answered

Chosen Option : 3

Q.21 Find the mean proportional of 12.96 and 0.16.

Ans ☒ 1. 1.44

☐ 2. 1.69

☐ 3. 1.96

☐ 4. 1.21

Question ID : 630680428538

Option 1 ID : 6306801672197

Option 2 ID : 6306801672198

Option 3 ID : 6306801672199

Option 4 ID : 6306801672196

Status : Answered

Chosen Option : 1

Q.22 Simplify the following.

$$16 \div 2 - 7 \times 15 \div 3 + 5 \times 5 + 4 \times 3 - 10$$

Ans ☐ 1. 1

☐ 2. -1

☒ 3. 0

☐ 4. 2

Question ID : 6306801047991

Option 1 ID : 6306804114008

Option 2 ID : 6306804114006

Option 3 ID : 6306804114007

Option 4 ID : 6306804114009

Status : Answered

Chosen Option : 3

Q.23 Find the remainder: $(17^{13} - 21) \div 18$

Ans ☒ 1. 14

☐ 2. 21

☐ 3. 15

☐ 4. 17

Question ID : 630680137168

Option 1 ID : 630680531268

Option 2 ID : 630680531266

Option 3 ID : 630680531269

Option 4 ID : 630680531267

Status : Answered

Chosen Option : 1

Q.24 A manufacturer announces a trade discount of 30% on his products for his dealers. One of the dealers purchased 6 smart phones manufactured by the company at the rate of Rs.25,000 each. What is the amount of trade discount?

Ans ☐ 1. Rs.55,000

☒ 2. Rs.45,000

☐ 3. Rs.50,000

☐ 4. Rs.1,05,000

Question ID : 63068071092

Option 1 ID : 630680274962

Option 2 ID : 630680274965

Option 3 ID : 630680274963

Option 4 ID : 630680274964

Status : Answered

Chosen Option : 2

Q.25 The table shows the percentage distribution of the population (only male and female) according to Gender and Literacy.

State	Percentage literate	Gender	
		Literate	Illiterate
		M : F	M : F
A	55	5 : 6	4 : 5
B	72	1 : 1	3 : 2
C	78	4 : 3	3 : 2

If the literate male population of state A is 5,00,000, then the total population of the state is:

- Ans** ☒ 1. 20,00,000
☒ 2. 16,00,000
☒ 3. 30,00,000
☒ 4. 40,00,000

Question ID : 630680135846
Option 1 ID : 630680526092
Option 2 ID : 630680526093
Option 3 ID : 630680526090
Option 4 ID : 630680526091
Status : Answered
Chosen Option : 1

Section : English Comprehension

Q.1 Select the most appropriate option that can rectify the incorrectly spelt word in the following sentence.
The government has ordered for the maintainance of the roads.

- Ans** ☒ 1. maintainiance
☒ 2. maintennance
☒ 3. maintainence
☒ 4. maintenance

Question ID : 630680360092
Option 1 ID : 6306801402314
Option 2 ID : 6306801402316
Option 3 ID : 6306801402313
Option 4 ID : 6306801402315
Status : Answered
Chosen Option : 3

Q.2 Give one word substitution for :
A person who is unsure about God's existence

- Ans** ☒ 1. Agnostic
☒ 2. Atheist
☒ 3. Ignorant
☒ 4. Theist

Question ID : 630680147489
Option 1 ID : 630680570729
Option 2 ID : 630680570728
Option 3 ID : 630680570726
Option 4 ID : 630680570727
Status : Answered
Chosen Option : 1

Q.3 Select the most appropriate **ANTONYM** of the underlined word.
If someone babbles, it means that they talk in a confused or excited way.

- Ans**
- ☒ 1. Rants
 - ☒ 2. Talkative
 - ☒ 3. Quiet
 - ☒ 4. Gossips

Question ID : 630680401027
Option 1 ID : 6306801563937
Option 2 ID : 6306801563940
Option 3 ID : 6306801563938
Option 4 ID : 6306801563939
Status : Answered
Chosen Option : 3

Q.4 Select the most appropriate option that can substitute the underlined part in the following sentence.
Everyone called the reporter a daredevil after he came back safely from the war zone.

- Ans**
- ☒ 1. a fearless person
 - ☒ 2. a hypocrite
 - ☒ 3. a common man
 - ☒ 4. an insignificant person

Question ID : 630680317821
Option 1 ID : 6306801236377
Option 2 ID : 6306801236378
Option 3 ID : 6306801236380
Option 4 ID : 6306801236379
Status : Answered
Chosen Option : 1

Q.5 Select the most appropriate meaning of the given word.
Illiterate

- Ans**
- ☒ 1. A person who cannot read and write
 - ☒ 2. A person who cannot speak
 - ☒ 3. One who is well-educated
 - ☒ 4. Highly rated thing

Question ID : 630680184925
Option 1 ID : 630680716650
Option 2 ID : 630680716649
Option 3 ID : 630680716652
Option 4 ID : 630680716651
Status : Answered
Chosen Option : 1

Q.6 Select the most appropriate meaning of the given idiom.

Radhika stood by Monica's side through thick and thin.

- Ans ☒ 1. Under easy situations wherein she could ensure Monica's safety and security
- ☒ 2. In all the happy moments, personally spending most of her time
- ☒ 3. In the moments when Monica couldn't complete some simple tasks
- ☒ 4. Under all conditions, no matter how challenging or difficult

Question ID : 630680366853
Option 1 ID : 6306801428892
Option 2 ID : 6306801428889
Option 3 ID : 6306801428890
Option 4 ID : 6306801428891
Status : Answered
Chosen Option : 4

Q.7 In the following sentence, four words are underlined out of which one word is misspelt. Identify the INCORRECTLY spelt word.
I felt absolutely (A) fit at the summit. My mind was absolutely clear. (B) I didn't feel tired, I felt exhelarated. (C) It was a very clear sensation. (D)

- Ans ☒ 1. C
- ☒ 2. A
- ☒ 3. B
- ☒ 4. D

Question ID : 630680409955
Option 1 ID : 6306801598652
Option 2 ID : 6306801598649
Option 3 ID : 6306801598651
Option 4 ID : 6306801598650
Status : Answered
Chosen Option : 1

Q.8 Select the option that expresses the given sentence in passive voice.
Martha made pancakes yesterday.

- Ans ☒ 1. Pancakes had been made by Martha yesterday.
- ☒ 2. Pancakes were made by Martha yesterday.
- ☒ 3. Pancakes were being made by Martha yesterday.
- ☒ 4. Pancakes was made by Martha yesterday.

Question ID : 630680206654
Option 1 ID : 630680801217
Option 2 ID : 630680801216
Option 3 ID : 630680801215
Option 4 ID : 630680801218
Status : Answered
Chosen Option : 2

Q.9 Select the most appropriate ANTONYM of the word in the brackets to fill in the blank.

Akash went to _____ his school uniform. [sell]

Ans ☒ 1. make

☐ 2. rent

☐ 3. loan

☒ 4. buy

Question ID : 630680132561

Option 1 ID : 630680513381

Option 2 ID : 630680513379

Option 3 ID : 630680513378

Option 4 ID : 630680513380

Status : Answered

Chosen Option : 4

Q.10 Select the most appropriate option to substitute the underlined word segment in the given sentence.

Carnatic music is usually performed by a small troupe of actors, consisting of a principal performer, a melodic accompaniment, and a rhythm accompaniment.

Ans ☒ 1. ensemble of musicians

☐ 2. panel of judges

☐ 3. band of singers

☐ 4. board of directors

Question ID : 630680168517

Option 1 ID : 630680652682

Option 2 ID : 630680652680

Option 3 ID : 630680652681

Option 4 ID : 630680652683

Status : Answered

Chosen Option : 3

Q.11 Choose the most appropriate ANTONYM for the underlined word in the given sentence.

The war was followed by a long period of prosperity.

Ans ☐ 1. Affluence

☐ 2. Security

☐ 3. Secure

☒ 4. Failure

Question ID : 630680517483

Option 1 ID : 6306802022331

Option 2 ID : 6306802022330

Option 3 ID : 6306802022329

Option 4 ID : 6306802022328

Status : Answered

Chosen Option : 4

Q.12 Select the most appropriate synonym of the underlined word in the given sentence.
His approach was filled with such perseverance that it was difficult to overlook his merit.

- Ans**
- ☒ 1. Reluctance
 - ☒ 2. Ignorance
 - ☒ 3. Doggedness
 - ☒ 4. Monotonous

Question ID : 630680182623
Option 1 ID : 630680707602
Option 2 ID : 630680707603
Option 3 ID : 630680707600
Option 4 ID : 630680707601
Status : Answered
Chosen Option : 3

Q.13 Parts of a sentence are given below in jumbled order. Select the option that gives their correct logical sequence and forms a meaningful sentence.

In November, Lakshman fell (P) / with fever (Q) / seriously ill (R) and pneumonia (S).

- Ans**
- ☒ 1. P, Q, R, S
 - ☒ 2. P, R, Q, S
 - ☒ 3. R, Q, S, P
 - ☒ 4. P, Q, S, R

Question ID : 630680114195
Option 1 ID : 630680442183
Option 2 ID : 630680442182
Option 3 ID : 630680442185
Option 4 ID : 630680442184
Status : Answered
Chosen Option : 2

Q.14 The following sentence has been divided into five segments. The first segment has no error. Select the option that has the segment with the grammatical error.
Due to the pandemic, / the prices of / medicines increased / every day since / last December.

- Ans**
- ☒ 1. every day since
 - ☒ 2. last December.
 - ☒ 3. medicines increased
 - ☒ 4. the prices of

Question ID : 630680317872
Option 1 ID : 6306801236579
Option 2 ID : 6306801236580
Option 3 ID : 6306801236578
Option 4 ID : 6306801236577
Status : Answered
Chosen Option : 4

Q.15 In the given question, a statement divided into different segments is given. Rearrange all the segments to form a coherent statement.
O: also benefit from knowing
P: there are several reasons
Q: why even parents would
R: more about how and why
S: children do the things that they do

- Ans** ☒ 1. RQOPS
☒ 2. OPQSR
☒ 3. PQORS
☒ 4. PQROS

Question ID : 630680383223
Option 1 ID : 6306801493801
Option 2 ID : 6306801493799
Option 3 ID : 6306801493802
Option 4 ID : 6306801493800
Status : Answered
Chosen Option : 3

Q.16 Select the most appropriate ANTONYM of the given word.
Affirmative

- Ans** ☒ 1. Accession
☒ 2. Sanction
☒ 3. Negative
☒ 4. Acquiescence

Question ID : 630680517372
Option 1 ID : 6306802021885
Option 2 ID : 6306802021886
Option 3 ID : 6306802021887
Option 4 ID : 6306802021884
Status : Answered
Chosen Option : 4

Q.17 Select the option that can be used as a one-word substitute for the given group of words.

One who speaks less in a forum.

- Ans** ☒ 1. Eccentric
☒ 2. Loquacious
☒ 3. Gabby
☒ 4. Reticent

Question ID : 630680414787
Option 1 ID : 6306801617893
Option 2 ID : 6306801617892
Option 3 ID : 6306801617891
Option 4 ID : 6306801617894
Status : Answered
Chosen Option : 4

Q.18 Select the option that can be used as a one-word substitute for the given phrase.

An important person who represents his/her country in a foreign country

Ans ✓ 1. Ambassador

✗ 2. Amateur

✗ 3. Anonymous

✗ 4. Altruist

Question ID : 630680353987
Option 1 ID : 6306801378021
Option 2 ID : 6306801378022
Option 3 ID : 6306801378024
Option 4 ID : 6306801378023
Status : Answered
Chosen Option : 1

Q.19 Select the option that expresses the given sentence in active voice.
I will be gifted a fancy doll by them the next day.

Ans ✓ 1. They will gift me a fancy doll tomorrow.

✗ 2. They gift me a fancy doll the previous day.

✗ 3. They gifted me a fancy doll yesterday.

✗ 4. They are gifting me a fancy doll the next day.

Question ID : 630680415281
Option 1 ID : 6306801619873
Option 2 ID : 6306801619871
Option 3 ID : 6306801619872
Option 4 ID : 6306801619874
Status : Answered
Chosen Option : 1

Q.20 Parts of the given sentence have been underlined. Identify the part that has an error.
Select 'No error' if there is no error.
Although the team had trained diligently for months, they had still overwhelmed by the opponent's unexpected tactics.

Ans ✗ 1. for months

✗ 2. trained diligently

✓ 3. had still overwhelmed

✗ 4. No error

Question ID : 630680415146
Option 1 ID : 6306801619332
Option 2 ID : 6306801619331
Option 3 ID : 6306801619333
Option 4 ID : 6306801619334
Status : Answered
Chosen Option : 3

Comprehension:

In the following passage, some words have been deleted. Read the passage carefully and select the most appropriate option to fill in each blank.

(1) _____ a letter came to inform them that Raka's mother Tara had another breakdown and was in a nursing home in Geneva and that Raka's grandmother Asha, (2) _____ seen another grandchild safely into the world, was flying to Switzerland to be with her, Nanda Kaul (3) _____ her lips, (4) _____ the blue sheets of paper with that distasteful sprawl (5) _____ them, and hid them in her desk.

SubQuestion No : 21

Q.21 Select the most appropriate option to fill in blank number 1.

Ans ☒ 1. Sooner

☒ 2. When

☒ 3. For

☒ 4. Unless

Question ID : 630680162908

Option 1 ID : 630680630863

Option 2 ID : 630680630861

Option 3 ID : 630680630860

Option 4 ID : 630680630862

Status : Answered

Chosen Option : 2

Comprehension:

In the following passage, some words have been deleted. Read the passage carefully and select the most appropriate option to fill in each blank.

(1) _____ a letter came to inform them that Raka's mother Tara had another breakdown and was in a nursing home in Geneva and that Raka's grandmother Asha, (2) _____ seen another grandchild safely into the world, was flying to Switzerland to be with her, Nanda Kaul (3) _____ her lips, (4) _____ the blue sheets of paper with that distasteful sprawl (5) _____ them, and hid them in her desk.

SubQuestion No : 22

Q.22 Select the most appropriate option to fill in blank number 2.

Ans ☒ 1. have

☒ 2. has

☒ 3. having

☒ 4. had

Question ID : 630680162909

Option 1 ID : 630680630866

Option 2 ID : 630680630864

Option 3 ID : 630680630867

Option 4 ID : 630680630865

Status : Answered

Chosen Option : 4

Comprehension:

In the following passage, some words have been deleted. Read the passage carefully and select the most appropriate option to fill in each blank.

(1) _____ a letter came to inform them that Raka's mother Tara had another breakdown and was in a nursing home in Geneva and that Raka's grandmother Asha, (2) _____ seen another grandchild safely into the world, was flying to Switzerland to be with her, Nanda Kaul (3) _____ her lips, (4) _____ the blue sheets of paper with that distasteful sprawl (5) _____ them, and hid them in her desk.

SubQuestion No : 23

Q.23 Select the most appropriate option to fill in blank number 3.

- Ans ☒ 1. stuck
☒ 2. dusted
☒ 3. pursed
☒ 4. dirt

Question ID : 630680162910

Option 1 ID : 630680630868

Option 2 ID : 630680630871

Option 3 ID : 630680630870

Option 4 ID : 630680630869

Status : Answered

Chosen Option : 3

Comprehension:

In the following passage, some words have been deleted. Read the passage carefully and select the most appropriate option to fill in each blank.

(1) _____ a letter came to inform them that Raka's mother Tara had another breakdown and was in a nursing home in Geneva and that Raka's grandmother Asha, (2) _____ seen another grandchild safely into the world, was flying to Switzerland to be with her, Nanda Kaul (3) _____ her lips, (4) _____ the blue sheets of paper with that distasteful sprawl (5) _____ them, and hid them in her desk.

SubQuestion No : 24

Q.24 Select the most appropriate option to fill in blank number 4.

- Ans ☒ 1. tucked away
☒ 2. cleared up
☒ 3. folded up
☒ 4. hid away

Question ID : 630680162911

Option 1 ID : 630680630873

Option 2 ID : 630680630874

Option 3 ID : 630680630872

Option 4 ID : 630680630875

Status : Answered

Chosen Option : 3

Comprehension:

In the following passage, some words have been deleted. Read the passage carefully and select the most appropriate option to fill in each blank.

(1) _____ a letter came to inform them that Raka's mother Tara had another breakdown and was in a nursing home in Geneva and that Raka's grandmother Asha, (2) _____ seen another grandchild safely into the world, was flying to Switzerland to be with her, Nanda Kaul (3) _____ her lips, (4) _____ the blue sheets of paper with that distasteful sprawl (5) _____ them, and hid them in her desk.

SubQuestion No : 25

Q.25 Select the most appropriate option to fill in blank number 5.

- Ans ☒ 1. by
☒ 2. in
☒ 3. across
☒ 4. at

Question ID : **630680162912**

Option 1 ID : **630680630876**

Option 2 ID : **630680630879**

Option 3 ID : **630680630878**

Option 4 ID : **630680630877**

Status : **Answered**

Chosen Option : **4**

