

Combined Graduate Level Examination 2024 Tier I

Roll Number	
Candidate Name	
Venue Name	
Exam Date	13/09/2024
Exam Time	9:00 AM - 10:00 AM
Subject	Combined Graduate Level Examination Tier I

Section : General Intelligence and Reasoning

Q.1 Select the option that can replace the question mark (?) in the following series.
AH21, CJ18, EL15, GN12, ?

- Ans ☒ 1. HR11
☒ 2. IP9
☒ 3. J8
☒ 4. HQ10

Question ID : 630680416297
Option 1 ID : 6306801623952
Option 2 ID : 6306801623954
Option 3 ID : 6306801623951
Option 4 ID : 6306801623953
Status : Answered
Chosen Option : 2

Q.2 Which of the following interchanges of numbers (not digits) would make the given equation correct?

$$\frac{480 \div 0.3 \times 5 + 500}{190 + 9 \times 27 \div 1.6} = 2$$

- Ans ☒ 1. 5 and 9
☒ 2. 0.3 and 1.6
☒ 3. 27 and 480
☒ 4. 500 and 190

Question ID : 630680172659
Option 1 ID : 630680669057
Option 2 ID : 630680669058
Option 3 ID : 630680669059
Option 4 ID : 630680669056
Status : Marked For Review
Chosen Option : 3

Test Prime

**ALL EXAMS,
ONE SUBSCRIPTION**



70,000+
Mock Tests



**Personalised
Report Card**



**Unlimited
Re-Attempt**



600+
Exam Covered



**Previous Year
Papers**



500%
Refund



ATTEMPT FREE MOCK NOW

Q.3 Select the option that is related to the third word in the same way as the second word is related to the first word. (The words must be considered as meaningful English words and must not be related to each other based on the number of letters/number of consonants/vowels in the word)
Frivolous : Big :: Deride : ?

Ans ☒ 1. Encourage

☒ 2. Taunt

☒ 3. Jeer

☒ 4. Detest

Question ID : 630680199098

Option 1 ID : 630680772102

Option 2 ID : 630680772099

Option 3 ID : 630680772100

Option 4 ID : 630680772101

Status : Answered

Chosen Option : 4

Q.4 Select the number from among the given options that can replace the question mark (?) in the following series.
30, 20, ?, 60, 140

Ans ☒ 1. 30

☒ 2. 40

☒ 3. 35

☒ 4. 25

Question ID : 630680411852

Option 1 ID : 6306801606245

Option 2 ID : 6306801606246


Option 3 ID : 6306801606244

Option 4 ID : 6306801606243

Status : Not Answered

Chosen Option : --

Q.5 How many triangles are there in the given figure?



Ans ☒ 1. 7

☒ 2. 8

☒ 3. 6

☒ 4. 9

Question ID : 630680295187

Option 1 ID : 6306801148474

Option 2 ID : 6306801148475

Option 3 ID : 6306801148473

Option 4 ID : 6306801148472

Status : Answered

Chosen Option : 1

Q.6 Select the pair in which the numbers are related to each other in the same way as are the numbers in the given pairs.

(NOTE: Operations should be performed on the whole numbers, without breaking down the numbers into its constituent digits. E.g. 13 – Operations on 13 such as adding /deleting/multiplying etc. to 13 can be performed. Breaking down 13 into 1 and 3 and then performing mathematical operations on 1 and 3 is not allowed.)

3 : 25

4 : 62

Ans ☒ 1. 5 : 123

☐ 2. 6 : 218

☐ 3. 7 : 345

☐ 4. 9 : 731

Question ID : 630680313727

Option 1 ID : 6306801220757

Option 2 ID : 6306801220760

Option 3 ID : 6306801220758

Option 4 ID : 6306801220759

Status : Answered

Chosen Option : 1

Q.7 The position(s) of how many letters will remain unchanged if all the letters in the word 'GRIMACE' are arranged in English alphabetical order?

Ans ☒ 1. Zero

☐ 2. One

☐ 3. Two

☐ 4. Three

Question ID : 630680375921

Option 1 ID : 6306801464756

Option 2 ID : 6306801464755

Option 3 ID : 6306801464757

Option 4 ID : 6306801464758

Status : Answered

Chosen Option : 1

Q.8 Which figure should replace the question mark (?) if the following series were to be continued?

A	L	U	A	?
B L U E	A B E M	M A B T	U M T L	
M	U	L	B	

Ans

✗ 1.

B
M T L H
A

✗ 2.

U
A T M B
L

✓ 3.

B
L U M H
A

✗ 4.

U
B T M A
L

Question ID : 630680214466

Option 1 ID : 630680831896

Option 2 ID : 630680831898

Option 3 ID : 630680831895

Option 4 ID : 630680831897

Status : Answered

Chosen Option : 3

Q.9 'Ample' is related to 'Abundant' in the same way as 'Substantial' is related to

_____.

(The words must be considered as meaningful English words and must not be related to each other based on the number of letters/number of consonants/vowels in the word.)

Ans ✓ 1. Considerable

✗ 2. Venerable

✗ 3. Meager

✗ 4. Scarce

Question ID : 630680416711

Option 1 ID : 6306801625608

Option 2 ID : 6306801625607

Option 3 ID : 6306801625610

Option 4 ID : 6306801625609

Status : Answered

Chosen Option : 3

Q.10 In a certain code language, 'HUSBAND' is written as 'JVUDBPF' and 'SISTER' is written as 'UJUVFT'. How will 'BROTHER' be written in that language?

- Ans
- ☐ 1. DJTFPTV
 - ☐ 2. FJPVDTT
 - ☒ 3. DTPVJFT
 - ☐ 4. TFVJTPD

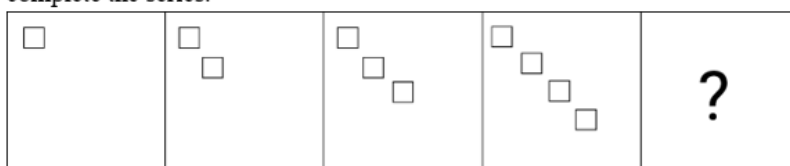
Question ID : 630680416128
Option 1 ID : 6306801623276
Option 2 ID : 6306801623277
Option 3 ID : 6306801623275
Option 4 ID : 6306801623278
Status : Answered
Chosen Option : 3

Q.11 In a certain code language,
 $X + Y$ means 'X is the father of Y',
 $X - Y$ means 'X is the brother of Y',
 $X \times Y$ means 'X is the sister of Y',
 $X \div Y$ means 'X is the wife of Y'.
Based on the above, how is D related to H if ' $D \times E \div F + G - H$ '?

- Ans
- ☐ 1. Father's sister
 - ☒ 2. Mother's sister
 - ☐ 3. Sister
 - ☐ 4. Mother's mother

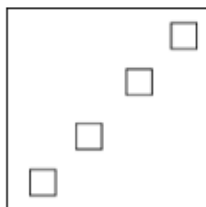
Question ID : 630680261889
Option 1 ID : 6306801017211
Option 2 ID : 6306801017214
Option 3 ID : 6306801017212
Option 4 ID : 6306801017213
Status : Answered
Chosen Option : 2

Q.12 Identify the figure given in the options which when put in place of ? will logically complete the series.

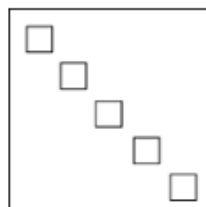


Ans

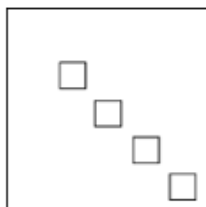
✗ 1.



✓ 2.



✗ 3.



✗ 4.



Question ID : 630680396460

Option 1 ID : 6306801545946

Option 2 ID : 6306801545943

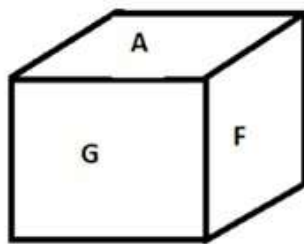
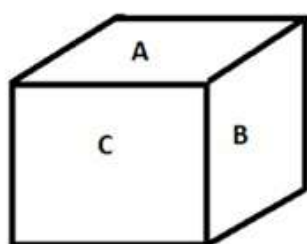
Option 3 ID : 6306801545944

Option 4 ID : 6306801545945

Status : Answered

Chosen Option : 2

Q.13 Six letters A, B, C, E, F and G are written on different faces of a dice. Two positions of this dice are shown in the figure below. Find the letter on the face opposite to A.



- Ans
- ☒ 1. F
 - ☒ 2. G
 - ☒ 3. E
 - ☒ 4. C

Question ID : 630680189142
 Option 1 ID : 630680733379
 Option 2 ID : 630680733378
 Option 3 ID : 630680733380
 Option 4 ID : 630680733377
 Status : Answered
 Chosen Option : 3

Q.14 Select the option that represents the letters that when sequentially placed from left to right in the blanks below will complete the letter series.

_ X _ F _ _ _ X T _ X _

- Ans
- ☒ 1. XTTFXFX
 - ☒ 2. FTXTFFT
 - ☒ 3. XFTTXFX
 - ☒ 4. FXXTFXT

Question ID : 630680262379
 Option 1 ID : 6306801019158
 Option 2 ID : 6306801019155
 Option 3 ID : 6306801019157
 Option 4 ID : 6306801019156
 Status : Answered
 Chosen Option : 2

Q.15 In a certain code language, 'mountain stand tall' is coded as '33 66 44'; 'rocky is tall' is coded as '44 55 11' and 'rocky is mountain' is coded as '33 55 11'. How is 'stand' coded in that language?

- Ans
- ☒ 1. 33
 - ☒ 2. 11
 - ☒ 3. 44
 - ☒ 4. 66

Question ID : 630680189118
 Option 1 ID : 630680733282
 Option 2 ID : 630680733284
 Option 3 ID : 630680733281
 Option 4 ID : 630680733283
 Status : Answered
 Chosen Option : 4

Q.16 Three of the following numbers are alike in a certain way and one is different. Pick the odd one out.
(NOTE : Operations should be performed on the whole numbers, without breaking down the numbers into its constituent digits. E.g. 13 – Operations on 13 such as adding /deleting /multiplying etc., to 13 can be performed. Breaking down 13 into 1 and 3 and then performing mathematical operations on 1 and 3 is not allowed.)

- Ans ☒ 1. $31 - 5 = 160$
☒ 2. $13 - 8 = 109$
☒ 3. $21 - 4 = 89$
☒ 4. $27 - 9 = 243$

Question ID : 630680389587
Option 1 ID : 6306801518807
Option 2 ID : 6306801518806
Option 3 ID : 6306801518808
Option 4 ID : 6306801518809
Status : Answered
Chosen Option : 4

Q.17 Select the option that represents the letters that, when placed from left to right in the blanks below, will complete the letter series.
D _ F D _ F _ F _ D _ F

- Ans ☒ 1. D F D D F
☒ 2. D F F D D
☒ 3. F F D F F
☒ 4. F D D F F

Question ID : 630680113686
Option 1 ID : 630680440281
Option 2 ID : 630680440280
Option 3 ID : 630680440279
Option 4 ID : 630680440278
Status : Answered
Chosen Option : 3

Q.18 Four letter-clusters have been given, out of which three are alike in some manner and one is different. Select the letter-cluster that is different.
Note: The odd one out is not based on the number of consonants/vowels or their position in the letter cluster.

- Ans ☒ 1. NMI
☒ 2. LKF
☒ 3. YXT
☒ 4. SRN

Question ID : 63068083229
Option 1 ID : 630680322776
Option 2 ID : 630680322779
Option 3 ID : 630680322777
Option 4 ID : 630680322778
Status : Answered
Chosen Option : 2

Q.19 What will come in the place of the question mark (?) in the following equation, if '+' and '-' are interchanged and 'x' and '÷' are interchanged?
 $315 \times 15 - 93 + 16 \div 7 = ?$

- Ans
- ☐ 1. 4
 - ☐ 2. 8
 - ☒ 3. 2
 - ☐ 4. 12

Question ID : 630680336422
 Option 1 ID : 6306801308410
 Option 2 ID : 6306801308411
 Option 3 ID : 6306801308412
 Option 4 ID : 6306801308409
 Status : Answered
 Chosen Option : 3

Q.20 Select the set in which the numbers are related in the same way as are the numbers of the following sets.

(NOTE: Operations should be performed on the whole numbers, without breaking down the numbers into its constituent digits. E.g. 13 – Operations on 13 such as adding /deleting /multiplying etc. to 13 can be performed. Breaking down 13 into 1 and 3 and then performing mathematical operations on 1 and 3 is not allowed.)
 (27, 405, 3)
 (23, 690, 6)

- Ans
- ☐ 1. (14, 364, 7)
 - ☐ 2. (16, 448, 7)
 - ☐ 3. (22, 616, 7)
 - ☒ 4. (24, 600, 5)

Question ID : 630680336442
 Option 1 ID : 6306801308490
 Option 2 ID : 6306801308489
 Option 3 ID : 6306801308492
 Option 4 ID : 6306801308491
 Status : Answered
 Chosen Option : 4

Q.21 Select the set in which the numbers are related in the same way as are the numbers of the following set.

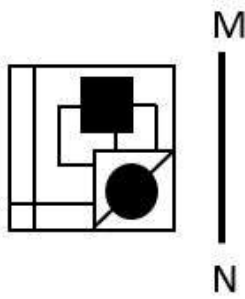
$7 - 14 - 23$
 $4 - 11 - 20$

NOTE: Operations should be performed on the whole numbers, without breaking down the numbers into its constituent digits. E.g. 13 – Operations on 13 such as adding/subtracting/multiplying etc. to 13 can be performed. Breaking down 13 into 1 and 3 and then performing mathematical operations on 1 and 3 is not allowed)

- Ans
- ☐ 1. $7 - 15 - 22$
 - ☒ 2. $5 - 12 - 21$
 - ☐ 3. $9 - 12 - 22$
 - ☐ 4. $15 - 30 - 20$

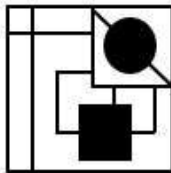
Question ID : 630680313545
 Option 1 ID : 6306801220046
 Option 2 ID : 6306801220045
 Option 3 ID : 6306801220047
 Option 4 ID : 6306801220048
 Status : Answered
 Chosen Option : 2

Q.22 Select the correct mirror image of the given figure when the mirror is placed at MN as shown.

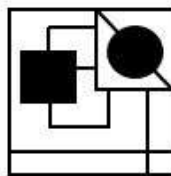


Ans

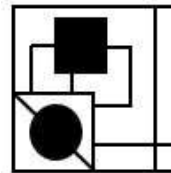
✗ 1.



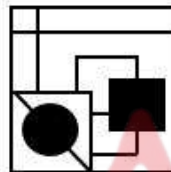
✗ 2.



✓ 3.



✗ 4.



Question ID : 630680306828

Option 1 ID : 6306801193604

Option 2 ID : 6306801193601

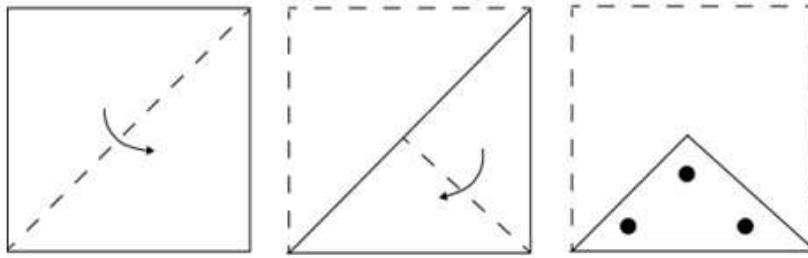
Option 3 ID : 6306801193603

Option 4 ID : 6306801193602

Status : Answered


Chosen Option : 3

Q.23 A square sheet of paper is folded along the dotted line successively along the directions shown and is then punched in the last as shown. How would the paper look when unfolded?




Ans

✗ 1.



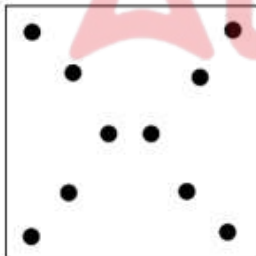
✗ 2.



✓ 3.



✗ 4.



Question ID : 630680324725

Option 1 ID : 6306801263299

Option 2 ID : 6306801263300

Option 3 ID : 6306801263298

Option 4 ID : 6306801263297

Status : Answered

Chosen Option : 3

Q.24 Which of the following terms will replace the question mark (?) in the given series?
KES, MIQ, PMN, TQJ, YUE, ?

Ans ☒ 1. EYY

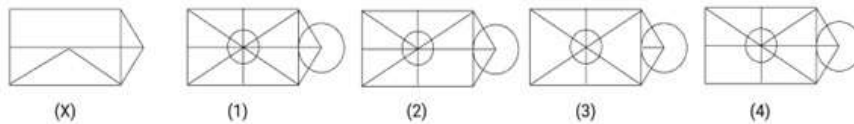
☒ 2. EXY

☒ 3. EXZ

☒ 4. FYX

Question ID : 630680417052
Option 1 ID : 6306801626972
Option 2 ID : 6306801626973
Option 3 ID : 6306801626971
Option 4 ID : 6306801626974
Status : Answered
Chosen Option : 1

Q.25 Figure X is followed by four figures numbered (1), (2), (3), (4). Identify the figure among the four in which figure X is embedded (i.e. contains figure X in the same form).



Ans ☒ 1. 3

☒ 2. 4

☒ 3. 2

☒ 4. 1

Question ID : 630680388183
Option 1 ID : 6306801513296
Option 2 ID : 6306801513297
Option 3 ID : 6306801513295
Option 4 ID : 6306801513294
Status : Answered
Chosen Option : 4

Section : General Awareness

Q.1 Which team won the T20 cricket event, Syed Mushtaq Ali Trophy 2022-2023?

Ans ☒ 1. Vidarbha

☒ 2. Himanchal Pradesh

☒ 3. Mumbai

☒ 4. Punjab

Question ID : 630680510761
Option 1 ID : 6306801996177
Option 2 ID : 6306801996175
Option 3 ID : 6306801996176
Option 4 ID : 6306801996174
Status : Answered
Chosen Option : 1

Q.2 According to the Census of India 2011, which group of Union Territories recorded the highest sex ratio?

- Ans** ☒ 1. Chandigarh, Puducherry, Lakshadweep
☒ 2. Puducherry, Lakshadweep, Andaman and Nicobar Islands
☒ 3. Puducherry, Delhi, Andaman and Nicobar Islands
☒ 4. Chandigarh, Puducherry, Delhi

Question ID : 630680209243
Option 1 ID : 630680811189
Option 2 ID : 630680811188
Option 3 ID : 630680811187
Option 4 ID : 630680811190
Status : Answered
Chosen Option : 3

Q.3 Match the sports in List I with the sportsperson in List II who were in news for their sports achievement in 2022:

LIST I- Sports	LIST II-Sports man
A Lakshya Sen	i Boxing
B Rameshbabu Pragganandhaa	ii Badminton
C Nikhat Zareen	iii Shooting
D Rudrankksh Patil	iv Chess

- Ans** ☒ 1. A-i, B-iv, C-ii, D-iii
☒ 2. A-ii, B-iv, C-i, D-iii
☒ 3. A-iv, B-ii, C-i, D-iii
☒ 4. A-iii, B-iv, C-i, D-ii

Question ID : 630680166709
Option 1 ID : 630680645749
Option 2 ID : 630680645750
Option 3 ID : 630680645751
Option 4 ID : 630680645748
Status : Answered
Chosen Option : 2

Q.4 Which Indian singer wrote 'Raag Sarita'?

- Ans** ☒ 1. Balasaheb Poonchwale
☒ 2. Kumar Gandharva
☒ 3. Kesarbai Kerkar
☒ 4. Chintaman Raghunath Vyas

Question ID : 630680415783
Option 1 ID : 6306801621877
Option 2 ID : 6306801621876
Option 3 ID : 6306801621878
Option 4 ID : 6306801621875
Status : Not Answered
Chosen Option : --

Q.5 Which of the following features of the Indian Constitution was borrowed from Irish Constitution?

- Ans** ☒ 1. Directive Principles of State Policy
☒ 2. Fundamental Rights
☒ 3. Rule of Law
☒ 4. Concurrent List

Question ID : 630680329436
 Option 1 ID : 6306801281488
 Option 2 ID : 6306801281486
 Option 3 ID : 6306801281485
 Option 4 ID : 6306801281487
 Status : Answered
 Chosen Option : 1

Q.6 Which state government honoured Vani Jairam with the MS Subbulakshmi Award for 2019?

- Ans** ☒ 1. Odissa
☒ 2. Karnataka
☒ 3. Tamil Nadu
☒ 4. Maharashtra

Question ID : 630680511803
 Option 1 ID : 6306802000185
 Option 2 ID : 6306802000184
 Option 3 ID : 6306802000183
 Option 4 ID : 6306802000182
 Status : Answered
 Chosen Option : 3

Q.7 Vindhyashakti was the founder of which of the following dynasties?

- Ans** ☒ 1. Pallava
☒ 2. Maukhari
☒ 3. Chalukya
☒ 4. Vakataka

Question ID : 630680412476
 Option 1 ID : 6306801608730
 Option 2 ID : 6306801608727
 Option 3 ID : 6306801608728
 Option 4 ID : 6306801608729
 Status : Answered
 Chosen Option : 4

Q.8 Which of the following is a man-made ecosystem?

- Ans** ☒ 1. Forest
☒ 2. Aquarium
☒ 3. Grassland
☒ 4. Dessert

Question ID : 63068099099
 Option 1 ID : 630680385102
 Option 2 ID : 630680385101
 Option 3 ID : 630680385100
 Option 4 ID : 630680385103
 Status : Answered
 Chosen Option : 2

Q.9 Which of the following are the two basic categories of an ecosystem?

- Ans
- ☐ 1. Forest and Rivers
 - ☐ 2. Forest and Aquatic
 - ☐ 3. Lakes and Ponds
 - ☒ 4. Terrestrial and Aquatic

Question ID : 630680314148
Option 1 ID : 6306801222398
Option 2 ID : 6306801222399
Option 3 ID : 6306801222397
Option 4 ID : 6306801222400
Status : Not Answered
Chosen Option : --

Q.10 Which of the following statements is correct about the composition of the agriculture sector and employment in GDP post-independence?

- Ans
- ☐ 1. The proportion of both the agriculture sector and employment in GDP has declined significantly.
 - ☐ 2. The proportion of employment has declined significantly but not the share of the agriculture sector in GDP.
 - ☐ 3. The proportion of both the agriculture sector and employment in GDP has increased significantly.
 - ☒ 4. The proportion of GDP contributed by the agricultural sector declined significantly but not the employment depending on the agriculture sector.

Question ID : 630680410854
Option 1 ID : 6306801602174
Option 2 ID : 6306801602173
Option 3 ID : 6306801602172
Option 4 ID : 6306801602171
Status : Answered
Chosen Option : 4

Q.11 Who among the following famous Indian women cricketers announced retirement in June 2022?

- Ans
- ☐ 1. Smriti Mandhana
 - ☒ 2. Mithali Raj
 - ☐ 3. Anjum Chopra
 - ☐ 4. Jhulan Goswami

Question ID : 630680310843
Option 1 ID : 6306801209503
Option 2 ID : 6306801209502
Option 3 ID : 6306801209504
Option 4 ID : 6306801209501
Status : Not Answered
Chosen Option : --

Q.12 Which region in India receives less rainfall in summer, but heavy rainfall in winter season due to the retreating north easterly winds?

- Ans ☒ 1. Southern coastal region
☒ 2. Eastern coastal region
☒ 3. Western coastal region
☒ 4. Northern coastal region

Question ID : 63068094176
Option 1 ID : 630680365401
Option 2 ID : 630680365399
Option 3 ID : 630680365400
Option 4 ID : 630680365402
Status : Answered
Chosen Option : 1

Q.13 Sundari trees are found in which type of forests in India?

- Ans ☒ 1. Tropical evergreen forests
☒ 2. Tropical deciduous forests
☒ 3. Mangrove forests
☒ 4. The thorn forests and scrubs

Question ID : 630680362628
Option 1 ID : 6306801412267
Option 2 ID : 6306801412268
Option 3 ID : 6306801412265
Option 4 ID : 6306801412266
Status : Not Answered
Chosen Option : --

Q.14 The Supreme Court of India comprises the Chief Justice and not more than _____ other Judges appointed by the President of India.

- Ans ☒ 1. 33
☒ 2. 38
☒ 3. 35
☒ 4. 37

Question ID : 630680329464
Option 1 ID : 6306801281597
Option 2 ID : 6306801281600
Option 3 ID : 6306801281598
Option 4 ID : 6306801281599
Status : Answered
Chosen Option : 1

Q.15 Who won the paralympic bronze medal in archery for India at Tokyo in 2020?

- Ans ☒ 1. Deepika Kumari
☒ 2. Harvinder Singh
☒ 3. Atanu Das
☒ 4. Pravin Jadhav

Question ID : 630680510822
Option 1 ID : 6306801996418
Option 2 ID : 6306801996419
Option 3 ID : 6306801996420
Option 4 ID : 6306801996421
Status : Not Answered
Chosen Option : --

Q.16 The central bank of India or Reserve Bank of India was created before Independence, in the year 1934. The recommendation to create a central bank was made by a commission called:

- Ans**
- ☒ 1. Dr. Raja Chelliah Committee
 - ☒ 2. Kothari Commission
 - ☒ 3. Hilton Young Commission
 - ☒ 4. Narasimham Committee

Question ID : 630680195224
 Option 1 ID : 630680757386
 Option 2 ID : 630680757388
 Option 3 ID : 630680757387
 Option 4 ID : 630680757385
 Status : Answered
 Chosen Option : 3

Q.17 Ranjana Gauhar was awarded the Padma Shri Award (2003) for her contribution to which of the following Indian dance forms?

- Ans**
- ☒ 1. Sattriya
 - ☒ 2. Manipuri
 - ☒ 3. Kuchipudi
 - ☒ 4. Odissi

Question ID : 630680409342
 Option 1 ID : 6306801596199
 Option 2 ID : 6306801596200
 Option 3 ID : 6306801596198
 Option 4 ID : 6306801596197
 Status : Not Answered
 Chosen Option : --

Q.18 Which of the following two quantities have the same dimensions?

- Ans**
- ☒ 1. Power and radius of circular motion
 - ☒ 2. Work and torque
 - ☒ 3. Power and moment of inertia
 - ☒ 4. Work and angular displacement

Question ID : 630680210471
 Option 1 ID : 630680816046
 Option 2 ID : 630680816043
 Option 3 ID : 630680816045
 Option 4 ID : 630680816044
 Status : Not Answered
 Chosen Option : --

Q.19 Which polyatomic ionic compound is a white, crystalline powder used in fire extinguishers and to neutralise acids and bases?

- Ans ☒ 1. Sodium Bicarbonate
☐ 2. Sodium Thiosulphate
☐ 3. Sodium Bisulphite
☐ 4. Sodium Chromate

Question ID : 630680295294
Option 1 ID : 6306801148901
Option 2 ID : 6306801148903
Option 3 ID : 6306801148900
Option 4 ID : 6306801148902
Status : Not Answered
Chosen Option : --

Q.20 Which port is developed as a satellite port?

- Ans ☐ 1. Mormugao
☐ 2. New Mangalore
☒ 3. Jawaharlal Nehru
☐ 4. Haldia

Question ID : 63068086734
Option 1 ID : 630680336347
Option 2 ID : 630680336348
Option 3 ID : 630680336346
Option 4 ID : 630680336345
Status : Not Answered
Chosen Option : --

Q.21 The Doctrine of Lapse was an annexation policy devised by which of the following Governor-Generals of India?

- Ans ☐ 1. Lord Mayo
☒ 2. Lord Dalhousie
☐ 3. Lord Wellesley
☐ 4. Lord Canning

Question ID : 630680511510
Option 1 ID : 6306801999165
Option 2 ID : 6306801999163
Option 3 ID : 6306801999164
Option 4 ID : 6306801999162
Status : Answered
Chosen Option : 2

Q.22 Chhath Puja is the main festival of which state?

- Ans ☐ 1. Assam
☒ 2. Bihar
☐ 3. Tamil Nadu
☐ 4. Karnataka

Question ID : 630680158773
Option 1 ID : 630680614584
Option 2 ID : 630680614585
Option 3 ID : 630680614587
Option 4 ID : 630680614586
Status : Answered
Chosen Option : 2

Q.23 For which of the following states was the Constitution (Scheduled Castes and Scheduled Tribes) Orders (Second Amendment) Bill, 2022, introduced in the Parliament?

- Ans
- ☒ 1. Bihar
 - ☒ 2. Uttar Pradesh
 - ☒ 3. Odisha
 - ☒ 4. Madhya Pradesh

Question ID : 630680303638
Option 1 ID : 6306801181122
Option 2 ID : 6306801181121
Option 3 ID : 6306801181123
Option 4 ID : 6306801181124
Status : Answered
Chosen Option : 2

Q.24 Who among the following is the hero of the Sanskrit historical poem, the 'Ramacharita' written by Sandhyakar Nandi?

- Ans
- ☒ 1. Ramapala
 - ☒ 2. Dharmapala
 - ☒ 3. Devapala
 - ☒ 4. Gopala

Question ID : 630680412433
Option 1 ID : 6306801608558
Option 2 ID : 6306801608557
Option 3 ID : 6306801608555
Option 4 ID : 6306801608556
Status : Not Answered
Chosen Option : --

Q.25 In which of the following areas did the Uprising of Khurda in 1817 take place?

- Ans
- ☒ 1. Bengal
 - ☒ 2. Madras
 - ☒ 3. United Province
 - ☒ 4. Odisha

Question ID : 630680412324
Option 1 ID : 6306801608119
Option 2 ID : 6306801608121
Option 3 ID : 6306801608122
Option 4 ID : 6306801608120
Status : Not Answered
Chosen Option : --

Section : Quantitative Aptitude

Q.1 The given table shows the marks obtained by a student in class 9.

Subjects	Marks (out of 100)
Social Science	93
Science	90
Hindi	90
English	95
Mathematics	78

What is the percentage of marks obtained by the student?

- Ans
- ☐ 1. 88%
 - ☐ 2. 90%
 - ☐ 3. 88.8%
 - ☒ 4. 89.2%

Question ID : 630680428139
Option 1 ID : 6306801670603
Option 2 ID : 6306801670601
Option 3 ID : 6306801670602
Option 4 ID : 6306801670600
Status : Answered
Chosen Option : 4

Q.2 An article is sold at a profit of 250%. What is the ratio of its cost price to selling price?

- Ans
- ☐ 1. 7 : 2
 - ☐ 2. 2 : 5
 - ☐ 3. 5 : 2
 - ☒ 4. 2 : 7

Question ID : 630680428985
Option 1 ID : 6306801673986
Option 2 ID : 6306801673985
Option 3 ID : 6306801673984
Option 4 ID : 6306801673987
Status : Answered
Chosen Option : 4

Q.3 From a circle of radius 7 units, an arc length is cut by a chord of length 7 units. What is the arc length of the smaller portion (in units)?

- Ans
- ☐ 1. $\frac{7}{6}\pi$
 - ☐ 2. $\frac{7}{4}\pi$
 - ☐ 3. $\frac{8}{3}\pi$
 - ☒ 4. $\frac{7}{3}\pi$

Question ID : 630680285498
Option 1 ID : 6306801109961
Option 2 ID : 6306801109960
Option 3 ID : 6306801109962
Option 4 ID : 6306801109959
Status : Answered
Chosen Option : 4

Q.4 If $\Delta PQR \cong \Delta ABC$, $AB = 6$ cm, $\angle B = 50^\circ$ and $\angle A = 70^\circ$, then which of the following is true?

- Ans
- ☒ 1. $QR = 6$ cm, $\angle R = 60^\circ$
 - ☒ 2. $QR = 6$ cm, $\angle Q = 60^\circ$
 - ☒ 3. $QP = 6$ cm, $\angle P = 60^\circ$
 - ☒ 4. $QP = 6$ cm, $\angle R = 60^\circ$

Question ID : 630680526454
 Option 1 ID : 6306802057883
 Option 2 ID : 6306802057884
 Option 3 ID : 6306802057882
 Option 4 ID : 6306802057885
 Status : Answered
 Chosen Option : 4

Q.5 A shopkeeper mixes two types of rice costing ₹250/5 kg and ₹280/5 kg in the ratio 7 : 8. Find the net cost of the resultant mixture (per kg).

- Ans
- ☒ 1. ₹53.20
 - ☒ 2. ₹32.50
 - ☒ 3. ₹52.30
 - ☒ 4. ₹25.30

Question ID : 630680395047
 Option 1 ID : 6306801540459
 Option 2 ID : 6306801540456
 Option 3 ID : 6306801540458
 Option 4 ID : 6306801540457
 Status : Answered
 Chosen Option : 1

Q.6 Simplify the following expression.

$$\frac{(x - y)^3 + (y - z)^3 + (z - x)^3}{(x - y)(y - z)(z - x)}$$

- Ans
- ☒ 1. 3
 - ☒ 2. 2
 - ☒ 3. 1
 - ☒ 4. 0

Question ID : 630680413537
 Option 1 ID : 6306801612975
 Option 2 ID : 6306801612974
 Option 3 ID : 6306801612973
 Option 4 ID : 6306801612972
 Status : Answered
 Chosen Option : 4

Q.7 There are two pipes used to fill a tank and when operated together, they can fill the tank in 20 minutes. If one pipe can fill the tank two and a half times as quickly as the other, then the faster pipe alone can fill the tank in:

- Ans
- ☐ 1. 34 min
 - ☐ 2. 30 min
 - ☐ 3. 32 min
 - ☒ 4. 28 min

Question ID : 630680493820
 Option 1 ID : 6306801929020
 Option 2 ID : 6306801929018
 Option 3 ID : 6306801929019
 Option 4 ID : 6306801929017
 Status : Answered
 Chosen Option : 4

Q.8 If $\sin 31^\circ = \alpha$, then the value of $\cot 59^\circ$ is:

- Ans
- ☒ 1. $\frac{\alpha}{\sqrt{1-\alpha^2}}$
 - ☐ 2. $\frac{\alpha}{\sqrt{1+\alpha^2}}$
 - ☐ 3. $\frac{\alpha}{\sqrt{1+\alpha^2}}$
 - ☐ 4. $\frac{\alpha}{\sqrt{1-\alpha^2}}$

Question ID : 630680397720
 Option 1 ID : 6306801550876
 Option 2 ID : 6306801550875
 Option 3 ID : 6306801550878
 Option 4 ID : 6306801550877
 Status : Answered
 Chosen Option : 1

Q.9 If $\frac{1}{1-\sin \theta} + \frac{1}{1+\sin \theta} = 4 \sec \theta$, ($0 < \theta < 90^\circ$), then the value of $(\cot \theta + \operatorname{cosec} \theta)$ is:

- Ans
- ☐ 1. $\sqrt{6}$
 - ☐ 2. $\sqrt{5}$
 - ☐ 3. $\sqrt{2}$
 - ☒ 4. $\sqrt{3}$

Question ID : 630680387769
 Option 1 ID : 6306801511710
 Option 2 ID : 6306801511711
 Option 3 ID : 6306801511709
 Option 4 ID : 6306801511708
 Status : Answered
 Chosen Option : 4

Q.10 At a cafe, Rama bought drinks for her 7 friends at ₹240. Some of them wanted coffee, while others wanted black tea. A regular cup of coffee cost ₹40 and a regular cup of black tea cost ₹ 30. How many cups of tea did she purchase?

- Ans
- ☒ 1. 5
 - ☒ 2. 6
 - ☒ 3. 3
 - ☒ 4. 4

Question ID : 630680387364
 Option 1 ID : 6306801510145
 Option 2 ID : 6306801510143
 Option 3 ID : 6306801510142
 Option 4 ID : 6306801510144
 Status : Answered
 Chosen Option : 4

Q.11 If $p(\sqrt{3} + \cot 30^\circ) = \tan^3 60^\circ - 2\sin 60^\circ$, then the value of p is:

- Ans
- ☒ 1. $\sqrt{3}$
 - ☒ 2. 1
 - ☒ 3. -1
 - ☒ 4. $2\sqrt{3}$

Question ID : 630680526457
 Option 1 ID : 6306802057896
 Option 2 ID : 6306802057894
 Option 3 ID : 6306802057895
 Option 4 ID : 6306802057897
 Status : Answered
 Chosen Option : 2

Q.12 In an election between R and S, R gets 110% of the votes of S and beats S by 770 votes. If there were no invalid votes, then the total number of votes polled is:

- Ans
- ☒ 1. 16170
 - ☒ 2. 17160
 - ☒ 3. 17610
 - ☒ 4. 16710

Question ID : 630680428055
 Option 1 ID : 6306801670265
 Option 2 ID : 6306801670264
 Option 3 ID : 6306801670266
 Option 4 ID : 6306801670267
 Status : Answered
 Chosen Option : 1

Q.13 A and B are centres of two circles with radii 2 cm and 1 cm respectively, where $AB = 5$ cm. C is the centre of another circle of radius r cm, which touches each of the above two circles externally. If $\angle ACB = 90^\circ$, then the value of r is:

Ans ☒ 1. 2 cm

☐ 2. 4 cm

☐ 3. 3 cm

☐ 4. 5 cm

Question ID : 630680194642

Option 1 ID : 630680755095

Option 2 ID : 630680755094

Option 3 ID : 630680755093

Option 4 ID : 630680755096

Status : Answered

Chosen Option : 1

Q.14 If the successive discount by 10%,15%, then the single equivalent rate of discount is:

Ans ☐ 1. 24.2%

☐ 2. 43.4%

☒ 3. 23.5%

☐ 4. 32.3%

Question ID : 630680150543

Option 1 ID : 630680582288

Option 2 ID : 630680582291

Option 3 ID : 630680582289

Option 4 ID : 630680582290

Status : Answered

Chosen Option : 3

Q.15 Simplify the following expression.

$[(70 - 60 \div 2 \text{ of } 6) + (20 - 10) \div 10] + 600 \div 25 \text{ of } (2 \times 3) \times (2 \text{ of } 3) + 2 \text{ of } 5.$

Ans ☒ 1. 100

☐ 2. 99

☐ 3. 90

☐ 4. 110

Question ID : 630680381252

Option 1 ID : 6306801485962

Option 2 ID : 6306801485959

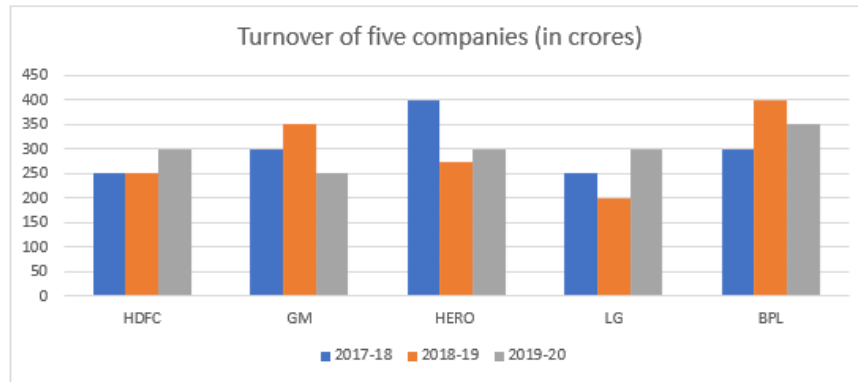
Option 3 ID : 6306801485961

Option 4 ID : 6306801485960

Status : Answered

Chosen Option : 1

Q.16 The given bar graph shows the turnover of five companies (in crores).



What is the difference between the average sales turnover of all the companies put together between the years 2018-2019 and 2019-2020?

- Ans ☒ 1. ₹5 crore
- ☐ 2. ₹2 crore
- ☐ 3. ₹3.5 crore
- ☐ 4. ₹6.5 crore

Question ID : 630680428006
 Option 1 ID : 6306801670070
 Option 2 ID : 6306801670068
 Option 3 ID : 6306801670069
 Option 4 ID : 6306801670071
 Status : Not Answered
 Chosen Option : --

Q.17 If 321y72 is a multiple of 6, where y is a digit, what is the least value of y?

- Ans ☒ 1. 0
- ☐ 2. 7
- ☐ 3. 2
- ☐ 4. 3

Question ID : 630680108513
 Option 1 ID : 630680421013
 Option 2 ID : 630680421015
 Option 3 ID : 630680421014
 Option 4 ID : 630680421012
 Status : Answered
 Chosen Option : 1

Q.18 If $A:B = 6 : 8$ and $B:C = 5 : 10$, then $A:B:C$ is:

- Ans ☐ 1. 1:2:4
- ☒ 2. 3:4:8
- ☐ 3. 4:3:2
- ☐ 4. 1:3:4

Question ID : 630680915057
 Option 1 ID : 6306803585274
 Option 2 ID : 6306803585272
 Option 3 ID : 6306803585275
 Option 4 ID : 6306803585273
 Status : Answered
 Chosen Option : 2

Q.19 The following table shows the sale (in lakh rupees) of six commodities in a provision store from August 2012 to October 2012.

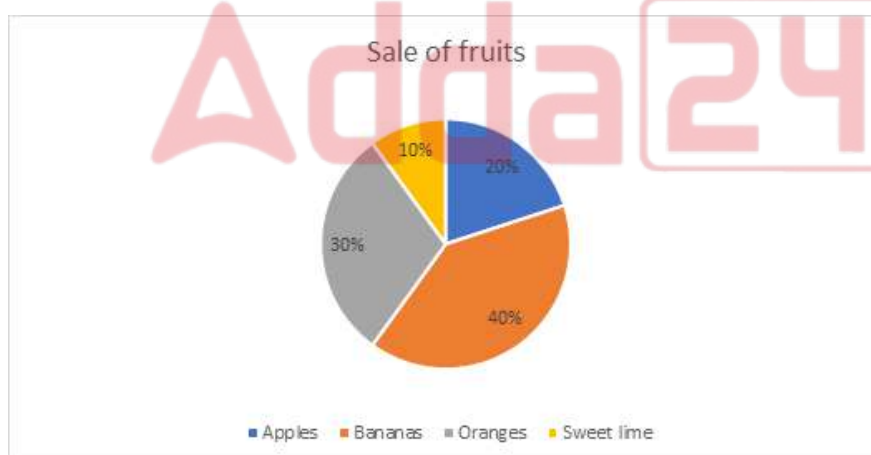
Month/Commodity	Dry Fruits	Tea	Pulses	Sugar	Flour	Rice
August	27	24	45	48	55	42
September	32	15	34	42	33	23
October	25	30	42	47	49	27

The total combined sale of dry fruits, sugar and rice for the period from August 2012 to October 2012 is what percentage (rounded off to the nearest whole number) of the total combined sale of tea, pulses and flour?

- Ans
- ☒ 1. 94%
 - ☒ 2. 98%
 - ☒ 3. 96%
 - ☒ 4. 95%

Question ID : 630680523727
Option 1 ID : 6306802047061
Option 2 ID : 6306802047062
Option 3 ID : 6306802047060
Option 4 ID : 6306802047059
Status : Answered
Chosen Option : 2

Q.20 The pie chart below shows the per cent sale of different fruits in a day for a shop. If the total number of fruits sold by a fruit seller in a day is 1200, what is the combined central angle in the pie chart for oranges and apples?



- Ans
- ☒ 1. 90°
 - ☒ 2. 180°
 - ☒ 3. 220°
 - ☒ 4. 160°

Question ID : 630680405107
Option 1 ID : 6306801579792
Option 2 ID : 6306801579791
Option 3 ID : 6306801579789
Option 4 ID : 6306801579790
Status : Answered
Chosen Option : 2

Q.21 The solution of the following equations is:

$$5x + 4y - 8z = 1$$

$$7x - 9y + z = -1$$

$$2x + 3y - 4z = 1$$

Ans ☒ 1. $x = 1, y = 1, z = -1$

☒ 2. $x = 1, y = 1, z = 1$

☒ 3. $x = -1, y = 1, z = 1$

☒ 4. $x = 1, y = -1, z = 1$

Question ID : 630680285457

Option 1 ID : 6306801109796

Option 2 ID : 6306801109798

Option 3 ID : 6306801109795

Option 4 ID : 6306801109797

Status : Answered

Chosen Option : 2

Q.22 A boat can travel 78 km upstream and back in a total of 32 hours. It can travel 15 km upstream and 52 km downstream in a total of 9 hours. How much distance will the boat cover in 12 hours in still water?

Ans ☒ 1. 92 km

☒ 2. 104 km

☒ 3. 96 km

☒ 4. 100 km

Question ID : 630680428338

Option 1 ID : 6306801671397

Option 2 ID : 6306801671396

Option 3 ID : 6306801671398

Option 4 ID : 6306801671399

Status : Answered

Chosen Option : 3

Q.23 Pranav borrows a sum of ₹6,23,305 at the rate of 10% per annum simple interest. At the end of the first year, he repays ₹16,390 towards return of principal amount borrowed. If Pranav clears all pending dues at the end of the second year, including interest payment that accrued during the first year, how much does he pay (in ₹) at the end of the second year?

Ans ☒ 1. 7,25,903

☒ 2. 7,29,937

☒ 3. 7,29,025

☒ 4. 7,38,700

Question ID : 630680809862

Option 1 ID : 6306803173029

Option 2 ID : 6306803173027

Option 3 ID : 6306803173028

Option 4 ID : 6306803173030

Status : Answered

Chosen Option : 4

Q.24 One-quarter of a circular pizza of radius 21 cm was removed from the whole pizza.
What is the perimeter (in cm) of the remaining pizza? (Use $\pi = \frac{22}{7}$)

- Ans
- ☐ 1. 99
 - ☐ 2. 128
 - ☒ 3. 141
 - ☐ 4. 131

Question ID : 630680397662
Option 1 ID : 6306801550572
Option 2 ID : 6306801550571
Option 3 ID : 6306801550569
Option 4 ID : 6306801550570
Status : Answered
Chosen Option : 1

Q.25 What is the height (in m) of a conical water tank having radius of 70 m and volume of 46,200 m³? (Take $\pi = \frac{22}{7}$)

- Ans
- ☐ 1. 27
 - ☐ 2. 54
 - ☐ 3. 18
 - ☒ 4. 9

Question ID : 630680421504
Option 1 ID : 6306801644480
Option 2 ID : 6306801644481
Option 3 ID : 6306801644482
Option 4 ID : 6306801644479
Status : Answered
Chosen Option : 4

Section : English Comprehension

Q.1 In the following sentence, four words have been underlined, out of which one word is MISSPELT. Select the option with the MISSPELT word.
In spite of the dilemma that preveiled during the discussion sessions, the committee remained committed to finding an amicable solution to the issue.

- Ans
- ☐ 1. dilemma
 - ☒ 2. preveiled
 - ☐ 3. amicable
 - ☐ 4. committee

Question ID : 630680409950
Option 1 ID : 6306801598629
Option 2 ID : 6306801598630
Option 3 ID : 6306801598632
Option 4 ID : 6306801598631
Status : Answered
Chosen Option : 2

Q.2 Select the most appropriate **ANTONYM** of the word in bold.
His mother never held a **grudge** against his father.

Ans ✓ 1. benevolence

✗ 2. malevolence

✗ 3. rancour

✗ 4. revulsion

Question ID : 630680319149

Option 1 ID : 6306801241501

Option 2 ID : 6306801241504

Option 3 ID : 6306801241503

Option 4 ID : 6306801241502

Status : Answered

Chosen Option : 1

Q.3 Select the most appropriate meaning of the given idiom.

A bad patch

Ans ✗ 1. A path that is untravelled

✗ 2. A dangerous road to walk on

✗ 3. A person who takes a difficult path

✓ 4. A period of time when a person faces lots of troubles

Question ID : 63068087181

Option 1 ID : 630680338116

Option 2 ID : 630680338114

Option 3 ID : 630680338115

Option 4 ID : 630680338113

Status : Answered

Chosen Option : 4

Q.4 Select the word which means the same as the group of words given.

A written statement made under oath

Ans ✗ 1. Statement

✗ 2. Testimony

✗ 3. Affirmation

✓ 4. Affidavit

Question ID : 630680414702

Option 1 ID : 6306801617554

Option 2 ID : 6306801617552

Option 3 ID : 6306801617553

Option 4 ID : 6306801617551

Status : Answered

Chosen Option : 4

Q.5 Select the most appropriate ANTONYM of the given word.
Barbarity

- Ans ☒ 1. Rivalry
☒ 2. Callous
☒ 3. Compassion
☒ 4. Compromise

Question ID : 630680192091
Option 1 ID : 630680744968
Option 2 ID : 630680744965
Option 3 ID : 630680744967
Option 4 ID : 630680744966
Status : Answered
Chosen Option : 3

Q.6 Select the INCORRECTLY spelt word.

- Ans ☒ 1. Reinforcement
☒ 2. Motivational
☒ 3. Opportunity
☒ 4. Atributes

Question ID : 630680378003
Option 1 ID : 6306801473074
Option 2 ID : 6306801473072
Option 3 ID : 6306801473073
Option 4 ID : 6306801473071
Status : Answered
Chosen Option : 4

Q.7 Select the most appropriate option that can substitute the underlined segment in the given sentence.

The team always anticipate a bowling friendly pitch on their easy victory in the T20 matches.

- Ans ☒ 1. pitch over their easy victory
☒ 2. pitch to their easy victory
☒ 3. pitch for their easy victory
☒ 4. pitch of their easy victory

Question ID : 630680147491
Option 1 ID : 630680570734
Option 2 ID : 630680570737
Option 3 ID : 630680570735
Option 4 ID : 630680570736
Status : Answered
Chosen Option : 3

Q.8 Select the option that expresses the given sentence in passive voice.
The team will announce the winner tomorrow.

- Ans** ☒ 1. The winner will be announced by the team tomorrow.
☒ 2. The winner will announce tomorrow by the team.
☒ 3. Tomorrow will be announced the winner by the team.
☒ 4. The team will announce tomorrow the winner.

Question ID : 630680415210
Option 1 ID : 6306801619590
Option 2 ID : 6306801619587
Option 3 ID : 6306801619589
Option 4 ID : 6306801619588
Status : Answered
Chosen Option : 1

Q.9 The following sentence has been divided into four segments. Identify the segment that contains an error.
Mr. Surya / have no interior / motive in offering / you support.

- Ans** ☒ 1. you support.
☒ 2. Mr. Surya
☒ 3. have no interior
☒ 4. motive in offering

Question ID : 630680206702
Option 1 ID : 630680801410
Option 2 ID : 630680801407
Option 3 ID : 630680801408
Option 4 ID : 630680801409
Status : Answered
Chosen Option : 3

Q.10 The following sentence has been split into four segments. Identify the segment that contains a grammatical error.
By the end of / this month, he / will been working / for five years.

- Ans** ☒ 1. will been working
☒ 2. By the end of
☒ 3. this month, he
☒ 4. for five years

Question ID : 630680514336
Option 1 ID : 6306802009971
Option 2 ID : 6306802009969
Option 3 ID : 6306802009970
Option 4 ID : 6306802009972
Status : Answered
Chosen Option : 1

Q.11 Select the most appropriate option to fill in the blank.

Kamal is not willing to purchase a house on the 12th floor of a sea-side apartment, as she is fearful of heights. She is suffering from _____.

- Ans
- ☐ 1. heliophobia
 - ☐ 2. sociophobia
 - ☐ 3. claustrophobia
 - ☒ 4. acrophobia

Question ID : 630680328429
Option 1 ID : 6306801277688
Option 2 ID : 6306801277686
Option 3 ID : 6306801277685
Option 4 ID : 6306801277687
Status : Answered
Chosen Option : 4

Q.12 Select the most appropriate ANTONYM of the underlined word in the given sentence.

An elephant is a large mammal.

- Ans
- ☐ 1. Bumper
 - ☐ 2. Gigantic
 - ☒ 3. Tiny
 - ☐ 4. Heroic

Question ID : 630680396412
Option 1 ID : 6306801545759
Option 2 ID : 6306801545757
Option 3 ID : 6306801545758
Option 4 ID : 6306801545756
Status : Answered
Chosen Option : 3

Q.13 Select the most appropriate ANTONYM of the given word.

Epitome

- Ans
- ☒ 1. Expansion
 - ☐ 2. Precise
 - ☐ 3. Exhort
 - ☐ 4. Lucid

Question ID : 630680517543
Option 1 ID : 6306802022570
Option 2 ID : 6306802022568
Option 3 ID : 6306802022569
Option 4 ID : 6306802022571
Status : Answered
Chosen Option : 4

Q.14 Select the option that can be used as a one-word substitute for the given group of words.
Cannot be corrected

Ans ✓ 1. Incurable

✗ 2. Illegible

✗ 3. Incredible

✗ 4. Ineligible

Question ID : 630680160080

Option 1 ID : 630680619707

Option 2 ID : 630680619705

Option 3 ID : 630680619704

Option 4 ID : 630680619706

Status : Answered

Chosen Option : 1

Q.15 Parts of a sentence are given below in jumbled order. Arrange the parts in the correct order to form a meaningful sentence.

A. Smoking in

B. Your youth stunts

C. The body and

D. Clouds the brain

Ans ✗ 1. DCBA

✗ 2. DBCA

✓ 3. ABCD

✗ 4. CABD

Question ID : 630680360809

Option 1 ID : 6306801405111

Option 2 ID : 6306801405112

Option 3 ID : 6306801405110

Option 4 ID : 6306801405109

Status : Answered

Chosen Option : 3

Q.16 Select the option that expresses the given sentence in passive voice.
Don't let Dylan fool you!

Ans ✗ 1. Do not ever be fooled by Dylan.

✗ 2. Do not be fool by Dylan.

✓ 3. Do not be fooled by Dylan.

✗ 4. Do not have been fooled by Dylan.

Question ID : 630680415274

Option 1 ID : 6306801619846

Option 2 ID : 6306801619844

Option 3 ID : 6306801619843

Option 4 ID : 6306801619845

Status : Answered

Chosen Option : 3

Q.17 Select the most appropriate option that can substitute the underlined segment in the given sentence. If no substitution is required, select 'No substitution'.
Satya is always great to his friends who helped him when he was in trouble.

Ans ☒ 1. grateful

☒ 2. no substitution

☒ 3. thanked

☒ 4. greatful

Question ID : 630680176607

Option 1 ID : 630680684649

Option 2 ID : 630680684648

Option 3 ID : 630680684651

Option 4 ID : 630680684650

Status : Answered

Chosen Option : 4

Q.18 Select the most appropriate ANTONYM of the word in bold to fill in the blank.
The modern work is deliberately _____ (ambiguous).

Ans ☒ 1. certain

☒ 2. dubious

☒ 3. vague

☒ 4. puzzling

Question ID : 630680295343

Option 1 ID : 6306801149097

Option 2 ID : 6306801149096

Option 3 ID : 6306801149099

Option 4 ID : 6306801149098

Status : Answered

Chosen Option : 1

Q.19 Select the most appropriate option to fill in the blank.

The homophone for the word 'there' is _____.

Ans ☒ 1. those

☒ 2. their

☒ 3. that

☒ 4. clear

Question ID : 630680129802

Option 1 ID : 630680502807

Option 2 ID : 630680502808

Option 3 ID : 630680502806

Option 4 ID : 630680502809

Status : Answered

Chosen Option : 2

Q.20 Select the most appropriate meaning of the given idiom.
Turned a deaf ear to

- Ans ☒ 1. Rebuked
☒ 2. Disregarded
☒ 3. By any means
☒ 4. At intervals

Question ID : 630680192299

Option 1 ID : 630680745797

Option 2 ID : 630680745798

Option 3 ID : 630680745800

Option 4 ID : 630680745799

Status : Answered

Chosen Option : 2

Comprehension:

In the following passage, some words have been deleted. Read the passage carefully and select the most appropriate option to fill in each blank.

Sleeping, dreaming and waking are three important (1)_____ for ordinary humans. But for those who have (2)_____ transcendental knowledge, all three are almost same and there is not much difference among these three. 'The world and life is a myth and it keeps on changing' (3)_____ Adi Shankaracharya, the greatest 'Advaita' preacher. Ramana Maharshi observed no difference between dreaming and waking states. What he said is that it is from one unreal world to another (4)_____ world. There is no difference between the images one sees when waking up and the images he/she sees during dreams. According to this great sage of the modern century, the first one is daydream and the second one is a night dream. The usual philosophers say that mind and body are the two elements and mind is the source of all diverse thoughts. In the waking up state, the mind is active with all tensions and dissatisfactions, so happiness is missing: during sleep as the mind is absent and so is the physical world, the real happiness (5)_____. It is said that deep sleep, where there is no feeling of body, mind and the world, is the natural state of human beings.

SubQuestion No : 21

Q.21 Select the most appropriate option to fill in blank number 1.

- Ans ☒ 1. angles
☒ 2. methods
☒ 3. problems
☒ 4. aspects

Question ID : 630680162882

Option 1 ID : 630680630766

Option 2 ID : 630680630767

Option 3 ID : 630680630765

Option 4 ID : 630680630764

Status : Answered

Chosen Option : 4

Comprehension:

In the following passage, some words have been deleted. Read the passage carefully and select the most appropriate option to fill in each blank.
Sleeping, dreaming and waking are three important (1)_____ for ordinary humans. But for those who have (2)_____ transcendental knowledge, all three are almost same and there is not much difference among these three. 'The world and life is a myth and it keeps on changing' (3)_____ Adi Shankaracharya, the greatest 'Advaita' preacher. Ramana Maharshi observed no difference between dreaming and waking states. What he said is that it is from one unreal world to another (4)_____ world. There is no difference between the images one sees when waking up and the images he/she sees during dreams. According to this great sage of the modern century, the first one is daydream and the second one is a night dream. The usual philosophers say that mind and body are the two elements and mind is the source of all diverse thoughts. In the waking up state, the mind is active with all tensions and dissatisfactions, so happiness is missing: during sleep as the mind is absent and so is the physical world, the real happiness (5)_____. It is said that deep sleep, where there is no feeling of body, mind and the world, is the natural state of human beings.

SubQuestion No : 22

Q.22 Select the most appropriate option to fill in blank number 2.

- Ans ☒ 1. deep
☐ 2. depth
☐ 3. superficial
☐ 4. large

Question ID : 630680162883
Option 1 ID : 630680630769
Option 2 ID : 630680630768
Option 3 ID : 630680630770
Option 4 ID : 630680630771
Status : Answered
Chosen Option : 1

Comprehension:

In the following passage, some words have been deleted. Read the passage carefully and select the most appropriate option to fill in each blank.
Sleeping, dreaming and waking are three important (1)_____ for ordinary humans. But for those who have (2)_____ transcendental knowledge, all three are almost same and there is not much difference among these three. 'The world and life is a myth and it keeps on changing' (3)_____ Adi Shankaracharya, the greatest 'Advaita' preacher. Ramana Maharshi observed no difference between dreaming and waking states. What he said is that it is from one unreal world to another (4)_____ world. There is no difference between the images one sees when waking up and the images he/she sees during dreams. According to this great sage of the modern century, the first one is daydream and the second one is a night dream. The usual philosophers say that mind and body are the two elements and mind is the source of all diverse thoughts. In the waking up state, the mind is active with all tensions and dissatisfactions, so happiness is missing: during sleep as the mind is absent and so is the physical world, the real happiness (5)_____. It is said that deep sleep, where there is no feeling of body, mind and the world, is the natural state of human beings.

SubQuestion No : 23

Q.23 Select the most appropriate option to fill in blank number 3.

- Ans ☐ 1. saying
☐ 2. was said
☒ 3. says
☐ 4. tells by

Question ID : 630680162884
Option 1 ID : 630680630774
Option 2 ID : 630680630775
Option 3 ID : 630680630773
Option 4 ID : 630680630772
Status : Answered
Chosen Option : 3

Comprehension:

In the following passage, some words have been deleted. Read the passage carefully and select the most appropriate option to fill in each blank.
Sleeping, dreaming and waking are three important (1)_____ for ordinary humans. But for those who have (2)_____ transcendental knowledge, all three are almost same and there is not much difference among these three. 'The world and life is a myth and it keeps on changing' (3)_____ Adi Shankaracharya, the greatest 'Advaita' preacher. Ramana Maharshi observed no difference between dreaming and waking states. What he said is that it is from one unreal world to another (4)_____ world. There is no difference between the images one sees when waking up and the images he/she sees during dreams. According to this great sage of the modern century, the first one is daydream and the second one is a night dream. The usual philosophers say that mind and body are the two elements and mind is the source of all diverse thoughts. In the waking up state, the mind is active with all tensions and dissatisfactions, so happiness is missing: during sleep as the mind is absent and so is the physical world, the real happiness (5)_____. It is said that deep sleep, where there is no feeling of body, mind and the world, is the natural state of human beings.

SubQuestion No : 24

Q.24 Select the most appropriate option to fill in blank number 4.

- Ans ☒ 1. reality
☒ 2. unreal
☒ 3. confused
☒ 4. unimaginary

Question ID : 630680162885
Option 1 ID : 630680630776
Option 2 ID : 630680630779
Option 3 ID : 630680630778
Option 4 ID : 630680630777
Status : Answered
Chosen Option : 2

Comprehension:

In the following passage, some words have been deleted. Read the passage carefully and select the most appropriate option to fill in each blank.
Sleeping, dreaming and waking are three important (1)_____ for ordinary humans. But for those who have (2)_____ transcendental knowledge, all three are almost same and there is not much difference among these three. 'The world and life is a myth and it keeps on changing' (3)_____ Adi Shankaracharya, the greatest 'Advaita' preacher. Ramana Maharshi observed no difference between dreaming and waking states. What he said is that it is from one unreal world to another (4)_____ world. There is no difference between the images one sees when waking up and the images he/she sees during dreams. According to this great sage of the modern century, the first one is daydream and the second one is a night dream. The usual philosophers say that mind and body are the two elements and mind is the source of all diverse thoughts. In the waking up state, the mind is active with all tensions and dissatisfactions, so happiness is missing: during sleep as the mind is absent and so is the physical world, the real happiness (5)_____. It is said that deep sleep, where there is no feeling of body, mind and the world, is the natural state of human beings.

SubQuestion No : 25

Q.25 Select the most appropriate option to fill in blank number 5.

- Ans ☒ 1. gained
☒ 2. is gained
☒ 3. was gained
☒ 4. gains

Question ID : 630680162886
Option 1 ID : 630680630782
Option 2 ID : 630680630781
Option 3 ID : 630680630783
Option 4 ID : 630680630780
Status : Answered
Chosen Option : 2