

Combined Graduate Level Examination 2024 Tier I

Roll Number	
Candidate Name	
Venue Name	
Exam Date	17/09/2024
Exam Time	9:00 AM - 10:00 AM
Subject	Combined Graduate Level Examination Tier I

Section : General Intelligence and Reasoning

Q.1 Select the option that represents the letters that, when sequentially placed from left to right in the blanks below, will complete the letter series.

_ D R G _ Z D R _ B Z D _ G B Z _ R G B

Ans ☒ 1. ZBGRB

☒ 2. ZBGRD

☒ 3. BBGRD

☒ 4. ZBDRD

Question ID : 630680261794

Option 1 ID : 6306801016834

Option 2 ID : 6306801016832

Option 3 ID : 6306801016833

Option 4 ID : 6306801016831

Status : Answered

Chosen Option : 2

Q.2 In this question, three statements are given, followed by three conclusions numbered I, II and III. Assuming the statements to be true, even if they seem to be at variance with commonly known facts, decide which of the conclusions logically follow(s) from the statements.

Statements:

All cars are birds.

Some birds are plants.

All plants are leaves.

Conclusions:

I. Some birds are cars.

II. Some plants are birds.

III. Some leaves are plants.

Ans ☒ 1. Only conclusions II and III follow.

☒ 2. All the conclusions follow.

☒ 3. Only conclusions I and III follow.

☒ 4. None of the conclusions follows.

Question ID : 630680416518

Option 1 ID : 6306801624836

Option 2 ID : 6306801624837

Option 3 ID : 6306801624835

Option 4 ID : 6306801624838

Status : Answered

Chosen Option : 2

Test Prime

**ALL EXAMS,
ONE SUBSCRIPTION**



70,000+
Mock Tests



**Personalised
Report Card**



**Unlimited
Re-Attempt**



600+
Exam Covered



**Previous Year
Papers**



**500%
Refund**



ATTEMPT FREE MOCK NOW

Q.3 Identify the figure given in the options which when put in place of ? will logically complete the series.

2	1	5	2	4	5	6	4	
	5		4		6		7	?
3	0	0	1	1	2	2	5	

Ans

✗ 1.

1		5
	2	
4		5

✓ 2.

7		6
	9	
5		4

✗ 3.

4		7
	5	
6		2

✗ 4.

6		4
	2	
7		5

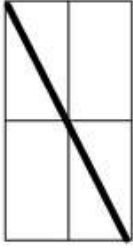
Question ID : 630680524403
Option 1 ID : 6306802049713
Option 2 ID : 6306802049714
Option 3 ID : 6306802049712
Option 4 ID : 6306802049711
Status : Answered
Chosen Option : 2

Q.4 In a certain code language, 'FLBS' is coded as '156' and 'MXT' is coded as '228'. How will 'VDZN' be coded in the same language?

- Ans
- ✗ 1. 220
- ✗ 2. 160
- ✓ 3. 264
- ✗ 4. 180

Question ID : 630680416228
Option 1 ID : 6306801623677
Option 2 ID : 6306801623678
Option 3 ID : 6306801623675
Option 4 ID : 6306801623676
Status : Answered
Chosen Option : 3

Q.5 How many triangles are there in the given figure?



Ans ☒ 1. 6

☐ 2. 2

☐ 3. 4

☐ 4. 7

Question ID : 630680161868

Option 1 ID : 630680626782

Option 2 ID : 630680626780

Option 3 ID : 630680626781

Option 4 ID : 630680626783

Status : Answered

Chosen Option : 1

Q.6 Three of the following four options are alike in a certain way and thus form a group.

Which is the one that does NOT belong to that group?

(NOTE: Operations should be performed on the whole numbers, without breaking down the numbers into its constituent digits. E.g. 13 – Operations on 13 such as adding/subtracting/multiplying etc. to 13 can be performed. Breaking down 13 into 1 and 3 and then performing mathematical operations on 1 and 3 is not allowed.)

Ans ☐ 1. $26 - 95 - 21$

☒ 2. $22 - 67 - 22$

☐ 3. $20 - 15 - 51$

☐ 4. $16 - 45 - 21$

Question ID : 630680196580

Option 1 ID : 630680762620

Option 2 ID : 630680762621

Option 3 ID : 630680762622

Option 4 ID : 630680762619

Status : Answered

Chosen Option : 3

Q.7 Select the correct mirror image of the given figure when the mirror is placed at MN.



- Ans
- ✓ 1. q ṡ m ṡ e q l
 - ✗ 2. q ṡ m ṡ e q l
 - ✗ 3. d ṡ m ṡ e q l
 - ✗ 4. q ṡ m ṡ e q l

Question ID : 630680325824
Option 1 ID : 6306801267489
Option 2 ID : 6306801267491
Option 3 ID : 6306801267490
Option 4 ID : 6306801267492
Status : Answered
Chosen Option : 1

Q.8 Select the term from among the given options that can replace the question mark (?) in the following series.
PJ 16, SM 25, VP 36, YS 49, ?

- Ans
- ✗ 1. DW 64
 - ✗ 2. CW 81
 - ✓ 3. BV 64
 - ✗ 4. CV 36

Question ID : 630680416233
Option 1 ID : 6306801623695
Option 2 ID : 6306801623696
Option 3 ID : 6306801623697
Option 4 ID : 6306801623698
Status : Answered
Chosen Option : 3

Q.9 In a certain code language, 'BIRTHDAY' is written as 'ADHTRIBY' and 'CONGRESS' is written as 'SERGNOCS'. How will 'DIVISION' be written in that language?

- Ans
- ✗ 1. NDOISIVI
 - ✗ 2. DNOISIVI
 - ✓ 3. OISIVIDN
 - ✗ 4. NOISIVID

Question ID : 630680285528
Option 1 ID : 6306801110079
Option 2 ID : 6306801110080
Option 3 ID : 6306801110081
Option 4 ID : 6306801110082
Status : Answered
Chosen Option : 3

Q.10 The position of how many letters will remain unchanged if each of the letter in the word 'CERTAIN' is arranged in English alphabetical order?

- Ans ☒ 1. One
☒ 2. Zero
☒ 3. Four
☒ 4. Two

Question ID : 630680349933
Option 1 ID : 6306801362023
Option 2 ID : 6306801362021
Option 3 ID : 6306801362022
Option 4 ID : 6306801362024
Status : Answered
Chosen Option : 2

Q.11 G is the brother of F. E is the father of K.. C is the daughter of A. F is the mother of E. C is the sister of E. How is G related to A?

- Ans ☒ 1. Brother's wife
☒ 2. Sister's husband
☒ 3. Husband's sister
☒ 4. Wife's brother

Question ID : 630680216625
Option 1 ID : 630680840463
Option 2 ID : 630680840464
Option 3 ID : 630680840466
Option 4 ID : 630680840465
Status : Answered
Chosen Option : 4

Q.12 30 is related to 41 following certain logic. Following the same logic, 14 is related to 21. To which of the following numbers is 54 related, following the same logic? (NOTE : Operations should be performed on the whole numbers, without breaking down the numbers into its constituent digits. E.g. 13 – Operations on 13 such as adding /deleting /multiplying etc., to 13 can be performed. Breaking down 13 into 1 and 3 and then performing mathematical operations on 1 and 3 is not allowed.)

- Ans ☒ 1. 69
☒ 2. 63
☒ 3. 53
☒ 4. 59

Question ID : 630680162504
Option 1 ID : 630680629313
Option 2 ID : 630680629312
Option 3 ID : 630680629314
Option 4 ID : 630680629315
Status : Not Answered
Chosen Option : --

Q.13 Which letter-cluster will replace the question mark (?) to complete the given series?
BKUZ, ENWB, ?, KTAF, NWCH

Ans ☒ 1. HRYE

☒ 2. HQYD

☒ 3. HRYD

☒ 4. HRZD

Question ID : 630680416919

Option 1 ID : 6306801626442

Option 2 ID : 6306801626440

Option 3 ID : 6306801626439

Option 4 ID : 6306801626441

Status : Answered

Chosen Option : 2

Q.14 Read the given statements and conclusions carefully. Assuming that the information given in the statements is true, even if it appears to be at variance with commonly known facts, decide which of the given conclusions logically follow(s) from the statements.

Statements:

Some balls are toys.

All circles are balls.

All balls are pits.

Conclusions:

(I) Some circles are toys.

(II) All pits are toys.

Ans ☒ 1. Only conclusion (II) follows.

☒ 2. Neither conclusion (I) nor (II) follow.

☒ 3. Only conclusion (I) follows.

☒ 4. Both conclusions (I) and (II) follow.

Question ID : 630680386649

Option 1 ID : 6306801507307

Option 2 ID : 6306801507309

Option 3 ID : 6306801507306

Option 4 ID : 6306801507308

Status : Answered

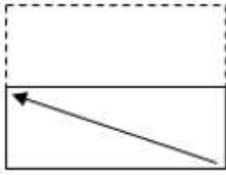
Chosen Option : 2

Q.15 A transparent sheet with a pattern is given below. Select the option that depicts the pattern that would appear when the given transparent sheet is folded at the middle horizontal line.

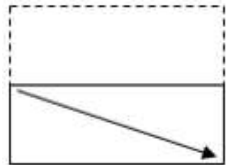


Ans

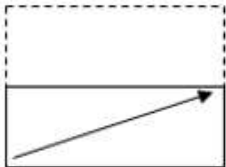
✗ 1.



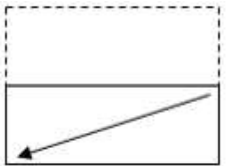
✓ 2.



✗ 3.



✗ 4.



Question ID : 630680389398

Option 1 ID : 6306801518053

Option 2 ID : 6306801518052

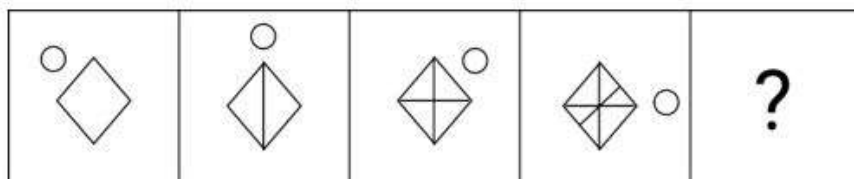
Option 3 ID : 6306801518050

Option 4 ID : 6306801518051

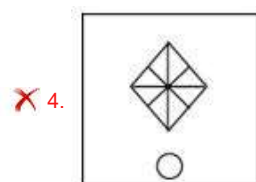
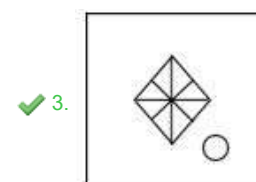
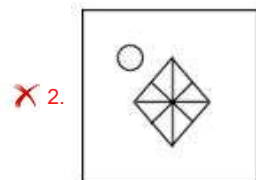
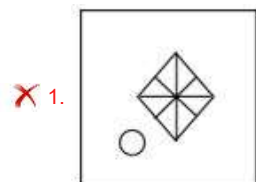
Status : Answered

Chosen Option : 2

Q.16 Select the figure from among the given options that can replace the question mark (?) and logically complete the series.



Ans



Question ID : 630680332547
Option 1 ID : 6306801293627
Option 2 ID : 6306801293628
Option 3 ID : 6306801293626
Option 4 ID : 6306801293625

Status : Answered

Chosen Option : 3

Q.17 Four letter-clusters have been given, out of which three are alike in some manner and one is different. Select the one that is different.

Note: The odd one out is not based on the number of consonants/vowels or their position in the letter cluster.

Ans ✗ 1. KNQ

✗ 2. SVY

✓ 3. ILN

✗ 4. BEH

Question ID : 63068083314
Option 1 ID : 630680323105
Option 2 ID : 630680323106
Option 3 ID : 630680323107
Option 4 ID : 630680323104

Status : Answered

Chosen Option : 3

Q.18 What will come in the place of the question mark (?) in the following equation, if '+' and '-' are interchanged and 'x' and '÷' are interchanged?
 $101 \div 48 - 13013 \times 13 + 12 = ?$

- Ans
- ☒ 1. 5834
 - ☒ 2. 5836
 - ☒ 3. 5837
 - ☒ 4. 5835

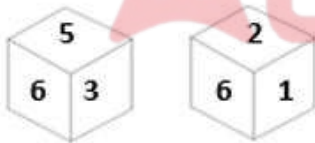
Question ID : 630680411652
 Option 1 ID : 6306801605443
 Option 2 ID : 6306801605445
 Option 3 ID : 6306801605446
 Option 4 ID : 6306801605444
 Status : Answered
 Chosen Option : 3

Q.19 Select the number from among the given options that can replace the question mark (?) in the following series.
 96,77,60,47,36, ?

- Ans
- ☒ 1. 32
 - ☒ 2. 30
 - ☒ 3. 29
 - ☒ 4. 28

Question ID : 630680411904
 Option 1 ID : 6306801606453
 Option 2 ID : 6306801606452
 Option 3 ID : 6306801606451
 Option 4 ID : 6306801606454
 Status : Answered
 Chosen Option : 3

Q.20 A dice has numbers 1, 2, 3, 5, 6 and 8 on its sides. Two different positions of the same dice are shown below. Select the number that will be on the face opposite to the one having 6.



- Ans
- ☒ 1. 3
 - ☒ 2. 2
 - ☒ 3. 8
 - ☒ 4. 1

Question ID : 630680385447
 Option 1 ID : 6306801502604
 Option 2 ID : 6306801502602
 Option 3 ID : 6306801502605
 Option 4 ID : 6306801502603
 Status : Answered
 Chosen Option : 3

Q.21 189 is related to 21 following a certain logic. Following the same logic, 234 is related to 26. To which of the following is 468 related, following the same logic?

(NOTE: Operations should be performed on the whole numbers, without breaking down the numbers into its constituent digits. E.g. 13 – Operations on 13 such as adding /deleting /multiplying etc. to 13 can be performed. Breaking down 13 into 1 and 3 and then performing mathematical operations on 1 and 3 is not allowed)

Ans ☒ 1. 58

☒ 2. 48

☒ 3. 52

☒ 4. 54

Question ID : 630680344660

Option 1 ID : 6306801340949

Option 2 ID : 6306801340950

Option 3 ID : 6306801340952

Option 4 ID : 6306801340951

Status : Answered

Chosen Option : 3

Q.22 What will come in the place of '?' in the following equation, if '+' and '-' are interchanged and 'x' and '÷' are interchanged?

$$4 + 9 \times 48 - 6 \div 7 = ?$$

Ans ☒ 1. 41

☒ 2. 37

☒ 3. 27

☒ 4. 30

Question ID : 630680339256

Option 1 ID : 6306801319595

Option 2 ID : 6306801319596

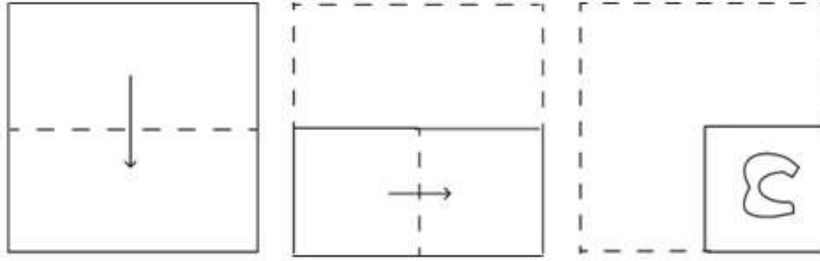
Option 3 ID : 6306801319594

Option 4 ID : 6306801319593

Status : Answered

Chosen Option : 2

Q.23 A paper is folded and cut as shown below. How will it appear when unfolded?



Ans

- ✗ 1.
- ✗ 2.
- ✗ 3.
- ✓ 4.

Question ID : 630680294957
 Option 1 ID : 6306801147556
 Option 2 ID : 6306801147559
 Option 3 ID : 6306801147558
 Option 4 ID : 6306801147557
 Status : Answered
 Chosen Option : 4

Q.24 'Magnify' is related to 'Expand' in the same way as 'Curtail' is related to '_____'.

Ans ☒ 1. Restrict

☐ 2. Measure

☐ 3. Big

☐ 4. Small

Question ID : 630680416585
 Option 1 ID : 6306801625105
 Option 2 ID : 6306801625104
 Option 3 ID : 6306801625106
 Option 4 ID : 6306801625103
 Status : Not Answered
 Chosen Option : --

Q.25 Select the set in which the numbers are related in the same way as are the numbers of the given sets.

(429, 514), (688, 773)

(NOTE : Operations should be performed on the whole numbers, without breaking down the numbers into its constituent digits. E.g., 13 – Operations on 13 such as adding /deleting /multiplying etc. to 13 can be performed. Breaking down 13 into 1 and 3 and then performing mathematical operations on 1 and 3 is not allowed)

Ans ☐ 1. (407, 512)

☒ 2. (546, 631)

☐ 3. (319, 399)

☐ 4. (396, 491)

Question ID : 630680319358
 Option 1 ID : 6306801242338
 Option 2 ID : 6306801242339
 Option 3 ID : 6306801242337
 Option 4 ID : 6306801242340
 Status : Answered
 Chosen Option : 2

Section : General Awareness

Q.1 Wood's Dispatch of 1854 primarily dealt with which of the following subject matters?

Ans ☒ 1. Education

☐ 2. Railways

☐ 3. Health

☐ 4. Finance

Question ID : 630680412323
 Option 1 ID : 6306801608115
 Option 2 ID : 6306801608118
 Option 3 ID : 6306801608116
 Option 4 ID : 6306801608117
 Status : Answered
 Chosen Option : 1

Q.2 If GNP is 16% higher than the last year and the rate of inflation is 9%, production in the economy has grown by:

- Ans ☒ 1. 5%
☒ 2. 7%
☒ 3. 4%
☒ 4. 6%

Question ID : 630680193003
Option 1 ID : 630680748550
Option 2 ID : 630680748552
Option 3 ID : 630680748549
Option 4 ID : 630680748551
Status : Answered
Chosen Option : 2

Q.3 Which of the following gases get released when dilute sulphuric acid (H_2SO_4) reacts with magnesium (Mg)?

- Ans ☒ 1. SO_2
☒ 2. O_2
☒ 3. H_2
☒ 4. SO_3

Question ID : 630680517171
Option 1 ID : 6306802021082
Option 2 ID : 6306802021080
Option 3 ID : 6306802021081
Option 4 ID : 6306802021083
Status : Not Answered
Chosen Option : --

Q.4 Prabha Atre, who received the Padma Vibhushan Award 2022, belongs to which Gharana?

- Ans ☒ 1. Agra gharana
☒ 2. Mewati gharana
☒ 3. Kirana gharana
☒ 4. Indore gharana

Question ID : 630680511794
Option 1 ID : 6306802000147
Option 2 ID : 6306802000146
Option 3 ID : 6306802000149
Option 4 ID : 6306802000148
Status : Not Answered
Chosen Option : --

Q.5 An inscription, Takht-i-Bahi recovered from Mardan near Peshawar, indicates the rule of which of the following dynasties in north-western area of present Pakistan?

- Ans ☐ 1. Sakas
☒ 2. Parthians
☐ 3. Indo-Greek
☐ 4. Bactrian

Question ID : 630680412518
Option 1 ID : 6306801608898
Option 2 ID : 6306801608897
Option 3 ID : 6306801608895
Option 4 ID : 6306801608896
Status : Not Answered
Chosen Option : --

Q.6 Which of the following is an example of private sector industry in India?

- Ans ☐ 1. Bharat Heavy Electricals Limited
☐ 2. Oil India Limited
☒ 3. Tata Iron and Steel Company
☐ 4. Steel Authority of India Limited

Question ID : 630680327631
Option 1 ID : 6306801274523
Option 2 ID : 6306801274524
Option 3 ID : 6306801274521
Option 4 ID : 6306801274522
Status : Answered
Chosen Option : 3

Q.7 When was pro kabaddi league inaugurated for the first time in India?

- Ans ☐ 1. 2007
☐ 2. 2015
☐ 3. 2008
☒ 4. 2014

Question ID : 630680510835
Option 1 ID : 6306801996472
Option 2 ID : 6306801996471
Option 3 ID : 6306801996473
Option 4 ID : 6306801996470
Status : Not Answered
Chosen Option : --

Q.8 Who among the following Indian women boxers was elected as the Chairperson and a voting member of the International Boxing Association in 2022?

- Ans ☐ 1. Mary Kom
☒ 2. Lovlina Borgohain
☐ 3. Nikhat Zareen
☐ 4. Pooja Rani

Question ID : 630680196027
Option 1 ID : 630680760495
Option 2 ID : 630680760496
Option 3 ID : 630680760497
Option 4 ID : 630680760498
Status : Answered
Chosen Option : 1

Q.9 Identify the Indian classical dancer associated with Kathak.

Ans ☒ 1. Vedantam Satyanarayana Sarma

☒ 2. Sharodi Saikia

☒ 3. Rohini Bhate

☒ 4. Kelucharan Mohapatra

Question ID : 630680512086

Option 1 ID : 6306802001317

Option 2 ID : 6306802001316

Option 3 ID : 6306802001314

Option 4 ID : 6306802001315

Status : Not Answered

Chosen Option : --

Q.10 Who among the following was the successor of Mughal Emperor, Babur?

Ans ☒ 1. Aurangzeb

☒ 2. Shahjahan

☒ 3. Jahangir

☒ 4. Humayun

Question ID : 630680412405

Option 1 ID : 6306801608445

Option 2 ID : 6306801608443

Option 3 ID : 6306801608446

Option 4 ID : 6306801608444

Status : Answered

Chosen Option : 4

Q.11 British Parliament introduced Indian High Courts Act in which year?

Ans ☒ 1. 1859

☒ 2. 1860

☒ 3. 1861

☒ 4. 1858

Question ID : 630680511484

Option 1 ID : 6306801999059

Option 2 ID : 6306801999060

Option 3 ID : 6306801999061

Option 4 ID : 6306801999058

Status : Not Answered

Chosen Option : --

Q.12 In which of the following years was the Election Commission of India founded?

Ans ☒ 1. 1952

☒ 2. 1950

☒ 3. 1955

☒ 4. 1947

Question ID : 630680157580

Option 1 ID : 630680609850

Option 2 ID : 630680609849

Option 3 ID : 630680609851

Option 4 ID : 630680609848

Status : Answered

Chosen Option : 2

Q.13 Match the following items.

List I

- i. Global System of Trade Preferences
- ii. India-Gulf Cooperation Council Free Trade Agreement
- iii. The India-Republic of Korea Comprehensive Economic Partnership Agreement
- iv. 7th Trade Policy Review

List II

- a. 2021
- b. 1988
- c. 2004
- d. 2010

- Ans
- ☒ 1. i (d), ii (a), iii (b), iv (c)
 - ☒ 2. i (b), ii (a), iii (d), iv (c)
 - ☒ 3. i (c), ii (d), iii (a), iv (b)
 - ☒ 4. i (b), ii (c), iii (d), iv (a)

Question ID : 6306801048054
 Option 1 ID : 6306804114263
 Option 2 ID : 6306804114265
 Option 3 ID : 6306804114264
 Option 4 ID : 6306804114262
 Status : Not Answered
 Chosen Option : --

Q.14 Which of the following numbers best describes the number of white pieces used in chess?

- Ans
- ☒ 1. 18
 - ☒ 2. 16
 - ☒ 3. 19
 - ☒ 4. 17

Question ID : 630680510777
 Option 1 ID : 6306801996240
 Option 2 ID : 6306801996238
 Option 3 ID : 6306801996241
 Option 4 ID : 6306801996239
 Status : Answered
 Chosen Option : 2

Q.15 Which set of diseases are caused by bacteria?

- Ans
- ☒ 1. Dengue, Malaria, Cholera
 - ☒ 2. Influenza, Dengue, Cholera
 - ☒ 3. Typhoid, Cholera, Tuberculosis
 - ☒ 4. Malaria, Common cold, Influenza

Question ID : 630680517130
 Option 1 ID : 6306802020918
 Option 2 ID : 6306802020917
 Option 3 ID : 6306802020916
 Option 4 ID : 6306802020919
 Status : Answered
 Chosen Option : 3

Q.16 Which of the following hills is located in the Eastern Ghats?

- Ans**
- ☒ 1. Anai Mudi hill
 - ☐ 2. Khasi hill
 - ☐ 3. Mizo hill
 - ☒ 4. Shevaroy hill

Question ID : 630680401676
 Option 1 ID : 6306801566484
 Option 2 ID : 6306801566483
 Option 3 ID : 6306801566482
 Option 4 ID : 6306801566485
 Status : Answered
 Chosen Option : 1

Q.17 Paryushana festival is celebrated by the people of which of the following communities?

- Ans**
- ☒ 1. Jain
 - ☐ 2. Hindu
 - ☐ 3. Muslim
 - ☐ 4. Sikh

Question ID : 630680158753
 Option 1 ID : 630680614504
 Option 2 ID : 630680614505
 Option 3 ID : 630680614506
 Option 4 ID : 630680614507
 Status : Not Answered
 Chosen Option : --

Q.18 Which of the following pairs is INCORRECTLY matched?.

- Ans**
- ☒ 1. Starch: Egg yolk
 - ☐ 2. Maltose: Wheat, cornmeal and barley
 - ☐ 3. Fructose: Grapes
 - ☐ 4. Lactose: Milk

Question ID : 630680199658
 Option 1 ID : 630680774241
 Option 2 ID : 630680774239
 Option 3 ID : 630680774242
 Option 4 ID : 630680774240
 Status : Answered
 Chosen Option : 1

Q.19 In which year was the MPLADS scheme implemented?

- Ans**
- ☐ 1. 2013
 - ☐ 2. 1983
 - ☐ 3. 2003
 - ☒ 4. 1993

Question ID : 630680195344
 Option 1 ID : 630680757845
 Option 2 ID : 630680757848
 Option 3 ID : 630680757846
 Option 4 ID : 630680757847
 Status : Not Answered
 Chosen Option : --

Q.20 Which of the following duties has been NOT prescribed by the Indian Constitution as Fundamental Duties?
 1. To defend the country
 2. To pay income tax
 3. To cast the vote in election
 4. To safeguard the public property

Ans ☒ 1. 2 only
☒ 2. 2 and 3 both
☒ 3. 1 only
☒ 4. 2 and 4 both

Question ID : 630680282976
 Option 1 ID : 6306801100036
 Option 2 ID : 6306801100037
 Option 3 ID : 6306801100035
 Option 4 ID : 6306801100038
 Status : Answered
 Chosen Option : 2

Q.21 According to Census of India 2011, which Union Territory has the highest slum population?

Ans ☒ 1. Chandigarh
☒ 2. Andaman and Nicobar Islands
☒ 3. Puducherry
☒ 4. Delhi

Question ID : 630680209236
 Option 1 ID : 630680811159
 Option 2 ID : 630680811162
 Option 3 ID : 630680811161
 Option 4 ID : 630680811160
 Status : Answered
 Chosen Option : 4

Q.22 Bhupen Hazarika was one of the most well-known personalities from the state of _____.

Ans ☒ 1. Nagaland
☒ 2. Odisha
☒ 3. Manipur
☒ 4. Assam

Question ID : 630680512246
 Option 1 ID : 6306802001955
 Option 2 ID : 6306802001957
 Option 3 ID : 6306802001956
 Option 4 ID : 6306802001954
 Status : Answered
 Chosen Option : 3

Q.23 The tropical cyclones in Australia are known as _____.

- Ans
- ☐ 1. hurricanes
 - ☐ 2. typhoons
 - ☐ 3. cyclones
 - ☒ 4. willy-willies

Question ID : 63068091122
Option 1 ID : 630680353242
Option 2 ID : 630680353244
Option 3 ID : 630680353245
Option 4 ID : 630680353243
Status : Not Answered
Chosen Option : --

Q.24 Calorimeter is a small container made of a thin sheet of _____ with good thermal conductivity.

- Ans
- ☐ 1. cesium
 - ☐ 2. platinum
 - ☐ 3. silver
 - ☒ 4. copper

Question ID : 63068085784
Option 1 ID : 630680332598
Option 2 ID : 630680332596
Option 3 ID : 630680332597
Option 4 ID : 630680332599
Status : Not Answered
Chosen Option : --

Q.25 In Pradhan Mantri Kisan Samman Nidhi Yojana, beneficiaries are provided with how much amount every year?

- Ans
- ☐ 1. ₹4,000
 - ☒ 2. ₹6,000
 - ☐ 3. ₹5,000
 - ☐ 4. ₹3,000

Question ID : 630680310852
Option 1 ID : 6306801209535
Option 2 ID : 6306801209533
Option 3 ID : 6306801209534
Option 4 ID : 6306801209536
Status : Answered
Chosen Option : 2

Section : Quantitative Aptitude

Q.1 If $\cos 24^\circ = \frac{m}{n}$, then the value of $(\operatorname{cosec} 24^\circ - \cos 66^\circ)$ is:

Ans

☐ 1. $\frac{n^2}{m\sqrt{n^2 - m^2}}$

☐ 2. $\frac{m^2}{n\sqrt{m^2 - n^2}}$

☒ 3. $\frac{m^2}{n\sqrt{n^2 - m^2}}$

☐ 4. $\frac{n^2}{m\sqrt{m^2 - n^2}}$

Question ID : 630680387748

Option 1 ID : 6306801511626

Option 2 ID : 6306801511628

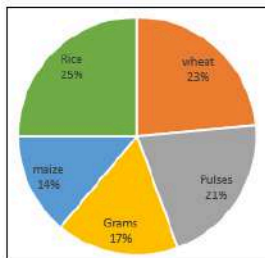
Option 3 ID : 6306801511627

Option 4 ID : 6306801511629

Status : Answered

Chosen Option : 3

Q.2 The given pie chart shows the annual agricultural production (in tonnes) in a region. The total production is 8600 tonnes.



What is the annual production of rice in the region?

Ans

☐ 1. 5012 tonnes

☐ 2. 1052 tonnes

☒ 3. 2150 tonnes

☐ 4. 2051 tonnes

Question ID : 630680428147

Option 1 ID : 6306801670632

Option 2 ID : 6306801670634

Option 3 ID : 6306801670633

Option 4 ID : 6306801670635

Status : Answered

Chosen Option : 3

Q.3 If A:B = 6 : 8 and B:C = 7 : 10, then A:B:C is:

- Ans
- ☐ 1. 14:31:20
 - ☐ 2. 21:23:40
 - ☒ 3. 21:28:40
 - ☐ 4. 23:32:40

Question ID : 630680915063
 Option 1 ID : 6306803585299
 Option 2 ID : 6306803585297
 Option 3 ID : 6306803585296
 Option 4 ID : 6306803585298
 Status : Answered
 Chosen Option : 3

Q.4 A shopkeeper marked the price 20% more than its cost price. If he allows a discount of 30%, then find his loss percent.

- Ans
- ☐ 1. 20%
 - ☐ 2. 15%
 - ☒ 3. 16%
 - ☐ 4. 25%

Question ID : 630680143030
 Option 1 ID : 630680553582
 Option 2 ID : 630680553584
 Option 3 ID : 630680553585
 Option 4 ID : 630680553583
 Status : Answered
 Chosen Option : 3

Q.5 The average of the squares of the first 47 natural numbers is

- Ans
- ☐ 1. 759
 - ☐ 2. 761
 - ☐ 3. 762
 - ☒ 4. 760

Question ID : 630680568974
 Option 1 ID : 6306802224707
 Option 2 ID : 6306802224706
 Option 3 ID : 6306802224708
 Option 4 ID : 6306802224705
 Status : Answered
 Chosen Option : 4

Q.6 If $x > 1$ and $x^2 + \frac{1}{x^2} = 83$, then $x^3 - \frac{1}{x^3}$ is:

- Ans
- ☐ 1. 876
 - ☐ 2. 884
 - ☒ 3. 756
 - ☐ 4. 754

Question ID : 630680413520
 Option 1 ID : 6306801612905
 Option 2 ID : 6306801612907
 Option 3 ID : 6306801612904
 Option 4 ID : 6306801612906
 Status : Answered
 Chosen Option : 3

Q.7 The circumference of the base of a cylindrical vessel is 44 cm and its height is 25 cm. How many liters of water can it hold? (Take $\pi = \frac{22}{7}$)

Ans ☒ 1. 3.85

☐ 2. 83.5

☐ 3. 3.58

☐ 4. 38.5

Question ID : 630680421539

Option 1 ID : 6306801644619

Option 2 ID : 6306801644621

Option 3 ID : 6306801644622

Option 4 ID : 6306801644620

Status : Answered

Chosen Option : 1

Q.8 What is the difference in area (in cm^2) of $\triangle ABC$ having sides of 10 cm, 20 cm and 20 cm, and a right angled triangle $\triangle PQR$ with hypotenuse of 13 cm and one of the perpendiculars of 12 cm?

Note: $\sqrt{2} = 1.41$, $\sqrt{3} = 1.73$, $\sqrt{7} = 2.65$, $\sqrt{13} = 3.61$, $\sqrt{15} = 3.87$, $\sqrt{21} = 4.58$

Ans ☒ 1. 66.75

☐ 2. 53.58

☐ 3. 36.57

☐ 4. 70.05

Question ID : 630680382145

Option 1 ID : 6306801489498

Option 2 ID : 6306801489497

Option 3 ID : 6306801489495

Option 4 ID : 6306801489496

Status : Answered

Chosen Option : 1

Q.9 If the simple interest on ₹7,200 in 3 years at the rate of 16% per annum equals the simple interest on ₹9,600 at the rate of x% per annum in 4 years. The value of x is equal to:

Ans ☒ 1. 9

☐ 2. 10

☐ 3. 11

☐ 4. 8

Question ID : 630680357949

Option 1 ID : 6306801393785

Option 2 ID : 6306801393788

Option 3 ID : 6306801393787

Option 4 ID : 6306801393786

Status : Answered

Chosen Option : 1

Q.10 A shopkeeper sold the following items to Arushi earning profit on it. How much total profit (in ₹) did he earn on the basis of the given data?

Item	Cost Price per unit (₹)	Profit on cost (%)
Mobile	20,000	10
Laptop	72,000	20
Mobile covers	300	12

- Ans
- ☒ 1. 34,760
 - ☒ 2. 16,636
 - ☒ 3. 16,760
 - ☒ 4. 16,436

Question ID : 630680428085
Option 1 ID : 6306801670387
Option 2 ID : 6306801670386
Option 3 ID : 6306801670385
Option 4 ID : 6306801670384
Status : Answered
Chosen Option : 4

Q.11 In a collection of rare coins, there is one gold coin for every four non-gold coins. If 20 more gold coins are added to the collection, the ratio of the number of gold coins to that of non-gold coins will be 2:3. The total number of coins in the collection will now become _____.

- Ans
- ☒ 1. 80
 - ☒ 2. 48
 - ☒ 3. 60
 - ☒ 4. 100

Question ID : 630680380361
Option 1 ID : 6306801482441
Option 2 ID : 6306801482439
Option 3 ID : 6306801482440
Option 4 ID : 6306801482442
Status : Answered
Chosen Option : 1

Q.12 Find the measure of the central angle of a sector if its area is 16π and the radius is 8.

- Ans
- ☒ 1. 90°
 - ☒ 2. 75°
 - ☒ 3. 60°
 - ☒ 4. 108°

Question ID : 630680195533
Option 1 ID : 630680758602
Option 2 ID : 630680758604
Option 3 ID : 630680758601
Option 4 ID : 630680758603
Status : Answered
Chosen Option : 1

Q.13 Simplify:

$$\left[\left(\frac{1}{6} \div \frac{1}{9} \times \frac{2}{3}\right) \times 18 + 5\right]$$

Ans ☒ 1. 27

☒ 2. 9

☒ 3. 23

☒ 4. 15

Question ID : 630680415868

Option 1 ID : 6306801622240

Option 2 ID : 6306801622241

Option 3 ID : 6306801622242

Option 4 ID : 6306801622239

Status : Answered

Chosen Option : 3

Q.14 Akshara and Siddharth travel from point P to Q, a distance of 72 km at a rate of 8 km/h and 10 km/h, respectively. Siddharth reaches Q first and returns immediately and meets Akshara at R. Find the distance from P to R.

Ans ☒ 1. 65 km

☒ 2. 64 km

☒ 3. 63 km

☒ 4. 66 km

Question ID : 630680131691

Option 1 ID : 630680509977

Option 2 ID : 630680509975

Option 3 ID : 630680509974

Option 4 ID : 630680509976

Status : Answered

Chosen Option : 2

Q.15 For what value of k, the system of equations $kx - 15y + 7 = 0$ and $7x - 21y - 19 = 0$ has NO solution?

Ans ☒ 1. 12

☒ 2. 25

☒ 3. 5

☒ 4. 6

Question ID : 630680198890

Option 1 ID : 630680771290

Option 2 ID : 630680771289

Option 3 ID : 630680771288

Option 4 ID : 630680771287

Status : Not Answered

Chosen Option : --

Q.16 AP and AQ are two tangents drawn to a circle with center O from an external point A. If $\angle PAQ = 40^\circ$, then $\angle POQ$ is:

Ans ☒ 1. 120°

☒ 2. 140°

☒ 3. 130°

☒ 4. 150°

Question ID : 630680195538

Option 1 ID : 630680758621

Option 2 ID : 630680758623

Option 3 ID : 630680758622

Option 4 ID : 630680758624

Status : Answered

Chosen Option : 2

Q.17 Pipes A and B can fill a tank in 15 hours and 25 hours, respectively, whereas pipe C can empty the full tank in 40 hours. All three pipes are opened together, but pipe A is closed after 5 hours. After how many hours will the remaining part of the tank be filled?

Ans ☒ 1. $44\frac{4}{9}$

☒ 2. $39\frac{4}{9}$

☒ 3. $41\frac{4}{9}$

☒ 4. $43\frac{4}{9}$

Question ID : 630680395577

Option 1 ID : 6306801542472

Option 2 ID : 6306801542475

Option 3 ID : 6306801542474

Option 4 ID : 6306801542473

Status : Answered

Chosen Option : 2

Q.18 The number of three different types of cars, X, Y, and Z, manufactured by a company over three years is given in the below table. Study the table carefully and answer the question that follows.

Cars/Years	2020	2021	2022
X	2560	3201	3551
Y	2250	2802	3020
Z	2750	2550	2600

What is the average number of cars manufactured by the company in the year 2022?

Ans ☒ 1. 3227

☒ 2. 2851

☒ 3. 3057

☒ 4. 2720

Question ID : 6306801047984

Option 1 ID : 6306804113981

Option 2 ID : 6306804113979

Option 3 ID : 6306804113980

Option 4 ID : 6306804113978

Status : Answered

Chosen Option : 3

Q.19 If a shopkeeper sells sugar at ₹44.8 per kg, he is able to make a 12% profit. Due to water seepage, $\frac{1}{5}$ of the sugar is damaged. What should now be the selling price per kg of the rest of the sugar to have a 5% profit?

- Ans**
- ☒ 1. ₹49.5
 - ☒ 2. ₹51.5
 - ☒ 3. ₹52.5
 - ☒ 4. ₹48.5

Question ID : 630680428884
 Option 1 ID : 6306801673581
 Option 2 ID : 6306801673580
 Option 3 ID : 6306801673582
 Option 4 ID : 6306801673583
 Status : Not Answered
 Chosen Option : --

Q.20 Find the least value of k for which a 7-digit number 249k876 is divisible by 6.

- Ans**
- ☒ 1. 5
 - ☒ 2. 0
 - ☒ 3. 7
 - ☒ 4. 1

Question ID : 630680131104
 Option 1 ID : 630680507687
 Option 2 ID : 630680507686
 Option 3 ID : 630680507688
 Option 4 ID : 630680507689
 Status : Answered
 Chosen Option : 2

Q.21 If $\sec\theta = \frac{29}{20}$ where $0 < \theta < 90^\circ$, then what is the value of $3\operatorname{cosec}\theta + 3\cot\theta$?

- Ans**
- ☒ 1. 7
 - ☒ 2. 49
 - ☒ 3. 14
 - ☒ 4. $\frac{7}{3}$

Question ID : 630680518869
 Option 1 ID : 6306802027949
 Option 2 ID : 6306802027951
 Option 3 ID : 6306802027950
 Option 4 ID : 6306802027948
 Status : Answered
 Chosen Option : 1

Q.22 In a right angle $\triangle ABC$, $\angle B = 90^\circ$, if $\tan A = 1$, then $4 \sin A \cos A$ = _____.

- Ans
- ☒ 1. $\frac{1}{2}$
 - ☒ 2. 4
 - ☒ 3. 1
 - ☒ 4. 2

Question ID : 630680402482

Option 1 ID : 6306801569672

Option 2 ID : 6306801569674

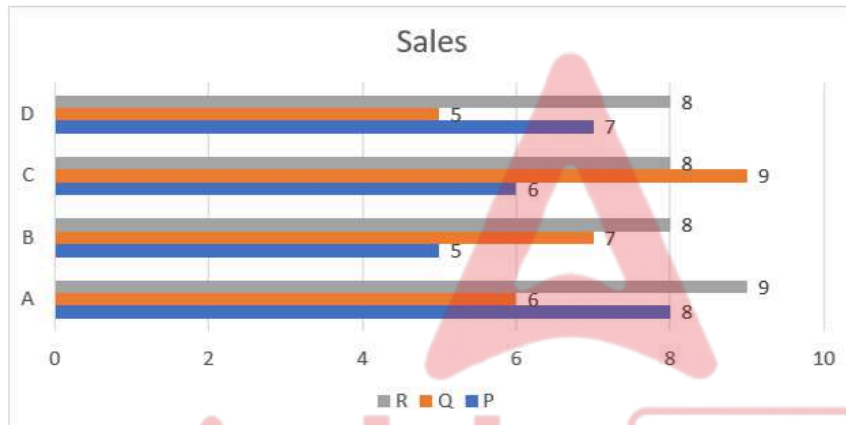
Option 3 ID : 6306801569671

Option 4 ID : 6306801569673

Status : Answered

Chosen Option : 4

Q.23 Study the given graph and answer the question that follows.
The graph shows the sales of three products: P, Q and R by four companies: A, B, C and D.



What percentage is the total production by company C, of the total production by company A?

- Ans
- ☒ 1. 110%
 - ☒ 2. 90%
 - ☒ 3. 105%
 - ☒ 4. 100%

Question ID : 630680427980

Option 1 ID : 6306801669965

Option 2 ID : 6306801669966

Option 3 ID : 6306801669967

Option 4 ID : 6306801669964

Status : Answered

Chosen Option : 2

Q.24 At what angle is the arc length half the perimeter of the circle?

- Ans
- ☒ 1. 120°
 - ☒ 2. 270°
 - ☒ 3. 90°
 - ☒ 4. 180°

Question ID : 630680421356
 Option 1 ID : 6306801643888
 Option 2 ID : 6306801643890
 Option 3 ID : 6306801643887
 Option 4 ID : 6306801643889
 Status : Answered
 Chosen Option : 4

Q.25 In a company, all employees are getting equal wages. If the number of employees is increased by 20% and their wages per head are decreased by 18%, what is the percentage decrease in total wages?

- Ans
- ☒ 1. 1.6%
 - ☒ 2. 2.4%
 - ☒ 3. 1.4%
 - ☒ 4. 1%

Question ID : 630680412061
 Option 1 ID : 6306801607081
 Option 2 ID : 6306801607082
 Option 3 ID : 6306801607080
 Option 4 ID : 6306801607079
 Status : Answered
 Chosen Option : 1

Section : English Comprehension

Q.1 Select the most appropriate option that can substitute the underlined segment in the given sentence.

My cousin works day and night to achieve success in life.

- Ans
- ☒ 1. around the clock
 - ☒ 2. great dealing
 - ☒ 3. vale of tears
 - ☒ 4. a handful

Question ID : 630680374777
 Option 1 ID : 6306801460277
 Option 2 ID : 6306801460276
 Option 3 ID : 6306801460278
 Option 4 ID : 6306801460275
 Status : Answered
 Chosen Option : 1

Q.2 Select the option that can be used as a one-word substitute for the given group of words.

The study of coins

Ans ☒ 1. Choreography

☒ 2. Numismatics

☒ 3. Cartography

☒ 4. Informatics

Question ID : 630680405383

Option 1 ID : 6306801580745

Option 2 ID : 6306801580744

Option 3 ID : 6306801580743

Option 4 ID : 6306801580742

Status : Answered

Chosen Option : 2

Q.3 Select the most appropriate synonym of the given word.
Labour

Ans ☒ 1. Relaxation

☒ 2. Toil

☒ 3. Dalliance

☒ 4. Mesh

Question ID : 630680168486

Option 1 ID : 630680652558

Option 2 ID : 630680652559

Option 3 ID : 630680652556

Option 4 ID : 630680652557

Status : Not Answered

Chosen Option : --

Q.4 Select the most appropriate option to fill in the blank.

Ram went to _____ an ice cream.

Ans ☒ 1. buy

☒ 2. byre

☒ 3. by

☒ 4. bye

Question ID : 630680123967

Option 1 ID : 630680480729

Option 2 ID : 630680480726

Option 3 ID : 630680480728

Option 4 ID : 630680480727

Status : Answered

Chosen Option : 1

Q.5 The following sentence has been divided into four segments. Identify the segment in which the article has been used INCORRECTLY.
UNESCO works to / strengthen an intellectual / and moral solidarity / of humankind.

Ans ✓ 1. strengthen an intellectual

✗ 2. of humankind.

✗ 3. and moral solidarity

✗ 4. UNESCO works to

Question ID : 630680206691

Option 1 ID : 630680801364

Option 2 ID : 630680801366

Option 3 ID : 630680801365

Option 4 ID : 630680801363

Status : Answered

Chosen Option : 3

Q.6 Select the most appropriate meaning of the underlined idiom.

In those days, we did not expect luxuries; we were thankful if we could keep the wolf from the door.

Ans ✗ 1. Wallow in poverty

✗ 2. Relish food

✓ 3. Avoid starvation

✗ 4. Encourage starvation

Question ID : 630680119691

Option 1 ID : 630680463848

Option 2 ID : 630680463849

Option 3 ID : 630680463846

Option 4 ID : 630680463847

Status : Answered

Chosen Option : 3

Q.7 Select the most appropriate option to substitute the underlined segment in the given sentence.

It is very hard for her to provide the necessities of her family.

Ans ✓ 1. the necessities to her family

✗ 2. the necessities from her families

✗ 3. the necessity of her family

✗ 4. the necessities by her family

Question ID : 630680176626

Option 1 ID : 630680684727

Option 2 ID : 630680684726

Option 3 ID : 630680684724

Option 4 ID : 630680684725

Status : Answered

Chosen Option : 1

Q.8 Select the most appropriate option that can substitute the underlined segment in the given sentence.

To the general public, William was best known as a crusader for peace and as an admired critic about social, political and ethical subjects.

- Ans
- ☒ 1. for peace and as an admired critic by
 - ☒ 2. about peace and as an admired critic about
 - ☒ 3. in peace and as an admired critic about
 - ☒ 4. for peace and as an admired critic on

Question ID : 630680158386

Option 1 ID : 630680613073

Option 2 ID : 630680613075

Option 3 ID : 630680613074

Option 4 ID : 630680613072

Status : Answered

Chosen Option : 4

Q.9 Select the option that expresses the given sentence in passive voice.
He will give a lecture on personality development.

- Ans
- ☒ 1. A lecture on personality development will be given by him.
 - ☒ 2. A lecture on personality development will be giving by him.
 - ☒ 3. A lecture on personality development can be given by him.
 - ☒ 4. A lecture will be given on personality development.

Question ID : 630680192099

Option 1 ID : 630680744997

Option 2 ID : 630680744999

Option 3 ID : 630680745000

Option 4 ID : 630680744998

Status : Answered

Chosen Option : 1

Q.10 Sentences of a paragraph are given below in jumbled order. Arrange the sentences in the correct order to form a meaningful and coherent paragraph. Note: This is an advertisement of an ice-cream brand.

- (A) That's why Silky is deliciously different and exceptionally versatile, natural, thick and durable ice cream.
(B) Beautifully firm, nice, silky rather than thin and watery, it stays in shape and stands on top of fruits or pastries without soaking in.
(C) Silky thick double ice cream has a unique, fresh taste and texture.

- Ans
- ☒ 1. BCA
 - ☒ 2. BAC
 - ☒ 3. CBA
 - ☒ 4. ABC

Question ID : 630680195455

Option 1 ID : 630680758292

Option 2 ID : 630680758291

Option 3 ID : 630680758290

Option 4 ID : 630680758289

Status : Answered

Chosen Option : 3

Q.11 Select the most appropriate synonym of the given word.
Bully

- Ans ☒ 1. Oxen
☒ 2. Coddle
☒ 3. Plough
☒ 4. Oppressor

Question ID : 630680132464
Option 1 ID : 630680512991
Option 2 ID : 630680512993
Option 3 ID : 630680512990
Option 4 ID : 630680512992
Status : Answered
Chosen Option : 2

Q.12 Select the most appropriate ANTONYM of the given word.
Entire

- Ans ☒ 1. Ingress
☒ 2. Incomplete
☒ 3. Undivided
☒ 4. Thorough

Question ID : 630680295211
Option 1 ID : 6306801148570
Option 2 ID : 6306801148571
Option 3 ID : 6306801148569
Option 4 ID : 6306801148568
Status : Answered
Chosen Option : 2

Q.13 Select the option that expresses the given sentence in passive voice.
His behaviour vexes me sometimes.

- Ans ☒ 1. Sometimes he vexes me with his behaviour.
☒ 2. I am sometimes vexed by his behaviour.
☒ 3. He is being vexing me with his behaviour
☒ 4. His behaviour is vexed.

Question ID : 630680415153
Option 1 ID : 6306801619359
Option 2 ID : 6306801619360
Option 3 ID : 6306801619361
Option 4 ID : 6306801619362
Status : Answered
Chosen Option : 2

Q.14 Select the most appropriate synonym of the given word.
Thankful

- Ans ☒ 1. Affirmation
☒ 2. Ungrateful
☒ 3. Obligated
☒ 4. Obscure

Question ID : 630680300702
Option 1 ID : 6306801169623
Option 2 ID : 6306801169626
Option 3 ID : 6306801169625
Option 4 ID : 6306801169624
Status : Answered
Chosen Option : 3

Q.15 Select the option that can be used as a one-word substitute for the given group of words.
A person who is inclined to see the worst aspect of things

- Ans ☒ 1. Philanthropist
☒ 2. Pessimist
☒ 3. Altruist
☒ 4. Optimist

Question ID : 630680414763
Option 1 ID : 6306801617795
Option 2 ID : 6306801617796
Option 3 ID : 6306801617797
Option 4 ID : 6306801617798
Status : Answered
Chosen Option : 2

Q.16 Select the sentence that contains a spelling error.

- Ans ☒ 1. The host institution must provide the delegates with accomodation at a subsidised rate.
☒ 2. Rail lines go parallel.
☒ 3. The boss addressed the meeting.
☒ 4. The occurrence of the lunar eclipse is often a mystery for children.

Question ID : 630680409931
Option 1 ID : 6306801598554
Option 2 ID : 6306801598553
Option 3 ID : 6306801598556
Option 4 ID : 6306801598555
Status : Answered
Chosen Option : 4

Q.17 The following sentence has been split into four segments. Identify the segment that contains an error.

Dr. Sinha has / brought about a new / book on social / impact of child labour.

- Ans
- ☒ 1. Dr. Sinha has
 - ☒ 2. book on social
 - ☒ 3. brought about a new
 - ☒ 4. impact of child labour

Question ID : 630680512936
Option 1 ID : 6306802004690
Option 2 ID : 6306802004692
Option 3 ID : 6306802004691
Option 4 ID : 6306802004693
Status : Answered
Chosen Option : 3

Q.18 Select the INCORRECTLY spelt word.

- Ans
- ☒ 1. Miscalculation
 - ☒ 2. Efficient
 - ☒ 3. Mediation
 - ☒ 4. Contribution

Question ID : 630680378002
Option 1 ID : 6306801473070
Option 2 ID : 6306801473069
Option 3 ID : 6306801473067
Option 4 ID : 6306801473068
Status : Answered
Chosen Option : 2

Q.19 Select the most appropriate option that can substitute the underlined segment in the given sentence. If no substitution is required, select 'No substitution'.
No matter how hard work you, your boss will not recognise your efforts.

- Ans
- ☒ 1. no substitution
 - ☒ 2. hard you work
 - ☒ 3. hardly you work
 - ☒ 4. work you do hard

Question ID : 630680176609
Option 1 ID : 630680684659
Option 2 ID : 630680684656
Option 3 ID : 630680684657
Option 4 ID : 630680684658
Status : Answered
Chosen Option : 2

Q.20 Select the word **OPPOSITE** in meaning to the underlined word in the given sentence.
Feeling discouraged, she finally finds the motivation for pursuing her goal.

- Ans** ☒ 1. energetic
☒ 2. inspired
☒ 3. disappointed
☒ 4. admired

Question ID : 630680517430
Option 1 ID : 6306802022118
Option 2 ID : 6306802022116
Option 3 ID : 6306802022119
Option 4 ID : 6306802022117
Status : Answered
Chosen Option : 2

Comprehension:

In the following passage, some words have been deleted. Read the passage carefully and select the most appropriate option to fill in each blank.
I have a recurring dream. Actually, I have a few: one is about dismembering a body, I'd rather not get into it, but the (1) _____ pertinent one is about college. It's the end of the semester, and I suddenly (2) _____ that there is a class I forgot to attend, ever, and now I have to sit for the final exam. I wake up panicked, my GPA in peril. How could I have done this? Why do I so (3) _____ dissatisfy myself? Then I remember I haven't been in college in more than a decade.
Someone with (4) _____ knowledge of my academic career might point out that this nightmare scenario is not that far removed from my actual collegiate experience, and that at certain times in my life, it did not take the magic of slumber to find me completely unprepared for a final. And, well, (5) _____ of what may or may not be true of my personal scholastic rigour, I suspect the school-stress dream is quite a common one.

SubQuestion No : 21

Q.21 Select the most appropriate option to fill in blank number 1.

- Ans** ☒ 1. more
☒ 2. better
☒ 3. best
☒ 4. strong

Question ID : 630680164281
Option 1 ID : 630680636248
Option 2 ID : 630680636249
Option 3 ID : 630680636251
Option 4 ID : 630680636250
Status : Answered
Chosen Option : 3

Comprehension:

In the following passage, some words have been deleted. Read the passage carefully and select the most appropriate option to fill in each blank.

I have a recurring dream. Actually, I have a few: one is about dismembering a body, I'd rather not get into it, but the (1) _____ pertinent one is about college. It's the end of the semester, and I suddenly (2) _____ that there is a class I forgot to attend, ever, and now I have to sit for the final exam. I wake up panicked, my GPA in peril. How could I have done this? Why do I so (3) _____ dissatisfy myself? Then I remember I haven't been in college in more than a decade.

Someone with (4) _____ knowledge of my academic career might point out that this nightmare scenario is not that far removed from my actual collegiate experience, and that at certain times in my life, it did not take the magic of slumber to find me completely unprepared for a final. And, well, (5) _____ of what may or may not be true of my personal scholastic rigour, I suspect the school-stress dream is quite a common one.

SubQuestion No : 22

Q.22 Select the most appropriate option to fill in blank number 2.

Ans ☒ 1. promise

☒ 2. realise

☒ 3. praise

☒ 4. offer

Question ID : 630680164282

Option 1 ID : 630680636252

Option 2 ID : 630680636254

Option 3 ID : 630680636255

Option 4 ID : 630680636253

Status : Answered

Chosen Option : 2

Comprehension:

In the following passage, some words have been deleted. Read the passage carefully and select the most appropriate option to fill in each blank.

I have a recurring dream. Actually, I have a few: one is about dismembering a body, I'd rather not get into it, but the (1) _____ pertinent one is about college. It's the end of the semester, and I suddenly (2) _____ that there is a class I forgot to attend, ever, and now I have to sit for the final exam. I wake up panicked, my GPA in peril. How could I have done this? Why do I so (3) _____ dissatisfy myself? Then I remember I haven't been in college in more than a decade.

Someone with (4) _____ knowledge of my academic career might point out that this nightmare scenario is not that far removed from my actual collegiate experience, and that at certain times in my life, it did not take the magic of slumber to find me completely unprepared for a final. And, well, (5) _____ of what may or may not be true of my personal scholastic rigour, I suspect the school-stress dream is quite a common one.

SubQuestion No : 23

Q.23 Select the most appropriate option to fill in blank number 3.

Ans ☒ 1. conflictly

☒ 2. unpredictability

☒ 3. consistently

☒ 4. clumsily

Question ID : 630680164283

Option 1 ID : 630680636259

Option 2 ID : 630680636258

Option 3 ID : 630680636257

Option 4 ID : 630680636256

Status : Answered

Chosen Option : 4

Comprehension:

In the following passage, some words have been deleted. Read the passage carefully and select the most appropriate option to fill in each blank.

I have a recurring dream. Actually, I have a few: one is about dismembering a body, I'd rather not get into it, but the (1) _____ pertinent one is about college. It's the end of the semester, and I suddenly (2) _____ that there is a class I forgot to attend, ever, and now I have to sit for the final exam. I wake up panicked, my GPA in peril. How could I have done this? Why do I so (3) _____ dissatisfy myself? Then I remember I haven't been in college in more than a decade.

Someone with (4) _____ knowledge of my academic career might point out that this nightmare scenario is not that far removed from my actual collegiate experience, and that at certain times in my life, it did not take the magic of slumber to find me completely unprepared for a final. And, well, (5) _____ of what may or may not be true of my personal scholastic rigour, I suspect the school-stress dream is quite a common one.

SubQuestion No : 24

Q.24 Select the most appropriate option to fill in blank number 4.

- Ans
- ☒ 1. bleak
 - ☒ 2. instigate
 - ☒ 3. distant
 - ☒ 4. remote

Question ID : 630680164284

Option 1 ID : 630680636261

Option 2 ID : 630680636262

Option 3 ID : 630680636260

Option 4 ID : 630680636263

Status : Answered

Chosen Option : 1

Comprehension:

In the following passage, some words have been deleted. Read the passage carefully and select the most appropriate option to fill in each blank.

I have a recurring dream. Actually, I have a few: one is about dismembering a body, I'd rather not get into it, but the (1) _____ pertinent one is about college. It's the end of the semester, and I suddenly (2) _____ that there is a class I forgot to attend, ever, and now I have to sit for the final exam. I wake up panicked, my GPA in peril. How could I have done this? Why do I so (3) _____ dissatisfy myself? Then I remember I haven't been in college in more than a decade.

Someone with (4) _____ knowledge of my academic career might point out that this nightmare scenario is not that far removed from my actual collegiate experience, and that at certain times in my life, it did not take the magic of slumber to find me completely unprepared for a final. And, well, (5) _____ of what may or may not be true of my personal scholastic rigour, I suspect the school-stress dream is quite a common one.

SubQuestion No : 25

Q.25 Select the most appropriate option to fill in blank number 5.

- Ans
- ☒ 1. regardless
 - ☒ 2. notwithstanding
 - ☒ 3. nevertheless
 - ☒ 4. inasmuch

Question ID : 630680164285

Option 1 ID : 630680636264

Option 2 ID : 630680636267

Option 3 ID : 630680636266

Option 4 ID : 630680636265

Status : Answered

Chosen Option : 1