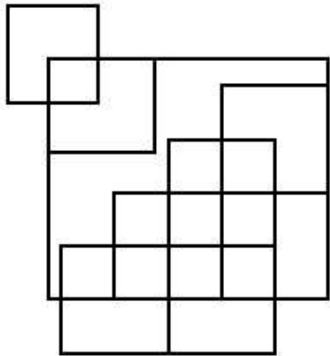


Combined Graduate Level Examination 2024 Tier I

Roll Number	
Candidate Name	
Venue Name	
Exam Date	17/09/2024
Exam Time	12:30 PM - 1:30 PM
Subject	Combined Graduate Level Examination Tier I

Section : General Intelligence and Reasoning

Q.1 How many squares are there in the given figure?



Ans ☒ 1. 20

☐ 2. 17

☐ 3. 19

☐ 4. 18

Question ID : 630680163564

Option 1 ID : 630680633441

Option 2 ID : 630680633440

Option 3 ID : 630680633442

Option 4 ID : 630680633443

Status : Answered

Chosen Option : 3

# Test Prime

**ALL EXAMS,  
ONE SUBSCRIPTION**



**70,000+**  
Mock Tests



**Personalised  
Report Card**



**Unlimited  
Re-Attempt**



**600+**  
Exam Covered



**Previous Year  
Papers**

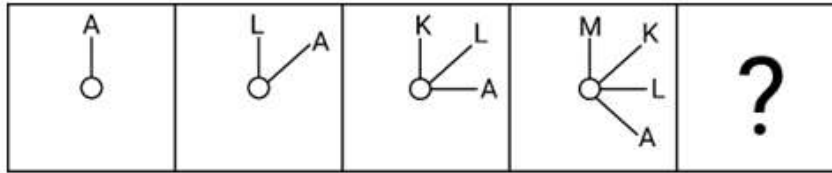


**500%**  
Refund



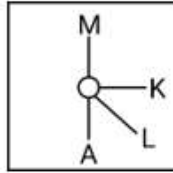
**ATTEMPT FREE MOCK NOW**

Q.2 Identify the figure given in the options which when put in place of ? will logically complete the series.

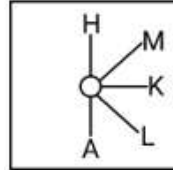


Ans

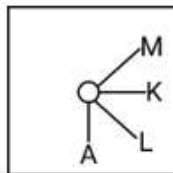
✗ 1.



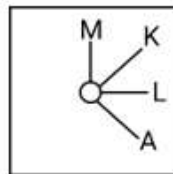
✓ 2.



✗ 3.



✗ 4.



Question ID : 630680524394

Option 1 ID : 6306802049678

Option 2 ID : 6306802049677

Option 3 ID : 6306802049676

Option 4 ID : 6306802049675

Status : Answered

Chosen Option : 2

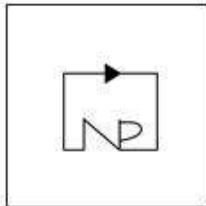
Q.3 Select the option figure in which the given figure (X) is embedded (rotation is NOT allowed).



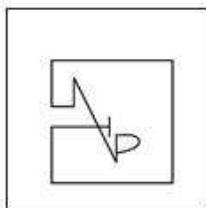
(X)

Ans

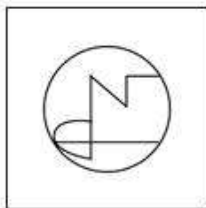
✗ 1.



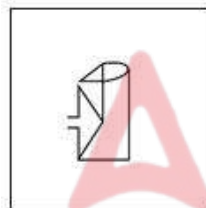
✗ 2.



✗ 3.

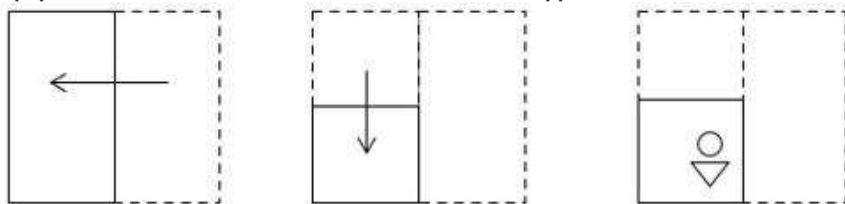


✓ 4.



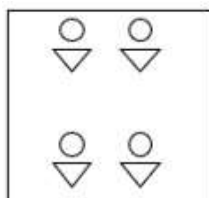
Question ID : 630680296895  
Option 1 ID : 6306801155225  
Option 2 ID : 6306801155226  
Option 3 ID : 6306801155224  
Option 4 ID : 6306801155223  
Status : Answered  
Chosen Option : 3

Q.4 A paper is folded and cut as shown below. How will it appear when unfolded?

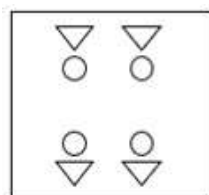


Ans

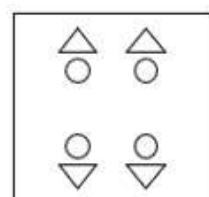
✗ 1.



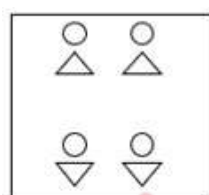
✗ 2.



✓ 3.



✗ 4.



Question ID : 630680147858

Option 1 ID : 630680572146

Option 2 ID : 630680572149

Option 3 ID : 630680572147

Option 4 ID : 630680572148

Status : Answered

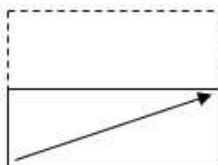
Chosen Option : 3

Q.5 A transparent sheet with a pattern is given in the following figure. Identify from amongst the options as to how the pattern would appear when the transparent sheet is folded at the middle horizontal line.

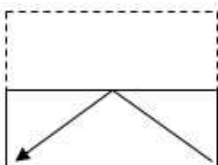


Ans

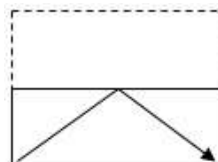
✗ 1.



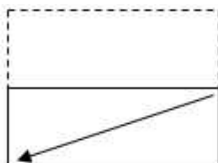
✗ 2.



✓ 3.



✗ 4.



Question ID : 630680287579

Option 1 ID : 6306801118225

Option 2 ID : 6306801118223

Option 3 ID : 6306801118224

Option 4 ID : 6306801118226

Status : Answered

Chosen Option : 3

Q.6 'Noise' is related to 'Silence' in the same way as 'Light' is related to '\_\_\_\_\_'.  
 Ans

✗ 1. Warmth

✗ 2. Radiant

✗ 3. Brightness

✓ 4. Darkness

Question ID : 630680416732

Option 1 ID : 6306801625692

Option 2 ID : 6306801625694

Option 3 ID : 6306801625693

Option 4 ID : 6306801625691

Status : Answered

Chosen Option : 4

**Q.7** In this question, three statements are given, followed by three conclusions numbered I, II and III. Assuming the statements to be true, even if they seem to be at variance with commonly known facts, decide which of the conclusions logically follow(s) from the statements.

**Statements:**

All computers are printers.

Some printers are laptops.

All laptops are mobiles.

**Conclusions:**

I. Some printers are computers.

II. Some laptops are printers.

III. Some mobiles are laptops.

**Ans** ☒ 1. Only conclusions II and III follow.

☒ 2. Only conclusion III follows.

☒ 3. Only conclusions I and III follow.

☒ 4. All the conclusions follow.

Question ID : 630680416520

Option 1 ID : 6306801624844

Option 2 ID : 6306801624845

Option 3 ID : 6306801624843

Option 4 ID : 6306801624846

Status : Answered

Chosen Option : 4

**Q.8** In a certain code language, 'TIDE' is coded as '9457' and 'DENT' is coded as '7593'. What is the code for 'N' in that language?

**Ans** ☒ 1. 5

☒ 2. 9

☒ 3. 7

☒ 4. 3

Question ID : 630680222449

Option 1 ID : 630680863557

Option 2 ID : 630680863555

Option 3 ID : 630680863558

Option 4 ID : 630680863556

Status : Answered

Chosen Option : 4

**Q.9** Which of the following terms will replace the question mark (?) in the given series?  
EQBY, GPDX, ?, KNHV, MMJU

**Ans** ☒ 1. IPFW

☒ 2. HOFW

☒ 3. IOEW

☒ 4. IOFW

Question ID : 630680416897

Option 1 ID : 6306801626354

Option 2 ID : 6306801626352

Option 3 ID : 6306801626351

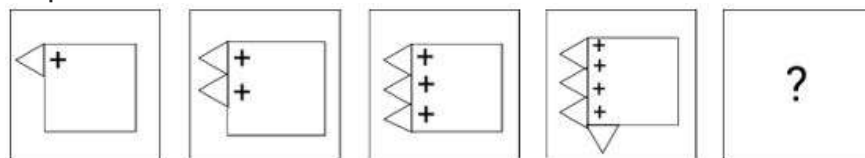
Option 4 ID : 6306801626353

Status : Answered

Chosen Option : 4



Q.10 Identify the figure given in the options which when put in place of '?' will logically complete the series.



Ans

- ✗ 1.
- ✗ 2.
- ✓ 3.
- ✗ 4.

Question ID : 630680366158  
Option 1 ID : 6306801426157  
Option 2 ID : 6306801426158  
Option 3 ID : 6306801426159  
Option 4 ID : 6306801426160  
Status : Answered  
Chosen Option : 3

Q.11 Read the given statements and conclusions carefully. You have to take the given statements to be true even if they seem to be at variance from commonly known facts. You have to decide which conclusion/s logically follow/s from the given statements.

Statements:

Some telephones are curtains.

All curtains are lamps.

No lamps is books.

Conclusions:

(I) All lamps are telephones.

(II) No books is lamps.

- Ans ✓ 1. Only conclusion (II) is follow
- ✗ 2. Neither conclusion (I) nor (II) is follow
- ✗ 3. Only conclusion (I) is follow
- ✗ 4. Both conclusions (I) and (II) are follow

Question ID : 630680392635  
Option 1 ID : 6306801530887  
Option 2 ID : 6306801530888  
Option 3 ID : 6306801530886  
Option 4 ID : 6306801530889  
Status : Answered  
Chosen Option : 1



Q.12 In a certain code language, 'What you think you become' is written as 'Fe Mo Su Ta Za' and 'What you think you achieve' is written as 'Mo Su Te Fe Za'. How will 'achieve' be written in that language?

- Ans
- ☒ 1. Mo
  - ☒ 2. Fe
  - ☒ 3. Za
  - ☒ 4. Te

Question ID : 630680339167  
 Option 1 ID : 6306801319237  
 Option 2 ID : 6306801319239  
 Option 3 ID : 6306801319238  
 Option 4 ID : 6306801319240  
 Status : Answered  
 Chosen Option : 4

Q.13 Select the option that represents the letters that when placed from left to right in the blanks below will complete the given letter series.  
 M N \_ O J K M \_ Q O J K \_ N Q \_ J K M N Q O \_ K M N

- Ans
- ☒ 1. QMNJO
  - ☒ 2. QNJMO
  - ☒ 3. QNMOJ
  - ☒ 4. QNMJO

Question ID : 630680416263  
 Option 1 ID : 6306801623815  
 Option 2 ID : 6306801623816  
 Option 3 ID : 6306801623818  
 Option 4 ID : 6306801623817  
 Status : Answered  
 Chosen Option : 3

Q.14 34 is related to 191 by certain logic. Following the same logic, 56 is related to 301. To which of the following is 63 related, following the same logic?  
 (NOTE : Operations should be performed on the whole numbers, without breaking down the numbers into its constituent digits. E.g. 13 – Operations on 13 such as adding /deleting /multiplying etc., to 13 can be performed. Breaking down 13 into 1 and 3 and then performing mathematical operations on 1 and 3 is not allowed.)

- Ans
- ☒ 1. 340
  - ☒ 2. 386
  - ☒ 3. 336
  - ☒ 4. 319

Question ID : 630680326551  
 Option 1 ID : 6306801270289  
 Option 2 ID : 6306801270292  
 Option 3 ID : 6306801270290  
 Option 4 ID : 6306801270291  
 Status : Not Answered  
 Chosen Option : --

Q.15 In a certain code language,

'A + B' means 'A is the mother of B';  
'A - B' means 'A is the brother of B';  
'A × B' means 'A is the wife of B' and  
'A ÷ B' means 'A is the father of B'.

Based on the above, how is 5 related to 2 if '5 ÷ 1 × 3 ÷ 4 - 2'?

- Ans
- ☐ 1. Mother's mother
  - ☐ 2. Father's father
  - ☒ 3. Mother's father
  - ☐ 4. Father's mother

Question ID : 630680300376  
Option 1 ID : 6306801168406  
Option 2 ID : 6306801168403  
Option 3 ID : 6306801168404  
Option 4 ID : 6306801168405  
Status : Answered  
Chosen Option : 2

Q.16 Four letter-clusters have been given, out of which three are alike in some manner and one is different. Select the letter-cluster that is different.

Note: The odd one out is not based on the number of consonants/vowels or their position in the letter cluster.

- Ans
- ☐ 1. LPN
  - ☒ 2. GIK
  - ☐ 3. HLJ
  - ☐ 4. BFD

Question ID : 63068083231  
Option 1 ID : 630680322787  
Option 2 ID : 630680322786  
Option 3 ID : 630680322784  
Option 4 ID : 630680322785  
Status : Answered  
Chosen Option : 2

Q.17 27 is related to 119 following a certain logic. Following the same logic, 33 is related to 143. To which of the following is 42 related, following the same logic? (NOTE : Operations should be performed on the whole numbers, without breaking down the numbers into its constituent digits. E.g. 13 – Operations on 13 such as adding /deleting /multiplying etc., to 13 can be performed. Breaking down 13 into 1 and 3 and then performing mathematical operations on 1 and 3 is not allowed.)

- Ans
- ☐ 1. 162
  - ☐ 2. 153
  - ☒ 3. 179
  - ☐ 4. 188

Question ID : 630680326610  
Option 1 ID : 6306801270525  
Option 2 ID : 6306801270526  
Option 3 ID : 6306801270528  
Option 4 ID : 6306801270527  
Status : Answered  
Chosen Option : 3

**Q.18** Select the number that will come in the place of the question mark(?), if '+' and '-' are interchanged and 'x' and '÷' are interchanged  
 $31 \div 3 - 186 \times 6 + 17 = ?$

**Ans** ✓ 1. 107

✗ 2. 96

✗ 3. 118

✗ 4. 103

Question ID : 630680163580

Option 1 ID : 630680633506

Option 2 ID : 630680633504

Option 3 ID : 630680633507

Option 4 ID : 630680633505

Status : Answered

Chosen Option : 1

**Q.19** The same operation(s) are followed in all the given number pairs except one. Find that odd number pair.

(NOTE : Operations should be performed on the whole numbers, without breaking down the numbers into its constituent digits. E.g. 13 – Operations on 13 such as adding /deleting /multiplying etc., to 13 can be performed. Breaking down 13 into 1 and 3 and then performing mathematical operations on 1 and 3 is not allowed.)

**Ans** ✓ 1. 40 : 52

✗ 2. 45 : 54

✗ 3. 35 : 42

✗ 4. 55 : 66

Question ID : 630680412040

Option 1 ID : 6306801606998

Option 2 ID : 6306801606996

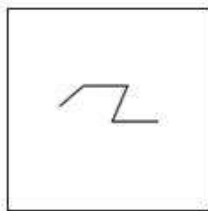
Option 3 ID : 6306801606995

Option 4 ID : 6306801606997

Status : Answered

Chosen Option : 1

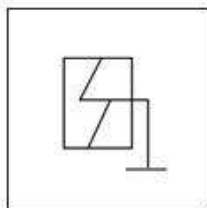
Q.20 Select the option figure in which the given figure (X) is embedded (rotation is NOT allowed).



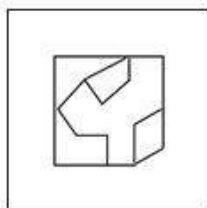
(X)

Ans

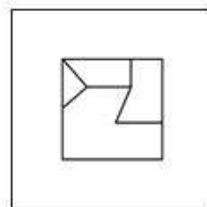
✗ 1.



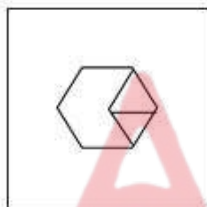
✗ 2.



✓ 3.



✗ 4.



Question ID : 630680296890  
Option 1 ID : 6306801155203  
Option 2 ID : 6306801155204  
Option 3 ID : 6306801155205  
Option 4 ID : 6306801155206  
Status : Answered  
Chosen Option : 3

Q.21 'ACKO' is related to 'ZXPL' in a certain way based on the English alphabetical order. In the same way, 'HIND' is related to 'SRMW'. To which of the following is 'PUKE' related, following the same logic?

Ans

✗ 1. JGQW

✗ 2. LFQV

✓ 3. KFPV

✗ 4. JGPW

Question ID : 630680416363  
Option 1 ID : 6306801624218  
Option 2 ID : 6306801624216  
Option 3 ID : 6306801624215  
Option 4 ID : 6306801624217  
Status : Answered  
Chosen Option : 3

Q.22 Select the option in which the numbers share the same relationship as that shared by the given pair of numbers.  
(NOTE: Operations should be performed on the whole numbers, without breaking down the numbers into its constituent digits. E.g. 13 – Operations on 13 such as adding/deleting/multiplying etc. to 13 can be performed. Breaking down 13 into 1 and 3 and then performing mathematical operations on 1 and 3 is not allowed.)

8 : 79  
6 : 51

- Ans ☐ 1. 7 : 62  
☐ 2. 4 : 32  
☒ 3. 9 : 96  
☐ 4. 5 : 39

Question ID : 630680326559  
Option 1 ID : 6306801270322  
Option 2 ID : 6306801270323  
Option 3 ID : 6306801270324  
Option 4 ID : 6306801270321  
Status : Answered  
Chosen Option : 4

Q.23 Each of the letters in the word 'LASTING' is arranged in the English alphabetical order. How many letters are there in the English alphabetical series between the letter which is second from the left end and the one which is fourth from the right end in the new letter-cluster thus formed?

- Ans ☐ 1. Five  
☐ 2. Six  
☒ 3. Four  
☐ 4. Three

Question ID : 630680327768  
Option 1 ID : 6306801275063  
Option 2 ID : 6306801275064  
Option 3 ID : 6306801275062  
Option 4 ID : 6306801275061  
Status : Not Answered  
Chosen Option : --

Q.24 Select the number from among the given options that can replace the question mark (?) in the following series.  
949, 1006, 1066, 1129, 1195, ?

- Ans ☒ 1. 1264  
☐ 2. 1233  
☐ 3. 1254  
☐ 4. 1244

Question ID : 630680411891  
Option 1 ID : 6306801606401  
Option 2 ID : 6306801606402  
Option 3 ID : 6306801606400  
Option 4 ID : 6306801606399  
Status : Answered  
Chosen Option : 1

Q.25 What will come in place of '?' in the following equation, if '+' and '-' are interchanged and 'x' and '÷' are interchanged?  
 $63 \times 9 + 21 - 4 \div 5 = ?$

Ans ☒ 1. 5

☐ 2. 6

☐ 3. 4

☐ 4. 7

Question ID : 630680327969

Option 1 ID : 6306801275846

Option 2 ID : 6306801275847

Option 3 ID : 6306801275845

Option 4 ID : 6306801275848

Status : Answered

Chosen Option : 1

Section : General Awareness

Q.1 Which of the following articles from Directive Principles of state policy mentions about organization of Village Panchayats?

Ans ☒ 1. Article 40

☐ 2. Article 36

☐ 3. Article 42

☐ 4. Article 38

Question ID : 630680329452

Option 1 ID : 6306801281551

Option 2 ID : 6306801281549

Option 3 ID : 6306801281552

Option 4 ID : 6306801281550

Status : Not Answered

Chosen Option : --

Q.2 Who among the following sports persons is designated as brand ambassador for Nikshay Mitra, an initiative under Pradhan Mantri TB Mukh Bharat Abhiyaan by Ministry of Health and Family welfare of GOI in November 2022?

Ans ☒ 1. Deepa Malik

☐ 2. Abhinav Bindra

☐ 3. Pullela Gopichand

☐ 4. Mary Kom

Question ID : 630680413024

Option 1 ID : 6306801610922

Option 2 ID : 6306801610920

Option 3 ID : 6306801610919

Option 4 ID : 6306801610921

Status : Not Answered

Chosen Option : --

Q.3 Which of the following was the mascot of the Khelo India University Games 2022?

- Ans ☐ 1. Moga  
☐ 2. Bheema  
☒ 3. Jitu  
☐ 4. Saavaj

Question ID : 630680510801  
Option 1 ID : 6306801996337  
Option 2 ID : 6306801996335  
Option 3 ID : 6306801996334  
Option 4 ID : 6306801996336  
Status : Not Answered  
Chosen Option : --

Q.4 Which of the following statements about the aims of National Mission for Sustainable Agriculture (NMSA) of India is/are correct?  
1.To make agriculture more productive.  
2.To make agriculture more sustainable.  
3.To promote organic farming.

- Ans ☐ 1. Only 1 is correct.  
☐ 2. Only 2 and 3 are correct.  
☐ 3. Only 1 and 2 are correct.  
☒ 4. 1, 2 and 3 are correct.

Question ID : 630680117306  
Option 1 ID : 630680454510  
Option 2 ID : 630680454513  
Option 3 ID : 630680454511  
Option 4 ID : 630680454512  
Status : Not Answered  
Chosen Option : --

Q.5 On 29<sup>th</sup> October 2020, the Ministry of Science and Technology launched the SERB-POWER Scheme. What is the objective of the scheme?

- Ans ☐ 1. To strengthen the solar programme of India with France  
☒ 2. To mitigate gender disparity in science and engineering research funding in various academic programmes and laboratories  
☐ 3. To allow reservation for women in the Parliament and Judiciary  
☐ 4. To allow reservation for women in the Ministry of Science and Technology

Question ID : 630680100089  
Option 1 ID : 630680389053  
Option 2 ID : 630680389055  
Option 3 ID : 630680389054  
Option 4 ID : 630680389052  
Status : Not Answered  
Chosen Option : --



Q.6 Samata Sainik Dal was formed in 1927 by whom among the following personalities?

- Ans ☒ 1. Savitribai Phule  
☒ 2. Mahatma Gandhi  
☒ 3. Narayana Guru  
☒ 4. BR Ambedkar

Question ID : 630680412321  
 Option 1 ID : 6306801608109  
 Option 2 ID : 6306801608108  
 Option 3 ID : 6306801608110  
 Option 4 ID : 6306801608107  
 Status : Not Answered  
 Chosen Option : --

Q.7 Which of the following is NOT a halogen gas?

- Ans ☒ 1. Cl  
☒ 2. He  
☒ 3. Br  
☒ 4. F

Question ID : 630680102240  
 Option 1 ID : 630680397245  
 Option 2 ID : 630680397243  
 Option 3 ID : 630680397246  
 Option 4 ID : 630680397244  
 Status : Answered  
 Chosen Option : 4

Q.8 The chemical formula of glucose is  $C_6H_{12}O_6$ . The weight % of carbon in glucose is:

- Ans ☒ 1. 53  
☒ 2. 25  
☒ 3. 72  
☒ 4. 40

Question ID : 630680517114  
 Option 1 ID : 6306802020852  
 Option 2 ID : 6306802020855  
 Option 3 ID : 6306802020854  
 Option 4 ID : 6306802020853  
 Status : Answered  
 Chosen Option : 3

Q.9 Deimachus who was a Greek ambassador came to India during the reign of the Mauryan king, \_\_\_\_\_.

- Ans ☒ 1. Shatadhanvan  
☒ 2. Ashoka  
☒ 3. Chandragupta Maurya  
☒ 4. Bindusara

Question ID : 630680412485  
 Option 1 ID : 6306801608766  
 Option 2 ID : 6306801608765  
 Option 3 ID : 6306801608763  
 Option 4 ID : 6306801608764  
 Status : Not Answered  
 Chosen Option : --

Q.10 Which of the following countries has the highest Hindu population after India?

- Ans ☒ 1. Sri Lanka  
☒ 2. Bhutan  
☒ 3. Myanmar  
☒ 4. Nepal

Question ID : 630680409673  
Option 1 ID : 6306801597522  
Option 2 ID : 6306801597523  
Option 3 ID : 6306801597524  
Option 4 ID : 6306801597521  
Status : Not Answered  
Chosen Option : --

Q.11 Indira PP Bora is a Padma Shri Awardee 2020 for her contribution to which Indian classical dance?

- Ans ☒ 1. Bharatanatyam  
☒ 2. Kathak  
☒ 3. Kuchipudi  
☒ 4. Sattriya

Question ID : 630680409340  
Option 1 ID : 6306801596192  
Option 2 ID : 6306801596191  
Option 3 ID : 6306801596190  
Option 4 ID : 6306801596189  
Status : Answered  
Chosen Option : 4

Q.12 Which article of the Constitution of India lays down that it shall be the duty of the Advocate-General to give advice to the Government of the State upon legal matters?

- Ans ☒ 1. Article 168  
☒ 2. Article 167  
☒ 3. Article 166  
☒ 4. Article 165

Question ID : 630680302225  
Option 1 ID : 6306801175577  
Option 2 ID : 6306801175576  
Option 3 ID : 6306801175575  
Option 4 ID : 6306801175574  
Status : Answered  
Chosen Option : 3

Q.13 Which of the following peninsular rivers falls into the Arabian Sea?

- Ans ☒ 1. Mahanadi river  
☒ 2. Krishna river  
☒ 3. Sabarmati river  
☒ 4. Godavari river

Question ID : 630680401709  
Option 1 ID : 6306801566612  
Option 2 ID : 6306801566611  
Option 3 ID : 6306801566613  
Option 4 ID : 6306801566610  
Status : Answered  
Chosen Option : 1

Q.14 Follow On is related to which of the following cricket formats?

- Ans ☒ 1. Only Test Matches  
☐ 2. Both test and One-day matches  
☐ 3. Only One Day matches  
☐ 4. Only T20 matches

Question ID : 630680510767  
Option 1 ID : 6306801996199  
Option 2 ID : 6306801996201  
Option 3 ID : 6306801996198  
Option 4 ID : 6306801996200  
Status : Not Answered  
Chosen Option : --

Q.15 Who among the following rulers built five astronomical observatories at different places in north India?

- Ans ☐ 1. Madho Singh  
☐ 2. Maharana Pratap  
☐ 3. Sawai Mansingh  
☒ 4. Sawai Jaisingh II

Question ID : 630680511547  
Option 1 ID : 6306801999313  
Option 2 ID : 6306801999311  
Option 3 ID : 6306801999310  
Option 4 ID : 6306801999312  
Status : Not Answered  
Chosen Option : --

Q.16 Which of the following festivals is celebrated in Madhya Pradesh?

- Ans ☐ 1. Thaipusam Festival  
☐ 2. Bihu Festival  
☐ 3. Jaisalmer Desert Festival  
☒ 4. Khajuraho Dance Festival

Question ID : 630680160213  
Option 1 ID : 630680620225  
Option 2 ID : 630680620226  
Option 3 ID : 630680620224  
Option 4 ID : 630680620227  
Status : Answered  
Chosen Option : 1

Q.17 In the ancient temple of Mahadev at Mahabaleshwar, the spout emerging from the mouth of a cow statue is the source of which river basin?

- Ans ☐ 1. Kaveri  
☐ 2. Godavari  
☐ 3. Narmada  
☒ 4. Krishna

Question ID : 630680305516  
Option 1 ID : 6306801188439  
Option 2 ID : 6306801188440  
Option 3 ID : 6306801188438  
Option 4 ID : 6306801188437  
Status : Answered  
Chosen Option : 4

Q.18 Which is a serious contagious bacterial infection that usually affects the mucous membranes of the nose and throat?

Ans ☒ 1. Diphtheria

☐ 2. Meningococcal

☐ 3. Shigellosis

☐ 4. Chlamydia

Question ID : 630680407468  
Option 1 ID : 6306801588812  
Option 2 ID : 6306801588811  
Option 3 ID : 6306801588813  
Option 4 ID : 6306801588810  
Status : Not Answered  
Chosen Option : --

Q.19 Who among the following is a Sarod player popularly known as 'Sarod Samrat'?

Ans ☒ 1. Ustad Amjad Ali Khan Bangash

☐ 2. Pandit Kishan Maharaj

☐ 3. Pandit Shivkumar Sharma

☐ 4. Pandit Ravi Shankar

Question ID : 630680560775  
Option 1 ID : 6306802192083  
Option 2 ID : 6306802192080  
Option 3 ID : 6306802192082  
Option 4 ID : 6306802192081  
Status : Answered  
Chosen Option : 1

Q.20 What was a significant negative environmental impact of the Green Revolution?

Ans ☐ 1. Ozone layer depletion

☐ 2. Increase in air pollution

☐ 3. Deforestation

☒ 4. Soil degradation

Question ID : 630680411106  
Option 1 ID : 6306801603179  
Option 2 ID : 6306801603178  
Option 3 ID : 6306801603176  
Option 4 ID : 6306801603177  
Status : Answered  
Chosen Option : 1

Q.21 What is subtracted from GDP to arrive at NDP?

Ans ☐ 1. Net indirect taxes

☐ 2. Subsidies

☒ 3. Depreciation

☐ 4. Net factor income from abroad

Question ID : 630680103675  
Option 1 ID : 630680402931  
Option 2 ID : 630680402934  
Option 3 ID : 630680402932  
Option 4 ID : 630680402933  
Status : Answered  
Chosen Option : 3

Q.22 The Maharashtra Bhushan was conferred upon \_\_\_\_\_ in the year 2002.

- Ans
- ☐ 1. Pandit Ravi Shankar
  - ☐ 2. Pandit Jasraj
  - ☐ 3. Pandit Hari Prasad Chaurasia
  - ☒ 4. Pandit Bhimsen Joshi

Question ID : 6306801048035  
Option 1 ID : 6306804114187  
Option 2 ID : 6306804114188  
Option 3 ID : 6306804114186  
Option 4 ID : 6306804114189  
Status : Not Answered  
Chosen Option : --

Q.23 What is the tenure of office for the Chief Election Commissioner?

- Ans
- ☐ 1. 5 years or up to the age of 60 years
  - ☐ 2. 6 years or up to the age of 60 years
  - ☒ 3. 6 years or up to the age of 65 years
  - ☐ 4. 5 years or up to the age of 65 years

Question ID : 630680413119  
Option 1 ID : 6306801611302  
Option 2 ID : 6306801611300  
Option 3 ID : 6306801611301  
Option 4 ID : 6306801611299  
Status : Answered  
Chosen Option : 4

Q.24 Which of the following animals was the emblem of the Chola dynasty?

- Ans
- ☐ 1. Horse
  - ☐ 2. Wolf
  - ☐ 3. Elephant
  - ☒ 4. Tiger

Question ID : 630680412284  
Option 1 ID : 6306801607962  
Option 2 ID : 6306801607961  
Option 3 ID : 6306801607960  
Option 4 ID : 6306801607959  
Status : Answered  
Chosen Option : 3

Q.25 Which of the following does NOT belong to the category of Porifera?

- Ans
- ☐ 1. Spongilla
  - ☒ 2. Hydra
  - ☐ 3. Euplectella
  - ☐ 4. Sycon

Question ID : 630680517147  
Option 1 ID : 6306802020987  
Option 2 ID : 6306802020985  
Option 3 ID : 6306802020984  
Option 4 ID : 6306802020986  
Status : Answered  
Chosen Option : 2

Q.1 Find the least value of x for which  $57x716$  is divisible by 9.

- Ans
- ☒ 1. 8
  - ☒ 2. 9
  - ☒ 3. 0
  - ☒ 4. 1

Question ID : 630680108682  
 Option 1 ID : 630680421658  
 Option 2 ID : 630680421657  
 Option 3 ID : 630680421659  
 Option 4 ID : 630680421656  
 Status : Answered  
 Chosen Option : 4

Q.2 AB and CD are two parallel chords drawn in a circle with centre O. The distance between the two chords is 21 cm. If the lengths of AB and CD are 24 cm and 18 cm, respectively, then the radius of the circle is equal to:

- Ans
- ☒ 1. 15 cm
  - ☒ 2. 18 cm
  - ☒ 3. 24 cm
  - ☒ 4. 20 cm

Question ID : 630680357967  
 Option 1 ID : 6306801393857  
 Option 2 ID : 6306801393858  
 Option 3 ID : 6306801393860  
 Option 4 ID : 6306801393859  
 Status : Not Answered  
 Chosen Option : --

Q.3 For what value of k, the system of equations  $4x + 12y + 36 = 0$  and  $5x + ky + 45 = 0$  has an infinite number of solutions?

- Ans
- ☒ 1. 22
  - ☒ 2. 20
  - ☒ 3. 25
  - ☒ 4. 15

Question ID : 630680198891  
 Option 1 ID : 630680771293  
 Option 2 ID : 630680771292  
 Option 3 ID : 630680771294  
 Option 4 ID : 630680771291  
 Status : Not Answered  
 Chosen Option : --

Q.4 M and N are, respectively, the centres of two circles of radii 12 cm and 8 cm. QR is the common tangent to the circles. If MN = 16 cm, then what will be the length of QR?

- Ans
- ☒ 1.  $5\sqrt{17}$  cm
  - ☒ 2.  $3\sqrt{19}$  cm
  - ☒ 3.  $6\sqrt{8}$  cm
  - ☒ 4.  $4\sqrt{15}$  cm

Question ID : 630680403939  
Option 1 ID : 6306801575243  
Option 2 ID : 6306801575245  
Option 3 ID : 6306801575244  
Option 4 ID : 6306801575242  
Status : Not Answered  
Chosen Option : --

Q.5 The table shows the production of different types of bikes (in thousands).

Years	2015	2016	2017	2018
Bikes				
A	157	194	271	290
B	138	225	146	206
C	255	227	213	239
D	196	304	162	224

The number of years, in which the production of bikes of type C is less than the average production of type A bikes over the years is

- Ans
- ☒ 1. 4%
  - ☒ 2. 2%
  - ☒ 3. 1%
  - ☒ 4. 3%

Question ID : 630680523806  
Option 1 ID : 6306802047377  
Option 2 ID : 6306802047375  
Option 3 ID : 6306802047376  
Option 4 ID : 6306802047378  
Status : Not Answered  
Chosen Option : --

Q.6 If  $a = x\cos\theta + y\sin\theta$  and  $b = x\sin\theta - y\cos\theta$ , then  $a^2 + b^2$  is equal to:

- Ans
- ☒ 1.  $x^2 + y^2$
  - ☒ 2.  $x + y$
  - ☒ 3.  $x^2 - y^2$
  - ☒ 4.  $x - y$

Question ID : 630680397684  
Option 1 ID : 6306801550662  
Option 2 ID : 6306801550663  
Option 3 ID : 6306801550661  
Option 4 ID : 6306801550664  
Status : Not Answered  
Chosen Option : --



Q.7 Simplify the following.

$$\left(5 - \frac{15}{16}\right) \times 1\frac{12}{13}$$

Ans

- ☒ 1.  $7\frac{11}{16}$   
☒ 2.  $5\frac{13}{16}$   
☒ 3.  $5\frac{11}{16}$   
☒ 4.  $7\frac{13}{16}$

Question ID : 630680399204  
 Option 1 ID : 6306801556764  
 Option 2 ID : 6306801556766  
 Option 3 ID : 6306801556765  
 Option 4 ID : 6306801556763  
 Status : Not Answered  
 Chosen Option : --

Q.8 Study the following table and answer the question that follows.  
Expenditures of a Company (in Lakh Rupees) Per Annum over Different Heads in the Given Years

Year	Item of Expenditure				
	Salary	Fuel and Transport	Bonus	Interest on Loans	Taxes
2010	310	98	3.84	23.4	83
2011	324	112	3.68	32.5	108
2012	338	101	3.00	41.6	74
2013	346	133	2.52	36.4	88
2014	410	142	3.96	49.4	98

The total amount of bonus paid by the company during the given period is approximately what percentage of the total amount of salary paid during this period? (Rounded off to the nearest integer.)

- Ans ☒ 1. 1.5%  
☒ 2. 1%  
☒ 3. 2.5%  
☒ 4. 2%

Question ID : 630680386865  
 Option 1 ID : 6306801508173  
 Option 2 ID : 6306801508170  
 Option 3 ID : 6306801508172  
 Option 4 ID : 6306801508171  
 Status : Not Answered  
 Chosen Option : --

**Q.9** If the height and diameter of a cylinder are 12 cm and 28 cm, respectively, then find the ratio of the total surface area to the curved surface area.

**Ans** ✓ 1. 13 : 6

✗ 2. 10 : 3

✗ 3. 13 : 5

✗ 4. 11 : 6

Question ID : 630680421534  
Option 1 ID : 6306801644602  
Option 2 ID : 6306801644599  
Option 3 ID : 6306801644600  
Option 4 ID : 6306801644601  
Status : Not Answered  
Chosen Option : --

**Q.10** In a company, the ratio of men and women is 5 : 3, respectively. When 150 additional women are employed in the company, the ratio becomes 5 : 4. How many men are employed in the company?

**Ans** ✗ 1. 850

✓ 2. 750

✗ 3. 550

✗ 4. 950

Question ID : 630680524267  
Option 1 ID : 6306802049219  
Option 2 ID : 6306802049222  
Option 3 ID : 6306802049221  
Option 4 ID : 6306802049220  
Status : Answered  
Chosen Option : 3

**Q.11** In right-angled triangle ABC,  $\angle C=90^\circ$ , CM is perpendicular on AB. If AB = 18 cm and BM = 6 cm, then find the length of CM.

**Ans** ✗ 1.  $2\sqrt{2}$  cm

✓ 2.  $6\sqrt{2}$  cm

✗ 3.  $7\sqrt{2}$  cm

✗ 4.  $4\sqrt{2}$  cm

Question ID : 630680401742  
Option 1 ID : 6306801566734  
Option 2 ID : 6306801566736  
Option 3 ID : 6306801566737  
Option 4 ID : 6306801566735  
Status : Answered  
Chosen Option : 2

**Q.12** A motorboat takes 18 hours to go downstream, and it takes 36 hours to return the same distance. Find the ratio of the speed of the boat in still water to the speed of the stream.

**Ans** ☒ 1. 3 : 2

☒ 2. 3 : 1

☒ 3. 2 : 1

☒ 4. 2 : 3

Question ID : 630680428504

Option 1 ID : 6306801672063

Option 2 ID : 6306801672062

Option 3 ID : 6306801672061

Option 4 ID : 6306801672060

Status : Answered

Chosen Option : 3

**Q.13** In a rhombus PQRS, O is any interior point such that  $OP = OR$ . What is the degree measure of  $\angle SOQ$ ?

**Ans** ☒ 1.  $240^\circ$

☒ 2.  $120^\circ$

☒ 3.  $180^\circ$

☒ 4.  $200^\circ$

Question ID : 630680379339

Option 1 ID : 6306801478402

Option 2 ID : 6306801478400

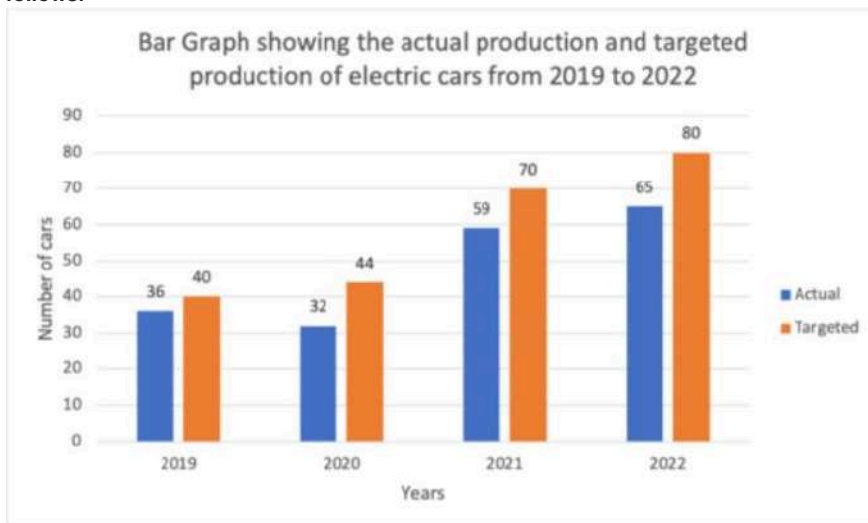
Option 3 ID : 6306801478399

Option 4 ID : 6306801478401

Status : Answered

Chosen Option : 3

Q.14 The given bar graph shows the actual production and targeted production of electric cars from 2019 to 2022. Study the given bar graph and answer the question that follows.



What is the ratio of the total targeted production of cars in 2021 and 2022 to the actual production of cars from 2019 to 2022 taken together?

- Ans
- ☒ 1. 25 : 36
  - ☒ 2. 36 : 25
  - ☒ 3. 25 : 32
  - ☒ 4. 32 : 25

Question ID : 630680421289

Option 1 ID : 6306801643634

Option 2 ID : 6306801643633

Option 3 ID : 6306801643632

Option 4 ID : 6306801643631

Status : Answered

Chosen Option : 3

Q.15 If  $\sin A + \cos A = \frac{1}{2\sqrt{2}}$ , then find the value of  $\sin^4 A + \cos^4 A$ .

- Ans
- ☒ 1.  $\frac{5}{13}$
  - ☒ 2.  $\frac{79}{128}$
  - ☒ 3.  $\frac{79}{126}$
  - ☒ 4.  $\frac{7}{13}$

Question ID : 630680526458

Option 1 ID : 6306802057900

Option 2 ID : 6306802057899

Option 3 ID : 6306802057898

Option 4 ID : 6306802057901

Status : Not Answered

Chosen Option : --

Q.16 If  $8a^3 + b^3 + 27c^3 = 18abc$ , then the relation among a, b and c is:

- Ans
- ☒ 1.  $b + 3c = 2a$
  - ☒ 2.  $b + 3c = -2a$
  - ☒ 3.  $2a + 3c = b$
  - ☒ 4.  $2a + b = 3c$

Question ID : 630680413514  
 Option 1 ID : 6306801612883  
 Option 2 ID : 6306801612882  
 Option 3 ID : 6306801612881  
 Option 4 ID : 6306801612880  
 Status : Not Answered  
 Chosen Option : --

Q.17

Find the value of  $\left[ \frac{4 \cos(90 - \theta) \sin^3(90 + \theta) - 4 \sin(90 + \theta) \cos^3(90 - \theta)}{\cos\left(\frac{180 + 2\theta}{2}\right)} \right]$ .

- Ans
- ☒ 1. -1
  - ☒ 2. 1
  - ☒ 3. 2
  - ☒ 4. 0

Question ID : 630680358058  
 Option 1 ID : 6306801394221  
 Option 2 ID : 6306801394223  
 Option 3 ID : 6306801394224  
 Option 4 ID : 6306801394222  
 Status : Not Answered  
 Chosen Option : --

Q.18 An article passing through two hands is sold at a total profit of 40% of the original cost price. If the first dealer makes a profit of 30%, then the profit percentage made by the second dealer is:

- Ans
- ☒ 1.  $7\frac{1}{13}\%$
  - ☒ 2.  $7\frac{9}{13}\%$
  - ☒ 3.  $6\frac{3}{13}\%$
  - ☒ 4.  $8\frac{6}{13}\%$

Question ID : 630680429012  
 Option 1 ID : 6306801674093  
 Option 2 ID : 6306801674095  
 Option 3 ID : 6306801674092  
 Option 4 ID : 6306801674094  
 Status : Answered  
 Chosen Option : 1

Q.19 If  $a^3 + 3a^2 + 3a = 7$ , then the value of  $a^2 + 2a$  is:

- Ans
- ☐ 1. 4
  - ☐ 2. 2
  - ☒ 3. 3
  - ☐ 4. 1

Question ID : 630680413517  
 Option 1 ID : 6306801612895  
 Option 2 ID : 6306801612893  
 Option 3 ID : 6306801612892  
 Option 4 ID : 6306801612894  
 Status : Not Answered  
 Chosen Option : --

Q.20 A group of 30 students appeared in a test. The average score of 12 students is 62, and that of the rest is 76. What is the average score of the group?

- Ans
- ☐ 1. 71.4
  - ☒ 2. 70.4
  - ☐ 3. 69.4
  - ☐ 4. 68.4

Question ID : 630680566263  
 Option 1 ID : 6306802214042  
 Option 2 ID : 6306802214040  
 Option 3 ID : 6306802214041  
 Option 4 ID : 6306802214043  
 Status : Not Answered  
 Chosen Option : --

Q.21 What is the rate of interest per annum for simple interest at which ₹1,040 amounts to ₹1,230 in  $1\frac{1}{2}$  years?

- Ans
- ☐ 1.  $11\frac{7}{39}\%$
  - ☐ 2.  $13\frac{7}{39}\%$
  - ☒ 3.  $12\frac{7}{39}\%$
  - ☐ 4.  $10\frac{7}{39}\%$

Question ID : 630680358023  
 Option 1 ID : 6306801394081  
 Option 2 ID : 6306801394084  
 Option 3 ID : 6306801394083  
 Option 4 ID : 6306801394082  
 Status : Not Answered  
 Chosen Option : --

Q.22 Two candidates contested in an election. 80% of the voters cast their votes, out of which 5% of the polled votes were invalid. The winning candidate got 70% of valid votes and won by a majority of 36,480 votes. Find the total number of voters.

- Ans
- ☐ 1. 1,18,000
  - ☐ 2. 1,15,000
  - ☒ 3. 1,20,000
  - ☐ 4. 1,25,000

Question ID : 630680419648  
Option 1 ID : 6306801637090  
Option 2 ID : 6306801637089  
Option 3 ID : 6306801637088  
Option 4 ID : 6306801637087  
Status : Not Answered  
Chosen Option : --

Q.23 The following table shows the categorisation of 100 students based on their marks in Physics and Chemistry in an examination.

Subject	Marks out of 50				
	40 and above	30 and above	20 and above	10 and above	0 and above
Physics	9	32	80	92	100
Chemistry	4	21	66	81	100

If a minimum of 40% marks in Chemistry is required to pursue higher studies in Chemistry, how many students will be eligible to pursue higher studies in Chemistry?

- Ans
- ☐ 1. 25
  - ☐ 2. 21
  - ☐ 3. 45
  - ☒ 4. 66

Question ID : 630680523693  
Option 1 ID : 6306802046926  
Option 2 ID : 6306802046925  
Option 3 ID : 6306802046924  
Option 4 ID : 6306802046923  
Status : Answered  
Chosen Option : 1

Q.24 A shopkeeper allows 40% discount on his goods. He further gives 20% discount. What is the single discount equivalent to these two successive discounts?

- Ans
- ☐ 1. 50%
  - ☐ 2. 60%
  - ☐ 3. 62%
  - ☒ 4. 52%

Question ID : 630680182422  
Option 1 ID : 630680706874  
Option 2 ID : 630680706876  
Option 3 ID : 630680706875  
Option 4 ID : 630680706877  
Status : Answered  
Chosen Option : 4



Q.25 A cistern can be filled by two pipes in 8 minutes and 10 minutes, separately. Both the pipes are opened together for a certain time, but due to an obstruction, only  $\frac{5}{8}$  of the full quantity of water flowed through the former pipe and  $\frac{3}{5}$  through the latter pipe. However, the obstruction was suddenly removed, and the cistern was filled in 3 minutes from that moment. How long did it take before the full flow began?

Ans

- ☒ 1.  $3\frac{1}{16}$  minutes
- ☒ 2.  $9\frac{6}{7}$  minutes
- ☒ 3.  $2\frac{6}{17}$  minutes
- ☒ 4.  $2\frac{30}{37}$  minutes

Question ID : 630680384349  
 Option 1 ID : 6306801498283  
 Option 2 ID : 6306801498284  
 Option 3 ID : 6306801498282  
 Option 4 ID : 6306801498285  
 Status : Not Answered  
 Chosen Option : --

Section : English Comprehension

Q.1 Select the most appropriate meaning of the following idiom.

To bring to light

- Ans
- ☒ 1. To disengage
  - ☒ 2. To engage in conversation
  - ☒ 3. To disclose
  - ☒ 4. To lighten

Question ID : 630680360829  
 Option 1 ID : 6306801405191  
 Option 2 ID : 6306801405190  
 Option 3 ID : 6306801405192  
 Option 4 ID : 6306801405189  
 Status : Answered  
 Chosen Option : 3

Q.2 Select the most appropriate ANTONYM of the underlined word.  
 We should plan our actions judiciously before going to war.

- Ans
- ☒ 1. Irrelevant
  - ☒ 2. Irreverent
  - ☒ 3. Irritatingly
  - ☒ 4. Irrational

Question ID : 630680360079  
 Option 1 ID : 6306801402261  
 Option 2 ID : 6306801402262  
 Option 3 ID : 6306801402264  
 Option 4 ID : 6306801402263  
 Status : Answered  
 Chosen Option : 4

Q.3 The following sentence has been split into four segments. Identify the segment that contains an error.

The principal gave up / the prizes to / the winners on / Republic Day.

- Ans
- ☒ 1. the prizes to
  - ☒ 2. the winners on
  - ☒ 3. Republic Day
  - ☒ 4. The principal gave up

Question ID : 630680512935  
Option 1 ID : 6306802004687  
Option 2 ID : 6306802004688  
Option 3 ID : 6306802004689  
Option 4 ID : 6306802004686  
Status : Answered  
Chosen Option : 4

Q.4 Select the option that can be used as a one-word substitute for the underlined group of words in the following sentence.  
Almost immediately, they heard the high shrill piercing cry of tires on the side road.

- Ans
- ☒ 1. beseech
  - ☒ 2. screech
  - ☒ 3. creche
  - ☒ 4. bleach

Question ID : 630680310038  
Option 1 ID : 6306801206298  
Option 2 ID : 6306801206300  
Option 3 ID : 6306801206297  
Option 4 ID : 6306801206299  
Status : Not Answered  
Chosen Option : --

Q.5 Select the most appropriate ANTONYM of the given word.  
Synthetic

- Ans
- ☒ 1. Natural
  - ☒ 2. Processed
  - ☒ 3. Artificial
  - ☒ 4. Imitation

Question ID : 630680517355  
Option 1 ID : 6306802021818  
Option 2 ID : 6306802021819  
Option 3 ID : 6306802021817  
Option 4 ID : 6306802021816  
Status : Answered  
Chosen Option : 1

**Q.6** Select the most appropriate **ANTONYM** of the underlined word in the sentence given below.  
I refuse to let anything come in the way of my dreams.

**Ans** ✓ 1. permit

✗ 2. repress

✗ 3. accord

✗ 4. balk

Question ID : 630680319132

Option 1 ID : 6306801241433

Option 2 ID : 6306801241434

Option 3 ID : 6306801241435

Option 4 ID : 6306801241436

Status : Answered

Chosen Option : 1

**Q.7** Sentences of a paragraph are given below in jumbled order. Arrange the sentences in the correct order to form a meaningful and coherent paragraph.

A. It was as simple as announcing what you have in your store or the services you offer in your premises.

B. Over the years, advertising has evolved into a major industry that goes beyond informing to persuading and influencing.

C. Advertising was initially meant to make people aware of the goods available in the market.

D. It is a form of brainwashing consumers.

**Ans** ✗ 1. DABC

✓ 2. CABD

✗ 3. BADC

✗ 4. ADBC

Question ID : 630680160907

Option 1 ID : 630680622995

Option 2 ID : 630680622993

Option 3 ID : 630680622992

Option 4 ID : 630680622994

Status : Answered

Chosen Option : 2

**Q.8** Select the most appropriate **ANTONYM** of the given word.  
**Attack**

**Ans** ✓ 1. Defence

✗ 2. Ambush

✗ 3. Engagement

✗ 4. Production

Question ID : 630680517373

Option 1 ID : 6306802021888

Option 2 ID : 6306802021889

Option 3 ID : 6306802021891

Option 4 ID : 6306802021890

Status : Answered

Chosen Option : 1

**Q.9** Parts of a sentence are given below in jumbled order. Arrange the parts in the correct order to form a meaningful sentence.

- P) willing to go  
Q) is not  
R) my son  
S) camping

Ans ☒ 1. QRSP  
☒ 2. SPRQ  
☒ 3. PQRS  
☒ 4. RQPS

Question ID : 630680377246  
Option 1 ID : 6306801470048  
Option 2 ID : 6306801470050  
Option 3 ID : 6306801470047  
Option 4 ID : 6306801470049  
Status : Answered  
Chosen Option : 4

**Q.10** Parts of a sentence are given below in jumbled order. Arrange the parts in the correct order to form a meaningful sentence.

- (a) false news websites  
(b) spreading propaganda about politics  
(c) thrive because the advertisements and politicians  
(d) and social networking sites  
(e) make a lot of money

Ans ☒ 1. adecb  
☒ 2. aedcb  
☒ 3. adcbe  
☒ 4. aecbd

Question ID : 630680374313  
Option 1 ID : 6306801458445  
Option 2 ID : 6306801458446  
Option 3 ID : 6306801458444  
Option 4 ID : 6306801458443  
Status : Answered  
Chosen Option : 1

**Q.11** Select the option that expresses the given sentence in passive voice.  
They have built a new bridge across the river.

Ans ☒ 1. A new bridge by them has been built across the river.  
☒ 2. A new bridge has built across the river by them.  
☒ 3. The river has been built a new bridge by them.  
☒ 4. A new bridge has been built across the river by them.

Question ID : 630680415211  
Option 1 ID : 6306801619591  
Option 2 ID : 6306801619594  
Option 3 ID : 6306801619593  
Option 4 ID : 6306801619592  
Status : Answered  
Chosen Option : 4

Q.12 Select the most appropriate option to substitute the underlined segment in the given sentence.

Experts acknowledged that some counterfeiting of document techniques are virtually impossible to detect.

- Ans
- ☒ 1. frenzy
  - ☒ 2. forgery
  - ☒ 3. fiasco
  - ☒ 4. impromptu

Question ID : 630680170442  
Option 1 ID : 630680660363  
Option 2 ID : 630680660362  
Option 3 ID : 630680660364  
Option 4 ID : 630680660361  
Status : Answered  
Chosen Option : 2

Q.13 Select the correct spelling to fill in the blank.

The thought of eating half-cooked food under compulsion fills me with \_\_\_\_\_.

- Ans
- ☒ 1. repugnance
  - ☒ 2. ripugnance
  - ☒ 3. repugnence
  - ☒ 4. repegnance

Question ID : 630680409976  
Option 1 ID : 6306801598733  
Option 2 ID : 6306801598736  
Option 3 ID : 6306801598735  
Option 4 ID : 6306801598734  
Status : Not Answered  
Chosen Option : --

Q.14 Select the most appropriate ANTONYM of the word in the brackets to fill in the blank.

The chef requires \_\_\_\_\_ vegetables for the salad. [stale]

- Ans
- ☒ 1. green
  - ☒ 2. cut
  - ☒ 3. leafy
  - ☒ 4. fresh

Question ID : 630680132563  
Option 1 ID : 630680513387  
Option 2 ID : 630680513388  
Option 3 ID : 630680513386  
Option 4 ID : 630680513389  
Status : Answered  
Chosen Option : 4

Q.15 Select the option that expresses the given sentence in passive voice.

They are building a new hospital in the city.

- Ans ☒ 1. A new hospital will be built in the city by them.  
☒ 2. A new hospital was built in the city by them.  
☒ 3. A new hospital is being built in the city by them.  
☒ 4. A new hospital has been built in the city by them.

Question ID : 630680415203  
Option 1 ID : 6306801619562  
Option 2 ID : 6306801619561  
Option 3 ID : 6306801619560  
Option 4 ID : 6306801619559  
Status : Answered  
Chosen Option : 3

Q.16 Select the most appropriate option to substitute the underlined part of the given sentence. If there is no need to substitute it, select 'No substitution'.

As the rulers of the planet, humans like to think that it is the largest creatures that will emerge victorious from the struggle for survival.

- Ans ☒ 1. No substitution  
☒ 2. it is the most large creatures  
☒ 3. they are a largest creature  
☒ 4. they are the largest creatures

Question ID : 630680200027  
Option 1 ID : 630680775535  
Option 2 ID : 630680775533  
Option 3 ID : 630680775532  
Option 4 ID : 630680775534  
Status : Answered  
Chosen Option : 4

Q.17 Select the correct meaning of the underlined idiom in the following sentence.

Rina pulled a long face since her husband had not bought her a diamond necklace on their anniversary.

- Ans ☒ 1. To be ecstatic  
☒ 2. To be euphoric  
☒ 3. To be electrified  
☒ 4. To look saddened

Question ID : 630680102548  
Option 1 ID : 630680398455  
Option 2 ID : 630680398457  
Option 3 ID : 630680398458  
Option 4 ID : 630680398456  
Status : Answered  
Chosen Option : 4

Q.18 Select the sentence that has a grammatical error.

Ans ☒ 1. Indian force are known for their loyalty and integrity.

☒ 2. It is said that Joseph was not ready to go to war.

☒ 3. It is impossible to wake Christine up in the morning.

☒ 4. Karl Marx was a renowned social scientist.

Question ID : 630680205364

Option 1 ID : 630680796304

Option 2 ID : 630680796303

Option 3 ID : 630680796306

Option 4 ID : 630680796305

Status : Answered

Chosen Option : 3

Q.19 Select the most appropriate homophone to fill in the blank.

The ointment will help to \_\_\_\_\_ the wound.

Ans ☒ 1. kneel

☒ 2. he'll

☒ 3. heal

☒ 4. heel

Question ID : 630680129726

Option 1 ID : 630680502511

Option 2 ID : 630680502513

Option 3 ID : 630680502512

Option 4 ID : 630680502510

Status : Answered

Chosen Option : 3

Q.20 Select the INCORRECTLY spelt word from the given sentence .

The resturant offers a wide variety of dishes.

Ans ☒ 1. dishes

☒ 2. variety

☒ 3. resturant

☒ 4. offers

Question ID : 630680374416

Option 1 ID : 6306801458850

Option 2 ID : 6306801458849

Option 3 ID : 6306801458847

Option 4 ID : 6306801458848

Status : Answered

Chosen Option : 3



### Comprehension:

In the following passage, some words have been deleted. Read the passage carefully and select the most appropriate option to fill in each blank.

The adverse (1)\_\_\_\_\_ of climate change and environmental degradation are increasingly driving human mobility the world over, particularly in countries with high exposure and low (2)\_\_\_\_\_ capacity. While most climate-related mobility currently occurs within countries, desperation and deteriorating environments can also compel people to seek a livelihood elsewhere through (3)\_\_\_\_\_ migration. While climate change negatively impacts everyone, everywhere, those already in vulnerable situations due to geography, poverty, gender, age, disability, origin, or other status, including migrant women who (4)\_\_\_\_\_ climate-sensitive livelihoods, and children who are less able to survive extreme weather events, are at the greatest risk of suffering harm. It is (5)\_\_\_\_\_ to recognise this reality and take meaningful action to protect the human rights of those most affected by climate change, including migrants.

### SubQuestion No : 21

Q.21 Select the most appropriate option to fill in blank number 1.

- Ans
- ☒ 1. affects
  - ☒ 2. effects
  - ☐ 3. renounce
  - ☐ 4. practice

Question ID : 630680158853  
Option 1 ID : 630680614884  
Option 2 ID : 630680614885  
Option 3 ID : 630680614886  
Option 4 ID : 630680614887  
Status : Answered  
Chosen Option : 1

### Comprehension:

In the following passage, some words have been deleted. Read the passage carefully and select the most appropriate option to fill in each blank.

The adverse (1)\_\_\_\_\_ of climate change and environmental degradation are increasingly driving human mobility the world over, particularly in countries with high exposure and low (2)\_\_\_\_\_ capacity. While most climate-related mobility currently occurs within countries, desperation and deteriorating environments can also compel people to seek a livelihood elsewhere through (3)\_\_\_\_\_ migration. While climate change negatively impacts everyone, everywhere, those already in vulnerable situations due to geography, poverty, gender, age, disability, origin, or other status, including migrant women who (4)\_\_\_\_\_ climate-sensitive livelihoods, and children who are less able to survive extreme weather events, are at the greatest risk of suffering harm. It is (5)\_\_\_\_\_ to recognise this reality and take meaningful action to protect the human rights of those most affected by climate change, including migrants.

### SubQuestion No : 22

Q.22 Select the most appropriate option to fill in blank number 2.

- Ans
- ☒ 1. adaptive
  - ☐ 2. affective
  - ☐ 3. adoptive
  - ☐ 4. minimum

Question ID : 630680158854  
Option 1 ID : 630680614888  
Option 2 ID : 630680614890  
Option 3 ID : 630680614889  
Option 4 ID : 630680614891  
Status : Answered  
Chosen Option : 1

### Comprehension:

In the following passage, some words have been deleted. Read the passage carefully and select the most appropriate option to fill in each blank.

The adverse (1)\_\_\_\_\_ of climate change and environmental degradation are increasingly driving human mobility the world over, particularly in countries with high exposure and low (2)\_\_\_\_\_ capacity. While most climate-related mobility currently occurs within countries, desperation and deteriorating environments can also compel people to seek a livelihood elsewhere through (3)\_\_\_\_\_ migration. While climate change negatively impacts everyone, everywhere, those already in vulnerable situations due to geography, poverty, gender, age, disability, origin, or other status, including migrant women who (4)\_\_\_\_\_ climate-sensitive livelihoods, and children who are less able to survive extreme weather events, are at the greatest risk of suffering harm. It is (5)\_\_\_\_\_ to recognise this reality and take meaningful action to protect the human rights of those most affected by climate change, including migrants.

SubQuestion No : 23

Q.23 Select the most appropriate option to fill in blank number 3.

- Ans ☒ 1. fast  
☒ 2. irregular  
☒ 3. regard  
☒ 4. fixate

Question ID : 630680158855  
Option 1 ID : 630680614895  
Option 2 ID : 630680614894  
Option 3 ID : 630680614893  
Option 4 ID : 630680614892  
Status : Answered  
Chosen Option : 1

### Comprehension:

In the following passage, some words have been deleted. Read the passage carefully and select the most appropriate option to fill in each blank.

The adverse (1)\_\_\_\_\_ of climate change and environmental degradation are increasingly driving human mobility the world over, particularly in countries with high exposure and low (2)\_\_\_\_\_ capacity. While most climate-related mobility currently occurs within countries, desperation and deteriorating environments can also compel people to seek a livelihood elsewhere through (3)\_\_\_\_\_ migration. While climate change negatively impacts everyone, everywhere, those already in vulnerable situations due to geography, poverty, gender, age, disability, origin, or other status, including migrant women who (4)\_\_\_\_\_ climate-sensitive livelihoods, and children who are less able to survive extreme weather events, are at the greatest risk of suffering harm. It is (5)\_\_\_\_\_ to recognise this reality and take meaningful action to protect the human rights of those most affected by climate change, including migrants.

SubQuestion No : 24

Q.24 Select the most appropriate option to fill in blank number 4.

- Ans ☒ 1. depend from  
☒ 2. depend on  
☒ 3. depend at  
☒ 4. depend in

Question ID : 630680158856  
Option 1 ID : 630680614898  
Option 2 ID : 630680614897  
Option 3 ID : 630680614899  
Option 4 ID : 630680614896  
Status : Answered  
Chosen Option : 2


**Comprehension:**

In the following passage, some words have been deleted. Read the passage carefully and select the most appropriate option to fill in each blank.

The adverse (1)\_\_\_\_\_ of climate change and environmental degradation are increasingly driving human mobility the world over, particularly in countries with high exposure and low (2)\_\_\_\_\_ capacity. While most climate-related mobility currently occurs within countries, desperation and deteriorating environments can also compel people to seek a livelihood elsewhere through (3)\_\_\_\_\_ migration. While climate change negatively impacts everyone, everywhere, those already in vulnerable situations due to geography, poverty, gender, age, disability, origin, or other status, including migrant women who (4)\_\_\_\_\_ climate-sensitive livelihoods, and children who are less able to survive extreme weather events, are at the greatest risk of suffering harm. It is (5)\_\_\_\_\_ to recognise this reality and take meaningful action to protect the human rights of those most affected by climate change, including migrants.

**SubQuestion No : 25**

**Q.25** Select the most appropriate option to fill in blank number 5.

- Ans  1. optional
-  2. imperative
-  3. resistant
-  4. secondary

Question ID : 630680158857

Option 1 ID : 630680614902

Option 2 ID : 630680614903

Option 3 ID : 630680614900

Option 4 ID : 630680614901

Status : Not Answered

Chosen Option : --