

Combined Graduate Level Examination 2024 Tier I

Roll Number	
Candidate Name	
Venue Name	
Exam Date	19/09/2024
Exam Time	4:00 PM - 5:00 PM
Subject	Combined Graduate Level Examination Tier I

Section : General Intelligence and Reasoning

Q.1 Select the correct mirror image of the given figure when the mirror is placed at MN as shown below.

h E r d 7 %

M

N

Ans

1. % 7 p r E d h

2. % 7 b r E d h

3. % 7 b r E d h

4. % 7 b r E d h

Question ID : 630680356664
Option 1 ID : 6306801388660
Option 2 ID : 6306801388657
Option 3 ID : 6306801388658
Option 4 ID : 6306801388659
Status : Answered
Chosen Option : 2

Q.2 In a certain code language, 'CYCLE' is coded as '242241522' and 'FINAL' is coded as '2118132615'. How will 'MUSIC' be coded in that language?

Ans

1. 14681824

2. 1421191824

3. 146191824

4. 146192184

Question ID : 630680285530
Option 1 ID : 6306801110090
Option 2 ID : 6306801110089
Option 3 ID : 6306801110087
Option 4 ID : 6306801110088
Status : Answered
Chosen Option : 1

Test Prime

**ALL EXAMS,
ONE SUBSCRIPTION**



70,000+
Mock Tests



**Personalised
Report Card**



**Unlimited
Re-Attempt**



600+
Exam Covered



**Previous Year
Papers**



**500%
Refund**



ATTEMPT FREE MOCK NOW

Q.3 Four letter-clusters have been given, out of which three are alike in some manner and one is different. Select the letter-cluster that is different.

Note: The odd one out is not based on the number of consonants/vowels or their position in the letter cluster...11

- Ans
- ☐ 1. TVX
 - ☐ 2. HJL
 - ☒ 3. MOP
 - ☐ 4. NPR

Question ID : 63068083311
Option 1 ID : 630680323094
Option 2 ID : 630680323092
Option 3 ID : 630680323095
Option 4 ID : 630680323093
Status : Answered
Chosen Option : 3

Q.4 Select the triad in which the numbers are related to each other in the same way as the numbers in the following triads.

4-5-41

2-3-13

(NOTE : Operations should be performed on the whole numbers, without breaking down the numbers into its constituent digits. E.g. 13 – Operations on 13 such as adding /deleting /multiplying etc., to 13 can be performed. Breaking down 13 into 1 and 3 and then performing mathematical operations on 1 and 3 is not allowed.)

- Ans
- ☐ 1. 7-8-110
 - ☐ 2. 10-11-211
 - ☐ 3. 12-13-213
 - ☒ 4. 5-6-61


Question ID : 630680132368
Option 1 ID : 630680512635
Option 2 ID : 630680512637
Option 3 ID : 630680512636
Option 4 ID : 630680512634
Status : Answered
Chosen Option : 4

Q.5 In a certain code language, 'PANTHER' is written as '0146283' and 'ANOTHER' is written as '2864109'. How will 'O' be written in that language?

- Ans
- ☐ 1. 3
 - ☐ 2. 8
 - ☐ 3. 0
 - ☒ 4. 9

Question ID : 630680339163
Option 1 ID : 6306801319222
Option 2 ID : 6306801319224
Option 3 ID : 6306801319221
Option 4 ID : 6306801319223
Status : Answered
Chosen Option : 4

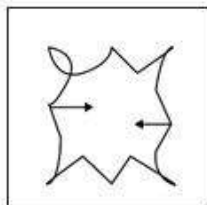
Q.6 Select the option figure in which the given figure (X) is embedded (rotation is NOT allowed).




(X)

Ans

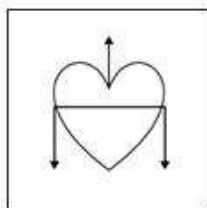
✗ 1.



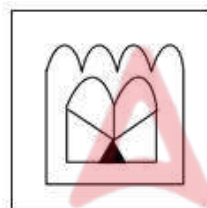
✗ 2.



✗ 3.



✓ 4.



Question ID : 630680296894

Option 1 ID : 6306801155219

Option 2 ID : 6306801155222

Option 3 ID : 6306801155220

Option 4 ID : 6306801155221

Status : Answered

Chosen Option : 4

Q.7 'MPQO' is related to 'KNSQ' in a certain way based on the English alphabetical order. In the same way, 'DGHF' is related to 'BEJH'. To which of the following is 'EINW' related, following the same logic?

- Ans
- ☐ 1. CHQY
 - ☐ 2. BHQX
 - ☐ 3. BGPX
 - ☒ 4. CGPY

Question ID : 630680416364
Option 1 ID : 6306801624221
Option 2 ID : 6306801624219
Option 3 ID : 6306801624220
Option 4 ID : 6306801624222
Status : Answered
Chosen Option : 4

Q.8 Select the number from the given options to complete the series.
58, 70, 83, 97, ____

- Ans
- ☒ 1. 112
 - ☐ 2. 113
 - ☐ 3. 114
 - ☐ 4. 111

Question ID : 630680411905
Option 1 ID : 6306801606456
Option 2 ID : 6306801606457
Option 3 ID : 6306801606458
Option 4 ID : 6306801606455
Status : Answered
Chosen Option : 1

Q.9 In a certain code language,
 $X + Y$ means 'X is the sister of Y',
 $X - Y$ means 'X is the wife of Y',
 $X \times Y$ means 'X is the mother of Y',
 $X \div Y$ means 'X is the father of Y'.
Based on the above, how is H related to L if ' $H \times I - J \div K + L$ '?

- Ans
- ☐ 1. Father's mother
 - ☐ 2. Mother
 - ☒ 3. Mother's mother
 - ☐ 4. Father's sister

Question ID : 630680261888
Option 1 ID : 6306801017209
Option 2 ID : 6306801017208
Option 3 ID : 6306801017207
Option 4 ID : 6306801017210
Status : Answered
Chosen Option : 3

Q.10 Select the word-pair that best represents a similar relationship to the one expressed in the pair of words given below.

(The words must be considered as meaningful English words and must not be related to each other based on the number of letters/number of consonants/vowels in the word.)

Larva : Insect

Ans ☒ 1. Dog : Animal

☒ 2. Fawn : Deer

☒ 3. Fox : Vixen

☒ 4. Bat : Chick

Question ID : 630680416658

Option 1 ID : 6306801625398

Option 2 ID : 6306801625396

Option 3 ID : 6306801625397

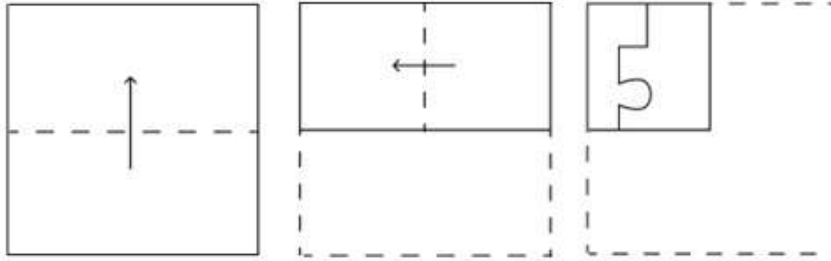
Option 4 ID : 6306801625395

Status : Answered

Chosen Option : 2

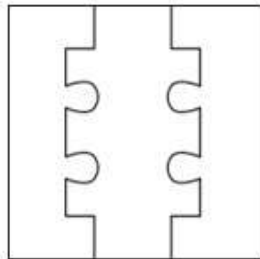


Q.11 A paper is folded and cut as shown below. How will it appear when unfolded?

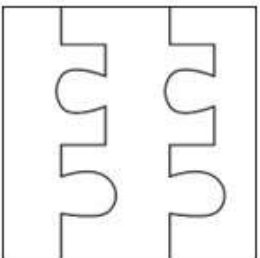


Ans

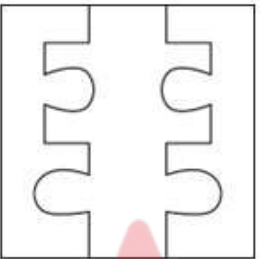
✓ 1.



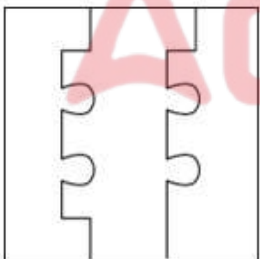
✗ 2.



✗ 3.



✗ 4.



Question ID : 630680294953

Option 1 ID : 6306801147541

Option 2 ID : 6306801147543

Option 3 ID : 6306801147542

Option 4 ID : 6306801147540

Status : Answered

Chosen Option : 1

Q.12 What will come in place of the question mark (?) in the following equation, if '+' and '-' are interchanged and 'x' and '÷' are interchanged?
 $69 + 2485 \times 5 - 912 \div 2 = ?$

- Ans ☒ 1. 1396
☒ 2. 1936
☒ 3. 1639
☒ 4. 1963

Question ID : 630680411724
Option 1 ID : 6306801605733
Option 2 ID : 6306801605734
Option 3 ID : 6306801605731
Option 4 ID : 6306801605732
Status : Answered
Chosen Option : 1

Q.13 Which figure should replace the question mark (?) if the following series were to be continued?

H	V	V	C	H	V	V	O	?				
S	O	6	6	S	O	↑	R		6	6	↑	R
↑		C	H	↑	C		O		H		C	

Ans

- ☒ 1.

H	V
R	6
C	O
- ☒ 2.

C	H
R	6
O	V
- ☒ 3.

H	V
C	6
O	R
- ☒ 4.

H	C
V	O
6	R

Question ID : 630680214425
Option 1 ID : 630680831733
Option 2 ID : 630680831734
Option 3 ID : 630680831732
Option 4 ID : 630680831731
Status : Answered
Chosen Option : 3

Q.14 Select the triad in which the numbers are related in the same way as are the numbers of the given triads.

(NOTE: Operations should be performed on the whole numbers, without breaking down the numbers into its constituent digits. E.g., 13 – Operations on 13 such as adding/deleting/multiplying etc. to 13 can be performed. Breaking down 13 into 1 and 3 and then performing mathematical operations on 1 and 3 is not allowed.)

(11, 1, 10)

(13, 7, 90)

Ans ☒ 1. (1, 2, 15)

☒ 2. (4, 5, 19)

☒ 3. (2, 6, 28)

☒ 4. (3, 6, 23)

Question ID : 630680166391

Option 1 ID : 630680644518

Option 2 ID : 630680644516

Option 3 ID : 630680644519

Option 4 ID : 630680644517

Status : Answered

Chosen Option : 2

Q.15 Three of the following four options are alike in a certain way and thus form a group. Which is the one that does NOT belong to that group?

(NOTE: Operations should be performed on the whole numbers, without breaking down the numbers into its constituent digits. E.g. 13 – Operations on 13 such as adding/subtracting/multiplying etc. to 13 can be performed. Breaking down 13 into 1 and 3 and then performing mathematical operations on 1 and 3 is not allowed.)

Ans ☒ 1. $88 - 23 = 245$

☒ 2. $56 - 31 = 205$

☒ 3. $22 - 13 = 85$

☒ 4. $18 - 12 = 72$

Question ID : 630680297318

Option 1 ID : 6306801156742

Option 2 ID : 6306801156741

Option 3 ID : 6306801156740

Option 4 ID : 6306801156739

Status : Not Answered

Chosen Option : --

Q.16 Select the option in which the numbers share the same relationship as that shared by the given pair of numbers.

(NOTE: Operations should be performed on the whole numbers, without breaking down the numbers into its constituent digits. E.g. 13 – Operations on 13 such as adding/deleting/multiplying etc. to 13 can be performed. Breaking down 13 into 1 and 3 and then performing mathematical operations on 1 and 3 is not allowed.)

11 : 62

13 : 64

Ans ☒ 1. 12 : 92

☒ 2. 9 : 59

☒ 3. 14 : 37

☒ 4. 16 : 67

Question ID : 630680326560

Option 1 ID : 6306801270326

Option 2 ID : 6306801270328

Option 3 ID : 6306801270325

Option 4 ID : 6306801270327

Status : Answered

Chosen Option : 2

Q.17 What will come in the place of '?' in the following equation, if '+' and '-' are interchanged and 'x' and '÷' are interchanged?
 $49 \times 7 - 6 \div 8 + 13 =$

Ans ☒ 1. 42

☒ 2. 37

☒ 3. 43

☒ 4. 32

Question ID : 630680337364

Option 1 ID : 6306801312178

Option 2 ID : 6306801312180

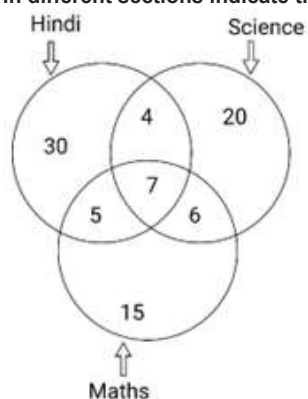
Option 3 ID : 6306801312179

Option 4 ID : 6306801312177

Status : Answered

Chosen Option : 1

Q.18 Study the given diagram carefully and answer the question that follows. The numbers in different sections indicate the number of students who like particular subjects.



How many students like Hindi and Science both, but NOT Maths?

Ans ☒ 1. 4

☒ 2. 11

☒ 3. 12

☒ 4. 10

Question ID : 630680180561

Option 1 ID : 630680699752

Option 2 ID : 630680699753

Option 3 ID : 630680699754

Option 4 ID : 630680699755

Status : Answered

Chosen Option : 1

Q.19 In this question, three statements are given, followed by two conclusions numbered I and II. Assuming the statements to be true, even if they seem to be at variance with commonly known facts, decide which of the conclusion(s) logically follows/follow from the statements.

Statements:

Some shirts are pants.


All pants are jackets.

All jackets are trousers.

Conclusions:

I. Some trousers are shirts.

II. All jackets are shirts.

Ans  1. Only conclusion I follows.

 2. Only conclusion II follows.

 3. Both conclusions I and II follow.

 4. Neither conclusion I nor II follows.

Question ID : 630680416136

Option 1 ID : 6306801623307

Option 2 ID : 6306801623308

Option 3 ID : 6306801623309

Option 4 ID : 6306801623310

Status : Answered

Chosen Option : 1



Q.20 Identify the figure from among the given options which when put in place of the question mark (?) will logically complete the series.

<div>P</div> <div>→</div> <div>+</div>	<div>←</div> <div>+</div> <div>q</div>	<div>+</div> <div>→</div> <div>P</div>	<div>+</div> <div>q</div> <div>←</div>	<div>?</div>
--	--	--	--	--------------

Ans

✗ 1.

q

+

→

✗ 2.

q

←

+

✗ 3.

P

+

←

✓ 4.

P

→

+

Question ID : 630680296880
Option 1 ID : 6306801155166
Option 2 ID : 6306801155163
Option 3 ID : 6306801155165
Option 4 ID : 6306801155164
Status : Answered
Chosen Option : 4

Q.21 Which of the following terms will replace the question mark (?) in the given series?
HDLB, LBPZ, PZTX, ? , XVBT

Ans

✗ 1. TWXC

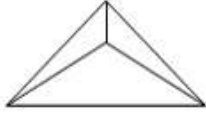
✓ 2. TXXV

✗ 3. TWWV

✗ 4. TVWC

Question ID : 630680416985
Option 1 ID : 6306801626706
Option 2 ID : 6306801626704
Option 3 ID : 6306801626705
Option 4 ID : 6306801626703
Status : Answered
Chosen Option : 2

Q.22 How many triangles are there in the given figure?



Ans ☒ 1. 5

☒ 2. 4

☒ 3. 2

☒ 4. 3

Question ID : 630680161865

Option 1 ID : 630680626771

Option 2 ID : 630680626770

Option 3 ID : 630680626768

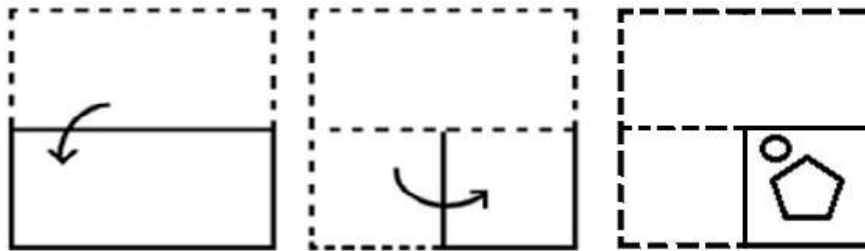
Option 4 ID : 630680626769

Status : Answered

Chosen Option : 2

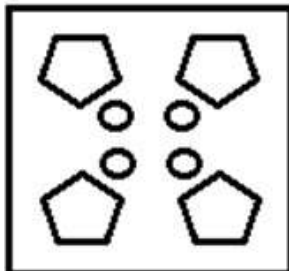


Q.23 The sequence of folding a piece of paper and the manner in which the folded paper has been cut is shown in the following figures. How would this paper look when unfolded?

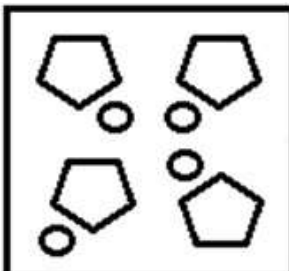


Ans

✓ 1.



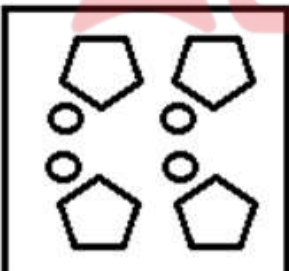
✗ 2.



✗ 3.



✗ 4.



Question ID : 630680105029

Option 1 ID : 630680408228

Option 2 ID : 630680408229

Option 3 ID : 630680408230

Option 4 ID : 630680408227

Status : Answered

Chosen Option : 1

Q.24 The position of how many letters will remain unchanged if each of the letters in the word 'DRAFTING' is arranged in the English alphabetical order?

Ans ☒ 1. None

☐ 2. One

☐ 3. Three

☐ 4. Two

Question ID : 630680327759

Option 1 ID : 6306801275025

Option 2 ID : 6306801275026

Option 3 ID : 6306801275028

Option 4 ID : 6306801275027

Status : Answered

Chosen Option : 1

Q.25 Select the option that represents the letters that when sequentially placed from left to right in the blanks below will complete the letter series.

I _ _ I _ _ I _ J _

Ans ☒ 1. J I J I J I I

☐ 2. J I I I J J I

☐ 3. I J I I J J I

☐ 4. I I J J J I J

Question ID : 630680262380

Option 1 ID : 6306801019161

Option 2 ID : 6306801019162

Option 3 ID : 6306801019159

Option 4 ID : 6306801019160

Status : Answered

Chosen Option : 1

Section : General Awareness

Q.1 Which of the following is the largest inhabited riverine island in the world?

Ans ☐ 1. Lakshadweep

☐ 2. Peacock

☒ 3. Majuli

☐ 4. Bhavani

Question ID : 630680309099

Option 1 ID : 6306801202573

Option 2 ID : 6306801202575

Option 3 ID : 6306801202574

Option 4 ID : 6306801202576

Status : Answered

Chosen Option : 2

Q.2 In the Right-Hand Thumb Rule, the thumb is directed towards the direction of:

- Ans ☒ 1. current
☒ 2. magnetic field
☒ 3. electric field
☒ 4. motion of the conductor

Question ID : 630680517176
Option 1 ID : 6306802021100
Option 2 ID : 6306802021101
Option 3 ID : 6306802021102
Option 4 ID : 6306802021103
Status : Not Answered
Chosen Option : --

Q.3 Which of the following illustrations is related to chloroplasts?



- Ans ☒ 1. c
☒ 2. b
☒ 3. d
☒ 4. a

Question ID : 630680305625
Option 1 ID : 6306801188875
Option 2 ID : 6306801188874
Option 3 ID : 6306801188876
Option 4 ID : 6306801188873
Status : Answered
Chosen Option : 1

Q.4 Which is the most important protein component in milk, both quantitatively and nutritionally, that accounts for about 80% of the total protein in bovine milk?

- Ans ☒ 1. Pepsin
☒ 2. Casein
☒ 3. Actin
☒ 4. Albumin

Question ID : 630680407428
Option 1 ID : 6306801588651
Option 2 ID : 6306801588653
Option 3 ID : 6306801588652
Option 4 ID : 6306801588650
Status : Marked For Review
Chosen Option : 1

Q.5 Which web portal was launched by the Department of Telecommunications for sharing information on mobile towers and EMF emission compliance?

- Ans ☒ 1. E-Amrit
☒ 2. Tarang Sanchar
☒ 3. Namaste
☒ 4. PM-Daksh

Question ID : 630680282834
 Option 1 ID : 6306801099469
 Option 2 ID : 6306801099467
 Option 3 ID : 6306801099468
 Option 4 ID : 6306801099470
 Status : Not Answered
 Chosen Option : --

Q.6 Which of the following is Fisher's equation of exchange?

- Ans ☒ 1. $MV = PT$
☒ 2. $\frac{M}{V} = \frac{T}{P}$
☒ 3. $MT = VP$
☒ 4. $M = S + I$

Question ID : 630680196517
 Option 1 ID : 630680762372
 Option 2 ID : 630680762373
 Option 3 ID : 630680762371
 Option 4 ID : 630680762374
 Status : Not Answered
 Chosen Option : --

Q.7 In 1539, the Battle of Chausa was fought between Humayun and _____.

- Ans ☒ 1. Ibrahim Lodhi
☒ 2. Sikandar Suri
☒ 3. Sher Shah Suri
☒ 4. Rana Sanga

Question ID : 630680412278
 Option 1 ID : 6306801607937
 Option 2 ID : 6306801607938
 Option 3 ID : 6306801607936
 Option 4 ID : 6306801607935
 Status : Answered
 Chosen Option : 3

Q.8 निम्नलिखित में से कौन आमतौर पर मौर्यों के अधीन प्रांतीय प्रशासन का नेतृत्व करता था?

- Ans ☒ 1. समाहर्ता
☒ 2. कुमार
☒ 3. दंडपाल
☒ 4. प्रशस्ति

Question ID : 630680412436
Option 1 ID : 6306801608570
Option 2 ID : 6306801608569
Option 3 ID : 6306801608568
Option 4 ID : 6306801608567
Status : Answered
Chosen Option : 2

Q.9 Sardhana Christian Fair is held in which of the following states?

- Ans ☒ 1. Haryana
☒ 2. Uttar Pradesh
☒ 3. Madhya Pradesh
☒ 4. West Bengal

Question ID : 630680164577
Option 1 ID : 630680637424
Option 2 ID : 630680637425
Option 3 ID : 630680637426
Option 4 ID : 630680637427
Status : Not Answered
Chosen Option : --

Q.10 Ali Akbar Khan was associated with which of the following gharanas?

- Ans ☒ 1. Kirana gharana
☒ 2. Gwalior gharana
☒ 3. Agra gharana
☒ 4. Maihar gharana

Question ID : 630680413017
Option 1 ID : 6306801610893
Option 2 ID : 6306801610892
Option 3 ID : 6306801610891
Option 4 ID : 6306801610894
Status : Answered
Chosen Option : 3

Q.11 Match the following Sportsman in List I and Award in List II:

LIST I- Sportsman	LIST II-Award
A Devendra Jhajharia	i Padma Shri 2022
B Sumit Antil	ii Padma Bhushan 2022
C Neeraj Chopra	iii Arjun Award 2021
D Shikhar Dhawan	iv Major Dhyan Chand Khel Ratna Award 2021

- Ans
- ☒ 1. A-iv, B-i, C-iii, D-ii
 - ☒ 2. A-i, B-iii, C-ii, D-iv
 - ☒ 3. A-iii, B-iv, C-i, D-ii
 - ☒ 4. A-ii, B-i, C-iv, D- iii

Question ID : 630680166705
 Option 1 ID : 630680645733
 Option 2 ID : 630680645732
 Option 3 ID : 630680645735
 Option 4 ID : 630680645734
 Status : Answered
 Chosen Option : 4

Q.12 Which Article of the Indian Constitution mentions that 'The State shall endeavour to promote cottage industries on an individual or co-operative basis in rural areas'?

- Ans
- ☒ 1. Article 42
 - ☒ 2. Article 44
 - ☒ 3. Article 49
 - ☒ 4. Article 43

Question ID : 630680408253
 Option 1 ID : 6306801591907
 Option 2 ID : 6306801591909
 Option 3 ID : 6306801591910
 Option 4 ID : 6306801591908
 Status : Marked For Review
 Chosen Option : 4

Q.13 Which of the following is the most controversial Article in the Indian Constitution, which provides for President's rule in any state?

- Ans
- ☒ 1. Article 356
 - ☒ 2. Article 358
 - ☒ 3. Article 352
 - ☒ 4. Article 360

Question ID : 630680408186
 Option 1 ID : 6306801591640
 Option 2 ID : 6306801591641
 Option 3 ID : 6306801591639
 Option 4 ID : 6306801591642
 Status : Answered
 Chosen Option : 1

Q.14 A dense mass of water drops on smoke or dust particles in the lower atmosphere layers is referred to as:

- Ans** ☒ 1. smog
☒ 2. frost
☒ 3. blizzard
☒ 4. mist

Question ID : 630680303272
 Option 1 ID : 6306801179744
 Option 2 ID : 6306801179743
 Option 3 ID : 6306801179742
 Option 4 ID : 6306801179745
 Status : Answered
 Chosen Option : 1

Q.15 Bhakti Pradeep Kulkarni is associated with _____.

- Ans** ☒ 1. cricket
☒ 2. kabaddi
☒ 3. chess
☒ 4. badminton

Question ID : 630680309517
 Option 1 ID : 6306801204222
 Option 2 ID : 6306801204224
 Option 3 ID : 6306801204221
 Option 4 ID : 6306801204223
 Status : Marked For Review
 Chosen Option : 4

Q.16 Who among the following was the youngest recipient of the Sangeetha Kalanidhi awarded by the Music Academy in 1947?

- Ans** ☒ 1. Bhimsen Joshi
☒ 2. Ariyakudi Ramanuja Iyengar
☒ 3. Mallikarjun Bheemarayappa Mansur
☒ 4. Semmangudi Radhakrishna Srinivasa Iyer

Question ID : 630680560764
 Option 1 ID : 6306802192039
 Option 2 ID : 6306802192037
 Option 3 ID : 6306802192038
 Option 4 ID : 6306802192036
 Status : Not Answered
 Chosen Option : --

Q.17 In which year was the battle of Buxar fought?

- Ans** ☒ 1. 1777
☒ 2. 1793
☒ 3. 1764
☒ 4. 1757

Question ID : 630680412325
 Option 1 ID : 6306801608126
 Option 2 ID : 6306801608125
 Option 3 ID : 6306801608124
 Option 4 ID : 6306801608123
 Status : Answered
 Chosen Option : 3

Q.18 Which of the following State governments has launched a scheme 'Ankur' in May 2021 to promote planting of trees in public, wherein people will be awarded for planting and taking care of the saplings?

- Ans
- ☐ 1. West Bengal
 - ☐ 2. Bihar
 - ☐ 3. Uttarakhand
 - ☒ 4. Madhya Pradesh

Question ID : 630680394944
Option 1 ID : 6306801540044
Option 2 ID : 6306801540047
Option 3 ID : 6306801540045
Option 4 ID : 6306801540046
Status : Not Answered
Chosen Option : --

Q.19 Which of the following Acts passed under Warren Hastings was also called 'half-loaf system'?

- Ans
- ☒ 1. Pitt's India Act 1784
 - ☐ 2. Government of India Act 1858
 - ☐ 3. Regulating Act 1773
 - ☐ 4. Charter Act 1813

Question ID : 630680511509
Option 1 ID : 6306801999159
Option 2 ID : 6306801999161
Option 3 ID : 6306801999158
Option 4 ID : 6306801999160
Status : Marked For Review
Chosen Option : 3

Q.20 In Newlands' Octaves, the properties of lithium and _____ were found to be the same.

- Ans
- ☒ 1. sodium
 - ☐ 2. beryllium
 - ☐ 3. aluminium
 - ☐ 4. magnesium

Question ID : 63068094250
Option 1 ID : 630680365698
Option 2 ID : 630680365697
Option 3 ID : 630680365695
Option 4 ID : 630680365696
Status : Answered
Chosen Option : 1

Q.21 India hosted the Asian Games in which of the following years?

- Ans ☐ 1. 1954 and 1982
☐ 2. 1951 and 1986
☒ 3. 1951 and 1982
☐ 4. 1954 and 1986

Question ID : 630680510792
Option 1 ID : 6306801996299
Option 2 ID : 6306801996300
Option 3 ID : 6306801996298
Option 4 ID : 6306801996301
Status : Marked For Review
Chosen Option : 3

Q.22 Which of the following movements created regional disparities between large and small farmers in India?

- Ans ☐ 1. Yellow revolution
☒ 2. Green revolution
☐ 3. Pink revolution
☐ 4. Blue revolution

Question ID : 630680134788
Option 1 ID : 630680521971
Option 2 ID : 630680521972
Option 3 ID : 630680521970
Option 4 ID : 630680521973
Status : Answered
Chosen Option : 2

Q.23 What was the main objective of the Second Green Revolution in India?

- Ans ☐ 1. Ensuring food security in the western states
☒ 2. Focusing on holistic development in agriculture
☐ 3. Increasing the use of chemical fertilizers and pesticides
☐ 4. Promoting conventional agricultural practices

Question ID : 6306801048048
Option 1 ID : 6306804114239
Option 2 ID : 6306804114240
Option 3 ID : 6306804114238
Option 4 ID : 6306804114241
Status : Marked For Review
Chosen Option : 3

Q.24 Which of the following Articles of the Indian Constitution CANNOT be suspended even during an emergency declared on the grounds of war or external aggression?

- Ans ☐ 1. Articles 15 and 17
☒ 2. Articles 20 and 21
☐ 3. Articles 14 and 16
☐ 4. Articles 30 and 32

Question ID : 630680413059
Option 1 ID : 6306801611060
Option 2 ID : 6306801611061
Option 3 ID : 6306801611059
Option 4 ID : 6306801611062
Status : Answered
Chosen Option : 2

Q.25 Elelakkaradi dance of Kerala is performed by which of the following tribes?

- Ans
- ☒ 1. Mavilan tribe
 - ☒ 2. Kurumba tribe
 - ☒ 3. Irular tribe
 - ☒ 4. Adiyan tribe

Question ID : 630680402077
 Option 1 ID : 6306801568010
 Option 2 ID : 6306801568008
 Option 3 ID : 6306801568009
 Option 4 ID : 6306801568011
 Status : Not Answered
 Chosen Option : --

Section : Quantitative Aptitude

Q.1 Two inlet pipes, P1 and P2, can fill a cistern in 20 hours and 30 hours, respectively. They were opened at the same time, but pipe P1 had to be closed 5 hours before the cistern was full. How many hours in total did it take for the two pipes to fill the cistern?

- Ans
- ☒ 1. 15 hours
 - ☒ 2. 9 hours
 - ☒ 3. 12 hours
 - ☒ 4. 10 hours

Question ID : 630680458810
 Option 1 ID : 6306801792104
 Option 2 ID : 6306801792106
 Option 3 ID : 6306801792105
 Option 4 ID : 6306801792107
 Status : Answered
 Chosen Option : 1

Q.2 The value of $[15 \div 3 \times 7 - 8 \text{ of } 2 + 6]$ is:

- Ans
- ☒ 1. 25
 - ☒ 2. -29
 - ☒ 3. 39.5
 - ☒ 4. 13

Question ID : 630680397186
 Option 1 ID : 6306801548801
 Option 2 ID : 6306801548800
 Option 3 ID : 6306801548803
 Option 4 ID : 6306801548802
 Status : Answered
 Chosen Option : 1

Q.3 The ratio of boys to girls initial in a college is 5 : 6. If 40 boys leave the college and 50 girls join the college, the ratio will become 8 : 11. Find the number of girls (initial) in the college.

Ans ☒ 1. 740

☒ 2. 640

☒ 3. 720

☒ 4. 860

Question ID : 630680428772

Option 1 ID : 6306801673134

Option 2 ID : 6306801673132

Option 3 ID : 6306801673133

Option 4 ID : 6306801673135

Status : Answered

Chosen Option : 3

Q.4 From a point A, a tangent line is drawn to the circle of radius 7 units. From the same point, a secant is drawn to the circle which cuts the circle at B and C and the point B is near A than C. What is the length of BC in units if the length of the tangent to the circle from point A is 21 units and the length of AB is 14 units?

Ans ☒ 1. 18.5

☒ 2. 16.5

☒ 3. 15.5

☒ 4. 17.5

Question ID : 630680297305

Option 1 ID : 6306801156688

Option 2 ID : 6306801156687

Option 3 ID : 6306801156689

Option 4 ID : 6306801156690

Status : Answered

Chosen Option : 4

Q.5 The given table shows the number of candidates appeared in an interview for different posts (A, B, C, D, E and F).
What is the average number of candidates appearing for the posts C, D, E and F?

Posts	Candidates appearing
A	5500
B	8200
C	8600
D	9900
E	5300
F	5100

Ans ☒ 1. 7600
☒ 2. 8000
☒ 3. 7500
☒ 4. 7225

Question ID : 630680428138
Option 1 ID : 6306801670598
Option 2 ID : 6306801670599
Option 3 ID : 6306801670597
Option 4 ID : 6306801670596
Status : Answered
Chosen Option : 4

Q.6 Pranav borrows a sum of ₹598397 at the rate of 20% per annum simple interest. At the end of the first year, he repays ₹24284 towards return of principal amount borrowed. If Pranav clears all pending dues at the end of the second year, including interest payment that accrued during the first year, how much does he pay (in ₹) at the end of the second year?

Ans ☒ 1. 808615
☒ 2. 812514
☒ 3. 817567
☒ 4. 818513

Question ID : 630680809871
Option 1 ID : 6306803173063
Option 2 ID : 6306803173066
Option 3 ID : 6306803173064
Option 4 ID : 6306803173065
Status : Answered
Chosen Option : 1

Q.7 A class of 30 students appeared in a test. The average score of 12 students is 62, and that of the rest is 68. What is the average score of the class?

- Ans
- ☒ 1. 66.6
 - ☒ 2. 63.6
 - ☒ 3. 65.6
 - ☒ 4. 64.6

Question ID : 630680566259
Option 1 ID : 6306802214026
Option 2 ID : 6306802214027
Option 3 ID : 6306802214024
Option 4 ID : 6306802214025
Status : Answered
Chosen Option : 3

Q.8 If the area of a sector of a circle is 462 cm² and the central angle is 120°, then its radius is ____.

- Ans
- ☒ 1. 18 cm
 - ☒ 2. 17 cm
 - ☒ 3. 14 cm
 - ☒ 4. 21 cm

Question ID : 630680405655
Option 1 ID : 6306801581772
Option 2 ID : 6306801581773
Option 3 ID : 6306801581770
Option 4 ID : 6306801581771
Status : Answered
Chosen Option : 4

Q.9 The given table shows the expenditure in (in crores ₹) of three companies A, B and C and the percentage profit of these companies in different years. Given that:

$$\text{Income} = \text{Expenditure} + \text{Expenditure} \times \frac{\text{Profit \%}}{100}$$

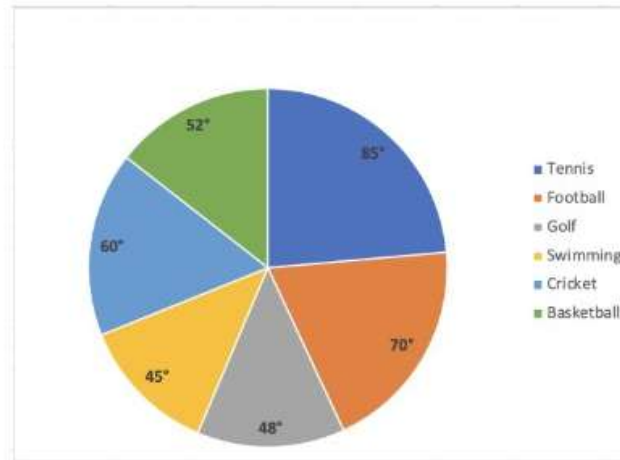
Years	Company A		Company B		Company C	
	Expenditure	Profit	Expenditure	Profit	Expenditure	Profit
2002	24	50%	20	40%	40	45%
2003	30	45%	15	25%	50	55%
2004	36	40%	25	35%	60	65%
2005	40	60%	35	48%	80	75%

What is the income (in crore ₹) of Company C in the year 2003?

- Ans
- ☒ 1. 77.5
 - ☒ 2. 75.7
 - ☒ 3. 69.8
 - ☒ 4. 105

Question ID : 630680523701
Option 1 ID : 6306802046957
Option 2 ID : 6306802046955
Option 3 ID : 6306802046958
Option 4 ID : 6306802046956
Status : Answered
Chosen Option : 1

Q.10 The pie-chart below shows the expenditures (in ₹ lakh) of a country on various sports during a particular year. Study the graph carefully and answer the question given below it.



What is the average expenditure (in ₹ lakh) on tennis, golf, swimming, and basketball, if the expenditure on cricket is ₹72 lakh?

- Ans
- ☒ 1. 138
 - ☒ 2. 44
 - ☒ 3. 69
 - ☒ 4. 120

Question ID : 630680397385
 Option 1 ID : 6306801549582
 Option 2 ID : 6306801549585
 Option 3 ID : 6306801549584
 Option 4 ID : 6306801549583

Status : Answered

Chosen Option : 3

Q.11 If $\tan \theta = \frac{5}{8}$, then find the value of $\frac{(1 + \cos \theta)(1 - \cos \theta)}{(1 + \sin \theta)(1 - \sin \theta)}$.

- Ans
- ☒ 1. $\frac{5}{64}$
 - ☒ 2. $\frac{2}{25}$
 - ☒ 3. $\frac{64}{25}$
 - ☒ 4. $\frac{25}{64}$

Question ID : 630680198958
 Option 1 ID : 630680771561
 Option 2 ID : 630680771560
 Option 3 ID : 630680771559
 Option 4 ID : 630680771562

Status : Answered

Chosen Option : 4

Q.12 In ΔPQR , if PT is the median, then which of the following is correct?

- Ans
- ☒ 1. $PQ^2 + PR^2 = PT^2 + QR^2$
 - ☒ 2. $PQ^2 + PR^2 = 2(PT^2 + QT^2)$
 - ☒ 3. $PQ^2 + PR^2 = PT^2 + QT^2$
 - ☒ 4. $PQ^2 + PR^2 = 2(PT^2 - QT^2)$

Question ID : 630680198952

Option 1 ID : 630680771536

Option 2 ID : 630680771538

Option 3 ID : 630680771535

Option 4 ID : 630680771537

Status : Answered

Chosen Option : 2

Q.13 Simplify $\frac{(25)^4 + 1250 + 1 - (25)^2}{(25)^2 + 25 + 1}$.

- Ans
- ☒ 1. 604
 - ☒ 2. 602
 - ☒ 3. 601
 - ☒ 4. 603

Question ID : 630680413525

Option 1 ID : 6306801612927

Option 2 ID : 6306801612925

Option 3 ID : 6306801612924

Option 4 ID : 6306801612926

Status : Not Answered

Chosen Option : --

Q.14 Which of the following numbers is NOT divisible by 8?

- Ans
- ☒ 1. 5544
 - ☒ 2. 7344
 - ☒ 3. 7497
 - ☒ 4. 4608

Question ID : 630680135994

Option 1 ID : 630680526684

Option 2 ID : 630680526685

Option 3 ID : 630680526682

Option 4 ID : 630680526683

Status : Answered

Chosen Option : 3

Q. Find the gain percentage, given that Anubha sold her scooter for ₹23358 gaining $\frac{1}{6}$ th of the selling price.

1
5
A
n
s

✓ 1. 20%

✗ 2. 35%

✗ 3. 30%

✗ 4. 25%

Question ID : 630680922759

Option 1 ID : 6306803615882

Option 2 ID : 6306803615884

Option 3 ID : 6306803615885

Option 4 ID : 6306803615883

Status : Answered

Chosen Option : 1

Q.16 Study the given table and answer the question that follows.

The given table shows the number of candidates who appeared (both male and female) in a Public Examination and the percentage of those who qualified in the examination from two states X and Z. Few values are missing in the table (indicated by -----). You will be required to fill them up according to the question.

Year	State X		State Z	
	Number of appeared candidates	Percentage of qualified candidates	Number of appeared candidates	Percentage of qualified candidates
2008	480	70%	-----	70%
2009	560	75%	-----	80%
2010	-----	60%	650	50%
2011	450	89%	720	72%
2012	790	-----	660	-----

The number of appeared candidates from State Z increased by 100% from 2008 to 2009. If the total number of qualified candidates from State Z in 2008 and 2009 together is 552, what is the number of appeared candidates from State Z in 2009?

Ans ✗ 1. 600

✗ 2. 240

✓ 3. 480

✗ 4. 360

Question ID : 630680523744

Option 1 ID : 6306802047130

Option 2 ID : 6306802047127

Option 3 ID : 6306802047128

Option 4 ID : 6306802047129

Status : Answered

Chosen Option : 3

Q.17 If $\tan \theta + \cot \theta = 2$, and θ is an acute angle, then the value of θ is:

- Ans
- ☐ 1. 15°
 - ☐ 2. 30°
 - ☒ 3. 45°
 - ☐ 4. 60°

Question ID : 630680526472
 Option 1 ID : 6306802057957
 Option 2 ID : 6306802057955
 Option 3 ID : 6306802057956
 Option 4 ID : 6306802057954
 Status : Answered
 Chosen Option : 3

Q.18 If A is an acute angle, then $\sqrt{\frac{1 - \cos A}{1 + \cos A}} + \sqrt{\frac{1 + \cos A}{1 - \cos A}}$ is equal to:

- Ans
- ☒ 1. $2 \operatorname{cosec} A$
 - ☐ 2. $2 \sec A$
 - ☐ 3. $2 \cos A$
 - ☐ 4. $2 \sin A$

Question ID : 630680398084
 Option 1 ID : 6306801552347
 Option 2 ID : 6306801552349
 Option 3 ID : 6306801552348
 Option 4 ID : 6306801552346
 Status : Answered
 Chosen Option : 1

Q.19 The total surface area of a closed cube is given as 1152 cm^2 . What is the length (in cm) of each side of the cube?

- Ans
- ☐ 1. $4\sqrt{13}$
 - ☐ 2. $8\sqrt{2}$
 - ☐ 3. $9\sqrt{2}$
 - ☒ 4. $8\sqrt{3}$

Question ID : 630680421491
 Option 1 ID : 6306801644430
 Option 2 ID : 6306801644427
 Option 3 ID : 6306801644429
 Option 4 ID : 6306801644428
 Status : Answered
 Chosen Option : 4

Q.20 A cooker is marked at ₹12,500. The dealer allows successive discounts of 6%, 6% and 4% on it. What is the net selling price of the cooker?

- Ans
- ☒ 1. ₹12,320.60
 - ☒ 2. ₹10,306
 - ☒ 3. ₹10,603.20
 - ☒ 4. ₹12,230

Question ID : 630680217286
 Option 1 ID : 630680843082
 Option 2 ID : 630680843079
 Option 3 ID : 630680843080
 Option 4 ID : 630680843081
 Status : Answered
 Chosen Option : 3

Q.21 A thief is spotted by a policeman from a distance of 195 metres. When the policeman starts the chase, the thief also starts running. If the speed of the thief is 22 km/h and that of the policeman is 27 km/h, then how far would the thief have run (in m) before he is overtaken?

- Ans
- ☒ 1. 858
 - ☒ 2. 958
 - ☒ 3. 951
 - ☒ 4. 825

Question ID : 630680428653
 Option 1 ID : 6306801672659
 Option 2 ID : 6306801672657
 Option 3 ID : 6306801672658
 Option 4 ID : 6306801672656
 Status : Answered
 Chosen Option : 1

Q.22 For the equations $ax + (a^2 + 1)y = 4$ and $4x + ay = a^2$, which of the following statements is TRUE?

- Ans
- ☒ 1. If $a = 6$, then $x = 48$, $y = 4$ are the solutions.
 - ☒ 2. If $a = -12$, then $x = 48$, $y = 4$ are the solutions.
 - ☒ 3. If $a = 6$, then $x = \frac{325}{28}$, $y = -\frac{25}{28}$ are the solutions.
 - ☒ 4. If $a = -12$, then $x = \frac{325}{28}$, $y = -\frac{25}{28}$ are the solutions.

Question ID : 630680183199
 Option 1 ID : 630680709867
 Option 2 ID : 630680709868
 Option 3 ID : 630680709865
 Option 4 ID : 630680709866
 Status : Answered
 Chosen Option : 2

Q.23 In a kite ABCD, longer diagonal BD is drawn. If $\angle ABD = 54^\circ$ and $\angle ADB = 50^\circ$, then what is the measure (in degrees) of the $\angle DCB$?

- Ans
- ☒ 1. 108
 - ☒ 2. 100
 - ☒ 3. 54
 - ☒ 4. 76

Question ID : 630680526543
 Option 1 ID : 6306802058239
 Option 2 ID : 6306802058241
 Option 3 ID : 6306802058238
 Option 4 ID : 6306802058240
 Status : Not Answered
 Chosen Option : --

Q.24 Three candidates X, Y and Z participated in an election. X got 30% more votes than Y, whereas Z got 25% more votes than Y. X also overtook Z by 5000 votes. If 71% of the voters voted and no invalid votes were cast, then what was the total number of voters in the voting list?

- Ans
- ☒ 1. 5,00,000
 - ☒ 2. 4,50,000
 - ☒ 3. 3,55,000
 - ☒ 4. 4,05,000

Question ID : 630680428042
 Option 1 ID : 6306801670215
 Option 2 ID : 6306801670214
 Option 3 ID : 6306801670212
 Option 4 ID : 6306801670213
 Status : Answered
 Chosen Option : 1

Q.25 In a rectangular field, the sum of the length and the breadth is 9 cm and area is 18 cm^2 . If the length is 'a' and breadth is 'b', then find the value of $(a^2 - ab + b^2)$.

- Ans
- ☒ 1. 18
 - ☒ 2. 36
 - ☒ 3. 24
 - ☒ 4. 27

Question ID : 630680413548
 Option 1 ID : 6306801613016
 Option 2 ID : 6306801613019
 Option 3 ID : 6306801613017
 Option 4 ID : 6306801613018
 Status : Answered
 Chosen Option : 4

Q.1 Select the most appropriate ANTONYM of the given word.

Appreciate

Ans ☒ 1. Acknowledge

☒ 2. Depreciate

☒ 3. Depict

☒ 4. Esteem

Question ID : 630680380477

Option 1 ID : 6306801482903

Option 2 ID : 6306801482905

Option 3 ID : 6306801482906

Option 4 ID : 6306801482904

Status : Answered

Chosen Option : 2

Q.2 Identify the INCORRECTLY spelt word in the following sentence and select its correct spelling from the given options.

The occurrence of this phenomenon is quite rare.

Ans ☒ 1. occurrence

☒ 2. occurance

☒ 3. occerence

☒ 4. occurance

Question ID : 630680409942

Option 1 ID : 6306801598599

Option 2 ID : 6306801598598

Option 3 ID : 6306801598597

Option 4 ID : 6306801598600

Status : Answered

Chosen Option : 1

Q.3 Select the option that expresses the given sentence in passive voice.
The school will hire new teachers.

Ans ☒ 1. New teachers will join the school.

☒ 2. New teachers are hired by the school.

☒ 3. New teachers will be hired by the school.

☒ 4. The school will be hiring new teachers.

Question ID : 630680415220

Option 1 ID : 6306801619630

Option 2 ID : 6306801619629

Option 3 ID : 6306801619627

Option 4 ID : 6306801619628

Status : Answered

Chosen Option : 3

Q.4 Select the most appropriate synonym of the given word.

Magnificent

- Ans ☐ 1. Sacred
☐ 2. Scared
☒ 3. Splendid
☐ 4. Slow

Question ID : 630680130679
Option 1 ID : 630680506012
Option 2 ID : 630680506010
Option 3 ID : 630680506011
Option 4 ID : 630680506013
Status : Answered
Chosen Option : 3

Q.5 Select the most appropriate option to fill in the blank.
The US _____ building was built in the year 1800.

- Ans ☐ 1. captain
☒ 2. capitol
☐ 3. capital
☐ 4. cannibal

Question ID : 630680170364
Option 1 ID : 630680660051
Option 2 ID : 630680660050
Option 3 ID : 630680660049
Option 4 ID : 630680660052
Status : Answered
Chosen Option : 3

Q.6 Parts of the following sentence have been given as options. Select the option that contains an error.
In some countries, you are not able to drink until you are 21.

- Ans ☐ 1. until you are 21.
☒ 2. able to drink
☐ 3. you are not
☐ 4. In some countries,

Question ID : 630680296377
Option 1 ID : 6306801153179
Option 2 ID : 6306801153178
Option 3 ID : 6306801153177
Option 4 ID : 6306801153176
Status : Answered
Chosen Option : 1

Q.7 Select the term which means the same as the given group of words.
A continuing unpleasant situation, created when one problem causes another problem that then makes the first problem worse

- Ans**
- ☒ 1. Round cycle
 - ☒ 2. Repetitive cycle
 - ☒ 3. Vicious cycle
 - ☒ 4. Enclosed cycle

Question ID : 630680374334
Option 1 ID : 6306801458528
Option 2 ID : 6306801458530
Option 3 ID : 6306801458527
Option 4 ID : 6306801458529
Status : Answered
Chosen Option : 3

Q.8 Select the option that corrects the error in the given sentence.
She sings good.

- Ans**
- ☒ 1. better
 - ☒ 2. goodly
 - ☒ 3. best
 - ☒ 4. well

Question ID : 630680514391
Option 1 ID : 6306802010191
Option 2 ID : 6306802010189
Option 3 ID : 6306802010192
Option 4 ID : 6306802010190
Status : Answered
Chosen Option : 4

Q.9 Parts of a sentence are given below in jumbled order. Select the option that arranges the parts in the correct sequence to form a meaningful sentence.

- (P) society benefits from diversity
(Q) enriching cultures and
(O) by fostering understanding and empathy
(R) perspectives from around the world

- Ans**
- ☒ 1. QPRO
 - ☒ 2. POQR
 - ☒ 3. ROQP
 - ☒ 4. RPOQ

Question ID : 630680380984
Option 1 ID : 6306801484923
Option 2 ID : 6306801484925
Option 3 ID : 6306801484924
Option 4 ID : 6306801484926
Status : Answered
Chosen Option : 2

Q.10 Select the option that can be used as a one-word substitute for the given group of words.
Lack of interest, enthusiasm or concern

- Ans** ☒ 1. Apathy
☐ 2. Antipathy
☐ 3. Sympathy
☐ 4. Empathy

Question ID : 630680414760
Option 1 ID : 6306801617785
Option 2 ID : 6306801617783
Option 3 ID : 6306801617784
Option 4 ID : 6306801617786
Status : Answered
Chosen Option : 1

Q.11 Select the option that can be used as a one-word substitute for the given group of words.

The study of ancient things such as art, graves, ruins etc.

- Ans** ☐ 1. Astrology
☐ 2. Meteorology
☒ 3. Archaeology
☐ 4. Geology

Question ID : 630680129473
Option 1 ID : 630680501511
Option 2 ID : 630680501512
Option 3 ID : 630680501510
Option 4 ID : 630680501513
Status : Answered
Chosen Option : 3

Q.12 Select the most appropriate option that can substitute the underlined segment in the given sentence.

No sooner did Mr. Piyahri Mishra finish his chemistry lecture that the students began to leave.

- Ans** ☒ 1. than the students began to leave.
☐ 2. then the students began to leave.
☐ 3. so the students began to leave.
☐ 4. and the students began to leave.

Question ID : 630680153520
Option 1 ID : 630680594011
Option 2 ID : 630680594008
Option 3 ID : 630680594010
Option 4 ID : 630680594009
Status : Answered
Chosen Option : 1

Q.13 Select the option that can be used as a one-word substitute for the given group of words.
An utter state of confusion

- Ans** ☒ 1. Chaos
☐ 2. Pathos
☐ 3. Innuendos
☐ 4. Engross

Question ID : 630680405390
Option 1 ID : 6306801580770
Option 2 ID : 6306801580771
Option 3 ID : 6306801580772
Option 4 ID : 6306801580773
Status : Answered
Chosen Option : 1

Q.14 Select the INCORRECTLY spelt word.

- Ans** ☐ 1. Cemetery
☐ 2. Occurrence
☒ 3. Begginig
☐ 4. Interrupt

Question ID : 630680380997
Option 1 ID : 6306801484975
Option 2 ID : 6306801484976
Option 3 ID : 6306801484977
Option 4 ID : 6306801484978
Status : Answered
Chosen Option : 3

Q.15 Select the most appropriate synonym of the given word.
Miraculous

- Ans** ☐ 1. Expected
☐ 2. Average
☒ 3. Incredible
☐ 4. Draining

Question ID : 630680158622
Option 1 ID : 630680613983
Option 2 ID : 630680613981
Option 3 ID : 630680613980
Option 4 ID : 630680613982
Status : Answered
Chosen Option : 3

Q.16 Select the most appropriate option to substitute the underlined segment in the given sentence.

After reflecting on the matter regarding his boss's selfish attitude, Raju decided to force himself to perform an unpleasant action in a difficult situation in order to resolve the matter.

- Ans ☒ 1. dodge the bullet
☒ 2. ignore the bullet
☒ 3. bite the bullet
☒ 4. shoot the bullet

Question ID : 630680316366
Option 1 ID : 6306801231090
Option 2 ID : 6306801231091
Option 3 ID : 6306801231089
Option 4 ID : 6306801231092
Status : Answered
Chosen Option : 3

Q.17 Select the most appropriate ANTONYM of the given word.
Absolve

- Ans ☒ 1. Appeal
☒ 2. Accuse
☒ 3. Excuse
☒ 4. Commend

Question ID : 630680377992
Option 1 ID : 6306801473029
Option 2 ID : 6306801473027
Option 3 ID : 6306801473030
Option 4 ID : 6306801473028
Status : Answered
Chosen Option : 2

Q.18 Select the option that expresses the given sentence in passive voice.

Meenakshi could have sent a reply.

- Ans ☒ 1. A reply could have been send by Meenakshi.
☒ 2. A reply could have be sent by Meenakshi.
☒ 3. A reply could have been sent by Meenakshi.
☒ 4. A reply could have sent by Meenakshi.

Question ID : 630680374746
Option 1 ID : 6306801460152
Option 2 ID : 6306801460153
Option 3 ID : 6306801460154
Option 4 ID : 6306801460151
Status : Answered
Chosen Option : 3

Q.19 Select the most appropriate synonym of the given word.
Beseech

- Ans ☒ 1. Impart
☒ 2. Implore
☒ 3. Bequeath
☒ 4. Pamper

Question ID : 630680295955
Option 1 ID : 6306801151532
Option 2 ID : 6306801151533
Option 3 ID : 6306801151534
Option 4 ID : 6306801151535
Status : Answered
Chosen Option : 2

Q.20 Select the option that can be used as a one-word substitute for the given group of words.

A person who has supreme power or authority

- Ans ☒ 1. Foreign
☒ 2. Secular
☒ 3. Diversity
☒ 4. Sovereign

Question ID : 630680414780
Option 1 ID : 6306801617866
Option 2 ID : 6306801617863
Option 3 ID : 6306801617865
Option 4 ID : 6306801617864
Status : Answered
Chosen Option : 4

Comprehension:

In the following passage, some words have been deleted. Read the passage carefully and select the most appropriate option to fill in each blank.
Augmented reality and virtual reality are two types of reality technologies that either augment or replace a real-world environment with a (1)_____ one. In augmented reality, a virtual environment coexists (2)_____ the actual world, to be instructive and offer more data about the real world that a user can access without having to search. When a handset is pointed at a piece of malfunctioning (3)_____, for example, industrial AR apps might provide rapid troubleshooting information. Virtual reality is a (4)_____ environmental simulation that completely replaces the user's surroundings with a totally virtual world. For example, VR may provide a user with a box containing a cartoon (5)_____ of Mike Tyson in a virtual boxing ring.

SubQuestion No : 21

Q.21 Select the most appropriate option to fill in blank number 1.

- Ans ☒ 1. revealed
☒ 2. simulated
☒ 3. catered
☒ 4. suffocated

Question ID : 630680177223
Option 1 ID : 630680687072
Option 2 ID : 630680687073
Option 3 ID : 630680687074
Option 4 ID : 630680687075
Status : Answered
Chosen Option : 2

Comprehension:

In the following passage, some words have been deleted. Read the passage carefully and select the most appropriate option to fill in each blank.
Augmented reality and virtual reality are two types of reality technologies that either augment or replace a real-world environment with a (1)_____ one. In augmented reality, a virtual environment coexists (2)_____ the actual world, to be instructive and offer more data about the real world that a user can access without having to search. When a handset is pointed at a piece of malfunctioning (3)_____, for example, industrial AR apps might provide rapid troubleshooting information. Virtual reality is a (4)_____ environmental simulation that completely replaces the user's surroundings with a totally virtual world. For example, VR may provide a user with a box containing a cartoon (5)_____ of Mike Tyson in a virtual boxing ring.

SubQuestion No : 22

Q.22 Select the most appropriate option to fill in blank number 2.

- Ans ☒ 1. beyond
☒ 2. with
☒ 3. along
☒ 4. behind

Question ID : 630680177224

Option 1 ID : 630680687077

Option 2 ID : 630680687076

Option 3 ID : 630680687079

Option 4 ID : 630680687078

Status : Answered

Chosen Option : 2

Comprehension:

In the following passage, some words have been deleted. Read the passage carefully and select the most appropriate option to fill in each blank.
Augmented reality and virtual reality are two types of reality technologies that either augment or replace a real-world environment with a (1)_____ one. In augmented reality, a virtual environment coexists (2)_____ the actual world, to be instructive and offer more data about the real world that a user can access without having to search. When a handset is pointed at a piece of malfunctioning (3)_____, for example, industrial AR apps might provide rapid troubleshooting information. Virtual reality is a (4)_____ environmental simulation that completely replaces the user's surroundings with a totally virtual world. For example, VR may provide a user with a box containing a cartoon (5)_____ of Mike Tyson in a virtual boxing ring.

SubQuestion No : 23

Q.23 Select the most appropriate option to fill in blank number 3.

- Ans ☒ 1. equipment
☒ 2. baggage
☒ 3. outfit
☒ 4. arsenal

Question ID : 630680177225

Option 1 ID : 630680687082

Option 2 ID : 630680687083

Option 3 ID : 630680687080

Option 4 ID : 630680687081

Status : Answered

Chosen Option : 1

Comprehension:

In the following passage, some words have been deleted. Read the passage carefully and select the most appropriate option to fill in each blank.
Augmented reality and virtual reality are two types of reality technologies that either augment or replace a real-world environment with a (1)_____ one. In augmented reality, a virtual environment coexists (2)_____ the actual world, to be instructive and offer more data about the real world that a user can access without having to search. When a handset is pointed at a piece of malfunctioning (3)_____, for example, industrial AR apps might provide rapid troubleshooting information. Virtual reality is a (4)_____ environmental simulation that completely replaces the user's surroundings with a totally virtual world. For example, VR may provide a user with a box containing a cartoon (5)_____ of Mike Tyson in a virtual boxing ring.

SubQuestion No : 24

Q.24 Select the most appropriate option to fill in blank number 4.

Ans ☒ 1. comprehensive

☐ 2. transgressive

☐ 3. conclusive

☐ 4. reprehensive

Question ID : 630680177226

Option 1 ID : 630680687087

Option 2 ID : 630680687084

Option 3 ID : 630680687085

Option 4 ID : 630680687086

Status : Answered

Chosen Option : 1

Comprehension:

In the following passage, some words have been deleted. Read the passage carefully and select the most appropriate option to fill in each blank.
Augmented reality and virtual reality are two types of reality technologies that either augment or replace a real-world environment with a (1)_____ one. In augmented reality, a virtual environment coexists (2)_____ the actual world, to be instructive and offer more data about the real world that a user can access without having to search. When a handset is pointed at a piece of malfunctioning (3)_____, for example, industrial AR apps might provide rapid troubleshooting information. Virtual reality is a (4)_____ environmental simulation that completely replaces the user's surroundings with a totally virtual world. For example, VR may provide a user with a box containing a cartoon (5)_____ of Mike Tyson in a virtual boxing ring.

SubQuestion No : 25

Q.25 Select the most appropriate option to fill in blank number 5.

Ans ☒ 1. rendition

☐ 2. glossary

☐ 3. network

☐ 4. resistance

Question ID : 630680177227

Option 1 ID : 630680687088

Option 2 ID : 630680687091

Option 3 ID : 630680687090

Option 4 ID : 630680687089

Status : Answered

Chosen Option : 1