

Combined Graduate Level Examination 2024 Tier I

Roll Number	
Candidate Name	
Venue Name	
Exam Date	19/09/2024
Exam Time	9:00 AM - 10:00 AM
Subject	Combined Graduate Level Examination Tier I

Section : General Intelligence and Reasoning

Q.1 Which of the following terms will replace the question mark (?) in the given series?
AWSO, KG CY, UQMI, EAWS, ?

- Ans
- ☒ 1. WAEI
 - ☒ 2. ZWTQ
 - ☒ 3. OKGC
 - ☒ 4. OGKH

Question ID : 630680416957
Option 1 ID : 6306801626593
Option 2 ID : 6306801626592
Option 3 ID : 6306801626591
Option 4 ID : 6306801626594
Status : Answered
Chosen Option : 3

Q.2 In a certain code language,
'A + B' means 'A is the mother of B';
'A - B' means 'A is the brother of B';
'A × B' means 'A is the wife of B' and
'A ÷ B' means 'A is the father of B'.

Based on the above, how is A related to D if 'A × B ÷ C × D'?

- Ans
- ☒ 1. Father's sister
 - ☒ 2. Father's brother
 - ☒ 3. Wife's mother
 - ☒ 4. Father-in-law

Question ID : 630680324896
Option 1 ID : 6306801263981
Option 2 ID : 6306801263982
Option 3 ID : 6306801263983
Option 4 ID : 6306801263984
Status : Answered
Chosen Option : 3

Test Prime

**ALL EXAMS,
ONE SUBSCRIPTION**



70,000+
Mock Tests



**Personalised
Report Card**



**Unlimited
Re-Attempt**



600+
Exam Covered



**Previous Year
Papers**



500%
Refund



ATTEMPT FREE MOCK NOW

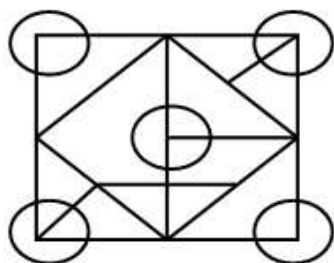
Q.3 Identify the figure from among the given options which when put in place of the question mark (?) will logically complete the series.

--	--	--	--	--

- Ans
- ✓ 1.
- ✗ 2.
- ✗ 3.
- ✗ 4.

Question ID : 630680296878
Option 1 ID : 6306801155156
Option 2 ID : 6306801155155
Option 3 ID : 6306801155157
Option 4 ID : 6306801155158
Status : Answered
Chosen Option : 1

Q.4 How many triangles are there in the given figure?



- Ans
- ☒ 1. 13
 - ☒ 2. 14
 - ☒ 3. 15
 - ☒ 4. 16

Question ID : 630680281040

Option 1 ID : 6306801092395

Option 2 ID : 6306801092396

Option 3 ID : 6306801092397

Option 4 ID : 6306801092398

Status : Answered

Chosen Option : 3

Q.5 Select the correct mirror image of the given figure when the mirror is placed at MN as shown below.



- Ans
- ☒ 1. e mk2 \ ɔ
 - ☒ 2. a w ɤ k \ G
 - ☒ 3. w a ɤ k \ ɔ
 - ☒ 4. ɛ w ɤ k \ ɔ

Question ID : 630680300289

Option 1 ID : 6306801168061

Option 2 ID : 6306801168060


Option 3 ID : 6306801168059

Option 4 ID : 6306801168062

Status : Answered

Chosen Option : 4

Q.6 Identify the figure given in the options which when put in place of ? will logically complete the series.

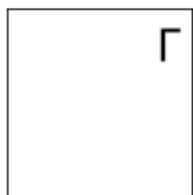


Ans

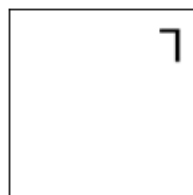
✗ 1.



✗ 2.



✗ 3.



✓ 4.



Question ID : 630680524407
Option 1 ID : 6306802049729
Option 2 ID : 6306802049728
Option 3 ID : 6306802049727
Option 4 ID : 6306802049730
Status : Answered
Chosen Option : 4

Q.7 Which number will come in the place of the question mark (?) in the following equation if '+' and '-' are interchanged and 'x' and '÷' are interchanged?
 $20 + 10 \times 2 - 4 \div 5 = ?$

Ans ✗ 1. 30

✓ 2. 35

✗ 3. 40

✗ 4. 45

Question ID : 630680328466
Option 1 ID : 6306801277835
Option 2 ID : 6306801277834
Option 3 ID : 6306801277833
Option 4 ID : 6306801277836
Status : Answered
Chosen Option : 2

Q.8 In a certain code language, 'TOUGH' is coded as '89251' and 'GHOST' is coded as '93258'. What is the code for 'S' in the given code language?

Ans ☒ 1. 3

☐ 2. 1

☐ 3. 9

☐ 4. 8

Question ID : 630680797482
Option 1 ID : 6306803124886
Option 2 ID : 6306803124887
Option 3 ID : 6306803124885
Option 4 ID : 6306803124884
Status : Answered
Chosen Option : 1

Q.9 'Wander' is related to 'Ramble' in the same way as 'Stray' is related to '_____'.
(The words must be considered as meaningful English words and must not be related to each other based on the number of letters/number of consonants/vowels in the word.)

Ans ☐ 1. Constant

☒ 2. Random

☐ 3. Trek

☐ 4. Steady

Question ID : 630680416710
Option 1 ID : 6306801625603
Option 2 ID : 6306801625605
Option 3 ID : 6306801625606
Option 4 ID : 6306801625604
Status : Not Attempted and Marked For Review
Chosen Option : --

Q.10 Each of the letters in the word 'KEYBOARD' are arranged in the English alphabetical order. How many letters are in the English alphabetical order between the letter which is the third from the right end and the second from the right end in the group of letters thus formed?

Ans ☐ 1. Four

☐ 2. Three

☐ 3. One

☒ 4. Two

Question ID : 630680313408
Option 1 ID : 6306801219500
Option 2 ID : 6306801219499
Option 3 ID : 6306801219497
Option 4 ID : 6306801219498
Status : Answered
Chosen Option : 4

Q.11 'RUCK' is related to 'TWAI' in a certain way based on the English alphabetical order. In the same way, 'DPHM' is related to 'FRFK'. To which of the following is 'KNOM' related, following the same logic?

- Ans
- ☒ 1. IPMJ
 - ☒ 2. MPMK
 - ☒ 3. IQNK
 - ☒ 4. MQNJ

Question ID : 630680416365
Option 1 ID : 6306801624223
Option 2 ID : 6306801624225
Option 3 ID : 6306801624224
Option 4 ID : 6306801624226
Status : Answered
Chosen Option : 2

Q.12 Two sets of numbers are given below. In each set of numbers, certain mathematical operation(s) on the first number result(s) in the second number. Similarly, certain mathematical operation(s) on the second number result(s) in the third number and so on. Which of the given options follows the same set of operations as in the given sets?

(NOTE: Operations should be performed on the whole numbers, without breaking down the numbers into their constituent digits. E.g. 13 – Operations on 13 such as adding/subtracting/multiplying to 13 can be performed. Breaking down 13 into 1 and 3 and then performing mathematical operations on 1 and 3 is not allowed.)

11 – 14 – 8 – 17; 12 – 15 – 9 – 18

- Ans
- ☒ 1. 5 – 8 – 3 – 10
 - ☒ 2. 6 – 9 – 3 – 12
 - ☒ 3. 3 – 6 – 2 – 8
 - ☒ 4. 4 – 7 – 12 – 18

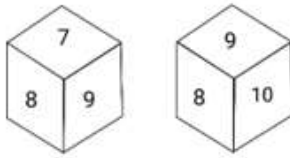
Question ID : 630680814078
Option 1 ID : 6306803189531
Option 2 ID : 6306803189532
Option 3 ID : 6306803189529
Option 4 ID : 6306803189530
Status : Answered
Chosen Option : 2

Q.13 Select the option that represents the letters that when placed from left to right in the blanks below will complete the given letter series.
B _ E N B _ C E N B B C _ N B B C E _ B _ C

- Ans
- ☒ 1. CNEBB
 - ☒ 2. BNECB
 - ☒ 3. CBENB
 - ☒ 4. BCENB

Question ID : 630680416269
Option 1 ID : 6306801623841
Option 2 ID : 6306801623839
Option 3 ID : 6306801623842
Option 4 ID : 6306801623840
Status : Answered
Chosen Option : 3

Q.14 Six numbers 5, 6, 7, 8, 9 and 10 are written on different faces of a dice. Two positions of this dice are shown in the figure below. Find the number on the face opposite to '7'.



- Ans
- ☒ 1. 8
 - ☒ 2. 10
 - ☒ 3. 9
 - ☒ 4. 6

Question ID : 630680196571

Option 1 ID : 630680762583

Option 2 ID : 630680762585

Option 3 ID : 630680762584

Option 4 ID : 630680762586

Status : Answered

Chosen Option : 2

Q.15 Select the correct mirror image of the given figure when the mirror is placed at MN.



- Ans
- ☒ 1. T a 2 f 5 a 7
 - ☒ 2. T 5 2 f a 7
 - ☒ 3. T 5 2 f 5 a 7
 - ☒ 4. T 5 2 f 5 a 7

Question ID : 630680325834

Option 1 ID : 6306801267529

Option 2 ID : 6306801267531

Option 3 ID : 6306801267532

Option 4 ID : 6306801267530

Status : Answered

Chosen Option : 2

Q.16 Select the option that is related to the fifth number in the same way as the second number is related to the first number and the fourth number is related to the third number.

14 : 30 :: 9 : 20 :: 4 : ?

(NOTE : Operations should be performed on the whole numbers, without breaking down the numbers into its constituent digits. E.g. 13 – Operations on 13 such as adding /deleting /multiplying etc., to 13 can be performed. Breaking down 13 into 1 and 3 and then performing mathematical operations on 1 and 3 is not allowed.)

Ans ☒ 1. 11

☒ 2. 10

☒ 3. 13

☒ 4. 12

Question ID : 630680312535

Option 1 ID : 6306801216022

Option 2 ID : 6306801216021

Option 3 ID : 6306801216024

Option 4 ID : 6306801216023

Status : Answered

Chosen Option : 2

Q.17 In a certain code language, 'SHE' is written as 'EIT' and 'SAD' is written as 'DBT'. How will 'SUN' be written in that language?

Ans ☒ 1. NYT

☒ 2. NTY

☒ 3. NTV

☒ 4. NVT

Question ID : 630680416249

Option 1 ID : 6306801623761

Option 2 ID : 6306801623759

Option 3 ID : 6306801623760

Option 4 ID : 6306801623762

Status : Answered

Chosen Option : 4

Q.18 Based on the English alphabetical order, three of the following four letter-clusters are alike in a certain way and thus form a group. Which is the letter-cluster that DOES NOT belong to that group?

(Note: The odd man out is not based on the number of consonants/vowels or their position in the letter-cluster.)

Ans ☒ 1. CHE

☒ 2. FLI

☒ 3. MSP

☒ 4. AGD

Question ID : 630680798706

Option 1 ID : 6306803129685

Option 2 ID : 6306803129686

Option 3 ID : 6306803129687

Option 4 ID : 6306803129684

Status : Answered

Chosen Option : 1

Q.19 Read the given statements and conclusions carefully. Assuming that the information given in the statements is true, even if it appears to be at variance with commonly known facts, decide which of the given conclusion(s) logically follow(s) from the statements.

Statements:
Some eagles are sparrows.
All sparrows are parrots.
No parrot is a penguin.

Conclusions:
(I) Some parrots are eagles.
(II) No penguin is a sparrow.

- Ans** ☒ 1. Only conclusion I follows.
☒ 2. Only conclusion II follows.
☒ 3. Both conclusions I and II follow.
☒ 4. Neither conclusion I nor II follows.

Question ID : 630680796946
Option 1 ID : 6306803122740
Option 2 ID : 6306803122741
Option 3 ID : 6306803122743
Option 4 ID : 6306803122742
Status : Answered
Chosen Option : 3

Q.20 Which of the following numbers will replace the question mark (?) in the given series?
3, 17, 83, 329, ?, 1961

- Ans** ☒ 1. 983
☒ 2. 880
☒ 3. 980
☒ 4. 883

Question ID : 630680411881
Option 1 ID : 6306801606360
Option 2 ID : 6306801606361
Option 3 ID : 6306801606359
Option 4 ID : 6306801606362
Status : Not Attempted and Marked For Review
Chosen Option : --

Q.21 17 is related to 21 following a certain logic. Following the same logic, 22 is related to 36. To which of the following is 29 related, following the same logic? (NOTE : Operations should be performed on the whole numbers, without breaking down the numbers into its constituent digits. E.g. 13 – Operations on 13 such as adding /deleting /multiplying etc., to 13 can be performed. Breaking down 13 into 1 and 3 and then performing mathematical operations on 1 and 3 is not allowed.)

- Ans** ☒ 1. 57
☒ 2. 46
☒ 3. 49
☒ 4. 58

Question ID : 630680344258
Option 1 ID : 6306801339345
Option 2 ID : 6306801339348
Option 3 ID : 6306801339347
Option 4 ID : 6306801339346
Status : Not Attempted and Marked For Review
Chosen Option : --

Q.22 BIRTHDAY - IBTRDHYA
BLAZER - LBZARE
REMOVE - ?

Using the same logic as applied for the first two pairs of terms, select the term that can replace the question mark (?) in the third pair.

Ans ☒ 1. EROMEV

☒ 2. ERMOVE

☒ 3. EROMVE

☒ 4. EVOMER

Question ID : 63068082921

Option 1 ID : 630680321547

Option 2 ID : 630680321545

Option 3 ID : 630680321546

Option 4 ID : 630680321544

Status : Answered

Chosen Option : 1

Q.23 The same operation(s) are followed in all the given number pairs except one. Find that odd number pair.

(NOTE : Operations should be performed on the whole numbers, without breaking down the numbers into its constituent digits. E.g. 13 – Operations on 13 such as adding /deleting /multiplying etc., to 13 can be performed. Breaking down 13 into 1 and 3 and then performing mathematical operations on 1 and 3 is not allowed.)

Ans ☒ 1. 24 : 4

☒ 2. 49 : 8

☒ 3. 19 : 3

☒ 4. 55 : 9

Question ID : 630680412032

Option 1 ID : 6306801606965

Option 2 ID : 6306801606963

Option 3 ID : 6306801606964

Option 4 ID : 6306801606966

Status : Answered

Chosen Option : 1

Q.24 What will come in place of the question mark (?) in the following equation, if '+' and '-' are interchanged and 'x' and '÷' are interchanged?
 $1205 \times 5 + 35 - 197 \div 18 = ?$

Ans ☒ 1. 3284

☒ 2. 3482

☒ 3. 3752

☒ 4. 3824

Question ID : 630680411720

Option 1 ID : 6306801605718

Option 2 ID : 6306801605717

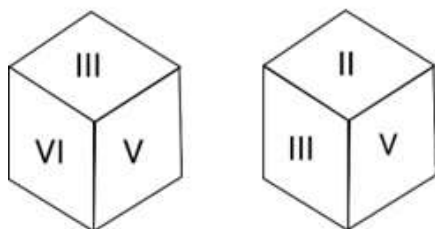
Option 3 ID : 6306801605715

Option 4 ID : 6306801605716

Status : Answered

Chosen Option : 3

Q.25 Six Roman numbers I, II, III, IV, V and VI are written on different faces of a dice. Two positions of this dice are shown in the figure below. Find the Roman number on the face opposite to 'VI'.



- Ans
- ☒ 1. III
 - ☒ 2. IV
 - ☒ 3. II
 - ☒ 4. V

Question ID : 630680287559
Option 1 ID : 6306801118144
Option 2 ID : 6306801118145
Option 3 ID : 6306801118143
Option 4 ID : 6306801118146
Status : Answered
Chosen Option : 3

Section : General Awareness

Q.1 In which of the following years was the Right of Persons with Disabilities Act passed?

- Ans
- ☒ 1. 2010
 - ☒ 2. 2002
 - ☒ 3. 2016
 - ☒ 4. 2019

Question ID : 630680200247
Option 1 ID : 630680776413
Option 2 ID : 630680776412
Option 3 ID : 630680776414
Option 4 ID : 630680776415
Status : Not Answered
Chosen Option : --

Q.2 Who among the following was one of the recipients of the inaugural 'Prof CR Rao Centenary Gold Medal' award in 2021?

- Ans
- ☒ 1. Amartya Sen
 - ☒ 2. Jagdish Bhagwati
 - ☒ 3. Raghuram Rajan
 - ☒ 4. Surjit Bhalla

Question ID : 630680158408
Option 1 ID : 630680613160
Option 2 ID : 630680613161
Option 3 ID : 630680613162
Option 4 ID : 630680613163
Status : Not Answered
Chosen Option : --

Q.3 Which of the following Articles states that the Prime Minister should be appointed by the President?

Ans ✓ 1. Article 75

✗ 2. Article 66

✗ 3. Article 62

✗ 4. Article 71

Question ID : 630680413116

Option 1 ID : 6306801611287

Option 2 ID : 6306801611289

Option 3 ID : 6306801611290

Option 4 ID : 6306801611288

Status : Answered

Chosen Option : 1

Q.4 Due to which of the following events did Rabindranath Tagore return the title of 'Knighthood' to the British Government while expressing his anguish?

Ans ✗ 1. Charan Paduka Incident

✗ 2. Chauri Chaura Incident

✓ 3. Jallianwala Bagh massacre

✗ 4. Partition of Bengal

Question ID : 630680511525

Option 1 ID : 6306801999225

Option 2 ID : 6306801999222

Option 3 ID : 6306801999224

Option 4 ID : 6306801999223

Status : Answered

Chosen Option : 3

Q.5 In which sport did India win its first individual Olympic medal?

Ans ✗ 1. Judo

✓ 2. Wrestling

✗ 3. Swimming

✗ 4. Shooting

Question ID : 630680510750

Option 1 ID : 6306801996133

Option 2 ID : 6306801996131

Option 3 ID : 6306801996132

Option 4 ID : 6306801996130

Status : Answered

Chosen Option : 4

Q.6 Which of the following is an example of Phylum Arthropoda?

Ans ✗ 1. Pila

✓ 2. Butterfly

✗ 3. Nereis

✗ 4. Hirudinaria

Question ID : 630680321341

Option 1 ID : 6306801250073

Option 2 ID : 6306801250076

Option 3 ID : 6306801250074

Option 4 ID : 6306801250075

Status : Not Attempted and
Marked For Review

Chosen Option : --

Q.7 Tarun Bhattacharya, who was awarded the Sangeet Natak Akademi Award in 2018, is known for playing which musical instrument?

- Ans ☒ 1. Sitar
- ☒ 2. Santoor
- ☒ 3. Violin
- ☒ 4. Tabla

Question ID : 630680511807
Option 1 ID : 6306802000198
Option 2 ID : 6306802000200
Option 3 ID : 6306802000199
Option 4 ID : 6306802000201
Status : Not Attempted and Marked For Review
Chosen Option : --

Q.8 Which of the following is a component of the SHG-bank linkage program in India?

- Ans ☒ 1. Microfinance institutions providing loans directly to SHGs
- ☒ 2. State government providing subsidies to SHGs for credit
- ☒ 3. Non-governmental organisations providing capacity building training to SHGs
- ☒ 4. Banks providing loans to individual members of SHGs

Question ID : 630680324075
Option 1 ID : 6306801260793
Option 2 ID : 6306801260794
Option 3 ID : 6306801260796
Option 4 ID : 6306801260795
Status : Answered
Chosen Option : 1

Q.9 As per the Timurid tradition, Humayun had to share power with his brothers. Humayun had the control of Delhi, Agra and Central India, while his brother Kamran controlled which of the following regions?

- Ans ☒ 1. Deccan
- ☒ 2. Afghanistan and Punjab
- ☒ 3. Gujarat and Rajasthan
- ☒ 4. Bengal and Bihar

Question ID : 630680412494
Option 1 ID : 6306801608800
Option 2 ID : 6306801608801
Option 3 ID : 6306801608802
Option 4 ID : 6306801608799
Status : Not Attempted and Marked For Review
Chosen Option : --

Q.10 Navratri festival is dedicated to which of the following Goddesses?

- Ans ☒ 1. Laxmi
☒ 2. Jawala
☒ 3. Saraswati
☒ 4. Durga

Question ID : 630680216083
 Option 1 ID : 630680838307
 Option 2 ID : 630680838309
 Option 3 ID : 630680838308
 Option 4 ID : 630680838310
 Status : Answered
 Chosen Option : 4

Q.11 Which two organic chemists are known for observing the peroxide effect in adding reagents to unsaturated compounds in 1933?

- Ans ☒ 1. Justus von Liebig and Friedrich Wöhler
☒ 2. Morris S Kharasch and Frank R Mayo
☒ 3. B Steven Bachrach and Roald Hoffmann
☒ 4. C John Cadogan and Luis M Campos

Question ID : 630680517142
 Option 1 ID : 6306802020967
 Option 2 ID : 6306802020965
 Option 3 ID : 6306802020964
 Option 4 ID : 6306802020966
 Status : Not Answered
 Chosen Option : --

Q.12 The oath of office to the Vice-President is administered by the _____.

- Ans ☒ 1. Chief Justice of India
☒ 2. Prime Minister
☒ 3. CAG
☒ 4. President

Question ID : 630680326511
 Option 1 ID : 6306801270130
 Option 2 ID : 6306801270132
 Option 3 ID : 6306801270131
 Option 4 ID : 6306801270129
 Status : Answered
 Chosen Option : 4

Q.13 What was the name of the wind measuring instrument invented for the first time in 1450?

- Ans ☒ 1. Anemometer
☒ 2. Ceiling Projector
☒ 3. Transmissometer
☒ 4. Dropsonde

Question ID : 630680302919
 Option 1 ID : 6306801178340
 Option 2 ID : 6306801178339
 Option 3 ID : 6306801178338
 Option 4 ID : 6306801178341
 Status : Not Answered
 Chosen Option : --

Q.14 As per a report of the Ministry of Labour and Employment, what was the rate of unemployment in Maharashtra for the year 2021-22?

Ans ☒ 1. 3.5%

☐ 2. 3.01%

☐ 3. 4.4%

☐ 4. 4.2%

Question ID : 630680409675

Option 1 ID : 6306801597529

Option 2 ID : 6306801597531

Option 3 ID : 6306801597532

Option 4 ID : 6306801597530

Status : Not Answered

Chosen Option : --

Q.15 Which of the following is NOT a unit of energy?

Ans ☐ 1. Joule

☐ 2. Kilowatt hour

☐ 3. Calorie

☒ 4. Newton

Question ID : 630680102235

Option 1 ID : 630680397223

Option 2 ID : 630680397225

Option 3 ID : 630680397224

Option 4 ID : 630680397226

Status : Answered

Chosen Option : 4

Q.16 The Wardha is a tributary of which of the following rivers?

Ans ☐ 1. Mahanadi river

☐ 2. Narmada river

☒ 3. Godavari river

☐ 4. Tapi river

Question ID : 630680328133

Option 1 ID : 6306801276502

Option 2 ID : 6306801276501

Option 3 ID : 6306801276504

Option 4 ID : 6306801276503

Status : Answered

Chosen Option : 3

Q.17 Pandit Omkar Nath Thakur was a student of _____.

Ans ☐ 1. Pandit Vishnu Narayan Bhatkhande

☒ 2. Pandit Vishnu Digambar Paluskar

☐ 3. Pandit Gopal Shankar Mishra

☐ 4. Ustad Abdul Karim Khan

Question ID : 63068087835

Option 1 ID : 630680340725

Option 2 ID : 630680340728

Option 3 ID : 630680340726

Option 4 ID : 630680340727

Status : Not Answered

Chosen Option : --

Q.18 Vijender Singh has represented India in Olympics for how many times?

Ans ☒ 1. 3

☐ 2. 4

☐ 3. 5

☐ 4. 2

Question ID : 630680510821
Option 1 ID : 6306801996415
Option 2 ID : 6306801996416
Option 3 ID : 6306801996417
Option 4 ID : 6306801996414
Status : Not Answered
Chosen Option : --

Q.19 Who among the following classical dancers is NOT related to Odissi?

Ans ☐ 1. Mayadhar Raut

☐ 2. Kiran Segal

☐ 3. Kumkum Mohanty

☒ 4. Geetanjali Lal

Question ID : 630680512083
Option 1 ID : 6306802001303
Option 2 ID : 6306802001305
Option 3 ID : 6306802001302
Option 4 ID : 6306802001304
Status : Not Attempted and Marked For Review
Chosen Option : --

Q.20 What were the main obstacles during the industrial development of India at the time of independence?

Ans ☐ 1. Employment required for industries

☒ 2. Capital investment in industries

☐ 3. Market for industrial produce

☐ 4. Land for industrial establishment

Question ID : 630680410792
Option 1 ID : 6306801601928
Option 2 ID : 6306801601927
Option 3 ID : 6306801601930
Option 4 ID : 6306801601929
Status : Answered
Chosen Option : 1

Q.21 Khudai Khidmatgar, a voluntary organisation, was established by which of the following leaders of India?

Ans ☐ 1. Muhammad Ali Jinnah

☒ 2. Khan Abdul Ghaffar Khan

☐ 3. Maulana Muhammad Ali

☐ 4. Hakim Ajmal Khan

Question ID : 630680412383
Option 1 ID : 6306801608355
Option 2 ID : 6306801608356
Option 3 ID : 6306801608357
Option 4 ID : 6306801608358
Status : Answered
Chosen Option : 2

Q.22 Which of the following is NOT a Fundamental Duty?

- Ans ☒ 1. To prohibit trade in rare and endangered species
☐ 2. To safeguard public property and to abjure violence
☐ 3. To uphold and protect the sovereignty, unity and integrity of India
☐ 4. To value and preserve rich heritage of the country's composite culture

Question ID : 630680326506
Option 1 ID : 6306801270112
Option 2 ID : 6306801270111
Option 3 ID : 6306801270109
Option 4 ID : 6306801270110
Status : Answered
Chosen Option : 1

Q.23 What is the other name of tetanus caused by toxin producing bacteria called clostridium tetani?

- Ans ☐ 1. Broken jaw
☐ 2. Snap jaw
☐ 3. Cleft jaw
☒ 4. Lockjaw

Question ID : 630680407465
Option 1 ID : 6306801588799
Option 2 ID : 6306801588800
Option 3 ID : 6306801588801
Option 4 ID : 6306801588798
Status : Not Answered
Chosen Option : --

Q.24 During which of the following rules did Buddhism get split into two schools - Hinayana and Mahayana in the fourth Buddhist council?

- Ans ☐ 1. Gupta
☐ 2. Parthian
☒ 3. Kushana
☐ 4. Shaka

Question ID : 630680412517
Option 1 ID : 6306801608891
Option 2 ID : 6306801608892
Option 3 ID : 6306801608894
Option 4 ID : 6306801608893
Status : Not Attempted and Marked For Review
Chosen Option : --

Q.25 As of Financial year 2019, which of the following state has the highest road density in India?

- Ans ☒ 1. Haryana
☒ 2. Tamil Nadu
☒ 3. Punjab
☒ 4. Kerala

Question ID : 630680227940
Option 1 ID : 630680884435
Option 2 ID : 630680884436
Option 3 ID : 630680884438
Option 4 ID : 630680884437
Status : Not Answered
Chosen Option : --

Section : Quantitative Aptitude

Q.1 A vendor started selling vegetables at ₹10 per kg, but couldn't find buyers at this rate. So he reduced the price to ₹7.2 per kg, but uses a faulty weight of 900 g instead of 1 kg. Find the percentage change in the actual price.

- Ans ☒ 1. 10%
☒ 2. 15%
☒ 3. 25%
☒ 4. 20%

Question ID : 630680428778
Option 1 ID : 6306801673156
Option 2 ID : 6306801673157
Option 3 ID : 6306801673159
Option 4 ID : 6306801673158
Status : Answered
Chosen Option : 4

Q.2 15 kg of ₹10 per kg wheat is mixed with 5 kg of another type of wheat to get a mixture costing ₹30 per kg. Find the price (per kg) of the costlier wheat.

- Ans ☒ 1. ₹90
☒ 2. ₹70
☒ 3. ₹60
☒ 4. ₹80

Question ID : 630680397734
Option 1 ID : 6306801550953
Option 2 ID : 6306801550951
Option 3 ID : 6306801550950
Option 4 ID : 6306801550952
Status : Answered
Chosen Option : 1

Q.3 In a family, the combined age of husband, wife and a son is 90 years. The husband is the oldest. The difference in the ages of the husband and wife is $\frac{1}{3}$ rd the age of their son. After 10 years, the age of the son would be half the age of his father. What is the present age of his mother (in years)?

- Ans
- ☒ 1. 40
 - ☒ 2. 45
 - ☒ 3. 35
 - ☒ 4. 30

Question ID : 630680297289
 Option 1 ID : 6306801156623
 Option 2 ID : 6306801156626
 Option 3 ID : 6306801156625
 Option 4 ID : 6306801156624
 Status : Not Attempted and Marked For Review
 Chosen Option : --

Q.4 If $\sin A + \cos A = \sqrt{3}$, then find the value of $\tan A + \cot A + 2\sin A \cos A$.

- Ans
- ☒ 1. 2
 - ☒ 2. 3
 - ☒ 3. 6
 - ☒ 4. 1

Question ID : 630680401751
 Option 1 ID : 6306801566775
 Option 2 ID : 6306801566776
 Option 3 ID : 6306801566777
 Option 4 ID : 6306801566774
 Status : Answered
 Chosen Option : 2

Q.5 AB is a chord of length 32 cm of a circle of radius 20 cm, the tangents at A and B intersect at a point T. Find length TA (rounded off to two digits after decimal).

- Ans
- ☒ 1. 21.33 cm
 - ☒ 2. 36.50 cm
 - ☒ 3. 26.67 cm
 - ☒ 4. 19.93 cm

Question ID : 630680384356
 Option 1 ID : 6306801498312
 Option 2 ID : 6306801498311
 Option 3 ID : 6306801498313
 Option 4 ID : 6306801498310
 Status : Not Attempted and Marked For Review
 Chosen Option : --

Q.6 P, Q and R are the three angles of a triangle. If $P - Q = 20^\circ$ and $Q - R = 26^\circ$, then $\angle P$ is equal to:

Ans ☒ 1. 82°

☐ 2. 46°

☐ 3. 52°

☐ 4. 92°

Question ID : 630680397492
Option 1 ID : 6306801549892
Option 2 ID : 6306801549890
Option 3 ID : 6306801549891
Option 4 ID : 6306801549893
Status : Answered
Chosen Option : 1

Q.7 Each of Ravi and Kavita had some marbles. Kavita had 12 more marbles than Ravi had. If each of them had one more marble, then three times the number of marbles Kavita would then have had would have been equal to four times the number of marbles Ravi would then have had. How many marbles did Kavita actually have?

Ans ☐ 1. 51

☐ 2. 48

☐ 3. 43

☒ 4. 47

Question ID : 630680325031
Option 1 ID : 6306801264522
Option 2 ID : 6306801264524
Option 3 ID : 6306801264521
Option 4 ID : 6306801264523
Status : Not Attempted and Marked For Review
Chosen Option : --

Q.8 The value of the expression $\sin x + \operatorname{cosec} x = 2$, then the value of $\sin^7 x + \operatorname{cosec}^7 x$ is:

Ans ☐ 1. 1

☐ 2. 4

☒ 3. 2

☐ 4. 0

Question ID : 630680526470
Option 1 ID : 6306802057946
Option 2 ID : 6306802057948
Option 3 ID : 6306802057949
Option 4 ID : 6306802057947
Status : Answered
Chosen Option : 3

Q.9 The following table shows the sales during two seasons of a company. Study the table and answer the question that follows.

Sales in summer season (in ₹)			Sales in winter season (in ₹)		
May	June	July	November	December	January
25,000	24,000	18,000	35,000	26,000	22,000

What is the percentage share of sales during months of June and July to the total sales?

- Ans
- ☐ 1. 30%
 - ☐ 2. 24%
 - ☒ 3. 28%
 - ☐ 4. 33%

Question ID : 630680428089
Option 1 ID : 6306801670402
Option 2 ID : 6306801670400
Option 3 ID : 6306801670401
Option 4 ID : 6306801670403
Status : Answered
Chosen Option : 3

Q.10 WXYZ is a quadrilateral in which XQ and ZP are perpendicular to WY such that XQ = ZP. Diagonals ZX and WY intersect each other at point O. If OX = 12 cm, then find the value of ZX (in cm).

- Ans
- ☐ 1. 18
 - ☒ 2. 24
 - ☐ 3. 36
 - ☐ 4. 12

Question ID : 630680354947
Option 1 ID : 6306801381863
Option 2 ID : 6306801381862
Option 3 ID : 6306801381864
Option 4 ID : 6306801381861
Status : Answered
Chosen Option : 4

Q.11 The cost of a diamond varies directly as the square of its weight. Once, this diamond broke into four pieces with weights in the ratio of 4 : 3 : 2 : 1 .When the pieces were sold, the merchant got ₹63,000 less than that of one piece. Find the original price of the diamond.

- Ans
- ☐ 1. ₹80,000
 - ☒ 2. ₹90,000
 - ☐ 3. ₹86,000
 - ☐ 4. ₹75,000

Question ID : 630680428766
Option 1 ID : 6306801673110
Option 2 ID : 6306801673108
Option 3 ID : 6306801673111
Option 4 ID : 6306801673109
Status : Answered
Chosen Option : 2

Q.12 A student studying in 6th class scored the following marks in 6 subjects.
The maximum marks for each subject are 100.

Subjects	Marks
Hindi	98
English	97
Mathematics	93
Social Science	94
Computer	92
Science	93

What are the average marks scored by the student?

Ans ☒ 1. 94.5

☐ 2. 95

☐ 3. 96

☐ 4. 92.5

Question ID : 630680390844

Option 1 ID : 6306801523814

Option 2 ID : 6306801523816

Option 3 ID : 6306801523817

Option 4 ID : 6306801523815

Status : Answered

Chosen Option : 1

Q.13 What number should be subtracted from $x^3 - 4x^2 - 8x + 11$ to make the number divisible by $(x + 2)$?

Ans ☐ 1. 9

☒ 2. 3

☐ 3. 5

☐ 4. 7

Question ID : 630680135986

Option 1 ID : 630680526653

Option 2 ID : 630680526651

Option 3 ID : 630680526650

Option 4 ID : 630680526652

Status : Answered

Chosen Option : 2

Q.14 Successive discounts of 10% and 20% are given on the purchase of a purse. If the marked price of the purse is ₹2,250, find the selling price.

Ans ☐ 1. ₹1,290

☐ 2. ₹1,320

☐ 3. ₹1,520

☒ 4. ₹1,620

Question ID : 63068091864

Option 1 ID : 630680356190

Option 2 ID : 630680356191

Option 3 ID : 630680356192

Option 4 ID : 630680356193

Status : Answered

Chosen Option : 4

Q.15 R is a point outside a circle and is 18 cm away from its centre. A secant drawn from the point R intersects the circle at points A and B in such a way that RA = 7 cm and AB = 5 cm. The radius of the circle (in cm) is:

Ans

✗ 1. $5\sqrt{15}$

✗ 2. $7\sqrt{15}$

✗ 3. $3\sqrt{15}$

✓ 4. $4\sqrt{15}$

Question ID : 630680198934

Option 1 ID : 630680771464

Option 2 ID : 630680771463

Option 3 ID : 630680771466

Option 4 ID : 630680771465

Status : Not Attempted and
Marked For Review

Chosen Option : --

Q.16 The marks of 6 students are given. All the marks are out of 100.

Student	English	Hindi	Maths	Physics	Chemistry	Biology
A	70	60	99	80	80	75
B	75	65	85	75	75	70
C	80	80	70	60	70	60
D	72	63	65	70	60	60
E	70	60	60	60	55	55
F	60	60	70	70	60	50

Find the percentage scored by C.

Ans ✓ 1. 70%

✗ 2. 68%

✗ 3. 75%

✗ 4. 65%

Question ID : 630680428171

Option 1 ID : 6306801670729

Option 2 ID : 6306801670731

Option 3 ID : 6306801670730

Option 4 ID : 6306801670728

Status : Answered

Chosen Option : 1

Q.17 The cost of tomatoes per kg is increased by 300%. A housewife reduces her consumption of tomatoes by 70%. By what percentage does her expenditure on tomatoes increase or decrease?

- Ans
- ☒ 1. Decreases, 30%
 - ☒ 2. Increases, 20%
 - ☒ 3. Decreases, 20%
 - ☒ 4. Increases, 30%

Question ID : 630680427956
Option 1 ID : 6306801669869
Option 2 ID : 6306801669870
Option 3 ID : 6306801669871
Option 4 ID : 6306801669868
Status : Answered
Chosen Option : 2

Q.18 The area of a parallelogram with base 26 cm and height 18 cm is:

- Ans
- ☒ 1. 468 cm^2
 - ☒ 2. 932 cm^2
 - ☒ 3. 936 cm^2
 - ☒ 4. 234 cm^2

Question ID : 630680101877
Option 1 ID : 630680395866
Option 2 ID : 630680395865
Option 3 ID : 630680395867
Option 4 ID : 630680395864
Status : Answered
Chosen Option : 1

Q.19 Aman invested a sum of money in scheme A at the rate of 8% p.a. for a period of 5 years on simple interest. He invested four times of the sum of scheme A in scheme B at the rate of 5% p.a. for 7 years on simple interest. He received a total interest amount of ₹1,620. How much (in ₹) did he invest in scheme B?

- Ans
- ☒ 1. 900
 - ☒ 2. 3,200
 - ☒ 3. 2,400
 - ☒ 4. 3,600

Question ID : 630680392929
Option 1 ID : 6306801532054
Option 2 ID : 6306801532056
Option 3 ID : 6306801532055
Option 4 ID : 6306801532057
Status : Answered
Chosen Option : 4

Q.20 The value of $4\frac{1}{6} \div 25 \times 75 \div \frac{1}{5}$ of 125 is:

- Ans
- ☒ 1. $\frac{1}{3}$
 - ☒ 2. $\frac{1}{6}$
 - ☒ 3. $\frac{1}{2}$
 - ☒ 4. $\frac{1}{4}$

Question ID : 630680427963
Option 1 ID : 6306801669897
Option 2 ID : 6306801669899
Option 3 ID : 6306801669896
Option 4 ID : 6306801669898
Status : Answered
Chosen Option : 3

Q.21 Two trains of lengths 150 m and 250 m run on parallel lines. When they run in the same direction, they take 20 seconds to cross each other and, when they run in the opposite direction, they take 5 seconds to cross each other. What is the speed of the two trains?

- Ans
- ☒ 1. 150 km/h and 105 km/h
 - ☒ 2. 180 km/h and 108 km/h
 - ☒ 3. 150 km/h and 250 km/h
 - ☒ 4. 160 km/h and 106 km/h

Question ID : 630680428336
Option 1 ID : 6306801671390
Option 2 ID : 6306801671388
Option 3 ID : 6306801671391
Option 4 ID : 6306801671389
Status : Answered
Chosen Option : 2

Q.22 If $3\sin^2\theta + 5\cos^2\theta = 4$ and θ is an acute angle, then the value of $\tan\theta$ is:

- Ans
- ☒ 1. $\frac{1}{\sqrt{3}}$
 - ☒ 2. $\frac{1}{2}$
 - ☒ 3. 1
 - ☒ 4. $\frac{1}{\sqrt{2}}$

Question ID : 630680358088
Option 1 ID : 6306801394344
Option 2 ID : 6306801394342
Option 3 ID : 6306801394341
Option 4 ID : 6306801394343
Status : Answered
Chosen Option : 3

Q.23 The table given below shows the marks obtained by four students in 4 different subjects. Maximum marks for each subject is 175.

Student	Subject			
	Mathematics	Physics	Chemistry	English
Amit	105	98	109	86
Gunja	112	119	99	97
Arpit	103	121	94	100
Kavya	108	102	104	120

What is the aggregate percentage of marks obtained by Gunja in all the four subjects?

- Ans
- ☐ 1. 58
 - ☒ 2. 61
 - ☐ 3. 67
 - ☐ 4. 71

Question ID : 630680523807
Option 1 ID : 6306802047379
Option 2 ID : 6306802047380
Option 3 ID : 6306802047381
Option 4 ID : 6306802047382
Status : Answered
Chosen Option : 2

Q.24 If $\left(a + \frac{1}{a}\right) = 7\sqrt{3}$, then what is the value of $(a^6 + a^{-6})$?

- Ans
- ☐ 1. 3048625
 - ☐ 2. 3048542
 - ☒ 3. 3048190
 - ☐ 4. 3048132

Question ID : 630680413473
Option 1 ID : 6306801612716
Option 2 ID : 6306801612717
Option 3 ID : 6306801612718
Option 4 ID : 6306801612719
Status : Answered
Chosen Option : 3

Q.25 Pipe X can fill a tank in 9 hours and Pipe Y can fill it in 21 hours. If they are opened on alternate hours and Pipe X is opened first, in how many hours shall the tank be full?

- Ans
- ☐ 1. $10\frac{3}{7}$
 - ☐ 2. $11\frac{3}{7}$
 - ☐ 3. $9\frac{3}{7}$
 - ☒ 4. $12\frac{3}{7}$

Question ID : 630680487596
Option 1 ID : 6306801904492
Option 2 ID : 6306801904491
Option 3 ID : 6306801904493
Option 4 ID : 6306801904490
Status : Answered
Chosen Option : 4

Q.1 Sentences of a paragraph are given below in jumbled order. Arrange the sentences in the correct order to form a meaningful and coherent paragraph.
A. However, their population is declining nowadays due to noise pollution.
B. It is one of the most common birds along with the other two species, the European starling, and the rock pigeon.
C. Their constant presence outside our homes makes it easy to overlook them.
D. House sparrows can be found in most places with and without houses (or other structures).

- Ans** ☒ 1. DABC
☒ 2. DBCA
☒ 3. DACB
☒ 4. BDCA

Question ID : 63068085875
Option 1 ID : 630680332958
Option 2 ID : 630680332959
Option 3 ID : 630680332957
Option 4 ID : 630680332956
Status : Answered
Chosen Option : 2

Q.2 Out of the four sentences given, three have spelling errors. Identify the sentence that has no spelling error.

- Ans** ☒ 1. She tried to manoeuvre her trolley around people.
☒ 2. The computer's software detected an anamoly caused by a virus.
☒ 3. What advice did he give to young entrepreneurs?
☒ 4. A clergyman read the litturgy from the prayer-book.

Question ID : 630680409984
Option 1 ID : 6306801598765
Option 2 ID : 6306801598766
Option 3 ID : 6306801598767
Option 4 ID : 6306801598768
Status : Answered
Chosen Option : 3

Q.3 Select the most appropriate meaning of the given idiom.

Start from scratch

- Ans** ☒ 1. To start or create something from the very beginning
☒ 2. To point out something wrong
☒ 3. To address an issue
☒ 4. To develop something out of waste material

Question ID : 63068087180
Option 1 ID : 630680338109
Option 2 ID : 630680338111
Option 3 ID : 630680338112
Option 4 ID : 630680338110
Status : Answered
Chosen Option : 1

Q.4 Parts of the following sentence have been given as options. Select the option that contains an error.
The police told the agitators to back in, else they would lathi-charge.

Ans ☒ 1. The police told

☒ 2. the agitators to back in

☒ 3. lathi-charge

☒ 4. else they would

Question ID : 630680514359

Option 1 ID : 6306802010061

Option 2 ID : 6306802010062

Option 3 ID : 6306802010064

Option 4 ID : 6306802010063

Status : Answered

Chosen Option : 4

Q.5 Select the most appropriate order of the segments in the options that will fill in the blanks and make a coherent paragraph.
Though Sheela loves watching horror movies,
_____, _____, _____ she
rented another romantic today.

Ans ☒ 1. she planned to try something different yesterday / so she rented the latest romantic / and to her surprise she enjoyed it very much / so much so that

☒ 2. so much so that / and to her surprise she enjoyed it very much / she planned to try something different yesterday / so she rented the latest romantic

☒ 3. so she rented the latest romantic / and to her surprise she enjoyed it very much / so much so that / she planned to try something different yesterday

☒ 4. and to her surprise she enjoyed it very much /so much so that /so she rented the latest romantic /she planned to try something different yesterday

Question ID : 630680146129

Option 1 ID : 630680565407

Option 2 ID : 630680565409

Option 3 ID : 630680565408

Option 4 ID : 630680565406

Status : Answered

Chosen Option : 3

Q.6 Select the most appropriate option to substitute the underlined segment in the given sentence.
Transnational linkages, for example, sever the nation-state's integrity and corrupt state-society relations.

Ans ☒ 1. cohesion and erode

☒ 2. divergence and relativity

☒ 3. severance and revolution

☒ 4. controversy and diminution

Question ID : 630680177245

Option 1 ID : 630680687159

Option 2 ID : 630680687156

Option 3 ID : 630680687158

Option 4 ID : 630680687157

Status : Not Attempted and
Marked For Review

Chosen Option : --

Q.7 Select the option that expresses the given sentence in passive voice.
The cashier had finished the assigned task on time.

- Ans**
- ☒ 1. The assigned task was finished by the cashier on time.
 - ☒ 2. The assigned task has been finished by the cashier on time.
 - ☒ 3. The assigned task had been finished by the cashier on time.
 - ☒ 4. The assigned task is finished by the cashier on time.

Question ID : 630680415259
Option 1 ID : 6306801619786
Option 2 ID : 6306801619783
Option 3 ID : 6306801619784
Option 4 ID : 6306801619785
Status : Answered
Chosen Option : 3

Q.8 Select the most appropriate synonym of the given word.
Garnish

- Ans**
- ☒ 1. Dwindle
 - ☒ 2. Decorate
 - ☒ 3. Blemish
 - ☒ 4. Tarnish

Question ID : 630680310018
Option 1 ID : 6306801206217
Option 2 ID : 6306801206218
Option 3 ID : 6306801206219
Option 4 ID : 6306801206220
Status : Answered
Chosen Option : 2

Q.9 Select the most appropriate synonym of the given word.
Determined

- Ans**
- ☒ 1. hesitant
 - ☒ 2. loathe
 - ☒ 3. resolute
 - ☒ 4. faltering

Question ID : 630680129932
Option 1 ID : 630680503315
Option 2 ID : 630680503317
Option 3 ID : 630680503314
Option 4 ID : 630680503316
Status : Answered
Chosen Option : 3

Q.10 Select the most appropriate option to substitute the underlined segment in the given sentence.
His house is smaller than you .

- Ans** ☒ 1. is smaller than your
☒ 2. is smaller than yours
☒ 3. is small as you
☒ 4. is small than you

Question ID : 630680172780
Option 1 ID : 630680669520
Option 2 ID : 630680669521
Option 3 ID : 630680669523
Option 4 ID : 630680669522
Status : Answered
Chosen Option : 2

Q.11 Select the most appropriate ANTONYM of the given word to fill in the blank.
Capricious
Share market prices have remained _____ for weeks.

- Ans** ☒ 1. fickle
☒ 2. stable
☒ 3. volatile
☒ 4. mischievous

Question ID : 630680157353
Option 1 ID : 630680608945
Option 2 ID : 630680608947
Option 3 ID : 630680608946
Option 4 ID : 630680608944
Status : Not Attempted and Marked For Review
Chosen Option : --

Q.12 Select the option that expresses the given sentence in active voice.
Data is being collected by the researcher.

- Ans** ☒ 1. The researcher is collecting data.
☒ 2. The researcher has been collecting data.
☒ 3. The researcher has collected data.
☒ 4. The researcher will be collecting data.

Question ID : 630680415251
Option 1 ID : 6306801619753
Option 2 ID : 6306801619754
Option 3 ID : 6306801619751
Option 4 ID : 6306801619752
Status : Answered
Chosen Option : 1

Q.13 Select the most appropriate ANTONYM of the underlined word.

Evenings get dark very early in this cold weather.

- Ans ☒ 1. Bright
☐ 2. Dim
☐ 3. Shadowy
☐ 4. Gloomy

Question ID : 630680377260
Option 1 ID : 6306801470103
Option 2 ID : 6306801470106
Option 3 ID : 6306801470105
Option 4 ID : 6306801470104
Status : Answered
Chosen Option : 1

Q.14 Select the option that can be used as a one-word substitute for the given group of words.

A person who performs magic to entertain people

- Ans ☐ 1. Angel
☒ 2. Magician
☐ 3. Palmist
☐ 4. Alchemist

Question ID : 630680414782
Option 1 ID : 6306801617872
Option 2 ID : 6306801617871
Option 3 ID : 6306801617873
Option 4 ID : 6306801617874
Status : Answered
Chosen Option : 2

Q.15 Select the INCORRECTLY spelt word in the given sentence.

Fundamentels of every subject need to be learnt on priority basis.

- Ans ☐ 1. basis
☐ 2. learnt
☐ 3. priority
☒ 4. Fundamentels

Question ID : 630680380481
Option 1 ID : 6306801482922
Option 2 ID : 6306801482920
Option 3 ID : 6306801482921
Option 4 ID : 6306801482919
Status : Answered
Chosen Option : 4

Q.16 Select the most appropriate option that has the same meaning as the italicised segment.
His illness became *a blessing in disguise* when he married his nurse.

- Ans** ✓ 1. an apparent misfortune that eventually has good results
✗ 2. when someone finds it difficult to choose between two alternatives
✗ 3. deal with a problem if and when it becomes necessary
✗ 4. to present a counter- argument

Question ID : 630680205201
Option 1 ID : 630680795664
Option 2 ID : 630680795663
Option 3 ID : 630680795665
Option 4 ID : 630680795666
Status : Answered
Chosen Option : 1

Q.17 Select the most appropriate ANTONYM of the given word.
Desolate

- Ans** ✗ 1. Frugal
✗ 2. Allusive
✓ 3. Festive
✗ 4. Melancholic

Question ID : 630680517359
Option 1 ID : 6306802021834
Option 2 ID : 6306802021835
Option 3 ID : 6306802021832
Option 4 ID : 6306802021833
Status : Marked For Review
Chosen Option : 2

Q.18 Parts of the following sentence have been given as options. Select the option that contains an error.
We took dinner in a Chinese restaurant and were amazed to see the interior of a restaurant.

- Ans** ✗ 1. in a Chinese restaurant
✗ 2. and were amazed to see
✓ 3. the interior of a restaurant
✗ 4. We took dinner

Question ID : 630680514268
Option 1 ID : 6306802009698
Option 2 ID : 6306802009699
Option 3 ID : 6306802009700
Option 4 ID : 6306802009697
Status : Answered
Chosen Option : 3

Q.19 Select the option that can be used as a one-word substitute for the given phrase.

A person who is kept captive for fulfilment of demands of money or conditions

Ans ☒ 1. Hostage

☐ 2. Hermit

☐ 3. Heretic

☐ 4. Introvert

Question ID : 630680310205

Option 1 ID : 6306801206952

Option 2 ID : 6306801206949

Option 3 ID : 6306801206950

Option 4 ID : 6306801206951

Status : Not Attempted and
Marked For Review

Chosen Option : --

Q.20 Select the most appropriate synonym of the given word.

Fallacy

Ans ☐ 1. Veracity

☒ 2. Error

☐ 3. Evidence

☐ 4. Verify

Question ID : 630680177545

Option 1 ID : 630680688343

Option 2 ID : 630680688341

Option 3 ID : 630680688340

Option 4 ID : 630680688342

Status : Answered

Chosen Option : 3

Comprehension:

In the following passage, some words have been deleted. Read the passage carefully and select the most appropriate option to fill in each blank.

When Ojeya Cruz Banks moved to Ohio from New Zealand (1) _____ years ago, she was overwhelmed by the logistics of uprooting her life. But Cruz Banks, a Denison University professor and a single mom, who is also my neighbour and friend, was (2) _____ to find a house next to a public elementary school. She assumed that she would be able to walk to pick up her daughter, a needed convenience given that she didn't yet have a car. Unfortunately, when she went to register her daughter for kindergarten, she was met with an (3) _____ surprise: The only (4) _____ option was a half-day program that would bus students to a day-care centre on the outskirts of the town for the afternoon. The district did offer a limited number of full-day slots, but those had all been claimed in a lottery earlier that spring and came with a tuition cost. "I was like, 'Cost me? What? Public school costs money here?'" she told me.

Many parents across the United States, like Cruz Banks, may assume that free, full-day kindergarten is a (5) _____ part of the country's public education system. I was one of them, until my youngest had to enter our district's lottery several months ago. When he was assigned to the half-day program, I swung between alarm and frustration.

SubQuestion No : 21

Q.21 Select the most appropriate option to fill in blank no. 1.

- Ans ☒ 1. particular
☒ 2. several
☒ 3. immense
☒ 4. enormous

Question ID : 630680164098
Option 1 ID : 630680635527
Option 2 ID : 630680635526
Option 3 ID : 630680635525
Option 4 ID : 630680635524
Status : Answered
Chosen Option : 2

Comprehension:

In the following passage, some words have been deleted. Read the passage carefully and select the most appropriate option to fill in each blank.

When Ojeya Cruz Banks moved to Ohio from New Zealand (1) _____ years ago, she was overwhelmed by the logistics of uprooting her life. But Cruz Banks, a Denison University professor and a single mom, who is also my neighbour and friend, was (2) _____ to find a house next to a public elementary school. She assumed that she would be able to walk to pick up her daughter, a needed convenience given that she didn't yet have a car. Unfortunately, when she went to register her daughter for kindergarten, she was met with an (3) _____ surprise: The only (4) _____ option was a half-day program that would bus students to a day-care centre on the outskirts of the town for the afternoon. The district did offer a limited number of full-day slots, but those had all been claimed in a lottery earlier that spring and came with a tuition cost. "I was like, 'Cost me? What? Public school costs money here?'" she told me.

Many parents across the United States, like Cruz Banks, may assume that free, full-day kindergarten is a (5) _____ part of the country's public education system. I was one of them, until my youngest had to enter our district's lottery several months ago. When he was assigned to the half-day program, I swung between alarm and frustration.

SubQuestion No : 22

Q.22 Select the most appropriate option to fill in blank no. 2.

- Ans ☒ 1. distraught
☒ 2. dispassionate
☒ 3. worried
☒ 4. relieved

Question ID : 630680164099
Option 1 ID : 630680635531
Option 2 ID : 630680635530
Option 3 ID : 630680635528
Option 4 ID : 630680635529
Status : Answered
Chosen Option : 3

Comprehension:

In the following passage, some words have been deleted. Read the passage carefully and select the most appropriate option to fill in each blank.

When Ojeya Cruz Banks moved to Ohio from New Zealand (1) _____ years ago, she was overwhelmed by the logistics of uprooting her life. But Cruz Banks, a Denison University professor and a single mom, who is also my neighbour and friend, was (2) _____ to find a house next to a public elementary school. She assumed that she would be able to walk to pick up her daughter, a needed convenience given that she didn't yet have a car. Unfortunately, when she went to register her daughter for kindergarten, she was met with an (3) _____ surprise: The only (4) _____ option was a half-day program that would bus students to a day-care centre on the outskirts of the town for the afternoon. The district did offer a limited number of full-day slots, but those had all been claimed in a lottery earlier that spring and came with a tuition cost. "I was like, 'Cost me? What? Public school costs money here?'" she told me.

Many parents across the United States, like Cruz Banks, may assume that free, full-day kindergarten is a (5) _____ part of the country's public education system. I was one of them, until my youngest had to enter our district's lottery several months ago. When he was assigned to the half-day program, I swung between alarm and frustration.

SubQuestion No : 23

Q.23 Select the most appropriate option to fill in blank no. 3.

Ans ☒ 1. unpleasant

☐ 2. agreeable

☐ 3. amusing

☐ 4. enjoyable

Question ID : 630680164100

Option 1 ID : 630680635534

Option 2 ID : 630680635532

Option 3 ID : 630680635535

Option 4 ID : 630680635533

Status : Answered

Chosen Option : 1

Comprehension:

In the following passage, some words have been deleted. Read the passage carefully and select the most appropriate option to fill in each blank.

When Ojeya Cruz Banks moved to Ohio from New Zealand (1) _____ years ago, she was overwhelmed by the logistics of uprooting her life. But Cruz Banks, a Denison University professor and a single mom, who is also my neighbour and friend, was (2) _____ to find a house next to a public elementary school. She assumed that she would be able to walk to pick up her daughter, a needed convenience given that she didn't yet have a car. Unfortunately, when she went to register her daughter for kindergarten, she was met with an (3) _____ surprise: The only (4) _____ option was a half-day program that would bus students to a day-care centre on the outskirts of the town for the afternoon. The district did offer a limited number of full-day slots, but those had all been claimed in a lottery earlier that spring and came with a tuition cost. "I was like, 'Cost me? What? Public school costs money here?'" she told me.

Many parents across the United States, like Cruz Banks, may assume that free, full-day kindergarten is a (5) _____ part of the country's public education system. I was one of them, until my youngest had to enter our district's lottery several months ago. When he was assigned to the half-day program, I swung between alarm and frustration.

SubQuestion No : 24

Q.24 Select the most appropriate option to fill in blank no. 4.

Ans ☐ 1. inaccessible

☒ 2. available

☐ 3. futile

☐ 4. nonviable

Question ID : 630680164101

Option 1 ID : 630680635537

Option 2 ID : 630680635536

Option 3 ID : 630680635539

Option 4 ID : 630680635538

Status : Answered

Chosen Option : 2

Comprehension:

In the following passage, some words have been deleted. Read the passage carefully and select the most appropriate option to fill in each blank.

When Ojeya Cruz Banks moved to Ohio from New Zealand (1) _____ years ago, she was overwhelmed by the logistics of uprooting her life. But Cruz Banks, a Denison University professor and a single mom, who is also my neighbour and friend, was (2) _____ to find a house next to a public elementary school. She assumed that she would be able to walk to pick up her daughter, a needed convenience given that she didn't yet have a car.

Unfortunately, when she went to register her daughter for kindergarten, she was met with an (3) _____ surprise: The only (4) _____ option was a half-day program that would bus students to a day-care centre on the outskirts of the town for the afternoon. The district did offer a limited number of full-day slots, but those had all been claimed in a lottery earlier that spring and came with a tuition cost. "I was like, 'Cost me? What? Public school costs money here?'" she told me.

Many parents across the United States, like Cruz Banks, may assume that free, full-day kindergarten is a (5) _____ part of the country's public education system. I was one of them, until my youngest had to enter our district's lottery several months ago. When he was assigned to the half-day program, I swung between alarm and frustration.

SubQuestion No : 25

Q.25 Select the most appropriate option to fill in blank no. 5.

- Ans**
- ☒ 1. inessential
 - ☒ 2. disapproved
 - ☒ 3. ceaseless
 - ☒ 4. required

Question ID : 630680164102

Option 1 ID : 630680635542

Option 2 ID : 630680635540

Option 3 ID : 630680635543

Option 4 ID : 630680635541

Status : Answered

Chosen Option : 1