

Combined Graduate Level Examination 2024 Tier I

Roll Number	
Candidate Name	
Venue Name	
Exam Date	23/09/2024
Exam Time	9:00 AM - 10:00 AM
Subject	Combined Graduate Level Examination Tier I

Section : General Intelligence and Reasoning

**Q.1** Based on the position in the English alphabetical order, three of the following letter-clusters are alike in some manner and one is different. Select the odd letter-cluster.  
**Note:** The odd one out is not based on the number of consonants/vowels or their position in the letter cluster.

- Ans**    ☒ 1. PSKI  
          ☒ 2. TWGD  
          ☒ 3. JMQN  
          ☒ 4. MPNK

Question ID : 630680416108  
Option 1 ID : 6306801623198  
Option 2 ID : 6306801623197  
Option 3 ID : 6306801623196  
Option 4 ID : 6306801623195  
Status : Answered  
Chosen Option : 1

**Q.2** Which of the following terms will replace the question mark (?) in the given series?  
JHOQ, NFSO, ?, VBAK, ZZEI

- Ans**    ☒ 1. RCWM  
          ☒ 2. RCXM  
          ☒ 3. RDMW  
          ☒ 4. RDWM

Question ID : 630680417058  
Option 1 ID : 6306801626998  
Option 2 ID : 6306801626996  
Option 3 ID : 6306801626995  
Option 4 ID : 6306801626997  
Status : Answered  
Chosen Option : 4

# Test Prime

**ALL EXAMS,  
ONE SUBSCRIPTION**



**70,000+**  
Mock Tests



**Personalised  
Report Card**



**Unlimited  
Re-Attempt**



**600+**  
Exam Covered



**Previous Year  
Papers**

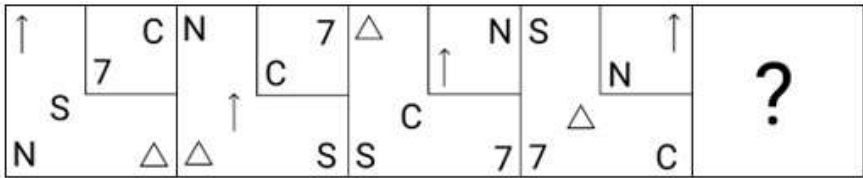


**500%**  
Refund



**ATTEMPT FREE MOCK NOW**

Q.3 Which figure should replace the question mark (?) if the following series were to be continued?



Ans

- ✗ 1.
- ✗ 2.
- ✗ 3.
- ✓ 4.

Question ID : 630680214467  
Option 1 ID : 630680831900  
Option 2 ID : 630680831901  
Option 3 ID : 630680831899  
Option 4 ID : 630680831902  
Status : Answered  
Chosen Option : 4

Q.4 Select the number that will come in the place of the question mark(?), if '+' and '-' are interchanged and 'x' and '÷' are interchanged  
 $63 \times 7 \div 13 - 64 + 42 = ?$

- ✓ 1. 139
- ✗ 2. 131
- ✗ 3. 144
- ✗ 4. 124

Question ID : 630680163584  
Option 1 ID : 630680633522  
Option 2 ID : 630680633523  
Option 3 ID : 630680633521  
Option 4 ID : 630680633520  
Status : Answered  
Chosen Option : 1

Q.5 In a certain code language, 'RADIO' is written as 'SZEHP' and 'FREQUENCY' is written as 'GQFPVDOBZ'. How will 'TELEVISION' be written in that language?

Ans ☒ 1. UDMDWHTHPM

☐ 2. UDMDWHTHOM

☐ 3. UDMDWHTHPN

☐ 4. UDMDWHTTPM

Question ID : 630680416222

Option 1 ID : 6306801623652

Option 2 ID : 6306801623654

Option 3 ID : 6306801623653

Option 4 ID : 6306801623651

Status : Answered

Chosen Option : 1

Q.6 Three of the following numbers are alike in a certain way and one is different. Pick the odd one out.

(NOTE : Operations should be performed on the whole numbers, without breaking down the numbers into its constituent digits. E.g. 13 – Operations on 13 such as adding /deleting /multiplying etc., to 13 can be performed. Breaking down 13 into 1 and 3 and then performing mathematical operations on 1 and 3 is not allowed.)

Ans ☐ 1. 18 – 11 – 63

☐ 2. 12 – 8 – 36

☒ 3. 21 – 14 – 72

☐ 4. 15 – 3 – 108

Question ID : 630680389589

Option 1 ID : 6306801518817

Option 2 ID : 6306801518815

Option 3 ID : 6306801518814

Option 4 ID : 6306801518816

Status : Answered

Chosen Option : 3

Q.7 Select the option that represents the letters that, when placed from left to right in the blanks below, will complete the letter series.

S \_ Y A \_ F I K M \_ S U W

Ans ☐ 1. UCP

☒ 2. VCP

☐ 3. VCQ

☐ 4. VBP

Question ID : 630680417336

Option 1 ID : 6306801628110

Option 2 ID : 6306801628107

Option 3 ID : 6306801628109

Option 4 ID : 6306801628108

Status : Marked For Review


Chosen Option : 2

Q.8 Find the correct combination of letters that when sequentially filled in the blanks of the given series will make the series logically complete.  
ABF\_HI\_NOP\_U\_WABCDH\_

- Ans
- ☐ 1. GMSVI
  - ☐ 2. GMTUI
  - ☒ 3. GMTVI
  - ☐ 4. IMTVI

Question ID : 630680113687  
Option 1 ID : 630680440283  
Option 2 ID : 630680440285  
Option 3 ID : 630680440284  
Option 4 ID : 630680440282  
Status : Answered  
Chosen Option : 3

Q.9 Six letters P, J, U, W, L and K are written on different faces of a dice. Two positions of this dice are shown in the figures below. Find the letter on the face opposite to P.



- Ans
- ☐ 1. K
  - ☒ 2. W
  - ☐ 3. U
  - ☐ 4. J

Question ID : 630680222366  
Option 1 ID : 630680863298  
Option 2 ID : 630680863295  
Option 3 ID : 630680863297  
Option 4 ID : 630680863296  
Status : Answered  
Chosen Option : 2

Q.10 Select the triad in which the numbers are related in the same way as are the numbers of the given triads.  
(25, 22, 47), (31, 24, 55)  
(NOTE : Operations should be performed on the whole numbers, without breaking down the numbers into its constituent digits. E.g. 13 – Operations on 13 such as adding /deleting /multiplying etc. to 13 can be performed. Breaking down 13 into 1 and 3 and then performing mathematical operations on 1 and 3 is not allowed)

- Ans
- ☐ 1. (17, 15, 22)
  - ☐ 2. (22, 19, 45)
  - ☒ 3. (18, 21, 39)
  - ☐ 4. (27, 25, 42)

Question ID : 630680319362  
Option 1 ID : 6306801242356  
Option 2 ID : 6306801242354  
Option 3 ID : 6306801242353  
Option 4 ID : 6306801242355  
Status : Answered  
Chosen Option : 3

Q.11 The position of how many letters will remain unchanged if all the letters in the word MOBILE are arranged in English alphabetical order?

Ans ☒ 1. Three

☒ 2. One

☒ 3. None

☒ 4. Two

Question ID : 630680348537

Option 1 ID : 6306801356440

Option 2 ID : 6306801356438

Option 3 ID : 6306801356437

Option 4 ID : 6306801356439

Status : Answered

Chosen Option : 3

Q.12 What will come in the place of '?' in the following equation, if '+' and '-' are interchanged and 'x' and '÷' are interchanged?

$$25 + 3 \div 9 - 14 \times 2 = ?$$

Ans ☒ 1. 5

☒ 2. 7

☒ 3. 12

☒ 4. 0

Question ID : 630680339255

Option 1 ID : 6306801319589

Option 2 ID : 6306801319592

Option 3 ID : 6306801319591

Option 4 ID : 6306801319590

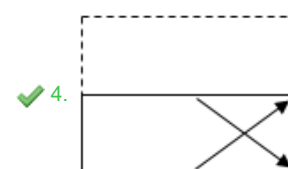
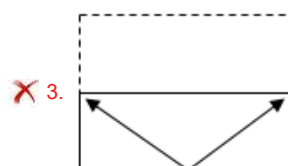
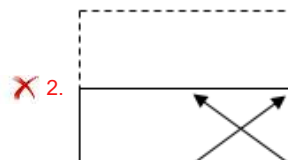
Status : Answered

Chosen Option : 1

Q.13 A transparent sheet with a pattern is given below. Select the option that depicts the pattern that would appear when the given transparent sheet is folded at the middle horizontal line.



Ans



Question ID : 630680389399

Option 1 ID : 6306801518054

Option 2 ID : 6306801518056

Option 3 ID : 6306801518057

Option 4 ID : 6306801518055

Status : Answered

Chosen Option : 4

Q.14 Select the word-pair that best represents a similar relationship to the one expressed in the pair of words given below.

(The words must be considered as meaningful English words and must NOT be related to each other based on the number of letters/number of consonants/vowels in the word)

France : Gallic Rooster

Ans ✗ 1. New Zealand : Hornbill

✓ 2. Australia : Emu

✗ 3. Germany : Swan

✗ 4. India : Eagle

Question ID : 630680417415

Option 1 ID : 6306801628423

Option 2 ID : 6306801628425

Option 3 ID : 6306801628426

Option 4 ID : 6306801628424

Status : Answered

Chosen Option : 3

Q.15 12 is related to 235 by certain logic. Following the same logic, 14 is related to 287. To which of the following is 18 related, following the same logic? (NOTE : Operations should be performed on the whole numbers, without breaking down the numbers into its constituent digits. E.g. 13 – Operations on 13 such as adding /deleting /multiplying etc., to 13 can be performed. Breaking down 13 into 1 and 3 and then performing mathematical operations on 1 and 3 is not allowed.)

Ans ☒ 1. 512

☒ 2. 415

☒ 3. 438

☒ 4. 320

Question ID : 630680326556

Option 1 ID : 6306801270312

Option 2 ID : 6306801270309

Option 3 ID : 6306801270311

Option 4 ID : 6306801270310

Status : Not Answered

Chosen Option : --

Q.16 Select the option that can replace the question mark (?) in the following series.  
BH14, CJ17, DL20, EN23, ?

Ans ☒ 1. FP26

☒ 2. GO24

☒ 3. GP26

☒ 4. FO24

Question ID : 630680416296

Option 1 ID : 6306801623948

Option 2 ID : 6306801623947

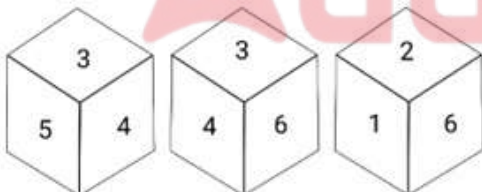
Option 3 ID : 6306801623949

Option 4 ID : 6306801623950

Status : Answered

Chosen Option : 1

Q.17 Three different positions of the same dice are given. Find the number on the face opposite to the face showing '2'.



Ans ☒ 1. 6

☒ 2. 4

☒ 3. 3

☒ 4. 1

Question ID : 630680367568

Option 1 ID : 6306801431721

Option 2 ID : 6306801431723

Option 3 ID : 6306801431724

Option 4 ID : 6306801431722

Status : Answered

Chosen Option : 3

Q.18 All the alphabets in the word 'DICTIONARY' are arranged in the alphabetical order.  
How many alphabets are there in the English alphabetical series between the alphabet which is fourth from the left end and the one which is second from the right end in the newly formed letter-cluster?

Ans ☒ 1. 12

☒ 2. 9

☒ 3. 11

☒ 4. 10

Question ID : 630680199106

Option 1 ID : 630680772132

Option 2 ID : 630680772131

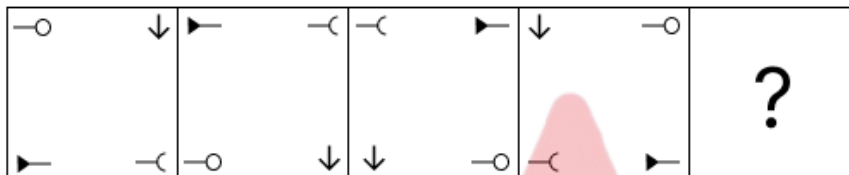
Option 3 ID : 630680772133

Option 4 ID : 630680772134

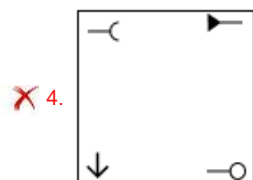
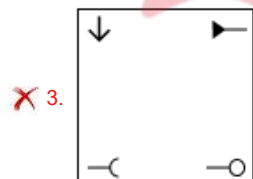
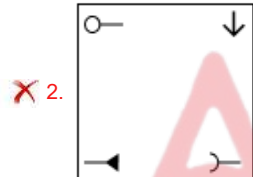
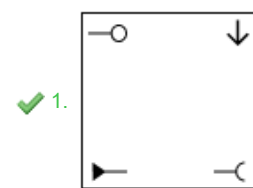
Status : Answered

Chosen Option : 4

Q.19 Identify the figure given in the options which when put in place of the question mark (?) will logically complete the series?



Ans



Question ID : 630680471498

Option 1 ID : 6306801841708

Option 2 ID : 6306801841706

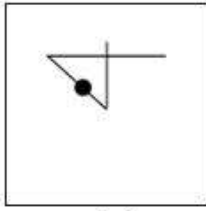
Option 3 ID : 6306801841709

Option 4 ID : 6306801841707

Status : Answered

Chosen Option : 1


Q.20 Select the option figure in which the given figure (X) is embedded (rotation is NOT allowed).



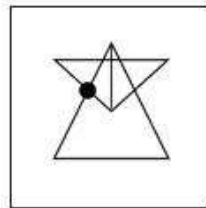
(X)

Ans

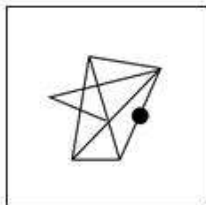
✗ 1.



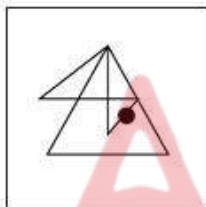
✓ 2.



✗ 3.



✗ 4.



Question ID : 630680296892

Option 1 ID : 6306801155214

Option 2 ID : 6306801155211

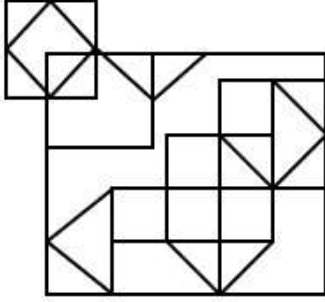
Option 3 ID : 6306801155212

Option 4 ID : 6306801155213

Status : Answered

Chosen Option : 2

Q.21 How many squares are there in the given figure?



- Ans
- ☐ 1. 14
  - ☐ 2. 12
  - ☐ 3. 11
  - ☒ 4. 15

Question ID : 630680163561

Option 1 ID : 630680633430

Option 2 ID : 630680633429

Option 3 ID : 630680633428

Option 4 ID : 630680633431

Status : Answered

Chosen Option : 1

Q.22 In a certain code language, 'BOTH' is written as 'DQVJ' and 'DARE' is written as 'FCTG'. How will 'WILL' be written in that language?

- Ans
- ☐ 1. YJMN
  - ☒ 2. YKNN
  - ☐ 3. XJMM
  - ☐ 4. XKNM

Question ID : 630680172761

Option 1 ID : 630680669447

Option 2 ID : 630680669444

Option 3 ID : 630680669445

Option 4 ID : 630680669446

Status : Answered

Chosen Option : 2

Q.23 If

'A & Z' means 'A is the brother of Z',  
 'A # Z' means 'A is the sister of Z',  
 'A ^ Z' means 'A is the brother of Z's father',  
 'A @ Z' means 'A is the wife of Z',  
 'A % Z' means 'A is the mother of Z',  
 'A α Z' means 'A is the father of Z',  
 then how is J related to Z in the following expression?

J % K # L @ M α N & Z

- Ans
- ☐ 1. Father's mother
  - ☐ 2. Mother
  - ☒ 3. Mother's mother
  - ☐ 4. Mother's sister

Question ID : 630680262033

Option 1 ID : 6306801017782

Option 2 ID : 6306801017781

Option 3 ID : 6306801017779

Option 4 ID : 6306801017780

Status : Answered

Chosen Option : 3

Q.24 Select the number from among the given options that can replace the question mark (?) in the following series.  
389, 420, 457, 498, 541, ?

Ans ☒ 1. 572

☒ 2. 584

☒ 3. 588

☒ 4. 598

Question ID : 630680411859

Option 1 ID : 6306801606273

Option 2 ID : 6306801606272

Option 3 ID : 6306801606274

Option 4 ID : 6306801606271

Status : Not Answered

Chosen Option : --

Q.25 Select the option in which the numbers share the same relationship as that shared by the given pair of numbers.  
(NOTE: Operations should be performed on the whole numbers, without breaking down the numbers into its constituent digits. E.g. 13 – Operations on 13 such as adding/deleting/multiplying etc. to 13 can be performed. Breaking down 13 into 1 and 3 and then performing mathematical operations on 1 and 3 is not allowed.)

40 : 123

63 : 192

Ans ☒ 1. 48 : 152

☒ 2. 46 : 131

☒ 3. 68 : 214

☒ 4. 39 : 120

Question ID : 630680326568

Option 1 ID : 6306801270357

Option 2 ID : 6306801270359

Option 3 ID : 6306801270360

Option 4 ID : 6306801270358

Status : Answered

Chosen Option : 4

Section : General Awareness

Q.1 Which of the following is related to neem?

Ans ☒ 1. Pinnately

☒ 2. Palmately

☒ 3. Spines

☒ 4. Tendril

Question ID : 630680314127

Option 1 ID : 6306801222316

Option 2 ID : 6306801222313

Option 3 ID : 6306801222315

Option 4 ID : 6306801222314

Status : Not Answered

Chosen Option : --

Q.2 For which film did Asha Bhosle win the International Indian Film Academy (IIFA) Award in the Best Playback Singer Female category in 2002?

- Ans
- ☐ 1. Devdas
  - ☐ 2. Humraz
  - ☐ 3. Om Jai Jagdish
  - ☒ 4. Lagaan

Question ID : 630680511798  
Option 1 ID : 6306802000163  
Option 2 ID : 6306802000162  
Option 3 ID : 6306802000165  
Option 4 ID : 6306802000164  
Status : Answered  
Chosen Option : 4

Q.3 What is the duration of monsoon in India?

- Ans
- ☒ 1. 100-120 days
  - ☐ 2. 150-200 days
  - ☐ 3. 40-60 days
  - ☐ 4. 50-80 days

Question ID : 630680302661  
Option 1 ID : 6306801177312  
Option 2 ID : 6306801177313  
Option 3 ID : 6306801177310  
Option 4 ID : 6306801177311  
Status : Answered  
Chosen Option : 1

Q.4 The northern plain of the Indian subcontinent has been formed by the interplay of the three major river systems along with their tributaries. Choose the odd one out of the options given.

- Ans
- ☐ 1. The Indus
  - ☐ 2. The Brahmaputra
  - ☐ 3. The Ganga
  - ☒ 4. The Godavari

Question ID : 630680309368  
Option 1 ID : 6306801203630  
Option 2 ID : 6306801203631  
Option 3 ID : 6306801203629  
Option 4 ID : 6306801203632  
Status : Answered  
Chosen Option : 4

Q.5 Which of the following is mentioned in Article 1 of the Indian constitution?

- Ans
- ☐ 1. India that is Bharat as parliamentary democracy
  - ☐ 2. India that is Bharat as federation of states
  - ☒ 3. India that is Bharat shall be a Union of states
  - ☐ 4. India that is Bharat as presidential form of democracy

Question ID : 630680282979  
Option 1 ID : 6306801100048  
Option 2 ID : 6306801100049  
Option 3 ID : 6306801100050  
Option 4 ID : 6306801100047  
Status : Answered  
Chosen Option : 3

Q.6 Who holds the record for the longest long jump in India as of 2023?

- Ans
- ☐ 1. Murali S
  - ☐ 2. Nayana James
  - ☒ 3. Jeswin aldrin
  - ☐ 4. TC Yohannan

Question ID : 630680510764  
Option 1 ID : 6306801996186  
Option 2 ID : 6306801996189  
Option 3 ID : 6306801996187  
Option 4 ID : 6306801996188  
Status : Not Answered  
Chosen Option : --

Q.7 Name the phenomenon where an opaque object on the path of light becomes very small and where light has a tendency to bend around it and not walk in a straight line.

- Ans
- ☐ 1. Reflection of light
  - ☐ 2. Angle of incidence
  - ☒ 3. Diffraction of light
  - ☐ 4. Angle of refraction

Question ID : 630680194546  
Option 1 ID : 630680754709  
Option 2 ID : 630680754712  
Option 3 ID : 630680754711  
Option 4 ID : 630680754710  
Status : Answered  
Chosen Option : 3

Q.8 Articles 52 to 78 in Part V of the Indian Constitution deal with \_\_\_\_\_.

- Ans
- ☐ 1. National emergency
  - ☐ 2. Amendment of the Constitution
  - ☐ 3. Finance Commission of India
  - ☒ 4. Union Executive

Question ID : 630680326512  
Option 1 ID : 6306801270134  
Option 2 ID : 6306801270135  
Option 3 ID : 6306801270136  
Option 4 ID : 6306801270133  
Status : Answered  
Chosen Option : 4

Q.9 What is the position of India in the world's telecommunication market, as of March 2024?

- Ans
- ☐ 1. Fourth
  - ☒ 2. Second
  - ☐ 3. Third
  - ☐ 4. First

Question ID : 630680327625  
Option 1 ID : 6306801274500  
Option 2 ID : 6306801274498  
Option 3 ID : 6306801274499  
Option 4 ID : 6306801274497  
Status : Not Answered  
Chosen Option : --

Q.10 The National Youth Policy was launched in:

- Ans ☒ 1. 2015  
☒ 2. 2014  
☒ 3. 2013  
☒ 4. 2012

Question ID : 630680409609  
 Option 1 ID : 6306801597268  
 Option 2 ID : 6306801597267  
 Option 3 ID : 6306801597266  
 Option 4 ID : 6306801597265  
 Status : Not Answered  
 Chosen Option : --

Q.11 Who among the following was the President of the Belgaum Session of the Indian National Congress held in 1924?

- Ans ☒ 1. Vallabhbhai Patel  
☒ 2. Mahatma Gandhi  
☒ 3. Subhas Chandra Bose  
☒ 4. Jawaharlal Nehru

Question ID : 630680511502  
 Option 1 ID : 6306801999131  
 Option 2 ID : 6306801999130  
 Option 3 ID : 6306801999132  
 Option 4 ID : 6306801999133  
 Status : Answered  
 Chosen Option : 2

Q.12 Ali Akbar Khan is known for playing the \_\_\_\_\_.

- Ans ☒ 1. Ektara  
☒ 2. Sarangi  
☒ 3. Tanpura  
☒ 4. Sarod

Question ID : 630680511894  
 Option 1 ID : 6306802000548  
 Option 2 ID : 6306802000547  
 Option 3 ID : 6306802000549  
 Option 4 ID : 6306802000546  
 Status : Answered  
 Chosen Option : 2

Q.13 Consider the following statements related to the Online Dispute Resolution (ODR) handbook.

- 1.It will be launched by the Ministry of Science and Technology.
- 2.ODR is the resolution for cases outside courts using digital technology and techniques of Alternative Dispute Resolution (ADR), such as negotiation, mediation and arbitration.
- 3.The development of ICT and increased use of internet has played a major role for ODR.

Which of the given statements is/are correct?

Ans ☒ 1. Only 2 and 3

☐ 2. Only 1 and 3

☐ 3. Only 2

☐ 4. Only 1

Question ID : 630680139324

Option 1 ID : 630680539371

Option 2 ID : 630680539370

Option 3 ID : 630680539372

Option 4 ID : 630680539373

Status : Not Answered

Chosen Option : --

Q.14 The Flexible Inflation Targeting Framework (FITF) was introduced in India post the amendment of the Reserve Bank of India (RBI) Act, 1934 in \_\_\_\_\_.

Ans ☐ 1. 2010

☐ 2. 2014

☒ 3. 2016

☐ 4. 2020

Question ID : 630680144749

Option 1 ID : 630680560040

Option 2 ID : 630680560039

Option 3 ID : 630680560038

Option 4 ID : 630680560041

Status : Not Answered

Chosen Option : --

Q.15 The government of which of the following states allocated ₹11,728 crore for the Aasara pension scheme in its annual budget for the fiscal year 2022-23?

Ans ☒ 1. Telangana

☐ 2. Odisha

☐ 3. Chhattisgarh

☐ 4. Gujarat

Question ID : 630680327505

Option 1 ID : 6306801274019

Option 2 ID : 6306801274018

Option 3 ID : 6306801274017

Option 4 ID : 6306801274020

Status : Not Answered

Chosen Option : --

Q.16 'Atla Taddi' is the widely celebrated festival of which Indian state?

- Ans
- ☐ 1. West Bengal
  - ☐ 2. Bihar
  - ☐ 3. Punjab
  - ☒ 4. Andhra Pradesh

Question ID : 630680216005  
Option 1 ID : 630680837998  
Option 2 ID : 630680837997  
Option 3 ID : 630680837995  
Option 4 ID : 630680837996  
Status : Not Answered  
Chosen Option : --

Q.17 Which national park in the Andaman and Nicobar Islands is home to species like Megapode, crab-eating Macaque, Nicobar Pigeon, and Giant Robber Crab?

- Ans
- ☒ 1. Campbell Bay National Park
  - ☐ 2. Raimona National Park
  - ☐ 3. Mouling National Park
  - ☐ 4. Papikonda National Park

Question ID : 630680407455  
Option 1 ID : 6306801588758  
Option 2 ID : 6306801588761  
Option 3 ID : 6306801588760  
Option 4 ID : 6306801588759  
Status : Answered  
Chosen Option : 1

Q.18 The Permanent Settlement came into operation in which of the following years?

- Ans
- ☒ 1. 1793
  - ☐ 2. 1890
  - ☐ 3. 1789
  - ☐ 4. 1790

Question ID : 630680412327  
Option 1 ID : 6306801608132  
Option 2 ID : 6306801608131  
Option 3 ID : 6306801608134  
Option 4 ID : 6306801608133  
Status : Not Answered  
Chosen Option : --

Q.19 Which part of the Constitution deals with the Panchayats?

- Ans
- ☐ 1. Part IV
  - ☐ 2. Part X
  - ☒ 3. Part IX
  - ☐ 4. Part VII

Question ID : 630680413118  
Option 1 ID : 6306801611296  
Option 2 ID : 6306801611297  
Option 3 ID : 6306801611298  
Option 4 ID : 6306801611295  
Status : Answered  
Chosen Option : 3

Q.20 Which of the following battles was fought between Babur and Rana Sanga in 1527?

- Ans ☐ 1. Battle of Chanderi  
☐ 2. Battle of Bayana  
☒ 3. Battle of Khanwa  
☐ 4. Second battle of Panipat

Question ID : 630680412406  
Option 1 ID : 6306801608448  
Option 2 ID : 6306801608449  
Option 3 ID : 6306801608450  
Option 4 ID : 6306801608447  
Status : Answered  
Chosen Option : 1

Q.21 Which among the following was NOT a part of the three sections of the Rigvedic tribe?

- Ans ☐ 1. Warriors  
☐ 2. Priests  
☐ 3. Ordinary people  
☒ 4. Craftsman

Question ID : 630680412438  
Option 1 ID : 6306801608576  
Option 2 ID : 6306801608577  
Option 3 ID : 6306801608578  
Option 4 ID : 6306801608575  
Status : Answered  
Chosen Option : 4

Q.22 Which of the following statements is/are correct?

- i. The first green revolution led to over-exploitation of natural resources.  
ii. The second Green Revolution was more focused on Southern India.  
iii. The second green revolution ensured in achieving sustainable livelihood security.

- Ans ☐ 1. Only ii  
☐ 2. i and ii  
☐ 3. ii and iii  
☒ 4. i and iii

Question ID : 6306801048046  
Option 1 ID : 6306804114233  
Option 2 ID : 6306804114230  
Option 3 ID : 6306804114231  
Option 4 ID : 6306804114232  
Status : Not Answered  
Chosen Option : --

Q.23 In which of the following states of India is Hojagiri dance predominantly performed?

- Ans ☐ 1. Kerala  
☐ 2. Maharashtra  
☒ 3. Tripura  
☐ 4. Himachal Pradesh

Question ID : 630680408973  
Option 1 ID : 6306801594816  
Option 2 ID : 6306801594817  
Option 3 ID : 6306801594815  
Option 4 ID : 6306801594818  
Status : Answered  
Chosen Option : 3

Q.24 A chemical reaction in which the rate of reaction is directly proportional to the first power of the concentration of the reacting substance is called:

- Ans ☒ 1. second order reaction  
☒ 2. first order reaction  
☒ 3. zero order reaction  
☒ 4. third order reaction

Question ID : 630680111958  
 Option 1 ID : 630680433560  
 Option 2 ID : 630680433559  
 Option 3 ID : 630680433558  
 Option 4 ID : 630680433561  
 Status : Not Answered  
 Chosen Option : --

Q.25 Where was the 1<sup>st</sup> World Cup of Kabaddi organised in 2004?

- Ans ☒ 1. Hyderabad  
☒ 2. Mumbai  
☒ 3. Punjab  
☒ 4. Kolkata

Question ID : 630680510814  
 Option 1 ID : 6306801996386  
 Option 2 ID : 6306801996388  
 Option 3 ID : 6306801996389  
 Option 4 ID : 6306801996387  
 Status : Not Answered  
 Chosen Option : --

Section : Quantitative Aptitude

Q.1 10 years ago, the age of Sunita was thrice the age of her daughter Tanya. 10 years hence, the age of Sunita will be twice the age of Tanya. What is the ratio of their present ages?

- Ans ☒ 1. 2 : 7  
☒ 2. 7 : 2  
☒ 3. 7 : 3  
☒ 4. 3 : 7

Question ID : 630680285563  
 Option 1 ID : 6306801110222  
 Option 2 ID : 6306801110221  
 Option 3 ID : 6306801110219  
 Option 4 ID : 6306801110220  
 Status : Answered  
 Chosen Option : 3

Q.2 A thief is noticed by a policeman from a distance of 92 m. The thief starts running and the policeman chases him. The thief and the policeman run at the speed of 90 km/h and 104.4 km/h, respectively. In how much time will the policeman catch the thief?

- Ans
- ☐ 1. 21 seconds
  - ☐ 2. 26 seconds
  - ☐ 3. 22 seconds
  - ☒ 4. 23 seconds

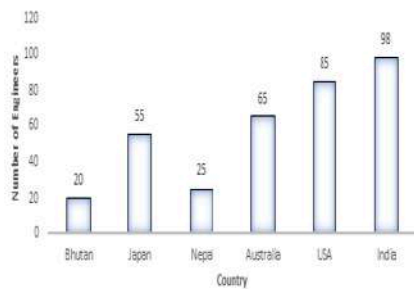
Question ID : 630680428622  
Option 1 ID : 6306801672532  
Option 2 ID : 6306801672533  
Option 3 ID : 6306801672535  
Option 4 ID : 6306801672534  
Status : Answered  
Chosen Option : 4

Q.3 R targets to score 85% marks in exams. He scores 450 marks and misses the target by 35%. How much increment in percentage should be there in his scored marks to meet the target?

- Ans
- ☐ 1. 53
  - ☐ 2. 45
  - ☒ 3. 70
  - ☐ 4. 35

Question ID : 630680428056  
Option 1 ID : 6306801670268  
Option 2 ID : 6306801670271  
Option 3 ID : 6306801670270  
Option 4 ID : 6306801670269  
Status : Not Answered  
Chosen Option : --

Q.4 Study the given bar-graph and answer the question that follows.



What is the ratio of the number of engineers of countries with an above average to the number of engineers of countries with a below average?

Ans

✗ 1.  $\frac{62}{25}$

✗ 2.  $\frac{2}{1}$

✓ 3.  $\frac{1}{1}$

✗ 4.  $\frac{39}{71}$

Question ID : 630680384351

Option 1 ID : 6306801498290

Option 2 ID : 6306801498293

Option 3 ID : 6306801498291

Option 4 ID : 6306801498292

Status : Not Attempted and  
Marked For Review

Chosen Option : --

Q.5 Simplify.

$$\frac{(232)^3 + (140)^3 + (353)^3 - 3 \times 232 \times 140 \times 353}{(232)^2 + (140)^2 + (353)^2 - 232 \times 140 - 140 \times 353 - 353 \times 232}$$

Ans ✓ 1. 725

✗ 2. 596

✗ 3. 445

✗ 4. 261

Question ID : 630680413475

Option 1 ID : 6306801612725

Option 2 ID : 6306801612727

Option 3 ID : 6306801612724

Option 4 ID : 6306801612726

Status : Answered

Chosen Option : 1

Q.6 In the following sets, which set represents the sides of a right-angled triangle?

- Ans ☒ 1. {5, 10, 12}
- ☒ 2. {3, 4, 6}
- ☒ 3. {5, 12, 13}
- ☒ 4. {8, 15, 16}

Question ID : 630680421383  
 Option 1 ID : 6306801643997  
 Option 2 ID : 6306801643995  
 Option 3 ID : 6306801643996  
 Option 4 ID : 6306801643998  
 Status : Answered  
 Chosen Option : 3

Q.7 Simplify  
 $6 \times [28 \div 84 \times \{36 \times 49 \div (6 \times 7)\}]$ .

- Ans ☒ 1. 94
- ☒ 2. 84
- ☒ 3. 64
- ☒ 4. 74

Question ID : 630680410447  
 Option 1 ID : 6306801600507  
 Option 2 ID : 6306801600506  
 Option 3 ID : 6306801600504  
 Option 4 ID : 6306801600505  
 Status : Answered  
 Chosen Option : 2

Q.8 The difference between the simple interests on the principal of ₹500 at an interest rate of 5% per annum for 3 years and 4% per annum for 4 years is:

- Ans ☒ 1. ₹15
- ☒ 2. ₹5
- ☒ 3. ₹7.5
- ☒ 4. ₹10

Question ID : 63068070431  
 Option 1 ID : 630680272352  
 Option 2 ID : 630680272351  
 Option 3 ID : 630680272353  
 Option 4 ID : 630680272350  
 Status : Answered  
 Chosen Option : 2

**Q.9** Aman has certain number of notes of denomination ₹20 and ₹10 which amount to ₹390. If the numbers of notes of each kind are interchanged, then the new amount is ₹90 less than before. Find the number of notes of ₹20 denomination.

**Ans** ✓ 1. 16

✗ 2. 14

✗ 3. 15

✗ 4. 12

Question ID : 630680354930

Option 1 ID : 6306801381793

Option 2 ID : 6306801381796

Option 3 ID : 6306801381794

Option 4 ID : 6306801381795

Status : Not Answered

Chosen Option : --

**Q.10** Which of the following are the angles of a scalene triangle?

**Ans** ✓ 1.  $60^\circ$ ,  $30^\circ$  and  $90^\circ$

✗ 2.  $110^\circ$ ,  $35^\circ$  and  $35^\circ$

✗ 3.  $60^\circ$ ,  $60^\circ$  and  $60^\circ$

✗ 4.  $90^\circ$ ,  $45^\circ$  and  $45^\circ$

Question ID : 630680378671

Option 1 ID : 6306801475731

Option 2 ID : 6306801475734

Option 3 ID : 6306801475733

Option 4 ID : 6306801475732

Status : Answered

Chosen Option : 2

**Q.11** For two circles of radius 7 units and  $\frac{7}{2}$  units, whose centres are 15 units apart, what is the length of the direct common tangent in units? (Correct to 3 decimal places.)

**Ans** ✓ 1. 14.586

✗ 2. 18.654

✗ 3. 16.584

✗ 4. 15.486

Question ID : 630680297304

Option 1 ID : 6306801156683

Option 2 ID : 6306801156686

Option 3 ID : 6306801156685

Option 4 ID : 6306801156684

Status : Not Answered

Chosen Option : --

Q.12 A tank can be filled by pipe A in 4 hours and pipe B in 6 hours. At 8:00 a.m., pipe A was opened. At what time will the tank be filled if pipe B is opened at 9:00 a.m.?

- Ans
- ☐ 1. 10:16 a.m.
  - ☐ 2. 10:22 a.m.
  - ☒ 3. 10:48 a.m.
  - ☐ 4. 10:18 a.m.

Question ID : 630680493242  
 Option 1 ID : 6306801926715  
 Option 2 ID : 6306801926717  
 Option 3 ID : 6306801926718  
 Option 4 ID : 6306801926716  
 Status : Answered  
 Chosen Option : 3

Q.13 A triangle ABC is made on a circle, where AB is diameter of the circle. If BC is equal to the radius of the circle and  $\angle ABC = x \angle BAC$ , then x is :

- Ans
- ☐ 1. 1
  - ☐ 2. 2.5
  - ☒ 3. 2
  - ☐ 4. 1.5

Question ID : 630680421355  
 Option 1 ID : 6306801643883  
 Option 2 ID : 6306801643886  
 Option 3 ID : 6306801643885  
 Option 4 ID : 6306801643884  
 Status : Not Answered  
 Chosen Option : --

Q.14 Amit and Bilal buy goods for ₹1,500 and ₹2,000, respectively. Amit marks his goods up by y%, while Bilal marks his goods up by 2y% and offers a discount of y%. If both make the same profit, then find the value of y.

- Ans
- ☐ 1. 10.5
  - ☒ 2. 12.5
  - ☐ 3. 11.5
  - ☐ 4. 12

Question ID : 630680428866  
 Option 1 ID : 6306801673508  
 Option 2 ID : 6306801673511  
 Option 3 ID : 6306801673509  
 Option 4 ID : 6306801673510  
 Status : Not Answered  
 Chosen Option : --

Q.15 30 is the mean proportional of 18 and A. Find the value of A.

- Ans
- ☒ 1. 60
  - ☒ 2. 40
  - ☒ 3. 50
  - ☒ 4. 45

Question ID : 630680428477  
 Option 1 ID : 6306801671953  
 Option 2 ID : 6306801671954  
 Option 3 ID : 6306801671952  
 Option 4 ID : 6306801671955  
 Status : Answered  
 Chosen Option : 3

Q.16 If  $4\tan\theta - 3 = 0$ , then the value of  $\frac{1 - \cos 2\theta}{1 + \cos 2\theta}$  is:

- Ans
- ☒ 1.  $\frac{9}{16}$
  - ☒ 2.  $\frac{4}{3}$
  - ☒ 3.  $\frac{7}{15}$
  - ☒ 4. 1

Question ID : 630680397005  
 Option 1 ID : 6306801548078  
 Option 2 ID : 6306801548077  
 Option 3 ID : 6306801548076  
 Option 4 ID : 6306801548079  
 Status : Not Answered  
 Chosen Option : --

Q.17 Find the length of the longest stick that can be fitted in a cubical vessel of edge 70 cm.

- Ans
- ☒ 1.  $70\sqrt{3}$  cm
  - ☒ 2.  $35\sqrt{3}$  cm
  - ☒ 3.  $10\sqrt{3}$  cm
  - ☒ 4.  $70\sqrt{2}$  cm

Question ID : 63068091888  
 Option 1 ID : 630680356286  
 Option 2 ID : 630680356288  
 Option 3 ID : 630680356289  
 Option 4 ID : 630680356287  
 Status : Answered  
 Chosen Option : 1

Q.18 A trader offers the following discount schemes on the purchase of a refrigerator.

- ( i ) a discount of 10% followed by a discount of 8%
- ( ii ) successive discounts of 12% and 10%
- ( iii ) two successive discounts of 12%
- ( iv ) a discount of 20%

In which scheme is the selling price the lowest?

- Ans
- ☐ 1. (i)
  - ☐ 2. (iv)
  - ☒ 3. (iii)
  - ☐ 4. (ii)

Question ID : 630680145358

Option 1 ID : 630680562409

Option 2 ID : 630680562406

Option 3 ID : 630680562407

Option 4 ID : 630680562408

Status : Not Answered

Chosen Option : --

Q.19 For what least value of  $n$ ,  $2^{2n} + 2n$  is completely divided by 6, where  $n$  is an integer?

- Ans
- ☐ 1. 3
  - ☐ 2. 2
  - ☒ 3. 1
  - ☐ 4. 0

Question ID : 630680115939

Option 1 ID : 630680449089

Option 2 ID : 630680449088

Option 3 ID : 630680449087

Option 4 ID : 630680449086

Status : Not Answered

Chosen Option : --

Q.20 There is a 32 l mixture of milk and water. The ratio of milk and water in this mixture is 5 : 3. How many litres of water should be added to this mixture so that the resultant mixture has 50% water in it?

- Ans
- ☐ 1. 4
  - ☒ 2. 8
  - ☐ 3. 6
  - ☐ 4. 5

Question ID : 630680518852

Option 1 ID : 6306802027882

Option 2 ID : 6306802027883

Option 3 ID : 6306802027881

Option 4 ID : 6306802027880

Status : Answered

Chosen Option : 2

Q.21 The value of  $\theta$ , when  $\sqrt{3} \cos \theta + \sin \theta = 1$  ( $1 \leq \theta \leq 90^\circ$ ), is:

- Ans
- ☒ 1.  $60^\circ$
  - ☒ 2.  $30^\circ$
  - ☒ 3.  $20^\circ$
  - ☒ 4.  $90^\circ$

Question ID : 630680526469  
Option 1 ID : 6306802057945  
Option 2 ID : 6306802057943  
Option 3 ID : 6306802057942  
Option 4 ID : 6306802057944  
Status : Not Answered  
Chosen Option : --

Q.22 Study the given table and answer the question that follows.  
The following table shows the production of printers by four plants of a company over the five years.

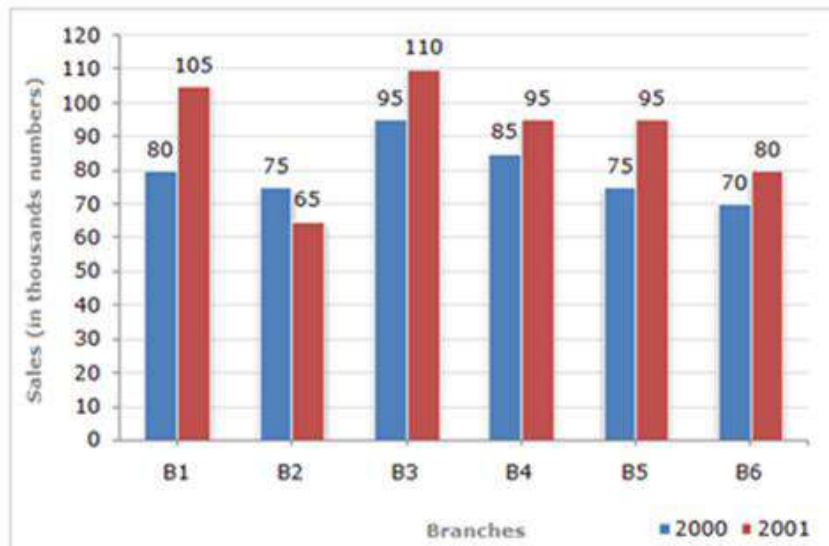
Year	Production (in thousands)			
	Plant 1	Plant 2	Plant 3	Plant 4
2018	35	25	40	45
2019	43	44	44	40
2020	48	39	36	30
2021	32	40	35	48
2022	42	44	30	42

What is the difference between the average production of plant 1 and plant 2 during five years?

- Ans
- ☒ 1. 1400
  - ☒ 2. 1600
  - ☒ 3. 3000
  - ☒ 4. 3840

Question ID : 630680428200  
Option 1 ID : 6306801670845  
Option 2 ID : 6306801670844  
Option 3 ID : 6306801670846  
Option 4 ID : 6306801670847  
Status : Not Answered  
Chosen Option : --

Q.23 Study the given bar-graph and answer the question that follows.  
The bar-graph shows the sales of books (in thousands) from six branches (B1, B2, B3, B4, B5 and B6) of a publishing company during two consecutive years 2000 and 2001.



What is the ratio of the total sales of branch B2 for both years to the total sales of branch B4 for both years?

- Ans
- ☐ 1. 3 : 5
  - ☒ 2. 7 : 9
  - ☐ 3. 2 : 3
  - ☐ 4. 6 : 7

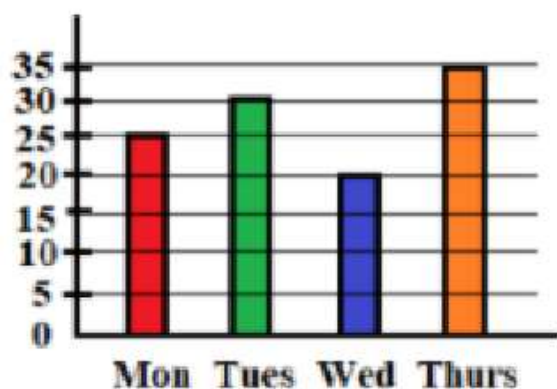
Question ID : 630680428213  
Option 1 ID : 6306801670897  
Option 2 ID : 6306801670899  
Option 3 ID : 6306801670896  
Option 4 ID : 6306801670898  
Status : Answered  
Chosen Option : 2

Q.24 Let  $x = r \cos(t)$ ,  $y = r \sin(t) \cos(u)$ ,  $z = r \sin(t) \sin(u)$ . Then the value of  $x^2 + y^2 + z^2$  is

- Ans
- ☐ 1.  $2r$
  - ☐ 2.  $r^2 \cos(u)$
  - ☒ 3.  $r^2$
  - ☐ 4.  $r^2 \sin(t)$

Question ID : 630680285509  
Option 1 ID : 6306801110006  
Option 2 ID : 6306801110005  
Option 3 ID : 6306801110004  
Option 4 ID : 6306801110003  
Status : Not Answered  
Chosen Option : --

Q.25 The bar graph shows the number of students present in a class on four days. The average number of students present on Monday, Tuesday and Wednesday is:



- Ans
- ☒ 1. 24
  - ☒ 2. 20
  - ☒ 3. 25
  - ☒ 4. 30

Question ID : 630680407267  
Option 1 ID : 6306801588015  
Option 2 ID : 6306801588014  
Option 3 ID : 6306801588016  
Option 4 ID : 6306801588017  
Status : Answered  
Chosen Option : 3

#### Section : English Comprehension

Q.1 Parts of a sentence are given below in jumbled order. Arrange the parts in the correct order to form a meaningful sentence.

- (O) attitude is
- (P) or tendency in individuals
- (Q) a broad-based behaviour
- (R) which implies
- (S) a hypothetical postulate

- Ans
- ☒ 1. OSRQP
  - ☒ 2. SQPRO
  - ☒ 3. OPQRS
  - ☒ 4. OPSRQ

Question ID : 630680377979  
Option 1 ID : 6306801472977  
Option 2 ID : 6306801472976  
Option 3 ID : 6306801472978  
Option 4 ID : 6306801472975  
Status : Answered  
Chosen Option : 1

Q.2 Select the most appropriate meaning of the given idiom.  
Off and on

Ans ☒ 1. Now and then

☐ 2. Know something thoroughly

☐ 3. Object to

☐ 4. Remind

Question ID : 630680192300

Option 1 ID : 630680745804

Option 2 ID : 630680745802

Option 3 ID : 630680745801

Option 4 ID : 630680745803

Status : Answered

Chosen Option : 1

Q.3 Select the most appropriate option to substitute the underlined segment in the given sentence.

The food intolerance industry has grown dramatically in the previous decade, chiefly because of a boost in Coeliac and Crohn's disease cases, as well as increasing awareness among health-conscious clients.

Ans ☐ 1. pretty much entirely because of a boil-down

☐ 2. contextually because of a spark

☒ 3. owing primarily to a rise

☐ 4. casually due to a growth

Question ID : 630680177246

Option 1 ID : 630680687163

Option 2 ID : 630680687162

Option 3 ID : 630680687161

Option 4 ID : 630680687160

Status : Answered

Chosen Option : 2

Q.4 Select the option that expresses the given sentence in passive voice.

I have booked an apartment in the new residential colony.

Ans ☐ 1. An apartment had been booked by me in the new residential colony.

☐ 2. An apartment have been booked by me in the new residential colony.

☒ 3. An apartment has been booked by me in the new residential colony.

☐ 4. An apartment is been booked by me in the new residential colony.

Question ID : 630680415180

Option 1 ID : 6306801619469

Option 2 ID : 6306801619470

Option 3 ID : 6306801619468

Option 4 ID : 6306801619467

Status : Answered

Chosen Option : 3

**Q.5** Select the most appropriate synonym of the word in bold.  
The city has immense coal piers.

- Ans ☒ 1. diminutive  
☒ 2. trifling  
☒ 3. huge  
☒ 4. set

Question ID : 630680319158  
Option 1 ID : 6306801241538  
Option 2 ID : 6306801241539  
Option 3 ID : 6306801241537  
Option 4 ID : 6306801241540  
Status : Answered  
Chosen Option : 3

**Q.6** Select the option that can be used as a one-word substitute for the given group of words.  
Speaking disrespectfully about sacred or religious things.

- Ans ☒ 1. Mystic  
☒ 2. Atheist  
☒ 3. Blasphemy  
☒ 4. Theist

Question ID : 630680160079  
Option 1 ID : 630680619703  
Option 2 ID : 630680619702  
Option 3 ID : 630680619700  
Option 4 ID : 630680619701  
Status : Answered  
Chosen Option : 3

**Q.7** Identify the error in the following sentence.  
Ourselves should not boast of one's knowledge.

- Ans ☒ 1. Ourselves  
☒ 2. knowledge  
☒ 3. boast  
☒ 4. one's

Question ID : 630680206321  
Option 1 ID : 630680800063  
Option 2 ID : 630680800066  
Option 3 ID : 630680800065  
Option 4 ID : 630680800064  
Status : Answered  
Chosen Option : 4

Q.8 Given below are four jumbled sentences. Select the option that gives their correct logical sequence.

- A. These are responsible for producing the major fuel used across the globe.
- B. The country has 100 major oil and gas fields.
- C. The economy of Saudi Arabia is based on petroleum.
- D. The chief oil field is Ghawar Field having an estimated 70 billion reserve resource.

Ans ✓ 1. CBAD

✗ 2. ABCD

✗ 3. BACD

✗ 4. DCAB

Question ID : 630680374762

Option 1 ID : 6306801460217

Option 2 ID : 6306801460216

Option 3 ID : 6306801460215

Option 4 ID : 6306801460218

Status : Answered

Chosen Option : 1

Q.9 Select the most appropriate homonyms from the given alternatives to fill in the blanks.

The rowing instructor commanded them to \_\_\_\_\_ in a \_\_\_\_\_.

A.row (verb)

B.roe

C.row (sequence)

Ans ✓ 1. A, C

✗ 2. A, B

✗ 3. C, A

✗ 4. B, C

Question ID : 630680129395

Option 1 ID : 630680501200

Option 2 ID : 630680501198

Option 3 ID : 630680501201

Option 4 ID : 630680501199

Status : Answered

Chosen Option : 1

Q.10 Select the most appropriate option to substitute the underlined word segment in the given sentence.

Sanat has just arrived in Mysore on transfer; he requests his friend Raghu to help him find an appropriate location.

Ans ✗ 1. a suitable elevation

✓ 2. a rented accommodation

✗ 3. a proper junction

✗ 4. an allocation recommendation

Question ID : 630680168512

Option 1 ID : 630680652661

Option 2 ID : 630680652662

Option 3 ID : 630680652660

Option 4 ID : 630680652663

Status : Answered

Chosen Option : 1

**Q.11** The given sentence is divided into four segments. Select the option that has the segment with a grammatical error.  
Two of the world's / best forwards / has played alongside / David Beckham.

**Ans** ✓ 1. has played alongside

✗ 2. best forwards

✗ 3. Two of the world's

✗ 4. David Beckham.

Question ID : 630680206626

Option 1 ID : 630680801105

Option 2 ID : 630680801104

Option 3 ID : 630680801103

Option 4 ID : 630680801106

Status : Answered

Chosen Option : 2

**Q.12** Select the most appropriate synonym of the given word.

**Brittle**

**Ans** ✗ 1. Furtive

✗ 2. Fatal

✓ 3. Fragile

✗ 4. Fickle

Question ID : 630680130677

Option 1 ID : 630680506005

Option 2 ID : 630680506003

Option 3 ID : 630680506004

Option 4 ID : 630680506002

Status : Answered

Chosen Option : 3

**Q.13** Select the most appropriate synonym of the given word.  
**Cherish**

**Ans** ✗ 1. Neglect

✗ 2. Afflict

✓ 3. Nurture

✗ 4. Breach

Question ID : 630680310017

Option 1 ID : 6306801206215

Option 2 ID : 6306801206214

Option 3 ID : 6306801206216

Option 4 ID : 6306801206213

Status : Answered

Chosen Option : 2

Q.14 Select the most appropriate synonym of the given word.  
Adequate

- Ans ☒ 1. Hidden  
☒ 2. Sufficient  
☒ 3. Reconcile  
☒ 4. Evaluate

Question ID : 630680167062  
Option 1 ID : 630680647108  
Option 2 ID : 630680647109  
Option 3 ID : 630680647111  
Option 4 ID : 630680647110  
Status : Answered  
Chosen Option : 2

Q.15 Select the option that contains all the MISSPELT words in the following sentences.

1. The new restaunt offers a wide variety of delicious dishes.
2. I can't beleive he made such a silly mistake in his presentation.
3. The teacher asked the students to complete the assignment by Friday.
4. She felt utterly embarassed by her colleague's comments.

- Ans ☒ 1. restaunt, silly, assignment, colleague  
☒ 2. delicious, silly, assignment, colleague  
☒ 3. delicious, beleive, assignment, utterly  
☒ 4. restaunt, beleive, assignment, embarassed

Question ID : 630680409947  
Option 1 ID : 6306801598619  
Option 2 ID : 6306801598620  
Option 3 ID : 6306801598617  
Option 4 ID : 6306801598618  
Status : Answered  
Chosen Option : 4

Q.16 Select the most appropriate meaning of the given idiom.  
At a low ebb

- Ans ☒ 1. In a critical moment  
☒ 2. In a happy state  
☒ 3. In an unemployed mode  
☒ 4. In a depressed or weak state

Question ID : 630680316361  
Option 1 ID : 6306801231069  
Option 2 ID : 6306801231070  
Option 3 ID : 6306801231072  
Option 4 ID : 6306801231071  
Status : Answered  
Chosen Option : 4

Q.17 Select the option that expresses the given sentence in passive voice.  
The teenager delivered the speech.

- Ans ☒ 1. The speech has been delivered by the teenager.  
☒ 2. The speech was delivered by the teenager.  
☒ 3. The speech was being delivered by the teenager.  
☒ 4. The speech is delivered by the teenager.

Question ID : 630680206655  
Option 1 ID : 630680801220  
Option 2 ID : 630680801221  
Option 3 ID : 630680801219  
Option 4 ID : 630680801222  
Status : Answered  
Chosen Option : 2

Q.18 Select the most appropriate option that can substitute the underlined segment in the given sentence.  
This book giving us much information about our freedom fighters who lost their lives while serving our motherland.

- Ans ☒ 1. give us much information  
☒ 2. give us many information  
☒ 3. gives us much information  
☒ 4. gives us many information

Question ID : 630680156309  
Option 1 ID : 630680604927  
Option 2 ID : 630680604926  
Option 3 ID : 630680604925  
Option 4 ID : 630680604924  
Status : Answered  
Chosen Option : 3

Q.19 Select the correctly spelt word to fill in the blank.  
My mother said that every relationship must have some amount of \_\_\_\_\_.

- Ans ☒ 1. flexebility  
☒ 2. flexibility  
☒ 3. phlexibility  
☒ 4. flaxibility

Question ID : 630680374780  
Option 1 ID : 6306801460289  
Option 2 ID : 6306801460287  
Option 3 ID : 6306801460288  
Option 4 ID : 6306801460290  
Status : Answered  
Chosen Option : 2

**Q.20** Select the most appropriate **ANTONYM** of the given word.  
**Material**

- Ans** ☒ 1. Cheap  
☒ 2. Temporary  
☒ 3. Abstract  
☒ 4. Concrete

Question ID : **630680395156**  
Option 1 ID : **6306801540884**  
Option 2 ID : **6306801540887**  
Option 3 ID : **6306801540886**  
Option 4 ID : **6306801540885**  
Status : **Answered**  
Chosen Option : **3**

**Comprehension:**

In the following passage, some words have been deleted. Read the passage carefully and select the most appropriate option to fill in each blank.  
Culture is (1)\_\_\_\_\_, understanding, and protecting, like the cultivation of a garden, not the destruction or eradication of its roots. Understanding the roots and seeds, taking much care and providing instructed nourishment (2)\_\_\_\_\_ important for good gardening. Culture also is similar; understanding its acquaintance (3)\_\_\_\_\_ literature and art and careful protection are required. Culture is the way of life of a particular society in which a group of people live together in one place. The society's culture is visible in its literature, arts, social system, language and religion. It is a combination of traditions, customs, institutions, food habits, manners, morals, thoughts, tastes, views and beliefs. Usually, families (4)\_\_\_\_\_ culture to the younger generations. As family system is becoming weak, schools, colleges and universities should take up this responsibility as education should promote potential values of its culture. The role of universities (5)\_\_\_\_\_ only to issue course completed certificates.

**SubQuestion No : 21**

**Q.21** Select the most appropriate option to fill in blank number 1.

- Ans** ☒ 1. to create  
☒ 2. create  
☒ 3. creating  
☒ 4. creation

Question ID : **630680162876**  
Option 1 ID : **630680630746**  
Option 2 ID : **630680630747**  
Option 3 ID : **630680630744**  
Option 4 ID : **630680630745**  
Status : **Answered**  
Chosen Option : **1**

### Comprehension:

In the following passage, some words have been deleted. Read the passage carefully and select the most appropriate option to fill in each blank.

Culture is (1)\_\_\_\_\_, understanding, and protecting, like the cultivation of a garden, not the destruction or eradication of its roots. Understanding the roots and seeds, taking much care and providing instructed nourishment (2)\_\_\_\_\_ important for good gardening. Culture also is similar; understanding its acquaintance (3)\_\_\_\_\_ literature and art and careful protection are required. Culture is the way of life of a particular society in which a group of people live together in one place. The society's culture is visible in its literature, arts, social system, language and religion. It is a combination of traditions, customs, institutions, food habits, manners, morals, thoughts, tastes, views and beliefs. Usually, families (4)\_\_\_\_\_ culture to the younger generations. As family system is becoming weak, schools, colleges and universities should take up this responsibility as education should promote potential values of its culture. The role of universities (5)\_\_\_\_\_ only to issue course completed certificates.

### SubQuestion No : 22

Q.22 Select the most appropriate option to fill in blank number 2.

- Ans
- ☒ 1. was
  - ☒ 2. were
  - ☒ 3. are
  - ☒ 4. is

Question ID : 630680162877  
Option 1 ID : 630680630750  
Option 2 ID : 630680630751  
Option 3 ID : 630680630749  
Option 4 ID : 630680630748  
Status : Answered  
Chosen Option : 4

### Comprehension:

In the following passage, some words have been deleted. Read the passage carefully and select the most appropriate option to fill in each blank.

Culture is (1)\_\_\_\_\_, understanding, and protecting, like the cultivation of a garden, not the destruction or eradication of its roots. Understanding the roots and seeds, taking much care and providing instructed nourishment (2)\_\_\_\_\_ important for good gardening. Culture also is similar; understanding its acquaintance (3)\_\_\_\_\_ literature and art and careful protection are required. Culture is the way of life of a particular society in which a group of people live together in one place. The society's culture is visible in its literature, arts, social system, language and religion. It is a combination of traditions, customs, institutions, food habits, manners, morals, thoughts, tastes, views and beliefs. Usually, families (4)\_\_\_\_\_ culture to the younger generations. As family system is becoming weak, schools, colleges and universities should take up this responsibility as education should promote potential values of its culture. The role of universities (5)\_\_\_\_\_ only to issue course completed certificates.

### SubQuestion No : 23

Q.23 Select the most appropriate option to fill in blank number 3.

- Ans
- ☒ 1. in
  - ☒ 2. for
  - ☒ 3. with
  - ☒ 4. on

Question ID : 630680162878  
Option 1 ID : 630680630754  
Option 2 ID : 630680630755  
Option 3 ID : 630680630753  
Option 4 ID : 630680630752  
Status : Answered  
Chosen Option : 1

### Comprehension:

In the following passage, some words have been deleted. Read the passage carefully and select the most appropriate option to fill in each blank.

Culture is (1)\_\_\_\_\_, understanding, and protecting, like the cultivation of a garden, not the destruction or eradication of its roots. Understanding the roots and seeds, taking much care and providing instructed nourishment (2)\_\_\_\_\_ important for good gardening. Culture also is similar; understanding its acquaintance (3)\_\_\_\_\_ literature and art and careful protection are required. Culture is the way of life of a particular society in which a group of people live together in one place. The society's culture is visible in its literature, arts, social system, language and religion. It is a combination of traditions, customs, institutions, food habits, manners, morals, thoughts, tastes, views and beliefs. Usually, families (4)\_\_\_\_\_ culture to the younger generations. As family system is becoming weak, schools, colleges and universities should take up this responsibility as education should promote potential values of its culture. The role of universities (5)\_\_\_\_\_ only to issue course completed certificates.

### SubQuestion No : 24

Q.24 Select the most appropriate option to fill in blank number 4.

- Ans ☒ 1. transmit  
☒ 2. transmitted  
☒ 3. transmits  
☒ 4. transmitting

Question ID : 630680162879  
Option 1 ID : 630680630756  
Option 2 ID : 630680630757  
Option 3 ID : 630680630758  
Option 4 ID : 630680630759  
Status : Answered  
Chosen Option : 1

### Comprehension:

In the following passage, some words have been deleted. Read the passage carefully and select the most appropriate option to fill in each blank.

Culture is (1)\_\_\_\_\_, understanding, and protecting, like the cultivation of a garden, not the destruction or eradication of its roots. Understanding the roots and seeds, taking much care and providing instructed nourishment (2)\_\_\_\_\_ important for good gardening. Culture also is similar; understanding its acquaintance (3)\_\_\_\_\_ literature and art and careful protection are required. Culture is the way of life of a particular society in which a group of people live together in one place. The society's culture is visible in its literature, arts, social system, language and religion. It is a combination of traditions, customs, institutions, food habits, manners, morals, thoughts, tastes, views and beliefs. Usually, families (4)\_\_\_\_\_ culture to the younger generations. As family system is becoming weak, schools, colleges and universities should take up this responsibility as education should promote potential values of its culture. The role of universities (5)\_\_\_\_\_ only to issue course completed certificates.

### SubQuestion No : 25

Q.25 Select the most appropriate option to fill in blank number 5.

- Ans ☒ 1. should not be restricted  
☒ 2. should be restricted  
☒ 3. should restricted  
☒ 4. restrict

Question ID : 630680162880  
Option 1 ID : 630680630763  
Option 2 ID : 630680630761  
Option 3 ID : 630680630762  
Option 4 ID : 630680630760  
Status : Not Answered  
Chosen Option : --