

Combined Graduate Level Examination 2024 Tier I

Roll Number	
Candidate Name	
Venue Name	
Exam Date	24/09/2024
Exam Time	4:00 PM - 5:00 PM
Subject	Combined Graduate Level Examination Tier I

Section : General Intelligence and Reasoning

Q.1 Select the correct mirror image of the given figure when the mirror is placed at MN.



- Ans
- 1. ~~Kf59Bar~~
  - 2. ~~Kf59Bar~~
  - 3. **Kf59Bar**
  - 4. ~~Kf59Bar~~

Question ID : 630680325837  
Option 1 ID : 6306801267542  
Option 2 ID : 6306801267543  
Option 3 ID : 6306801267541  
Option 4 ID : 6306801267544  
Status : Answered  
Chosen Option : 3

Q.2 7 is related to 40 by certain logic. Following the same logic, 5 is related to 16. To which of the following is 9 related, following the same logic? (NOTE : Operations should be performed on the whole numbers, without breaking down the numbers into its constituent digits. E.g. 13 – Operations on 13 such as adding /deleting /multiplying etc., to 13 can be performed. Breaking down 13 into 1 and 3 and then performing mathematical operations on 1 and 3 is not allowed.)

- Ans
- 1. ~~48~~
  - 2. **72**
  - 3. ~~54~~
  - 4. ~~70~~

Question ID : 630680326550  
Option 1 ID : 6306801270286  
Option 2 ID : 6306801270285  
Option 3 ID : 6306801270287  
Option 4 ID : 6306801270288  
Status : Answered  
Chosen Option : 2

Q.3 64 is related to 4 following a certain logic. Following the same logic, 216 is related to 6. To which of the following is 729 related, following the same logic?

(NOTE: Operations should be performed on the whole numbers, without breaking down the numbers into its constituent digits. E.g. 13 – Operations on 13 such as adding /deleting /multiplying etc. to 13 can be performed. Breaking down 13 into 1 and 3 and then performing mathematical operations on 1 and 3 is not allowed)

- Ans
- 1. ~~11~~
  - 2. ~~7~~
  - 3. **9**
  - 4. ~~13~~

Question ID : 630680344659  
Option 1 ID : 6306801340946  
Option 2 ID : 6306801340945  
Option 3 ID : 6306801340947  
Option 4 ID : 6306801340948  
Status : Answered  
Chosen Option : 3

# Test Prime

**ALL EXAMS,  
ONE SUBSCRIPTION**



**70,000+**  
Mock Tests



**Personalised  
Report Card**



**Unlimited  
Re-Attempt**



**600+**  
Exam Covered



**Previous Year  
Papers**



**500%  
Refund**



**ATTEMPT FREE MOCK NOW**

**Q.4** Select the combination of letters that when sequentially placed in the blanks of the given series will complete the series.

B \_DE\_GDGBK\_IB\_DK

- Ans
- ☒ 1. CBDP
  - ☒ 2. OCBD
  - ☒ 3. CODB
  - ☒ 4. CBDO

Question ID : 630680325789  
Option 1 ID : 6306801267352  
Option 2 ID : 6306801267349  
Option 3 ID : 6306801267350  
Option 4 ID : 6306801267351  
Status : Answered  
Chosen Option : 4

**Q.5** In a certain code language, 'ZCJV' is coded as 'YBIU' and 'GKMD' is coded as 'FJLC'. How will 'EYOR' be coded in that language?

- Ans
- ☒ 1. DWMP
  - ☒ 2. DXNQ
  - ☒ 3. CXNQ
  - ☒ 4. QWMP

Question ID : 630680172182  
Option 1 ID : 630680667166  
Option 2 ID : 630680667165  
Option 3 ID : 630680667167  
Option 4 ID : 630680667164  
Status : Answered  
Chosen Option : 2

**Q.6** Q is the mother of T. R is the husband of P. S is the father of Q. T is the brother of P. How is P related to S?

- Ans
- ☒ 1. Daughter's daughter
  - ☒ 2. Mother's father
  - ☒ 3. Brother's wife
  - ☒ 4. Mother's mother

Question ID : 630680216627  
Option 1 ID : 630680840472  
Option 2 ID : 630680840471  
Option 3 ID : 630680840473  
Option 4 ID : 630680840474  
Status : Answered  
Chosen Option : 2

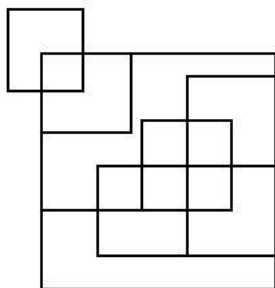
**Q.7** Based on the English alphabetical order, three of the following four letter-clusters are alike in a certain way and thus form a group. Which is the one that DOES NOT belong to that group?

(Note: The odd man out is not based on the number of consonants/vowels or their position in the letter-cluster.)

- Ans
- ☒ 1. HKI
  - ☒ 2. MPN
  - ☒ 3. RUS
  - ☒ 4. QUR

Question ID : 630680812277  
Option 1 ID : 6306803182556  
Option 2 ID : 6306803182555  
Option 3 ID : 6306803182554  
Option 4 ID : 6306803182553  
Status : Answered  
Chosen Option : 4

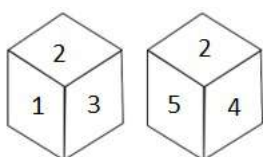
Q.8 How many squares are there in the figure shown below?



- Ans
- ☒ 1. 14
  - ☒ 2. 12
  - ☒ 3. 13
  - ☒ 4. 11

Question ID : 630680296651  
Option 1 ID : 6306801154256  
Option 2 ID : 6306801154255  
Option 3 ID : 6306801154258  
Option 4 ID : 6306801154257  
Status : Answered  
Chosen Option : 2

Q.9 Two different positions of the same dice are given below. Which is the number on the face opposite the face containing 5?



- Ans
- ☒ 1. 3
  - ☒ 2. 2
  - ☒ 3. 1
  - ☒ 4. 6

Question ID : 630680313768  
Option 1 ID : 6306801220916  
Option 2 ID : 6306801220915  
Option 3 ID : 6306801220914  
Option 4 ID : 6306801220913  
Status : Answered  
Chosen Option : 3

Q.10 In this question, three statements are given, followed by two conclusions numbered I and II. Assuming the statements to be true, even if they seem to be at variance with commonly known facts, decide which of the conclusion(s) logically follows/follow from the statements.

Statements:  
All grains are cereals.  
Some cereals are fruits.  
No fruit is a vegetable.

Conclusions:  
I. All cereals can be vegetables.  
II. All grains are fruits.

- Ans
- ☒ 1. Only Conclusion I follows.
  - ☒ 2. Neither Conclusion I nor II follow.
  - ☒ 3. Only Conclusion II follows.
  - ☒ 4. Both Conclusions I and II follow.

Question ID : 630680416395  
Option 1 ID : 6306801624343  
Option 2 ID : 6306801624346  
Option 3 ID : 6306801624344  
Option 4 ID : 6306801624345  
Status : Answered  
Chosen Option : 2

Q.11 In the following number-pairs, the second number is obtained by applying certain mathematical operations to the first number. Select the set in which the numbers are related in the same way as are the numbers of the following sets.  
(NOTE : Operations should be performed on the whole numbers, without breaking down the numbers into its constituent digits. E.g. 13 – Operations on 13 such as adding /deleting /multiplying etc., to 13 can be performed. Breaking down 13 into 1 and 3 and then performing mathematical operations on 1 and 3 is not allowed.)  
(26, 114)  
(47, 198)

- Ans ☒ 1. (22, 88)  
☒ 2. (15, 70)  
☒ 3. (18, 74)  
☒ 4. (25, 105)

Question ID : 630680338904  
Option 1 ID : 6306801318206  
Option 2 ID : 6306801318205  
Option 3 ID : 6306801318207  
Option 4 ID : 6306801318208  
Status : Answered  
Chosen Option : 2

Q.12 Select the word pair that best represents a similar relationship to the one expressed in the pair of words given below. (The words must be considered as meaningful English words and must not be related to each other based on the number of letters/number of consonants/vowels in the word)  
Love : Harmony

- Ans ☒ 1. Calm : Sad  
☒ 2. Peace : Bliss  
☒ 3. Rage : Cool  
☒ 4. Anger : Excitement

Question ID : 630680416651  
Option 1 ID : 6306801625367  
Option 2 ID : 6306801625369  
Option 3 ID : 6306801625370  
Option 4 ID : 6306801625368  
Status : Answered  
Chosen Option : 2

Q.13 The position of how many letters will remain unchanged if each of the letters in the word 'SIGNATURE' is re-arranged in the English alphabetical order from left to right?

- Ans ☒ 1. One  
☒ 2. Two  
☒ 3. Four  
☒ 4. Three

Question ID : 630680106897  
Option 1 ID : 630680415163  
Option 2 ID : 630680415162  
Option 3 ID : 630680415160  
Option 4 ID : 630680415161  
Status : Answered  
Chosen Option : 1

Q.14 Which of the following numbers will replace the question marks (?) in the given series?  
61, ?, ?, 73, 79, 83, 89

- Ans ☒ 1. 67, 69  
☒ 2. 63, 65  
☒ 3. 63, 67  
☒ 4. 67, 71

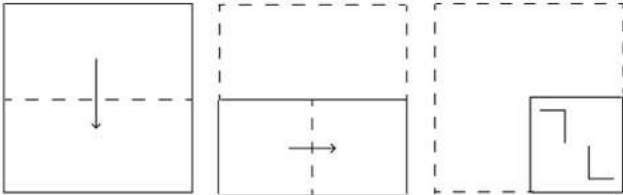
Question ID : 630680411867  
Option 1 ID : 6306801606306  
Option 2 ID : 6306801606304  
Option 3 ID : 6306801606305  
Option 4 ID : 6306801606303  
Status : Answered  
Chosen Option : 4

Q.15 In a certain code language, 'BLEACHERS' is coded as '63' and 'ABACAS' is coded as '42'. How will 'FIZZY' be coded in the same language?

- Ans
- ☒ 1. 52
  - ☒ 2. 45
  - ☒ 3. 44
  - ☒ 4. 35

Question ID : 630680416229  
Option 1 ID : 6306801623679  
Option 2 ID : 6306801623682  
Option 3 ID : 6306801623680  
Option 4 ID : 6306801623681  
Status : Answered  
Chosen Option : 4

Q.16 A paper is folded and cut as shown below. How will it appear when unfolded?



Ans

- ☒ 1.
- ☒ 2.
- ☒ 3.
- ☒ 4.

Question ID : 630680294960  
Option 1 ID : 6306801147569  
Option 2 ID : 6306801147570  
Option 3 ID : 6306801147568  
Option 4 ID : 6306801147571  
Status : Answered  
Chosen Option : 3

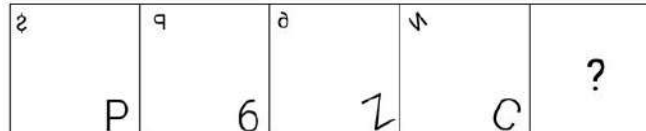


Q.17 Which number will come in the place of the question mark (?) in the following equation if '+' and '-' are interchanged and 'x' and '÷' are interchanged?  
 $7 \div 5 - 30 \times 6 + 4 = ?$

- Ans ☒ 1. 32  
☒ 2. 36  
☒ 3. 30  
☒ 4. 34

Question ID : 630680328467  
Option 1 ID : 6306801277838  
Option 2 ID : 6306801277840  
Option 3 ID : 6306801277837  
Option 4 ID : 6306801277839  
Status : Answered  
Chosen Option : 2

Q.18 Identify the figure from among the given options which when put in place of the question mark (?) will logically complete the series.

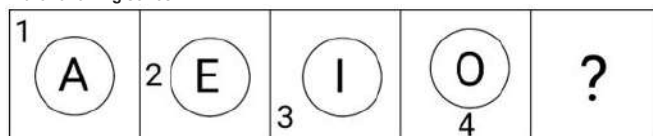


Ans

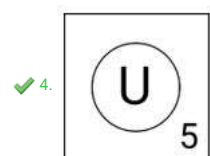
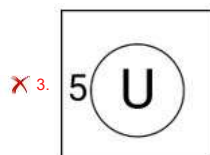
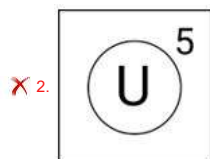
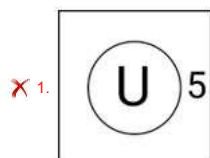
- ☒ 1.
- ☒ 2.
- ☒ 3.
- ☒ 4.

Question ID : 630680296884  
Option 1 ID : 6306801155180  
Option 2 ID : 6306801155181  
Option 3 ID : 6306801155182  
Option 4 ID : 6306801155179  
Status : Answered  
Chosen Option : 4

Q.19 Select the figure from among the given options that can replace the question mark (?) in the following series.

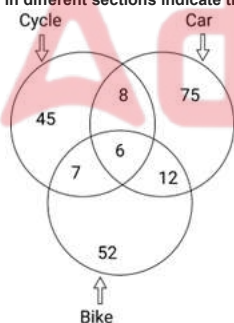


Ans



Question ID : 630680366398  
Option 1 ID : 6306801427110  
Option 2 ID : 6306801427109  
Option 3 ID : 6306801427112  
Option 4 ID : 6306801427111  
Status : Answered  
Chosen Option : 4

Q.20 Study the given diagram carefully and answer the question that follows. The numbers in different sections indicate the number of persons who can drive different vehicles.



What is the difference between the number of persons who can drive all the three vehicles and that of persons who can drive any two of these vehicles?

- Ans
- ✗ 1. 15
  - ✗ 2. 12
  - ✗ 3. 27
  - ✓ 4. 21

Question ID : 630680195791  
Option 1 ID : 630680759618  
Option 2 ID : 630680759617  
Option 3 ID : 630680759616  
Option 4 ID : 630680759615  
Status : Answered  
Chosen Option : 4



Q.21 What will come in place of the question mark (?) in the following equation, if '+' and '-' are interchanged and 'x' and '÷' are interchanged?  
 $1604 \times 4 + 87 - 16 \div 16 = ?$

- Ans
- ☒ 1. 770
  - ☒ 2. 870
  - ☒ 3. 570
  - ☒ 4. 670

Question ID : 630680411729  
 Option 1 ID : 6306801605752  
 Option 2 ID : 6306801605751  
 Option 3 ID : 6306801605754  
 Option 4 ID : 6306801605753  
 Status : Answered  
 Chosen Option : 3

Q.22 Select the option that is related to the third word in the same way as the second word is related to the first word. (The words must be considered as meaningful English words and must not be related to each other based on the number of letters/number of consonants/vowels in the word)  
 Botany : Plants :: Conchology : ?

- Ans
- ☒ 1. Fossils
  - ☒ 2. Names
  - ☒ 3. Shells
  - ☒ 4. Soil

Question ID : 630680416117  
 Option 1 ID : 6306801623232  
 Option 2 ID : 6306801623233  
 Option 3 ID : 6306801623234  
 Option 4 ID : 6306801623231  
 Status : Answered  
 Chosen Option : 3

Q.23 Which of the following letter-clusters will replace the question mark (?) in the given series to make it logically complete?  
 JAL, MDO, PGR, SJU, ?

- Ans
- ☒ 1. WNX
  - ☒ 2. WMX
  - ☒ 3. VMY
  - ☒ 4. VMX

Question ID : 630680416937  
 Option 1 ID : 6306801626512  
 Option 2 ID : 6306801626511  
 Option 3 ID : 6306801626514  
 Option 4 ID : 6306801626513  
 Status : Answered  
 Chosen Option : 4

Q.24 Three of the following numbers are alike in a certain way and one is different. Pick the odd one out.  
 (NOTE : Operations should be performed on the whole numbers, without breaking down the numbers into its constituent digits. E.g. 13 – Operations on 13 such as adding /deleting /multiplying etc. to 13 can be performed. Breaking down 13 into 1 and 3 and then performing mathematical operations on 1 and 3 is not allowed.)

- Ans
- ☒ 1. 829
  - ☒ 2. 237
  - ☒ 3. 643
  - ☒ 4. 821

Question ID : 630680412028  
 Option 1 ID : 6306801606947  
 Option 2 ID : 6306801606950  
 Option 3 ID : 6306801606948  
 Option 4 ID : 6306801606949  
 Status : Not Answered  
 Chosen Option : --

Q.25 Select the correct mirror image of the given figure when the mirror is placed at MN.



- Ans
- ☒ 1. ~~s b t 2 4 w 3~~
  - ☒ 2. ~~s d 5 t 4 w 3~~
  - ☒ 3. ~~s b 5 t 4 w 3~~
  - ☒ 4. ~~s b 5 t 4 w 3~~

Question ID : 630680325832  
 Option 1 ID : 6306801267521  
 Option 2 ID : 6306801267522  
 Option 3 ID : 6306801267524  
 Option 4 ID : 6306801267523  
 Status : Answered  
 Chosen Option : 4

Section : General Awareness

Q.1 Gangubai Hangal belonged to the \_\_\_\_\_.

- Ans
- ☒ 1. Banaras gharana
  - ☒ 2. Kirana gharana
  - ☒ 3. Gwalior gharana
  - ☒ 4. Agra gharana

Question ID : 630680512251  
 Option 1 ID : 6306802001975  
 Option 2 ID : 6306802001974  
 Option 3 ID : 6306802001976  
 Option 4 ID : 6306802001977  
 Status : Not Answered  
 Chosen Option : --

Q.2 In India, Teachers' Day is celebrated annually on September 5 to mark the birthday of:

- Ans
- ☒ 1. APJ Abdul Kalam
  - ☒ 2. Sardar Vallabhbhai Patel
  - ☒ 3. Subash Chandra Bose
  - ☒ 4. Sarvepalli Radhakrishnan

Question ID : 630680164572  
 Option 1 ID : 630680637406  
 Option 2 ID : 630680637404  
 Option 3 ID : 630680637405  
 Option 4 ID : 630680637407  
 Status : Answered  
 Chosen Option : 4

Q.3 Which of the following articles of the Indian constitution deals with the parliament and its proceedings?

- Ans
- ☒ 1. Article 36 to 51
  - ☒ 2. Article 12 to 35
  - ☒ 3. Article 51A
  - ☒ 4. Article 79 to 122

Question ID : 630680329459  
 Option 1 ID : 6306801281578  
 Option 2 ID : 6306801281577  
 Option 3 ID : 6306801281579  
 Option 4 ID : 6306801281580  
 Status : Answered  
 Chosen Option : 4

Q.4 Which of the following Rajiv Gandhi National Sadbhavana Awards was conferred on Ustad Amjad Ali Khan?

- Ans
- ☐ 1. 18<sup>th</sup>
  - ☒ 2. 21<sup>st</sup>
  - ☐ 3. 20<sup>th</sup>
  - ☐ 4. 19<sup>th</sup>

Question ID : 6306801048037  
Option 1 ID : 6306804114194  
Option 2 ID : 6306804114197  
Option 3 ID : 6306804114196  
Option 4 ID : 6306804114195  
Status : Not Answered  
Chosen Option : --

Q.5 The Pratiharas who first had their capital at Bhinmal gained prominence during the rule of:

- Ans
- ☐ 1. Kanishka
  - ☒ 2. Nagabhata I
  - ☐ 3. Devpala
  - ☐ 4. Nagarjuna

Question ID : 630680412292  
Option 1 ID : 6306801607993  
Option 2 ID : 6306801607991  
Option 3 ID : 6306801607994  
Option 4 ID : 6306801607992  
Status : Not Answered  
Chosen Option : --

Q.6 In which state of India is the Chandra Prabha Wildlife Sanctuary located?

- Ans
- ☐ 1. Bihar
  - ☐ 2. Gujarat
  - ☐ 3. Madhya Pradesh
  - ☒ 4. Uttar Pradesh

Question ID : 630680362629  
Option 1 ID : 6306801412270  
Option 2 ID : 6306801412272  
Option 3 ID : 6306801412271  
Option 4 ID : 6306801412269  
Status : Not Answered  
Chosen Option : --

Q.7 Which Committee identified the existence of legal provisions for implementation of some of the Fundamental Duties?

- Ans
- ☐ 1. Justice Mulla Committee
  - ☒ 2. Justice Verma Committee
  - ☐ 3. Justice Sapre Committee
  - ☐ 4. Justice VR Krishna Iyer Committee

Question ID : 630680309212  
Option 1 ID : 6306801203026  
Option 2 ID : 6306801203025  
Option 3 ID : 6306801203028  
Option 4 ID : 6306801203027  
Status : Answered  
Chosen Option : 2

Q.8 Which of the following is a correct statement?

- Ans
- ☒ 1. National Income is NNP at FC.
  - ☐ 2. National Income is GDP at MP.
  - ☐ 3. National Income is GNP at FC.
  - ☐ 4. National Income is NDP at MP.

Question ID : 630680145290  
Option 1 ID : 630680562142  
Option 2 ID : 630680562144  
Option 3 ID : 630680562143  
Option 4 ID : 630680562145  
Status : Answered  
Chosen Option : 2

Q.9 The final match of IPL 2023 was hosted by which of the following cities?

- Ans ☐ 1. Mumbai  
☐ 2. Bengaluru  
☐ 3. Chennai  
☒ 4. Ahmedabad

Question ID : 630680510789  
Option 1 ID : 6306801996287  
Option 2 ID : 6306801996289  
Option 3 ID : 6306801996288  
Option 4 ID : 6306801996286  
Status : Answered  
Chosen Option : 3

Q.10 Which among the following is NOT a classification criterion of drugs?

- Ans ☒ 1. Behavioural condition  
☐ 2. Molecular target  
☐ 3. Pharmacological effect  
☐ 4. Chemical structure

Question ID : 630680517219  
Option 1 ID : 6306802021274  
Option 2 ID : 6306802021273  
Option 3 ID : 6306802021272  
Option 4 ID : 6306802021275  
Status : Answered  
Chosen Option : 2

Q.11 What is iGOT launched by the Government of India in April 2020?

- Ans ☐ 1. Online portal for digital payments  
☐ 2. Online portal for social security schemes  
☒ 3. Online training portal for COVID-19 management  
☐ 4. Online portal for scholarships to single girl child

Question ID : 630680112081  
Option 1 ID : 630680434052  
Option 2 ID : 630680434053  
Option 3 ID : 630680434050  
Option 4 ID : 630680434051  
Status : Not Answered  
Chosen Option : --

Q.12 The \_\_\_\_\_ portal is a platform provided by the Govt. of India for famers to attain any information related to agriculture.

- Ans ☐ 1. Agricultural  
☒ 2. Farmer's  
☐ 3. Cultivation  
☐ 4. Cropland

Question ID : 630680409602  
Option 1 ID : 6306801597238  
Option 2 ID : 6306801597237  
Option 3 ID : 6306801597239  
Option 4 ID : 6306801597240  
Status : Answered  
Chosen Option : 2

Q.13 The name of the strait between the Pacific and Arctic oceans, separating the Chukchi Peninsula of the Russian Far East from the Seward Peninsula of Alaska, is the:

- Ans ☐ 1. Davis Strait  
☒ 2. Bering Strait  
☐ 3. Messina Strait  
☐ 4. Florida Strait

Question ID : 63068076887  
Option 1 ID : 630680297648  
Option 2 ID : 630680297646  
Option 3 ID : 630680297647  
Option 4 ID : 630680297645  
Status : Not Answered  
Chosen Option : --

Q.14 'Ungali Oruvan' (One Among You) is the autobiography of which of the following chief ministers?

- Ans
- ☐ 1. K Chandrashekhara Rao
  - ☐ 2. Pinarayi Vijayan
  - ☐ 3. Basavaraj Bommai
  - ☒ 4. MK Stalin

Question ID : 630680195362  
 Option 1 ID : 630680757920  
 Option 2 ID : 630680757919  
 Option 3 ID : 630680757918  
 Option 4 ID : 630680757917  
 Status : Not Answered  
 Chosen Option : --

Q.15 What happens when two forces act in the opposite directions on an object?

- Ans
- ☐ 1. The net force acting on the object is the total of the two forces.
  - ☐ 2. The net force acting on the object is the difference between the two objects.
  - ☐ 3. The net force acting on the object is the sum of the two objects.
  - ☒ 4. The net force acting on the object is the difference between the two forces.

Question ID : 630680134714  
 Option 1 ID : 630680521674  
 Option 2 ID : 630680521675  
 Option 3 ID : 630680521677  
 Option 4 ID : 630680521676  
 Status : Answered  
 Chosen Option : 4

Q.16 The first Indian woman to hold the Under-20 World Wrestling Championship is \_\_\_\_\_.

- Ans
- ☐ 1. Hina Khalifa
  - ☐ 2. Pranati Nayak
  - ☐ 3. Swati Sanjay
  - ☒ 4. Antim Panghal

Question ID : 630680329492  
 Option 1 ID : 6306801281710  
 Option 2 ID : 6306801281712  
 Option 3 ID : 6306801281711  
 Option 4 ID : 6306801281709  
 Status : Answered  
 Chosen Option : 4

Q.17 Which industrial policy marked the beginning of liberalisation in the Indian industry, reducing the restrictions on private companies?

- Ans
- ☐ 1. Industrial Policy 1956
  - ☐ 2. Industrial Policy 1977
  - ☐ 3. Industrial Policy 1980
  - ☒ 4. Industrial Policy 1991

Question ID : 630680411084  
 Option 1 ID : 6306801603088  
 Option 2 ID : 6306801603089  
 Option 3 ID : 6306801603090  
 Option 4 ID : 6306801603091  
 Status : Answered  
 Chosen Option : 4

Q.18 Which of the following is a saturated hydrocarbon?

- Ans
- ☐ 1.  $C_2H_4$
  - ☒ 2.  $C_3H_8$
  - ☐ 3.  $C_6H_6$
  - ☐ 4.  $C_4H_8$

Question ID : 630680517161  
 Option 1 ID : 6306802021040  
 Option 2 ID : 6306802021043  
 Option 3 ID : 6306802021041  
 Option 4 ID : 6306802021042  
 Status : Not Answered  
 Chosen Option : --

Q.19 Who among the following famous badminton players won Swiss Open 2022?

- Ans ☒ 1. PV Sindhu  
☐ 2. Apama Popat  
☐ 3. Jwala Gutta  
☐ 4. Saina Nehwal

Question ID : 630680310840  
Option 1 ID : 6306801209489  
Option 2 ID : 6306801209492  
Option 3 ID : 6306801209491  
Option 4 ID : 6306801209490  
Status : Not Answered  
Chosen Option : --

Q.20 The Kuchipudi dance belongs to which of the following states?

- Ans ☐ 1. Tamil Nadu  
☐ 2. Madhya Pradesh  
☐ 3. Manipur  
☒ 4. Andhra Pradesh

Question ID : 630680402052  
Option 1 ID : 6306801567908  
Option 2 ID : 6306801567909  
Option 3 ID : 6306801567911  
Option 4 ID : 6306801567910  
Status : Answered  
Chosen Option : 4

Q.21 With reference to Ishwar Chandra Vidyasagar, consider the following statements.  
a) He protested child marriage and polygamy.  
b) Due to his efforts, the first Hindu Widow Remarriage Act, 1856, was introduced.  
c) He was primarily known for his scholarship in Persian language.  
Which of the above statements is/are correct?

- Ans ☐ 1. b, c  
☐ 2. a, c  
☐ 3. a, b, c  
☒ 4. a, b

Question ID : 630680412308  
Option 1 ID : 6306801608057  
Option 2 ID : 6306801608058  
Option 3 ID : 6306801608055  
Option 4 ID : 6306801608056  
Status : Answered  
Chosen Option : 4

Q.22 A large number of words are derived from the word 'Go' meaning cow. A wealthy person was known as \_\_\_\_\_ in Vedic times.

- Ans ☐ 1. Gotra  
☐ 2. Gabaksha  
☒ 3. Gomat  
☐ 4. Gaveshana

Question ID : 630680412440  
Option 1 ID : 6306801608585  
Option 2 ID : 6306801608583  
Option 3 ID : 6306801608586  
Option 4 ID : 6306801608584  
Status : Not Answered  
Chosen Option : --

Q.23 What was India's annual exponential growth rate as per the 2011 Census?

- Ans ☒ 1. 1.64%  
☐ 2. 3.54%  
☐ 3. 1.10%  
☐ 4. 4.34%

Question ID : 630680314147  
Option 1 ID : 6306801222394  
Option 2 ID : 6306801222395  
Option 3 ID : 6306801222393  
Option 4 ID : 6306801222396  
Status : Answered  
Chosen Option : 1

Q.24 Which of the following districts of India is an example of an industrial district?

- Ans ☒ 1. Faridabad  
☒ 2. Meerut  
☒ 3. Jaipur  
☒ 4. Kota

Question ID : 630680209259  
 Option 1 ID : 630680811254  
 Option 2 ID : 630680811252  
 Option 3 ID : 630680811253  
 Option 4 ID : 630680811251  
 Status : Answered  
 Chosen Option : 4

Q.25 The Non-Cooperation Movement was called off after which of the following incidents?

- Ans ☒ 1. Kakori train robbery  
☒ 2. Komagata Maru incident  
☒ 3. Outbreak of the First World War  
☒ 4. Chauri-Chaura incident

Question ID : 630680511508  
 Option 1 ID : 6306801999155  
 Option 2 ID : 6306801999154  
 Option 3 ID : 6306801999157  
 Option 4 ID : 6306801999156  
 Status : Answered  
 Chosen Option : 4

Section : Quantitative Aptitude

Q.1 Which composite number can divide the sum of the first 12 natural numbers?

- Ans ☒ 1. 12  
☒ 2. 8  
☒ 3. 6  
☒ 4. 4

Question ID : 630680108457  
 Option 1 ID : 630680420795  
 Option 2 ID : 630680420792  
 Option 3 ID : 630680420794  
 Option 4 ID : 630680420793  
 Status : Not Answered  
 Chosen Option : --

Q.2 Let ABC be a triangle. If the mid-points of AB, BC and AC are D, E and F, respectively, then  $\triangle DEF$  is NOT congruent to \_\_\_\_\_.

- Ans ☒ 1.  $\triangle BDE$   
☒ 2.  $\triangle ADF$   
☒ 3.  $\triangle ECF$   
☒ 4.  $\triangle ABC$

Question ID : 630680297311  
 Option 1 ID : 6306801156714  
 Option 2 ID : 6306801156711  
 Option 3 ID : 6306801156713  
 Option 4 ID : 6306801156712  
 Status : Not Answered  
 Chosen Option : --

Q.3 The angles of a triangle are in the ratio 1 : 2 : 3. The difference in the largest and smallest angle is (in degrees):

- Ans ☒ 1. 15  
☒ 2. 30  
☒ 3. 45  
☒ 4. 60

Question ID : 630680421360  
 Option 1 ID : 6306801643906  
 Option 2 ID : 6306801643903  
 Option 3 ID : 6306801643905  
 Option 4 ID : 6306801643904  
 Status : Not Answered  
 Chosen Option : --



**Q.4** The income of a person is ₹16,500, and his expenditure is ₹12,000. Next year, his income increases by 24% but his expenditure decreases by 10%. The percentage increase (rounded off to the nearest integer) in his savings is:

**Ans** ✓ 1. 115%

✗ 2. 120%

✗ 3. 95%

✗ 4. 90%

Question ID : 630680427955

Option 1 ID : 6306801669867

Option 2 ID : 6306801669866

Option 3 ID : 6306801669864

Option 4 ID : 6306801669865

Status : Not Answered

Chosen Option : --

**Q.5** If two straight lines are coinciding with each other, then the number of points of intersection is/are:

**Ans** ✓ 1. infinitely many points of intersection

✗ 2. unique point of intersection

✗ 3. finite number of point of intersection

✗ 4. no points of intersection

Question ID : 630680194606

Option 1 ID : 630680754950

Option 2 ID : 630680754949

Option 3 ID : 630680754952

Option 4 ID : 630680754951

Status : Not Answered

Chosen Option : --

**Q.6** One year ago, the age of B was twice that of A. After 9 years, if the ratio of the ages of B and A would be 4 : 3, then the sum of their present ages is \_\_\_\_ years.

**Ans** ✓ 1. 17

✗ 2. 15

✗ 3. 21

✗ 4. 30

Question ID : 630680297288

Option 1 ID : 6306801156619

Option 2 ID : 6306801156620

Option 3 ID : 6306801156621

Option 4 ID : 6306801156622

Status : Answered

Chosen Option : 1

**Q.7** Pipe A can fill a cistern in 4 hours and Pipe B can fill the same cistern in 5 hours. Pipe C can empty a full cistern in 3 hours. If all three pipes are opened together, then the time (in minutes) taken to fill the tank is: (round to the nearest minute)

**Ans** ✗ 1. 625

✗ 2. 445

✓ 3. 514

✗ 4. 800

Question ID : 630680397521

Option 1 ID : 6306801550002

Option 2 ID : 6306801550003

Option 3 ID : 6306801550005

Option 4 ID : 6306801550004

Status : Answered

Chosen Option : 3

**Q.8** If  $a + b = c$ , then the expression  $a^3 + b^3 - c^3 + 3abc$  will be equal to:

**Ans** ✓ 1. 0

✗ 2. 1

✗ 3. 3

✗ 4. 2

Question ID : 630680413519

Option 1 ID : 6306801612902

Option 2 ID : 6306801612900

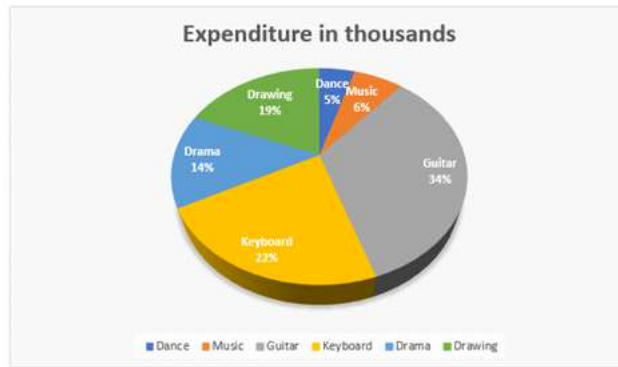
Option 3 ID : 6306801612903

Option 4 ID : 6306801612901

Status : Not Answered

Chosen Option : --

Q.9 Study the given pie chart carefully and answer the question that follows.  
The given pie chart depicts the expenditure incurred towards different hobby classes of an institute.



If the total expenditure is ₹10,70,000, then find the central angle of the sector representing 'drawing'.

- Ans
- ☒ 1.  $70^\circ$
  - ☒ 2.  $68.4^\circ$
  - ☒ 3.  $19^\circ$
  - ☒ 4.  $90^\circ$

Question ID : 630680427996  
Option 1 ID : 6306801670031  
Option 2 ID : 6306801670029  
Option 3 ID : 6306801670028  
Option 4 ID : 6306801670030  
Status : Not Answered  
Chosen Option : --

Q.10 A policeman is chasing a thief at a speed of 82 km/h. The thief is 1300 m away and is running at a speed of 64 km/h. In how much time will the policeman catch the thief if both are riding on bikes?

- Ans
- ☒ 1. 300 sec
  - ☒ 2. 350 sec
  - ☒ 3. 260 sec
  - ☒ 4. 250 sec

Question ID : 630680428431  
Option 1 ID : 6306801671768  
Option 2 ID : 6306801671771  
Option 3 ID : 6306801671770  
Option 4 ID : 6306801671769  
Status : Not Answered  
Chosen Option : --

Q.11 If  $A = 15^\circ$ , then what is the value of  $\frac{11\sqrt{2} \cos 3A + 10 \sin 2A}{7\sqrt{3} \sin 4A}$ ?

- Ans
- ☒ 1.  $\frac{32}{21}$
  - ☒ 2.  $\frac{11}{7}$
  - ☒ 3.  $\frac{11}{7}$
  - ☒ 4.  $\frac{21}{32}$

Question ID : 630680402352  
Option 1 ID : 6306801568972  
Option 2 ID : 6306801568974  
Option 3 ID : 6306801568973  
Option 4 ID : 6306801568971  
Status : Not Answered  
Chosen Option : --

Q.12 Ramu lent ₹3,000 to Raju and a certain sum to Ravi at the same time and at the same rate of simple interest of 8% per annum. After 5 years, he received a sum of ₹1,600 from Raju and Ravi together as interest. Find the sum lent to Ravi.

Ans ☒ 1. ₹1,000

☐ 2. ₹1,250

☐ 3. ₹1,200

☐ 4. ₹1,500

Question ID : 630680349819  
Option 1 ID : 6306801361565  
Option 2 ID : 6306801361568  
Option 3 ID : 6306801361566  
Option 4 ID : 6306801361567  
Status : Not Answered  
Chosen Option : --

Q.13 The ratio of two numbers is 2 : 5 and their difference is 210. The smaller number is

Ans ☐ 1. 60

☐ 2. 150

☐ 3. 350

☒ 4. 140

Question ID : 630680428776  
Option 1 ID : 6306801673149  
Option 2 ID : 6306801673151  
Option 3 ID : 6306801673150  
Option 4 ID : 6306801673148  
Status : Answered  
Chosen Option : 4

Q.14 The number of students in a class who have answered correctly, incorrectly, or not attempted each question in an examination is shown in the table below. The marks for each question are also listed. There is no negative or partial marking.

Q No	Marks	Answered correctly	Answered incorrectly	Not attempted
1	1	20	10	10
2	2	15	15	10
3	5	20	20	0
4	10	12	15	13

Find the average of the marks obtained by the class in the examination.

Ans ☐ 1. 5.75

☐ 2. 5.25

☒ 3. 6.75

☐ 4. 6.25

Question ID : 630680428173  
Option 1 ID : 6306801670737  
Option 2 ID : 6306801670736  
Option 3 ID : 6306801670739  
Option 4 ID : 6306801670738  
Status : Answered  
Chosen Option : 3

Q.15 Find the gain percentage, given that Aditi sold her scooter for ₹25404 gaining  $\frac{1}{6}$ th of the selling price.

Ans ☐ 1. 30%

☐ 2. 25%

☐ 3. 40%

☒ 4. 20%

Question ID : 630680922767  
Option 1 ID : 6306803615917  
Option 2 ID : 6306803615916  
Option 3 ID : 6306803615915  
Option 4 ID : 6306803615914  
Status : Not Answered  
Chosen Option : --

Q.16 A line cuts two concentric circles. The length of chords formed by this line on the circles is 6 cm and 18 cm. Find the difference in the squares of the radii of two circles.

- Ans ☒ 1. 72  
☒ 2. 90  
☒ 3. 120  
☒ 4. 60

Question ID : 630680358079  
Option 1 ID : 6306801394306  
Option 2 ID : 6306801394307  
Option 3 ID : 6306801394308  
Option 4 ID : 6306801394305  
Status : Not Answered  
Chosen Option : --

Q.17 The ratio of the length, the breadth, and the height of a solid cuboid is given as 3 : 2 : 1, and the breadth of this cuboid is given as 12 cm. Find the volume (in  $\text{cm}^3$ ) of the cuboid.

- Ans ☒ 1. 1500  
☒ 2. 1250  
☒ 3. 1200  
☒ 4. 1296

Question ID : 630680421492  
Option 1 ID : 6306801644432  
Option 2 ID : 6306801644434  
Option 3 ID : 6306801644433  
Option 4 ID : 6306801644431  
Status : Not Answered  
Chosen Option : --

Q.18 A class of 30 students appeared in a test. The average score of 12 students is 62, and that of the rest is 78. What is the average score of the class?

- Ans ☒ 1. 69.6  
☒ 2. 71.6  
☒ 3. 70.6  
☒ 4. 72.6

Question ID : 630680566264  
Option 1 ID : 6306802214047  
Option 2 ID : 6306802214044  
Option 3 ID : 6306802214045  
Option 4 ID : 6306802214046  
Status : Answered  
Chosen Option : 2

Q.19 If the market price of a bag is 25% above the cost price, and a discount of 18% is declared on it, then find the gain percentage.

- Ans ☒ 1. 1.5%  
☒ 2. 3.0%  
☒ 3. 2.5%  
☒ 4. 2.0%

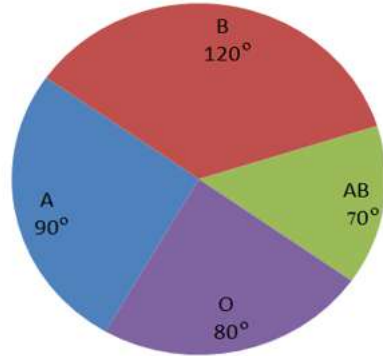
Question ID : 630680428064  
Option 1 ID : 6306801670300  
Option 2 ID : 6306801670303  
Option 3 ID : 6306801670302  
Option 4 ID : 6306801670301  
Status : Not Answered  
Chosen Option : --

Q. In  $\triangle ABC$ ,  $AB = 6$  cm,  $BC = 9$  cm and  $AC = 12$  cm. If AD is the angle bisector of  $\angle BAC$ , where D is a point on BC, the

- 2  
0  
A  
n  
s  
☒ 1. 7  
☒ 2. 3  
☒ 3. 6  
☒ 4. 9

Question ID  
Option 1 ID  
Option 2 ID  
Option 3 ID  
Option 4 ID  
Status  
Chosen Option

Q.21 The given pie-chart shows the data on A, B, O, and AB blood groups of 240 donors. Study the chart and answer the question that follows.



What is the ratio of the average donors of blood groups 'A', 'O', and 'AB' to the donors of blood group 'B'?

- Ans
- ☐ 1. 4 : 3
  - ☐ 2. 3 : 4
  - ☐ 3. 1 : 3
  - ☒ 4. 2 : 3

Question ID : 630680387735  
Option 1 ID : 6306801511577  
Option 2 ID : 6306801511574  
Option 3 ID : 6306801511576  
Option 4 ID : 6306801511575  
Status : Not Answered  
Chosen Option : --

Q.22 Simplify  $\frac{1 + \sin \theta - \cos \theta}{1 + \sin \theta + \cos \theta}$

- Ans
- ☒ 1.  $\tan \frac{\theta}{2}$
  - ☐ 2.  $\cos \frac{\theta}{2}$
  - ☐ 3.  $\cot \frac{\theta}{2}$
  - ☐ 4.  $\sin \frac{\theta}{2}$

Question ID : 630680383493  
Option 1 ID : 6306801494869  
Option 2 ID : 6306801494868  
Option 3 ID : 6306801494867  
Option 4 ID : 6306801494870  
Status : Not Answered  
Chosen Option : --

Q.23 Refer the below table and answer the question that follows.

India's exports in 2020	Value in million US \$
Electronics	720
Cotton	680
Jewellery	500
Steel	450
Software	850

Jewellery was what percentage of the total exports? (Rounded to two decimal places)

- Ans
- ☐ 1. 14.63%
  - ☐ 2. 15.78%
  - ☒ 3. 15.63%
  - ☐ 4. 14.34%

Question ID : 630680428109  
Option 1 ID : 6306801670483  
Option 2 ID : 6306801670481  
Option 3 ID : 6306801670482  
Option 4 ID : 6306801670480  
Status : Not Answered  
Chosen Option : --

Q.24 If 436P5 is divisible by 3, then the largest value of P is:

- Ans
- ☒ 1. 8
  - ☒ 2. 12
  - ☒ 3. 9
  - ☒ 4. 6

Question ID : 630680136692  
Option 1 ID : 630680529383  
Option 2 ID : 630680529382  
Option 3 ID : 630680529384  
Option 4 ID : 630680529385  
Status : Not Answered  
Chosen Option : --

Q.25 If  $10 \sin^2 \theta + 6 \cos^2 \theta = 7$ ,  $0 < \theta < 90^\circ$ , then find the value of  $\tan \theta$ .

- Ans
- ☒ 1. 1
  - ☒ 2.  $\sqrt{3}$
  - ☒ 3.  $\frac{1}{2}$
  - ☒ 4.  $\frac{1}{\sqrt{3}}$

Question ID : 630680526459  
Option 1 ID : 6306802057904  
Option 2 ID : 6306802057903  
Option 3 ID : 6306802057905  
Option 4 ID : 6306802057902  
Status : Not Answered  
Chosen Option : --

Section : English Comprehension

Q.1 Select the most appropriate idiom to fill in the blank.

After months of dedication and effort, I finally completed the marathon. I can really \_\_\_\_\_ for this accomplishment.

- Ans
- ☒ 1. up a creek without a paddle
  - ☒ 2. eat like a horse
  - ☒ 3. pat myself on the back
  - ☒ 4. blow hot and cold

Question ID : 630680374410  
Option 1 ID : 6306801458826  
Option 2 ID : 6306801458825  
Option 3 ID : 6306801458823  
Option 4 ID : 6306801458824  
Status : Answered  
Chosen Option : 3

Q.2 Select the most appropriate synonym of the given word.  
Grotesque

- Ans
- ☒ 1. Shameful
  - ☒ 2. Comely
  - ☒ 3. Ugly
  - ☒ 4. Spontaneous

Question ID : 630680145488  
Option 1 ID : 630680562929  
Option 2 ID : 630680562928  
Option 3 ID : 630680562927  
Option 4 ID : 630680562926  
Status : Not Answered  
Chosen Option : --

**Q.3** Select the option that can be used as a one-word substitute for the underlined group of words.  
We, as human beings, have a tendency of believing in the things that can be seen and touched.

- Ans** ☒ 1. tangible  
☒ 2. inexpressible  
☒ 3. impalpable  
☒ 4. spiritual

Question ID : 630680158620  
Option 1 ID : 630680613973  
Option 2 ID : 630680613975  
Option 3 ID : 630680613972  
Option 4 ID : 630680613974  
Status : Answered  
Chosen Option : 1

**Q.4** Select the correctly spelled sentence.

- Ans** ☒ 1. The resteraunt serves delicious meals.  
☒ 2. The resturant serves delicious meals.  
☒ 3. The restaurant serves delicious meals.  
☒ 4. The restauraunt serves delisious meals.

Question ID : 630680377272  
Option 1 ID : 6306801470151  
Option 2 ID : 6306801470152  
Option 3 ID : 6306801470153  
Option 4 ID : 6306801470154  
Status : Answered  
Chosen Option : 3

**Q.5** Select the most appropriate synonym of the given word.  
Loving

- Ans** ☒ 1. Offish  
☒ 2. Rejuvenate  
☒ 3. Affectionate  
☒ 4. Subordinate

Question ID : 630680168487  
Option 1 ID : 630680652560  
Option 2 ID : 630680652563  
Option 3 ID : 630680652561  
Option 4 ID : 630680652562  
Status : Answered  
Chosen Option : 3

**Q.6** Select the word which means the same as the group of words given.

Essence or main point of any passage, lecture or book

- Ans** ☒ 1. Meaning  
☒ 2. Gist  
☒ 3. Significance  
☒ 4. Heart

Question ID : 630680414697  
Option 1 ID : 6306801617534  
Option 2 ID : 6306801617533  
Option 3 ID : 6306801617532  
Option 4 ID : 6306801617531  
Status : Answered  
Chosen Option : 2

**Q.7** Select the most appropriate option that can substitute the underlined segment in the given sentence.

Arushya purchased the most good of all the suits kept in the shop.

- Ans** ☒ 1. the more good  
☒ 2. the goods  
☒ 3. the best  
☒ 4. the good

Question ID : 630680153521  
Option 1 ID : 630680594014  
Option 2 ID : 630680594015  
Option 3 ID : 630680594012  
Option 4 ID : 630680594013  
Status : Answered  
Chosen Option : 3



**Q.8** Select the option that expresses the given sentence in passive voice.

The chef prepares the meal with great care.

- Ans
- ☒ 1. The meal has been prepared with great care by the chef.
  - ☒ 2. The meal will be prepared with great care by the chef.
  - ☒ 3. The meal is prepared with great care by the chef.
  - ☒ 4. The meal was prepared with great care by the chef.

Question ID : 630680415202  
Option 1 ID : 6306801619555  
Option 2 ID : 6306801619558  
Option 3 ID : 6306801619557  
Option 4 ID : 6306801619556  
Status : Answered  
Chosen Option : 3

**Q.9** Select the option that expresses the following sentence in active voice.  
The novels of Dickens are being read by Mayank.

- Ans
- ☒ 1. Mayank had been reading the novels of Dickens.
  - ☒ 2. Mayank is reading the novels of Dickens.
  - ☒ 3. Mayank was reading the novels of Dickens.
  - ☒ 4. Mayank has been reading the novels of Dickens.

Question ID : 630680415243  
Option 1 ID : 6306801619720  
Option 2 ID : 6306801619722  
Option 3 ID : 6306801619719  
Option 4 ID : 6306801619721  
Status : Answered  
Chosen Option : 2

**Q.10** Select the most appropriate synonym of the word in brackets to fill in the blanks.  
The soldiers spent long period \_\_\_\_\_ (convalescing).

- Ans
- ☒ 1. travelling
  - ☒ 2. attacking
  - ☒ 3. ailing
  - ☒ 4. recovering

Question ID : 630680186689  
Option 1 ID : 630680723708  
Option 2 ID : 630680723707  
Option 3 ID : 630680723705  
Option 4 ID : 630680723706  
Status : Answered  
Chosen Option : 4

**Q.11** Select the most appropriate option that can substitute the underlined segment in the given sentence.

Even if you've never heard his name, you've probably met someone with his words tattooed in their skin or heard them sung at a music concert.

- Ans
- ☒ 1. tattooed on their skin
  - ☒ 2. tattooed through their skin
  - ☒ 3. tattooed until their skin
  - ☒ 4. tattooed overdoing their skin

Question ID : 630680147488  
Option 1 ID : 630680570722  
Option 2 ID : 630680570725  
Option 3 ID : 630680570723  
Option 4 ID : 630680570724  
Status : Answered  
Chosen Option : 1

**Q.12** The following sentence has been divided into four segments. Identify the segment that contains a grammatical error.

The lions became violently / when the visitors / started throwing / stones at them.

**Ans** ✓ 1. The lions became violently

✗ 2. when the visitors

✗ 3. started throwing

✗ 4. stones at them.

Question ID : 630680317347  
Option 1 ID : 6306801234505  
Option 2 ID : 6306801234506  
Option 3 ID : 6306801234507  
Option 4 ID : 6306801234508  
Status : Answered  
Chosen Option : 1

**Q.13** Select the most appropriate synonym of the given word.  
Necessary

**Ans** ✓ 1. Essential

✗ 2. Spatial

✗ 3. Existential

✗ 4. Potential

Question ID : 630680168489  
Option 1 ID : 630680652570  
Option 2 ID : 630680652569  
Option 3 ID : 630680652571  
Option 4 ID : 630680652568  
Status : Answered  
Chosen Option : 1

**Q.14** Select the most appropriate ANTONYM of the given word.  
Intelligible

**Ans** ✓ 1. Incoherent

✗ 2. Deliberate

✗ 3. Scriptable

✗ 4. Embezzle

Question ID : 630680517358  
Option 1 ID : 6306802021830  
Option 2 ID : 6306802021831  
Option 3 ID : 6306802021829  
Option 4 ID : 6306802021828  
Status : Not Answered  
Chosen Option : --

**Q.15** Select the INCORRECTLY spelt word.

**Ans** ✗ 1. Possession

✗ 2. Referred

✗ 3. Weather

✓ 4. Unfourseen

Question ID : 630680409966  
Option 1 ID : 6306801598693  
Option 2 ID : 6306801598694  
Option 3 ID : 6306801598696  
Option 4 ID : 6306801598695  
Status : Answered  
Chosen Option : 2

**Q.16** Select the option that can be used as a one-word substitute for the given group of words.

Fear of snakes

**Ans** ✗ 1. Claustrophobia

✓ 2. Ophidiophobia

✗ 3. Xenophobia

✗ 4. Syngenesophobia

Question ID : 630680414665  
Option 1 ID : 6306801617406  
Option 2 ID : 6306801617405  
Option 3 ID : 6306801617403  
Option 4 ID : 6306801617404  
Status : Answered  
Chosen Option : 3

Q.17 Select the most appropriate synonym of the given word.  
Evoke

- Ans ☒ 1. Induce  
☐ 2. Abandon  
☐ 3. Reduce  
☐ 4. Divert

Question ID : 630680295953  
Option 1 ID : 6306801151526  
Option 2 ID : 6306801151527  
Option 3 ID : 6306801151525  
Option 4 ID : 6306801151524  
Status : Answered  
Chosen Option : 1

Q.18 Parts of a sentence are given below in jumbled order. Arrange the parts in the correct order to form a meaningful sentence.

- A. at the same time giving happiness to the poor  
B. by providing them with food, clothes, money or grain  
C. festivals in India are celebrated to share happiness  
D. by being in the presence of the members of the family and

- Ans ☐ 1. CABD  
☐ 2. ACBD  
☒ 3. CDAB  
☐ 4. CBAD

Question ID : 630680205029  
Option 1 ID : 630680794982  
Option 2 ID : 630680794980  
Option 3 ID : 630680794979  
Option 4 ID : 630680794981  
Status : Answered  
Chosen Option : 3

Q.19 Select the most appropriate meaning of the underlined idiom in the following sentence.

The leader of the Legislative Assembly won the hearts of the members through his maiden speech during the session in state council.

- Ans ☐ 1. closure speech  
☒ 2. first speech  
☐ 3. logical speech  
☐ 4. final speech

Question ID : 630680316704  
Option 1 ID : 6306801231996  
Option 2 ID : 6306801231995  
Option 3 ID : 6306801231993  
Option 4 ID : 6306801231994  
Status : Answered  
Chosen Option : 2

Q.20 The given sentence is divided into four segments. Select the option that has the segment with a grammatical error.  
Jerry driving / home late / when the incident / took place.

- Ans ☒ 1. Jerry driving  
☐ 2. took place.  
☐ 3. when the incident  
☐ 4. home late

Question ID : 630680206623  
Option 1 ID : 630680801091  
Option 2 ID : 630680801094  
Option 3 ID : 630680801093  
Option 4 ID : 630680801092  
Status : Answered  
Chosen Option : 1

## Comprehension:

In the following passage, some words have been deleted. Read the passage carefully and select the most appropriate option, in the questions that follow, to fill in each blank.  
Listening starts with hearing but goes (1)\_\_\_\_\_. Hearing, in other words, is necessary, but is not a sufficient (2)\_\_\_\_\_ for listening. Listening involves hearing with attention. Listening is a process that (3)\_\_\_\_\_ concentration. While listening, one should also be observant. In other words, listening has to do with the ears, (4)\_\_\_\_\_ with the eyes and the mind. Listening is to be understood as the total process that involves hearing with attention, being observant and making interpretations. Good communication is essentially a/an (5)\_\_\_\_\_ process.

### SubQuestion No : 21

Q.21 Select the most appropriate option to fill in blank number 1.

- Ans ☒ 1. towards  
☒ 2. across  
☒ 3. beyond  
☒ 4. throughout

Question ID : 630680156799  
Option 1 ID : 630680606831  
Option 2 ID : 630680606828  
Option 3 ID : 630680606829  
Option 4 ID : 630680606830  
Status : Answered  
Chosen Option : 3

## Comprehension:

In the following passage, some words have been deleted. Read the passage carefully and select the most appropriate option, in the questions that follow, to fill in each blank.  
Listening starts with hearing but goes (1)\_\_\_\_\_. Hearing, in other words, is necessary, but is not a sufficient (2)\_\_\_\_\_ for listening. Listening involves hearing with attention. Listening is a process that (3)\_\_\_\_\_ concentration. While listening, one should also be observant. In other words, listening has to do with the ears, (4)\_\_\_\_\_ with the eyes and the mind. Listening is to be understood as the total process that involves hearing with attention, being observant and making interpretations. Good communication is essentially a/an (5)\_\_\_\_\_ process.

### SubQuestion No : 22

Q.22 Select the most appropriate option to fill in blank number 2.

- Ans ☒ 1. condition  
☒ 2. place  
☒ 3. decorum  
☒ 4. scenario

Question ID : 630680156800  
Option 1 ID : 630680606834  
Option 2 ID : 630680606832  
Option 3 ID : 630680606835  
Option 4 ID : 630680606833  
Status : Answered  
Chosen Option : 4

## Comprehension:

In the following passage, some words have been deleted. Read the passage carefully and select the most appropriate option, in the questions that follow, to fill in each blank.  
Listening starts with hearing but goes (1)\_\_\_\_\_. Hearing, in other words, is necessary, but is not a sufficient (2)\_\_\_\_\_ for listening. Listening involves hearing with attention. Listening is a process that (3)\_\_\_\_\_ concentration. While listening, one should also be observant. In other words, listening has to do with the ears, (4)\_\_\_\_\_ with the eyes and the mind. Listening is to be understood as the total process that involves hearing with attention, being observant and making interpretations. Good communication is essentially a/an (5)\_\_\_\_\_ process.

### SubQuestion No : 23

Q.23 Select the most appropriate option to fill in blank number 3.

- Ans ☒ 1. brings up  
☒ 2. takes for  
☒ 3. calls for  
☒ 4. disposes of

Question ID : 630680156801  
Option 1 ID : 630680606839  
Option 2 ID : 630680606838  
Option 3 ID : 630680606837  
Option 4 ID : 630680606836  
Status : Answered  
Chosen Option : 3

Comprehension:

In the following passage, some words have been deleted. Read the passage carefully and select the most appropriate option, in the questions that follow, to fill in each blank.  
Listening starts with hearing but goes (1)\_\_\_\_\_. Hearing, in other words, is necessary, but is not a sufficient (2)\_\_\_\_\_ for listening. Listening involves hearing with attention. Listening is a process that (3)\_\_\_\_\_ concentration. While listening, one should also be observant. In other words, listening has to do with the ears, (4)\_\_\_\_\_ with the eyes and the mind. Listening is to be understood as the total process that involves hearing with attention, being observant and making interpretations. Good communication is essentially a/an (5)\_\_\_\_\_ process.

SubQuestion No : 24

Q.24 Select the most appropriate option to fill in blank number 4.

Ans ☒ 1. although

☒ 2. rather

☒ 3. yet

☒ 4. as well as

Question ID : 630680156802

Option 1 ID : 630680606841

Option 2 ID : 630680606842

Option 3 ID : 630680606843

Option 4 ID : 630680606840

Status : Answered

Chosen Option : 4

Comprehension:

In the following passage, some words have been deleted. Read the passage carefully and select the most appropriate option, in the questions that follow, to fill in each blank.  
Listening starts with hearing but goes (1)\_\_\_\_\_. Hearing, in other words, is necessary, but is not a sufficient (2)\_\_\_\_\_ for listening. Listening involves hearing with attention. Listening is a process that (3)\_\_\_\_\_ concentration. While listening, one should also be observant. In other words, listening has to do with the ears, (4)\_\_\_\_\_ with the eyes and the mind. Listening is to be understood as the total process that involves hearing with attention, being observant and making interpretations. Good communication is essentially a/an (5)\_\_\_\_\_ process.

SubQuestion No : 25

Q.25 Select the most appropriate option to fill in blank number 5.

Ans ☒ 1. interactive

☒ 2. obnoxious

☒ 3. pecuniary

☒ 4. onerous

Question ID : 630680156803

Option 1 ID : 630680606847

Option 2 ID : 630680606845

Option 3 ID : 630680606844

Option 4 ID : 630680606846

Status : Answered

Chosen Option : 1