

Combined Graduate Level Examination 2024 Tier I

| | |
|----------------|--|
| Roll Number | |
| Candidate Name | |
| Venue Name | |
| Exam Date | 25/09/2024 |
| Exam Time | 9:00 AM - 10:00 AM |
| Subject | Combined Graduate Level Examination Tier I |

Section : General Intelligence and Reasoning

Q.1 Select the term from among the given options that can replace the question mark (?) in the given series.
HM71, JP68, LS65, NV62, ?

- Ans
- ☒ 1. RX59
 - ☒ 2. QY57
 - ☒ 3. PY59
 - ☒ 4. QX58

Question ID : 630680416273
Option 1 ID : 6306801623855
Option 2 ID : 6306801623856
Option 3 ID : 6306801623857
Option 4 ID : 6306801623858
Status : Answered
Chosen Option : 3

Q.2 Select the set in which the numbers are related in the same way as are the numbers of the following set.
(24, 15, 120)
(21, 19, 133)
(NOTE: Operations should be performed on the whole numbers, without breaking down the numbers into its constituent digits. E.g. 13 – Operations on 13 such as adding/deleting/multiplying etc. to 13 can be performed. Breaking down 13 into 1 and 3 and then performing mathematical operations on 1 and 3 is not allowed.)

- Ans
- ☒ 1. (31, 9, 96)
 - ☒ 2. (18, 16, 99)
 - ☒ 3. (27, 12, 108)
 - ☒ 4. (33, 10, 170)

Question ID : 630680329212
Option 1 ID : 6306801280671
Option 2 ID : 6306801280672
Option 3 ID : 6306801280670
Option 4 ID : 6306801280669
Status : Not Answered
Chosen Option : --

Test Prime

**ALL EXAMS,
ONE SUBSCRIPTION**



70,000+
Mock Tests



**Personalised
Report Card**



**Unlimited
Re-Attempt**



600+
Exam Covered



**Previous Year
Papers**

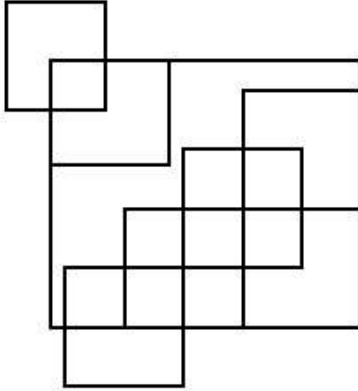


500%
Refund



ATTEMPT FREE MOCK NOW

Q.3 How many squares are there in the figure shown below?



Ans ☒ 1. 18

☒ 2. 17

☒ 3. 15

☒ 4. 16

Question ID : 630680296652

Option 1 ID : 6306801154260

Option 2 ID : 6306801154262

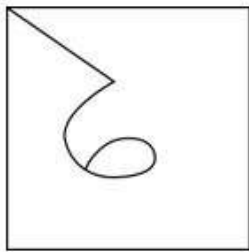
Option 3 ID : 6306801154259

Option 4 ID : 6306801154261

Status : Answered

Chosen Option : 4

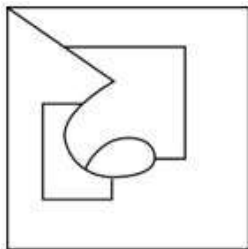
Q.4 Select the option figure in which the given figure (X) is embedded (rotation is NOT allowed).



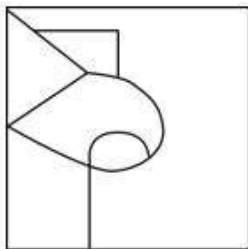
(X)

Ans

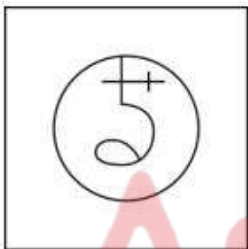
✓ 1.



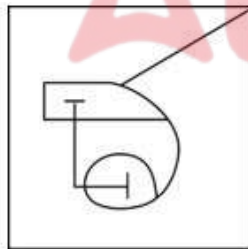
✗ 2.



✗ 3.



✗ 4.



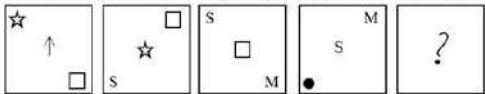
Question ID : 630680332540
Option 1 ID : 6306801293600
Option 2 ID : 6306801293598
Option 3 ID : 6306801293597
Option 4 ID : 6306801293599
Status : Answered
Chosen Option : 1

Q.5 Select the option that is related to the fifth letter-cluster in the same way as the second letter-cluster is related to the first letter-cluster and the fourth letter-cluster is related to the third letter-cluster.
CRW: TIN :: DOZ: UFQ :: ALW:?

- Ans ☒ 1. RCN
☒ 2. RCM
☒ 3. JCN
☒ 4. JCM

Question ID : 630680416749
Option 1 ID : 6306801625760
Option 2 ID : 6306801625762
Option 3 ID : 6306801625761
Option 4 ID : 6306801625759
Status : Answered
Chosen Option : 1

Q.6 Select the figure from among the given options that can replace the question mark (?) and complete the pattern.



Ans

- ☒ 1.
- ☒ 2.
- ☒ 3.
- ☒ 4.

Question ID : 63068063226
Option 1 ID : 630680244072
Option 2 ID : 630680244073
Option 3 ID : 630680244070
Option 4 ID : 630680244071
Status : Answered
Chosen Option : 2

Q.7 Four letter-clusters have been given, out of which three are alike in some manner and one is different. Select the one that is different.

Note : The odd one out is not based on the number of consonants/vowels or their position in the letter cluster.

- Ans
- ☒ 1. SQPN
 - ☒ 2. YWVT
 - ☒ 3. NLKI
 - ☒ 4. WVTS

Question ID : 63068082918
Option 1 ID : 630680321532
Option 2 ID : 630680321533
Option 3 ID : 630680321534
Option 4 ID : 630680321535
Status : Answered
Chosen Option : 4

Q.8 In a certain code language, 'EAGLE' is written as 'DZFKD' and 'DREAM' is written as 'CQDZL'. How will 'SINCE' be written in that language?

- Ans
- ☒ 1. THMDF
 - ☒ 2. RHMBD
 - ☒ 3. RJOB D
 - ☒ 4. TJODF

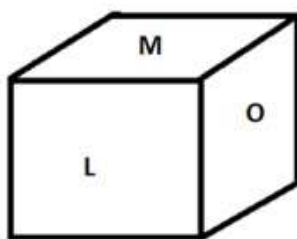
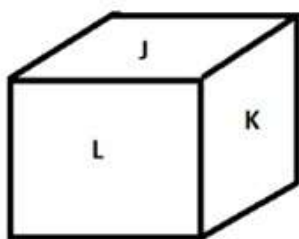
Question ID : 630680172760
Option 1 ID : 630680669440
Option 2 ID : 630680669443
Option 3 ID : 630680669441
Option 4 ID : 630680669442
Status : Answered
Chosen Option : 2

Q.9 Select the correct combination of mathematical signs to sequentially place from left to right in the blanks below to balance the given equation.
 $75 _ 3 _ 17 _ 8 = 0$

- Ans
- ☒ 1. ÷, -, -
 - ☒ 2. ×, +, -
 - ☒ 3. -, -, ×
 - ☒ 4. -, -, +

Question ID : 630680411779
Option 1 ID : 6306801605954
Option 2 ID : 6306801605951
Option 3 ID : 6306801605952
Option 4 ID : 6306801605953
Status : Answered
Chosen Option : 1

Q.10 Six letters J, K, L, M, N and O are written on different faces of a dice. Two positions of this dice are shown in the figure below. Find the letter on the face opposite to N.



- Ans
- ☒ 1. J
 - ☒ 2. L
 - ☒ 3. M
 - ☒ 4. K

Question ID : 630680194489

Option 1 ID : 630680754490

Option 2 ID : 630680754489

Option 3 ID : 630680754491

Option 4 ID : 630680754492

Status : Answered

Chosen Option : 2

Q.11 All the six members of a family, 1, 2, 3, 4, 5 and 6, live together. 2 is the daughter of 3, but 3 is not the mother of 2. 1 and 3 are a married couple. 5 is the sister of 3. 4 is the daughter of 1. 6 is the brother of 2. Who is the mother of 2?

- Ans
- ☒ 1. 2
 - ☒ 2. 1
 - ☒ 3. 4
 - ☒ 4. 5

Question ID : 630680280750

Option 1 ID : 6306801091236

Option 2 ID : 6306801091238

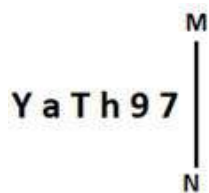
Option 3 ID : 6306801091237

Option 4 ID : 6306801091235

Status : Answered

Chosen Option : 4

Q.12 Select the correct mirror image of the given figure when the mirror is placed at MN as shown below.



- Ans
- ☒ 1. 7eH1sY
 - ☒ 2. 7eHTsY
 - ☒ 3. 7eHTsY
 - ☒ 4. 7e4TsY

Question ID : 630680356661
 Option 1 ID : 6306801388646
 Option 2 ID : 6306801388645
 Option 3 ID : 6306801388647
 Option 4 ID : 6306801388648
 Status : Answered
 Chosen Option : 3

Q.13 The question contains pairs of words that are related to each other in a certain way. Three of the following four word pairs are alike as these have the same relationship and thus form a group. Which word pair is the one that DOES NOT belong to that group?

(The words must be considered as meaningful English words and must not be related to each other based on the number of letters / number of consonants/vowels in the word.)

- Ans
- ☒ 1. Shoes – feet
 - ☒ 2. Book – pages
 - ☒ 3. Flowers – petals
 - ☒ 4. Spectacles – lens

Question ID : 630680798753
 Option 1 ID : 6306803129866
 Option 2 ID : 6306803129864
 Option 3 ID : 6306803129867
 Option 4 ID : 6306803129865
 Status : Answered
 Chosen Option : 1

Q.14 Select the figure from among the given option that can replace the question mark (?) in the following series.

| | | | | | | | | | | | | |
|---|---|---|---|---|---|---|---|---|---|---|---|---|
| S | △ | N | O | 4 | 2 | N | P | 4 | 2 | S | △ | ? |
| | P | | | △ | | | O | | | P | | |
| 2 | 4 | O | N | P | S | △ | S | 2 | 4 | O | N | |

Ans

- ✗ 1.

| | | |
|---|---|---|
| 4 | 2 | N |
| | △ | |
| O | S | P |
- ✗ 2.

| | | |
|---|---|---|
| 4 | O | 2 |
| | S | |
| N | P | △ |
- ✗ 3.

| | | |
|---|---|---|
| △ | 2 | S |
| | 4 | |
| O | N | P |
- ✓ 4.

| | | |
|---|---|---|
| 4 | O | S |
| | 2 | |
| P | N | △ |

Question ID : 630680283520
Option 1 ID : 6306801102202
Option 2 ID : 6306801102199
Option 3 ID : 6306801102201
Option 4 ID : 6306801102200
Status : Answered
Chosen Option : 4

Q.15 Select the number from among the given options that can replace the question mark (?) in the following series.
35, 46, 68, 101, 145, ?

- Ans
- ✗ 1. 212
- ✓ 2. 200
- ✗ 3. 214
- ✗ 4. 210

Question ID : 630680411902
Option 1 ID : 6306801606445
Option 2 ID : 6306801606444
Option 3 ID : 6306801606443
Option 4 ID : 6306801606446
Status : Answered
Chosen Option : 2

Q.16 Select the option that represents the letters that when sequentially placed from left to right in the blanks below will complete the letter series.

Z _ A _ Z _ _ Z A _ Z _

Ans ☒ 1. ZZAZZA

☐ 2. AZAZAZ

☐ 3. ZZZAAA

☐ 4. AZZAZZ

Question ID : 630680262377

Option 1 ID : 6306801019150

Option 2 ID : 6306801019148

Option 3 ID : 6306801019149

Option 4 ID : 6306801019147

Status : Answered

Chosen Option : 1

Q.17 The position of how many letters will change if each of the letters in the word 'CORNFLAKES' is re-arranged in the English alphabetical order from left to right?

Ans ☒ 1. Eight

☐ 2. Seven

☐ 3. Nine

☐ 4. Ten

Question ID : 630680106898

Option 1 ID : 630680415166

Option 2 ID : 630680415167

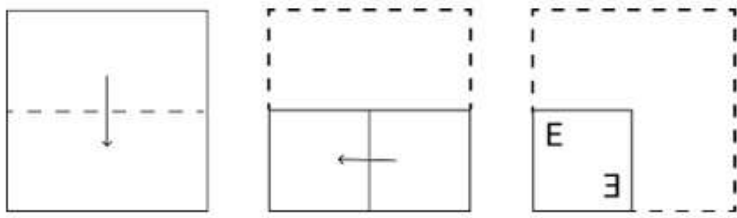
Option 3 ID : 630680415165

Option 4 ID : 630680415164

Status : Answered

Chosen Option : 1

Q.18 A paper is folded and cut as shown below. How will it appear when unfolded?



Ans

- ✖ 1.
- ✔ 2.
- ✖ 3.
- ✖ 4.

Question ID : 630680285668
Option 1 ID : 6306801110641
Option 2 ID : 6306801110639
Option 3 ID : 6306801110640
Option 4 ID : 6306801110642
Status : Answered
Chosen Option : 2

Q.19 Read the given statements and conclusions carefully. Assuming that the information given in the statements is true, even if it appears to be at variance with commonly known facts, decide which of the given conclusions logically follow(s) from the statements.

Statements:

Some vegetables are fruits.
Some fruits are flowers.
All flowers are garlands.

Conclusions:

I. Some garlands are fruits.
II. Some vegetables are flowers.
III. Some vegetables are garlands.

- Ans** ☒ 1. Only conclusions I and III follow
☒ 2. Only conclusions II and III follow
☒ 3. Only conclusions I and II follow
☒ 4. Only conclusion I follows

Question ID : 630680416209

Option 1 ID : 6306801623600

Option 2 ID : 6306801623602

Option 3 ID : 6306801623599

Option 4 ID : 6306801623601

Status : Answered

Chosen Option : 4

Q.20 In a certain code language, 'EXCESS' is written as '726572121', 'ENERGY' is written as '716720927', how will 'ESCAPE' be written in that language?

- Ans** ☒ 1. 72153187
☒ 2. 72153165
☒ 3. 72151167
☒ 4. 71933187

Question ID : 630680416123

Option 1 ID : 6306801623256

Option 2 ID : 6306801623257

Option 3 ID : 6306801623258

Option 4 ID : 6306801623255

Status : Answered

Chosen Option : 1

Q.21 Which letter-cluster will replace the question mark (?) to complete the given series?
CQJG, ERMJ, ?, ITSP, KUVS

- Ans** ☒ 1. GSQM
☒ 2. GRPM
☒ 3. GTPM
☒ 4. GSPM

Question ID : 630680416920

Option 1 ID : 6306801626445

Option 2 ID : 6306801626446

Option 3 ID : 6306801626444

Option 4 ID : 6306801626443

Status : Answered

Chosen Option : 4

Q.22 Which number will come in the place of the question mark (?) in the following equation if '+' and '-' are interchanged and 'x' and '÷' are interchanged?
 $27 \times 3 + 4 \div 2 - 7 = ?$

- Ans
- ☐ 1. 10
 - ☐ 2. 9
 - ☐ 3. 6
 - ☒ 4. 8

Question ID : 630680328465
 Option 1 ID : 6306801277830
 Option 2 ID : 6306801277832
 Option 3 ID : 6306801277831
 Option 4 ID : 6306801277829
 Status : Answered
 Chosen Option : 4

Q.23 11 is related to 121 following a certain logic. Following the same logic, 22 is related to 484. To which of the following is 31 related, following the same logic?

(NOTE: Operations should be performed on the whole numbers, without breaking down the numbers into its constituent digits. E.g. 13 – Operations on 13 such as adding /deleting /multiplying etc. to 13 can be performed. Breaking down 13 into 1 and 3 and then performing mathematical operations on 1 and 3 is not allowed)

- Ans
- ☐ 1. 943
 - ☒ 2. 961
 - ☐ 3. 957
 - ☐ 4. 973

Question ID : 630680344656
 Option 1 ID : 6306801340935
 Option 2 ID : 6306801340933
 Option 3 ID : 6306801340934
 Option 4 ID : 6306801340936
 Status : Answered
 Chosen Option : 2

Q.24 The same operation(s) are followed in all the given number pairs except one. Find that odd number pair.

(NOTE : Operations should be performed on the whole numbers, without breaking down the numbers into its constituent digits. E.g. 13 – Operations on 13 such as adding /deleting /multiplying etc., to 13 can be performed. Breaking down 13 into 1 and 3 and then performing mathematical operations on 1 and 3 is not allowed.)

- Ans
- ☐ 1. 22 : 45
 - ☐ 2. 7 : 15
 - ☒ 3. 11 : 121
 - ☐ 4. 5 : 11

Question ID : 630680412039
 Option 1 ID : 6306801606993
 Option 2 ID : 6306801606991
 Option 3 ID : 6306801606992
 Option 4 ID : 6306801606994
 Status : Answered
 Chosen Option : 3

Q.25 Select the option that is related to the fifth number in the same way as the second number is related to the first number and the fourth number is related to the third number.

4 : 68 :: 8 : 136 :: 9 : ?

(NOTE : Operations should be performed on the whole numbers, without breaking down the numbers into its constituent digits. E.g. 13 – Operations on 13 such as adding /deleting /multiplying etc., to 13 can be performed. Breaking down 13 into 1 and 3 and then performing mathematical operations on 1 and 3 is not allowed.)

Ans ☒ 1. 147

☒ 2. 149

☒ 3. 153

☒ 4. 152

Question ID : 630680312536

Option 1 ID : 6306801216025

Option 2 ID : 6306801216026

Option 3 ID : 6306801216028

Option 4 ID : 6306801216027

Status : Answered

Chosen Option : 3

Section : General Awareness

Q.1 Match the points under Column A with those under Column B.

Column A (Disease)

Column B (Organism Responsible)

i. Malaria

a. Vibrio

ii. Diarrhoea

b. Salmonella

iii. Typhoid

c. Rotavirus

iv. Cholera

d. Plasmodium

Ans ☒ 1. i-a, ii-c, iii-b, iv-d

☒ 2. i-a, ii-b, iii-c, iv-d

☒ 3. i-d, ii-c, iii-b, iv-a

☒ 4. i-b, ii-a, iii-c, iv-d

Question ID : 630680199657

Option 1 ID : 630680774236

Option 2 ID : 630680774235

Option 3 ID : 630680774238

Option 4 ID : 630680774237

Status : Answered

Chosen Option : 3

Q.2 The record obtained by the measurement of earthquake is called a:

Ans ☒ 1. seismic wave

☒ 2. seismograph

☒ 3. seismology

☒ 4. seismogram

Question ID : 63068098917

Option 1 ID : 630680384373

Option 2 ID : 630680384375

Option 3 ID : 630680384372

Option 4 ID : 630680384374

Status : Answered

Chosen Option : 1

Q.3 Ghiyas ud-din Balban had set up a _____ department called 'Diwan-i-arz'.

- Ans
- ☐ 1. agriculture
 - ☐ 2. education
 - ☐ 3. commerce
 - ☒ 4. military

Question ID : 630680412429
Option 1 ID : 6306801608541
Option 2 ID : 6306801608539
Option 3 ID : 6306801608540
Option 4 ID : 6306801608542
Status : Not Answered
Chosen Option : --

Q.4 In chess which of the following may move only diagonally?

- Ans
- ☐ 1. The Queen
 - ☐ 2. The Knight
 - ☐ 3. The Rook
 - ☒ 4. The Bishop

Question ID : 630680510775
Option 1 ID : 6306801996232
Option 2 ID : 6306801996233
Option 3 ID : 6306801996231
Option 4 ID : 6306801996230
Status : Not Answered
Chosen Option : --

Q.5 Which of the following is associated with the retreating monsoon in India?

- Ans
- ☐ 1. Loo
 - ☐ 2. Mahawat
 - ☒ 3. October heat
 - ☐ 4. Kaal Baisakhi

Question ID : 630680309095
Option 1 ID : 6306801202559
Option 2 ID : 6306801202558
Option 3 ID : 6306801202557
Option 4 ID : 6306801202560
Status : Not Answered
Chosen Option : --

Q.6 Which famous santoor player was honoured with the Ustad Hafiz Ali Khan Award in 1998?

- Ans
- ☐ 1. Tarun Bhattacharya
 - ☐ 2. Abhay Sopori
 - ☐ 3. Satish Vyas
 - ☒ 4. Shivkumar Sharma

Question ID : 630680511805
Option 1 ID : 6306802000192
Option 2 ID : 6306802000190
Option 3 ID : 6306802000193
Option 4 ID : 6306802000191
Status : Not Answered
Chosen Option : --

Q.7 The Atal Innovation Mission was launched in year _____.

Ans ☒ 1. 2014

☒ 2. 2016

☒ 3. 2021

☒ 4. 2004

Question ID : 630680195341

Option 1 ID : 630680757836

Option 2 ID : 630680757834

Option 3 ID : 630680757833

Option 4 ID : 630680757835

Status : Not Answered

Chosen Option : --

Q.8 In 2022, Vinay Mohan Kwatra took charge as the Foreign Secretary of India. Prior to this, he served as the ambassador to which of the following countries?

Ans ☒ 1. Nepal

☒ 2. Maldives

☒ 3. Bhutan

☒ 4. Sri Lanka

Question ID : 630680195361

Option 1 ID : 630680757914

Option 2 ID : 630680757916

Option 3 ID : 630680757913

Option 4 ID : 630680757915

Status : Not Answered

Chosen Option : --

Q.9 Alla Rakha is famous for playing which of the following musical instruments?

Ans ☒ 1. Shehnai

☒ 2. Bansuri

☒ 3. Tabla

☒ 4. Damaru

Question ID : 630680410183

Option 1 ID : 6306801599555

Option 2 ID : 6306801599553

Option 3 ID : 6306801599554

Option 4 ID : 6306801599556

Status : Answered

Chosen Option : 3

Q.10 Who suggested the law that the British Government passed in 1856 to support widow remarriage?

Ans ☒ 1. Keshub Chandra Sen

☒ 2. Ishwar Chandra Vidyasagar

☒ 3. Atmaram Pandurang

☒ 4. Raja Ram Mohan Roy

Question ID : 630680511536

Option 1 ID : 6306801999266

Option 2 ID : 6306801999268

Option 3 ID : 6306801999269

Option 4 ID : 6306801999267

Status : Answered

Chosen Option : 2

Q.11 Ishwari Prasad is credited to have introduced the _____ Gharana of Kathak.

- Ans
- ☒ 1. Raigarh
 - ☒ 2. Jaipur
 - ☒ 3. Banaras
 - ☒ 4. Lucknow

Question ID : 630680405008
 Option 1 ID : 6306801579466
 Option 2 ID : 6306801579465
 Option 3 ID : 6306801579464
 Option 4 ID : 6306801579463
 Status : Not Answered
 Chosen Option : --

Q.12 Pulakeshin II assumed the title of 'Dakshinapatheshvara' (lord of the south) after defeating which of the following rulers of north India?

- Ans
- ☒ 1. Harshavardhana
 - ☒ 2. Rudrasena II
 - ☒ 3. Dhruvasena II
 - ☒ 4. Prabhakarvardhana

Question ID : 630680412522
 Option 1 ID : 6306801608912
 Option 2 ID : 6306801608911
 Option 3 ID : 6306801608914
 Option 4 ID : 6306801608913
 Status : Answered
 Chosen Option : 1

Q.13 Makar Sankranti is the festival dedicated to which of the following Lords?

- Ans
- ☒ 1. Indra
 - ☒ 2. Surya
 - ☒ 3. Chandra
 - ☒ 4. Ganesha

Question ID : 630680216082
 Option 1 ID : 630680838305
 Option 2 ID : 630680838303
 Option 3 ID : 630680838304
 Option 4 ID : 630680838306
 Status : Answered
 Chosen Option : 2

Q.14 When did a States Reorganisation Commission was set up, which recommended the creation of linguistic States on the basis of larger linguistic groups?

- Ans
- ☒ 1. December 1953
 - ☒ 2. December 1963
 - ☒ 3. December 1958
 - ☒ 4. December 1956

Question ID : 630680408188
 Option 1 ID : 6306801591647
 Option 2 ID : 6306801591650
 Option 3 ID : 6306801591649
 Option 4 ID : 6306801591648
 Status : Not Answered
 Chosen Option : --

Q.15 According to Census of India 2011, female adolescents in the age group of 10-19 years had a share of:

- Ans
- ☐ 1. 52.7%
 - ☐ 2. 20.9%
 - ☒ 3. 47.3%
 - ☐ 4. 31.3%

Question ID : 630680409649
Option 1 ID : 6306801597426
Option 2 ID : 6306801597425
Option 3 ID : 6306801597427
Option 4 ID : 6306801597428
Status : Not Answered
Chosen Option : --

Q.16 Which part of the Indian Constitution deals with the Election Commission?

- Ans
- ☐ 1. Part XII
 - ☒ 2. Part XV
 - ☐ 3. Part IV
 - ☐ 4. Part XI

Question ID : 630680413120
Option 1 ID : 6306801611306
Option 2 ID : 6306801611303
Option 3 ID : 6306801611304
Option 4 ID : 6306801611305
Status : Not Answered
Chosen Option : --

Q.17 Which of the following is an example of an eastern coast port?

- Ans
- ☐ 1. Mumbai Port
 - ☐ 2. Mormugao Port
 - ☐ 3. New Mangalore Port
 - ☒ 4. Chennai Port

Question ID : 630680327617
Option 1 ID : 6306801274465
Option 2 ID : 6306801274468
Option 3 ID : 6306801274466
Option 4 ID : 6306801274467
Status : Answered
Chosen Option : 4

Q.18 In 1910, The United India House at Seattle, USA, was set up by _____.

- Ans
- ☒ 1. Tarak Nath Das and GD Kumar
 - ☐ 2. Shyamji Krishna Varma
 - ☐ 3. VD Savarkar and Ganesh
 - ☐ 4. Khudiram Bose and Prafulla Chaki

Question ID : 630680412318
Option 1 ID : 6306801608096
Option 2 ID : 6306801608095
Option 3 ID : 6306801608098
Option 4 ID : 6306801608097
Status : Not Answered
Chosen Option : --

Q.19 An organic reaction used to convert an aryl diazonium salt into an aryl halide using a copper(I) halide catalyst is called:

- Ans** ☒ 1. Sandmeyer reaction
☒ 2. Balz-Schiemann reaction
☒ 3. Finkelstein reaction
☒ 4. Gattermann reaction

Question ID : 63068051559
 Option 1 ID : 630680198473
 Option 2 ID : 630680198471
 Option 3 ID : 630680198472
 Option 4 ID : 630680198470
 Status : Not Answered
 Chosen Option : --

Q.20 Which Article of the Indian Constitution provides for protecting and improving the environment and safeguarding forests and wildlife?

- Ans** ☒ 1. Article 48-A
☒ 2. Article 47-A
☒ 3. Article 47-B
☒ 4. Article 49-C

Question ID : 630680305538
 Option 1 ID : 6306801188527
 Option 2 ID : 6306801188525
 Option 3 ID : 6306801188526
 Option 4 ID : 6306801188528
 Status : Not Answered
 Chosen Option : --

Q.21 NDP = _____.

- Ans** ☒ 1. GDP + Net factor income from abroad
☒ 2. GDP – Net factor income from abroad
☒ 3. GDP – Depreciation
☒ 4. GDP + Depreciation

Question ID : 63068068742
 Option 1 ID : 630680265661
 Option 2 ID : 630680265660
 Option 3 ID : 630680265658
 Option 4 ID : 630680265659
 Status : Not Answered
 Chosen Option : --

Q.22 What is the primary objective of the Micro, Small, and Medium Enterprises Development (MSMED) Act of 2006 in India?

- Ans** ☒ 1. To increase import tariffs to protect MSMEs
☒ 2. To focus on large-scale industries only
☒ 3. To regulate foreign companies
☒ 4. To promote and facilitate the development of MSMEs

Question ID : 630680411086
 Option 1 ID : 6306801603098
 Option 2 ID : 6306801603099
 Option 3 ID : 6306801603096
 Option 4 ID : 6306801603097
 Status : Not Answered
 Chosen Option : --

Q.23 Where was the Durand Cup Tournament started in India in 1888?

- Ans ☒ 1. Shimla
☐ 2. Mumbai
☐ 3. Calcutta
☐ 4. Delhi

Question ID : 630680510819
Option 1 ID : 6306801996407
Option 2 ID : 6306801996409
Option 3 ID : 6306801996408
Option 4 ID : 6306801996406
Status : Answered
Chosen Option : 1

Q.24 Which essential amino acid enhances calcium absorption and also plays an important role in the formation of collagen?

- Ans ☐ 1. Tyrosine
☐ 2. Histidine
☒ 3. Lysine
☐ 4. Arginine

Question ID : 630680407467
Option 1 ID : 6306801588809
Option 2 ID : 6306801588807
Option 3 ID : 6306801588808
Option 4 ID : 6306801588806
Status : Not Answered
Chosen Option : --

Q.25 According to Mendeleev's Periodic Table, which elements' properties matched up remarkably well with eka-silicon?

- Ans ☐ 1. Scandium
☐ 2. Gallium
☐ 3. Titanium
☒ 4. Germanium

Question ID : 630680113553
Option 1 ID : 630680439748
Option 2 ID : 630680439747
Option 3 ID : 630680439749
Option 4 ID : 630680439746
Status : Not Answered
Chosen Option : --

Section : Quantitative Aptitude

Q.1 Find the value of $(\operatorname{cosec} \theta - \sin \theta)(\sec \theta - \cos \theta)(\tan \theta + \cot \theta)$.

Ans

- ☒ 1. $\frac{1}{2}$
☒ 2. 0
☒ 3. -1
☒ 4. 1

Question ID : 630680285633
 Option 1 ID : 6306801110502
 Option 2 ID : 6306801110500
 Option 3 ID : 6306801110499
 Option 4 ID : 6306801110501
 Status : Answered
 Chosen Option : 4

Q.2 The salaries of P and Q together amount to ₹9,60,000. P and Q save 64% and 44%, respectively of their individual salaries. If P's expenditure is 1.5 times Q's expenditure, then what is the ratio of P's salary to Q's salary?

Ans

- ☒ 1. 2 : 3
☒ 2. 3 : 2
☒ 3. 3 : 7
☒ 4. 7 : 3

Question ID : 630680395405
 Option 1 ID : 6306801541801
 Option 2 ID : 6306801541800
 Option 3 ID : 6306801541802
 Option 4 ID : 6306801541803
 Status : Not Answered
 Chosen Option : --

Q.3 Study the given table and answer the question that follows.

The given table shows the production of three types of cars (A, B and C) manufactured (in thousands) by an automobile company over the years.

| Year | A | B | C |
|------|-----|-----|------|
| 2015 | 840 | 680 | 890 |
| 2016 | 900 | 750 | 960 |
| 2017 | 760 | 620 | 1000 |
| 2018 | 800 | 540 | 1200 |

The total number of A-type cars produced by the company from 2015 to 2017 is what percentage (rounded off to the nearest integer) is more or less than the total number of C-type cars produced by the company from 2016 to 2018?

Ans

- ☒ 1. More, 21%
☒ 2. More, 24%
☒ 3. Less, 24%
☒ 4. Less, 21%

Question ID : 630680523746
 Option 1 ID : 6306802047137
 Option 2 ID : 6306802047135
 Option 3 ID : 6306802047136
 Option 4 ID : 6306802047138
 Status : Not Answered
 Chosen Option : --

Q.4 Evaluate $2 \frac{\tan 54^\circ}{\cot 36^\circ} - \frac{\cot 41^\circ}{\tan 49^\circ}$.

- Ans
- ☐ 1. 0
 - ☐ 2. -1
 - ☒ 3. 1
 - ☐ 4. 2

Question ID : 630680403309
Option 1 ID : 6306801572734
Option 2 ID : 6306801572737
Option 3 ID : 6306801572735
Option 4 ID : 6306801572736
Status : Answered
Chosen Option : 3

Q.5 Study the given table and answer the question.
The table displays the number of cars produced (in lakhs) by six different brands between 2018 and 2023.

| Type | 2018 | 2019 | 2000 | 2021 | 2022 | 2023 |
|------|------|------|------|------|------|------|
| A | 36 | 40 | 42 | 45 | 47 | 42 |
| B | 23 | 37 | 28 | 32 | 34 | 26 |
| C | 45 | 47 | 51 | 54 | 56 | 48 |
| D | 35 | 37 | 42 | 32 | 36 | 28 |
| E | 57 | 56 | 52 | 38 | 48 | 42 |
| F | 43 | 45 | 56 | 41 | 52 | 40 |

Find the difference in the average production of B and D during 2018-2023.

- Ans
- ☐ 1. 5.5 lakhs
 - ☐ 2. 6 lakhs
 - ☒ 3. 5 lakhs
 - ☐ 4. 4 lakhs

Question ID : 630680459225
Option 1 ID : 6306801793760
Option 2 ID : 6306801793757
Option 3 ID : 6306801793759
Option 4 ID : 6306801793758
Status : Answered
Chosen Option : 3

Q.6 $9 \div \left[1 + \left\{ 4 \times \left(\frac{5}{6} - \frac{1}{3} + \frac{1}{2} \right) \right\} \right]$ is equal to:

- Ans
- ☒ 1. 9
 - ☐ 2. 1
 - ☐ 3. $\frac{9}{5}$
 - ☐ 4. 0

Question ID : 630680426552
Option 1 ID : 6306801664300
Option 2 ID : 6306801664299
Option 3 ID : 6306801664301
Option 4 ID : 6306801664298
Status : Answered
Chosen Option : 1

Q.7 The following table shows the number of pages printed by 3 printers (P, Q and R) for 3 days.

| Day | P | Q | R |
|-----------|-----|-----|-----|
| Monday | 100 | 130 | 200 |
| Tuesday | 120 | 145 | 160 |
| Wednesday | 180 | 85 | 120 |

What is the ratio of the total number of pages printed by printer P over the course of three days to the total number of pages printed by printer Q during the same three days?

- Ans
- ☒ 1. 11 : 10
 - ☒ 2. 10 : 9
 - ☒ 3. 10 : 11
 - ☒ 4. 9 : 10

Question ID : 630680523691
Option 1 ID : 6306802046918
Option 2 ID : 6306802046915
Option 3 ID : 6306802046917
Option 4 ID : 6306802046916
Status : Answered
Chosen Option : 2

Q.8 Ramesh purchased 130 books at the rate of ₹200 each and sold half of them at the rate of ₹300 each, one-fifth of them at the rate of ₹350 each and the rest at the cost price. Find his profit percentage.

- Ans
- ☒ 1. 44%
 - ☒ 2. 40%
 - ☒ 3. 35%
 - ☒ 4. 38%

Question ID : 630680429027
Option 1 ID : 6306801674155
Option 2 ID : 6306801674154
Option 3 ID : 6306801674152
Option 4 ID : 6306801674153
Status : Not Answered
Chosen Option : --

Q.9 The centres of two circles are 36 cm apart. If the radii of these two circles are 15 cm and 9 cm, respectively, then what is the sum of the lengths (in cm) of a direct common tangent and a transverse common tangent of these two circles?

Ans

✗ 1. $6\sqrt{7}(\sqrt{7} + 2)$

✗ 2. $6\sqrt{5}(\sqrt{5} + 2)$

✗ 3. $6\sqrt{7}(\sqrt{5} + 2)$

✓ 4. $6\sqrt{5}(\sqrt{7} + 2)$

Question ID : 630680196685

Option 1 ID : 630680763039

Option 2 ID : 630680763041

Option 3 ID : 630680763040

Option 4 ID : 630680763042

Status : Not Answered

Chosen Option : --

Q.10 The side BC of $\triangle ABC$ is produced to a point D. If $AC = BC$ and $\angle BAC = 70^\circ$, then find the value of $\angle ACD - \angle ABC$.

Ans

✗ 1. 60°

✓ 2. 70°

✗ 3. 45°

✗ 4. 75°

Question ID : 630680383150

Option 1 ID : 6306801493508

Option 2 ID : 6306801493509

Option 3 ID : 6306801493507

Option 4 ID : 6306801493510

Status : Not Answered

Chosen Option : --

Q.11 Rohini buys a Bluetooth headphone set for ₹1,700 from a wholesale shop and marks it at ₹2,000. Later on, she allows a discount of 40% on its sale. What is her loss or gain percentage (correct up to two decimal places)?

Ans

✗ 1. 29.41% gain

✗ 2. 25.19% loss

✗ 3. 25.19% gain

✓ 4. 29.41% loss

Question ID : 630680216677

Option 1 ID : 630680840671

Option 2 ID : 630680840674

Option 3 ID : 630680840673

Option 4 ID : 630680840672

Status : Answered

Chosen Option : 4

Q.12 It is always possible to draw a circle passing through _____ non-collinear points in a plane.

Ans ☒ 1. 3

☐ 2. 6

☐ 3. 5

☐ 4. 4

Question ID : 630680297301

Option 1 ID : 6306801156671

Option 2 ID : 6306801156674

Option 3 ID : 6306801156673

Option 4 ID : 6306801156672

Status : Answered

Chosen Option : 1

Q.13 The simple interest on a sum for 6 years is three-fifth of the sum. The rate of interest per annum is:

Ans ☐ 1. 3%

☐ 2. 7%

☒ 3. 10%

☐ 4. 5%

Question ID : 630680344606

Option 1 ID : 6306801340734

Option 2 ID : 6306801340735

Option 3 ID : 6306801340736

Option 4 ID : 6306801340733

Status : Answered

Chosen Option : 3

Q.14 The average of the squares of the first 48 natural numbers is

Ans ☒ 1. 792.17

☐ 2. 793.17

☐ 3. 794.17

☐ 4. 791.17

Question ID : 630680568975

Option 1 ID : 6306802224709

Option 2 ID : 6306802224710

Option 3 ID : 6306802224712

Option 4 ID : 6306802224711

Status : Not Answered

Chosen Option : --

Q.15 Nihira is 25 years old and Punith is 30 years old. How many years ago was the ratio of their ages 3 : 4?

Ans ☒ 1. 10 years

☐ 2. 15 years

☐ 3. 5 years

☐ 4. 20 years

Question ID : 630680426563

Option 1 ID : 6306801664343

Option 2 ID : 6306801664344

Option 3 ID : 6306801664342

Option 4 ID : 6306801664345

Status : Not Answered

Chosen Option : --

Q.16 Which of the following fractions is the largest?

$$\frac{3}{7}, \frac{7}{53}, \frac{41}{80}, \frac{29}{79}$$

Ans

✗ 1. $\frac{7}{53}$

✗ 2. $\frac{29}{79}$

✓ 3. $\frac{41}{80}$

✗ 4. $\frac{3}{7}$

Question ID : 630680797477

Option 1 ID : 6306803124866

Option 2 ID : 6306803124867

Option 3 ID : 6306803124864

Option 4 ID : 6306803124865

Status : Not Answered

Chosen Option : --

Q.17 An inlet pipe can fill a water storage tank in 11 hours and an outlet pipe can empty the completely filled tank in 15 hours .If both pipes opened simultaneously. The time taken to fill the empty tank (in hrs) is :

Ans ✗ 1. 40

✓ 2. $41\frac{1}{4}$

✗ 3. $49\frac{3}{4}$

✗ 4. $45\frac{1}{2}$

Question ID : 630680397516

Option 1 ID : 6306801549982

Option 2 ID : 6306801549983

Option 3 ID : 6306801549985

Option 4 ID : 6306801549984

Status : Answered

Chosen Option : 2

Q.18 If $x^2 + 7x + 8 = 0$, then find the value of $\frac{4x}{x^2 - 5x + 8}$.

- Ans
- ✓ 1. $-\frac{1}{3}$
 - ✗ 2. $\frac{1}{6}$
 - ✗ 3. $\frac{1}{2}$
 - ✗ 4. $-\frac{1}{4}$

Question ID : 630680413534
Option 1 ID : 6306801612961
Option 2 ID : 6306801612963
Option 3 ID : 6306801612960
Option 4 ID : 6306801612962
Status : Not Answered
Chosen Option : --

Q.19 If $a^3 + \frac{1}{a^3} = 2$ ($a > 0$), then the value of $a + \frac{1}{a}$ is:

- Ans
- ✓ 1. 2
 - ✗ 2. 4
 - ✗ 3. 1
 - ✗ 4. 3

Question ID : 630680413527
Option 1 ID : 6306801612933
Option 2 ID : 6306801612935
Option 3 ID : 6306801612932
Option 4 ID : 6306801612934
Status : Not Answered
Chosen Option : --

Q.20 Suppose P starts walking at a speed of 8 km/h. After 8 hours B started travelling on a bicycle at a speed of 24 km/h. The distance from the starting B can catch A is:

- Ans
- ✗ 1. 88 km
 - ✓ 2. 96 km
 - ✗ 3. 72 km
 - ✗ 4. 64 km

Question ID : 630680135792
Option 1 ID : 630680525887
Option 2 ID : 630680525888
Option 3 ID : 630680525889
Option 4 ID : 630680525886
Status : Not Answered
Chosen Option : --

Q.21 Find the values of 'a' and 'b' for which the system of equations $3x+y=3$ and $(a-b)x+(a+b)y=3a+b-3$ has infinite solutions.

Ans

✗ 1. $a = -\frac{3}{2}, b = 2$

✗ 2. $a = 2, b = -\frac{3}{2}$

✗ 3. $a = 3, b = -\frac{2}{3}$

✓ 4. $a = 3, b = -\frac{3}{2}$

Question ID : 630680200492

Option 1 ID : 630680777324

Option 2 ID : 630680777326

Option 3 ID : 630680777323

Option 4 ID : 630680777325

Status : Not Answered

Chosen Option : --

Q.22

The circumference of the base of the cylindrical vessel is 154 cm and its height is 49 mm. How many litres of water can it hold? (correct to three places of decimals, use $\pi = \frac{22}{7}$)

Ans

✗ 1. 2.439

✓ 2. 9.244

✗ 3. 4.329

✗ 4. 3.924

Question ID : 630680421486

Option 1 ID : 6306801644407

Option 2 ID : 6306801644408

Option 3 ID : 6306801644409

Option 4 ID : 6306801644410

Status : Not Answered

Chosen Option : --

Q.23 If the lengths of two sides of an isosceles triangle are 6 cm and 12 cm, then find the length of the third side.

Ans

✗ 1. 8 cm

✓ 2. 12 cm

✗ 3. 14 cm

✗ 4. 6 cm

Question ID : 630680200536

Option 1 ID : 630680777501

Option 2 ID : 630680777500

Option 3 ID : 630680777502

Option 4 ID : 630680777499

Status : Not Answered

Chosen Option : --

Q. If $m + 5 = \sec^2 A \cos^2 A (1 - \cos^2 A)(1 - \sin^2 A) + 5$, then find the value of m :

2
4
Ans

☒ 1. 0

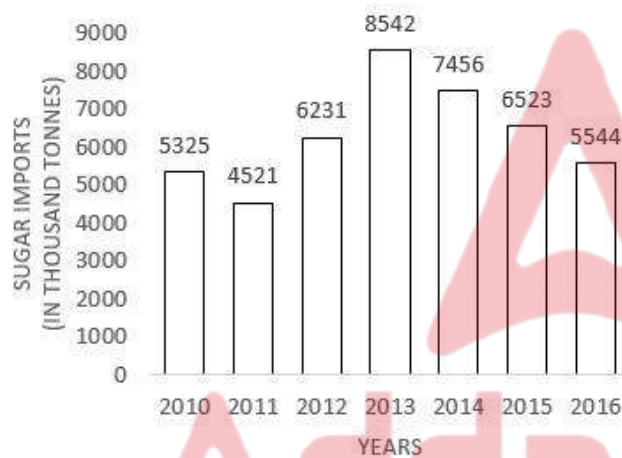
☒ 2. 5

☒ 3. 1

☒ 4. 10

Question ID : 630680401755
Option 1 ID : 6306801566786
Option 2 ID : 6306801566788
Option 3 ID : 6306801566787
Option 4 ID : 6306801566789
Status : Not Answered
Chosen Option : --

Q.25 The given bar graph shows sugar imports of a country (in thousand tonnes) over the years. Study the graph and answer the question that follows.



The average imports (in thousand tonnes) of all the years is:

Ans

☒ 1. 6469

☒ 2. 6603

☒ 3. 6433

☒ 4. 6306

Question ID : 630680397704
Option 1 ID : 6306801550776
Option 2 ID : 6306801550775
Option 3 ID : 6306801550773
Option 4 ID : 6306801550774
Status : Answered
Chosen Option : 4

Q.1 Parts of a sentence are given below in jumbled order. Arrange the parts in the correct order to form a meaningful sentence.

- P) achieve success
Q) when you
R) and polite
S) stay humble

Ans ☒ 1. RQPS
☒ 2. PQRS
☒ 3. PRQS
☒ 4. SRQP

Question ID : 630680377250
Option 1 ID : 6306801470066
Option 2 ID : 6306801470063
Option 3 ID : 6306801470065
Option 4 ID : 6306801470064
Status : Answered
Chosen Option : 4

Q.2 Select the most appropriate idiom that can substitute the underlined segment in the given sentence.
Leela was in class when the big fight happened. So, if you want to know the details, You should ask her, you will get the truth given by somebody who is directly involved and therefore likely to be accurate.

Ans ☒ 1. shooting off the cuff
☒ 2. with kid gloves
☒ 3. calling a spade a spade
☒ 4. straight from the horse's mouth

Question ID : 630680375539
Option 1 ID : 6306801463312
Option 2 ID : 6306801463311
Option 3 ID : 6306801463314
Option 4 ID : 6306801463313
Status : Not Answered
Chosen Option : --

Q.3 The following sentence has been split into four segments. Identify the segment that contains a grammatical error.
My dog / barks / very louder / at night.

Ans ☒ 1. at night
☒ 2. barks
☒ 3. very louder
☒ 4. My dog

Question ID : 630680383194
Option 1 ID : 6306801493686
Option 2 ID : 6306801493684
Option 3 ID : 6306801493685
Option 4 ID : 6306801493683
Status : Answered
Chosen Option : 3

Q.4 Select the most appropriate **ANTONYM** of the given word.
Dissolve

Ans ✓ 1. Appear

✗ 2. Fade

✗ 3. Solve

✗ 4. Vanish

Question ID : 630680517556

Option 1 ID : 6306802022621

Option 2 ID : 6306802022620

Option 3 ID : 6306802022622

Option 4 ID : 6306802022623

Status : Answered

Chosen Option : 1

Q.5 The following sentence contains a word with a spelling error. Rectify the sentence by selecting the correct spelling of the identified word from the given options.

Later on, he was truly apologetic for his misconduct in the meeting.

Ans ✗ 1. Truily

✗ 2. Trooly

✓ 3. Truly

✗ 4. Treuly

Question ID : 630680360841

Option 1 ID : 6306801405239

Option 2 ID : 6306801405240

Option 3 ID : 6306801405238

Option 4 ID : 6306801405237

Status : Not Answered

Chosen Option : --

Q.6 Select the correctly spelt word.

Ans ✗ 1. Exhileration

✗ 2. Exilaration

✗ 3. Exhillaration

✓ 4. Exhilaration

Question ID : 630680409946

Option 1 ID : 6306801598613

Option 2 ID : 6306801598614

Option 3 ID : 6306801598616

Option 4 ID : 6306801598615

Status : Answered

Chosen Option : 2

Q.7 Select the most appropriate **ANTONYM** of the given word.

Laudable

- Ans ☒ 1. Humorous
☒ 2. Deplorable
☒ 3. Commendable
☒ 4. Severe

Question ID : 630680517366
 Option 1 ID : 6306802021862
 Option 2 ID : 6306802021861
 Option 3 ID : 6306802021860
 Option 4 ID : 6306802021863
 Status : Not Answered
 Chosen Option : --

Q.8 Select the option that expresses the given sentence in active voice.
 A comic play was performed by the comedian.

- Ans ☒ 1. The comedian do perform a comic play.
☒ 2. The comedian performance a comic play.
☒ 3. The comedian performed a comic play.
☒ 4. The comedian performs a comic play.

Question ID : 630680415256
 Option 1 ID : 6306801619773
 Option 2 ID : 6306801619774
 Option 3 ID : 6306801619771
 Option 4 ID : 6306801619772
 Status : Answered
 Chosen Option : 3

Q.9 Select the option that expresses the given sentence in passive voice.

The research team is conducting experiments on a new drug that could revolutionise the treatment of the disease.

- Ans ☒ 1. Experiments are conducted on a new drug that could revolutionise the treatment of the disease from the research team.
☒ 2. Experiments were being conducted on a new drug that could revolutionise the treatment of the disease by the research team.
☒ 3. Experiments have been conducted on a new drug that could have revolutionised the treatment of the disease through the research team.
☒ 4. Experiments are being conducted on a new drug that could revolutionise the treatment of the disease by the research team.

Question ID : 630680374381
 Option 1 ID : 6306801458708
 Option 2 ID : 6306801458707
 Option 3 ID : 6306801458709
 Option 4 ID : 6306801458710
 Status : Answered
 Chosen Option : 4

Q.10 Select the most appropriate ANTONYM of the underlined word to fill in the blank.
Ram failed initially but after a few years, he _____ in every field.

- Ans ☒ 1. enjoyed
☒ 2. elevated
☒ 3. succeeded
☒ 4. reserved

Question ID : 630680167047
Option 1 ID : 630680647051
Option 2 ID : 630680647050
Option 3 ID : 630680647048
Option 4 ID : 630680647049
Status : Answered
Chosen Option : 3

Q.11 The following sentence has been split into four segments. Identify the segment that contains a grammatical error.

The company specialises at / designing, crafting and manufacturing / exquisite, high-quality furniture / of exceptional craftsmanship.

- Ans ☒ 1. designing, crafting and manufacturing
☒ 2. The company specialises at
☒ 3. of exceptional craftsmanship
☒ 4. exquisite, high-quality furniture

Question ID : 630680415189
Option 1 ID : 6306801619504
Option 2 ID : 6306801619503
Option 3 ID : 6306801619506
Option 4 ID : 6306801619505
Status : Not Answered
Chosen Option : --

Q.12 Select the most appropriate synonym of the given word.

Derogatory

- Ans ☒ 1. Delegation
☒ 2. Insulting
☒ 3. Salutary
☒ 4. Derivative

Question ID : 630680360816
Option 1 ID : 6306801405140
Option 2 ID : 6306801405139
Option 3 ID : 6306801405138
Option 4 ID : 6306801405137
Status : Not Answered
Chosen Option : --

Q.13 Select the most appropriate option to fill in the blank.
Raj is very interested in studying human psychology, so he decided to pursue his master's degree in _____.

- Ans** ☒ 1. Archaeology
☒ 2. Psychology
☒ 3. Philosophy
☒ 4. Anatomy

Question ID : 630680328427
Option 1 ID : 6306801277679
Option 2 ID : 6306801277677
Option 3 ID : 6306801277680
Option 4 ID : 6306801277678
Status : Answered
Chosen Option : 3

Q.14 Select the most appropriate option that can substitute the underlined part in the following sentence.
The entire speech of the revivalist fell flat with the crowd that was present there.

- Ans** ☒ 1. had somewhat of a result on
☒ 2. had a great impact on
☒ 3. had moderate influence on
☒ 4. had no effect on

Question ID : 630680317824
Option 1 ID : 6306801236392
Option 2 ID : 6306801236389
Option 3 ID : 6306801236391
Option 4 ID : 6306801236390
Status : Answered
Chosen Option : 4

Q.15 Select the option that can be used as a one-word substitute for the given group of words.
A performer's first public appearance

- Ans** ☒ 1. Foundation
☒ 2. Premise
☒ 3. Dawn
☒ 4. Debut

Question ID : 630680414755
Option 1 ID : 6306801617765
Option 2 ID : 6306801617763
Option 3 ID : 6306801617764
Option 4 ID : 6306801617766
Status : Not Answered
Chosen Option : --

Q.16 Select the option that can be used as a one-word substitute for the given group of words.
To go through an area making a lot of noise and causing damage

- Ans**
- ☒ 1. Violence
 - ☒ 2. Cacophony
 - ☒ 3. Rampage
 - ☒ 4. Brutality

Question ID : 630680414624
Option 1 ID : 6306801617240
Option 2 ID : 6306801617242
Option 3 ID : 6306801617239
Option 4 ID : 6306801617241
Status : Answered
Chosen Option : 2

Q.17 Parts of a sentence are given below in jumbled order. Arrange the parts in the correct order to form a meaningful sentence.
(A) and was searching for them
(B) the grandmother couldn't find
(C) all around the house
(D) placed them on her head
(E) her spectacles because she had

- Ans**
- ☒ 1. BADEC
 - ☒ 2. CABED
 - ☒ 3. BEDAC
 - ☒ 4. ADBEC

Question ID : 630680360059
Option 1 ID : 6306801402181
Option 2 ID : 6306801402184
Option 3 ID : 6306801402182
Option 4 ID : 6306801402183
Status : Answered
Chosen Option : 3

Q.18 Select the option that can substitute/replace the bracketed word correctly and complete the sentence.

If he runs, he (get) there in time.

- Ans**
- ☒ 1. got there in time
 - ☒ 2. will get
 - ☒ 3. is getting
 - ☒ 4. has to get

Question ID : 630680176613
Option 1 ID : 630680684672
Option 2 ID : 630680684673
Option 3 ID : 630680684675
Option 4 ID : 630680684674
Status : Answered
Chosen Option : 2

Q.19 Select the most appropriate synonym of the underlined word.

We went to a legitimate Mexican restaurant for my birthday, where they served cuisine like you would find in Mexico.

Ans ☒ 1. productive

☒ 2. genuine

☒ 3. fictitious

☒ 4. falsified

Question ID : 630680195035

Option 1 ID : 630680756632

Option 2 ID : 630680756630

Option 3 ID : 630680756629

Option 4 ID : 630680756631

Status : Not Answered

Chosen Option : --

Q.20 Select the most appropriate synonym of the underlined word.

Our university is affiliated with various institutes all over the world.

Ans ☒ 1. disparate

☒ 2. unlike

☒ 3. diverse

☒ 4. allied

Question ID : 630680183597

Option 1 ID : 630680711400

Option 2 ID : 630680711398

Option 3 ID : 630680711399

Option 4 ID : 630680711397

Status : Not Answered

Chosen Option : --

Comprehension:

In the following passage, some words have been deleted. Read the passage carefully and select the most appropriate option to fill in each blank.

The Kuno Palpur National Park, located in Madhya Pradesh's Chambal (1) _____, has an area of 750 square kilometres. It now has leopards, jackals, spotted deer, sambhar, neelgai, chinkara, wild boar, and four-horned antelope, making it a perfect (2) _____ base for felids. Despite strong objections from Gujarat, which (3) _____ that lions were part of the state's heritage, that MP had a poor (4) _____ in wildlife management, and that Kuno Palpur had other big cat species that would (5) _____ lion relocation, the sanctuary was chosen for the lion reintroduction project in 2013.

SubQuestion No : 21

Q.21 Select the most appropriate option to fill in blank number 1.

Ans ☒ 1. reason

☒ 2. river

☒ 3. reign

☒ 4. region

Question ID : 630680159206

Option 1 ID : 630680616290

Option 2 ID : 630680616291

Option 3 ID : 630680616289

Option 4 ID : 630680616288

Status : Answered

Chosen Option : 3

Comprehension:

In the following passage, some words have been deleted. Read the passage carefully and select the most appropriate option to fill in each blank.

The Kuno Palpur National Park, located in Madhya Pradesh's Chambal (1)_____, has an area of 750 square kilometres. It now has leopards, jackals, spotted deer, sambhar, neelgai, chinkara, wild boar, and four-horned antelope, making it a perfect (2)_____ base for felids. Despite strong objections from Gujarat, which (3)_____ that lions were part of the state's heritage, that MP had a poor (4)_____ in wildlife management, and that Kuno Palpur had other big cat species that would (5)_____ lion relocation, the sanctuary was chosen for the lion reintroduction project in 2013.

SubQuestion No : 22

Q.22 Select the most appropriate option to fill in blank number 2.

- Ans
- ☒ 1. aid
 - ☒ 2. fun
 - ☒ 3. guard
 - ☒ 4. prey

Question ID : 630680159207

Option 1 ID : 630680616295

Option 2 ID : 630680616292

Option 3 ID : 630680616293

Option 4 ID : 630680616294

Status : Not Answered

Chosen Option : --

Comprehension:

In the following passage, some words have been deleted. Read the passage carefully and select the most appropriate option to fill in each blank.

The Kuno Palpur National Park, located in Madhya Pradesh's Chambal (1)_____, has an area of 750 square kilometres. It now has leopards, jackals, spotted deer, sambhar, neelgai, chinkara, wild boar, and four-horned antelope, making it a perfect (2)_____ base for felids. Despite strong objections from Gujarat, which (3)_____ that lions were part of the state's heritage, that MP had a poor (4)_____ in wildlife management, and that Kuno Palpur had other big cat species that would (5)_____ lion relocation, the sanctuary was chosen for the lion reintroduction project in 2013.

SubQuestion No : 23

Q.23 Select the most appropriate option to fill in blank number 3.

- Ans
- ☒ 1. restricted
 - ☒ 2. adjourned
 - ☒ 3. accused
 - ☒ 4. claimed

Question ID : 630680159208

Option 1 ID : 630680616296

Option 2 ID : 630680616298

Option 3 ID : 630680616299

Option 4 ID : 630680616297

Status : Not Answered

Chosen Option : --

Comprehension:

In the following passage, some words have been deleted. Read the passage carefully and select the most appropriate option to fill in each blank.

The Kuno Palpur National Park, located in Madhya Pradesh's Chambal (1)_____, has an area of 750 square kilometres. It now has leopards, jackals, spotted deer, sambhar, neelgai, chinkara, wild boar, and four-horned antelope, making it a perfect (2)_____ base for felids. Despite strong objections from Gujarat, which (3)_____ that lions were part of the state's heritage, that MP had a poor (4)_____ in wildlife management, and that Kuno Palpur had other big cat species that would (5)_____ lion relocation, the sanctuary was chosen for the lion reintroduction project in 2013.

SubQuestion No : 24

Q.24 Select the most appropriate option to fill in blank number 4.

- Ans
- ☒ 1. summary
 - ☒ 2. gaze
 - ☒ 3. record
 - ☒ 4. loss

Question ID : 630680159209

Option 1 ID : 630680616301

Option 2 ID : 630680616302

Option 3 ID : 630680616300

Option 4 ID : 630680616303

Status : Answered

Chosen Option : 3

Comprehension:

In the following passage, some words have been deleted. Read the passage carefully and select the most appropriate option to fill in each blank.

The Kuno Palpur National Park, located in Madhya Pradesh's Chambal (1)_____, has an area of 750 square kilometres. It now has leopards, jackals, spotted deer, sambhar, neelgai, chinkara, wild boar, and four-horned antelope, making it a perfect (2)_____ base for felids. Despite strong objections from Gujarat, which (3)_____ that lions were part of the state's heritage, that MP had a poor (4)_____ in wildlife management, and that Kuno Palpur had other big cat species that would (5)_____ lion relocation, the sanctuary was chosen for the lion reintroduction project in 2013.

SubQuestion No : 25

Q.25 Select the most appropriate option to fill in blank number 5.

- Ans
- ☒ 1. Jeopardise
 - ☒ 2. Innocuous
 - ☒ 3. channelise
 - ☒ 4. safeguard

Question ID : 630680159210

Option 1 ID : 630680616307

Option 2 ID : 630680616306

Option 3 ID : 630680616305

Option 4 ID : 630680616304

Status : Not Answered

Chosen Option : --