

Combined Graduate Level Examination 2024 Tier I

Roll Number	
Candidate Name	
Venue Name	
Exam Date	26/09/2024
Exam Time	4:00 PM - 5:00 PM
Subject	Combined Graduate Level Examination Tier I

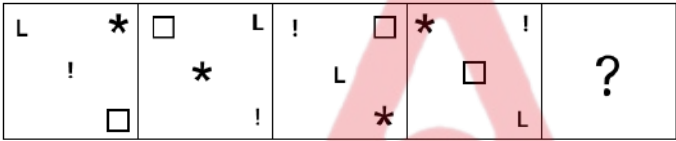
Section : General Intelligence and Reasoning

Q.1 Four letter-clusters have been given, out of which three are alike in some manner and one is different. Select the letter-cluster that is different.
Note: The odd one out is not based on the number of consonants/vowels or their position in the letter cluster.

- Ans
- ☒ 1. YWA
 - ☒ 2. JHL
 - ☒ 3. LJO
 - ☒ 4. OMQ

Question ID : 63068083230
Option 1 ID : 630680322783
Option 2 ID : 630680322780
Option 3 ID : 630680322781
Option 4 ID : 630680322782
Status : Answered
Chosen Option : 3

Q.2 Identify the figure given in the options which when put in place of the question mark (?) will logically complete the series?



Ans

- ☒ 1.
- ☒ 2.
- ☒ 3.
- ☒ 4.

Question ID : 630680471503
Option 1 ID : 6306801841728
Option 2 ID : 6306801841726
Option 3 ID : 6306801841727
Option 4 ID : 6306801841729
Status : Answered
Chosen Option : 3

Test Prime

**ALL EXAMS,
ONE SUBSCRIPTION**



70,000+
Mock Tests



**Personalised
Report Card**



**Unlimited
Re-Attempt**



600+
Exam Covered



**Previous Year
Papers**



**500%
Refund**



ATTEMPT FREE MOCK NOW

Q.3 624 is related to 160 following a certain logic. Following the same logic, 448 is related to 116. To which of the following is 528 related, following the same logic? (NOTE : Operations should be performed on the whole numbers, without breaking down the numbers into its constituent digits. E.g. 13 – Operations on 13 such as adding /deleting /multiplying etc., to 13 can be performed. Breaking down 13 into 1 and 3 and then performing mathematical operations on 1 and 3 is not allowed.)

Ans ☒ 1. 130

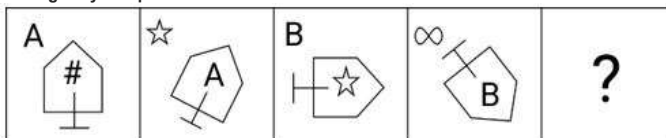
☒ 2. 136

☒ 3. 148

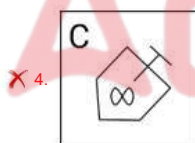
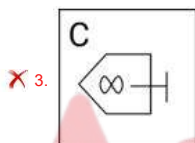
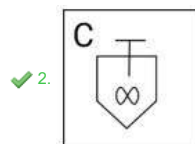
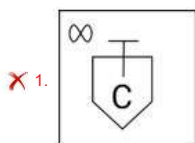
☒ 4. 128

Question ID : 630680326609
Option 1 ID : 6306801270521
Option 2 ID : 6306801270523
Option 3 ID : 6306801270524
Option 4 ID : 6306801270522
Status : Answered
Chosen Option : 2

Q.4 Select the figure from among the given options that can replace the question mark (?) and logically complete the series.



Ans



Question ID : 630680332548
Option 1 ID : 6306801293632
Option 2 ID : 6306801293630
Option 3 ID : 6306801293631
Option 4 ID : 6306801293629
Status : Answered
Chosen Option : 2

Q.5 What will come in the place of the question mark (?) in the following equation if '+' and 'x' are interchanged and '-' and '÷' are interchanged?
 $95 - 19 \times 4 + 6 \div 16 = ?$

Ans ☒ 1. 11

☒ 2. 14

☒ 3. 12

☒ 4. 13

Question ID : 630680336513
Option 1 ID : 6306801308773
Option 2 ID : 6306801308776
Option 3 ID : 6306801308774
Option 4 ID : 6306801308775
Status : Answered
Chosen Option : 4

Q.6 Select the correct mirror image of the given figure when the mirror is placed at MN.



- Ans
- ✓ 1. 5aē47P1Y
 - ✗ 2. YrP74ea5
 - ✗ 3. 5aē47P1Y
 - ✗ 4. 5aē47P1Y

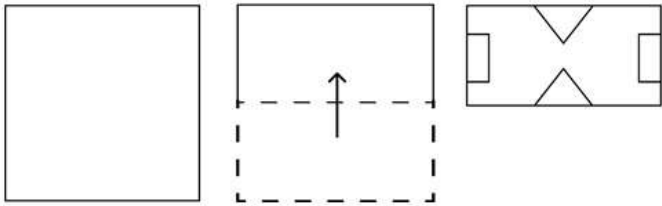
Question ID : 630680325826
Option 1 ID : 6306801267498
Option 2 ID : 6306801267497
Option 3 ID : 6306801267499
Option 4 ID : 6306801267500
Status : Answered
Chosen Option : 1

Q.7 80 is related to 99 following certain logic. Following the same logic, 0 is related to 3. To which of the following numbers is 35 related, following the same logic? (NOTE : Operations should be performed on the whole numbers, without breaking down the numbers into its constituent digits. E.g. 13 – Operations on 13 such as adding /deleting /multiplying etc., to 13 can be performed. Breaking down 13 into 1 and 3 and then performing mathematical operations on 1 and 3 is not allowed.)

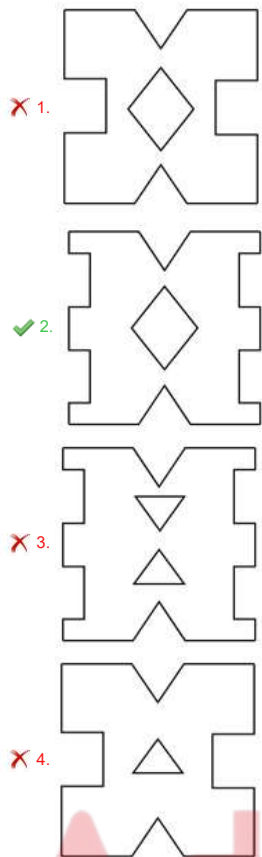
- Ans
- ✗ 1. 42
 - ✓ 2. 48
 - ✗ 3. 44
 - ✗ 4. 46

Question ID : 630680162509
Option 1 ID : 630680629332
Option 2 ID : 630680629335
Option 3 ID : 630680629333
Option 4 ID : 630680629334
Status : Answered
Chosen Option : 2

Q.8 A square sheet of paper is folded along the dotted line successively along the directions shown and is then punched in the last. How would the paper look when unfolded?



Ans



✗ 1.

✓ 2.

✗ 3.

✗ 4.

Question ID : 630680387115
Option 1 ID : 6306801509173
Option 2 ID : 6306801509170
Option 3 ID : 6306801509171
Option 4 ID : 6306801509172
Status : Answered
Chosen Option : 2

Q.9 What will come in place of the question mark (?) in the following equation, if '+' and '-' are interchanged and 'x' and '÷' are interchanged?
 $2736 \times 8 - 55 + 105 \div 2 = ?$

- Ans
- ✗ 1. 177
 - ✗ 2. 137
 - ✗ 3. 127
 - ✓ 4. 187

Question ID : 630680411714
Option 1 ID : 6306801605693
Option 2 ID : 6306801605692
Option 3 ID : 6306801605691
Option 4 ID : 6306801605694
Status : Answered
Chosen Option : 4

Q.10 Which of the following terms will replace the question mark (?) in the given series?
FHVQ, IJSO, LLPM, ONMK, ?

- Ans
- ☒ 1. ROJI
 - ☒ 2. RPJI
 - ☒ 3. QPJI
 - ☒ 4. RPKJ

Question ID : 630680416895
Option 1 ID : 6306801626346
Option 2 ID : 6306801626344
Option 3 ID : 6306801626345
Option 4 ID : 6306801626343
Status : Answered
Chosen Option : 2

Q.11 Select the option that is related to the fifth letter-cluster in the same way as the second letter-cluster is related to the first letter-cluster and the fourth letter-cluster is related to the third letter-cluster.
WEL: DVO :: FOR: ULI :: SDX:?

- Ans
- ☒ 1. HWC
 - ☒ 2. GXC
 - ☒ 3. HXC
 - ☒ 4. GWC

Question ID : 630680416751
Option 1 ID : 6306801625768
Option 2 ID : 6306801625770
Option 3 ID : 6306801625769
Option 4 ID : 6306801625767
Status : Answered
Chosen Option : 1

Q.12 In a certain code language, 'open the door' is coded as 'wu ko tn' and 'door is solid' is coded as 'ko gk mb'. How is 'door' coded in the given language?

- Ans
- ☒ 1. wu
 - ☒ 2. tn
 - ☒ 3. ko
 - ☒ 4. gk

Question ID : 630680812197
Option 1 ID : 6306803182238
Option 2 ID : 6306803182239
Option 3 ID : 6306803182237
Option 4 ID : 6306803182240
Status : Answered
Chosen Option : 3

Q.13 Select the option that represents the letters that, when sequentially placed from left to right in the blanks below, will complete the letter series.
_ V D W Y _ D W Y V _ W Y _ D _

- Ans
- ☒ 1. YVDVW
 - ☒ 2. YWDVW
 - ☒ 3. YVYVW
 - ☒ 4. YVDVY

Question ID : 630680261797
Option 1 ID : 6306801016846
Option 2 ID : 6306801016843
Option 3 ID : 6306801016844
Option 4 ID : 6306801016845
Status : Answered
Chosen Option : 1

Q.14 In a certain code language,

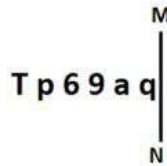
'A + B' means 'A is the mother of B';
'A - B' means 'A is the brother of B';
'A × B' means 'A is the wife of B' and
'A ÷ B' means 'A is the father of B'.

Based on the above, how is 4 related to 1 if '4 × 3 - 2 - 1'?

- Ans ☒ 1. Sister
☒ 2. Brother's wife
☒ 3. Father's sister
☒ 4. Mother

Question ID : 630680324898
Option 1 ID : 6306801263991
Option 2 ID : 6306801263992
Option 3 ID : 6306801263989
Option 4 ID : 6306801263990
Status : Answered
Chosen Option : 2

Q.15 Select the correct mirror image of the given figure when the mirror is placed at MN as shown below.



- Ans ☒ 1. p e e 9 q T
☒ 2. p s e d q T
☒ 3. q s 6 9 q T
☒ 4. p s e d q L

Question ID : 630680356652
Option 1 ID : 6306801388612
Option 2 ID : 6306801388611
Option 3 ID : 6306801388610
Option 4 ID : 6306801388609
Status : Answered
Chosen Option : 2

Q.16 Six letters I, O, A, Y, Z and X are written on different faces of a dice. Two positions of this dice are shown in the figures below. Find the letter on the face opposite to O.



- Ans ☒ 1. Z
☒ 2. Y
☒ 3. A
☒ 4. X

Question ID : 630680222369
Option 1 ID : 630680863307
Option 2 ID : 630680863309
Option 3 ID : 630680863310
Option 4 ID : 630680863308
Status : Answered
Chosen Option : 2

Q.17 The position of how many letters will remain unchanged if all the letters in the word MOLTEN are arranged in English alphabetical order?

- Ans ☒ 1. Two
☒ 2. Three
☒ 3. None
☒ 4. One

Question ID : 630680348541
Option 1 ID : 6306801356455
Option 2 ID : 6306801356456
Option 3 ID : 6306801356453
Option 4 ID : 6306801356454
Status : Answered
Chosen Option : 3

Q.18 In a certain code language, 'VTPM' is coded as '37' and 'CGNK' is coded as '73'. How will 'MVLG' be coded in the same language?

- Ans
- ☐ 1. 64
 - ☐ 2. 81
 - ☐ 3. 72
 - ☒ 4. 58

Question ID : 630680416230
Option 1 ID : 6306801623683
Option 2 ID : 6306801623686
Option 3 ID : 6306801623685
Option 4 ID : 6306801623684
Status : Answered
Chosen Option : 4

Q.19 Select the number from among the given options that can replace the question mark (?) in the following series.
672, 677, 686, 699, 716, ?

- Ans
- ☐ 1. 749
 - ☒ 2. 737
 - ☐ 3. 747
 - ☐ 4. 757

Question ID : 630680411892
Option 1 ID : 6306801606406
Option 2 ID : 6306801606403
Option 3 ID : 6306801606404
Option 4 ID : 6306801606405
Status : Answered
Chosen Option : 2

Q.20 Three of the following number-pairs are alike in some manner and hence form a group. Which number-pair does not belong to that group?
(NOTE: Operations should be performed on the whole numbers, without breaking down the numbers into its constituent digits. E.g. 13 – Operations on 13 such as adding/subtracting/multiplying etc. to 13 can be performed. Breaking down 13 into 1 and 3 and then performing mathematical operations on 1 and 3 is not allowed.)

- Ans
- ☐ 1. 8 – 100
 - ☐ 2. 6 – 64
 - ☒ 3. 12 – 225
 - ☐ 4. 9 – 121

Question ID : 630680349006
Option 1 ID : 6306801358314
Option 2 ID : 6306801358315
Option 3 ID : 6306801358316
Option 4 ID : 6306801358313
Status : Not Answered
Chosen Option : --

Q.21 Select the option that is related to the fifth letter cluster in the same way as the second letter cluster is related to the first letter cluster and the fourth letter cluster is related to the third letter cluster.
IMPROVE : RPMIEVO :: HISTORY : TSIHYRO :: JOURNEY : ?

- Ans
- ☐ 1. NEYJOUR
 - ☐ 2. YENRUQJ
 - ☒ 3. RUQJYEN
 - ☐ 4. JOURYEN

Question ID : 630680416458
Option 1 ID : 6306801624597
Option 2 ID : 6306801624596
Option 3 ID : 6306801624598
Option 4 ID : 6306801624595
Status : Answered
Chosen Option : 3

Q.22 Three statements are given followed by three conclusions numbered I, II and III. Assuming the statements to be true, even if they seem to be at variance with commonly known facts, decide which of the conclusions logically follow(s) from the statements.

Statements:
Some cups are glasses.
No glass is a stone.
All stones are metals.

Conclusions:
I. All cups can never be stones.
II. No cup is a metal.
III. All metals can never be glasses.

- Ans ☒ 1. Only II and III conclusion follow
☒ 2. Only I and III conclusion follow
☒ 3. Only conclusion I follows
☒ 4. All I, II and III conclusion follow

Question ID : 630680416214
Option 1 ID : 6306801623622
Option 2 ID : 6306801623621
Option 3 ID : 6306801623620
Option 4 ID : 6306801623619
Status : Answered
Chosen Option : 1

Q.23 In the following number-pairs, the second number is obtained by applying certain mathematical operations to the first number. Select the set in which the numbers are related in the same way as are the numbers of the following sets.
(NOTE : Operations should be performed on the whole numbers, without breaking down the numbers into its constituent digits. E.g. 13 – Operations on 13 such as adding /deleting /multiplying etc., to 13 can be performed. Breaking down 13 into 1 and 3 and then performing mathematical operations on 1 and 3 is not allowed.)
(96, 29)
(112, 33)

- Ans ☒ 1. (188, 52)
☒ 2. (176, 45)
☒ 3. (108, 30)
☒ 4. (204, 55)

Question ID : 630680338905
Option 1 ID : 6306801318212
Option 2 ID : 6306801318211
Option 3 ID : 6306801318210
Option 4 ID : 6306801318209
Status : Not Answered
Chosen Option : --

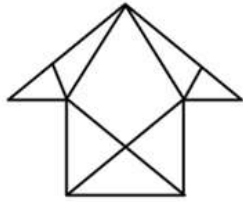
Q.24 In this question, three statements are given, followed by three conclusions numbered I, II and III. Assuming the statements to be true, even if they seem to be at variance with commonly known facts, decide which of the conclusions logically follow(s) from the statements.

Statements:
All phones are TVs.
Some TVs are big.
Some big are cars.
Conclusions:
I. Some TVs are phones.
II. Some big are TVs.
III. All big are cars.

- Ans ☒ 1. Only conclusions II and III follow.
☒ 2. Only conclusions I and II follow.
☒ 3. None of the conclusions follows.
☒ 4. Only conclusion III follows.

Question ID : 630680416523
Option 1 ID : 6306801624856
Option 2 ID : 6306801624855
Option 3 ID : 6306801624858
Option 4 ID : 6306801624857
Status : Answered
Chosen Option : 2

Q.25 How many triangles are there in the given figure?



- Ans
- ☒ 1. 10
 - ☒ 2. 11
 - ☒ 3. 13
 - ☒ 4. 12

Question ID : 630680189144
Option 1 ID : 630680733385
Option 2 ID : 630680733388
Option 3 ID : 630680733387
Option 4 ID : 630680733386
Status : Answered
Chosen Option : 4

Section : General Awareness

Q.1 In which of the following places did Mahatma Gandhi, along with other Indians, establish the Natal Congress to fight against racial discrimination?

- Ans
- ☒ 1. South Africa
 - ☒ 2. France
 - ☒ 3. England
 - ☒ 4. India

Question ID : 630680511522
Option 1 ID : 6306801999212
Option 2 ID : 6306801999211
Option 3 ID : 6306801999210
Option 4 ID : 6306801999213
Status : Answered
Chosen Option : 1

Q.2 Yakshagan is a folk dance of which of the following states?

- Ans
- ☒ 1. Madhya Pradesh
 - ☒ 2. West Bengal
 - ☒ 3. Odisha
 - ☒ 4. Karnataka

Question ID : 630680402074
Option 1 ID : 6306801567989
Option 2 ID : 6306801567988
Option 3 ID : 6306801567990
Option 4 ID : 6306801567991
Status : Answered
Chosen Option : 4

Q.3 What is the unit of specific resistance?

- Ans
- ☒ 1. Coulomb
 - ☒ 2. Ampere
 - ☒ 3. Ohm meter
 - ☒ 4. Farad

Question ID : 630680111955
Option 1 ID : 630680433549
Option 2 ID : 630680433546
Option 3 ID : 630680433548
Option 4 ID : 630680433547
Status : Answered
Chosen Option : 3

Q.4 UPSC is a Constitutional Body to conduct examinations for appointments to the services of the Union and the services of the State, respectively, under Article _____.

- Ans
- ☐ 1. 332
 - ☐ 2. 328
 - ☐ 3. 324
 - ☒ 4. 320

Question ID : 630680195832
Option 1 ID : 630680759774
Option 2 ID : 630680759773
Option 3 ID : 630680759772
Option 4 ID : 630680759771
Status : Not Answered
Chosen Option : --

Q.5 The Tripartite struggle happened among the Palas, the Pratiharas and the _____.

- Ans
- ☒ 1. Rashtrakutas
 - ☐ 2. Maukharis
 - ☐ 3. Chandelas
 - ☐ 4. Chalukyas

Question ID : 630680412293
Option 1 ID : 6306801607996
Option 2 ID : 6306801607997
Option 3 ID : 6306801607998
Option 4 ID : 6306801607995
Status : Answered
Chosen Option : 1

Q.6 Guru Ghasidas led which of the following movements to improve the social condition of leather workers in British India?

- Ans
- ☐ 1. Satyashodhak Samaj
 - ☒ 2. Satnami Movement
 - ☐ 3. Aravipuram Movement
 - ☐ 4. Nirankari Movement

Question ID : 630680412372
Option 1 ID : 6306801608312
Option 2 ID : 6306801608313
Option 3 ID : 6306801608314
Option 4 ID : 6306801608311
Status : Answered
Chosen Option : 3

Q.7 Subansiri, Jia Bharali, Dhansiri and Puthimari are the major tributaries of which river?

- Ans
- ☐ 1. Mahanadi
 - ☐ 2. Godavari
 - ☐ 3. Bhagirathi
 - ☒ 4. Brahmaputra

Question ID : 630680302924
Option 1 ID : 6306801178358
Option 2 ID : 6306801178360
Option 3 ID : 6306801178361
Option 4 ID : 6306801178359
Status : Not Answered
Chosen Option : --

Q.8 The first Indian Olympic Games was hosted by which of the following cities?

- Ans
- ☐ 1. Bombay
 - ☐ 2. Allahabad
 - ☐ 3. Madras
 - ☒ 4. Lahore

Question ID : 630680510795
Option 1 ID : 6306801996312
Option 2 ID : 6306801996311
Option 3 ID : 6306801996313
Option 4 ID : 6306801996310
Status : Answered
Chosen Option : 1

Q.9 Which law states that endothermic animals from cold climates have smaller extremities or appendages than closely related species from warm climates?

- Ans**
- ☒ 1. Allen's rule
 - ☐ 2. Reich's rule
 - ☐ 3. Harper's rule
 - ☐ 4. Moller's rule

Question ID : 630680407459
 Option 1 ID : 6306801588775
 Option 2 ID : 6306801588776
 Option 3 ID : 6306801588774
 Option 4 ID : 6306801588777
 Status : Answered
 Chosen Option : 3

Q.10 What gave a major impetus to the cotton textile industry in India after Independence?

- Ans**
- ☐ 1. Export of raw cotton to England
 - ☐ 2. Partition of India in 1947
 - ☒ 3. Swadeshi movement
 - ☐ 4. Development of railway network

Question ID : 630680283353
 Option 1 ID : 6306801101537
 Option 2 ID : 6306801101538
 Option 3 ID : 6306801101535
 Option 4 ID : 6306801101536
 Status : Answered
 Chosen Option : 3

Q.11 Pushyabhuti dynasty, after Prabhakarvardhana, strengthened its position in the regions of Punjab and Haryana after defeating which of the following dynasties?

- Ans**
- ☐ 1. Chalukyas
 - ☒ 2. Hunas
 - ☐ 3. Maitrakas
 - ☐ 4. Maukharis

Question ID : 630680412525
 Option 1 ID : 6306801608924
 Option 2 ID : 6306801608923
 Option 3 ID : 6306801608926
 Option 4 ID : 6306801608925
 Status : Not Answered
 Chosen Option : --

Q.12 Which type of well-managed industry was established in India at the time of independence?

- Ans**
- ☐ 1. Cement and Sugar
 - ☒ 2. Steel and Cotton
 - ☐ 3. Steel and Electronics
 - ☐ 4. Electronics and Electricals

Question ID : 630680410675
 Option 1 ID : 6306801601457
 Option 2 ID : 6306801601456
 Option 3 ID : 6306801601459
 Option 4 ID : 6306801601458
 Status : Answered
 Chosen Option : 2

Q.13 Each of the following statements includes two terms. In three cases, the two terms mean the same as each other. In which of the following cases do the two terms NOT mean the same as each other?

- Ans**
- ☐ 1. The base period and the reference period
 - ☒ 2. Changes in real GDP and the GDP deflator
 - ☐ 3. Nominal GDP and GDP at current prices
 - ☐ 4. Real GDP and GDP at constant prices

Question ID : 630680324081
 Option 1 ID : 6306801260819
 Option 2 ID : 6306801260820
 Option 3 ID : 6306801260817
 Option 4 ID : 6306801260818
 Status : Not Answered
 Chosen Option : --

Q.14 Vishu festival is celebrated in which of the following states?

- Ans ☐ 1. Madhya Pradesh & Rajasthan
☐ 2. Gujarat and Maharashtra
☐ 3. Kerala And Karnataka
☒ 4. Kerala And Tamil Nadu

Question ID : 630680158755
Option 1 ID : 630680614512
Option 2 ID : 630680614514
Option 3 ID : 630680614515
Option 4 ID : 630680614513
Status : Answered
Chosen Option : 3

Q.15 Which of the following statements is INCORRECT regarding water remaining colder in an earthen pot (matka)?

- Ans ☐ 1. The earthen pot is porous.
☐ 2. The water oozes out through the pores in an earthen pot.
☒ 3. Environmental water vapour enters the pot through pores.
☐ 4. Water gets evaporated at the surface of the earthen pot.

Question ID : 630680517148
Option 1 ID : 6306802020988
Option 2 ID : 6306802020989
Option 3 ID : 6306802020991
Option 4 ID : 6306802020990
Status : Answered
Chosen Option : 3

Q.16 In February 2023, BVR Subrahmanyam was appointed as the _____.

- Ans ☐ 1. Comptroller General Of India
☒ 2. CEO NITI Ayog
☐ 3. Chief Vigilance Commissioner
☐ 4. Chief Election Commissioner

Question ID : 630680413033
Option 1 ID : 6306801610956
Option 2 ID : 6306801610955
Option 3 ID : 6306801610957
Option 4 ID : 6306801610958
Status : Not Answered
Chosen Option : --

Q.17 Which of the following is a key focus area of the 'Amrit Dharohar' scheme launched by the Prime Minister Narendra Modi on World Environment Day, 2023?

- Ans ☐ 1. Development of rural infrastructure
☐ 2. Preservation of ancient Indian heritage sites
☐ 3. Promotion of organic farming
☒ 4. To promote values of local communities in conserving wetland ecosystem

Question ID : 630680413087
Option 1 ID : 6306801611174
Option 2 ID : 6306801611173
Option 3 ID : 6306801611172
Option 4 ID : 6306801611171
Status : Answered
Chosen Option : 4

Q.18 Which of the following states suffers from 'Loo'?

- Ans ☐ 1. Karnataka
☐ 2. Assam
☒ 3. Rajasthan
☐ 4. Kerala

Question ID : 630680328140
Option 1 ID : 6306801276531
Option 2 ID : 6306801276530
Option 3 ID : 6306801276532
Option 4 ID : 6306801276529
Status : Not Answered
Chosen Option : --

Q.19 The National Youth Policy 2014 defines youth as population between the ages of _____ and _____.

- Ans
- ☐ 1. 15; 25
 - ☐ 2. 20; 29
 - ☒ 3. 15; 29
 - ☐ 4. 10; 19

Question ID : 630680409648
Option 1 ID : 6306801597423
Option 2 ID : 6306801597421
Option 3 ID : 6306801597424
Option 4 ID : 6306801597422
Status : Not Answered
Chosen Option : --

Q.20 Which television channel presents the IMMIES Awards every year with an aim to reward the best talent in the Indian music industry?

- Ans
- ☐ 1. 9XM
 - ☒ 2. MTV
 - ☐ 3. Channel V
 - ☐ 4. B4U Music

Question ID : 630680511792
Option 1 ID : 6306802000140
Option 2 ID : 6306802000141
Option 3 ID : 6306802000138
Option 4 ID : 6306802000139
Status : Not Answered
Chosen Option : --

Q.21 At which Olympic games did Abhinav Bindra win the gold medal?

- Ans
- ☐ 1. Athens 2004
 - ☐ 2. Rio 2016
 - ☒ 3. Beijing 2008
 - ☐ 4. London 2012

Question ID : 630680435729
Option 1 ID : 6306801700837
Option 2 ID : 6306801700839
Option 3 ID : 6306801700840
Option 4 ID : 6306801700838
Status : Not Answered
Chosen Option : --

Q.22 Which of the following options best describes the primary cause of the per capita income decline?

- Ans
- ☐ 1. Equitable distribution of income
 - ☒ 2. Increase in the population growth
 - ☐ 3. Decline in the population growth
 - ☐ 4. Decline in the gross domestic product

Question ID : 630680314145
Option 1 ID : 6306801222385
Option 2 ID : 6306801222386
Option 3 ID : 6306801222387
Option 4 ID : 6306801222388
Status : Not Answered
Chosen Option : --

Q.23 Which of the following organisations is associated with the development of the web version: e-GOPALA application?

- Ans
- ☐ 1. National Institute of Agricultural Extension Management
 - ☐ 2. Indian Council of Agricultural Research
 - ☒ 3. National Dairy Development Board (NDDB)
 - ☐ 4. National Dairy Research Institute (NDRI)

Question ID : 63068099702
Option 1 ID : 630680387504
Option 2 ID : 630680387505
Option 3 ID : 630680387507
Option 4 ID : 630680387506
Status : Not Answered
Chosen Option : --

Q.24 Which Article of the Indian Constitution mentions about the 'Promotion of educational and economic interests of Scheduled Castes, Scheduled Tribes and other weaker sections'?

- Ans
- ☒ 1. Article 45
 - ☒ 2. Article 47
 - ☒ 3. Article 48
 - ☒ 4. Article 46

Question ID : 630680408252
Option 1 ID : 6306801591904
Option 2 ID : 6306801591905
Option 3 ID : 6306801591906
Option 4 ID : 6306801591903
Status : Answered
Chosen Option : 1

Q.25 Pandit Ram Narayan was associated with which of the following musical instruments?

- Ans
- ☒ 1. Sarangi
 - ☒ 2. Sarod
 - ☒ 3. Mohan veena
 - ☒ 4. Rudra veena

Question ID : 630680560817
Option 1 ID : 6306802192267
Option 2 ID : 6306802192266
Option 3 ID : 6306802192265
Option 4 ID : 6306802192264
Status : Answered
Chosen Option : 2

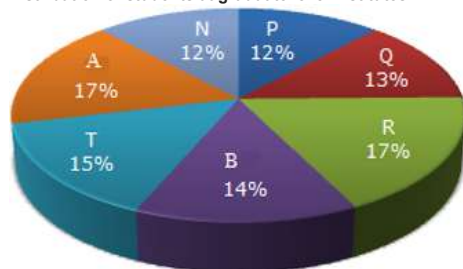
Section : Quantitative Aptitude

Q.1 Ram's income is 2.5% more than Shyam's income. By what percentage is Shyam's income less than Ram's income?

- Ans
- ☒ 1. 4.43%
 - ☒ 2. 1.43%
 - ☒ 3. 3.43%
 - ☒ 4. 2.43%

Question ID : 630680427998
Option 1 ID : 6306801670036
Option 2 ID : 6306801670039
Option 3 ID : 6306801670037
Option 4 ID : 6306801670038
Status : Answered
Chosen Option : 4

Q.2 The following pie-chart shows the distribution of students at graduate level in different institutes in a town. Study the given chart and answer the question that follows.
Distribution of students at graduate level institutes



If the total number of students at the graduate level is 2,46,000, then how many students of institutes A and B are studying at graduate level?

- Ans
- ☒ 1. 76,260
 - ☒ 2. 86,190
 - ☒ 3. 78,370
 - ☒ 4. 74,580

Question ID : 630680386869
Option 1 ID : 6306801508187
Option 2 ID : 6306801508189
Option 3 ID : 6306801508188
Option 4 ID : 6306801508186
Status : Answered
Chosen Option : 1

Q.3 Find the volume of a cone having base radius 3.5 cm and height 18 cm.

- Ans
- ☐ 1. 221 cm³
 - ☐ 2. 241 cm³
 - ☐ 3. 201 cm³
 - ☒ 4. 231 cm³

Question ID : 630680421494
Option 1 ID : 6306801644439
Option 2 ID : 6306801644441
Option 3 ID : 6306801644442
Option 4 ID : 6306801644440
Status : Answered
Chosen Option : 4

Q.4 A shopkeeper has a fault of 100 g in a 3 kg weight. He sold 3 kg of potatoes to Charu using the same faulty weight for ₹46. The cost price of the potatoes for the seller was ₹12 per kg. How much profit (in ₹) did he earn on the potatoes?

- Ans
- ☐ 1. 11.6
 - ☒ 2. 11.2
 - ☐ 3. 10.2
 - ☐ 4. 10

Question ID : 630680428935
Option 1 ID : 6306801673787
Option 2 ID : 6306801673786
Option 3 ID : 6306801673784
Option 4 ID : 6306801673785
Status : Not Answered
Chosen Option : --

Q.5 In how much time will ₹5,000 at 4% per annum simple interest produce the same interest as ₹8,000 in $2\frac{1}{2}$ years at 8% per annum simple interest?

- Ans
- ☐ 1. 2 years
 - ☒ 2. 8 years
 - ☐ 3. 5 years
 - ☐ 4. 4 years

Question ID : 630680397862
Option 1 ID : 6306801551462
Option 2 ID : 6306801551465
Option 3 ID : 6306801551464
Option 4 ID : 6306801551463
Status : Answered
Chosen Option : 2

Q.6 The given table shows the expenditure of a company (in lakh rupees) per annum over the years.

Year	Salary	Fuel and transport	Bonus	Interest on loan	Taxes
2005	212	78	4.00	24.6	88
2006	225	98	4.25	29.7	110
2007	236	105	4.75	36.8	125
2008	247	125	5.55	42.3	103
2009	295	145	6.25	49.6	118
2010	325	155	6.85	58.4	135

The total expenditure on all these categories in 2006 is what percentage (rounded off to two places of decimals) of the total expenditure in 2009?

- Ans
- ☐ 1. 66.07%
 - ☒ 2. 76.07%
 - ☐ 3. 76.09%
 - ☐ 4. 66.09%

Question ID : 630680523757
Option 1 ID : 6306802047179
Option 2 ID : 6306802047180
Option 3 ID : 6306802047182
Option 4 ID : 6306802047181
Status : Not Answered
Chosen Option : --

Q.7 A tank is filled in 45 minutes by two pipes, A and B. Pipe B fills the tank twice as fast as A. How much time (in minutes) will pipe A alone take to fill the tank?

- Ans
- ☒ 1. 115
 - ☒ 2. 135
 - ☒ 3. 125
 - ☒ 4. 140

Question ID : 630680493925
Option 1 ID : 6306801929437
Option 2 ID : 6306801929439
Option 3 ID : 6306801929438
Option 4 ID : 6306801929440
Status : Not Answered
Chosen Option : --

Q.8 If $\frac{x}{x^2 - 2x + 1} = \frac{1}{3}$, then the value of $x^3 + \frac{1}{x^3}$ is:

- Ans
- ☒ 1. 110
 - ☒ 2. 180
 - ☒ 3. 160
 - ☒ 4. 130

Question ID : 630680413518
Option 1 ID : 6306801612896
Option 2 ID : 6306801612897
Option 3 ID : 6306801612899
Option 4 ID : 6306801612898
Status : Not Answered
Chosen Option : --

Q.9 How much rice of ₹4 per kg should be mixed to 15 kg of rice of ₹10 per kg, so as to make a mixture worth ₹6.50 per kg?

- Ans
- ☒ 1. 40 kg
 - ☒ 2. 21 kg
 - ☒ 3. 30 kg
 - ☒ 4. 15 kg

Question ID : 630680397458
Option 1 ID : 6306801549754
Option 2 ID : 6306801549757
Option 3 ID : 6306801549756
Option 4 ID : 6306801549755
Status : Not Answered
Chosen Option : --

Q.10 Find the value of the unknowns:

$$\begin{aligned} x + 1.5y + 2z &= 5.5 \\ x + 5y + 7z &= 15 \\ 3x + 11y + 13z &= 25 \end{aligned}$$

- Ans
- ☒ 1. $x = 4, y = -3, z = 2$
 - ☒ 2. $x = -3, y = 2, z = 4$
 - ☒ 3. $x = 2, y = -3, z = 4$
 - ☒ 4. $x = 2, y = 4, z = -3$

Question ID : 630680285561
Option 1 ID : 6306801110211
Option 2 ID : 6306801110212
Option 3 ID : 6306801110214
Option 4 ID : 6306801110213
Status : Answered
Chosen Option : 3

Q.11 In a triangle PQR, $\angle P + \angle Q = 84^\circ$. Find the value of $\angle R$.

- Ans
- ☒ 1. 74°
 - ☒ 2. 96°
 - ☒ 3. 102°
 - ☒ 4. 60°

Question ID : 630680421347
Option 1 ID : 6306801643852
Option 2 ID : 6306801643853
Option 3 ID : 6306801643854
Option 4 ID : 6306801643851
Status : Answered
Chosen Option : 2

Q.12 The monthly incomes of A, B and C are in the ratio 2 : 9 : 3 and their expenses are in the ratio 3 : 9 : 5. If A's saving is half of his total income, then savings of A, B and C are, respectively, in the ratio of:

- Ans
- ☒ 1. 3 : 9 : 2
 - ☒ 2. 2 : 5 : 2
 - ☒ 3. 3 : 18 : 4
 - ☒ 4. 1 : 2 : 1

Question ID : 630680524297
Option 1 ID : 6306802049339
Option 2 ID : 6306802049340
Option 3 ID : 6306802049342
Option 4 ID : 6306802049341
Status : Not Answered
Chosen Option : --

Q.13 If $x = a \sec \theta \cos \phi$, $y = b \sec \theta \sin \phi$ and $z = c \tan \theta$, then the value of

$\left(\frac{x^2}{a^2} + \frac{y^2}{b^2} - \frac{z^2}{c^2}\right)$ is equal to:

- Ans
- ☒ 1. 0
 - ☒ 2. 3
 - ☒ 3. 1
 - ☒ 4. 2

Question ID : 630680373918
Option 1 ID : 6306801456943
Option 2 ID : 6306801456946
Option 3 ID : 6306801456944
Option 4 ID : 6306801456945
Status : Answered
Chosen Option : 3

Q.14 If $\cot \theta = \sqrt{11}$, then the value of $\frac{\operatorname{cosec}^2 \theta - \sec^2 \theta}{\operatorname{cosec}^2 \theta + \sec^2 \theta}$ is:

- Ans
- ☒ 1. $\frac{6}{7}$
 - ☒ 2. $\frac{5}{6}$
 - ☒ 3. $\frac{3}{5}$
 - ☒ 4. $\frac{4}{5}$

Question ID : 630680526474
Option 1 ID : 6306802057964
Option 2 ID : 6306802057965
Option 3 ID : 6306802057963
Option 4 ID : 6306802057962
Status : Answered
Chosen Option : 2

Q.15 In triangle XYZ, A is a point on YZ such that $XA = YA$. If $\angle XYA = 50^\circ$ and $\angle AXZ = 19^\circ$, what is the degree measure of $\angle XZY$?

Ans ☒ 1. 61°

☒ 2. 53°

☒ 3. 49°

☒ 4. 41°

Question ID : 630680402
Option 1 ID : 630680156
Option 2 ID : 630680156
Option 3 ID : 630680156
Option 4 ID : 630680156
Status : Answered
Chosen Option : 4

Q.16 Simplify

$$626 \times 2912 \div 8138$$

Ans ☒ 1. 364

☒ 2. 224

☒ 3. 285

☒ 4. 310

Question ID : 63068042794
Option 1 ID : 6306801669940
Option 2 ID : 6306801669943
Option 3 ID : 6306801669942
Option 4 ID : 6306801669941
Status : Answered
Chosen Option : 2

Q.17 $7^{15} + 7^{16} + 7^{17}$ is divisible by which of the following given numbers?

Ans ☒ 1. 5

☒ 2. 2

☒ 3. 4

☒ 4. 3

Question ID : 630680108870
Option 1 ID : 630680422373
Option 2 ID : 630680422372
Option 3 ID : 630680422374
Option 4 ID : 630680422375
Status : Answered
Chosen Option : 3

Q.18 If the altitude from two vertices of a triangle to the opposite sides are equal, then the triangle will be:

Ans ☒ 1. equilateral triangle

☒ 2. isosceles triangle

☒ 3. scalene triangle

☒ 4. obtuse angle triangle

Question ID : 630680526578
Option 1 ID : 6306802058378
Option 2 ID : 6306802058380
Option 3 ID : 6306802058379
Option 4 ID : 6306802058381
Status : Answered
Chosen Option : 2

Q.19 The number of applicants appeared and qualified in a 4-wheeler driving licence test during the last four months of 2022 from a city are listed in the following table. Study the table carefully and answer the question that follows.

Month	Appeared applicants	Qualified applicants
September	2500	1200
October	2000	1100
November	2100	900
December	3000	1500

What is the percentage of disqualified applicants for the driving licence test in September?

- Ans
- ☐ 1. 48%
 - ☐ 2. 50%
 - ☒ 3. 52%
 - ☐ 4. 54%

Question ID : 630680428190
Option 1 ID : 6306801670804
Option 2 ID : 6306801670805
Option 3 ID : 6306801670806
Option 4 ID : 6306801670807
Status : Answered
Chosen Option : 3

Q.20 The greatest value of $\sin^4 \theta + \cos^4 \theta$ is:

- Ans
- ☒ 1. 1
 - ☐ 2. 3
 - ☐ 3. 4
 - ☐ 4. 2

Question ID : 630680526477
Option 1 ID : 6306802057976
Option 2 ID : 6306802057975
Option 3 ID : 6306802057977
Option 4 ID : 6306802057974
Status : Answered
Chosen Option : 1

Q.21 An article costs ₹1,000 for a salesman. He fixes its marked price as ₹1,500. He sells it to a customer at a discount of 20%. He gives a further discount of 10% for each cash payment. Find the percentage of loss or gain that the salesman makes on sale.

- Ans
- ☐ 1. loss 10%
 - ☐ 2. gain 10%
 - ☐ 3. loss 8%
 - ☒ 4. gain 8%

Question ID : 630680388631
Option 1 ID : 6306801514986
Option 2 ID : 6306801514987
Option 3 ID : 6306801514989
Option 4 ID : 6306801514988
Status : Not Answered
Chosen Option : --

Q.22 Simplify $\frac{4x^2 - 49y^2}{2x + 7y} + 7y - 2x$

- Ans
- ☒ 1. 0
 - ☐ 2. $4x$
 - ☐ 3. $7y$
 - ☐ 4. $4x - 14y$

Question ID : 630680413460
Option 1 ID : 6306801612664
Option 2 ID : 6306801612665
Option 3 ID : 6306801612667
Option 4 ID : 6306801612666
Status : Answered
Chosen Option : 4

Q.23 In a circular race of 1600 m in length, Bhaskar and Vinay start with speeds of 27 km/h and 45 km/h starting at the same time from the same point. When will they meet for the first time on the track when running in the opposite directions and the same direction, respectively?

- Ans
- ☒ 1. 1 minute 40 seconds and 5 minutes 20 seconds
 - ☒ 2. 1 minute 20 seconds and 5 minutes 20 seconds
 - ☒ 3. 2 minutes 40 seconds and 5 minutes 40 seconds
 - ☒ 4. 2 minutes 20 seconds and 4 minutes 20 seconds

Question ID : 630680428185
Option 1 ID : 6306801670785
Option 2 ID : 6306801670784
Option 3 ID : 6306801670787
Option 4 ID : 6306801670786
Status : Not Answered
Chosen Option : --

Q.24 The following table shows the production (in units) and sales, of different items of a steel company. Study the table and answer the question that follows.

Item	Production (Units)	Sales (Units)
Plate	252	190
Bowl	356	307
Spoon	185	133
Pipe	220	155
Holder	458	419

In which item is there the least number of unsold items?

- Ans
- ☒ 1. Plate
 - ☒ 2. Holder
 - ☒ 3. Spoon
 - ☒ 4. Pipe

Question ID : 630680428093
Option 1 ID : 6306801670417
Option 2 ID : 6306801670416
Option 3 ID : 6306801670418
Option 4 ID : 6306801670419
Status : Answered
Chosen Option : 2

Q.25 A secant PAB is drawn from an external point P to the circle with the centre at O, intersecting it at A and B. If OP = 17 cm, PA = 12 cm and PB = 22.5 cm, then the radius of the circle is:

- Ans
- ☒ 1. $\sqrt{19}$ cm
 - ☒ 2. $\sqrt{17}$ cm
 - ☒ 3. $\sqrt{21}$ cm
 - ☒ 4. $\sqrt{23}$ cm

Question ID : 630680360377
Option 1 ID : 6306801403414
Option 2 ID : 6306801403415
Option 3 ID : 6306801403413
Option 4 ID : 6306801403416
Status : Not Answered
Chosen Option : --

Q.1 Select the most appropriate ANTONYM of the given word.

Customary

- Ans
- ☒ 1. Protection
 - ☒ 2. Habitual
 - ☒ 3. Fashion
 - ☒ 4. Unusual

Question ID : 630680380476
Option 1 ID : 6306801482902
Option 2 ID : 6306801482901
Option 3 ID : 6306801482899
Option 4 ID : 6306801482900
Status : Answered
Chosen Option : 4

Q.2 Select the most appropriate option to substitute the underlined part of the following sentence.

The playwright has faced many ups and downs in his literary career, which spanned for almost 30 years.

- Ans
- ☒ 1. much truth and falsehood
 - ☒ 2. much light and darkness
 - ☒ 3. many agreements and disagreements
 - ☒ 4. many good and bad times

Question ID : 630680297861
Option 1 ID : 6306801158843
Option 2 ID : 6306801158844
Option 3 ID : 6306801158846
Option 4 ID : 6306801158845
Status : Answered
Chosen Option : 4

Q.3 Select the word segment that can substitute the bracketed word segment correctly and complete the sentence meaningfully.

We will have to (put the meeting away) as the Director is not well.

- Ans
- ☒ 1. put the meeting up
 - ☒ 2. put the meeting again
 - ☒ 3. put the meeting on
 - ☒ 4. put the meeting off

Question ID : 630680186716
Option 1 ID : 630680723813
Option 2 ID : 630680723814
Option 3 ID : 630680723815
Option 4 ID : 630680723816
Status : Answered
Chosen Option : 4

Q.4 Complete the sentence with the most appropriate set of ANTONYMS of the highlighted word. .
'Grisly'.

The other day Jimmy behaved _____ with Jammy and that was quite _____ for me.

- Ans
- ☒ 1. pleasantly , comforting
 - ☒ 2. rudely, attractive
 - ☒ 3. ghastly, shameless
 - ☒ 4. disgusting, atrocious

Question ID : 630680517275
Option 1 ID : 6306802021498
Option 2 ID : 6306802021499
Option 3 ID : 6306802021497
Option 4 ID : 6306802021496
Status : Answered
Chosen Option : 1

Q.5 Select the option that expresses the given sentence in active voice.
How have they been ordered by the minister?

- Ans** ☒ 1. How has the minister ordered them?
☒ 2. How did the minister order them?
☒ 3. How have the minister ordered them?
☒ 4. How had the minister ordered them?

Question ID : 630680415280
 Option 1 ID : 6306801619867
 Option 2 ID : 6306801619870
 Option 3 ID : 6306801619868
 Option 4 ID : 6306801619869
 Status : Answered
 Chosen Option : 3

Q.6 Parts of a sentence are given below in jumbled order. Arrange the parts in the correct order to form a meaningful sentence.
 (A) to become severely seasick
 (B) a world tour, but he was
 (C) a nervous flyer and tended
 (D) he wanted to go on

- Ans** ☒ 1. DBCA
☒ 2. ADBC
☒ 3. CADB
☒ 4. BADC

Question ID : 630680360058
 Option 1 ID : 6306801402178
 Option 2 ID : 6306801402180
 Option 3 ID : 6306801402177
 Option 4 ID : 6306801402179
 Status : Answered
 Chosen Option : 1

Q.7 Select the correct meaning of the underlined idiom in the following sentence.

Lucy's conceited conduct with her colleagues has left her high and dry.

- Ans** ☒ 1. Impoverished
☒ 2. Superseding
☒ 3. Helpless
☒ 4. Surrounded by people

Question ID : 630680102549
 Option 1 ID : 630680398460
 Option 2 ID : 630680398462
 Option 3 ID : 630680398461
 Option 4 ID : 630680398459
 Status : Answered
 Chosen Option : 3

Q.8 The following sentence has been split into four segments. Identify the segment that contains an error.
 He was / bad injured / in the / last match.

- Ans** ☒ 1. He was
☒ 2. bad injured
☒ 3. in the
☒ 4. last match.

Question ID : 630680514348
 Option 1 ID : 6306802010017
 Option 2 ID : 6306802010018
 Option 3 ID : 6306802010019
 Option 4 ID : 6306802010020
 Status : Answered
 Chosen Option : 2

Q.9 Sentences of a paragraph are given below in jumbled order. Select the option that arranges the sentences in the correct logical sequence to form a meaningful and coherent paragraph.

a. This figure is predicted to climb as the percentage of Americans residing in rural areas falls by an average of 1.6% annually.

b. The United Nations reports that India's urban population is growing at a rate of 1.1 percent annually, while the country's rural population is shrinking at a rate of 0.37 percent annually.

c. While 82% of Americans live in urban settings, only 30% of Indians do so.

d. It's still a considerably smaller percentage of the Indian population than it is in the US that resides in urban areas.

Ans ✓ 1. b, d, c, a

✗ 2. d, b, a, c

✗ 3. a, c, b, d

✗ 4. b, d, a, c

Question ID : 630680180686
Option 1 ID : 630680700243
Option 2 ID : 630680700241
Option 3 ID : 630680700242
Option 4 ID : 630680700240
Status : Answered
Chosen Option : 4

Q.10 Select the option that can be used as a one-word substitute for the given group of words.
Study of flying airplanes

Ans ✗ 1. Astronomy

✗ 2. Alchemy

✓ 3. Aviation

✗ 4. Acoustics

Question ID : 630680414691
Option 1 ID : 6306801617508
Option 2 ID : 6306801617510
Option 3 ID : 6306801617509
Option 4 ID : 6306801617507
Status : Answered
Chosen Option : 3

Q.11 Select the most appropriate homophone to fill in the blank.
The _____ of the flowers spread everywhere when they bloom.

Ans ✗ 1. cent

✗ 2. sent

✓ 3. scent

✗ 4. saint

Question ID : 630680129954
Option 1 ID : 630680503403
Option 2 ID : 630680503402
Option 3 ID : 630680503405
Option 4 ID : 630680503404
Status : Answered
Chosen Option : 3

Q.12 Select the INCORRECTLY spelt word.

Ans ✗ 1. Embarrass

✗ 2. Discipline

✗ 3. National

✓ 4. Convinient

Question ID : 630680380998
Option 1 ID : 6306801484980
Option 2 ID : 6306801484982
Option 3 ID : 6306801484981
Option 4 ID : 6306801484979
Status : Answered
Chosen Option : 4

Q.13 Select the most appropriate synonym of the word in brackets to fill in the blank.
She _____ requested him to pay the bills. (persistently)

- Ans** ☒ 1. continuously
☒ 2. impetuously
☒ 3. obliviously
☒ 4. tremendously

Question ID : 630680168482
Option 1 ID : 630680652541
Option 2 ID : 630680652542
Option 3 ID : 630680652543
Option 4 ID : 630680652540
Status : Answered
Chosen Option : 1

Q.14 Select the most appropriate ANTONYM of the given word.
Astute

- Ans** ☒ 1. Stupid
☒ 2. Dispute
☒ 3. Temporary
☒ 4. Illegal

Question ID : 630680360075
Option 1 ID : 6306801402246
Option 2 ID : 6306801402248
Option 3 ID : 6306801402245
Option 4 ID : 6306801402247
Status : Answered
Chosen Option : 1

Q.15 Parts of a sentence are given below in jumbled order. Arrange the parts in the correct order to form a meaningful sentence.
(a) one of the primary obstacles encountered
(b) is the risk of sample contamination
(c) during the analysis of controlled dangerous substance (CDS)
(d) from improper handling and collecting methodologies
(e) proof bloodstain patterns and DNA evidence

- Ans** ☒ 1. acebd
☒ 2. abcde
☒ 3. eacdb
☒ 4. aecdb

Question ID : 630680392735
Option 1 ID : 6306801531281
Option 2 ID : 6306801531279
Option 3 ID : 6306801531278
Option 4 ID : 6306801531280
Status : Answered
Chosen Option : 1

Q.16 Select the most appropriate ANTONYM of the given word.

Coy

- Ans** ☒ 1. Recent
☒ 2. Extroverted
☒ 3. Uptight
☒ 4. Shy

Question ID : 630680517381
Option 1 ID : 6306802021923
Option 2 ID : 6306802021921
Option 3 ID : 6306802021922
Option 4 ID : 6306802021920
Status : Answered
Chosen Option : 2

Q.17 Select the correct spelling of the word that means 'to replace'.

- Ans ☒ 1. Supersed
☒ 2. Superseed
☒ 3. Supersede
☒ 4. Superceed

Question ID : 630680409945
Option 1 ID : 6306801598609
Option 2 ID : 6306801598612
Option 3 ID : 6306801598610
Option 4 ID : 6306801598611
Status : Answered
Chosen Option : 3

Q.18 Select the option that expresses the given sentence in passive voice.
A famous company conducted the workshop for its customers.

- Ans ☒ 1. The workshop were conducted by a famous company for its customers.
☒ 2. The workshop was conducted by a famous company for its customers.
☒ 3. The workshop is conducted by a famous company for its customers.
☒ 4. The workshop had been conducted by a famous company for its customers.

Question ID : 630680415293
Option 1 ID : 6306801619919
Option 2 ID : 6306801619922
Option 3 ID : 6306801619921
Option 4 ID : 6306801619920
Status : Answered
Chosen Option : 2

Q.19 Select the most appropriate option that can substitute the underlined segment in the given sentence. If no substitution is required, select 'No substitution'.
The chief guest concluded his speech as he requested to stop by the organisers.

- Ans ☒ 1. he is requested
☒ 2. no substitution
☒ 3. he will be requested
☒ 4. he was requested

Question ID : 630680176606
Option 1 ID : 630680684647
Option 2 ID : 630680684645
Option 3 ID : 630680684644
Option 4 ID : 630680684646
Status : Answered
Chosen Option : 4

Q.20 The following sentence has been divided into four segments. Identify the segment that contains a grammatical error.

My sister and I / work very hard / nevertheless my brother does not do / any task assigned to him.

- Ans ☒ 1. work very hard
☒ 2. My sister and I
☒ 3. nevertheless my brother does not do
☒ 4. any task assigned to him.

Question ID : 630680300646
Option 1 ID : 6306801169408
Option 2 ID : 6306801169407
Option 3 ID : 6306801169409
Option 4 ID : 6306801169410
Status : Answered
Chosen Option : 3

Comprehension:

In the following passage, some words have been deleted. Read the passage carefully and select the most appropriate option to fill in each blank.

Global warming is a major problem. The result will be the problems created by the rising temperatures of the Arctic region. As a result of global warming, (1)_____ in rainfall and plant distribution affect the migration patterns, feeding behaviour, and breeding preferences of numerous bird species. The increase in the temperature may also alter ocean currents, which may alter the (2)_____ ecology as a whole. Greenhouse gas emissions are responsible for the ongoing melting of the Arctic. This will result in a (3)_____ loop since greenhouse gases trap the heat in the atmosphere and the additional emissions may (4)_____ the global warming process. Now, the only way to reverse the harm is for every person to be environmentally sensitive. This may offer us hope that we will be able to leave a green planet to our future generations, who presently appear to face (5)_____.

SubQuestion No : 21

Q.21 Select the most appropriate option to fill in blank number 1.

- Ans
- ☒ 1. stabilisation
 - ☒ 2. fixation
 - ☒ 3. stagnation
 - ☒ 4. alterations

Question ID : 630680171748
Option 1 ID : 630680665434
Option 2 ID : 630680665431
Option 3 ID : 630680665432
Option 4 ID : 630680665433
Status : Answered
Chosen Option : 4

Comprehension:

In the following passage, some words have been deleted. Read the passage carefully and select the most appropriate option to fill in each blank.

Global warming is a major problem. The result will be the problems created by the rising temperatures of the Arctic region. As a result of global warming, (1)_____ in rainfall and plant distribution affect the migration patterns, feeding behaviour, and breeding preferences of numerous bird species. The increase in the temperature may also alter ocean currents, which may alter the (2)_____ ecology as a whole. Greenhouse gas emissions are responsible for the ongoing melting of the Arctic. This will result in a (3)_____ loop since greenhouse gases trap the heat in the atmosphere and the additional emissions may (4)_____ the global warming process. Now, the only way to reverse the harm is for every person to be environmentally sensitive. This may offer us hope that we will be able to leave a green planet to our future generations, who presently appear to face (5)_____.

SubQuestion No : 22

Q.22 Select the most appropriate option to fill in blank number 2.

- Ans
- ☒ 1. grassland
 - ☒ 2. biosphere
 - ☒ 3. landscape
 - ☒ 4. marine

Question ID : 630680171749
Option 1 ID : 630680665436
Option 2 ID : 630680665435
Option 3 ID : 630680665437
Option 4 ID : 630680665438
Status : Answered
Chosen Option : 4

Comprehension:

In the following passage, some words have been deleted. Read the passage carefully and select the most appropriate option to fill in each blank.

Global warming is a major problem. The result will be the problems created by the rising temperatures of the Arctic region. As a result of global warming, (1)_____ in rainfall and plant distribution affect the migration patterns, feeding behaviour, and breeding preferences of numerous bird species. The increase in the temperature may also alter ocean currents, which may alter the (2)_____ ecology as a whole. Greenhouse gas emissions are responsible for the ongoing melting of the Arctic. This will result in a (3)_____ loop since greenhouse gases trap the heat in the atmosphere and the additional emissions may (4)_____ the global warming process. Now, the only way to reverse the harm is for every person to be environmentally sensitive. This may offer us hope that we will be able to leave a green planet to our future generations, who presently appear to face (5)_____.

SubQuestion No : 23

Q.23 Select the most appropriate option to fill in blank number 3.

- Ans
- ☒ 1. vicious
 - ☒ 2. feeble
 - ☒ 3. moderate
 - ☒ 4. gentle

Question ID : 630680171750
Option 1 ID : 630680665439
Option 2 ID : 630680665441
Option 3 ID : 630680665442
Option 4 ID : 630680665440
Status : Answered
Chosen Option : 1

Comprehension:

In the following passage, some words have been deleted. Read the passage carefully and select the most appropriate option to fill in each blank.

Global warming is a major problem. The result will be the problems created by the rising temperatures of the Arctic region. As a result of global warming, (1)_____ in rainfall and plant distribution affect the migration patterns, feeding behaviour, and breeding preferences of numerous bird species. The increase in the temperature may also alter ocean currents, which may alter the (2)_____ ecology as a whole. Greenhouse gas emissions are responsible for the ongoing melting of the Arctic. This will result in a (3)_____ loop since greenhouse gases trap the heat in the atmosphere and the additional emissions may (4)_____ the global warming process. Now, the only way to reverse the harm is for every person to be environmentally sensitive. This may offer us hope that we will be able to leave a green planet to our future generations, who presently appear to face (5)_____.

SubQuestion No : 24

Q.24 Select the most appropriate option to fill in blank number 4.

- Ans
- ☒ 1. hinder
 - ☒ 2. repress
 - ☒ 3. restrain
 - ☒ 4. accelerate

Question ID : 630680171751
Option 1 ID : 630680665446
Option 2 ID : 630680665444
Option 3 ID : 630680665445
Option 4 ID : 630680665443
Status : Answered
Chosen Option : 4

Comprehension:

In the following passage, some words have been deleted. Read the passage carefully and select the most appropriate option to fill in each blank.

Global warming is a major problem. The result will be the problems created by the rising temperatures of the Arctic region. As a result of global warming, (1)_____ in rainfall and plant distribution affect the migration patterns, feeding behaviour, and breeding preferences of numerous bird species. The increase in the temperature may also alter ocean currents, which may alter the (2)_____ ecology as a whole. Greenhouse gas emissions are responsible for the ongoing melting of the Arctic. This will result in a (3)_____ loop since greenhouse gases trap the heat in the atmosphere and the additional emissions may (4)_____ the global warming process. Now, the only way to reverse the harm is for every person to be environmentally sensitive. This may offer us hope that we will be able to leave a green planet to our future generations, who presently appear to face (5)_____.

SubQuestion No : 25

Q.25 Select the most appropriate option to fill in blank number 5.

- Ans
- ☒ 1. extinction
 - ☒ 2. renovation
 - ☒ 3. salvation
 - ☒ 4. redemption

Question ID : 630680171752
Option 1 ID : 630680665448
Option 2 ID : 630680665449
Option 3 ID : 630680665447
Option 4 ID : 630680665450
Status : Answered
Chosen Option : 1