



रेल भर्ती बोर्ड / RAILWAY RECRUITMENT BOARDS

सी ई एन ०१/२०१९ - एन टी पी सी - CEN 01/2019 - NTPC



Participant ID	
Participant Name	
Test Center Name	Bhartiyam Digital Academy
Test Date	20/01/2021
Test Time	3:00 PM - 4:30 PM
Subject	NTPC

*** Note**

Correct Answer will carry 1 mark per Question.

Incorrect Answer will carry 1/3 Negative mark.

- Options shown in green color with a tick icon are correct.
- Chosen option on the right of the question indicates the option selected by the candidate.

Section : NTPC

Q.1 Consider the given statements and decide which of the given assumptions is/are implicit in the statement.

Statement:

To expand their business, a budding company now requires more staff.

Assumptions:

I: The current staff is incompetent.

II: Business can only be expanded by always hiring new staff.

Ans

- ✓ 1. Neither assumption I nor II is implicit.
- ✗ 2. Both the assumptions are implicit.
- ✗ 3. Only assumption I is implicit.
- ✗ 4. Only assumption II is implicit.

Question ID : 9489113481

Option 1 ID : 94891113924

Option 2 ID : 94891113923

Option 3 ID : 94891113921

Option 4 ID : 94891113922

Status : Answered

Chosen Option : 4

Test Prime

**ALL EXAMS,
ONE SUBSCRIPTION**



70,000+
Mock Tests



**Personalised
Report Card**



**Unlimited
Re-Attempt**



600+
Exam Covered



**Previous Year
Papers**



**500%
Refund**



ATTEMPT FREE MOCK NOW

Q.2 If $\sin 3\theta = \cos(\theta - 6^\circ)$, then θ is:

- Ans ☒ 1. 24°
☒ 2. 26°
☒ 3. 12°
☒ 4. 3°

Question ID : 9489113470

Option 1 ID : 94891113877

Option 2 ID : 94891113878

Option 3 ID : 94891113879

Option 4 ID : 94891113880

Status : Answered

Chosen Option : 1

Q.3 When was the first Indian Cricket Club –the Calcutta Cricket Club established?

- Ans ☒ 1. 1792
☒ 2. 1790
☒ 3. 1791
☒ 4. 1793

Question ID : 9489113119

Option 1 ID : 94891112475

Option 2 ID : 94891112473

Option 3 ID : 94891112474

Option 4 ID : 94891112476

Status : Not Answered

Chosen Option : --

Q.4 $x\%$ of y is $y\%$ of:

- Ans ☒ 1. x
☒ 2. $\frac{y}{10}$
☒ 3. $\frac{x}{10}$
☒ 4. $100x$

Question ID : 9489113456

Option 1 ID : 94891113821

Option 2 ID : 94891113824

Option 3 ID : 94891113823

Option 4 ID : 94891113822

Status : Answered

Chosen Option : 1

Q.5 Name the creation of Devaki Nandan Khatri which is considered to be the first authentic work of prose in Hindi.

- Ans**
- ☒ 1. Ratnavali
 - ☒ 2. Chandrakanta
 - ☒ 3. Gitanjali
 - ☒ 4. Gita Govinda

Question ID : 9489113108

Option 1 ID : 94891112429

Option 2 ID : 94891112431

Option 3 ID : 94891112430

Option 4 ID : 94891112432

Status : **Answered**

Chosen Option : 3

Q.6 The International Criminal Police Commission (ICPC), predecessor to INTERPOL was founded at _____ in 1923.

- Ans**
- ☒ 1. Washington
 - ☒ 2. Geneva
 - ☒ 3. New York
 - ☒ 4. Vienna

Question ID : 9489113134

Option 1 ID : 94891112535

Option 2 ID : 94891112536

Option 3 ID : 94891112533

Option 4 ID : 94891112534

Status : **Answered**

Chosen Option : 3

Q.7 If $x + \frac{1}{x} = 6$, then value of $x^2 + \frac{1}{x^2}$ is:

- Ans**
- ☒ 1. 36
 - ☒ 2. 12
 - ☒ 3. 38
 - ☒ 4. 34

Question ID : 9489113453

Option 1 ID : 94891113810

Option 2 ID : 94891113812

Option 3 ID : 94891113811

Option 4 ID : 94891113809

Status : **Answered**

Chosen Option : 4

Q.8 If J is coded as N, R is coded as V and X is coded as B, then how will you code JOY?

- Ans
- ☒ 1. NOB
 - ☒ 2. NRA
 - ☒ 3. NSC
 - ☒ 4. NSA

Question ID : 9489113474

Option 1 ID : 94891113895

Option 2 ID : 94891113893

Option 3 ID : 94891113896

Option 4 ID : 94891113894

Status : Answered

Chosen Option : 3

Q.9 A ratio of the cost price and the selling price of an article is 4 : 5 . What is the percentage gain or loss?

- Ans
- ☒ 1. 20% gain
 - ☒ 2. 20% loss
 - ☒ 3. 25% loss
 - ☒ 4. 25% gain

Question ID : 9489113458

Option 1 ID : 94891113830

Option 2 ID : 94891113832

Option 3 ID : 94891113831

Option 4 ID : 94891113829

Status : Answered

Chosen Option : 4

Q.10 Which of the following pairs of numbers is co-prime?

- Ans
- ☒ 1. 6 and 35
 - ☒ 2. 9 and 12
 - ☒ 3. 39 and 65
 - ☒ 4. 14 and 21

Question ID : 9489113445

Option 1 ID : 94891113780

Option 2 ID : 94891113777

Option 3 ID : 94891113779

Option 4 ID : 94891113778

Status : Answered

Chosen Option : 1

Q.11 The first Pressurised Heavy Water Reactor (PHWR) of India in 1964 was a Collaborative venture between Atomic Energy of _____ Ltd and NPCIL of India.

- Ans**
- ☒ 1. France
 - ☒ 2. USSR
 - ☒ 3. Israel
 - ☒ 4. Canada

Question ID : 9489113132

Option 1 ID : 94891112527

Option 2 ID : 94891112526

Option 3 ID : 94891112528

Option 4 ID : 94891112525

Status : Answered

Chosen Option : 2

Q.12 If an article is sold at a gain of 5% instead of being sold at a loss of 5%, a man gets ₹5 more. What is the cost price of the article?

- Ans**
- ☒ 1. ₹80
 - ☒ 2. ₹40
 - ☒ 3. ₹60
 - ☒ 4. ₹50

Question ID : 9489113457

Option 1 ID : 94891113828

Option 2 ID : 94891113825

Option 3 ID : 94891113827

Option 4 ID : 94891113826

Status : Answered

Chosen Option : 4

Q.13 The value of

$\tan 5^\circ \tan 25^\circ \tan 45^\circ \tan 65^\circ \tan 85^\circ$ is equal to:

- Ans**
- ☒ 1. 1
 - ☒ 2. 4
 - ☒ 3. 2
 - ☒ 4. 3

Question ID : 9489113471

Option 1 ID : 94891113881

Option 2 ID : 94891113884

Option 3 ID : 94891113882

Option 4 ID : 94891113883

Status : Answered

Chosen Option : 1

Q.14 If $23A64A13 = 136423$ and $9A57A12 = 12579$, then $29A4A6 = ?$

- Ans
- ☒ 1. 6249
 - ☒ 2. 6924
 - ☒ 3. 6492
 - ☒ 4. 6429

Question ID : 9489113498

Option 1 ID : 94891113989

Option 2 ID : 94891113991

Option 3 ID : 94891113992

Option 4 ID : 94891113990

Status : Answered

Chosen Option : 4

Q.15 Radha is the sister of the son of Abhinav's son. How is Radha related to Abhinav?

- Ans
- ☒ 1. Aunt
 - ☒ 2. Grandmother
 - ☒ 3. Granddaughter
 - ☒ 4. Sister

Question ID : 9489113480

Option 1 ID : 94891113920

Option 2 ID : 94891113918

Option 3 ID : 94891113919

Option 4 ID : 94891113917

Status : Answered

Chosen Option : 3

Q.16 Which of the following special trains can be taken to travel to Lumbini, Bodhgaya, Sarnath and Kushinagar?

- Ans
- ☒ 1. Buddhist Train
 - ☒ 2. Buddhist Tourist Train
 - ☒ 3. Buddhist Circuit Tourist Train
 - ☒ 4. Buddha Express Special Tourist Train

Question ID : 9489113141

Option 1 ID : 94891112563

Option 2 ID : 94891112562

Option 3 ID : 94891112561

Option 4 ID : 94891112564

Status : Answered

Chosen Option : 3

Q.17 In April, the profit of a book store is increased by 25%, and in May, it is decreased by 20%. How did the profit of the store at the end of May compare to that in the beginning of April?

- Ans**
- ☒ 1. It was less.
 - ☒ 2. It was 25% greater.
 - ☒ 3. It was same.
 - ☒ 4. It was 5% greater.

Question ID : 9489113502

Option 1 ID : 94891114005

Option 2 ID : 94891114008

Option 3 ID : 94891114006

Option 4 ID : 94891114007

Status : Answered

Chosen Option : 3

Q.18 A can finish a piece of work in 20 days and B can finish it in 24 days. They work together for 10 days then A leaves. In how many days will B finish the remaining work?

- Ans**
- ☒ 1. 1 day
 - ☒ 2. Half day
 - ☒ 3. 3 days
 - ☒ 4. 2 days

Question ID : 9489113461

Option 1 ID : 94891113842

Option 2 ID : 94891113843

Option 3 ID : 94891113844

Option 4 ID : 94891113841

Status : Answered

Chosen Option : 4

Q.19 What will be the compound interest on ₹25,000 at the rate of 6% per annum in 2 years?

- Ans**
- ☒ 1. ₹2,560
 - ☒ 2. ₹3,090
 - ☒ 3. ₹1,560
 - ☒ 4. ₹1,950

Question ID : 9489113459

Option 1 ID : 94891113836

Option 2 ID : 94891113833

Option 3 ID : 94891113834

Option 4 ID : 94891113835

Status : Answered

Chosen Option : 2

Q.20 Name the British chemist who presented his atomic theory in 1808, on conservation of mass and law of definite proportions, which was a turning point in the study of matter.

- Ans**
- ✓ 1. John Dalton
 - ✗ 2. Lavoisier
 - ✗ 3. Ernest Rutherford
 - ✗ 4. Proust

Question ID : 9489113115

Option 1 ID : 94891112459

Option 2 ID : 94891112457

Option 3 ID : 94891112460

Option 4 ID : 94891112458

Status : Answered

Chosen Option : 1

Q.21 Government of India has set ambitious target of building _____ Kms of highways in FY21.

- Ans**
- ✓ 1. 15000
 - ✗ 2. 10000
 - ✗ 3. 5000
 - ✗ 4. 1000

Question ID : 9489113139

Option 1 ID : 94891112553

Option 2 ID : 94891112554

Option 3 ID : 94891112555

Option 4 ID : 94891112556

Status : Not Answered

Chosen Option : --

Q.22 Name the book written by Mahatma Gandhi in 1909 that suggested the British rule would come to an end if Indians didn't cooperate with them.

- Ans**
- ✓ 1. Hind Swaraj
 - ✗ 2. Constructive Programme – Its Meaning and Place
 - ✗ 3. Village Swaraj
 - ✗ 4. India of my dreams

Question ID : 9489113118

Option 1 ID : 94891112469

Option 2 ID : 94891112472

Option 3 ID : 94891112471

Option 4 ID : 94891112470

Status : Answered

Chosen Option : 4

Q.23 Two boxes, A and B, have the capacity of holding 85 and 68 units of an article respectively. However, these articles have to be first packed into uniformly sized smaller packets that fit into the boxes. What is the maximum number of units that should be put into each of these packets such that both boxes A and B are filled to their full capacity?

- Ans**
- ☒ 1. 68 units per packet
 - ☒ 2. 1445 units per packet
 - ☒ 3. 17 units per packet
 - ☒ 4. 85 units per packet

Question ID : 9489113452
Option 1 ID : 94891113806
Option 2 ID : 94891113808
Option 3 ID : 94891113807
Option 4 ID : 94891113805
Status : Answered
Chosen Option : 3

Q.24 In a certain code, METHOD is written as DOHTEM. How will CHOCOLATE be written as in that code?

- Ans**
- ☒ 1. TELAOCOCH
 - ☒ 2. ETALCOHOC
 - ☒ 3. ETALOCOHC
 - ☒ 4. ETLAOCOCH

Question ID : 9489113478
Option 1 ID : 94891113909
Option 2 ID : 94891113912
Option 3 ID : 94891113911
Option 4 ID : 94891113910
Status : Answered
Chosen Option : 3

Q.25 Which among the following is NOT an extension for a video file?

- Ans**
- ☒ 1. .avi
 - ☒ 2. .mov
 - ☒ 3. .jpeg
 - ☒ 4. .mp4

Question ID : 9489113138
Option 1 ID : 94891112550
Option 2 ID : 94891112551
Option 3 ID : 94891112549
Option 4 ID : 94891112552
Status : Answered
Chosen Option : 3

Q.26 A dealer lists his goods at 40% above cost price and allows a discount of 20%. His profit is:

- Ans
- ☒ 1. 10%
 - ☒ 2. 20%
 - ☒ 3. 40%
 - ☒ 4. 12%

Question ID : 9489113454

Option 1 ID : 94891113813

Option 2 ID : 94891113814

Option 3 ID : 94891113816

Option 4 ID : 94891113815

Status : Answered

Chosen Option : 4

Q.27 $\sqrt{2} - \sqrt{3}$ is :

- Ans
- ☒ 1. a whole number
 - ☒ 2. an irrational number
 - ☒ 3. a natural number
 - ☒ 4. a rational number

Question ID : 9489113449

Option 1 ID : 94891113793

Option 2 ID : 94891113796

Option 3 ID : 94891113794

Option 4 ID : 94891113795

Status : Answered

Chosen Option : 2

Q.28 Rationalising factor of $\sqrt[3]{40}$ is:

- Ans
- ☒ 1. $10\frac{1}{3}$
 - ☒ 2. $5\frac{2}{3}$
 - ☒ 3. $40\frac{1}{3}$
 - ☒ 4. $2\frac{2}{3}$

Question ID : 9489113450

Option 1 ID : 94891113798

Option 2 ID : 94891113800

Option 3 ID : 94891113797

Option 4 ID : 94891113799

Status : Answered

Chosen Option : 3

Q.29 If Quantity A is the number of ways to assign a number from 1 to 5 without repetition to each of four people, and Quantity B is the number of ways to assign a number from 1 to 5 without repetition to each of 5 people, then which of the following statements is correct with respect to Quantities A and B?

- Ans**
- ☒ 1. Impossible to determine.
 - ☒ 2. Quantity B is greater.
 - ☒ 3. Both Quantities A and B are equal.
 - ☒ 4. Quantity A is greater.

Question ID : 9489113486
Option 1 ID : 94891113944
Option 2 ID : 94891113942
Option 3 ID : 94891113943
Option 4 ID : 94891113941
Status : Answered
Chosen Option : 2

Q.30 Five friends, G, H, I, J and K, are standing in a row (not necessarily in the same order).

- 1. The person in the middle is between J and I.
- 2. G is at the left end.
- 3. K is the neighbour of both J and I.

Who is standing at the right end?

- Ans**
- ☒ 1. H
 - ☒ 2. I
 - ☒ 3. K
 - ☒ 4. J

Question ID : 9489113501
Option 1 ID : 94891114004
Option 2 ID : 94891114001
Option 3 ID : 94891114002
Option 4 ID : 94891114003
Status : Answered
Chosen Option : 1

Q.31 The Ministry of Human Resource Development has designed a one stop education portal which caters to the needs of students, starting from elementary students to research, scholars, teachers and life-long learners. What is the name of this portal?

- Ans**
- ☒ 1. PRASHIKSHAK
 - ☒ 2. SAKSHAT
 - ☒ 3. PADHAI
 - ☒ 4. DIKSHA

Question ID : 9489113136
Option 1 ID : 94891112542
Option 2 ID : 94891112544
Option 3 ID : 94891112543
Option 4 ID : 94891112541
Status : Answered
Chosen Option : 1

Q.32 The mean of the first ten even natural numbers is:

- Ans
- ☒ 1. 10
 - ☒ 2. 8
 - ☒ 3. 11
 - ☒ 4. 9

Question ID : 9489113469
 Option 1 ID : 94891113874
 Option 2 ID : 94891113873
 Option 3 ID : 94891113875
 Option 4 ID : 94891113876
 Status : Answered
 Chosen Option : 3

Q.33 Name the writ under which the court orders that the arrested person should be presented before it or can order to set free an arrested person if the manner or grounds of arrest are NOT lawful or satisfactory.

- Ans
- ☒ 1. Quo Warranto
 - ☒ 2. Habeas corpus
 - ☒ 3. Mandamus
 - ☒ 4. Certiorari

Question ID : 9489113129
 Option 1 ID : 94891112515
 Option 2 ID : 94891112513
 Option 3 ID : 94891112514
 Option 4 ID : 94891112516
 Status : Answered
 Chosen Option : 2

Q.34 Who among the following Nobel Prize winners is the founder of a grassroots movement to combat deforestation?

- Ans
- ☒ 1. Francoise Barre
 - ☒ 2. Linda Buck
 - ☒ 3. Wangari Mathai
 - ☒ 4. May- Britt Moser

Question ID : 9489113104
 Option 1 ID : 94891112415
 Option 2 ID : 94891112414
 Option 3 ID : 94891112413
 Option 4 ID : 94891112416
 Status : Answered
 Chosen Option : 2

Q.35 The radius of a semicircular compound is 35 m. What will be its circumference?

- Ans
- ☒ 1. 45 m
 - ☒ 2. 180 m
 - ☒ 3. 135 m
 - ☒ 4. 90 m

Question ID : 9489113466

Option 1 ID : 94891113861

Option 2 ID : 94891113864

Option 3 ID : 94891113863

Option 4 ID : 94891113862

Status : Answered

Chosen Option : 2

Q.36 Which of the following river's section was declared as National Waterway-2 in 1988?

- Ans
- ☒ 1. Krishna
 - ☒ 2. Narmada
 - ☒ 3. Brahmaputra
 - ☒ 4. Ganga

Question ID : 9489113140

Option 1 ID : 94891112559

Option 2 ID : 94891112560

Option 3 ID : 94891112557

Option 4 ID : 94891112558

Status : Answered

Chosen Option : 3

Q.37 Who along with Motilal Nehru formed the Swaraj Party within the Congress to argue for a return to council politics?

- Ans
- ☒ 1. CR Das
 - ☒ 2. Jawaharlal Nehru
 - ☒ 3. BR Ambedkar
 - ☒ 4. Subhas Chandra Bose

Question ID : 9489113120

Option 1 ID : 94891112477

Option 2 ID : 94891112478

Option 3 ID : 94891112480

Option 4 ID : 94891112479

Status : Answered

Chosen Option : 1

Q.38 20 years ago, the average age of a husband and his wife was 23 years. Now, the average age of the family consisting of the husband, wife and their son is 34 years. The present age of the son is:

- Ans**
- ☒ 1. 34 years
 - ☒ 2. 16 years
 - ☒ 3. 24 years
 - ☒ 4. 42 years

Question ID : 9489113473

Option 1 ID : 94891113889

Option 2 ID : 94891113892

Option 3 ID : 94891113891

Option 4 ID : 94891113890

Status : Answered

Chosen Option : 2

Q.39 In the expansion of $(x + 3)^3$, the coefficient of x is:

- Ans**
- ☒ 1. 9
 - ☒ 2. 1
 - ☒ 3. 18
 - ☒ 4. 27

Question ID : 9489113464

Option 1 ID : 94891113853

Option 2 ID : 94891113854

Option 3 ID : 94891113855

Option 4 ID : 94891113856

Status : Answered

Chosen Option : 4

Q.40 The ratio of the area of a circle and that of an equilateral triangle, where the diameter of the circle is equal to the sides of the equilateral triangle, is:

- Ans**
- ☒ 1. $\pi : \sqrt{2}$
 - ☒ 2. $\pi : \sqrt{3}$
 - ☒ 3. $\pi : 1$
 - ☒ 4. $\sqrt{3} : \pi$

Question ID : 9489113467

Option 1 ID : 94891113866

Option 2 ID : 94891113867

Option 3 ID : 94891113868

Option 4 ID : 94891113865

Status : Answered

Chosen Option : 2

Q.41 In a row of girls, Rajeshwari is fifth from one extreme and sixth from the other. Find the total number of girls in the row.

- Ans**
- ☒ 1. 11
 - ☒ 2. 9
 - ☒ 3. 10
 - ☒ 4. 12

Question ID : 9489113499

Option 1 ID : 94891113995

Option 2 ID : 94891113994

Option 3 ID : 94891113993

Option 4 ID : 94891113996

Status : **Answered**

Chosen Option : 3

Q.42 What is the scale for measuring a hydrogen ion concentration in a solution?

- Ans**
- ☒ 1. pH scale
 - ☒ 2. OH scale
 - ☒ 3. Hydrogen scale
 - ☒ 4. dB scale

Question ID : 9489113112

Option 1 ID : 94891112448

Option 2 ID : 94891112445

Option 3 ID : 94891112446

Option 4 ID : 94891112447

Status : **Answered**

Chosen Option : 1

Q.43 Pointing to a photograph of a man, a woman said, "That man is the son of the only brother of my husband." How is the woman related to the man in the photograph?

- Ans**
- ☒ 1. Maternal Aunt
 - ☒ 2. Mother
 - ☒ 3. Sister
 - ☒ 4. Paternal Aunt

Question ID : 9489113475

Option 1 ID : 94891113900

Option 2 ID : 94891113898

Option 3 ID : 94891113897

Option 4 ID : 94891113899

Status : **Answered**

Chosen Option : 4

Q.44 Tendu, Amaltas, Bel are common trees found in which type of forests in India?

- Ans
- ☒ 1. Tropical thorny forests
 - ☒ 2. Dry deciduous forests
 - ☒ 3. Moist deciduous forests
 - ☒ 4. Montane forests

Question ID : 9489113125

Option 1 ID : 94891112500

Option 2 ID : 94891112498

Option 3 ID : 94891112499

Option 4 ID : 94891112497

Status : Answered

Chosen Option : 2

Q.45 A 600 m long train is running at the speed of 72 km/h. How much time will it take to cross a 200 m long bridge?

- Ans
- ☒ 1. 10 s
 - ☒ 2. 30 s
 - ☒ 3. 20 s
 - ☒ 4. 40 s

Question ID : 9489113462

Option 1 ID : 94891113848

Option 2 ID : 94891113845

Option 3 ID : 94891113846

Option 4 ID : 94891113847

Status : Answered

Chosen Option : 4

Q.46 Median of 14, 14, 15, 17, 16, 17, 17, 22, 13 is:

- Ans
- ☒ 1. 16
 - ☒ 2. 15
 - ☒ 3. 17
 - ☒ 4. 14

Question ID : 9489113468

Option 1 ID : 94891113869

Option 2 ID : 94891113870

Option 3 ID : 94891113871

Option 4 ID : 94891113872

Status : Answered

Chosen Option : 1

Q.47 Find the value of:

$$(0.63 \div 1.26) \times 4 + 5 \times 3$$

- Ans
- ☒ 1. 16
 - ☒ 2. 17
 - ☒ 3. 15
 - ☒ 4. 18

Question ID : 9489113446

Option 1 ID : 94891113782

Option 2 ID : 94891113783

Option 3 ID : 94891113781

Option 4 ID : 94891113784

Status : Answered

Chosen Option : 2

Q.48 A number exceeds 25% of itself by 60. the number is:

- Ans
- ☒ 1. 65
 - ☒ 2. 80
 - ☒ 3. 45
 - ☒ 4. 75

Question ID : 9489113455

Option 1 ID : 94891113820

Option 2 ID : 94891113819

Option 3 ID : 94891113818

Option 4 ID : 94891113817

Status : Answered

Chosen Option : 4

Q.49 Which Mughal monument was designed by Ustad Ahmed Lahori and declared a UNESCO World Heritage site in 1983?

- Ans
- ☒ 1. Red Fort
 - ☒ 2. Taj Mahal
 - ☒ 3. Agra Fort
 - ☒ 4. Humayun's Tomb

Question ID : 9489113109

Option 1 ID : 94891112436

Option 2 ID : 94891112433

Option 3 ID : 94891112435

Option 4 ID : 94891112434

Status : Answered

Chosen Option : 1

Q.50 Four fractions have been given, out of which three are alike in some manner and one is different. Select the one that is different from the rest.

- Ans**
- ✓ 1. $\frac{62}{15}$
 - ✗ 2. $\frac{49}{12}$
 - ✗ 3. $\frac{65}{16}$
 - ✗ 4. $\frac{37}{9}$

Question ID : 9489113493

Option 1 ID : 94891113969

Option 2 ID : 94891113972

Option 3 ID : 94891113970

Option 4 ID : 94891113971

Status : Answered

Chosen Option : 1

Q.51 Yakshagana is a folk performance of which Indian state?

- Ans**
- ✗ 1. Gujarat
 - ✓ 2. Karnataka
 - ✗ 3. Maharashtra
 - ✗ 4. Assam

Question ID : 9489113107

Option 1 ID : 94891112426

Option 2 ID : 94891112427

Option 3 ID : 94891112425

Option 4 ID : 94891112428

Status : Answered

Chosen Option : 2

Q.52 Solve the following.

$$(\sqrt{3} - \sqrt{2}) \times (\sqrt{3} + \sqrt{2}) = ?$$

- Ans**
- ✗ 1. 2
 - ✗ 2. 3
 - ✗ 3. $(\sqrt{3} + \sqrt{2})$
 - ✓ 4. 1

Question ID : 9489113451

Option 1 ID : 94891113802

Option 2 ID : 94891113803

Option 3 ID : 94891113804

Option 4 ID : 94891113801

Status : Answered

Chosen Option : 4

Q.53 The quadratic equation whose one root is $3 + \sqrt{5}$, is:

- Ans
- ☒ 1. $x^2 - 6x - 4 = 0$
 - ☒ 2. $x^2 - 6x + 4 = 0$
 - ☒ 3. $x^2 + 6x + 4 = 0$
 - ☒ 4. $x^2 + 6x - 4 = 0$

Question ID : 9489113465

Option 1 ID : 94891113858

Option 2 ID : 94891113857

Option 3 ID : 94891113859

Option 4 ID : 94891113860

Status : Not Answered

Chosen Option : --

Q.54 The mean of the first twelve prime numbers is:

- Ans
- ☒ 1. 16.42
 - ☒ 2. 12.00
 - ☒ 3. 20.45
 - ☒ 4. 10.50

Question ID : 9489113472

Option 1 ID : 94891113887

Option 2 ID : 94891113886

Option 3 ID : 94891113888

Option 4 ID : 94891113885

Status : Answered

Chosen Option : 2

Q.55 The decimal expansion of $\frac{27}{25}$ will terminate after:

- Ans
- ☒ 1. three decimal places
 - ☒ 2. one decimal place
 - ☒ 3. two decimal places
 - ☒ 4. more than three decimal places

Question ID : 9489113447

Option 1 ID : 94891113787

Option 2 ID : 94891113785

Option 3 ID : 94891113786

Option 4 ID : 94891113788

Status : Answered

Chosen Option : 3

Q.56 What is another name for calcium oxide?

- Ans
- ☒ 1. Lime soda
 - ☒ 2. Baking soda
 - ☒ 3. Quick lime
 - ☒ 4. Cement

Question ID : 9489113111

Option 1 ID : 94891112443

Option 2 ID : 94891112444

Option 3 ID : 94891112441

Option 4 ID : 94891112442

Status : Answered

Chosen Option : 3

Q.57 Which of the following is NOT a part of the National Social Assistance Programme?

- Ans
- ☒ 1. Indira Gandhi National Disability Pension Scheme
 - ☒ 2. Indira Gandhi National Widow Pension Scheme
 - ☒ 3. Annapurna
 - ☒ 4. AYUSH

Question ID : 9489113142

Option 1 ID : 94891112566

Option 2 ID : 94891112565

Option 3 ID : 94891112567

Option 4 ID : 94891112568

Status : Answered

Chosen Option : 4

Q.58 Who was one of the founders of American computer company Sun microsystems later acquired by oracle?

- Ans
- ☒ 1. Vinod Khosla
 - ☒ 2. Satya Nadella
 - ☒ 3. Sunder Pichai
 - ☒ 4. Sabeer Bhatia

Question ID : 9489113137

Option 1 ID : 94891112548

Option 2 ID : 94891112547

Option 3 ID : 94891112545

Option 4 ID : 94891112546

Status : Not Answered

Chosen Option : --

Q.59 In which of the following states in India the 'rat hole mining' is still practised?

- Ans
- ☒ 1. Gujarat
 - ☒ 2. Meghalaya
 - ☒ 3. Maharashtra
 - ☒ 4. Jharkhand

Question ID : 9489113123

Option 1 ID : 94891112491

Option 2 ID : 94891112492

Option 3 ID : 94891112490

Option 4 ID : 94891112489

Status : Not Answered

Chosen Option : --

Q.60 Name the drainage pattern where the river originates from a hill and flows in all directions.

- Ans
- ☒ 1. Dendritic
 - ☒ 2. Centripetal
 - ☒ 3. Trellis
 - ☒ 4. Radial

Question ID : 9489113126

Option 1 ID : 94891112504

Option 2 ID : 94891112501

Option 3 ID : 94891112502

Option 4 ID : 94891112503

Status : Answered

Chosen Option : 1

Q.61 Which flagship programme under the Ministry of Rural Development aims to organise the rural poor women into their own institutions like self-help groups and their federations, producers' collectives etc. and also ensure their financial inclusion and livelihood support?

- Ans
- ☒ 1. The National Social Assistance Programme (NSAP)
 - ☒ 2. Rashtriya Krishi Vikas Yojana
 - ☒ 3. Mahatma Gandhi National Rural Employment Guarantee Programme (MGNREGA)
 - ☒ 4. Deendayal Antyodaya Yojana – National Rural Livelihoods Mission (DAY-NRLM)

Question ID : 9489113143

Option 1 ID : 94891112569

Option 2 ID : 94891112570

Option 3 ID : 94891112572

Option 4 ID : 94891112571

Status : Answered

Chosen Option : 4

Q.62 In February 2019, which communication satellite was launched by ISRO to help in bulk data transfer for telecommunication applications?

- Ans**
- ☒ 1. GSAT-31
 - ☐ 2. GSAT-32
 - ☐ 3. GSAT-13
 - ☐ 4. GSAT-30

Question ID : 9489113130

Option 1 ID : 94891112518

Option 2 ID : 94891112517

Option 3 ID : 94891112519

Option 4 ID : 94891112520

Status : Answered

Chosen Option : 4

Q.63 Rahul is shorter than Raman. Ramesh is shorter than Ravi but taller than Raman. Who among them is the tallest?

- Ans**
- ☐ 1. Raman
 - ☐ 2. Rahul
 - ☐ 3. Ramesh
 - ☒ 4. Ravi

Question ID : 9489113487

Option 1 ID : 94891113945

Option 2 ID : 94891113948

Option 3 ID : 94891113946

Option 4 ID : 94891113947

Status : Answered

Chosen Option : 4

Q.64 The HCF of 24 and 144 is ' $10p + 4$ ', then the value of 'p' is:

- Ans**
- ☐ 1. 1
 - ☐ 2. 4
 - ☒ 3. 2
 - ☐ 4. 3

Question ID : 9489113448

Option 1 ID : 94891113789

Option 2 ID : 94891113792

Option 3 ID : 94891113790

Option 4 ID : 94891113791

Status : Answered

Chosen Option : 3

Q.65 Name the Shiva temple near Taliparamba in Kerala, where women are allowed to enter only after 8 p.m. A unique feature of this temple is the absence of a flagstaff.

- Ans**
- ☒ 1. Gokarnanatheshwara Temple
 - ☒ 2. Rajarajeshwara temple
 - ☒ 3. Mallikarjun Temple
 - ☒ 4. Rameswaram Mahadeva Temple

Question ID : 9489113110

Option 1 ID : 94891112440

Option 2 ID : 94891112438

Option 3 ID : 94891112437

Option 4 ID : 94891112439

Status : Answered

Chosen Option : 3

Q.66 Who among the following is NOT a Cabinet Minister?

- Ans**
- ☒ 1. Minister of Home Affairs
 - ☒ 2. Minister of State in the Ministry of Defence
 - ☒ 3. Minister of External Affairs
 - ☒ 4. Minister of Law and Justice

Question ID : 9489113128

Option 1 ID : 94891112509

Option 2 ID : 94891112512

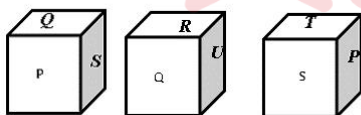
Option 3 ID : 94891112510

Option 4 ID : 94891112511

Status : Answered

Chosen Option : 2

Q.67 Three different positions of the same dice are shown. Select the letter that will be on the face opposite to the one having U?



- Ans**
- ☒ 1. S
 - ☒ 2. T
 - ☒ 3. R
 - ☒ 4. P

Question ID : 9489113503

Option 1 ID : 94891114012

Option 2 ID : 94891114010

Option 3 ID : 94891114011

Option 4 ID : 94891114009

Status : Answered

Chosen Option : 1

Q.68 What is the language spoken by a majority of the people in Lakshadweep?

- Ans
- ☒ 1. Malayalam
 - ☐ 2. Marathi
 - ☐ 3. Konkani
 - ☐ 4. Kannada

Question ID : 9489113122

Option 1 ID : 94891112485

Option 2 ID : 94891112486

Option 3 ID : 94891112487

Option 4 ID : 94891112488

Status : Answered

Chosen Option : 4

Q.69 At which university did Mahatma Gandhi make his first public appearance in 1916 after returning from South Africa to India?

- Ans
- ☒ 1. Banaras Hindu University
 - ☐ 2. Aligarh Muslim University
 - ☐ 3. Allahabad University
 - ☐ 4. University of Mumbai

Question ID : 9489113121

Option 1 ID : 94891112483

Option 2 ID : 94891112482

Option 3 ID : 94891112481

Option 4 ID : 94891112484

Status : Answered

Chosen Option : 3

Q.70 A photograph of a bacteria enlarged 60000 times attains a length of 6 cm. The actual length of bacteria is:

- Ans
- ☐ 1. $\frac{1}{100}$ cm
 - ☒ 2. $\frac{1}{10000}$ cm
 - ☐ 3. 1000 cm
 - ☐ 4. $\frac{1}{1000}$ cm

Question ID : 9489113460

Option 1 ID : 94891113840

Option 2 ID : 94891113839

Option 3 ID : 94891113837

Option 4 ID : 94891113838

Status : Answered

Chosen Option : 2

Q.71 Select the number that can replace the question mark (?) in the following series.

12, 49, 197, 789, ?

- Ans
- ☒ 1. 2341
 - ☒ 2. 1845
 - ☒ 3. 3157
 - ☒ 4. 4029

Question ID : 9489113484
Option 1 ID : 94891113934
Option 2 ID : 94891113933
Option 3 ID : 94891113935
Option 4 ID : 94891113936
Status : Answered
Chosen Option : 3

Q.72 Name the German chemist who grouped elements into triads in 1817.

- Ans
- ☒ 1. Dmitri Ivanovich Mendeleev
 - ☒ 2. John Newlands
 - ☒ 3. Johann Wolfgang Dobereiner
 - ☒ 4. Henry Moseley

Question ID : 9489113114
Option 1 ID : 94891112455
Option 2 ID : 94891112454
Option 3 ID : 94891112453
Option 4 ID : 94891112456
Status : Answered
Chosen Option : 2

Q.73 In 1930, who organised the Dalits into the Depressed Classes Association and demanded separate electorates for them?

- Ans
- ☒ 1. Abdul Gaffar Khan
 - ☒ 2. Jawahar Lal Nehru
 - ☒ 3. Mahatma Gandhi
 - ☒ 4. BR Ambedkar

Question ID : 9489113117
Option 1 ID : 94891112467
Option 2 ID : 94891112468
Option 3 ID : 94891112465
Option 4 ID : 94891112466
Status : Answered
Chosen Option : 4

Q.74 Which Indian state has declared Malkhamb as its state sport?

- Ans
- ☒ 1. Madhya Pradesh
 - ☐ 2. Uttar Pradesh
 - ☐ 3. Haryana
 - ☐ 4. Uttarakhand

Question ID : 9489113106

Option 1 ID : 94891112424

Option 2 ID : 94891112422

Option 3 ID : 94891112421

Option 4 ID : 94891112423

Status : Answered

Chosen Option : 4

Q.75 If $2 + 2 = 12$, $3 + 3 = 24$, $4 + 4 = 34$ and $5 + 5 = 42$, then what will be the value of $8 + 8$?

- Ans
- ☐ 1. 56
 - ☒ 2. 54
 - ☐ 3. 50
 - ☐ 4. 52

Question ID : 9489113500

Option 1 ID : 94891114000

Option 2 ID : 94891113999

Option 3 ID : 94891113997

Option 4 ID : 94891113998

Status : Not Answered

Chosen Option : --

Q.76 Which of the following is a property of an ionic compound?

- Ans
- ☐ 1. It is hard and does not break easily.
 - ☒ 2. It has a high melting point and boiling point.
 - ☐ 3. It is soluble in solvents such as kerosene and petrol.
 - ☐ 4. It conducts electricity in the solid state.

Question ID : 9489113116

Option 1 ID : 94891112461

Option 2 ID : 94891112463

Option 3 ID : 94891112462

Option 4 ID : 94891112464

Status : Answered

Chosen Option : 1

Q.77 From where did India's Polar Satellite Launch Vehicle (PSLV-C45) successfully launch EMISAT and 28 international customer satellites on 1st April 2019?

- Ans**
- ☒ 1. Spaceport in French Guiana
 - ☒ 2. Satish Dhawan Space Centre
 - ☐ 3. UR Rao Satellite Centre
 - ☐ 4. Centre Spatial Guyanais, Kourou

Question ID : 9489113131

Option 1 ID : 94891112523

Option 2 ID : 94891112524

Option 3 ID : 94891112522

Option 4 ID : 94891112521

Status : **Answered**

Chosen Option : 2

Q.78 "The Nice Guy Who Finished First" is the biography of which famous sportsperson?

- Ans**
- ☒ 1. Rahul Dravid
 - ☐ 2. David Beckham
 - ☐ 3. Michael Phelps
 - ☐ 4. Tiger Woods

Question ID : 9489113105

Option 1 ID : 94891112417

Option 2 ID : 94891112420

Option 3 ID : 94891112419

Option 4 ID : 94891112418

Status : **Not Answered**

Chosen Option : --

Q.79 From which Constitution has the Fundamental Rights in the Indian Constitution drawn?

- Ans**
- ☐ 1. Britain
 - ☐ 2. Switzerland
 - ☒ 3. United States
 - ☐ 4. Soviet Union

Question ID : 9489113127

Option 1 ID : 94891112505

Option 2 ID : 94891112508

Option 3 ID : 94891112507

Option 4 ID : 94891112506

Status : **Answered**

Chosen Option : 3

Q.80 On heating gypsum at 373 k, it loses water molecules and becomes calcium sulphate hemihydrate. This substance is used to make toys, material for decoration and smooth surfaces. What is this substance commonly known as?

- Ans**
- ☒ 1. Cement
 - ☒ 2. Alabaster
 - ☒ 3. Plaster of Paris
 - ☒ 4. Clay

Question ID : 9489113113

Option 1 ID : 94891112450

Option 2 ID : 94891112452

Option 3 ID : 94891112451

Option 4 ID : 94891112449

Status : Answered

Chosen Option : 3

Q.81 The HCF of the least prime number and the least composite natural number is:

- Ans**
- ☒ 1. 4
 - ☒ 2. 2
 - ☒ 3. 1
 - ☒ 4. 3

Question ID : 9489113444

Option 1 ID : 94891113776

Option 2 ID : 94891113774

Option 3 ID : 94891113773

Option 4 ID : 94891113775

Status : Answered

Chosen Option : 3

Q.82 The National TB programme (NTP) was launched by the Government of India in year _____ in the form of District TB Centre Model involved with BCG Vaccination and TB treatment.

- Ans**
- ☒ 1. 1962
 - ☒ 2. 1963
 - ☒ 3. 1961
 - ☒ 4. 1960

Question ID : 9489113135

Option 1 ID : 94891112539

Option 2 ID : 94891112540

Option 3 ID : 94891112538

Option 4 ID : 94891112537

Status : Answered

Chosen Option : 2

Q.83 Which place in India was known as 'kala pani'?

- Ans
- ☐ 1. Gulf of Kutch
 - ☐ 2. Kerala's backwaters
 - ☐ 3. Lakshadweep
 - ☒ 4. Andaman Islands

Question ID : 9489113124

Option 1 ID : 94891112493

Option 2 ID : 94891112494

Option 3 ID : 94891112496

Option 4 ID : 94891112495

Status : Answered

Chosen Option : 4

Q.84 Where is the office of the United Nations Environment Programme (UNEP) located in India?

- Ans
- ☐ 1. Chennai
 - ☐ 2. Bangalore
 - ☐ 3. Mumbai
 - ☒ 4. New Delhi

Question ID : 9489113133

Option 1 ID : 94891112532

Option 2 ID : 94891112531

Option 3 ID : 94891112530

Option 4 ID : 94891112529

Status : Answered

Chosen Option : 4

Q.85 A tank has two inlets A and B that can fill it in 5 h and 6 h respectively. An outlet C can empty the full tank in 30 h. If all the three pipes are opened together in the empty tank, how much time will the pipes take to fill the tank?

- Ans
- ☐ 1. 5 h
 - ☐ 2. 4 h
 - ☐ 3. 2 h
 - ☒ 4. 3 h

Question ID : 9489113463

Option 1 ID : 94891113852

Option 2 ID : 94891113849

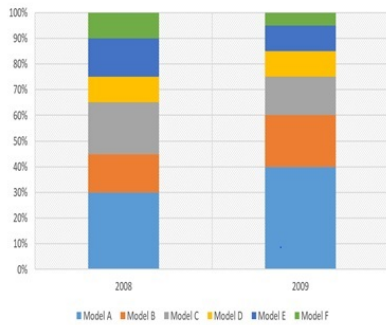
Option 3 ID : 94891113851

Option 4 ID : 94891113850

Status : Answered

Chosen Option : 4

Q.86 The given graph shows the percentage-wise distribution of different mobile phone models (A to F) produced by a mobile company in 2008 and 2009. The total number of mobile phones produced in 2008 was 4,50,000 and that in 2009 was 6,40,000.
(If a value for any model is between a range, consider it to be at midpoint, e.g any point between 10 and 20 should be considered 15.)



What is the total number of mobile phones produced of models C, D and F in 2008?

- Ans** ✓ 1. 1,80,000
✗ 2. 1,35,000
✗ 3. 2,25,000
✗ 4. 2,02,500

Question ID : 9489113489

Option 1 ID : 94891113954

Option 2 ID : 94891113956

Option 3 ID : 94891113955

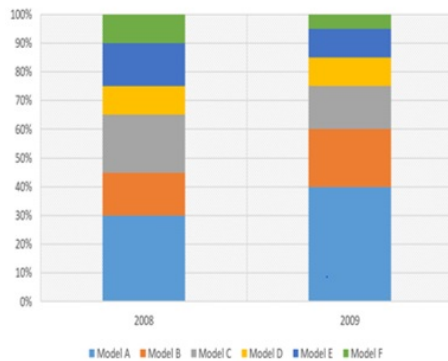
Option 4 ID : 94891113953

Status : Answered

Chosen Option : 1

Q.87 The given graph shows the percentage-wise distribution of different mobile phone models (A to F) produced by a mobile company in 2008 and 2009. The total number of mobile phones produced in 2008 was 4,50,000 and that in 2009 was 6,40,000.

(If a value for any model in between a range, consider it to be at midpoint, e.g any point between 10 and 20 should be considered 15.)



For which model was the increase/decrease in production volume between 2008 and 2009 the minimum?

- Ans**
- ☒ 1. Model C
 - ☒ 2. Model A
 - ☒ 3. Model B
 - ☒ 4. Model E

Question ID : 9489113490

Option 1 ID : 94891113959

Option 2 ID : 94891113957

Option 3 ID : 94891113958

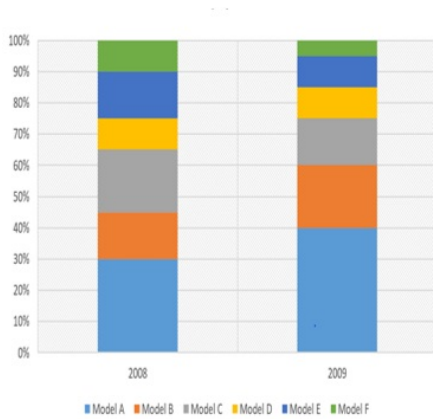
Option 4 ID : 94891113960

Status : Answered

Chosen Option : 4

Q.88 The given graph shows the percentage-wise distribution of different mobile phone models (A to F) produced by a mobile company in 2008 and 2009. The total number of mobile phones produced in 2008 was 4,50,000 and that in 2009 was 6,40,000.

(If a value for any model in between a range, consider it to be at midpoint, e.g any point between 10 and 20 should be considered 15.)



What is the difference between the numbers of Model B sets produced in 2008 and 2009?

- Ans**
- ☒ 1. 1,21,000
 - ☒ 2. 60,500
 - ☒ 3. 65,000
 - ☒ 4. 22,000

Question ID : 9489113491

Option 1 ID : 94891113964

Option 2 ID : 94891113963

Option 3 ID : 94891113962

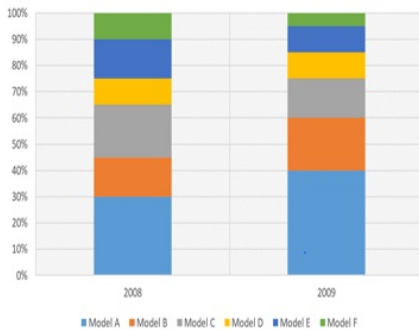
Option 4 ID : 94891113961

Status : Answered

Chosen Option : 2

Q.89 The given graph shows the percentage-wise distribution of different mobile phone models (A to F) produced by a mobile company in 2008 and 2009. The total number of mobile phones produced in 2008 was 4,50,000 and that in 2009 was 6,40,000.

(If a value for any model in between a range, consider it to be at midpoint, e.g any point between 10 and 20 should be considered 15.)



If 90% of Model C sets produced by the company were sold each year, then how many of them were remaining at the end of 2009?

- Ans**
- ☒ 1. 6,000
 - ☒ 2. 18,600
 - ☒ 3. 96,000
 - ☒ 4. 1,67,400

Question ID : 9489113492

Option 1 ID : 94891113968

Option 2 ID : 94891113966

Option 3 ID : 94891113967

Option 4 ID : 94891113965

Status : Answered

Chosen Option : 2

Q.90 Anuj, Ankit, Anu and Alka are teachers who teach Biology, History and Mathematics. Biology is the only subject taught by two teachers, one of whom is male. Two of the four are married to each other and they teach History and Biology respectively. Ankit teaches Biology and is unmarried.

Which subject does Anuj teach?

- Ans**
- ☒ 1. Mathematics
 - ☒ 2. History
 - ☒ 3. Biology
 - ☒ 4. Cannot be determined

Question ID : 9489113496

Option 1 ID : 94891113982

Option 2 ID : 94891113981

Option 3 ID : 94891113983

Option 4 ID : 94891113984

Status : Answered

Chosen Option : 2

Q.91 Select the number from among the given options that can replace the question mark (?) in the following series.

D4R22H8Y15P?

- Ans**
- ☒ 1. 18
 - ☒ 2. 7
 - ☒ 3. 24
 - ☒ 4. 20

Question ID : 9489113488

Option 1 ID : 94891113950

Option 2 ID : 94891113952

Option 3 ID : 94891113949

Option 4 ID : 94891113951

Status : Not Answered

Chosen Option : --

Q.92 'Minute' is related to 'Hour' in the same way as 'Inch' is related to '_____'.

- Ans**
- ☒ 1. Measure
 - ☒ 2. Foot
 - ☒ 3. Metre
 - ☒ 4. Centigrade

Question ID : 9489113477

Option 1 ID : 94891113905

Option 2 ID : 94891113906

Option 3 ID : 94891113908

Option 4 ID : 94891113907

Status : Answered

Chosen Option : 3

Q.93 Select the option in which the words share the same relationship as that shared by the given set of words.

Whisper : Singing : Sound

- Ans**
- ☒ 1. Babies : Soft : Cute
 - ☒ 2. Sea : Underneath : Large
 - ☒ 3. Magazine : Book : Read
 - ☒ 4. Road : Vehicle : Destination

Question ID : 9489113479

Option 1 ID : 94891113913

Option 2 ID : 94891113916

Option 3 ID : 94891113915

Option 4 ID : 94891113914

Status : Answered

Chosen Option : 2

Q.94 Select the word from the following options that CANNOT be formed using the letters of the given word.

CATASTROPHE

- Ans**
- ☒ 1. STAR
 - ☒ 2. CASTOR
 - ☒ 3. TROPHY
 - ☒ 4. TRAP

Question ID : 9489113494

Option 1 ID : 94891113976

Option 2 ID : 94891113973

Option 3 ID : 94891113975

Option 4 ID : 94891113974

Status : Answered

Chosen Option : 3

Q.95 Read the given statement and conclusions carefully and decide which of the conclusions logically follow(s) from the statement.

Statement:

The postal system of India was started by the Britishers in 1764.

Conclusions:

I: Postal mails are often delayed or go missing.

II: Postmen are poorly paid, so they tend to make mistakes.

- Ans**
- ☒ 1. Only conclusion II follows.
 - ☒ 2. Only conclusion I follows.
 - ☒ 3. Neither conclusion I nor II follows.
 - ☒ 4. Both the conclusions follow.

Question ID : 9489113482

Option 1 ID : 94891113926

Option 2 ID : 94891113925

Option 3 ID : 94891113928

Option 4 ID : 94891113927

Status : Answered

Chosen Option : 3

Q.96 If GOES is coded as 715519, then what will be the code for FAST?

- Ans**
- ☒ 1. 511620
 - ☒ 2. 611920
 - ☒ 3. 512620
 - ☒ 4. 611519

Question ID : 9489113476

Option 1 ID : 94891113904

Option 2 ID : 94891113903

Option 3 ID : 94891113902

Option 4 ID : 94891113901

Status : Answered

Chosen Option : 2

Q.97 In a certain code language, 'VLGH' is written as '52', 'QBNZ' is written as '62'. What is the code for 'XPRF' in that code language?

- Ans**
- ☒ 1. 69
 - ☒ 2. 73
 - ☒ 3. 67
 - ☒ 4. 71

Question ID : 9489113497

Option 1 ID : 94891113986

Option 2 ID : 94891113988

Option 3 ID : 94891113985

Option 4 ID : 94891113987

Status : Answered

Chosen Option : 3

Q.98 H has three times as many cards as R has. If H gives 50 cards to R, R will have three times as many cards as H has. How many cards does H have?

- Ans**
- ☒ 1. 50
 - ☒ 2. 25
 - ☒ 3. 75
 - ☒ 4. 100

Question ID : 9489113483

Option 1 ID : 94891113930

Option 2 ID : 94891113929

Option 3 ID : 94891113931

Option 4 ID : 94891113932

Status : Answered

Chosen Option : 3

Q.99 If $x = -2$, $y = 3$, Quantity A = $-x^2y^3$ and Quantity B = 0, then which of the following statements is correct with respect to Quantities A and B?

- Ans**
- ☒ 1. Quantity A is greater.
 - ☒ 2. Both Quantities A and B are equal.
 - ☒ 3. Impossible to determine.
 - ☒ 4. Quantity B is greater.

Question ID : 9489113485

Option 1 ID : 94891113937

Option 2 ID : 94891113939

Option 3 ID : 94891113940

Option 4 ID : 94891113938

Status : Answered

Chosen Option : 4

Q.100 Four letter-clusters have been given, out of which three are alike in some manner and one is different. Select the odd one.

- Ans**
- ☒ 1. BDG
 - ☒ 2. MOQ
 - ☒ 3. JLO
 - ☒ 4. RTW

Question ID : 9489113495

Option 1 ID : 94891113978

Option 2 ID : 94891113977

Option 3 ID : 94891113979

Option 4 ID : 94891113980

Status : Answered

Chosen Option : 2

