

Combined Graduate Level Examination 2020 Tier-I




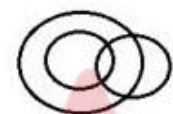
Roll Number	
Candidate Name	
Venue Name	
Exam Date	16/08/2021
Exam Time	12:00 PM - 1:00 PM
Subject	Combined Graduate Level Examination 2020 Tier 1

Section : General Intelligence and Reasoning

Q.1 Select the Venn diagram that best illustrates the relationship among the following classes.

Whisk, Utensil, Sickle

Ans

- ✗ 1. 
- ✓ 2. 
- ✗ 3. 
- ✗ 4. 

Question ID : 81616112933

Status : Answered

Chosen Option : 2

Q.2 Select the number from among the given options that can replace the question mark (?) in the following series.

5, 13, 22, 34, 51, 75, 108, 152, ?

- Ans ✗ 1. 230
- ✗ 2. 203
- ✓ 3. 209
- ✗ 4. 290

Question ID : 81616113122

Status : Not Answered

Chosen Option : --

Test Prime

**ALL EXAMS,
ONE SUBSCRIPTION**



70,000+
Mock Tests



**Personalised
Report Card**



**Unlimited
Re-Attempt**



600+
Exam Covered



**Previous Year
Papers**



500%
Refund



ATTEMPT FREE MOCK NOW

Q.3 Select the letter-cluster from among the given options that can replace the question mark (?) in the following series.

GCB, JHE, MMH, PRK, ?

- Ans
- ☒ 1. RVM
 - ☒ 2. TXO
 - ☒ 3. SWN
 - ☒ 4. SXM

Question ID : 81616112505

Status : Answered

Chosen Option : 3

Q.4 Four letter-clusters have been given, out of which three are alike in some manner and one is different. Select the letter-cluster that is different.

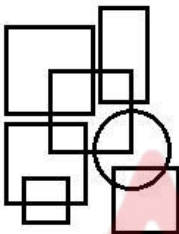
- Ans
- ☒ 1. IDWG
 - ☒ 2. BTGN
 - ☒ 3. FJQL
 - ☒ 4. EMNK

Question ID : 81616113113

Status : Not Answered

Chosen Option : --

Q.5 Find the number of squares in the given figure. (Rectangles NOT to be included)



- Ans
- ☒ 1. 9
 - ☒ 2. 7
 - ☒ 3. 5
 - ☒ 4. 16

Question ID : 81616112221

Status : Answered

Chosen Option : 1

Q.6 Select the letter from among the given options that can replace the question mark (?) in the following series.

B, E, G, J, L, ?

Ans  1. O

 2. N

 3. Q

 4. P

Question ID : 81616112513

Status : Answered

Chosen Option : 1

Q.7 The present age of a father is three times that of his elder son. Four years hence, the age of the father will be four times that of his younger son. If the difference between the present ages of the elder and younger child is 6 years, what is the present age of the father?

Ans  1. 36 years

 2. 32 years

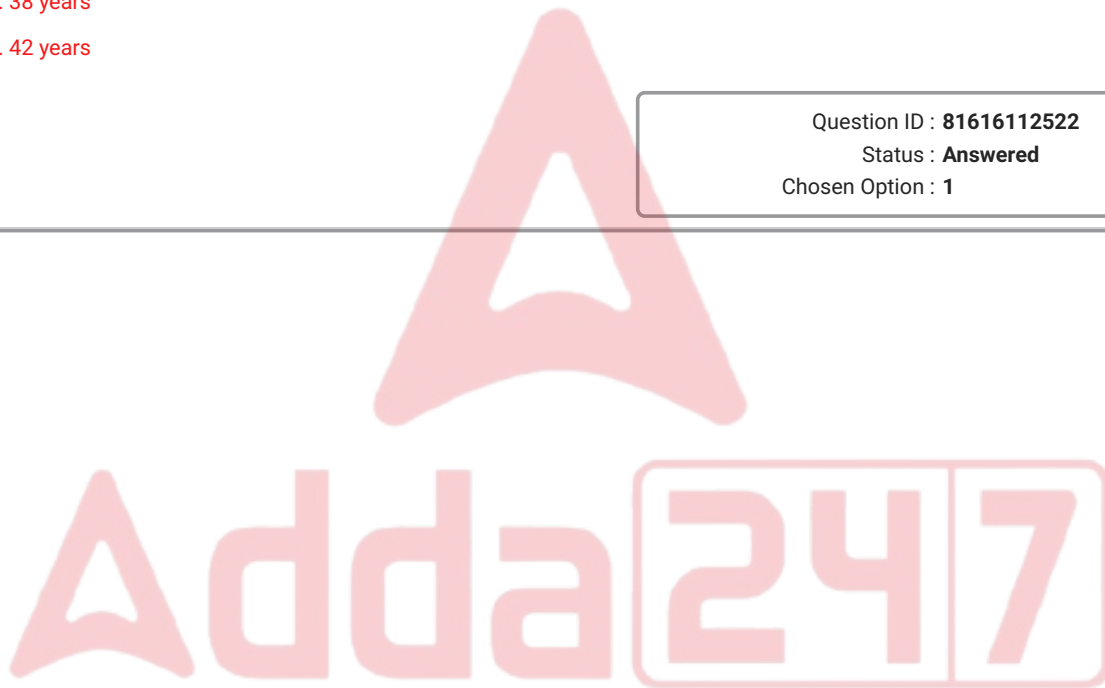
 3. 38 years

 4. 42 years

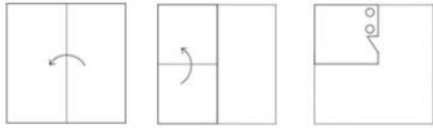
Question ID : 81616112522

Status : Answered

Chosen Option : 1

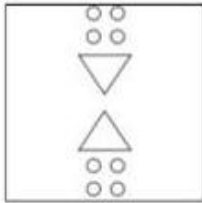


Q.8 The sequence of folding a piece of paper and the manner in which the folded paper has been cut is shown in the following figures. How would this paper look when unfolded?

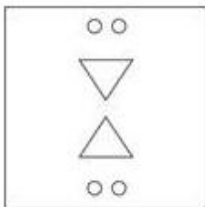


Ans

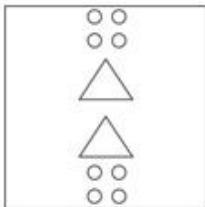
✓ 1.



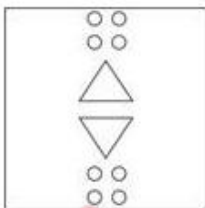
✗ 2.



✗ 3.



✗ 4.



Question ID : 81616112528

Status : Answered

Chosen Option : 1

Q.9 Select the correct sequence of mathematical signs that can sequentially replace the * signs and balance the given equation.

$$6 * 10 * 55 * 162 * 9 = 23$$

Ans ✓ 1. $\times, -, +, \div$

✗ 2. $\times, \div, -, +$

✗ 3. $\div, +, \times, -$

✗ 4. $+, -, \div, \times$

Question ID : 81616112218

Status : Answered

Chosen Option : 1

Q.10 Select the option that is related to the third number in the same way as the second number is related to the first number and the sixth number is related to the fifth number.

15 : 135 :: 16 : ? :: 18 : 189

Ans ☒ 1. 152

☐ 2. 121

☐ 3. 131

☐ 4. 141

Question ID : 81616112921

Status : Not Answered

Chosen Option : --

Q.11 Four words have been given, out of which three are alike in some manner and one is different. Select the word that is different.

Ans ☒ 1. Prowl

☐ 2. Growl

☐ 3. Howl

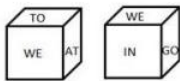
☐ 4. Yowl

Question ID : 81616112205

Status : Answered

Chosen Option : 4

Q.12 Two different positions of the same dice are shown, the six faces of which are marked as 'AT', 'IN', 'SO', 'WE', 'GO' and 'TO'. Select the word that will be on the face opposite to the face showing the word 'TO'.



Ans ☐ 1. AT

☐ 2. SO

☒ 3. GO

☐ 4. IN

Question ID : 81616112222

Status : Answered

Chosen Option : 3

Q.13 In a certain code language, 'ALPINE' is coded as '171' and 'SPRING' is coded as '83'. How will 'CAPITAL' be coded in that language?

Ans ☐ 1. 124

☐ 2. 93

☐ 3. 62

☒ 4. 186

Question ID : 81616112209

Status : Answered

Chosen Option : 4

Q.14 Select the correct option that indicates the arrangement of the given words in the order in which they appear in an English dictionary.

1. Umbilical
2. Urgent
3. Unaltered
4. Umbrella
5. Unanimous

Ans ☒ 1. 1, 4, 3, 5, 2
☒ 2. 4, 1, 3, 5, 2
☒ 3. 1, 4, 2, 3, 5
☒ 4. 4, 1, 5, 3, 2

Question ID : 81616113112
 Status : Answered
 Chosen Option : 1

Q.15 Select the option that is related to the third word in the same way as the second word is related to the first word.

Chicken : Flock :: Bear : ?

Ans ☒ 1. Drove
☒ 2. Sleuth
☒ 3. Ambush
☒ 4. Clutter

Question ID : 81616113115
 Status : Not Answered
 Chosen Option : --

Q.16 In a certain code language, 'MORBID' is written as 'THGMID'. How will 'OBTAIN' be written in that language?

Ans ☒ 1. GFOJDS
☒ 2. JOFGSD
☒ 3. GJFOSD
☒ 4. JGOFDS

Question ID : 81616112915
 Status : Not Answered
 Chosen Option : --

Q.17 Four number-pairs have been given, out of which three are alike in some manner and one is different. Select the number-pair that is different.

Ans ☒ 1. 169 : 55
☒ 2. 289 : 70
☒ 3. 256 : 61
☒ 4. 324 : 64

Question ID : 81616112215
 Status : Answered
 Chosen Option : 4

Q.18 Introducing Rajat to a guest, Ajay said, "He is the only son of my father's daughter-in law".
How is Ajay related to Rajat?

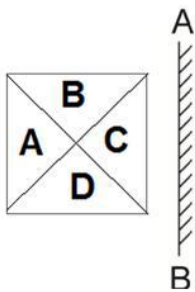
- Ans
- ☒ 1. Paternal grandfather
 - ☒ 2. Maternal grandfather
 - ☒ 3. Brother
 - ☒ 4. Either father or uncle

Question ID : 81616112514

Status : Answered

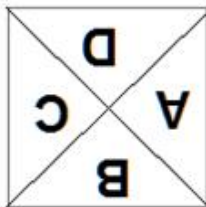
Chosen Option : 3

Q.19 Select the correct mirror image of the given figure when the mirror is placed at 'AB' as shown.

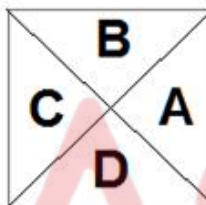


Ans

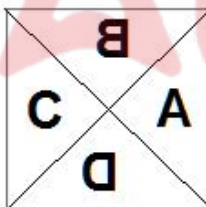
☒ 1.



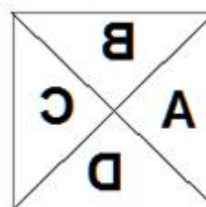
☒ 2.



☒ 3.



☒ 4.

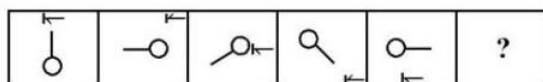


Question ID : 81616112527

Status : Answered

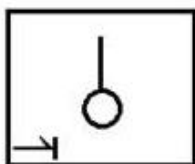
Chosen Option : 4

Q.20 Select the figure from among the given options that can replace the question mark (?) in the following series.

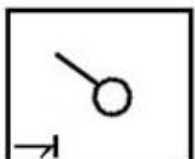


Ans

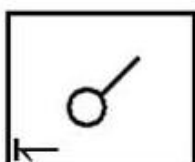
✗ 1.



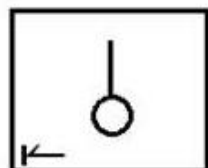
✗ 2.



✗ 3.



✓ 4.



Question ID : 81616113129

Status : Answered

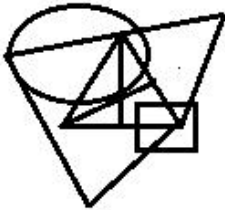
Chosen Option : 4

Q.21 Select the option in which the given figure is embedded (rotation is NOT allowed).

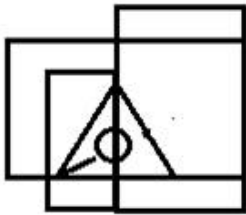


Ans

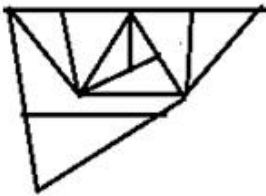
✓ 1.



✗ 2.



✗ 3.



✗ 4.



Question ID : 81616112526

Status : Answered

Chosen Option : 1

Q.22 Select the option in which the words share the same relationship as that shared by the given pair of words.

Raj Ghat : Mahatma Gandhi

Ans ✓ 1. Vijay Ghat : Lal Bahadur Shastri

✗ 2. Shanti Vana : Rajiv Gandhi

✗ 3. Shakti Sthal : Sanjay Gandhi

✗ 4. Veer Bhoomi : Indira Gandhi

Question ID : 81616112510

Status : Answered

Chosen Option : 1

Q.23 Study the given pattern carefully and select the number that can replace the question mark (?) in it.

22 32 7
18 24 5
32 40 ?

- Ans ☒ 1. 4
☒ 2. 8
☒ 3. 12
☒ 4. 10

Question ID : 81616112923

Status : Not Answered

Chosen Option : --

Q.24 Read the given statements and conclusions carefully. Assuming that the information given in the statements is true, even if it appears to be at variance with commonly known facts, decide which of the given conclusions logically follows from the statements.

Statements:

All computers are laptops.
All hard disks are pen drives.
No pen drive is a keyboard.
No computer is a hard disk.

Conclusions:

- I. Some pen drives are not laptops.
II. No keyboard is a computer.
III. No hard disk is a laptop.
IV. All pen drives are not keyboards.

- Ans ☒ 1. Only conclusion III follows
☒ 2. Only conclusion I follows
☒ 3. Only conclusion II follows
☒ 4. Only conclusion IV follows

Question ID : 81616112919

Status : Not Answered

Chosen Option : --

Q.25 Study the given pattern carefully and select the number that can replace the question mark (?) in it.

6 11 14
8 3 ?
62 47 89

- Ans ☒ 1. 15
☒ 2. 5
☒ 3. 6
☒ 4. 4

Question ID : 81616112217

Status : Not Answered

Chosen Option : --

Q.1 Which of the following is also called 'green algae'?

- Ans
- ☒ 1. Phaeophyceae
 - ☒ 2. Porphyridium
 - ☒ 3. Chlorophyceae
 - ☒ 4. Rhodophyceae

Question ID : 81616112233
Status : Answered
Chosen Option : 3

Q.2 _____ organised his trusted nobles into a group of forty known as Turkan-i-Chahalgani.

- Ans
- ☒ 1. Qutub-Ud-Din Aibak
 - ☒ 2. Balban
 - ☒ 3. Iltutmish
 - ☒ 4. Ala-ud-Din Khilji

Question ID : 81616112544
Status : Answered
Chosen Option : 2

Q.3 Who among the following is the author of the book 'Interpreter of Maladies'?

- Ans
- ☒ 1. Sudha Murty
 - ☒ 2. Arundhati Roy
 - ☒ 3. Anita Nair
 - ☒ 4. Jhumpa Lahiri

Question ID : 81616112547
Status : Not Answered
Chosen Option : --

Q.4 The _____ rate measures rising prices in everything except food and energy.

- Ans
- ☒ 1. wage inflation
 - ☒ 2. core inflation
 - ☒ 3. stagflation
 - ☒ 4. deflation

Question ID : 81616112532
Status : Answered
Chosen Option : 1

Q.5 Who among the following was the first Vice President of India?

- Ans
- ☒ 1. Varahagiri Venkata Giri
 - ☒ 2. Gopal Swarup Pathak
 - ☒ 3. Sarvepalli Radhakrishnan
 - ☒ 4. Zakir Hussain

Question ID : 81616112245
Status : Answered
Chosen Option : 3

Q.6 The elements of the groups 3 to 12 are called ____ elements or transition elements.

Ans ☒ 1. c-block

☒ 2. d-block

☒ 3. a-block

☒ 4. b-block

Question ID : 81616112538

Status : Answered

Chosen Option : 2

Q.7 ____ is a practice of establishing and managing individual trees generally for amenity purposes.

Ans ☒ 1. Floriculture

☒ 2. Viniculture

☒ 3. Silviculture

☒ 4. Arboriculture

Question ID : 81616113147

Status : Answered

Chosen Option : 2

Q.8 Which of the following is a private good?

Ans ☒ 1. A good that is available to everyone to consume, regardless of who pays for it and who does not.

☒ 2. A good that is consumed by a single person or household

☒ 3. Spillover benefits

☒ 4. Non-rival in consumption and non-excludable

Question ID : 81616112230

Status : Answered

Chosen Option : 2

Q.9 Which of the following nations is NOT a part of the Quad Group?

Ans ☒ 1. Australia

☒ 2. Canada

☒ 3. India

☒ 4. Japan

Question ID : 81616112553

Status : Answered

Chosen Option : 2

Q.10 In which Indian state will you find the Borail Wildlife Sanctuary?

- Ans
- ☒ 1. Karnataka
 - ☒ 2. Odisha
 - ☒ 3. Assam
 - ☒ 4. West Bengal

Question ID : 81616112236
Status : Not Answered
Chosen Option : --

Q.11 _____ is a branch of biology that studies fungi.

- Ans
- ☒ 1. Morphology
 - ☒ 2. Kalology
 - ☒ 3. Mycology
 - ☒ 4. Virology

Question ID : 81616112938
Status : Answered
Chosen Option : 3

Q.12 Which of the following is one of the metals used in LED semiconductor technology?

- Ans
- ☒ 1. Copper
 - ☒ 2. Gallium
 - ☒ 3. Iron
 - ☒ 4. Zinc

Question ID : 81616113141
Status : Answered
Chosen Option : 2

Q.13 Which of the following countries' former Prime Minister was awarded with the Padma Vibhushan award in 2021?

- Ans
- ☒ 1. Nepal
 - ☒ 2. Japan
 - ☒ 3. Sri Lanka
 - ☒ 4. Bangladesh

Question ID : 81616113152
Status : Answered
Chosen Option : 2

Q.14 What is the name of the river formed by the confluence of Sankh River and South Koel River at Vedvyas in Odisha?

- Ans ☒ 1. Brahmani
☒ 2. Pennar
☒ 3. Subarnarekha
☒ 4. Sabarmati

Question ID : 81616112540
Status : Answered
Chosen Option : 1

Q.15 Of the known elements in the periodic table, only _____ are gases under normal atmospheric conditions.

- Ans ☒ 1. 11
☒ 2. 13
☒ 3. 12
☒ 4. 10

Question ID : 81616112941
Status : Not Answered
Chosen Option : --

Q.16 Who among the following was the Australian Open 2020 women's singles winner?

- Ans ☒ 1. Simona Halep
☒ 2. Serena Williams
☒ 3. Garbine Muguruza
☒ 4. Sofia Kenin

Question ID : 81616112955
Status : Answered
Chosen Option : 1

Q.17 The place of Gautama Buddha's birth was a grove known as _____.

- Ans ☒ 1. Kavus
☒ 2. Lumbini
☒ 3. Mangar Bani
☒ 4. Mawphlang

Question ID : 81616112240
Status : Answered
Chosen Option : 2

Q.18 When is the Hindi Diwas observed annually?

- Ans
- ☐ 1. 2 October
 - ☐ 2. 14 March
 - ☐ 3. 6 April
 - ☒ 4. 14 September

Question ID : 81616112934
Status : Answered
Chosen Option : 4

Q.19 Who is the ex-officio President of the Indian Parliamentary Group (IPG), set up in 1949, which functions as the national group of the Inter-Parliamentary Union (IPU) and the main branch of the Commonwealth Parliamentary Association (CPA) in India?

- Ans
- ☐ 1. Vice President
 - ☐ 2. Prime Minister
 - ☐ 3. President
 - ☒ 4. Speaker of the Lok Sabha

Question ID : 81616112549
Status : Answered
Chosen Option : 4

Q.20 In which state is Ponu Yoksi, a sword-like instrument, used during ceremonial dances performed by priests?

- Ans
- ☐ 1. Uttar Pradesh
 - ☐ 2. Himachal Pradesh
 - ☒ 3. Arunachal Pradesh
 - ☐ 4. Madhya Pradesh

Question ID : 81616112228
Status : Answered
Chosen Option : 1

Q.21 Who among the following had written the book 'Char Chaman', during the reign of Shah Jahan, describing the Mughal nobility?

- Ans
- ☒ 1. Chandrabhan Brahman
 - ☐ 2. Abu'l Dazi
 - ☐ 3. Muhammad Waris
 - ☐ 4. Gulbadan Begum

Question ID : 81616112949
Status : Answered
Chosen Option : 2

Q.22 Where is the headquarters of International Hockey Federation (FIH) located?

- Ans ☒ 1. Australia
☒ 2. Switzerland
☐ 3. Bhutan
☐ 4. Nepal

Question ID : 81616113156
 Status : Answered
 Chosen Option : 2

Q.23 In February 2021, the Defence Ministry of India awarded a contract to manufacture 83 Light Combat Aircraft (LCA) Tejas fighters to ____.

- Ans ☒ 1. Hindustan Aeronautics Limited
☐ 2. Bharat Dynamics Limited
☐ 3. Bharat Electronics Limited
☐ 4. Defence Research and Development Organisation

Question ID : 81616113160
 Status : Answered
 Chosen Option : 1

Q.24 In which of the following years was the origin and enactment of the Indian Age of Consent Act passed?

- Ans ☐ 1. 1889
☐ 2. 1901
☒ 3. 1891
☐ 4. 1834

Question ID : 81616112946
 Status : Not Answered
 Chosen Option : --

Q.25 How many people were awarded the Padma Vibhushan in January 2021?

- Ans ☐ 1. 29
☐ 2. 4
☐ 3. 10
☒ 4. 7

Question ID : 81616113158
 Status : Answered
 Chosen Option : 4

Section : Quantitative Aptitude

Q.1 If $4x^4 - 37x^2 + 9 = 0, x > \sqrt{\frac{3}{2}}$, then what is the value of $8x^3 - \frac{27}{x^3}$?

- Ans
- ☐ 1. 35
 - ☒ 2. 215
 - ☐ 3. -215
 - ☐ 4. -35

Question ID : 81616112265
Status : Answered
Chosen Option : 2

Q.2 If $a - \frac{12}{a} = 1$, where $a > 0$, then the value of $a^2 + \frac{16}{a^2}$ is:

- Ans
- ☐ 1. 15
 - ☒ 2. 17
 - ☐ 3. 19
 - ☐ 4. 11

Question ID : 81616113172
Status : Answered
Chosen Option : 2

Q.3 Table shows income (in ₹) received by 4 employees of a company during the month of December 2020 and all their income sources.

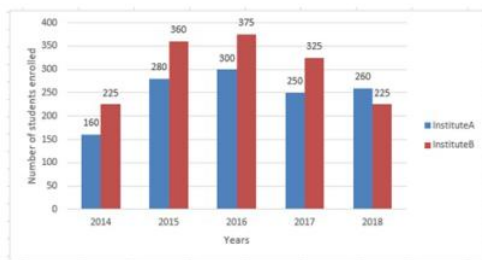
Source	Amit	Suresh	Nitin	Varun
Salary	35000	38500	29000	42000
Arrears	6000	6300	5000	7500
Bonus	1000	1100	1000	1240
Overtime	1800	1950	1400	1500

By what percent is the bonus of Varun less than the bonus of Amit and Nitin taken together?

- Ans
- ☐ 1. 45
 - ☐ 2. 48
 - ☐ 3. 40.9
 - ☒ 4. 38

Question ID : 81616112579
Status : Answered
Chosen Option : 3

Q.4 The bar graph shows the number of students enrolled for a science course in institutes A and B during 5 years from 2014 to 2018,



What is the ratio of the total numbers of students enrolled in institute B in 2015 and 2017 to that of students enrolled in institute A in 2014 and 2016?

- Ans
- ☐ 1. 111 : 91
 - ☐ 2. 91 : 111
 - ☐ 3. 92 : 137
 - ☒ 4. 137 : 92

Question ID : 81616113284

Status : Answered

Chosen Option : 4

Q.5 A train leaves station A at 8 am and reaches station B at 12 noon. A car leaves station B at 8:30 am and reaches station A at the same time when the train reaches station B. At what time do they meet?

- Ans
- ☐ 1. 10 : 22 am
 - ☒ 2. 10 : 08 am
 - ☐ 3. 9 : 38 am
 - ☐ 4. 9 : 52 am

Question ID : 81616112968

Status : Not Answered

Chosen Option : --

Q.6 The value of $3\frac{5}{6} + \left[3\frac{2}{3} + \left\{ \frac{15}{4} \left(5\frac{4}{5} \div 14\frac{1}{2} \right) \right\} \right]$ is equal to:

- Ans
- ☐ 1. 6
 - ☐ 2. 7
 - ☒ 3. 9
 - ☐ 4. 8

Question ID : 81616113162

Status : Answered

Chosen Option : 3

Q.7 In $\triangle ABC$, $AB = 20$ cm, $BC = 21$ cm and $AC = 29$ cm. What is the value of $\cot C + \operatorname{cosec} C - 2 \tan A$?

- Ans
- ☒ 1. $\frac{3}{5}$
 - ☒ 2. $\frac{9}{20}$
 - ☒ 3. $\frac{2}{5}$
 - ☒ 4. $\frac{7}{20}$

Question ID : 81616113786

Status : Answered

Chosen Option : 3

Q.8 In a triangle ABC, point D lies on AB, and points E and F lie on BC such that DF is parallel to AC and DE is parallel to AF. If $BE = 4$ cm, $CF = 3$ cm, then find the length (in cm) of EF.

- Ans
- ☒ 1. 5
 - ☒ 2. 3
 - ☒ 3. 2
 - ☒ 4. 1.5

Question ID : 81616112572

Status : Not Answered

Chosen Option : --

Q.9 A and B can complete a work in 15 days and 10 days respectively. They started doing the work together but after 4 days B had to leave. Then A working with a new worker C completed the remaining work in 3 days. If C works alone, in how many days he can do 40% of the same work?

- Ans
- ☒ 1. 9
 - ☒ 2. $8\frac{1}{2}$
 - ☒ 3. 8
 - ☒ 4. 10

Question ID : 81616112260

Status : Answered

Chosen Option : 1

Q.10 If one of the angles of a triangle is 74° , then the angle between the bisectors of the other two interior angles is:

- Ans
- ☒ 1. 53°
 - ☒ 2. 106°
 - ☒ 3. 127°
 - ☒ 4. 16°

Question ID : 81616113177

Status : Answered

Chosen Option : 3

Q.11 $\frac{\cot^3 \theta}{\operatorname{cosec}^2 \theta} + \frac{\tan^3 \theta}{\sec^2 \theta} + 2 \sin \theta \cos \theta = ?$

- Ans
- ✓ 1. $\operatorname{cosec} \theta \sec \theta$
 - ✗ 2. $\sin \theta \cos \theta$
 - ✗ 3. $\operatorname{cosec}^2 \theta \sec^2 \theta$
 - ✗ 4. $\sin^2 \theta \cos \theta$

Question ID : 81616112373
Status : Answered
Chosen Option : 1

Q.12 If the nine-digit number 7p5964q28 is completely divisible by 88, what is the value of $(p^2 - q)$, for the largest value of q, where p and q are natural numbers?

- Ans
- ✗ 1. 81
 - ✗ 2. 9
 - ✗ 3. 0
 - ✓ 4. 72

Question ID : 81616112252
Status : Not Answered
Chosen Option : --

Q.13 Table shows the number of trees planted in 4 cities from 2016 to 2020.

Years	Chandigarh	Ahmadabad	Pune	Kolkata
2016	1800	2500	1800	2000
2017	2500	2300	1850	1800
2018	2300	2400	1840	1760
2019	2440	1950	1900	1600
2020	2250	2100	2000	1750

In which year were the maximum number of trees planted?

- Ans
- ✗ 1. 2016
 - ✗ 2. 2020
 - ✓ 3. 2017
 - ✗ 4. 2018

Question ID : 81616112577
Status : Answered
Chosen Option : 3

Q.14 Chamanlal, Arshad and Jagjit Singh contested an election. All the votes polled were valid. Arshad got 35% of the total votes. For every 35 votes Chamanlal got 14 votes. The winner got 4950 more votes than the person who received the least number of votes. Find the total number of votes polled.

- Ans
- ☒ 1. 99000
 - ☒ 2. 33000
 - ☒ 3. 13378
 - ☒ 4. 38000

Question ID : 81616112256
Status : Not Answered
Chosen Option : --

Q.15 AB is a diameter of a circle. C and D are points on the opposite sides of the diameter AB, such that $\angle ACD = 25^\circ$. E is a point on the minor arc BD. Find the measure of $\angle BED$ (in degrees).

- Ans
- ☒ 1. 105
 - ☒ 2. 125
 - ☒ 3. 130
 - ☒ 4. 115

Question ID : 81616112267
Status : Answered
Chosen Option : 1

Q.16 Three shopkeepers A, B and C marked an identical article at ₹4820. A, B and C sold their article on successive discounts of 20% and 20%; 25% and 15%; 30% and 10% respectively. Which shopkeeper gives the maximum discount and how much (in Rs)?

- Ans
- ☒ 1. C, 1780
 - ☒ 2. C, 1783.40
 - ☒ 3. B, 1800
 - ☒ 4. A, 1735.20

Question ID : 81616112962
Status : Answered
Chosen Option : 2

Q.17 Hridaya opened her piggy bank and found coins of denomination ₹1, ₹2, ₹5 and ₹10 in the ratio 10 : 5 : 2 : 1. If there are 72 coins in all, then how much money (in ₹) was there in the piggy bank in the form of coins?

- Ans
- ☒ 1. 100
 - ☒ 2. 72
 - ☒ 3. 160
 - ☒ 4. 90

Question ID : 81616112965
Status : Answered
Chosen Option : 3

Q.18 A sum at a certain rate of simple interest becomes ₹14880 after 3 years and ₹16800 after 5 years. Find the simple interest on the same sum at 10% per annum for 4 years (in ₹).

- Ans
- ☒ 1. 5184
 - ☒ 2. 4860
 - ☒ 3. 4800
 - ☒ 4. 4740

Question ID : 81616112259

Status : Answered

Chosen Option : 1

Q.19 From an external point A, two tangents AB and AC have been drawn to a circle touching the circle at B and C respectively. P and Q are points on AB and AC respectively such that PQ touches the circle at R. If AB = 11 cm, AP = 7 cm and AQ = 9 cm, then find the length of PQ (in cm).

- Ans
- ☒ 1. 7
 - ☒ 2. 5
 - ☒ 3. 8
 - ☒ 4. 6

Question ID : 81616112569

Status : Answered

Chosen Option : 4

Q.20 What is the ratio of the average of first eight prime numbers to the average of first ten even natural numbers?

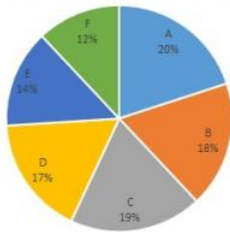
- Ans
- ☒ 1. 7 : 8
 - ☒ 2. 1 : 7
 - ☒ 3. 7 : 80
 - ☒ 4. 8 : 70

Question ID : 81616112557

Status : Answered

Chosen Option : 1

- Q.21** The following Pie chart represents the percentage-wise distribution of 300 students of class X in a school in six different sections A, B, C, D, E and F.



The table given below shows the number of boys of class X in six different sections A, B, C, D, E and F.

Section	A	B	C	D	E	F
No. of boys	36	26	34	28	x	20

If in section E, the ratio of the number of boys to the number of girls is 3 : 4, then the ratio of number of boys in section E to the number of girls in section C is :

- Ans**
- ☒ 1. 23 : 18
 - ☒ 2. 23 : 24
 - ☒ 3. 24 : 23
 - ☒ 4. 18 : 23

Question ID : 81616113286

Status : Not Answered

Chosen Option : --

- Q.22** A heap of wheat is in the form of a cone whose base diameter is 8.4 m and height is 1.75 m. The heap is to be covered by canvass. What is the area (in m^2) of the canvas required? (Use $\pi = \frac{22}{7}$)

- Ans**
- ☒ 1. 60.06
 - ☒ 2. 60.6
 - ☒ 3. 115.05
 - ☒ 4. 115.5

Question ID : 81616112565

Status : Answered

Chosen Option : 1

- Q.23** If $2 \sin(3x - 15)^\circ = 1$, $0^\circ < (3x - 15) < 90^\circ$, then find the value of $\cos^2(2x + 15)^\circ + \cot^2(x + 15)^\circ$.

- Ans**
- ☒ 1. $\frac{7}{2}$
 - ☒ 2. 1
 - ☒ 3. $-\frac{7}{2}$
 - ☒ 4. $\frac{5}{2}$

Question ID : 81616112270

Status : Answered

Chosen Option : 1

Q.24 If $(16\sqrt{2}x^3 + 81\sqrt{3}y^3) \div (2\sqrt{2}x + 3\sqrt{3}y) = Ax^2 + By^2 + Cxy$, then find the value of $2A - 3B - 2\sqrt{6}C$.

- Ans
- ☒ 1. 25
 - ☒ 2. 7
 - ☒ 3. 137
 - ☒ 4. 79

Question ID : 81616112971
Status : Answered
Chosen Option : 3

Q.25 Radha purchased a Computer table for ₹10000 and a Centre table for ₹5000. She sold Computer table with 8% profit. With what profit percent should she sell the Centre table so as to gain 10% on the whole transaction?

- Ans
- ☒ 1. 12%
 - ☒ 2. 10%
 - ☒ 3. 14%
 - ☒ 4. 18%

Question ID : 81616113166
Status : Answered
Chosen Option : 3

Section : English Comprehension

Q.1 Select the most appropriate meaning of the following idiom.

To the nines

- Ans
- ☒ 1. To perfection
 - ☒ 2. To great depths
 - ☒ 3. To be exalted
 - ☒ 4. To be jealous

Question ID : 81616113002
Status : Answered
Chosen Option : 1

Q.2 Select the option that expresses the given sentence in indirect speech.

The teacher said, "Man is mortal."

- Ans
- ☒ 1. The teacher said that man was mortal.
 - ☒ 2. The teacher instructed that man was mortal.
 - ☒ 3. The teacher said that men were mortal.
 - ☒ 4. The teacher said that man is mortal.

Question ID : 81616112583
Status : Answered
Chosen Option : 4

Q.3 Select the most appropriate option to fill in the blank.

I read some _____ of properties for sale on the Internet before I called the agent.

- Ans
- ☒ 1. spaces
 - ☒ 2. monologues
 - ☒ 3. arguments
 - ☒ 4. descriptions

Question ID : 81616112301

Status : Answered

Chosen Option : 3

Q.4 Sentences of a paragraph are given below in jumbled order. Arrange the sentences in the right order to form a meaningful and coherent paragraph.

- A. There are many secondary reasons as well along with increasing levels of carbon.
- B. The term is used to describe the unnatural rise in earth's average temperature.
- C. Increased carbon dioxide is the primary driver of global warming.
- D. Global warming is the single biggest threat to life on earth today.

- Ans
- ☒ 1. DABC
 - ☒ 2. DBCA
 - ☒ 3. ABCD
 - ☒ 4. ACBD

Question ID : 81616113198

Status : Answered

Chosen Option : 2

Q.5 Select the option that can be used as a one-word substitute for the given group of words.

A large bedroom for a number of people in a school or institution.

- Ans
- ☒ 1. Creche
 - ☒ 2. Hostel
 - ☒ 3. Dormitory
 - ☒ 4. Assembly

Question ID : 81616112297

Status : Answered

Chosen Option : 3

Q.6 Sentences of a paragraph are given below in jumbled order. Arrange the sentences in the right order to form a meaningful and coherent paragraph.

- A. This awareness has motivated everyone to go for physical exercises.
- B. These days people are more aware of their health.
- C. In addition to physical exercises, some prefer taking health supplements too.
- D. It is advisable, but one should consult a trainer/doctor before consuming health supplements.

Ans ☒ 1. BACD

☒ 2. DBCA

☒ 3. ADBC

☒ 4. BADC

Question ID : 81616112997

Status : Answered

Chosen Option : 1

Q.7 Select the most appropriate ANTONYM of the given word.

Harmony

Ans ☒ 1. Conflict

☒ 2. Amity

☒ 3. Accord

☒ 4. Concord

Question ID : 81616113001

Status : Answered

Chosen Option : 1

Q.8 Select the INCORRECTLY spelt word.

Ans ☒ 1. Perfectionist

☒ 2. Pessimist

☒ 3. Optimist

☒ 4. Fatalist

Question ID : 81616113209

Status : Answered

Chosen Option : 2

Q.9 Select the option that expresses the given sentence in passive voice.

The postman had delayed the letter.

Ans ☒ 1. The letter had been delayed by the postman.

☒ 2. The letter had delayed the postman.

☒ 3. The letter was delayed by the postman.

☒ 4. The postman had been delayed by the letter.

Question ID : 81616112279

Status : Answered

Chosen Option : 1

Q.10 Select the most appropriate synonym of the given word.

Rejuvenate

- Ans ☒ 1. Retell
☒ 2. Refresh
☒ 3. Reset
☒ 4. Retake

Question ID : 81616112595
 Status : Answered
 Chosen Option : 2

Q.11 Select the INCORRECTLY spelt word.

- Ans ☒ 1. Profuse
☒ 2. Virtuous
☒ 3. Luxurians
☒ 4. Recluse

Question ID : 81616113208
 Status : Answered
 Chosen Option : 3

Q.12 Select the most appropriate ANTONYM of the given word.

Elated

- Ans ☒ 1. Excited
☒ 2. Depressed
☒ 3. Proud
☒ 4. Thrilled

Question ID : 81616113202
 Status : Answered
 Chosen Option : 2

Q.13 Select the most appropriate synonym of the given word.

Chaos

- Ans ☒ 1. Fusion
☒ 2. Tension
☒ 3. Confusion
☒ 4. Dirt

Question ID : 81616112594
 Status : Answered
 Chosen Option : 3

Q.14 Select the most appropriate option to substitute the underlined segment in the given sentence. If no substitution is required, select 'No substitution'.

Sholay is one in the most popular Hindi movies.

- Ans ☒ 1. is one of the most popular
☒ 2. No substitution
☒ 3. is one in the more popular
☒ 4. is in the most popular

Question ID : 81616112281
 Status : Answered
 Chosen Option : 1

Q.15 Select the most appropriate option to substitute the underlined segment in the given sentence. If no substitution is required, select 'No substitution'.

Much of the truth about the mysterious death of her pet was not revealed.

- Ans ☒ 1. have not revealed
☒ 2. were not being revealed
☒ 3. No substitution
☒ 4. were not revealed

Question ID : 81616112585
 Status : Answered
 Chosen Option : 3

Q.16 Select the option that can be used as a one-word substitute for the given group of words.

A group of people, typically with vehicles or animals, travelling together.

- Ans ☒ 1. Troop
☒ 2. Gang
☒ 3. Circus
☒ 4. Caravan

Question ID : 81616112298
 Status : Answered
 Chosen Option : 2

Q.17 Select the most appropriate meaning of the following idiom.

Apple of one's eye

- Ans ☒ 1. Someone who plays all sports
☒ 2. Someone very precious or dear
☒ 3. Someone who behaves courteously
☒ 4. Someone with great respect

Question ID : 81616113003
 Status : Answered
 Chosen Option : 4

Q.18 The following sentence has been divided into parts. One of them contains an error. Select the part that contains the error from the given options.

"Would you liked / to have / some fries / along with your coffee, / sir?" / asked the waiter.

- Ans ☒ 1. asked the waiter
☒ 2. along with your coffee
☒ 3. Would you liked
☒ 4. some fries

Question ID : 81616112278

Status : Answered

Chosen Option : 2

Q.19 The following sentence has been split into four segments. Identify the segment that contains a grammatical error.

The supervisor / wanted to known / the pros and cons / of the issue.

- Ans ☒ 1. wanted to known
☒ 2. the pros and cons
☒ 3. The supervisor
☒ 4. of the issue

Question ID : 81616112984

Status : Answered

Chosen Option : 1

Q.20 Select the most appropriate option to fill in the blank.

The jungle was nearly _____, so the progress was slow.

- Ans ☒ 1. immaterial
☒ 2. immortal
☒ 3. immobile
☒ 4. impenetrable

Question ID : 81616112605

Status : Answered

Chosen Option : 4

Comprehension:

In the following passage, some words have been deleted. Fill in the blanks with the help of the alternatives given. Select the most appropriate option for each blank.

It is essential to form a link between formal education and skill (1)____. Multidisciplinary and personality enhancement skills are the (2)____ requirements of every sector. Many reforms are being (3)____ in higher education to co-relate academics to the (4)____ of various service sectors. Innovative models can help to (5)____ the varied needs of skilled and unskilled labour.

SubQuestion No : 21

Q.21 Select the most appropriate option to fill in blank no.1.

Ans ✓ 1. development

✗ 2. maturity

✗ 3. progress

✗ 4. ripening

Question ID : 81616113193

Status : Answered

Chosen Option : 1

Comprehension:

In the following passage, some words have been deleted. Fill in the blanks with the help of the alternatives given. Select the most appropriate option for each blank.

It is essential to form a link between formal education and skill (1)____. Multidisciplinary and personality enhancement skills are the (2)____ requirements of every sector. Many reforms are being (3)____ in higher education to co-relate academics to the (4)____ of various service sectors. Innovative models can help to (5)____ the varied needs of skilled and unskilled labour.

SubQuestion No : 22

Q.22 Select the most appropriate option to fill in blank no.2.

Ans ✗ 1. needless

✓ 2. essential

✗ 3. external

✗ 4. domestic

Question ID : 81616113194

Status : Answered

Chosen Option : 2

Comprehension:

In the following passage, some words have been deleted. Fill in the blanks with the help of the alternatives given. Select the most appropriate option for each blank.

It is essential to form a link between formal education and skill (1)____. Multidisciplinary and personality enhancement skills are the (2)____ requirements of every sector. Many reforms are being (3)____ in higher education to co-relate academics to the (4)____ of various service sectors. Innovative models can help to (5)____ the varied needs of skilled and unskilled labour.

SubQuestion No : 23

Q.23 Select the most appropriate option to fill in blank no.3.

- Ans
- ☒ 1. settled
 - ☒ 2. related
 - ☒ 3. introduced
 - ☒ 4. improved

Question ID : 81616113195

Status : Answered

Chosen Option : 3

Comprehension:

In the following passage, some words have been deleted. Fill in the blanks with the help of the alternatives given. Select the most appropriate option for each blank.

It is essential to form a link between formal education and skill (1)____. Multidisciplinary and personality enhancement skills are the (2)____ requirements of every sector. Many reforms are being (3)____ in higher education to co-relate academics to the (4)____ of various service sectors. Innovative models can help to (5)____ the varied needs of skilled and unskilled labour.

SubQuestion No : 24

Q.24 Select the most appropriate option to fill in blank no.4.

- Ans
- ☒ 1. need
 - ☒ 2. urgency
 - ☒ 3. charge
 - ☒ 4. duty

Question ID : 81616113196

Status : Answered

Chosen Option : 1

Comprehension:

In the following passage, some words have been deleted. Fill in the blanks with the help of the alternatives given. Select the most appropriate option for each blank.

It is essential to form a link between formal education and skill (1)____. Multidisciplinary and personality enhancement skills are the (2)____ requirements of every sector. Many reforms are being (3)____ in higher education to co-relate academics to the (4)____ of various service sectors. Innovative models can help to (5)____ the varied needs of skilled and unskilled labour.


SubQuestion No : 25

Q.25 Select the most appropriate option to fill in blank no.5.

Ans  1. meet

 2. meeting

 3. met

 4. meets

Question ID : 81616113197

Status : Answered

Chosen Option : 1

