

CGLE- Combined Graduate Level Tier-I, 2018 Examination

Roll No.	
Registration No.	
Name	
Test Venue	
Test Time	1:00 PM - 2:00 PM
Test Date	06/06/2019

Section : General Intelligence and Reasoning

Q.1 In a family of eight persons, there are two couples, each having two children. C and D are cousin brothers. The father of E is married to G, who is the aunt of F. F's mother, H, is married to B, the brother of A. C is the nephew of H. How is A related to D?

- Ans**
- ☒ 1. Uncle
 - ☐ 2. Brother
 - ☐ 3. Nephew
 - ☐ 4. Father

Question ID : 98958013658
Status : Not Answered
Chosen Option : --

Q.2 'Dumbness' is related to 'Speech' in the same way as '_____' is related to 'Memory'.

- Ans**
- ☐ 1. Thoughtlessness
 - ☒ 2. Amnesia
 - ☐ 3. Recognition
 - ☐ 4. Illusion

Question ID : 98958013653
Status : Answered
Chosen Option : 2

Q.3 Select the set in which the numbers are related in the same way as are the numbers of the following set.

(15, 22, 31)

- Ans**
- ☒ 1. (7, 14, 23)
 - ☐ 2. (5, 11, 20)
 - ☐ 3. (23, 30, 40)
 - ☐ 4. (11, 18, 29)

Question ID : 98958013663
Status : Answered
Chosen Option : 1

Q.4 Select the combination of letters that when sequentially placed in the gaps of the given letter series will complete the series.

dc_abc_cb_bcd_ba_c

- Ans**
- ☐ 1. dbacb
 - ☐ 2. cbadb
 - ☒ 3. bdacb

Test Prime

**ALL EXAMS,
ONE SUBSCRIPTION**



70,000+
Mock Tests



**Personalised
Report Card**



**Unlimited
Re-Attempt**



600+
Exam Covered



**Previous Year
Papers**



**500%
Refund**



ATTEMPT FREE MOCK NOW

4. bdcab

Question ID : 98958013657

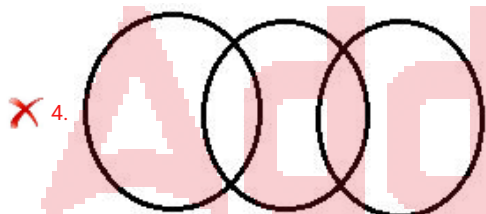
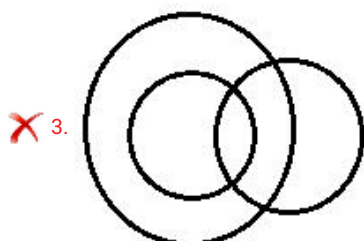
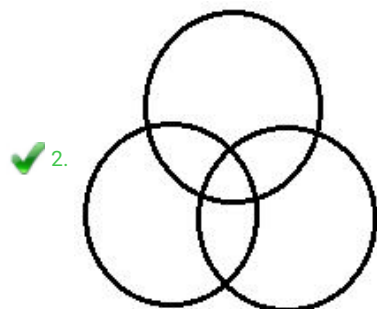
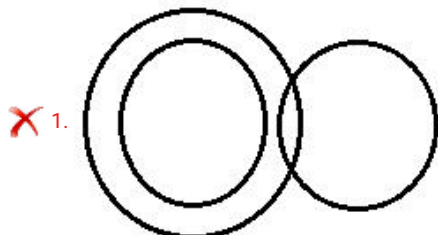
Status : Not Answered

Chosen Option : --

Q.5 Select the Venn diagram that best illustrates the relationship between the following classes.

Doctors, Salaried Persons, Parents

Ans



Question ID : 98958013673

Status : Answered

Chosen Option : 3

Q.6 Select the option that is related to the third term in the same way as the second term is related to the first term.

Happy : Mirthful :: Sad : ?

- Ans
- 1. Contented
 - 2. Jolly
 - 3. Morose
 - 4. Gleeeful

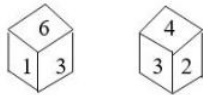
Question ID : 98958013654

Status : Not Answered

Chosen Option : --

Q.7

Two different positions of the same dice are shown. Which number will be at the top if 1 is at the bottom?



- Ans
- ☒ 1. 4
 - ☐ 2. 2
 - ☐ 3. 6
 - ☐ 4. 5

Question ID : 98958013669
Status : Answered
Chosen Option : 1

Q.8 Which number will replace the question mark (?) in the following series?

2, 3, 6, 10, 17, 28, ?

- Ans
- ☐ 1. 45
 - ☐ 2. 39
 - ☐ 3. 43
 - ☒ 4. 46

Question ID : 98958013660
Status : Answered
Chosen Option : 4

Q.9 Three of the following four letter-clusters are alike in a certain way and one is different. Pick the odd one out.

- Ans
- ☒ 1. ZOOM
 - ☐ 2. PAST
 - ☐ 3. BIRD
 - ☐ 4. DECK

Question ID : 98958013651
Status : Answered
Chosen Option : 1

Q.10 Select the number-pair in which the two numbers are related in the same way as are the two numbers of the following number-pair.

28 : 63

- Ans
- ☒ 1. 16 : 36
 - ☐ 2. 36 : 78
 - ☐ 3. 12 : 28
 - ☐ 4. 48 : 98

Question ID : 98958013661
Status : Answered
Chosen Option : 1

Q.11 निम्नलिखित चार शब्दों में से तीन शब्द किसी प्रकार से एक समान हैं और एक शब्द असमान है। असमान शब्द का चयन कीजिए।

- Ans
- ☐ 1. अमरुद
 - ☐ 2. अनार
 - ☒ 3. खीरा

4. पपीता

Question ID : 98958013652

Status : Answered

Chosen Option : 2

Q.12 ₹820 is divided among 6 men, 8 women and 12 boys in such a way that every woman gets an amount equal to that received by one man and one boy combined and that every man gets one and a half times the amount received by a boy. What is the total amount received by 8 women?

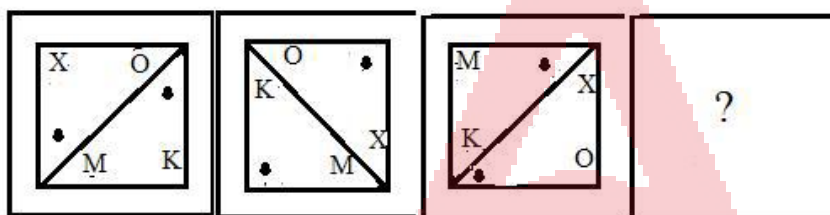
- Ans
- ✓ 1. ₹400
 - ✗ 2. ₹300
 - ✗ 3. ₹240
 - ✗ 4. ₹380

Question ID : 98958013666

Status : Answered

Chosen Option : 1

Q.13 Select the figure that will come next in the following figure series.



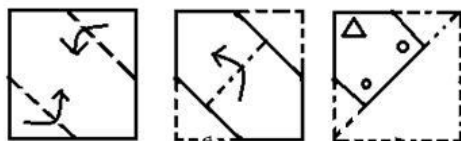
Ans

- ✓ 1.
- ✗ 2.
- ✗ 3.
- ✗ 4.

Question ID : 98958013667

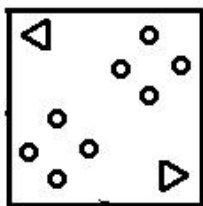
Status : Answered
Chosen Option : 1

Q.14 A square paper is folded and cut as shown below. How will it appear when unfolded?

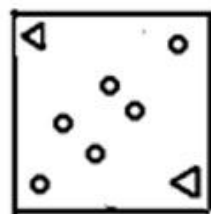


Ans

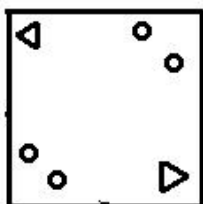
✓ 1.



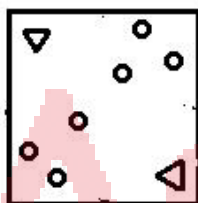
✗ 2.



✗ 3.



✗ 4.

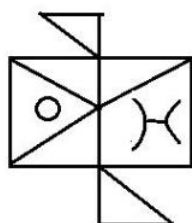


Question ID : 98958013672

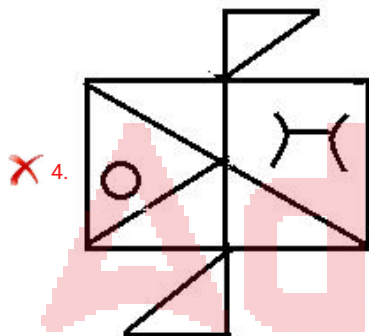
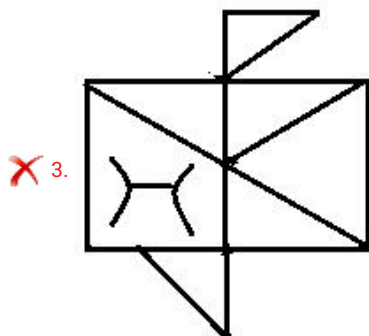
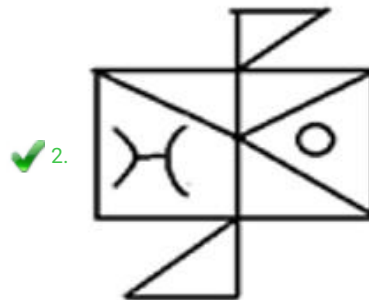
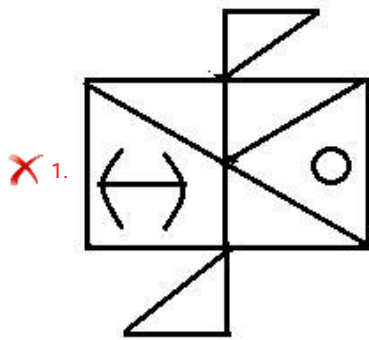
Status : Answered

Chosen Option : 1

Q.15 Select the correct mirror image of the given figure when the mirror is placed to the right of the figure.



Ans



Question ID : 98958013671

Status : Answered

Chosen Option : 2

Q.16 Arrange the following words in a logical and meaningful order.

1. Writing
2. Distributing
3. Publishing
4. Printing
5. Editing

Ans ✗ 1. 1, 2, 3, 4, 5

✗ 2. 2, 4, 3, 1, 5

✗ 3. 2, 3, 4, 5, 1

✓ 4. 1, 5, 4, 3, 2

Question ID : 98958013650

Status : Answered

Chosen Option : 4

Q.17 If POSTER is coded as 592314 and DARK is coded as 8647, then how will STROKE be coded as?

Ans ✗ 1. 234917

✓ 2. 234971

✗ 3. 493287

✗ 4. 329417

Question ID : 98958013656

Status : Answered

Chosen Option : 2

Q.18 Select the option that is related to the third letter-cluster in the same way as the second letter-cluster is related to the first letter-cluster.

JKLM : HLKO :: PQRS : ?

Ans ✓ 1. NRQU

✗ 2. MRQV

✗ 3. NQRU

✗ 4. ORQT

Question ID : 98958013649

Status : Answered

Chosen Option : 1

Q.19 Select the set in which the numbers are related in the same way as are the numbers of the following set.

(12, 16, 28)

Ans ✓ 1. (18, 24, 42)

✗ 2. (9, 15, 21)

✗ 3. (36, 48, 77)

✗ 4. (20, 25, 35)

Question ID : 98958013664

Status : Answered

Chosen Option : 1

Q.20 Which two signs should be interchanged in the following equation to make it correct?

$$12 - 6 \div 12 \times 6 + 6 = 9$$

Ans ✗ 1. \div and \times

✗ 2. $+$ and \div

✓ 3. $-$ and $+$

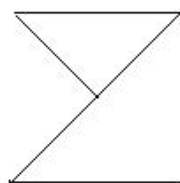
✗ 4. \times and $+$

Question ID : 98958013665

Status : Answered

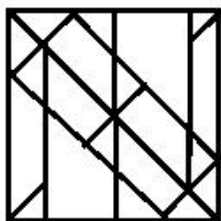
Chosen Option : 3

Q.21 Select the option in which the given figure is embedded.



Ans

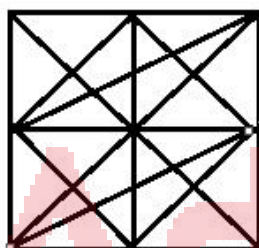
X 1.



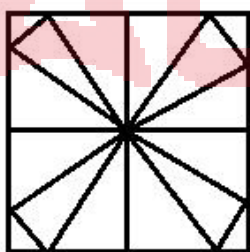
X 2.



✓ 3.



X 4.



Question ID : 98958013670

Status : Answered

Chosen Option : 3

Q.22

Two statements are given followed by three conclusions numbered I, II and III. Assuming the statements to be true even if they seem to be at variance with commonly known facts, decide which of the conclusions logically follow(s) from the statements.

Statements:

Some students are players.

Some players are athletes.

Conclusions:

I. Some students are athletes.

II. Some players are students.

III. No student is an athlete.

Ans ☒ 1. Only conclusion II and either conclusion I or III follow

☒ 2. None of the conclusions follows

☒ 3. Only conclusion I follows

☒ 4. Only conclusions II and III follow

Question ID : 98958013659

Status : Answered

Chosen Option : 1

Q.23 Three of the following four numbers are alike in a certain way and one is different. Pick the number that is different from the rest.

Ans ☒ 1. 166

☒ 2. 341

☒ 3. 132

☒ 4. 209

Question ID : 98958013662

Status : Not Answered

Chosen Option : --

Q.24 In a code language, TEACHING is written as SDBDGHOH. How will BOOKWORM be written as in that language?

Ans ☒ 1. ANPLXNNS

☒ 2. ANPLXPSL

☒ 3. CPNJXPSL

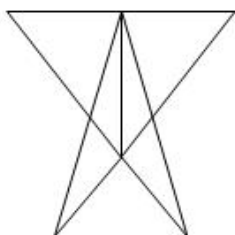
☒ 4. ANPLVNSN

Question ID : 98958013655

Status : Answered

Chosen Option : 4

Q.25 How many triangles are there in the following figure?



Ans ☒ 1. 12

- ☒ 2. 13
☒ 3. 11
☒ 4. 15

Question ID : 98958013668
 Status : Answered
 Chosen Option : 2

Section : General Awareness

Q.1 _____ is a scientific discipline concerned with the study of plant pollen, spores, and certain microscopic planktonic organisms, in both, living and fossil form.

- Ans ☒ 1. Paleobotany
☒ 2. Ethnobotany
☒ 3. Dendrology
☒ 4. Palynology

Question ID : 98958014182
 Status : Answered
 Chosen Option : 1

Q.2 _____ is the branch of zoology concerned with the study of amphibians.

- Ans ☒ 1. Herpetology
☒ 2. Ethology
☒ 3. Mammology
☒ 4. Morphology

Question ID : 98958014181
 Status : Answered
 Chosen Option : 3

Q.3 _____ is the study of the microanatomy of cells, tissues and organs as seen through a microscope.

- Ans ☒ 1. Paleontology
☒ 2. Histology
☒ 3. Ichthyology
☒ 4. Entomology

Question ID : 98958014180
 Status : Answered
 Chosen Option : 2

Q.4 Kala Bhavana, founded in 1919, is a noted institution of education and research in visual arts. It is located in _____.

- Ans ☒ 1. Bihar
☒ 2. Uttar Pradesh
☒ 3. West Bengal
☒ 4. Sikkim

Question ID : 98958014174
 Status : Answered
 Chosen Option : 1

Q.5 Which of the following passes connects Tawang with Lhasa?

- Ans ☒ 1. Chankan Pass

- ☒ 2. Bum La Pass
☒ 3. Hpungan Pass
☒ 4. Kumjawng Pass

Question ID : 98958014185
Status : Answered
Chosen Option : 2

Q.6 Poush Mela displays local artisans displaying folk dances, music, food and culture of ____.

- Ans ☒ 1. Gujarat
☒ 2. West Bengal
☒ 3. Rajasthan
☒ 4. Uttarakhand

Question ID : 98958014175
Status : Answered
Chosen Option : 2

Q.7 Pramod Sawant became Chief Minister of which Indian state in March, 2019?

- Ans ☒ 1. Tamil Nadu
☒ 2. Goa
☒ 3. Kerala
☒ 4. Maharashtra

Question ID : 98958014193
Status : Answered
Chosen Option : 2

Q.8 In March 2019, who among the followings was appointed as India's first Lokpal?

- Ans ☒ 1. Justice A K Sikri
☒ 2. Justice N V Ramana
☒ 3. Justice Pinaki Chandra Ghose
☒ 4. Justice S A Bobde

Question ID : 98958014190
Status : Answered
Chosen Option : 3

Q.9 In March 2019, India won five silver medals at the Makran Cup Boxing Tournament in Iran. Who among the following is NOT one of the silver medallists?

- Ans ☒ 1. Duryodhan Singh Negi
☒ 2. P Lalitha Prasad
☒ 3. Deepak Singh
☒ 4. Manish Kaushik

Question ID : 98958014194
Status : Answered
Chosen Option : 3

Q.10 The invasion of Delhi by Timur in ____ A.D marked the end of the Tughlaq empire.

- Ans ☒ 1. 1645
☒ 2. 1398
☒ 3. 1452

✗ 4. 1215

Question ID : 98958014189

Status : Answered

Chosen Option : 3

Q.11 Who among the following was one of the Governors during the reign of Alauddin Khilji?

Ans

- ✗ 1. Jalal-ud-din Khilji
- ✗ 2. Shams-ud-din Iltutmish
- ✓ 3. Ghiyasuddin Tughlaq
- ✗ 4. Nasiruddin Mahmud

Question ID : 98958014187

Status : Answered

Chosen Option : 3

Q.12 TV remote controls work on the principle of ____.

Ans

- ✗ 1. Ultrasonic waves
- ✗ 2. Laser technology
- ✗ 3. Bluetooth technology
- ✓ 4. Infrared waves

Question ID : 98958014179

Status : Answered

Chosen Option : 4

Q.13 Who was appointed as the director of Bhabha Atomic Research Centre (BARC) for a period of three years in March 2019?

Ans

- ✗ 1. Vishvapavan Pati
- ✗ 2. Kamlesh Nilkanth Vyas
- ✗ 3. Satyajeet Rajan
- ✓ 4. Ajit Kumar Mohanty

Question ID : 98958014191

Status : Answered

Chosen Option : 4

Q.14 Government of India nominated member of NITI Aayog, _____ to head the Food and Agricultural Organisation (FAO) in March 2019.

Ans

- ✓ 1. Ramesh Chand
- ✗ 2. Binay Ranjan Sen
- ✗ 3. V K Paul
- ✗ 4. Amitabh Kant

Question ID : 98958014197

Status : Answered

Chosen Option : 4

Q.15 Who founded the Sayyid dynasty?

Ans

- ✗ 1. Nizam Shah
- ✗ 2. Muhammad-bin-Farid
- ✓ 3. Khizr Khan
- ✗ 4. Bahlul Khan

Question ID : 98958014188

Status : Answered

Chosen Option : 3

Q.16 Majuli, the largest river island in the world is located in

- Ans
- ☒ 1. Arunachal Pradesh
 - ☒ 2. Assam
 - ☒ 3. Nagaland
 - ☒ 4. Uttar Pradesh

Question ID : 98958014183

Status : Answered

Chosen Option : 3

Q.17 Which of the following passes is known as the gateway connecting Jammu and Srinagar?

- Ans
- ☒ 1. Lanak-La Pass
 - ☒ 2. Chang-La Pass
 - ☒ 3. Banihal Pass
 - ☒ 4. Aghil Pass

Question ID : 98958014184

Status : Answered

Chosen Option : 3

Q.18 _____ in Himachal Pradesh is a famous tourist attraction.

- Ans
- ☒ 1. Aghil Pass
 - ☒ 2. Chang-La Pass
 - ☒ 3. Mintaka Pass
 - ☒ 4. Rohtang Pass

Question ID : 98958014186

Status : Answered

Chosen Option : 4

Q.19 In March 2019, the government of India appointed _____ as the director-general of the National Archives of India.

- Ans
- ☒ 1. Kamlesh Vyas
 - ☒ 2. Binay Sen
 - ☒ 3. V K Paul
 - ☒ 4. P V Ramesh

Question ID : 98958014198

Status : Answered

Chosen Option : 3

Q.20 A sustained rise in the general price level in an economy is called _____.

- Ans
- ☒ 1. Disinflation
 - ☒ 2. Deflation
 - ☒ 3. Inflation
 - ☒ 4. Stagflation

Question ID : 98958014177

Status : Answered

Chosen Option : 3

Q.21 Who founded the Indian Statistical Institute on 17 December 1931?

- Ans ☒ 1. P.C. Mahalanobis
☒ 2. R.A. Fischer
☒ 3. F. Yates
☒ 4. M.H. Hansen

Question ID : 98958014176
 Status : Answered
 Chosen Option : 1

Q.22 _____ was observed nationwide from 24th to 30th April, 2019.

- Ans ☒ 1. World Tourism Week
☒ 2. World Immunization Week
☒ 3. World Environment Week
☒ 4. World Postal Week

Question ID : 98958014196
 Status : Answered
 Chosen Option : 2

Q.23 Rust needs three components to occur, i.e., _____.

- Ans ☒ 1. Steel, iron and oxygen
☒ 2. Iron, oxygen and moisture
☒ 3. Iron, nitrogen and moisture
☒ 4. Helium, hydrogen and nitrogen

Question ID : 98958014178
 Status : Answered
 Chosen Option : 2

Q.24 _____ created history in its second Twenty20 International against Ireland by achieving the highest ever T20 total at the Rajiv Gandhi International Cricket Stadium in Dehradun, Uttarakhand.

- Ans ☒ 1. Pakistan
☒ 2. India
☒ 3. Afghanistan
☒ 4. Australia

Question ID : 98958014195
 Status : Answered
 Chosen Option : 3

Q.25 Which of the following articles promotes equal justice and free legal aid for all the citizens?

- Ans ☒ 1. 39A
☒ 2. 32A
☒ 3. 43A
☒ 4. 48A

Question ID : 98958014192
 Status : Answered
 Chosen Option : 1

Q.1 The efficiencies of A, B and C are in the ratio 5 : 3 : 8. Working together they can complete a work in 30 days. A and B worked together for 20 days. The remaining work will be completed by C alone in:

- Ans
- ✓ 1. 40 days
 - ✗ 2. 36 days
 - ✗ 3. 30 days
 - ✗ 4. 32 days

Question ID : 98958013231

Status : Answered

Chosen Option : 3

Q.2 If $\frac{\cos^2 \theta}{\cot^2 \theta - \cos^2 \theta} = 3, 0^\circ < \theta < 90^\circ$, then the value of $\cot \theta + \operatorname{cosec} \theta$ is:

- Ans
- ✓ 1. $\sqrt{3}$
 - ✗ 2. $\frac{\sqrt{3}}{2}$
 - ✗ 3. $2\sqrt{3}$
 - ✗ 4. $\frac{3\sqrt{3}}{4}$

Question ID : 98958013242

Status : Answered

Chosen Option : 1

Q.3 In ΔABC with sides 6 cm, 7 cm and 8 cm, the angle bisector of the largest angle divides the opposite side into two segments. What is the length of the shorter segment?

- Ans
- ✗ 1. $\frac{24}{5}$ cm
 - ✗ 2. $\frac{21}{5}$ cm
 - ✓ 3. $\frac{48}{13}$ cm
 - ✗ 4. $\frac{56}{13}$ cm

Question ID : 98958013241

Status : Answered

Chosen Option : 3

Q.4 The distance between two stations A and B is 800 km. A train X starts from A and moves towards B at 40 km/h and another train Y starts from B and moves towards A at 60 km/h. How far from A will they cross each other?

- Ans
- ✗ 1. 380 km
 - ✓ 2. 320 km
 - ✗ 3. 300 km
 - ✗ 4. 360 km

Question ID : 98958013232

Status : Answered

Chosen Option : 2

Q.5 If $2x^2 + y^2 + 6x - 2xy + 9 = 0$, then the value of $(4x^3 - y^3 + x^2y^2)$ is:

- Ans
- ✓ 1. 0
 - ✗ 2. 9

3. -3

4. -9

Question ID : 98958013236

Status : Answered

Chosen Option : 3

Q.6 The vertices of a ΔPQR lie on a circle with centre O. SR is a tangent to the circle at the point R. If QR bisects the $\angle ORS$, then what is the measure of $\angle RPQ$?

Ans 1. 60°

2. 45°

3. 40°

4. 30°

Question ID : 98958013239

Status : Answered

Chosen Option : 2

Q.7 In a circle with centre O, ACBO is a parallelogram where C is a point on the minor arc AB. What is the measure of $\angle AOB$?

Ans 1. 150°

2. 100°

3. 110°

4. 120°

Question ID : 98958013238

Status : Answered

Chosen Option : 3

Q.8 If $\sin \theta = 4 \cos \theta$, then what is the value of $\sin \theta \cos \theta$?

Ans 1. $\frac{2}{9}$

2. $\frac{3}{10}$

3. $\frac{4}{17}$

4. $\frac{3}{4}$

Question ID : 98958013243

Status : Answered

Chosen Option : 3

Q.9 ABCD is a parallelogram in which diagonals AD and BC intersect at O. AE and DF are perpendiculars on BC at E and F, respectively. Which of the following is NOT true?

Ans 1. $\Delta ABC \cong \Delta DCB$

2. $\Delta AOE \cong \Delta DOF$

3. $\Delta AEB \cong \Delta DFC$

4. $\Delta ADC \cong \Delta ABD$

Question ID : 98958013240

Status : Answered

Chosen Option : 3

Q.10

The average of twelve numbers is 46. The average of the first four numbers is 43 and that of the last five numbers is 49.4. The 5th and the 6th numbers are respectively 4 and 6 more than the 7th number. What is the average of the 5th and the 7th numbers?

- Ans
- ☒ 1. 43.5
 - ☒ 2. 43
 - ☒ 3. 44.5
 - ☒ 4. 44

Question ID : 98958013226

Status : Answered

Chosen Option : 3

Q.11 The value of $\frac{9}{15}$ of $\left(\frac{2}{3} \div \frac{2}{3} \text{ of } \frac{3}{2}\right) \div \left(\frac{3}{4} \times \frac{3}{4} \div \frac{3}{4} \text{ of } \frac{4}{3}\right)$ of $\left(\frac{5}{4} \div \frac{5}{2} \times \frac{2}{5} \text{ of } \frac{4}{5}\right)$ is:

- Ans
- ☒ 1. $\frac{20}{9}$
 - ☒ 2. $\frac{4}{25}$
 - ☒ 3. $\frac{18}{125}$
 - ☒ 4. $\frac{40}{9}$

Question ID : 98958013225

Status : Answered

Chosen Option : 3

Q.12 If $x + y = 12$ and $xy = 27, x > y$, then the value of $(x^3 - y^3)$ is:

- Ans
- ☒ 1. 720
 - ☒ 2. 702
 - ☒ 3. 724
 - ☒ 4. 710

Question ID : 98958013235

Status : Answered

Chosen Option : 2

Q.13 What is the compound interest on a sum of ₹10,000 at 14% p.a. for $2\frac{5}{7}$ years where the interest is compounded yearly? (nearest to ₹ 1)

- Ans
- ☒ 1. ₹4,259
 - ☒ 2. ₹4,296
 - ☒ 3. ₹4,439
 - ☒ 4. ₹4,394

Question ID : 98958013230

Status : Answered

Chosen Option : 2

Q.14 Abhi bought two articles for ₹624. He sold one at a loss of 14% and the other at a profit of 14%. If the selling price of both the articles is equal, then the difference between their cost prices (in ₹) is:

- Ans
- ☒ 1. 89.64
 - ☒ 2. 87.36
 - ☒ 3. 89.68
 - ☒ 4. 88.84

Question ID : 98958013228

Status : Answered

Chosen Option : 2

Q.15 The table shows the production of different types of cars (in thousands).

Year Car	2012	2013	2014	2015	2016
A	54	58	60	63	55
B	40	54	56	61	67
C	46	50	63	73	77
D	33	35	48	45	49
E	47	43	53	48	52

The total production of type E cars in 2012 and 2013 is approximately what percent more than the average production of type A cars during the years 2012 to 2016?

Ans ☒ 1. 53.8

☒ 2. 55.2

☒ 3. 52.2

☒ 4. 56.4

Question ID : 98958013247

Status : Not Answered

Chosen Option : --

Q.16 The length of a metallic pipe is 7.56 m. Its external and internal radii are 2.5 cm and 1.5 cm respectively. If 1 cm³ of the metal weigh 7.5 g, then the weight of the pipe is: (Take $\pi = \frac{22}{7}$)

Ans ☒ 1. 72.82 kg

☒ 2. 70.14 kg

☒ 3. 71.28 kg

☒ 4. 69.68 kg

Question ID : 98958013233

Status : Answered

Chosen Option : 3

Q.17 Let $a = \frac{2 \sin x}{1 + \sin x + \cos x}$ and $b = \frac{c}{1 + \sin x}$. Then $a = b$, if $c = ?$

Ans ☒ 1. $1 - \sin x \cos x$

☒ 2. $1 + \sin x - \cos x$

☒ 3. $1 + \sin x \cos x$

☒ 4. $1 + \cos x - \sin x$

Question ID : 98958013244

Status : Not Answered

Chosen Option : --

Q.18 If $x^2 + y^2 + z^2 = 133$, $xy + yz + zx = 114$ and $xyz = 216$, then the value of $x^3 + y^3 + z^3$ is:

Ans ☒ 1. 948

☒ 2. 999

☒ 3. 942

☒ 4. 1009

Question ID : 98958013237

Status : Not Answered

Chosen Option : --

Q.19

The table shows the production of different types of cars (in thousands).

Year Car	2012	2013	2014	2015	2016
A	54	58	60	63	55
B	40	54	56	61	67
C	46	50	63	73	77
D	33	35	48	45	49
E	47	43	53	48	52

The total production of all type of cars, except type B, in 2012 is what percent less than the total production of all types of cars in 2016?

- Ans
- ✓ 1. 40
- ✗ 2. 25.8
- ✗ 3. 26.7
- ✗ 4. 42

Question ID : 98958013248

Status : Not Answered

Chosen Option : --

Q.20 The table shows the production of different types of cars (in thousands).

Year Car	2012	2013	2014	2015	2016
A	54	58	60	63	55
B	40	54	56	61	67
C	46	50	63	73	77
D	33	35	48	45	49
E	47	43	53	48	52

If the data related to the production of type D cars is represented by a pie chart, then the central angle of the sector representing the production of cars in 2013 will be:

- Ans
- ✗ 1. 84°
- ✗ 2. 75°
- ✓ 3. 60°
- ✗ 4. 77°

Question ID : 98958013246

Status : Not Answered

Chosen Option : --

Q.21 The table shows the production of different types of cars (in thousands).

Year Car	2012	2013	2014	2015	2016
A	54	58	60	63	55
B	40	54	56	61	67
C	46	50	63	73	77
D	33	35	48	45	49
E	47	43	53	48	52

What is the ratio of the total production of type E cars in 2014 and type C cars in 2016 taken together to the total production of type B cars in 2014 and type D cars in 2013 taken together?

- Ans
- ✗ 1. 9 : 8
- ✓ 2. 10 : 7
- ✗ 3. 11 : 8
- ✗ 4. 11 : 5

Question ID : 98958013245

Status : Answered

Chosen Option : 2

Q.22 When the price of an item was reduced by 20%, then its sale increased by $x\%$. If there is an increase of 60% in the receipt of the revenue, then the value of x is:

- Ans
- ✗ 1. 120
- ✗ 2. 96
- ✓ 3. 100
- ✗ 4. 80

Question ID : 98958013234

Status : Answered

Chosen Option : 3

Q.23 The ratio of the present ages of A and B is 8 : 9. After 9 years, this ratio will become 19 : 21. C is 3 years younger to B. What is the present age (in years) of C?

- Ans
- ☒ 1. 49
 - ☒ 2. 48
 - ☒ 3. 51
 - ☒ 4. 52

Question ID : 98958013229

Status : Answered

Chosen Option : 3

Q.24 If a 9-digit number $32x4115y2$ is divisible by 88, then the value of $(4x - y)$ for the smallest possible value of y , is:

- Ans
- ☒ 1. 31
 - ☒ 2. 20
 - ☒ 3. -1
 - ☒ 4. 11

Question ID : 98958013224

Status : Answered

Chosen Option : 4

Q.25 A trader marks his goods at 40% above the cost price. He sells 70% of the goods at the marked price and the rest, he sells by allowing a 40% discount on the marked price. His percentage profit is:

- Ans
- ☒ 1. 23.4
 - ☒ 2. 24.2
 - ☒ 3. 23.2
 - ☒ 4. 24.4

Question ID : 98958013227

Status : Answered

Chosen Option : 3

Section : English Comprehension

Q.1 Given below are four jumbled sentences. Select the option that gives their correct order.

- A. Canada accounts for nearly one-third of the world's production of news print.
- B. Forest products, therefore, have been important export items of Canada for more than a century.
- C. A large part of Canada is covered with coniferous trees.
- D. Pulp and paper are the two most important forest products.

- Ans
- ☒ 1. ABCD
 - ☒ 2. DCAB
 - ☒ 3. CBDA
 - ☒ 4. BACD

Question ID : 98958012525

Status : Answered

Chosen Option : 1

Q.2 Select the most appropriate option to substitute the underlined segment in the given sentence. If no substitution is required, select No improvement.

The Head has been so busy to go through these files and resolve the matter.

- Ans
- ☒ 1. such busy to go through
 - ☒ 2. too busy to go through

- ☐ 3. No improvement
- ☐ 4. too so busy to go through

Question ID : 98958012517
Status : Answered
Chosen Option : 2

Q.3 Select the correct active form of the given sentence.

The wall of this park is being painted by children.

- Ans ☒ 1. Children are painting the wall of this park.
- ☐ 2. The wall is painting children of this park.
- ☐ 3. Children have been painting the wall of this park.
- ☐ 4. Children painted the wall of this park.

Question ID : 98958012515
Status : Answered
Chosen Option : 1

Q.4 Select the synonym of the given word.

ENTICE

- Ans ☐ 1. ensue
- ☐ 2. entail
- ☐ 3. enrage
- ☒ 4. entrap

Question ID : 98958012527
Status : Answered
Chosen Option : 4

Q.5 Select the synonym of the given word.

DUBIOUS

- Ans ☐ 1. certain
- ☒ 2. fishy
- ☐ 3. loyal
- ☐ 4. steady

Question ID : 98958012526
Status : Answered
Chosen Option : 2

Q.6 Select the antonym of the given word.

FINITE

- Ans ☐ 1. finished
- ☐ 2. limited
- ☐ 3. bound
- ☒ 4. endless

Question ID : 98958012528
Status : Answered
Chosen Option : 4

Q.7 Select the most appropriate meaning of the given idiom.

Couch potato

- Ans
- ☒ 1. a person who sleeps all day
 - ☐ 2. a person who watches too much television
 - ☒ 3. a person who remains relaxed and calm
 - ☒ 4. a person who is simple in nature

Question ID : 98958012530
Status : Answered
Chosen Option : 2

Q.8 Select the wrongly spelt word.

- Ans
- ☒ 1. rendezvous
 - ☐ 2. renassaince
 - ☒ 3. remuneration
 - ☒ 4. remonstrate

Question ID : 98958012535
Status : Answered
Chosen Option : 2

Q.9 Select the most appropriate option to fill in the blank.

In many countries the _____ in pay for men and women is quite common, for example, in Germany women are paid 21 per cent less as compared to men.

- Ans
- ☒ 1. unlikeliness
 - ☒ 2. equivalence
 - ☒ 3. disagreement
 - ☐ 4. disparity

Question ID : 98958012537
Status : Answered
Chosen Option : 4

Q.10 Select the most appropriate meaning of the given idiom.

Lead someone by the nose

- Ans
- ☒ 1. to do the right thing
 - ☒ 2. to force someone to take the blame
 - ☐ 3. to dominate someone
 - ☒ 4. to quarrel with someone

Question ID : 98958012531
Status : Answered
Chosen Option : 3

Q.11 Select the wrongly spelt word.

- Ans
- ☐ 1. megre
 - ☒ 2. meadow
 - ☒ 3. matter
 - ☒ 4. measure

Question ID : 98958012534
Status : Answered
Chosen Option : 1

Q.12 Select the most appropriate option to substitute the underlined segment in the given sentence. If no substitution is required, select No improvement.

You won't tell the secret, won't you?

- Ans
- ☒ 1. No improvement
 - ☒ 2. would you
 - ☒ 3. will you
 - ☒ 4. isn't it

Question ID : 98958012516

Status : Answered

Chosen Option : 3

Comprehension:

In the following passage some words have been deleted. Fill in the blanks with the help of the alternatives given. Select the most appropriate option for each blank.

In 1914 a war began in Europe which engulfed the entire world. The damage (1)_____ by this war has no precedent in history. (2)_____ the earlier wars, the civilian populations were (3)_____ not involved and the casualties were mostly (4)_____ to the warring armies. The war (5)_____ began in 1914 was a total war in which all the resources of the warring states were mobilized.

SubQuestion No : 13

Q.13 Select the most appropriate option for blank No. 1.

- Ans
- ☒ 1. made
 - ☒ 2. caused
 - ☒ 3. generated
 - ☒ 4. began

Question ID : 98958012519

Status : Answered

Chosen Option : 2

Comprehension:

In the following passage some words have been deleted. Fill in the blanks with the help of the alternatives given. Select the most appropriate option for each blank.

In 1914 a war began in Europe which engulfed the entire world. The damage (1)_____ by this war has no precedent in history. (2)_____ the earlier wars, the civilian populations were (3)_____ not involved and the casualties were mostly (4)_____ to the warring armies. The war (5)_____ began in 1914 was a total war in which all the resources of the warring states were mobilized.

SubQuestion No : 14

Q.14 Select the most appropriate option for blank No. 2.

- Ans
- ☒ 1. At
 - ☒ 2. Into
 - ☒ 3. In
 - ☒ 4. On

Question ID : 98958012520

Status : Answered

Chosen Option : 3

Comprehension:

In the following passage some words have been deleted. Fill in the blanks with the help of the alternatives given. Select the most appropriate option for each blank.

In 1914 a war began in Europe which engulfed the entire world. The damage (1)_____ by this war has no precedent in history. (2)_____ the earlier wars, the civilian populations were (3)_____ not involved and the casualties were mostly (4)_____ to the warring armies. The war (5)_____ began in 1914 was a total war in which all the resources of the warring states were mobilized.

SubQuestion No : 15

Q.15 Select the most appropriate option for blank No. 3.

- Ans
- ☒ 1. generally
 - ☐ 2. broadly
 - ☐ 3. chiefly
 - ☐ 4. finally

Question ID : 98958012521
Status : Answered
Chosen Option : 1

Comprehension:

In the following passage some words have been deleted. Fill in the blanks with the help of the alternatives given. Select the most appropriate option for each blank.

In 1914 a war began in Europe which engulfed the entire world. The damage (1)_____ by this war has no precedent in history. (2)_____ the earlier wars, the civilian populations were (3)_____ not involved and the casualties were mostly (4)_____ to the warring armies. The war (5)_____ began in 1914 was a total war in which all the resources of the warring states were mobilized.

SubQuestion No : 16

Q.16 Select the most appropriate option for blank No. 4.

- Ans
- ☐ 1. belonged
 - ☒ 2. confined
 - ☐ 3. retrained
 - ☐ 4. bound

Question ID : 98958012522
Status : Answered
Chosen Option : 2

Comprehension:

In the following passage some words have been deleted. Fill in the blanks with the help of the alternatives given. Select the most appropriate option for each blank.

In 1914 a war began in Europe which engulfed the entire world. The damage (1)_____ by this war has no precedent in history. (2)_____ the earlier wars, the civilian populations were (3)_____ not involved and the casualties were mostly (4)_____ to the warring armies. The war (5)_____ began in 1914 was a total war in which all the resources of the warring states were mobilized.

SubQuestion No : 17

Q.17 Select the most appropriate option for blank No. 5.

- Ans
- ☒ 1. which
 - ☐ 2. whom
 - ☐ 3. what
 - ☐ 4. who

Question ID : 98958012523
Status : Answered
Chosen Option : 1

Q.18 Select the word which means the same as the group of words given.

Persons living at the same time

- Ans
- ☐ 1. cosmopolitans
 - ☐ 2. compatriots
 - ☐ 3. colleagues
 - ☒ 4. contemporaries

Question ID : 98958012533
Status : Answered

Chosen Option : 4

Q.19 Select the most appropriate option to fill in the blank.

Catholics and Protestants have a long history of _____ in Northern Ireland but volunteers from both communities came together to build the monument of Peace.

- Ans
- ☒ 1. truce
 - ☒ 2. agreement
 - ☒ 3. contest
 - ☒ 4. conflict

Question ID : 98958012536

Status : Answered

Chosen Option : 4

Q.20 Given below are four jumbled sentences. Select the option that gives their correct order.

- A. In China, thousands of people celebrated it.
- B. The Lunar New Year of the Pig began on 5th February.
- C. Others burned the first joss sticks of the year to bring them good fortune.
- D. Some performers re-enacted historical ceremonies.

- Ans
- ☒ 1. ABCD
 - ☒ 2. BADC
 - ☒ 3. DABC
 - ☒ 4. BDCA

Question ID : 98958012524

Status : Answered

Chosen Option : 2

Q.21 Select the correct passive form of the given sentence.

Take this suitcase upstairs.

- Ans
- ☒ 1. You are requested to take this suitcase upstairs.
 - ☒ 2. You must be taking this suitcase upstairs.
 - ☒ 3. This suitcase should be taken upstairs.
 - ☒ 4. Let this suitcase been taken upstairs.

Question ID : 98958012514

Status : Answered

Chosen Option : 4

Q.22 Select the antonym of the given word.

REPRIMAND

- Ans
- ☒ 1. apprehend
 - ☒ 2. reproach
 - ☒ 3. compliment
 - ☒ 4. blame

Question ID : 98958012529

Status : Answered

Chosen Option : 3

Q.23 In the sentence identify the segment which contains the grammatical error.

I know the cobbler which mends the shoes outside the gate of our colony.

- Ans
- ☒ 1. I know the cobbler

- ☐ 2. the shoes
- ☒ 3. which mends
- ☐ 4. outside the gate

Question ID : 98958012512
Status : Answered
Chosen Option : 3

Q.24 In the sentence identify the segment which contains the grammatical error.

The street artist Satish Munjal has been painting this wall since the past one week.

- Ans ☐ 1. has been painting
- ☐ 2. The street artist
- ☐ 3. this wall
- ☒ 4. since the past one week

Question ID : 98958012513
Status : Answered
Chosen Option : 4

Q.25 Select the word which means the same as the group of words given.

Someone who believes that people cannot change the way events will happen

- Ans ☐ 1. prophet
- ☒ 2. fatalist
- ☐ 3. fanatic
- ☐ 4. seer

Question ID : 98958012532
Status : Answered
Chosen Option : 2