

Multi Tasking Non Technical Staff and Havaldar CBIC and CBN Examination 2023

Roll Number	
Candidate Name	
Venue Name	iON Digital Zone iDZ 1 GT Karnal Road
Exam Date	08/09/2023
Exam Time	4:00 PM - 6:00 PM
Subject	MTS Non Tech Havaldar CBIC and CBN Examination 2023

Section : Numerical and Mathematical Ability

Q.1 Tea leaves worth ₹108 per kg and ₹120 per kg are mixed with a third variety in the ratio 2 : 3 : 5. If the mixture is worth ₹125 per kg, the price (in ₹, rounded off to the nearest integer) of the third variety of tea leaves per kg will be:

- Ans
- ☒ 1. 130
 - ☒ 2. 128
 - ☒ 3. 135
 - ☒ 4. 133

Question ID : 264330156469

Option 1 ID : 264330613265

Option 2 ID : 264330613264

Option 3 ID : 264330613263

Option 4 ID : 264330613266

Status : Answered

Chosen Option : 3

Q.2 Rima covers a certain distance by car driving at a speed of 59 km/h and she returns to the starting point riding on a bike with a speed of 43 km/h. Find the average speed (in km/h) for the whole journey. (Rounded off to 2 decimal places)

- Ans
- ☒ 1. 52.25
 - ☒ 2. 49.75
 - ☒ 3. 42.00
 - ☒ 4. 45.37

Question ID : 264330155730

Option 1 ID : 264330610323

Option 2 ID : 264330610324

Option 3 ID : 264330610326

Option 4 ID : 264330610325

Status : Answered

Chosen Option : 2

Test Prime

**ALL EXAMS,
ONE SUBSCRIPTION**



70,000+
Mock Tests



**Personalised
Report Card**



**Unlimited
Re-Attempt**



600+
Exam Covered



**Previous Year
Papers**



**500%
Refund**



ATTEMPT FREE MOCK NOW

Q.3 If 7 men working 8 hours a day for 5 days can complete a work, then how many men are required to complete the same work if they work 10 hours a day for 7 days?

- Ans**
- ☒ 1. 6
 - ☒ 2. 4
 - ☒ 3. 3
 - ☒ 4. 5

Question ID : 264330156535

Option 1 ID : 264330613529

Option 2 ID : 264330613528

Option 3 ID : 264330613530

Option 4 ID : 264330613527

Status : Answered

Chosen Option : 2

Q.4 The LCM of $\frac{1}{6}, \frac{5}{27}, \frac{4}{15}, \frac{8}{3}$ is:

- Ans**
- ☒ 1. $\frac{40}{3}$
 - ☒ 2. $\frac{3}{28}$
 - ☒ 3. $\frac{5}{28}$
 - ☒ 4. $\frac{40}{5}$

Question ID : 264330156205

Option 1 ID : 264330612221

Option 2 ID : 264330612220

Option 3 ID : 264330612219

Option 4 ID : 264330612222

Status : Answered

Chosen Option : 1

Q.5 The mean proportional between 0.8 and 7.2 is:

- Ans**
- ☒ 1. 2.4
 - ☒ 2. 3.4
 - ☒ 3. 4.2
 - ☒ 4. 1.2

Question ID : 264330153769

Option 1 ID : 264330602541

Option 2 ID : 264330602540

Option 3 ID : 264330602539

Option 4 ID : 264330602542

Status : Answered

Chosen Option : 1

Q.6 The value of $\frac{3 \div 3 \times 2 - 6 \div 3 + 7}{5 \div 5 \times 6 \div 6 + 3 + 3}$ is equal to:

- Ans ☒ 1. 1
- ☐ 2. $\frac{3}{2}$
- ☐ 3. $1\frac{3}{2}$
- ☐ 4. 2

Question ID : 264330156502

Option 1 ID : 264330613397

Option 2 ID : 264330613395

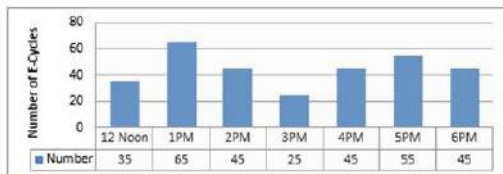
Option 3 ID : 264330613396

Option 4 ID : 264330613398

Status : Answered

Chosen Option : 1

Q.7 The bar diagram represents the number of E- Cycles parking at a metro station from 12:00 P.M. to 6:00 P.M.
How many times the number of E- Cycles parked is more than average?



- Ans ☐ 1. 4
- ☐ 2. 5
- ☒ 3. 2
- ☐ 4. 3

Question ID : 264330154064

Option 1 ID : 264330603721

Option 2 ID : 264330603722

Option 3 ID : 264330603719

Option 4 ID : 264330603720

Status : Answered

Chosen Option : 3

Q.8 A can do a piece of work in 10 days and B can do it in 15 days. They work together for 2 days and then A leaves.
How long will B take to finish the remaining work?

- Ans ☒ 1. 10 days
- ☐ 2. 22 days
- ☐ 3. 12 days
- ☐ 4. 5 days

Question ID : 264330153885

Option 1 ID : 264330603004

Option 2 ID : 264330603003

Option 3 ID : 264330603006

Option 4 ID : 264330603005

Status : Answered

Chosen Option : 1

Q.9 A cylinder has a total surface area of 64π square units, where the height of the cylinder is equal to its radius. If the height is doubled and the radius is halved, then the total surface area of the new cylinder is _____ square units.

- Ans
- ☒ 1. 54π
 - ☒ 2. 40π
 - ☒ 3. 64π
 - ☒ 4. 48π

Question ID : 264330153825

Option 1 ID : 264330602763

Option 2 ID : 264330602764

Option 3 ID : 264330602766

Option 4 ID : 264330602765

Status : Answered

Chosen Option : 2

Q.10 A boy covers a certain distance between his house and school on a cycle. Having an average speed of 10 km/h, he is late by 10 min. However, with an average speed of 15 km/h, he reaches the school in 5 min. earlier. Find the distance (in km) between his house and school.

- Ans
- ☒ 1. 8.5
 - ☒ 2. 8
 - ☒ 3. 7
 - ☒ 4. 7.5

Question ID : 264330156272

Option 1 ID : 264330612490

Option 2 ID : 264330612489

Option 3 ID : 264330612487

Option 4 ID : 264330612488

Status : Answered

Chosen Option : 4

Q.11 A motorboat can row 12 km/h in still water. If the speed of the current is 2 km/h, it takes 1.5 hours more in covering some distance upstream than it does downstream for covering the same distance. The one-side distance is:

- Ans
- ☒ 1. 52.5 km
 - ☒ 2. 50 km
 - ☒ 3. 51.5 km
 - ☒ 4. 53 km

Question ID : 264330156286

Option 1 ID : 264330612545

Option 2 ID : 264330612543

Option 3 ID : 264330612544

Option 4 ID : 264330612546

Status : Answered

Chosen Option : 1

Q.12 A and B entered a partnership for 5 years. At the start of the business, they invested ₹36,000 and ₹58,000, respectively. At the end of 5 years, their total profit was ₹94,000. What will be the share of B (in ₹) out of this profit?

- Ans**
- ☒ 1. 52,000
 - ☒ 2. 46,000
 - ☒ 3. 58,000
 - ☒ 4. 60,000

Question ID : 264330155742

Option 1 ID : 264330610372

Option 2 ID : 264330610371

Option 3 ID : 264330610373

Option 4 ID : 264330610374

Status : Answered

Chosen Option : 3

Q.13 If the ratio of the principal and the simple interest for 5 years is 10 : 7, then the rate of interest per annum is:

- Ans**
- ☒ 1. 18%
 - ☒ 2. 16%
 - ☒ 3. 12%
 - ☒ 4. 14%

Question ID : 264330156523

Option 1 ID : 264330613481

Option 2 ID : 264330613482

Option 3 ID : 264330613479

Option 4 ID : 264330613480

Status : Answered

Chosen Option : 4

Q.14 The table below shows the earning of different schools (in ₹ crores) in different years. Study the table carefully and answer the question that follows.

School/years	2018	2019	2020	2021	2022
P	50	45	49	56	57
Q	46	48	50	55	62
R	70	65	63	68	63
S	38	47	56	60	69
T	48	37	52	69	77

Find the ratio between the total earnings of schools P and R taken together in year 2020 to the total earnings of schools Q, S and T taken together in the year 2022?

- Ans**
- ☒ 1. 7 : 13
 - ☒ 2. 7 : 19
 - ☒ 3. 12 : 7
 - ☒ 4. 12 : 13

Question ID : 264330156573

Option 1 ID : 264330613681

Option 2 ID : 264330613682

Option 3 ID : 264330613679

Option 4 ID : 264330613680

Status : Answered

Chosen Option : 1

Q.15 A student's marks were incorrectly entered as 44 instead of 86. Due to this, the average of the class got decreased by $\frac{3}{2}$. What is the number of students in the class?

- Ans**
- ☒ 1. 24
 - ☒ 2. 28
 - ☒ 3. 36
 - ☒ 4. 30

Question ID : 264330153757

Option 1 ID : 264330602491

Option 2 ID : 264330602494

Option 3 ID : 264330602492

Option 4 ID : 264330602493

Status : Answered

Chosen Option : 2

Q.16 The percentage profit earned by selling an article for ₹955 is equal to the percentage loss incurred by selling the same article for ₹845. At what price should the article be sold to make a 6% profit?

- Ans**
- ☒ 1. ₹955
 - ☒ 2. ₹954
 - ☒ 3. ₹925
 - ☒ 4. ₹1,014

Question ID : 264330159021

Option 1 ID : 264330623443

Option 2 ID : 264330623446

Option 3 ID : 264330623445

Option 4 ID : 264330623444

Status : Answered

Chosen Option : 2

Q.17 Find the area of a triangle whose base is 7 cm and corresponding height is 82 cm.

- Ans**
- ☒ 1. 191 cm^2
 - ☒ 2. 574 cm^2
 - ☒ 3. 143 cm^2
 - ☒ 4. 287 cm^2

Question ID : 264330153892

Option 1 ID : 264330603033

Option 2 ID : 264330603031

Option 3 ID : 264330603034

Option 4 ID : 264330603032

Status : Answered

Chosen Option : 4

Q.18 The price of a commodity increased from ₹200 to ₹250. What is the percentage increase in price?

- Ans**
- ☒ 1. 27%
 - ☒ 2. 20%
 - ☒ 3. 25%
 - ☒ 4. 22%

Question ID : 264330156260

Option 1 ID : 264330612442

Option 2 ID : 264330612439

Option 3 ID : 264330612441

Option 4 ID : 264330612440

Status : Answered

Chosen Option : 3

Q.19 What will be the compound interest on ₹30,000 at 10% per annum for $1\frac{1}{2}$ years, when interest is compounded half-yearly?

- Ans**
- ☒ 1. ₹4,728.75
 - ☒ 2. ₹4,800.75
 - ☒ 3. ₹5,728.75
 - ☒ 4. ₹4,928.75

Question ID : 264330154132

Option 1 ID : 264330603993

Option 2 ID : 264330603991

Option 3 ID : 264330603992

Option 4 ID : 264330603994

Status : Answered

Chosen Option : 1

Q.20 Ravi sells a laptop bag to Reeta for ₹1,920 and he sells another similar laptop bag to Vinay for ₹1,280. The percentage profit earned in selling the laptop bag to Reeta is equal to the percentage loss in selling the laptop bag to Vinay. At what price (in ₹) should Ravi sell the laptop bag to make a profit of 25%?

- Ans**
- ☒ 1. 1,650
 - ☒ 2. 1,600
 - ☒ 3. 1,800
 - ☒ 4. 2,000

Question ID : 264330155706

Option 1 ID : 264330610228

Option 2 ID : 264330610227

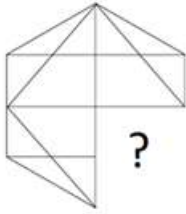
Option 3 ID : 264330610229

Option 4 ID : 264330610230

Status : Answered

Chosen Option : 4

Q.1 Identify the figure that completes the pattern (rotation is NOT allowed).



Ans

✗ 1.



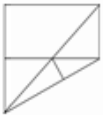
✓ 2.



✗ 3.



✗ 4.



Question ID : 264330154513

Option 1 ID : 264330605515

Option 2 ID : 264330605517

Option 3 ID : 264330605516

Option 4 ID : 264330605518

Status : Answered

Chosen Option : 2

Q.2 What should come in place of ? in the given series based on the English alphabetical order?

HPS, JRU, LTW, NVY, ?

Ans

✓ 1.

PXA

✗ 2.

MXB

✗ 3.

NYB

✗ 4.

NZA

Question ID : 264330155765

Option 1 ID : 264330610463

Option 2 ID : 264330610466

Option 3 ID : 264330610464

Option 4 ID : 264330610465

Status : Answered

Chosen Option : 1

Q.3 What will come in place of '?' in the following equation, if '+' and '×' are interchanged and '-' and '+' are interchanged?

$$16 - 4 + 13 \times 5 + 2 = ?$$

- Ans**
- ☒ 1. 36
 - ☒ 2. 24
 - ☒ 3. 48
 - ☒ 4. 55

Question ID : 264330154667

Option 1 ID : 264330606134

Option 2 ID : 264330606133

Option 3 ID : 264330606132

Option 4 ID : 264330606131

Status : Answered

Chosen Option : 4

Q.4 In a certain code language, 'PORTAL' is coded as 'RQIVCN' and 'QUIET' is coded as 'SWKGV'. What is the code for 'SIMPLE' in the given code language?

- Ans**
- ☒ 1. VKNRMJ
 - ☒ 2. UKORNG
 - ☒ 3. TJNSMH
 - ☒ 4. TNOSMI

Question ID : 264330155813

Option 1 ID : 264330610658

Option 2 ID : 264330610655

Option 3 ID : 264330610656

Option 4 ID : 264330610657

Status : Answered

Chosen Option : 2

Q.5 17 is related to 52 following a certain logic. Following the same logic, 42 is related to 127. To which of the following is 29 related to, following the same logic?

- Ans**
- ☒ 1. 84
 - ☒ 2. 88
 - ☒ 3. 86
 - ☒ 4. 82

Question ID : 264330151591

Option 1 ID : 264330593992

Option 2 ID : 264330593994

Option 3 ID : 264330593993

Option 4 ID : 264330593991

Status : Answered

Chosen Option : 2

Q.6 What should come in place of '?' in the given series?

9 26 77 230 689 ?

- Ans
- ☒ 1. 2035
 - ☒ 2. 2112
 - ☒ 3. 2094
 - ☒ 4. 2066

Question ID : 264330151478

Option 1 ID : 264330593539

Option 2 ID : 264330593542

Option 3 ID : 264330593541

Option 4 ID : 264330593540

Status : Answered

Chosen Option : 4

Q.7 Which figure should replace the question mark (?) if the following figure series were to be continued?

R	I	K	2	R	D	7	↑	K	T	7	△	
2	△	D	△	I	T	T	2	△	2	↑	I	?
↑	7	T	K	↑	7	D	R	I	K	D	R	

Ans

☒ 1.

R	I	K
D	T	7
△	2	↑

☒ 2.

R	D	K
I	△	2
↑	7	T

☒ 3.

R	I	K
D	△	7
↑	2	T

☒ 4.

R	D	K
I	T	2
△	7	↑

Question ID : 264330154737

Option 1 ID : 264330606411

Option 2 ID : 264330606412

Option 3 ID : 264330606413

Option 4 ID : 264330606414

Status : Answered

Chosen Option : 2

Q.8 Read the given statements and conclusions carefully. You have to take the given statements to be true even if they seem to be at variance from commonly known facts. You have to decide which conclusion/s logically follow/s from the given statements.

Statements: All stamps are keys. All keys are black. All black are grey.

Conclusion I: All keys are stamps.

Conclusion II: Some keys are black.

- Ans**
- ☒ 1. Both conclusions (I) and (II) are follow.
 - ☒ 2. Only conclusion (II) is follow.
 - ☒ 3. Only conclusion (I) is follow.
 - ☒ 4. Neither conclusion (I) nor (II) is follow.

Question ID : 264330155893

Option 1 ID : 264330610978

Option 2 ID : 264330610976

Option 3 ID : 264330610975

Option 4 ID : 264330610977

Status : Answered

Chosen Option : 4

Q.9 What will come in the place of '?' in the following equation, if '+' and '-' are interchanged and '×' and '÷' are interchanged?

$$17 \div 9 - 39 \div 225 \times 15 = ?$$

- Ans**
- ☒ 1. 167
 - ☒ 2. 177
 - ☒ 3. 157
 - ☒ 4. 187

Question ID : 264330155669

Option 1 ID : 264330610082

Option 2 ID : 264330610081

Option 3 ID : 264330610079

Option 4 ID : 264330610080

Status : Answered

Chosen Option : 2

Q.10 What should come in place of '?' in the given series?

1 14 79 404 2029 ?

- Ans**
- ☒ 1. 10154
 - ☒ 2. 9848
 - ☒ 3. 9812
 - ☒ 4. 10132

Question ID : 264330151468

Option 1 ID : 264330593502

Option 2 ID : 264330593500

Option 3 ID : 264330593499

Option 4 ID : 264330593501

Status : Answered

Chosen Option : 1

Q.11 In a certain code language, 'do it now' is coded as 'qh tr ce' and 'now or never' is coded as 'lx uk tr'. How is 'now' coded in the given language?

- Ans
- ☒ 1. ce
 - ☒ 2. qh
 - ☒ 3. tr
 - ☒ 4. lx

Question ID : 264330151686

Option 1 ID : 264330594371

Option 2 ID : 264330594374

Option 3 ID : 264330594372

Option 4 ID : 264330594373

Status : Answered

Chosen Option : 3

Q.12 The position of how many letters will remain unchanged if each of the letter in the word 'ABSOLUTE' is arranged in alphabetical order?

- Ans
- ☒ 1. Five
 - ☒ 2. Two
 - ☒ 3. Three
 - ☒ 4. Four

Question ID : 264330154323

Option 1 ID : 264330604758

Option 2 ID : 264330604755

Option 3 ID : 264330604757

Option 4 ID : 264330604756

Status : Answered

Chosen Option : 3

Q.13 Seven people, B, N, M, O, P, Y and S are sitting in a straight line, facing south. Only two people sit between P and S. N is the immediate neighbour of S and M. Only one person sits to the right of P. N sits second to the left of O. Y is an immediate neighbour of P.

Total how many people sit between P and M?

- Ans
- ☒ 1. Two
 - ☒ 2. Four
 - ☒ 3. Three
 - ☒ 4. One

Question ID : 264330161697

Option 1 ID : 264330634116

Option 2 ID : 264330634118

Option 3 ID : 264330634117

Option 4 ID : 264330634115

Status : Answered

Chosen Option : 2

Q.14 Read the given statements and conclusions carefully. You have to take the given statements to be true even if they seem to be at variance from commonly known facts. You have to decide which conclusion/s logically follow/s from the given statements.

Statements: All threads are soft. Some soft are fruit. All fruit is yellow.

Conclusion I: Some thread is fruit.

Conclusion II: Some fruit is yellow.

- Ans**
- ☒ 1. Neither conclusion (I) nor (II) is follow.
 - ☒ 2. Both conclusions (I) and (II) are follow.
 - ☒ 3. Only conclusion (II) is follow.
 - ☒ 4. Only conclusion (I) is follow.

Question ID : 264330155921

Option 1 ID : 264330611089

Option 2 ID : 264330611090

Option 3 ID : 264330611088

Option 4 ID : 264330611087

Status : Answered

Chosen Option : 1

Q.15 What should come in place of ? in the given series?

21 24 29 36 47 ?

- Ans**
- ☒ 1. 64
 - ☒ 2. 60
 - ☒ 3. 56
 - ☒ 4. 66

Question ID : 264330151715

Option 1 ID : 264330594487

Option 2 ID : 264330594490

Option 3 ID : 264330594488

Option 4 ID : 264330594489

Status : Answered

Chosen Option : 2

Q.16 Find out the correct alternative that when filled in the blanks in the same sequence will make the series logically complete.

WA_XV_FX_EFXTGF_SI_X

- Ans**
- ☒ 1. MNVKD
 - ☒ 2. FCUXF
 - ☒ 3. FVYNS
 - ☒ 4. HKVHU

Question ID : 264330154722

Option 1 ID : 264330606353

Option 2 ID : 264330606351

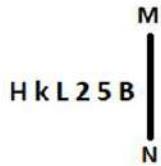
Option 3 ID : 264330606354

Option 4 ID : 264330606352

Status : Answered

Chosen Option : 2

Q.17 Select the correct mirror image of the given figure when the mirror is placed at MN as shown below.



- Ans
- ☒ 1. **B 2 L 2 k H**
 - ☒ 2. **B 2 S J k H**
 - ☒ 3. **B 5 S J k H**
 - ☒ 4. **5 B S J k H**

Question ID : 264330151501
Option 1 ID : 264330593633
Option 2 ID : 264330593631
Option 3 ID : 264330593632
Option 4 ID : 264330593634

Status : Answered

Chosen Option : 2

Q.18 Select the set in which the numbers are related in the same way as are the numbers of the following sets.

(NOTE: Operations should be performed on the whole numbers, without breaking down the numbers into its constituent digits. E.g. 13 – Operations on 13 such as adding / subtracting / multiplying etc. to 13 can be performed.

Breaking down 13 into 1 and 3 and then performing mathematical operations on 1 and 3 is not allowed)

(5, 11, 80)

(6, 12, 90)

- Ans
- ☒ 1. 4, 19, 148
 - ☒ 2. 9, 11, 67
 - ☒ 3. 7, 17, 120
 - ☒ 4. 2, 16, 123

Question ID : 264330151615
Option 1 ID : 264330594089
Option 2 ID : 264330594090
Option 3 ID : 264330594087
Option 4 ID : 264330594088

Status : Answered

Chosen Option : 3

Q.19 Select the word-pair that best represents a similar relationship to the one expressed in the pair of words given below.

(The words must be considered as meaningful English words and must not be related to each other based on the number of letters/number of consonants/vowels in the word)

Scissors : Cloth

- Ans
- ☒ 1. Pen : Ink
 - ☒ 2. Razor : Beard
 - ☒ 3. Nail : Hammer
 - ☒ 4. Furnace : Smoke

Question ID : 264330154631
Option 1 ID : 264330605987
Option 2 ID : 264330605990
Option 3 ID : 264330605989
Option 4 ID : 264330605988

Status : Answered

Chosen Option : 2

Q.20 Select the combination of letters that when sequentially placed in the blanks of the given series will make it logically complete.

HLO_ J_OC LL_E _LOG P_OI

- Ans**
- ☒ 1. AONEL
 - ☒ 2. ALONL
 - ☒ 3. BGHPN
 - ☒ 4. BLOEN

Question ID : 264330156321

Option 1 ID : 264330612684

Option 2 ID : 264330612683

Option 3 ID : 264330612685

Option 4 ID : 264330612686

Status : Answered

Chosen Option : 2

Section : General Awareness

Q.1 What is the maximum time gap between two sessions of the State Legislature?

- Ans**
- ☒ 1. Three months
 - ☒ 2. Two months
 - ☒ 3. Six months
 - ☒ 4. One year

Question ID : 264330159927

Option 1 ID : 264330627056

Option 2 ID : 264330627055

Option 3 ID : 264330627057

Option 4 ID : 264330627058

Status : Answered

Chosen Option : 3

Q.2 In 1951, the first Asian Games was held in which city?

- Ans**
- ☒ 1. Jaipur
 - ☒ 2. Pune
 - ☒ 3. Mumbai
 - ☒ 4. New Delhi

Question ID : 264330158228

Option 1 ID : 264330620274

Option 2 ID : 264330620272

Option 3 ID : 264330620273

Option 4 ID : 264330620271

Status : Answered

Chosen Option : 4

Q.3 What is a government budget?

- Ans ☐ 1. A report on the economic growth of a country.
- ☐ 2. A plan for managing personal finances.
- ☒ 3. A financial statement of a government's expected revenue and expenditure for a specific period.
- ☐ 4. A document outlining foreign policy goals.

Question ID : 264330157270

Option 1 ID : 264330616445

Option 2 ID : 264330616443

Option 3 ID : 264330616444

Option 4 ID : 264330616446

Status : Answered

Chosen Option : 3

Q.4 Who is the author of the novel 'A Suitable Boy'?

- Ans ☐ 1. Kiran Desai
- ☒ 2. Vikram Seth
- ☐ 3. Chetan Bhagat
- ☐ 4. Anita Desai

Question ID : 264330160967

Option 1 ID : 264330631201

Option 2 ID : 264330631200

Option 3 ID : 264330631199

Option 4 ID : 264330631202

Status : Answered

Chosen Option : 2

Q.5 Which of the following oceans extends into the Mediterranean Sea?

- Ans ☐ 1. Indian Ocean
- ☐ 2. Pacific Ocean
- ☒ 3. Atlantic Ocean
- ☐ 4. Arctic Ocean

Question ID : 264330157834

Option 1 ID : 264330618695

Option 2 ID : 264330618698

Option 3 ID : 264330618696

Option 4 ID : 264330618697

Status : Answered

Chosen Option : 3

Q.6 What is the meaning of the term 'Collateral' in banking?

- Ans ☐ 1. An investment portfolio
- ☐ 2. A type of credit card
- ☐ 3. A form of digital payment
- ☒ 4. An asset pledged as security for a loan

Question ID : 264330157306

Option 1 ID : 264330616589

Option 2 ID : 264330616587

Option 3 ID : 264330616588

Option 4 ID : 264330616590

Status : Answered

Chosen Option : 4

Q.7 The word 'kathak' is derived from which of the following words?

- Ans ☒ 1. Story
☒ 2. Narrator
☒ 3. Dance steps
☒ 4. Bells

Question ID : 264330160787
 Option 1 ID : 264330630479
 Option 2 ID : 264330630480
 Option 3 ID : 264330630481
 Option 4 ID : 264330630482
 Status : Answered
 Chosen Option : 1

Q.8 Which of the following autobiographies was written by Dr. APJ Abdul Kalam, the former president of India?

- Ans ☒ 1. One Life is Not Enough
☒ 2. Waiting for a Visa
☒ 3. Atmakatha
☒ 4. Wings of Fire

Question ID : 264330161755
 Option 1 ID : 264330634350
 Option 2 ID : 264330634349
 Option 3 ID : 264330634348
 Option 4 ID : 264330634347
 Status : Answered
 Chosen Option : 4

Q.9 Which Indian musician got the prestigious Academy Award?

- Ans ☒ 1. AR Rahman
☒ 2. Anu Malik
☒ 3. Naushad
☒ 4. Bappi Lahiri

Question ID : 264330162233
 Option 1 ID : 264330636262
 Option 2 ID : 264330636260
 Option 3 ID : 264330636261
 Option 4 ID : 264330636259
 Status : Answered
 Chosen Option : 1

Q.10 In relation to the state of Tamil Nadu, the Constitution (Scheduled Tribes) Order (Second Amendment) Act, 2022 will include the _____ and Kurivikkaran communities in the list of Scheduled Tribes in Tamil Nadu.

- Ans ☒ 1. Narikoravan
☒ 2. Irular
☒ 3. Kadar
☒ 4. Kammara

Question ID : 264330161414
 Option 1 ID : 264330632983
 Option 2 ID : 264330632984
 Option 3 ID : 264330632985
 Option 4 ID : 264330632986
 Status : Answered
 Chosen Option : 1

Q.11 Which antibiotic is considered the first miracle drug, used to treat throat infections, meningitis, syphilis and other bacterial infections?

- Ans
- ☒ 1. Aciclovir
 - ☒ 2. Nifuratel
 - ☒ 3. Penicillin
 - ☒ 4. Metronidazole

Question ID : 264330161078
 Option 1 ID : 264330631644
 Option 2 ID : 264330631646
 Option 3 ID : 264330631643
 Option 4 ID : 264330631645
 Status : Not Answered
 Chosen Option : --

Q.12 Which of the following is the Fundamental Law of any country which sets out the framework and the principal functions of various organs of the government?

- Ans
- ☒ 1. Customs
 - ☒ 2. International Law
 - ☒ 3. Constitution
 - ☒ 4. Ordinance

Question ID : 264330161395
 Option 1 ID : 264330632908
 Option 2 ID : 264330632910
 Option 3 ID : 264330632907
 Option 4 ID : 264330632909
 Status : Answered
 Chosen Option : 3

Q.13 Who was the singer of the famous song 'Mere Desh Ki Dharti Sona Ugle' from the film 'Upkar' (1967)?

- Ans
- ☒ 1. KJ Yesudas
 - ☒ 2. Suresh Wadkar
 - ☒ 3. Manna Dey
 - ☒ 4. Mahendra Kapoor

Question ID : 264330155513
 Option 1 ID : 264330609457
 Option 2 ID : 264330609458
 Option 3 ID : 264330609456
 Option 4 ID : 264330609455
 Status : Answered
 Chosen Option : 2

Q.14 Rani Machaiah was awarded with 'Padam Shri' in the year _____ for her contribution to folk dance.

- Ans
- ☒ 1. 2015
 - ☒ 2. 2018
 - ☒ 3. 2012
 - ☒ 4. 2023

Question ID : 264330155526
 Option 1 ID : 264330609509
 Option 2 ID : 264330609508
 Option 3 ID : 264330609510
 Option 4 ID : 264330609507
 Status : Not Answered
 Chosen Option : --

Q.15 Jyothi Yarraji created a new national record in 2023 in which of the following sports?

- Ans
- ☒ 1. Indoor hurdling
 - ☒ 2. High jump
 - ☒ 3. Shot put
 - ☒ 4. Long jump

Question ID : 264330158373
 Option 1 ID : 264330620854
 Option 2 ID : 264330620853
 Option 3 ID : 264330620852
 Option 4 ID : 264330620851
 Status : Answered
 Chosen Option : 4

Q.16 Which physicist's experiment during a lecture in 1820 showed the connection between electricity and magnetism?

- Ans
- ☒ 1. John Cockcroft
 - ☒ 2. William Gilbert
 - ☒ 3. Heinrich Hertz
 - ☒ 4. Hans Christian Oersted

Question ID : 264330161045
 Option 1 ID : 264330631512
 Option 2 ID : 264330631511
 Option 3 ID : 264330631514
 Option 4 ID : 264330631513
 Status : Answered
 Chosen Option : 4

Q.17 In the performance of _____ dance, on one side raasa dances are performed by women, whereas on the opposite side instrumentalist play the pung choloms (drums) and the karataala (cymbals).

- Ans
- ☒ 1. Kathakali
 - ☒ 2. Yakshagana
 - ☒ 3. Odissi
 - ☒ 4. Manipuri

Question ID : 264330161342
Option 1 ID : 264330632696
Option 2 ID : 264330632697
Option 3 ID : 264330632695
Option 4 ID : 264330632698
Status : Answered
Chosen Option : 4

Q.18 Who among the following was the founder of the Khudai Khidmatgars, a powerful non-violent movement among the Pathans of North-West Frontier Province?

- Ans
- ☒ 1. Khan Abdul Ghaffar Khan
 - ☒ 2. Abdul Qayyum Khan Kashmiri
 - ☒ 3. Mohammad Ali Jinnah
 - ☒ 4. Khan Abdul Jabbar Khan

Question ID : 264330161749
Option 1 ID : 264330634323
Option 2 ID : 264330634326
Option 3 ID : 264330634325
Option 4 ID : 264330634324
Status : Answered
Chosen Option : 1

Q.19 In which year was the Vernacular Press Act passed?

- Ans
- ☒ 1. 1757 CE
 - ☒ 2. 1878 CE
 - ☒ 3. 1888 CE
 - ☒ 4. 1600 CE

Question ID : 264330162318
Option 1 ID : 264330636600
Option 2 ID : 264330636602
Option 3 ID : 264330636601
Option 4 ID : 264330636599
Status : Answered
Chosen Option : 2

Q.20 Which state of India is associated with the famous thunderstorms 'Kaal Baisakhi'?

- Ans
- ☒ 1. West Bengal
 - ☒ 2. Karnataka
 - ☒ 3. Gujarat
 - ☒ 4. Haryana

Question ID : 264330161519
Option 1 ID : 264330633403
Option 2 ID : 264330633405
Option 3 ID : 264330633406
Option 4 ID : 264330633404
Status : Answered
Chosen Option : 1

Q.21 According to Ministry of Commerce and Industry (2018-19), which state of India is the largest producer of Rubber?

- Ans
- ☒ 1. Maharashtra
 - ☒ 2. Gujarat
 - ☒ 3. Kerala
 - ☒ 4. Uttar Pradesh

Question ID : 264330161487
 Option 1 ID : 264330633276
 Option 2 ID : 264330633278
 Option 3 ID : 264330633275
 Option 4 ID : 264330633277
 Status : Answered
 Chosen Option : 3

Q.22 In which year was the first Khelo India Winter Games held?

- Ans
- ☒ 1. 2022
 - ☒ 2. 2019
 - ☒ 3. 2021
 - ☒ 4. 2020

Question ID : 264330158238
 Option 1 ID : 264330620314
 Option 2 ID : 264330620311
 Option 3 ID : 264330620313
 Option 4 ID : 264330620312
 Status : Answered
 Chosen Option : 3

Q.23 'Losoong' festival, celebrated by the tribal community in _____, is usually the time when the farmers rejoice and celebrate their harvest.

- Ans
- ☒ 1. Sikkim
 - ☒ 2. Jharkhand
 - ☒ 3. Odisha
 - ☒ 4. West Bengal

Question ID : 264330160818
 Option 1 ID : 264330630603
 Option 2 ID : 264330630606
 Option 3 ID : 264330630605
 Option 4 ID : 264330630604
 Status : Answered
 Chosen Option : 1

Q.24 According to the Human Development Index 2021, which group of neighbouring countries has ranked behind India?

- Ans
- ☒ 1. Maldives and Bhutan
 - ☒ 2. Pakistan and Afghanistan
 - ☒ 3. Bangladesh and China
 - ☒ 4. Sri Lanka and Bhutan

Question ID : 264330160173
 Option 1 ID : 264330628033
 Option 2 ID : 264330628032
 Option 3 ID : 264330628031
 Option 4 ID : 264330628034
 Status : Answered
 Chosen Option : 2

Q.25 Which of the following statements is true about the Great Bath of the Indus Valley Civilisation?

- Ans ☒ 1. It was used for grain storage.
☒ 2. It was used for farming.
☒ 3. It was used as the water tank of the city.
☒ 4. It was probably used for religious purpose.

Question ID : 264330160763
 Option 1 ID : 264330630385
 Option 2 ID : 264330630384
 Option 3 ID : 264330630386
 Option 4 ID : 264330630383
 Status : Answered
 Chosen Option : 3

Section : English Language and Comprehension

Q.1 Select the most appropriate option that can substitute the underlined segment in the given sentence.

France is a largest country.

- Ans ☒ 1. smaller
☒ 2. larger
☒ 3. smallest
☒ 4. large

Question ID : 264330155422
 Option 1 ID : 264330609097
 Option 2 ID : 264330609096
 Option 3 ID : 264330609098
 Option 4 ID : 264330609095
 Status : Answered
 Chosen Option : 4

Q.2 The following sentence has been split into four segments. Identify the segment that contains an error.

Mr Sharma would have left / the station / by this time / tomorrow.

- Ans ☒ 1. tomorrow
☒ 2. by this time
☒ 3. the station
☒ 4. Mr Sharma would have left

Question ID : 264330143051
 Option 1 ID : 264330560482
 Option 2 ID : 264330560481
 Option 3 ID : 264330560480
 Option 4 ID : 264330560479
 Status : Answered
 Chosen Option : 4

Q.3 Select the most appropriate meaning of the underlined idiom in the following sentence.

“Do not turn a blind eye to all the mischief your child is up to”, the teacher told the young parent.

- Ans
- ☒ 1. Close the door
 - ☒ 2. Take pride in
 - ☒ 3. Give rewards
 - ☒ 4. Pretend not to notice

Question ID : 264330153051

Option 1 ID : 264330599772

Option 2 ID : 264330599771

Option 3 ID : 264330599774

Option 4 ID : 264330599773

Status : Answered

Chosen Option : 4

Q.4 Select the most appropriate option to fill in the blank.
The mother _____ the chips because they were soggy.

- Ans
- ☒ 1. saved
 - ☒ 2. wasted
 - ☒ 3. discarded
 - ☒ 4. recovered

Question ID : 264330152579

Option 1 ID : 264330597922

Option 2 ID : 264330597920

Option 3 ID : 264330597921

Option 4 ID : 264330597919

Status : Answered

Chosen Option : 3

Q.5 Identify the most appropriate meaning of the given word.
Hope

- Ans
- ☒ 1. Caution
 - ☒ 2. Realism
 - ☒ 3. Cynicism
 - ☒ 4. Wish

Question ID : 264330152572

Option 1 ID : 264330597891

Option 2 ID : 264330597893

Option 3 ID : 264330597892

Option 4 ID : 264330597894

Status : Answered

Chosen Option : 4

Q.6 Select the most appropriate meaning of the given idiom.
Have egg on your face

- Ans ☒ 1. Defeat someone thoroughly
- ☒ 2. To be made to look foolish or embarrassed
- ☒ 3. Making a choice between two unpleasant choices
- ☒ 4. Reveal a secret

Question ID : 264330155282

Option 1 ID : 264330608571

Option 2 ID : 264330608573

Option 3 ID : 264330608574

Option 4 ID : 264330608572

Status : Answered

Chosen Option : 2

Q.7 The following sentence contains some errors. Select the option that correctly rectifies the error.
The tiger was tranquillized in the morning and kept in a cage to avoid disturbannces by human beings.

- Ans ☒ 1. The tiger was tranquilized in the morning and kept in a cage to avoiid disturbaences by human beings.
- ☒ 2. The tiger was tranquilized in the morning and kept in a cage to avoid disturbances by human beings.
- ☒ 3. The tiger was traanquilized in the morning and kept in a cage to avoid dissturbances by human beings.
- ☒ 4. The tiger was tranquiilized in the morning and kept in a cage to avoid disturbances by human beings.

Question ID : 264330152692

Option 1 ID : 264330598373

Option 2 ID : 264330598374

Option 3 ID : 264330598372

Option 4 ID : 264330598371

Status : Answered

Chosen Option : 2

Q.8 Select the most appropriate synonym of the bracketed word in the following sentence to fill in the blank.
She's reading a _____ (secrecy) novel and can't wait to find out who the killer is.

- Ans ☒ 1. crisis
- ☒ 2. complication
- ☒ 3. difficulty
- ☒ 4. mystery

Question ID : 264330152660

Option 1 ID : 264330598246

Option 2 ID : 264330598245

Option 3 ID : 264330598243

Option 4 ID : 264330598244

Status : Answered

Chosen Option : 4

Q.9 The following sentence has been divided into parts. One of them may contain an error. Select the part that contains the error from the given options. If you don't find any error, mark 'No error' as your answer.

The viable of life / depends on a pair / of conflicting realities.

- Ans ☒ 1. depends on a pair
☒ 2. No error
☒ 3. The viable of life
☒ 4. of conflicting realities

Question ID : 264330153607

Option 1 ID : 264330601911

Option 2 ID : 264330601914

Option 3 ID : 264330601913

Option 4 ID : 264330601912

Status : Answered

Chosen Option : 1

Q.10 Parts of the following sentence have been given as options. Select the option that contains an error.
I shall be playing for four hours.

- Ans ☒ 1. four hours
☒ 2. I
☒ 3. shall be playing
☒ 4. for

Question ID : 264330152818

Option 1 ID : 264330598866

Option 2 ID : 264330598863

Option 3 ID : 264330598864

Option 4 ID : 264330598865

Status : Answered

Chosen Option : 3

Q.11 Select the most appropriate meaning of the underlined segment in the given sentence.
Our team is all on the same page when it comes to our goals for the upcoming project.

- Ans ☒ 1. Be confused
☒ 2. Be in agreement
☒ 3. Be unsure
☒ 4. Be in conflict

Question ID : 264330152927

Option 1 ID : 264330599289

Option 2 ID : 264330599287

Option 3 ID : 264330599290

Option 4 ID : 264330599288

Status : Answered

Chosen Option : 2

Q.12 Select the most appropriate meaning of the given idiom.
Bite the dust

- Ans ☒ 1. To suffer a defeat
☒ 2. To fall from a height
☒ 3. To remain calm
☒ 4. To fall asleep

Question ID : 264330155285
Option 1 ID : 264330608584
Option 2 ID : 264330608583
Option 3 ID : 264330608586
Option 4 ID : 264330608585
Status : Answered
Chosen Option : 1

Q.13 Select the option that can be used as a one-word substitute for the given group of words.

A person who avoids sensory pleasures and physical comforts

- Ans ☒ 1. Frugal
☒ 2. Epicurean
☒ 3. Bohemian
☒ 4. Ascetic

Question ID : 264330151869
Option 1 ID : 264330595097
Option 2 ID : 264330595098
Option 3 ID : 264330595096
Option 4 ID : 264330595095
Status : Answered
Chosen Option : 4

Q.14 Select the INCORRECTLY spelt word.

- Ans ☒ 1. Chivalrous
☒ 2. Expose
☒ 3. Confess
☒ 4. Convict

Question ID : 264330152944
Option 1 ID : 264330599355
Option 2 ID : 264330599356
Option 3 ID : 264330599357
Option 4 ID : 264330599358
Status : Answered
Chosen Option : 3

Q.15 Select the option that can be used as a one-word substitute for the given group of words.

A person living in solitude like a saint for religious practices.

- Ans ☒ 1. Hermit
☒ 2. Cretin
☒ 3. Heir
☒ 4. Heretic

Question ID : 264330151812
 Option 1 ID : 264330594875
 Option 2 ID : 264330594878
 Option 3 ID : 264330594877
 Option 4 ID : 264330594876
 Status : Answered
 Chosen Option : 1

Q.16 Select the most appropriate ANTONYM of the given word.
 Clumsy

- Ans ☒ 1. Jealous
☒ 2. Fierce
☒ 3. Graceful
☒ 4. Nervous

Question ID : 264330151916
 Option 1 ID : 264330595279
 Option 2 ID : 264330595282
 Option 3 ID : 264330595280
 Option 4 ID : 264330595281
 Status : Answered
 Chosen Option : 3

Q.17 Select the most appropriate option that can substitute the underlined segment in the given sentence.

No sooner had the sun risen over the horizon when the birds began to chirp and the squirrels started to scamper around the park.

- Ans ☒ 1. when the birds begin
☒ 2. than birds begin
☒ 3. when birds began
☒ 4. than the birds began

Question ID : 264330151857
 Option 1 ID : 264330595050
 Option 2 ID : 264330595047
 Option 3 ID : 264330595048
 Option 4 ID : 264330595049
 Status : Answered
 Chosen Option : 4

Q.18 Select the most appropriate option to fill in the blank.

During the meeting, he went on a long and angry _____ about how the project was being mismanaged.

- Ans
- ☒ 1. shout
 - ☒ 2. whisper
 - ☒ 3. rant
 - ☒ 4. mutter

Question ID : 264330151860

Option 1 ID : 264330595062

Option 2 ID : 264330595060

Option 3 ID : 264330595059

Option 4 ID : 264330595061

Status : Answered

Chosen Option : 3

Q.19 The following sentence has been split into four segments. Identify the segment that contains a grammatical error.

I had / a bad habit of / waking up / lately.

- Ans
- ☒ 1. lately
 - ☒ 2. waking up
 - ☒ 3. a bad habit of
 - ☒ 4. I had

Question ID : 264330153185

Option 1 ID : 264330600302

Option 2 ID : 264330600301

Option 3 ID : 264330600300

Option 4 ID : 264330600299

Status : Answered

Chosen Option : 1

Q.20 Select the most appropriate option to fill in the blank.

Chaitnya was _____ from the school due to his inappropriate behaviour.

- Ans
- ☒ 1. expelled
 - ☒ 2. xpelled
 - ☒ 3. expeled
 - ☒ 4. xpeled

Question ID : 264330153305

Option 1 ID : 264330600777

Option 2 ID : 264330600778

Option 3 ID : 264330600775

Option 4 ID : 264330600776

Status : Answered

Chosen Option : 1

Comprehension:

In the following passage, some words have been deleted. Read the passage carefully and select the most appropriate option to fill in each blank.
Once there was a king named Midas who was granted a (1)_____ by Dionysus, the god of wine. For his wish, Midas asked that whatever he (2)_____ would turn to gold. Despite Dionysus' efforts to prevent it, Midas pleaded that this was a fantastic wish, and so, it was bestowed. Excited about his newly-earned (3)_____, Midas started touching all kinds of things, turning each item into pure gold. But soon, Midas became (4)_____. As he picked up a piece of food, he found he couldn't eat it. It had turned to gold in his hand. Hungry, Midas groaned, "I'll starve! Perhaps this was not such an excellent wish after all!" Seeing his dismay, Midas' (5)_____ daughter threw her arms around him to comfort him, and she, too, turned to gold. "The golden touch is no blessing," Midas cried.

SubQuestion No : 21

Q.21 Select the most appropriate option to fill in blank number 1.

- Ans ☒ 1. slavery
☒ 2. wish
☒ 3. employment
☒ 4. job

Question ID : 264330153525

Option 1 ID : 264330601610

Option 2 ID : 264330601609

Option 3 ID : 264330601608

Option 4 ID : 264330601607

Status : Answered

Chosen Option : 2

Comprehension:

In the following passage, some words have been deleted. Read the passage carefully and select the most appropriate option to fill in each blank.
Once there was a king named Midas who was granted a (1)_____ by Dionysus, the god of wine. For his wish, Midas asked that whatever he (2)_____ would turn to gold. Despite Dionysus' efforts to prevent it, Midas pleaded that this was a fantastic wish, and so, it was bestowed. Excited about his newly-earned (3)_____, Midas started touching all kinds of things, turning each item into pure gold. But soon, Midas became (4)_____. As he picked up a piece of food, he found he couldn't eat it. It had turned to gold in his hand. Hungry, Midas groaned, "I'll starve! Perhaps this was not such an excellent wish after all!" Seeing his dismay, Midas' (5)_____ daughter threw her arms around him to comfort him, and she, too, turned to gold. "The golden touch is no blessing," Midas cried.

SubQuestion No : 22

Q.22 Select the most appropriate option to fill in blank number 2.

- Ans ☒ 1. next felt
☒ 2. touched
☒ 3. kept
☒ 4. left

Question ID : 264330153526

Option 1 ID : 264330601614

Option 2 ID : 264330601612

Option 3 ID : 264330601611

Option 4 ID : 264330601613

Status : Answered

Chosen Option : 2

Comprehension:

In the following passage, some words have been deleted. Read the passage carefully and select the most appropriate option to fill in each blank.

Once there was a king named Midas who was granted a (1)_____ by Dionysus, the god of wine. For his wish, Midas asked that whatever he (2)_____ would turn to gold. Despite Dionysus' efforts to prevent it, Midas pleaded that this was a fantastic wish, and so, it was bestowed. Excited about his newly-earned (3)_____, Midas started touching all kinds of things, turning each item into pure gold. But soon, Midas became (4)_____. As he picked up a piece of food, he found he couldn't eat it. It had turned to gold in his hand. Hungry, Midas groaned, "I'll starve! Perhaps this was not such an excellent wish after all!" Seeing his dismay, Midas' (5)_____ daughter threw her arms around him to comfort him, and she, too, turned to gold. "The golden touch is no blessing," Midas cried.

SubQuestion No : 23

Q.23 Select the most appropriate option to fill in blank number 3.

Ans ☒ 1. legacies

☒ 2. powers

☒ 3. awards

☒ 4. visuals

Question ID : 264330153527

Option 1 ID : 264330601618

Option 2 ID : 264330601615

Option 3 ID : 264330601617

Option 4 ID : 264330601616

Status : Answered

Chosen Option : 2

Comprehension:

In the following passage, some words have been deleted. Read the passage carefully and select the most appropriate option to fill in each blank.

Once there was a king named Midas who was granted a (1)_____ by Dionysus, the god of wine. For his wish, Midas asked that whatever he (2)_____ would turn to gold. Despite Dionysus' efforts to prevent it, Midas pleaded that this was a fantastic wish, and so, it was bestowed. Excited about his newly-earned (3)_____, Midas started touching all kinds of things, turning each item into pure gold. But soon, Midas became (4)_____. As he picked up a piece of food, he found he couldn't eat it. It had turned to gold in his hand. Hungry, Midas groaned, "I'll starve! Perhaps this was not such an excellent wish after all!" Seeing his dismay, Midas' (5)_____ daughter threw her arms around him to comfort him, and she, too, turned to gold. "The golden touch is no blessing," Midas cried.

SubQuestion No : 24

Q.24 Select the most appropriate option to fill in blank number 4.

Ans ☒ 1. mad

☒ 2. hungry

☒ 3. tired

☒ 4. angry

Question ID : 264330153528

Option 1 ID : 264330601620

Option 2 ID : 264330601622

Option 3 ID : 264330601621

Option 4 ID : 264330601619

Status : Answered

Chosen Option : 3

Comprehension:

In the following passage, some words have been deleted. Read the passage carefully and select the most appropriate option to fill in each blank.

Once there was a king named Midas who was granted a (1)_____ by Dionysus, the god of wine. For his wish, Midas asked that whatever he (2)_____ would turn to gold. Despite Dionysus' efforts to prevent it, Midas pleaded that this was a fantastic wish, and so, it was bestowed. Excited about his newly-earned (3)_____, Midas started touching all kinds of things, turning each item into pure gold. But soon, Midas became (4)_____. As he picked up a piece of food, he found he couldn't eat it. It had turned to gold in his hand. Hungry, Midas groaned, "I'll starve! Perhaps this was not such an excellent wish after all!" Seeing his dismay, Midas' (5)_____ daughter threw her arms around him to comfort him, and she, too, turned to gold. "The golden touch is no blessing," Midas cried.

SubQuestion No : 25

Q.25 Select the most appropriate option to fill in blank number 5.

- Ans
- ☒ 1. estranged
 - ☒ 2. guarded
 - ☒ 3. beloved
 - ☒ 4. hated

Question ID : 264330153529

Option 1 ID : 264330601624

Option 2 ID : 264330601626

Option 3 ID : 264330601623

Option 4 ID : 264330601625

Status : Answered

Chosen Option : 3

