

Multi Tasking Non Technical Staff and Havalдар CBIC and CBN
Examination 2023

Roll Number	
Candidate Name	
Venue Name	iON Digital Zone IDZ Powai
Exam Date	11/09/2023
Exam Time	9:00 AM - 11:00 AM
Subject	MTS Non Tech Havalдар CBIC and CBN Examination 2023

Section : Numerical and Mathematical Ability

Q.1 If the selling price of 16 bulbs is equal to the cost price of 24 bulbs, what is the profit percentage?

- Ans

☒

1. 40%
- ☒

2. 50%
- ☒

3. 25%
- ☒

4. 20%

Question ID : 264330161014
Option 1 ID : 264330631388
Option 2 ID : 264330631390
Option 3 ID : 264330631389
Option 4 ID : 264330631387
Status : Answered
Chosen Option : 2

Q.2 If the manufacturer gains 10%, the wholesale dealer gains 12% and the retailer gains 15%, then find the cost production of a table, the retail price of which is ₹1,771.

- Ans

☒

1. ₹1,150
- ☒

2. ₹1,050
- ☒

3. ₹1,250
- ☒

4. ₹1,350

Question ID : 264330155998
Option 1 ID : 264330611393
Option 2 ID : 264330611391
Option 3 ID : 264330611392
Option 4 ID : 264330611394
Status : Answered
Chosen Option : 3

Test Prime

**ALL EXAMS,
ONE SUBSCRIPTION**



70,000+
Mock Tests



**Personalised
Report Card**



**Unlimited
Re-Attempt**



600+
Exam Covered



**Previous Year
Papers**



**500%
Refund**



ATTEMPT FREE MOCK NOW

Q.3 If the average of two numbers is 12 and the product of the same two numbers is 119, then the difference of those two numbers is:

- Ans**
- ☒ 1. 7
 - ☒ 2. 6
 - ☒ 3. 10
 - ☒ 4. 8

Question ID : 264330156508
 Option 1 ID : 264330613420
 Option 2 ID : 264330613422
 Option 3 ID : 264330613421
 Option 4 ID : 264330613419
 Status : Answered
 Chosen Option : 3

Q.4 Two cyclists start at the same time from opposite ends of a 200 km long straight road. One cyclist travels at a speed of 20 km/h and the other at a speed of 30 km/h. How long will it take them to meet?

- Ans**
- ☒ 1. 5 hours
 - ☒ 2. 4 hours
 - ☒ 3. 5.5 hours
 - ☒ 4. 4.5 hours

Question ID : 264330156274
 Option 1 ID : 264330612497
 Option 2 ID : 264330612495
 Option 3 ID : 264330612498
 Option 4 ID : 264330612496
 Status : Answered
 Chosen Option : 2

Q.5 A hollow metal sphere of internal and external radii 5 cm and 6 cm, respectively, is melted into a solid cone of base radius 5.2 cm. What is the height (in cm, rounded off to 1 decimal place) of the cone?

- Ans**
- ☒ 1. 11.8
 - ☒ 2. 12.8
 - ☒ 3. 13.5
 - ☒ 4. 14.5

Question ID : 264330153794
 Option 1 ID : 264330602641
 Option 2 ID : 264330602639
 Option 3 ID : 264330602642
 Option 4 ID : 264330602640
 Status : Answered
 Chosen Option : 3

Q.6 If Rita's salary increases by 5% in the first year and by 2% in the next year, then what is the net percentage increase in her salary after two years?

- Ans**
- ☒ 1. 6.1%
 - ☒ 2. 5.1%
 - ☒ 3. 8.1%
 - ☒ 4. 7.1%

Question ID : 264330156218

Option 1 ID : 264330612272

Option 2 ID : 264330612271

Option 3 ID : 264330612274

Option 4 ID : 264330612273

Status : Answered

Chosen Option : 4

Q.7 Mohan can complete a piece of work in 24 days. He worked for 6 days and left the work. Thereafter, Sohan finished the remaining work in 21 days. In how many days, can Mohan and Sohan together complete it?

- Ans**
- ☒ 1. $12\frac{12}{13}$ days
 - ☒ 2. $12\frac{9}{13}$ days
 - ☒ 3. $12\frac{11}{13}$ days
 - ☒ 4. $12\frac{10}{13}$ days

Question ID : 264330156238

Option 1 ID : 264330612354

Option 2 ID : 264330612351

Option 3 ID : 264330612353

Option 4 ID : 264330612352

Status : Answered

Chosen Option : 1

Q.8 The volume (in cm^3) of a sphere with diameter 7 cm is:

Take $\pi = \frac{22}{7}$

- Ans**
- ☒ 1. 179.66
 - ☒ 2. 168.44
 - ☒ 3. 197.66
 - ☒ 4. 186.44

Question ID : 264330156368

Option 1 ID : 264330612873

Option 2 ID : 264330612874

Option 3 ID : 264330612871

Option 4 ID : 264330612872

Status : Answered

Chosen Option : 1

Q.9 In a fort, 160 men had food for 94 days. After 10 days, 20 men left the fort. How long (in days) would the food last at the same rate?

- Ans**
- ☒ 1. 84
 - ☒ 2. 90
 - ☒ 3. 96
 - ☒ 4. 100

Question ID : 264330156495

Option 1 ID : 264330613368

Option 2 ID : 264330613370

Option 3 ID : 264330613369

Option 4 ID : 264330613367

Status : Answered

Chosen Option : 3

Q.10 What sum of money (in ₹) will earn an interest of ₹1,800 at the rate of 6% per annum simple interest in five years?

- Ans**
- ☒ 1. 18,000
 - ☒ 2. 6,000
 - ☒ 3. 8,000
 - ☒ 4. 5,000

Question ID : 264330156484

Option 1 ID : 264330613326

Option 2 ID : 264330613323

Option 3 ID : 264330613325

Option 4 ID : 264330613324

Status : Answered

Chosen Option : 2

Q.11 If the ratio among the time taken by three cars to travel a certain distance is 2 : 3 : 5, then the ratio of speeds of these cars will be:

- Ans**
- ☒ 1. 10 : 6 : 15
 - ☒ 2. 15 : 9 : 8
 - ☒ 3. 10 : 15 : 8
 - ☒ 4. 15 : 10 : 6

Question ID : 264330156292

Option 1 ID : 264330612567

Option 2 ID : 264330612570

Option 3 ID : 264330612568

Option 4 ID : 264330612569

Status : Answered

Chosen Option : 4

Q.12 The fourth proportion of 2, a and 5a is _____.

Ans

✗ 1. $\frac{2a^2}{5}$

✓ 2. $\frac{5a^2}{2}$

✗ 3. $\frac{2a^2}{3}$

✗ 4. $\frac{5a^2}{3}$

Question ID : 264330153809

Option 1 ID : 264330602702

Option 2 ID : 264330602701

Option 3 ID : 264330602699

Option 4 ID : 264330602700

Status : Answered

Chosen Option : 2

Q.13 Find the LCM of 1288, 230, 276.

Ans

✓ 1. 19,320

✗ 2. 19,230

✗ 3. 9,660

✗ 4. 6,440

Question ID : 264330156092

Option 1 ID : 264330611768

Option 2 ID : 264330611767

Option 3 ID : 264330611769

Option 4 ID : 264330611770

Status : Answered

Chosen Option : 1

Q.14 Study the following table and answer the question given below it.
Distribution of students according to professional courses.

S.No	Course	Faculty			
		Arts		Science	
		Girls	Boys	Girls	Boys
1.	Business Management	25	45	25	65
2.	Type-writing	23	186	20	32
3.	Costing	25	120	12	58
4.	Typewriting & Costing	12	100	3	5

The percentage of students of Arts faculty doing costing only is (round to the nearest integer):

Ans

✗ 1. 18

✗ 2. 15

✗ 3. 10

✓ 4. 27

Question ID : 264330156351

Option 1 ID : 264330612805

Option 2 ID : 264330612804

Option 3 ID : 264330612803

Option 4 ID : 264330612806

Status : Answered

Chosen Option : 4

Q.15 In some quantity of water ,four times the quantity of milk is added and the quantity of the mixture is now 7.5 litres. How much more milk is to be added to the mixture to have 90% milk in the mixture ?

- Ans
- ☐ 1. 9 liters
 - ☐ 2. 9.5 liters
 - ☐ 3. 6 liters
 - ☒ 4. 7.5 liters

Question ID : 264330153800

Option 1 ID : 264330602665

Option 2 ID : 264330602666

Option 3 ID : 264330602663

Option 4 ID : 264330602664

Status : Answered

Chosen Option : 4

Q.16 Evaluate $3\frac{1}{2} - [2\frac{1}{4} \div \{1\frac{1}{4} - \frac{3}{4}(1\frac{1}{2} - \frac{1}{2} - 2\frac{1}{2})\}] :$

- Ans
- ☐ 1. $1\frac{21}{38}$
 - ☐ 2. $2\frac{19}{18}$
 - ☒ 3. $2\frac{21}{38}$
 - ☐ 4. $\frac{47}{38}$

Question ID : 264330154038

Option 1 ID : 264330603618

Option 2 ID : 264330603615

Option 3 ID : 264330603616

Option 4 ID : 264330603617

Status : Answered

Chosen Option : 3

Q.17 Arvind, Bilal, Carmen invest ₹49,000 towards a business. Arvind invests ₹5,000 more than Bilal and Bilal invests ₹4,000 more than Carmen. Out of a total profit of ₹98,000, how much does Bilal receive?

- Ans
- ☐ 1. ₹34,400
 - ☐ 2. ₹33,200
 - ☐ 3. ₹30,500
 - ☒ 4. ₹32,000

Question ID : 264330156108

Option 1 ID : 264330611831

Option 2 ID : 264330611834


Option 3 ID : 264330611833

Option 4 ID : 264330611832

Status : Answered

Chosen Option : 4

Q.18 The bar graph shows the average marks scored in Mathematics examination (out of 100) by students of 6 divisions of XIIth standard.



What is the ratio of the average marks scored by Division B to Division D?

- Ans**
- ✓ 1. 9 : 13
 - ✗ 2. 1 : 3
 - ✗ 3. 13 : 9
 - ✗ 4. 1 : 9

Question ID : 264330154101
Option 1 ID : 264330603867
Option 2 ID : 264330603869
Option 3 ID : 264330603868
Option 4 ID : 264330603870

Status : Answered

Chosen Option : 1

Q.19 An amount of ₹2,000 amounts to ₹2,880 in 2 years. What will be the rate of interest if compounded annually?

- Ans**
- ✗ 1. 12%
 - ✗ 2. 28%
 - ✗ 3. 10%
 - ✓ 4. 20%

Question ID : 264330154054
Option 1 ID : 264330603682
Option 2 ID : 264330603680
Option 3 ID : 264330603679
Option 4 ID : 264330603681

Status : Answered

Chosen Option : 4

Q.20 The average weight of some students in class 12th was 56 kg. When seven students whose average weight was 58 kg joined the class, the average weight of all the students increased by 200 gm. Find the number of students in the class in the beginning?

- Ans**
- ✗ 1. 56
 - ✗ 2. 77
 - ✗ 3. 49
 - ✓ 4. 63

Question ID : 264330156548
Option 1 ID : 264330613580
Option 2 ID : 264330613582
Option 3 ID : 264330613579
Option 4 ID : 264330613581

Status : Answered

Chosen Option : 4

Q.1 What will come in the place of '?' in the following equation, if '+' and '-' are interchanged and '×' and '÷' are interchanged?
 $23 \div 2 + 41 - 84 \times 14 = ?$

- Ans**
- ☐ 1. 21
 - ☐ 2. 1
 - ☐ 3. 31
 - ☒ 4. 11

Question ID : 264330155668

Option 1 ID : 264330610075

Option 2 ID : 264330610078

Option 3 ID : 264330610077

Option 4 ID : 264330610076

Status : Answered

Chosen Option : 4

Q.2 In a certain code language, 'yes you can' is coded as 'an cf dt' and 'you are enough' is coded as 'sk dt hw'. How is 'you' coded in the given language?

- Ans**
- ☐ 1. cf
 - ☐ 2. sk
 - ☒ 3. dt
 - ☐ 4. hw

Question ID : 264330151706

Option 1 ID : 264330594451

Option 2 ID : 264330594454

Option 3 ID : 264330594452

Option 4 ID : 264330594453

Status : Answered

Chosen Option : 3

Q.3 Read the given statements and conclusions carefully. You have to take the given statements to be true even if they seem to be at variance from commonly known facts. You have to decide which conclusion/s logically follow/s from the given statements.

Statements: All phones are flowers. Some flowers are bags. All bags are heavy.

Conclusion I: Some phones are flowers.

Conclusion II: All flowers are bags.

- Ans**
- ☐ 1. Neither conclusion (I) nor (II) is follow.
 - ☐ 2. Both conclusions (I) and (II) are follow.
 - ☐ 3. Only conclusion (II) is follow.
 - ☒ 4. Only conclusion (I) is follow.

Question ID : 264330155907

Option 1 ID : 264330611033

Option 2 ID : 264330611034

Option 3 ID : 264330611032

Option 4 ID : 264330611031

Status : Answered

Chosen Option : 1

Q.4 The position of how many letters will remain unchanged if each of the letter in the word 'CHILDREN' is arranged in alphabetical order?

- Ans** ✓ 1. One
✗ 2. Four
✗ 3. Three
✗ 4. Two

Question ID : 264330154328

Option 1 ID : 264330604775

Option 2 ID : 264330604776

Option 3 ID : 264330604778

Option 4 ID : 264330604777

Status : Answered

Chosen Option : 1

Q.5 Read the given statements and conclusions carefully. You have to take the given statements to be true even if they seem to be at variance from commonly known facts. You have to decide which conclusion/s logically follow/s from the given statements.

Statements: All torches are guitars. Some guitars are bulbs. No bulb is a stove.

Conclusion I: All bulbs are guitars.

Conclusion II: No guitar is a torch.

- Ans** ✓ 1. Neither conclusion (I) nor (II) is follow.
✗ 2. Only conclusion (I) is follow.
✗ 3. Both conclusions (I) and (II) are follow.
✗ 4. Only conclusion (II) is follow.

Question ID : 264330155912

Option 1 ID : 264330611053

Option 2 ID : 264330611051

Option 3 ID : 264330611054

Option 4 ID : 264330611052

Status : Answered

Chosen Option : 1

Q.6 What will come in place of '?' in the following equation, if '+' and '-' are interchanged and '×' and '÷' are interchanged?

$$15 - 6 + 12 \times 3 \div 4 = ?$$

- Ans** ✓ 1. 5
✗ 2. 10
✗ 3. 7
✗ 4. 9

Question ID : 264330154662

Option 1 ID : 264330606112

Option 2 ID : 264330606111

Option 3 ID : 264330606114

Option 4 ID : 264330606113

Status : Answered

Chosen Option : 1

Q.7 Select the combination of letters that when sequentially placed in the blanks of the given series, will complete the series.

NO _ N _ _ NO _ _ ON

- Ans
- ✓ 1. NONNN
 - ✗ 2. OONNO
 - ✗ 3. ONOON
 - ✗ 4. NONON

Question ID : 264330151653

Option 1 ID : 264330594241

Option 2 ID : 264330594240

Option 3 ID : 264330594242

Option 4 ID : 264330594239

Status : Answered

Chosen Option : 1

Q.8 What should come in place of '?' in the given series?

4 19 79 319 1279 ?

- Ans
- ✗ 1. 4875
 - ✗ 2. 5299
 - ✗ 3. 4913
 - ✓ 4. 5119

Question ID : 264330151459

Option 1 ID : 264330593463

Option 2 ID : 264330593466

Option 3 ID : 264330593464

Option 4 ID : 264330593465

Status : Answered

Chosen Option : 4

Q.9 Six people, Deepak, Gauri, Babita, Ira, Farheen and Hema are sitting in a straight line, facing north. Deepak sits 2nd from the left end. Gauri sits 2nd to the right of Deepak. Ira sits 2nd to the right of Gauri. Farheen sits 3rd to the left of Ira. Babita sits 2nd to the left of Farheen. Who sits 3rd to the right of Deepak?

- Ans
- ✗ 1. Farheen
 - ✓ 2. Hema
 - ✗ 3. Babita
 - ✗ 4. Ira

Question ID : 264330155661

Option 1 ID : 264330610050

Option 2 ID : 264330610047

Option 3 ID : 264330610049

Option 4 ID : 264330610048

Status : Answered

Chosen Option : 2

Q.10 What should come in place of '?' in the given series?

5 23 95 ? 1535 6143 24575

- Ans
- ✓ 1. 383
 - ✗ 2. 347
 - ✗ 3. 312
 - ✗ 4. 361

Question ID : 264330151493

Option 1 ID : 264330593602

Option 2 ID : 264330593600

Option 3 ID : 264330593599

Option 4 ID : 264330593601

Status : Answered

Chosen Option : 1

Q.11 Select the word-pair that best represents a similar relationship to the one expressed in the pair of words given below.

(The words must be considered as meaningful English words and must not be related to each other based on the number of letters/number of consonants/vowels in the word)

Legend : Map

- Ans
- ✗ 1. Volume : Guidebook
 - ✓ 2. Glossary : Text
 - ✗ 3. Column : Essay
 - ✗ 4. Profession : Biography

Question ID : 264330154642

Option 1 ID : 264330606031

Option 2 ID : 264330606033

Option 3 ID : 264330606034

Option 4 ID : 264330606032

Status : Answered

Chosen Option : 1

Q.12 What should come in place of ? in the given series based on the English alphabetical order?

CSP, EUQ, GWR, IYS, ?

- Ans
- ✗ 1. JBS
 - ✗ 2. LBT
 - ✓ 3. KAT
 - ✗ 4. JAR

Question ID : 264330155783

Option 1 ID : 264330610536

Option 2 ID : 264330610538

Option 3 ID : 264330610535

Option 4 ID : 264330610537

Status : Answered

Chosen Option : 3

Q.13 Find out the correct alternative that when filled in the blanks in the same sequence will make the series logically complete.

BK_Y _KUT R_PO MKK_ HK_E

- Ans**
- ☒ 1. WKBFP
 - ☒ 2. WBHZP
 - ☒ 3. ZWKJF
 - ☒ 4. ZKWLF

Question ID : 264330154729

Option 1 ID : 264330606379

Option 2 ID : 264330606381

Option 3 ID : 264330606382

Option 4 ID : 264330606380

Status : Answered

Chosen Option : 3

Q.14 In a certain code language, 'BACK' is coded as '17' and 'DTDC' is coded as '31'. What is the code for 'JAAM' in the given code language?

- Ans**
- ☒ 1. 35
 - ☒ 2. 20
 - ☒ 3. 40
 - ☒ 4. 25

Question ID : 264330155819

Option 1 ID : 264330610680

Option 2 ID : 264330610681

Option 3 ID : 264330610682

Option 4 ID : 264330610679

Status : Answered

Chosen Option : 4

Q.15 In the following number-pairs, the second number is obtained by applying certain mathematical operations to the first number. Select the set in which the numbers are related in the same way as are the numbers of the following sets.

(NOTE: Operations should be performed on the whole numbers, without breaking down the numbers into its constituent digits. E.g. 13 – Operations on 13 such as adding / subtracting / multiplying etc. to 13 can be performed. Breaking down 13 into 1 and 3 and then performing mathematical operations on 1 and 3 is not allowed)

8, 128

9, 162

- Ans**
- ☒ 1. 11, 124
 - ☒ 2. 14, 392
 - ☒ 3. 12, 149
 - ☒ 4. 13, 170

Question ID : 264330151619

Option 1 ID : 264330594103

Option 2 ID : 264330594106

Option 3 ID : 264330594104

Option 4 ID : 264330594105

Status : Answered

Chosen Option : 2

Q.16 Which figure should replace the question mark (?) if the following figure series were to be continued?

7	V	C	7	=	C	□	=	
=	↑	Z	Z	V	=	V	3	7
3	D	↑	3	Z	↑	3	Z	?

Ans

✓ 1.

	V	□
C	Z	=
7	3	

✗ 2.

	=	V
C	Z	□
7	3	

✗ 3.

	V	□
3	7	=
Z	C	

✗ 4.

	=	V
3	7	□
Z	C	

Question ID : 264330154761

Option 1 ID : 264330606507

Option 2 ID : 264330606509

Option 3 ID : 264330606510

Option 4 ID : 264330606508

Status : Answered

Chosen Option : 1

Q.17 What should come in place of '?' in the given series?

11 59 299 1499 7499 ?

Ans

✗ 1. 38199

✗ 2. 37699

✓ 3. 37499

✗ 4. 38499

Question ID : 264330151469

Option 1 ID : 264330593505

Option 2 ID : 264330593504

Option 3 ID : 264330593503

Option 4 ID : 264330593506

Status : Answered

Chosen Option : 3

Q.18 In the following number-pairs, the second number is obtained by applying certain mathematical operations to the first number. Select the set in which the numbers are related in the same way as are the numbers of the following sets.
(NOTE : Operations should be performed on the whole numbers, without breaking down the numbers into its constituent digits. E.g. 13 – Operations on 13 such as adding /deleting /multiplying etc. to 13 can be performed. Breaking down 13 into 1 and 3 and then performing mathematical operations on 1 and 3 is not allowed)
16 : 41
11 : 26

- Ans
- ☒ 1. 7 : 28
 - ☒ 2. 5 : 15
 - ☒ 3. 21 : 84
 - ☒ 4. 12 : 29

Question ID : 264330154650

Option 1 ID : 264330606065

Option 2 ID : 264330606066

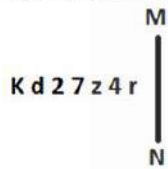
Option 3 ID : 264330606063

Option 4 ID : 264330606064

Status : Answered

Chosen Option : 4

Q.19 Select the correct mirror image of the given figure when the mirror is placed at MN as shown below.



- Ans
- ☒ 1.
 - ☒ 2.
 - ☒ 3.
 - ☒ 4.

Question ID : 264330151506

Option 1 ID : 264330593654

Option 2 ID : 264330593652

Option 3 ID : 264330593651

Option 4 ID : 264330593653

Status : Answered

Chosen Option : 2

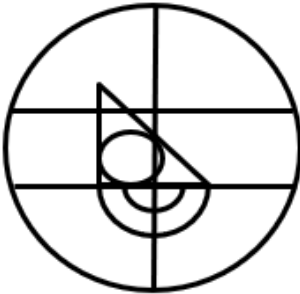
Q.20 Select the option figure in which the given figure (X) is embedded as its part (rotation is NOT allowed).



(X)

Ans

✗ 1.



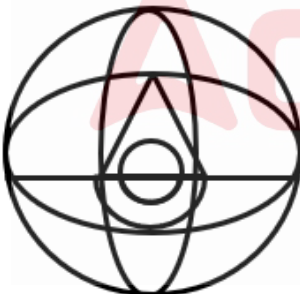
✗ 2.



✓ 3.



✗ 4.



Question ID : 264330151725

Option 1 ID : 264330594527

Option 2 ID : 264330594528

Option 3 ID : 264330594530

Option 4 ID : 264330594529

Status : Answered

Chosen Option : 3

Q.1 What is the purpose of a savings account?

- Ans ☒ 1. Obtaining a mortgage loan
☒ 2. Earning interest on deposits
☒ 3. Making day-to-day transactions
☒ 4. Paying bills online

Question ID : 264330157301
 Option 1 ID : 264330616569
 Option 2 ID : 264330616568
 Option 3 ID : 264330616567
 Option 4 ID : 264330616570
 Status : Answered
 Chosen Option : 3

Q.2 According to the Census of India 2011, the female literacy rate was recorded as _____.

- Ans ☒ 1. 75.35%
☒ 2. 65.46%
☒ 3. 55.84%
☒ 4. 70.24%

Question ID : 264330161557
 Option 1 ID : 264330633557
 Option 2 ID : 264330633558
 Option 3 ID : 264330633555
 Option 4 ID : 264330633556
 Status : Answered
 Chosen Option : 2

Q.3 Which of the following crops is most suitable for black soil?

- Ans ☒ 1. Soybean
☒ 2. Maize
☒ 3. Cotton
☒ 4. Barley

Question ID : 264330161316
 Option 1 ID : 264330632591
 Option 2 ID : 264330632592
 Option 3 ID : 264330632594
 Option 4 ID : 264330632593
 Status : Answered
 Chosen Option : 3

Q.4 In India, the 'Aus', 'Aman' and 'Boro' terms are associated with which crop from the following?

- Ans ☒ 1. Wheat
☒ 2. Gram
☒ 3. Sugarcane
☒ 4. Paddy

Question ID : 264330161510
 Option 1 ID : 264330633367
 Option 2 ID : 264330633370
 Option 3 ID : 264330633369
 Option 4 ID : 264330633368
 Status : Answered
 Chosen Option : 4

Q.5 The President of India conferred the Padma Shri award to Gurcharan Singh for his distinguished service in the field of _____ in 2023.

- Ans**
- ☒ 1. Tennis
 - ☒ 2. Cricket
 - ☒ 3. Football
 - ☒ 4. Badminton

Question ID : 264330161443
 Option 1 ID : 264330633102
 Option 2 ID : 264330633099
 Option 3 ID : 264330633100
 Option 4 ID : 264330633101
 Status : Not Answered
 Chosen Option : --

Q.6 Who moved the resolution proposing that the National Flag of India be a 'horizontal tricolour of saffron, white and dark green in equal proportion'?

- Ans**
- ☒ 1. Sardar Vallabhbhai Patel
 - ☒ 2. Jawaharlal Nehru
 - ☒ 3. Mahatma Gandhi
 - ☒ 4. Dr Rajendra Prasad

Question ID : 264330161747
 Option 1 ID : 264330634317
 Option 2 ID : 264330634316
 Option 3 ID : 264330634315
 Option 4 ID : 264330634318
 Status : Answered
 Chosen Option : 2

Q.7 In which of the following States was the first Janjatiya Khel Mahotsav held?

- Ans**
- ☒ 1. Odisha
 - ☒ 2. Chhattisgarh
 - ☒ 3. Jharkhand
 - ☒ 4. Andhra Pradesh

Question ID : 264330161127
 Option 1 ID : 264330631839
 Option 2 ID : 264330631841
 Option 3 ID : 264330631840
 Option 4 ID : 264330631842
 Status : Answered
 Chosen Option : 3

Q.8 Identify the Indian singer who sang the song 'Ae mere watan ke logon jara akhon mein bharlo paani...' before the first Prime Minister of India, Pandit Jawaharlal Nehru.

- Ans**
- ☒ 1. Lata Mangeshkar
 - ☒ 2. Mohammad Rafi
 - ☒ 3. Mukesh
 - ☒ 4. Asha Bhosle

Question ID : 264330160980
 Option 1 ID : 264330631251
 Option 2 ID : 264330631254
 Option 3 ID : 264330631253
 Option 4 ID : 264330631252
 Status : Answered
 Chosen Option : 1

Q.9 Which regulatory body in India is responsible for overseeing and regulating Micro Finance Institutions?

- Ans ☒ 1. Securities and Exchange Board of India (SEBI)
☒ 2. Small Industries Development Bank of India (SIDBI)
☒ 3. Reserve Bank of India (RBI)
☒ 4. National Bank for Agriculture and Rural Development (NABARD)

Question ID : 264330157285
 Option 1 ID : 264330616504
 Option 2 ID : 264330616505
 Option 3 ID : 264330616503
 Option 4 ID : 264330616506
 Status : Answered
 Chosen Option : 2

Q.10 Who among the following was the viceroy of India at the time of India's independence from colonial rule on 15 August 1947?

- Ans ☒ 1. Lord Wavell
☒ 2. Lord Willingdon
☒ 3. Lord Mountbatten
☒ 4. Lord Linlithgow

Question ID : 264330160824
 Option 1 ID : 264330630628
 Option 2 ID : 264330630630
 Option 3 ID : 264330630627
 Option 4 ID : 264330630629
 Status : Answered
 Chosen Option : 3

Q.11 Which of the following is the legislative organ of the Union Government?

- Ans ☒ 1. Cabinet
☒ 2. Supreme Court
☒ 3. Executive
☒ 4. Parliament

Question ID : 264330159920
 Option 1 ID : 264330627030
 Option 2 ID : 264330627029
 Option 3 ID : 264330627027
 Option 4 ID : 264330627028
 Status : Answered
 Chosen Option : 4

Q.12 Due to rapid urbanisation, the human lifestyle has changed severely; obesity is a major health issue in such condition. Which of the following is a reason for obesity?

- Ans ☒ 1. Excessive consumption of water
☒ 2. Excessive intake of high calorie foods
☒ 3. Lack of protein
☒ 4. Lack of vitamins in regular diet

Question ID : 264330156610
 Option 1 ID : 264330613828
 Option 2 ID : 264330613827
 Option 3 ID : 264330613830
 Option 4 ID : 264330613829
 Status : Answered
 Chosen Option : 2

Q.13 Who won the Best Playback Singer (Male) award in the 68th Filmfare Awards 2023?

- Ans
- ☒ 1. Mohit Chauhan
 - ☒ 2. Shaan
 - ☒ 3. Arijit Singh
 - ☒ 4. Amit Mishra

Question ID : 264330155516
 Option 1 ID : 264330609467
 Option 2 ID : 264330609469
 Option 3 ID : 264330609468
 Option 4 ID : 264330609470
 Status : Answered
 Chosen Option : 3

Q.14 Where was Shree Narayana Dharma Paripalana Yogam founded?

- Ans
- ☒ 1. Tamil Nādu
 - ☒ 2. Kerala
 - ☒ 3. Karnataka
 - ☒ 4. Telangana

Question ID : 264330160890
 Option 1 ID : 264330630892
 Option 2 ID : 264330630891
 Option 3 ID : 264330630894
 Option 4 ID : 264330630893
 Status : Not Answered
 Chosen Option : --

Q.15 Who is the renowned kathak dancer, student of 'Pandit Birju Maharaj' and also served as an officer with Indian Audit and Accounts Services?

- Ans
- ☒ 1. Sonal Mansingh
 - ☒ 2. Guru Bipin Singh
 - ☒ 3. Shovana Narayan
 - ☒ 4. Padma Subrahmanayam

Question ID : 264330159063
 Option 1 ID : 264330623613
 Option 2 ID : 264330623611
 Option 3 ID : 264330623612
 Option 4 ID : 264330623614
 Status : Answered
 Chosen Option : 3

Q.16 Shama Bhate received the Sangeet Natak Akademi Award-2021 (given in February 2023) for her contribution to which dance form of the following?

- Ans**
- ☒ 1. Manipuri
 - ☒ 2. Kathak
 - ☒ 3. Bharatanatyam
 - ☒ 4. Mohiniyattam

Question ID : 264330155518
 Option 1 ID : 264330609477
 Option 2 ID : 264330609476
 Option 3 ID : 264330609475
 Option 4 ID : 264330609478
 Status : Answered
 Chosen Option : 1

Q.17 Which of the following Indus Valley sites is now located in Pakistan?

- Ans**
- ☒ 1. Harappa
 - ☒ 2. Lothal
 - ☒ 3. Alamgirpur
 - ☒ 4. Kalibangan

Question ID : 264330162697
 Option 1 ID : 264330638108
 Option 2 ID : 264330638110
 Option 3 ID : 264330638107
 Option 4 ID : 264330638109
 Status : Answered
 Chosen Option : 1

Q.18 In April 2023, Satwiksairaj Rankireddy and Chirag Shetty made history, becoming the first Indian men's doubles pair to win a gold medal at the Badminton Asia Championships. Where was this championship held?

- Ans**
- ☒ 1. Singapore
 - ☒ 2. Dubai
 - ☒ 3. Qatar
 - ☒ 4. Malaysia

Question ID : 264330161153
 Option 1 ID : 264330631946
 Option 2 ID : 264330631944
 Option 3 ID : 264330631943
 Option 4 ID : 264330631945
 Status : Not Answered
 Chosen Option : --

Q.19 Which of the following states has introduced a dedicated Semiconductor Policy 2022-27 with a view to generate at least 2,00,000 new employment opportunities in the state?

- Ans ☒ 1. Andhra Pradesh
☒ 2. Maharashtra
☒ 3. Gujarat
☒ 4. Kerala

Question ID : 264330161409
 Option 1 ID : 264330632965
 Option 2 ID : 264330632963
 Option 3 ID : 264330632964
 Option 4 ID : 264330632966
 Status : Answered
 Chosen Option : 1

Q.20 The classical dance style of Bharatanatyam belongs to the state of _____.

- Ans ☒ 1. Karnataka
☒ 2. Tamil Nadu
☒ 3. Assam
☒ 4. Rajasthan

Question ID : 264330159049
 Option 1 ID : 264330623555
 Option 2 ID : 264330623556
 Option 3 ID : 264330623557
 Option 4 ID : 264330623558
 Status : Answered
 Chosen Option : 2

Q.21 Which of the following peninsular rivers of India is a west flowing river?

- Ans ☒ 1. Kaveri
☒ 2. Narmada
☒ 3. Godavari
☒ 4. Krishna

Question ID : 264330161496
 Option 1 ID : 264330633312
 Option 2 ID : 264330633314
 Option 3 ID : 264330633311
 Option 4 ID : 264330633313
 Status : Answered
 Chosen Option : 1

Q.22 Which Articles of the Constitution of India deal with the Union and its territory?

- Ans ☒ 1. Articles 5-11
☒ 2. Articles 1-4
☒ 3. Articles 12-35
☒ 4. Article 36-51

Question ID : 264330159894
 Option 1 ID : 264330626924
 Option 2 ID : 264330626923
 Option 3 ID : 264330626925
 Option 4 ID : 264330626926
 Status : Answered
 Chosen Option : 2

Q.23 'The Great Indian Novel' is a satirical novel by _____.

- Ans
- ☒ 1. Suryakant Tripathi
 - ☒ 2. KR Narayan
 - ☒ 3. Munshi Prem Chand
 - ☒ 4. Shashi Tharoor

Question ID : 264330155496

Option 1 ID : 264330609387

Option 2 ID : 264330609388

Option 3 ID : 264330609389

Option 4 ID : 264330609390

Status : Not Answered

Chosen Option : --

Q.24 What is the systematic name of a colourless gas with a faint, ethereal odour called acetylene, widely used for welding?

- Ans
- ☒ 1. Ethyne
 - ☒ 2. Ethanoic anhydride
 - ☒ 3. Azoethane
 - ☒ 4. Ethyl acetate

Question ID : 264330161050

Option 1 ID : 264330631532

Option 2 ID : 264330631533

Option 3 ID : 264330631534

Option 4 ID : 264330631531

Status : Not Answered

Chosen Option : --

Q.25 Identify the correct pair of novel and its writer from the following.

- Ans
- ☒ 1. Seven Summers - Mulk Raj Anand
 - ☒ 2. The White Tiger - Kiran Desai
 - ☒ 3. A Suitable Boy- Amitav Ghosh
 - ☒ 4. The Inheritance of Loss -Aravind Adiga

Question ID : 264330155501

Option 1 ID : 264330609409

Option 2 ID : 264330609410

Option 3 ID : 264330609407

Option 4 ID : 264330609408

Status : Not Answered

Chosen Option : --

Q.1 The following sentence has been divided into four parts. Identify the part that contains an error.
(A) Taylor, Richard, and / (B) Francis plays for / (C) the state / (D) basketball team.

- Ans ☒ 1. D
☒ 2. A
☒ 3. C
☒ 4. B

Question ID : 264330152616
Option 1 ID : 264330598067
Option 2 ID : 264330598070
Option 3 ID : 264330598068
Option 4 ID : 264330598069
Status : Answered
Chosen Option : 4

Q.2 Select the most appropriate meaning of the given idiom.
Pay an arm and a leg for something

- Ans ☒ 1. Be devoted to unwanted things
☒ 2. Pay a lot of money for something
☒ 3. Give a lot of love and care to someone
☒ 4. Pay a lot of attention to an incident

Question ID : 264330153438
Option 1 ID : 264330601277
Option 2 ID : 264330601275
Option 3 ID : 264330601278
Option 4 ID : 264330601276
Status : Answered
Chosen Option : 2

Q.3 The following sentence has been divided into parts. One of them may contain an error. Select the part that contains the error from the given options. If you don't find any error, mark 'No error' as your answer.
As they driven through the dark, twisting lane / down which they had walked earlier, Lucius heard / the whistling of the night air in his ears.

- Ans ☒ 1. down which they had walked earlier, Lucius heard
☒ 2. No error
☒ 3. the whistling of the night air in his ears.
☒ 4. As they driven through the dark, twisting lane

Question ID : 264330153212
Option 1 ID : 264330600409
Option 2 ID : 264330600410
Option 3 ID : 264330600407
Option 4 ID : 264330600408
Status : Answered
Chosen Option : 3

Q.4 Select the most appropriate synonym of the given word.
Trivial

- Ans ☒ 1. Minor
☒ 2. Fatal
☒ 3. Decisive
☒ 4. Formal

Question ID : 264330152683
Option 1 ID : 264330598338
Option 2 ID : 264330598335
Option 3 ID : 264330598337
Option 4 ID : 264330598336
Status : Answered
Chosen Option : 1

Q.5 Select the most appropriate word to fill in the blank.
Ministry of education has announced that students can _____ the Board Examinations twice.

- Ans ☒ 1. take
☒ 2. participate
☒ 3. give
☒ 4. get

Question ID : 264330153506
Option 1 ID : 264330601537
Option 2 ID : 264330601538
Option 3 ID : 264330601536
Option 4 ID : 264330601535
Status : Answered
Chosen Option : 1

Q.6 Select the most appropriate meaning of the underlined idiom in the given sentence.

A man of character, he stuck to his guns even in the most difficult situations.

- Ans ☒ 1. To do things that would please people
☒ 2. To behave disrespectfully
☒ 3. To find a treasure
☒ 4. To stand firm against all difficulties and challenges

Question ID : 264330152880
Option 1 ID : 264330599113
Option 2 ID : 264330599111
Option 3 ID : 264330599112
Option 4 ID : 264330599114
Status : Answered
Chosen Option : 4

Q.7 Select the most appropriate meaning of the underlined segment in the given sentence.
After her husband passed away, Jane had to learn to bite the bullet and take care of the household on her own.

- Ans**
- ☒ 1. Create a difficult situation
 - ☒ 2. Accept a difficult situation bravely
 - ☒ 3. Criticise someone harshly
 - ☒ 4. Run away from a difficult situation

Question ID : 264330152922
Option 1 ID : 264330599269
Option 2 ID : 264330599268
Option 3 ID : 264330599270
Option 4 ID : 264330599267
Status : Answered
Chosen Option : 2

Q.8 Select the option that can be used as a one-word substitute for the given phrase.
One who lends money to others at a very high rate of interest.

- Ans**
- ☒ 1. Curator
 - ☒ 2. Bankrupt
 - ☒ 3. Usurer
 - ☒ 4. Numismatist

Question ID : 264330152674
Option 1 ID : 264330598301
Option 2 ID : 264330598302
Option 3 ID : 264330598299
Option 4 ID : 264330598300
Status : Answered
Chosen Option : 4

Q.9 Parts of the following sentence have been given as options. Select the option that contains an error.
The platinum is a precious metal.

- Ans**
- ☒ 1. is
 - ☒ 2. The platinum
 - ☒ 3. a
 - ☒ 4. precious metal

Question ID : 264330155201
Option 1 ID : 264330608264
Option 2 ID : 264330608263
Option 3 ID : 264330608265
Option 4 ID : 264330608266
Status : Answered
Chosen Option : 2

Q.10 Select the most appropriate option to fill in the blank.
All praised him when he soared in the business world, but the same people _____ him when he failed in business.

- Ans ☒ 1. nourished
☒ 2. criticised
☒ 3. supported
☒ 4. dramatised

Question ID : 264330153576
Option 1 ID : 264330601799
Option 2 ID : 264330601800
Option 3 ID : 264330601802
Option 4 ID : 264330601801
Status : Answered
Chosen Option : 2

Q.11 Parts of the following sentence have been underlined and given as options. Select the option that contains an error.
What most off us want most is to move forward.

- Ans ☒ 1. most off
☒ 2. is to
☒ 3. want most
☒ 4. move forward

Question ID : 264330153209
Option 1 ID : 264330600395
Option 2 ID : 264330600397
Option 3 ID : 264330600396
Option 4 ID : 264330600398
Status : Answered
Chosen Option : 1

Q.12 Select the word which means the same as the group of words given.
That which can't be read.

- Ans ☒ 1. Inaccessible
☒ 2. Incurable
☒ 3. Illegible
☒ 4. Irrelevant

Question ID : 264330152570
Option 1 ID : 264330597883
Option 2 ID : 264330597884
Option 3 ID : 264330597885
Option 4 ID : 264330597886
Status : Answered
Chosen Option : 3

Q.13 Select the INCORRECTLY spelt word.

- Ans ☒ 1. Acknowledge
☒ 2. Territory
☒ 3. Excellence
☒ 4. Business

Question ID : 264330152688
Option 1 ID : 264330598356
Option 2 ID : 264330598358
Option 3 ID : 264330598357
Option 4 ID : 264330598355
Status : Answered
Chosen Option : 1

Q.14 Select the most appropriate ANTONYM of the given word.
Authentic

- Ans ☒ 1. Moderate
☒ 2. Actual
☒ 3. False
☒ 4. Wise

Question ID : 264330152675
Option 1 ID : 264330598306
Option 2 ID : 264330598303
Option 3 ID : 264330598304
Option 4 ID : 264330598305
Status : Answered
Chosen Option : 3

Q.15 Select the most appropriate idiom to fill in the blank.
Please tell me about the meeting _____.

- Ans ☒ 1. in a nutshell
☒ 2. in a stew
☒ 3. in a huff
☒ 4. in a spin

Question ID : 264330152597
Option 1 ID : 264330597992
Option 2 ID : 264330597993
Option 3 ID : 264330597994
Option 4 ID : 264330597991
Status : Answered
Chosen Option : 1

Q.16 Select the most appropriate option to fill in the blank.
Augmented Reality (AR) continues to develop and become more _____ among a wide range of applications.

- Ans ☒ 1. rare
☒ 2. amicable
☒ 3. idealistic
☒ 4. pervasive

Question ID : 264330151905
Option 1 ID : 264330595235
Option 2 ID : 264330595237
Option 3 ID : 264330595238
Option 4 ID : 264330595236
Status : Answered
Chosen Option : 3

Q.17 Select the INCORRECTLY spelt word.

- Ans ☒ 1. Grammar
☒ 2. Pleasant
☒ 3. Familiar
☒ 4. Aweful

Question ID : 264330152828
Option 1 ID : 264330598905
Option 2 ID : 264330598906
Option 3 ID : 264330598903
Option 4 ID : 264330598904
Status : Answered
Chosen Option : 4

Q.18 Select the INCORRECTLY spelt word in the given sentence.
The handloom shop at the Ring Road has many kinds of bags, such as paper, leather, cloth and cannvas.

- Ans ☒ 1. Paper
☒ 2. Cannvas
☒ 3. Leather
☒ 4. Cloth

Question ID : 264330153302
Option 1 ID : 264330600763
Option 2 ID : 264330600766
Option 3 ID : 264330600764
Option 4 ID : 264330600765
Status : Answered
Chosen Option : 2

Q.19 Select the most appropriate option to fill in the blank.
A/An _____ fellow cannot become an ideal teacher.

- Ans ☒ 1. idle
☒ 2. bright
☒ 3. intelligent
☒ 4. honest

Question ID : 264330153355
Option 1 ID : 264330600971
Option 2 ID : 264330600974
Option 3 ID : 264330600972
Option 4 ID : 264330600973
Status : Answered
Chosen Option : 1

Q.20 Select the most appropriate option that can substitute the underlined segment in the given sentence.

I considered Geography as an easier subject.

- Ans ☒ 1. the easy
☒ 2. the easier
☒ 3. an easiest
☒ 4. an easy

Question ID : 264330155423
Option 1 ID : 264330609100
Option 2 ID : 264330609101
Option 3 ID : 264330609102
Option 4 ID : 264330609099
Status : Answered
Chosen Option : 4

Comprehension:

In the following passage some words have been deleted. Read the passage carefully and select the most appropriate option to fill in each blank.
The most common hazard in forests is forest fire. Forest fires are as old as the forests themselves. They pose a 1. _____ not only to the forest wealth but also to the entire regime to fauna and flora seriously disturbing the biodiversity and the ecology and environment of a region. During summer, when there is no rain for months, the forests 2. _____ littered with dry senescent leaves and twinges, which could burst into flames ignited by the slightest spark. The Himalayan forests, particularly, Garhwal Himalayas have been burning 3. _____ during the last few summers, with colossal loss of vegetation cover of that region. The youngest mountain ranges of the Himalayas are the most 4. _____ stretches of the world susceptible to forest fires. The forests of the Western are more 5. _____ vulnerable to forest fires as compared to those in the Eastern Himalayas. This is because forests of the Eastern Himalayas grow in high rain density.

SubQuestion No : 21

Q.21 Select the most appropriate option to fill in blank no.1.

- Ans ☒ 1. mercy
☒ 2. trend
☒ 3. failure
☒ 4. threat

Question ID : 264330151933
Option 1 ID : 264330595344
Option 2 ID : 264330595346
Option 3 ID : 264330595343
Option 4 ID : 264330595345
Status : Answered
Chosen Option : 4

Comprehension:

In the following passage some words have been deleted. Read the passage carefully and select the most appropriate option to fill in each blank.
The most common hazard in forests is forest fire. Forest fires are as old as the forests themselves. They pose a 1. _____ not only to the forest wealth but also to the entire regime to fauna and flora seriously disturbing the biodiversity and the ecology and environment of a region. During summer, when there is no rain for months, the forests 2. _____ littered with dry senescent leaves and twinges, which could burst into flames ignited by the slightest spark. The Himalayan forests, particularly, Garhwal Himalayas have been burning 3. _____ during the last few summers, with colossal loss of vegetation cover of that region. The youngest mountain ranges of the Himalayas are the most 4. _____ stretches of the world susceptible to forest fires. The forests of the Western are more 5. _____ vulnerable to forest fires as compared to those in the Eastern Himalayas. This is because forests of the Eastern Himalayas grow in high rain density.

SubQuestion No : 22

Q.22 Select the most appropriate option to fill in blank no.2.

- Ans ☒ 1. keep
☒ 2. build
☒ 3. become
☒ 4. drive

Question ID : 264330151934

Option 1 ID : 264330595349

Option 2 ID : 264330595350

Option 3 ID : 264330595348

Option 4 ID : 264330595347

Status : Answered

Chosen Option : 3

Comprehension:

In the following passage some words have been deleted. Read the passage carefully and select the most appropriate option to fill in each blank.
The most common hazard in forests is forest fire. Forest fires are as old as the forests themselves. They pose a 1. _____ not only to the forest wealth but also to the entire regime to fauna and flora seriously disturbing the biodiversity and the ecology and environment of a region. During summer, when there is no rain for months, the forests 2. _____ littered with dry senescent leaves and twinges, which could burst into flames ignited by the slightest spark. The Himalayan forests, particularly, Garhwal Himalayas have been burning 3. _____ during the last few summers, with colossal loss of vegetation cover of that region. The youngest mountain ranges of the Himalayas are the most 4. _____ stretches of the world susceptible to forest fires. The forests of the Western are more 5. _____ vulnerable to forest fires as compared to those in the Eastern Himalayas. This is because forests of the Eastern Himalayas grow in high rain density.

SubQuestion No : 23

Q.23 Select the most appropriate option to fill in blank no.3.

- Ans ☒ 1. rarely
☒ 2. regularly
☒ 3. badly
☒ 4. enough

Question ID : 264330151935

Option 1 ID : 264330595354

Option 2 ID : 264330595351

Option 3 ID : 264330595353

Option 4 ID : 264330595352

Status : Answered

Chosen Option : 2

Comprehension:

In the following passage some words have been deleted. Read the passage carefully and select the most appropriate option to fill in each blank.
The most common hazard in forests is forest fire. Forest fires are as old as the forests themselves. They pose a 1. _____ not only to the forest wealth but also to the entire regime to fauna and flora seriously disturbing the biodiversity and the ecology and environment of a region. During summer, when there is no rain for months, the forests 2. _____ littered with dry senescent leaves and twinges, which could burst into flames ignited by the slightest spark. The Himalayan forests, particularly, Garhwal Himalayas have been burning 3. _____ during the last few summers, with colossal loss of vegetation cover of that region. The youngest mountain ranges of the Himalayas are the most 4. _____ stretches of the world susceptible to forest fires. The forests of the Western are more 5. _____ vulnerable to forest fires as compared to those in the Eastern Himalayas. This is because forests of the Eastern Himalayas grow in high rain density.

SubQuestion No : 24

Q.24 Select the most appropriate option to fill in blank no.4.

- Ans ☒ 1. outrageous
☒ 2. vulnerable
☒ 3. greasy
☒ 4. mysterious

Question ID : 264330151936
Option 1 ID : 264330595356
Option 2 ID : 264330595358
Option 3 ID : 264330595357
Option 4 ID : 264330595355
Status : Answered
Chosen Option : 2

Comprehension:

In the following passage some words have been deleted. Read the passage carefully and select the most appropriate option to fill in each blank.
The most common hazard in forests is forest fire. Forest fires are as old as the forests themselves. They pose a 1. _____ not only to the forest wealth but also to the entire regime to fauna and flora seriously disturbing the biodiversity and the ecology and environment of a region. During summer, when there is no rain for months, the forests 2. _____ littered with dry senescent leaves and twinges, which could burst into flames ignited by the slightest spark. The Himalayan forests, particularly, Garhwal Himalayas have been burning 3. _____ during the last few summers, with colossal loss of vegetation cover of that region. The youngest mountain ranges of the Himalayas are the most 4. _____ stretches of the world susceptible to forest fires. The forests of the Western are more 5. _____ vulnerable to forest fires as compared to those in the Eastern Himalayas. This is because forests of the Eastern Himalayas grow in high rain density.

SubQuestion No : 25

Q.25 Select the most appropriate option to fill in blank no.5.

- Ans ☒ 1. closely
☒ 2. frequently
☒ 3. deeply
☒ 4. barely

Question ID : 264330151937
Option 1 ID : 264330595362
Option 2 ID : 264330595360
Option 3 ID : 264330595361
Option 4 ID : 264330595359
Status : Answered
Chosen Option : 3