

Multi Tasking Non Technical Staff and Havaladar CBIC and CBN Examination 2022

Roll Number	
Candidate Name	
Venue Name	TCS Gito Bitan
Exam Date	02/05/2023
Exam Time	12:00 PM - 2:00 PM
Subject	MTS Non Tech Havaladar CBIC and CBN Examination 2022

Section : Numerical and Mathematical Ability

Q.1 When a wire is bent in the form of a square, then the area enclosed by it is 5929 cm^2 . If wire is bent into the form of a circle, then what will be the area enclosed by the wire?

- Ans**
- ✓ 1. 7546 cm^2
 - ✗ 2. 8542 cm^2
 - ✗ 3. 7632 cm^2
 - ✗ 4. 6954 cm^2

Question Type : MCQ

Question ID : 264330138029

Option 1 ID : 264330540725

Option 2 ID : 264330540726

Option 3 ID : 264330540724

Option 4 ID : 264330540723

Status : Answered

Chosen Option : 1

Q.2 The average of 10 numbers is 42. If each number is increased by 5, then what will be the new average?

- Ans**
- ✗ 1. 42
 - ✓ 2. 47
 - ✗ 3. 92
 - ✗ 4. 57

Question Type : MCQ

Question ID : 264330133629

Option 1 ID : 264330523541

Option 2 ID : 264330523542

Option 3 ID : 264330523539

Option 4 ID : 264330523540

Status : Answered

Chosen Option : 2

Test Prime

**ALL EXAMS,
ONE SUBSCRIPTION**



70,000+
Mock Tests



**Personalised
Report Card**



**Unlimited
Re-Attempt**



600+
Exam Covered



**Previous Year
Papers**



**500%
Refund**



ATTEMPT FREE MOCK NOW

Q.3 It takes 6 hours to clean a garden. In 2 hours 30 minutes, how much part of the garden can clean?

Ans

✗ 1. $\frac{5}{2}$

✓ 2. $\frac{5}{12}$

✗ 3. $\frac{5}{8}$

✗ 4. $\frac{5}{6}$

Question Type : MCQ

Question ID : 264330133829

Option 1 ID : 264330524340

Option 2 ID : 264330524339

Option 3 ID : 264330524342

Option 4 ID : 264330524341

Status : Answered

Chosen Option : 2

Q.4 A thief is noticed by a policeman from a distance of 150 m. The thief starts running and the policeman chases him. The thief and the policeman run at the rate of 8 kmph and 10 kmph respectively. At what distance will the policeman catches the thief?

Ans

✗ 1. 1000 meter

✗ 2. 850 meter

✗ 3. 500 meter

✓ 4. 750 meter

Question Type : MCQ

Question ID : 264330133639

Option 1 ID : 264330523579

Option 2 ID : 264330523582

Option 3 ID : 264330523580

Option 4 ID : 264330523581

Status : Answered

Chosen Option : 4

Q.5 The below table shows the number of the music systems that were sold by two companies in the years 2014 to 2017. What is the difference between the average sale of company A and company B?

Year	Company A	Company B
2014	5640	6980
2015	8412	10512
2016	7148	8620
2017	8424	10020

Ans

✗ 1. 7406

✓ 2. 1627

✗ 3. 2016

✗ 4. 9033

Question Type : MCQ

Question ID : 264330138052

Option 1 ID : 264330540817

Option 2 ID : 264330540815

Option 3 ID : 264330540818

Option 4 ID : 264330540816

Status : Answered

Chosen Option : 3

Q.6 A man sold 150 chairs and had a gain equal to selling price of 25 chairs. Find his profit percentage.

- Ans**
- ☒ 1. 18%
 - ☒ 2. 15%
 - ☒ 3. 20%
 - ☒ 4. 13%

Question Type : **MCQ**

Question ID : **264330135071**

Option 1 ID : **264330529221**

Option 2 ID : **264330529219**

Option 3 ID : **264330529220**

Option 4 ID : **264330529222**

Status : **Answered**

Chosen Option : **3**

Q.7 Rs. 7205 are invested in a scheme of compound interest (compounding annually). If the rate of interest is 20% per annum, then what is the interest earned (in Rs) in 1 year?

- Ans**
- ☒ 1. Rs. 1422
 - ☒ 2. Rs. 1540
 - ☒ 3. Rs. 1441
 - ☒ 4. Rs. 1544

Question Type : **MCQ**

Question ID : **264330135143**

Option 1 ID : **264330529510**

Option 2 ID : **264330529509**

Option 3 ID : **264330529507**

Option 4 ID : **264330529508**

Status : **Answered**

Chosen Option : **3**

Q.8 What will be the area of the semi-circle of perimeter 3.6 meters?

- Ans**
- ☒ 1. 1.54 m^2
 - ☒ 2. 1.76 m^2
 - ☒ 3. 1.10 m^2
 - ☒ 4. 0.77 m^2

Question Type : **MCQ**

Question ID : **264330133834**

Option 1 ID : **264330524362**

Option 2 ID : **264330524361**

Option 3 ID : **264330524360**

Option 4 ID : **264330524359**

Status : **Answered**

Chosen Option : **4**

Q.9 A sum fetched a simple interest of Rs. 3360 at a rate of 6% per year in 7 years. Find the sum.

- Ans** ☒ 1. Rs. 8000
☐ 2. Rs. 9500
☐ 3. Rs. 7500
☐ 4. Rs. 6000

Question Type : **MCQ**

Question ID : **264330135142**

Option 1 ID : **264330529505**

Option 2 ID : **264330529506**

Option 3 ID : **264330529504**

Option 4 ID : **264330529503**

Status : **Answered**

Chosen Option : **1**

Q.10 The profit percent earned by selling a centre table for Rs.13440 is equal to the loss percent made by selling the same centre table for Rs.10560. At what price should the article be sold to make 20% profit?

- Ans** ☐ 1. Rs.12000
☐ 2. Rs.24000
☒ 3. Rs.14400
☐ 4. Rs.18000

Question Type : **MCQ**

Question ID : **264330133633**

Option 1 ID : **264330523555**

Option 2 ID : **264330523557**

Option 3 ID : **264330523556**

Option 4 ID : **264330523558**

Status : **Answered**

Chosen Option : **3**

Q.11 Eleven friends spent Rs. 18 each on a tour and the twelfth friend spent Rs. 11 less than the average expenditure of all twelve of them. What is the total money spent by twelve friends?

- Ans** ☒ 1. Rs.204
☐ 2. Rs.215
☐ 3. Rs.212
☐ 4. Rs.208

Question Type : **MCQ**

Question ID : **264330137178**

Option 1 ID : **264330537358**

Option 2 ID : **264330537357**

Option 3 ID : **264330537355**

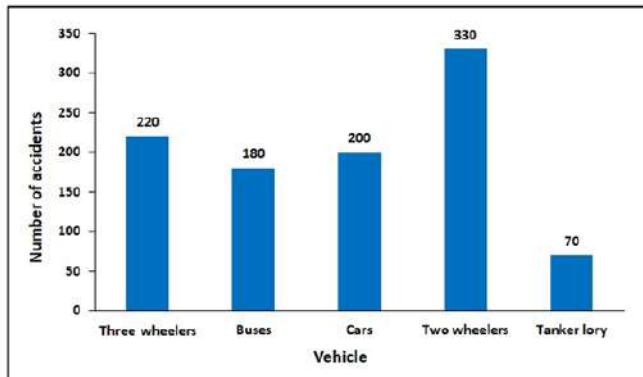
Option 4 ID : **264330537356**

Status : **Answered**

Chosen Option : **1**

Q.12 The following bar graph shows the number of accident happened in a city during the year 2021.

B = difference in accidents of two wheelers and buses. B is what percent of total number of accidents?



- Ans
- ☒ 1. 33%
 - ☒ 2. 15%
 - ☒ 3. 18%
 - ☒ 4. 10%

Question Type : MCQ

Question ID : 264330133643

Option 1 ID : 264330523595

Option 2 ID : 264330523596

Option 3 ID : 264330523598

Option 4 ID : 264330523597

Status : Answered

Chosen Option : 2

Q.13 The ratio of two numbers is 5 : 9. If 6 is added to the greater number and 6 is subtracted from smaller number, then greater number becomes 6 times the smaller number. What are the numbers?

- Ans
- ☒ 1. 15 and 27
 - ☒ 2. 10 and 18
 - ☒ 3. 25 and 45
 - ☒ 4. 20 and 36

Question Type : MCQ

Question ID : 264330133635

Option 1 ID : 264330523563

Option 2 ID : 264330523565

Option 3 ID : 264330523566

Option 4 ID : 264330523564

Status : Answered

Chosen Option : 3

Q.14 If $A + \{5 \times 8 \div 2^2\} \times 11 = 134$, then what is the value of A?

Ans ☒ 1. 24

☐ 2. 4

☐ 3. 14

☐ 4. 34

Question Type : MCQ

Question ID : 264330138036

Option 1 ID : 264330540753

Option 2 ID : 264330540751

Option 3 ID : 264330540752

Option 4 ID : 264330540754

Status : Answered

Chosen Option : 1

Q.15 Divide Rs.14136 among A, B and C such that 2 times A's share, 3 times B's share and 5 times C's share are all equal.
What is the share of C?

Ans ☐ 1. Rs.3680

☐ 2. Rs.456

☒ 3. Rs.2736

☐ 4. Rs.1413

Question Type : MCQ

Question ID : 264330133636

Option 1 ID : 264330523570

Option 2 ID : 264330523567

Option 3 ID : 264330523569

Option 4 ID : 264330523568

Status : Answered

Chosen Option : 3

Q.16 If 33.33% of a number is added to 16, then the result is the number itself. Find the number.

Ans ☐ 1. 30

☐ 2. 33

☐ 3. 36

☒ 4. 24

Question Type : MCQ

Question ID : 264330135136

Option 1 ID : 264330529482

Option 2 ID : 264330529479

Option 3 ID : 264330529480

Option 4 ID : 264330529481

Status : Answered

Chosen Option : 4

Q.17 The average age of 6 members of a family is 20 years. If the age of the servant is included, then the average age increase by 20 percent. What is the age of the servant?

- Ans**
- ☒ 1. 52 years
 - ☒ 2. 56 years
 - ☒ 3. 50 years
 - ☒ 4. 48 years

Question Type : **MCQ**
 Question ID : **264330139000**
 Option 1 ID : **264330544607**
 Option 2 ID : **264330544609**
 Option 3 ID : **264330544610**
 Option 4 ID : **264330544608**
 Status : **Answered**
 Chosen Option : **4**

Q.18 The marked price is 10% higher than cost price. A discount of 10% given on marked price. What is the gain or loss percent?

- Ans**
- ☒ 1. 5% gain
 - ☒ 2. 5% loss
 - ☒ 3. 1% loss
 - ☒ 4. 1% gain

Question Type : **MCQ**
 Question ID : **264330133634**
 Option 1 ID : **264330523562**
 Option 2 ID : **264330523561**
 Option 3 ID : **264330523559**
 Option 4 ID : **264330523560**
 Status : **Answered**
 Chosen Option : **3**

Q.19 The value of $(0.18 \div 0.9 + 0.8) \times 0.001$ is:

- Ans**
- ☒ 1. 0.1
 - ☒ 2. 1.001
 - ☒ 3. 0.01
 - ☒ 4. 0.001

Question Type : **MCQ**
 Question ID : **264330133627**
 Option 1 ID : **264330523534**
 Option 2 ID : **264330523531**
 Option 3 ID : **264330523533**
 Option 4 ID : **264330523532**
 Status : **Answered**
 Chosen Option : **4**

Q.20 Two numbers are in the ratio 11:6. If their HCF is 4, find the smallest number.

- Ans**
- ☐ 1. 30
 - ☐ 2. 18
 - ☒ 3. 24
 - ☐ 4. 12

Question Type : **MCQ**
 Question ID : **264330135132**
 Option 1 ID : **264330529466**
 Option 2 ID : **264330529465**
 Option 3 ID : **264330529463**
 Option 4 ID : **264330529464**
 Status : **Answered**
 Chosen Option : **3**

Section : Reasoning Ability and Problem Solving

Q.1 Seven students of a coaching centre, Param, Qazi, Ravi, Suresh, Tanvir, Uday and Varsha, have obtained different percentages. Param scored the second-highest percentage in the centre. The percentage scored by Varsha was more than only one person. Suresh's percentage was more than Tanvir's but less than Param's. Three people got more percentage than Tanvir and three got lesser than Tanvir. Neither Ravi nor Qazi received the lowest percentage. Whose percentage was the lowest?

- Ans**
- ☐ 1. Tanvir
 - ☐ 2. Param
 - ☒ 3. Uday
 - ☐ 4. Qazi

Question Type : **MCQ**
 Question ID : **264330133374**
 Option 1 ID : **264330522527**
 Option 2 ID : **264330522529**
 Option 3 ID : **264330522528**
 Option 4 ID : **264330522530**
 Status : **Answered**
 Chosen Option : **3**

Q.2 Two Statements are given followed by two conclusions numbered I and II. Assuming the statements to be true, even if they seem to be at variance with commonly known facts, decide which of the conclusions logically follow(s) from the statements.

Statements:

All pens are cars.

Some cars are bulbs.

Conclusions:

I. Some cars are not bulbs.

II. Some pens being bulbs is a possibility.

- Ans**
- ☐ 1. Both conclusions I and II follow
 - ☐ 2. Neither conclusion I nor II follows
 - ☐ 3. Only conclusion I follows
 - ☒ 4. Only conclusion II follows

Question Type : **MCQ**
 Question ID : **264330133376**
 Option 1 ID : **264330522537**
 Option 2 ID : **264330522538**
 Option 3 ID : **264330522535**
 Option 4 ID : **264330522536**
 Status : **Answered**
 Chosen Option : **4**

Q.3 Select the option that is related to the third word in the same way as the second word is related to the first word.

Abandon : Leave :: Pensive : ?

- Ans
- ✗ 1. Dancing
 - ✓ 2. Thoughtful
 - ✗ 3. Depressed
 - ✗ 4. Happy

Question Type : MCQ

Question ID : 264330133368

Option 1 ID : 264330522506

Option 2 ID : 264330522503

Option 3 ID : 264330522504

Option 4 ID : 264330522505

Status : Answered

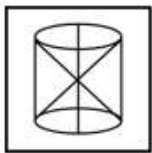
Chosen Option : 2

Q.4 Select the option figure in which the given figure is embedded as its part (rotation is NOT allowed).

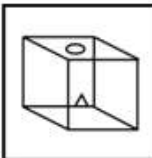


Ans

✓ 1.



✗ 2.



✗ 3.



✗ 4.



Question Type : MCQ

Question ID : 264330137849

Option 1 ID : 264330540004

Option 2 ID : 264330540006

Option 3 ID : 264330540003

Option 4 ID : 264330540005

Status : Answered

Chosen Option : 1

Q.5 In a certain code language, 'ACTOR' is written as '52' and 'PACK' is written as '27'. How will 'SEVEN' be written in that language?

- Ans**
- ☒ 1. 59
 - ☒ 2. 65
 - ☒ 3. 60
 - ☒ 4. 72

Question Type : **MCQ**

Question ID : **264330137350**

Option 1 ID : **264330538029**

Option 2 ID : **264330538027**

Option 3 ID : **264330538028**

Option 4 ID : **264330538030**

Status : **Answered**

Chosen Option : **3**

Q.6 Five friends X, Y, Z, A, and B are sitting in a circle facing the centre. X is to the immediate left of Y and to the immediate right of Z. B is to the immediate right of A. Who is to the immediate left of A?

- Ans**
- ☒ 1. X
 - ☒ 2. Y
 - ☒ 3. B
 - ☒ 4. Z

Question Type : **MCQ**

Question ID : **264330133373**

Option 1 ID : **264330522524**

Option 2 ID : **264330522523**

Option 3 ID : **264330522526**

Option 4 ID : **264330522525**

Status : **Answered**

Chosen Option : **2**

Q.7 Which two numbers should be interchanged to make the given equation correct?

$$13 + 4 \div 16 \times 5 - 22 = 11$$

- Ans**
- ☒ 1. 13 and 22
 - ☒ 2. 16 and 22
 - ☒ 3. 13 and 16
 - ☒ 4. 4 and 16

Question Type : **MCQ**

Question ID : **264330133381**

Option 1 ID : **264330522558**

Option 2 ID : **264330522557**

Option 3 ID : **264330522555**

Option 4 ID : **264330522556**

Status : **Answered**

Chosen Option : **4**

Q.8 Two Statements are given followed by two conclusions numbered I and II. Assuming the statements to be true, even if they seem to be at variance with commonly known facts, decide which of the conclusions logically follow(s) from the statements.

Statements:

All girls are smart.

All smart are intelligent.

Conclusions:

I. All girls are intelligent.

II. Some girls are not intelligent.

- Ans**
- ☒ 1. Only conclusion II follows
 - ☒ 2. Neither conclusion I nor II follows
 - ☒ 3. Both conclusions I and II follow
 - ☒ 4. Only conclusion I follows

Question Type : **MCQ**

Question ID : **264330133375**

Option 1 ID : **264330522532**

Option 2 ID : **264330522534**

Option 3 ID : **264330522533**

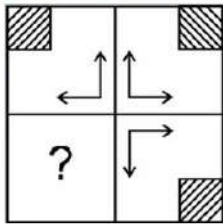
Option 4 ID : **264330522531**

Status : **Answered**

Chosen Option : **4**

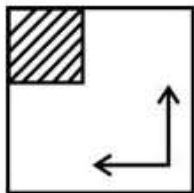


Q.9 Select the option figure that will replace the question mark (?) in the figure given below to complete the pattern.
(rotation is not allowed)

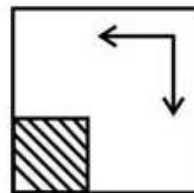


Ans

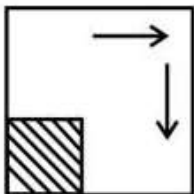
✗ 1.



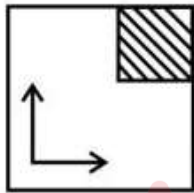
✓ 2.



✗ 3.



✗ 4.



Question Type : MCQ
Question ID : 264330133385
Option 1 ID : 264330522571
Option 2 ID : 264330522573
Option 3 ID : 264330522574
Option 4 ID : 264330522572
Status : Answered
Chosen Option : 2

Q.10 If A denotes 'addition', B denotes 'multiplication', C denotes 'subtraction', and D denotes 'division', then what will be the value of the following equation?
 $14\ C\ (18\ D\ 3)\ A\ 5 = ?$

- Ans**
- ☒ 1. 31
 - ☒ 2. 13
 - ☒ 3. 20
 - ☒ 4. 17

Question Type : **MCQ**
 Question ID : **264330135038**
 Option 1 ID : **264330529089**
 Option 2 ID : **264330529088**
 Option 3 ID : **264330529087**
 Option 4 ID : **264330529090**
 Status : **Answered**
 Chosen Option : **2**

Q.11 Which of the following numbers will replace the question mark (?) in the given series?
 7, 14, 21, 28, 35, 42, 49, ?

- Ans**
- ☒ 1. 82
 - ☒ 2. 68
 - ☒ 3. 63
 - ☒ 4. 56

Question Type : **MCQ**
 Question ID : **264330133378**
 Option 1 ID : **264330522543**
 Option 2 ID : **264330522546**
 Option 3 ID : **264330522545**
 Option 4 ID : **264330522544**
 Status : **Answered**
 Chosen Option : **4**

Q.12 Select the option that is related to the fifth term in the same way as the second term is related to the first term and fourth term is related to third term.
 KP2 : PK16 :: AG3 : FB81 :: TR5 : ?

- Ans**
- ☒ 1. MY625
 - ☒ 2. MY125
 - ☒ 3. YM625
 - ☒ 4. YM125

Question Type : **MCQ**
 Question ID : **264330138520**
 Option 1 ID : **264330542687**
 Option 2 ID : **264330542690**
 Option 3 ID : **264330542688**
 Option 4 ID : **264330542689**
 Status : **Answered**
 Chosen Option : **3**

Q.13 Select the option that is related to the third number in the same way as the second number is related to the first number.

9 : 28 :: 13 : ?

- Ans**
- ☒ 1. 39
 - ☒ 2. 40
 - ☒ 3. 54
 - ☒ 4. 28

Question Type : **MCQ**

Question ID : **264330135035**

Option 1 ID : **264330529075**

Option 2 ID : **264330529076**

Option 3 ID : **264330529077**

Option 4 ID : **264330529078**

Status : **Answered**

Chosen Option : **2**

Q.14 In a certain code language, '231' means 'Pant is Brown', '307' means 'His Brown Shirt' and '781' means 'Shirt and Pant'.

Find the code for 'is'.

- Ans**
- ☒ 1. 2
 - ☒ 2. 0
 - ☒ 3. 8
 - ☒ 4. 1

Question Type : **MCQ**

Question ID : **264330133471**

Option 1 ID : **264330522915**

Option 2 ID : **264330522916**

Option 3 ID : **264330522918**

Option 4 ID : **264330522917**

Status : **Answered**

Chosen Option : **1**

Q.15 Which of the following numbers will replace the question mark (?) in the given series?

7, 7, 5, 15, 11, 55, 49, 343, ?

- Ans**
- ☒ 1. 335
 - ☒ 2. 293
 - ☒ 3. 194
 - ☒ 4. 395

Question Type : **MCQ**

Question ID : **264330135033**

Option 1 ID : **264330529069**

Option 2 ID : **264330529068**

Option 3 ID : **264330529070**

Option 4 ID : **264330529067**

Status : **Answered**

Chosen Option : **1**

Q.16 Which of the following letter cluster will replace the blanks in the given series?

ca_pcaa_caa_caap_aap

- Ans
- ☒ 1. aacp
 - ☒ 2. aapp
 - ☒ 3. appc
 - ☒ 4. appp

Question Type : MCQ
Question ID : 264330133366
Option 1 ID : 264330522497
Option 2 ID : 264330522496
Option 3 ID : 264330522498
Option 4 ID : 264330522495
Status : Answered
Chosen Option : 3

Q.17 Select the option that is related to the third word in the same way as the second word is related to the first word.

Rabindranath Tagore : Literature : : Mother Teresa : ?

- Ans
- ☒ 1. Peace
 - ☒ 2. Physics
 - ☒ 3. Chemistry
 - ☒ 4. Mathematics

Question Type : MCQ
Question ID : 264330133367
Option 1 ID : 264330522502
Option 2 ID : 264330522499
Option 3 ID : 264330522501
Option 4 ID : 264330522500
Status : Answered
Chosen Option : 1

Q.18 Study the given pattern carefully and select the number that can replace the question mark (?) in it.

First row- 14, 42, 84

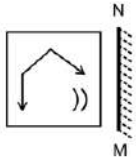
Second row- 28, 84, 168

Third row- 19, 57, ?

- Ans
- ☒ 1. 129
 - ☒ 2. 126
 - ☒ 3. 114
 - ☒ 4. 112

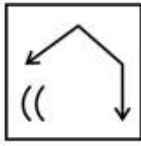
Question Type : MCQ
Question ID : 264330133380
Option 1 ID : 264330522551
Option 2 ID : 264330522552
Option 3 ID : 264330522554
Option 4 ID : 264330522553
Status : Answered
Chosen Option : 3

Q.19 Select the correct mirror image of the given figure when the mirror MN is placed to the right side of the figure.



Ans

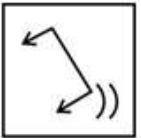
✓ 1.



✗ 2.



✗ 3.



✗ 4.



Question Type : **MCQ**

Question ID : **264330137850**

Option 1 ID : **264330540009**

Option 2 ID : **264330540010**

Option 3 ID : **264330540007**

Option 4 ID : **264330540008**

Status : **Answered**

Chosen Option : **1**

Q.20 Five friends Aman, Biraj, Chaman, Sourav and Rajesh are seating around a circular table facing the centre. Aman is to the immediate right of Chaman who is second to the right of Sourav. Biraj is to the immediate left of Chaman. Who is second to the right of Aman?

Ans

✗ 1. Chaman

✗ 2. Biraj

✓ 3. Sourav

✗ 4. Rajesh

Question Type : **MCQ**

Question ID : **264330133372**

Option 1 ID : **264330522520**

Option 2 ID : **264330522522**

Option 3 ID : **264330522519**

Option 4 ID : **264330522521**

Status : **Answered**

Chosen Option : **3**

Q.1 Which of the following vitamins helps to keep our skin and eyes healthy?

- Ans ☒ 1. Vitamin A
☐ 2. Vitamin D
☐ 3. Vitamin C
☐ 4. Vitamin B

Question Type : MCQ

Question ID : 264330133869

Option 1 ID : 264330524499

Option 2 ID : 264330524502

Option 3 ID : 264330524501

Option 4 ID : 264330524500

Status : Answered

Chosen Option : 1

Q.2 According to the 2011 census, what is the literacy rate of New Delhi District?

- Ans ☒ 1. 88.01 percent
☐ 2. 64.09 percent
☐ 3. 54.12 percent
☐ 4. 98.42 percent

Question Type : MCQ

Question ID : 264330137406

Option 1 ID : 264330538251

Option 2 ID : 264330538252

Option 3 ID : 264330538254

Option 4 ID : 264330538253

Status : Answered

Chosen Option : 1

Q.3 India accounts for what percent of total geographical area of the world?

- Ans ☐ 1. 3.2 percent
☐ 2. 5.2 percent
☐ 3. 4.8 percent
☒ 4. 2.4 percent

Question Type : MCQ

Question ID : 264330133874

Option 1 ID : 264330524520

Option 2 ID : 264330524522

Option 3 ID : 264330524521

Option 4 ID : 264330524519

Status : Not Answered

Chosen Option : --

Q.4 Which Guru of Kuchipudi dance form received Padma Bhushan in the year 1998?

Ans ☒ 1. Guru Vempati Chinna Satyam

☐ 2. Uday Shankar

☐ 3. Kelucharan Mohapatra

☐ 4. Guru Bipin Singh

Question Type : MCQ

Question ID : 264330133950

Option 1 ID : 264330524826

Option 2 ID : 264330524823

Option 3 ID : 264330524824

Option 4 ID : 264330524825

Status : Answered

Chosen Option : 1

Q.5 The Jain temple at Pattadakal was built by _____.

Ans ☐ 1. Chalukyas

☐ 2. Cholas

☒ 3. Rashtrakutas

☐ 4. Hoyasalas

Question Type : MCQ

Question ID : 264330134698

Option 1 ID : 264330527750

Option 2 ID : 264330527747

Option 3 ID : 264330527749

Option 4 ID : 264330527748

Status : Not Answered

Chosen Option : --

Q.6 Which among the following states has the highest sex ratio in India according to the Census 2011?

Ans ☐ 1. Andhra Pradesh

☒ 2. Kerala

☐ 3. Maharashtra

☐ 4. Tamil Nadu

Question Type : MCQ

Question ID : 264330134705

Option 1 ID : 264330527775

Option 2 ID : 264330527777

Option 3 ID : 264330527776

Option 4 ID : 264330527778

Status : Answered

Chosen Option : 2

Q.7 Which among the following elements is used in moisturising creams and soaps because of its hygroscopic properties?

- Ans
- ☒ 1. Galena
 - ☒ 2. Ethanol
 - ☒ 3. Freon
 - ☒ 4. Glycerol

Question Type : MCQ
Question ID : 264330134701
Option 1 ID : 264330527761
Option 2 ID : 264330527759
Option 3 ID : 264330527762
Option 4 ID : 264330527760
Status : Answered
Chosen Option : 4

Q.8 Which UK Prime Minister resigned on 20th October, 2022 after serving for 44 days?

- Ans
- ☒ 1. Boris Johnson
 - ☒ 2. Liz Truss
 - ☒ 3. Theresa May
 - ☒ 4. Rishi Sunak

Question Type : MCQ
Question ID : 264330133864
Option 1 ID : 264330524479
Option 2 ID : 264330524480
Option 3 ID : 264330524481
Option 4 ID : 264330524482
Status : Answered
Chosen Option : 2

Q.9 Who among the following has been awarded with Major Dhyan Chand Khel Ratna Award 2021 for "Para Shooting"?

- Ans
- ☒ 1. Krishna Nagar
 - ☒ 2. Pramod Bhagat
 - ☒ 3. Sumit Antil
 - ☒ 4. Avani Lekhara

Question Type : MCQ
Question ID : 264330133859
Option 1 ID : 264330524462
Option 2 ID : 264330524461
Option 3 ID : 264330524460
Option 4 ID : 264330524459
Status : Not Answered
Chosen Option : --

Q.10 The prehistoric period in the early development of human beings is commonly known as the _____.

- Ans ☒ 1. Old stone age
- ☐ 2. Mesolithic age
- ☐ 3. Iron age
- ☐ 4. New stone age

Question Type : MCQ

Question ID : 264330137957

Option 1 ID : 264330540438

Option 2 ID : 264330540435

Option 3 ID : 264330540437

Option 4 ID : 264330540436

Status : Not Answered

Chosen Option : --

Q.11 Which among the following is NOT a Jovian planet?

- Ans ☒ 1. Mercury
- ☐ 2. Neptune
- ☐ 3. Jupiter
- ☐ 4. Saturn

Question Type : MCQ

Question ID : 264330134702

Option 1 ID : 264330527766

Option 2 ID : 264330527764

Option 3 ID : 264330527763

Option 4 ID : 264330527765

Status : Not Answered

Chosen Option : --

Q.12 Article 17 of the Indian constitution is related with _____.

- Ans ☒ 1. Abolition of Untouchability
- ☐ 2. Abolition of Titles
- ☐ 3. Equality before law
- ☐ 4. Right to Education

Question Type : MCQ

Question ID : 264330133868

Option 1 ID : 264330524495

Option 2 ID : 264330524496

Option 3 ID : 264330524498

Option 4 ID : 264330524497

Status : Answered

Chosen Option : 1

Q.13 Dr. APJ Abdul Kalam, famous Indian scientist's, autobiography is known as _____.

Ans ☒ 1. One Life is Not Enough

☒ 2. Wings of Fire

☒ 3. Waiting for a Visa

☒ 4. The Race of My Life

Question Type : MCQ

Question ID : 264330133948

Option 1 ID : 264330524815

Option 2 ID : 264330524817

Option 3 ID : 264330524818

Option 4 ID : 264330524816

Status : Answered

Chosen Option : 2

Q.14 Pandit Shiv Kumar Sharma, an Indian musician and composer was the foremost exponent of the _____.

Ans ☒ 1. Guitar

☒ 2. Santoor

☒ 3. Harmonium

☒ 4. Violin

Question Type : MCQ

Question ID : 264330133862

Option 1 ID : 264330524473

Option 2 ID : 264330524471

Option 3 ID : 264330524474

Option 4 ID : 264330524472

Status : Answered

Chosen Option : 2

Q.15 Which among the following sessions of Indian National Congress was the first session to be presided by a lady?

Ans ☒ 1. Calcutta - 1917

☒ 2. Kanpur - 1925

☒ 3. Lahore - 1929

☒ 4. Surat - 1907

Question Type : MCQ

Question ID : 264330134709

Option 1 ID : 264330527792

Option 2 ID : 264330527791

Option 3 ID : 264330527793

Option 4 ID : 264330527794

Status : Answered

Chosen Option : 1

Q.16 The Delhi Municipal Corporation (Amendment) Bill, 2022 aimed at unifying the _____ Municipal Corporations of Delhi to ensure a robust setup for synergised and strategic planning and optimal utilisation of resources.

- Ans ☒ 1. three
☐ 2. two
☐ 3. four
☐ 4. five

Question Type : MCQ
Question ID : 264330134695
Option 1 ID : 264330527736
Option 2 ID : 264330527735
Option 3 ID : 264330527737
Option 4 ID : 264330527738
Status : Not Answered
Chosen Option : --

Q.17 The Walker Cup is associated with which of the following sports?

- Ans ☐ 1. Hockey
☐ 2. Chess
☐ 3. Football
☒ 4. Golf

Question Type : MCQ
Question ID : 264330134717
Option 1 ID : 264330527825
Option 2 ID : 264330527826
Option 3 ID : 264330527823
Option 4 ID : 264330527824
Status : Not Answered
Chosen Option : --

Q.18 Galvanisation is a process in which a protective _____ coating is applied on iron to prevent it from rusting.

- Ans ☐ 1. nickel
☒ 2. zinc
☐ 3. copper
☐ 4. silver

Question Type : MCQ
Question ID : 264330134699
Option 1 ID : 264330527751
Option 2 ID : 264330527754
Option 3 ID : 264330527752
Option 4 ID : 264330527753
Status : Answered
Chosen Option : 2

Q.19 Which among the following is the famous harvest festival of Meghalaya, India?

- Ans
- ☒ 1. Chapcharkut festival
 - ☒ 2. Sunburn festival
 - ☒ 3. Hornbill festival
 - ☒ 4. Nongkrem festival

Question Type : MCQ
 Question ID : 264330137947
 Option 1 ID : 264330540395
 Option 2 ID : 264330540398
 Option 3 ID : 264330540397
 Option 4 ID : 264330540396
 Status : Answered
 Chosen Option : 4

Q.20 Bharatanatyam dance is associated with which state?

- Ans
- ☒ 1. Maharashtra
 - ☒ 2. Tamil Nadu
 - ☒ 3. Madhya Pradesh
 - ☒ 4. Kerala

Question Type : MCQ
 Question ID : 264330133856
 Option 1 ID : 264330524447
 Option 2 ID : 264330524448
 Option 3 ID : 264330524449
 Option 4 ID : 264330524450
 Status : Answered
 Chosen Option : 2

Q.21 Indian Railways plan to become Net Zero Carbon Emitter by _____.

- Ans
- ☒ 1. 2030
 - ☒ 2. 2027
 - ☒ 3. 2032
 - ☒ 4. 2025

Question Type : MCQ
 Question ID : 264330133865
 Option 1 ID : 264330524485
 Option 2 ID : 264330524484
 Option 3 ID : 264330524486
 Option 4 ID : 264330524483
 Status : Answered
 Chosen Option : 1

Q.22 What does 'F' stand for in FRBM Act, 2003 of Indian economy?

- Ans ☒ 1. Fiscal
☒ 2. Financial
☒ 3. Freedom
☒ 4. Functional

Question Type : MCQ
 Question ID : 264330133955
 Option 1 ID : 264330524844
 Option 2 ID : 264330524843
 Option 3 ID : 264330524845
 Option 4 ID : 264330524846
 Status : Not Answered
 Chosen Option : --

Q.23 Who among the following introduced the silver tanka and the copper jital - the two basic coins of the Sultanate period?

- Ans ☒ 1. Alauddin Khilji
☒ 2. Iltutmish
☒ 3. Ibrahim Lodi
☒ 4. Qutubuddin Aibak

Question Type : MCQ
 Question ID : 264330134708
 Option 1 ID : 264330527789
 Option 2 ID : 264330527787
 Option 3 ID : 264330527790
 Option 4 ID : 264330527788
 Status : Answered
 Chosen Option : 2

Q.24 Which of the following states is the leading producer of cotton in India, as of November 2022?

- Ans ☒ 1. Telangana
☒ 2. Karnataka
☒ 3. Madhya Pradesh
☒ 4. Gujarat

Question Type : MCQ
 Question ID : 264330133940
 Option 1 ID : 264330524785
 Option 2 ID : 264330524784
 Option 3 ID : 264330524783
 Option 4 ID : 264330524786
 Status : Answered
 Chosen Option : 4

Q.25 Who was the President of Swaraj Party formed in the year 1922?

- Ans
- ☒ 1. Motilal Nehru
 - ☒ 2. C Rajagopalachari
 - ☒ 3. Mahatma Gandhi
 - ☒ 4. Chittaranjan Das

Question Type : MCQ
Question ID : 264330137960
Option 1 ID : 264330540449
Option 2 ID : 264330540447
Option 3 ID : 264330540448
Option 4 ID : 264330540450
Status : Answered
Chosen Option : 4

Section : English Language and Comprehension

Q.1 Improve the underlined part of the sentence. Choose 'No improvement' as an answer if the sentence is grammatically correct.
We went to the mall; however, us only gone window-shopping.

- Ans
- ☒ 1. No improvement
 - ☒ 2. we only went
 - ☒ 3. they only going
 - ☒ 4. we only gone

Question Type : MCQ
Question ID : 264330134325
Option 1 ID : 264330526294
Option 2 ID : 264330526292
Option 3 ID : 264330526291
Option 4 ID : 264330526293
Status : Answered
Chosen Option : 2

Q.2 Find the part of the given sentence that has an error in it. If there is no error, choose 'No error'.
Make sure you known how to swim.

- Ans
- ☒ 1. No error
 - ☒ 2. how to swim.
 - ☒ 3. Make sure
 - ☒ 4. you known

Question Type : MCQ
Question ID : 264330134476
Option 1 ID : 264330526874
Option 2 ID : 264330526873
Option 3 ID : 264330526871
Option 4 ID : 264330526872
Status : Answered
Chosen Option : 4

Q.3 Fill in the blank with the most appropriate option.

“May I _____ your coats, Mr. and Mrs. Mason?”

- Ans
- ✓ 1. take
 - ✗ 2. taste
 - ✗ 3. trek
 - ✗ 4. track

Question Type : MCQ
 Question ID : 264330136594
 Option 1 ID : 264330535109
 Option 2 ID : 264330535108
 Option 3 ID : 264330535110
 Option 4 ID : 264330535107
 Status : Answered
 Chosen Option : 1

Q.4 Select the most appropriate synonym to substitute the bracketed word in the given sentence.

They wanted me to (expound) on this topic because I had some decent ideas on the subject.

- Ans
- ✗ 1. paucity
 - ✗ 2. notoriety
 - ✗ 3. partisan
 - ✓ 4. expatiate

Question Type : MCQ
 Question ID : 264330136526
 Option 1 ID : 264330534844
 Option 2 ID : 264330534846
 Option 3 ID : 264330534843
 Option 4 ID : 264330534845
 Status : Answered
 Chosen Option : 4

Q.5 Identify the segment that contains a grammatical error. If there is no error, select 'No error'.

The front part is used for carving / the lines and the back end / for scratching of whole areas.

- Ans
- ✗ 1. the lines and the back end
 - ✗ 2. No Error
 - ✗ 3. The front part is used for carving
 - ✓ 4. for scratching of whole areas.

Question Type : MCQ
 Question ID : 264330135793
 Option 1 ID : 264330532048
 Option 2 ID : 264330532050
 Option 3 ID : 264330532047
 Option 4 ID : 264330532049
 Status : Not Answered
 Chosen Option : --

Q.6 In the following question, out of the given four alternatives, select the alternative which best expresses the meaning of the Idiom/Phrase.
Break sweat

- Ans**
- ☒ 1. To make a futile attempt
 - ☒ 2. To lie
 - ☒ 3. To use a lot of energy or effort
 - ☒ 4. To be caught stealing

Question Type : **MCQ**
Question ID : **264330134341**
Option 1 ID : **264330526354**
Option 2 ID : **264330526351**
Option 3 ID : **264330526352**
Option 4 ID : **264330526353**
Status : **Answered**
Chosen Option : **3**

Q.7 Select the appropriate antonym for the underlined word.
There can't be anything positive about plastics with pathogens floating around.

- Ans**
- ☒ 1. approving
 - ☒ 2. flattering
 - ☒ 3. depreciative
 - ☒ 4. fundamental

Question Type : **MCQ**
Question ID : **264330134339**
Option 1 ID : **264330526343**
Option 2 ID : **264330526346**
Option 3 ID : **264330526344**
Option 4 ID : **264330526345**
Status : **Answered**
Chosen Option : **3**

Q.8 Choose the word that is opposite in meaning to the given word.

Curtailed

- Ans**
- ☒ 1. Slashed
 - ☒ 2. Lengthened
 - ☒ 3. Pruned
 - ☒ 4. Trimmed

Question Type : **MCQ**
Question ID : **264330134841**
Option 1 ID : **264330528300**
Option 2 ID : **264330528301**
Option 3 ID : **264330528302**
Option 4 ID : **264330528299**
Status : **Answered**
Chosen Option : **2**

Q.9 Find the part of the given sentence that has an error in it. If there is no error, choose 'No error'.
This is most unique thing I have ever seen in my life.

- Ans**
- ☒ 1. No error
 - ☒ 2. thing I have ever
 - ☒ 3. seen in my life.
 - ☒ 4. This is most unique

Question Type : **MCQ**
Question ID : **264330134322**
Option 1 ID : **264330526282**
Option 2 ID : **264330526280**
Option 3 ID : **264330526281**
Option 4 ID : **264330526279**
Status : **Answered**
Chosen Option : **4**

Q.10 Select the appropriate synonym for the underlined word.
It is not that you seem heartless.

- Ans**
- ☒ 1. robust
 - ☒ 2. warm
 - ☒ 3. mild
 - ☒ 4. cruel

Question Type : **MCQ**
Question ID : **264330134336**
Option 1 ID : **264330526334**
Option 2 ID : **264330526333**
Option 3 ID : **264330526331**
Option 4 ID : **264330526332**
Status : **Answered**
Chosen Option : **4**

Q.11 Select the most appropriate option to substitute the bracketed segment in the given sentence. If there is no need to substitute it, select 'no substitution required'.
No, they are normal people, (although they perceive the world differently).

- Ans**
- ☒ 1. but they perceive the world differently
 - ☒ 2. No substitution required
 - ☒ 3. from they perceive the world differently
 - ☒ 4. while they perceive the world different

Question Type : **MCQ**
Question ID : **264330135796**
Option 1 ID : **264330532059**
Option 2 ID : **264330532062**
Option 3 ID : **264330532061**
Option 4 ID : **264330532060**
Status : **Answered**
Chosen Option : **1**

Q.12 Four sentences are given, out of which three have spelling errors. Choose the sentence with all correctly spelt words.

- Ans
- ☒ 1. He made the most delicious pumkin pie.
 - ☒ 2. The paralel lives of two contemporaries.
 - ☒ 3. She took a pair of sissors and cut his hair.
 - ☒ 4. I need a strong adhesive.

Question Type : MCQ

Question ID : 264330136407

Option 1 ID : 264330534394

Option 2 ID : 264330534391

Option 3 ID : 264330534393

Option 4 ID : 264330534392

Status : Answered

Chosen Option : 4

Q.13 Improve the underlined part of the sentence. Choose 'No improvement' as an answer if the sentence is grammatically correct.
He started a newly jobs on Tuesday.

- Ans
- ☒ 1. No improvement
 - ☒ 2. a new job
 - ☒ 3. a new jobs
 - ☒ 4. an new job

Question Type : MCQ

Question ID : 264330134298

Option 1 ID : 264330526190

Option 2 ID : 264330526188

Option 3 ID : 264330526187

Option 4 ID : 264330526189

Status : Answered

Chosen Option : 2

Q.14 In the following question, out of the given four alternatives, select the alternative which best expresses the meaning of the Idiom/Phrase.

To poke one's nose into

- Ans
- ☒ 1. To give permission
 - ☒ 2. To show disrespect
 - ☒ 3. To bring no sense
 - ☒ 4. To interfere

Question Type : MCQ

Question ID : 264330134843

Option 1 ID : 264330528307

Option 2 ID : 264330528309

Option 3 ID : 264330528310

Option 4 ID : 264330528308

Status : Answered

Chosen Option : 4

Q.15 A sentence has been given with a blank to be filled with an appropriate option. Choose the correct alternative.
I strained _____ to catch his options.

- Ans ☒ 1. hardly
☒ 2. hard
☒ 3. hardest
☒ 4. hardness

Question Type : MCQ
Question ID : 264330134326
Option 1 ID : 264330526298
Option 2 ID : 264330526297
Option 3 ID : 264330526296
Option 4 ID : 264330526295
Status : Answered
Chosen Option : 2

Q.16 Fill in the blank with the most appropriate option.

Rohan was now standing on tiptoe to _____ over at the inhabitants of the two beds.

- Ans ☒ 1. look
☒ 2. view
☒ 3. stare
☒ 4. peep

Question Type : MCQ
Question ID : 264330136408
Option 1 ID : 264330534395
Option 2 ID : 264330534398
Option 3 ID : 264330534397
Option 4 ID : 264330534396
Status : Answered
Chosen Option : 1

Q.17 Choose the word that can substitute the given group of words.
A group of people who have no permanent abode but wander from place to place

- Ans ☒ 1. Truant
☒ 2. Nomad
☒ 3. Ponderer
☒ 4. Usurer

Question Type : MCQ
Question ID : 264330134335
Option 1 ID : 264330526329
Option 2 ID : 264330526328
Option 3 ID : 264330526330
Option 4 ID : 264330526327
Status : Answered
Chosen Option : 2

Q.18 Choose the incorrectly spelt word.

- Ans ☒ 1. Artiset
☒ 2. Banker
☒ 3. Robber
☒ 4. Teacher

Question Type : MCQ
 Question ID : 264330134342
 Option 1 ID : 264330526358
 Option 2 ID : 264330526355
 Option 3 ID : 264330526356
 Option 4 ID : 264330526357
 Status : Answered
 Chosen Option : 1

Q.19 Select the most appropriate option to fill in the blank.
 Plastic inhabits the oceans, _____ up in the guts of seagulls and great white sharks.

- Ans ☒ 1. building
☒ 2. burning
☒ 3. provoking
☒ 4. sailing

Question Type : MCQ
 Question ID : 264330134345
 Option 1 ID : 264330526367
 Option 2 ID : 264330526369
 Option 3 ID : 264330526370
 Option 4 ID : 264330526368
 Status : Answered
 Chosen Option : 1

Q.20 Choose the word that can substitute the given group of words.

That can be carried or moved easily

- Ans ☒ 1. Illegible
☒ 2. Handful
☒ 3. Portable
☒ 4. Potable

Question Type : MCQ
 Question ID : 264330134837
 Option 1 ID : 264330528286
 Option 2 ID : 264330528285
 Option 3 ID : 264330528284
 Option 4 ID : 264330528283
 Status : Answered
 Chosen Option : 3

Comprehension:

In the following passage some of the words have been deleted. Read the passage carefully and select the correct answer for the given blank out of the four alternatives.

A young man walks toward me with a stick slung across his back and a (1) _____ of sheep at his feet, which carry him down the path (2) _____ a crowd of rowdy children. An older man follows, weatherworn but still (3) _____, a rifle over his left shoulder. He clicks his tongue to (4) _____ the flock. Behind him are two women on horses; I guess (5) _____ are his wife and daughter.

SubQuestion No : 21

Q.21 Select the most appropriate option to fill in blank number 1.

- Ans
- ☒ 1. army
 - ☒ 2. shoal
 - ☒ 3. horde
 - ☒ 4. flock

Question Type : MCQ
Question ID : 264330134832
Option 1 ID : 264330528266
Option 2 ID : 264330528265
Option 3 ID : 264330528264
Option 4 ID : 264330528263
Status : Answered
Chosen Option : 4

Comprehension:

In the following passage some of the words have been deleted. Read the passage carefully and select the correct answer for the given blank out of the four alternatives.

A young man walks toward me with a stick slung across his back and a (1) _____ of sheep at his feet, which carry him down the path (2) _____ a crowd of rowdy children. An older man follows, weatherworn but still (3) _____, a rifle over his left shoulder. He clicks his tongue to (4) _____ the flock. Behind him are two women on horses; I guess (5) _____ are his wife and daughter.

SubQuestion No : 22

Q.22 Select the most appropriate option to fill in blank number 2.

- Ans
- ☒ 1. likeness
 - ☒ 2. like
 - ☒ 3. likely
 - ☒ 4. liking

Question Type : MCQ
Question ID : 264330134833
Option 1 ID : 264330528270
Option 2 ID : 264330528268
Option 3 ID : 264330528269
Option 4 ID : 264330528267
Status : Answered
Chosen Option : 2

Comprehension:

In the following passage some of the words have been deleted. Read the passage carefully and select the correct answer for the given blank out of the four alternatives.

A young man walks toward me with a stick slung across his back and a (1) _____ of sheep at his feet, which carry him down the path (2) _____ a crowd of rowdy children. An older man follows, weatherworn but still (3) _____, a rifle over his left shoulder. He clicks his tongue to (4) _____ the flock. Behind him are two women on horses; I guess (5) _____ are his wife and daughter.

SubQuestion No : 23

Q.23 Select the most appropriate option to fill in blank number 3.

- Ans ☒ 1. strong
☒ 2. sick
☒ 3. thin
☒ 4. slow

Question Type : MCQ
 Question ID : 264330134834
 Option 1 ID : 264330528272
 Option 2 ID : 264330528273
 Option 3 ID : 264330528274
 Option 4 ID : 264330528271
 Status : Answered
 Chosen Option : 1

Comprehension:

In the following passage some of the words have been deleted. Read the passage carefully and select the correct answer for the given blank out of the four alternatives.

A young man walks toward me with a stick slung across his back and a (1) _____ of sheep at his feet, which carry him down the path (2) _____ a crowd of rowdy children. An older man follows, weatherworn but still (3) _____, a rifle over his left shoulder. He clicks his tongue to (4) _____ the flock. Behind him are two women on horses; I guess (5) _____ are his wife and daughter.

SubQuestion No : 24

Q.24 Select the most appropriate option to fill in blank number 4.

- Ans ☒ 1. punish
☒ 2. claim
☒ 3. encourage
☒ 4. dress

Question Type : MCQ
 Question ID : 264330134835
 Option 1 ID : 264330528276
 Option 2 ID : 264330528275
 Option 3 ID : 264330528277
 Option 4 ID : 264330528278
 Status : Answered
 Chosen Option : 3

Comprehension:

In the following passage some of the words have been deleted. Read the passage carefully and select the correct answer for the given blank out of the four alternatives.

A young man walks toward me with a stick slung across his back and a (1) _____ of sheep at his feet, which carry him down the path (2) _____ a crowd of rowdy children. An older man follows, weatherworn but still (3) _____, a rifle over his left shoulder. He clicks his tongue to (4) _____ the flock. Behind him are two women on horses; I guess (5) _____ are his wife and daughter.

SubQuestion No : 25

Q.25 Select the most appropriate option to fill in blank number 5.

- Ans
- ☒ 1. them
 - ☒ 2. these
 - ☒ 3. they
 - ☒ 4. this

Question Type : MCQ

Question ID : 264330134836

Option 1 ID : 264330528282

Option 2 ID : 264330528279

Option 3 ID : 264330528281

Option 4 ID : 264330528280

Status : Answered

Chosen Option : 3

