

Multi Tasking Non Technical Staff and Havaladar CBIC and CBN Examination 2022

Roll Number	
Candidate Name	
Venue Name	iON Digital Zone iDZ Ward No 1
Exam Date	02/05/2023
Exam Time	3:30 PM - 5:00 PM
Subject	MTS Non Tech Havaladar CBIC and CBN Examination 2022

Section : Numerical and Mathematical Ability

Q.1 A1 alone can do a work in 12 days and A2 alone can do the same work in 15 days. With help of A3, they finish the same work in 5 days. In how many days A3 alone can do the same work?

- Ans**
- ☒ 1. 16 days
 - ☒ 2. 20 days
 - ☒ 3. 24 days
 - ☒ 4. 27 days

Question Type : **MCQ**

Question ID : **264330137131**

Option 1 ID : **264330537169**

Option 2 ID : **264330537168**

Option 3 ID : **264330537167**

Option 4 ID : **264330537170**

Status : **Answered**

Chosen Option : **2**

Q.2 Mahesh, Suresh and Raju together can complete a work in 18 days. Mahesh and Suresh together can complete the same work in 72 days. Raju alone can finish the same work in how many days?

- Ans**
- ☒ 1. 21 days
 - ☒ 2. 24 days
 - ☒ 3. 34 days
 - ☒ 4. 18 days

Question Type : **MCQ**

Question ID : **264330139056**

Option 1 ID : **264330544833**

Option 2 ID : **264330544832**

Option 3 ID : **264330544831**

Option 4 ID : **264330544834**

Status : **Answered**

Chosen Option : **2**

Test Prime

**ALL EXAMS,
ONE SUBSCRIPTION**



70,000+
Mock Tests



**Personalised
Report Card**



**Unlimited
Re-Attempt**



600+
Exam Covered



**Previous Year
Papers**



**500%
Refund**



ATTEMPT FREE MOCK NOW

Q.3 What will be the length of longest diagonal of the cuboid having length 13 cm width 11 cm and height 20 cm?

- Ans
- ☒ 1. 23.45 cm
 - ☒ 2. 26.27 cm
 - ☒ 3. 34.65 cm
 - ☒ 4. 22.65 cm

Question Type : MCQ
 Question ID : 264330138765
 Option 1 ID : 264330543668
 Option 2 ID : 264330543667
 Option 3 ID : 264330543669
 Option 4 ID : 264330543670
 Status : Answered
 Chosen Option : 3

Q.4 What is the average of the first four multiples of 6?

- Ans
- ☒ 1. 25
 - ☒ 2. 14
 - ☒ 3. 20
 - ☒ 4. 15

Question Type : MCQ
 Question ID : 264330138749
 Option 1 ID : 264330543606
 Option 2 ID : 264330543603
 Option 3 ID : 264330543604
 Option 4 ID : 264330543605
 Status : Answered
 Chosen Option : 4

Q.5 What will be the HCF of the following set of numbers : 30, 45, 150, ?

- Ans
- ☒ 1. 16
 - ☒ 2. 15
 - ☒ 3. 30
 - ☒ 4. 20

Question Type : MCQ
 Question ID : 264330138748
 Option 1 ID : 264330543600
 Option 2 ID : 264330543599
 Option 3 ID : 264330543601
 Option 4 ID : 264330543602
 Status : Answered
 Chosen Option : 2

Q.6 The number of hours, spent by a child on different activities in a working day, is given in the table. How much percent of time did he spent in sleep?

Activities	Number of hours
School	8
Play	3
Sleep	8
Eat	2
Music	3
Total	24

- Ans
- ☒ 1. 48.11%
 - ☒ 2. 33.33%
 - ☒ 3. 37.22%
 - ☒ 4. 41.12%

Question Type : MCQ
 Question ID : 264330138716
 Option 1 ID : 264330543473
 Option 2 ID : 264330543472
 Option 3 ID : 264330543474
 Option 4 ID : 264330543471
 Status : Answered
 Chosen Option : 2

Q.7 A sum of Rs. 2000 will become Rs. 2400 in 12 months at some rate of simple interest. Find the rate of interest per annum.

- Ans
- ☒ 1. 25 %
 - ☒ 2. 20 %
 - ☒ 3. 40 %
 - ☒ 4. 45 %

Question Type : MCQ
 Question ID : 264330138757
 Option 1 ID : 264330543636
 Option 2 ID : 264330543635
 Option 3 ID : 264330543637
 Option 4 ID : 264330543638
 Status : Answered
 Chosen Option : 2

Q.8 A shopkeeper earns 20% profit on his goods. He lost 20% of his goods during a theft. What is his profit or loss percent?

- Ans
- ☒ 1. 4% loss
 - ☒ 2. 4% gain
 - ☒ 3. 6% gain
 - ☒ 4. 6% loss

Question Type : MCQ
 Question ID : 264330141028
 Option 1 ID : 264330552460
 Option 2 ID : 264330552459
 Option 3 ID : 264330552461
 Option 4 ID : 264330552462
 Status : Answered
 Chosen Option : 1

Q.9 What is the value of $\frac{1}{2}$ of $\frac{16}{5} + \frac{1}{8}$ of $\frac{24}{9} \times \frac{18}{12} - \frac{5}{8}$?

Ans

☒ 1. $\frac{51}{40}$

☒ 2. $\frac{68}{39}$

☒ 3. $\frac{59}{40}$

☒ 4. $\frac{61}{50}$

Question Type : MCQ

Question ID : 264330138700

Option 1 ID : 264330543410

Option 2 ID : 264330543408

Option 3 ID : 264330543407

Option 4 ID : 264330543409

Status : Answered

Chosen Option : 3

Q.10 What will be the LCM of 37, 41?

Ans

☒ 1. 1517

☒ 2. 1761

☒ 3. 1254

☒ 4. 1765

Question Type : MCQ

Question ID : 264330135088

Option 1 ID : 264330529287

Option 2 ID : 264330529290

Option 3 ID : 264330529288

Option 4 ID : 264330529289

Status : Answered

Chosen Option : 1

Q.11 The ratio of the outer and the inner circumference of a circular path is 17 : 15. If path is 40 metres wide, then what is the radius of the inner circle?

Ans

☒ 1. 280 metres

☒ 2. 340 metres

☒ 3. 360 metres

☒ 4. 300 metres

Question Type : MCQ

Question ID : 264330137146

Option 1 ID : 264330537229

Option 2 ID : 264330537227

Option 3 ID : 264330537230

Option 4 ID : 264330537228

Status : Answered

Chosen Option : 2

Q.12 If $A : B = 3 : 2$, $B : C = 7 : 5$ and $C : D = 10 : 3$, then what is $A : D$ equal to?

- Ans ☒ 1. $7 : 1$
☒ 2. $1 : 7$
☒ 3. $4 : 3$
☒ 4. $3 : 4$

Question Type : MCQ

Question ID : 264330138756

Option 1 ID : 264330543632

Option 2 ID : 264330543631

Option 3 ID : 264330543634

Option 4 ID : 264330543633

Status : Answered

Chosen Option : 1

Q.13 Find compound interest on Rs. 8000 at 15% per annum for 2 years, compounded annually.

- Ans ☒ 1. Rs. 2580.00
☒ 2. Rs. 6345.51
☒ 3. Rs. 2778.81
☒ 4. Rs. 26548.81

Question Type : MCQ

Question ID : 264330138758

Option 1 ID : 264330543642

Option 2 ID : 264330543639

Option 3 ID : 264330543641

Option 4 ID : 264330543640

Status : Answered

Chosen Option : 1

Q.14 Rs. 1800 is divided among A and B in the ratio of 2 : 3 respectively. What is the share of A?

- Ans ☒ 1. Rs.840
☒ 2. Rs.900
☒ 3. Rs.780
☒ 4. Rs.720

Question Type : MCQ

Question ID : 264330138755

Option 1 ID : 264330543629

Option 2 ID : 264330543630

Option 3 ID : 264330543628

Option 4 ID : 264330543627

Status : Answered

Chosen Option : 4

Q.15 Manny bought an AC for ₹ 12000 and paid ₹ 400 for transportation. Then he sold it for ₹14000. Find his profit %.

- Ans** ☒ 1. 12.90%
☒ 2. 13.1%
☒ 3. 13%
☒ 4. 12.80%

Question Type : **MCQ**

Question ID : **264330138753**

Option 1 ID : **264330543620**

Option 2 ID : **264330543622**

Option 3 ID : **264330543619**

Option 4 ID : **264330543621**

Status : **Answered**

Chosen Option : **1**

Q.16 Anita scored 36 marks out of 120 but later her teacher increased 6 marks for her. What will be the increase in her percentage?

- Ans** ☒ 1. 6%
☒ 2. 10%
☒ 3. 8%
☒ 4. 5%

Question Type : **MCQ**

Question ID : **264330138751**

Option 1 ID : **264330543611**

Option 2 ID : **264330543613**

Option 3 ID : **264330543612**

Option 4 ID : **264330543614**

Status : **Answered**

Chosen Option : **4**

Q.17 Working 12 hours per day, Raj can complete a work in 12 days. How many hours per day he should work so as to finish the same work in 9 days?

- Ans** ☒ 1. 20 hours
☒ 2. 24 hours
☒ 3. 12 hours
☒ 4. 16 hours

Question Type : **MCQ**

Question ID : **264330138761**

Option 1 ID : **264330543653**

Option 2 ID : **264330543651**

Option 3 ID : **264330543652**

Option 4 ID : **264330543654**

Status : **Answered**

Chosen Option : **4**

Q.18 A car has to cover a distance of 288 km in 20 hours. If it covers half of the journey in $\frac{1}{5}$ th of the time, find the speed to cover the remaining distance in the time left.

- Ans**
- ☒ 1. 6 km/hr
 - ☒ 2. 7 km/hr
 - ☒ 3. 9 km/hr
 - ☒ 4. 8 km/hr

Question Type : **MCQ**

Question ID : **264330141017**

Option 1 ID : **264330552415**

Option 2 ID : **264330552418**

Option 3 ID : **264330552416**

Option 4 ID : **264330552417**

Status : **Answered**

Chosen Option : **3**

Q.19 The radius of a right circular cylinder is thrice of its height. If the height of the cylinder is 3.5 cm, then what is the volume of cylinder?

- Ans**
- ☒ 1. 1124.25 cm^3
 - ☒ 2. 1324.75 cm^3
 - ☒ 3. 1468.25 cm^3
 - ☒ 4. 1212.75 cm^3

Question Type : **MCQ**

Question ID : **264330139069**

Option 1 ID : **264330544884**

Option 2 ID : **264330544886**

Option 3 ID : **264330544883**

Option 4 ID : **264330544885**

Status : **Answered**

Chosen Option : **4**

Q.20 The cost price of the box of pens is Rs.400. The shopkeeper gave 10% of discount on the cost price. What will be the selling price?

- Ans**
- ☒ 1. Rs. 300
 - ☒ 2. Rs. 360
 - ☒ 3. Rs. 350
 - ☒ 4. Rs. 380

Question Type : **MCQ**

Question ID : **264330138754**

Option 1 ID : **264330543623**

Option 2 ID : **264330543625**

Option 3 ID : **264330543624**

Option 4 ID : **264330543626**


Status : **Answered**


Chosen Option : **2**


Q.1 Select the option in which the numbers shares the same relationship in set as that shared by the numbers in the given set.
(NOTE: Operations should be performed on the whole numbers, without breaking down the numbers into its constituent digits. E.g. 13 – Operations on 13 such as adding /subtracting /multiplying etc. to 13 can be performed. Breaking down 13 into 1 and 3 and then performing mathematical operations on 1 and 3 is not allowed)


(14, 20, 26)

(22, 28, 34)

Ans  1. (32, 38, 44)

 2. (4, 6, 11)

 3. (25, 30, 44)

 4. (10, 20, 24)

Question Type : **MCQ**

Question ID : **264330138618**

Option 1 ID : **264330543082**

Option 2 ID : **264330543079**

Option 3 ID : **264330543081**

Option 4 ID : **264330543080**


Status : **Answered**


Chosen Option : 1


Q.2 Select the option that is related to the fourth term in the same way as the first term is related to the second term and fifth term is related to sixth term.

AJM : KHY :: ? : TBC :: PKS : QIN

Ans  1. EDU

 2. FDV

 3. EDV

 4. FCU

Question Type : **MCQ**

Question ID : **264330138605**

Option 1 ID : **264330543029**

Option 2 ID : **264330543028**

Option 3 ID : **264330543027**

Option 4 ID : **264330543030**

Status : **Answered**

Chosen Option : 2

Q.3 In the following question below are given some statements followed by some conclusions based on those statements. Taking the given statements to be true even if they seem to be at variance from commonly known facts. Read all the conclusions and then decide which of the given conclusion logically follows the given statements.

Statements:

I. All R are M.

II. Some S are R.

Conclusion:

I. Some R are S.

II. Some M are not R.

III. Some R are M.

- Ans**
- ☒ 1. Only conclusion II follows
 - ☒ 2. Both conclusions I and III follows
 - ☒ 3. All conclusion follows
 - ☒ 4. Both conclusions I and II follows

Question Type : MCQ

Question ID : 264330138614

Option 1 ID : 264330543066

Option 2 ID : 264330543065

Option 3 ID : 264330543064

Option 4 ID : 264330543063

Status : Answered

Chosen Option : 2

Q.4 A series is given with one term missing. Select the correct alternative from the given ones that will complete the series.

MOG, OMI, QKK, SIM, ?

- Ans**
- ☒ 1. VGO
 - ☒ 2. UHO
 - ☒ 3. UGO
 - ☒ 4. VHO

Question Type : MCQ

Question ID : 264330138603

Option 1 ID : 264330543020

Option 2 ID : 264330543021

Option 3 ID : 264330543019

Option 4 ID : 264330543022

Status : Answered

Chosen Option : 3

Q.5 In the following question below are given some statements followed by some conclusions based on those statements. Taking the given statements to be true even if they seem to be at variance from commonly known facts. Read all the conclusions and then decide which of the given conclusion logically follows the given statements.

Statements:

I. No J is K.

II. Some K are L.

Conclusion:

I. Some K are not J.

II. Some L are not J.

- Ans** ☒ 1. Both conclusions I and II follows
☒ 2. Neither conclusion follows
☒ 3. Only conclusion II follows
☒ 4. Only conclusion I follows

Question Type : MCQ

Question ID : 264330138613

Option 1 ID : 264330543061

Option 2 ID : 264330543062

Option 3 ID : 264330543060

Option 4 ID : 264330543059

Status : Answered

Chosen Option : 2

Q.6 Number of wickets taken by six bowlers Anil, Kamal, Laxman, Mohan, Bittu and Rahul are compared. Number of wickets taken by Kamal are more than only the number of wickets taken by Anil. Number of wickets taken by Bittu are less than only two bowlers. Number of wickets taken by Mohan are not more than Bittu. Who among the following has taken more wickets than Bittu?

- Ans** ☒ 1. Rahul
☒ 2. Kamal
☒ 3. Anil
☒ 4. Mohan

Question Type : MCQ

Question ID : 264330138612

Option 1 ID : 264330543058

Option 2 ID : 264330543056

Option 3 ID : 264330543057

Option 4 ID : 264330543055

Status : Answered

Chosen Option : 3

Q.7 In a certain code language, 'MEDIUM' is coded as 'LDCGSK'. What is the code for 'PREFER' in that code language?

- Ans** ☒ 1. OQDDCP
☒ 2. OQCDDP
☒ 3. OQDDBQ
☒ 4. OQDDDP

Question Type : MCQ

Question ID : 264330138833

Option 1 ID : 264330543939

Option 2 ID : 264330543942

Option 3 ID : 264330543940

Option 4 ID : 264330543941

Status : Answered

Chosen Option : 1

Q.8 After interchanging the given two numbers, what will be the value of the given equation?

6 and 2 ; $9 \div 2 \times 6 + 5 - 1$

- Ans
- ☒ 1. 13
 - ☒ 2. 7
 - ☒ 3. 5
 - ☒ 4. 9

Question Type : MCQ

Question ID : 264330138619

Option 1 ID : 264330543086

Option 2 ID : 264330543083

Option 3 ID : 264330543084

Option 4 ID : 264330543085

Status : Answered

Chosen Option : 2

Q.9 In the following question, select the missing number of the given series.

94, 105, 92, 107, 90, ?

- Ans
- ☒ 1. 115
 - ☒ 2. 110
 - ☒ 3. 122
 - ☒ 4. 109

Question Type : MCQ

Question ID : 264330138616

Option 1 ID : 264330543074

Option 2 ID : 264330543072

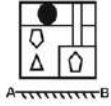
Option 3 ID : 264330543073

Option 4 ID : 264330543071

Status : Answered

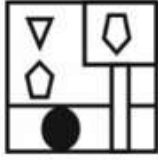
Chosen Option : 4

Q.10 If a mirror is placed on the line AB, then out of the option figures which figure will be the right image of the question figure?

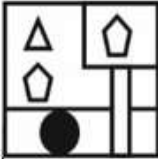


Ans

✓ 1.



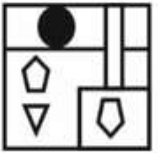
✗ 2.



✗ 3.



✗ 4.



Question Type : MCQ

Question ID : 264330138580

Option 1 ID : 264330542928

Option 2 ID : 264330542930

Option 3 ID : 264330542929

Option 4 ID : 264330542927

Status : Answered

Chosen Option : 1

Q.11 Eight boys Anil, Kamal, Ram, Sanjay, Aakash, Vivek, Rahul and Ramu are sitting around a circular table facing towards the centre (not necessarily in the same order). Vivek is second to the right of Anil. Anil is fourth to the right of Ramu. Sanjay is third to the right of Ram. Ram is not the immediate neighbour of Vivek or Kamal. Ramu is not the immediate neighbour of Rahul.

Who is the immediate neighbour of Anil and Ram?

Ans ✗ 1. Vivek

✗ 2. Sanjay

✓ 3. Rahul

✗ 4. Ramu

Question Type : MCQ

Question ID : 264330138610

Option 1 ID : 264330543049

Option 2 ID : 264330543048

Option 3 ID : 264330543047

Option 4 ID : 264330543050

Status : Answered

Chosen Option : 3

Q.12 Eight boys Anil, Kamal, Ram, Sanjay, Aakash, Vivek, Rahul and Ramu are sitting around a circular table facing opposite to the centre (not necessarily in the same order). Ramu is not the immediate neighbour of Aakash or Sanjay. Ramu is to immediate right of Anil. Rahul is the immediate neighbour of Aakash. Vivek is to immediate left of Kamal. Ram is the immediate neighbour of both Aakash and Vivek. Who is sitting third to the left of Sanjay?

- Ans** ☒ 1. Ram
☒ 2. Rahul
☒ 3. Vivek
☒ 4. Aakash

Question Type : **MCQ**
 Question ID : **264330138611**
 Option 1 ID : **264330543052**
 Option 2 ID : **264330543051**
 Option 3 ID : **264330543053**
 Option 4 ID : **264330543054**
 Status : **Answered**
 Chosen Option : 1

Q.13 In a certain code language, 'FAN' is written as '21'. How will 'TORCH' be written in that language?

- Ans** ☒ 1. 64
☒ 2. 74
☒ 3. 53
☒ 4. 23

Question Type : **MCQ**
 Question ID : **264330133391**
 Option 1 ID : **264330522598**
 Option 2 ID : **264330522597**
 Option 3 ID : **264330522596**
 Option 4 ID : **264330522595**
 Status : **Answered**
 Chosen Option : 1

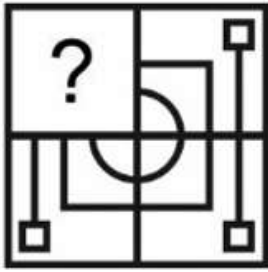
Q.14 By Interchanging the given two numbers (not digits) which of the following equation will be not correct?

5 and 6

- Ans** ☒ 1. $6 \times 8 - 5 \times 4 = 16$
☒ 2. $5 \times 2 - 4 + 6 = 13$
☒ 3. $5 - 3 \times 6 + 4 = -3$
☒ 4. $6 - 5 + 2 = 1$

Question Type : **MCQ**
 Question ID : **264330138620**
 Option 1 ID : **264330543088**
 Option 2 ID : **264330543087**
 Option 3 ID : **264330543089**
 Option 4 ID : **264330543090**
 Status : **Answered**
 Chosen Option : 1

Q.15 Which answer figure will complete the pattern in the question figure?



Ans

✓ 1.



✗ 2.



✗ 3.



✗ 4.



Question Type : MCQ

Question ID : 264330138623

Option 1 ID : 264330543101

Option 2 ID : 264330543100

Option 3 ID : 264330543102

Option 4 ID : 264330543099

Status : Answered

Chosen Option : 1

Q.16 In the following question, select the missing number of the given series.

50, 39, 27, 14, 0, ?

Ans

✗ 1. -10

✗ 2. -8

✓ 3. -15

✗ 4. -14

Question Type : MCQ

Question ID : 264330138615

Option 1 ID : 264330543068

Option 2 ID : 264330543069

Option 3 ID : 264330543067

Option 4 ID : 264330543070

Status : Answered

Chosen Option : 3

Q.17 Select the option that is related to the fifth term in the same way as the second term is related to the first term and fourth term is related to third term.

TOP : ZIW :: PAM : VUT :: SQB : ?

- Ans**
- ☒ 1. ZKI
 - ☒ 2. YKJ
 - ☒ 3. YKI
 - ☒ 4. XKI

Question Type : **MCQ**
 Question ID : **264330138606**
 Option 1 ID : **264330543031**
 Option 2 ID : **264330543032**
 Option 3 ID : **264330543034**
 Option 4 ID : **264330543033**
 Status : **Answered**
 Chosen Option : **3**

Q.18 In a certain code language, 'GLOBE' is coded as '40', 'GRASS' is coded as '63'. What is the code for 'HANDY' in that code language?

- Ans**
- ☒ 1. 52
 - ☒ 2. 49
 - ☒ 3. 51
 - ☒ 4. 50

Question Type : **MCQ**
 Question ID : **264330137091**
 Option 1 ID : **264330537007**
 Option 2 ID : **264330537008**
 Option 3 ID : **264330537010**
 Option 4 ID : **264330537009**
 Status : **Answered**
 Chosen Option : **3**

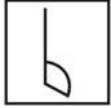
Q.19 Select the option that is related to the fifth number in the same way as the second number is related to the first number and fourth number is related to third number.

11 : 122 :: 14 : 197 :: 18 : ?

- Ans**
- ☒ 1. 328
 - ☒ 2. 317
 - ☒ 3. 325
 - ☒ 4. 320

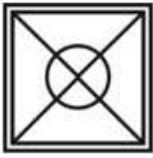
Question Type : **MCQ**
 Question ID : **264330138617**
 Option 1 ID : **264330543076**
 Option 2 ID : **264330543078**
 Option 3 ID : **264330543075**
 Option 4 ID : **264330543077**
 Status : **Answered**
 Chosen Option : **3**

Q.20 Select the option figure in which the given figure is embedded. (rotation is NOT allowed)



Ans

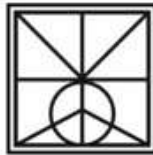
✗ 1.



✗ 2.



✓ 3.



✗ 4.



Question Type : MCQ

Question ID : 264330138579

Option 1 ID : 264330542924

Option 2 ID : 264330542925

Option 3 ID : 264330542923

Option 4 ID : 264330542926

Status : Answered

Chosen Option : 3

Section : General Awareness

Q.1 Pommel Horse, Roman Rings, Vaulting Table are few term which are related to _____ .

Ans

✓ 1. Gymnastics

✗ 2. Swimming

✗ 3. Riding

✗ 4. Polo

Question Type : MCQ

Question ID : 264330138678

Option 1 ID : 264330543319

Option 2 ID : 264330543320

Option 3 ID : 264330543322

Option 4 ID : 264330543321

Status : Answered

Chosen Option : 4

Q.2 'The Zoya Factor' is a novel written by _____.

- Ans
- ☐ 1. Rajashree
 - ☐ 2. Jerry Pinto
 - ☐ 3. Suketu Mehta
 - ☒ 4. Anuja Chauhan

Question Type : MCQ

Question ID : 264330133886

Option 1 ID : 264330524569

Option 2 ID : 264330524570

Option 3 ID : 264330524568

Option 4 ID : 264330524567

Status : Not Answered

Chosen Option : --

Q.3 Hornbill festival is celebrated in which of the following states?

- Ans
- ☒ 1. Nagaland
 - ☐ 2. Ladakh
 - ☐ 3. Rajasthan
 - ☐ 4. Tamil Nadu

Question Type : MCQ

Question ID : 264330138625

Option 1 ID : 264330543109

Option 2 ID : 264330543108

Option 3 ID : 264330543110

Option 4 ID : 264330543107

Status : Answered

Chosen Option : 1

Q.4 Which of the following articles of the Indian constitution is related to "Uniform civil code for the citizen"?

- Ans
- ☒ 1. Article 44
 - ☐ 2. Article 42
 - ☐ 3. Article 41
 - ☐ 4. Article 43

Question Type : MCQ

Question ID : 264330138686

Option 1 ID : 264330543354

Option 2 ID : 264330543352

Option 3 ID : 264330543351

Option 4 ID : 264330543353

Status : Answered

Chosen Option : 1

Q.5 Which are the most widespread forests in India?

- Ans
- ☐ 1. Montane forest
 - ☐ 2. Mangrove Forests
 - ☐ 3. Tropical Evergreen Forests
 - ☒ 4. Tropical Deciduous Forests

Question Type : MCQ
 Question ID : 264330138692
 Option 1 ID : 264330543378
 Option 2 ID : 264330543375
 Option 3 ID : 264330543376
 Option 4 ID : 264330543377
 Status : Answered
 Chosen Option : 4

Q.6 Nepal, a neighbouring country of India, is located to the _____ of India

- Ans
- ☐ 1. East
 - ☒ 2. North
 - ☐ 3. South
 - ☐ 4. West

Question Type : MCQ
 Question ID : 264330135496
 Option 1 ID : 264330530891
 Option 2 ID : 264330530894
 Option 3 ID : 264330530893
 Option 4 ID : 264330530892
 Status : Answered
 Chosen Option : 2

Q.7 Mrinalini Sarabhai who received 'Padma Shri' in the year 1965 was a recognized _____ dancer.

- Ans
- ☐ 1. Odissi
 - ☐ 2. Manipuri
 - ☐ 3. Kuchipudi
 - ☒ 4. Bharatanatyam

Question Type : MCQ
 Question ID : 264330133888
 Option 1 ID : 264330524576
 Option 2 ID : 264330524575
 Option 3 ID : 264330524578
 Option 4 ID : 264330524577
 Status : Not Answered
 Chosen Option : --

Q.8 Which of the following is NOT an example of Millets or coarse grains?

- Ans
- ☒ 1. Jowar
 - ☒ 2. Ragi
 - ☒ 3. Wheat
 - ☒ 4. Bajra

Question Type : MCQ
 Question ID : 264330133898
 Option 1 ID : 264330524615
 Option 2 ID : 264330524618
 Option 3 ID : 264330524616
 Option 4 ID : 264330524617
 Status : Answered
 Chosen Option : 3

Q.9 In Table Tennis, the length of upper surface of the table is _____ .

- Ans
- ☒ 1. 264 cm
 - ☒ 2. 780 cm
 - ☒ 3. 274 cm
 - ☒ 4. 270 cm

Question Type : MCQ
 Question ID : 264330138677
 Option 1 ID : 264330543315
 Option 2 ID : 264330543318
 Option 3 ID : 264330543317
 Option 4 ID : 264330543316
 Status : Answered
 Chosen Option : 1

Q.10 Sultan Mahmud of Ghazni, raided which famous Indian temple?

- Ans
- ☒ 1. Somnath Temple, Gujarat
 - ☒ 2. Jagannath puri Temple, Odisha
 - ☒ 3. Yamunotri Temple, Uttarakhand
 - ☒ 4. Lingraj Temple, Odisha

Question Type : MCQ
 Question ID : 264330138696
 Option 1 ID : 264330543393
 Option 2 ID : 264330543391
 Option 3 ID : 264330543394
 Option 4 ID : 264330543392
 Status : Answered
 Chosen Option : 1

Q.11 Wood's dispatch sent by the Court of Directors of the East India Company in 1854 was related to _____ .

- Ans
- ☒ 1. Famine
 - ☒ 2. Military
 - ☒ 3. Textiles
 - ☒ 4. Education

Question Type : MCQ
 Question ID : 264330138697
 Option 1 ID : 264330543396
 Option 2 ID : 264330543395
 Option 3 ID : 264330543397
 Option 4 ID : 264330543398
 Status : Answered
 Chosen Option : 4

Q.12 In India, National Voters' Day is celebrated on _____ .

- Ans
- ☒ 1. 26 March
 - ☒ 2. 24 February
 - ☒ 3. 27 December
 - ☒ 4. 25 January

Question Type : MCQ
 Question ID : 264330138685
 Option 1 ID : 264330543349
 Option 2 ID : 264330543347
 Option 3 ID : 264330543350
 Option 4 ID : 264330543348
 Status : Answered
 Chosen Option : 2

Q.13 In June 2022, Reserve Bank of India (RBI) has released a report titled _____ .

- Ans
- ☒ 1. Digital Currency Vision 2030
 - ☒ 2. Payments Vision 2025
 - ☒ 3. Digital Currency Vision 2025
 - ☒ 4. Payments Vision 2030

Question Type : MCQ
 Question ID : 264330138683
 Option 1 ID : 264330543342
 Option 2 ID : 264330543339
 Option 3 ID : 264330543341
 Option 4 ID : 264330543340
 Status : Answered
 Chosen Option : 3

Q.14 Giorgia Meloni recently become first Woman Prime Minister of which country?

- Ans
- ☐ 1. Austria
 - ☒ 2. Italy
 - ☐ 3. Spain
 - ☐ 4. Ukraine

Question Type : MCQ

Question ID : 264330138682

Option 1 ID : 264330543338

Option 2 ID : 264330543336

Option 3 ID : 264330543335

Option 4 ID : 264330543337

Status : Answered

Chosen Option : 2

Q.15 Lucknow Pact was signed between _____.

- Ans
- ☐ 1. the Muslim League and Mahatma Gandhi
 - ☐ 2. the Indian National Congress and Arya Samaj
 - ☒ 3. the Indian National Congress and the Muslim League
 - ☐ 4. the Indian National Congress and Sayyid Ahmed Khan

Question Type : MCQ

Question ID : 264330138648

Option 1 ID : 264330543199

Option 2 ID : 264330543202

Option 3 ID : 264330543201

Option 4 ID : 264330543200

Status : Answered

Chosen Option : 3

Q.16 Identify the Indian music personality.

Under him the shehnai came out of its ceremonial context and began to be acknowledged as a classical music instrument.

- Ans
- ☐ 1. Alla Rakha
 - ☒ 2. Ustad Bismillah Khan
 - ☐ 3. Pandit Ram Narayan
 - ☐ 4. Ustad Bundu Khan

Question Type : MCQ

Question ID : 264330138680

Option 1 ID : 264330543328

Option 2 ID : 264330543327

Option 3 ID : 264330543330

Option 4 ID : 264330543329

Status : Answered

Chosen Option : 2

Q.17 An image which can be obtained on a screen is called a _____ .

- Ans
- ☒ 1. vector image
 - ☒ 2. virtual image
 - ☒ 3. real image
 - ☒ 4. spectral image

Question Type : MCQ
 Question ID : 264330138690
 Option 1 ID : 264330543369
 Option 2 ID : 264330543368
 Option 3 ID : 264330543367
 Option 4 ID : 264330543370
 Status : Answered
 Chosen Option : 3

Q.18 In biology, the term "IVF" stands for _____ .

- Ans
- ☒ 1. In vitro fragmentation
 - ☒ 2. In vitro fertilization
 - ☒ 3. Internal venom frosting
 - ☒ 4. Internal vitro fragmentation

Question Type : MCQ
 Question ID : 264330138688
 Option 1 ID : 264330543359
 Option 2 ID : 264330543360
 Option 3 ID : 264330543362
 Option 4 ID : 264330543361
 Status : Not Answered
 Chosen Option : --

Q.19 The leaves have a green pigment called _____, which helps leaves to capture the energy from the sunlight.

- Ans
- ☒ 1. Cladophyll
 - ☒ 2. Chlorophyll
 - ☒ 3. Xanthophyll
 - ☒ 4. Cytoplasm

Question Type : MCQ
 Question ID : 264330138687
 Option 1 ID : 264330543355
 Option 2 ID : 264330543358
 Option 3 ID : 264330543357
 Option 4 ID : 264330543356
 Status : Answered
 Chosen Option : 2

Q.20 Bhoota Kola, a spirit worship ritual dance is of which state?

- Ans
- ☒ 1. Andhra Pradesh
 - ☒ 2. Tamil Nadu
 - ☒ 3. Kerala
 - ☒ 4. Karnataka

Question Type : MCQ
 Question ID : 264330138674
 Option 1 ID : 264330543306
 Option 2 ID : 264330543304
 Option 3 ID : 264330543305
 Option 4 ID : 264330543303
 Status : Not Answered
 Chosen Option : --

Q.21 As the river enters the plain it get twists and turns forming large bends known as _____ .

- Ans
- ☒ 1. ox-bow
 - ☒ 2. levees
 - ☒ 3. meanders
 - ☒ 4. stack

Question Type : MCQ
 Question ID : 264330138689
 Option 1 ID : 264330543364
 Option 2 ID : 264330543365
 Option 3 ID : 264330543363
 Option 4 ID : 264330543366
 Status : Answered
 Chosen Option : 3

Q.22 "Arthashastra" was written by _____ .

- Ans
- ☒ 1. Vishnu Sharma
 - ☒ 2. Kalidasa
 - ☒ 3. Chandragupta
 - ☒ 4. Chanakya

Question Type : MCQ
 Question ID : 264330138645
 Option 1 ID : 264330543190
 Option 2 ID : 264330543187
 Option 3 ID : 264330543189
 Option 4 ID : 264330543188
 Status : Answered
 Chosen Option : 4

Q.23 The population of a nation in working age group is generally grouped between _____.

- Ans
- ☒ 1. 18 – 62 years
 - ☒ 2. 16 – 60 years
 - ☒ 3. 15 – 59 years
 - ☒ 4. 14 – 58 years

Question Type : MCQ
 Question ID : 264330138915
 Option 1 ID : 264330544270
 Option 2 ID : 264330544269
 Option 3 ID : 264330544268
 Option 4 ID : 264330544267
 Status : Answered
 Chosen Option : 2

Q.24 For a bank, the main liability is the _____.

- Ans
- ☒ 1. deposits
 - ☒ 2. economic rent
 - ☒ 3. assets
 - ☒ 4. loans

Question Type : MCQ
 Question ID : 264330133891
 Option 1 ID : 264330524590
 Option 2 ID : 264330524588
 Option 3 ID : 264330524587
 Option 4 ID : 264330524589
 Status : Answered
 Chosen Option : 1

Q.25 Which Mughal Emperor has attempted to vandalise the Kailash Temple at Ellora?

- Ans
- ☒ 1. Aurangzeb
 - ☒ 2. Humayun
 - ☒ 3. Shah Jahan
 - ☒ 4. Babur

Question Type : MCQ
 Question ID : 264330138676
 Option 1 ID : 264330543314
 Option 2 ID : 264330543312
 Option 3 ID : 264330543313
 Option 4 ID : 264330543311
 Status : Answered
 Chosen Option : 1

Q.1 Select the most appropriate option to fill in the blank.

The last man standing was _____, a fully paid vacation to Las Vegas.

- Ans
- ☒ 1. appreciated
 - ☒ 2. discarded
 - ☒ 3. rewarded
 - ☒ 4. allotted

Question Type : MCQ
Question ID : 264330136741
Option 1 ID : 264330535671
Option 2 ID : 264330535673
Option 3 ID : 264330535672
Option 4 ID : 264330535674
Status : Answered
Chosen Option : 3

Q.2 Choose the word that means the same as the given word.

Uterior

- Ans
- ☒ 1. Anterior
 - ☒ 2. Prior
 - ☒ 3. Ancient
 - ☒ 4. Eventual

Question Type : MCQ
Question ID : 264330136786
Option 1 ID : 264330535844
Option 2 ID : 264330535843
Option 3 ID : 264330535845
Option 4 ID : 264330535846
Status : Not Answered
Chosen Option : --

Q.3 Select the appropriate synonym for the underlined word.

You were mad at me for having the same ability as you.

- Ans
- ☒ 1. Feature
 - ☒ 2. Inefficacy
 - ☒ 3. Skill
 - ☒ 4. Flexibility

Question Type : MCQ
Question ID : 264330136811
Option 1 ID : 264330535940
Option 2 ID : 264330535939
Option 3 ID : 264330535941
Option 4 ID : 264330535942
Status : Answered
Chosen Option : 1

Q.4 In the following question, out of the given four alternatives, select the alternative which best expresses the meaning of the Idiom/Phrase.
A bed of nails

- Ans**
- ✓ 1. A problematic or uncomfortable situation
 - ✗ 2. A quick and automatic response
 - ✗ 3. A person with no moral ethics
 - ✗ 4. A fiercely contested fight or dispute

Question Type : MCQ
Question ID : 264330136816
Option 1 ID : 264330535962
Option 2 ID : 264330535961
Option 3 ID : 264330535960
Option 4 ID : 264330535959
Status : Answered
Chosen Option : 1

Q.5 Find the part of the given sentence that has an error in it. If there is no error, choose 'No error'.

Where can I find a good Chinese restaurant about here?

- Ans**
- ✗ 1. Where can I find
 - ✗ 2. a good Chinese
 - ✓ 3. restaurant about here?
 - ✗ 4. No error

Question Type : MCQ
Question ID : 264330135283
Option 1 ID : 264330530047
Option 2 ID : 264330530048
Option 3 ID : 264330530049
Option 4 ID : 264330530050
Status : Answered
Chosen Option : 3

Q.6 Select the appropriate antonym for the underlined word.
I need to spend some time fixing the disorder of my bookshelves.

- Ans**
- ✗ 1. Condition
 - ✗ 2. Chaos
 - ✓ 3. Regulate
 - ✗ 4. Plague

Question Type : MCQ
Question ID : 264330136814
Option 1 ID : 264330535952
Option 2 ID : 264330535953
Option 3 ID : 264330535951
Option 4 ID : 264330535954
Status : Answered
Chosen Option : 3

Q.7 In the following question, out of the given four alternatives, select the alternative which best expresses the meaning of the Idiom/Phrase.

Beat about the bush

- Ans**
- ☒ 1. Play tricks with someone
 - ☒ 2. Avoid talking about the main topic
 - ☒ 3. Divide something into many parts
 - ☒ 4. To plan an ambush

Question Type : **MCQ**
 Question ID : **264330136815**
 Option 1 ID : **264330535956**
 Option 2 ID : **264330535958**
 Option 3 ID : **264330535957**
 Option 4 ID : **264330535955**
 Status : **Answered**
 Chosen Option : **1**

Q.8 Choose the incorrectly spelt word.

- Ans**
- ☒ 1. Barely
 - ☒ 2. Boldly
 - ☒ 3. Lastly
 - ☒ 4. Happilly

Question Type : **MCQ**
 Question ID : **264330136817**
 Option 1 ID : **264330535963**
 Option 2 ID : **264330535966**
 Option 3 ID : **264330535965**
 Option 4 ID : **264330535964**
 Status : **Answered**
 Chosen Option : **4**

Q.9 Improve the underlined part of the sentence. Choose 'No improvement' as an answer if the sentence is grammatically correct.

I had to got up early, so I have been in a daze all morning.

- Ans**
- ☒ 1. had to get up
 - ☒ 2. No improvement
 - ☒ 3. have to got in
 - ☒ 4. has to get on

Question Type : **MCQ**
 Question ID : **264330136826**
 Option 1 ID : **264330536000**
 Option 2 ID : **264330536002**
 Option 3 ID : **264330536001**
 Option 4 ID : **264330535999**
 Status : **Answered**
 Chosen Option : **1**

Q.10 Choose the word that can substitute the given group of words.

The art of cutting gems

- Ans
- ☐ 1. Jewelry
 - ☐ 2. Philately
 - ☐ 3. Mining
 - ☒ 4. Lapidary

Question Type : MCQ
 Question ID : 264330136810
 Option 1 ID : 264330535935
 Option 2 ID : 264330535938
 Option 3 ID : 264330535936
 Option 4 ID : 264330535937
 Status : Answered
 Chosen Option : 2

Q.11 Improve the underlined part of the sentence. Choose 'No improvement' as an answer if the sentence is grammatically correct.

You'll have to brakes hard when you go down the hill.

- Ans
- ☐ 1. brake hardly
 - ☐ 2. braked hard
 - ☐ 3. No improvement
 - ☒ 4. brake hard

Question Type : MCQ
 Question ID : 264330135286
 Option 1 ID : 264330530061
 Option 2 ID : 264330530060
 Option 3 ID : 264330530062
 Option 4 ID : 264330530059
 Status : Answered
 Chosen Option : 4

Q.12 Select the wrongly spelt word.

- Ans
- ☐ 1. Declivity
 - ☐ 2. Decorous
 - ☐ 3. Cosmopolitan
 - ☒ 4. Copous

Question Type : MCQ
 Question ID : 264330136740
 Option 1 ID : 264330535669
 Option 2 ID : 264330535670
 Option 3 ID : 264330535667
 Option 4 ID : 264330535668
 Status : Answered
 Chosen Option : 3

Q.13 A sentence has been given with a blank to be filled with an appropriate option. Choose the correct alternative.
It's _____ for someone to buy a product that contains no sugar.

- Ans**
- ✓ 1. easier
 - ✗ 2. easiest
 - ✗ 3. easily
 - ✗ 4. ease

Question Type : **MCQ**
Question ID : **264330136802**
Option 1 ID : **264330535908**
Option 2 ID : **264330535910**
Option 3 ID : **264330535907**
Option 4 ID : **264330535909**
Status : **Answered**
Chosen Option : **1**

Q.14 Improve the underlined part of the sentence. Choose 'No improvement' as an answer if the sentence is grammatically correct.

At the grocery store, coffee is in an same aisles as tea.

- Ans**
- ✗ 1. a same aisles as
 - ✓ 2. the same aisle as
 - ✗ 3. same aisle is
 - ✗ 4. No improvement

Question Type : **MCQ**
Question ID : **264330136850**
Option 1 ID : **264330536091**
Option 2 ID : **264330536092**
Option 3 ID : **264330536093**
Option 4 ID : **264330536094**
Status : **Answered**
Chosen Option : **2**

Q.15 Choose the word that is opposite in meaning to the given word.

Abridge

- Ans**
- ✗ 1. Taper
 - ✗ 2. Fortify
 - ✗ 3. Syncopate
 - ✓ 4. Elongate

Question Type : **MCQ**
Question ID : **264330136813**
Option 1 ID : **264330535950**
Option 2 ID : **264330535949**
Option 3 ID : **264330535947**
Option 4 ID : **264330535948**
Status : **Answered**
Chosen Option : **4**

Q.16 Choose the word that can substitute the given group of words.

The sound made by frogs

- Ans
- ☒ 1. Trumpet
 - ☒ 2. Moo
 - ☒ 3. Croak
 - ☒ 4. Roar

Question Type : MCQ
 Question ID : 264330136809
 Option 1 ID : 264330535931
 Option 2 ID : 264330535932
 Option 3 ID : 264330535933
 Option 4 ID : 264330535934
 Status : Answered
 Chosen Option : 3

Q.17 Select the most appropriate option to fill in the blank.

She reduced the volume because the _____ music was becoming too much for her.

- Ans
- ☒ 1. concede
 - ☒ 2. content
 - ☒ 3. constant
 - ☒ 4. competent

Question Type : MCQ
 Question ID : 264330136820
 Option 1 ID : 264330535975
 Option 2 ID : 264330535977
 Option 3 ID : 264330535976
 Option 4 ID : 264330535978
 Status : Answered
 Chosen Option : 3

Q.18 A sentence has been given with a blank to be filled with an appropriate option. Choose the correct alternative.
 He was stable _____ they met.

- Ans
- ☒ 1. while
 - ☒ 2. when
 - ☒ 3. hence
 - ☒ 4. lest

Question Type : MCQ
 Question ID : 264330136801
 Option 1 ID : 264330535906
 Option 2 ID : 264330535905
 Option 3 ID : 264330535904
 Option 4 ID : 264330535903
 Status : Answered
 Chosen Option : 2

Q.19 Find the part of the given sentence that has an error in it. If there is no error, choose 'No error'.

Factoring is, of course, different from and superior than bill discounting, from the point of view of a small company.

- Ans**
- ☒ 1. bill discounting, from the point of
 - ☒ 2. No error
 - ☒ 3. Factoring is, of course, different from and superior than
 - ☒ 4. view of a small company.

Question Type : **MCQ**

Question ID : **264330136797**

Option 1 ID : **264330535888**

Option 2 ID : **264330535890**

Option 3 ID : **264330535887**

Option 4 ID : **264330535889**

Status : **Answered**

Chosen Option : **3**

Q.20 Find the part of the given sentence that has an error in it. If there is no error, choose 'No error'.

Companies will go after one other in their marketing campaigns.

- Ans**
- ☒ 1. their marketing campaigns.
 - ☒ 2. after one other in
 - ☒ 3. Companies will go
 - ☒ 4. No error

Question Type : **MCQ**

Question ID : **264330136847**

Option 1 ID : **264330536081**

Option 2 ID : **264330536080**

Option 3 ID : **264330536079**

Option 4 ID : **264330536082**

Status : **Answered**

Chosen Option : **2**

Comprehension:

In the following passage some of the words have been deleted. Read the passage carefully and select the correct answer for the given blank out of the four alternatives.

In Switzerland these glacial meltwaters are (1) _____ for hydropower. In fact, water falling on 93% of Switzerland ultimately passes (2) _____ at least one electric power plant before even (3) _____ the country. So one consequence is that melting glaciers help to (4) _____ for low rainfall in times of drought, filling reservoirs to supply the nation's (5) _____ supply.

SubQuestion No : 21

Q.21 Select the most appropriate option to fill in the blank No. 1.

- Ans
- ☒ 1. chosen
 - ☒ 2. plotted
 - ☒ 3. glued
 - ☒ 4. used

Question Type : MCQ

Question ID : 264330136804

Option 1 ID : 264330535912

Option 2 ID : 264330535914

Option 3 ID : 264330535913

Option 4 ID : 264330535911

Status : Answered

Chosen Option : 4

Comprehension:

In the following passage some of the words have been deleted. Read the passage carefully and select the correct answer for the given blank out of the four alternatives.

In Switzerland these glacial meltwaters are (1) _____ for hydropower. In fact, water falling on 93% of Switzerland ultimately passes (2) _____ at least one electric power plant before even (3) _____ the country. So one consequence is that melting glaciers help to (4) _____ for low rainfall in times of drought, filling reservoirs to supply the nation's (5) _____ supply.

SubQuestion No : 22

Q.22 Select the most appropriate option to fill in the blank No. 2.

- Ans
- ☒ 1. for
 - ☒ 2. with
 - ☒ 3. through
 - ☒ 4. beneath

Question Type : MCQ

Question ID : 264330136805

Option 1 ID : 264330535915

Option 2 ID : 264330535917

Option 3 ID : 264330535916

Option 4 ID : 264330535918

Status : Answered

Chosen Option : 3

Comprehension:

In the following passage some of the words have been deleted. Read the passage carefully and select the correct answer for the given blank out of the four alternatives.

In Switzerland these glacial meltwaters are (1) _____ for hydropower. In fact, water falling on 93% of Switzerland ultimately passes (2) _____ at least one electric power plant before even (3) _____ the country. So one consequence is that melting glaciers help to (4) _____ for low rainfall in times of drought, filling reservoirs to supply the nation's (5) _____ supply.

SubQuestion No : 23

Q.23 Select the most appropriate option to fill in the blank No. 3.

- Ans
- ☒ 1. throwing
 - ☒ 2. catching
 - ☒ 3. sieving
 - ☒ 4. leaving

Question Type : MCQ

Question ID : 264330136806

Option 1 ID : 264330535919

Option 2 ID : 264330535922

Option 3 ID : 264330535921

Option 4 ID : 264330535920

Status : Answered

Chosen Option : 4

Comprehension:

In the following passage some of the words have been deleted. Read the passage carefully and select the correct answer for the given blank out of the four alternatives.

In Switzerland these glacial meltwaters are (1) _____ for hydropower. In fact, water falling on 93% of Switzerland ultimately passes (2) _____ at least one electric power plant before even (3) _____ the country. So one consequence is that melting glaciers help to (4) _____ for low rainfall in times of drought, filling reservoirs to supply the nation's (5) _____ supply.

SubQuestion No : 24

Q.24 Select the most appropriate option to fill in the blank No. 4.

- Ans
- ☒ 1. compensate
 - ☒ 2. surrender
 - ☒ 3. slate
 - ☒ 4. stall

Question Type : MCQ

Question ID : 264330136807

Option 1 ID : 264330535925

Option 2 ID : 264330535926

Option 3 ID : 264330535924

Option 4 ID : 264330535923

Status : Not Answered

Chosen Option : --

Comprehension:

In the following passage some of the words have been deleted. Read the passage carefully and select the correct answer for the given blank out of the four alternatives.

In Switzerland these glacial meltwaters are (1) _____ for hydropower. In fact, water falling on 93% of Switzerland ultimately passes (2) _____ at least one electric power plant before even (3) _____ the country. So one consequence is that melting glaciers help to (4) _____ for low rainfall in times of drought, filling reservoirs to supply the nation's (5) _____ supply.

SubQuestion No : 25

Q.25 Select the most appropriate option to fill in the blank No. 5.

- Ans
- ☒ 1. stage
 - ☒ 2. energy
 - ☒ 3. cooking
 - ☒ 4. air

Question Type : MCQ

Question ID : 264330136808

Option 1 ID : 264330535927

Option 2 ID : 264330535930

Option 3 ID : 264330535929

Option 4 ID : 264330535928

Status : Answered

Chosen Option : 2

