

Multi Tasking Non Technical Staff and Havaladar CBIC and CBN Examination 2022

Roll Number	
Candidate Name	
Venue Name	iON Digital Zone iDZ 2 Sector 62
Exam Date	03/05/2023
Exam Time	3:30 PM - 5:00 PM
Subject	MTS Non Tech Havaladar CBIC and CBN Examination 2022

Section : Numerical and Mathematical Ability

Q.1 Akhil bought 13 kg of apples for Rs. 2,400. He sold them at a profit equal to the selling price of 7 kg of apples. Find the selling price of apples per kg.

- Ans** ☒ 1. Rs. 400
☒ 2. Rs. 650
☒ 3. Rs. 350
☒ 4. Rs. 600

Question Type : **MCQ**

Question ID : **264330135138**

Option 1 ID : **264330529488**

Option 2 ID : **264330529489**

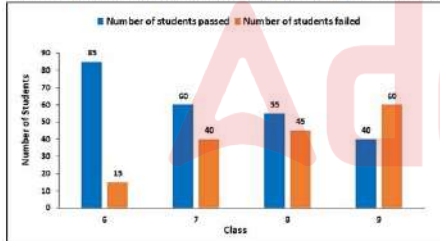
Option 3 ID : **264330529490**

Option 4 ID : **264330529487**

Status : **Answered**

Chosen Option : **3**

Q.2 The bar graph shows the number of students who passed and failed in different classes in a school. If the total number of students in each class is 100, find the percentage of students who passed the exam.



- Ans** ☒ 1. 25%
☒ 2. 65%
☒ 3. 60%
☒ 4. 55%

Question Type : **MCQ**

Question ID : **264330135148**

Option 1 ID : **264330529527**

Option 2 ID : **264330529530**

Option 3 ID : **264330529528**

Option 4 ID : **264330529529**

Status : **Answered**

Chosen Option : **3**

Test Prime

**ALL EXAMS,
ONE SUBSCRIPTION**



70,000+
Mock Tests



**Personalised
Report Card**



**Unlimited
Re-Attempt**



600+
Exam Covered



**Previous Year
Papers**



**500%
Refund**



ATTEMPT FREE MOCK NOW

Q.3 D alone can do a work in 20 days and E alone can do the same work in 25 days. If they work on it together for 8 days, then the fraction of the work that left is:

- Ans ☒ 1. $11/25$
☒ 2. $7/25$
☒ 3. $9/100$
☒ 4. $51/100$

Question Type : **MCQ**
 Question ID : **264330138362**
 Option 1 ID : **264330542057**
 Option 2 ID : **264330542055**
 Option 3 ID : **264330542058**
 Option 4 ID : **264330542056**
 Status : **Answered**
 Chosen Option : **2**

Q.4 Find the fourth proportion to 8, 14 and 24.

- Ans ☒ 1. 42
☒ 2. 26
☒ 3. 40
☒ 4. 36

Question Type : **MCQ**
 Question ID : **264330135141**
 Option 1 ID : **264330529501**
 Option 2 ID : **264330529499**
 Option 3 ID : **264330529500**
 Option 4 ID : **264330529502**
 Status : **Answered**
 Chosen Option : **1**

Q.5 A alone can complete half of a work in 150 days. In 50 days, what percentage of the work will be completed by A?

- Ans ☒ 1. 16.67 percent
☒ 2. 15 percent
☒ 3. 20 percent
☒ 4. 22.5 percent

Question Type : **MCQ**
 Question ID : **264330135042**
 Option 1 ID : **264330529105**
 Option 2 ID : **264330529106**
 Option 3 ID : **264330529104**
 Option 4 ID : **264330529103**
 Status : **Answered**
 Chosen Option : **1**

Q.6 Sajid drove for 6 hours at a rate of 60 km/hr and for 4 hours at 50 km/hr. What was his average speed for the whole journey?

- Ans**
- ☒ 1. 52 kmph
 - ☒ 2. 56 kmph
 - ☒ 3. 54 kmph
 - ☒ 4. 58 kmph

Question Type : **MCQ**

Question ID : **264330141022**

Option 1 ID : **264330552436**

Option 2 ID : **264330552435**

Option 3 ID : **264330552437**

Option 4 ID : **264330552438**

Status : **Answered**

Chosen Option : **2**

Q.7 The following table shows the number of buyers visiting in four different brand stores in a week. The number of buyers in Brand R is how much percent more than the number of buyers in Brand P during this week?

Brand	Number of buyers
P	400
Q	530
R	415
S	310

- Ans**
- ☒ 1. 5.50%
 - ☒ 2. 2.25%
 - ☒ 3. 4.25%
 - ☒ 4. 3.75%

Question Type : **MCQ**

Question ID : **264330138741**

Option 1 ID : **264330543572**

Option 2 ID : **264330543574**

Option 3 ID : **264330543571**

Option 4 ID : **264330543573**

Status : **Answered**

Chosen Option : **4**

Q.8 Two successive price decreases of 20% and 30% of an article are equivalent to a single price decrease of:

- Ans**
- ☒ 1. 50%
 - ☒ 2. 44%
 - ☒ 3. 25%
 - ☒ 4. 40%

Question Type : **MCQ**

Question ID : **264330135114**

Option 1 ID : **264330529391**

Option 2 ID : **264330529393**

Option 3 ID : **264330529392**

Option 4 ID : **264330529394**

Status : **Answered**

Chosen Option : **2**

Q.9 Find the value of $841 + 6 \times 15 + 45\%$ of 60 :

- Ans
- ☒ 1. 654
 - ☒ 2. 888
 - ☒ 3. 765
 - ☒ 4. 958

Question Type : MCQ

Question ID : 264330135130

Option 1 ID : 264330529455

Option 2 ID : 264330529457

Option 3 ID : 264330529458

Option 4 ID : 264330529456

Status : Answered

Chosen Option : 4

Q.10 What is the HCF of 1.05 and 6.23?

- Ans
- ☒ 1. 0.89
 - ☒ 2. 0.21
 - ☒ 3. 0.07
 - ☒ 4. 0.35

Question Type : MCQ

Question ID : 264330141021

Option 1 ID : 264330552432

Option 2 ID : 264330552433

Option 3 ID : 264330552431

Option 4 ID : 264330552434

Status : Answered

Chosen Option : 3

Q.11 $a:b = 5:8$ and $b:c = 2:6$. If $a = 25$, then find the value of c .

- Ans
- ☒ 1. 90
 - ☒ 2. 140
 - ☒ 3. 120
 - ☒ 4. 96

Question Type : MCQ

Question ID : 264330135140

Option 1 ID : 264330529496

Option 2 ID : 264330529498

Option 3 ID : 264330529495

Option 4 ID : 264330529497

Status : Answered

Chosen Option : 3

Q.12 The difference in simple interest and compound interest on a certain sum of money in 2 years at 3% per annum is 90 paisa. What is the sum?

- Ans**
- ☐ 1. Rs. 9000
 - ☐ 2. Rs. 5000
 - ☐ 3. Rs. 3000
 - ☒ 4. Rs. 1000

Question Type : **MCQ**

Question ID : **264330135121**

Option 1 ID : **264330529420**

Option 2 ID : **264330529422**

Option 3 ID : **264330529421**

Option 4 ID : **264330529419**

Status : **Answered**

Chosen Option : **4**

Q.13 If interest is being compounded half yearly, then what sum will amount to Rs. 51840 in 2 years at the rate of 40 percent per annum on compound interest?

- Ans**
- ☒ 1. Rs.25000
 - ☐ 2. Rs.15000
 - ☐ 3. Rs.20000
 - ☐ 4. Rs.30000

Question Type : **MCQ**

Question ID : **264330137186**

Option 1 ID : **264330537389**

Option 2 ID : **264330537387**

Option 3 ID : **264330537388**

Option 4 ID : **264330537390**

Status : **Not Attempted and
Marked For Review**

Chosen Option : **--**

Q.14 A product, whose marked price is Rs. 840, is sold for Rs. 798 by a wholesale shop. What is the percentage discount given by him?

- Ans**
- ☐ 1. 6%
 - ☒ 2. 5%
 - ☐ 3. 3%
 - ☐ 4. 4%

Question Type : **MCQ**

Question ID : **264330135139**

Option 1 ID : **264330529491**

Option 2 ID : **264330529494**

Option 3 ID : **264330529493**

Option 4 ID : **264330529492**

Status : **Answered**

Chosen Option : **2**

Q.15 The length of a cuboid is six times of its breadth and the height of cuboid is four times of its breadth. If the breadth of the cuboid is 3 cm, then what is the total surface area of cuboid?

- Ans**
- ☒ 1. 484 cm^2
 - ☒ 2. 612 cm^2
 - ☒ 3. 576 cm^2
 - ☒ 4. 676 cm^2

Question Type : **MCQ**

Question ID : **264330135057**

Option 1 ID : **264330529163**

Option 2 ID : **264330529166**

Option 3 ID : **264330529164**

Option 4 ID : **264330529165**

Status : **Answered**

Chosen Option : **2**

Q.16 The speed of a boat in still water is 17 km/hr and the speed of a stream is 11 km/hr. Find the difference between the upstream speed and the downstream speed of the boat.

- Ans**
- ☒ 1. 18 km/hr
 - ☒ 2. 22 km/hr
 - ☒ 3. 21 km/hr
 - ☒ 4. 28 km/hr

Question Type : **MCQ**

Question ID : **264330135144**

Option 1 ID : **264330529514**

Option 2 ID : **264330529512**

Option 3 ID : **264330529511**

Option 4 ID : **264330529513**

Status : **Answered**

Chosen Option : **2**

Q.17 The ratio of radii of a cylinder to a cone is 3:1. If their heights are equal, What is the ratio of their volumes?

- Ans**
- ☒ 1. 1:3
 - ☒ 2. 27:1
 - ☒ 3. 9:1
 - ☒ 4. 1:9

Question Type : **MCQ**

Question ID : **264330138367**

Option 1 ID : **264330542076**

Option 2 ID : **264330542075**

Option 3 ID : **264330542077**

Option 4 ID : **264330542078**

Status : **Answered**

Chosen Option : **2**

Q.18 Rohit buys an old bat for Rs. 880 and spends Rs. 120 on its repairing. If he sells it for Rs. 800, then what is the loss percentage?

- Ans**
- ☒ 1. 25 percent
 - ☒ 2. 30 percent
 - ☒ 3. 10 percent
 - ☒ 4. 20 percent

Question Type : **MCQ**

Question ID : **264330137651**

Option 1 ID : **264330539211**

Option 2 ID : **264330539212**

Option 3 ID : **264330539214**

Option 4 ID : **264330539213**

Status : **Answered**

Chosen Option : **4**

Q.19 The average of numbers A and B is 16. The average of numbers B and C is 40. What is the difference between C and A?

- Ans**
- ☒ 1. 48
 - ☒ 2. 12
 - ☒ 3. 80
 - ☒ 4. 66

Question Type : **MCQ**

Question ID : **264330135133**

Option 1 ID : **264330529470**

Option 2 ID : **264330529469**

Option 3 ID : **264330529468**

Option 4 ID : **264330529467**

Status : **Answered**

Chosen Option : **1**

Q.20

The value of $\left[\frac{1}{4} \text{ of } 18 \div \frac{6}{5} + \left(\frac{1}{8} + \frac{7}{4} \right) \right] \times \frac{1}{15}$ is:

- Ans**
- ☒ 1. $\frac{3}{8}$
 - ☒ 2. $\frac{6}{7}$
 - ☒ 3. $\frac{5}{8}$
 - ☒ 4. $\frac{4}{5}$

Question Type : **MCQ**

Question ID : **264330138725**

Option 1 ID : **264330543507**

Option 2 ID : **264330543509**

Option 3 ID : **264330543510**

Option 4 ID : **264330543508**

Status : **Answered**

Chosen Option : **1**

Q.1 Amar, Bidisha, Caramel, Deepa and Ellen are sitting on a bench facing south. Ellen is sitting at one end of the bench with nobody to her left. Caramel is sitting to the immediate left of Deepa, who is sitting at the end of the bench. Amar is sitting to the right of Bidisha. In which position is Amar sitting?

- Ans**
- ☒ 1. Exactly between Deepa and Bidisha
 - ☒ 2. Exactly between Deepa and Caramel
 - ☒ 3. Exactly between Caramel and Bidisha
 - ☒ 4. Exactly between Bidisha and Ellen

Question Type : **MCQ**
 Question ID : **264330135029**
 Option 1 ID : **264330529054**
 Option 2 ID : **264330529051**
 Option 3 ID : **264330529052**
 Option 4 ID : **264330529053**
 Status : **Answered**
 Chosen Option : **3**

Q.2 Which of the following letters will replace the question mark (?) in the given series?
 O, N, L, K, I, H, F, ?

- Ans**
- ☒ 1. A
 - ☒ 2. E
 - ☒ 3. F
 - ☒ 4. H

Question Type : **MCQ**
 Question ID : **264330135020**
 Option 1 ID : **264330529016**
 Option 2 ID : **264330529017**
 Option 3 ID : **264330529015**
 Option 4 ID : **264330529018**
 Status : **Answered**
 Chosen Option : **2**

Q.3 In a certain code language, 'ALBUMS' is coded as 'UMWBNA'. What is the code for 'CLEVER' in that code language?

- Ans**
- ☒ 1. TXEENC
 - ☒ 2. XETENC
 - ☒ 3. TEXENC
 - ☒ 4. TEXNEC

Question Type : **MCQ**
 Question ID : **264330138588**
 Option 1 ID : **264330542959**
 Option 2 ID : **264330542960**
 Option 3 ID : **264330542962**
 Option 4 ID : **264330542961**
 Status : **Answered**
 Chosen Option : **3**

Q.4 Study the given pattern carefully and select the number that can replace the question mark (?) in it.

First row - 14, 42, 84

Second row - 21, 63, 126

Third row - 8, 24, ?

Ans ☒ 1. 48

☒ 2. 82

☒ 3. 38

☒ 4. 65

Question Type : **MCQ**

Question ID : **264330135036**

Option 1 ID : **264330529082**

Option 2 ID : **264330529081**

Option 3 ID : **264330529080**

Option 4 ID : **264330529079**

Status : **Answered**

Chosen Option : 1

Q.5 Which of the following numbers will replace the question mark (?) in the given series?

1, 8, 9, 64, 25, 216, 49, ?

Ans ☒ 1. 612

☒ 2. 512

☒ 3. 552

☒ 4. 385

Question Type : **MCQ**

Question ID : **264330135011**

Option 1 ID : **264330528979**

Option 2 ID : **264330528981**

Option 3 ID : **264330528982**

Option 4 ID : **264330528980**

Status : **Answered**

Chosen Option : 2

Q.6 Select the option that is related to the third word in the same way as the second word is related to the first word.

Celsius : Temperature :: Pound : ?

Ans ☒ 1. Angle

☒ 2. Distance

☒ 3. Time

☒ 4. Weight

Question Type : **MCQ**

Question ID : **264330135022**

Option 1 ID : **264330529026**

Option 2 ID : **264330529023**

Option 3 ID : **264330529025**

Option 4 ID : **264330529024**

Status : **Answered**

Chosen Option : 4

Q.7 Select the option that is related to the third number in the same way as the second number is related to the first number.

17 : 272 :: 22 : ?

Ans ✓ 1. 462

✗ 2. 596

✗ 3. 394

✗ 4. 448

Question Type : **MCQ**

Question ID : **264330135013**

Option 1 ID : **264330528990**

Option 2 ID : **264330528987**

Option 3 ID : **264330528988**

Option 4 ID : **264330528989**

Status : **Answered**

Chosen Option : **1**

Q.8 Select the option that is related to the third word in the same way as the second word is related to the first word.

Fan : Blades :: Cycle : ?

Ans ✗ 1. Bike

✗ 2. Hands

✗ 3. Car

✓ 4. Wheels

Question Type : **MCQ**

Question ID : **264330135023**

Option 1 ID : **264330529030**

Option 2 ID : **264330529029**

Option 3 ID : **264330529027**

Option 4 ID : **264330529028**

Status : **Answered**

Chosen Option : **4**

Q.9 If a mirror is placed on the line AB, then out of the option figures which figure will be the right image of the question figure?

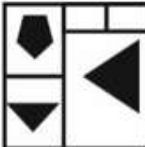


Ans

✓ 1.



✗ 2.



✗ 3.



✗ 4.



Question Type : MCQ

Question ID : 264330138601

Option 1 ID : 264330543012

Option 2 ID : 264330543014

Option 3 ID : 264330543013

Option 4 ID : 264330543011

Status : Answered

Chosen Option : 1

Q.10 Umesh is older than Satish. Suresh is younger than Neeraj but older than Umesh. Tarun is older than Ritesh but younger than Satish. Manish is the youngest. Who is the eldest among them?

Ans

✗ 1. Satish

✓ 2. Neeraj

✗ 3. Ritesh

✗ 4. Suresh

Question Type : MCQ

Question ID : 264330135030

Option 1 ID : 264330529058

Option 2 ID : 264330529057

Option 3 ID : 264330529055

Option 4 ID : 264330529056

Status : Answered

Chosen Option : 2

Q.11 In a certain code language, 'STOCK' is written as '19V15E11'. How will 'CRYPTO' be written in that language?

- Ans
- ☒ 1. 3T25S6VT5
 - ☒ 2. 2T2316V15
 - ☒ 3. 3T2F1AV15
 - ☒ 4. 3T25R20Q

Question Type : MCQ

Question ID : 264330133529

Option 1 ID : 264330523148

Option 2 ID : 264330523147

Option 3 ID : 264330523149

Option 4 ID : 264330523150

Status : Answered

Chosen Option : 1

Q.12 In a certain code language, 'CUT' is written as 'BD21SU'. How will 'DRY' be written in that language?

- Ans
- ☒ 1. C18EXZ
 - ☒ 2. CE18XZ
 - ☒ 3. CZ18EX
 - ☒ 4. CE18ZX

Question Type : MCQ

Question ID : 264330137812

Option 1 ID : 264330539856

Option 2 ID : 264330539855

Option 3 ID : 264330539857

Option 4 ID : 264330539858

Status : Answered

Chosen Option : 2

Q.13 A, B, and C are sitting on a bench facing south. D, E, and F are sitting on a parallel bench facing north. D is at one of the ends and to the immediate left of F. B is facing D. C is to the right of A. Who is facing A?

- Ans
- ☒ 1. E
 - ☒ 2. C
 - ☒ 3. D
 - ☒ 4. F

Question Type : MCQ

Question ID : 264330135028

Option 1 ID : 264330529049

Option 2 ID : 264330529047

Option 3 ID : 264330529048

Option 4 ID : 264330529050

Status : Answered

Chosen Option : 4

Q.14 Which two numbers should be interchanged to make the given equation correct?

$$120 \div 12 \times 6 + 24 - 15 = 27$$

- Ans
- ☐ 1. 12 and 6
 - ☐ 2. 12 and 15
 - ☒ 3. 12 and 24
 - ☐ 4. 6 and 24

Question Type : MCQ

Question ID : 264330137361

Option 1 ID : 264330538071

Option 2 ID : 264330538074

Option 3 ID : 264330538072

Option 4 ID : 264330538073

Status : Answered

Chosen Option : 3

Q.15 Two statements are given followed by two conclusions numbered I and II. Assuming the statements to be true, even if they seem to be at variance with commonly known facts, decide which of the conclusions logically follow(s) from the statements.

Statements:

Some songs are snow.

Some snow are shoes.

Conclusions:

I. Some shoes are snow.

II. Some snows are songs.

- Ans
- ☐ 1. Only conclusion I follows
 - ☐ 2. Neither conclusion I nor II follows
 - ☐ 3. Only conclusion II follows
 - ☒ 4. Both conclusions I and II follow

Question Type : MCQ

Question ID : 264330135031

Option 1 ID : 264330529059

Option 2 ID : 264330529062

Option 3 ID : 264330529060

Option 4 ID : 264330529061

Status : Answered

Chosen Option : 4

Q.16 Which two signs should be interchanged to make the given equation correct?

$$2 - 8 \div 4 = 6 \times 3 + 18$$

- Ans
- ☐ 1. \times and $-$
 - ☒ 2. $=$ and $+$
 - ☐ 3. \times and $+$
 - ☐ 4. $+$ and $-$

Question Type : MCQ

Question ID : 264330135037

Option 1 ID : 264330529083

Option 2 ID : 264330529086

Option 3 ID : 264330529085

Option 4 ID : 264330529084

Status : Answered

Chosen Option : 2

Q.17 Select the option figure in which the given figure is embedded. (rotation is NOT allowed)

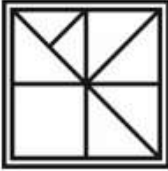


Ans

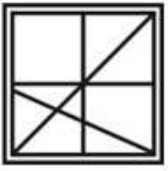
✗ 1.



✗ 2.



✗ 3.



✓ 4.



Question Type : MCQ

Question ID : 264330138600

Option 1 ID : 264330543008

Option 2 ID : 264330543010

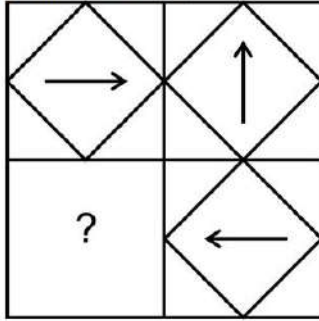
Option 3 ID : 264330543009

Option 4 ID : 264330543007

Status : Answered

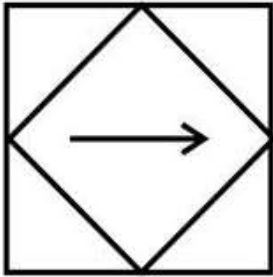
Chosen Option : 4

Q.18 Select the option figure that will replace the question mark (?) in the figure given below to complete the pattern.
(rotation is not allowed)

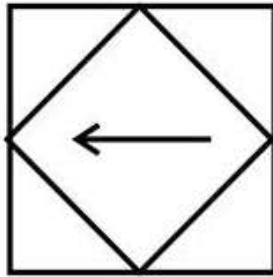


Ans

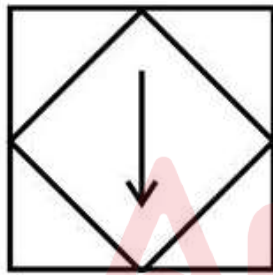
✗ 1.



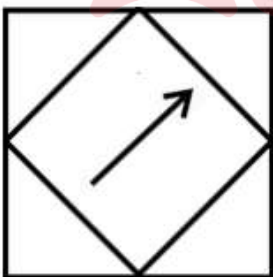
✗ 2.



✓ 3.



✗ 4.



Question Type : MCQ

Question ID : 264330135041

Option 1 ID : 264330529101

Option 2 ID : 264330529102

Option 3 ID : 264330529100

Option 4 ID : 264330529099

Status : Answered

Chosen Option : 3

Q.19 Three statements are given followed by two conclusions numbered I and II. Assuming the statements to be true, even if they seem to be at variance with commonly known facts, decide which of the conclusions logically follow(s) from the statements.

Statements:

All paper are chair.

Some chair are ground.

All cat are ground.

Conclusions:

I. Some cat are chair.

II. Some chair are not paper.

- Ans**
- ☒ 1. Only conclusion II follows
 - ☒ 2. Both conclusions I and II follow
 - ☒ 3. Only conclusion I follows
 - ☒ 4. Neither conclusion I nor II follows

Question Type : **MCQ**

Question ID : **264330135032**

Option 1 ID : **264330529064**

Option 2 ID : **264330529065**

Option 3 ID : **264330529063**

Option 4 ID : **264330529066**

Status : **Answered**

Chosen Option : **1**

Q.20 Which of the following numbers will replace the question mark (?) in the given series?

-34, -31, -25, -16, -4, 11, 29, ?

- Ans**
- ☒ 1. 60
 - ☒ 2. 50
 - ☒ 3. 80
 - ☒ 4. 70

Question Type : **MCQ**

Question ID : **264330135034**

Option 1 ID : **264330529071**

Option 2 ID : **264330529072**

Option 3 ID : **264330529073**

Option 4 ID : **264330529074**

Status : **Answered**

Chosen Option : **2**

Section : **General Awareness**

Q.1 Which acid destroys the bacteria that enter the stomach?

- Ans
- ☒ 1. Nitric acid
 - ☒ 2. Hydrochloric acid
 - ☒ 3. Boric acid
 - ☒ 4. Uric acid

Question Type : MCQ
 Question ID : 264330134676
 Option 1 ID : 264330527659
 Option 2 ID : 264330527662
 Option 3 ID : 264330527660
 Option 4 ID : 264330527661
 Status : Answered
 Chosen Option : 2

Q.2 Which among the following wind is associated with extreme cold and dryness?

- Ans
- ☒ 1. Monsoon Winds
 - ☒ 2. Westerlies
 - ☒ 3. Trade Winds
 - ☒ 4. Polar Easterlies

Question Type : MCQ
 Question ID : 264330134677
 Option 1 ID : 264330527664
 Option 2 ID : 264330527666
 Option 3 ID : 264330527663
 Option 4 ID : 264330527665
 Status : Answered
 Chosen Option : 4

Q.3 Baisakhi Festival is majorly celebrated in the states of _____ and _____.

- Ans
- ☒ 1. Nagaland, Tripura
 - ☒ 2. Rajasthan, Madhya Pradesh
 - ☒ 3. Punjab, Haryana
 - ☒ 4. Tamil Nadu, Kerala

Question Type : MCQ
 Question ID : 264330138650
 Option 1 ID : 264330543208
 Option 2 ID : 264330543210
 Option 3 ID : 264330543209
 Option 4 ID : 264330543207
 Status : Answered
 Chosen Option : 3

Q.4 Cash reserve ratio is a _____ tool to control money supply.

- I. Qualitative
- II. Quantitative

- Ans
- ✓ 1. Only II
 - ✗ 2. Only I
 - ✗ 3. Neither I nor II
 - ✗ 4. Both I and II

Question Type : MCQ
Question ID : 264330138659
Option 1 ID : 264330543244
Option 2 ID : 264330543243
Option 3 ID : 264330543246
Option 4 ID : 264330543245
Status : Answered
Chosen Option : 1

Q.5 Which battle led to the destruction of the Vijayanagara empire?

- Ans
- ✗ 1. Battle of Raichur
 - ✗ 2. Battle of Haldighati
 - ✓ 3. Battle of Talikota
 - ✗ 4. Battle of Arcot

Question Type : MCQ
Question ID : 264330134683
Option 1 ID : 264330527689
Option 2 ID : 264330527688
Option 3 ID : 264330527690
Option 4 ID : 264330527687
Status : Answered
Chosen Option : 2

Q.6 Mahabalipuram Monuments were built in _____ dynasty architecture.

- Ans
- ✗ 1. Chandella
 - ✓ 2. Pallava
 - ✗ 3. Pali
 - ✗ 4. Gupta

Question Type : MCQ
Question ID : 264330137065
Option 1 ID : 264330536903
Option 2 ID : 264330536904
Option 3 ID : 264330536906
Option 4 ID : 264330536905
Status : Answered
Chosen Option : 2

Q.7 V. Satyanarayana Sarma was awarded with Padma Shri in 1970 for his contributions in the field of _____ dance.

Ans ☒ 1. Kuchipudi

☐ 2. Odissi

☐ 3. Manipuri

☐ 4. Kathak

Question Type : MCQ

Question ID : 264330138656

Option 1 ID : 264330543233

Option 2 ID : 264330543234

Option 3 ID : 264330543231

Option 4 ID : 264330543232

Status : Answered

Chosen Option : 2

Q.8 In _____, at its Madras session, the Indian National Congress set up an All Parties Conference to draft a Constitution for India.

Ans ☐ 1. 1922

☐ 2. 1932

☒ 3. 1927

☐ 4. 1915

Question Type : MCQ

Question ID : 264330137076

Option 1 ID : 264330536948

Option 2 ID : 264330536947

Option 3 ID : 264330536949

Option 4 ID : 264330536950

Status : Answered

Chosen Option : 1

Q.9 According to census 2011, which Union territory has highest decadal population growth rate between 2001 - 11?

Ans ☐ 1. NCT of Delhi

☐ 2. Lakshadweep

☒ 3. Dadra & Nagar Haveli

☐ 4. Chandigarh

Question Type : MCQ

Question ID : 264330137030

Option 1 ID : 264330536764

Option 2 ID : 264330536766

Option 3 ID : 264330536765

Option 4 ID : 264330536763

Status : Answered

Chosen Option : 1

Q.10 Koneru Humpy is associated with which of the following sport?

- Ans ☒ 1. Chess
☒ 2. Boxing
☒ 3. Badminton
☒ 4. Cricket

Question Type : MCQ
 Question ID : 264330134692
 Option 1 ID : 264330527726
 Option 2 ID : 264330527725
 Option 3 ID : 264330527723
 Option 4 ID : 264330527724
 Status : Answered
 Chosen Option : 1

Q.11 Which among the following countries will host the 2024 South Asian Games?

- Ans ☒ 1. India
☒ 2. Bhutan
☒ 3. Nepal
☒ 4. Pakistan

Question Type : MCQ
 Question ID : 264330134716
 Option 1 ID : 264330527822
 Option 2 ID : 264330527820
 Option 3 ID : 264330527819
 Option 4 ID : 264330527821
 Status : Not Attempted and Marked For Review
 Chosen Option : --

Q.12 Union Agriculture Minister Narendra Singh Tomar announced in October 2022 that the central government will launch a _____ crore accelerator programme to support the productive ideas of agro businesses.

- Ans ☒ 1. Rs.450
☒ 2. Rs.500
☒ 3. Rs.300
☒ 4. Rs.350

Question Type : MCQ
 Question ID : 264330134694
 Option 1 ID : 264330527733
 Option 2 ID : 264330527734
 Option 3 ID : 264330527732
 Option 4 ID : 264330527731
 Status : Answered
 Chosen Option : 4

Q.13 'India's Struggle for Independence' is one of the notable books written by _____.

Ans ☒ 1. Sekhar Bandyopadhyay

☒ 2. R.K. Narayana

☒ 3. R.C. Majumdar

☒ 4. Bipan Chandra

Question Type : MCQ

Question ID : 264330138654

Option 1 ID : 264330543226

Option 2 ID : 264330543223

Option 3 ID : 264330543224

Option 4 ID : 264330543225

Status : Answered

Chosen Option : 4

Q.14 The Inter-State Council consists of _____ ministers of Cabinet rank in the Union Council of Ministers nominated by the Prime Minister of India.

Ans ☒ 1. six

☒ 2. two

☒ 3. ten

☒ 4. four

Question Type : MCQ

Question ID : 264330134715

Option 1 ID : 264330527816

Option 2 ID : 264330527818

Option 3 ID : 264330527815

Option 4 ID : 264330527817

Status : Answered

Chosen Option : 4

Q.15 Fundamental Duties were incorporated in Part IV-A of the Constitution by the _____ Constitutional Amendment Act, 1976 on the recommendations of the Swaran Singh Committee.

Ans ☒ 1. 42nd

☒ 2. 47th

☒ 3. 35th

☒ 4. 51st

Question Type : MCQ

Question ID : 264330134714

Option 1 ID : 264330527814

Option 2 ID : 264330527812

Option 3 ID : 264330527813

Option 4 ID : 264330527811

Status : Answered

Chosen Option : 1

Q.16 Nepal does NOT share its boundary with which of the following states in India?

- Ans
- ☐ 1. Sikkim
 - ☐ 2. Bihar
 - ☐ 3. West Bengal
 - ☒ 4. Manipur

Question Type : MCQ

Question ID : 264330137931

Option 1 ID : 264330540333

Option 2 ID : 264330540331

Option 3 ID : 264330540332

Option 4 ID : 264330540334

Status : Answered

Chosen Option : 1

Q.17 "Mission Karmayogi" programme is for _____.

- Ans
- ☐ 1. Doctors
 - ☐ 2. Women Entrepreneur
 - ☒ 3. Civil servants
 - ☐ 4. Construction workers

Question Type : MCQ

Question ID : 264330137062

Option 1 ID : 264330536893

Option 2 ID : 264330536894

Option 3 ID : 264330536892

Option 4 ID : 264330536891

Status : Answered

Chosen Option : 1

Q.18 Who among the following was awarded the Bharat Ratna in 2001 and has been credited with taking the shehnai from the marriage mandap to the concert hall?

- Ans
- ☐ 1. Ravi Shankar
 - ☐ 2. Ali Akbar Khan
 - ☐ 3. Hariprasad Chaurasia
 - ☒ 4. Bismillah Khan

Question Type : MCQ

Question ID : 264330134712

Option 1 ID : 264330527806

Option 2 ID : 264330527804

Option 3 ID : 264330527803

Option 4 ID : 264330527805

Status : Answered

Chosen Option : 4

Q.19 In 1895, Mahatma Gandhi, along with other Indians has established _____ to fight against racial discrimination.

- Ans
- ☒ 1. Dev Samaj
 - ☒ 2. Brahmo Samaj
 - ☒ 3. Natal Congress
 - ☒ 4. Sabarmati Ashram

Question Type : MCQ

Question ID : 264330138673

Option 1 ID : 264330543302

Option 2 ID : 264330543301

Option 3 ID : 264330543299

Option 4 ID : 264330543300

Status : Answered

Chosen Option : 1

Q.20 Padma Subrahmanyam is a well-known dancer of which of the following dance forms?

- Ans
- ☒ 1. Bharatnatyam
 - ☒ 2. Manipuri
 - ☒ 3. Odissi
 - ☒ 4. Kuchipudi

Question Type : MCQ

Question ID : 264330134696

Option 1 ID : 264330527739

Option 2 ID : 264330527741

Option 3 ID : 264330527742

Option 4 ID : 264330527740

Status : Answered

Chosen Option : 1

Q.21 Fern is an example of which plant group?

- Ans
- ☒ 1. Phanerogams
 - ☒ 2. Bryophyta
 - ☒ 3. Pteridophyta
 - ☒ 4. Thallophyta

Question Type : MCQ

Question ID : 264330134700

Option 1 ID : 264330527758

Option 2 ID : 264330527757

Option 3 ID : 264330527755

Option 4 ID : 264330527756

Status : Answered

Chosen Option : 4

Q.22 The ambassador who was sent to the court of Chandragupta Maurya by the Greek ruler Seleucus Nicator is _____.

- Ans
- ☐ 1. Homer
 - ☐ 2. Strabo
 - ☐ 3. Herodotus
 - ☒ 4. Megasthenes

Question Type : MCQ
 Question ID : 264330138670
 Option 1 ID : 264330543288
 Option 2 ID : 264330543287
 Option 3 ID : 264330543290
 Option 4 ID : 264330543289
 Status : Answered
 Chosen Option : 4

Q.23 Hindustan Aeronautics limited comes under which sector?

- Ans
- ☐ 1. Co-operative sector
 - ☐ 2. Private sector
 - ☐ 3. Foreign sector
 - ☒ 4. Public sector

Question Type : MCQ
 Question ID : 264330138666
 Option 1 ID : 264330543274
 Option 2 ID : 264330543271
 Option 3 ID : 264330543273
 Option 4 ID : 264330543272
 Status : Answered
 Chosen Option : 4

Q.24 Newton's first law of motion is also known as _____.

- Ans
- ☐ 1. Law of magnitude
 - ☐ 2. Law of reaction
 - ☒ 3. Law of Inertia
 - ☐ 4. Law of masses

Question Type : MCQ
 Question ID : 264330134674
 Option 1 ID : 264330527653
 Option 2 ID : 264330527654
 Option 3 ID : 264330527651
 Option 4 ID : 264330527652
 Status : Answered
 Chosen Option : 3

Q.25 Which river is the third largest in the peninsula of India and the largest river of Odisha state?

- Ans
- ☒ 1. Godavari
 - ☐ 2. Mahanadi
 - ☐ 3. Krishna
 - ☐ 4. Narmada

Question Type : MCQ
Question ID : 264330134704
Option 1 ID : 264330527771
Option 2 ID : 264330527773
Option 3 ID : 264330527774
Option 4 ID : 264330527772
Status : Answered
Chosen Option : 2

Section : English Language and Comprehension

Q.1 Select the most appropriate option to fill in the blank.

His father was killed in a _____, when the boy was nine years old.

- Ans
- ☐ 1. dwell
 - ☐ 2. drool
 - ☐ 3. dual
 - ☒ 4. duel

Question Type : MCQ
Question ID : 264330136793
Option 1 ID : 264330535873
Option 2 ID : 264330535874
Option 3 ID : 264330535871
Option 4 ID : 264330535872
Status : Answered
Chosen Option : 4

Q.2 Choose the word that can substitute the given group of words.

Something that is necessary or crucial

- Ans
- ☐ 1. Pedantic
 - ☐ 2. Trivial
 - ☒ 3. Indispensable
 - ☐ 4. Auxiliary

Question Type : MCQ
Question ID : 264330134838
Option 1 ID : 264330528289
Option 2 ID : 264330528287
Option 3 ID : 264330528290
Option 4 ID : 264330528288
Status : Answered
Chosen Option : 3

Q.3 Select the most appropriate option to fill in the blank.

Each band is known across a wide area because all residents of a given region are typically tied to one another through a large _____ of kinship and reciprocity

- Ans**
- ☒ 1. variation
 - ☒ 2. mesh
 - ☒ 3. network
 - ☒ 4. clash

Question Type : **MCQ**
 Question ID : **264330134848**
 Option 1 ID : **264330528329**
 Option 2 ID : **264330528328**
 Option 3 ID : **264330528330**
 Option 4 ID : **264330528327**
 Status : **Answered**
 Chosen Option : **3**

Q.4 Identify the segment that contains a grammatical error. If there is no error, select 'No error'

The police released a statement saying/, "This was one of the most vicious/ attack we have ever seen."

- Ans**
- ☒ 1. No error
 - ☒ 2. The police released a statement saying,
 - ☒ 3. "This was one of the most vicious
 - ☒ 4. attack we have ever seen."

Question Type : **MCQ**
 Question ID : **264330136292**
 Option 1 ID : **264330533950**
 Option 2 ID : **264330533947**
 Option 3 ID : **264330533948**
 Option 4 ID : **264330533949**
 Status : **Answered**
 Chosen Option : **3**

Q.5 Select the appropriate antonym for the underlined word.

Social justice has been one of the cherished goals of the makers of our Constitution.

- Ans**
- ☒ 1. relished
 - ☒ 2. valued
 - ☒ 3. treasured
 - ☒ 4. despised

Question Type : **MCQ**
 Question ID : **264330134842**
 Option 1 ID : **264330528304**
 Option 2 ID : **264330528305**
 Option 3 ID : **264330528306**
 Option 4 ID : **264330528303**
 Status : **Answered**
 Chosen Option : **4**

Q.6 Select the most appropriate option to substitute the bracketed segment in the given sentence. If there is no need to substitute it, select 'no substitution required'.

This looks (like one of those unwelcome social summons which call upon a man) either to be bored or to lie.

Ans ✓ 1.

like one of those unwelcome social summonses which call upon a man

✗ 2.

like one of these unwelcome social summons that call upon a man

✗ 3.

like one of those unwelcome social summon that call upon a man

✗ 4. No substitution required

Question Type : MCQ

Question ID : 264330136295

Option 1 ID : 264330533960

Option 2 ID : 264330533959

Option 3 ID : 264330533961

Option 4 ID : 264330533962

Status : Answered

Chosen Option : 1

Q.7 Improve the underlined part of the sentence. Choose 'No improvement' as an answer if the sentence is grammatically correct.

When I was eight years old, I used to played with toys.

Ans ✗ 1. No improvement

✗ 2. use to played

✗ 3. used to playing

✓ 4. used to play

Question Type : MCQ

Question ID : 264330135183

Option 1 ID : 264330529666

Option 2 ID : 264330529665

Option 3 ID : 264330529663

Option 4 ID : 264330529664

Status : Answered

Chosen Option : 4

Q.8 Choose the word that means the same as the given word.

Wage

Ans ✗ 1. Sycophant

✗ 2. Jocular

✓ 3. Emolument

✗ 4. Jackpot

Question Type : MCQ

Question ID : 264330136812

Option 1 ID : 264330535945

Option 2 ID : 264330535943

Option 3 ID : 264330535946

Option 4 ID : 264330535944

Status : Answered

Chosen Option : 3

Q.9 Select the appropriate synonym for the underlined word.

There is no need to panic, not yet.

- Ans
- ☒ 1. mock
 - ☒ 2. cheer
 - ☒ 3. fright
 - ☒ 4. block

Question Type : MCQ
 Question ID : 264330134839
 Option 1 ID : 264330528292
 Option 2 ID : 264330528294
 Option 3 ID : 264330528293
 Option 4 ID : 264330528291
 Status : Answered
 Chosen Option : 3

Q.10 Choose the incorrectly spelt word.

- Ans
- ☒ 1. Monitour
 - ☒ 2. Slope
 - ☒ 3. Constant
 - ☒ 4. Chemical

Question Type : MCQ
 Question ID : 264330134845
 Option 1 ID : 264330528317
 Option 2 ID : 264330528316
 Option 3 ID : 264330528318
 Option 4 ID : 264330528315
 Status : Answered
 Chosen Option : 1

Q.11 A sentence has been given with a blank to be filled with an appropriate option. Choose the correct alternative.

Potato milk is _____ another option for those wanting an alternative to cow's milk.

- Ans
- ☒ 1. though
 - ☒ 2. yet
 - ☒ 3. so
 - ☒ 4. but

Question Type : MCQ
 Question ID : 264330136828
 Option 1 ID : 264330536010
 Option 2 ID : 264330536007
 Option 3 ID : 264330536009
 Option 4 ID : 264330536008
 Status : Answered
 Chosen Option : 2

Q.12 In the following question, out of the given four alternatives, select the alternative which best expresses the meaning of the Idiom/Phrase.

To make one's mouth water

- Ans**
- ☒ 1. To make faces
 - ☒ 2. To tremble with fear
 - ☒ 3. To feel no pain
 - ☒ 4. Feel hungry

Question Type : **MCQ**
 Question ID : **264330134817**
 Option 1 ID : **264330528207**
 Option 2 ID : **264330528208**
 Option 3 ID : **264330528209**
 Option 4 ID : **264330528210**
 Status : **Answered**
 Chosen Option : **4**

Q.13 Select the most appropriate antonym of the given word.

Misunderstand

- Ans**
- ☒ 1. Impossible
 - ☒ 2. Comprehend
 - ☒ 3. Delayed
 - ☒ 4. Sluggish

Question Type : **MCQ**
 Question ID : **264330135785**
 Option 1 ID : **264330532018**
 Option 2 ID : **264330532017**
 Option 3 ID : **264330532016**
 Option 4 ID : **264330532015**
 Status : **Answered**
 Chosen Option : **2**

Q.14 Choose the word that can substitute the given group of words.

A sound that cannot be heard

- Ans**
- ☒ 1. Inaudible
 - ☒ 2. Audacious
 - ☒ 3. Autonomous
 - ☒ 4. Delible

Question Type : **MCQ**
 Question ID : **264330134811**
 Option 1 ID : **264330528186**
 Option 2 ID : **264330528183**
 Option 3 ID : **264330528184**
 Option 4 ID : **264330528185**
 Status : **Answered**
 Chosen Option : **1**

Q.15 Choose the sentence with no spelling error.

- Ans ☒ 1. And he wanted to sea him sufer.
☒ 2. And he wanted to see him sufer.
☒ 3. And he wanted to see him suffer.
☒ 4. And he wanted to see him suffer.

Question Type : MCQ

Question ID : 264330136792

Option 1 ID : 264330535868

Option 2 ID : 264330535870

Option 3 ID : 264330535869

Option 4 ID : 264330535867

Status : Answered

Chosen Option : 3

Q.16 Improve the underlined part of the sentence. Choose 'No improvement' as an answer if the sentence is grammatically correct.
After the concert, his voice has hoarse from cheering.

- Ans ☒ 1. No improvement
☒ 2. voice was
☒ 3. voiced was
☒ 4. voice were

Question Type : MCQ

Question ID : 264330134479

Option 1 ID : 264330526886

Option 2 ID : 264330526884

Option 3 ID : 264330526883

Option 4 ID : 264330526885

Status : Answered

Chosen Option : 2

Q.17 Find the part of the given sentence that has an error in it. If there is no error, choose 'No error'.

Why is your friend giving me weird looks?

- Ans ☒ 1. weird looks?
☒ 2. giving me
☒ 3. Why is your friend
☒ 4. No error

Question Type : MCQ

Question ID : 264330134719

Option 1 ID : 264330527833

Option 2 ID : 264330527832

Option 3 ID : 264330527831

Option 4 ID : 264330527834

Status : Answered

Chosen Option : 1

Q.18 A sentence has been given with a blank to be filled with an appropriate option. Choose the correct alternative.

She had no _____ of telling him the truth.

- Ans**
- ☒ 1. intending
 - ☒ 2. intended
 - ☒ 3. intents
 - ☒ 4. intention

Question Type : **MCQ**

Question ID : **264330134829**

Option 1 ID : **264330528258**

Option 2 ID : **264330528255**

Option 3 ID : **264330528257**

Option 4 ID : **264330528256**

Status : **Answered**

Chosen Option : **4**

Q.19 Find the part of the given sentence that has an error in it. If there is no error, choose 'No error'.

Soap removes traces of pesticides and heavy metals that hand sanitizers can left behind.

- Ans**
- ☒ 1. Soap removes traces of pesticides
 - ☒ 2. and heavy metals that hand
 - ☒ 3. sanitizers can left behind.
 - ☒ 4. No error

Question Type : **MCQ**

Question ID : **264330134825**

Option 1 ID : **264330528239**

Option 2 ID : **264330528240**

Option 3 ID : **264330528241**

Option 4 ID : **264330528242**

Status : **Answered**

Chosen Option : **3**

Q.20 In the following question, out of the given four alternatives, select the alternative which best expresses the meaning of the Idiom/Phrase.

To turn over a new leaf

- Ans**
- ☒ 1. To have an inclination towards gardening
 - ☒ 2. To make a fresh start
 - ☒ 3. To turn your back on someone
 - ☒ 4. To reply brazenly

Question Type : **MCQ**

Question ID : **264330134844**

Option 1 ID : **264330528312**

Option 2 ID : **264330528311**

Option 3 ID : **264330528313**

Option 4 ID : **264330528314**

Status : **Answered**

Chosen Option : **2**

Comprehension:

In the following passage some words have been deleted. Fill in the blanks with the help of the alternatives given. Select the most appropriate option for each number.

To mark the 25th anniversary of the run, (1) _____ Royal Canadian Mint unveiled a one-dollar commemorative circulation coin (2) _____ Monday on the campus of Simon Fraser University. Fox was (3) _____ undergraduate student and basketball player at SFU when a malignant tumour was discovered in his right leg in 1977. It resulted in (4) _____. A bronze statue of Fox, one of many such tributes across Canada, looks over the academic quadrangle of the university, just a short stroll from the theatre where Monday's (5) _____ was held.

SubQuestion No : 21

Q.21 Select the most appropriate option to fill in the blank No. 1

- Ans
- ☒ 1. a
 - ☒ 2. in
 - ☒ 3. of
 - ☒ 4. the

Question Type : MCQ

Question ID : 264330135776

Option 1 ID : 264330531979

Option 2 ID : 264330531982

Option 3 ID : 264330531981

Option 4 ID : 264330531980

Status : Answered

Chosen Option : 4

Comprehension:

In the following passage some words have been deleted. Fill in the blanks with the help of the alternatives given. Select the most appropriate option for each number.

To mark the 25th anniversary of the run, (1) _____ Royal Canadian Mint unveiled a one-dollar commemorative circulation coin (2) _____ Monday on the campus of Simon Fraser University. Fox was (3) _____ undergraduate student and basketball player at SFU when a malignant tumour was discovered in his right leg in 1977. It resulted in (4) _____. A bronze statue of Fox, one of many such tributes across Canada, looks over the academic quadrangle of the university, just a short stroll from the theatre where Monday's (5) _____ was held.

SubQuestion No : 22

Q.22 Select the most appropriate option to fill in the blank No. 2.

- Ans
- ☒ 1. at
 - ☒ 2. through
 - ☒ 3. on
 - ☒ 4. over

Question Type : MCQ

Question ID : 264330135777

Option 1 ID : 264330531986

Option 2 ID : 264330531983

Option 3 ID : 264330531985

Option 4 ID : 264330531984

Status : Answered

Chosen Option : 3

Comprehension:

In the following passage some words have been deleted. Fill in the blanks with the help of the alternatives given. Select the most appropriate option for each number.

To mark the 25th anniversary of the run, (1) _____ Royal Canadian Mint unveiled a one-dollar commemorative circulation coin (2) _____ Monday on the campus of Simon Fraser University. Fox was (3) _____ undergraduate student and basketball player at SFU when a malignant tumour was discovered in his right leg in 1977. It resulted in (4) _____. A bronze statue of Fox, one of many such tributes across Canada, looks over the academic quadrangle of the university, just a short stroll from the theatre where Monday's (5) _____ was held.

SubQuestion No : 23

Q.23 Select the most appropriate option to fill in the blank No. 3.

- Ans
- ☒ 1. their
 - ☒ 2. a
 - ☒ 3. an
 - ☒ 4. the

Question Type : MCQ

Question ID : 264330135778

Option 1 ID : 264330531987

Option 2 ID : 264330531988

Option 3 ID : 264330531989

Option 4 ID : 264330531990

Status : Answered

Chosen Option : 2

Comprehension:

In the following passage some words have been deleted. Fill in the blanks with the help of the alternatives given. Select the most appropriate option for each number.

To mark the 25th anniversary of the run, (1) _____ Royal Canadian Mint unveiled a one-dollar commemorative circulation coin (2) _____ Monday on the campus of Simon Fraser University. Fox was (3) _____ undergraduate student and basketball player at SFU when a malignant tumour was discovered in his right leg in 1977. It resulted in (4) _____. A bronze statue of Fox, one of many such tributes across Canada, looks over the academic quadrangle of the university, just a short stroll from the theatre where Monday's (5) _____ was held.

SubQuestion No : 24

Q.24 Select the most appropriate option to fill in the blank No. 4.

- Ans
- ☒ 1. fragmentation
 - ☒ 2. amputation
 - ☒ 3. vasodilation
 - ☒ 4. implantation

Question Type : MCQ

Question ID : 264330135779

Option 1 ID : 264330531992

Option 2 ID : 264330531994

Option 3 ID : 264330531993

Option 4 ID : 264330531991

Status : Answered

Chosen Option : 2





Comprehension:

In the following passage some words have been deleted. Fill in the blanks with the help of the alternatives given. Select the most appropriate option for each number.

To mark the 25th anniversary of the run, (1) _____ Royal Canadian Mint unveiled a one-dollar commemorative circulation coin (2) _____ Monday on the campus of Simon Fraser University. Fox was (3) _____ undergraduate student and basketball player at SFU when a malignant tumour was discovered in his right leg in 1977. It resulted in (4) _____. A bronze statue of Fox, one of many such tributes across Canada, looks over the academic quadrangle of the university, just a short stroll from the theatre where Monday's (5) _____ was held.

SubQuestion No : 25

Q.25 Select the most appropriate option to fill in the blank No. 5.

- Ans  1. unveiling
-  2. countervailing
-  3. reconciling
-  4. veiling

Question Type : MCQ

Question ID : 264330135780

Option 1 ID : 264330531996

Option 2 ID : 264330531997

Option 3 ID : 264330531998

Option 4 ID : 264330531995

Status : Answered

Chosen Option : 1

