

Multi Tasking Non Technical Staff and Havaladar CBIC and CBN Examination 2022

Roll Number	
Candidate Name	
Venue Name	Markandey Mahadev Infotech Pvt Ltd
Exam Date	08/05/2023
Exam Time	12:00 PM - 2:00 PM
Subject	MTS Non Tech Havaladar CBIC and CBN Examination 2022

Section : Numerical and Mathematical Ability

Q.1 What is the compounded ratio of (2 : 5), (5 : 11) and (33 : 8)?

- Ans**
- ✓ 1. 3 : 4
 - ✗ 2. 2 : 11
 - ✗ 3. 33 : 5
 - ✗ 4. 2 : 5

Question Type : **MCQ**
 Question ID : **264330133589**
 Option 1 ID : **264330523379**
 Option 2 ID : **264330523381**
 Option 3 ID : **264330523382**
 Option 4 ID : **264330523380**
 Status : **Answered**
 Chosen Option : 1

Q.2 Cost price of an article is Rs.350. If the profit percentage is 35 percent, then what is the value of profit?

- Ans**
- ✗ 1. Rs.145.6
 - ✓ 2. Rs.122.5
 - ✗ 3. Rs.135.6
 - ✗ 4. Rs.112.8

Question Type : **MCQ**
 Question ID : **264330135049**
 Option 1 ID : **264330529132**
 Option 2 ID : **264330529131**
 Option 3 ID : **264330529134**
 Option 4 ID : **264330529133**
 Status : **Answered**
 Chosen Option : 2

Test Prime

**ALL EXAMS,
ONE SUBSCRIPTION**



70,000+
Mock Tests



**Personalised
Report Card**



**Unlimited
Re-Attempt**



600+
Exam Covered



**Previous Year
Papers**



**500%
Refund**



ATTEMPT FREE MOCK NOW

Q.3 Rani can do a work alone in 10 days, Priya can do the same work alone in 12 days and Guddu can do the same work alone in 15 days. If they do that work together and they are paid Rs. 6000, then what is the share of Priya?

- Ans**
- ☒ 1. Rs.2500
 - ☒ 2. Rs.1600
 - ☒ 3. Rs.1800
 - ☒ 4. Rs.2000

Question Type : **MCQ**

Question ID : **264330137174**

Option 1 ID : **264330537339**

Option 2 ID : **264330537342**

Option 3 ID : **264330537341**

Option 4 ID : **264330537340**

Status : **Answered**

Chosen Option : **4**

Q.4 A car travels with the speed of 40 km/hr for first hour and 60 km/hr for next hour. What will be the average speed of the car?

- Ans**
- ☒ 1. 60 km/hr
 - ☒ 2. 40 km/hr
 - ☒ 3. 50 km/hr
 - ☒ 4. 45 km/hr

Question Type : **MCQ**

Question ID : **264330141042**

Option 1 ID : **264330552517**

Option 2 ID : **264330552515**

Option 3 ID : **264330552516**

Option 4 ID : **264330552518**

Status : **Answered**

Chosen Option : **3**

Q.5 Find $\frac{1}{21}$ th of the volume of a hemisphere whose radius is 4.2 m.

- Ans**
- ☒ 1. 6.6 m^3
 - ☒ 2. 7.3 m^3
 - ☒ 3. 8.2 m^3
 - ☒ 4. 7.1 m^3

Question Type : **MCQ**

Question ID : **264330135410**

Option 1 ID : **264330530547**

Option 2 ID : **264330530548**

Option 3 ID : **264330530549**

Option 4 ID : **264330530550**

Status : **Answered**

Chosen Option : **1**

Q.6 सोहन समान दूरी की चार यात्राएँ करता है। पहली यात्रा में उसकी चाल 240 km/hr थी और बाद की प्रत्येक यात्रा में उसकी चाल पिछली यात्रा की चाल से आधी थी। इन चारों यात्राओं में सोहन की औसत चाल क्या है?

- Ans
- ☒ 1. 50 km/hr
 - ☒ 2. 64 km/hr
 - ☒ 3. 60 km/hr
 - ☒ 4. 52 km/hr

Question Type : MCQ

Question ID : 264330137134

Option 1 ID : 264330537182

Option 2 ID : 264330537180

Option 3 ID : 264330537179

Option 4 ID : 264330537181

Status : Answered

Chosen Option : 2

Q.7 Two cubes each of edge 9 cm are joined to form a single cuboid. What is the total surface area of the cuboid formed?

- Ans
- ☒ 1. 775 cm²
 - ☒ 2. 810 cm²
 - ☒ 3. 990 cm²
 - ☒ 4. 1024 cm²

Question Type : MCQ

Question ID : 264330137189

Option 1 ID : 264330537399

Option 2 ID : 264330537401

Option 3 ID : 264330537402

Option 4 ID : 264330537400

Status : Answered

Chosen Option : 2

Q.8 A single discount equivalent to the series of discounts 15%, 10% and 5% is equal to:

- Ans
- ☒ 1. 26.5%
 - ☒ 2. 31.5%
 - ☒ 3. 32%
 - ☒ 4. 27.325%

Question Type : MCQ

Question ID : 264330133588

Option 1 ID : 264330523378

Option 2 ID : 264330523375

Option 3 ID : 264330523376

Option 4 ID : 264330523377

Status : Answered

Chosen Option : 4

Q.9 Kabir climb up a hill at a speed of 3 miles per hour and comes down at 5 miles per hour. If total time taken for the total journey is 10 hours, then what was the distance between hill top and foothills?

- Ans**
- ☒ 1. 3.75 miles
 - ☒ 2. 18.75 miles
 - ☒ 3. 37.5 miles
 - ☒ 4. 20.5 miles

Question Type : **MCQ**
 Question ID : **264330133593**
 Option 1 ID : **264330523397**
 Option 2 ID : **264330523396**
 Option 3 ID : **264330523395**
 Option 4 ID : **264330523398**
 Status : **Answered**
 Chosen Option : **4**

Q.10 The average of five consecutive numbers is 53. What is the biggest of these numbers?

- Ans**
- ☒ 1. 52
 - ☒ 2. 55
 - ☒ 3. 53
 - ☒ 4. 54

Question Type : **MCQ**
 Question ID : **264330133583**
 Option 1 ID : **264330523355**
 Option 2 ID : **264330523358**
 Option 3 ID : **264330523356**
 Option 4 ID : **264330523357**
 Status : **Answered**
 Chosen Option : **2**

Q.11 What will be the simple interest on a principal of Rs. 2400 for 6 years at the rate of 8 percent per annum?

- Ans**
- ☒ 1. Rs. 1082
 - ☒ 2. Rs. 972
 - ☒ 3. Rs. 1232
 - ☒ 4. Rs. 1152

Question Type : **MCQ**
 Question ID : **264330137884**
 Option 1 ID : **264330540144**
 Option 2 ID : **264330540146**
 Option 3 ID : **264330540145**
 Option 4 ID : **264330540143**
 Status : **Answered**
 Chosen Option : **4**

Q.12 The table given below shows the number of students in 6 different schools.

Schools	Students
A	120
B	60
C	70
D	80
E	30
F	50

The number of students in school A is what percentage of number of students in school F?

- Ans**
- ☒ 1. 41.66 percent
 - ☒ 2. 200 percent
 - ☒ 3. 240 percent
 - ☒ 4. 120 percent

Question Type : **MCQ**

Question ID : **264330139094**

Option 1 ID : **264330544986**

Option 2 ID : **264330544983**

Option 3 ID : **264330544984**

Option 4 ID : **264330544985**

Status : **Answered**

Chosen Option : **3**

Q.13 Suresh alone can do a work in 10 days working 1 hour a day. Shalu alone can do the same work in 2 days working 5 hours a day. How many hours do they need to work together in a day to complete the same work in 10 days?

- Ans**
- ☒ 1. 1.5 hours
 - ☒ 2. 0.5 hours
 - ☒ 3. 1 hour
 - ☒ 4. 2 hours

Question Type : **MCQ**

Question ID : **264330139077**

Option 1 ID : **264330544915**

Option 2 ID : **264330544917**

Option 3 ID : **264330544918**

Option 4 ID : **264330544916**

Status : **Answered**

Chosen Option : **2**

Q.14 What is the value of $1.65 \times 1.65 \times 1.65 + 0.35 \times 0.35 \times 0.35 + 3.465$?

- Ans ☒ 1. 8
☒ 2. 7.5
☒ 3. 4
☒ 4. 5.5

Question Type : MCQ
 Question ID : 264330139093
 Option 1 ID : 264330544980
 Option 2 ID : 264330544981
 Option 3 ID : 264330544979
 Option 4 ID : 264330544982
 Status : Answered
 Chosen Option : 2

Q.15 A dishonest shopkeeper sells sugar at a rate of Rs.45 per kg. The cost price of the sugar is Rs.40 per kg. Even after doing this, he tries to increase his profit by removing 100 gm from each packet of 1 kg. What is the gain percent of the shopkeeper?

- Ans ☒ 1. 30%
☒ 2. 35%
☒ 3. 20%
☒ 4. 25%

Question Type : MCQ
 Question ID : 264330133587
 Option 1 ID : 264330523373
 Option 2 ID : 264330523374
 Option 3 ID : 264330523371
 Option 4 ID : 264330523372
 Status : Answered
 Chosen Option : 4

Q.16 840 is what percentage of 1500?

- Ans ☒ 1. 64 percent
☒ 2. 56 percent
☒ 3. 62 percent
☒ 4. 57 percent

Question Type : MCQ
 Question ID : 264330137879
 Option 1 ID : 264330540124
 Option 2 ID : 264330540126
 Option 3 ID : 264330540125
 Option 4 ID : 264330540123
 Status : Answered
 Chosen Option : 2

Q.17 If 540 kg of grass would feed 100 cows for 9 days, then for how many days would 900 kg of grass feed 50 cows?

- Ans
- ☒ 1. 50 days
 - ☒ 2. 10 days
 - ☒ 3. 20 days
 - ☒ 4. 30 days

Question Type : MCQ

Question ID : 264330133590

Option 1 ID : 264330523383

Option 2 ID : 264330523385

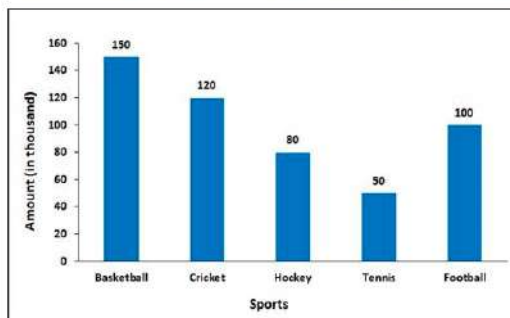
Option 3 ID : 264330523386

Option 4 ID : 264330523384

Status : Answered

Chosen Option : 4

Q.18 The following bar graph shows the amount of money spent on various sports by a school administration in a particular year. The amount spent on Hockey and Football is what percent of the amount spent on Basketball and Tennis?



- Ans
- ☒ 1. 20%
 - ☒ 2. 70%
 - ☒ 3. 90%
 - ☒ 4. 50%

Question Type : MCQ

Question ID : 264330133597

Option 1 ID : 264330523411

Option 2 ID : 264330523413

Option 3 ID : 264330523414

Option 4 ID : 264330523412

Status : Answered

Chosen Option : 3

Q.19 The value of $\frac{1}{5}$ of $30 - (\frac{1}{4})$ of $20 + 1$ is:

- Ans
- ☒ 1. 0
 - ☒ 2. 12
 - ☒ 3. 2
 - ☒ 4. 6

Question Type : MCQ

Question ID : 264330133581

Option 1 ID : 264330523349

Option 2 ID : 264330523347

Option 3 ID : 264330523350

Option 4 ID : 264330523348

Status : Answered

Chosen Option : 3

Q.20 The product of two co-prime numbers is 483. Find the Least Common Multiple of both numbers.

Ans ☒ 1. 483

☐ 2. 21

☐ 3. 1

☐ 4. 23

Question Type : **MCQ**

Question ID : **264330138370**

Option 1 ID : **264330542087**

Option 2 ID : **264330542089**

Option 3 ID : **264330542088**

Option 4 ID : **264330542090**

Status : **Answered**

Chosen Option : **3**

Section : **Reasoning Ability and Problem Solving**

Q.1 In a certain code language, 'HEG' is coded as '840', 'JFD' is coded as '720'. What is the code for 'JDK' in that code language?

Ans ☐ 1. 1380

☒ 2. 1320

☐ 3. 1280

☐ 4. 1400

Question Type : **MCQ**

Question ID : **264330137093**

Option 1 ID : **264330537016**

Option 2 ID : **264330537018**

Option 3 ID : **264330537017**

Option 4 ID : **264330537015**

Status : **Answered**

Chosen Option : **2**

Q.2 Select the option that is related to the third number in the same way as the second number is related to the first number.
435 : 87 :: 285 : ?

Ans ☒ 1. 57

☐ 2. 59

☐ 3. 56

☐ 4. 58

Question Type : **MCQ**

Question ID : **264330137801**

Option 1 ID : **264330539812**

Option 2 ID : **264330539814**

Option 3 ID : **264330539813**

Option 4 ID : **264330539811**

Status : **Answered**

Chosen Option : **1**

Q.3 Words given on the left side of (::) are related with each other by some Logic/Rule/Relation. Select the missing word/word pair on the right side of (::) from the given alternatives based on the same Logic/Rule/Relation.

Watt : Power :: Ohm : ?

- Ans**
- ☒ 1. Electrical Resistance
 - ☐ 2. Current
 - ☐ 3. Volume
 - ☐ 4. Force

Question Type : **MCQ**
 Question ID : **264330137087**
 Option 1 ID : **264330536991**
 Option 2 ID : **264330536992**
 Option 3 ID : **264330536993**
 Option 4 ID : **264330536994**
 Status : **Answered**
 Chosen Option : **1**

Q.4 In a certain code language, 'READER' is coded as 'UHGDHU'. What is the code for 'SENIOR' in that code language?

- Ans**
- ☐ 1. URLQIV
 - ☐ 2. URMQHV
 - ☐ 3. URLQHW
 - ☒ 4. URLQHV

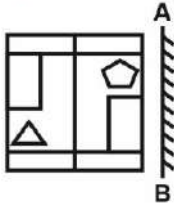
Question Type : **MCQ**
 Question ID : **264330137371**
 Option 1 ID : **264330538113**
 Option 2 ID : **264330538112**
 Option 3 ID : **264330538111**
 Option 4 ID : **264330538114**
 Status : **Answered**
 Chosen Option : **4**

Q.5 Six friends Pawan, Kanta, Rishab, Subham, Mayank and Vikram are sitting in a circle facing the centre. Pawan is to the immediate left of Vikram. Rishab is 4th to the right of Pawan. Only Mayank sits between Pawan and Rishab. Subham does not sit adjacent to Vikram. Who sits to the immediate right of Subham?

- Ans**
- ☐ 1. Kanta
 - ☐ 2. Mayank
 - ☐ 3. Pawan
 - ☒ 4. Rishab

Question Type : **MCQ**
 Question ID : **264330133327**
 Option 1 ID : **264330522344**
 Option 2 ID : **264330522346**
 Option 3 ID : **264330522345**
 Option 4 ID : **264330522343**
 Status : **Answered**
 Chosen Option : **4**

Q.6 If a mirror is placed on the line AB, then out of the option figures which figure will be the right image of the question figure?



Ans

✗ 1.



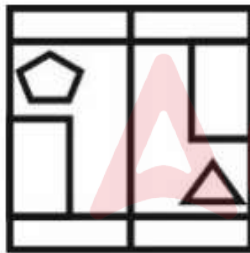
✗ 2.



✗ 3.



✓ 4.



Question Type : MCQ

Question ID : 264330138869

Option 1 ID : 264330544086

Option 2 ID : 264330544083

Option 3 ID : 264330544084

Option 4 ID : 264330544085

Status : Answered

Chosen Option : 4

Q.7 Select the option that is related to the third letter cluster in the same way as the second letter cluster is related to the first letter cluster.

MNO : RST :: GHI : ?

- Ans**
- ✓ 1. LMN
 - ✗ 2. LOM
 - ✗ 3. MNL
 - ✗ 4. LNO

Question Type : MCQ

Question ID : 264330133321

Option 1 ID : 264330522319

Option 2 ID : 264330522321

Option 3 ID : 264330522320

Option 4 ID : 264330522322

Status : Answered

Chosen Option : 1

Q.8 Two Statements are given followed by two conclusions numbered I and II. Assuming the statements to be true, even if they seem to be at variance with commonly known facts, decide which of the conclusions logically follow(s) from the statements.

Statements:

All bottles are black.

Some black are white.

Conclusions:

I. All blacks are bottles.

II. Some blacks are not white.

- Ans**
- ✗ 1. Only conclusion I follows
 - ✗ 2. Both conclusions I and II follow
 - ✓ 3. Neither conclusion I nor II follows
 - ✗ 4. Only conclusion II follows

Question Type : MCQ

Question ID : 264330133329

Option 1 ID : 264330522351

Option 2 ID : 264330522353

Option 3 ID : 264330522354

Option 4 ID : 264330522352

Status : Answered

Chosen Option : 4

Q.9 Which of the following numbers will replace the question mark (?) in the given series?

68, 62, 50, 32, 8, -22, ?

- Ans**
- ✗ 1. -75
 - ✓ 2. -58
 - ✗ 3. -53
 - ✗ 4. 58

Question Type : MCQ

Question ID : 264330137799

Option 1 ID : 264330539804

Option 2 ID : 264330539803

Option 3 ID : 264330539806

Option 4 ID : 264330539805

Status : Answered

Chosen Option : 2

Q.10 Which of the following numbers will replace the question mark (?) in the given series?

55, 42, 31, 22, 15, 10,?

Ans ☒ 1. 7

☐ 2. 5

☐ 3. 3

☐ 4. 6

Question Type : MCQ

Question ID : 264330133332

Option 1 ID : 264330522364

Option 2 ID : 264330522366

Option 3 ID : 264330522365

Option 4 ID : 264330522363

Status : Answered

Chosen Option : 1

Q.11 Study the given pattern carefully and select the number that can replace the question mark (?) in it.

First row- 80, 40, 160

Second row- 30, 15, 60

Third row- 24, 12,?

Ans ☐ 1. 65

☒ 2. 48

☐ 3. 38

☐ 4. 54

Question Type : MCQ

Question ID : 264330133334

Option 1 ID : 264330522373

Option 2 ID : 264330522372

Option 3 ID : 264330522371

Option 4 ID : 264330522374

Status : Answered

Chosen Option : 2

Q.12 Which of the following letter will replace the question mark (?) in the given series?

d, f, h, j, l, n, p, r,?

Ans ☐ 1. s

☒ 2. t

☐ 3. u

☐ 4. v

Question Type : MCQ

Question ID : 264330133320

Option 1 ID : 264330522315

Option 2 ID : 264330522316

Option 3 ID : 264330522317

Option 4 ID : 264330522318

Status : Answered

Chosen Option : 2

Q.13 Select the option figure in which the given figure is embedded. (rotation is NOT allowed)

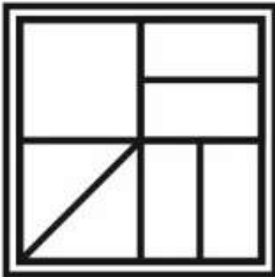


Ans

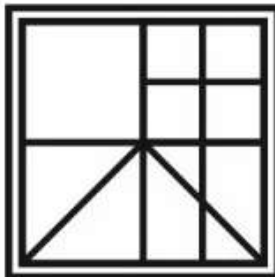
✗ 1.



✗ 2.



✓ 3.



✗ 4.



Question Type : MCQ

Question ID : 264330138868

Option 1 ID : 264330544082

Option 2 ID : 264330544079

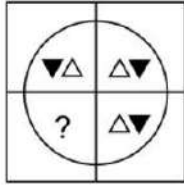
Option 3 ID : 264330544080

Option 4 ID : 264330544081

Status : Answered

Chosen Option : 3

Q.14 Select the option figure that will replace the question mark (?) in the figure given below to complete the pattern.
(rotation is not allowed)

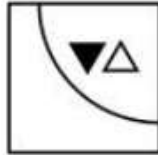


Ans

✗ 1.



✓ 2.



✗ 3.



✗ 4.



Question Type : MCQ

Question ID : 264330133339

Option 1 ID : 264330522393

Option 2 ID : 264330522394

Option 3 ID : 264330522392

Option 4 ID : 264330522391

Status : Answered

Chosen Option : 2

Q.15 Words given on the left side of (::) are related with each other by some Logic/Rule/Relation. Select the missing word/word pair on the right side of (::) from the given alternatives based on the same Logic/Rule/Relation.

Gujarat : Gandhinagar :: Rajasthan : ?

Ans

✗ 1. Chandigarh

✗ 2. Jodhpur

✗ 3. Udaipur

✓ 4. Jaipur

Question Type : MCQ

Question ID : 264330138478

Option 1 ID : 264330542522

Option 2 ID : 264330542521

Option 3 ID : 264330542520

Option 4 ID : 264330542519

Status : Answered

Chosen Option : 4

Q.16 In a certain code language, 'SNOW' is coded as '21, 16, 17, 25', 'RIDE' is coded as '20, 11, 6, 7'. What is the code for 'TAPE' in that code language?

- Ans**
- ☒ 1. 22, 3, 17, 7
 - ☒ 2. 22, 3, 18, 6
 - ☒ 3. 20, 3, 18, 7
 - ☒ 4. 22, 3, 18, 7

Question Type : **MCQ**

Question ID : **264330138524**

Option 1 ID : **264330542703**

Option 2 ID : **264330542706**

Option 3 ID : **264330542705**

Option 4 ID : **264330542704**

Status : **Answered**

Chosen Option : **4**

Q.17 Select the option that is related to the third word in the same way as the second word is related to the first word.

Oology : Eggs :: Mycology :?

- Ans**
- ☒ 1. Fungi
 - ☒ 2. Bacteria
 - ☒ 3. Virus
 - ☒ 4. Protozoa

Question Type : **MCQ**

Question ID : **264330133322**

Option 1 ID : **264330522326**

Option 2 ID : **264330522323**

Option 3 ID : **264330522325**

Option 4 ID : **264330522324**

Status : **Answered**

Chosen Option : **1**

Q.18 अलग-अलग कद वाले सात मित्र हारून, इमान, जेसन, कीर्ति, लिसा, मोहन और नीति अपने कद के अवरोही क्रम में खड़े हैं। सबसे ऊँचा व्यक्ति पंक्ति में सबसे आगे और सबसे छोटा व्यक्ति पंक्ति में सबसे आखिर में खड़ा है। हारून, लिसा के ठीक पीछे खड़ा है, जो कीर्ति के ठीक पीछे खड़ी है। मोहन और नीति के बीच सिर्फ दो व्यक्ति खड़े हैं। इमान आगे से दूसरे स्थान पर खड़ा है। मोहन सबसे ऊँचा नहीं है। पंक्ति में सबसे आगे कौन खड़ा है?

- Ans**
- ☒ 1. कीर्ति
 - ☒ 2. नीति
 - ☒ 3. मोहन
 - ☒ 4. जेसन

Question Type : **MCQ**

Question ID : **264330133328**

Option 1 ID : **264330522348**

Option 2 ID : **264330522349**

Option 3 ID : **264330522347**

Option 4 ID : **264330522350**

Status : **Answered**

Chosen Option : **2**

Q.19 Five men M, N, O, P, and Q are sitting in a row facing north. M is sitting at one end and O is on the other end. Q sits to the immediate left of M and to the immediate right of P. Who sits third to the right of O?

- Ans**
- ✓ 1. Q
 - ✗ 2. M
 - ✗ 3. P
 - ✗ 4. N

Question Type : **MCQ**
 Question ID : **264330133326**
 Option 1 ID : **264330522342**
 Option 2 ID : **264330522339**
 Option 3 ID : **264330522341**
 Option 4 ID : **264330522340**
 Status : **Answered**
 Chosen Option : **1**

Q.20 Two Statements are given followed by two conclusions numbered I and II. Assuming the statements to be true, even if they seem to be at variance with commonly known facts, decide which of the conclusions logically follow(s) from the statements.

Statements:

All tables are strong.

No strong is weak.

Conclusions:

I. No tables are weak.

II. Some weak are tables.

- Ans**
- ✗ 1. Neither conclusion I nor II follows
 - ✗ 2. Only conclusion II follows
 - ✗ 3. Both conclusions I and II follow
 - ✓ 4. Only conclusion I follows

Question Type : **MCQ**
 Question ID : **264330133330**
 Option 1 ID : **264330522358**
 Option 2 ID : **264330522356**
 Option 3 ID : **264330522357**
 Option 4 ID : **264330522355**
 Status : **Answered**
 Chosen Option : **4**

Section : **General Awareness**

Q.1 Which among the following dance forms of India is associated with Rajasthan?

- Ans**
- ✓ 1. Kalbelia
 - ✗ 2. Bharatanatyam
 - ✗ 3. Odissi
 - ✗ 4. Kathakali

Question Type : **MCQ**
 Question ID : **264330133650**
 Option 1 ID : **264330523626**
 Option 2 ID : **264330523625**
 Option 3 ID : **264330523624**
 Option 4 ID : **264330523623**
 Status : **Answered**
 Chosen Option : **1**

Q.2 Bhagat singh and B.K. Dutt threw bomb in the central Legislative Assembly on _____.

- Ans
- ☒ 1. 8 April 1930
 - ☒ 2. 10 April 1929
 - ☒ 3. 8 April 1929
 - ☒ 4. 10 April 1930

Question Type : MCQ
 Question ID : 264330138945
 Option 1 ID : 264330544388
 Option 2 ID : 264330544389
 Option 3 ID : 264330544387
 Option 4 ID : 264330544390
 Status : Answered
 Chosen Option : 3

Q.3 'Freedom in Exile' is the autobiographical book of _____.

- Ans
- ☒ 1. Jawaharlal Nehru
 - ☒ 2. Mahatma Gandhi
 - ☒ 3. J.B. Kriplani
 - ☒ 4. Dalai Lama

Question Type : MCQ
 Question ID : 264330137392
 Option 1 ID : 264330538196
 Option 2 ID : 264330538198
 Option 3 ID : 264330538197
 Option 4 ID : 264330538195
 Status : Answered
 Chosen Option : 4

Q.4 Which of the following is termed as "sericulture"?

- Ans
- ☒ 1. Cultivation of grapes
 - ☒ 2. Growing of fruits
 - ☒ 3. Breeding of fish
 - ☒ 4. Commercial rearing of silk worms

Question Type : MCQ
 Question ID : 264330137404
 Option 1 ID : 264330538243
 Option 2 ID : 264330538246
 Option 3 ID : 264330538245
 Option 4 ID : 264330538244
 Status : Answered
 Chosen Option : 4

Q.5 According to 2011 Census, among the following which state has the lowest sex ratio?

- Ans ☒ 1. Haryana
☒ 2. Bihar
☒ 3. Sikkim
☒ 4. Jharkhand

Question Type : MCQ
 Question ID : 264330137072
 Option 1 ID : 264330536932
 Option 2 ID : 264330536933
 Option 3 ID : 264330536931
 Option 4 ID : 264330536934
 Status : Answered
 Chosen Option : 1

Q.6 At least how old must be an Indian citizen to be a member of Rajya Sabha?

- Ans ☒ 1. 30 years
☒ 2. 25 years
☒ 3. 35 years
☒ 4. 20 years

Question Type : MCQ
 Question ID : 264330133669
 Option 1 ID : 264330523701
 Option 2 ID : 264330523700
 Option 3 ID : 264330523702
 Option 4 ID : 264330523699
 Status : Answered
 Chosen Option : 1

Q.7 उत्पादित वस्तुओं और सेवाओं के वार्षिक मूल्य की गणना करने के लिए उपयोग की जाने वाली उत्पाद विधि को _____ भी कहा जाता है।

- Ans ☒ 1. मूल्यवर्धित विधि
☒ 2. आय विधि
☒ 3. व्यय विधि
☒ 4. मूल्यहास विधि

Question Type : MCQ
 Question ID : 264330137397
 Option 1 ID : 264330538217
 Option 2 ID : 264330538218
 Option 3 ID : 264330538216
 Option 4 ID : 264330538215
 Status : Answered
 Chosen Option : 1

Q.8 The most important ruler of the Satavahanas was _____.

- Ans
- ☐ 1. Pulumavi IV
 - ☒ 2. Gautamiputra Shri Satakarni
 - ☐ 3. Simuka
 - ☐ 4. Vasisthiputra Pulamavi

Question Type : MCQ

Question ID : 264330138942

Option 1 ID : 264330544378

Option 2 ID : 264330544375

Option 3 ID : 264330544377

Option 4 ID : 264330544376

Status : Not Answered

Chosen Option : --

Q.9 Which among the following straits divide Sri Lanka from India?

- Ans
- ☐ 1. Yucatan Strait
 - ☐ 2. Malacca Strait
 - ☒ 3. Palk Strait
 - ☐ 4. Sunda Strait

Question Type : MCQ

Question ID : 264330137073

Option 1 ID : 264330536937

Option 2 ID : 264330536938

Option 3 ID : 264330536935

Option 4 ID : 264330536936

Status : Answered

Chosen Option : 3

Q.10 The Guru Kelucharan Mohapatra Award has been instituted in the year 1995. Guru Kelucharan Mohapatra was recognized for which dance form?

- Ans
- ☐ 1. Kathak
 - ☐ 2. Manipuri
 - ☐ 3. Chhau
 - ☒ 4. Odissi

Question Type : MCQ

Question ID : 264330137394

Option 1 ID : 264330538205

Option 2 ID : 264330538204

Option 3 ID : 264330538206

Option 4 ID : 264330538203

Status : Answered

Chosen Option : 4

Q.11 Which among the following rivers originates in Maharashtra?

- Ans ☒ 1. Godavari
☒ 2. Yamuna
☒ 3. Narmada
☒ 4. Tapi

Question Type : MCQ
 Question ID : 264330133658
 Option 1 ID : 264330523658
 Option 2 ID : 264330523655
 Option 3 ID : 264330523657
 Option 4 ID : 264330523656
 Status : Answered
 Chosen Option : 1

Q.12 The Mongols under Genghis Khan invaded Transoxiana in north-east Iran in _____.

- Ans ☒ 1. 1219
☒ 2. 1212
☒ 3. 1230
☒ 4. 1227

Question Type : MCQ
 Question ID : 264330137908
 Option 1 ID : 264330540239
 Option 2 ID : 264330540242
 Option 3 ID : 264330540241
 Option 4 ID : 264330540240
 Status : Not Answered
 Chosen Option : --

Q.13 Which is the largest continent in the world?

- Ans ☒ 1. North America
☒ 2. Africa
☒ 3. South America
☒ 4. Asia

Question Type : MCQ
 Question ID : 264330137902
 Option 1 ID : 264330540215
 Option 2 ID : 264330540217
 Option 3 ID : 264330540216
 Option 4 ID : 264330540218
 Status : Answered
 Chosen Option : 4

Q.14 Stand Up India scheme aims at supporting entrepreneurship to _____ community of India.

- Ans
- ☒ 1. Below Poverty Line
 - ☒ 2. Construction workers
 - ☒ 3. Scheduled caste
 - ☒ 4. Business person

Question Type : MCQ
 Question ID : 264330133648
 Option 1 ID : 264330523616
 Option 2 ID : 264330523617
 Option 3 ID : 264330523615
 Option 4 ID : 264330523618
 Status : Not Answered
 Chosen Option : --

Q.15 Udaipur was founded by _____ after the fall of Chittor to Akbar in 1568.

- Ans
- ☒ 1. Sawai Jai Singh
 - ☒ 2. Raja Bharmal
 - ☒ 3. Man singh
 - ☒ 4. Rana Udai Singh

Question Type : MCQ
 Question ID : 264330138923
 Option 1 ID : 264330544299
 Option 2 ID : 264330544302
 Option 3 ID : 264330544301
 Option 4 ID : 264330544300
 Status : Answered
 Chosen Option : 4

Q.16 Which article of the Indian Constitution provides freedom to manage its own affairs in matters of religion?

- Ans
- ☒ 1. Article 30
 - ☒ 2. Article 5
 - ☒ 3. Article 26
 - ☒ 4. Article 210

Question Type : MCQ
 Question ID : 264330133668
 Option 1 ID : 264330523697
 Option 2 ID : 264330523695
 Option 3 ID : 264330523696
 Option 4 ID : 264330523698
 Status : Answered
 Chosen Option : 3

Q.17 Who has the power to interpret the constitution of India?

- Ans
- ☐ 1. Supreme court only
 - ☐ 2. High courts only
 - ☒ 3. Both Supreme court and High courts
 - ☐ 4. President of India

Question Type : MCQ

Question ID : 264330138932

Option 1 ID : 264330544335

Option 2 ID : 264330544336

Option 3 ID : 264330544337

Option 4 ID : 264330544338

Status : Answered

Chosen Option : 3

Q.18 "Ambubachi Mela" is held in which place?

- Ans
- ☐ 1. Patna
 - ☐ 2. Lucknow
 - ☐ 3. Pune
 - ☒ 4. Guwahati

Question Type : MCQ

Question ID : 264330138922

Option 1 ID : 264330544296

Option 2 ID : 264330544297

Option 3 ID : 264330544298

Option 4 ID : 264330544295

Status : Answered

Chosen Option : 4

Q.19 Which of the following is an artificial sweetener?

- Ans
- ☒ 1. Saccharin
 - ☐ 2. Glucose
 - ☐ 3. Lactamase
 - ☐ 4. Sodium benzoate

Question Type : MCQ

Question ID : 264330137901

Option 1 ID : 264330540214

Option 2 ID : 264330540211

Option 3 ID : 264330540212

Option 4 ID : 264330540213

Status : Answered

Chosen Option : 4

Q.20 Which famous Indian sportsman is nicknamed as 'Captain Cool'?

- Ans ☒ 1. Mahendra Singh Dhoni
☐ 2. Major Dhyan Chand
☐ 3. Milkha Singh
☐ 4. Rohit Sharma

Question Type : MCQ

Question ID : 264330133670

Option 1 ID : 264330523703

Option 2 ID : 264330523706

Option 3 ID : 264330523705

Option 4 ID : 264330523704

Status : Answered

Chosen Option : 1

Q.21 Practice of "sati" was banned in India in _____.

- Ans ☒ 1. 1829
☐ 2. 1857
☐ 3. 1847
☐ 4. 1819

Question Type : MCQ

Question ID : 264330138944

Option 1 ID : 264330544384

Option 2 ID : 264330544386

Option 3 ID : 264330544385

Option 4 ID : 264330544383

Status : Answered

Chosen Option : 1

Q.22 Which of the following material is a conductor of electricity?

- Ans ☒ 1. Silver
☐ 2. Glass
☐ 3. Mica
☐ 4. Ebonite

Question Type : MCQ

Question ID : 264330137899

Option 1 ID : 264330540205

Option 2 ID : 264330540203

Option 3 ID : 264330540206

Option 4 ID : 264330540204

Status : Answered

Chosen Option : 1

Q.23 As of 2022, which Indian musician has the most number of Oscar awards?

- Ans
- ☐ 1. Asha Bhosle
 - ☐ 2. Gulzar
 - ☒ 3. A R Rahman
 - ☐ 4. Lata Mangeshkar

Question Type : MCQ
 Question ID : 264330133666
 Option 1 ID : 264330523688
 Option 2 ID : 264330523687
 Option 3 ID : 264330523690
 Option 4 ID : 264330523689
 Status : Answered
 Chosen Option : 3

Q.24 Which among the following organs in human body, is most affected by Pneumonia disease?

- Ans
- ☐ 1. Kidneys
 - ☐ 2. Urinary bladder
 - ☐ 3. Heart
 - ☒ 4. Lungs

Question Type : MCQ
 Question ID : 264330133654
 Option 1 ID : 264330523642
 Option 2 ID : 264330523641
 Option 3 ID : 264330523639
 Option 4 ID : 264330523640
 Status : Answered
 Chosen Option : 4

Q.25 How many field players are in a football team?

- Ans
- ☒ 1. 11
 - ☐ 2. 14
 - ☐ 3. 12
 - ☐ 4. 13

Question Type : MCQ
 Question ID : 264330137917
 Option 1 ID : 264330540275
 Option 2 ID : 264330540278
 Option 3 ID : 264330540276
 Option 4 ID : 264330540277
 Status : Answered
 Chosen Option : 1

Q.1 Improve the underlined part of the sentence. Choose 'No improvement' as an answer if the sentence is grammatically correct.
When my calculations are wrong, I have to pore over the spreadsheet to find the error.

- Ans ☒ 1. No improvement
☒ 2. to poring over
☒ 3. to pored over
☒ 4. to pore by

Question Type : MCQ
Question ID : 264330134299
Option 1 ID : 264330526194
Option 2 ID : 264330526191
Option 3 ID : 264330526192
Option 4 ID : 264330526193
Status : Not Answered
Chosen Option : --

Q.2 Choose the word that means the same as the given word.

Jaded

- Ans ☒ 1. Weariless
☒ 2. Unwearied
☒ 3. Beguiled
☒ 4. Fatigued

Question Type : MCQ
Question ID : 264330141164
Option 1 ID : 264330552999
Option 2 ID : 264330553001
Option 3 ID : 264330553000
Option 4 ID : 264330553002
Status : Not Answered
Chosen Option : --

Q.3 Select the appropriate synonym for the underlined word.
Are you kidding?

- Ans ☒ 1. rocking
☒ 2. mixing
☒ 3. pleading
☒ 4. joking

Question Type : MCQ
Question ID : 264330134310
Option 1 ID : 264330526233
Option 2 ID : 264330526231
Option 3 ID : 264330526232
Option 4 ID : 264330526234
Status : Answered
Chosen Option : 4

Q.4 Select the appropriate antonym for the underlined word.
The pillar of light has faded.

- Ans ☒ 1. grown
☒ 2. painted
☒ 3. melted
☒ 4. vanished

Question Type : MCQ
Question ID : 264330134313
Option 1 ID : 264330526243
Option 2 ID : 264330526245
Option 3 ID : 264330526246
Option 4 ID : 264330526244
Status : Answered
Chosen Option : 1

Q.5 Improve the underlined part of the sentence. Choose 'No improvement' as an answer if the sentence is grammatically correct.
The sun was shining through the window.

- Ans ☒ 1. was shines
☒ 2. No improvement
☒ 3. were shined
☒ 4. were shining

Question Type : MCQ
Question ID : 264330134297
Option 1 ID : 264330526185
Option 2 ID : 264330526186
Option 3 ID : 264330526184
Option 4 ID : 264330526183
Status : Answered
Chosen Option : 2

Q.6 Select the most appropriate option to substitute the bracketed segment in the given sentence. If there is no need to substitute it, select 'no substitution required'.
(Democrats control neither Congress and neither the White House, but) they are doing their best to control the judicial processes.

- Ans ☒ 1.
Democrat controls neither Congress and nor the White House, though
☒ 2. No substitution required
☒ 3.
Democrats control neither Congress nor the White House, but
☒ 4.
Democrats control neither Congress or the White House, but

Question Type : MCQ
Question ID : 264330135771
Option 1 ID : 264330531965
Option 2 ID : 264330531966
Option 3 ID : 264330531964
Option 4 ID : 264330531963
Status : Answered
Chosen Option : 1

Q.7 Find the part of the given sentence that has an error in it. If there is no error, choose 'No error'.
Shivam is more cleverer than any other boy in the office.

- Ans ☒ 1. than any other boy
☒ 2. Shivam is more cleverer
☒ 3. in the office.
☒ 4. No error

Question Type : MCQ
Question ID : 264330134296
Option 1 ID : 264330526180
Option 2 ID : 264330526179
Option 3 ID : 264330526181
Option 4 ID : 264330526182
Status : Answered
Chosen Option : 2

Q.8 Select the most appropriate option to fill in the blank.
A national holiday _____ on the same day as my birthday.

- Ans ☒ 1. falls
☒ 2. false
☒ 3. flows
☒ 4. fouls

Question Type : MCQ
Question ID : 264330136897
Option 1 ID : 264330536271
Option 2 ID : 264330536273
Option 3 ID : 264330536272
Option 4 ID : 264330536274
Status : Answered
Chosen Option : 1

Q.9 Fill in the blank with the most appropriate option.
That remark _____ a stir.

- Ans ☒ 1. built
☒ 2. constructed
☒ 3. produced
☒ 4. created

Question Type : MCQ
Question ID : 264330141198
Option 1 ID : 264330553129
Option 2 ID : 264330553128
Option 3 ID : 264330553130
Option 4 ID : 264330553127
Status : Answered
Chosen Option : 4

Q.10 Select the most appropriate meaning of the given idiom.

Walk on air

- Ans
- ☒ 1. To work hard
 - ☒ 2. To describe an unusual situation
 - ☒ 3. To be extremely happy
 - ☒ 4. Feeling weakened or tired

Question Type : MCQ
Question ID : 264330136259
Option 1 ID : 264330533820
Option 2 ID : 264330533821
Option 3 ID : 264330533822
Option 4 ID : 264330533819
Status : Answered
Chosen Option : 3

Q.11 Choose the sentence with no spelling error.

- Ans
- ☒ 1. A few exemples can illustrate this.
 - ☒ 2. A few examples can illustrate this.
 - ☒ 3. A few examples can ilustrate this.
 - ☒ 4. A few examples can illustrate this.

Question Type : MCQ
Question ID : 264330136896
Option 1 ID : 264330536267
Option 2 ID : 264330536268
Option 3 ID : 264330536269
Option 4 ID : 264330536270
Status : Answered
Chosen Option : 2

Q.12 In the following question, out of the given four alternatives, select the alternative which best expresses the meaning of the Idiom/Phrase.
Wet behind the ears

- Ans
- ☒ 1. A sudden change in fortune due to a windfall
 - ☒ 2. To place a bad bet
 - ☒ 3. To be young and without experience
 - ☒ 4. To win a bet

Question Type : MCQ
Question ID : 264330134315
Option 1 ID : 264330526254
Option 2 ID : 264330526252
Option 3 ID : 264330526251
Option 4 ID : 264330526253
Status : Answered
Chosen Option : 3

Q.13 Identify the segment that contains a grammatical error. If there is no error, select 'No error'
We talked about writing a will, but it / was one of the best thing you never get / around to doing.

- Ans**
- ☒ 1. We talked about writing a will, but it
 - ☒ 2. was one of the best thing you never get
 - ☒ 3. around to doing.
 - ☒ 4. No Error

Question Type : **MCQ**
Question ID : **264330135768**
Option 1 ID : **264330531951**
Option 2 ID : **264330531952**
Option 3 ID : **264330531953**
Option 4 ID : **264330531954**
Status : **Answered**
Chosen Option : **2**

Q.14 Identify the segment that contains a grammatical error. If there is no error, select 'No error'
If Tom was here, / he could have / solved the issue.

- Ans**
- ☒ 1. he could have
 - ☒ 2. If Tom was here,
 - ☒ 3. No Error
 - ☒ 4. solved the issue.

Question Type : **MCQ**
Question ID : **264330135767**
Option 1 ID : **264330531948**
Option 2 ID : **264330531947**
Option 3 ID : **264330531950**
Option 4 ID : **264330531949**
Status : **Answered**
Chosen Option : **2**

Q.15 Select the most appropriate option to fill in the blank.
To _____ your self-worth, write down some things that are positive about yourself.

- Ans**
- ☒ 1. sanctify
 - ☒ 2. overlook
 - ☒ 3. affirm
 - ☒ 4. repudiate

Question Type : **MCQ**
Question ID : **264330134319**
Option 1 ID : **264330526268**
Option 2 ID : **264330526270**
Option 3 ID : **264330526269**
Option 4 ID : **264330526267**
Status : **Answered**
Chosen Option : **4**

Q.16 Choose the word that can substitute the given group of words.
A person who easily believes without demanding proof

- Ans ☒ 1. Cosmopolitan
☒ 2. Credulous
☒ 3. Streetwise
☒ 4. Wary

Question Type : MCQ
Question ID : 264330134309
Option 1 ID : 264330526228
Option 2 ID : 264330526227
Option 3 ID : 264330526230
Option 4 ID : 264330526229
Status : Answered
Chosen Option : 2

Q.17 A sentence has been given with a blank to be filled with an appropriate option. Choose the correct alternative.
Ram is _____ like the kings before him.

- Ans ☒ 1. none
☒ 2. not
☒ 3. nor
☒ 4. no

Question Type : MCQ
Question ID : 264330134300
Option 1 ID : 264330526196
Option 2 ID : 264330526195
Option 3 ID : 264330526197
Option 4 ID : 264330526198
Status : Answered
Chosen Option : 2

Q.18 Select the most appropriate word for the given group of words.

Fear of heights

- Ans ☒ 1. Hydrophobia
☒ 2. Acrophobia
☒ 3. Bathophobia
☒ 4. Vaccinophobia

Question Type : MCQ
Question ID : 264330136253
Option 1 ID : 264330533796
Option 2 ID : 264330533797
Option 3 ID : 264330533795
Option 4 ID : 264330533798
Status : Answered
Chosen Option : 2

Q.19 Choose the word that is opposite in meaning to the given word.

Abstract

- Ans
- ☒ 1. Transcend
 - ☒ 2. Romantic
 - ☒ 3. Utopian
 - ☒ 4. Concrete

Question Type : MCQ

Question ID : 264330136891

Option 1 ID : 264330536247

Option 2 ID : 264330536248

Option 3 ID : 264330536250

Option 4 ID : 264330536249

Status : Answered

Chosen Option : 4

Q.20 Choose the incorrectly spelt word.

- Ans
- ☒ 1. Jutsice
 - ☒ 2. Blast
 - ☒ 3. Caste
 - ☒ 4. Toast

Question Type : MCQ

Question ID : 264330134316

Option 1 ID : 264330526256

Option 2 ID : 264330526258

Option 3 ID : 264330526255

Option 4 ID : 264330526257

Status : Answered

Chosen Option : 1

Comprehension:

In the following passage some of the words have been deleted. Read the passage carefully and select the correct answer for the given blank out of the four alternatives.

One afternoon, a dozen Arizona State University students (1) _____ to spend the morning cutting cardboard, taping fans and assembling filters in an effort to (2) _____ 125 portable air purifiers for local schools. That (3) _____ morning, staff members at a homeless shelter in Los Angeles were setting (4) _____ 20 homemade purifiers of their own, while in Brookline, Massachusetts, another DIY air purifier was whirring quietly in the back of a day care (5) _____ as children played.

SubQuestion No : 21

Q.21 Select the most appropriate option to fill in the blank No. 1.

- Ans
- ☒ 1. plated
 - ☒ 2. gathered
 - ☒ 3. triggered
 - ☒ 4. dismissed

Question Type : MCQ

Question ID : 264330136882

Option 1 ID : 264330536213

Option 2 ID : 264330536211

Option 3 ID : 264330536214

Option 4 ID : 264330536212

Status : Answered

Chosen Option : 2

Comprehension:

In the following passage some of the words have been deleted. Read the passage carefully and select the correct answer for the given blank out of the four alternatives.

One afternoon, a dozen Arizona State University students (1) _____ to spend the morning cutting cardboard, taping fans and assembling filters in an effort to (2) _____ 125 portable air purifiers for local schools. That (3) _____ morning, staff members at a homeless shelter in Los Angeles were setting (4) _____ 20 homemade purifiers of their own, while in Brookline, Massachusetts, another DIY air purifier was whirring quietly in the back of a day care (5) _____ as children played.

SubQuestion No : 22

Q.22 Select the most appropriate option to fill in the blank No. 2.

- Ans
- ☒ 1. build
 - ☐ 2. beat
 - ☐ 3. sieve
 - ☐ 4. weld

Question Type : MCQ

Question ID : 264330136883

Option 1 ID : 264330536217

Option 2 ID : 264330536218

Option 3 ID : 264330536215

Option 4 ID : 264330536216

Status : Answered

Chosen Option : 1

Comprehension:

In the following passage some of the words have been deleted. Read the passage carefully and select the correct answer for the given blank out of the four alternatives.

One afternoon, a dozen Arizona State University students (1) _____ to spend the morning cutting cardboard, taping fans and assembling filters in an effort to (2) _____ 125 portable air purifiers for local schools. That (3) _____ morning, staff members at a homeless shelter in Los Angeles were setting (4) _____ 20 homemade purifiers of their own, while in Brookline, Massachusetts, another DIY air purifier was whirring quietly in the back of a day care (5) _____ as children played.

SubQuestion No : 23

Q.23 Select the most appropriate option to fill in the blank No. 3.

- Ans
- ☐ 1. copy
 - ☐ 2. cruel
 - ☐ 3. resembling
 - ☒ 4. same

Question Type : MCQ

Question ID : 264330136884

Option 1 ID : 264330536221

Option 2 ID : 264330536219

Option 3 ID : 264330536220

Option 4 ID : 264330536222

Status : Answered

Chosen Option : 4

Comprehension:

In the following passage some of the words have been deleted. Read the passage carefully and select the correct answer for the given blank out of the four alternatives.

One afternoon, a dozen Arizona State University students (1) _____ to spend the morning cutting cardboard, taping fans and assembling filters in an effort to (2) _____ 125 portable air purifiers for local schools. That (3) _____ morning, staff members at a homeless shelter in Los Angeles were setting (4) _____ 20 homemade purifiers of their own, while in Brookline, Massachusetts, another DIY air purifier was whirring quietly in the back of a day care (5) _____ as children played.

SubQuestion No : 24

Q.24 Select the most appropriate option to fill in the blank No. 4.

- Ans
- ☒ 1. on
 - ☒ 2. in
 - ☒ 3. up
 - ☒ 4. off

Question Type : MCQ

Question ID : 264330136885

Option 1 ID : 264330536223

Option 2 ID : 264330536225

Option 3 ID : 264330536226

Option 4 ID : 264330536224

Status : Answered

Chosen Option : 3

Comprehension:

In the following passage some of the words have been deleted. Read the passage carefully and select the correct answer for the given blank out of the four alternatives.

One afternoon, a dozen Arizona State University students (1) _____ to spend the morning cutting cardboard, taping fans and assembling filters in an effort to (2) _____ 125 portable air purifiers for local schools. That (3) _____ morning, staff members at a homeless shelter in Los Angeles were setting (4) _____ 20 homemade purifiers of their own, while in Brookline, Massachusetts, another DIY air purifier was whirring quietly in the back of a day care (5) _____ as children played.

SubQuestion No : 25

Q.25 Select the most appropriate option to fill in the blank No. 5.

- Ans
- ☒ 1. auditorium
 - ☒ 2. podium
 - ☒ 3. hangar
 - ☒ 4. classroom

Question Type : MCQ

Question ID : 264330136886

Option 1 ID : 264330536230

Option 2 ID : 264330536228

Option 3 ID : 264330536227

Option 4 ID : 264330536229

Status : Answered

Chosen Option : 4