

Multi Tasking Non Technical Staff and Havaladar CBIC and CBN Examination 2022

Roll Number	
Candidate Name	
Venue Name	iON Digital Zone iDZ 2 Sector 62
Exam Date	08/05/2023
Exam Time	3:30 PM - 5:00 PM
Subject	MTS Non Tech Havaladar CBIC and CBN Examination 2022

Section : Numerical and Mathematical Ability

Q.1 What is the area of a triangle whose base is 120 cm and the corresponding height is 35 cm?

- Ans
- ☒ 1. 2120 cm²
 - ☒ 2. 2100 cm²
 - ☒ 3. 2010 cm²
 - ☒ 4. 2630 cm²

Question Type : MCQ

Question ID : 264330134099

Option 1 ID : 264330525421

Option 2 ID : 264330525420

Option 3 ID : 264330525419

Option 4 ID : 264330525422

Status : Answered

Chosen Option : 2

Q.2 A boy buys candies at 6 for a rupee. How many candies should he sell for a rupee to earn a profit of 20%?

- Ans
- ☒ 1. 4
 - ☒ 2. 3
 - ☒ 3. 7
 - ☒ 4. 5

Question Type : MCQ

Question ID : 264330133822

Option 1 ID : 264330524312

Option 2 ID : 264330524313

Option 3 ID : 264330524314

Option 4 ID : 264330524311

Status : Answered

Chosen Option : 4

Test Prime

**ALL EXAMS,
ONE SUBSCRIPTION**



70,000+
Mock Tests



**Personalised
Report Card**



**Unlimited
Re-Attempt**



600+
Exam Covered



**Previous Year
Papers**



**500%
Refund**



ATTEMPT FREE MOCK NOW

Q.3 After getting a discount of 8%, Rashmi bought a cycle for Rs. 7912. What was the original price of the cycle?

- Ans**
- ☒ 1. Rs. 7800
 - ☒ 2. Rs. 8600
 - ☒ 3. Rs. 9200
 - ☒ 4. Rs. 8800

Question Type : **MCQ**
 Question ID : **264330133823**
 Option 1 ID : **264330524315**
 Option 2 ID : **264330524316**
 Option 3 ID : **264330524318**
 Option 4 ID : **264330524317**
 Status : **Answered**
 Chosen Option : **2**

Q.4 The average of five consecutive odd numbers is 37. What is the sum of the highest and the lowest number?

- Ans**
- ☒ 1. 8
 - ☒ 2. 74
 - ☒ 3. 41
 - ☒ 4. 66

Question Type : **MCQ**
 Question ID : **264330133818**
 Option 1 ID : **264330524298**
 Option 2 ID : **264330524295**
 Option 3 ID : **264330524297**
 Option 4 ID : **264330524296**
 Status : **Answered**
 Chosen Option : **2**

Q.5 The fourth proportional to 3.6, 4.2 and 5.4 is:

- Ans**
- ☒ 1. 1.4
 - ☒ 2. 7.2
 - ☒ 3. 1.2
 - ☒ 4. 6.3

Question Type : **MCQ**
 Question ID : **264330133824**
 Option 1 ID : **264330524319**
 Option 2 ID : **264330524322**
 Option 3 ID : **264330524320**
 Option 4 ID : **264330524321**
 Status : **Answered**
 Chosen Option : **4**

Q.6 48 is how much percent of 84?

- Ans
- ☒ 1. $\frac{103}{17}\%$
 - ☒ 2. $\frac{100}{11}\%$
 - ☒ 3. $\frac{51}{7}\%$
 - ☒ 4. $\frac{400}{7}\%$

Question Type : MCQ

Question ID : 264330133820

Option 1 ID : 264330524305

Option 2 ID : 264330524304

Option 3 ID : 264330524306

Option 4 ID : 264330524303

Status : Answered

Chosen Option : 4

Q.7 What is the value of $\frac{192}{64} \times \left(\frac{47}{94} + \frac{42}{84} \right) + \frac{182}{14}$?

- Ans
- ☒ 1. 16
 - ☒ 2. 23
 - ☒ 3. 8
 - ☒ 4. 14

Question Type : MCQ

Question ID : 264330138031

Option 1 ID : 264330540732

Option 2 ID : 264330540733

Option 3 ID : 264330540731

Option 4 ID : 264330540734

Status : Answered

Chosen Option : 1

Q.8 Solve: $\{(42/7) \times 6\} \{45 \times 6 + 65\} [63/7] - 76$

- Ans
- ☒ 1. 108464
 - ☒ 2. 10998
 - ☒ 3. 10876
 - ☒ 4. 10987

Question Type : MCQ

Question ID : 264330135087

Option 1 ID : 264330529283

Option 2 ID : 264330529286

Option 3 ID : 264330529285

Option 4 ID : 264330529284

Status : Answered

Chosen Option : 1

Q.9 Given table shows the number of jobs held by boys over 7 different cities. In which of these city jobs held by boys is minimum?

Cities	Jobs
Delhi	230
Mumbai	420
Raipur	340
Kolkata	245
Pune	654
Bhopal	234
Kanpur	321

- Ans**
- ☒ 1. Raipur
 - ☒ 2. Pune
 - ☒ 3. Mumbai
 - ☒ 4. Delhi

Question Type : **MCQ**
 Question ID : **264330135103**
 Option 1 ID : **264330529350**
 Option 2 ID : **264330529349**
 Option 3 ID : **264330529348**
 Option 4 ID : **264330529347**
 Status : **Answered**
 Chosen Option : **4**

Q.10 A truck covers a distance of 540 km at a certain speed in 9 hours. How much time would a car take at an average speed which is 16 km/hr more than that of the speed of the truck to cover a distance which is 68 km more than that travelled by the truck?

- Ans**
- ☒ 1. 10 hours
 - ☒ 2. 8 hours
 - ☒ 3. 6 hours
 - ☒ 4. 12 hours

Question Type : **MCQ**
 Question ID : **264330133828**
 Option 1 ID : **264330524337**
 Option 2 ID : **264330524336**
 Option 3 ID : **264330524335**
 Option 4 ID : **264330524338**
 Status : **Answered**
 Chosen Option : **2**

Q.11 When a laptop is sold at Rs.55,000, a person earns a 25% gain. Find the cost price of the laptop.

- Ans**
- ☒ 1. Rs.30,000
 - ☒ 2. Rs.44,000
 - ☒ 3. Rs.33,000
 - ☒ 4. Rs.45,000

Question Type : **MCQ**
 Question ID : **264330135419**
 Option 1 ID : **264330530583**
 Option 2 ID : **264330530584**
 Option 3 ID : **264330530585**
 Option 4 ID : **264330530586**
 Status : **Answered**
 Chosen Option : **2**

Q.12 A_1 , A_2 and A_3 alone can complete a piece of work in 12 hour, 24 hours and 16 hours respectively. Working together, in how much time they will complete the same work?

- Ans**
- ☒ 1. 5 hours 30 minutes
 - ☒ 2. 5 hours 20 minutes
 - ☒ 3. 4 hours 20 minutes
 - ☒ 4. 3 hours 30 minutes

Question Type : **MCQ**
 Question ID : **264330134094**
 Option 1 ID : **264330525401**
 Option 2 ID : **264330525399**
 Option 3 ID : **264330525402**
 Option 4 ID : **264330525400**
 Status : **Answered**
 Chosen Option : **2**

Q.13 The value of $100 \div (10 + 12 - 2 \times 6)$ is:

- Ans**
- ☒ 1. 88
 - ☒ 2. 12
 - ☒ 3. 100
 - ☒ 4. 10

Question Type : **MCQ**
 Question ID : **264330133816**
 Option 1 ID : **264330524288**
 Option 2 ID : **264330524289**
 Option 3 ID : **264330524287**
 Option 4 ID : **264330524290**
 Status : **Answered**
 Chosen Option : **4**

Q.14 A man covers half part of a certain distance at 25 km/hr. He covers 40 percent of remaining distance at the speed of 8 km/hr and covers rest of the distance at the speed of 18 km/hr. What is his average speed for the entire journey?

- Ans**
- ☒ 1. $(650/37)$ km/hr
 - ☒ 2. $(540/37)$ km/hr
 - ☒ 3. $(600/37)$ km/hr
 - ☒ 4. $(480/37)$ km/hr

Question Type : **MCQ**
 Question ID : **264330137607**
 Option 1 ID : **264330539038**
 Option 2 ID : **264330539037**
 Option 3 ID : **264330539035**
 Option 4 ID : **264330539036**
 Status : **Answered**
 Chosen Option : **3**

Q.15 A man alone can paint a house in 9 day and a woman alone can paint the house in 18 days. If 3 men and 3 women worked together, then in how many day they will paint the house?

- Ans
- ☒ 1. 4 days
 - ☒ 2. 3 days
 - ☒ 3. 2 days
 - ☒ 4. 6 days

Question Type : MCQ

Question ID : 264330138104

Option 1 ID : 264330541023

Option 2 ID : 264330541024

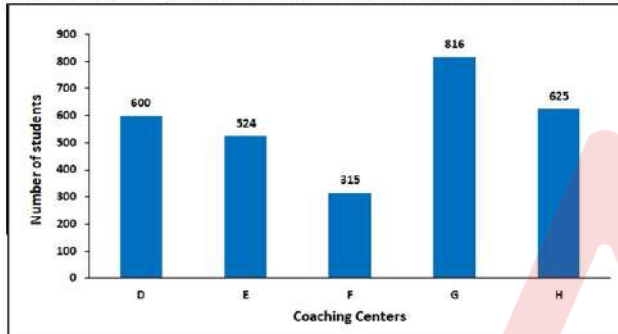
Option 3 ID : 264330541025

Option 4 ID : 264330541026

Status : Answered

Chosen Option : 3

Q.16 The following bar graph shows the number of students in five different coaching centers.
In how many coaching centers the number of students is more than the average number of students of these centers?



- Ans
- ☒ 1. 2
 - ☒ 2. 3
 - ☒ 3. 1
 - ☒ 4. 4

Question Type : MCQ

Question ID : 264330133832

Option 1 ID : 264330524353

Option 2 ID : 264330524354

Option 3 ID : 264330524351

Option 4 ID : 264330524352

Status : Answered

Chosen Option : 2

Q.17 A mobile phone bought for Rs. 25000. The value of that mobile phone depreciates by 5% per annum due to its use. The value of the mobile phone after 2 years is:

- Ans** ☒ 1. Rs. 22562.50
☒ 2. Rs. 23842.50
☒ 3. Rs. 21546.50
☒ 4. Rs. 24800.50

Question Type : MCQ

Question ID : 264330133827

Option 1 ID : 264330524331

Option 2 ID : 264330524332

Option 3 ID : 264330524334

Option 4 ID : 264330524333

Status : Answered

Chosen Option : 1

Q.18 The radius of the base of a conical tent is 8 m and its height is 15 m, what is the cost of the material needed to make it if it costs Rs.54 per π m²?

- Ans** ☒ 1. Rs.6454
☒ 2. Rs.7344
☒ 3. Rs.8678
☒ 4. Rs.7454

Question Type : MCQ

Question ID : 264330138108

Option 1 ID : 264330541042

Option 2 ID : 264330541041

Option 3 ID : 264330541040

Option 4 ID : 264330541039

Status : Answered

Chosen Option : 2

Q.19 Salaries of Ankur and Ankit are in the ratio 3:2. If the salaries of each is decreased by Rs 2500, the new ratio becomes 8:5. What is the sum of their salaries?

- Ans** ☒ 1. Rs. 7500
☒ 2. Rs. 12500
☒ 3. Rs. 37500
☒ 4. Rs. 28500

Question Type : MCQ

Question ID : 264330133825

Option 1 ID : 264330524324

Option 2 ID : 264330524326

Option 3 ID : 264330524323

Option 4 ID : 264330524325

Status : Answered

Chosen Option : 3

Q.20 Rs. 20000 is lent at compound interest at an annual rate of 16 percent for 1 year. If the compounding of interest is done half yearly, then how much interest will be obtained?

- Ans**
- ☐ 1. Rs. 3180
 - ☐ 2. Rs. 3396
 - ☐ 3. Rs. 3224
 - ☒ 4. Rs. 3328

Question Type : MCQ

Question ID : 264330137142

Option 1 ID : 264330537214

Option 2 ID : 264330537211

Option 3 ID : 264330537212

Option 4 ID : 264330537213

Status : Answered

Chosen Option : 4

Section : Reasoning Ability and Problem Solving

Q.1 Two Statements are given followed by two conclusions numbered I and II. Assuming the statements to be true, even if they seem to be at variance with commonly known facts, decide which of the conclusions logically follow(s) from the statements.

Statements:

Some songs are short.

Some short are good.

Conclusions:

I. Some songs are good.

II. Some short not being good is a possibility.

- Ans**
- ☐ 1. Both conclusions I and II follow
 - ☒ 2. Only conclusion II follows
 - ☐ 3. Neither conclusion I nor II follows
 - ☐ 4. Only conclusion I follows

Question Type : MCQ

Question ID : 264330133535

Option 1 ID : 264330523173

Option 2 ID : 264330523172

Option 3 ID : 264330523174

Option 4 ID : 264330523171

Status : Answered

Chosen Option : 3

Q.2 By Interchanging the given two numbers which of the following equation will be correct?

7 and 8

I. $5 \times 7 + 6 \div 2 - 8 = 36$

II. $8 + 3 \times 7 - 5 + 1 = 26$

Ans ☒ 1. Neither I nor II

☒ 2. Only II

☒ 3. Both I and II

☒ 4. Only I

Question Type : **MCQ**

Question ID : **264330137104**

Option 1 ID : **264330537062**

Option 2 ID : **264330537060**

Option 3 ID : **264330537061**

Option 4 ID : **264330537059**

Status : **Answered**

Chosen Option : **3**

Q.3 Three Statements are given followed by two conclusions numbered I and II. Assuming the statements to be true, even if they seem to be at variance with commonly known facts, decide which of the conclusions logically follow(s) from the statements.

Statements:

All gold are silver.

All silver are brass.

All brass are copper.

Conclusions:

I. All gold are copper.

II. All silver are copper.

Ans ☒ 1. Neither conclusion I nor II follows

☒ 2. Only conclusion I follows

☒ 3. Only conclusion II follows

☒ 4. Both conclusions I and II follow

Question Type : **MCQ**

Question ID : **264330133536**

Option 1 ID : **264330523178**

Option 2 ID : **264330523175**

Option 3 ID : **264330523176**

Option 4 ID : **264330523177**

Status : **Answered**

Chosen Option : **4**

Q.4 In a certain code language, 'WATCH' is written as '5B2D8'. How will 'HEAR' be written in that language?

- Ans** ☒ 1. 8F1S
☒ 2. 8F2S
☒ 3. 1SF8
☒ 4. F8S1

Question Type : **MCQ**
 Question ID : **264330133450**
 Option 1 ID : **264330522831**
 Option 2 ID : **264330522832**
 Option 3 ID : **264330522834**
 Option 4 ID : **264330522833**
 Status : **Answered**
 Chosen Option : **1**

Q.5 Which two numbers should be interchanged to make the given equation correct?

$$7 \times 3 - 98 \div 14 + 5 = 31$$

- Ans** ☒ 1. 5 and 3
☒ 2. 7 and 98
☒ 3. 31 and 7
☒ 4. 3 and 14

Question Type : **MCQ**
 Question ID : **264330133541**
 Option 1 ID : **264330523198**
 Option 2 ID : **264330523196**
 Option 3 ID : **264330523195**
 Option 4 ID : **264330523197**
 Status : **Answered**
 Chosen Option : **1**

Q.6 Six colleagues X, Y, Z, A, B, and C are sitting in a row facing south. Z is to the immediate right of C who is sitting at one of the ends. A sits third to the right of B. X does not sit adjacent to B. Who sits to the immediate left of A?

- Ans** ☒ 1. C
☒ 2. X
☒ 3. Y
☒ 4. Z

Question Type : **MCQ**
 Question ID : **264330133532**
 Option 1 ID : **264330523162**
 Option 2 ID : **264330523160**
 Option 3 ID : **264330523159**
 Option 4 ID : **264330523161**
 Status : **Answered**
 Chosen Option : **2**

Q.7 Which of the following numbers will replace the question mark (?) in the given series?

63, 56, 49, 42, 35, 28, ?

Ans ☒ 1. 14

☒ 2. 21

☒ 3. 22

☒ 4. 35

Question Type : MCQ

Question ID : 264330133537

Option 1 ID : 264330523179

Option 2 ID : 264330523181

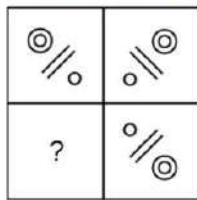
Option 3 ID : 264330523182

Option 4 ID : 264330523180

Status : Answered

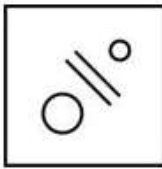
Chosen Option : 2

Q.8 Select the option figure that will replace the question mark (?) in the figure given below to complete the pattern.
(Rotation is not allowed).

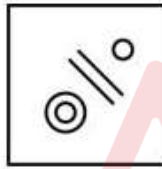


Ans

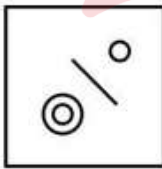
☒ 1.



☒ 2.



☒ 3.



☒ 4.



Question Type : MCQ

Question ID : 264330133545

Option 1 ID : 264330523214

Option 2 ID : 264330523212

Option 3 ID : 264330523213

Option 4 ID : 264330523211

Status : Answered

Chosen Option : 2

Q.9 In a certain code language, 'PLANET' is coded as 'RCLYJN'. What is the code for 'MODELS' in that code language?

- Ans** ☒ 1. QJCBMK
☒ 2. QJCCCM
☒ 3. QJCBNK
☒ 4. QJCBML

Question Type : **MCQ**
 Question ID : **264330135621**
 Option 1 ID : **264330531383**
 Option 2 ID : **264330531386**
 Option 3 ID : **264330531385**
 Option 4 ID : **264330531384**
 Status : **Answered**
 Chosen Option : **1**

Q.10 Which of the following numbers will replace the question mark (?) in the given series?
 5, 10, 30, 60, 180, 360, 1080, ?

- Ans** ☒ 1. 2160
☒ 2. 2400
☒ 3. 2610
☒ 4. 3240

Question Type : **MCQ**
 Question ID : **264330133538**
 Option 1 ID : **264330523183**
 Option 2 ID : **264330523184**
 Option 3 ID : **264330523186**
 Option 4 ID : **264330523185**
 Status : **Answered**
 Chosen Option : **1**

Q.11 Eight professors of a college namely, X, Y, Z, A, B, C, D and E are sitting around a square table in such a way that four of them sit at four corners of the table while the other four sit in the middle of each of the four sides facing each other. C sits to the immediate right of A who faces Z, E sits opposite to X who sits to the immediate right of Y. B sits to the immediate left of Y and opposite to C. Who among the following faces Y?

- Ans** ☒ 1. Z
☒ 2. A
☒ 3. D
☒ 4. C

Question Type : **MCQ**
 Question ID : **264330133533**
 Option 1 ID : **264330523163**
 Option 2 ID : **264330523166**
 Option 3 ID : **264330523164**
 Option 4 ID : **264330523165**
 Status : **Answered**
 Chosen Option : **3**

Q.12 Select the option that is related to the third letter cluster in the same way as the second letter cluster is related to the first letter cluster.

HOME : SN13D :: BALL : ?

- Ans**
- ☒ 1. 12MZ2
 - ☒ 2. 2Z21M
 - ☒ 3. 2Z12K
 - ☒ 4. 4Z14

Question Type : MCQ

Question ID : 264330133528

Option 1 ID : 264330523145

Option 2 ID : 264330523143

Option 3 ID : 264330523144

Option 4 ID : 264330523146

Status : Answered

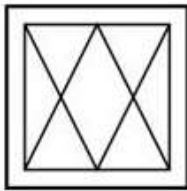
Chosen Option : 3

Q.13 Select the option figure in which the given figure is embedded as its part (rotation is NOT allowed).



Ans

☒ 1.



☒ 2.



☒ 3.



☒ 4.



Question Type : MCQ

Question ID : 264330134995

Option 1 ID : 264330528915

Option 2 ID : 264330528917

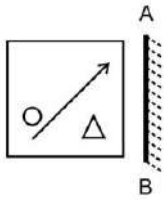
Option 3 ID : 264330528918

Option 4 ID : 264330528916

Status : Answered

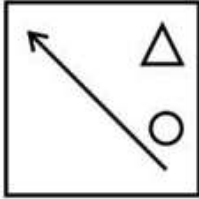
Chosen Option : 1

Q.14 Select the correct mirror image of the given figure when the mirror AB is placed to the right side of the figure.

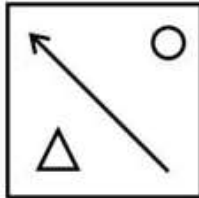


Ans

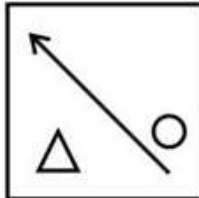
✗ 1.



✗ 2.



✓ 3.



✗ 4.



Question Type : MCQ

Question ID : 264330134996

Option 1 ID : 264330528920

Option 2 ID : 264330528921

Option 3 ID : 264330528922

Option 4 ID : 264330528919

Status : Answered

Chosen Option : 3

Q.15 Which of the following letter will replace the question mark (?) in the given series?

C, E, G, I, K, M, O, ?

Ans ☒ 1. Q

☐ 2. T

☐ 3. R

☐ 4. S

Question Type : MCQ

Question ID : 264330133526

Option 1 ID : 264330523136

Option 2 ID : 264330523138

Option 3 ID : 264330523137

Option 4 ID : 264330523135

Status : Answered

Chosen Option : 1

Q.16 Select the option that is related to the third number in the same way as the second number is related to the first number.

83 : 161 :: 71 : ?

Ans ☐ 1. 232

☐ 2. 210

☒ 3. 149

☐ 4. 150

Question Type : MCQ

Question ID : 264330133539

Option 1 ID : 264330523188

Option 2 ID : 264330523189

Option 3 ID : 264330523190

Option 4 ID : 264330523187

Status : Answered

Chosen Option : 3

Q.17 In a certain code language, 'SEARCH' is written as 'ACEHRS'. How will 'IMPORT' be written in that language?

Ans ☐ 1. IMOPTR

☐ 2. IMPORT

☐ 3. EXPORT

☒ 4. IMOPRT

Question Type : MCQ

Question ID : 264330137563

Option 1 ID : 264330538862

Option 2 ID : 264330538860

Option 3 ID : 264330538859

Option 4 ID : 264330538861

Status : Answered

Chosen Option : 4

Q.18 Study the given pattern carefully and select the number that can replace the question mark (?) in it.

First row- 26, 35, 44

Second row- 47, 56, 65

Third row- 15, 24, ?

Ans ☒ 1. 19

☒ 2. 33

☒ 3. 35

☒ 4. 22

Question Type : **MCQ**

Question ID : **264330133540**

Option 1 ID : **264330523193**

Option 2 ID : **264330523194**

Option 3 ID : **264330523191**

Option 4 ID : **264330523192**

Status : **Answered**

Chosen Option : **2**

Q.19 Seven colleagues P, A, R, S, T, U and V's contribution to a farewell party is given. No two colleagues contributed the same amount. V contributed more than P who contributed more than A. R and T contributed the maximum and minimum amount but not necessarily in the same order. U's contribution was less than only R. S's contribution was more than only one person. Whose contribution was the third highest?

Ans ☒ 1. R

☒ 2. S

☒ 3. V

☒ 4. T

Question Type : **MCQ**

Question ID : **264330133534**

Option 1 ID : **264330523167**

Option 2 ID : **264330523169**

Option 3 ID : **264330523168**

Option 4 ID : **264330523170**

Status : **Answered**

Chosen Option : **3**

Q.20 Select the option that is related to the third word in the same way as the second word is related to the first word.

Trivial : Insignificant : : Veteran : ?

Ans ☒ 1. Inexperienced

☒ 2. Fool

☒ 3. Funny

☒ 4. Experienced

Question Type : **MCQ**

Question ID : **264330133527**

Option 1 ID : **264330523142**

Option 2 ID : **264330523140**

Option 3 ID : **264330523141**

Option 4 ID : **264330523139**

Status : **Answered**

Chosen Option : **4**

Q.1 Which among the following is India's first Human spaceflight programme?

- Ans
- ☒ 1. Shukrayaan
 - ☒ 2. Gaganyaan
 - ☒ 3. Mangalyaan
 - ☒ 4. Chandrayaan - 1

Question Type : MCQ

Question ID : 264330134014

Option 1 ID : 264330525079

Option 2 ID : 264330525082

Option 3 ID : 264330525081

Option 4 ID : 264330525080

Status : Answered

Chosen Option : 2

Q.2 When did Mahatma Gandhi founded the All India Harijan Sevak Sangh?

- Ans
- ☒ 1. 1920
 - ☒ 2. 1928
 - ☒ 3. 1936
 - ☒ 4. 1932

Question Type : MCQ

Question ID : 264330134660

Option 1 ID : 264330527596

Option 2 ID : 264330527597

Option 3 ID : 264330527595

Option 4 ID : 264330527598

Status : Answered

Chosen Option : 4

Q.3 'Galpaguchchha', written by Rabindranath Tagore is a collection of _____.

- Ans
- ☒ 1. devotional songs
 - ☒ 2. poems
 - ☒ 3. English shayaris
 - ☒ 4. short stories

Question Type : MCQ

Question ID : 264330135501

Option 1 ID : 264330530914

Option 2 ID : 264330530911

Option 3 ID : 264330530913

Option 4 ID : 264330530912

Status : Answered

Chosen Option : 1

Q.4 Who among the following won the most number of Grand Slam Tournaments in Men's Tennis Singles as of 25th October 2022?

- Ans**
- ☒ 1. Pete Sampras
 - ☒ 2. Rafael Nadal
 - ☒ 3. Roger Federer
 - ☒ 4. Novak Djokovic

Question Type : **MCQ**
 Question ID : **264330134029**
 Option 1 ID : **264330525139**
 Option 2 ID : **264330525141**
 Option 3 ID : **264330525140**
 Option 4 ID : **264330525142**
 Status : **Answered**
 Chosen Option : **4**

Q.5 _____ is the heaviest naturally occurring element of Periodic Table with an atomic weight of 238.

- Ans**
- ☒ 1. Xenon
 - ☒ 2. Uranium
 - ☒ 3. Helium
 - ☒ 4. Mercury

Question Type : **MCQ**
 Question ID : **264330134011**
 Option 1 ID : **264330525070**
 Option 2 ID : **264330525069**
 Option 3 ID : **264330525067**
 Option 4 ID : **264330525068**
 Status : **Answered**
 Chosen Option : **2**

Q.6 The feature of Directive Principles of State Policy in the Indian Constitution is borrowed from the _____ Constitution

- Ans**
- ☒ 1. British
 - ☒ 2. Irish
 - ☒ 3. French
 - ☒ 4. Canadian

Question Type : **MCQ**
 Question ID : **264330134026**
 Option 1 ID : **264330525128**
 Option 2 ID : **264330525129**
 Option 3 ID : **264330525127**
 Option 4 ID : **264330525130**
 Status : **Answered**
 Chosen Option : **2**

Q.7 _____ is a festival of sowing seeds in the field. It is a major festival celebrated in Jharkhand.

- Ans
- ☐ 1. Karam
 - ☐ 2. Bandana
 - ☐ 3. Jawa
 - ☒ 4. Rohini

Question Type : MCQ
Question ID : 264330134647
Option 1 ID : 264330527544
Option 2 ID : 264330527543
Option 3 ID : 264330527546
Option 4 ID : 264330527545
Status : Answered
Chosen Option : 3

Q.8 In which year was the 5G telecommunications technology launched in India?

- Ans
- ☐ 1. 2019
 - ☒ 2. 2022
 - ☐ 3. 2017
 - ☐ 4. 2014

Question Type : MCQ
Question ID : 264330135493
Option 1 ID : 264330530881
Option 2 ID : 264330530882
Option 3 ID : 264330530880
Option 4 ID : 264330530879
Status : Answered
Chosen Option : 2

Q.9 Which among the following book was NOT written by King Harshavardhana?

- Ans
- ☐ 1. Ratnavali
 - ☒ 2. Amuktamalayada
 - ☐ 3. Nagananda
 - ☐ 4. Priyadarsika

Question Type : MCQ
Question ID : 264330134657
Option 1 ID : 264330527583
Option 2 ID : 264330527586
Option 3 ID : 264330527585
Option 4 ID : 264330527584
Status : Answered
Chosen Option : 2

Q.10 According to Census 2011, which among the following is the least populous Union territory in India?

- Ans
- ☒ 1. Chandigarh
 - ☒ 2. Lakshadweep
 - ☒ 3. Dadra and Nagar Haveli
 - ☒ 4. Daman and Diu

Question Type : MCQ
Question ID : 264330137747
Option 1 ID : 264330539595
Option 2 ID : 264330539598
Option 3 ID : 264330539596
Option 4 ID : 264330539597
Status : Answered
Chosen Option : 2

Q.11 Who among the following was the founder of the Khilji Dynasty?

- Ans
- ☒ 1. Jalal-ud-din Firoz Khilji
 - ☒ 2. Alauddin Khilji
 - ☒ 3. Nasiruddin Khusrau Shah
 - ☒ 4. Qutbuddin Mubarak Shah

Question Type : MCQ
Question ID : 264330134020
Option 1 ID : 264330525106
Option 2 ID : 264330525105
Option 3 ID : 264330525103
Option 4 ID : 264330525104
Status : Answered
Chosen Option : 1

Q.12 Which law of economics state "Bad money drives out good money"?

- Ans
- ☒ 1. Baxter's Law
 - ☒ 2. Ohm's Law
 - ☒ 3. Gresham's Law
 - ☒ 4. Gauss's Law

Question Type : MCQ
Question ID : 264330135508
Option 1 ID : 264330530942
Option 2 ID : 264330530939
Option 3 ID : 264330530940
Option 4 ID : 264330530941
Status : Answered
Chosen Option : 3

Q.13 Governor general Lord Dalhousie described the Kingdom of _____ "as a cherry that will drop into our mouth one day".

- Ans
- ☒ 1. Ahom
 - ☒ 2. Mysore
 - ☒ 3. Awadh
 - ☒ 4. Maratha

Question Type : MCQ
Question ID : 264330137034
Option 1 ID : 264330536780
Option 2 ID : 264330536781
Option 3 ID : 264330536782
Option 4 ID : 264330536779
Status : Answered
Chosen Option : 3

Q.14 Which among the following dances is also known as Ekaharya, where one dancer takes on many roles in a single performance?

- Ans
- ☒ 1. Bharatnatyam
 - ☒ 2. Kuchipudi
 - ☒ 3. Kathakali
 - ☒ 4. Kathak

Question Type : MCQ
Question ID : 264330134008
Option 1 ID : 264330525055
Option 2 ID : 264330525058
Option 3 ID : 264330525057
Option 4 ID : 264330525056
Status : Answered
Chosen Option : 2

Q.15 The Blackbuck National Park is located in _____.

- Ans
- ☒ 1. Sikkim
 - ☒ 2. Gujarat
 - ☒ 3. Madhya Pradesh
 - ☒ 4. Haryana

Question Type : MCQ
Question ID : 264330134013
Option 1 ID : 264330525075
Option 2 ID : 264330525077
Option 3 ID : 264330525078
Option 4 ID : 264330525076
Status : Answered
Chosen Option : 2

Q.16 Which among the following is not an example of Thallophyta?

- Ans
- ☒ 1. Spirogyra
 - ☒ 2. Marchantia
 - ☒ 3. Chara
 - ☒ 4. Cladophora

Question Type : MCQ

Question ID : 264330134012

Option 1 ID : 264330525073

Option 2 ID : 264330525074

Option 3 ID : 264330525071

Option 4 ID : 264330525072

Status : Not Answered

Chosen Option : --

Q.17 Bhimsen Joshi was one of the greatest Indian vocalists from _____, in the Hindustani classical tradition.

- Ans
- ☒ 1. Karnataka
 - ☒ 2. Tamil Nadu
 - ☒ 3. Maharashtra
 - ☒ 4. Kerala

Question Type : MCQ

Question ID : 264330134024

Option 1 ID : 264330525121

Option 2 ID : 264330525120

Option 3 ID : 264330525122

Option 4 ID : 264330525119

Status : Answered

Chosen Option : 3

Q.18 The High court of Delhi was established in _____.

- Ans
- ☒ 1. 1962
 - ☒ 2. 1947
 - ☒ 3. 1951
 - ☒ 4. 1966

Question Type : MCQ

Question ID : 264330137022

Option 1 ID : 264330536733

Option 2 ID : 264330536731

Option 3 ID : 264330536732

Option 4 ID : 264330536734

Status : Answered

Chosen Option : 4

Q.19 The Department of Pharmaceuticals has given 'in-principle' approval to the proposals to set up bulk drug parks in three states- Himachal Pradesh, Gujarat and _____ under the scheme of "Promotion of Bulk Drug Parks".

- Ans**
- ☐ 1. Uttar Pradesh
 - ☐ 2. West Bengal
 - ☐ 3. Madhya Pradesh
 - ☒ 4. Andhra Pradesh

Question Type : **MCQ**

Question ID : **264330134006**

Option 1 ID : **264330525050**

Option 2 ID : **264330525047**

Option 3 ID : **264330525048**

Option 4 ID : **264330525049**

Status : **Answered**

Chosen Option : **2**

Q.20 Which famous Indian Kathak dancer received the Padma Vibhushan, India's second highest civilian award, in 1986?

- Ans**
- ☐ 1. Manjari Chaturvedi
 - ☐ 2. Madhavi Mudgal
 - ☐ 3. Mallika Sarabhai
 - ☒ 4. Birju Maharaj

Question Type : **MCQ**

Question ID : **264330135503**

Option 1 ID : **264330530922**

Option 2 ID : **264330530920**

Option 3 ID : **264330530919**

Option 4 ID : **264330530921**

Status : **Answered**

Chosen Option : **4**

Q.21 The ancient name of which of the following rivers is Vipasha?

- Ans**
- ☐ 1. Sutlej
 - ☐ 2. Ravi
 - ☐ 3. Chenab
 - ☒ 4. Beas

Question Type : **MCQ**

Question ID : **264330134016**

Option 1 ID : **264330525090**

Option 2 ID : **264330525087**

Option 3 ID : **264330525089**

Option 4 ID : **264330525088**

Status : **Answered**

Chosen Option : **2**

Q.22 According to 2011 Census, which among the following states has the highest literacy rate?

- Ans ☒ 1. Karnataka
☒ 2. Tamil Nadu
☒ 3. Maharashtra
☒ 4. Kerala

Question Type : MCQ
 Question ID : 264330133992
 Option 1 ID : 264330524992
 Option 2 ID : 264330524994
 Option 3 ID : 264330524991
 Option 4 ID : 264330524993
 Status : Answered
 Chosen Option : 4

Q.23 Which of the following cities was the first planned city of the Mughals?

- Ans ☒ 1. Mirzapur
☒ 2. Fatehpur Sikri
☒ 3. Lucknow
☒ 4. Lahore

Question Type : MCQ
 Question ID : 264330137013
 Option 1 ID : 264330536697
 Option 2 ID : 264330536696
 Option 3 ID : 264330536698
 Option 4 ID : 264330536695
 Status : Answered
 Chosen Option : 2

Q.24 Lok Sabha has a fixed term of _____ years and can be dissolved by the President at any time.

- Ans ☒ 1. 8
☒ 2. 10
☒ 3. 12
☒ 4. 5

Question Type : MCQ
 Question ID : 264330134027
 Option 1 ID : 264330525132
 Option 2 ID : 264330525133
 Option 3 ID : 264330525134
 Option 4 ID : 264330525131
 Status : Answered
 Chosen Option : 4

Q.25 The International Cricket Council (ICC) Women's Cricket World Cup 2022 was hosted by _____ in March and April 2022.

- Ans**
- ☒ 1. England
 - ☒ 2. India
 - ☒ 3. Bangladesh
 - ☒ 4. New Zealand

Question Type : **MCQ**
 Question ID : **264330134028**
 Option 1 ID : **264330525137**
 Option 2 ID : **264330525136**
 Option 3 ID : **264330525135**
 Option 4 ID : **264330525138**
 Status : **Answered**
 Chosen Option : **1**

Section : English Language and Comprehension

Q.1 Select the appropriate synonym for the underlined word.
 It was a distraction.

- Ans**
- ☒ 1. confusion
 - ☒ 2. faith
 - ☒ 3. conviction
 - ☒ 4. assurance

Question Type : **MCQ**
 Question ID : **264330134492**
 Option 1 ID : **264330526932**
 Option 2 ID : **264330526933**
 Option 3 ID : **264330526934**
 Option 4 ID : **264330526931**
 Status : **Answered**
 Chosen Option : **1**

Q.2 Choose the word that means the same as the given word.

Impede

- Ans**
- ☒ 1. Sore
 - ☒ 2. Stalwart
 - ☒ 3. Thwart
 - ☒ 4. Stampede

Question Type : **MCQ**
 Question ID : **264330134814**
 Option 1 ID : **264330528198**
 Option 2 ID : **264330528196**
 Option 3 ID : **264330528197**
 Option 4 ID : **264330528195**
 Status : **Answered**
 Chosen Option : **2**

Q.3 Improve the underlined part of the sentence. Choose 'No improvement' as an answer if the sentence is grammatically correct.
They selling postage stamps at the corner store.

Ans ✓ 1. sell postage stamps

✗ 2. sold postal stamped

✗ 3. No improvement

✗ 4. sells postage stamps

Question Type : MCQ

Question ID : 264330134376

Option 1 ID : 264330526489

Option 2 ID : 264330526488

Option 3 ID : 264330526490

Option 4 ID : 264330526487

Status : Answered

Chosen Option : 1

Q.4 Select the most appropriate option to fill in the blank.

In 1971, he was awarded the silver _____ of the Society of Arts, London.

Ans ✓ 1. medal

✗ 2. metal

✗ 3. meddle

✗ 4. medieval

Question Type : MCQ

Question ID : 264330134795

Option 1 ID : 264330528126

Option 2 ID : 264330528124

Option 3 ID : 264330528125

Option 4 ID : 264330528123

Status : Answered

Chosen Option : 1

Q.5 Select the most appropriate option to substitute the bracketed segment in the given sentence. If there is no need to substitute it, select 'no substitution required'.

Chia is currently pursuing a (master's in developmental studies in Netherlands).

Ans ✓ 1. master's in developmental studies in the Netherlands.

✗ 2. masters' in developmental studies in the Netherlands.

✗ 3. No substitution required

✗ 4. master's in developmental studies at Netherlands.

Question Type : MCQ

Question ID : 264330136086

Option 1 ID : 264330533155

Option 2 ID : 264330533156

Option 3 ID : 264330533158

Option 4 ID : 264330533157

Status : Answered

Chosen Option : 3

Q.6 In the following question, out of the given four alternatives, select the alternative which best expresses the meaning of the Idiom/Phrase.
To have a foot in the grave

- Ans** ☒ 1. To be near death
☒ 2. To take risks
☒ 3. To trip somebody over
☒ 4. To hire a contract killer

Question Type : **MCQ**
Question ID : **264330134496**
Option 1 ID : **264330526949**
Option 2 ID : **264330526950**
Option 3 ID : **264330526947**
Option 4 ID : **264330526948**
Status : **Answered**
Chosen Option : **1**

Q.7 Improve the underlined part of the sentence. Choose 'No improvement' as an answer if the sentence is grammatically correct.
The most worrying aspect of climate change is the effect it has on the world's food supply.

- Ans** ☒ 1. A most worry aspect
☒ 2. A worried aspects
☒ 3. The most worrying aspects
☒ 4. No improvement

Question Type : **MCQ**
Question ID : **264330134481**
Option 1 ID : **264330526891**
Option 2 ID : **264330526893**
Option 3 ID : **264330526892**
Option 4 ID : **264330526894**
Status : **Answered**
Chosen Option : **4**

Q.8 In the following question, out of the given four alternatives, select the alternative which best expresses the meaning of the Idiom/Phrase.
To have the heart of stone

- Ans** ☒ 1. Not being able to make a decision
☒ 2. To be fearless
☒ 3. To feel no pity
☒ 4. To have a hidden agenda

Question Type : **MCQ**
Question ID : **264330134497**
Option 1 ID : **264330526951**
Option 2 ID : **264330526952**
Option 3 ID : **264330526954**
Option 4 ID : **264330526953**
Status : **Answered**
Chosen Option : **3**

Q.9 Choose the word that can substitute the given group of words.
A person appointed by two parties to solve a problem

- Ans ☒ 1. Advocate
☒ 2. Judge
☒ 3. Arbitrator
☒ 4. Jury

Question Type : MCQ
Question ID : 264330134490
Option 1 ID : 264330526925
Option 2 ID : 264330526923
Option 3 ID : 264330526926
Option 4 ID : 264330526924
Status : Answered
Chosen Option : 3

Q.10 Choose the word that is opposite in meaning to the given word.

Analogous

- Ans ☒ 1. Matching
☒ 2. Puzzle
☒ 3. Straight
☒ 4. Dissimilar

Question Type : MCQ
Question ID : 264330135300
Option 1 ID : 264330530112
Option 2 ID : 264330530114
Option 3 ID : 264330530113
Option 4 ID : 264330530111
Status : Answered
Chosen Option : 1

Q.11 Choose the incorrectly spelt word.

- Ans ☒ 1. Possible
☒ 2. Energetic
☒ 3. Helpful
☒ 4. Juorney

Question Type : MCQ
Question ID : 264330134498
Option 1 ID : 264330526957
Option 2 ID : 264330526956
Option 3 ID : 264330526955
Option 4 ID : 264330526958
Status : Answered
Chosen Option : 4

Q.12 Select the appropriate antonym for the underlined word.
Amenorrhea can cause a range of issues, including infertility.

- Ans ☒ 1. fecund
☒ 2. stance
☒ 3. sterile
☒ 4. barrenness

Question Type : MCQ
Question ID : 264330134495
Option 1 ID : 264330526945
Option 2 ID : 264330526946
Option 3 ID : 264330526944
Option 4 ID : 264330526943
Status : Answered
Chosen Option : 2

Q.13 Find the part of the given sentence that has an error in it. If there is no error, choose 'No error'.
Methanol is released from pectin, and is therefore many abundant in fermented fruit.

- Ans ☒ 1. Methanol is released from pectin,
☒ 2. abundant in fermented fruit.
☒ 3. No error
☒ 4. and is therefore many

Question Type : MCQ
Question ID : 264330134528
Option 1 ID : 264330527071
Option 2 ID : 264330527073
Option 3 ID : 264330527074
Option 4 ID : 264330527072
Status : Answered
Chosen Option : 4

Q.14 A sentence has been given with a blank to be filled with an appropriate option. Choose the correct alternative.
I always try to _____ chocolates for you.

- Ans ☒ 1. bringing
☒ 2. bought
☒ 3. bring
☒ 4. brought

Question Type : MCQ
Question ID : 264330134482
Option 1 ID : 264330526895
Option 2 ID : 264330526898
Option 3 ID : 264330526896
Option 4 ID : 264330526897
Status : Answered
Chosen Option : 3

Q.15 Choose the sentence with no spelling error.

- Ans
- ☒ 1. After a long momment, she shook her head.
 - ☒ 2. After a long momant, she shock her head.
 - ☒ 3. After a long moment, she shuok her head.
 - ☒ 4. After a long moment, she shook her head.

Question Type : MCQ

Question ID : 264330134794

Option 1 ID : 264330528120

Option 2 ID : 264330528122

Option 3 ID : 264330528121

Option 4 ID : 264330528119

Status : Answered

Chosen Option : 4

Q.16 A sentence has been given with a blank to be filled with an appropriate option. Choose the correct alternative.

When there is not _____ to eat, people starve to death.

- Ans
- ☒ 1. some
 - ☒ 2. a few
 - ☒ 3. enough
 - ☒ 4. any

Question Type : MCQ

Question ID : 264330134804

Option 1 ID : 264330528161

Option 2 ID : 264330528160

Option 3 ID : 264330528162

Option 4 ID : 264330528159

Status : Answered

Chosen Option : 3

Q.17 Choose the word that can substitute the given group of words.
The editor of a dictionary

- Ans
- ☒ 1. Scenographer
 - ☒ 2. Stenographer
 - ☒ 3. Lexicographer
 - ☒ 4. Hagiographer

Question Type : MCQ

Question ID : 264330134491

Option 1 ID : 264330526927

Option 2 ID : 264330526928

Option 3 ID : 264330526930

Option 4 ID : 264330526929

Status : Answered

Chosen Option : 3

Q.18 Identify the segment that contains a grammatical error. If there is no error, select 'No error'.

Never put of / until tomorrow what / you can do today.

- Ans
- ☒ 1. you can do today.
 - ☒ 2. until tomorrow what
 - ☒ 3. No error
 - ☒ 4. Never put of

Question Type : MCQ

Question ID : 264330136083

Option 1 ID : 264330533145

Option 2 ID : 264330533144

Option 3 ID : 264330533146

Option 4 ID : 264330533143

Status : Answered

Chosen Option : 4

Q.19 Select the most appropriate option to fill in the blank.

I enjoy finding ways to make the most of my budget by being _____.

- Ans
- ☒ 1. miser
 - ☒ 2. lethargic
 - ☒ 3. frugal
 - ☒ 4. gloomy

Question Type : MCQ

Question ID : 264330134501

Option 1 ID : 264330526967

Option 2 ID : 264330526969

Option 3 ID : 264330526968

Option 4 ID : 264330526970

Status : Answered

Chosen Option : 3

Q.20 Find the part of the given sentence that has an error in it. If there is no error, choose 'No error'.

India is already the third-largest aviation market in terms of domestic travel.

- Ans
- ☒ 1. aviation market in
 - ☒ 2. India is already the third-largest
 - ☒ 3. No error
 - ☒ 4. terms of domestic travel.

Question Type : MCQ

Question ID : 264330134478

Option 1 ID : 264330526880

Option 2 ID : 264330526879

Option 3 ID : 264330526882

Option 4 ID : 264330526881

Status : Answered

Chosen Option : 4

Comprehension:

In the following passage some of the words have been deleted. Read the passage carefully and select the correct answer for the given blank out of the four alternatives.

Although the (1) _____ in the Supreme Court arise out of the judgments or orders made by the Subordinate Courts including the High Courts, but of late the Supreme Court has started entertaining (2) _____ in which interest of the public at large is involved and the Court can be moved by any (3) _____ or group of persons either by filing a Writ Petition at the Filing Counter of the Court or by (4) _____ a letter to Hon'ble the Chief Justice of India highlighting the question of public importance for (5) _____ this jurisdiction.

SubQuestion No : 21

Q.21 Select the most appropriate option to fill in blank number 1.

- Ans
- ☒ 1. proceedings
 - ☐ 2. arrangement
 - ☐ 3. battles
 - ☐ 4. punctuality

Question Type : MCQ

Question ID : 264330135291

Option 1 ID : 264330530075

Option 2 ID : 264330530078

Option 3 ID : 264330530076

Option 4 ID : 264330530077

Status : Answered

Chosen Option : 1

Comprehension:

In the following passage some of the words have been deleted. Read the passage carefully and select the correct answer for the given blank out of the four alternatives.

Although the (1) _____ in the Supreme Court arise out of the judgments or orders made by the Subordinate Courts including the High Courts, but of late the Supreme Court has started entertaining (2) _____ in which interest of the public at large is involved and the Court can be moved by any (3) _____ or group of persons either by filing a Writ Petition at the Filing Counter of the Court or by (4) _____ a letter to Hon'ble the Chief Justice of India highlighting the question of public importance for (5) _____ this jurisdiction.

SubQuestion No : 22

Q.22 Select the most appropriate option to fill in blank number 2.

- Ans
- ☐ 1. tangents
 - ☐ 2. jams
 - ☒ 3. matters
 - ☐ 4. means

Question Type : MCQ

Question ID : 264330135292

Option 1 ID : 264330530082

Option 2 ID : 264330530080

Option 3 ID : 264330530081

Option 4 ID : 264330530079

Status : Answered

Chosen Option : 3

Comprehension:

In the following passage some of the words have been deleted. Read the passage carefully and select the correct answer for the given blank out of the four alternatives.

Although the (1) _____ in the Supreme Court arise out of the judgments or orders made by the Subordinate Courts including the High Courts, but of late the Supreme Court has started entertaining (2) _____ in which interest of the public at large is involved and the Court can be moved by any (3) _____ or group of persons either by filing a Writ Petition at the Filing Counter of the Court or by (4) _____ a letter to Hon'ble the Chief Justice of India highlighting the question of public importance for (5) _____ this jurisdiction.

SubQuestion No : 23

Q.23 Select the most appropriate option to fill in blank number 3.

- Ans
- ☐ 1. personnel
 - ☐ 2. species
 - ☒ 3. individual
 - ☐ 4. fauna

Question Type : MCQ

Question ID : 264330135293

Option 1 ID : 264330530086

Option 2 ID : 264330530083

Option 3 ID : 264330530084

Option 4 ID : 264330530085

Status : Answered

Chosen Option : 3

Comprehension:

In the following passage some of the words have been deleted. Read the passage carefully and select the correct answer for the given blank out of the four alternatives.

Although the (1) _____ in the Supreme Court arise out of the judgments or orders made by the Subordinate Courts including the High Courts, but of late the Supreme Court has started entertaining (2) _____ in which interest of the public at large is involved and the Court can be moved by any (3) _____ or group of persons either by filing a Writ Petition at the Filing Counter of the Court or by (4) _____ a letter to Hon'ble the Chief Justice of India highlighting the question of public importance for (5) _____ this jurisdiction.

SubQuestion No : 24

Q.24 Select the most appropriate option to fill in blank number 4.

- Ans
- ☐ 1. calculating
 - ☒ 2. addressing
 - ☐ 3. Tagging
 - ☐ 4. summoning

Question Type : MCQ

Question ID : 264330135294

Option 1 ID : 264330530088

Option 2 ID : 264330530090

Option 3 ID : 264330530087

Option 4 ID : 264330530089

Status : Answered

Chosen Option : 4

Comprehension:

In the following passage some of the words have been deleted. Read the passage carefully and select the correct answer for the given blank out of the four alternatives.

Although the (1) _____ in the Supreme Court arise out of the judgments or orders made by the Subordinate Courts including the High Courts, but of late the Supreme Court has started entertaining (2) _____ in which interest of the public at large is involved and the Court can be moved by any (3) _____ or group of persons either by filing a Writ Petition at the Filing Counter of the Court or by (4) _____ a letter to Hon'ble the Chief Justice of India highlighting the question of public importance for (5) _____ this jurisdiction.

SubQuestion No : 25

Q.25 Select the most appropriate option to fill in blank number 5.

- Ans
- ☒ 1. Halting
 - ☒ 2. Invoking
 - ☒ 3. Rocking
 - ☒ 4. Joking

Question Type : MCQ

Question ID : 264330135295

Option 1 ID : 264330530091

Option 2 ID : 264330530093

Option 3 ID : 264330530092

Option 4 ID : 264330530094

Status : Answered

Chosen Option : 2

