

Multi Tasking Non Technical Staff and Havaladar CBIC and CBN Examination 2022

Roll Number	
Candidate Name	
Venue Name	iON Digital Zone iDZ Thondamuthur
Exam Date	09/05/2023
Exam Time	9:00 AM - 10:30 AM
Subject	MTS Non Tech Havaladar CBIC and CBN Examination 2022

Section : Numerical and Mathematical Ability

Q.1 The marked price of an article is 160 percent of the cost price. If 20 percent discount is given, then what will be the profit percentage?

- Ans** ☒ 1. 28 percent
☒ 2. 25 percent
☒ 3. 22 percent
☒ 4. 32 percent

Question Type : **MCQ**

Question ID : **264330137886**

Option 1 ID : **264330540152**

Option 2 ID : **264330540153**

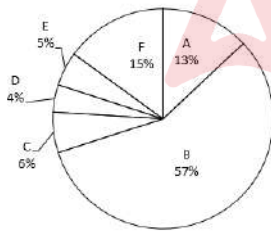
Option 3 ID : **264330540151**

Option 4 ID : **264330540154**

Status : **Answered**

Chosen Option : **2**

Q.2 The pie chart given below shows the number of mobile phones sold by six companies in a year. The total mobile phones sold by six companies are 500. Number of mobile phones sold by a particular company is shown as a percentage of total number of mobile phones sold by all these six companies.



What is the ratio of number of mobile phones sold by C to number of mobile phones sold by F?

- Ans** ☒ 1. 2 : 7
☒ 2. 5 : 2
☒ 3. 3 : 2
☒ 4. 2 : 5

Question Type : **MCQ**

Question ID : **264330137893**

Option 1 ID : **264330540182**

Option 2 ID : **264330540180**

Option 3 ID : **264330540181**

Option 4 ID : **264330540179**

Status : **Answered**

Chosen Option : **4**

Test Prime

**ALL EXAMS,
ONE SUBSCRIPTION**



70,000+
Mock Tests



**Personalised
Report Card**



**Unlimited
Re-Attempt**



600+
Exam Covered



**Previous Year
Papers**



**500%
Refund**



ATTEMPT FREE MOCK NOW

Q.3 Working 15 hours a day, Vaibhav can complete a piece of work in 35 days. How many hours a day should he work so as finish the work in 25 days?

- Ans**
- ✓ 1. 21 hours
 - ✗ 2. 20 hours
 - ✗ 3. 18 hours
 - ✗ 4. 17 hours

Question Type : **MCQ**
 Question ID : **264330135080**
 Option 1 ID : **264330529256**
 Option 2 ID : **264330529255**
 Option 3 ID : **264330529257**
 Option 4 ID : **264330529258**
 Status : **Answered**
 Chosen Option : **1**

Q.4 The Largest possible sphere is carved out of a cube of side 6 cm. What is the volume of the sphere?

- Ans**
- ✓ 1. $792/7 \text{ cm}^3$
 - ✗ 2. $144/7 \text{ cm}^3$
 - ✗ 3. $133/3 \text{ cm}^3$
 - ✗ 4. $444/7 \text{ cm}^3$

Question Type : **MCQ**
 Question ID : **264330135085**
 Option 1 ID : **264330529277**
 Option 2 ID : **264330529276**
 Option 3 ID : **264330529275**
 Option 4 ID : **264330529278**
 Status : **Answered**
 Chosen Option : **1**

Q.5 Find the value of $62.5 \times 2 + 1100 - (16)^2 + (30)^2$:

- Ans**
- ✗ 1. 1445
 - ✓ 2. 1869
 - ✗ 3. 1666
 - ✗ 4. 1900

Question Type : **MCQ**
 Question ID : **264330135131**
 Option 1 ID : **264330529460**
 Option 2 ID : **264330529461**
 Option 3 ID : **264330529459**
 Option 4 ID : **264330529462**
 Status : **Answered**
 Chosen Option : **2**

Q.6 The following table shows the number of units of a product manufactured and sold by a company in 5 years. Calculate the total number of unsold products.

Years	Number of units manufactured (in hundred)	Sold (in hundred)
2018	440	350
2019	500	450
2020	320	300
2021	450	400
2022	290	200

- Ans**
- ✓ 1. 30,000
- ✗ 2. 40,000
- ✗ 3. 50,000
- ✗ 4. 20,000

Question Type : **MCQ**

Question ID : **264330135147**

Option 1 ID : **264330529524**

Option 2 ID : **264330529525**

Option 3 ID : **264330529526**

Option 4 ID : **264330529523**

Status : **Answered**

Chosen Option : **1**

Q.7 The average age of 15 members of a committee is increased by 4 years when two members whose ages are 60 years and 70 years are replaced by the two new members. What is the average age of the new members?

- Ans**
- ✗ 1. 105 years
- ✗ 2. 80 years
- ✗ 3. 85 years
- ✓ 4. 95 years

Question Type : **MCQ**

Question ID : **264330137649**

Option 1 ID : **264330539204**

Option 2 ID : **264330539205**

Option 3 ID : **264330539203**

Option 4 ID : **264330539206**

Status : **Marked For Review**

Chosen Option : **4**

Q.8 The ratio of ages of two students is 5 : 4. The difference between their ages is 8 years. What is the age of the younger student?

- Ans**
- ✗ 1. 24 years
- ✓ 2. 32 years
- ✗ 3. 40 years
- ✗ 4. 48 years

Question Type : **MCQ**

Question ID : **264330137883**

Option 1 ID : **264330540142**

Option 2 ID : **264330540141**

Option 3 ID : **264330540139**

Option 4 ID : **264330540140**

Status : **Answered**

Chosen Option : **2**

Q.9 What is the compound interest on Rs. 10000 in 1 year 6 month at 10% per annum, the interest being compounded half-yearly?

- Ans**
- ☐ 1. Rs. 1625.50
 - ☒ 2. Rs. 1576.25
 - ☐ 3. Rs. 1826.50
 - ☐ 4. Rs. 1422.25

Question Type : MCQ

Question ID : 264330133807

Option 1 ID : 264330524254

Option 2 ID : 264330524251

Option 3 ID : 264330524252

Option 4 ID : 264330524253

Status : Answered

Chosen Option : 2

Q.10 If A can do a work in 21 days and B can do the same work in 28 days. In how many days will they complete the work if they work on alternate days?

- Ans**
- ☐ 1. 22 days
 - ☐ 2. 28 days
 - ☐ 3. 20 days
 - ☒ 4. 24 days

Question Type : MCQ

Question ID : 264330138405

Option 1 ID : 264330542228

Option 2 ID : 264330542230

Option 3 ID : 264330542229

Option 4 ID : 264330542227

Status : Answered

Chosen Option : 4

Q.11 On a certain sum, the simple interest for 2 years is Rs. 12000. If the sum is Rs. 12000, then what will be the compound interest (compounding annually) on the same sum at the same rate of interest for first 3 years?

- Ans**
- ☐ 1. Rs. 29250
 - ☐ 2. Rs. 29300
 - ☒ 3. Rs. 28500
 - ☐ 4. Rs. 22750

Question Type : MCQ

Question ID : 264330137635

Option 1 ID : 264330539150

Option 2 ID : 264330539149

Option 3 ID : 264330539148

Option 4 ID : 264330539147

Status : Answered

Chosen Option : 3

Q.12 The average of five consecutive odd numbers is 15. What is the smallest of these five numbers?

- Ans**
- ☒ 1. 11
 - ☐ 2. 13
 - ☐ 3. 15
 - ☐ 4. 9

Question Type : **MCQ**

Question ID : **264330137877**

Option 1 ID : **264330540117**

Option 2 ID : **264330540116**

Option 3 ID : **264330540115**

Option 4 ID : **264330540118**

Status : **Answered**

Chosen Option : **1**

Q.13 What is that greatest four-digit number which when divided by 3 and 4 leaves remainder 2 in each case?

- Ans**
- ☐ 1. 9994
 - ☐ 2. 9996
 - ☒ 3. 9998
 - ☐ 4. 9995

Question Type : **MCQ**

Question ID : **264330137889**

Option 1 ID : **264330540166**

Option 2 ID : **264330540164**

Option 3 ID : **264330540163**

Option 4 ID : **264330540165**

Status : **Answered**

Chosen Option : **3**

Q.14 A number is first increased by 12% and then decreased by 12%. The change in number is:

- Ans**
- ☐ 1. 1.44% increase
 - ☐ 2. 12% increase
 - ☐ 3. 12% decrease
 - ☒ 4. 1.44% decrease

Question Type : **MCQ**

Question ID : **264330133800**

Option 1 ID : **264330524224**

Option 2 ID : **264330524226**

Option 3 ID : **264330524225**

Option 4 ID : **264330524223**

Status : **Answered**

Chosen Option : **4**

Q.15 A person bought an article and sold it at a loss of 10 percent. If he had bought it for 30 percent less price and sold it for Rs. 90 more, then he would earn a profit of 35 percent. What is the cost price of the article?

- Ans**
- ☒ 1. Rs. 2400
 - ☒ 2. Rs. 2000
 - ☒ 3. Rs. 2100
 - ☒ 4. Rs. 2200

Question Type : **MCQ**
 Question ID : **264330137881**
 Option 1 ID : **264330540131**
 Option 2 ID : **264330540132**
 Option 3 ID : **264330540133**
 Option 4 ID : **264330540134**
 Status : **Answered**
 Chosen Option : **2**

Q.16 If $p : q : r = 2 : 5 : 3$ and $r : s = 6 : 5$, then what is the value of $p : q : r : s$?

- Ans**
- ☒ 1. $4 : 12 : 7 : 3$
 - ☒ 2. $4 : 10 : 6 : 5$
 - ☒ 3. $6 : 5 : 8 : 10$
 - ☒ 4. $8 : 12 : 7 : 8$

Question Type : **MCQ**
 Question ID : **264330137882**
 Option 1 ID : **264330540138**
 Option 2 ID : **264330540135**
 Option 3 ID : **264330540136**
 Option 4 ID : **264330540137**
 Status : **Answered**
 Chosen Option : **2**

Q.17 What is the smallest integer that is divisible by 12, 22 and 32?

- Ans**
- ☒ 1. 1056
 - ☒ 2. 1080
 - ☒ 3. 1144
 - ☒ 4. 444

Question Type : **MCQ**
 Question ID : **264330141036**
 Option 1 ID : **264330552491**
 Option 2 ID : **264330552493**
 Option 3 ID : **264330552494**
 Option 4 ID : **264330552492**
 Status : **Answered**
 Chosen Option : **1**

Q.18 Find the area of the rhombus whose diagonals are 16 cm and 20 cm.

- Ans
- ☒ 1. 110 cm²
 - ☒ 2. 150 cm²
 - ☒ 3. 160 cm²
 - ☒ 4. 120 cm²

Question Type : MCQ

Question ID : 264330138409

Option 1 ID : 264330542243

Option 2 ID : 264330542244

Option 3 ID : 264330542245

Option 4 ID : 264330542246

Status : Answered

Chosen Option : 3

Q.19 A train moves at a speed of 30 m/s and crosses a bridge of length 650 metres in 50 seconds. What is the length of the train?

- Ans
- ☒ 1. 1000 metres
 - ☒ 2. 900 metres
 - ☒ 3. 850 metres
 - ☒ 4. 750 metres

Question Type : MCQ

Question ID : 264330137876

Option 1 ID : 264330540114

Option 2 ID : 264330540111

Option 3 ID : 264330540113

Option 4 ID : 264330540112

Status : Answered

Chosen Option : 3

Q.20 Asha bought a saree for Rs. 4000 and sold it for Rs. 4400. Her profit percent is:

- Ans
- ☒ 1. 5%
 - ☒ 2. 80%
 - ☒ 3. 10%
 - ☒ 4. 40%

Question Type : MCQ

Question ID : 264330138731

Option 1 ID : 264330543531

Option 2 ID : 264330543534

Option 3 ID : 264330543532

Option 4 ID : 264330543533

Status : Answered

Chosen Option : 3

Q.1 Reena, Meena, Tina, Leena, and Neena are sitting in a straight line facing south. Tina is sitting to the immediate right of Reena. Only Neena is sitting between Reena and Leena. Tina is not sitting in the end. Who is sitting to the immediate left of Neena?

- Ans**
- ☒ 1. Tina
 - ☒ 2. Reena
 - ☒ 3. Meena
 - ☒ 4. Leena

Question Type : **MCQ**
 Question ID : **264330137795**
 Option 1 ID : **264330539788**
 Option 2 ID : **264330539789**
 Option 3 ID : **264330539787**
 Option 4 ID : **264330539790**
 Status : **Answered**
 Chosen Option : **4**

Q.2 Select the option that is related to the third letter cluster in the same way as the second letter cluster is related to the first letter cluster:
 DAK : FCM :: PVH : ?

- Ans**
- ☒ 1. RJZ
 - ☒ 2. SXJ
 - ☒ 3. RXJ
 - ☒ 4. RXI

Question Type : **MCQ**
 Question ID : **264330137789**
 Option 1 ID : **264330539763**
 Option 2 ID : **264330539766**
 Option 3 ID : **264330539764**
 Option 4 ID : **264330539765**
 Status : **Answered**
 Chosen Option : **3**

Q.3 Which of the following letter cluster will replace the question mark (?) in the given series?
 AGM, CEO, ECQ, GAS, ?

- Ans**
- ☒ 1. IYU
 - ☒ 2. IUY
 - ☒ 3. JZS
 - ☒ 4. YUI

Question Type : **MCQ**
 Question ID : **264330137786**
 Option 1 ID : **264330539751**
 Option 2 ID : **264330539752**
 Option 3 ID : **264330539754**
 Option 4 ID : **264330539753**
 Status : **Answered**
 Chosen Option : **1**

Q.4 Three statements are given followed by two conclusions numbered I and II. Assuming the statements to be true, even if they seem to be at variance with commonly known facts, decide which of the conclusions logically follow(s) from the statements.

Statements:

All students are good.

Rachel is a student.

Some good are honest.

Conclusions:

I. Rachel is honest.

II. Some honest are good.

- Ans**
- ✓ 1. Only conclusion II follows
 - ✗ 2. Only conclusion I follows
 - ✗ 3. Neither conclusion I nor II follows
 - ✗ 4. Both conclusions I and II follow

Question Type : **MCQ**

Question ID : **264330137798**

Option 1 ID : **264330539800**

Option 2 ID : **264330539799**

Option 3 ID : **264330539802**

Option 4 ID : **264330539801**

Status : **Answered**

Chosen Option : **1**

Q.5 Five people P, Q, T, V and R are sitting in a circle facing away from the centre. P is to the immediate right of V. T is in between V and R. Who is sitting to the immediate left of R?

- Ans**
- ✗ 1. P
 - ✗ 2. V
 - ✗ 3. T
 - ✓ 4. Q

Question Type : **MCQ**

Question ID : **264330137794**

Option 1 ID : **264330539783**

Option 2 ID : **264330539786**

Option 3 ID : **264330539785**

Option 4 ID : **264330539784**

Status : **Answered**

Chosen Option : **4**

Q.6 Which two signs should be interchanged to make the given equation correct?

$$12 + 4 \div 2 - 6 = 16$$

- Ans**
- ✗ 1. - and =
 - ✓ 2. + and -
 - ✗ 3. ÷ and =
 - ✗ 4. ÷ and +

Question Type : **MCQ**

Question ID : **264330137803**

Option 1 ID : **264330539820**

Option 2 ID : **264330539822**

Option 3 ID : **264330539819**

Option 4 ID : **264330539821**

Status : **Answered**

Chosen Option : **2**

Q.7 Select the option that is related to the third word in the same way as the second word is related to the first word.

Haughty : Arrogant :: Ominous : ?

- Ans**
- ☒ 1. Soothing
 - ☒ 2. Peaceful
 - ☒ 3. Threatening
 - ☒ 4. Calm

Question Type : **MCQ**

Question ID : **264330137788**

Option 1 ID : **264330539761**

Option 2 ID : **264330539759**

Option 3 ID : **264330539762**

Option 4 ID : **264330539760**

Status : **Answered**

Chosen Option : **3**

Q.8 In a certain code language, 'ABSENCE' is written as 'ASBECNE'. How will 'EXACTLY' be written in that language?

- Ans**
- ☒ 1. EAXCLYT
 - ☒ 2. EXACTLY
 - ☒ 3. EAXTCLY
 - ☒ 4. EAXCLTY

Question Type : **MCQ**

Question ID : **264330137542**

Option 1 ID : **264330538778**

Option 2 ID : **264330538775**

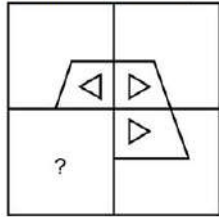
Option 3 ID : **264330538777**

Option 4 ID : **264330538776**

Status : **Answered**

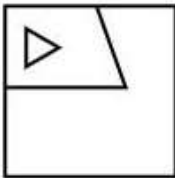
Chosen Option : **4**

Q.9 Select the option figure that will replace the question mark (?) in the figure given below to complete the pattern.
(rotation is not allowed)

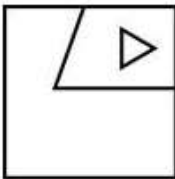


Ans

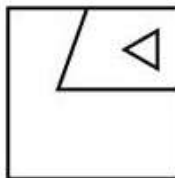
✗ 1.



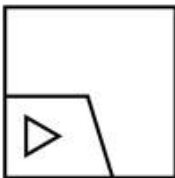
✗ 2.



✓ 3.



✗ 4.



Question Type : MCQ

Question ID : 264330137807

Option 1 ID : 264330539836

Option 2 ID : 264330539838

Option 3 ID : 264330539835

Option 4 ID : 264330539837

Status : Answered

Chosen Option : 3

Q.10 Two statements are given followed by two conclusions numbered I and II. Assuming the statements to be true, even if they seem to be at variance with commonly known facts, decide which of the conclusions logically follow (s) from the statements.

Statements:

Some gold are silver.

All gold are platinum.

Conclusions:

I. Some silver are platinum.

II. All platinum are gold.

- Ans**
- ☒ 1. Both conclusions I and II follow
 - ☒ 2. Only conclusion II follows
 - ☒ 3. Neither conclusion I nor II follows
 - ☒ 4. Only conclusion I follows

Question Type : MCQ

Question ID : 264330137797

Option 1 ID : 264330539797

Option 2 ID : 264330539796

Option 3 ID : 264330539798

Option 4 ID : 264330539795

Status : Answered

Chosen Option : 4

Q.11 In a certain code language, 'FELLOW' is coded as 'FDNLNY'. What is the code for 'GOLDEN' in that code language?

- Ans**
- ☒ 1. GNNEDQ
 - ☒ 2. DNNDQDQ
 - ☒ 3. GNNDDP
 - ☒ 4. GNMDEP

Question Type : MCQ

Question ID : 264330138835

Option 1 ID : 264330543950

Option 2 ID : 264330543949

Option 3 ID : 264330543948

Option 4 ID : 264330543947

Status : Answered

Chosen Option : 3

Q.12 Seven brothers P, Q, R, S, T, U, and V were born in different years. S is younger than only 2 other brothers and neither of them is U. P is older than R but younger than U and S. R is not the youngest. U is younger than Q who is younger than T. Who is the youngest?

- Ans**
- ☒ 1. T
 - ☒ 2. P
 - ☒ 3. Q
 - ☒ 4. V

Question Type : MCQ

Question ID : 264330137796

Option 1 ID : 264330539792

Option 2 ID : 264330539793

Option 3 ID : 264330539791

Option 4 ID : 264330539794

Status : Answered

Chosen Option : 4

Q.13 Study the given pattern carefully and select the number that can replace the question mark (?) in it.

First row- 6, 36, 72

Second row- 8, 48, 96

Third row- 9, 54, ?

- Ans**
- ☒ 1. 105
 - ☒ 2. 108
 - ☒ 3. 231
 - ☒ 4. 130

Question Type : **MCQ**

Question ID : **264330137802**

Option 1 ID : **264330539815**

Option 2 ID : **264330539818**

Option 3 ID : **264330539816**

Option 4 ID : **264330539817**

Status : **Answered**

Chosen Option : **2**

Q.14 Which of the following numbers will replace the question mark (?) in the given series?

69, 80, 89, 96, 101, ?

- Ans**
- ☒ 1. 104
 - ☒ 2. 102
 - ☒ 3. 105
 - ☒ 4. 106

Question Type : **MCQ**

Question ID : **264330133517**

Option 1 ID : **264330523100**

Option 2 ID : **264330523099**

Option 3 ID : **264330523101**

Option 4 ID : **264330523102**

Status : **Answered**

Chosen Option : **1**

Q.15 Select the option that is related to the third number in the same way as the second number is related to the first number.

289 : 325 :: 361 : ?

- Ans**
- ☒ 1. 400
 - ☒ 2. 401
 - ☒ 3. 399
 - ☒ 4. 411

Question Type : **MCQ**

Question ID : **264330133519**

Option 1 ID : **264330523108**

Option 2 ID : **264330523107**

Option 3 ID : **264330523109**

Option 4 ID : **264330523110**

Status : **Answered**

Chosen Option : **2**

Q.16 If A denotes 'addition', B denotes 'multiplication', C denotes 'subtraction', and D denotes 'division', then what will be the value of the following equation?
 $7 \text{ A } 5 \text{ C } (6 \text{ D } 3) = ?$

- Ans**
- ☒ 1. 32
 - ☒ 2. 16
 - ☒ 3. 10
 - ☒ 4. 19

Question Type : **MCQ**

Question ID : **264330137555**

Option 1 ID : **264330538830**

Option 2 ID : **264330538828**

Option 3 ID : **264330538827**

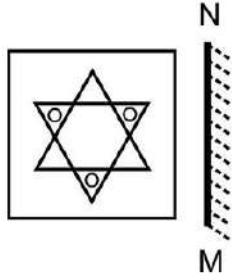
Option 4 ID : **264330538829**

Status : **Answered**

Chosen Option : **3**

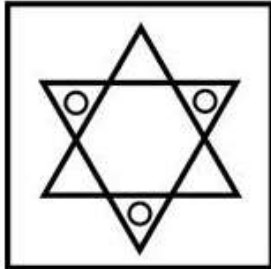


Q.17 Select the correct mirror image of the given figure when the mirror is placed to the right side of the figure.

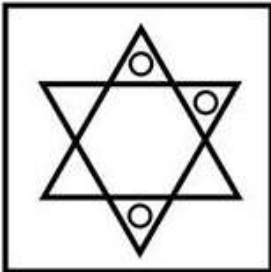


Ans

✓ 1.



✗ 2.



✗ 3.



✗ 4.



Question Type : MCQ

Question ID : 264330135040

Option 1 ID : 264330529097

Option 2 ID : 264330529095

Option 3 ID : 264330529098

Option 4 ID : 264330529096

Status : Answered

Chosen Option : 1

Q.18 In a certain code language, 'AJDM' is written as 'JDMA'. How will 'SKWM' be written in that language?

- Ans
- ☒ 1. KMMS
 - ☒ 2. KSMW
 - ☒ 3. KWMS
 - ☒ 4. KMWS

Question Type : MCQ

Question ID : 264330135002

Option 1 ID : 264330528946

Option 2 ID : 264330528945

Option 3 ID : 264330528944

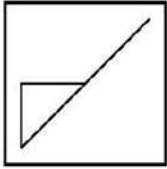
Option 4 ID : 264330528943

Status : Answered

Chosen Option : 3



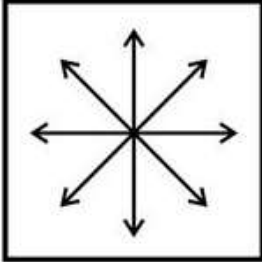
Q.19 Select the option figure in which the given figure (X) is embedded as its part (rotation is NOT allowed).



X

Ans

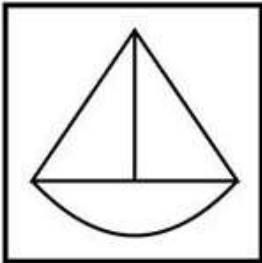
✗ 1.



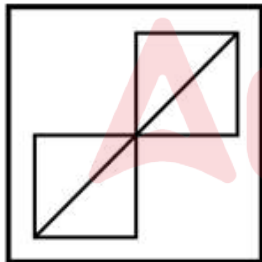
✗ 2.



✗ 3.



✓ 4.



Question Type : MCQ

Question ID : 264330135039

Option 1 ID : 264330529094

Option 2 ID : 264330529091

Option 3 ID : 264330529092

Option 4 ID : 264330529093

Status : Answered

Chosen Option : 4

Q.20 Which of the following numbers will replace the question mark (?) in the given series?

57, 54, 52, 49, 47, 44, 42, ?

Ans ☒ 1. 40

☒ 2. 27

☒ 3. 39

☒ 4. 47

Question Type : **MCQ**

Question ID : **264330137800**

Option 1 ID : **264330539807**

Option 2 ID : **264330539808**

Option 3 ID : **264330539810**

Option 4 ID : **264330539809**

Status : **Answered**

Chosen Option : **3**

Section : **General Awareness**

Q.1 Pradhan Mantri Jan-Dhan Yojana (PMJDY) now has in excess of 472 million accounts. Which state has topped this list (as on October 12, 2022)?

Ans ☒ 1. Haryana

☒ 2. West Bengal

☒ 3. Maharashtra

☒ 4. Uttar Pradesh

Question Type : **MCQ**

Question ID : **264330137894**

Option 1 ID : **264330540185**

Option 2 ID : **264330540186**

Option 3 ID : **264330540183**

Option 4 ID : **264330540184**

Status : **Not Answered**

Chosen Option : **--**

Q.2 According to census 2011, which of the following is NOT included in top ten most populous countries?

Ans ☒ 1. Pakistan

☒ 2. Japan

☒ 3. Nigeria

☒ 4. Canada

Question Type : **MCQ**

Question ID : **264330138316**

Option 1 ID : **264330541874**

Option 2 ID : **264330541871**

Option 3 ID : **264330541872**

Option 4 ID : **264330541873**

Status : **Not Answered**

Chosen Option : **--**

Q.3 One of the major hubs of information technology is the Silicon valley which is situated in _____.

- Ans
- ☐ 1. Tokyo
 - ☐ 2. London
 - ☐ 3. New york
 - ☒ 4. California

Question Type : MCQ
Question ID : 264330138913
Option 1 ID : 264330544260
Option 2 ID : 264330544259
Option 3 ID : 264330544262
Option 4 ID : 264330544261
Status : Answered
Chosen Option : 3

Q.4 The presiding officer of the Lok Sabha is called _____.

- Ans
- ☐ 1. The Chairman
 - ☒ 2. The Speaker
 - ☐ 3. The Deputy Chairman
 - ☐ 4. The Deputy Speaker

Question Type : MCQ
Question ID : 264330137915
Option 1 ID : 264330540268
Option 2 ID : 264330540267
Option 3 ID : 264330540270
Option 4 ID : 264330540269
Status : Answered
Chosen Option : 2

Q.5 Which among the following is the coldest of the atmospheric layers?

- Ans
- ☒ 1. Mesosphere
 - ☐ 2. Stratosphere
 - ☐ 3. Thermosphere
 - ☐ 4. Troposphere

Question Type : MCQ
Question ID : 264330133989
Option 1 ID : 264330524981
Option 2 ID : 264330524980
Option 3 ID : 264330524982
Option 4 ID : 264330524979
Status : Answered
Chosen Option : 1

Q.6 Which among the following Acts discarded the 'dyarchy' system at the provincial level and allowed for the emergence of popularly elected provincial legislatures?

Ans ☒ 1. Charter Act, 1793

☒ 2.

Montague-Chelmsford Reform (Government of India Act), 1919

☒ 3. Government of India Act, 1935

☒ 4. Pitt's India Act, 1784

Question Type : **MCQ**

Question ID : **264330137726**

Option 1 ID : **264330539512**

Option 2 ID : **264330539513**

Option 3 ID : **264330539514**

Option 4 ID : **264330539511**

Status : **Answered**

Chosen Option : **2**

Q.7 According to 2011 Census, which among the following state has the highest population?

Ans ☒ 1. Bihar

☒ 2. Tamil Nadu

☒ 3. Uttar Pradesh

☒ 4. Maharashtra

Question Type : **MCQ**

Question ID : **264330134017**

Option 1 ID : **264330525091**

Option 2 ID : **264330525093**

Option 3 ID : **264330525094**

Option 4 ID : **264330525092**

Status : **Answered**

Chosen Option : **3**

Q.8 Lovlina Borgohain is associated with which sports?

Ans ☒ 1. Chess

☒ 2. Table Tennis

☒ 3. Boxing

☒ 4. Swimming

Question Type : **MCQ**

Question ID : **264330137916**

Option 1 ID : **264330540274**

Option 2 ID : **264330540272**

Option 3 ID : **264330540273**

Option 4 ID : **264330540271**

Status : **Answered**

Chosen Option : **3**

Q.9 Who among the following wrote the biography of Jahangir known as Iqbalnama-i Jahangiri?

- Ans ☒ 1. Mutamid Khan
☒ 2. Inayat Khan
☒ 3. Abdul Rahim Khan
☒ 4. Abul Fazl

Question Type : MCQ
 Question ID : 264330133995
 Option 1 ID : 264330525005
 Option 2 ID : 264330525006
 Option 3 ID : 264330525003
 Option 4 ID : 264330525004
 Status : Answered
 Chosen Option : 3

Q.10 Which of the following dances is a popular folk dance of Maharashtra?

- Ans ☒ 1. Lavani
☒ 2. Bihu
☒ 3. Jhumar
☒ 4. Giddha

Question Type : MCQ
 Question ID : 264330137896
 Option 1 ID : 264330540193
 Option 2 ID : 264330540191
 Option 3 ID : 264330540194
 Option 4 ID : 264330540192
 Status : Answered
 Chosen Option : 1

Q.11 _____ was founded by Dadoba Pandurang and his brother Atmaram Pandurang in 1867.

- Ans ☒ 1. Tattvabodhini Sabha
☒ 2. Brahmo Samaj
☒ 3. Arya Samaj
☒ 4. Prarthana Samaj

Question Type : MCQ
 Question ID : 264330134710
 Option 1 ID : 264330527797
 Option 2 ID : 264330527796
 Option 3 ID : 264330527798
 Option 4 ID : 264330527795
 Status : Answered
 Chosen Option : 4

Q.12 What is the major function of a cell wall?

- Ans
- ☐ 1. It works as a storage for material
 - ☒ 2. It provides shape and rigidity to the cell
 - ☐ 3. It is responsible for cell division
 - ☐ 4. It helps in synthesis of carbohydrate

Question Type : MCQ

Question ID : 264330137900

Option 1 ID : 264330540207

Option 2 ID : 264330540210

Option 3 ID : 264330540209

Option 4 ID : 264330540208

Status : Not Answered

Chosen Option : --

Q.13 Which article of the constitution of India lays down the uniform civil code?

- Ans
- ☐ 1. Article 377
 - ☐ 2. Article 370
 - ☒ 3. Article 44
 - ☐ 4. Article 12

Question Type : MCQ

Question ID : 264330137914

Option 1 ID : 264330540263

Option 2 ID : 264330540264

Option 3 ID : 264330540265

Option 4 ID : 264330540266

Status : Answered

Chosen Option : 3

Q.14 'In The Afternoon of Time' is an autobiographical book by _____.

- Ans
- ☐ 1. Satyajit Ray
 - ☐ 2. Sam Pitroda
 - ☒ 3. Harivansh Rai Bachchan
 - ☐ 4. P.T. Usha

Question Type : MCQ

Question ID : 264330138901

Option 1 ID : 264330544213

Option 2 ID : 264330544212

Option 3 ID : 264330544214

Option 4 ID : 264330544211

Status : Not Answered

Chosen Option : --

Q.15 Which among the following instruments is used for measuring the humidity of the air or a gas?

- Ans
- ☐ 1. Bolometer
 - ☒ 2. Hygrometer
 - ☐ 3. Hydrometer
 - ☐ 4. Altimeter

Question Type : MCQ

Question ID : 264330133986

Option 1 ID : 264330524968

Option 2 ID : 264330524970

Option 3 ID : 264330524969

Option 4 ID : 264330524967

Status : Answered

Chosen Option : 2

Q.16 The Family Courts (Amendment) Bill seeks to extend the application of the Family Courts Act to which of the following states?

- Ans
- ☐ 1. Nagaland and Sikkim
 - ☐ 2. Sikkim and Manipur
 - ☒ 3. Himachal Pradesh and Nagaland
 - ☐ 4. Himachal Pradesh and Sikkim

Question Type : MCQ

Question ID : 264330137712

Option 1 ID : 264330539456

Option 2 ID : 264330539458

Option 3 ID : 264330539455

Option 4 ID : 264330539457

Status : Not Answered

Chosen Option : --

Q.17 Saswati Sen is the proud recipient of the Sangeet Natak Akademi Award for 2004-2005. She is recognized for which dance form?

- Ans
- ☒ 1. Kathak
 - ☐ 2. Kuchipudi
 - ☐ 3. Manipuri
 - ☐ 4. Mohiniyattam

Question Type : MCQ

Question ID : 264330138903

Option 1 ID : 264330544222

Option 2 ID : 264330544221

Option 3 ID : 264330544219

Option 4 ID : 264330544220

Status : Not Attempted and Marked For Review

Chosen Option : --

Q.18 Jim Corbett National Park is in which state of India?

- Ans
- ☐ 1. Punjab
 - ☐ 2. Himachal Pradesh
 - ☒ 3. Uttarakhand
 - ☐ 4. Uttar Pradesh

Question Type : MCQ
 Question ID : 264330137904
 Option 1 ID : 264330540226
 Option 2 ID : 264330540224
 Option 3 ID : 264330540223
 Option 4 ID : 264330540225
 Status : Answered
 Chosen Option : 3

Q.19 _____ is used for the separation of components of a mixture containing two miscible liquids that boil without decomposition and have sufficient difference in their boiling points.

- Ans
- ☐ 1. Carbonation
 - ☒ 2. Distillation
 - ☐ 3. Sublimation
 - ☐ 4. Emulsification

Question Type : MCQ
 Question ID : 264330133988
 Option 1 ID : 264330524975
 Option 2 ID : 264330524978
 Option 3 ID : 264330524977
 Option 4 ID : 264330524976
 Status : Answered
 Chosen Option : 2

Q.20 Late Jagjit Singh was a popular composer and a _____ singer.

- Ans
- ☐ 1. Opera
 - ☒ 2. Ghazal
 - ☐ 3. Rock
 - ☐ 4. Pop

Question Type : MCQ
 Question ID : 264330137912
 Option 1 ID : 264330540256
 Option 2 ID : 264330540258
 Option 3 ID : 264330540255
 Option 4 ID : 264330540257
 Status : Not Attempted and Marked For Review
 Chosen Option : --

Q.21 Magha Saaji is celebrated as Makar Sankranti in which of the following states?

- Ans
- ☐ 1. Madhya Pradesh
 - ☐ 2. Gujarat
 - ☒ 3. Himachal Pradesh
 - ☐ 4. Goa

Question Type : MCQ
 Question ID : 264330134697
 Option 1 ID : 264330527743
 Option 2 ID : 264330527744
 Option 3 ID : 264330527746
 Option 4 ID : 264330527745
 Status : Not Answered
 Chosen Option : --

Q.22 Myanmar doesn't share its boundary with which of the following states?

- Ans
- ☐ 1. Nagaland
 - ☐ 2. Manipur
 - ☒ 3. Sikkim
 - ☐ 4. Mizoram

Question Type : MCQ
 Question ID : 264330134707
 Option 1 ID : 264330527783
 Option 2 ID : 264330527785
 Option 3 ID : 264330527786
 Option 4 ID : 264330527784
 Status : Answered
 Chosen Option : 3

Q.23 The number of times a unit of money changes hands during the unit period is called the _____.

- Ans
- ☒ 1. velocity of circulation of money
 - ☐ 2. base money
 - ☐ 3. remittances
 - ☐ 4. zero economic profit

Question Type : MCQ
 Question ID : 264330138906
 Option 1 ID : 264330544231
 Option 2 ID : 264330544232
 Option 3 ID : 264330544233
 Option 4 ID : 264330544234
 Status : Answered
 Chosen Option : 1

Q.24 Who among the following won the Meltwater Champions Chess Tour 2022?

- Ans ☒ 1. Magnus Carlsen
- ☐ 2. Arjun Erigaisi
- ☐ 3. Jan-Krzysztof Duda
- ☐ 4. Vidit Santosh Gujrathi

Question Type : MCQ
 Question ID : 264330134004
 Option 1 ID : 264330525040
 Option 2 ID : 264330525039
 Option 3 ID : 264330525041
 Option 4 ID : 264330525042
 Status : Answered
 Chosen Option : 1

Q.25 Who among the following Mughal emperors built Sheesh Mahal in Agra?

- Ans ☒ 1. Shah Jahan
- ☐ 2. Humayun
- ☐ 3. Babur
- ☐ 4. Akbar

Question Type : MCQ
 Question ID : 264330137715
 Option 1 ID : 264330539467
 Option 2 ID : 264330539470
 Option 3 ID : 264330539469
 Option 4 ID : 264330539468
 Status : Not Attempted and Marked For Review
 Chosen Option : --

Section : English Language and Comprehension

Q.1 Choose the sentence with no spelling error.

- Ans ☐ 1. How is your currant brand strategy working?
- ☐ 2. How is your current brrand strategy working?
- ☐ 3. How is your current brand stretagy working?
- ☒ 4. How is your current brand strategy working?

Question Type : MCQ
 Question ID : 264330134846
 Option 1 ID : 264330528319
 Option 2 ID : 264330528322
 Option 3 ID : 264330528321
 Option 4 ID : 264330528320
 Status : Answered
 Chosen Option : 4

Q.2 Select the most appropriate option to fill in the blank.

After suffering so many losses, the company is about to go _____.

Ans ☒ 1. bankrupt

☐ 2. silent

☐ 3. cynical

☐ 4. awry

Question Type : MCQ

Question ID : 264330134847

Option 1 ID : 264330528325

Option 2 ID : 264330528324

Option 3 ID : 264330528323

Option 4 ID : 264330528326

Status : Answered

Chosen Option : 1

Q.3 In the following question, out of the given four alternatives, select the alternative which best expresses the meaning of the Idiom/Phrase.
Fit as a fiddle

Ans ☒ 1. In a very good physical condition

☐ 2. To be in love

☐ 3. To drink alcohol regularly

☐ 4. To be firm

Question Type : MCQ

Question ID : 264330134470

Option 1 ID : 264330526849

Option 2 ID : 264330526850

Option 3 ID : 264330526847

Option 4 ID : 264330526848

Status : Answered

Chosen Option : 1

Q.4 Find the part of the given sentence that has an error in it. If there is no error, choose 'No error'.

Shapes that are impossible to make of machining can be printed.

Ans ☐ 1. Shapes that are impossible

☐ 2. No error

☐ 3. can be printed.

☒ 4. to make of machining

Question Type : MCQ

Question ID : 264330134746

Option 1 ID : 264330527935

Option 2 ID : 264330527938

Option 3 ID : 264330527937

Option 4 ID : 264330527936

Status : Answered

Chosen Option : 4

Q.5 Select the most appropriate option to substitute the bracketed segment in the given sentence. If there is no need to substitute it, select 'no substitution required'.

The government appears (to be at war with it's own people.)

- Ans**
- ☒ 1. to be on war with it's own people
 - ☒ 2. to be at war against it's own people
 - ☒ 3. No substitution required
 - ☒ 4. to be at war with its own people

Question Type : **MCQ**
 Question ID : **264330136669**
 Option 1 ID : **264330535395**
 Option 2 ID : **264330535397**
 Option 3 ID : **264330535398**
 Option 4 ID : **264330535396**
 Status : **Answered**
 Chosen Option : **4**

Q.6 Select the most appropriate antonym of the given word.

Mad

- Ans**
- ☒ 1. Sound
 - ☒ 2. Indisposition
 - ☒ 3. Distemper
 - ☒ 4. Dense

Question Type : **MCQ**
 Question ID : **264330136075**
 Option 1 ID : **264330533114**
 Option 2 ID : **264330533111**
 Option 3 ID : **264330533112**
 Option 4 ID : **264330533113**
 Status : **Not Attempted and Marked For Review**
 Chosen Option : **--**

Q.7 Fill in the blank with the most appropriate option.

Today is cloudy, but yesterday the sun _____.

- Ans**
- ☒ 1. flamed
 - ☒ 2. shown
 - ☒ 3. shone
 - ☒ 4. burned

Question Type : **MCQ**
 Question ID : **264330136264**
 Option 1 ID : **264330533840**
 Option 2 ID : **264330533839**
 Option 3 ID : **264330533842**
 Option 4 ID : **264330533841**
 Status : **Answered**
 Chosen Option : **3**

Q.8 Identify the segment that contains a grammatical error. If there is no error, select 'No error'.

The Gryffindors trooped back up / to the castle, none of them talking; / it have been another long day.

- Ans**
- ☒ 1. No error
 - ☒ 2. The Gryffindors trooped back up
 - ☒ 3. it have been another long day.
 - ☒ 4. to the castle, none of them talking;

Question Type : **MCQ**

Question ID : **264330136241**

Option 1 ID : **264330533754**

Option 2 ID : **264330533751**

Option 3 ID : **264330533753**

Option 4 ID : **264330533752**

Status : **Answered**

Chosen Option : **3**

Q.9 Choose the word that means the same as the given word.

Valet

- Ans**
- ☒ 1. Carrier
 - ☒ 2. Carrousel
 - ☒ 3. Kingpin
 - ☒ 4. Butler

Question Type : **MCQ**

Question ID : **264330135195**

Option 1 ID : **264330529708**

Option 2 ID : **264330529710**

Option 3 ID : **264330529707**

Option 4 ID : **264330529709**

Status : **Not Attempted and Marked For Review**

Chosen Option : **--**

Q.10 Select the word from the options which is exactly opposite in meaning to the bracketed word given in the sentence below.

I was (disappointed) to see the lack of coverage afforded to this event.

- Ans**
- ☒ 1. Dizzy
 - ☒ 2. Humiliated
 - ☒ 3. Encouraged
 - ☒ 4. Gloomy

Question Type : **MCQ**

Question ID : **264330136258**

Option 1 ID : **264330533818**

Option 2 ID : **264330533817**

Option 3 ID : **264330533815**

Option 4 ID : **264330533816**

Status : **Answered**

Chosen Option : **3**

Q.11 Select the most appropriate synonym of the given word.

Paradise

- Ans
- ✓ 1. Bliss
 - ✗ 2. Trivial
 - ✗ 3. Display
 - ✗ 4. Ghost

Question Type : MCQ
Question ID : 264330136255
Option 1 ID : 264330533804
Option 2 ID : 264330533803
Option 3 ID : 264330533805
Option 4 ID : 264330533806
Status : Answered
Chosen Option : 1

Q.12 Select the most appropriate option to substitute the bracketed segment in the given sentence. If there is no need to substitute it, select 'no substitution required'.

He suggested (there was collusions through objectors, due to similarities) in some letters sent to the council.

- Ans
- ✗ 1. there was collusions from the objector, due to similarities
 - ✓ 2. there was collusion between objectors, due to similarities
 - ✗ 3. No substitution required
 - ✗ 4. their was collusion by the objectors, due to similarities

Question Type : MCQ
Question ID : 264330136296
Option 1 ID : 264330533964
Option 2 ID : 264330533963
Option 3 ID : 264330533966
Option 4 ID : 264330533965
Status : Answered
Chosen Option : 2

Q.13 Choose the word that can substitute the given group of words.
A woman with brown hair

- Ans
- ✗ 1. Blunt
 - ✓ 2. Brunette
 - ✗ 3. Blonde
 - ✗ 4. Bumble

Question Type : MCQ
Question ID : 264330134464
Option 1 ID : 264330526825
Option 2 ID : 264330526823
Option 3 ID : 264330526826
Option 4 ID : 264330526824
Status : Answered
Chosen Option : 2

Q.14 A sentence has been given with a blank to be filled with an appropriate option. Choose the correct alternative.

The story of human evolution _____ a moving target in recent years.

- Ans**
- ☒ 1. had being
 - ☒ 2. has been
 - ☒ 3. have been
 - ☒ 4. did has

Question Type : **MCQ**
 Question ID : **264330135185**
 Option 1 ID : **264330529673**
 Option 2 ID : **264330529672**
 Option 3 ID : **264330529674**
 Option 4 ID : **264330529671**
 Status : **Answered**
 Chosen Option : **2**

Q.15 The statement below has been given with bracketed text. Select the option with correct idiom for the bracketed text.

That new budget bill was (totally useless) before it hit the Senate.

- Ans**
- ☒ 1. a cry wolf
 - ☒ 2. a dead duck
 - ☒ 3. cold feet
 - ☒ 4. a fuel to the fire

Question Type : **MCQ**
 Question ID : **264330136260**
 Option 1 ID : **264330533825**
 Option 2 ID : **264330533826**
 Option 3 ID : **264330533823**
 Option 4 ID : **264330533824**
 Status : **Answered**
 Chosen Option : **2**

Q.16 Four words are given, out of which only one word is spelt correctly. Choose the correctly spelt word.

- Ans**
- ☒ 1. CALANDER
 - ☒ 2. SPLATER
 - ☒ 3. ASSASINATION
 - ☒ 4. ARGUMENT

Question Type : **MCQ**
 Question ID : **264330136261**
 Option 1 ID : **264330533830**
 Option 2 ID : **264330533827**
 Option 3 ID : **264330533828**
 Option 4 ID : **264330533829**
 Status : **Answered**
 Chosen Option : **4**

Q.17 Improve the underlined part of the sentence. Choose 'No improvement' as an answer if the sentence is grammatically correct.

My grandmother taught me how to sew my own clothes.

- Ans**
- ☒ 1. teach mine
 - ☒ 2. taught myself
 - ☒ 3. No improvement
 - ☒ 4. taught I

Question Type : MCQ
 Question ID : 264330134800
 Option 1 ID : 264330528144
 Option 2 ID : 264330528145
 Option 3 ID : 264330528146
 Option 4 ID : 264330528143
 Status : Answered
 Chosen Option : 3

Q.18 Select the most appropriate word for the given group of words.

The act of destroying or damaging something

- Ans**
- ☒ 1. Vengeance
 - ☒ 2. Avenge
 - ☒ 3. Sabotage
 - ☒ 4. Revenge

Question Type : MCQ
 Question ID : 264330136254
 Option 1 ID : 264330533799
 Option 2 ID : 264330533802
 Option 3 ID : 264330533800
 Option 4 ID : 264330533801
 Status : Answered
 Chosen Option : 3

Q.19 Fill in the blank with the most appropriate option.

I am sorry that I was unable to see _____ of you over the summer.

- Ans**
- ☒ 1. more
 - ☒ 2. many
 - ☒ 3. much
 - ☒ 4. many more

Question Type : MCQ
 Question ID : 264330136245
 Option 1 ID : 264330533768
 Option 2 ID : 264330533767
 Option 3 ID : 264330533769
 Option 4 ID : 264330533770
 Status : Answered
 Chosen Option : 2

Q.20 Identify the segment that contains a grammatical error. If there is no error, select 'No error'.

Our passage across the Arabian Sea/ was smooth as the most timid of/ navigators could desire.

- Ans**
- ☒ 1. No error
 - ☒ 2. Our passage across the Arabian Sea
 - ☒ 3. was smooth as the most timid of
 - ☒ 4. navigators could desire.

Question Type : MCQ

Question ID : 264330136666

Option 1 ID : 264330535386

Option 2 ID : 264330535383

Option 3 ID : 264330535384

Option 4 ID : 264330535385

Status : Answered

Chosen Option : 3

Comprehension:

In the following passage some words have been deleted. Fill in the blanks with the help of the alternatives given. Select the most appropriate option for each number.

In 700 BCE Greek poet Hesiod (1) _____ "Theogony" and "Work and Days". In these mythologies, Atlas was a Titan (2) _____ enormous strength. He along with other titans (3) _____ the gods of Mount Olympus. While the other Titans were banished to Tartarus after being defeated by the god Zeus as retribution, Atlas (4) _____ was forced to carry the earth and the sky for an eternity. In depictions of Atlas, obviously carved by human based on myths, he is shown as a stooped figure carrying the (5) _____ on his shoulders. Because of his association with the globe, maps began to be decorated with this image of Atlas.

SubQuestion No : 21

Q.21 Select the most appropriate option to fill in the blank No. 1.

- Ans**
- ☒ 1. had written
 - ☒ 2. will write
 - ☒ 3. wrote
 - ☒ 4. writes

Question Type : MCQ

Question ID : 264330136066

Option 1 ID : 264330533077

Option 2 ID : 264330533078

Option 3 ID : 264330533076

Option 4 ID : 264330533075

Status : Answered

Chosen Option : 3

Comprehension:

In the following passage some words have been deleted. Fill in the blanks with the help of the alternatives given. Select the most appropriate option for each number.

In 700 BCE Greek poet Hesiod (1) _____ "Theogony" and "Work and Days". In these mythologies, Atlas was a Titan (2) _____ enormous strength. He along with other titans (3) _____ the gods of Mount Olympus. While the other Titans were banished to Tartarus after being defeated by the god Zeus as retribution, Atlas (4) _____ was forced to carry the earth and the sky for an eternity. In depictions of Atlas, obviously carved by human based on myths, he is shown as a stooped figure carrying the (5) _____ on his shoulders. Because of his association with the globe, maps began to be decorated with this image of Atlas.

SubQuestion No : 22

Q.22 Select the most appropriate option to fill in the blank No. 2.

- Ans
- ☒ 1. from
 - ☒ 2. in
 - ☒ 3. of
 - ☒ 4. at

Question Type : MCQ
Question ID : 264330136067
Option 1 ID : 264330533082
Option 2 ID : 264330533080
Option 3 ID : 264330533079
Option 4 ID : 264330533081
Status : Answered
Chosen Option : 3

Comprehension:

In the following passage some words have been deleted. Fill in the blanks with the help of the alternatives given. Select the most appropriate option for each number.

In 700 BCE Greek poet Hesiod (1) _____ "Theogony" and "Work and Days". In these mythologies, Atlas was a Titan (2) _____ enormous strength. He along with other titans (3) _____ the gods of Mount Olympus. While the other Titans were banished to Tartarus after being defeated by the god Zeus as retribution, Atlas (4) _____ was forced to carry the earth and the sky for an eternity. In depictions of Atlas, obviously carved by human based on myths, he is shown as a stooped figure carrying the (5) _____ on his shoulders. Because of his association with the globe, maps began to be decorated with this image of Atlas.

SubQuestion No : 23

Q.23 Select the most appropriate option to fill in the blank No. 3.

- Ans
- ☒ 1. collaborated
 - ☒ 2. claimed
 - ☒ 3. challenged
 - ☒ 4. corroborated

Question Type : MCQ
Question ID : 264330136068
Option 1 ID : 264330533086
Option 2 ID : 264330533083
Option 3 ID : 264330533085
Option 4 ID : 264330533084
Status : Answered
Chosen Option : 3

Comprehension:

In the following passage some words have been deleted. Fill in the blanks with the help of the alternatives given. Select the most appropriate option for each number.

In 700 BCE Greek poet Hesiod (1) _____ "Theogony" and "Work and Days". In these mythologies, Atlas was a Titan (2) _____ enormous strength. He along with other titans (3) _____ the gods of Mount Olympus. While the other Titans were banished to Tartarus after being defeated by the god Zeus as retribution, Atlas (4) _____ was forced to carry the earth and the sky for an eternity. In depictions of Atlas, obviously carved by human based on myths, he is shown as a stooped figure carrying the (5) _____ on his shoulders. Because of his association with the globe, maps began to be decorated with this image of Atlas.

SubQuestion No : 24

Q.24 Select the most appropriate option to fill in the blank No. 4.

- Ans ☒ 1. however
☒ 2. despite
☒ 3. in fact
☒ 4. unlike

Question Type : MCQ

Question ID : 264330136069

Option 1 ID : 264330533090

Option 2 ID : 264330533087

Option 3 ID : 264330533088

Option 4 ID : 264330533089

Status : Answered

Chosen Option : 1

Comprehension:

In the following passage some words have been deleted. Fill in the blanks with the help of the alternatives given. Select the most appropriate option for each number.

In 700 BCE Greek poet Hesiod (1) _____ "Theogony" and "Work and Days". In these mythologies, Atlas was a Titan (2) _____ enormous strength. He along with other titans (3) _____ the gods of Mount Olympus. While the other Titans were banished to Tartarus after being defeated by the god Zeus as retribution, Atlas (4) _____ was forced to carry the earth and the sky for an eternity. In depictions of Atlas, obviously carved by human based on myths, he is shown as a stooped figure carrying the (5) _____ on his shoulders. Because of his association with the globe, maps began to be decorated with this image of Atlas.

SubQuestion No : 25

Q.25 Select the most appropriate option to fill in the blank No. 5.

- Ans ☒ 1. universe
☒ 2. globe
☒ 3. seas
☒ 4. heavens

Question Type : MCQ

Question ID : 264330136070

Option 1 ID : 264330533094

Option 2 ID : 264330533091

Option 3 ID : 264330533093

Option 4 ID : 264330533092

Status : Answered

Chosen Option : 2