

## Multi Tasking Non Technical Staff and Havaladar CBIC and CBN Examination 2022

|                |  |
|----------------|--|
| Roll Number    |  |
| Candidate Name |  |
| Venue Name     | IT GATEWAY INC                                       |
| Exam Date      | 09/05/2023   |
| Exam Time      | 12:00 PM - 2:00 PM                                   |
| Subject        | MTS Non Tech Havaladar CBIC and CBN Examination 2022 |

### Section : Numerical and Mathematical Ability

**Q.1** A person goes from J to K at a speed of 55 km/hr. He comes back from K to J at a certain speed. If his average speed is 660/17 km/hr, then what was his speed while moving from K towards J?

- Ans**
- ☒ 1. 24 km/hr
  - ☒ 2. 38 km/hr
  - ☒ 3. 30 km/hr
  - ☒ 4. 42 km/hr

Question Type : **MCQ**

Question ID : **264330135046**

Option 1 ID : **264330529119**

Option 2 ID : **264330529121**

Option 3 ID : **264330529120**

Option 4 ID : **264330529122**

Status : **Answered**

Chosen Option : **2**

**Q.2** The compound interest (compounding annually) on a certain sum for 2 years at the rate of 60 percent per annum is Rs. 6240. What will be the simple interest on the same sum for 3 years at the same rate of interest?

- Ans**
- ☒ 1. Rs. 6800
  - ☒ 2. Rs. 7200
  - ☒ 3. Rs. 7100
  - ☒ 4. Rs. 6500

Question Type : **MCQ**

Question ID : **264330137885**

Option 1 ID : **264330540149**

Option 2 ID : **264330540148**

Option 3 ID : **264330540150**

Option 4 ID : **264330540147**

Status : **Answered**

Chosen Option : **2**

# Test Prime

**ALL EXAMS,  
ONE SUBSCRIPTION**



**70,000+**  
Mock Tests



**Personalised  
Report Card**



**Unlimited  
Re-Attempt**



**600+**  
Exam Covered



**Previous Year  
Papers**



**500%  
Refund**



**ATTEMPT FREE MOCK NOW**

Q.3 What is the value of  $3.25 \times 3.25 \times 3.25 + 0.75 \times 0.75 \times 0.75 + 29.25$ ?

Ans ☒ 1. 64

☐ 2. 80

☐ 3. 84

☐ 4. 75

Question Type : MCQ

Question ID : 264330139073

Option 1 ID : 264330544899

Option 2 ID : 264330544901

Option 3 ID : 264330544902

Option 4 ID : 264330544900

Status : Answered

Chosen Option : 4

Q.4 The value of  $(1/2 + 3/4) \div (1/5 + 3/10)$  lies between:

Ans ☐ 1. 2.7 and 3.0

☐ 2. 2.0 and 2.2

☐ 3. 1.5 and 1.8

☒ 4. 2.3 and 2.6

Question Type : MCQ

Question ID : 264330133796

Option 1 ID : 264330524210

Option 2 ID : 264330524208

Option 3 ID : 264330524207

Option 4 ID : 264330524209

Status : Answered

Chosen Option : 4

Q.5 The table given below shows the number of students in 6 different schools.

| Schools | Students |
|---------|----------|
| J       | 360      |
| K       | 180      |
| L       | 210      |
| M       | 240      |
| N       | 90       |
| P       | 150      |

What is the total number of students in all schools?

- Ans
- ☒ 1. 1340
  - ☒ 2. 1020
  - ☒ 3. 1230
  - ☒ 4. 1180

Question Type : MCQ

Question ID : 264330139074

Option 1 ID : 264330544905

Option 2 ID : 264330544906

Option 3 ID : 264330544904

Option 4 ID : 264330544903

Status : Answered

Chosen Option : 3

Q.6 A person lent certain sum of money at the annual rate of 20 percent on simple interest. In 10 years, the interest amounted to Rs. 800 more than the sum lent. What is the sum lent?

- Ans
- ☒ 1. Rs. 800
  - ☒ 2. Rs. 500
  - ☒ 3. Rs. 1200
  - ☒ 4. Rs. 400

Question Type : MCQ

Question ID : 264330139006

Option 1 ID : 264330544632

Option 2 ID : 264330544634

Option 3 ID : 264330544631

Option 4 ID : 264330544633

Status : Answered

Chosen Option : 3

**Q.7** A bus travels 166 Km in 3 hours and then travels the next 2 hours at 134 Km/hr. Find the average speed of the bus

- Ans**
- ☒ 1. 50.4 km/hr
  - ☒ 2. 86.8 km/hr
  - ☒ 3. 43.8 km/hr
  - ☒ 4. 59.4 km/hr

Question Type : **MCQ**

Question ID : **264330141037**

Option 1 ID : **264330552497**

Option 2 ID : **264330552496**

Option 3 ID : **264330552498**

Option 4 ID : **264330552495**

Status : **Answered**

Chosen Option : **1**

**Q.8** Two cubes of iron whose edges are 7 cm and 11 cm are melted and formed into a single cube. Find the volume of the new cube formed.

- Ans**
- ☒ 1. 1881 cm<sup>3</sup>
  - ☒ 2. 1674 cm<sup>3</sup>
  - ☒ 3. 1444 cm<sup>3</sup>
  - ☒ 4. 1221 cm<sup>3</sup>

Question Type : **MCQ**

Question ID : **264330138433**

Option 1 ID : **264330542340**

Option 2 ID : **264330542339**

Option 3 ID : **264330542341**

Option 4 ID : **264330542342**

Status : **Answered**

Chosen Option : **3**

**Q.9** A person bought 8 articles for 2 rupees. Find at what price should he be able to sell 120 articles to get a profit of 10%.

- Ans**
- ☒ 1. Rs. 22
  - ☒ 2. Rs. 33
  - ☒ 3. Rs. 20
  - ☒ 4. Rs. 44

Question Type : **MCQ**

Question ID : **264330135397**

Option 1 ID : **264330530497**

Option 2 ID : **264330530496**

Option 3 ID : **264330530498**

Option 4 ID : **264330530495**

Status : **Answered**

Chosen Option : **2**

**Q.10** The numbers are in the ratio of 3:5. if their HCF is 11, then find the sum of two numbers.

- Ans**
- ☒ 1. 55
  - ☒ 2. 33
  - ☒ 3. 53
  - ☒ 4. 88

Question Type : **MCQ**  
 Question ID : **264330138392**  
 Option 1 ID : **264330542177**  
 Option 2 ID : **264330542178**  
 Option 3 ID : **264330542176**  
 Option 4 ID : **264330542175**  
 Status : **Answered**  
 Chosen Option : **4**

**Q.11** A rectangle has sides of 45 cm and 55 cm. What is the area of this rectangle?

- Ans**
- ☒ 1.  $2675 \text{ cm}^2$
  - ☒ 2.  $2475 \text{ cm}^2$
  - ☒ 3.  $2550 \text{ cm}^2$
  - ☒ 4.  $2350 \text{ cm}^2$

Question Type : **MCQ**  
 Question ID : **264330135127**  
 Option 1 ID : **264330529445**  
 Option 2 ID : **264330529443**  
 Option 3 ID : **264330529444**  
 Option 4 ID : **264330529446**  
 Status : **Answered**  
 Chosen Option : **2**

**Q.12** A and B working together can complete a job in 90 days. The ratio of their efficiencies is 3:5. In how many days can the faster person complete the job?

- Ans**
- ☒ 1. 90 days
  - ☒ 2. 80 days
  - ☒ 3. 144 days
  - ☒ 4. 118 days

Question Type : **MCQ**  
 Question ID : **264330138428**  
 Option 1 ID : **264330542322**  
 Option 2 ID : **264330542319**  
 Option 3 ID : **264330542321**  
 Option 4 ID : **264330542320**  
 Status : **Answered**  
 Chosen Option : **2**

**Q.13** Kapila is thrice as efficient as Vipul and together they can finish a piece of work in 30 days. In how many days Vipul alone can finish the work?

- Ans**
- ☒ 1. 60 days
  - ☒ 2. 30 days
  - ☒ 3. 90 days
  - ☒ 4. 120 days

Question Type : **MCQ**  
 Question ID : **264330135123**  
 Option 1 ID : **264330529428**  
 Option 2 ID : **264330529427**  
 Option 3 ID : **264330529429**  
 Option 4 ID : **264330529430**  
 Status : **Not Answered**  
 Chosen Option : --

**Q.14** A man travelled a distance of 110 km in 11 hours. He travelled some distance on foot at 6 km/hr and remaining distance on a bicycle at 14 km/hr. What is the distance travelled on bicycle?

- Ans**
- ☒ 1. 66 km
  - ☒ 2. 99 km
  - ☒ 3. 77 km
  - ☒ 4. 88 km

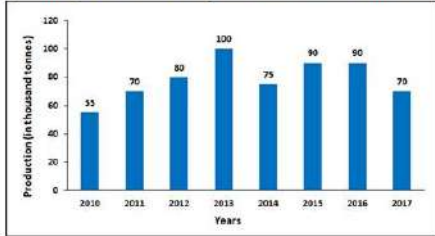
Question Type : **MCQ**  
 Question ID : **264330133808**  
 Option 1 ID : **264330524255**  
 Option 2 ID : **264330524258**  
 Option 3 ID : **264330524256**  
 Option 4 ID : **264330524257**  
 Status : **Not Answered**  
 Chosen Option : --

**Q.15** The average of the series 500, 505, 515, 530, 550 is:

- Ans**
- ☒ 1. 520
  - ☒ 2. 515
  - ☒ 3. 505
  - ☒ 4. 530

Question Type : **MCQ**  
 Question ID : **264330133798**  
 Option 1 ID : **264330524217**  
 Option 2 ID : **264330524216**  
 Option 3 ID : **264330524215**  
 Option 4 ID : **264330524218**  
 Status : **Answered**  
 Chosen Option : **2**

**Q.16** The following bar graph shows the production of wheat (in 1000 tonnes) in India over the years. What was the percentage decline in the production of wheat from 2013 to 2014?



- Ans**
- ☒ 1. 25%
  - ☐ 2. 5%
  - ☐ 3. 15%
  - ☐ 4. 35%

Question Type : **MCQ**  
 Question ID : **264330133812**  
 Option 1 ID : **264330524271**  
 Option 2 ID : **264330524272**  
 Option 3 ID : **264330524273**  
 Option 4 ID : **264330524274**  
 Status : **Answered**  
 Chosen Option : 1

**Q.17** The marked price of a speaker is Rs. 1000. A man buys it at Rs. 873 after getting two successive discounts of 10% and x%. What is the value of x?

- Ans**
- ☐ 1. 5%
  - ☐ 2. 8%
  - ☐ 3. 4%
  - ☒ 4. 3%

Question Type : **MCQ**  
 Question ID : **264330133803**  
 Option 1 ID : **264330524235**  
 Option 2 ID : **264330524237**  
 Option 3 ID : **264330524236**  
 Option 4 ID : **264330524238**  
 Status : **Answered**  
 Chosen Option : 3

**Q.18** In a school library, the ratio of Science to English books is 10:13. If there are 400 Science books and due to increase in demand of Science books, few Science books are added by school authority and the ratio becomes 25:26. What is the number of Science books added?

- Ans**
- ☐ 1. 50
  - ☒ 2. 100
  - ☐ 3. 120
  - ☐ 4. 80

Question Type : **MCQ**  
 Question ID : **264330133805**  
 Option 1 ID : **264330524245**  
 Option 2 ID : **264330524243**  
 Option 3 ID : **264330524246**  
 Option 4 ID : **264330524244**  
 Status : **Not Answered**  
 Chosen Option : --



**Q.19** In a wallet, there are coins of Rs. 1, Rs. 2 and Rs. 5 in the ratio of 2:5:3 respectively. If there is Rs. 54 in all, then how many Rs. 5 coins are there?

- Ans**
- ☒ 1. 20
  - ☒ 2. 10
  - ☒ 3. 4
  - ☒ 4. 6

Question Type : **MCQ**

Question ID : **264330133804**

Option 1 ID : **264330524242**

Option 2 ID : **264330524240**

Option 3 ID : **264330524239**

Option 4 ID : **264330524241**

Status : **Not Answered**

Chosen Option : --

**Q.20** A dishonest shopkeeper pretends to sell his goods at cost price but uses false weights and gain 10%. How much false weight he is using instead 1 kg weight?

- Ans**
- ☒ 1. 909.09 gm
  - ☒ 2. 900 gm
  - ☒ 3. 920.30 gm
  - ☒ 4. 911.12 gm

Question Type : **MCQ**

Question ID : **264330133802**

Option 1 ID : **264330524231**

Option 2 ID : **264330524232**

Option 3 ID : **264330524234**

Option 4 ID : **264330524233**

Status : **Not Answered**

Chosen Option : --

#### Section : Reasoning Ability and Problem Solving

**Q.1** Prateek, Kiran, Rohit, Suraj and Tony are five friends who scored different marks in a test. Only two people scored between Prateek and Suraj. Kiran scored the highest marks. Tony scored more than Rohit. Who scored the fourth highest marks?

- Ans**
- ☒ 1. Kiran
  - ☒ 2. Rohit
  - ☒ 3. Suraj
  - ☒ 4. Prateek

Question Type : **MCQ**

Question ID : **264330133514**

Option 1 ID : **264330523088**

Option 2 ID : **264330523089**

Option 3 ID : **264330523090**

Option 4 ID : **264330523087**

Status : **Answered**

Chosen Option : 2

Q.2 Which of the following numbers will replace the question mark (?) in the given series?

87, 168, 217, 242, 251, ?

- Ans
- ☒ 1. 255
  - ☒ 2. 253
  - ☒ 3. 252
  - ☒ 4. 254

Question Type : MCQ

Question ID : 264330133518

Option 1 ID : 264330523106

Option 2 ID : 264330523104

Option 3 ID : 264330523103

Option 4 ID : 264330523105

Status : Not Answered

Chosen Option : --

Q.3 In a certain code language, 'APPLES' is written as 'AQQMET'. How will 'ORANGE' be written in that language?

- Ans
- ☒ 1. SOCHEI
  - ☒ 2. OSAOHE
  - ☒ 3. OSAHOE
  - ☒ 4. SOACHE

Question Type : MCQ

Question ID : 264330133449

Option 1 ID : 264330522828

Option 2 ID : 264330522830

Option 3 ID : 264330522827

Option 4 ID : 264330522829

Status : Answered

Chosen Option : 2

Q.4 Which of the following numbers will replace the question mark (?) in the given series?

-15, -9, -3, 3, 9, 15, ?

- Ans
- ☒ 1. 24
  - ☒ 2. 30
  - ☒ 3. 21
  - ☒ 4. 18

Question Type : MCQ

Question ID : 264330138820

Option 1 ID : 264330543890

Option 2 ID : 264330543887

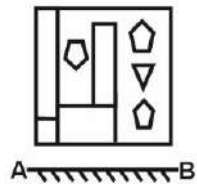
Option 3 ID : 264330543888

Option 4 ID : 264330543889

Status : Answered

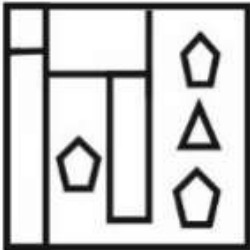
Chosen Option : 3

Q.5 If a mirror is placed on the line AB, then out of the option figures which figure will be the right image of the question figure?

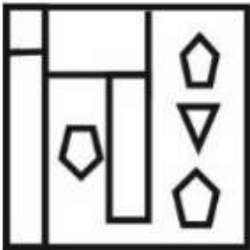


Ans

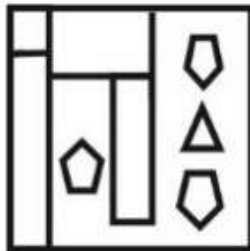
✗ 1.



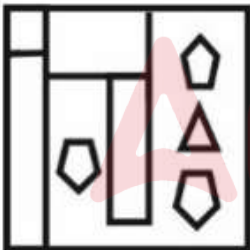
✗ 2.



✓ 3.



✗ 4.



Question Type : MCQ

Question ID : 264330138848

Option 1 ID : 264330543999

Option 2 ID : 264330544000

Option 3 ID : 264330544001

Option 4 ID : 264330544002

Status : Answered

Chosen Option : 3

**Q.6** Two Statements are given followed by two conclusions numbered I and II. Assuming the statements to be true, even if they seem to be at variance with commonly known facts, decide which of the conclusions logically follow(s) from the statements.

Statements:

Some Parrots are Birds.

All Birds are animals.

Conclusions:

I. All animals are Birds.

II. Some animals are Parrot.

- Ans**
- ☒ 1. Only conclusion I follows.
  - ☒ 2. Only conclusion II follows.
  - ☒ 3. Neither conclusion I nor II follow.
  - ☒ 4. Both conclusions I and II follow.

Question Type : **MCQ**

Question ID : **264330133515**

Option 1 ID : **264330523091**

Option 2 ID : **264330523092**

Option 3 ID : **264330523094**

Option 4 ID : **264330523093**

Status : **Answered**

Chosen Option : **2**

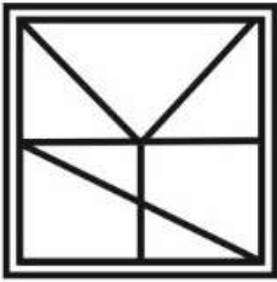


Q.7 Select the option figure in which the given figure is embedded. (rotation is NOT allowed)

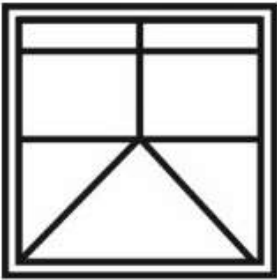


Ans

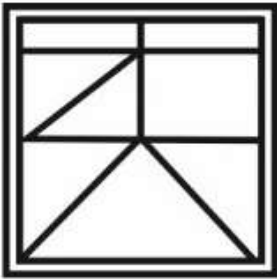
✗ 1.



✗ 2.



✗ 3.



✓ 4.



Question Type : MCQ

Question ID : 264330138847

Option 1 ID : 264330543997

Option 2 ID : 264330543995

Option 3 ID : 264330543996

Option 4 ID : 264330543998

Status : Answered

Chosen Option : 1

**Q.8** Seven students A, B, C, D, X, Y and Z are sitting in their classroom facing in the southern direction. A and D do not sit together. Z sits second to the left of X. B does not sit with Z. X is fourth to the right of C. A and B are not sitting together. C sits in between D and Y. Y sits second to the left of the one who sits second to the left of B. Who sits at the extreme ends?

- Ans**
- ☒ 1. B and D
  - ☐ 2. C and Y
  - ☐ 3. Z and X
  - ☐ 4. A and B

Question Type : **MCQ**  
 Question ID : **264330133513**  
 Option 1 ID : **264330523085**  
 Option 2 ID : **264330523086**  
 Option 3 ID : **264330523083**  
 Option 4 ID : **264330523084**  
 Status : **Not Answered**  
 Chosen Option : --

**Q.9** If A denotes 'addition', B denotes 'multiplication', C denotes 'subtraction', and D denotes 'division', then what will be the value of the following equation?  
 $10 \text{ B } 2 \text{ C } (15 \text{ D } 5) = ?$

- Ans**
- ☐ 1. 19
  - ☐ 2. 15
  - ☐ 3. 21
  - ☒ 4. 17

Question Type : **MCQ**  
 Question ID : **264330137804**  
 Option 1 ID : **264330539826**  
 Option 2 ID : **264330539823**  
 Option 3 ID : **264330539824**  
 Option 4 ID : **264330539825**  
 Status : **Answered**  
 Chosen Option : **4**

**Q.10** Two Statements are given followed by two conclusions numbered I and II. Assuming the statements to be true, even if they seem to be at variance with commonly known facts, decide which of the conclusions logically follow(s) from the statements.

Statements:

Some pupils are cutes.

All boys are cutes.

Conclusions:

I. All cutes are boys.

II. Some pupils are boys.

- Ans**
- ☒ 1. Only conclusion I follows.
  - ☒ 2. Neither conclusion I nor II follow.
  - ☒ 3. Both conclusions I and II follow.
  - ☒ 4. Only conclusion II follows.

Question Type : **MCQ**

Question ID : **264330133516**

Option 1 ID : **264330523095**

Option 2 ID : **264330523098**

Option 3 ID : **264330523097**

Option 4 ID : **264330523096**

Status : **Answered**

Chosen Option : **4**

**Q.11** Select the option that is related to the third word in the same way as the second word is related to the first word.

Bangladesh : Dhaka :: New Zealand : ?

- Ans**
- ☒ 1. Wellington
  - ☒ 2. Sydney
  - ☒ 3. Melbourne
  - ☒ 4. Canberra

Question Type : **MCQ**

Question ID : **264330133508**

Option 1 ID : **264330523063**

Option 2 ID : **264330523064**

Option 3 ID : **264330523066**

Option 4 ID : **264330523065**

Status : **Answered**

Chosen Option : **1**

**Q.12** Select the option that is related to the third word in the same way as the second word is related to the first word.

Japan : Yen :: Bangladesh : ?

- Ans**
- ☒ 1. Dinar
  - ☒ 2. Rupee
  - ☒ 3. Peso
  - ☒ 4. Taka

Question Type : **MCQ**

Question ID : **264330140012**

Option 1 ID : **264330548430**

Option 2 ID : **264330548427**

Option 3 ID : **264330548428**

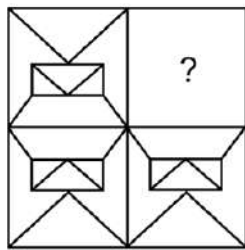
Option 4 ID : **264330548429**

Status : **Answered**

Chosen Option : **2**

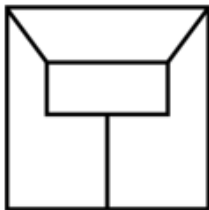
**Q.13** Select the option figure that will replace the question mark (?) in the figure given below to complete the pattern.

(rotation is not allowed)



Ans

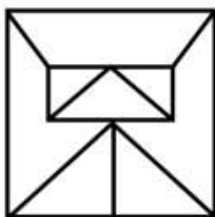
✗ 1.



✗ 2.



✗ 3.



✓ 4.



Question Type : MCQ

Question ID : 264330133525

Option 1 ID : 264330523131

Option 2 ID : 264330523133

Option 3 ID : 264330523132

Option 4 ID : 264330523134

Status : Answered

Chosen Option : 4



**Q.14** Select the set in which the numbers are related in the same way as are the numbers of the following sets.(NOTE :

Operations should be performed on the whole numbers, without breaking down the numbers into its constituent digits.

E.g 13 – Operations on 13 such as adding /subtracting/multiplying etc. to 13 can be performed. Breaking down 13 into 1 and 3 and then performing mathematical operations on 1 and 3 is not allowed)

(4, 3, 49)

(5, 4, 81)

- Ans**
- ☒ 1. (6, 2, 36)
  - ☒ 2. (5, 4, 100)
  - ☒ 3. (7, 5, 121)
  - ☒ 4. (6, 5, 121)

Question Type : **MCQ**  
 Question ID : **264330133520**  
 Option 1 ID : **264330523113**  
 Option 2 ID : **264330523111**  
 Option 3 ID : **264330523114**  
 Option 4 ID : **264330523112**  
 Status : **Not Answered**  
 Chosen Option : --

**Q.15** Which of the following letter clusters will replace the question mark (?) in the given series?

LB, NZ, PX, RV, ?

- Ans**
- ☒ 1. TS
  - ☒ 2. UT
  - ☒ 3. ST
  - ☒ 4. TT

Question Type : **MCQ**  
 Question ID : **264330133506**  
 Option 1 ID : **264330523056**  
 Option 2 ID : **264330523058**  
 Option 3 ID : **264330523057**  
 Option 4 ID : **264330523055**  
 Status : **Answered**  
 Chosen Option : 4

**Q.16** In a certain code language, 'FLED' is coded as '4, 10, 3, 2', 'GOAT' is coded as '5, 13, 25, 18'. What is the code for 'HECK' in that code language?

- Ans**
- ☒ 1. 8, 3, 1, 9
  - ☒ 2. 6, 3, 1, 11
  - ☒ 3. 6, 3, 1, 9
  - ☒ 4. 6, 3, 3, 9

Question Type : **MCQ**  
 Question ID : **264330138834**  
 Option 1 ID : **264330543946**  
 Option 2 ID : **264330543944**  
 Option 3 ID : **264330543945**  
 Option 4 ID : **264330543943**  
 Status : **Answered**  
 Chosen Option : 3

**Q.17** Select the option that is related to the third word in the same way as the second word is related to the first word.

French : Language :: Train : ?

- Ans**
- ☒ 1. Travel
  - ☒ 2. Vehicle
  - ☐ 3. Goods
  - ☐ 4. Tracks

Question Type : **MCQ**

Question ID : **264330133507**

Option 1 ID : **264330523061**

Option 2 ID : **264330523060**

Option 3 ID : **264330523062**

Option 4 ID : **264330523059**

Status : **Answered**

Chosen Option : 1

**Q.18** In a family of 6 people Anil, Pallavi, Naveen, Sumanth, Priyanka, Harika are sitting in two rows equally and facing each other. Naveen and Priyanka are neighbours facing North. Harika is diagonally opposite to Naveen. Pallavi is sitting to the left of Harika. Priyanka is sitting opposite to Anil. Which of the following are in one of the two rows?

- Ans**
- ☒ 1. Pallavi, Anil, Harika
  - ☐ 2. Harika, Sumanth, Pallavi
  - ☐ 3. Harika, Priyanka, Naveen
  - ☐ 4. Pallavi, Naveen, Priyanka

Question Type : **MCQ**

Question ID : **264330133512**

Option 1 ID : **264330523082**

Option 2 ID : **264330523080**

Option 3 ID : **264330523079**

Option 4 ID : **264330523081**

Status : **Answered**

Chosen Option : 2

**Q.19** Which of the mathematical signs should be interchanged in the below equation to make it mathematically correct?

$$10 + 54 \div 9 - 4 \times 60 = 116$$

- Ans**
- ☐ 1. - and ×
  - ☐ 2. ÷ and ×
  - ☒ 3. + and ×
  - ☐ 4. + and -

Question Type : **MCQ**

Question ID : **264330133521**

Option 1 ID : **264330523118**

Option 2 ID : **264330523116**

Option 3 ID : **264330523115**

Option 4 ID : **264330523117**

Status : **Answered**

Chosen Option : 3

**Q.20** In a certain code language, 'MODERN' is coded as 'KOBALJ'. What is the code for 'PEOPLE' in that code language?

- Ans**
- ☒ 1. BIMLCM
  - ☒ 2. BINLBN
  - ☒ 3. BIMLBM
  - ☒ 4. BIMLBN

Question Type : **MCQ**

Question ID : **264330137521**

Option 1 ID : **264330538691**

Option 2 ID : **264330538694**

Option 3 ID : **264330538692**

Option 4 ID : **264330538693**

Status : **Not Answered**

Chosen Option : --

Section : **General Awareness**

**Q.1** Bangladesh does not share its boundary with which of the following Indian states?

- Ans**
- ☒ 1. Sikkim
  - ☒ 2. Assam
  - ☒ 3. West Bengal
  - ☒ 4. Tripura

Question Type : **MCQ**

Question ID : **264330137048**

Option 1 ID : **264330536837**

Option 2 ID : **264330536836**

Option 3 ID : **264330536835**

Option 4 ID : **264330536838**

Status : **Answered**

Chosen Option : **1**

**Q.2** According to Indira Gandhi National Old Age Pension Scheme (IGNOAPS), BPL (Below Poverty Line) person aged 60 years or above are entitled to a monthly pension of \_\_\_\_\_ up to 79 years of age as of October 2022.

- Ans**
- ☒ 1. Rs 250
  - ☒ 2. Rs 400
  - ☒ 3. Rs 350
  - ☒ 4. Rs 200

Question Type : **MCQ**

Question ID : **264330137723**

Option 1 ID : **264330539502**

Option 2 ID : **264330539501**

Option 3 ID : **264330539499**

Option 4 ID : **264330539500**

Status : **Answered**

Chosen Option : **3**

Q.3 How many tax slabs are classified in the GST Bill?

- Ans
- ☐ 1. Seven
  - ☐ 2. Three
  - ☐ 3. Eight
  - ☒ 4. Four

Question Type : MCQ

Question ID : 264330137895

Option 1 ID : 264330540188

Option 2 ID : 264330540190

Option 3 ID : 264330540189

Option 4 ID : 264330540187

Status : Answered

Chosen Option : 4

Q.4 Which among the following is not a part of Western Ghats?

- Ans
- ☐ 1. Anaimalai Hills
  - ☐ 2. Cardamom Hills
  - ☒ 3. Mahadeo Hills
  - ☐ 4. Nilgiri Hills

Question Type : MCQ

Question ID : 264330133991

Option 1 ID : 264330524990

Option 2 ID : 264330524987

Option 3 ID : 264330524989

Option 4 ID : 264330524988

Status : Answered

Chosen Option : 2

Q.5 Which British officer gave the order to open fire and led to the Jallianwala Bagh massacre?

- Ans
- ☐ 1. Charles Cornwallis
  - ☐ 2. Charles Metcalfe
  - ☒ 3. Reginald Dyer
  - ☐ 4. Warren Hastings

Question Type : MCQ

Question ID : 264330137909

Option 1 ID : 264330540243

Option 2 ID : 264330540246

Option 3 ID : 264330540244

Option 4 ID : 264330540245

Status : Answered

Chosen Option : 3

Q.6 An image which cannot be obtained on a screen is called a \_\_\_\_\_ .

- Ans
- ✓ 1. virtual image
  - ✗ 2. real image
  - ✗ 3. vector image
  - ✗ 4. spectral image

Question Type : MCQ

Question ID : 264330138887

Option 1 ID : 264330544156

Option 2 ID : 264330544155

Option 3 ID : 264330544158

Option 4 ID : 264330544157

Status : Answered

Chosen Option : 4

Q.7 As of October 2022, how many fundamental duties are there in the Indian Constitution?

- Ans
- ✗ 1. 10
  - ✗ 2. 12
  - ✓ 3. 11
  - ✗ 4. 13

Question Type : MCQ

Question ID : 264330134001

Option 1 ID : 264330525027

Option 2 ID : 264330525029

Option 3 ID : 264330525028

Option 4 ID : 264330525030

Status : Answered

Chosen Option : 3

Q.8 Who among the following was the first musician ever to be awarded the Bharat Ratna?

- Ans
- ✗ 1. Semmangudi Srinivasa Iyer
  - ✗ 2. Girija Devi
  - ✗ 3. Siddheswari Devi
  - ✓ 4. M.S. Subbulakshmi

Question Type : MCQ

Question ID : 264330133999

Option 1 ID : 264330525019

Option 2 ID : 264330525020

Option 3 ID : 264330525021

Option 4 ID : 264330525022

Status : Answered

Chosen Option : 4

Q.9 FIFA world cup 2022 is hosted by which country?

- Ans
- ☒ 1. Germany
  - ☒ 2. Japan
  - ☒ 3. France
  - ☒ 4. Qatar

Question Type : MCQ  
Question ID : 264330138875  
Option 1 ID : 264330544107  
Option 2 ID : 264330544110  
Option 3 ID : 264330544108  
Option 4 ID : 264330544109  
Status : Answered  
Chosen Option : 4

Q.10 Who wrote the treatise on politics, "Arthashastra"?

- Ans
- ☒ 1. Kautilya
  - ☒ 2. Kalidas
  - ☒ 3. Raghuvansham
  - ☒ 4. Kadambari

Question Type : MCQ  
Question ID : 264330137703  
Option 1 ID : 264330539420  
Option 2 ID : 264330539419  
Option 3 ID : 264330539421  
Option 4 ID : 264330539422  
Status : Answered  
Chosen Option : 2

Q.11 The stage of the embryo in which all the body parts can be identified is called \_\_\_\_\_.

- Ans
- ☒ 1. Uterus
  - ☒ 2. Ovulation
  - ☒ 3. Foetus
  - ☒ 4. Zygote

Question Type : MCQ  
Question ID : 264330138885  
Option 1 ID : 264330544147  
Option 2 ID : 264330544148  
Option 3 ID : 264330544149  
Option 4 ID : 264330544150  
Status : Answered  
Chosen Option : 1

Q.12 The capital of Sangam kingdom 'Pandyas' was \_\_\_\_\_.

- Ans
- ☐ 1. Thiruvavur
  - ☐ 2. Kaveripattanam
  - ☐ 3. Nagapattinam
  - ☒ 4. Madurai

Question Type : MCQ  
 Question ID : 264330138917  
 Option 1 ID : 264330544278  
 Option 2 ID : 264330544275  
 Option 3 ID : 264330544277  
 Option 4 ID : 264330544276  
 Status : Answered  
 Chosen Option : 3

Q.13 With reference to Buddhist architecture, what does chaitya mean?

- Ans
- ☐ 1. Buddha Relics
  - ☐ 2. Temple entrance
  - ☒ 3. Prayer Hall
  - ☐ 4. Residence/Monastery

Question Type : MCQ  
 Question ID : 264330137898  
 Option 1 ID : 264330540200  
 Option 2 ID : 264330540202  
 Option 3 ID : 264330540201  
 Option 4 ID : 264330540199  
 Status : Not Answered  
 Chosen Option : --

Q.14 Rulers belonging to Gurjara – Pratihara, Rashtrakuta and Pala dynasties fought for control over \_\_\_\_\_.

- Ans
- ☐ 1. Patliputra
  - ☐ 2. Ujjain
  - ☒ 3. Kannauj
  - ☐ 4. Jaipur

Question Type : MCQ  
 Question ID : 264330138893  
 Option 1 ID : 264330544180  
 Option 2 ID : 264330544179  
 Option 3 ID : 264330544182  
 Option 4 ID : 264330544181  
 Status : Answered  
 Chosen Option : 2

Q.15 For a person to be eligible to become the Vice-President of India, he must be of \_\_\_\_\_ years of age.

- Ans
- ☐ 1. 30
  - ☐ 2. 25
  - ☒ 3. 35
  - ☐ 4. 40

Question Type : MCQ  
 Question ID : 264330134002  
 Option 1 ID : 264330525031  
 Option 2 ID : 264330525034  
 Option 3 ID : 264330525033  
 Option 4 ID : 264330525032  
 Status : Answered  
 Chosen Option : 3

Q.16 In India, roads are classified in the \_\_\_\_\_ classes according to their capacity.

- Ans
- ☐ 1. seven
  - ☐ 2. four
  - ☐ 3. three
  - ☒ 4. six

Question Type : MCQ  
 Question ID : 264330137695  
 Option 1 ID : 264330539390  
 Option 2 ID : 264330539387  
 Option 3 ID : 264330539389  
 Option 4 ID : 264330539388  
 Status : Answered  
 Chosen Option : 3

Q.17 Pandit Birju Maharaj was conferred with which of the following awards?

- Ans
- ☐ 1. Shaurya Chakra
  - ☒ 2. Padma Vibhushan
  - ☐ 3. Padma Bhushan
  - ☐ 4. Padma Shri

Question Type : MCQ  
 Question ID : 264330137705  
 Option 1 ID : 264330539430  
 Option 2 ID : 264330539427  
 Option 3 ID : 264330539429  
 Option 4 ID : 264330539428  
 Status : Answered  
 Chosen Option : 3



Q.18 In MUDRA Yojana, what does 'M' stand for?

- Ans
- ☒ 1. Macro
  - ☒ 2. Money
  - ☒ 3. Micro
  - ☒ 4. Multi

Question Type : MCQ  
Question ID : 264330137710  
Option 1 ID : 264330539447  
Option 2 ID : 264330539449  
Option 3 ID : 264330539448  
Option 4 ID : 264330539450  
Status : Answered  
Chosen Option : 4

Q.19 Jhijhiya is a famous folk dance of Bihar and is performed in the mythological town of Mithila. This dance is performed by women only. The whole Navaratri 'nine nights' festival is celebrated to worship the three forms of Lord \_\_\_\_\_.

- Ans
- ☒ 1. Kali, Lakshmi, Durga
  - ☒ 2. Sita, Durga, Laxmi
  - ☒ 3. Lakshmi, Parvati, and Saraswati.
  - ☒ 4. Sita, Kali and Parvati

Question Type : MCQ  
Question ID : 264330133983  
Option 1 ID : 264330524956  
Option 2 ID : 264330524958  
Option 3 ID : 264330524957  
Option 4 ID : 264330524955  
Status : Answered  
Chosen Option : 3

Q.20 The Central Government has recently launched YUVA 2.0 Scheme. It is a mentoring programme for young and budding authors below the age of \_\_\_\_\_.

- Ans
- ☒ 1. 45
  - ☒ 2. 40
  - ☒ 3. 35
  - ☒ 4. 30

Question Type : MCQ  
Question ID : 264330133981  
Option 1 ID : 264330524949  
Option 2 ID : 264330524947  
Option 3 ID : 264330524950  
Option 4 ID : 264330524948  
Status : Answered  
Chosen Option : 4

**Q.21** The Indian National Congress passed Purna Swaraj resolution in 1929 under the presidency of \_\_\_\_\_.

- Ans**
- ☒ 1. Mahatma Gandhi
  - ☒ 2. Lala Lajpat Rai
  - ☒ 3. Jawaharlal Nehru
  - ☒ 4. Sardar Vallabhbhai Patel

Question Type : **MCQ**  
 Question ID : **264330138920**  
 Option 1 ID : **264330544288**  
 Option 2 ID : **264330544287**  
 Option 3 ID : **264330544289**  
 Option 4 ID : **264330544290**  
 Status : **Answered**  
 Chosen Option : **3**

**Q.22** Which of the following god/goddess is NOT associated with Ratha Yatra festival of Puri, Odisha?

- Ans**
- ☒ 1. Lord Jagannath
  - ☒ 2. Lord Balabhadra
  - ☒ 3. Devi Subhadra
  - ☒ 4. Lord Shiva

Question Type : **MCQ**  
 Question ID : **264330138897**  
 Option 1 ID : **264330544195**  
 Option 2 ID : **264330544198**  
 Option 3 ID : **264330544197**  
 Option 4 ID : **264330544196**  
 Status : **Answered**  
 Chosen Option : **1**

**Q.23** Which of the following layers is NOT one of the atmospheric layers of the earth?

- Ans**
- ☒ 1. Stratosphere
  - ☒ 2. Thermosphere
  - ☒ 3. Mesosphere
  - ☒ 4. Endosphere

Question Type : **MCQ**  
 Question ID : **264330138886**  
 Option 1 ID : **264330544151**  
 Option 2 ID : **264330544154**  
 Option 3 ID : **264330544153**  
 Option 4 ID : **264330544152**  
 Status : **Answered**  
 Chosen Option : **4**

Q.24 \_\_\_\_\_ hosted the World Games 2022 in July 2022.

- Ans
- ☒ 1. Germany
  - ☒ 2. Japan
  - ☒ 3. United States of America
  - ☒ 4. Italy

Question Type : MCQ  
Question ID : 264330134003  
Option 1 ID : 264330525037  
Option 2 ID : 264330525035  
Option 3 ID : 264330525036  
Option 4 ID : 264330525038  
Status : Answered  
Chosen Option : 1

Q.25 \_\_\_\_\_ describe the idea of evolution in his book, "The origin of species".

- Ans
- ☒ 1. Edward Jenner
  - ☒ 2. Charles Darwin
  - ☒ 3. Robert Brown
  - ☒ 4. Aristotle

Question Type : MCQ  
Question ID : 264330133987  
Option 1 ID : 264330524974  
Option 2 ID : 264330524973  
Option 3 ID : 264330524971  
Option 4 ID : 264330524972  
Status : Answered  
Chosen Option : 2

Section : English Language and Comprehension

Q.1 Choose the word that means the same as the given word.

Calamity

- Ans
- ☒ 1. Embark
  - ☒ 2. Debauchery
  - ☒ 3. Debar
  - ☒ 4. Debacle

Question Type : MCQ  
Question ID : 264330136890  
Option 1 ID : 264330536243  
Option 2 ID : 264330536246  
Option 3 ID : 264330536244  
Option 4 ID : 264330536245  
Status : Answered  
Chosen Option : 3

Q.2 Find the part of the given sentence that has an error in it. If there is no error, choose 'No error'.

David said that statistics are his favourite subject.

- Ans
- ☒ 1. David said that
  - ☒ 2. favourite subject
  - ☒ 3. No error
  - ☒ 4. statistics are his

Question Type : MCQ

Question ID : 264330134797

Option 1 ID : 264330528131

Option 2 ID : 264330528133

Option 3 ID : 264330528134

Option 4 ID : 264330528132

Status : Answered

Chosen Option : 3

Q.3 Select the appropriate synonym for the underlined word.  
The child develops a deadly disease.

- Ans
- ☒ 1. huge
  - ☒ 2. corrective
  - ☒ 3. kind
  - ☒ 4. fatal

Question Type : MCQ

Question ID : 264330134466

Option 1 ID : 264330526834

Option 2 ID : 264330526831

Option 3 ID : 264330526833

Option 4 ID : 264330526832

Status : Answered

Chosen Option : 4

Q.4 Select the appropriate antonym for the underlined word.  
Richard himself came up to persuade David to agree to their plan.

- Ans
- ☒ 1. prompt
  - ☒ 2. lure
  - ☒ 3. coax
  - ☒ 4. deter

Question Type : MCQ

Question ID : 264330134469

Option 1 ID : 264330526844

Option 2 ID : 264330526843

Option 3 ID : 264330526845

Option 4 ID : 264330526846

Status : Answered

Chosen Option : 3

**Q.5** A sentence has been given with a blank to be filled with an appropriate option. Choose the correct alternative.  
John rushed to the spot and saw his wife and kid \_\_\_\_\_ on the road.

- Ans**
- ☒ 1. lain
  - ☒ 2. lying
  - ☒ 3. lie
  - ☒ 4. laying

Question Type : **MCQ**  
Question ID : **264330141163**  
Option 1 ID : **264330552995**  
Option 2 ID : **264330552996**  
Option 3 ID : **264330552997**  
Option 4 ID : **264330552998**  
Status : **Answered**  
Chosen Option : **3**

**Q.6** Find the part of the given sentence that has an error in it. If there is no error, choose 'No error'.  
When I have arrived at the theatre, the show had already started.

- Ans**
- ☒ 1. had already started
  - ☒ 2. When I have arrived at
  - ☒ 3. the theatre, the show
  - ☒ 4. No error

Question Type : **MCQ**  
Question ID : **264330134452**  
Option 1 ID : **264330526781**  
Option 2 ID : **264330526779**  
Option 3 ID : **264330526780**  
Option 4 ID : **264330526782**  
Status : **Answered**  
Chosen Option : **1**

**Q.7** A sentence has been given with a blank to be filled with an appropriate option. Choose the correct alternative.  
The water from the river was \_\_\_\_\_ cold for me to drink directly.

- Ans**
- ☒ 1. very
  - ☒ 2. most
  - ☒ 3. too
  - ☒ 4. many

Question Type : **MCQ**  
Question ID : **264330134456**  
Option 1 ID : **264330526797**  
Option 2 ID : **264330526798**  
Option 3 ID : **264330526795**  
Option 4 ID : **264330526796**  
Status : **Answered**  
Chosen Option : **3**

**Q.8** Improve the underlined part of the sentence. Choose 'No improvement' as an answer if the sentence is grammatically correct.  
The idea was to delivered governmental services at the citizen's doorstep.

- Ans**
- ☒ 1. delivering government serviced
  - ☒ 2. delivers governmental servicing
  - ☒ 3. No improvement
  - ☒ 4. deliver government services

Question Type : MCQ  
Question ID : 264330134455  
Option 1 ID : 264330526792  
Option 2 ID : 264330526793  
Option 3 ID : 264330526794  
Option 4 ID : 264330526791  
Status : Answered  
Chosen Option : 4

**Q.9** Choose the incorrectly spelt word.

- Ans**
- ☒ 1. Lattar
  - ☒ 2. Critical
  - ☒ 3. Mastery
  - ☒ 4. Loudly

Question Type : MCQ  
Question ID : 264330134472  
Option 1 ID : 264330526857  
Option 2 ID : 264330526855  
Option 3 ID : 264330526858  
Option 4 ID : 264330526856  
Status : Answered  
Chosen Option : 1

**Q.10** In the following question, out of the given four alternatives, select the alternative which best expresses the meaning of the Idiom/Phrase.  
Bell the cat

- Ans**
- ☒ 1. To do a dangerous task
  - ☒ 2. To estimate the risks involved
  - ☒ 3. To reveal confidential information
  - ☒ 4. To train company's employees

Question Type : MCQ  
Question ID : 264330136841  
Option 1 ID : 264330536058  
Option 2 ID : 264330536055  
Option 3 ID : 264330536057  
Option 4 ID : 264330536056  
Status : Answered  
Chosen Option : 2

**Q.11** Identify the segment that contains a grammatical error. If there is no error, select 'No error'.  
Using a loofah with a hydrating / shower gel each day also ensures / you'll have the most smoothest skin.

- Ans**
- ☒ 1. shower gel each day also ensures
  - ☒ 2. No error
  - ☒ 3. you'll have the most smoothest skin.
  - ☒ 4. Using a loofah with a hydrating

Question Type : **MCQ**  
Question ID : **264330136058**  
Option 1 ID : **264330533048**  
Option 2 ID : **264330533050**  
Option 3 ID : **264330533049**  
Option 4 ID : **264330533047**  
Status : **Answered**  
Chosen Option : **1**

**Q.12** Improve the underlined part of the sentence. Choose 'No improvement' as an answer if the sentence is grammatically correct.  
She was bored because she didn't have any work to does.

- Ans**
- ☒ 1. work to done
  - ☒ 2. No improvement
  - ☒ 3. work to do
  - ☒ 4. works to do

Question Type : **MCQ**  
Question ID : **264330134375**  
Option 1 ID : **264330526485**  
Option 2 ID : **264330526486**  
Option 3 ID : **264330526484**  
Option 4 ID : **264330526483**  
Status : **Answered**  
Chosen Option : **1**

**Q.13** In the following question, out of the given four alternatives, select the alternative which best expresses the meaning of the Idiom/Phrase.  
Loaves and fishes

- Ans**
- ☒ 1. Accidentally kill someone
  - ☒ 2. Material gain
  - ☒ 3. To bury the dead
  - ☒ 4. To let bygones be bygones

Question Type : **MCQ**  
Question ID : **264330134471**  
Option 1 ID : **264330526852**  
Option 2 ID : **264330526853**  
Option 3 ID : **264330526851**  
Option 4 ID : **264330526854**  
Status : **Answered**  
Chosen Option : **1**

Q.14 Choose the sentence with no spelling error.

- Ans ☒ 1. I can't stop the tissue from repairing.  
☒ 2. I can't stop the tissue from reparing.  
☒ 3. I can't stop the tisue from repairing.  
☒ 4. I can't stop the tissue from repaying.

Question Type : MCQ

Question ID : 264330136870

Option 1 ID : 264330536169

Option 2 ID : 264330536168

Option 3 ID : 264330536167

Option 4 ID : 264330536170

Status : Answered

Chosen Option : 2

Q.15 Select the most appropriate option to fill in the blank.

Today I received a letter. Finally, I \_\_\_\_\_ back from him.

- Ans ☒ 1. herd  
☒ 2. hard  
☒ 3. heard  
☒ 4. horde

Question Type : MCQ

Question ID : 264330136871

Option 1 ID : 264330536174

Option 2 ID : 264330536173

Option 3 ID : 264330536171

Option 4 ID : 264330536172

Status : Answered

Chosen Option : 3

Q.16 Select the most appropriate option to substitute the bracketed segment in the given sentence. If there is no need to substitute it, select 'no substitution required'.  
(I wouldn't cross him if I was you, not) if you value your life.

- Ans ☒ 1. No substitution required  
☒ 2. I wouldn't has crossed him if I were you, not  
☒ 3. I wouldn't had crossed him if I was you, not  
☒ 4. I wouldn't cross him if I were you, not

Question Type : MCQ

Question ID : 264330136061

Option 1 ID : 264330533062

Option 2 ID : 264330533059

Option 3 ID : 264330533060

Option 4 ID : 264330533061

Status : Answered

Chosen Option : 3



Q.17 Choose the word that can substitute the given group of words.

Experiences that are very unpleasant or difficult

- Ans
- ☒ 1. Pitfall
  - ☒ 2. Ordeal
  - ☒ 3. Strident
  - ☒ 4. Knack

Question Type : MCQ  
Question ID : 264330136835  
Option 1 ID : 264330536033  
Option 2 ID : 264330536034  
Option 3 ID : 264330536031  
Option 4 ID : 264330536032  
Status : Answered  
Chosen Option : 3

Q.18 Choose the word that can substitute the given group of words.  
To enter unlawfully upon the land of another

- Ans
- ☒ 1. Trespass
  - ☒ 2. Delinquent
  - ☒ 3. Transgression
  - ☒ 4. Culprit

Question Type : MCQ  
Question ID : 264330134465  
Option 1 ID : 264330526827  
Option 2 ID : 264330526829  
Option 3 ID : 264330526830  
Option 4 ID : 264330526828  
Status : Answered  
Chosen Option : 2

Q.19 Select the most appropriate antonym of the given word.

Rare

- Ans
- ☒ 1. Familiar
  - ☒ 2. Latent
  - ☒ 3. Clarify
  - ☒ 4. Extraordinary

Question Type : MCQ  
Question ID : 264330136257  
Option 1 ID : 264330533813  
Option 2 ID : 264330533812  
Option 3 ID : 264330533814  
Option 4 ID : 264330533811  
Status : Answered  
Chosen Option : 4

Q.20 Select the most appropriate option to fill in the blank.

Women \_\_\_\_\_ their male relatives to the battlefield for the purpose of tending the wounded and carrying away the dead.

- Ans
- ☒ 1. signify
  - ☒ 2. forsake
  - ☒ 3. justify
  - ☒ 4. accompany

Question Type : MCQ

Question ID : 264330134475

Option 1 ID : 264330526868

Option 2 ID : 264330526867

Option 3 ID : 264330526870

Option 4 ID : 264330526869

Status : Answered

Chosen Option : 3

### Comprehension:

In the following passage some words have been deleted. Fill in the blanks with the help of the alternatives given. Select the most appropriate option for each number.

Dinner in the Great Hall that night (1) \_\_\_\_\_ a pleasant experience for Sunny. The (2) \_\_\_\_\_ about his shouting match with Umbridge had (3) \_\_\_\_\_ exceptionally fast even (4) \_\_\_\_\_ standards. He heard whispers all (5) \_\_\_\_\_ as he sat eating between Rob and Ravi.

SubQuestion No : 21

Q.21 Select the most appropriate option to fill in blank number 1.

- Ans
- ☒ 1. were not
  - ☒ 2. was neither
  - ☒ 3. was not
  - ☒ 4. is not

Question Type : MCQ

Question ID : 264330136248

Option 1 ID : 264330533775

Option 2 ID : 264330533778

Option 3 ID : 264330533776

Option 4 ID : 264330533777

Status : Answered

Chosen Option : 3

### Comprehension:

In the following passage some words have been deleted. Fill in the blanks with the help of the alternatives given. Select the most appropriate option for each number.

Dinner in the Great Hall that night (1) \_\_\_\_\_ a pleasant experience for Sunny. The (2) \_\_\_\_\_ about his shouting match with Umbridge had (3) \_\_\_\_\_ exceptionally fast even (4) \_\_\_\_\_ standards. He heard whispers all (5) \_\_\_\_\_ as he sat eating between Rob and Ravi.

### SubQuestion No : 22

Q.22 Select the most appropriate option to fill in blank number 2.

- Ans
- ☒ 1. information
  - ☒ 2. sequence
  - ☒ 3. account
  - ☒ 4. news

Question Type : MCQ

Question ID : 264330136249

Option 1 ID : 264330533780

Option 2 ID : 264330533781

Option 3 ID : 264330533779

Option 4 ID : 264330533782

Status : Answered

Chosen Option : 1

### Comprehension:

In the following passage some words have been deleted. Fill in the blanks with the help of the alternatives given. Select the most appropriate option for each number.

Dinner in the Great Hall that night (1) \_\_\_\_\_ a pleasant experience for Sunny. The (2) \_\_\_\_\_ about his shouting match with Umbridge had (3) \_\_\_\_\_ exceptionally fast even (4) \_\_\_\_\_ standards. He heard whispers all (5) \_\_\_\_\_ as he sat eating between Rob and Ravi.

### SubQuestion No : 23

Q.23 Select the most appropriate option to fill in blank number 3.

- Ans
- ☒ 1. travelled
  - ☒ 2. drove
  - ☒ 3. migrated
  - ☒ 4. moved

Question Type : MCQ

Question ID : 264330136250

Option 1 ID : 264330533783

Option 2 ID : 264330533785

Option 3 ID : 264330533786

Option 4 ID : 264330533784

Status : Answered

Chosen Option : 1

### Comprehension:

In the following passage some words have been deleted. Fill in the blanks with the help of the alternatives given. Select the most appropriate option for each number.

Dinner in the Great Hall that night (1) \_\_\_\_\_ a pleasant experience for Sunny. The (2) \_\_\_\_\_ about his shouting match with Umbridge had (3) \_\_\_\_\_ exceptionally fast even (4) \_\_\_\_\_ standards. He heard whispers all (5) \_\_\_\_\_ as he sat eating between Rob and Ravi.

### SubQuestion No : 24

Q.24 Select the most appropriate option to fill in blank number 4.

- Ans
- ✓ 1. by the institute's
  - ✗ 2. as the institute's
  - ✗ 3. of the institutes'
  - ✗ 4. at the institute

Question Type : MCQ  
 Question ID : 264330136251  
 Option 1 ID : 264330533789  
 Option 2 ID : 264330533788  
 Option 3 ID : 264330533787  
 Option 4 ID : 264330533790  
 Status : Answered  
 Chosen Option : 4

### Comprehension:

In the following passage some words have been deleted. Fill in the blanks with the help of the alternatives given. Select the most appropriate option for each number.

Dinner in the Great Hall that night (1) \_\_\_\_\_ a pleasant experience for Sunny. The (2) \_\_\_\_\_ about his shouting match with Umbridge had (3) \_\_\_\_\_ exceptionally fast even (4) \_\_\_\_\_ standards. He heard whispers all (5) \_\_\_\_\_ as he sat eating between Rob and Ravi.

### SubQuestion No : 25

Q.25 Select the most appropriate option to fill in blank number 5.

- Ans
- ✗ 1. revolving him
  - ✗ 2. surrounding him
  - ✗ 3. rotating him
  - ✓ 4. around him

Question Type : MCQ  
 Question ID : 264330136252  
 Option 1 ID : 264330533794  
 Option 2 ID : 264330533791  
 Option 3 ID : 264330533793  
 Option 4 ID : 264330533792  
 Status : Answered  
 Chosen Option : 2