

Multi Tasking Non Technical Staff and Havaladar CBIC and CBN Examination 2022

Roll Number	
Candidate Name	
Venue Name	Sanaka Educational Trust Group of Institutions
Exam Date	10/05/2023
Exam Time	9:00 AM - 10:30 AM
Subject	MTS Non Tech Havaladar CBIC and CBN Examination 2022

Section : Numerical and Mathematical Ability

Q.1 Sonam bought an old motor bike for Rs. 4675 and spent Rs. 225 on its repair. Then she sold it in Rs. 5390. What is her profit percent?

- Ans**
- ☒ 1. 20%
 - ☒ 2. 15%
 - ☒ 3. 10%
 - ☒ 4. 8%

Question Type : MCQ

Question ID : 264330138353

Option 1 ID : 264330542022

Option 2 ID : 264330542019

Option 3 ID : 264330542021

Option 4 ID : 264330542020

Status : Answered

Chosen Option : 3

Q.2 Average price of 20 pens is Rs. 18. If 12 new pens are added, then the average price rise by Rs. 4. What is the total price of the new pens?

- Ans**
- ☒ 1. Rs.384
 - ☒ 2. Rs.368
 - ☒ 3. Rs.328
 - ☒ 4. Rs.344

Question Type : MCQ

Question ID : 264330139080

Option 1 ID : 264330544927

Option 2 ID : 264330544929

Option 3 ID : 264330544930

Option 4 ID : 264330544928

Status : Answered

Chosen Option : 4

Test Prime

**ALL EXAMS,
ONE SUBSCRIPTION**



70,000+
Mock Tests



**Personalised
Report Card**



**Unlimited
Re-Attempt**



600+
Exam Covered



**Previous Year
Papers**



500%
Refund



ATTEMPT FREE MOCK NOW

Q.3 A can do a piece of work in 16 days. B can do the same work in 24 days. A started the work alone. After how many days should B join him, so that the work is finished in 10 days?

- Ans**
- ☒ 1. 6 days
 - ☒ 2. 2 days
 - ☒ 3. 5 days
 - ☒ 4. 1 day

Question Type : **MCQ**
 Question ID : **264330133849**
 Option 1 ID : **264330524420**
 Option 2 ID : **264330524421**
 Option 3 ID : **264330524419**
 Option 4 ID : **264330524422**
 Status : **Answered**
 Chosen Option : **4**

Q.4 A alone can do a piece of work in 30 days. He worked at it for 5 days and then B alone finished the remaining work in 10 days. In how many days B alone can finish the entire work?

- Ans**
- ☒ 1. 12 days
 - ☒ 2. 15 days
 - ☒ 3. 10 days
 - ☒ 4. 18 days

Question Type : **MCQ**
 Question ID : **264330138051**
 Option 1 ID : **264330540812**
 Option 2 ID : **264330540813**
 Option 3 ID : **264330540811**
 Option 4 ID : **264330540814**
 Status : **Answered**
 Chosen Option : **1**

Q.5 What is the Least Common Multiple of lengths 80 cm, 90 cm and 112 cm?

- Ans**
- ☒ 1. 4250 cm
 - ☒ 2. 5040 cm
 - ☒ 3. 5680 cm
 - ☒ 4. 4840 cm

Question Type : **MCQ**
 Question ID : **264330137191**
 Option 1 ID : **264330537407**
 Option 2 ID : **264330537409**
 Option 3 ID : **264330537410**
 Option 4 ID : **264330537408**
 Status : **Answered**
 Chosen Option : **2**

Q.6 The average expenditure of Raman for 5 days is Rs. 160. If his expenditure for the first 4 days is Rs. 90, Rs. 135, Rs. 75 and Rs. 180 respectively, then what is his expenditure on the 5th day?

- Ans
- ☒ 1. Rs.360
 - ☒ 2. Rs.320
 - ☒ 3. Rs.280
 - ☒ 4. Rs.250

Question Type : MCQ

Question ID : 264330137177

Option 1 ID : 264330537353

Option 2 ID : 264330537352

Option 3 ID : 264330537354

Option 4 ID : 264330537351

Status : Answered

Chosen Option : 2

Q.7 In an isosceles triangle, if the ratio of equal side and unequal side is 5:7 and its perimeter is 34 cm, then what is the length of equal side?

- Ans
- ☒ 1. 14 cm
 - ☒ 2. 18 cm
 - ☒ 3. 10 cm
 - ☒ 4. 34 cm

Question Type : MCQ

Question ID : 264330133854

Option 1 ID : 264330524439

Option 2 ID : 264330524441

Option 3 ID : 264330524440

Option 4 ID : 264330524442

Status : Answered

Chosen Option : 3

Q.8 The following table shows the marks obtained by five students in six different subjects.
How much percent marks are scored by Isha in aggregate?

Students/ Subject	Hindi (Out of 100)	English (Out of 100)	Maths (Out of 150)	S.St (Out of 150)	Science (Out 150)	Computer (Out of 50)
Anchal	84	62	100	140	112	40
Bhavana	92	80	132	148	145	42
Isha	80	60	104	132	105	45
Anuradha	81	71	110	140	125	48
Manjari	78	70	108	135	130	40

- Ans
- ☒ 1. 84.66%
 - ☒ 2. 72.56%
 - ☒ 3. 75.14%
 - ☒ 4. 80.42%

Question Type : MCQ

Question ID : 264330138363

Option 1 ID : 264330542062

Option 2 ID : 264330542059

Option 3 ID : 264330542061

Option 4 ID : 264330542060

Status : Answered

Chosen Option : 3

Q.9 The ratio of the expenditure and savings of a person is 4 : 3. His expenditure increases by $\frac{1}{4}$ of his initial savings and his income increases by Rs. 300. If his savings remains the same, then what is his initial expenditure?

- Ans**
- ✓ 1. Rs.1600
 - ✗ 2. Rs.20000
 - ✗ 3. Rs.10000
 - ✗ 4. Rs.12000

Question Type : MCQ
 Question ID : 264330137184
 Option 1 ID : 264330537382
 Option 2 ID : 264330537381
 Option 3 ID : 264330537380
 Option 4 ID : 264330537379
 Status : Answered
 Chosen Option : 1

Q.10 After 55 years, a sum invested at simple interest at the rate of r percent becomes twice of itself. What is the value of ' r '?

- Ans**
- ✗ 1. 17/20%
 - ✗ 2. 11/30%
 - ✗ 3. 13/15%
 - ✓ 4. 20/11%

Question Type : MCQ
 Question ID : 264330135402
 Option 1 ID : 264330530517
 Option 2 ID : 264330530518
 Option 3 ID : 264330530516
 Option 4 ID : 264330530515
 Status : Answered
 Chosen Option : 4

Q.11 What is the value of $\frac{49 - 7 \times 5 + 3 \times 21}{98 + 49 \times 2 - 195}$?

- Ans**
- ✓ 1. 77
 - ✗ 2. 22
 - ✗ 3. 11
 - ✗ 4. 7

Question Type : MCQ
 Question ID : 264330137192
 Option 1 ID : 264330537412
 Option 2 ID : 264330537414
 Option 3 ID : 264330537413
 Option 4 ID : 264330537411
 Status : Answered
 Chosen Option : 1

Q.12 A shopkeeper sells an article at 10 percent loss after giving a discount of 20 percent. What is the ratio of cost price and marked price of the article?

- Ans**
- ☒ 1. 5 : 8
 - ☒ 2. 8 : 9
 - ☒ 3. 7 : 9
 - ☒ 4. 4 : 9

Question Type : **MCQ**
 Question ID : **264330137187**
 Option 1 ID : **264330537391**
 Option 2 ID : **264330537392**
 Option 3 ID : **264330537393**
 Option 4 ID : **264330537394**
 Status : **Answered**
 Chosen Option : **2**

Q.13 The speed of a boat in still water is 9 km/hr and the speed of the stream is 6 km/hr. If a man goes a distance of 45 km against the stream and comes back to the starting point, then what is the total time taken by him?

- Ans**
- ☒ 1. 20 hours
 - ☒ 2. 30 hours
 - ☒ 3. 24 hours
 - ☒ 4. 18 hours

Question Type : **MCQ**
 Question ID : **264330137176**
 Option 1 ID : **264330537347**
 Option 2 ID : **264330537350**
 Option 3 ID : **264330537348**
 Option 4 ID : **264330537349**
 Status : **Answered**
 Chosen Option : **4**

Q.14 A and B enter into a partnership such that 5 times of A's investment is equal to 7 times of B's investment. If the total profit is Rs. 12000, then what is the share of A?

- Ans**
- ☒ 1. Rs.6300
 - ☒ 2. Rs.7000
 - ☒ 3. Rs.8000
 - ☒ 4. Rs.7500

Question Type : **MCQ**
 Question ID : **264330137183**
 Option 1 ID : **264330537375**
 Option 2 ID : **264330537377**
 Option 3 ID : **264330537378**
 Option 4 ID : **264330537376**
 Status : **Answered**
 Chosen Option : **2**

Q.15

Evaluate: $6 + 6 \text{ of } 6 \div 6 - \frac{6}{5}$

- Ans ☒ 1. 12/5
☒ 2. 54/5
☒ 3. 44/5
☒ 4. 6/5

Question Type : MCQ

Question ID : 264330138347

Option 1 ID : 264330541997

Option 2 ID : 264330541995

Option 3 ID : 264330541998

Option 4 ID : 264330541996

Status : Answered

Chosen Option : 2

Q.16 When a number is increased by 112, it becomes 170% of itself. Find the number.

- Ans ☒ 1. 160
☒ 2. 150
☒ 3. 200
☒ 4. 180

Question Type : MCQ

Question ID : 264330135070

Option 1 ID : 264330529216

Option 2 ID : 264330529215

Option 3 ID : 264330529218

Option 4 ID : 264330529217

Status : Answered

Chosen Option : 1

Q.17 The difference between compound interest and simple interest on an amount of Rs. 14,400 for 2 years is Rs. 3600. Find the rate of interest.

- Ans ☒ 1. 30%
☒ 2. 35%
☒ 3. 10%
☒ 4. 50%

Question Type : MCQ

Question ID : 264330135077

Option 1 ID : 264330529244

Option 2 ID : 264330529245

Option 3 ID : 264330529243

Option 4 ID : 264330529246

Status : Answered

Chosen Option : 4

Q.18 By selling a glass for Rs. 1378 a man earns a profit of 6 percent. If he sells it for Rs. 1079, then what will be the loss percent?

- Ans**
- ☒ 1. 11 percent
 - ☒ 2. 18 percent
 - ☒ 3. 17 percent
 - ☒ 4. 15 percent

Question Type : **MCQ**

Question ID : **264330137182**

Option 1 ID : **264330537372**

Option 2 ID : **264330537371**

Option 3 ID : **264330537374**

Option 4 ID : **264330537373**

Status : **Answered**

Chosen Option : **3**

Q.19 Find the weight of a cylindrical iron container with base radius 12.6 cm and height is 4 m, where the weight of 1 cm³ of iron is 2 grams?

- Ans**
- ☒ 1. 299.284 kg
 - ☒ 2. 199.584 kg
 - ☒ 3. 399.168 kg
 - ☒ 4. 499.482 kg

Question Type : **MCQ**

Question ID : **264330138056**

Option 1 ID : **264330540834**

Option 2 ID : **264330540832**

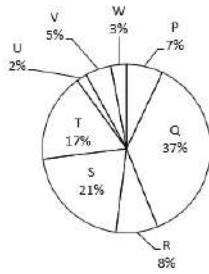
Option 3 ID : **264330540831**

Option 4 ID : **264330540833**

Status : **Answered**

Chosen Option : **3**

Q.20 The pie chart given below shows the number of boys in 8 schools. The total number of boys in all these 8 schools is 8000. Number of boys in a particular school is shown as a percent of total number of boys in all these 8 schools.



What is the sum of average number of boys in P, R, T and W and the average number of boys in Q and V?

- Ans**
- ☒ 1. 2580
 - ☒ 2. 2180
 - ☒ 3. 2380
 - ☒ 4. 1980

Question Type : **MCQ**

Question ID : **264330137195**

Option 1 ID : **264330537423**

Option 2 ID : **264330537426**


Option 3 ID : **264330537425**

Option 4 ID : **264330537424**

Status : **Answered**

Chosen Option : **3**

Section : Reasoning Ability and Problem Solving



Q.1 Select the option figure in which the given figure is embedded. (rotation is NOT allowed)

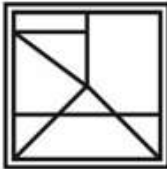


Ans

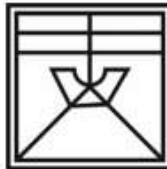
✗ 1.



✗ 2.



✓ 3.



✗ 4.



Question Type : MCQ

Question ID : 264330138474

Option 1 ID : 264330542506

Option 2 ID : 264330542503

Option 3 ID : 264330542504

Option 4 ID : 264330542505

Status : Answered

Chosen Option : 3

Q.2 Which of the following numbers will replace the question mark (?) in the given series?

19, 27, 54, 118, 243, ?

Ans

✗ 1. 469

✗ 2. 449

✓ 3. 459

✗ 4. 457

Question Type : MCQ

Question ID : 264330137357

Option 1 ID : 264330538058

Option 2 ID : 264330538057

Option 3 ID : 264330538056

Option 4 ID : 264330538055

Status : Answered

Chosen Option : 3

Q.3 Select the option that is related to the third word in the same way as the second word is related to the first word.
Night blindness : Vitamin A :: Scurvy : ?

- Ans**
- ☒ 1. Vitamin D
 - ☒ 2. Vitamin C
 - ☒ 3. Vitamin K
 - ☒ 4. Vitamin E

Question Type : **MCQ**
Question ID : **264330137346**
Option 1 ID : **264330538012**
Option 2 ID : **264330538014**
Option 3 ID : **264330538013**
Option 4 ID : **264330538011**
Status : **Answered**
Chosen Option : **1**

Q.4 P, Q, R, S and T are sitting on a bench facing towards north but not necessarily in the same order. P is immediate neighbour of Q, S is immediate neighbour of T, P is not sitting with R who sits on the right end of the bench. P sits to the right of S and T. S sits to the right of T.
In which position P is sitting?

- Ans**
- ☒ 1. Second from right
 - ☒ 2. Fourth from left
 - ☒ 3. Second from left
 - ☒ 4. Third from left

Question Type : **MCQ**
Question ID : **264330137351**
Option 1 ID : **264330538033**
Option 2 ID : **264330538034**
Option 3 ID : **264330538031**
Option 4 ID : **264330538032**
Status : **Answered**
Chosen Option : **4**





Q.5 Select the option that is related to the third number in the same way as the second number is related to the first number.
441 : 9261 :: 169 : ?

- Ans**
- ☒ 1. 2197
 - ☒ 2. 2019
 - ☒ 3. 2917
 - ☒ 4. 2719

Question Type : **MCQ**
Question ID : **264330134969**
Option 1 ID : **264330528813**
Option 2 ID : **264330528814**
Option 3 ID : **264330528811**
Option 4 ID : **264330528812**
Status : **Answered**
Chosen Option : **1**

Q.6 Select the set in which the numbers are related in the same way as are the numbers of the following sets.(NOTE : Operations should be performed on the whole numbers, without breaking down the numbers into its constituent digits. E.g 13 – Operations on 13 such as adding / subtracting /multiplying etc. to 13 can be performed. Breaking down 13 into 1 and 3 and then performing mathematical operations on 1 and 3 is not allowed)

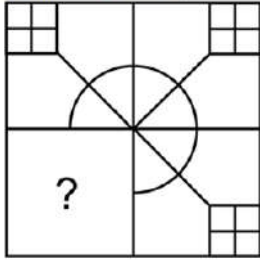
(6, 4, 48)
(8, 5, 80)

- Ans**  1. (3, 7, 42)
-  2. (2, 7, 14)
-  3. (5, 7, 42)
-  4. (4, 6, 36)

Question Type : **MCQ**
Question ID : **264330137359**
Option 1 ID : **264330538063**
Option 2 ID : **264330538064**
Option 3 ID : **264330538066**
Option 4 ID : **264330538065**
Status : **Answered**
Chosen Option : **1**

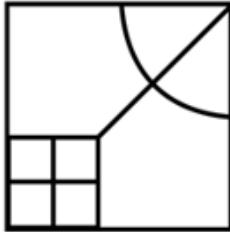


Q.7 Select the option figure that will replace the question mark (?) in the figure given below to complete the pattern.
(rotation is not allowed)

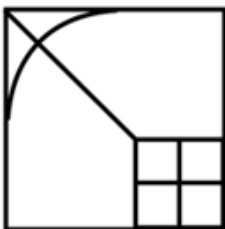


Ans

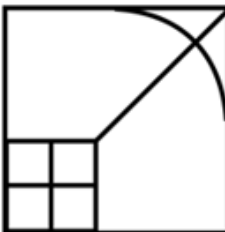
✓ 1.



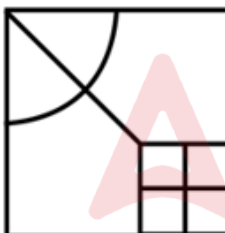
✗ 2.



✗ 3.



✗ 4.



Question Type : MCQ

Question ID : 264330137364

Option 1 ID : 264330538084

Option 2 ID : 264330538083

Option 3 ID : 264330538086

Option 4 ID : 264330538085

Status : Answered

Chosen Option : 1

Q.8 Two Statements are given followed by two conclusions numbered I and II. Assuming the statements to be true, even if they seem to be at variance with commonly known facts, decide which of the conclusions logically follow(s) from the statements.

Statements:

No plate is Mug.

Some Mugs are Tables.

Conclusions:

I. All plates being tables is a possibility.

II. Some tables are not mugs.

- Ans**
- ☒ 1. Both conclusions I and II follow.
 - ☒ 2. Neither conclusion I nor II follow.
 - ☒ 3. Only conclusion I follows.
 - ☒ 4. Only conclusion II follows.

Question Type : MCQ

Question ID : 264330137355

Option 1 ID : 264330538049

Option 2 ID : 264330538050

Option 3 ID : 264330538047

Option 4 ID : 264330538048

Status : Answered

Chosen Option : 4

Q.9 Five boys Aman, Baman, Chaman, Daman and Farhan have different ages. Farhan is elder than only Aman and Baman. Daman is younger than only Chaman. Aman is not the youngest. How many boys are elder than Aman?

- Ans**
- ☒ 1. 1
 - ☒ 2. 2
 - ☒ 3. 3
 - ☒ 4. 4

Question Type : MCQ

Question ID : 264330137353

Option 1 ID : 264330538039

Option 2 ID : 264330538040

Option 3 ID : 264330538041

Option 4 ID : 264330538042

Status : Answered

Chosen Option : 3

Q.10 In a certain code language, 'DJ' is written as '410'. How will 'NS' be written in that language?

- Ans**
- ☒ 1. 1419
 - ☒ 2. 1320
 - ☒ 3. 1420
 - ☒ 4. 1319

Question Type : MCQ

Question ID : 264330137790

Option 1 ID : 264330539770

Option 2 ID : 264330539767

Option 3 ID : 264330539769

Option 4 ID : 264330539768

Status : Answered

Chosen Option : 1

Q.11 Which of the following letter cluster will replace the question mark (?) in the given series?

XF, UI, RL, OO, ?

- Ans
- ☒ 1. KS
 - ☒ 2. KR
 - ☒ 3. LS
 - ☒ 4. LR

Question Type : MCQ

Question ID : 264330137343

Option 1 ID : 264330538001

Option 2 ID : 264330538002

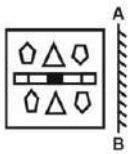
Option 3 ID : 264330537999

Option 4 ID : 264330538000

Status : Answered

Chosen Option : 4

Q.12 If a mirror is placed on the line AB, then out of the option figures which figure will be the right image of the question figure?



Ans

- ☒ 1.
- ☒ 2.
- ☒ 3.
- ☒ 4.

Question Type : MCQ

Question ID : 264330138475

Option 1 ID : 264330542509

Option 2 ID : 264330542507

Option 3 ID : 264330542508

Option 4 ID : 264330542510

Status : Answered

Chosen Option : 1

Q.13 A, B, C, D, E, F, G, and H are sitting around a square table facing the centre of the table. Four of them are sitting at each of the corners, while the other four are sitting at the exact centre of each of the sides.
E who sits at the centre of a side, sits to the fourth left of the G. Only one person sits between G and F. B is immediate neighbour of E. Only three people sit between B and A. A is not a neighbour of D. H sits to the immediate left of C. C sits to the third right of E.
Who sits third to the right of D?

- Ans** ☒ 1. H
☒ 2. C
☒ 3. G
☒ 4. B

Question Type : **MCQ**
 Question ID : **264330137352**
 Option 1 ID : **264330538037**
 Option 2 ID : **264330538035**
 Option 3 ID : **264330538038**
 Option 4 ID : **264330538036**
 Status : **Answered**
 Chosen Option : **3**

Q.14 Which of the following numbers will replace the question mark (?) in the given series?
 14, 15, 30, 33, 132, 137, 822, ?

- Ans** ☒ 1. 899
☒ 2. 829
☒ 3. 819
☒ 4. 982

Question Type : **MCQ**
 Question ID : **264330134967**
 Option 1 ID : **264330528804**
 Option 2 ID : **264330528805**
 Option 3 ID : **264330528806**
 Option 4 ID : **264330528803**
 Status : **Answered**
 Chosen Option : **2**

Q.15 Two Statements are given followed by two conclusions numbered I and II. Assuming the statements to be true, even if they seem to be at variance with commonly known facts, decide which of the conclusions logically follow(s) from the statements.
 Statements:
 All carrots are vegetables.
 Some vegetables are snacks.
 Conclusions:
 I. All vegetables are carrots.
 II. All carrots are snacks.

- Ans** ☒ 1. Only conclusion I follows.
☒ 2. Only conclusion II follows.
☒ 3. Neither conclusion I nor II follow.
☒ 4. Both conclusions I and II follow.

Question Type : **MCQ**
 Question ID : **264330137354**
 Option 1 ID : **264330538043**
 Option 2 ID : **264330538044**
 Option 3 ID : **264330538046**
 Option 4 ID : **264330538045**
 Status : **Answered**
 Chosen Option : **3**

Q.16 Select the option that is related to the third word in the same way as the second word is related to the first word.

Newton : Force :: Joule : ?

- Ans**
- ☒ 1. Momentum
 - ☒ 2. Work
 - ☒ 3. Time
 - ☒ 4. Pressure

Question Type : **MCQ**

Question ID : **264330137345**

Option 1 ID : **264330538010**

Option 2 ID : **264330538008**

Option 3 ID : **264330538007**

Option 4 ID : **264330538009**

Status : **Answered**

Chosen Option : **2**

Q.17 In a certain code language, 'SHOE' is written as '47'. How will 'HELMET' be written in that language?

- Ans**
- ☒ 1. 63
 - ☒ 2. 83
 - ☒ 3. 68
 - ☒ 4. 72

Question Type : **MCQ**

Question ID : **264330134938**

Option 1 ID : **264330528689**

Option 2 ID : **264330528690**

Option 3 ID : **264330528688**

Option 4 ID : **264330528687**

Status : **Answered**

Chosen Option : **1**

Q.18 By interchanging the given two signs which of the following equation will be not correct?

+ and -

I. $4 \times 6 + 7 - 3 + 1 = 21$

II. $6 \times 9 + 7 - 8 + 2 = 51$

- Ans**
- ☒ 1. Only I
 - ☒ 2. Both I and II
 - ☒ 3. Neither I nor II
 - ☒ 4. Only II

Question Type : **MCQ**

Question ID : **264330135611**

Option 1 ID : **264330531343**

Option 2 ID : **264330531345**

Option 3 ID : **264330531346**

Option 4 ID : **264330531344**

Status : **Answered**

Chosen Option : **1**

Q.19 Which of the mathematical signs should be interchanged in the below equation to make it mathematically correct?

$$24 \div 15 \times 16 + 4 - 18 = 66$$

- Ans**
- ☒ 1. \div and \times
 - ☒ 2. $-$ and $+$
 - ☒ 3. $-$ and \times
 - ☒ 4. \div and $+$

Question Type : MCQ

Question ID : 264330137360

Option 1 ID : 264330538067

Option 2 ID : 264330538069

Option 3 ID : 264330538070

Option 4 ID : 264330538068

Status : Answered

Chosen Option : 4

Q.20 In a certain code language, 'TYPING' is written as 'VAPING'. How will 'WIPING' be written in that language?

- Ans**
- ☒ 1. YKPING
 - ☒ 2. VKPJNG
 - ☒ 3. VIPING
 - ☒ 4. VKPGNG

Question Type : MCQ

Question ID : 264330134936

Option 1 ID : 264330528681

Option 2 ID : 264330528682

Option 3 ID : 264330528679

Option 4 ID : 264330528680

Status : Answered

Chosen Option : 1

Section : General Awareness

Q.1 Which of these is the title of the first novel of Anand Neelakantan?

- Ans**
- ☒ 1. Asura: Tale of the Vanquished
 - ☒ 2. Satya Ke Prayog
 - ☒ 3. The Immortals of Meluha
 - ☒ 4. Kadambari

Question Type : MCQ

Question ID : 264330134624

Option 1 ID : 264330527451

Option 2 ID : 264330527454

Option 3 ID : 264330527452

Option 4 ID : 264330527453

Status : Answered

Chosen Option : 1

Q.2 Article _____ of the Indian Constitution deals with "Right to Constitutional Remedies".

- Ans ☒ 1. 28 – 33
☒ 2. 32 – 35
☒ 3. 25 – 30
☒ 4. 22 – 25

Question Type : MCQ
 Question ID : 264330137081
 Option 1 ID : 264330536967
 Option 2 ID : 264330536970
 Option 3 ID : 264330536969
 Option 4 ID : 264330536968
 Status : Answered
 Chosen Option : 2

Q.3 As per the Census 2011, what is the sex ratio in India?

- Ans ☒ 1. 843 females per thousand males
☒ 2. 943 females per thousand males
☒ 3. 743 females per thousand males
☒ 4. 643 females per thousand males

Question Type : MCQ
 Question ID : 264330135445
 Option 1 ID : 264330530690
 Option 2 ID : 264330530689
 Option 3 ID : 264330530688
 Option 4 ID : 264330530687
 Status : Answered
 Chosen Option : 2

Q.4 Which bill passed in the Lok Sabha in 2022 seeks to convert the National Rail and Transportation Institute, Vadodara (a deemed university) to the Gati Shakti Vishwavidyalaya?

- Ans ☒ 1. The Appropriation Bill
☒ 2. The Competition (Amendment) Bill
☒ 3. Central Universities (Amendment) Bill
☒ 4. University Laws (Amendment) Bill

Question Type : MCQ
 Question ID : 264330135460
 Option 1 ID : 264330530747
 Option 2 ID : 264330530749
 Option 3 ID : 264330530748
 Option 4 ID : 264330530750
 Status : Answered
 Chosen Option : 3

Q.5 Steapsin, the enzyme which converts fats into fatty acids and glycerol, is secreted by _____.

- Ans
- ☐ 1. stomach
 - ☒ 2. pancreas
 - ☐ 3. small intestine
 - ☐ 4. large intestine

Question Type : MCQ

Question ID : 264330137067

Option 1 ID : 264330536911

Option 2 ID : 264330536912

Option 3 ID : 264330536913

Option 4 ID : 264330536914

Status : Not Answered

Chosen Option : --

Q.6 English East India Company acquired Diwani of Bengal in _____.

- Ans
- ☒ 1. 1765
 - ☐ 2. 1755
 - ☐ 3. 1760
 - ☐ 4. 1770

Question Type : MCQ

Question ID : 264330134642

Option 1 ID : 264330527525

Option 2 ID : 264330527523

Option 3 ID : 264330527524

Option 4 ID : 264330527526

Status : Answered

Chosen Option : 1

Q.7 President Draupadi Murmu launched the 'Pradhan Mantri TB Mukti Bharat Abhiyan' and the Nikshay 2.0 portal to eliminate Tuberculosis by _____ through a virtual event.

- Ans
- ☐ 1. 2035
 - ☐ 2. 2028
 - ☒ 3. 2025
 - ☐ 4. 2030

Question Type : MCQ

Question ID : 264330137061

Option 1 ID : 264330536887

Option 2 ID : 264330536888

Option 3 ID : 264330536890

Option 4 ID : 264330536889

Status : Answered

Chosen Option : 4

Q.8 Which among the following Buddhist Universities is located in Bihar, India?

- Ans
- ☐ 1. Vallabhi University
 - ☐ 2. Somapuri University
 - ☒ 3. Nalanda University
 - ☐ 4. Nabadwip University

Question Type : MCQ

Question ID : 264330135463

Option 1 ID : 264330530762

Option 2 ID : 264330530761

Option 3 ID : 264330530760

Option 4 ID : 264330530759

Status : Answered

Chosen Option : 3

Q.9 Who has been the chairman of Union Public Service Commission (UPSC) since 5 April, 2022?

- Ans
- ☐ 1. Dr. T.C.A. Anant
 - ☐ 2. Shri Bharat Bhushan Vyas
 - ☒ 3. Dr. Manoj Soni
 - ☐ 4. Ms. Smita Nagaraj

Question Type : MCQ

Question ID : 264330134627

Option 1 ID : 264330527466

Option 2 ID : 264330527465

Option 3 ID : 264330527463

Option 4 ID : 264330527464

Status : Answered

Chosen Option : 3

Q.10 When was the first battle of Tarain fought?

- Ans
- ☐ 1. 1208
 - ☐ 2. 1182
 - ☒ 3. 1191
 - ☐ 4. 1215

Question Type : MCQ

Question ID : 264330138234

Option 1 ID : 264330541546

Option 2 ID : 264330541545

Option 3 ID : 264330541544

Option 4 ID : 264330541543

Status : Answered

Chosen Option : 3

Q.11 Raja Parba festival of Odisha is the living cultural heritage and agricultural way of life. It is held for three days in the month of _____.

- Ans**
- ☒ 1. July
 - ☒ 2. June
 - ☒ 3. September
 - ☒ 4. August

Question Type : **MCQ**

Question ID : **264330138224**

Option 1 ID : **264330541503**

Option 2 ID : **264330541504**

Option 3 ID : **264330541506**

Option 4 ID : **264330541505**

Status : **Not Answered**

Chosen Option : --

Q.12 According to census 2011, which state has highest decadal population growth rate between 2001 – 11?

- Ans**
- ☒ 1. Bihar
 - ☒ 2. Arunachal Pradesh
 - ☒ 3. Mizoram
 - ☒ 4. Meghalaya

Question Type : **MCQ**

Question ID : **264330134613**

Option 1 ID : **264330527408**

Option 2 ID : **264330527409**

Option 3 ID : **264330527410**

Option 4 ID : **264330527407**

Status : **Answered**

Chosen Option : 4

Q.13 Who gave the slogan, "Freedom is my birth right and I shall have it!"?

- Ans**
- ☒ 1. Badruddin Tyabji
 - ☒ 2. Lala Lajpat Rai
 - ☒ 3. Bal Gangadhar Tilak
 - ☒ 4. Bipin Chandra Pal

Question Type : **MCQ**

Question ID : **264330134618**

Option 1 ID : **264330527430**

Option 2 ID : **264330527427**

Option 3 ID : **264330527428**

Option 4 ID : **264330527429**

Status : **Answered**

Chosen Option : 3

Q.14 _____ is scheduled to host the International Cricket Council (ICC) Men's Cricket World Cup 2023.

Ans ☒ 1. England

☒ 2. New Zealand

☒ 3. India

☒ 4. Pakistan

Question Type : MCQ

Question ID : 264330137083

Option 1 ID : 264330536975

Option 2 ID : 264330536976

Option 3 ID : 264330536978

Option 4 ID : 264330536977

Status : Answered

Chosen Option : 3

Q.15 Who among the following is famous for playing the musical instrument 'Sarod'?

Ans ☒ 1. Amjad Ali Khan

☒ 2. Bismillah Khan

☒ 3. Zakir Hussain

☒ 4. Ravi Shankar

Question Type : MCQ

Question ID : 264330137079

Option 1 ID : 264330536959

Option 2 ID : 264330536961

Option 3 ID : 264330536962

Option 4 ID : 264330536960

Status : Answered

Chosen Option : 1

Q.16 Identify the famous Indian classical dancer.

She is a Guru of both Bharatanatyam and Odissi dancing style. She received Sangeet Natak Akademi Award in 1987.

Ans ☒ 1. Shovana Narayana

☒ 2. Sonal Mansingh

☒ 3. Padma Subrahmanyam

☒ 4. Mrinalini Sarabhai

Question Type : MCQ

Question ID : 264330134626

Option 1 ID : 264330527462

Option 2 ID : 264330527461

Option 3 ID : 264330527459

Option 4 ID : 264330527460

Status : Answered

Chosen Option : 2

Q.17 In 1867, Keshab Chandra Sen helped Atmaram Pandurang found the Prarthana Samaj in _____.

- Ans
- ☒ 1. Calcutta
 - ☒ 2. Bombay
 - ☒ 3. Poona
 - ☒ 4. Chennai

Question Type : MCQ
 Question ID : 264330138237
 Option 1 ID : 264330541557
 Option 2 ID : 264330541555
 Option 3 ID : 264330541556
 Option 4 ID : 264330541558
 Status : Answered
 Chosen Option : 2

Q.18 The famous Hirakud Captive Thermal Power plant is located in which of the following states?

- Ans
- ☒ 1. Odisha
 - ☒ 2. Gujarat
 - ☒ 3. Tamil Nadu
 - ☒ 4. Andhra Pradesh

Question Type : MCQ
 Question ID : 264330137071
 Option 1 ID : 264330536927
 Option 2 ID : 264330536928
 Option 3 ID : 264330536930
 Option 4 ID : 264330536929
 Status : Answered
 Chosen Option : 1

Q.19 As a result of which act did Queen Victoria, who was the monarch of Britain, also became the sovereign of British territories in India, with the title "Empress of India" in 1858?

- Ans
- ☒ 1. Indian Councils Act
 - ☒ 2. Government Of India Act
 - ☒ 3. Charter Act
 - ☒ 4. Regulating Act

Question Type : MCQ
 Question ID : 264330135474
 Option 1 ID : 264330530804
 Option 2 ID : 264330530805
 Option 3 ID : 264330530803
 Option 4 ID : 264330530806
 Status : Answered
 Chosen Option : 2

Q.20 When was the Pradhan Mantri Ujjwala Yojana launched by the Government of India?

- Ans
- ☐ 1. 2018
 - ☐ 2. 2014
 - ☒ 3. 2016
 - ☐ 4. 2012

Question Type : MCQ
Question ID : 264330138233
Option 1 ID : 264330541542
Option 2 ID : 264330541541
Option 3 ID : 264330541540
Option 4 ID : 264330541539
Status : Answered
Chosen Option : 3

Q.21 PM Street Vendor's AtmaNirbhar Nidhi (PM SVANidhi) Scheme was launched by which ministry?

- Ans
- ☐ 1. Ministry of Consumer Affairs
 - ☐ 2. Ministry of Finance
 - ☐ 3. Ministry of Commerce
 - ☒ 4. Ministry of Housing and Urban Affairs

Question Type : MCQ
Question ID : 264330134603
Option 1 ID : 264330527369
Option 2 ID : 264330527367
Option 3 ID : 264330527368
Option 4 ID : 264330527370
Status : Answered
Chosen Option : 4

Q.22 _____ species are those species of plants and animals which are found exclusively in a particular area.

- Ans
- ☒ 1. Endemic
 - ☐ 2. Endangered
 - ☐ 3. Threatened
 - ☐ 4. Critically Endangered

Question Type : MCQ
Question ID : 264330134633
Option 1 ID : 264330527488
Option 2 ID : 264330527489
Option 3 ID : 264330527487
Option 4 ID : 264330527490
Status : Answered
Chosen Option : 1

Q.23 Which among the following is a subject of State List in Constitution of India?

- Ans
- ☒ 1. Banking
 - ☒ 2. Ports
 - ☒ 3. Agriculture
 - ☒ 4. Railways

Question Type : MCQ
 Question ID : 264330137082
 Option 1 ID : 264330536972
 Option 2 ID : 264330536974
 Option 3 ID : 264330536971
 Option 4 ID : 264330536973
 Status : Answered
 Chosen Option : 2

Q.24 Pung Cholom is performed usually on religious occasions to the accompaniment of songs and dhol. It is famously performed in which of the following states?

- Ans
- ☒ 1. Uttar Pradesh
 - ☒ 2. Maharashtra
 - ☒ 3. Manipur
 - ☒ 4. Kerala

Question Type : MCQ
 Question ID : 264330137063
 Option 1 ID : 264330536897
 Option 2 ID : 264330536895
 Option 3 ID : 264330536896
 Option 4 ID : 264330536898
 Status : Answered
 Chosen Option : 3

Q.25 Major plantations are found in the _____ region of the world.

- Ans
- ☒ 1. Tropical
 - ☒ 2. Grassland
 - ☒ 3. Temperate
 - ☒ 4. Desert

Question Type : MCQ
 Question ID : 264330134611
 Option 1 ID : 264330527402
 Option 2 ID : 264330527399
 Option 3 ID : 264330527400
 Option 4 ID : 264330527401
 Status : Answered
 Chosen Option : 3

Q.1 Select the most appropriate option to substitute the bracketed segment in the given sentence. If there is no need to substitute it, select 'no substitution required'.
(In fact, climbing fern is spreading so rapidly that its) now the state's worst invasive weed.

- Ans**
- ☒ 1. In fact, climbing fern is spreading so rapid that it's
 - ☒ 2. In fact, climbing fern is spread so rapidly that its
 - ☒ 3. In fact, climbing fern is spreading so rapidly that it's
 - ☒ 4. No substitution required

Question Type : **MCQ**
Question ID : **264330135798**
Option 1 ID : **264330532067**
Option 2 ID : **264330532069**
Option 3 ID : **264330532068**
Option 4 ID : **264330532070**
Status : **Answered**
Chosen Option : **3**

Q.2 Select the correctly spelt word.

- Ans**
- ☒ 1. Concensus
 - ☒ 2. Concencus
 - ☒ 3. Consensus
 - ☒ 4. Consencus

Question Type : **MCQ**
Question ID : **264330135789**
Option 1 ID : **264330532034**
Option 2 ID : **264330532032**
Option 3 ID : **264330532031**
Option 4 ID : **264330532033**
Status : **Answered**
Chosen Option : **3**

Q.3 Select the most appropriate antonym to substitute the (bracketed) word in the given sentence.
It would effectively rouse people's ardour to invest, and help to (discourage) the transfer of capital abroad.

- Ans**
- ☒ 1. Industrious
 - ☒ 2. Construe
 - ☒ 3. Persuade
 - ☒ 4. Intolerable

Question Type : **MCQ**
Question ID : **264330135786**
Option 1 ID : **264330532022**
Option 2 ID : **264330532021**
Option 3 ID : **264330532019**
Option 4 ID : **264330532020**
Status : **Answered**
Chosen Option : **3**

Q.4 Fill in the blank with the most appropriate choice

This _____ piece of mischief by his brother brought a quiet laugh from David.

- Ans
- ☐ 1. nonsensical
 - ☐ 2. classical
 - ☒ 3. whimsical
 - ☐ 4. vesical

Question Type : MCQ

Question ID : 264330135792

Option 1 ID : 264330532043

Option 2 ID : 264330532045

Option 3 ID : 264330532044

Option 4 ID : 264330532046

Status : Answered

Chosen Option : 3

Q.5 In the following question, out of the given four alternatives, select the alternative which best expresses the meaning of the Idiom/Phrase.

The life and soul of the party

- Ans
- ☐ 1. The only person who dances in the party
 - ☐ 2. Chief guest of the party
 - ☐ 3. A person who brings lots of gifts
 - ☒ 4. Person who brings lots of energy to the party

Question Type : MCQ

Question ID : 264330134765

Option 1 ID : 264330528009

Option 2 ID : 264330528008

Option 3 ID : 264330528010

Option 4 ID : 264330528007

Status : Answered

Chosen Option : 4

Q.6 Four sentences are given, out of which three have spelling errors. Choose the sentence with all correct spelt words.

- Ans
- ☐ 1. The main problem, I beleive, lies elsewhere.
 - ☐ 2. He said the goverment remained committed to peace.
 - ☒ 3. You could have seen in them a cemetery or a war memorial.
 - ☐ 4. Jerry is an amatuer who dances because he feels like it.

Question Type : MCQ

Question ID : 264330136610

Option 1 ID : 264330535168

Option 2 ID : 264330535170

Option 3 ID : 264330535169

Option 4 ID : 264330535167

Status : Answered

Chosen Option : 3

Q.7 Identify the segment that contains a grammatical error. If there is no error, select 'No error'.

Early, during December 2021, / Lal was appointed as / the Secretary to the Lokpal.

- Ans
- ☒ 1. the Secretary to the Lokpal.
 - ☒ 2. Early, during December 2021,
 - ☒ 3. Lal was appointed as
 - ☒ 4. No error

Question Type : MCQ
 Question ID : 264330136588
 Option 1 ID : 264330535085
 Option 2 ID : 264330535083
 Option 3 ID : 264330535084
 Option 4 ID : 264330535086
 Status : Answered
 Chosen Option : 2

Q.8 Find the part of the given sentence that has an error in it. If there is no error, choose 'No error'.

Neither I nor my friends are going too walk down that street.

- Ans
- ☒ 1. down that street.
 - ☒ 2. friends are going too walk
 - ☒ 3. No error
 - ☒ 4. Neither I nor my

Question Type : MCQ
 Question ID : 264330134502
 Option 1 ID : 264330526973
 Option 2 ID : 264330526972
 Option 3 ID : 264330526974
 Option 4 ID : 264330526971
 Status : Answered
 Chosen Option : 2

Q.9 Identify the segment that contains a grammatical error. If there is no error, select 'No error'

In 79 A.D., the Mount Vesuvius blew / its top, burying the ancient / cities of Pompeii and Herculaneum.

- Ans
- ☒ 1. In 79 A.D., the Mount Vesuvius blew
 - ☒ 2. its top, burying the ancient
 - ☒ 3. cities of Pompeii and Herculaneum.
 - ☒ 4. No Error

Question Type : MCQ
 Question ID : 264330135769
 Option 1 ID : 264330531955
 Option 2 ID : 264330531956
 Option 3 ID : 264330531957
 Option 4 ID : 264330531958
 Status : Answered
 Chosen Option : 1

Q.10 Fill in the blank with the most appropriate option.

This change is responsible for a recent _____ the number of cases of cancer in this age group.

- Ans
- ☐ 1. rise to
 - ☐ 2. rise at
 - ☒ 3. rise in
 - ☐ 4. rise of

Question Type : MCQ

Question ID : 264330136611

Option 1 ID : 264330535174

Option 2 ID : 264330535173

Option 3 ID : 264330535172

Option 4 ID : 264330535171

Status : Answered

Chosen Option : 3

Q.11 Fill in the blank with the most appropriate option.

For months, Drupad could not taste anything he ate as regret layered _____ mud.

- Ans
- ☒ 1. his mouth like
 - ☐ 2. his mouth as though
 - ☐ 3. his mouth comparable to
 - ☐ 4. his mouth allied to

Question Type : MCQ

Question ID : 264330136646

Option 1 ID : 264330535308

Option 2 ID : 264330535307

Option 3 ID : 264330535309

Option 4 ID : 264330535310

Status : Answered

Chosen Option : 1

Q.12 Select the most appropriate word for the given group of words.

A local meeting of party members to select candidates, elect convention delegates, etc

- Ans
- ☐ 1. Claque
 - ☐ 2. Clique
 - ☐ 3. Caravan
 - ☒ 4. Caucus

Question Type : MCQ

Question ID : 264330135782

Option 1 ID : 264330532005

Option 2 ID : 264330532006

Option 3 ID : 264330532004

Option 4 ID : 264330532003

Status : Answered

Chosen Option : 2

Q.13 Choose the word that can substitute the given group of words.

The flowers of a particular region

- Ans ☒ 1. Flora
☒ 2. Fauna
☒ 3. Bovine
☒ 4. Bryophyte

Question Type : MCQ
 Question ID : 264330134759
 Option 1 ID : 264330527984
 Option 2 ID : 264330527986
 Option 3 ID : 264330527983
 Option 4 ID : 264330527985
 Status : Answered
 Chosen Option : 1

Q.14 Select the most appropriate synonym of the given word.

Console

- Ans ☒ 1. Fret
☒ 2. Arteriole
☒ 3. Solace
☒ 4. Torment

Question Type : MCQ
 Question ID : 264330135783
 Option 1 ID : 264330532009
 Option 2 ID : 264330532007
 Option 3 ID : 264330532008
 Option 4 ID : 264330532010
 Status : Answered
 Chosen Option : 3

Q.15 Improve the underlined part of the sentence. Choose 'No improvement' as an answer if the sentence is grammatically correct.

Each passenger is allows one piece of carry-on luggage.

- Ans ☒ 1. is allowed
☒ 2. No improvement
☒ 3. is allowing
☒ 4. is allow

Question Type : MCQ
 Question ID : 264330134722
 Option 1 ID : 264330527843
 Option 2 ID : 264330527846
 Option 3 ID : 264330527844
 Option 4 ID : 264330527845
 Status : Answered
 Chosen Option : 1

Q.16 Choose the word that is opposite in meaning to the given word.

Malign

- Ans ☒ 1. Praise
☐ 2. Align
☐ 3. Cheerful
☐ 4. Harangue

Question Type : MCQ
Question ID : 264330135222
Option 1 ID : 264330529813
Option 2 ID : 264330529811
Option 3 ID : 264330529812
Option 4 ID : 264330529814
Status : Answered
Chosen Option : 1

Q.17 Fill in the blank with the most appropriate choice.

During treatment, patients lay _____ on the treatment couch for around 3 hrs.

- Ans ☐ 1. arsine
☐ 2. alpine
☐ 3. repine
☒ 4. supine

Question Type : MCQ
Question ID : 264330135773
Option 1 ID : 264330531974
Option 2 ID : 264330531973
Option 3 ID : 264330531971
Option 4 ID : 264330531972
Status : Not Answered
Chosen Option : --

Q.18 Select the most appropriate meaning of the bracketed idiom in the given sentence.

Later, Brooks' brother alleged that racism helped put the (pedal to the metal).

- Ans ☐ 1. Very excessive
☒ 2. To go full speed, especially while driving a vehicle
☐ 3. To enjoy yourself by going out
☐ 4. Avoid responsibility by giving it to someone else

Question Type : MCQ
Question ID : 264330135788
Option 1 ID : 264330532028
Option 2 ID : 264330532030
Option 3 ID : 264330532029
Option 4 ID : 264330532027
Status : Answered
Chosen Option : 1

Q.19 Select the word segment that substitutes (replaces) the bracketed word segment correctly and completes the sentence meaningfully. Select the option 'no correction required' if the sentence is correct as given.

He (returned back) Cambridge shortly before three o'clock.

- Ans**
- ☒ 1. showed
 - ☒ 2. No correction required
 - ☒ 3. appeared
 - ☒ 4. reached

Question Type : MCQ
 Question ID : 264330136591
 Option 1 ID : 264330535096
 Option 2 ID : 264330535098
 Option 3 ID : 264330535095
 Option 4 ID : 264330535097
 Status : Answered
 Chosen Option : 4

Q.20 Select the word from the options which is similar in meaning to the bracketed part given in the sentence below.

I suppose I was looking for (a work that would give me income) and that was going to be an adventure.

- Ans**
- ☒ 1. Activity
 - ☒ 2. Calling
 - ☒ 3. Pursuit
 - ☒ 4. Occupation

Question Type : MCQ
 Question ID : 264330136630
 Option 1 ID : 264330535243
 Option 2 ID : 264330535244
 Option 3 ID : 264330535246
 Option 4 ID : 264330535245
 Status : Answered
 Chosen Option : 4

Comprehension:

In the following passage some of the words have been deleted. Read the passage carefully and select the correct answer for the given blank out of the four alternatives.

Intriguingly, those who (1) _____ the psychobiotic diet reported they felt less stressed compared (2) _____ those who followed the control diet. There was also a direct correlation between how strictly (3) _____ followed the diet and their perceived stress levels, with those who (4) _____ more psychobiotic foods during the four-week period reporting the (5) _____ reduction in perceived stress levels.

SubQuestion No : 21

Q.21 Select the most appropriate option to fill in blank number 1.

- Ans
- ☒ 1. casted
 - ☒ 2. followed
 - ☒ 3. believed
 - ☒ 4. bellowed

Question Type : MCQ
Question ID : 264330135213
Option 1 ID : 264330529778
Option 2 ID : 264330529775
Option 3 ID : 264330529776
Option 4 ID : 264330529777
Status : Answered
Chosen Option : 2

Comprehension:

In the following passage some of the words have been deleted. Read the passage carefully and select the correct answer for the given blank out of the four alternatives.

Intriguingly, those who (1) _____ the psychobiotic diet reported they felt less stressed compared (2) _____ those who followed the control diet. There was also a direct correlation between how strictly (3) _____ followed the diet and their perceived stress levels, with those who (4) _____ more psychobiotic foods during the four-week period reporting the (5) _____ reduction in perceived stress levels.

SubQuestion No : 22

Q.22 Select the most appropriate option to fill in blank number 2.

- Ans
- ☒ 1. of
 - ☒ 2. with
 - ☒ 3. by
 - ☒ 4. on

Question Type : MCQ
Question ID : 264330135214
Option 1 ID : 264330529781
Option 2 ID : 264330529780
Option 3 ID : 264330529782
Option 4 ID : 264330529779
Status : Answered
Chosen Option : 2

Comprehension:

In the following passage some of the words have been deleted. Read the passage carefully and select the correct answer for the given blank out of the four alternatives.

Intriguingly, those who (1) _____ the psychobiotic diet reported they felt less stressed compared (2) _____ those who followed the control diet. There was also a direct correlation between how strictly (3) _____ followed the diet and their perceived stress levels, with those who (4) _____ more psychobiotic foods during the four-week period reporting the (5) _____ reduction in perceived stress levels.

SubQuestion No : 23

Q.23 Select the most appropriate option to fill in blank number 3.

- Ans
- ☒ 1. participants
 - ☐ 2. nomads
 - ☐ 3. animals
 - ☐ 4. spectators

Question Type : MCQ

Question ID : 264330135215

Option 1 ID : 264330529786

Option 2 ID : 264330529783

Option 3 ID : 264330529784

Option 4 ID : 264330529785

Status : Answered

Chosen Option : 1

Comprehension:

In the following passage some of the words have been deleted. Read the passage carefully and select the correct answer for the given blank out of the four alternatives.

Intriguingly, those who (1) _____ the psychobiotic diet reported they felt less stressed compared (2) _____ those who followed the control diet. There was also a direct correlation between how strictly (3) _____ followed the diet and their perceived stress levels, with those who (4) _____ more psychobiotic foods during the four-week period reporting the (5) _____ reduction in perceived stress levels.

SubQuestion No : 24

Q.24 Select the most appropriate option to fill in blank number 4.

- Ans
- ☐ 1. staked
 - ☒ 2. ate
 - ☐ 3. eroded
 - ☐ 4. raked

Question Type : MCQ

Question ID : 264330135216

Option 1 ID : 264330529789

Option 2 ID : 264330529790

Option 3 ID : 264330529787

Option 4 ID : 264330529788

Status : Answered

Chosen Option : 2

Comprehension:


In the following passage some of the words have been deleted. Read the passage carefully and select the correct answer for the given blank out of the four alternatives.


Intriguingly, those who (1) _____ the psychobiotic diet reported they felt less stressed compared (2) _____ those who followed the control diet. There was also a direct correlation between how strictly (3) _____ followed the diet and their perceived stress levels, with those who (4) _____ more psychobiotic foods during the four-week period reporting the (5) _____ reduction in perceived stress levels.


SubQuestion No : 25

Q.25 Select the most appropriate option to fill in blank number 5.

Ans  1. greatest

 2. greater

 3. greatly

 4. great

Question Type : MCQ

Question ID : 264330135217

Option 1 ID : 264330529793

Option 2 ID : 264330529792

Option 3 ID : 264330529794

Option 4 ID : 264330529791

Status : Answered

Chosen Option : 1

