

## Multi Tasking Non Technical Staff and Havaladar CBIC and CBN Examination 2022

Roll Number	
Candidate Name	
Venue Name	Eduhive Palestra
Exam Date	10/05/2023
Exam Time	12:00 PM - 2:00 PM
Subject	MTS Non Tech Havaladar CBIC and CBN Examination 2022

### Section : Numerical and Mathematical Ability

**Q.1** A defective dining set costing Rs. 10000 is being sold at 10% loss. If the price is further reduced successively by 5%, then the selling price is:

- Ans** ☒ 1. Rs. 8550  
☒ 2. Rs. 7850  
☒ 3. Rs. 9000  
☒ 4. Rs. 9150

Question Type : MCQ

Question ID : 264330138706

Option 1 ID : 264330543431

Option 2 ID : 264330543433

Option 3 ID : 264330543432

Option 4 ID : 264330543434

Status : Answered

Chosen Option : 1

**Q.2** The following tables show the product sold by a shopping app in 3 years. Find the average number of clothes sold by the app in all three years.

Products	2019	2020	2021
Cloth	824	476	500
Electronics	750	820	450
Makeup	600	810	510
Footwear	470	390	790

- Ans** ☒ 1. 450  
☒ 2. 740  
☒ 3. 530  
☒ 4. 600

Question Type : MCQ

Question ID : 264330135407

Option 1 ID : 264330530538

Option 2 ID : 264330530535

Option 3 ID : 264330530536

Option 4 ID : 264330530537

Status : Answered

Chosen Option : 4

# Test Prime

**ALL EXAMS,  
ONE SUBSCRIPTION**



**70,000+**  
Mock Tests



**Personalised  
Report Card**



**Unlimited  
Re-Attempt**



**600+**  
Exam Covered



**Previous Year  
Papers**



**500%  
Refund**



**ATTEMPT FREE MOCK NOW**

**Q.3** 9 boys and 12 men can complete a work in 24 days. Each boy takes thrice the time taken by a man to complete the work. In how many days will 15 men complete the same work?

- Ans**
- ☒ 1. 26 days
  - ☒ 2. 30 days
  - ☒ 3. 24 days
  - ☒ 4. 22 days

Question Type : **MCQ**

Question ID : **264330137646**

Option 1 ID : **264330539192**

Option 2 ID : **264330539194**

Option 3 ID : **264330539193**

Option 4 ID : **264330539191**

Status : **Answered**

Chosen Option : **3**

**Q.4** The marked price of an article is 150 percent of the cost price. If 30 percent discount is given, then what will be the profit percentage?

- Ans**
- ☒ 1. 3 percent
  - ☒ 2. 5 percent
  - ☒ 3. 6 percent
  - ☒ 4. 4 percent

Question Type : **MCQ**

Question ID : **264330137677**

Option 1 ID : **264330539318**

Option 2 ID : **264330539315**

Option 3 ID : **264330539317**

Option 4 ID : **264330539316**

Status : **Answered**

Chosen Option : **2**

**Q.5** If  $p : q = 4 : 7$  and  $q : r = 3 : 5$ , then what is the value of  $2p : 3q : 5r$ ?

- Ans**
- ☒ 1. 36 : 60 : 181
  - ☒ 2. 25 : 72 : 180
  - ☒ 3. 24 : 63 : 175
  - ☒ 4. 28 : 79 : 188

Question Type : **MCQ**

Question ID : **264330137673**

Option 1 ID : **264330539301**

Option 2 ID : **264330539302**

Option 3 ID : **264330539300**

Option 4 ID : **264330539299**

Status : **Answered**

Chosen Option : **3**

**Q.6** A jar contains a mixture of milk and water, having 50% water. A part of this mixture is replaced by another mixture having 29% water. The percentage of water in the jar after replacement is 36%. What fraction of the original mixture was replaced?

**Ans**

☒ 1.  $\frac{3}{2}$

☒ 2.  $\frac{4}{5}$

☒ 3.  $\frac{1}{3}$

☒ 4.  $\frac{2}{3}$

Question Type : **MCQ**

Question ID : **264330135090**

Option 1 ID : **264330529296**

Option 2 ID : **264330529298**

Option 3 ID : **264330529297**

Option 4 ID : **264330529295**

Status : **Answered**

Chosen Option : **4**

**Q.7** Find the value of  $(22)^2 - (14)^2 - 207$ :

**Ans**

☒ 1. 97

☒ 2. 99

☒ 3. 81

☒ 4. 77

Question Type : **MCQ**

Question ID : **264330135391**

Option 1 ID : **264330530474**

Option 2 ID : **264330530473**

Option 3 ID : **264330530472**

Option 4 ID : **264330530471**

Status : **Answered**

Chosen Option : **3**

**Q.8** Sides of a triangle are 20 cm, 48 cm and 52 cm. What is the area of the triangle?

**Ans**

☒ 1.  $320 \text{ cm}^2$

☒ 2.  $480 \text{ cm}^2$

☒ 3.  $560 \text{ cm}^2$

☒ 4.  $245 \text{ cm}^2$

Question Type : **MCQ**

Question ID : **264330137659**

Option 1 ID : **264330539246**

Option 2 ID : **264330539245**

Option 3 ID : **264330539244**

Option 4 ID : **264330539243**

Status : **Answered**

Chosen Option : **2**

**Q.9** Average of 4 numbers is 45. Average of first two numbers is thrice the average of other two numbers. What is the sum of first two numbers?

- Ans**
- ☒ 1. 122
  - ☒ 2. 105
  - ☒ 3. 125
  - ☒ 4. 135

Question Type : **MCQ**

Question ID : **264330137668**

Option 1 ID : **264330539281**

Option 2 ID : **264330539280**

Option 3 ID : **264330539279**

Option 4 ID : **264330539282**

Status : **Answered**

Chosen Option : **4**

**Q.10** A sum of money at simple interest amounts to Rs. 212 in 2 years and to Rs. 224 in 4 years. The sum is:

- Ans**
- ☒ 1. Rs. 400
  - ☒ 2. Rs. 200
  - ☒ 3. Rs. 100
  - ☒ 4. Rs. 500

Question Type : **MCQ**

Question ID : **264330133846**

Option 1 ID : **264330524407**

Option 2 ID : **264330524408**

Option 3 ID : **264330524409**

Option 4 ID : **264330524410**

Status : **Answered**

Chosen Option : **2**

**Q.11** What is that least perfect square which is exactly divisible by each of 14, 84 and 28?

- Ans**
- ☒ 1. 7056
  - ☒ 2. 3528
  - ☒ 3. 1764
  - ☒ 4. 441

Question Type : **MCQ**

Question ID : **264330137680**

Option 1 ID : **264330539328**

Option 2 ID : **264330539329**

Option 3 ID : **264330539330**

Option 4 ID : **264330539327**

Status : **Answered**

Chosen Option : **1**

**Q.12** Ramesh sells an article at a loss of 20 percent. If he buys it for 30 percent less price and sells it for Rs. 36 less price, then his profit will be 10 percent. What is the cost price of the article?

- Ans**
- ☒ 1. 1000
  - ☒ 2. 1200
  - ☒ 3. 900
  - ☒ 4. 1500

Question Type : **MCQ**  
 Question ID : **264330137672**  
 Option 1 ID : **264330539297**  
 Option 2 ID : **264330539296**  
 Option 3 ID : **264330539298**  
 Option 4 ID : **264330539295**  
 Status : **Answered**  
 Chosen Option : **2**

**Q.13** 12 workers can earn Rs. 2400 in 10 days. Find the earnings of 6 workers in 6 days.

- Ans**
- ☒ 1. Rs. 630
  - ☒ 2. Rs. 720
  - ☒ 3. Rs. 510
  - ☒ 4. Rs. 840

Question Type : **MCQ**  
 Question ID : **264330133769**  
 Option 1 ID : **264330524101**  
 Option 2 ID : **264330524100**  
 Option 3 ID : **264330524102**  
 Option 4 ID : **264330524099**  
 Status : **Answered**  
 Chosen Option : **2**

**Q.14** The difference between compound interest and simple interest on Rs. x at 25% per annum for 2 years is Rs. 325. Find the value of x.

- Ans**
- ☒ 1. Rs. 5200
  - ☒ 2. Rs. 4000
  - ☒ 3. Rs. 5300
  - ☒ 4. Rs. 2400

Question Type : **MCQ**  
 Question ID : **264330138381**  
 Option 1 ID : **264330542132**  
 Option 2 ID : **264330542134**  
 Option 3 ID : **264330542131**  
 Option 4 ID : **264330542133**  
 Status : **Answered**  
 Chosen Option : **1**

**Q.15** There are three cups of mixture of milk and water in ratio 4 : 5, 5 : 6, 9 : 7. 36 liters of first and 44 liters of second cup are taken. How much quantity from third cup is to be taken so that final mixture from the three cups will have milk and water in ratio 1 : 1?

- Ans**
- ☒ 1. 32 litres
  - ☒ 2. 64 litres
  - ☒ 3. 54 litres
  - ☒ 4. 60 litres

Question Type : **MCQ**

Question ID : **264330137674**

Option 1 ID : **264330539306**

Option 2 ID : **264330539304**

Option 3 ID : **264330539305**

Option 4 ID : **264330539303**

Status : **Answered**

Chosen Option : **2**

**Q.16** What is the value of  $\frac{56}{7} \times \left( \frac{24}{81} \times \frac{729}{72} \right) + \frac{42}{6}$ ?

- Ans**
- ☒ 1. 30
  - ☒ 2. 32
  - ☒ 3. 31
  - ☒ 4. 33

Question Type : **MCQ**

Question ID : **264330139072**

Option 1 ID : **264330544896**

Option 2 ID : **264330544898**

Option 3 ID : **264330544897**

Option 4 ID : **264330544895**

Status : **Answered**

Chosen Option : **3**

**Q.17** Find the area of the Kite whose diagonals are 22 cm and 6 cm.

- Ans**
- ☒ 1. 66 cm<sup>2</sup>
  - ☒ 2. 100 cm<sup>2</sup>
  - ☒ 3. 88 cm<sup>2</sup>
  - ☒ 4. 50 cm<sup>2</sup>

Question Type : **MCQ**

Question ID : **264330133774**

Option 1 ID : **264330524119**

Option 2 ID : **264330524121**

Option 3 ID : **264330524120**

Option 4 ID : **264330524122**

Status : **Answered**

Chosen Option : **1**

**Q.18** A 1000 metres long train is running at the speed of 72 km/hr. If it crosses a bridge in 85 seconds, then what is the length of the bridge?

- Ans**
- ☒ 1. 800 metres
  - ☒ 2. 700 metres
  - ☒ 3. 950 metres
  - ☒ 4. 750 metres

Question Type : MCQ

Question ID : 264330137667

Option 1 ID : 264330539276

Option 2 ID : 264330539275

Option 3 ID : 264330539278

Option 4 ID : 264330539277

Status : Answered

Chosen Option : 2

**Q.19** The average height of 40 sticks is 156 cm. Some sticks of average height 162 cm are taken out. If the new average height is 150 cm, then how many sticks are remaining?

- Ans**
- ☒ 1. 25
  - ☒ 2. 20
  - ☒ 3. 16
  - ☒ 4. 32

Question Type : MCQ

Question ID : 264330137878

Option 1 ID : 264330540119

Option 2 ID : 264330540120

Option 3 ID : 264330540122

Option 4 ID : 264330540121

Status : Answered

Chosen Option : 2

**Q.20** The pie chart given below shows the number of mobile phones sold by six companies in a year. The total mobile phones sold by six companies are 300. Number of mobile phones sold by a particular company is shown as a percentage of total number of mobile phones sold by all these six companies.



What is the average number of mobile phones sold by Q and S?

- Ans**
- ☒ 1. 45
  - ☒ 2. 60
  - ☒ 3. 75
  - ☒ 4. 80

Question Type : MCQ

Question ID : 264330137684

Option 1 ID : 264330539346

Option 2 ID : 264330539344

Option 3 ID : 264330539345

Option 4 ID : 264330539343

Status : Answered

Chosen Option : 2

## Section : Reasoning Ability and Problem Solving

**Q.1** Select the option that is related to the third word in the same way as the second word is related to the first word.  
Malaysia : Kuala Lumpur :: Bhutan : ?

- Ans**
- ☒ 1. Dhaka
  - ☒ 2. Islamabad
  - ☒ 3. Kathmandu
  - ☒ 4. Thimphu

Question Type : MCQ  
Question ID : 264330137583  
Option 1 ID : 264330538940  
Option 2 ID : 264330538939  
Option 3 ID : 264330538942  
Option 4 ID : 264330538941  
Status : Answered  
Chosen Option : 4

**Q.2** Two Statements are given followed by two conclusions numbered I and II. Assuming the statements to be true, even if they seem to be at variance with commonly known facts, decide which of the conclusions logically follow(s) from the statements.

Statements:  
All subjects are tough.  
No tough is easy.

Conclusions:  
I. Some subjects are easy.  
II. Some easy are tough.

- Ans**
- ☒ 1. Only conclusion I follows
  - ☒ 2. Neither conclusion I nor II follows
  - ☒ 3. Only conclusion II follows
  - ☒ 4. Both conclusions I and II follow

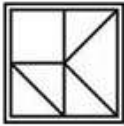
Question Type : MCQ  
Question ID : 264330137592  
Option 1 ID : 264330538975  
Option 2 ID : 264330538978  
Option 3 ID : 264330538976  
Option 4 ID : 264330538977  
Status : Answered  
Chosen Option : 2

Q.3 Select the option figure in which the given figure is embedded. (rotation is NOT allowed)



Ans

✗ 1.



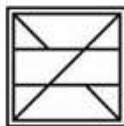
✗ 2.



✗ 3.



✓ 4.



Question Type : MCQ

Question ID : 264330135612

Option 1 ID : 264330531348

Option 2 ID : 264330531350

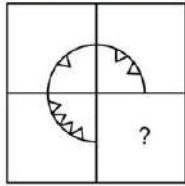
Option 3 ID : 264330531349

Option 4 ID : 264330531347

Status : Answered

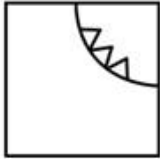
Chosen Option : 4

Q.4 Select the option figure that will replace the question mark (?) in the figure given below to complete the pattern.  
(rotation is not allowed)

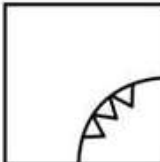


Ans

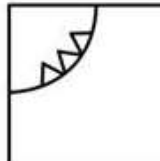
✗ 1.



✗ 2.



✓ 3.



✗ 4.



Question Type : MCQ

Question ID : 264330137602

Option 1 ID : 264330539015

Option 2 ID : 264330539017

Option 3 ID : 264330539018

Option 4 ID : 264330539016

Status : Answered

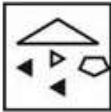
Chosen Option : 3

**Q.5** If a mirror is placed on the line AB, then out of the option figures which figure will be the right image of the question figure?



**Ans**

✗ 1.



✗ 2.



✗ 3.



✓ 4.



Question Type : **MCQ**

Question ID : **264330135613**

Option 1 ID : **264330531352**

Option 2 ID : **264330531353**

Option 3 ID : **264330531354**

Option 4 ID : **264330531351**

Status : **Answered**

Chosen Option : **4**

**Q.6** In a certain code language, 'RATIO' is written as 'TTARO'. How will 'UNTIL' be written in that language?

**Ans**

✗ 1. INTUL

✗ 2. ITLUN

✗ 3. ITUNL

✓ 4. ITNUL

Question Type : **MCQ**

Question ID : **264330137858**

Option 1 ID : **264330540039**

Option 2 ID : **264330540041**

Option 3 ID : **264330540042**

Option 4 ID : **264330540040**

Status : **Answered**

Chosen Option : **4**

Q.7 Which of the following numbers will replace the question mark (?) in the given series?

92, 99, 106, 113, 120, ?

- Ans
- ☒ 1. 117
  - ☒ 2. 127
  - ☒ 3. 213
  - ☒ 4. 217

Question Type : MCQ

Question ID : 264330137595

Option 1 ID : 264330538987

Option 2 ID : 264330538990

Option 3 ID : 264330538989

Option 4 ID : 264330538988

Status : Answered

Chosen Option : 2

Q.8 Which two numbers should be interchanged to make the given equation correct?

$11 \times 2 + 15 \div 13 - 3 = 14$

- Ans
- ☒ 1. 14 and 15
  - ☒ 2. 3 and 2
  - ☒ 3. 13 and 3
  - ☒ 4. 11 and 15

Question Type : MCQ

Question ID : 264330137598

Option 1 ID : 264330539002

Option 2 ID : 264330539001

Option 3 ID : 264330538999

Option 4 ID : 264330539000

Status : Answered

Chosen Option : 3

Q.9 Seven people A, B, C, D, E, F, and G are comparing their heights. No two people are of the same height. F is taller than A, who is taller than D and C. Only two people are shorter than E but neither of them is C. D is not the shortest person. G is shorter than just one person, F. Who is the shortest person?

- Ans
- ☒ 1. E
  - ☒ 2. A
  - ☒ 3. B
  - ☒ 4. C

Question Type : MCQ

Question ID : 264330137591

Option 1 ID : 264330538971

Option 2 ID : 264330538974

Option 3 ID : 264330538973

Option 4 ID : 264330538972

Status : Answered

Chosen Option : 3

**Q.10** Select the option that is related to the third word in the same way as the second word is related to the first word.

Judge : Court :: Gambler : ?

- Ans**
- ✓ 1. Casino
  - ✗ 2. Hangar
  - ✗ 3. Sea
  - ✗ 4. Station

Question Type : **MCQ**

Question ID : **264330134977**

Option 1 ID : **264330528845**

Option 2 ID : **264330528843**

Option 3 ID : **264330528846**

Option 4 ID : **264330528844**

Status : **Answered**

Chosen Option : **1**

**Q.11** Select the option that is related to the third letter in the same way as the second letter is related to the first letter.

A : Z :: I : ?

- Ans**
- ✗ 1. V
  - ✗ 2. S
  - ✓ 3. R
  - ✗ 4. T

Question Type : **MCQ**

Question ID : **264330137584**

Option 1 ID : **264330538946**

Option 2 ID : **264330538943**

Option 3 ID : **264330538944**

Option 4 ID : **264330538945**

Status : **Answered**

Chosen Option : **3**

**Q.12** In the following question, select the missing number of the given series.

1, 22, 43, 64, 85, ?

- Ans**
- ✗ 1. 114
  - ✗ 2. 110
  - ✗ 3. 108
  - ✓ 4. 106

Question Type : **MCQ**

Question ID : **264330138489**

Option 1 ID : **264330542566**

Option 2 ID : **264330542565**

Option 3 ID : **264330542564**

Option 4 ID : **264330542563**

Status : **Answered**

Chosen Option : **4**

**Q.13** Q, R, and S are sitting in a straight line facing south. U, W, and X are sitting in a parallel line facing north. Q is sitting to the immediate left of S and opposite to W. R who is opposite to U, is to the immediate right of S. Who sits to the immediate right of U?

- Ans**
- ☒ 1. Q
  - ☒ 2. W
  - ☒ 3. S
  - ☒ 4. X

Question Type : **MCQ**  
 Question ID : **264330137589**  
 Option 1 ID : **264330538964**  
 Option 2 ID : **264330538966**  
 Option 3 ID : **264330538963**  
 Option 4 ID : **264330538965**  
 Status : **Answered**  
 Chosen Option : **4**

**Q.14** In a certain code language, 'IMAGE' is written as 'RN1TV'. How will 'KNIFE' be written in that language?

- Ans**
- ☒ 1. PIMVU
  - ☒ 2. P9MUV
  - ☒ 3. PM9UV
  - ☒ 4. PM9VU

Question Type : **MCQ**  
 Question ID : **264330134981**  
 Option 1 ID : **264330528860**  
 Option 2 ID : **264330528861**  
 Option 3 ID : **264330528859**  
 Option 4 ID : **264330528862**  
 Status : **Answered**  
 Chosen Option : **3**

**Q.15** In a certain code language, 'EMPIRE' is written as '5P16L18H'. How will 'EXPAND' be written in that language?

- Ans**
- ☒ 1. 5A61D14G
  - ☒ 2. 5A16D18G
  - ☒ 3. 5A16D14G
  - ☒ 4. 5G16D14G

Question Type : **MCQ**  
 Question ID : **264330134983**  
 Option 1 ID : **264330528867**  
 Option 2 ID : **264330528868**  
 Option 3 ID : **264330528869**  
 Option 4 ID : **264330528870**  
 Status : **Answered**  
 Chosen Option : **3**

**Q.16** A, B, C, D, and E are sitting in a straight line facing north. C is exactly in between B and D. E is to the immediate left of B. D is not sitting at the end of the bench. Who is sitting to the immediate right of D?

- Ans**
- ☒ 1. C
  - ☒ 2. E
  - ☒ 3. A
  - ☒ 4. B

Question Type : **MCQ**  
 Question ID : **264330137590**  
 Option 1 ID : **264330538969**  
 Option 2 ID : **264330538970**  
 Option 3 ID : **264330538967**  
 Option 4 ID : **264330538968**  
 Status : **Answered**  
 Chosen Option : **3**

**Q.17** Three statements are given followed by two conclusions numbered I and II. Assuming the statements to be true, even if they seem to be at variance with commonly known facts, decide which of the conclusions logically follow(s) from the statements.

Statements:

- Some towns are cities.
- Some cities are villages.
- All villages are states.

Conclusions:

- I. Some towns are not villages.
- II. Some states are cities.

- Ans**
- ☒ 1. Only conclusion II follows
  - ☒ 2. Only conclusion I follows
  - ☒ 3. Both conclusions I and II follow
  - ☒ 4. Neither conclusion I nor II follows

Question Type : **MCQ**  
 Question ID : **264330137593**  
 Option 1 ID : **264330538980**  
 Option 2 ID : **264330538979**  
 Option 3 ID : **264330538981**  
 Option 4 ID : **264330538982**  
 Status : **Answered**  
 Chosen Option : **1**

**Q.18** Which two numbers should be interchanged to make the given equation correct?

$$9 + 30 \times 15 - 18 \div 6 = 274$$

- Ans**
- ☒ 1. 18 and 9
  - ☒ 2. 30 and 18
  - ☒ 3. 15 and 18
  - ☒ 4. 9 and 30

Question Type : **MCQ**  
 Question ID : **264330133577**  
 Option 1 ID : **264330523334**  
 Option 2 ID : **264330523333**  
 Option 3 ID : **264330523332**  
 Option 4 ID : **264330523331**  
 Status : **Answered**  
 Chosen Option : **2**

Q.19 Which of the following letter will replace the question mark (?) in the given series?

L, K, I, F, B, W, ?

- Ans
- ☒ 1. U
  - ☒ 2. Q
  - ☒ 3. R
  - ☒ 4. M

Question Type : MCQ

Question ID : 264330137581

Option 1 ID : 264330538934

Option 2 ID : 264330538933

Option 3 ID : 264330538932

Option 4 ID : 264330538931

Status : Answered

Chosen Option : 2

Q.20 Study the given pattern carefully and select the number that can replace the question mark (?) in it.

First row- 25, 40, 10

Second row- 55, 70, 40

Third row- 33, 48, ?

- Ans
- ☒ 1. 19
  - ☒ 2. 15
  - ☒ 3. 18
  - ☒ 4. 17

Question Type : MCQ

Question ID : 264330137597

Option 1 ID : 264330538998

Option 2 ID : 264330538996

Option 3 ID : 264330538997

Option 4 ID : 264330538995

Status : Answered

Chosen Option : 3

#### Section : General Awareness

Q.1 Srimanta Sankardev is generally acknowledged with pioneering new musical, dramatic, and linguistic forms. He is associated with which of the following dance forms?

- Ans
- ☒ 1. Manipuri
  - ☒ 2. Kathakali
  - ☒ 3. Odissi
  - ☒ 4. Sattriya

Question Type : MCQ

Question ID : 264330137988

Option 1 ID : 264330540559

Option 2 ID : 264330540561

Option 3 ID : 264330540560

Option 4 ID : 264330540562

Status : Answered

Chosen Option : 4

Q.2 Which of the following singer is the recipient of the Dadasaheb Phalke Award?

- Ans
- ☒ 1. Sonu Nigam
  - ☒ 2. Asha Bhosle
  - ☒ 3. Neha Kakkar
  - ☒ 4. Arijit Singh

Question Type : MCQ  
 Question ID : 264330137779  
 Option 1 ID : 264330539726  
 Option 2 ID : 264330539724  
 Option 3 ID : 264330539725  
 Option 4 ID : 264330539723  
 Status : Answered  
 Chosen Option : 2

Q.3 According to the Union Home Ministry, the census 2021 (which got postponed due to COVID 19) was supposed to collect data for \_\_\_\_\_ for the first time.

- Ans
- ☒ 1. Schedule Tribes
  - ☒ 2. Schedule Castes
  - ☒ 3. Economically weaker sections
  - ☒ 4. Other Backward Castes

Question Type : MCQ  
 Question ID : 264330134042  
 Option 1 ID : 264330525194  
 Option 2 ID : 264330525193  
 Option 3 ID : 264330525191  
 Option 4 ID : 264330525192  
 Status : Answered  
 Chosen Option : 3

Q.4 The total number of Ministers, including the Prime Minister, in the Council of Ministers shall not exceed \_\_\_\_\_ percent of the total number of members of the House of the People.

- Ans
- ☒ 1. fifteen
  - ☒ 2. twelve
  - ☒ 3. twenty
  - ☒ 4. ten

Question Type : MCQ  
 Question ID : 264330137782  
 Option 1 ID : 264330539736  
 Option 2 ID : 264330539738  
 Option 3 ID : 264330539735  
 Option 4 ID : 264330539737  
 Status : Answered  
 Chosen Option : 1

Q.5 “Brahmadeya” a type of land during Chola Period was the \_\_\_\_\_.

- Ans
- ✓ 1. land gifted to Brahmins
  - ✗ 2. land of non - Brahmana peasant proprietors
  - ✗ 3. land gifted to temples
  - ✗ 4. land of royal person

Question Type : MCQ

Question ID : 264330138268

Option 1 ID : 264330541682

Option 2 ID : 264330541679

Option 3 ID : 264330541680

Option 4 ID : 264330541681

Status : Answered

Chosen Option : 1

Q.6 Which of the following structure is associated with Buddhism?

- Ans
- ✗ 1. Pallava
  - ✗ 2. Mandapa
  - ✗ 3. Shikhara
  - ✓ 4. Stupa

Question Type : MCQ

Question ID : 264330134035

Option 1 ID : 264330525166

Option 2 ID : 264330525163

Option 3 ID : 264330525164

Option 4 ID : 264330525165

Status : Answered

Chosen Option : 4

Q.7 Which of the famous personalities belonged to the extremist phase of modern history?

- Ans
- ✗ 1. P.M. Mehta
  - ✗ 2. A.O. Hume
  - ✗ 3. Gopal Krishna Gokhale
  - ✓ 4. Bal Gangadhar Tilak

Question Type : MCQ

Question ID : 264330134046

Option 1 ID : 264330525209

Option 2 ID : 264330525208

Option 3 ID : 264330525207

Option 4 ID : 264330525210

Status : Answered

Chosen Option : 4

Q.8 Santhal community is an ethnic group of \_\_\_\_\_ India.

- Ans ☒ 1. eastern  
☐ 2. northern  
☐ 3. southern  
☐ 4. western

Question Type : MCQ

Question ID : 264330135472

Option 1 ID : 264330530795

Option 2 ID : 264330530797

Option 3 ID : 264330530798

Option 4 ID : 264330530796

Status : Answered

Chosen Option : 1

Q.9 Chapchar kut festival, is a famous festival of \_\_\_\_\_ state of India.

- Ans ☐ 1. Tamil Nadu  
☒ 2. Mizoram  
☐ 3. Punjab  
☐ 4. Uttar Pradesh

Question Type : MCQ

Question ID : 264330135462

Option 1 ID : 264330530757

Option 2 ID : 264330530755

Option 3 ID : 264330530756

Option 4 ID : 264330530758

Status : Answered

Chosen Option : 2

Q.10 Neeraj Chopra, Clinched the historic gold at Tokyo Olympics 2020 with a throw of \_\_\_\_\_.

- Ans ☐ 1. 86.58 m  
☒ 2. 87.58 m  
☐ 3. 85.58 m  
☐ 4. 88.58 m

Question Type : MCQ

Question ID : 264330138250

Option 1 ID : 264330541608

Option 2 ID : 264330541609

Option 3 ID : 264330541607

Option 4 ID : 264330541610

Status : Answered

Chosen Option : 4

Q.11 Which articles of the Indian constitution address fundamental rights?

- Ans ☒ 1. Article 12 to 35  
☒ 2. Article 5 to 35  
☒ 3. Article 12 to 40  
☒ 4. Article 5 to 11

Question Type : MCQ  
 Question ID : 264330137781  
 Option 1 ID : 264330539734  
 Option 2 ID : 264330539732  
 Option 3 ID : 264330539733  
 Option 4 ID : 264330539731  
 Status : Answered  
 Chosen Option : 1

Q.12 The SI unit of power of lens is \_\_\_\_\_.

- Ans ☒ 1. candela  
☒ 2. mole  
☒ 3. watt  
☒ 4. dioptre

Question Type : MCQ  
 Question ID : 264330138262  
 Option 1 ID : 264330541656  
 Option 2 ID : 264330541657  
 Option 3 ID : 264330541655  
 Option 4 ID : 264330541658  
 Status : Answered  
 Chosen Option : 4

Q.13 Shifting Agriculture is also known as Jhum in \_\_\_\_\_.

- Ans ☒ 1. Maharashtra  
☒ 2. Assam  
☒ 3. Rajasthan  
☒ 4. Karnataka

Question Type : MCQ  
 Question ID : 264330137978  
 Option 1 ID : 264330540522  
 Option 2 ID : 264330540521  
 Option 3 ID : 264330540519  
 Option 4 ID : 264330540520  
 Status : Answered  
 Chosen Option : 2

Q.14 Who among the following freedom fighters was one of the founders of the Fergusson College in Pune in 1885?

- Ans
- ☒ 1. Subhash Chandra Bose
  - ☒ 2. Bal Gangadhar Tilak
  - ☒ 3. Sardar Vallabh Bhai Patel
  - ☒ 4. Lala Lajpat Rai

Question Type : MCQ

Question ID : 264330135475

Option 1 ID : 264330530807

Option 2 ID : 264330530809

Option 3 ID : 264330530808

Option 4 ID : 264330530810

Status : Answered

Chosen Option : 2

Q.15 In which sport did Mirabai Chanu win India's first Gold Medal at the Commonwealth Games 2022?

- Ans
- ☒ 1. Boxing
  - ☒ 2. Archery
  - ☒ 3. Weightlifting
  - ☒ 4. Shooting

Question Type : MCQ

Question ID : 264330137783

Option 1 ID : 264330539740

Option 2 ID : 264330539739

Option 3 ID : 264330539742

Option 4 ID : 264330539741

Status : Answered

Chosen Option : 3

Q.16 The government launched the Stand-Up India scheme to promote entrepreneurship among \_\_\_\_\_.

- Ans
- ☒ 1. Disabled Individuals
  - ☒ 2. Transgender community
  - ☒ 3. Elderly Individuals
  - ☒ 4. Women and SC/ST communities

Question Type : MCQ

Question ID : 264330137761

Option 1 ID : 264330539652

Option 2 ID : 264330539654

Option 3 ID : 264330539651

Option 4 ID : 264330539653

Status : Answered

Chosen Option : 2

**Q.17** The National Anti-Doping Bill was passed in the Lok Sabha on July 27, 2022. Which of the following organisation manage and administer doping control programs in India?

- Ans**
- ✓ 1. National Anti-Doping Agency (NADA)
  - ✗ 2. National Adverse Doping Agency (NADA)
  - ✗ 3. National Dope Testing Laboratory (NDTL)
  - ✗ 4. National Doping Control Agency (NDCA)

Question Type : **MCQ**  
 Question ID : **264330134032**  
 Option 1 ID : **264330525151**  
 Option 2 ID : **264330525154**  
 Option 3 ID : **264330525152**  
 Option 4 ID : **264330525153**  
 Status : **Answered**  
 Chosen Option : **4**

**Q.18** The head office of National Bank for Agricultural and Rural Development is located in \_\_\_\_\_.

- Ans**
- ✗ 1. Pune
  - ✓ 2. Mumbai
  - ✗ 3. Chennai
  - ✗ 4. Kolkata

Question Type : **MCQ**  
 Question ID : **264330137993**  
 Option 1 ID : **264330540580**  
 Option 2 ID : **264330540581**  
 Option 3 ID : **264330540582**  
 Option 4 ID : **264330540579**  
 Status : **Not Answered**  
 Chosen Option : **--**

**Q.19** What is added to toothpaste to reduce tooth decay?

- Ans**
- ✗ 1. Iron
  - ✗ 2. Cobalt
  - ✓ 3. Fluoride
  - ✗ 4. Molybdenum

Question Type : **MCQ**  
 Question ID : **264330137767**  
 Option 1 ID : **264330539677**  
 Option 2 ID : **264330539678**  
 Option 3 ID : **264330539675**  
 Option 4 ID : **264330539676**  
 Status : **Answered**  
 Chosen Option : **3**

Q.20 "The Inheritance of Loss" is written by which of the following authors?

- Ans
- ☐ 1. Jhumpa Lahiri
  - ☐ 2. Amitav Ghosh
  - ☒ 3. Kiran Desai
  - ☐ 4. Anita Desai

Question Type : MCQ

Question ID : 264330137986

Option 1 ID : 264330540551

Option 2 ID : 264330540554

Option 3 ID : 264330540552

Option 4 ID : 264330540553

Status : Answered

Chosen Option : 1

Q.21 In which of the following regions days and nights are almost equal in length throughout the year?

- Ans
- ☐ 1. Tundra region
  - ☒ 2. Equatorial region
  - ☐ 3. Desert region
  - ☐ 4. Mountain forest region

Question Type : MCQ

Question ID : 264330138261

Option 1 ID : 264330541651

Option 2 ID : 264330541652

Option 3 ID : 264330541653

Option 4 ID : 264330541654

Status : Answered

Chosen Option : 2

Q.22 Kathakali is a classical dance of which state?

- Ans
- ☐ 1. Andhra Pradesh
  - ☐ 2. Tamil Nadu
  - ☐ 3. Karnataka
  - ☒ 4. Kerala

Question Type : MCQ

Question ID : 264330137763

Option 1 ID : 264330539662

Option 2 ID : 264330539661

Option 3 ID : 264330539659

Option 4 ID : 264330539660

Status : Answered

Chosen Option : 4

Q.23 Which of the following statement is 'NOT' correct about "Manures"?

- Ans
- ☒ 1. They can be prepared in the fields
  - ☒ 2. They do not provide humus to soil
  - ☒ 3. They are relatively less rich in plant nutrients
  - ☒ 4. They are natural substance

Question Type : MCQ  
Question ID : 264330138260  
Option 1 ID : 264330541649  
Option 2 ID : 264330541648  
Option 3 ID : 264330541650  
Option 4 ID : 264330541647  
Status : Answered  
Chosen Option : 2

Q.24 In migration the factors which cause people to leave their place of residence or origin are called \_\_\_\_\_.

- Ans
- ☒ 1. Pull factors
  - ☒ 2. Regular factors
  - ☒ 3. Push factors
  - ☒ 4. Irregular factors

Question Type : MCQ  
Question ID : 264330138315  
Option 1 ID : 264330541867  
Option 2 ID : 264330541870  
Option 3 ID : 264330541868  
Option 4 ID : 264330541869  
Status : Answered  
Chosen Option : 3

Q.25 Which place in the world receives the highest rainfall?

- Ans
- ☒ 1. Agartala
  - ☒ 2. Guwahati
  - ☒ 3. Itanagar
  - ☒ 4. Mawsynram

Question Type : MCQ  
Question ID : 264330137771  
Option 1 ID : 264330539693  
Option 2 ID : 264330539691  
Option 3 ID : 264330539694  
Option 4 ID : 264330539692  
Status : Answered  
Chosen Option : 4

Q.1 Choose the word that means the same as the given word.

Backfire

- Ans
- ☒ 1. Florid
  - ☒ 2. Collapse
  - ☒ 3. Flood
  - ☒ 4. Flourish

Question Type : MCQ  
 Question ID : 264330135273  
 Option 1 ID : 264330530007  
 Option 2 ID : 264330530010  
 Option 3 ID : 264330530008  
 Option 4 ID : 264330530009  
 Status : Answered  
 Chosen Option : 2

Q.2 Choose the sentence with no spelling error.

- Ans
- ☒ 1. We need to give priority to customer satisfaction.
  - ☒ 2. We need to give priority to customar satisfaction.
  - ☒ 3. We need to give priorrity to customer satisfaction.
  - ☒ 4. We need to give priority to customer satisfraction.

Question Type : MCQ  
 Question ID : 264330135227  
 Option 1 ID : 264330529833  
 Option 2 ID : 264330529832  
 Option 3 ID : 264330529834  
 Option 4 ID : 264330529831  
 Status : Answered  
 Chosen Option : 1

Q.3 Identify the segment that contains a grammatical error. If there is no error, select 'No error'.

He behaves so aggressive in his new/ home that he is rehoused with an old/ couple who could give him everything he lacks.

- Ans
- ☒ 1. couple who could give him everything he lacks.
  - ☒ 2. home that he is rehoused with an old
  - ☒ 3. No error
  - ☒ 4. He behaves so aggressive in his new

Question Type : MCQ  
 Question ID : 264330136665  
 Option 1 ID : 264330535381  
 Option 2 ID : 264330535380  
 Option 3 ID : 264330535382  
 Option 4 ID : 264330535379  
 Status : Answered  
 Chosen Option : 4

**Q.4** Select the most appropriate option to substitute the bracketed segment in the given sentence. If there is no need to substitute it, select 'no substitution required'.

Jane was asked by her (aunt, "Where were you least night?")

- Ans**
- ☒ 1. No substitution required
  - ☒ 2. aunt that, "Where were you last night?"
  - ☒ 3. aunt, "Where were you last night?"
  - ☒ 4. aunt, "Where last night you was?"

Question Type : **MCQ**

Question ID : **264330136668**

Option 1 ID : **264330535394**

Option 2 ID : **264330535391**

Option 3 ID : **264330535393**

Option 4 ID : **264330535392**

Status : **Answered**

Chosen Option : **3**

**Q.5** Select the most appropriate word for the given group of words.

Scientific tests or techniques used in connection with the detection of crime

- Ans**
- ☒ 1. Post-mortem
  - ☒ 2. Autopsy
  - ☒ 3. Forensics
  - ☒ 4. Etymology

Question Type : **MCQ**

Question ID : **264330136627**

Option 1 ID : **264330535232**

Option 2 ID : **264330535233**

Option 3 ID : **264330535234**

Option 4 ID : **264330535231**

Status : **Answered**

Chosen Option : **3**

**Q.6** Identify the segment that contains a grammatical error. If there is no error, select 'No error'

In doing so, he have acquainted/ himself with the geological features/ and colours of the stone of the site.

- Ans**
- ☒ 1. No error
  - ☒ 2. and colours of the stone of the site.
  - ☒ 3. himself with the geological features
  - ☒ 4. In doing so, he have acquainted

Question Type : **MCQ**

Question ID : **264330136215**

Option 1 ID : **264330533654**

Option 2 ID : **264330533653**

Option 3 ID : **264330533652**

Option 4 ID : **264330533651**

Status : **Answered**

Chosen Option : **4**

**Q.7** Improve the underlined part of the sentence. Choose 'No improvement' as an answer if the sentence is grammatically correct.

The film's director decide to reshoot the scene.

- Ans**
- ☒ 1. deciding to reshoot
  - ☒ 2. decide to reshot
  - ☒ 3. decided to reshoot
  - ☒ 4. No improvement

Question Type : **MCQ**  
 Question ID : **264330134775**  
 Option 1 ID : **264330528049**  
 Option 2 ID : **264330528048**  
 Option 3 ID : **264330528047**  
 Option 4 ID : **264330528050**  
 Status : **Answered**  
 Chosen Option : **3**

**Q.8** Select the most appropriate meaning of the given idiom.

High horse

- Ans**
- ☒ 1. To be very lucky
  - ☒ 2. To have a low self-esteem
  - ☒ 3. An attitude of moral superiority
  - ☒ 4. To be the person in charge

Question Type : **MCQ**  
 Question ID : **264330136633**  
 Option 1 ID : **264330535257**  
 Option 2 ID : **264330535256**  
 Option 3 ID : **264330535255**  
 Option 4 ID : **264330535258**  
 Status : **Answered**  
 Chosen Option : **1**

**Q.9** Select the most appropriate option to fill in the blank.

As a preliminary to negotiation, the government was required to \_\_\_\_\_ all the obnoxious measures.

- Ans**
- ☒ 1. rescind
  - ☒ 2. requisite
  - ☒ 3. quaint
  - ☒ 4. repeat

Question Type : **MCQ**  
 Question ID : **264330136219**  
 Option 1 ID : **264330533670**  
 Option 2 ID : **264330533669**  
 Option 3 ID : **264330533667**  
 Option 4 ID : **264330533668**  
 Status : **Answered**  
 Chosen Option : **1**

Q.10 Choose the word that is opposite in meaning to the given word.  
Apprentice

- Ans ☒ 1. Crude  
☒ 2. Neophyte  
☒ 3. Veteran  
☒ 4. Essential

Question Type : MCQ  
Question ID : 264330134520  
Option 1 ID : 264330527042  
Option 2 ID : 264330527039  
Option 3 ID : 264330527040  
Option 4 ID : 264330527041  
Status : Answered  
Chosen Option : 3

Q.11 Select the most appropriate synonym of the given word.

Unfamiliar

- Ans ☒ 1. Unsparing  
☒ 2. Prodigious  
☒ 3. Strange  
☒ 4. Parallel

Question Type : MCQ  
Question ID : 264330136229  
Option 1 ID : 264330533706  
Option 2 ID : 264330533705  
Option 3 ID : 264330533703  
Option 4 ID : 264330533704  
Status : Answered  
Chosen Option : 3

Q.12 Select the most appropriate antonym to substitute the bracketed word in the given sentence.

The lens in this collection is focused very carefully upon the (quotidian), with all of its utterly familiar vexations.

- Ans ☒ 1. Mandatory  
☒ 2. Normal  
☒ 3. Sporadic  
☒ 4. Obligatory

Question Type : MCQ  
Question ID : 264330136232  
Option 1 ID : 264330533715  
Option 2 ID : 264330533716  
Option 3 ID : 264330533717  
Option 4 ID : 264330533718  
Status : Answered  
Chosen Option : 2

Q.13 Select the most appropriate word for the given group of words.

Impossible to deny or disapprove

- Ans ☒ 1. Incontrovertible  
☒ 2. Dubitable  
☒ 3. Frangible  
☒ 4. Assailable

Question Type : MCQ  
 Question ID : 264330136228  
 Option 1 ID : 264330533700  
 Option 2 ID : 264330533701  
 Option 3 ID : 264330533702  
 Option 4 ID : 264330533699  
 Status : Answered  
 Chosen Option : 2

Q.14 Select the most appropriate option to fill in the blank.

If the anesthesia is not \_\_\_\_\_ properly, he might wake up in the \_\_\_\_\_ of the surgery.

- Ans ☒ 1. perpetuated/ start  
☒ 2. administer/during  
☒ 3. perpetuated/ middle  
☒ 4. administered/ middle

Question Type : MCQ  
 Question ID : 264330136238  
 Option 1 ID : 264330533741  
 Option 2 ID : 264330533739  
 Option 3 ID : 264330533742  
 Option 4 ID : 264330533740  
 Status : Answered  
 Chosen Option : 4

Q.15 A sentence has been given with a blank to be filled with an appropriate option. Choose the correct alternative.

The need to take theatre online \_\_\_\_\_ in global collaborations.

- Ans ☒ 1. has resulted  
☒ 2. result  
☒ 3. have resulted  
☒ 4. resulting

Question Type : MCQ  
 Question ID : 264330135263  
 Option 1 ID : 264330529973  
 Option 2 ID : 264330529974  
 Option 3 ID : 264330529972  
 Option 4 ID : 264330529971  
 Status : Answered  
 Chosen Option : 1

**Q.16** Select the most appropriate meaning of the bracketed idiom in the given sentence.

After repeated failures and disappointments he was tempted (to throw up the sponge), but continued perseverance finally brought success.

- Ans**
- ☒ 1. To catch somebody of guard
  - ☒ 2. To surrender or give up the contest
  - ☒ 3. To reveal secret information
  - ☒ 4. To be afraid

Question Type : **MCQ**  
 Question ID : **264330136234**  
 Option 1 ID : **264330533726**  
 Option 2 ID : **264330533724**  
 Option 3 ID : **264330533725**  
 Option 4 ID : **264330533723**  
 Status : **Answered**  
 Chosen Option : **2**

**Q.17** Find the part of the given sentence that has an error in it. If there is no error, choose 'No error'.

He didn't went to the school as he was down with fever.

- Ans**
- ☒ 1. No error
  - ☒ 2. He didn't went
  - ☒ 3. was down with fever.
  - ☒ 4. to the school as he

Question Type : **MCQ**  
 Question ID : **264330134398**  
 Option 1 ID : **264330526574**  
 Option 2 ID : **264330526571**  
 Option 3 ID : **264330526573**  
 Option 4 ID : **264330526572**  
 Status : **Answered**  
 Chosen Option : **2**

**Q.18** Select the word segment that substitutes (replaces) the bracketed word segment correctly and completes the sentence meaningfully. Select the option 'no correction required' if the sentence is correct as given.

(Much times), I have felt that conversations like these must take place in person.

- Ans**
- ☒ 1. Many a times
  - ☒ 2. Many time
  - ☒ 3. No correction required
  - ☒ 4. Many a time

Question Type : **MCQ**  
 Question ID : **264330136244**  
 Option 1 ID : **264330533763**  
 Option 2 ID : **264330533765**  
 Option 3 ID : **264330533766**  
 Option 4 ID : **264330533764**  
 Status : **Answered**  
 Chosen Option : **1**

Q.19 Select the correctly spelt word.

- Ans
- ☒ 1. Dominering
  - ☒ 2. Domoneering
  - ☒ 3. Dominiering
  - ☒ 4. Domineering

Question Type : MCQ

Question ID : 264330136235

Option 1 ID : 264330533729

Option 2 ID : 264330533728

Option 3 ID : 264330533730

Option 4 ID : 264330533727

Status : Answered

Chosen Option : 4

Q.20 Select the most appropriate option to fill in the blank.

He wanted me to \_\_\_\_\_ your necklace.

- Ans
- ☒ 1. stern
  - ☒ 2. steal
  - ☒ 3. steel
  - ☒ 4. steam

Question Type : MCQ

Question ID : 264330135228

Option 1 ID : 264330529835

Option 2 ID : 264330529837

Option 3 ID : 264330529838

Option 4 ID : 264330529836

Status : Answered

Chosen Option : 2

#### Comprehension:

In the following passage some of the words have been deleted. Read the passage carefully and select the correct answer for the given blank out of the four alternatives.

Gaming in the banking sector seems virtually (1) \_\_\_\_\_ to eliminate. The only effective measure to end it would be to (2) \_\_\_\_\_ bankers personally liable for losses, to remove the sense that their actions – their games – have (3) \_\_\_\_\_ personal financial or legal consequences.

It is this, rather (4) \_\_\_\_\_ removing the cap on bankers' bonuses, that has the best chance of preventing the financial system blowing (5) \_\_\_\_\_ again.

#### SubQuestion No : 21

Q.21 Select the most appropriate option to fill in blank number 1.

- Ans
- ☒ 1. feasible
  - ☒ 2. impossible
  - ☒ 3. penetrable
  - ☒ 4. liable

Question Type : MCQ

Question ID : 264330134511

Option 1 ID : 264330527006

Option 2 ID : 264330527003

Option 3 ID : 264330527005

Option 4 ID : 264330527004

Status : Answered

Chosen Option : 2

### Comprehension:

In the following passage some of the words have been deleted. Read the passage carefully and select the correct answer for the given blank out of the four alternatives.

Gaming in the banking sector seems virtually (1) \_\_\_\_\_ to eliminate. The only effective measure to end it would be to (2) \_\_\_\_\_ bankers personally liable for losses, to remove the sense that their actions – their games – have (3) \_\_\_\_\_ personal financial or legal consequences.

It is this, rather (4) \_\_\_\_\_ removing the cap on bankers' bonuses, that has the best chance of preventing the financial system blowing (5) \_\_\_\_\_ again.

### SubQuestion No : 22

Q.22 Select the most appropriate option to fill in blank number 2.

- Ans
- ☒ 1. gave
  - ☒ 2. bake
  - ☒ 3. take
  - ☒ 4. make

Question Type : MCQ

Question ID : 264330134512

Option 1 ID : 264330527007

Option 2 ID : 264330527009

Option 3 ID : 264330527010

Option 4 ID : 264330527008

Status : Answered

Chosen Option : 4

### Comprehension:

In the following passage some of the words have been deleted. Read the passage carefully and select the correct answer for the given blank out of the four alternatives.

Gaming in the banking sector seems virtually (1) \_\_\_\_\_ to eliminate. The only effective measure to end it would be to (2) \_\_\_\_\_ bankers personally liable for losses, to remove the sense that their actions – their games – have (3) \_\_\_\_\_ personal financial or legal consequences.

It is this, rather (4) \_\_\_\_\_ removing the cap on bankers' bonuses, that has the best chance of preventing the financial system blowing (5) \_\_\_\_\_ again.

### SubQuestion No : 23

Q.23 Select the most appropriate option to fill in blank number 3.

- Ans
- ☒ 1. never
  - ☒ 2. none
  - ☒ 3. not
  - ☒ 4. no

Question Type : MCQ

Question ID : 264330134513

Option 1 ID : 264330527011

Option 2 ID : 264330527014

Option 3 ID : 264330527012

Option 4 ID : 264330527013

Status : Answered

Chosen Option : 4

### Comprehension:

In the following passage some of the words have been deleted. Read the passage carefully and select the correct answer for the given blank out of the four alternatives.

Gaming in the banking sector seems virtually (1) \_\_\_\_\_ to eliminate. The only effective measure to end it would be to (2) \_\_\_\_\_ bankers personally liable for losses, to remove the sense that their actions – their games – have (3) \_\_\_\_\_ personal financial or legal consequences.

It is this, rather (4) \_\_\_\_\_ removing the cap on bankers' bonuses, that has the best chance of preventing the financial system blowing (5) \_\_\_\_\_ again.

### SubQuestion No : 24

Q.24 Select the most appropriate option to fill in blank number 4.

- Ans
- ☒ 1. then
  - ☒ 2. but
  - ☒ 3. so
  - ☒ 4. than

Question Type : MCQ

Question ID : 264330134514

Option 1 ID : 264330527015

Option 2 ID : 264330527016

Option 3 ID : 264330527017

Option 4 ID : 264330527018

Status : Answered

Chosen Option : 4

### Comprehension:

In the following passage some of the words have been deleted. Read the passage carefully and select the correct answer for the given blank out of the four alternatives.

Gaming in the banking sector seems virtually (1) \_\_\_\_\_ to eliminate. The only effective measure to end it would be to (2) \_\_\_\_\_ bankers personally liable for losses, to remove the sense that their actions – their games – have (3) \_\_\_\_\_ personal financial or legal consequences.

It is this, rather (4) \_\_\_\_\_ removing the cap on bankers' bonuses, that has the best chance of preventing the financial system blowing (5) \_\_\_\_\_ again.

### SubQuestion No : 25

Q.25 Select the most appropriate option to fill in blank number 5.

- Ans
- ☒ 1. on
  - ☒ 2. into
  - ☒ 3. up
  - ☒ 4. off

Question Type : MCQ

Question ID : 264330134515

Option 1 ID : 264330527020

Option 2 ID : 264330527019

Option 3 ID : 264330527022

Option 4 ID : 264330527021

Status : Answered

Chosen Option : 3